

$$\underline{J_a = 1.0134J_s} \quad 1$$

$$J_a = \frac{\pi(D^4 - d^4)}{32} \quad 2$$

$$J_s = \frac{\pi d^4}{32} \quad 3$$

$$D^4 - d^4 = 1.0134 d^4$$

$$D^4 = 2.0134 d^4$$

$$\underline{D = 1.191 d}$$

$$\frac{\tau}{r} = \frac{G\theta}{\ell}$$

Steel

$$\theta = \frac{\tau_s \ell}{G_s r_s} = \frac{36E6 \ell \times 2}{7.7E10 \times d}$$

$$\frac{\theta}{\ell} = \frac{9.35E-4}{d} \quad 4$$

Aluminium bronze alloy

$$\theta = \frac{\tau_a \ell}{G_a r_a} = \frac{18E6 \ell \times 2}{3.8E10 \times D}$$

$$\frac{\theta}{\ell} = \frac{7.954E-4}{d} \quad 5$$

Al bronze alloy is the design criterion

$$J_a = \frac{\pi}{32} (1.191^4 - 1^4)d^4 = \underline{0.0994d^4}$$

$$\frac{\tau_a}{r_a} = \frac{T_a}{J_a}$$

$$\frac{18E6}{1.191d} \times 2 = \frac{166.7}{0.994d^4}$$

$$d = 0.0381\text{m} = \underline{38.1 \text{ mm}}$$

$$\underline{D = 45.4 \text{ mm}}$$

8.

$$\frac{\tau}{r} = \frac{G\theta}{l}$$

$$r = \frac{\tau l}{G\theta} = \frac{180 \times 10^6 \times 1}{7.7E10 \times 0.06109} = 0.03827 \text{ m}$$

$$\frac{T_e}{J} = \frac{\tau}{r}$$

$$T_e = \frac{180E6 \times 3.3687E-6}{0.03827} \cdot \frac{1}{1E6} = 0.0158 \text{ MN.m}$$

$$T_p = \frac{2\pi}{3} \tau_{yp} (R^3 - r^3)$$

$$= \frac{2\pi}{3} \cdot 180E6 (0.1^3 - 0.03827^3) \cdot \frac{1}{1E6}$$

$$= 0.356 \text{ MN.m}$$

$$T = T_e + T_p = 0.37\text{MN.m}$$

9.
$$\tau = \frac{T}{2At}$$

$$170E6 = \frac{T}{2 \times 0.1 \times 0.2 \times 1E-2}$$

$$\underline{T = 68\,000 \text{ N.m}}$$

$$\theta = \frac{TL}{4A^2G} \oint \frac{ds}{t}$$

$$\theta = \frac{68000 \times 1}{4 \times 4E-4 \times 7.7E10} \times \frac{180}{\pi} \left(\frac{0.5}{1E-2} + \frac{0.1}{2E-2} \right)$$

$$= 0.0316 \times 55$$

$$\theta = 1.738^\circ$$

10. $J = \Sigma \frac{bt^3}{3}$

$$= \frac{0.1 \times (1E - 2)^3 + 0.2 \times (1E - 2)^3 + 0.2 \times (2E - 2)^3}{3}$$

$$J = \frac{3E-7 + 1.6E-6}{3}$$

$$J = 6.333E-7 \text{ m}$$

$$\tau_{\max} = \frac{T t_{\max}}{J}$$

$$T = \frac{170E6 \times 6.333E-7}{2E-2} = 5383 \text{ M.m}$$

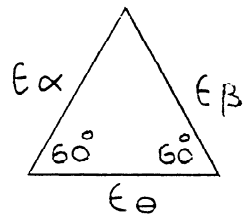
$$T = GJ \left(\frac{\theta}{\ell} \right)$$

$$\frac{\theta}{\ell} = \frac{T}{GJ} = \frac{5383}{7.7E10 \times 6.333E-7} \times \frac{180}{\pi}$$

$$\frac{\theta}{\ell} = 6.325^\circ/\text{metre}$$

CHAPTER 7

1.



$$\epsilon_{\theta} = \frac{1}{2} (\epsilon_1 + \epsilon_2) + \frac{1}{2} (\epsilon_1 - \epsilon_2) \cos 2\theta \quad 1$$

$$\epsilon_{\alpha} = \frac{1}{2} (\epsilon_1 + \epsilon_2) + \frac{1}{2} (\epsilon_1 - \epsilon_2) \cos (2\theta + 120^\circ) \quad 2$$

$$\epsilon_{\beta} = \frac{1}{2} (\epsilon_1 + \epsilon_2) + \frac{1}{2} (\epsilon_1 - \epsilon_2) \cos (2\theta + 240^\circ) \quad 3$$

Equations 2 and 3 can be rewritten in the following form:

$$\epsilon_{\alpha} = \frac{1}{2} (\epsilon_1 + \epsilon_2) + \frac{1}{2} (\epsilon_1 - \epsilon_2) (-\cos 2\theta \cdot \cos 60 - \sin 2\theta) \sin 60 \quad 4$$

$$\epsilon_{\beta} = \frac{1}{2} (\epsilon_1 + \epsilon_2) + \frac{1}{2} (\epsilon_1 - \epsilon_2) (-\cos 2\theta \cdot \cos 60 + \sin 2\theta \cdot \sin 60) \quad 5$$

Adding together equations 1, 4 and 5

$$\epsilon_{\theta} + \epsilon_{\alpha} + \epsilon_{\beta} = \frac{3}{2} (\epsilon_1 + \epsilon_2)$$

$$\text{or } (\epsilon_1 + \epsilon_2) = \frac{2}{3} (\epsilon_{\theta} + \epsilon_{\alpha} + \epsilon_{\beta}) \quad 6$$

Taking 4 from 5

$$\epsilon_{\beta} - \epsilon_{\alpha} = (\epsilon_1 - \epsilon_2) \sin 2\theta \cdot \sin 60 \quad 7$$

Taking 1 from 5

$$\epsilon_{\beta} - \epsilon_{\theta} = \frac{1}{2} (\epsilon_1 - \epsilon_2) \left(-\frac{3}{2} \cos 2\theta + \sin 2\theta \cdot \frac{\sqrt{3}}{2} \right) \quad 8$$

Dividing 8 by 7

$$\frac{\epsilon_\beta - \epsilon_\theta}{\epsilon_\beta - \epsilon_\alpha} = \frac{1}{2} \frac{\left(-\frac{3}{2} \cos 2\theta + \sin 2\theta \cdot \frac{\sqrt{3}}{2}\right)}{\left(\sin 2\theta \cdot \frac{\sqrt{3}}{2}\right)}$$

$$= \frac{1}{2} \left(-\sqrt{3} \cot 2\theta + 1\right)$$

$$\frac{2(\epsilon_\beta - \epsilon_\theta)}{\epsilon_\beta - \epsilon_\alpha} = -\sqrt{3} \cot 2\theta + 1$$

or

$$-\sqrt{3} \cot 2\theta = \frac{2(\epsilon_\beta - \epsilon_\theta)}{\epsilon_\beta - \epsilon_\alpha} - 1$$

$$= \frac{2\epsilon_\beta - 2\epsilon_\theta - \epsilon_\beta + \epsilon_\alpha}{\epsilon_\beta - \epsilon_\alpha}$$

$$= \frac{-2\epsilon_\theta + \epsilon_\beta + \epsilon_\alpha}{\epsilon_\beta - \epsilon_\alpha}$$

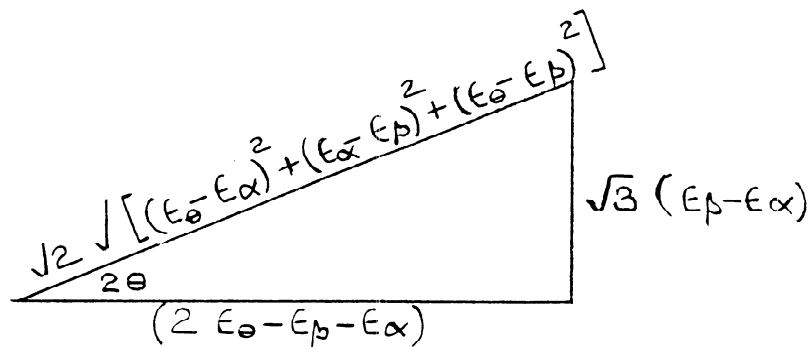
or

$$\tan 2\theta = \frac{\sqrt{3} (\epsilon_\beta - \epsilon_\alpha)}{2\epsilon_\theta - \epsilon_\beta - \epsilon_\alpha}$$

9

To determine E_1 & E_2

From the mathematical triangle



$$\cos 2\theta = \frac{(2\epsilon_\theta - \epsilon_\beta - \epsilon_\alpha)}{\sqrt{2} \sqrt{[(\epsilon_\theta - \epsilon_\alpha)^2 + (\epsilon_\alpha - \epsilon_\beta)^2 + (\epsilon_\theta - \epsilon_\beta)^2]}} \quad 10$$

$$\sin 2\theta = \frac{\sqrt{3} (\epsilon_\beta - \epsilon_\alpha)}{\sqrt{2} \sqrt{[(\epsilon_\theta - \epsilon_\alpha)^2 + (\epsilon_\alpha - \epsilon_\beta)^2 + (\epsilon_\theta - \epsilon_\beta)^2]}} \quad 11$$

Substituting equation 11 into 7

$$\epsilon_\beta - \epsilon_\alpha = (\epsilon_1 - \epsilon_2) \cdot \frac{\sqrt{3}}{2} \cdot \frac{\sqrt{3} (\epsilon_\beta - \epsilon_\alpha)}{\sqrt{2} \sqrt{[(\epsilon_\theta - \epsilon_\alpha)^2 + (\epsilon_\alpha - \epsilon_\beta)^2 + (\epsilon_\theta - \epsilon_\beta)^2]}}$$

$$\text{or } \epsilon_1 - \epsilon_2 = \frac{2}{3} \sqrt{[(\epsilon_\theta - \epsilon_\alpha)^2 + (\epsilon_\alpha - \epsilon_\beta)^2 + (\epsilon_\theta - \epsilon_\beta)^2]} \quad 12$$

Adding equations 6 and 12

$$\epsilon_1 = \frac{1}{3} \sqrt{[(\epsilon_\theta + \epsilon_\alpha + \epsilon_\beta)]} + \frac{\sqrt{2}}{3} \sqrt{[(\epsilon_\theta - \epsilon_\alpha)^2 + (\epsilon_\alpha - \epsilon_\beta)^2 + (\epsilon_\theta - \epsilon_\beta)^2]}$$

$$\epsilon_2 = \frac{1}{3} (\epsilon_\theta + \epsilon_\alpha + \epsilon_\beta) - \frac{\sqrt{2}}{3} \sqrt{[(\epsilon_\theta - \epsilon_\alpha)^2 + (\epsilon_\alpha - \epsilon_\beta)^2 + (\epsilon_\theta - \epsilon_\beta)^2]}$$

2.

$$\sigma_\theta = \frac{1}{2}(\sigma_x + \sigma_y) + \frac{1}{2} (\sigma_x - \sigma_y) \cos 2\theta + \tau_{xy} \sin 2\theta$$

$$\text{Let } \underline{\sigma_x = -10 \text{ MN/m}^2}$$

$$\underline{\text{For } \theta = 30^\circ}$$

$$\therefore \sigma_{30} = 30 = -\frac{1}{2}(-10 + \sigma_y) + \frac{1}{2}(-10 - \sigma_y) \cos 60 + \tau_{xy} \sin 60$$

$$30 = -5 + \frac{\sigma_y}{2} - (5 + \frac{\sigma_y}{2}) 0.5 + 0.866 \tau_{xy}$$

$$30 = -5 + 0.5\sigma_y - 0.25\sigma_y - 2.5 + 0.866 \tau_{xy}$$

$$37.5 = 0.25 \sigma_y + 0.866 \tau_{xy} \tag{1}$$

For $\theta = 100^\circ$

$$40 = \frac{1}{2}(-10 + \sigma_y) + \frac{1}{2}(-10 - \sigma_y) \cos 200 + \tau_{xy} \sin 200$$

$$40 = -5 + 0.5\sigma_y - (5 + \sigma_y/2)(-0.9397) - 0.342 \tau_{xy}$$

$$40 = -0.3015 + 0.9698\sigma_y - 0.342 \tau_{xy}$$

$$40.302 = 0.9698 \sigma_y - 0.342 \tau_{xy} \tag{2}$$

Divide 1 by 0.25

$$150 = \sigma_y + 3.464 \tau_{xy} \tag{1a}$$

Divide 2 by 0.9698

$$41.55 = \sigma_y - 0.353 \tau_{xy} \tag{2a}$$

Take 5a from 1a

$$108.45 = 3.817 \tau_{xy}$$

$$\therefore \tau_{xy} = 28.41 \text{ MN/m}^2$$

From 1a

$$\sigma_y = 51.58 \text{ MN/m}^2$$

$$\theta = \frac{1}{2} \tan^{-1} \left[\frac{2\tau_{xy}}{\sigma_x - \sigma_y} \right]$$

$$\theta = -21.35^\circ$$

$$\sigma_1 = \frac{1}{2}(\sigma_x + \sigma_y) + \frac{1}{2}\sqrt{(\sigma_x - \sigma_y)^2 + 4\tau_{xy}^2}$$

$$= 20.79 + 41.89$$

$$\sigma_1 = 62.68 \text{ MN/m}^2$$

$$\sigma_2 = -21.1 \text{ MN/m}^2$$

3.

$$\epsilon_\theta = \frac{1}{2} (\epsilon_x + \epsilon_y) + \frac{1}{2} (\epsilon_x - \epsilon_y) \cos 2\theta + \frac{1}{2} \gamma_{xy} \sin 2\theta$$

$$\text{Let } \epsilon_x = 300 \times 10^{-6}$$

$$\text{At } \theta = 30^\circ$$

$$E_{30} = -100 \times 10^{-6} = 150 \times 10^{-6} + 0.5\epsilon_y + 0.5(300 \times 10^{-6} - \epsilon_y)$$

$$+ 0.5 \gamma_{xy} \tag{1}$$

$$-100 \times 10^{-6} = 225 \times 10^{-6} + 0.25 \epsilon_y + 0.433 \gamma_{xy}$$

$$-325 \times 10^{-6} = 0.25 \epsilon_y + 0.433 \gamma_{xy}$$

$$\text{At } \theta = 100^\circ$$

$$-200 \times 10^{-6} + 150 \times 10^{-6} + 0.5 \epsilon_y = 0.5(300 \times 10^{-6} - \epsilon_y)(-0.9397)$$

$$+ 0.5 \gamma_{xy} * (-0.342)$$

$$= 9.05 \times 10^{-6} + 0.9699 \epsilon_y - 0.171 \gamma_{xy}$$

$$-209.1 \times 10^{-6} = 0.9699 \epsilon_y - 0.171 \gamma_{xy} \tag{2}$$

$$-1300 \times 10^{-6} = \epsilon_y - 0.1732 \gamma_{xy} \tag{1a}$$

$$-215.6 \times 10^{-6} = \epsilon_y - 0.176 \gamma_{xy} \tag{2a}$$

Take 2a from 1a

$$-1084.4 - 1.908 \gamma_{xy}$$

$$\underline{\gamma_{xy} = -568.3 \times 10^{-6}}$$

From 1a

$$\epsilon_y = -315.6 \times 10^{-6}$$

$$\epsilon_1 = \frac{(\epsilon_x + \epsilon_y)}{2} + \frac{1}{2} \sqrt{[(\epsilon_x - \epsilon_y)^2 + \gamma_{xy}]^2}$$

$$= -7.8E-6 + \frac{1}{2} \times 837.8 \times 10^{-6}$$

$$\epsilon_1 = -7.8E-6 + 418.9E-6$$

$$\epsilon_1 = 411.1 \times 10^{-6}$$

$$\epsilon_2 = -426.7E-6$$

$$\sigma_1 = \frac{2 \times 10^{11}}{0.91} (411.1 - 0.3 \times 426.7) \times 10^{-6}$$

$$\sigma_1 = 62.2 \text{ MN/m}^2$$

$$\sigma_2 = -66.67 \text{ MN/m}^2$$

$$\hat{\tau} = 64.44 \text{ MN/m}^2$$

$$\theta = \frac{1}{2} \tan^{-1} \left(\frac{\gamma_{xy}}{\epsilon_x - \epsilon_y} \right)$$

$$\theta = -21.36^\circ$$

4.

$$G = \frac{2E11}{(2.6)} = 7.69E10$$

$$\gamma = \epsilon_1 - \epsilon_3$$

$$= (-300 - 200) E-6$$

$$= -500 E-6$$

$$\tau = 38.45 \text{ MN/m}^2$$

$$J = \frac{\pi(2E-2)^4}{32} = 1.571E-8 \text{ m}^4$$

$$T = \frac{\tau * J}{r} = \frac{38.45E6 \times 1.571E-8}{1E-2}$$

$$T = 60.4 \text{ Nm}$$

$$A = 3.142E-4 \text{ m}^2$$

$$\epsilon_1 = \epsilon_{IT} + \epsilon_{45D}$$

$$\epsilon_3 = -\epsilon_{IT} + \epsilon_{45D}$$

Adding together

$$(-300 + 200) E-6 = 2\epsilon_{45D}$$

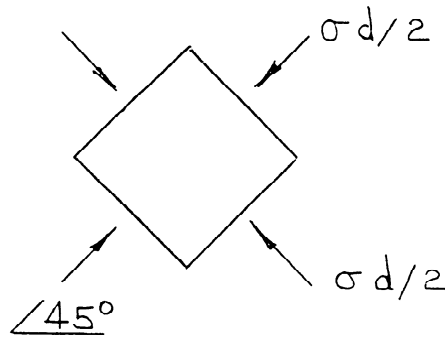
$$\therefore \epsilon_{45D} = -50E-6 @ 45^\circ \text{ to axis}$$

$$= \frac{1}{2E} (\sigma_d - \nu\sigma_d)$$

$$\therefore \frac{(-100 E-6) 2E11}{0.7} = \sigma_d$$

$$\sigma_d = -28.57 \text{ MN/m}^2$$

$$\text{Thrust} = -8.98 \text{ kN}$$



5.

$$50 \sin \alpha ab = 150 ac + 75 bc = 0$$

$$50 \sin \alpha + 150 \frac{ac}{ab} + 75 \frac{bc}{ab} = 0$$

$$50 \sin \alpha + 150 \sin \alpha + 75 \cos \alpha = 0$$

$$200 \sin \alpha = -75 \cos \alpha$$

$$\alpha = -20.56^\circ$$

$$50 \cos \alpha ab + 75 ac + \sigma_y bc = 0$$

$$46.82 - 26.34 + 0.936\sigma_y = 0$$

$$\therefore \sigma_y = -21.88$$

$$\sigma_1 = \frac{1}{2} (150 - 21.88) + \frac{1}{2} \sqrt{[(150 + 21.88)^2 + 4 \times 75^2]}$$