

$$F_{ad} + 0.243 F_{cd} = -6.667 - 42.16 \times 0.316$$

$$F_{ad} = -20 - 0.243 F_{cd} \quad \text{_____} \quad 4$$

Resolving vertically

$$F_{cd} \sin \alpha_2 + F_{ed} \sin \alpha_1 = 10$$

$$F_{cd} = 10/0.97 + 42.16 \times 0.949/0.97$$

$$F_{cd} = 51.55 \text{ kN (tensile)} \quad \text{_____} \quad 5$$

Substitute 5 into 4

$$F_{ad} = -32.5 \text{ kN (compressive)}$$

Joint C

Resolving vertically

$$F_{ac} \sin \alpha_2 + F_{cd} \sin \alpha_2$$

$$+ F_{ce} \sin \alpha_3 = 0$$

$$0.97 F_{ac} + 51.55 \times 0.97 + 22.36 \times 0.447$$

$$F_{ac} = -61.85 \text{ kN (compressive)}$$

Resolving horizontally

$$F_{bc} + F_{ac} \cos \alpha_2 = F_{cd} \cos \alpha_2 + F_{ce} \cos \alpha_3$$

$$F_{bc} = +61.85 \times 0.243 + 51.55 \times 0.243 + 22.36 \times 0.894$$

$$F_{bc} = 47.5 \text{ kN (tensile)}$$

Reactions

Joint B

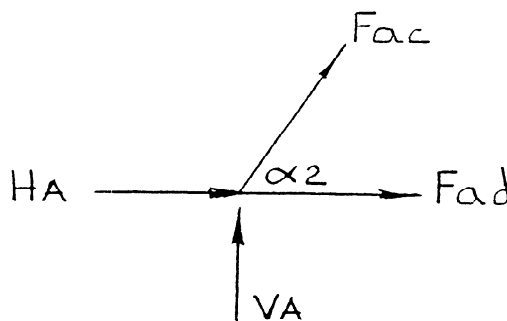
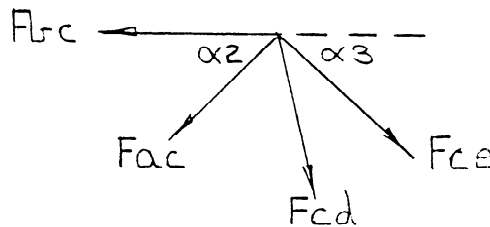
$$H_B = F_{bc} = 47.5 \text{ kN}$$

Joint A

Resolving vertically

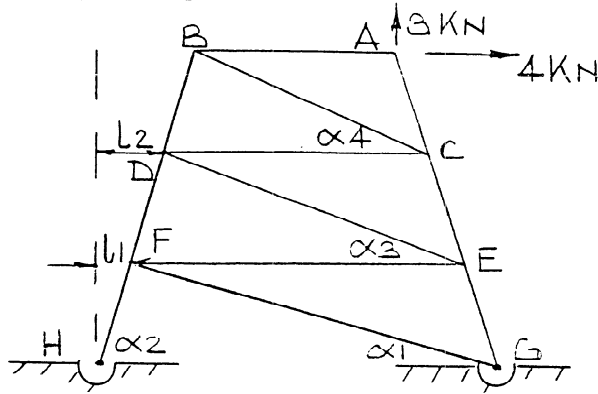
$$V_A = -F_{ac} \sin \alpha_2 = 60 \text{ kN}$$

Resolving horizontally



$$\underline{H_4} = -F_{ad} - F_{ac} \cos \alpha_2 = 32.5 + 61.85 \times 0.243 = \underline{47.5 \text{ kN}}$$

7.



$$\alpha_2 = \tan^{-1} \left(\frac{7.5 \times 3}{3.75} \right) = 80.538^\circ$$

$$l_1 = \frac{7.5}{\tan \alpha_2} = 1.25 \text{ m}$$

$$l_2 = 2.5 \text{ m}$$

$$\alpha_1 = \tan^{-1} \frac{7.5}{(15 - 1.25)} = 28.6^\circ$$

$$\alpha_3 = \tan^{-1} \frac{7.5}{(15 - 3.75)} = 33.69^\circ$$

$$\alpha_4 = \tan^{-1} \frac{7.5}{(15 - 3.75 - 2.5)} = 40.60^\circ$$

Joint A

Resolving vertically

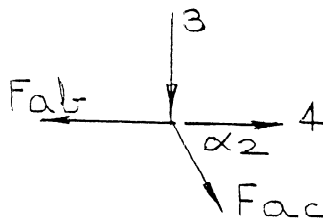
$$3 + F_{ac} \sin \alpha_2 = 0$$

$$\underline{F_{ac}} = -3/0.986 = -3.04 \text{ kN (compressive)}$$

Resolving horizontally

$$F_{ab} = F_{ac} \cos \alpha_2 + 4$$

$$\underline{F_{ab}} = +3.5 \text{ kN (tensile)}$$



Joint B

Resolving vertically

$$F_{bd} \sin \alpha_2 + F_{bc} \sin \alpha_4 = 0$$

$$0.986 F_{bd} = -0.651 F_{bc}$$

$$\underline{F_{bd} = -0.66 F_{bc}} \quad \text{—————} \quad 1$$

Resolving horizontally

$$F_{bd} \cos \alpha_2 = F_{ab} + F_{bc} \cos \alpha_4$$

$$0.164 F_{bd} = 3.5 + 0.759 F_{bc} \quad \text{—————} \quad 2$$

Substitute 1 into 2

$$(0.759 + 0.108) F_{bc} = -3.5$$

$$\underline{F_{bc} = -4.04 \text{ kN (compressive)}} \quad \text{—————} \quad 3$$

Substitute 3 into 1

$$\underline{F_{bd} = 2.66 \text{ kN (tensile)}}$$

Joint C

Resolving horizontally

$$F_{cd} + F_{bc} \cos \alpha_4 + F_{ac} \cos \alpha_2 = F_{ce}$$

$$F_{cd} = 4.04 \times 0.759 + 3.04 \times 0.164 + F_{ce} \times 0.164$$

$$F_{cd} = 3.565 + 0.164 F_{ce} \quad \text{—————} \quad 4$$

Resolving vertically

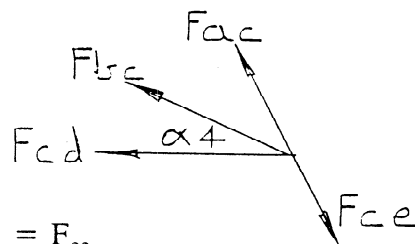
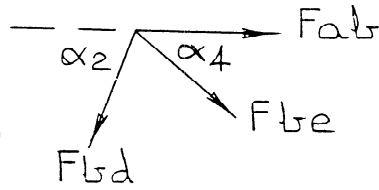
$$F_{ac} \sin \alpha_2 + F_{bc} \sin \alpha_4 = F_{ce} \sin \alpha_2$$

$$0.986 F_{ac} + 0.651 F_{bc} = 0.986 F_{ce}$$

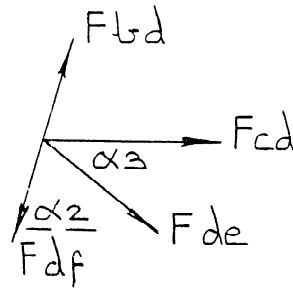
$$\underline{F_{ce} = -5.617/0.986 = -5.7 \text{ kN (compressive)}} \quad \text{—————} \quad 5$$

Substitute 5 into 4

$$\underline{F_{cd} = 2.63 \text{ kN (tensile)}}$$



Joint D



Resolving vertically

$$F_{bd} \sin \alpha_2 = F_{de} \sin \alpha_3 + F_{df} \sin \alpha_2$$

$$2.66 \times 0.986 = F_{de} \times 0.555 + 0.986 F_{df}$$

$$F_{df} = 2.66 - 0.563 F_{de} \quad \text{-----} \quad 6$$

Resolving horizontally

$$F_{bd} \cos \alpha_2 + F_{cd} + F_{de} \cos \alpha_3 = F_{df} \cos \alpha_2$$

$$0.164 \times 2.66 + 2.63 + 0.832 F_{de} = 0.164 F_{df}$$

$$\text{-----} \quad 7$$

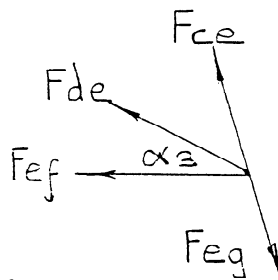
Substituting 5 into 6

$$0.436 + 2.63 = F_{de} (-0.832 - 0.092) + 0.436$$

$$F_{de} = -2.84 \text{ kN (compressive)} \quad \text{-----} \quad 8$$

Substitute 8 into 6

$$F_{df} = 4.26 \text{ kN (tensile)}$$



Joint E

Resolving vertically

$$F_{de} \sin \alpha_3 + F_{ce} \sin \alpha_2 = F_{eg} \sin \alpha_2$$

$$-2.84 \times 0.555 - 5.7 \times 0.986 = 0.986 F_{eg}$$

$$F_{eg} = -7.3 \text{ kN (compressive)}$$

Resolving horizontally

$$F_{ef} + F_{de} \cos \alpha_3 + F_{ce} \cos \alpha_2 = F_{eg} \cos \alpha_2$$

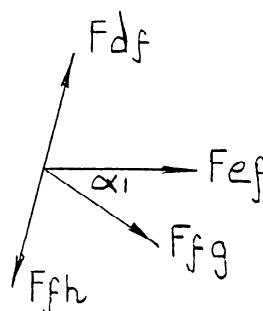
$$F_{ef} = -0.164 \times 7.3 + 0.832 \times 2.84 + 0.164 \times 5.7$$

$$F_{ef} = 2.1 \text{ kN (tensile)}$$

Joint F

Resolving vertically

$$F_{df} \sin \alpha_2 = F_{fg} \sin \alpha_1 + F_{fh} \sin \alpha_2$$



$$4.26 \times 0.986 = F_{fg} \times 0.479 + F_{fh} \times 0.986$$

$$F_{fh} = 4.26 - 0.486 F_{fg} \quad \text{-----} \quad 9$$

Resolving horizontally

$$F_{df} \cos \alpha_2 + F_{ef} + F_{fg} \cos \alpha_1 = F_{fh} \cos \alpha_2$$

$$4.26 \times 0.164 + 2.1 = 0.164 \times F_{fh} - 0.878 F_{fg} \quad \text{-----} \quad 10$$

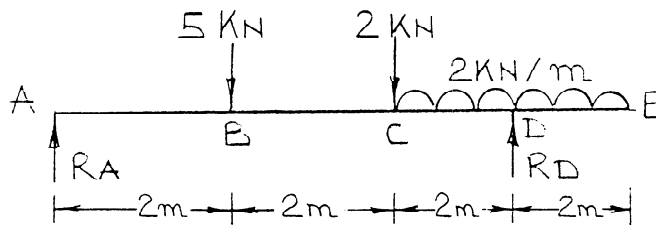
Substituting 10 into 9

$$F_{fg} = \underline{-2.19 \text{ kN}} \text{ (compressive)} \quad \text{-----} \quad 11$$

Substituting 11 into 9

$$F_{fh} = \underline{5.33 \text{ kN}} \text{ (tensile)}$$

8.



Moments about D

$$\begin{aligned} R_A \times 6 &= 5 \times 4 + 2 \times 2 \\ &= 24 \end{aligned}$$

$$R_A = \underline{4 \text{ kN}}$$

Resolving vertically

$$R_A + R_D = 5 + 2 + 2 \times 4$$

$$R_D = 15 - 4$$

$$R_D = \underline{11 \text{ kN}}$$

Bending moments (M)

$$M_A = 0$$

$$M_B = R_A \times 2 = 8 \text{ kNm}$$

$$M_C = R_A \times 4 - 5 \times 2 = 6 \text{ kNm}$$

$$M_D = R_A \times 6 - 5 \times 4 - 2 \times 2 - 2 \times 2 \times 1 = -4 \text{ kNm}$$

$$M_E = 0$$

Shearing forces (F)

$$F_A = 4 \text{ kN}$$

$$F_{B-} = 4 \text{ kN}; F_{B+} = 4 - 5 = -1 \text{ kN}$$

$$F_{C-} = 4 - 5 = -1 \text{ kN}$$

$$F_{C+} = 4 - 5 - 2 = -3 \text{ kN}$$

$$F_{D-} = 4 - 5 - 2 - 2 \times 2 = -7 \text{ kN}$$

$$F_{D+} = 4 - 5 - 2 - 2 \times 2 + R_D = 4 \text{ kN}$$

$$F_E = 0$$

9. Bending moments (M)

$$M_A = 3 \text{ kNm}$$

$$M_{B-} = 3 \text{ kNm}$$

$$M_{B+} = 3 - 5 = -2 \text{ kNm}$$

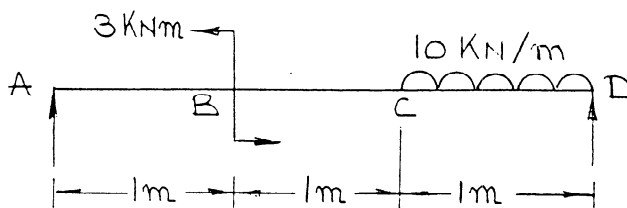
$$M_{C-} = 3 - 5 = -2 \text{ kNm}$$

$$M_{C+} = 3 - 5 + 2 = 0$$

Shearing Forces (F)

$$F_A = F_B = F_C = F_D = 0$$

10.



Moments about D

$$R_A \times 3 = 3 + 10 \times 1 \times 0.5$$

$$R_A = 2.667 \text{ kN}$$

Resolving vertically

$$R_A + R_D = 10 \times 1$$

$$R_D = 7.333 \text{ kN}$$

Bending moments (M)

$$M_A = 0$$

$$M_{B-} = R_A \times 1 = 2.667 \text{ kNm}$$

$$M_{B+} = 2.667 - 3 = -0.333 \text{ kNm}$$

$$M_C = R_A \times 2 - 3 = 2.33 \text{ kNm}$$

$$M_D = 0$$

Shearing Forces (F)

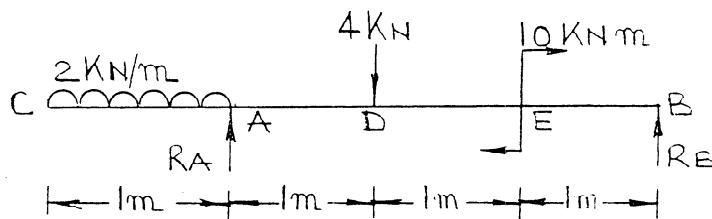
$$F_A = R_A = 2.667 \text{ kN}$$

$$F_B = 2.667 \text{ kN}$$

$$F_C = 2.667 \text{ kN}$$

$$F_D = -R_D = -7.333 \text{ kN}$$

11.



Moments about B

$$R_A \times 3 + 10 = 2 \times 1 \times 3.5 + 4 \times 2$$

$$R_A = 1.667 \text{ kN}$$

Resolving vertically

$$R_A + R_B = 2 \times 1 + 4$$

$$R_B = 4.333 \text{ kN}$$

Bending moments (M)

$$M_C = 0$$

$$M_A = -2 \times 1 \times 0.5 = -1 \text{ kNm}$$

$$M_D = -2 \times 1 \times 1.5 + R_A \times 1$$

$$M_D = -3 + 1.667 = -1.333 \text{ kNm}$$

$$M_{E-} = -2 \times 1 \times 2.5 + R_A \times 2 - 4 \times 1 = -5.667 \text{ kNm}$$

$$M_{E+} = -5.667 \times 10 = 4.333 \text{ kNm}$$

$$M_B = 0$$

Shearing Forces (F)

$$F_C = 0$$

$$F_{A-} = -2 \times 1 = -2 \text{ kN}$$

$$F_{A+} = -2 + R_A = -0.333 \text{ kN}$$

$$F_{D-} = -0.333 \text{ kN}$$

$$F_{D+} = -0.333 - 4 = -4.333 \text{ kN}$$

$$F_E = -4.333 \text{ kN}$$

$$F_B = -R_B = -4.333 \text{ kN}$$

12. $2a + 2b = 6$

$$a + b = 3$$

1

$$w_a = \frac{a}{a+b} = \frac{a}{3}$$

$$R = \frac{a+b}{2} = 1.5$$

$$M_A = a \times \frac{a}{6} \times \frac{a}{3} = \frac{a^3}{18}$$

$$M_{\text{central}} = \frac{1}{2} \times 3 \times 1 \times 1 - 1.5 \times b = 1.5 - 1.5(3 - a)$$

$$M_A = M_{\text{central}}$$

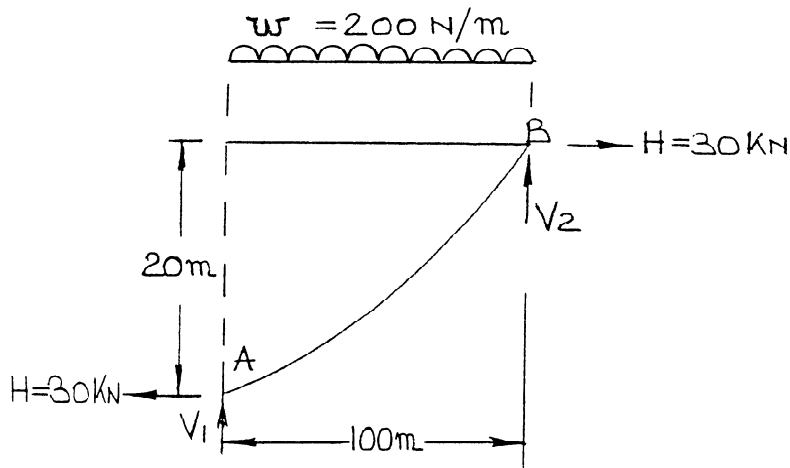
$$\frac{a^3}{18} = -\frac{3}{2} + \frac{3}{2}(3 - a)$$

$$\frac{a^3}{18} = -1.5 + 1.5 \times 3 - 1.5a$$

$$a^3/18 + 1.5a = 3$$

$$a = 1.788 \text{ m}$$

13.



Moments about B

$$H \times 20 + V_1 \times 100 = 200 \times 100 \times 50$$

$$V_1 = \frac{1E6 - 0.6E6}{100}$$

$$\underline{V_1 = 4 \text{ kN}}$$

Resolving vertically

$$V_1 + V_2 = 200 \times 100$$

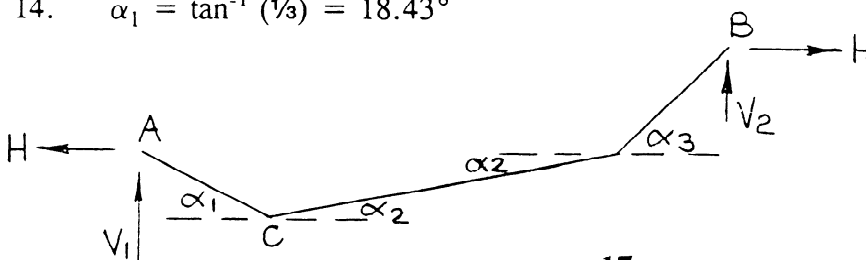
$$\underline{V_2 = 16 \text{ kN}}$$

To find maximum tension

$$T_A = \sqrt{[V_1^2 + H^2]} = 30.27 \text{ kN}$$

$$\underline{T_B = \sqrt{[V_2^2 + H^2]} = 34.0 \text{ kN (maximum tension)}}$$

14. $\alpha_1 = \tan^{-1}(1/3) = 18.43^\circ$



$$\alpha_2 = \tan^{-1} \left(\frac{20}{50} \right) = 21.8^\circ$$

$$\alpha_3 = \tan^{-1} (1) = 45^\circ$$

Joint C

Resolving horizontally

$$T_1 \cos \alpha_1 = T_2 \cos \alpha_2$$

$$T_1 = 0.979 T_2 \quad \text{—————} \quad 1$$

Resolving vertically

$$T_1 \sin \alpha_1 + T_2 \sin \alpha_2 = 20$$

$$0.316 T_1 + 0.371 T_2 = 20 \quad \text{—————} \quad 2$$

Substituting 1 into 2

$$0.680 T_2 = 20$$

$$\underline{T_2 = 29.4 \text{ kN}} \quad \text{—————} \quad 3$$

Substituting 3 into 1

$$\underline{T_1 = 28.78 \text{ kN}}$$

Joint A

Resolving horizontally

$$H = T_1 \cos \alpha_1 = \underline{27.3 \text{ kN}} \quad \text{—————} \quad 4$$

Resolving vertically

$$V_1 = T_1 \sin \alpha_1$$

$$\underline{V_1 = 9.09 \text{ kN}}$$

Joint D

Resolving horizontally

$$T_3 \cos \alpha_3 = T_2 \cos \alpha_2$$