

## Screwed Joints

1. Introduction.
2. Advantages and Disadvantages of Screwed Joints.
3. Important Terms used in Screw Threads.
4. Forms of Screw Threads.
5. Location of Screwed Joints.
6. Common Types of Screw Fastenings.
7. Locking Devices.
8. Designation of Screw Threads.
9. Standard Dimensions of Screw Threads.
10. Stresses in Screwed Fastening due to Static Loading.
11. Initial Stresses due to Screwing Up Forces.
12. Stresses due to External Forces.
13. Stress due to Combined Forces.
14. Design of Cylinder Covers.
15. Boiler Stays.
16. Bolts of Uniform Strength.
17. Design of a Nut.
18. Bolted Joints under Eccentric Loading.
19. Eccentric Load Acting Parallel to the Axis of Bolts.
20. Eccentric Load Acting Perpendicular to the Axis of Bolts.
21. Eccentric Load on a Bracket with Circular Base.
22. Eccentric Load Acting in the Plane Containing the Bolts.



### 11.1 Introduction

A screw thread is formed by cutting a continuous helical groove on a cylindrical surface. A screw made by cutting a single helical groove on the cylinder is known as **single threaded** (or single-start) screw and if a second thread is cut in the space between the grooves of the first, a **double threaded** (or double-start) screw is formed. Similarly, triple and quadruple (*i.e.* multiple-start) threads may be formed. The helical grooves may be cut either **right hand** or **left hand**.

A screwed joint is mainly composed of two elements *i.e.* a bolt and nut. The screwed joints are widely used where the machine parts are required to be readily connected or disconnected without damage to the machine or the fastening. This may be for the purpose of holding or adjustment in assembly or service inspection, repair, or replacement or it may be for the manufacturing or assembly reasons.

The parts may be rigidly connected or provisions may be made for predetermined relative motion.

## 11.2 Advantages and Disadvantages of Screwed Joints

Following are the advantages and disadvantages of the screwed joints.

### Advantages

1. Screwed joints are highly reliable in operation.
2. Screwed joints are convenient to assemble and disassemble.
3. A wide range of screwed joints may be adopted to various operating conditions.
4. Screws are relatively cheap to produce due to standardisation and highly efficient manufacturing processes.

### Disadvantages

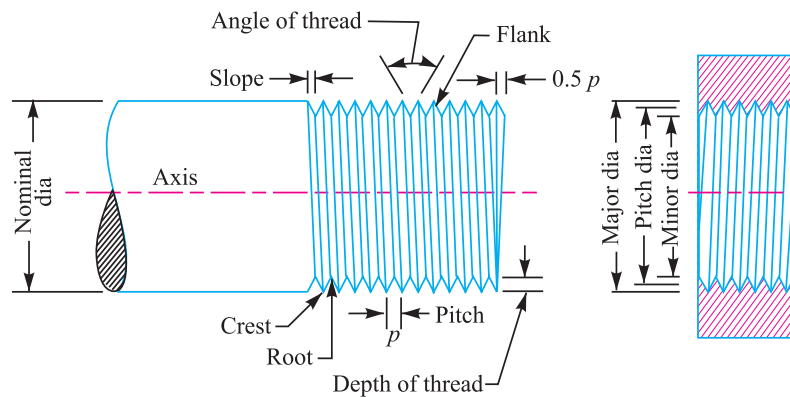
The main disadvantage of the screwed joints is the stress concentration in the threaded portions which are vulnerable points under variable load conditions.

**Note :** The strength of the screwed joints is not comparable with that of riveted or welded joints.



## 11.3 Important Terms Used in Screw Threads

The following terms used in screw threads, as shown in Fig. 11.1, are important from the subject point of view :



**Fig. 11.1.** Terms used in screw threads.

**1. Major diameter.** It is the largest diameter of an external or internal screw thread. The screw is specified by this diameter. It is also known as *outside* or *nominal diameter*.

**2. Minor diameter.** It is the smallest diameter of an external or internal screw thread. It is also known as *core* or *root diameter*.

**3. Pitch diameter.** It is the diameter of an imaginary cylinder, on a cylindrical screw thread, the surface of which would pass through the thread at such points as to make equal the width of the thread and the width of the spaces between the threads. It is also called an *effective diameter*. In a nut and bolt assembly, it is the diameter at which the ridges on the bolt are in complete touch with the ridges of the corresponding nut.

**4. Pitch.** It is the distance from a point on one thread to the corresponding point on the next. This is measured in an axial direction between corresponding points in the same axial plane. Mathematically,

$$\text{Pitch} = \frac{1}{\text{No. of threads per unit length of screw}}$$

**5. Lead.** It is the distance between two corresponding points on the same helix. It may also be defined as the distance which a screw thread advances axially in one rotation of the nut. Lead is equal to the pitch in case of single start threads, it is twice the pitch in double start, thrice the pitch in triple start and so on.

**6. Crest.** It is the top surface of the thread.

**7. Root.** It is the bottom surface created by the two adjacent flanks of the thread.

**8. Depth of thread.** It is the perpendicular distance between the crest and root.

**9. Flank.** It is the surface joining the crest and root.

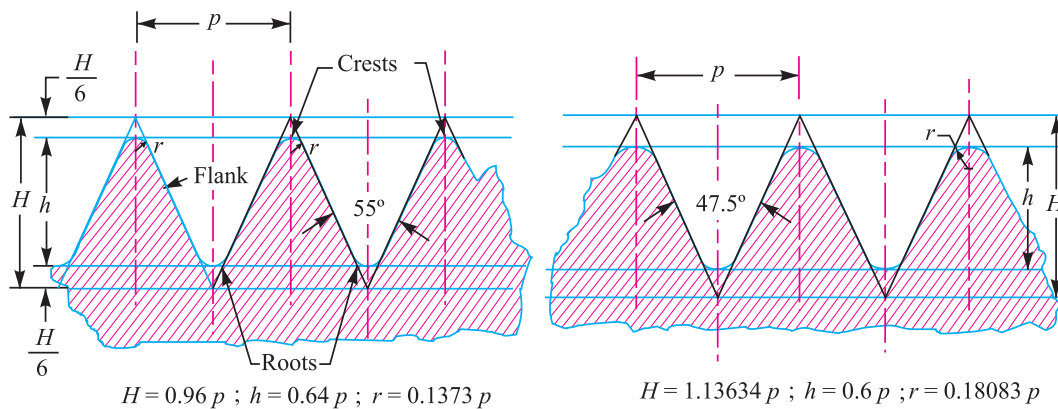
**10. Angle of thread.** It is the angle included by the flanks of the thread.

**11. Slope.** It is half the pitch of the thread.

## 11.4 Forms of Screw Threads

The following are the various forms of screw threads.

**1. British standard whitworth (B.S.W.) thread.** This is a British standard thread profile and has coarse pitches. It is a symmetrical V-thread in which the angle between the flanks, measured in an axial plane, is  $55^\circ$ . These threads are found on bolts and screwed fastenings for special purposes. The various proportions of B.S.W. threads are shown in Fig. 11.2.



**Fig. 11.2.** British standard whitworth (B.S.W.) thread.

**Fig. 11.3.** British association (B.A.) thread.

The British standard threads with fine pitches (B.S.F.) are used where great strength at the root is required. These threads are also used for line adjustments and where the connected parts are subjected to increased vibrations as in aero and automobile work.

The British standard pipe (B.S.P.) threads with fine pitches are used for steel and iron pipes and tubes carrying fluids. In external pipe threading, the threads are specified by the bore of the pipe.

**2. British association (B.A.) thread.** This is a B.S.W. thread with fine pitches. The proportions of the B.A. thread are shown in Fig. 11.3. These threads are used for instruments and other precision works.

**3. American national standard thread.** The American national standard or U.S. or Seller's thread has flat crests and roots. The flat crest can withstand more rough usage than sharp V-threads. These threads are used for general purposes e.g. on bolts, nuts, screws and tapped holes. The various

proportions are shown in Fig. 11.4.

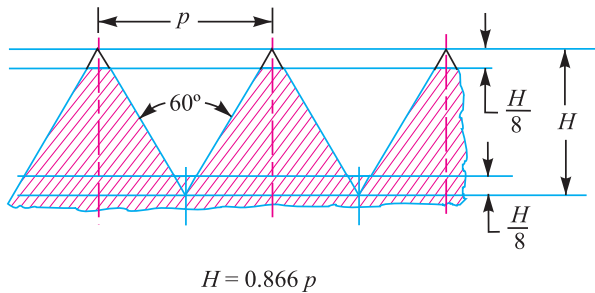


Fig. 11.4. American national standard thread.

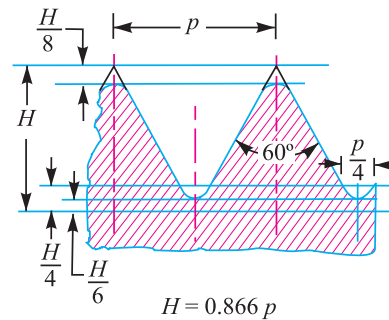


Fig. 11.5. Unified standard thread.

**4. Unified standard thread.** The three countries *i.e.*, Great Britain, Canada and United States came to an agreement for a common screw thread system with the included angle of  $60^\circ$ , in order to facilitate the exchange of machinery. The thread has rounded crests and roots, as shown in Fig. 11.5.

**5. Square thread.** The square threads, because of their high efficiency, are widely used for transmission of power in either direction. Such type of threads are usually found on the feed mechanisms of machine tools, valves, spindles, screw jacks etc. The square threads are not so strong as V-threads but they offer less frictional resistance to motion than Whitworth threads. The pitch of the square thread is often taken twice that of a B.S.W. thread of the same diameter. The proportions of the thread are shown in Fig. 11.6.

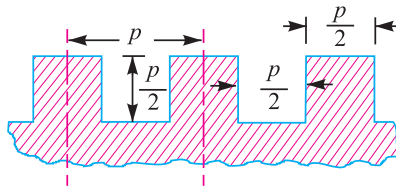


Fig. 11.6. Square thread.

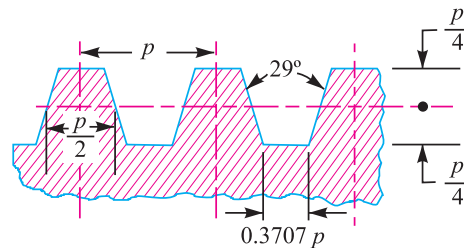
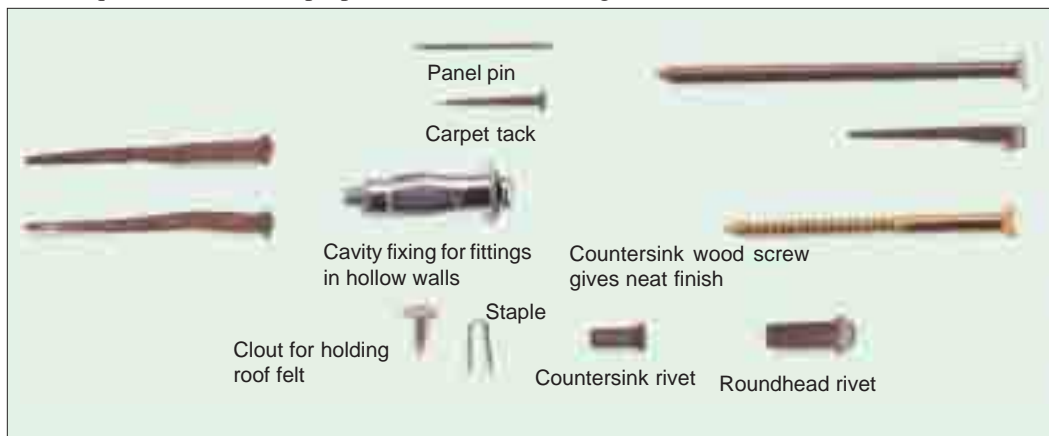


Fig. 11.7. Acme thread.

**6. Acme thread.** It is a modification of square thread. It is much stronger than square thread and can be easily produced. These threads are frequently used on screw cutting lathes, brass valves, cocks and bench vices. When used in conjunction with a split nut, as on the lead screw of a lathe, the tapered sides of the thread facilitate ready engagement and disengagement of the halves of the nut when required. The various proportions are shown in Fig. 11.7.



**7. Knuckle thread.** It is also a modification of square thread. It has rounded top and bottom. It can be cast or rolled easily and can not economically be made on a machine. These threads are used for rough and ready work. They are usually found on railway carriage couplings, hydrants, necks of glass bottles and large moulded insulators used in electrical trade.

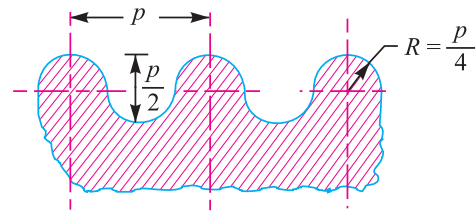
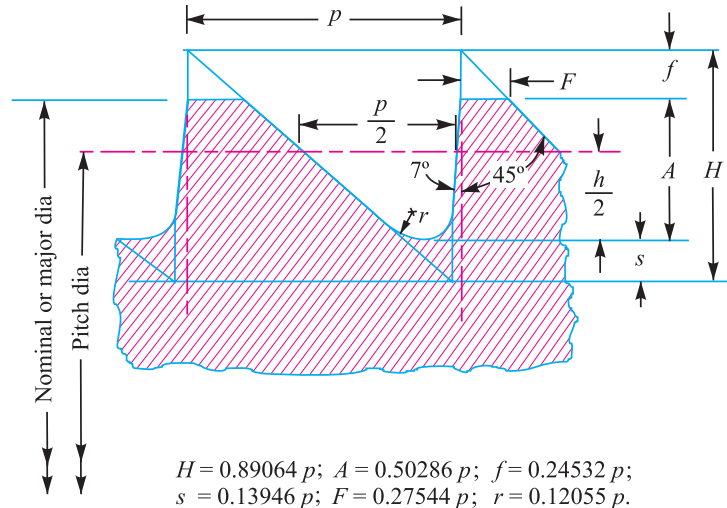


Fig. 11.8. Knuckle thread.

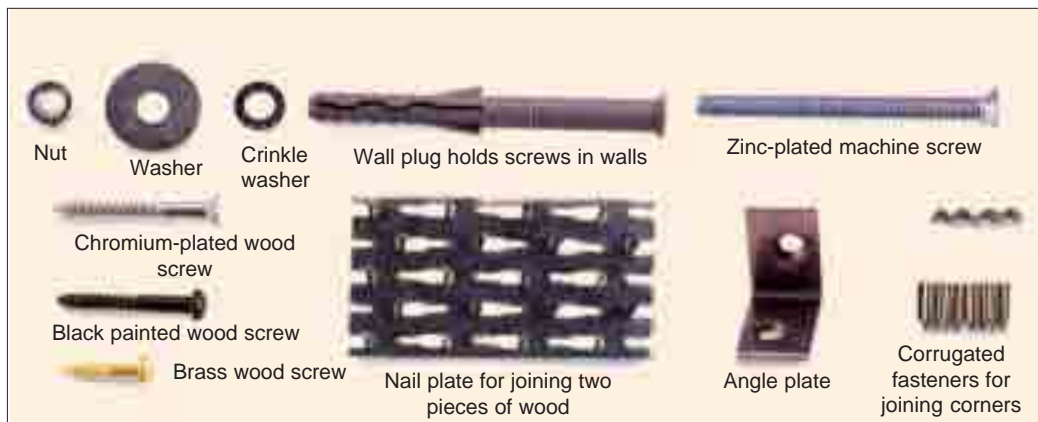
**8. Buttress thread.** It is used for transmission of power in one direction only. The force is transmitted almost parallel to the axis. This thread units the advantage of both square and V-threads. It has a low frictional resistance characteristics of the square thread and have the same strength as that of V-thread. The spindles of bench vices are usually provided with buttress thread. The various proportions of buttress thread are shown in Fig. 11.9.



$$H = 0.89064 p; A = 0.50286 p; f = 0.24532 p; s = 0.13946 p; F = 0.27544 p; r = 0.12055 p.$$

Fig. 11.9. Buttress thread.

**9. Metric thread.** It is an Indian standard thread and is similar to B.S.W. threads. It has an included angle of 60° instead of 55°. The basic profile of the thread is shown in Fig. 11.10 and the design profile of the nut and bolt is shown in Fig. 11.11.



Simple Machine Tools.

Note : This picture is given as additional information and is not a direct example of the current chapter.

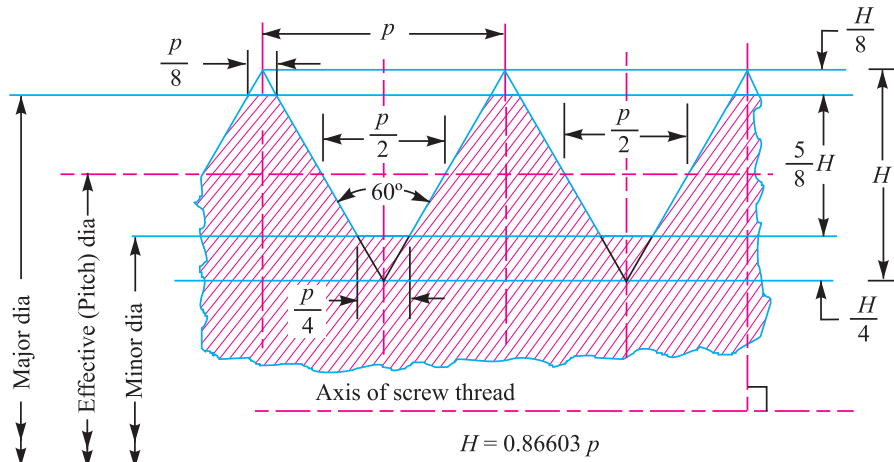


Fig. 11.10. Basic profile of the thread.

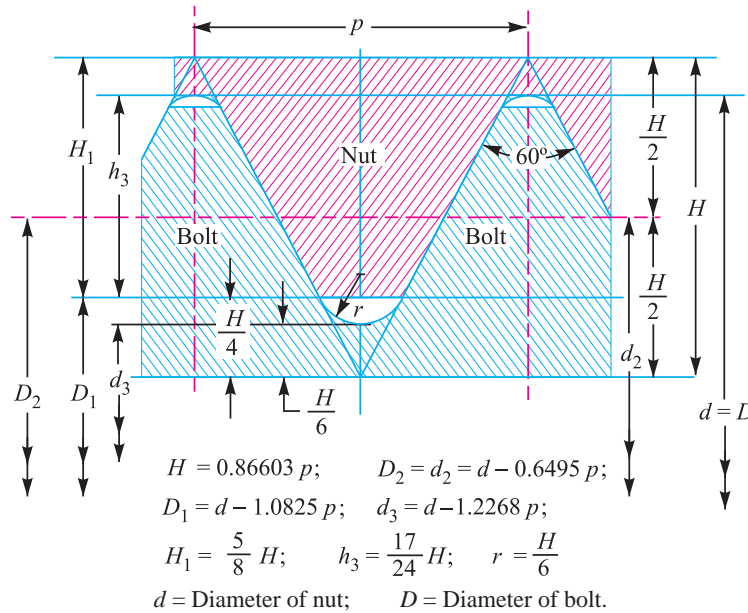
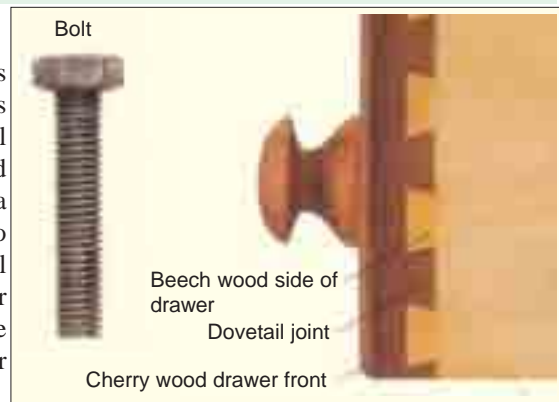


Fig. 11.11. Design profile of the nut and bolt.

### 11.5 Location of Screwed Joints

The choice of type of fastenings and its location are very important. The fastenings should be located in such a way so that they will be subjected to tensile and/or shear loads and bending of the fastening should be reduced to a minimum. The bending of the fastening due to misalignment, tightening up loads, or external loads are responsible for many failures. In order to relieve fastenings of bending stresses, the use of clearance spaces, spherical seat washers, or other devices may be used.

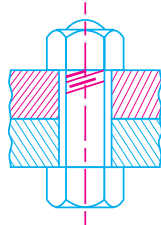




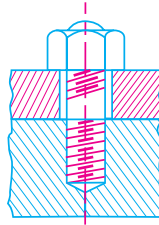
## 11.6 Common Types of Screw Fastenings

Following are the common types of screw fastenings :

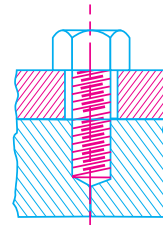
**1. Through bolts.** A through bolt (or simply a bolt) is shown in Fig. 11.12 (a). It is a cylindrical bar with threads for the nut at one end and head at the other end. The cylindrical part of the bolt is known as **shank**. It is passed through drilled holes in the two parts to be fastened together and clamped them securely to each other as the nut is screwed on to the threaded end. The through bolts may or may not have a machined finish and are made with either hexagonal or square heads. A through bolt should pass easily in the holes, when put under tension by a load along its axis. If the load acts perpendicular to the axis, tending to slide one of the connected parts along the other end thus subjecting it to shear, the holes should be reamed so that the bolt shank fits snugly there in. The through bolts according to their usage may be known as **machine bolts, carriage bolts, automobile bolts, eye bolts etc.**



(a) Through bolt.



(b) Tap bolt.



(c) Stud.

Fig. 11.12

**2. Tap bolts.** A tap bolt or screw differs from a bolt. It is screwed into a tapped hole of one of the parts to be fastened without the nut, as shown in Fig. 11.12 (b).

**3. Studs.** A stud is a round bar threaded at both ends. One end of the stud is screwed into a tapped hole of the parts to be fastened, while the other end receives a nut on it, as shown in Fig. 11.12 (c). Studs are chiefly used instead of tap bolts for securing various kinds of covers *e.g.* covers of engine and pump cylinders, valves, chests etc.



Deck-handler crane is used on ships to move loads

Note : This picture is given as additional information and is not a direct example of the current chapter.

This is due to the fact that when tap bolts are unscrewed or replaced, they have a tendency to break the threads in the hole. This disadvantage is overcome by the use of studs.

**4. Cap screws.** The cap screws are similar to tap bolts except that they are of small size and a variety of shapes of heads are available as shown in Fig. 11.13.

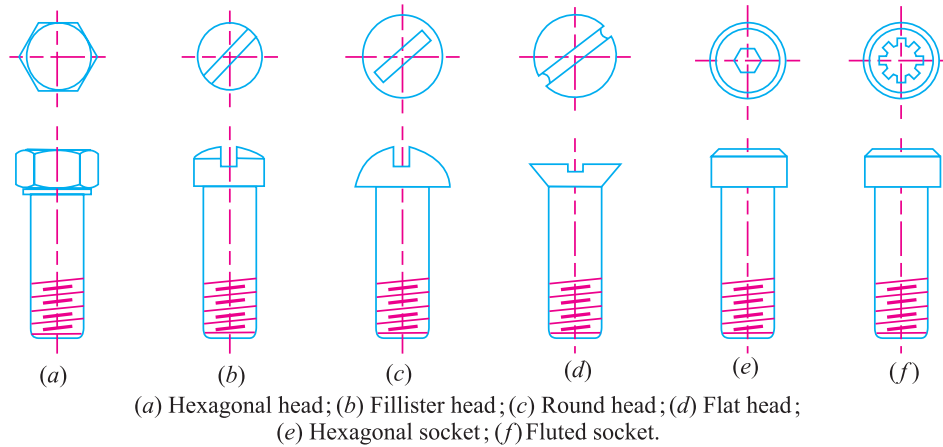


Fig. 11.13. Types of cap screws.

**5. Machine screws.** These are similar to cap screws with the head slotted for a screw driver. These are generally used with a nut.

**6. Set screws.** The set screws are shown in Fig. 11.14. These are used to prevent relative motion between the two parts. A set screw is screwed through a threaded hole in one part so that its point (*i.e.* end of the screw) presses against the other part. This resists the relative motion between the two parts by means of friction between the point of the screw and one of the parts. They may be used instead of key to prevent relative motion between a hub and a shaft in light power transmission members. They may also be used in connection with a key, where they prevent relative axial motion of the shaft, key and hub assembly.

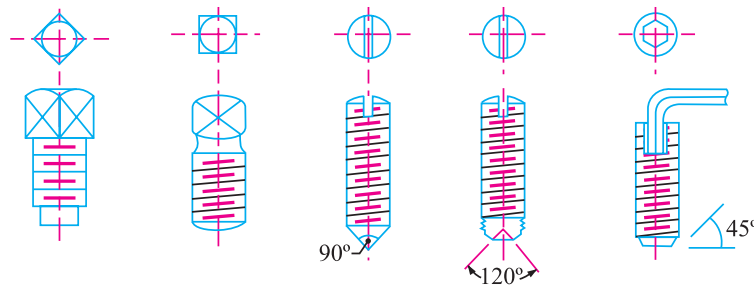


Fig. 11.14. Set screws.

The diameter of the set screw ( $d$ ) may be obtained from the following expression:

$$d = 0.125 D + 8 \text{ mm}$$

where  $D$  is the diameter of the shaft (in mm) on which the set screw is pressed.

The tangential force (in newtons) at the surface of the shaft is given by

$$F = 6.6 (d)^{2.3}$$



∴ Torque transmitted by a set screw,

$$T = F \times \frac{D}{2} \text{ N-m} \quad \dots (D \text{ is in metres})$$

and power transmitted (in watts),  $P = \frac{2\pi NT}{60}$ , where  $N$  is the speed in r.p.m.

## 11.7 Locking Devices

Ordinary thread fastenings, generally, remain tight under static loads, but many of these fastenings become loose under the action of variable loads or when machine is subjected to vibrations. The loosening of fastening is very dangerous and must be prevented. In order to prevent this, a large number of locking devices are available, some of which are discussed below :

**1. Jam nut or lock nut.** A most common locking device is a jam, lock or check nut. It has about one-half to two-third thickness of the standard nut. The thin lock nut is first tightened down with ordinary force, and then the upper nut (*i.e.* thicker nut) is tightened down upon it, as shown in Fig. 11.15 (a). The upper nut is then held tightly while the lower one is slackened back against it.

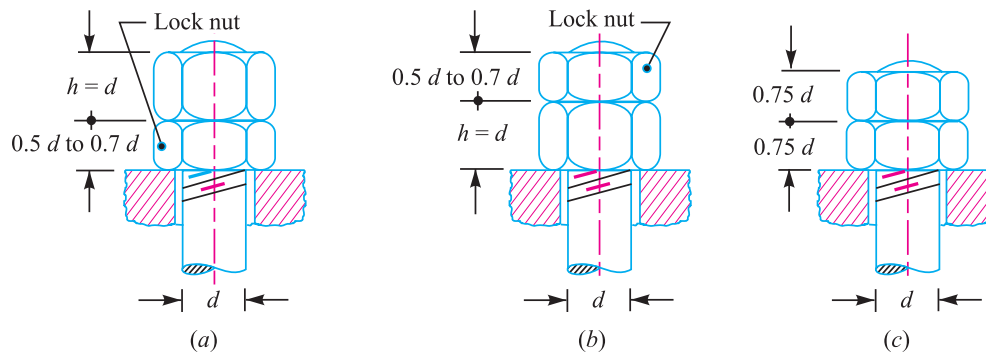


Fig. 11.15. Jam nut or lock nut.

In slackening back the lock nut, a thin spanner is required which is difficult to find in many shops. Therefore to overcome this difficulty, a thin nut is placed on the top as shown in Fig. 11.15 (b).

If the nuts are really tightened down as they should be, the upper nut carries a greater tensile load than the bottom one. Therefore, the top nut should be thicker one with a thin nut below it because it is desirable to put whole of the load on the thin nut. In order to overcome both the difficulties, both the nuts are made of the same thickness as shown in Fig. 11.15 (c).

**2. Castle nut.** It consists of a hexagonal portion with a cylindrical upper part which is slotted in line with the centre of each face, as shown in Fig. 11.16. The split pin passes through two slots in the nut and a hole in the bolt, so that a positive lock is obtained unless the pin shears. It is extensively used on jobs subjected to sudden shocks and considerable vibration such as in automobile industry.

**3. Sawn nut.** It has a slot sawed about half way through, as shown in Fig. 11.17. After the nut is screwed down, the small screw is tightened which produces more friction between the nut and the bolt. This prevents the loosening of nut.

**4. Penn, ring or grooved nut.** It has an upper portion hexagonal and a lower part cylindrical as shown in Fig. 11.18. It is largely used where bolts pass through connected pieces reasonably near their edges such as in marine type connecting rod ends. The bottom portion is cylindrical and is recessed to receive the tip of the locking set screw. The bolt hole requires counter-boring to receive the cylindrical portion of the nut. In order to prevent bruising of the latter by the case hardened tip of the set screw, it is recessed.

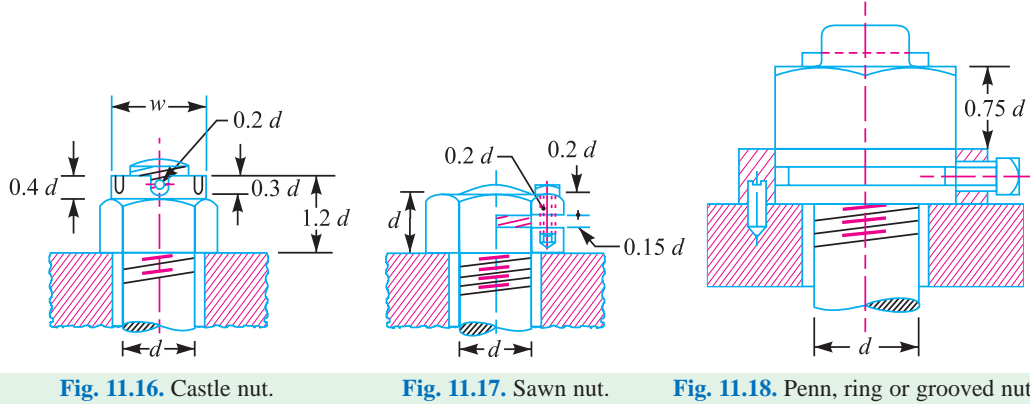


Fig. 11.16. Castle nut.

Fig. 11.17. Sawn nut.

Fig. 11.18. Penn, ring or grooved nut.

**5. Locking with pin.** The nuts may be locked by means of a taper pin or cotter pin passing through the middle of the nut as shown in Fig. 11.19 (a). But a split pin is often driven through the bolt above the nut, as shown in Fig. 11.19 (b).

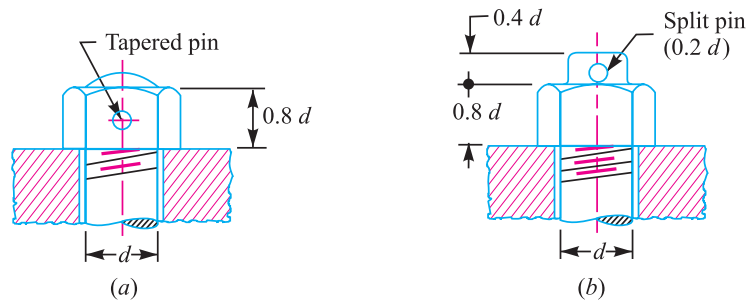


Fig. 11.19. Locking with pin.

**6. Locking with plate.** A form of stop plate or locking plate is shown in Fig. 11.20. The nut can be adjusted and subsequently locked through angular intervals of  $30^\circ$  by using these plates.

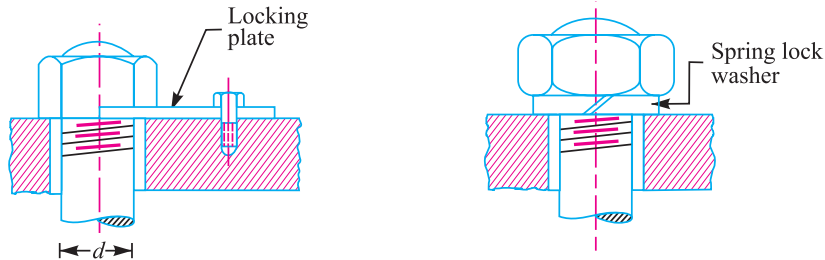


Fig. 11.20. Locking with plate.

Fig. 11.21. Locking with washer.

**7. Spring lock washer.** A spring lock washer is shown in Fig. 11.21. As the nut tightens the washer against the piece below, one edge of the washer is caused to dig itself into that piece, thus increasing the resistance so that the nut will not loosen so easily. There are many kinds of spring lock washers manufactured, some of which are fairly effective.

### 11.8 Designation of Screw Threads

According to Indian standards, IS : 4218 (Part IV) 1976 (Reaffirmed 1996), the complete designation of the screw thread shall include

**1. Size designation.** The size of the screw thread is designated by the letter 'M' followed by the diameter and pitch, the two being separated by the sign ×. When there is no indication of the pitch, it shall mean that a coarse pitch is implied.

**2. Tolerance designation.** This shall include

- (a) A figure designating tolerance grade as indicated below:  
 '7' for fine grade, '8' for normal (medium) grade, and '9' for coarse grade.
- (b) A letter designating the tolerance position as indicated below :  
 'H' for unit thread, 'd' for bolt thread with allowance, and 'h' for bolt thread without allowance.

For example, A bolt thread of 6 mm size of coarse pitch and with allowance on the threads and normal (medium) tolerance grade is designated as M6-8d.

### 11.9 Standard Dimensions of Screw Threads

The design dimensions of I.S.O. screw threads for screws, bolts and nuts of coarse and fine series are shown in Table 11.1.

**Table 11.1. Design dimensions of screw threads, bolts and nuts according to IS : 4218 (Part III) 1976 (Reaffirmed 1996) (Refer Fig. 11.1)**

Designation	Pitch mm	Major or nominal diameter Nut and Bolt (d = D) mm	Effective or pitch diameter Nut and Bolt (d <sub>p</sub> ) mm	Minor or core diameter (d <sub>c</sub> ) mm		Depth of thread (bolt) mm	Stress area mm <sup>2</sup>
				Bolt	Nut		
(1)	(2)	(3)	(4)	(5)	(6)	(7)	(8)
<b>Coarse series</b>							
M 0.4	0.1	0.400	0.335	0.277	0.292	0.061	0.074
M 0.6	0.15	0.600	0.503	0.416	0.438	0.092	0.166
M 0.8	0.2	0.800	0.670	0.555	0.584	0.123	0.295
M 1	0.25	1.000	0.838	0.693	0.729	0.153	0.460
M 1.2	0.25	1.200	1.038	0.893	0.929	0.158	0.732
M 1.4	0.3	1.400	1.205	1.032	1.075	0.184	0.983
M 1.6	0.35	1.600	1.373	1.171	1.221	0.215	1.27
M 1.8	0.35	1.800	1.573	1.371	1.421	0.215	1.70
M 2	0.4	2.000	1.740	1.509	1.567	0.245	2.07
M 2.2	0.45	2.200	1.908	1.648	1.713	0.276	2.48
M 2.5	0.45	2.500	2.208	1.948	2.013	0.276	3.39
M 3	0.5	3.000	2.675	2.387	2.459	0.307	5.03
M 3.5	0.6	3.500	3.110	2.764	2.850	0.368	6.78
M 4	0.7	4.000	3.545	3.141	3.242	0.429	8.78
M 4.5	0.75	4.500	4.013	3.580	3.688	0.460	11.3
M 5	0.8	5.000	4.480	4.019	4.134	0.491	14.2
M 6	1	6.000	5.350	4.773	4.918	0.613	20.1

(1)	(2)	(3)	(4)	(5)	(6)	(7)	(8)
M 7	1	7.000	6.350	5.773	5.918	0.613	28.9
M 8	1.25	8.000	7.188	6.466	6.647	0.767	36.6
M 10	1.5	10.000	9.026	8.160	8.876	0.920	58.3
M 12	1.75	12.000	10.863	9.858	10.106	1.074	84.0
M 14	2	14.000	12.701	11.546	11.835	1.227	115
M 16	2	16.000	14.701	13.546	13.835	1.227	157
M 18	2.5	18.000	16.376	14.933	15.294	1.534	192
M 20	2.5	20.000	18.376	16.933	17.294	1.534	245
M 22	2.5	22.000	20.376	18.933	19.294	1.534	303
M 24	3	24.000	22.051	20.320	20.752	1.840	353
M 27	3	27.000	25.051	23.320	23.752	1.840	459
M 30	3.5	30.000	27.727	25.706	26.211	2.147	561
M 33	3.5	33.000	30.727	28.706	29.211	2.147	694
M 36	4	36.000	33.402	31.093	31.670	2.454	817
M 39	4	39.000	36.402	34.093	34.670	2.454	976
M 42	4.5	42.000	39.077	36.416	37.129	2.760	1104
M 45	4.5	45.000	42.077	39.416	40.129	2.760	1300
M 48	5	48.000	44.752	41.795	42.587	3.067	1465
M 52	5	52.000	48.752	45.795	46.587	3.067	1755
M 56	5.5	56.000	52.428	49.177	50.046	3.067	2022
M 60	5.5	60.000	56.428	53.177	54.046	3.374	2360
<b>Fine series</b>							
M 8 × 1	1	8.000	7.350	6.773	6.918	0.613	39.2
M 10 × 1.25	1.25	10.000	9.188	8.466	8.647	0.767	61.6
M 12 × 1.25	1.25	12.000	11.184	10.466	10.647	0.767	92.1
M 14 × 1.5	1.5	14.000	13.026	12.160	12.376	0.920	125
M 16 × 1.5	1.5	16.000	15.026	14.160	14.376	0.920	167
M 18 × 1.5	1.5	18.000	17.026	16.160	16.376	0.920	216
M 20 × 1.5	1.5	20.000	19.026	18.160	18.376	0.920	272
M 22 × 1.5	1.5	22.000	21.026	20.160	20.376	0.920	333
M 24 × 2	2	24.000	22.701	21.546	21.835	1.227	384
M 27 × 2	2	27.000	25.701	24.546	24.835	1.227	496
M 30 × 2	2	30.000	28.701	27.546	27.835	1.227	621
M 33 × 2	2	33.000	31.701	30.546	30.835	1.227	761
M 36 × 3	3	36.000	34.051	32.319	32.752	1.840	865
M 39 × 3	3	39.000	37.051	35.319	35.752	1.840	1028

**Note :** In case the table is not available, then the core diameter ( $d_c$ ) may be taken as  $0.84 d$ , where  $d$  is the major diameter.

### 11.10 Stresses in Screwed Fastening due to Static Loading

The following stresses in screwed fastening due to static loading are important from the subject point of view :

1. Internal stresses due to screwing up forces,
2. Stresses due to external forces, and
3. Stress due to combination of stresses at (1) and (2).

We shall now discuss these stresses, in detail, in the following articles.

### 11.11 Initial Stresses due to Screwing up Forces

The following stresses are induced in a bolt, screw or stud when it is screwed up tightly.

1. **Tensile stress due to stretching of bolt.** Since none of the above mentioned stresses are accurately determined, therefore bolts are designed on the basis of direct tensile stress with a large factor of safety in order to account for the indeterminate stresses. The initial tension in a bolt, based on experiments, may be found by the relation

$$P_i = 2840 d \text{ N}$$

where

$$P_i = \text{Initial tension in a bolt, and}$$

$$d = \text{Nominal diameter of bolt, in mm.}$$

The above relation is used for making a joint fluid tight like steam engine cylinder cover joints etc. When the joint is not required as tight as fluid-tight joint, then the initial tension in a bolt may be reduced to half of the above value. In such cases

$$P_i = 1420 d \text{ N}$$

The small diameter bolts may fail during tightening, therefore bolts of smaller diameter (less than M 16 or M 18) are not permitted in making fluid tight joints.

If the bolt is not initially stressed, then the maximum safe axial load which may be applied to it, is given by

$$P = \text{Permissible stress} \times \text{Cross-sectional area at bottom of the thread} \\ (\text{i.e. stress area})$$

The stress area may be obtained from Table 11.1 or it may be found by using the relation

$$\text{Stress area} = \frac{\pi}{4} \left( \frac{d_p + d_c}{2} \right)^2$$

where

$$d_p = \text{Pitch diameter, and}$$

$$d_c = \text{Core or minor diameter.}$$



Simple machine tools.

Note : This picture is given as additional information and is not a direct example of the current chapter.

**2. Torsional shear stress caused by the frictional resistance of the threads during its tightening.** The torsional shear stress caused by the frictional resistance of the threads during its tightening may be obtained by using the torsion equation. We know that

$$\frac{T}{J} = \frac{\tau}{r}$$

$$\therefore \tau = \frac{T}{J} \times r = \frac{T}{\frac{\pi}{32} (d_c)^4} \times \frac{d_c}{2} = \frac{16 T}{\pi (d_c)^3}$$

where  $\tau$  = Torsional shear stress,  
 $T$  = Torque applied, and  
 $d_c$  = Minor or core diameter of the thread.

It has been shown during experiments that due to repeated unscrewing and tightening of the nut, there is a gradual scoring of the threads, which increases the torsional twisting moment ( $T$ ).

**3. Shear stress across the threads.** The average thread shearing stress for the screw ( $\tau_s$ ) is obtained by using the relation :

$$\tau_s = \frac{P}{\pi d_c \times b \times n}$$

where  $b$  = Width of the thread section at the root.

The average thread shearing stress for the nut is

$$\tau_n = \frac{P}{\pi d \times b \times n}$$

where  $d$  = Major diameter.

**4. Compression or crushing stress on threads.** The compression or crushing stress between the threads ( $\sigma_c$ ) may be obtained by using the relation :

$$\sigma_c = \frac{P}{\pi [d^2 - (d_c)^2] n}$$

where  $d$  = Major diameter,  
 $d_c$  = Minor diameter, and  
 $n$  = Number of threads in engagement.

**5. Bending stress if the surfaces under the head or nut are not perfectly parallel to the bolt axis.** When the outside surfaces of the parts to be connected are not parallel to each other, then the bolt will be subjected to bending action. The bending stress ( $\sigma_b$ ) induced in the shank of the bolt is given by

$$\sigma_b = \frac{x \cdot E}{2l}$$

where  $x$  = Difference in height between the extreme corners of the nut or head,  
 $l$  = Length of the shank of the bolt, and  
 $E$  = Young's modulus for the material of the bolt.

**Example 11.1.** Determine the safe tensile load for a bolt of M 30, assuming a safe tensile stress of 42 MPa.

**Solution.** Given :  $d = 30$  mm ;  $\sigma_t = 42$  MPa = 42 N/mm<sup>2</sup>



From Table 11.1 (coarse series), we find that the stress area *i.e.* cross-sectional area at the bottom of the thread corresponding to M 30 is 561 mm<sup>2</sup>.

$$\therefore \text{Safe tensile load} = \text{Stress area} \times \sigma_t = 561 \times 42 = 23\,562 \text{ N} = 23.562 \text{ kN} \quad \text{Ans.}$$

**Note:** In the above example, we have assumed that the bolt is not initially stressed.

**Example 11.2.** Two machine parts are fastened together tightly by means of a 24 mm tap bolt. If the load tending to separate these parts is neglected, find the stress that is set up in the bolt by the initial tightening.

**Solution.** Given :  $d = 24 \text{ mm}$

From Table 11.1 (coarse series), we find that the core diameter of the thread corresponding to M 24 is  $d_c = 20.32 \text{ mm}$ .

Let  $\sigma_t =$  Stress set up in the bolt.

We know that initial tension in the bolt,

$$P = 2840 d = 2840 \times 24 = 68\,160 \text{ N}$$

We also know that initial tension in the bolt ( $P$ ),

$$68\,160 = \frac{\pi}{4} (d_c)^2 \sigma_t = \frac{\pi}{4} (20.30)^2 \sigma_t = 324 \sigma_t$$

$$\therefore \sigma_t = 68\,160 / 324 = 210 \text{ N/mm}^2 = 210 \text{ MPa} \quad \text{Ans.}$$

### 11.12 Stresses due to External Forces

The following stresses are induced in a bolt when it is subjected to an external load.

**1. Tensile stress.** The bolts, studs and screws usually carry a load in the direction of the bolt axis which induces a tensile stress in the bolt.

Let  $d_c =$  Root or core diameter of the thread, and

$\sigma_t =$  Permissible tensile stress for the bolt material.

We know that external load applied,

$$P = \frac{\pi}{4} (d_c)^2 \sigma_t \quad \text{or} \quad d_c = \sqrt{\frac{4P}{\pi \sigma_t}}$$

Now from Table 11.1, the value of the nominal diameter of bolt corresponding to the value of  $d_c$  may be obtained or stress area  $\left[ \frac{\pi}{4} (d_c)^2 \right]$  may be fixed.

**Notes:** (a) If the external load is taken up by a number of bolts, then

$$P = \frac{\pi}{4} (d_c)^2 \sigma_t \times n$$

(b) In case the standard table is not available, then for coarse threads,  $d_c = 0.84 d$ , where  $d$  is the nominal diameter of bolt.



Simple machine tools.

**Note :** This picture is given as additional information and is not a direct example of the current chapter.

**2. Shear stress.** Sometimes, the bolts are used to prevent the relative movement of two or more parts, as in case of flange coupling, then the shear stress is induced in the bolts. The shear stresses should be avoided as far as possible. It should be noted that when the bolts are subjected to direct shearing loads, they should be located in such a way that the shearing load comes upon the body (*i.e.* shank) of the bolt and not upon the threaded portion. In some cases, the bolts may be relieved of shear load by using shear pins. When a number of bolts are used to share the shearing load, the finished bolts should be fitted to the reamed holes.

Let  $d$  = Major diameter of the bolt, and  
 $n$  = Number of bolts.

∴ Shearing load carried by the bolts,

$$P_s = \frac{\pi}{4} \times d^2 \times \tau \times n \quad \text{or} \quad d = \sqrt{\frac{4 P_s}{\pi \tau n}}$$

**3. Combined tension and shear stress.** When the bolt is subjected to both tension and shear loads, as in case of coupling bolts or bearing, then the diameter of the shank of the bolt is obtained from the shear load and that of threaded part from the tensile load. A diameter slightly larger than that required for either shear or tension may be assumed and stresses due to combined load should be checked for the following principal stresses.

Maximum principal shear stress,

$$\tau_{max} = \frac{1}{2} \sqrt{(\sigma_t)^2 + 4\tau^2}$$

and maximum principal tensile stress,

$$\sigma_{t(max)} = \frac{\sigma_t}{2} + \frac{1}{2} \sqrt{(\sigma_t)^2 + 4\tau^2}$$

These stresses should not exceed the safe permissible values of stresses.

**Example 11.3.** An eye bolt is to be used for lifting a load of 60 kN. Find the nominal diameter of the bolt, if the tensile stress is not to exceed 100 MPa. Assume coarse threads.

**Solution.** Given :  $P = 60 \text{ kN} = 60 \times 10^3 \text{ N}$  ;  
 $\sigma_t = 100 \text{ MPa} = 100 \text{ N/mm}^2$

An eye bolt for lifting a load is shown in Fig. 11.22.

Let  $d$  = Nominal diameter of the bolt, and  
 $d_c$  = Core diameter of the bolt.

We know that load on the bolt ( $P$ ),

$$60 \times 10^3 = \frac{\pi}{4} (d_c)^2 \sigma_t = \frac{\pi}{4} (d_c)^2 100 = 78.55 (d_c)^2$$

$$\therefore (d_c)^2 = 600 \times 10^3 / 78.55 = 764 \quad \text{or} \quad d_c = 27.6 \text{ mm}$$

From Table 11.1 (coarse series), we find that the standard core diameter ( $d_c$ ) is 28.706 mm and the corresponding nominal diameter ( $d$ ) is 33 mm. **Ans.**

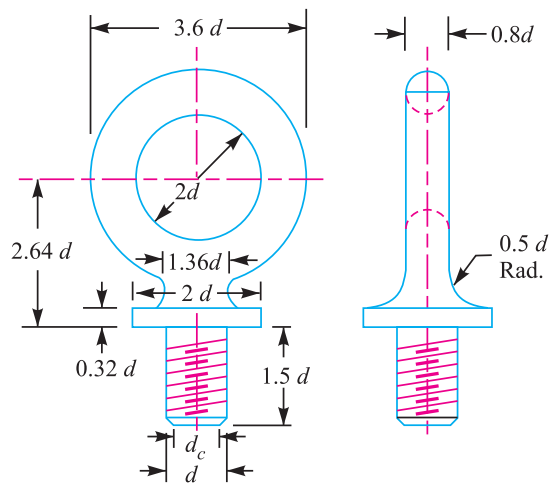


Fig. 11.22

**Note :** A lifting eye bolt, as shown in Fig. 11.22, is used for lifting and transporting heavy machines. It consists of a ring of circular cross-section at the head and provided with threads at the lower portion for screwing inside a threaded hole on the top of the machine.

**Example 11.4.** Two shafts are connected by means of a flange coupling to transmit torque of 25 N-m. The flanges of the coupling are fastened by four bolts of the same material at a radius of 30 mm. Find the size of the bolts if the allowable shear stress for the bolt material is 30 MPa.

**Solution.** Given :  $T = 25 \text{ N-m} = 25 \times 10^3 \text{ N-mm}$  ;  $n = 4$ ;  $R_p = 30 \text{ mm}$  ;  $\tau = 30 \text{ MPa} = 30 \text{ N/mm}^2$   
 We know that the shearing load carried by flange coupling,

$$P_s = \frac{T}{R_p} = \frac{25 \times 10^3}{30} = 833.3 \text{ N} \quad \dots(i)$$

Let  $d_c$  = Core diameter of the bolt.

∴ Resisting load on the bolts

$$= \frac{\pi}{4} (d_c)^2 \tau \times n = \frac{\pi}{4} (d_c)^2 30 \times 4 = 94.26 (d_c)^2 \quad \dots(ii)$$

From equations (i) and (ii), we get

$$(d_c)^2 = 833.3 / 94.26 = 8.84 \quad \text{or} \quad d_c = 2.97 \text{ mm}$$

From Table 11.1 (coarse series), we find that the standard core diameter of the bolt is 3.141 mm and the corresponding size of the bolt is M 4. **Ans.**

**Example 11.5.** A lever loaded safety valve has a diameter of 100 mm and the blow off pressure is 1.6 N/mm<sup>2</sup>. The fulcrum of the lever is screwed into the cast iron body of the cover. Find the diameter of the threaded part of the fulcrum if the permissible tensile stress is limited to 50 MPa and the leverage ratio is 8.

**Solution.** Given :  $D = 100 \text{ mm}$  ;  $p = 1.6 \text{ N/mm}^2$ ;  $\sigma_t = 50 \text{ MPa} = 50 \text{ N/mm}^2$

We know that the load acting on the valve,

$$F = \text{Area} \times \text{pressure} = \frac{\pi}{4} \times D^2 \times p = \frac{\pi}{4} (100)^2 1.6 = 12\,568 \text{ N}$$

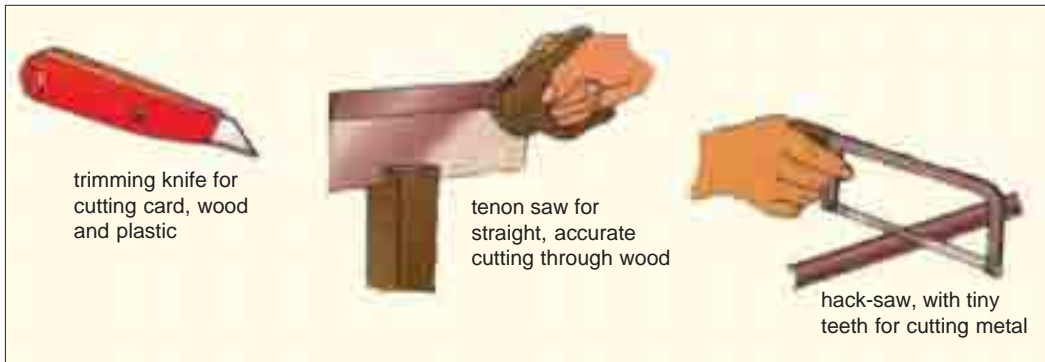
Since the leverage is 8, therefore load at the end of the lever,

$$W = \frac{12\,568}{8} = 1571 \text{ N}$$

∴ Load on the fulcrum,

$$P = F - W = 12\,568 - 1571 = 10\,997 \text{ N} \quad \dots(i)$$

Let  $d_c$  = Core diameter of the threaded part.



Simple machine tools.

**Note :** This picture is given as additional information and is not a direct example of the current chapter.

∴ Resisting load on the threaded part of the fulcrum,

$$P = \frac{\pi}{4} (d_c)^2 \sigma_t = \frac{\pi}{4} (d_c)^2 50 = 39.3 (d_c)^2 \quad \dots(ii)$$

From equations (i) and (ii), we get

$$(d_c)^2 = 10\,997 / 39.3 = 280 \quad \text{or} \quad d_c = 16.7 \text{ mm}$$

From Table 11.1 (fine series), we find that the standard core diameter is 18.376 mm and the corresponding size of the bolt is M 20 × 1.5. **Ans.**

### 11.13 Stress due to Combined Forces

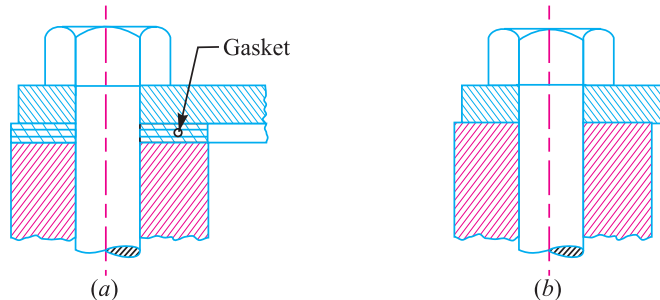


Fig. 11.23

The resultant axial load on a bolt depends upon the following factors :

1. The initial tension due to tightening of the bolt,
2. The external load, and
3. The relative elastic yielding (springiness) of the bolt and the connected members.

When the connected members are very yielding as compared with the bolt, which is a soft gasket, as shown in Fig. 11.23 (a), then the resultant load on the bolt is approximately equal to the sum of the initial tension and the external load. On the other hand, if the bolt is very yielding as compared with the connected members, as shown in Fig. 11.23 (b), then the resultant load will be either the initial tension or the external load, whichever is greater. The actual conditions usually lie between the two extremes. In order to determine the resultant axial load ( $P$ ) on the bolt, the following equation may be used :

$$P = P_1 + \frac{a}{1+a} \times P_2 = P_1 + K.P_2 \quad \dots \left( \text{Substituting } \frac{a}{1+a} = K \right)$$

where

$P_1$  = Initial tension due to tightening of the bolt,

$P_2$  = External load on the bolt, and

$a$  = Ratio of elasticity of connected parts to the elasticity of bolt.



Simple machine tools.

Note : This picture is given as additional information and is not a direct example of the current chapter.

For soft gaskets and large bolts, the value of  $a$  is high and the value of  $\frac{a}{1+a}$  is approximately equal to unity, so that the resultant load is equal to the sum of the initial tension and the external load.

For hard gaskets or metal to metal contact surfaces and with small bolts, the value of  $a$  is small and the resultant load is mainly due to the initial tension (or external load, in rare case it is greater than initial tension).

The value of ' $a$ ' may be estimated by the designer to obtain an approximate value for the resultant load. The values of  $\frac{a}{1+a}$  (i.e.  $K$ ) for various type of joints are shown in Table 11.2. The designer thus has control over the influence on the resultant load on a bolt by proportioning the sizes of the connected parts and bolts and by specifying initial tension in the bolt.

**Table 11.2. Values of  $K$  for various types of joints.**

Type of joint	$K = \frac{a}{1+a}$
Metal to metal joint with through bolts	0.00 to 0.10
Hard copper gasket with long through bolts	0.25 to 0.50
Soft copper gasket with long through bolts	0.50 to 0.75
Soft packing with through bolts	0.75 to 1.00
Soft packing with studs	1.00

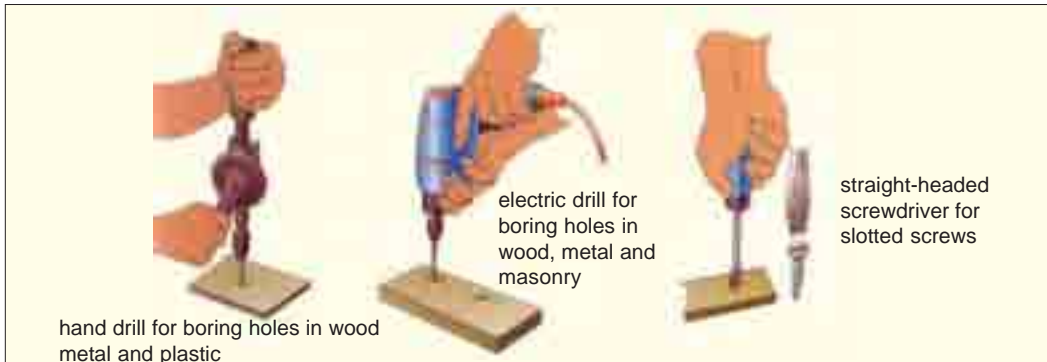
### 11.14 Design of Cylinder Covers

The cylinder covers may be secured by means of bolts or studs, but studs are preferred. The possible arrangement of securing the cover with bolts and studs is shown in Fig. 11.24 (a) and (b) respectively. The bolts or studs, cylinder cover plate and cylinder flange may be designed as discussed below:

#### 1. Design of bolts or studs

In order to find the size and number of bolts or studs, the following procedure may be adopted.

- Let
- $D$  = Diameter of the cylinder,
  - $p$  = Pressure in the cylinder,
  - $d_c$  = Core diameter of the bolts or studs,
  - $n$  = Number of bolts or studs, and
  - $\sigma_{tb}$  = Permissible tensile stress for the bolt or stud material.



Simple machine tools.

Note : This picture is given as additional information and is not a direct example of the current chapter.

We know that upward force acting on the cylinder cover,

$$P = \frac{\pi}{4} (D^2) p \quad \dots(i)$$

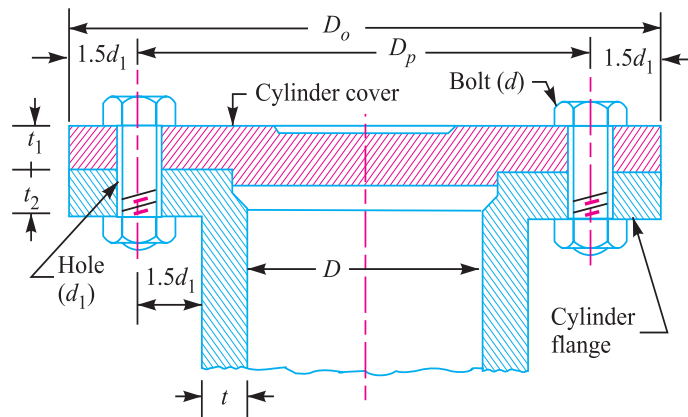
This force is resisted by  $n$  number of bolts or studs provided on the cover.

∴ Resisting force offered by  $n$  number of bolts or studs,

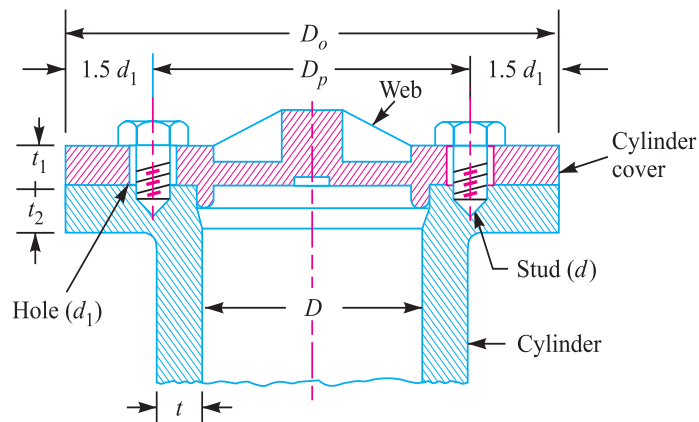
$$P = \frac{\pi}{4} (d_c)^2 \sigma_{tb} \times n \quad \dots(ii)$$

From equations (i) and (ii), we have

$$\frac{\pi}{4} (D^2) p = \frac{\pi}{4} (d_c)^2 \sigma_{tb} \times n \quad \dots(iii)$$



(a) Arrangement of securing the cylinder cover with bolts.



(b) Arrangement of securing the cylinder cover with studs.

Fig. 11.24

From this equation, the number of bolts or studs may be obtained, if the size of the bolt or stud is known and *vice-versa*. Usually the size of the bolt is assumed. If the value of  $n$  as obtained from the above relation is odd or a fraction, then next higher even number is adopted.

The bolts or studs are screwed up tightly, along with metal gasket or asbestos packing, in order to provide a leak proof joint. We have already discussed that due to the tightening of bolts, sufficient



tensile stress is produced in the bolts or studs. This may break the bolts or studs, even before any load due to internal pressure acts upon them. Therefore a bolt or a stud less than 16 mm diameter should never be used.

The tightness of the joint also depends upon the circumferential pitch of the bolts or studs. The circumferential pitch should be between  $20 \sqrt{d_1}$  and  $30 \sqrt{d_1}$ , where  $d_1$  is the diameter of the hole in mm for bolt or stud. The pitch circle diameter ( $D_p$ ) is usually taken as  $D + 2t + 3d_1$  and outside diameter of the cover is kept as

$$D_o = D_p + 3d_1 = D + 2t + 6d_1$$

where

$t$  = Thickness of the cylinder wall.

### 2. Design of cylinder cover plate

The thickness of the cylinder cover plate ( $t_1$ ) and the thickness of the cylinder flange ( $t_2$ ) may be determined as discussed below:

Let us consider the semi-cover plate as shown in Fig. 11.25. The internal pressure in the cylinder tries to lift the cylinder cover while the bolts or studs try to retain it in its position. But the centres of pressure of these two loads do not coincide. Hence, the cover plate is subjected to bending stress. The point X is the centre of pressure for bolt load and the point Y is the centre of internal pressure.

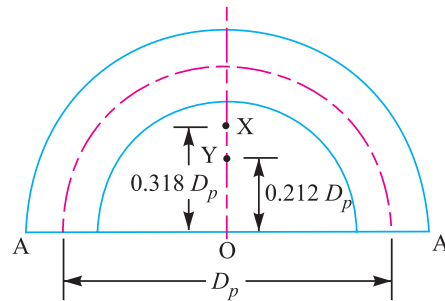


Fig. 11.25. Semi-cover plate of a cylinder.

We know that the bending moment at A-A,

$$M = \frac{\text{Total bolt load}}{2} (OX - OY) = \frac{P}{2} (0.318 D_p - 0.212 D_p)$$

$$= \frac{P}{2} \times 0.106 D_p = 0.053 P \times D_p$$

Section modulus,  $Z = \frac{1}{6} w (t_1)^2$

where  $w$  = Width of plate

= Outside dia. of cover plate - 2 × dia. of bolt hole

$$= D_o - 2d_1$$

Knowing the tensile stress for the cover plate material, the value of  $t_1$  may be determined by using the bending equation, i.e.,  $\sigma_t = M / Z$ .

### 3. Design of cylinder flange

The thickness of the cylinder flange ( $t_2$ ) may be determined from bending consideration. A portion of the cylinder flange under the influence of one bolt is shown in Fig. 11.26.

The load in the bolt produces bending stress in the section X-X. From the geometry of the figure, we find that eccentricity of the load from section X-X is

$$e = \text{Pitch circle radius} - (\text{Radius of bolt hole} + \text{Thickness of cylinder wall})$$

$$= \frac{D_p}{2} - \left( \frac{d_1}{2} + t \right)$$

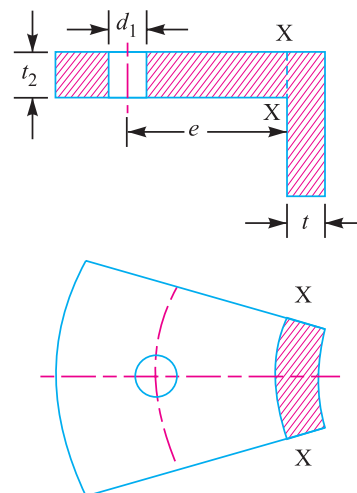


Fig. 11.26. A portion of the cylinder flange.

**398 ■ A Textbook of Machine Design**

∴ Bending moment,  $M = \text{Load on each bolt} \times e = \frac{P}{n} \times e$

Radius of the section X-X,

$$R = \text{Cylinder radius} + \text{Thickness of cylinder wall} = \frac{D}{2} + t$$

Width of the section X-X,

$$w = \frac{2\pi R}{n}, \text{ where } n \text{ is the number of bolts.}$$

Section modulus,  $Z = \frac{1}{6} w (t_2)^2$

Knowing the tensile stress for the cylinder flange material, the value of  $t_2$  may be obtained by using the bending equation i.e.  $\sigma_t = M / Z$ .

**Example 11.6.** A steam engine cylinder has an effective diameter of 350 mm and the maximum steam pressure acting on the cylinder cover is 1.25 N/mm<sup>2</sup>. Calculate the number and size of studs required to fix the cylinder cover, assuming the permissible stress in the studs as 33 MPa.

**Solution.** Given:  $D = 350 \text{ mm}$  ;  $p = 1.25 \text{ N/mm}^2$  ;  $\sigma_t = 33 \text{ MPa} = 33 \text{ N/mm}^2$

Let  $d = \text{Nominal diameter of studs,}$   
 $d_c = \text{Core diameter of studs, and}$   
 $n = \text{Number of studs.}$

We know that the upward force acting on the cylinder cover,

$$P = \frac{\pi}{4} \times D^2 \times p = \frac{\pi}{4} (350)^2 1.25 = 120\,265 \text{ N} \quad \dots(i)$$

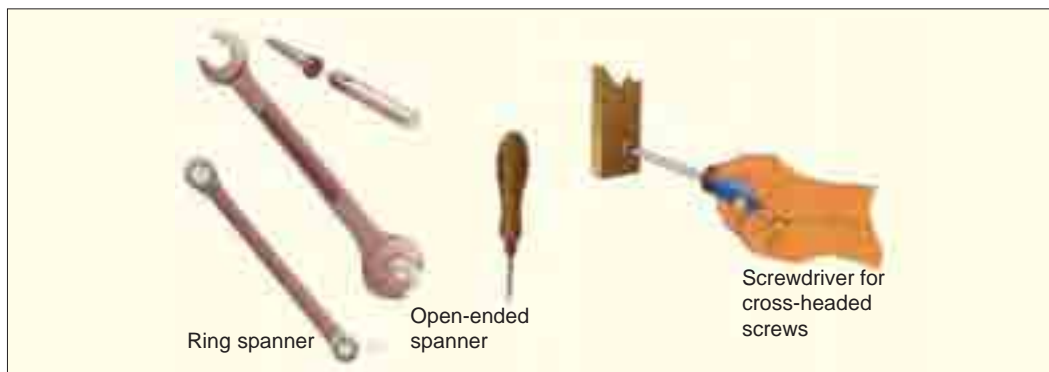
Assume that the studs of nominal diameter 24 mm are used. From Table 11.1 (coarse series), we find that the corresponding core diameter ( $d_c$ ) of the stud is 20.32 mm.

∴ Resisting force offered by  $n$  number of studs,

$$P = \frac{\pi}{4} \times (d_c)^2 \sigma_t \times n = \frac{\pi}{4} (20.32)^2 33 \times n = 10\,700 \text{ n N} \quad \dots(ii)$$

From equations (i) and (ii), we get

$$n = 120\,265 / 10\,700 = 11.24 \text{ say } 12 \text{ Ans.}$$



Simple machine tools.

Note : This picture is given as additional information and is not a direct example of the current chapter.

Taking the diameter of the stud hole ( $d_1$ ) as 25 mm, we have pitch circle diameter of the studs,

$$D_p = D + 2t + 3d_1 = 350 + 2 \times 10 + 3 \times 25 = 445 \text{ mm}$$

...(Assuming  $t = 10$  mm)

∴ \*Circumferential pitch of the studs

$$= \frac{\pi \times D_p}{n} = \frac{\pi \times 445}{12} = 116.5 \text{ mm}$$

We know that for a leak-proof joint, the circumferential pitch of the studs should be between  $20\sqrt{d_1}$  to  $30\sqrt{d_1}$ , where  $d_1$  is the diameter of stud hole in mm.

∴ Minimum circumferential pitch of the studs

$$= 20\sqrt{d_1} = 20\sqrt{25} = 100 \text{ mm}$$

and maximum circumferential pitch of the studs

$$= 30\sqrt{d_1} = 30\sqrt{25} = 150 \text{ mm}$$

Since the circumferential pitch of the studs obtained above lies within 100 mm to 150 mm, therefore the size of the stud chosen is satisfactory.

∴ Size of the stud = M 24 **Ans.**

**Example 11.7.** A mild steel cover plate is to be designed for an inspection hole in the shell of a pressure vessel. The hole is 120 mm in diameter and the pressure inside the vessel is  $6 \text{ N/mm}^2$ . Design the cover plate along with the bolts. Assume allowable tensile stress for mild steel as  $60 \text{ MPa}$  and for bolt material as  $40 \text{ MPa}$ .

**Solution.** Given :  $D = 120$  mm or  $r = 60$  mm ;  $p = 6 \text{ N/mm}^2$  ;  $\sigma_t = 60 \text{ MPa} = 60 \text{ N/mm}^2$  ;  $\sigma_{ib} = 40 \text{ MPa} = 40 \text{ N/mm}^2$

First for all, let us find the thickness of the pressure vessel. According to Lamé's equation, thickness of the pressure vessel,

$$t = r \left[ \sqrt{\frac{\sigma_t + p}{\sigma_t - p}} - 1 \right] = 60 \left[ \sqrt{\frac{60 + 6}{60 - 6}} - 1 \right] = 6 \text{ mm}$$

Let us adopt  $t = 10$  mm

### Design of bolts

Let  $d$  = Nominal diameter of the bolts,  
 $d_c$  = Core diameter of the bolts, and  
 $n$  = Number of bolts.

We know that the total upward force acting on the cover plate (or on the bolts),

$$P = \frac{\pi}{4} (D)^2 p = \frac{\pi}{4} (120)^2 6 = 67\,860 \text{ N} \quad \dots(i)$$

Let the nominal diameter of the bolt is 24 mm. From Table 11.1 (coarse series), we find that the corresponding core diameter ( $d_c$ ) of the bolt is 20.32 mm.

∴ Resisting force offered by  $n$  number of bolts,

$$P = \frac{\pi}{4} (d_c)^2 \sigma_{ib} \times n = \frac{\pi}{4} (20.32)^2 40 \times n = 12\,973 \text{ n N} \quad \dots(ii)$$

\* The circumferential pitch of the studs can not be measured and marked on the cylinder cover. The centres of the holes are usually marked by angular distribution of the pitch circle into  $n$  number of equal parts. In the present case, the angular displacement of the stud hole centre will be  $360^\circ/12 = 30^\circ$ .

## 400 ■ A Textbook of Machine Design

From equations (i) and (ii), we get

$$n = 67\,860 / 12\,973 = 5.23 \text{ say } 6$$

Taking the diameter of the bolt hole ( $d_1$ ) as 25 mm, we have pitch circle diameter of bolts,

$$D_p = D + 2t + 3d_1 = 120 + 2 \times 10 + 3 \times 25 = 215 \text{ mm}$$

∴ Circumferential pitch of the bolts

$$= \frac{\pi \times D_p}{n} = \frac{\pi \times 215}{6} = 112.6 \text{ mm}$$

We know that for a leak proof joint, the circumferential pitch of the bolts should lie between  $20\sqrt{d_1}$  to  $30\sqrt{d_1}$ , where  $d_1$  is the diameter of the bolt hole in mm.

∴ Minimum circumferential pitch of the bolts

$$= 20\sqrt{d_1} = 20\sqrt{25} = 100 \text{ mm}$$

and maximum circumferential pitch of the bolts

$$= 30\sqrt{d_1} = 30\sqrt{25} = 150 \text{ mm}$$

Since the circumferential pitch of the bolts obtained above is within 100 mm and 150 mm, therefore size of the bolt chosen is satisfactory.

∴ Size of the bolt = M 24 **Ans.**

### Design of cover plate

Let  $t_1$  = Thickness of the cover plate.

The semi-cover plate is shown in Fig. 11.27.

We know that the bending moment at A-A,

$$\begin{aligned} M &= 0.053 P \times D_p \\ &= 0.053 \times 67\,860 \times 215 \\ &= 773\,265 \text{ N-mm} \end{aligned}$$

Outside diameter of the cover plate,

$$D_o = D_p + 3d_1 = 215 + 3 \times 25 = 290 \text{ mm}$$

Width of the plate,

$$w = D_o - 2d_1 = 290 - 2 \times 25 = 240 \text{ mm}$$

∴ Section modulus,

$$Z = \frac{1}{6} w(t_1)^2 = \frac{1}{6} \times 240 (t_1)^2 = 40 (t_1)^2 \text{ mm}^3$$

We know that bending (tensile) stress,

$$\sigma_t = M/Z \quad \text{or} \quad 60 = 773\,265 / 40 (t_1)^2$$

∴  $(t_1)^2 = 773\,265 / 40 \times 60 = 322$  or  $t_1 = 18 \text{ mm}$  **Ans.**

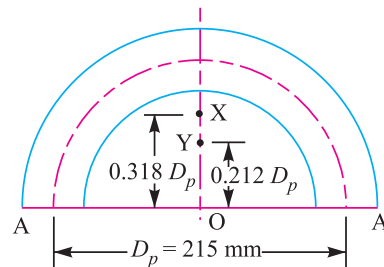
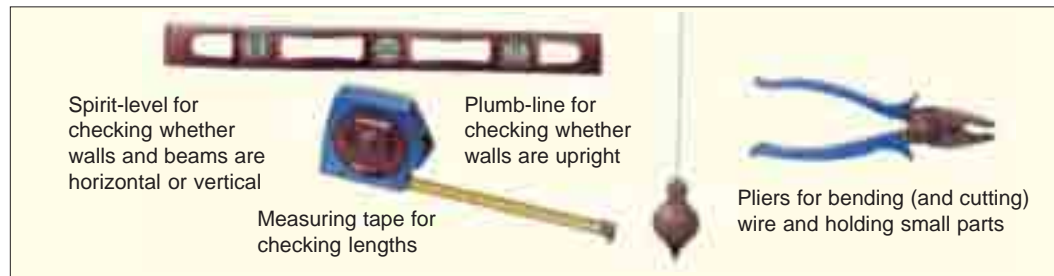


Fig. 11.27



Simple machine tools.

Note : This picture is given as additional information and is not a direct example of the current chapter.

**Example 11.8.** The cylinder head of a steam engine is subjected to a steam pressure of  $0.7 \text{ N/mm}^2$ . It is held in position by means of 12 bolts. A soft copper gasket is used to make the joint leak-proof. The effective diameter of cylinder is 300 mm. Find the size of the bolts so that the stress in the bolts is not to exceed 100 MPa.

**Solution.** Given:  $p = 0.7 \text{ N/mm}^2$ ;  $n = 12$ ;  $D = 300 \text{ mm}$ ;  $\sigma_t = 100 \text{ MPa} = 100 \text{ N/mm}^2$

We know that the total force (or the external load) acting on the cylinder head *i.e.* on 12 bolts,

$$= \frac{\pi}{4} (D)^2 p = \frac{\pi}{4} (300)^2 0.7 = 49\,490 \text{ N}$$

∴ External load on the cylinder head per bolt,

$$P_2 = 49\,490 / 12 = 4124 \text{ N}$$

Let  $d$  = Nominal diameter of the bolt, and

$d_c$  = Core diameter of the bolt.

We know that initial tension due to tightening of bolt,

$$P_1 = 2840 d \text{ N} \quad \dots \text{ (where } d \text{ is in mm)}$$

From Table 11.2, we find that for soft copper gasket with long through bolts, the minimum value of  $K = 0.5$ .

∴ Resultant axial load on the bolt,

$$P = P_1 + K \cdot P_2 = 2840 d + 0.5 \times 4124 = (2840 d + 2062) \text{ N}$$

We know that load on the bolt ( $P$ ),

$$2840 d + 2062 = \frac{\pi}{4} (d_c)^2 \sigma_t = \frac{\pi}{4} (0.84d)^2 100 = 55.4 d^2 \quad \dots \text{ (Taking } d_c = 0.84 d)$$

$$\therefore 55.4 d^2 - 2840d - 2062 = 0$$

$$\text{or} \quad d^2 - 51.3d - 37.2 = 0$$

$$\therefore d = \frac{51.3 \pm \sqrt{(51.3)^2 + 4 \times 37.2}}{2} = \frac{51.3 \pm 52.7}{2} = 52 \text{ mm}$$

∴ (Taking + ve sign)

Thus, we shall use a bolt of size M 52. **Ans.**

**Example 11.9.** A steam engine of effective diameter 300 mm is subjected to a steam pressure of  $1.5 \text{ N/mm}^2$ . The cylinder head is connected by 8 bolts having yield point 330 MPa and endurance limit at 240 MPa. The bolts are tightened with an initial preload of 1.5 times the steam load. A soft copper gasket is used to make the joint leak-proof. Assuming a factor of safety 2, find the size of bolt required. The stiffness factor for copper gasket may be taken as 0.5.

**Solution.** Given :  $D = 300 \text{ mm}$ ;  $p = 1.5 \text{ N/mm}^2$ ;  $n = 8$ ;  $\sigma_y = 330 \text{ MPa} = 330 \text{ N/mm}^2$ ;  $\sigma_e = 240 \text{ MPa} = 240 \text{ N/mm}^2$ ;  $P_1 = 1.5 P_2$ ;  $F.S. = 2$ ;  $K = 0.5$

We know that steam load acting on the cylinder head,

$$P_2 = \frac{\pi}{4} (D)^2 p = \frac{\pi}{4} (300)^2 1.5 = 106\,040 \text{ N}$$

∴ Initial pre-load,

$$P_1 = 1.5 P_2 = 1.5 \times 106\,040 = 159\,060 \text{ N}$$

We know that the resultant load (or the maximum load) on the cylinder head,

$$P_{max} = P_1 + K \cdot P_2 = 159\,060 + 0.5 \times 106\,040 = 212\,080 \text{ N}$$

This load is shared by 8 bolts, therefore maximum load on each bolt,

$$P_{max} = 212\,080 / 8 = 26\,510 \text{ N}$$

and minimum load on each bolt,

$$P_{min} = P_1 / n = 159\,060 / 8 = 19\,882 \text{ N}$$

## 402 ■ A Textbook of Machine Design

We know that mean or average load on the bolt,

$$P_m = \frac{P_{max} + P_{min}}{2} = \frac{26\,510 + 19\,882}{2} = 23\,196 \text{ N}$$

and the variable load on the bolt,

$$P_v = \frac{P_{max} - P_{min}}{2} = \frac{26\,510 - 19\,882}{2} = 3\,314 \text{ N}$$

Let  $d_c$  = Core diameter of the bolt in mm.

∴ Stress area of the bolt,

$$A_s = \frac{\pi}{4} (d_c)^2 = 0.7854 (d_c)^2 \text{ mm}^2$$

We know that mean or average stress on the bolt,

$$\sigma_m = \frac{P_m}{A_s} = \frac{23\,196}{0.7854 (d_c)^2} = \frac{29\,534}{(d_c)^2} \text{ N/mm}^2$$

and variable stress on the bolt,

$$\sigma_v = \frac{P_v}{A_s} = \frac{3\,314}{0.7854 (d_c)^2} = \frac{4\,220}{(d_c)^2} \text{ N/mm}^2$$

According to \*Soderberg's formula, the variable stress,

$$\sigma_v = \sigma_e \left( \frac{1}{F.S} - \frac{\sigma_m}{\sigma_y} \right)$$

$$\frac{4\,220}{(d_c)^2} = 240 \left( \frac{1}{2} - \frac{29\,534}{(d_c)^2 \cdot 330} \right) = 120 - \frac{21\,480}{(d_c)^2}$$

or  $\frac{4\,220}{(d_c)^2} + \frac{21\,480}{(d_c)^2} = 120$  or  $\frac{25\,700}{(d_c)^2} = 120$

$$\therefore (d_c)^2 = 25\,700 / 120 = 214 \quad \text{or} \quad d_c = 14.6 \text{ mm}$$

From Table 11.1 (coarse series), the standard core diameter is  $d_c = 14.933$  mm and the corresponding size of the bolt is M18. **Ans.**

### 11.15 Boiler Stays

In steam boilers, flat or slightly curved plates are supported by stays. The stays are used in order to increase strength and stiffness of the plate and to reduce distortion. The principal types of stays are:



Simple machine tools.

Note : This picture is given as additional information and is not a direct example of the current chapter.

\* See Chapter 6, Art. 6.20.



1. **Direct stays.** These stays are usually screwed round bars placed at right angles to the plates supported by them.
2. **Diagonal and gusset stays.** These stays are used for supporting one plate by trying it to another at right angles to it.
3. **Girder stays.** These stays are placed edgewise on the plate to be supported and bolted to it at intervals.

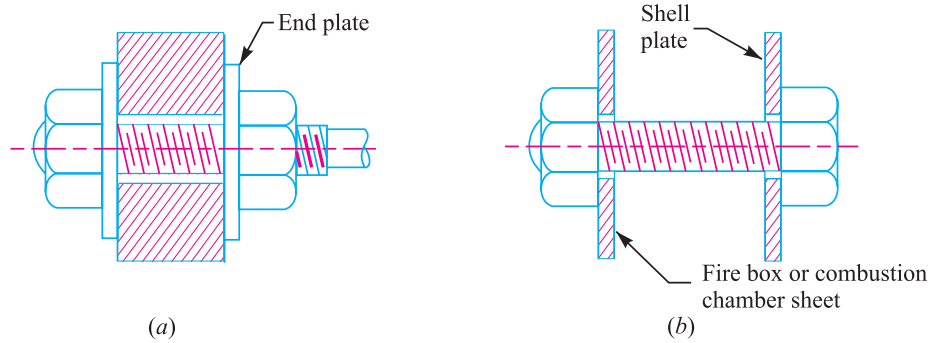


Fig. 11.28. Boiler stays.

Here we are mainly concerned with the direct stays. The direct stays may be *bar stays* or *screwed stays*. A bar stay for supporting one end plate of a boiler shell from the other end plate is shown in Fig. 11.28 (a). The ends of the bar are screwed to receive two nuts between which the end plate is locked. The bar stays are not screwed into the plates.

The fire boxes or combustion chambers of locomotive and marine boilers are supported by screwed stays as shown in Fig. 11.28 (b). These stays are called screwed stays, because they are screwed into the plates which they support. The size of the bar or screwed stays may be obtained as discussed below :

Consider a short boiler having longitudinal bar stays as shown in Fig. 11.29.

- Let
- $p$  = Pressure of steam in a boiler,
  - $x$  = Pitch of the stays,
  - $A$  = Area of the plate supported by each stay  $= x \times x = x^2$
  - $d_c$  = Core diameter of the stays, and
  - $\sigma_t$  = Permissible tensile stress for the material of the stays.

We know that force acting on the stay,

$$P = \text{Pressure} \times \text{Area} = p.A = p.x^2$$

Knowing the force  $P$ , we may determine the core diameter of the stays by using the following relation,

$$P = \frac{\pi}{4} (d_c)^2 \sigma_t$$

From the core diameter, the standard size of the stay may be fixed from Table 11.1.

**Example 11.10.** The longitudinal bar stays of a short boiler are pitched at 350 mm horizontally and vertically as shown in Fig. 11.29. The steam pressure is 0.84 N/mm<sup>2</sup>. Find the size of mild steel bolts having tensile stress as 56 MPa.

**Solution.** Given :  $p = 0.84 \text{ N/mm}^2$  ;  $\sigma_t = 56 \text{ MPa} = 56 \text{ N/mm}^2$

Since the pitch of the stays is 350 mm, therefore area of the plate supported by each stay,

$$A = 350 \times 350 = 122\,500 \text{ mm}^2$$

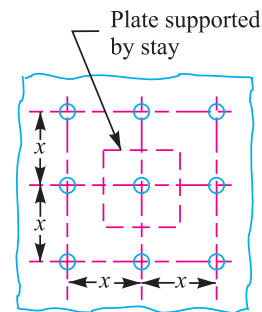


Fig. 11.29. Longitudinal bar stay.

We know that force acting on each stay,

$$P = A \times p = 122\,500 \times 0.84 = 102\,900 \text{ N}$$

Let  $d_c$  = Core diameter of the bolts.

We know that the resisting force on the bolts ( $P$ ),

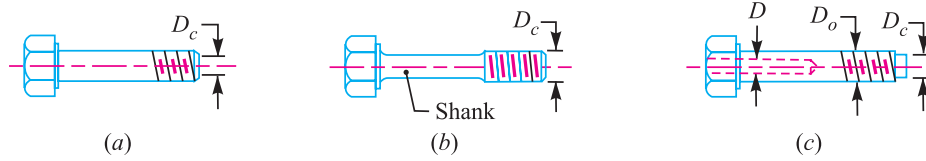
$$102\,900 = \frac{\pi}{4} (d_c)^2 \sigma_t = \frac{\pi}{4} (d_c)^2 56 = 44 (d_c)^2$$

$$\therefore (d_c)^2 = 102\,900 / 44 = 2340 \quad \text{or} \quad d_c = 48.36 \text{ mm}$$

From Table 11.1 (coarse series), the standard core diameter is 49.177 mm. Therefore size of the bolt corresponding to 49.177 mm is M 56. **Ans.**

### 11.16 Bolts of Uniform Strength

When a bolt is subjected to shock loading, as in case of a cylinder head bolt of an internal combustion engine, the resilience of the bolt should be considered in order to prevent breakage at the thread. In an ordinary bolt shown in Fig. 11.30 (a), the effect of the impulsive loads applied axially is concentrated on the weakest part of the bolt *i.e.* the cross-sectional area at the root of the threads. In other words, the stress in the threaded part of the bolt will be higher than that in the shank. Hence a great portion of the energy will be absorbed at the region of the threaded part which may fracture the threaded portion because of its small length.



**Fig. 11.30.** Bolts of uniform strength.

If the shank of the bolt is turned down to a diameter equal or even slightly less than the core diameter of the thread ( $D_c$ ) as shown in Fig. 11.30 (b), then shank of the bolt will undergo a higher stress. This means that a shank will absorb a large portion of the energy, thus relieving the material at the sections near the thread. The bolt, in this way, becomes stronger and lighter and it increases the shock absorbing capacity of the bolt because of an increased modulus of resilience. This gives us **bolts of uniform strength**. The resilience of a bolt may also be increased by increasing its length.

A second alternative method of obtaining the bolts of uniform strength is shown in Fig. 11.30 (c). In this method, an axial hole is drilled through the head as far as the thread portion such that the area of the shank becomes equal to the root area of the thread.

Let  $D$  = Diameter of the hole.

$D_o$  = Outer diameter of the thread, and

$D_c$  = Root or core diameter of the thread.

$$\therefore \frac{\pi}{4} D^2 = \frac{\pi}{4} [(D_o)^2 - (D_c)^2]$$

or 
$$D^2 = (D_o)^2 - (D_c)^2$$

$$\therefore D = \sqrt{(D_o)^2 - (D_c)^2}$$

**Example 11.11.** Determine the diameter of the hole that must be drilled in a M 48 bolt such that the bolt becomes of uniform strength.

**Solution.** Given :  $D_o = 48 \text{ mm}$

From Table 11.1 (coarse series), we find that the core diameter of the thread (corresponding to  $D_o = 48 \text{ mm}$ ) is  $D_c = 41.795 \text{ mm}$ .

We know that for bolts of uniform strength, the diameter of the hole,

$$D = \sqrt{(D_o)^2 - (D_c)^2} = \sqrt{(48)^2 - (41.795)^2} = 23.64 \text{ mm Ans.}$$

### 11.17 Design of a Nut

When a bolt and nut is made of mild steel, then the effective height of nut is made equal to the nominal diameter of the bolt. If the nut is made of weaker material than the bolt, then the height of nut should be larger, such as  $1.5 d$  for gun metal,  $2 d$  for cast iron and  $2.5 d$  for aluminium alloys (where  $d$  is the nominal diameter of the bolt). In case cast iron or aluminium nut is used, then V-threads are permissible only for permanent fastenings, because threads in these materials are damaged due to repeated screwing and unscrewing. When these materials are to be used for parts frequently removed and fastened, a screw in steel bushing for cast iron and cast-in-bronze or monel metal insert should be used for aluminium and should be drilled and tapped in place.

### 11.18 Bolted Joints under Eccentric Loading

There are many applications of the bolted joints which are subjected to eccentric loading such as a wall bracket, pillar crane, etc. The eccentric load may be

1. Parallel to the axis of the bolts,
2. Perpendicular to the axis of the bolts, and
3. In the plane containing the bolts.

We shall now discuss the above cases, in detail, in the following articles.

### 11.19 Eccentric Load Acting Parallel to the Axis of Bolts

Consider a bracket having a rectangular base bolted to a wall by means of four bolts as shown in Fig. 11.31. A little consideration will show that each bolt is subjected to a direct tensile load of

$$W_{t1} = \frac{W}{n}, \text{ where } n \text{ is the number of bolts.}$$

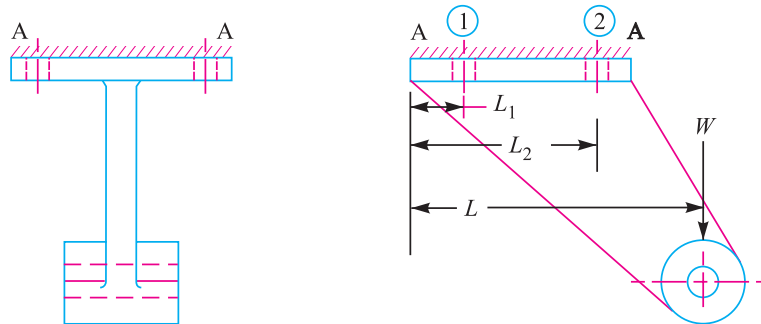


Fig. 11.31. Eccentric load acting parallel to the axis of bolts.

Further the load  $W$  tends to rotate the bracket about the edge A-A. Due to this, each bolt is stretched by an amount that depends upon its distance from the tilting edge. Since the stress is a function of \*elongation, therefore each bolt will experience a different load which also depends upon the distance from the tilting edge. For convenience, all the bolts are made of same size. In case the flange is heavy, it may be considered as a rigid body.

Let  $w$  be the load in a bolt per unit distance due to the turning effect of the bracket and let  $W_1$  and  $W_2$  be the loads on each of the bolts at distances  $L_1$  and  $L_2$  from the tilting edge.

\* We know that elongation is proportional to strain which in turn is proportional to stress within elastic limits.

## 406 ■ A Textbook of Machine Design

∴ Load on each bolt at distance  $L_1$ ,

$$W_1 = w.L_1$$

and moment of this load about the tilting edge

$$= w_1.L_1 \times L_1 = w (L_1)^2$$

Similarly, load on each bolt at distance  $L_2$ ,

$$W_2 = w.L_2$$

and moment of this load about the tilting edge

$$= w.L_2 \times L_2 = w (L_2)^2$$

∴ Total moment of the load on the bolts about the tilting edge

$$= 2w (L_1)^2 + 2w (L_2)^2 \quad \dots(i)$$

... (∵ There are two bolts each at distance of  $L_1$  and  $L_2$ )

Also the moment due to load  $W$  about the tilting edge

$$= W.L \quad \dots(ii)$$

From equations (i) and (ii), we have

$$W.L = 2w (L_1)^2 + 2w(L_2)^2 \quad \text{or} \quad w = \frac{W.L}{2 [(L_1)^2 + (L_2)^2]} \quad \dots(iii)$$

It may be noted that the most heavily loaded bolts are those which are situated at the greatest distance from the tilting edge. In the case discussed above, the bolts at distance  $L_2$  are heavily loaded.

∴ Tensile load on each bolt at distance  $L_2$ ,

$$W_{t2} = W_2 = w.L_2 = \frac{W.L.L_2}{2[(L_1)^2 + (L_2)^2]} \quad \dots \text{ [From equation (iii)]}$$

and the total tensile load on the most heavily loaded bolt,

$$W_t = W_{t1} + W_{t2} \quad \dots(iv)$$

If  $d_c$  is the core diameter of the bolt and  $\sigma_t$  is the tensile stress for the bolt material, then total tensile load,

$$W_t = \frac{\pi}{4} (d_c)^2 \sigma_t \quad \dots(v)$$

From equations (iv) and (v), the value of  $d_c$  may be obtained.

**Example 11.12.** A bracket, as shown in Fig. 11.31, supports a load of 30 kN. Determine the size of bolts, if the maximum allowable tensile stress in the bolt material is 60 MPa. The distances are :

$$L_1 = 80 \text{ mm}, L_2 = 250 \text{ mm}, \text{ and } L = 500 \text{ mm}.$$

**Solution.** Given :  $W = 30 \text{ kN}$  ;  $\sigma_t = 60 \text{ MPa} = 60 \text{ N/mm}^2$  ;  $L_1 = 80 \text{ mm}$  ;  $L_2 = 250 \text{ mm}$  ;  $L = 500 \text{ mm}$

We know that the direct tensile load carried by each bolt,

$$W_{t1} = \frac{W}{n} = \frac{30}{4} = 7.5 \text{ kN}$$

and load in a bolt per unit distance,

$$w = \frac{W.L}{2 [(L_1)^2 + (L_2)^2]} = \frac{30 \times 500}{2 [(80)^2 + (250)^2]} = 0.109 \text{ kN/mm}$$

Since the heavily loaded bolt is at a distance of  $L_2$  mm from the tilting edge, therefore load on the heavily loaded bolt,

$$W_{t2} = w.L_2 = 0.109 \times 250 = 27.25 \text{ kN}$$

∴ Maximum tensile load on the heavily loaded bolt,

$$W_t = W_{t1} + W_{t2} = 7.5 + 27.25 = 34.75 \text{ kN} = 34\,750 \text{ N}$$

Let  $d_c$  = Core diameter of the bolts.

We know that the maximum tensile load on the bolt ( $W_b$ ),

$$34\,750 = \frac{\pi}{4} (d_c)^2 \sigma_t = \frac{\pi}{4} (d_c)^2 60 = 47 (d_c)^2$$

$$\therefore (d_c)^2 = 34\,750 / 47 = 740$$

or  $d_c = 27.2$  mm

From Table 11.1 (coarse series), we find that the standard core diameter of the bolt is 28.706 mm and the corresponding size of the bolt is M 33. **Ans.**

**Example 11.13.** A crane runway bracket is shown in Fig. 11.32. Determine the tensile and compressive stresses produced in the section X-X when the magnitude of the wheel load is 15 kN.

Also find the maximum stress produced in the bolts used for fastening the bracket to the roof truss.

**Solution.** Given :  $W = 15$  kN =  $15 \times 10^3$  N

First of all, let us find the distance of centre of gravity of the section at X-X.

Let  $\bar{y}$  = Distance of centre of gravity (G) from the top of the flange.

$$\therefore \bar{y} = \frac{135 \times 25 \times \frac{25}{2} + 175 \times 25 \left( 25 + \frac{175}{2} \right)}{135 \times 25 + 175 \times 25} = 69 \text{ mm}$$

Moment of inertia about an axis passing through the centre of gravity of the section,

$$I_{GG} = \left[ \frac{135(25)^3}{12} + 135 \times 25 \left( 69 - \frac{25}{2} \right)^2 \right] + \left[ \frac{25(175)^3}{12} + 175 \times 25 \left( 200 - 69 - \frac{175}{2} \right)^2 \right]$$

$$= 30.4 \times 10^6 \text{ mm}^4$$

Distance of C.G. from the top of the flange,

$$y_1 = \bar{y} = 69 \text{ mm}$$

and distance of C.G. from the bottom of the web,

$$y_2 = 175 + 25 - 69 = 131 \text{ mm}$$

Due to the tilting action of the load  $W$ , the cross-section of the bracket X-X will be under bending stress. The upper fibres of the top flange will be under maximum tension and the lower fibres of the web will be under maximum compression.

$\therefore$  Section modulus for the maximum tensile stress,

$$Z_1 = \frac{I_{GG}}{y_1} = \frac{30.4 \times 10^6}{69} = 440.6 \times 10^3 \text{ mm}^3$$

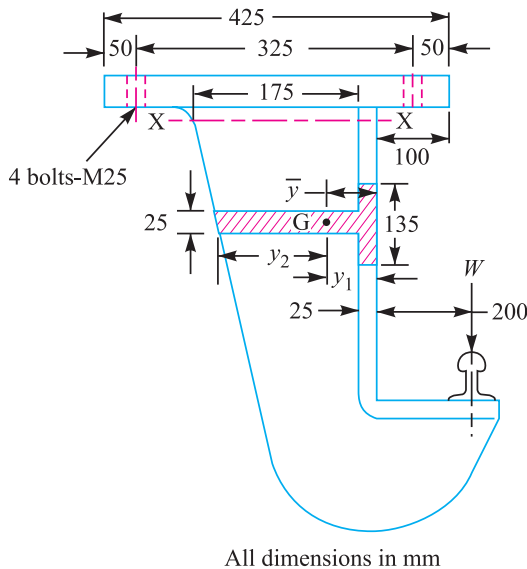


Fig. 11.32

## 408 ■ A Textbook of Machine Design

and section modulus for the maximum compressive stress,

$$Z_2 = \frac{I_{GG}}{y_2} = \frac{30.4 \times 10^6}{131} = 232 \times 10^3 \text{ mm}^3$$

We know that bending moment exerted on the section,

$$M = 15 \times 10^3 (200 + 69) = 4035 \times 10^3 \text{ N-mm}$$

∴ Maximum bending stress (tensile) in the flange,

$$\sigma_{b1} = \frac{M}{Z_1} = \frac{4035 \times 10^3}{440.6 \times 10^3} = 9.16 \text{ N/mm}^2$$

and maximum bending stress (compressive) in the web,

$$\sigma_{b2} = \frac{M}{Z_2} = \frac{4035 \times 10^3}{232 \times 10^3} = 17.4 \text{ N/mm}^2$$

The eccentric load also induces direct tensile stress in the bracket. We know that direct tensile stress,

$$\begin{aligned} \sigma_{t1} &= \frac{\text{Load}}{\text{Cross-sectional area of the bracket at } X-X} \\ &= \frac{15 \times 10^3}{135 \times 25 + 175 \times 25} = 1.94 \text{ N/mm}^2 \end{aligned}$$

∴ Maximum tensile stress produced in the section at  $X-X$  (*i.e.* in the flange),

$$\sigma_t = \sigma_{b1} + \sigma_{t1} = 9.16 + 1.94 = 11.1 \text{ N/mm}^2 = 11.1 \text{ MPa Ans.}$$

and maximum compressive stress produced in the section at  $X-X$  (*i.e.* in the web),

$$\sigma_c = \sigma_{b2} - \sigma_{t1} = 17.4 - 1.94 = 15.46 \text{ N/mm}^2 = 15.46 \text{ MPa Ans.}$$

Let

$\sigma_{tb}$  = Maximum stress produced in bolts,

$n$  = Number of bolts  
= 4, and ... (Given)

$d$  = Major diameter of the bolts  
= 25 mm ... (Given)

The plan of the bracket is shown in Fig. 11.33. Due to the eccentric load  $W$ , the bracket has a tendency to tilt about the edge  $EE$ . Since the load is acting parallel to the axis of bolts, therefore direct tensile load on each bolt,

$$W_{t1} = \frac{W}{n} = \frac{15 \times 10^3}{4} = 3750 \text{ N}$$

Let

$w$  = Load in each bolt per mm distance from the edge  $EE$  due to the turning effect of the bracket,

$L_1$  = Distance of bolts 1 and 4 from the tilting edge  $EE$  = 50 mm, and

$L_2$  = Distance of bolts 2 and 3 from the tilting edge  $EE$   
= 50 + 325 = 375 mm

$$\text{We know that } w = \frac{W.L}{2[(L_1)^2 + (L_2)^2]} = \frac{15 \times 10^3 (100 + 50 + 325 + 50)}{2[(50)^2 + (375)^2]} = 27.5 \text{ N/mm}$$

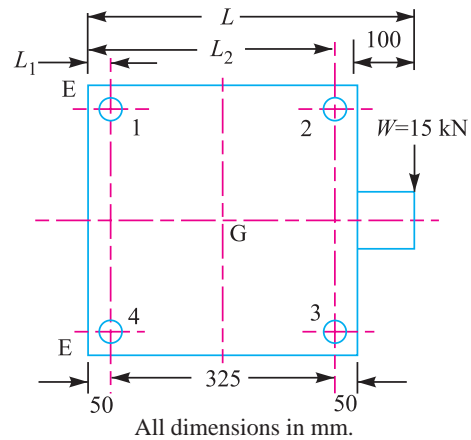


Fig. 11.33



Since the heavily loaded bolts are those which lie at greater distance from the tilting edge, therefore the bolts 2 and 3 will be heavily loaded.

∴ Maximum tensile load on each of bolts 2 and 3,

$$W_{t2} = w \times L_2 = 27.5 \times 375 = 10\,312 \text{ N}$$

and the total tensile load on each of the bolts 2 and 3,

$$W_t = W_{t1} + W_{t2} = 3750 + 10\,312 = 14\,062 \text{ N}$$

We know that tensile load on the bolt ( $W_t$ ),

$$14\,062 = \frac{\pi}{4} (d_c)^2 \sigma_{tb} = \frac{\pi}{4} (0.84 \times 25)^2 \sigma_{tb} = 346.4 \sigma_{tb}$$

... (Taking,  $d_c = 0.84 d$ )

$$\therefore \sigma_{tb} = 14\,062/346.4 = 40.6 \text{ N/mm}^2 = 40.6 \text{ MPa} \text{ Ans.}$$

### 11.20 Eccentric Load Acting Perpendicular to the Axis of Bolts

A wall bracket carrying an eccentric load perpendicular to the axis of the bolts is shown in Fig. 11.34.

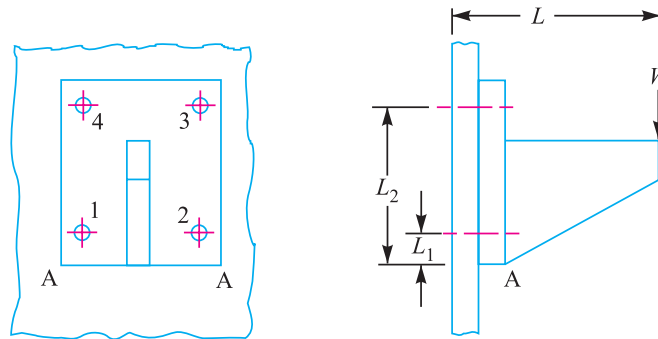


Fig. 11.34. Eccentric load perpendicular to the axis of bolts.

In this case, the bolts are subjected to direct shearing load which is equally shared by all the bolts. Therefore direct shear load on each bolts,

$$W_s = W/n, \text{ where } n \text{ is number of bolts.}$$

A little consideration will show that the eccentric load  $W$  will try to tilt the bracket in the clockwise direction about the edge  $A-A$ . As discussed earlier, the bolts will be subjected to tensile stress due to the turning moment. The maximum tensile load on a heavily loaded bolt ( $W_t$ ) may be obtained in the similar manner as discussed in the previous article. In this case, bolts 3 and 4 are heavily loaded.

∴ Maximum tensile load on bolt 3 or 4,

$$W_{t2} = W_t = \frac{W.L.L_2}{2 [(L_1)^2 + (L_2)^2]}$$

When the bolts are subjected to shear as well as tensile loads, then the equivalent loads may be determined by the following relations :

Equivalent tensile load,

$$W_{te} = \frac{1}{2} \left[ W_t + \sqrt{(W_t)^2 + 4(W_s)^2} \right]$$

and equivalent shear load,

$$W_{se} = \frac{1}{2} \left[ \sqrt{(W_t)^2 + 4(W_s)^2} \right]$$

Knowing the value of equivalent loads, the size of the bolt may be determined for the given allowable stresses.

**Example 11.14.** For supporting the travelling crane in a workshop, the brackets are fixed on steel columns as shown in Fig. 11.35. The maximum load that comes on the bracket is 12 kN acting vertically at a distance of 400 mm from the face of the column. The vertical face of the bracket is secured to a column by four bolts, in two rows (two in each row) at a distance of 50 mm from the lower edge of the bracket. Determine the size of the bolts if the permissible value of the tensile stress for the bolt material is 84 MPa. Also find the cross-section of the arm of the bracket which is rectangular.

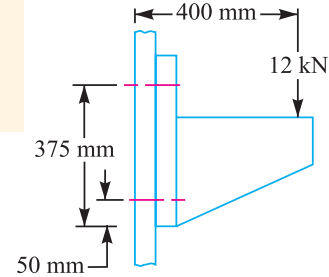


Fig. 11.35

**Solution.** Given :  $W = 12 \text{ kN} = 12 \times 10^3 \text{ N}$  ;  $L = 400 \text{ mm}$  ;  
 $L_1 = 50 \text{ mm}$  ;  $L_2 = 375 \text{ mm}$  ;  $\sigma_t = 84 \text{ MPa} = 84 \text{ N/mm}^2$  ;  $n = 4$

We know that direct shear load on each bolt,

$$W_s = \frac{W}{n} = \frac{12}{4} = 3 \text{ kN}$$

Since the load  $W$  will try to tilt the bracket in the clockwise direction about the lower edge, therefore the bolts will be subjected to tensile load due to turning moment. The maximum loaded bolts are 3 and 4 (See Fig. 11.34), because they lie at the greatest distance from the tilting edge A–A (i.e. lower edge).

We know that maximum tensile load carried by bolts 3 and 4,

$$W_t = \frac{W.L.L_2}{2 [(L_1)^2 + (L_2)^2]} = \frac{12 \times 400 \times 375}{2 [(50)^2 + (375)^2]} = 6.29 \text{ kN}$$

Since the bolts are subjected to shear load as well as tensile load, therefore equivalent tensile load,

$$\begin{aligned} W_{te} &= \frac{1}{2} \left[ W_t + \sqrt{(W_t)^2 + 4(W_s)^2} \right] = \frac{1}{2} \left[ 6.29 + \sqrt{(6.29)^2 + 4 \times 3^2} \right] \text{ kN} \\ &= \frac{1}{2} (6.29 + 8.69) = 7.49 \text{ kN} = 7490 \text{ N} \end{aligned}$$



**Size of the bolt**

Let  $d_c$  = Core diameter of the bolt.

We know that the equivalent tensile load ( $W_{te}$ ),

$$7490 = \frac{\pi}{4} (d_c)^2 \sigma_t = \frac{\pi}{4} (d_c)^2 84 = 66 (d_c)^2$$

$$\therefore (d_c)^2 = 7490 / 66 = 113.5 \quad \text{or} \quad d_c = 10.65 \text{ mm}$$

From Table 11.1 (coarse series), the standard core diameter is 11.546 mm and the corresponding size of the bolt is M 14. **Ans.**

**Cross-section of the arm of the bracket**

Let  $t$  and  $b$  = Thickness and depth of arm of the bracket respectively.

$\therefore$  Section modulus,

$$Z = \frac{1}{6} t.b^2$$

Assume that the arm of the bracket extends upto the face of the steel column. This assumption gives stronger section for the arm of the bracket.

$\therefore$  Maximum bending moment on the bracket,

$$M = 12 \times 10^3 \times 400 = 4.8 \times 10^6 \text{ N-mm}$$

We know that the bending (tensile) stress ( $\sigma_t$ ),

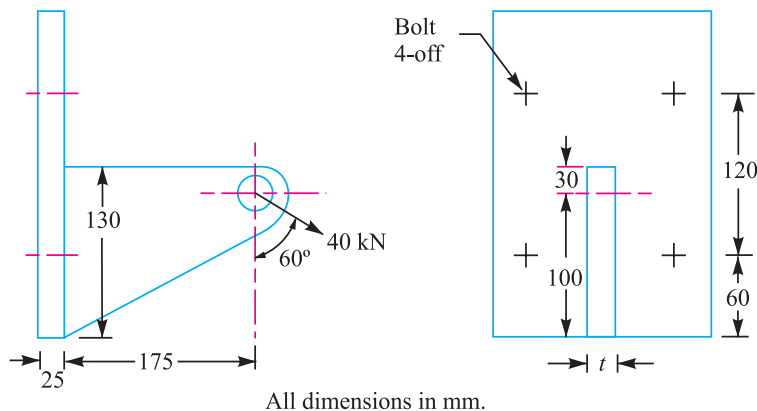
$$84 = \frac{M}{Z} = \frac{4.8 \times 10^6 \times 6}{t.b^2} = \frac{28.8 \times 10^6}{t.b^2}$$

$$\therefore t.b^2 = 28.8 \times 10^6 / 84 = 343 \times 10^3 \quad \text{or} \quad t = 343 \times 10^3 / b^2$$

Assuming depth of arm of the bracket,  $b = 250$  mm, we have

$$t = 343 \times 10^3 / (250)^2 = 5.5 \text{ mm} \quad \text{Ans.}$$

**Example 11.15.** Determine the size of the bolts and the thickness of the arm for the bracket as shown in Fig. 11.36, if it carries a load of 40 kN at an angle of 60° to the vertical.



**Fig 11.36**

The material of the bracket and the bolts is same for which the safe stresses can be assumed as 70, 50 and 105 MPa in tension, shear and compression respectively.

**Solution.** Given :  $W = 40 \text{ kN} = 40 \times 10^3 \text{ N}$  ;  $\sigma_t = 70 \text{ MPa} = 70 \text{ N/mm}^2$  ;  $\tau = 50 \text{ MPa} = 50 \text{ N/mm}^2$  ;  $\sigma_c = 105 \text{ MPa} = 105 \text{ N/mm}^2$

## 412 ■ A Textbook of Machine Design

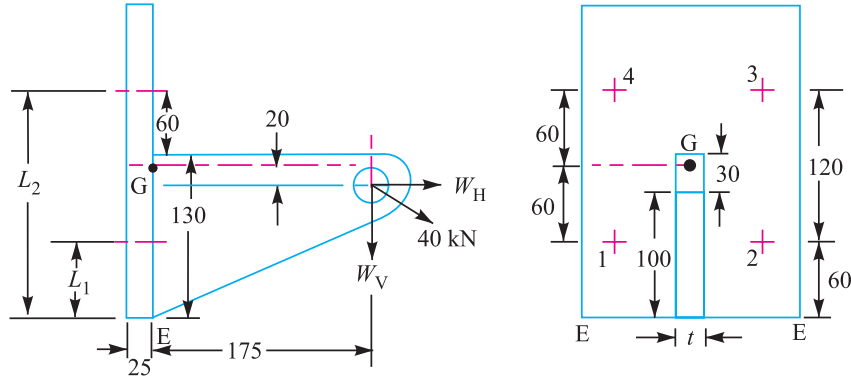
Since the load  $W = 40$  kN is inclined at an angle of  $60^\circ$  to the vertical, therefore resolving it into horizontal and vertical components. We know that horizontal component of 40 kN,

$$W_H = 40 \times \sin 60^\circ = 40 \times 0.866 = 34.64 \text{ kN} = 34\,640 \text{ N}$$

and vertical component of 40 kN,

$$W_V = 40 \times \cos 60^\circ = 40 \times 0.5 = 20 \text{ kN} = 20\,000 \text{ N}$$

Due to the horizontal component ( $W_H$ ), which acts parallel to the axis of the bolts as shown in Fig. 11.37, the following two effects are produced :



All dimensions in mm.

**Fig. 11.37**

1. A direct tensile load equally shared by all the four bolts, and
2. A turning moment about the centre of gravity of the bolts, in the anticlockwise direction.

∴ Direct tensile load on each bolt,

$$W_{t1} = \frac{W_H}{4} = \frac{34\,640}{4} = 8660 \text{ N}$$

Since the centre of gravity of all the four bolts lies in the centre at  $G$  (because of symmetrical bolts), therefore the turning moment is in the anticlockwise direction. From the geometry of the Fig. 11.37, we find that the distance of horizontal component from the centre of gravity ( $G$ ) of the bolts

$$= 60 + 60 - 100 = 20 \text{ mm}$$

∴ Turning moment due to  $W_H$  about  $G$ ,

$$T_H = W_H \times 20 = 34\,640 \times 20 = 692.8 \times 10^3 \text{ N-mm} \quad \dots(\text{Anticlockwise})$$

Due to the vertical component  $W_V$ , which acts perpendicular to the axis of the bolts as shown in Fig. 11.37, the following two effects are produced:

1. A direct shear load equally shared by all the four bolts, and
2. A turning moment about the edge of the bracket in the clockwise direction.

∴ Direct shear load on each bolt,

$$W_s = \frac{W_V}{4} = \frac{20\,000}{4} = 5000 \text{ N}$$

Distance of vertical component from the edge  $E$  of the bracket,

$$= 175 \text{ mm}$$

∴ Turning moment due to  $W_V$  about the edge of the bracket,

$$T_V = W_V \times 175 = 20\,000 \times 175 = 3500 \times 10^3 \text{ N-mm} \quad (\text{Clockwise})$$

From above, we see that the clockwise moment is greater than the anticlockwise moment, therefore,

$$\text{Net turning moment} = 3500 \times 10^3 - 692.8 \times 10^3 = 2807.2 \times 10^3 \text{ N-mm (Clockwise)} \quad \dots(i)$$

Due to this clockwise moment, the bracket tends to tilt about the lower edge  $E$ .

Let  $w$  = Load on each bolt per mm distance from the edge  $E$  due to the turning effect of the bracket,

$L_1$  = Distance of bolts 1 and 2 from the tilting edge  $E = 60$  mm, and

$L_2$  = Distance of bolts 3 and 4 from the tilting edge  $E$   
 $= 60 + 120 = 180$  mm

$$\begin{aligned} \therefore \text{Total moment of the load on the bolts about the tilting edge } E \\ &= 2(w.L_1)L_1 + 2(w.L_2)L_2 \\ &\quad \dots (\because \text{There are two bolts each at distance } L_1 \text{ and } L_2.) \\ &= 2w(L_1)^2 + 2w(L_2)^2 = 2w(60)^2 + 2w(180)^2 \\ &= 72\,000 w \text{ N-mm} \quad \dots(ii) \end{aligned}$$

From equations (i) and (ii),

$$w = 2807.2 \times 10^3 / 72\,000 = 39 \text{ N/mm}$$

Since the heavily loaded bolts are those which lie at a greater distance from the tilting edge, therefore the upper bolts 3 and 4 will be heavily loaded. Thus the diameter of the bolt should be based on the load on the upper bolts. We know that the maximum tensile load on each upper bolt,

$$W_{t2} = w.L_2 = 39 \times 180 = 7020 \text{ N}$$

$\therefore$  Total tensile load on each of the upper bolt,

$$W_t = W_{t1} + W_{t2} = 8660 + 7020 = 15\,680 \text{ N}$$

Since each upper bolt is subjected to a tensile load ( $W_t = 15\,680$  N) and a shear load ( $W_s = 5000$  N), therefore equivalent tensile load,

$$\begin{aligned} W_{te} &= \frac{1}{2} \left[ W_t + \sqrt{W_t^2 + 4(W_s)^2} \right] \\ &= \frac{1}{2} \left[ 15\,680 + \sqrt{(15\,680)^2 + 4(5000)^2} \right] \text{ N} \\ &= \frac{1}{2} [15\,680 + 18\,600] = 17\,140 \text{ N} \quad \dots(iii) \end{aligned}$$

**Size of the bolts**

Let  $d_c$  = Core diameter of the bolts.

We know that tensile load on each bolt

$$= \frac{\pi}{2} (d_c)^2 \sigma_t = \frac{\pi}{4} (d_c)^2 70 = 55 (d_c)^2 \text{ N} \quad \dots(iv)$$

From equations (iii) and (iv), we get

$$(d_c)^2 = 17\,140 / 55 = 311.64 \quad \text{or} \quad d_c = 17.65 \text{ mm}$$

From Table 11.1 (coarse series), we find that the standard core diameter is 18.933 mm and corresponding size of the bolt is M 22. **Ans.**

**Thickness of the arm of the bracket**

Let  $t$  = Thickness of the arm of the bracket in mm, and

$b$  = Depth of the arm of the bracket = 130 mm ...(Given)

## 414 ■ A Textbook of Machine Design

We know that cross-sectional area of the arm,

$$A = b \times t = 130 t \text{ mm}^2$$

and section modulus of the arm,

$$Z = \frac{1}{6} t (b)^2 = \frac{1}{6} \times t (130)^2 = 2817 t \text{ mm}^3$$

Due to the horizontal component  $W_H$ , the following two stresses are induced in the arm :

1. Direct tensile stress,

$$\sigma_{t1} = \frac{W_H}{A} = \frac{34\,640}{130 t} = \frac{266.5}{t} \text{ N/mm}^2$$

2. Bending stress causing tensile in the upper most fibres of the arm and compressive in the lower most fibres of the arm. We know that the bending moment of  $W_H$  about the centre of gravity of the arm,

$$M_H = W_H \left( 100 - \frac{130}{2} \right) = 34\,640 \times 35 = 1212.4 \times 10^3 \text{ N-mm}$$

$$\therefore \text{ Bending stress, } \sigma_{t2} = \frac{M_H}{Z} = \frac{1212.4 \times 10^3}{2817 t} = \frac{430.4}{t} \text{ N/mm}^2$$

Due to the vertical component  $W_V$ , the following two stresses are induced in the arm :

1. Direct shear stress,

$$\tau = \frac{W_V}{A} = \frac{20\,000}{130 t} = \frac{154}{t} \text{ N/mm}^2$$

2. Bending stress causing tensile stress in the upper most fibres of the arm and compressive in the lower most fibres of the arm.

Assuming that the arm extends upto the plate used for fixing the bracket to the structure. This assumption gives stronger section for the arm of the bracket.

$\therefore$  Bending moment due to  $W_V$ ,

$$M_V = W_V (175 + 25) = 20\,000 \times 200 = 4 \times 10^6 \text{ N-mm}$$

and bending stress, 
$$\sigma_{t3} = \frac{M_V}{Z} = \frac{4 \times 10^6}{2817 t} = \frac{1420}{t} \text{ N/mm}^2$$

Net tensile stress induced in the upper most fibres of the arm of the bracket,

$$\sigma_t = \sigma_{t1} + \sigma_{t2} + \sigma_{t3} = \frac{266.5}{t} + \frac{430.4}{t} + \frac{1420}{t} = \frac{2116.9}{t} \text{ N/mm}^2 \quad \dots(v)$$

We know that maximum tensile stress  $[\sigma_{t(max)}]$ ,

$$\begin{aligned} 70 &= \frac{1}{2} \sigma_t + \frac{1}{2} \sqrt{(\sigma_t)^2 + 4\tau^2} \\ &= \frac{1}{2} \times \frac{2116.9}{t} + \frac{1}{2} \sqrt{\left(\frac{2116.9}{t}\right)^2 + 4\left(\frac{154}{t}\right)^2} \\ &= \frac{1058.45}{t} + \frac{1069.6}{t} = \frac{2128.05}{t} \end{aligned}$$

$$\therefore t = 2128.05 / 70 = 30.4 \text{ say } 31 \text{ mm } \mathbf{Ans.}$$

Let us now check the shear stress induced in the arm. We know that maximum shear stress,

$$\begin{aligned} \tau_{max} &= \frac{1}{2} \sqrt{(\sigma_t)^2 + 4\tau^2} = \frac{1}{2} \sqrt{\left(\frac{2116.9}{t}\right)^2 + 4\left(\frac{154}{t}\right)^2} \\ &= \frac{1069.6}{t} = \frac{1069.6}{31} = 34.5 \text{ N/mm}^2 = 34.5 \text{ MPa} \end{aligned}$$

Since the induced shear stress is less than the permissible stress (50 MPa), therefore the design is safe.

**Notes : 1.** The value of 't' may be obtained as discussed below :

Since the shear stress at the upper most fibres of the arm of the bracket is zero, therefore equating equation (v) to the given safe tensile stress (*i.e.* 70 MPa), we have

$$\frac{2116.9}{t} = 70 \quad \text{or} \quad t = 2116.9 / 70 = 30.2 \text{ say } 31 \text{ mm Ans.}$$

**2.** If the compressive stress in the lower most fibres of the arm is taken into consideration, then the net compressive stress induced in the lower most fibres of the arm,

$$\begin{aligned} \sigma_c &= \sigma_{c1} + \sigma_{c2} + \sigma_{c3} \\ &= -\sigma_{t1} + \sigma_{t2} + \sigma_{t3} \\ &\quad \dots (\because \text{The magnitude of tensile and compressive stresses is same.}) \\ &= -\frac{266.5}{t} + \frac{430.4}{t} + \frac{1420}{t} = \frac{1583.9}{t} \text{ N/mm}^2 \end{aligned}$$

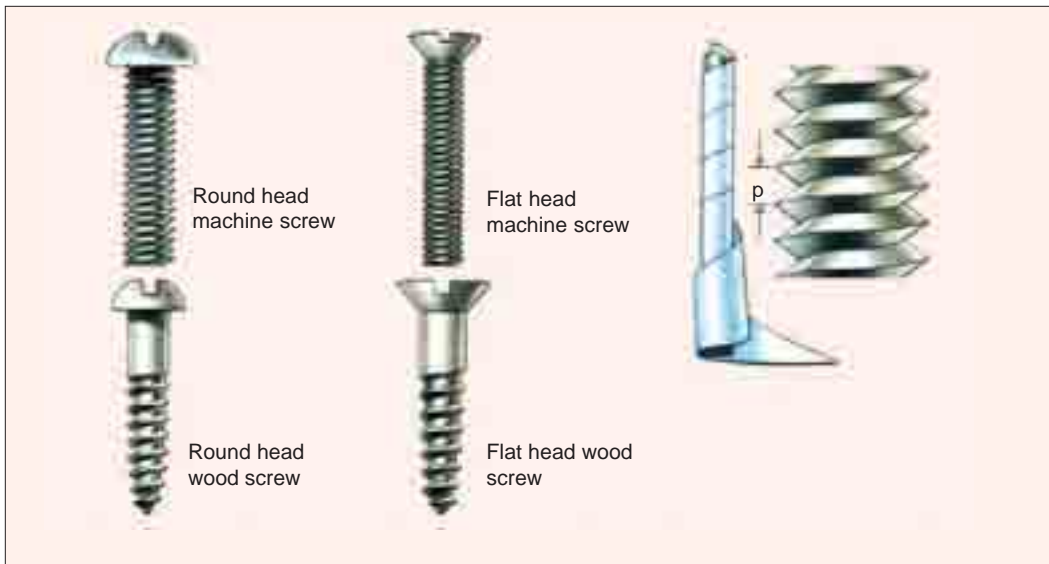
Since the safe compressive stress is 105 N/mm<sup>2</sup>, therefore

$$105 = \frac{1583.9}{t} \quad \text{or} \quad t = 1583.9 / 105 = 15.1 \text{ mm}$$

This value of thickness is low as compared to 31 mm as calculated above. Since the higher value is taken, therefore

$$t = 31 \text{ mm Ans.}$$

**Example 11.16.** An offset bracket, having arm of I-cross-section is fixed to a vertical steel column by means of four standard bolts as shown in Fig. 11.38. An inclined pull of 10 kN is acting on the bracket at an angle of 60° to the vertical.



Note : This picture is given as additional information and is not a direct example of the current chapter.



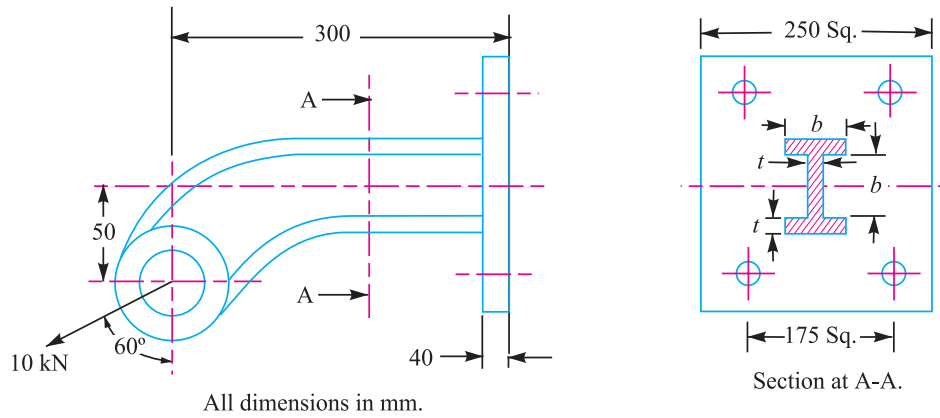


Fig. 11.38

Determine : (a) the diameter of the fixing bolts, and (b) the dimensions of the arm of the bracket if the ratio between  $b$  and  $t$  is 3 : 1.

For all parts, assume safe working stresses of 100 MPa in tension and 60 MPa in shear.

**Solution.** Given :  $W = 10 \text{ kN}$  ;  $\theta = 60^\circ$  ;  $\sigma_1 = 100 \text{ MPa} = 100 \text{ N/mm}^2$  ;  $\tau = 60 \text{ MPa} = 60 \text{ N/mm}^2$

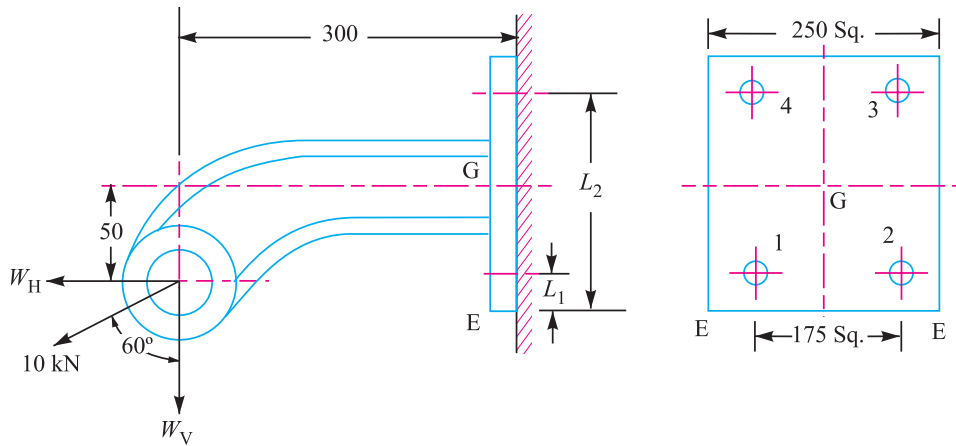


Fig. 11.39

Resolving the pull acting on the bracket (*i.e.* 10 kN) into horizontal and vertical components, we have

Horizontal component of 10 kN,

$$W_H = 10 \times \sin 60^\circ = 10 \times 0.866 = 8.66 \text{ kN} = 8660 \text{ N}$$

and vertical component of 10 kN,

$$W_V = 10 \cos 60^\circ = 10 \times 0.5 = 5 \text{ kN} = 5000 \text{ N}$$

Due to the horizontal component ( $W_H$ ), which acts parallel to the axis of the bolts, as shown in Fig. 11.39, the following two effects are produced :

1. A direct tensile load equally shared by all the four bolts, and
2. A turning moment about the centre of gravity of the bolts. Since the centre of gravity of all the four bolts lie in the centre at  $G$  (because of symmetrical bolts), therefore the turning moment is in the clockwise direction.

∴ Direct tensile load on each bolt,

$$W_{t1} = \frac{W_H}{4} = \frac{8660}{4} = 2165 \text{ N}$$

Distance of horizontal component from the centre of gravity ( $G$ ) of the bolts  
 $= 50 \text{ mm} = 0.05 \text{ m}$

∴ Turning moment due to  $W_H$  about  $G$ ,

$$T_H = W_H \times 0.05 = 8660 \times 0.05 = 433 \text{ N-m (Clockwise)}$$

Due to the vertical component ( $W_V$ ), which acts perpendicular to the axis of the bolts, as shown in Fig. 11.39, the following two effects are produced :

1. A direct shear load equally shared by all the four bolts, and
2. A turning moment about the edge of the bracket, in the anticlockwise direction.

∴ Direct shear load on each bolt,

$$W_s = \frac{W_V}{4} = \frac{5000}{4} = 1250 \text{ N}$$

Distance of vertical component from the edge of the bracket  
 $= 300 \text{ mm} = 0.3 \text{ m}$

∴ Turning moment about the edge of the bracket,

$$T_V = W_V \times 0.3 = 5000 \times 0.3 = 1500 \text{ N-m (Anticlockwise)}$$

From above, we see that the anticlockwise moment is greater than the clockwise moment, therefore

Net turning moment

$$= 1500 - 433 = 1067 \text{ N-m (Anticlockwise)} \quad \dots(i)$$

Due to this anticlockwise moment, the bracket tends to tilt about the edge  $E$ .

Let  $w$  = Load in each bolt per metre distance from the edge  $E$ , due to the turning effect of the bracket,

$L_1$  = Distance of bolts 1 and 2 from the tilting edge  $E$

$$= \frac{250 - 175}{2} = 37.5 \text{ mm} = 0.0375 \text{ m}$$

$L_3$  = Distance of bolts 3 and 4 from the tilting edge

$$= L_1 + 175 \text{ mm} = 37.5 + 175 = 212.5 \text{ mm} = 0.2125 \text{ m}$$

∴ Total moment of the load on the bolts about the tilting edge  $E$

$$= 2 (w.L_1) L_1 + 2 (w.L_2) L_2 = 2w (L_1)^2 + 2w (L_2)^2$$

∴ (∵ There are two bolts each at distance  $L_1$  and  $L_2$ .)

$$= 2w (0.0375)^2 + 2w (0.2125)^2 = 0.093 w \text{ N-m} \quad \dots(ii)$$

From equations (i) and (ii), we have

$$w = 1067 / 0.093 = 11\,470 \text{ N/m}$$

Since the heavily loaded bolts are those which lie at a greater distance from the tilting edge, therefore the upper bolts 3 and 4 will be heavily loaded.

∴ Maximum tensile load on each upper bolt,

$$W_{t2} = w.L_2 = 11\,470 \times 0.2125 = 2435 \text{ N}$$

and total tensile load on each of the upper bolt,

$$W_t = W_{t1} + W_{t2} = 2165 + 2435 = 4600 \text{ N}$$

## 418 ■ A Textbook of Machine Design

Since each upper bolt is subjected to a total tensile load ( $W_t = 4600$  N) and a shear load ( $W_s = 1250$  N), therefore equivalent tensile load,

$$\begin{aligned} W_{te} &= \frac{1}{2} \left[ W_t + \sqrt{(W_t)^2 + 4(W_s)^2} \right] = \frac{1}{2} \left[ 4600 + \sqrt{(4600)^2 + 4(1250)^2} \right] \\ &= \frac{1}{2} (4600 + 5240) = 4920 \text{ N} \end{aligned}$$

### (a) Diameter of the fixing bolts

Let  $d_c$  = Core diameter of the fixing bolts.

We know that the equivalent tensile load ( $W_{te}$ ),

$$4920 = \frac{\pi}{4} (d_c)^2 \sigma_t = \frac{\pi}{4} (d_c)^2 100 = 78.55 (d_c)^2$$

$$\therefore (d_c)^2 = 4920 / 78.55 = 62.6 \quad \text{or} \quad d_c = 7.9 \text{ mm}$$

From Table 11.1 (coarse series), we find that standard core diameter is 8.18 mm and the corresponding size of the bolt is M 10. **Ans.**

### Dimensions of the arm of the bracket

Let  $t$  = Thickness of the flanges and web in mm, and

$b$  = Width of the flanges in mm =  $3t$  ... (Given)

$\therefore$  Cross-sectional area of the  $I$ -section of the arms,

$$A = 3 b.t = 3 \times 3 t \times t = 9 t^2 \text{ mm}^2$$

and moment of inertia of the  $I$ -section of the arm about an axis passing through the centre of gravity of the arm,

$$\begin{aligned} I &= \frac{b (2t + b)^3}{12} - \frac{(b - t) b^3}{12} \\ &= \frac{3t (2t + 3t)^3}{12} - \frac{(3t - t) (3t)^3}{12} = \frac{375 t^4}{12} - \frac{54 t^4}{12} = \frac{321 t^4}{12} \end{aligned}$$

$\therefore$  Section modulus of  $I$ -section of the arm,

$$Z = \frac{I}{t + b/2} = \frac{321 t^4}{12 (t + 3t/2)} = 10.7 t^3 \text{ mm}^3$$

Due to the horizontal component  $W_H$ , the following two stresses are induced in the arm:

1. Direct tensile stress,

$$\sigma_{H1} = \frac{W_H}{A} = \frac{8660}{9t^2} = \frac{962}{t^2} \text{ N/mm}^2$$

2. Bending stress causing tensile in the lower most fibres of the bottom flange and compressive in the upper most fibres of the top flange.

We know that bending moment of  $W_H$  about the centre of gravity of the arm,

$$M_H = W_H \times 0.05 = 8660 \times 0.05 = 433 \text{ N-m} = 433 \times 10^3 \text{ N-mm}$$

$\therefore$  Bending stress,

$$\sigma_{H2} = \frac{M_H}{Z} = \frac{433 \times 10^3}{10.7 t^3} = \frac{40.5 \times 10^3}{t^3} \text{ N/mm}^2$$

Due to the vertical component  $W_V$ , the following two stresses are induced the arm:

1. Direct shear stress,

$$\tau = \frac{W_V}{A} = \frac{5000}{9t^2} = 556 \text{ N/mm}^2$$

- 2. Bending stress causing tensile in the upper most fibres of the top flange and compressive in lower most fibres of the bottom flange.

Assuming that the arm extends upto the plate used for fixing the bracket to the structure.

We know that bending moment due to  $W_V$ ,

$$M_V = W_V \times 0.3 = 5000 \times 0.3 = 1500 \text{ N-m} = 1500 \times 10^3 \text{ N-mm}$$

∴ Bending stress,

$$\sigma_{t3} = \frac{M_V}{Z} = \frac{1500 \times 10^3}{10.7 t^3} = \frac{140.2 \times 10^3}{t^3} \text{ N/mm}^2$$

Considering the upper most fibres of the top flange.

Net tensile stress induced in the arm of the bracket

$$\begin{aligned} &= \sigma_{t1} - \sigma_{t2} + \sigma_{t3} \\ &= \frac{962}{t^2} - \frac{40.5 \times 10^3}{t^3} + \frac{140.2 \times 10^3}{t^3} \\ &= \frac{962}{t^2} + \frac{99.7 \times 10^3}{t^3} \end{aligned}$$

Since the shear stress at the top most fibres is zero, therefore equating the above expression, equal to the given safe tensile stress of 100 N/mm<sup>2</sup>, we have

$$\frac{962}{t^2} + \frac{99.7 \times 10^3}{t^3} = 100$$

By hit and trial method, we find that

$$t = 10.4 \text{ mm Ans.}$$

and

$$b = 3t = 3 \times 10.4 = 31.2 \text{ mm Ans.}$$



Retaining screws on a lamp.

### 11.21 Eccentric Load on a Bracket with Circular Base

Sometimes the base of a bracket is made circular as in case of a flanged bearing of a heavy machine tool and pillar crane etc. Consider a round flange bearing of a machine tool having four bolts as shown in Fig. 11.40.

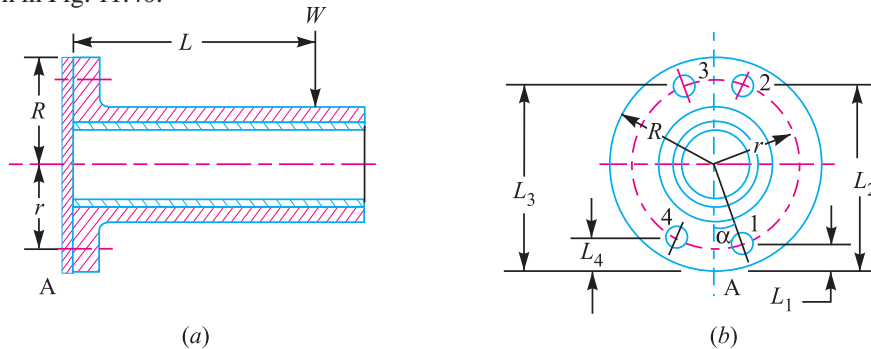


Fig. 11.40. Eccentric load on a bracket with circular base.

- Let
- $R$  = Radius of the column flange,
  - $r$  = Radius of the bolt pitch circle,
  - $w$  = Load per bolt per unit distance from the tilting edge,
  - $L$  = Distance of the load from the tilting edge, and
  - $L_1, L_2, L_3$ , and  $L_4$  = Distance of bolt centres from the tilting edge A.

## 420 ■ A Textbook of Machine Design

As discussed in the previous article, equating the external moment  $W \times L$  to the sum of the resisting moments of all the bolts, we have,

$$W.L = w [(L_1)^2 + (L_2)^2 + (L_3)^2 + (L_4)^2]$$

$$\therefore w = \frac{W.L}{(L_1)^2 + (L_2)^2 + (L_3)^2 + (L_4)^2} \quad \dots(i)$$

Now from the geometry of the Fig. 11.40 (b), we find that

$$\begin{aligned} L_1 &= R - r \cos \alpha & L_2 &= R + r \sin \alpha \\ L_3 &= R + r \cos \alpha & \text{and} & & L_4 &= R - r \sin \alpha \end{aligned}$$

Substituting these values in equation (i), we get

$$w = \frac{W.L}{4R^2 + 2r^2}$$

$$\therefore \text{Load in the bolt situated at 1} = w.L_1 = \frac{W.L.L_1}{4R^2 + 2r^2} = \frac{W.L(R - r \cos \alpha)}{4R^2 + 2r^2}$$

This load will be maximum when  $\cos \alpha$  is minimum *i.e.* when  $\cos \alpha = -1$  or  $\alpha = 180^\circ$ .

$\therefore$  Maximum load in a bolt

$$= \frac{W.L(R + r)}{4R^2 + 2r^2}$$

In general, if there are  $n$  number of bolts, then load in a bolt

$$= \frac{2W.L(R - r \cos \alpha)}{n(2R^2 + r^2)}$$

and maximum load in a bolt,

$$W_t = \frac{2W.L(R + r)}{n(2R^2 + r^2)}$$

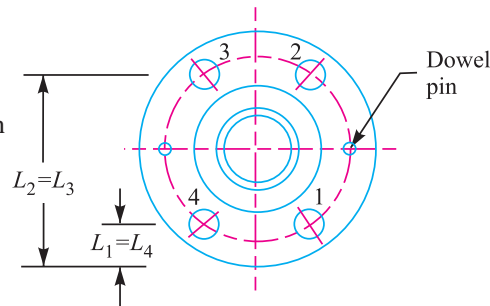


Fig. 11.41

The above relation is used when the direction of the load  $W$  changes with relation to the bolts as in the case of pillar crane. But if the direction of load is fixed, then the maximum load on the bolts may be reduced by locating the bolts in such a way that two of them are equally stressed as shown in Fig. 11.41. In such a case, maximum load is given by

$$W_t = \frac{2W.L}{n} \left[ \frac{R + r \cos \left( \frac{180}{n} \right)}{2R^2 + r^2} \right]$$

Knowing the value of maximum load, we can determine the size of the bolt.

**Note :** Generally, two dowel pins as shown in Fig. 11.41, are used to take up the shear load. Thus the bolts are relieved of shear stress and the bolts are designed for tensile load only.

**Example 11.17.** The base of a pillar crane is fastened to the foundation (a level plane) by eight bolts spaced equally on a bolt circle of diameter 1.6 m. The diameter of the pillar base is 2 m. Determine the size of bolts when the crane carries a load of 100 kN at a distance of 5 m from the centre of the base. The allowable stress for the bolt material is 100 MPa. The table for metric coarse threads is given below :

Major diameter (mm)	20	24	30	36	42	48
Pitch (mm)	2.5	3.0	3.5	4.0	4.5	5.0
Stress area (mm <sup>2</sup> )	245	353	561	817	1120	1472

**Solution.** Given :  $n = 8$  ;  $d = 1.6$  m or  $r = 0.8$  m ;  $D = 2$  m or  $R = 1$  m ;  $W = 100$  kN  
 $= 100 \times 10^3$  N ;  $e = 5$  m ;  $\sigma_t = 100$  MPa =  $100$  N/mm<sup>2</sup>

The pillar crane is shown in Fig. 11.42.

We know that the distance of the load from the tilting edge A-A,

$$L = e - R = 5 - 1 = 4 \text{ m}$$

Let  $d_c$  = Core diameter of the bolts.

We know that maximum load on a bolt,

$$\begin{aligned} W_t &= \frac{2 W.L (R + r)}{n (2R^2 + r^2)} \\ &= \frac{2 \times 100 \times 10^3 \times 4 (1 + 0.8)}{8 [2 \times 1^2 + (0.8)^2]} \\ &= \frac{1440 \times 10^3}{21.12} = 68.18 \times 10^3 \text{ N} \end{aligned}$$

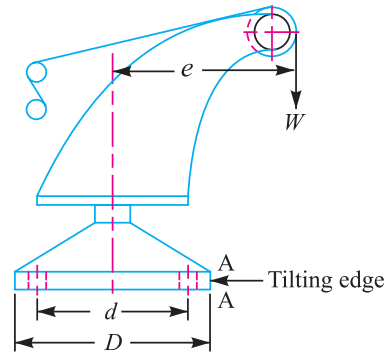


Fig. 11.42

We also know that maximum load on a bolt ( $W_t$ ),

$$68.18 \times 10^3 = \frac{\pi}{4} (d_c)^2 \sigma_t = \frac{\pi}{4} (d_c)^2 100 = 78.54 (d_c)^2$$

$$\therefore (d_c)^2 = 68.18 \times 10^3 / 78.54 = 868 \quad \text{or} \quad d_c = 29.5 \text{ mm}$$

From Table 11.1 (coarse series), we find that the standard core diameter of the bolt is 31.093 mm and the corresponding size of the bolt is M 36. **Ans.**

**Example 11.18.** A flanged bearing, as shown in Fig. 11.40, is fastened to a frame by means of four bolts spaced equally on 500 mm bolt circle. The diameter of bearing flange is 650 mm and a load of 400 kN acts at a distance of 250 mm from the frame. Determine the size of the bolts, taking safe tensile stress as 60 MPa for the material of the bolts.

**Solution.** Given :  $n = 4$  ;  $d = 500$  mm or  $r = 250$  mm ;  $D = 650$  mm or  $R = 325$  mm ;  
 $W = 400$  kN =  $400 \times 10^3$  N ;  $L = 250$  mm ;  $\sigma_t = 60$  MPa =  $60$  N/mm<sup>2</sup>

Let  $d_c$  = Core diameter of the bolts.

We know that when the bolts are equally spaced, the maximum load on the bolt,

$$\begin{aligned} W_t &= \frac{2W.L}{n} \left[ \frac{R + r \cos \left( \frac{180}{n} \right)}{2R^2 + r^2} \right] \\ &= \frac{2 \times 400 \times 10^3 \times 250}{4} \left[ \frac{325 + 250 \cos \left( \frac{180}{4} \right)}{2 (325)^2 + (250)^2} \right] = 91\,643 \text{ N} \end{aligned}$$

We also know that maximum load on the bolt ( $W_t$ ),

$$91\,643 = \frac{\pi}{4} (d_c)^2 \sigma_t = \frac{\pi}{4} (d_c)^2 60 = 47.13 (d_c)^2$$

$$\therefore (d_c)^2 = 91\,643 / 47.13 = 1945 \quad \text{or} \quad d_c = 44 \text{ mm}$$

From Table 11.1, we find that the standard core diameter of the bolt is 45.795 mm and corresponding size of the bolt is M 52. **Ans.**

**Example 11.19.** A pillar crane having a circular base of 600 mm diameter is fixed to the foundation of concrete base by means of four bolts. The bolts are of size 30 mm and are equally spaced on a bolt circle diameter of 500 mm.

## 422 ■ A Textbook of Machine Design

Determine : 1. The distance of the load from the centre of the pillar along a line X-X as shown in Fig. 11.43 (a). The load lifted by the pillar crane is 60 kN and the allowable tensile stress for the bolt material is 60 MPa.

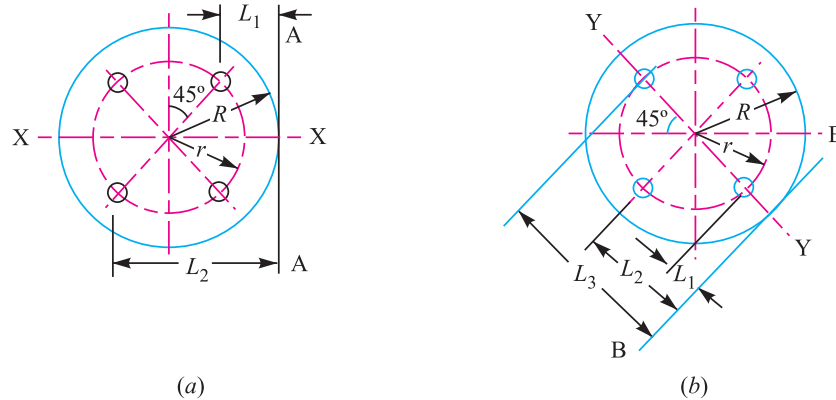


Fig. 11.43

2. The maximum stress induced in the bolts if the load is applied along a line Y-Y of the foundation as shown in Fig. 11.43 (b) at the same distance as in part (1).

**Solution.** Given :  $D = 600$  mm or  $R = 300$  mm ;  $n = 4$  ;  $d_b = 30$  mm ;  $d = 500$  mm or  $r = 250$  mm ;  $W = 60$  kN ;  $\sigma_t = 60$  MPa =  $60$  N/mm<sup>2</sup>

Since the size of bolt (*i.e.*  $d_b = 30$  mm), is given therefore from Table 11.1, we find that the stress area corresponding to M 30 is  $561$  mm<sup>2</sup>.

We know that the maximum load carried by each bolt

$$= \text{Stress area} \times \sigma_t = 561 \times 60 = 33\,660 \text{ N} = 33.66 \text{ kN}$$

and direct tensile load carried by each bolt

$$= \frac{W}{n} = \frac{60}{4} = 15 \text{ kN}$$

$\therefore$  Total load carried by each bolt at distance  $L_2$  from the tilting edge A-A

$$= 33.66 + 15 = 48.66 \text{ kN} \quad \dots(i)$$

From Fig. 11.43 (a), we find that

$$L_1 = R - r \cos 45^\circ = 300 - 250 \times 0.707 = 123 \text{ mm} = 0.123 \text{ m}$$

and

$$L_2 = R + r \cos 45^\circ = 300 + 250 \times 0.707 = 477 \text{ mm} = 0.477 \text{ m}$$

Let

$$w = \text{Load (in kN) per bolt per unit distance.}$$

$\therefore$  Total load carried by each bolt at distance  $L_2$  from the tilting edge A-A

$$= w.L_2 = w \times 0.477 \text{ kN} \quad \dots(ii)$$

From equations (i) and (ii), we have

$$w = 48.66 / 0.477 = 102 \text{ kN/m}$$

$\therefore$  Resisting moment of all the bolts about the outer (*i.e.* tilting) edge of the flange along the tangent A-A

$$= 2w [(L_1)^2 + (L_2)^2] = 2 \times 102 [(0.123)^2 + (0.477)^2] = 49.4 \text{ kN-m}$$

### 1. Distance of the load from the centre of the pillar

Let

$e$  = Distance of the load from the centre of the pillar or eccentricity of the load, and

$L$  = Distance of the load from the tilting edge A-A =  $e - R = e - 0.3$



We know that turning moment due to load  $W$ , about the tilting edge  $A-A$  of the flange  
 $= W.L = 60 (e - 0.3)$  kN-m

Now equating the turning moment to the resisting moment of all the bolts, we have

$$60 (e - 0.3) = 49.4$$

$$\therefore e - 0.3 = 49.4 / 60 = 0.823 \quad \text{or} \quad e = 0.823 + 0.3 = 1.123 \text{ m Ans.}$$

### 2. Maximum stress induced in the bolt

Since the load is applied along a line  $Y-Y$  as shown in Fig. 11.43 (b), and at the same distance as in part (1) i.e. at  $L = e - 0.3 = 1.123 - 0.3 = 0.823$  m from the tilting edge  $B-B$ , therefore

Turning moment due to load  $W$  about the tilting edge  $B-B$

$$= W.L = 60 \times 0.823 = 49.4 \text{ kN-m}$$

From Fig. 11.43 (b), we find that

$$L_1 = R - r = 300 - 250 = 50 \text{ mm} = 0.05 \text{ m}$$

$$L_2 = R = 300 \text{ mm} = 0.3 \text{ m}$$

and

$$L_3 = R + r = 300 + 250 = 550 \text{ mm} = 0.55 \text{ m}$$

$\therefore$  Resisting moment of all the bolts about  $B-B$

$$= w [(L_1)^2 + 2(L_2)^2 + (L_3)^2] = w[(0.05)^2 + 2(0.3)^2 + (0.55)^2] \text{ kN-m}$$

$$= 0.485 w \text{ kN-m}$$

Equating resisting moment of all the bolts to the turning moment, we have

$$0.485 w = 49.4$$

or

$$w = 49.4 / 0.485 = 102 \text{ kN/m}$$

Since the bolt at a distance of  $L_3$  is heavily loaded, therefore load carried by this bolt

$$= w.L_3 = 102 \times 0.55 = 56.1 \text{ kN}$$



Harvesting machine

Note : This picture is given as additional information and is not a direct example of the current chapter.

and net force taken by the bolt

$$= w.L_3 - \frac{W}{n} = 56.1 - \frac{60}{4} = 41.1 \text{ kN} = 41\ 100 \text{ N}$$

∴ Maximum stress induced in the bolt

$$= \frac{\text{Force}}{\text{Stress area}} = \frac{41\ 000}{516} = 79.65 \text{ N/mm}^2 = 79.65 \text{ MPa Ans.}$$

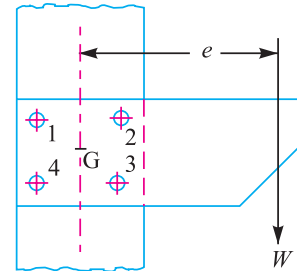


Fig. 11.44. Eccentric load in the plane containing the bolts.

### 11.22 Eccentric Load Acting in the Plane Containing the Bolts

When the eccentric load acts in the plane containing the bolts, as shown in Fig. 11.44, then the same procedure may be followed as discussed for eccentric loaded riveted joints.

**Example 11.20.** Fig. 11.45 shows a solid forged bracket to carry a vertical load of 13.5 kN applied through the centre of hole. The square flange is secured to the flat side of a vertical stanchion through four bolts. Calculate suitable diameter  $D$  and  $d$  for the arms of the bracket, if the permissible stresses are 110 MPa in tension and 65 MPa in shear.

Estimate also the tensile load on each top bolt and the maximum shearing force on each bolt.

**Solution.** Given :  $W = 13.5 \text{ kN} = 13\ 500 \text{ N}$  ;  $\sigma_t = 110 \text{ MPa} = 110 \text{ N/mm}^2$  ;  $\tau = 65 \text{ MPa} = 65 \text{ N/mm}^2$

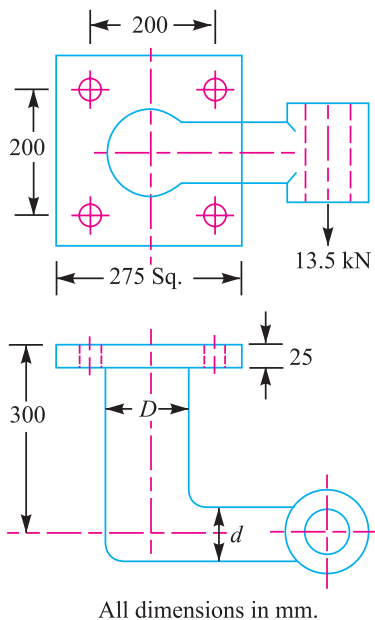


Fig. 11.45

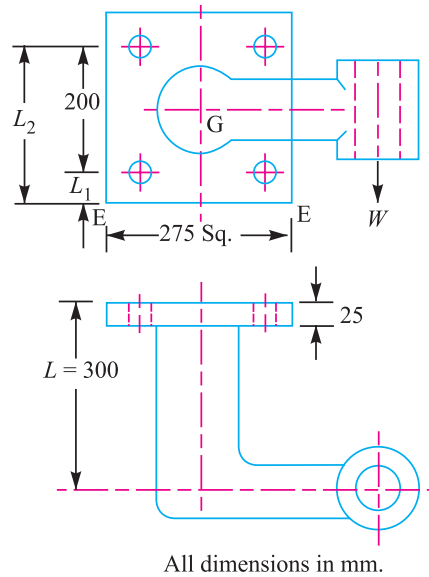


Fig. 11.46

#### Diameter $D$ for the arm of the bracket

The section of the arm having  $D$  as the diameter is subjected to bending moment as well as twisting moment. We know that bending moment,

$$M = 13\ 500 \times (300 - 25) = 3712.5 \times 10^3 \text{ N-mm}$$

and twisting moment,  $T = 13\,500 \times 250 = 3375 \times 10^3$  N-mm

∴ Equivalent twisting moment,

$$T_e = \sqrt{M^2 + T^2} = \sqrt{(3712.5 \times 10^3)^2 + (3375 \times 10^3)^2} \text{ N-mm}$$

$$= 5017 \times 10^3 \text{ N-mm}$$

We know that equivalent twisting moment ( $T_e$ ),

$$5017 \times 10^3 = \frac{\pi}{16} \times \tau \times D^3 = \frac{\pi}{16} \times 65 \times D^3 = 12.76 D^3$$

$$\therefore D^3 = 5017 \times 10^3 / 12.76 = 393 \times 10^3$$

or

$$D = 73.24 \text{ say } 75 \text{ mm Ans.}$$

#### **Diameter ( $d$ ) for the arm of the bracket**

The section of the arm having  $d$  as the diameter is subjected to bending moment only. We know that bending moment,

$$M = 13\,500 \left( 250 - \frac{75}{2} \right) = 2868.8 \times 10^3 \text{ N-mm}$$

and section modulus,  $Z = \frac{\pi}{32} \times d^3 = 0.0982 d^3$

We know that bending (tensile) stress ( $\sigma_t$ ),

$$110 = \frac{M}{Z} = \frac{2868.8 \times 10^3}{0.0982 d^3} = \frac{29.2 \times 10^6}{d^3}$$

$$\therefore d^3 = 29.2 \times 10^6 / 110 = 265.5 \times 10^3 \quad \text{or} \quad d = 64.3 \text{ say } 65 \text{ mm Ans.}$$

#### **Tensile load on each top bolt**

Due to the eccentric load  $W$ , the bracket has a tendency to tilt about the edge  $E-E$ , as shown in Fig. 11.46.

Let  $w$  = Load on each bolt per mm distance from the tilting edge due to the tilting effect of the bracket.

Since there are two bolts each at distance  $L_1$  and  $L_2$  as shown in Fig. 11.46, therefore total moment of the load on the bolts about the tilting edge  $E-E$

$$= 2(w.L_1)L_1 + 2(w.L_2)L_2 = 2w[(L_1)^2 + (L_2)^2]$$

$$= 2w[(37.5)^2 + (237.5)^2] = 115\,625 w \text{ N-mm} \quad \dots(i)$$

∴ ( $L_1 = 37.5$  mm and  $L_2 = 237.5$  mm)

and turning moment of the load about the tilting edge

$$= W.L = 13\,500 \times 300 = 4050 \times 10^3 \text{ N-mm} \quad \dots(ii)$$

From equations (i) and (ii), we have

$$w = 4050 \times 10^3 / 115\,625 = 35.03 \text{ N/mm}$$

∴ Tensile load on each top bolt

$$= w.L_2 = 35.03 \times 237.5 = 8320 \text{ N Ans.}$$

#### **Maximum shearing force on each bolt**

We know that primary shear load on each bolt acting vertically downwards,

$$W_{s1} = \frac{W}{n} = \frac{13\,500}{4} = 3375 \text{ N} \quad \dots(\because \text{No. of bolts, } n = 4)$$

Since all the bolts are at equal distances from the centre of gravity of the four bolts ( $G$ ), therefore the secondary shear load on each bolt is same.

## 426 ■ A Textbook of Machine Design

Distance of each bolt from the centre of gravity (G) of the bolts,

$$l_1 = l_2 = l_3 = l_4 = \sqrt{(100)^2 + (100)^2} = 141.4 \text{ mm}$$

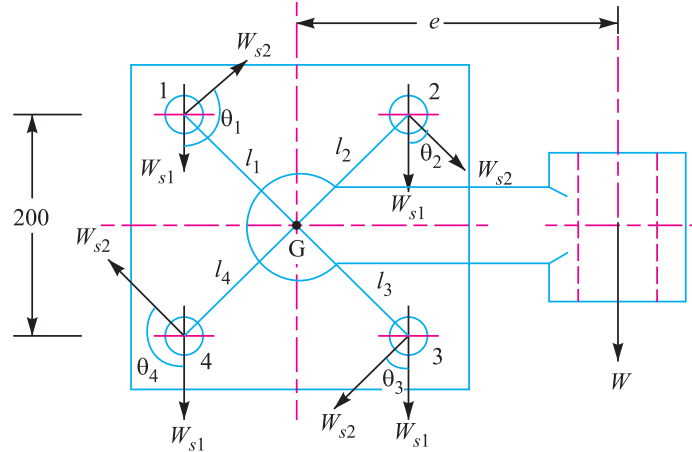


Fig. 11.47

∴ Secondary shear load on each bolt,

$$W_{s2} = \frac{W.e.l_1}{(l_1)^2 + (l_2)^2 + (l_3)^2 + (l_4)^2} = \frac{13\,500 \times 250 \times 141.4}{4(141.4)^2} = 5967 \text{ N}$$

Since the secondary shear load acts at right angles to the line joining the centre of gravity of the bolt group to the centre of the bolt as shown in Fig. 11.47, therefore the resultant of the primary and secondary shear load on each bolt gives the maximum shearing force on each bolt.

From the geometry of the Fig. 11.47, we find that

$$\theta_1 = \theta_4 = 135^\circ, \text{ and } \theta_2 = \theta_3 = 45^\circ$$

∴ Maximum shearing force on the bolts 1 and 4

$$\begin{aligned} &= \sqrt{(W_{s1})^2 + (W_{s2})^2 + 2 W_{s1} \times W_{s2} \times \cos 135^\circ} \\ &= \sqrt{(3375)^2 + (5967)^2 - 2 \times 3375 \times 5967 \times 0.7071} = 4303 \text{ N Ans.} \end{aligned}$$

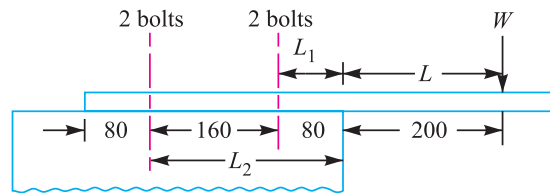
and maximum shearing force on the bolts 2 and 3

$$\begin{aligned} &= \sqrt{(W_{s1})^2 + (W_{s2})^2 + 2 W_{s1} \times W_{s2} \times \cos 45^\circ} \\ &= \sqrt{(3375)^2 + (5967)^2 + 2 \times 3375 \times 5967 \times 0.7071} = 8687 \text{ N Ans.} \end{aligned}$$

### EXERCISES

- Determine the safe tensile load for bolts of M 20 and M 36. Assume that the bolts are not initially stressed and take the safe tensile stress as 200 MPa. [Ans. 49 kN; 16.43 kN]
- An eye bolt carries a tensile load of 20 kN. Find the size of the bolt, if the tensile stress is not to exceed 100 MPa. Draw a neat proportioned figure for the bolt. [Ans. M 20]
- An engine cylinder is 300 mm in diameter and the steam pressure is 0.7 N/mm<sup>2</sup>. If the cylinder head is held by 12 studs, find the size. Assume safe tensile stress as 28 MPa. [Ans. M 24]

4. Find the size of 14 bolts required for a C.I. steam engine cylinder head. The diameter of the cylinder is 400 mm and the steam pressure is  $0.12 \text{ N/mm}^2$ . Take the permissible tensile stress as 35 MPa. [Ans. M 24]
5. The cylinder head of a steam engine is subjected to a pressure of  $1 \text{ N/mm}^2$ . It is held in position by means of 12 bolts. The effective diameter of the cylinder is 300 mm. A soft copper gasket is used to make the joint leak proof. Determine the size of the bolts so that the stress in the bolts does not exceed 100 MPa. [Ans. M 36]
6. A steam engine cylinder of 300 mm diameter is supplied with steam at  $1.5 \text{ N/mm}^2$ . The cylinder cover is fastened by means of 8 bolts of size M 20. The joint is made leak proof by means of suitable gaskets. Find the stress produced in the bolts. [Ans. 249 MPa]
7. The effective diameter of the cylinder is 400 mm. The maximum pressure of steam acting on the cylinder cover is  $1.12 \text{ N/mm}^2$ . Find the number and size of studs required to fix the cover. Draw a neat proportioned sketch for the elevation of the cylinder cover. [Ans. 14; M 24]
8. Specify the size and number of studs required to fasten the head of a 400 mm diameter cylinder containing steam at  $2 \text{ N/mm}^2$ . A hard gasket (gasket constant = 0.3) is used in making the joint. Draw a neat sketch of the joint also. Other data may be assumed. [Ans. M 30; 12]
9. A steam engine cylinder has an effective diameter of 200 mm. It is subjected to a maximum steam pressure of  $1.75 \text{ N/mm}^2$ . Calculate the number and size of studs required to fix the cylinder cover onto the cylinder flange assuming the permissible stress in the studs as 30 MPa. Take the pitch circle diameter of the studs as 320 mm and the total load on the studs as 20% higher than the external load on the joint. Also check the circumferential pitch of the studs so as to give a leak proof joint. [Ans. 16; M 16]
10. A steam engine cylinder of size  $300 \text{ mm} \times 400 \text{ mm}$  operates at  $1.5 \text{ N/mm}^2$  pressure. The cylinder head is connected by means of 8 bolts having yield point stress of 350 MPa and endurance limit of 240 MPa. The bolts are tightened with an initial preload of 1.8 times the steam load. The joint is made leak-proof by using soft copper gasket which renders the effect of external load to be half. Determine the size of bolts, if factor of safety is 2 and stress concentration factor is 3. [Ans. M 20]
11. The cylinder head of a  $200 \text{ mm} \times 350 \text{ mm}$  compressor is secured by means of 12 studs of rolled mild steel. The gas pressure is  $1.5 \text{ N/mm}^2$  gauge. The initial tension in the bolts, assumed to be equally loaded such that a cylinder pressure of  $3 \text{ N/mm}^2$  gauge is required for the joint to be on the point of opening. Suggest the suitable size of the studs in accordance with Soderberg's equation assuming the equivalent diameter of the compressed parts to be twice the bolt size and factor of safety 2. The stress concentration factor may be taken as 2.8 and the value of endurance strength for reversed axial loading is half the value of ultimate strength. [Ans. M 12]
12. Find the diameter of screwed boiler stays, each stay supports an area equal to  $200 \text{ mm} \times 150 \text{ mm}$ . The steam pressure is  $1 \text{ N/mm}^2$ . The permissible tensile stress for the stay material is 34 MPa. [Ans. M 36]
13. What size of hole must be drilled in a M 42 bolt so as to make the bolt of uniform strength? [Ans. 18.4 mm]
14. A mounting plate for a drive unit is fixed to the support by means of four M 12 bolts as shown in Fig. 11.48. The core diameter of the bolts can be considered as 9.858 mm. Determine the maximum value of 'W' if the allowable tensile stress in bolt material is 60 MPa. [Ans. 12.212 kN]



All dimensions in mm.

Fig. 11.48

15. A pulley bracket, as shown in Fig. 11.49, is supported by 4 bolts, two at A-A and two at B-B. Determine the size of bolts using an allowable shear stress of 25 MPa for the material of the bolts.

[Ans. M 27]

16. A wall bracket, as shown in Fig. 11.50, is fixed to a wall by means of four bolts. Find the size of the bolts and the width of bracket. The safe stress in tension for the bolt and bracket may be assumed as 70 MPa.

[Ans. M 30 ; 320 mm]

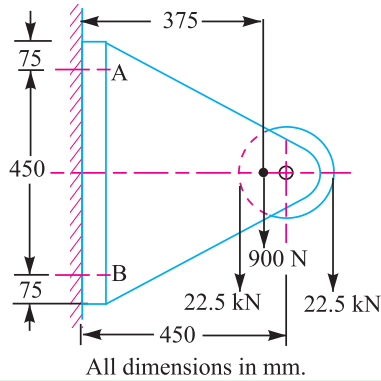
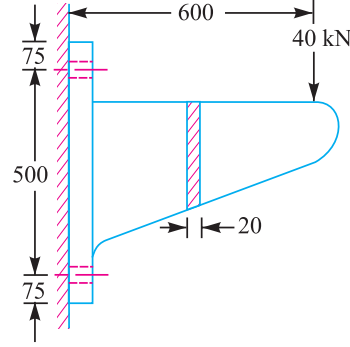


Fig. 11.49

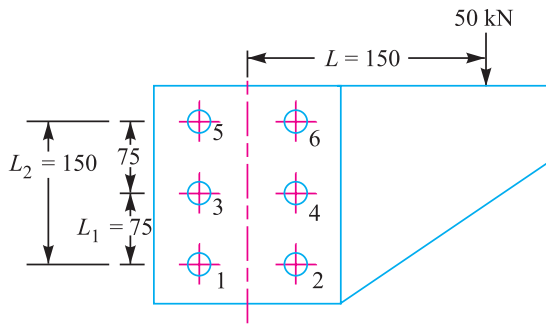


All dimensions in mm.

Fig. 11.50

17. A bracket is bolted to a column by 6 bolts of equal size as shown in Fig. 11.51. It carries a load of 50 kN at a distance of 150 mm from the centre of column. If the maximum stress in the bolts is to be limited to 150 MPa, determine the diameter of bolt.

[Ans. 14 mm]



All dimensions in mm.

Fig. 11.51

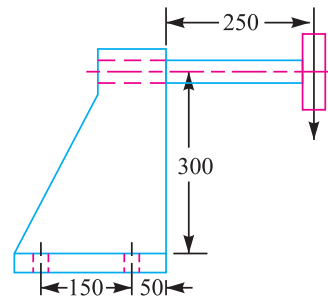


Fig. 11.52

18. A cast iron bracket to carry a shaft and a belt pulley is shown in Fig. 11.52. The bracket is fixed to the main body by means of four standard bolts. The tensions in the slack and tight sides of the belt are 2.2 kN and 4.25 kN respectively. Find the size of the bolts, if the safe tensile stress for bolts is 50 MPa.

[Ans. M 16]

19. Determine the size of the foundation bolts for a 60 kN pillar crane as shown in Fig. 11.42 (page 421) from the following data :

Distance of the load from the centre of the pillar	= 1.25 m
Diameter of pillar flange	= 600 mm
Diameter of bolt circle	= 500 mm
Number of bolts, equally spaced	= 4
Allowable tensile stress for bolts	= 600 MPa

[Ans. M 33]

20. A bracket, as shown in Fig. 11.53, is fixed to a vertical steel column by means of five standard bolts. Determine : (a) The diameter of the fixing bolts, and (b) The thickness of the arm of the bracket. Assume safe working stresses of 70 MPa in tension and 50 MPa in shear.

[Ans. M 18; 50 mm]

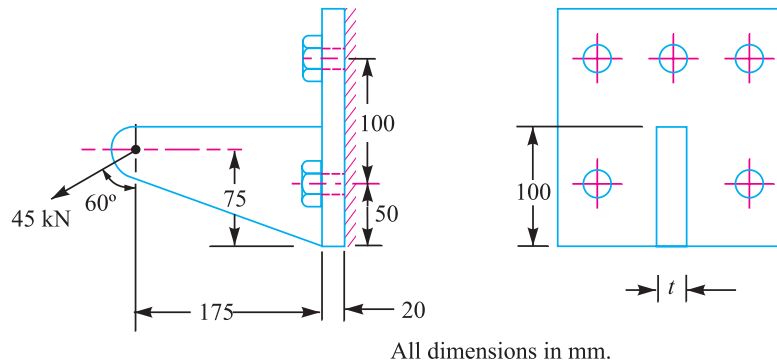


Fig. 11.53

### QUESTIONS

1. What do you understand by the single start and double start threads ?
2. Define the following terms :  
(a) Major diameter, (b) Minor diameter, (c) Pitch, and (d) Lead.
3. Write short note on nut locking devices covering the necessity and various types. Your answer should be illustrated with neat sketches.
4. Discuss the significance of the initial tightening load and the applied load so far as bolts are concerned. Explain which of the above loads must be greater for a properly designed bolted joint and show how each affects the total load on the bolt.
5. Discuss on bolts of uniform strength giving examples of practical applications of such bolts.
6. Bolts less than M 16 should normally be used in pre loaded joints. Comment.
7. How the core diameter of the bolt is determined when a bracket having a rectangular base is bolted to a wall by four bolts and carries an eccentric load parallel to the axis of the bolt?
8. Derive an expression for the maximum load in a bolt when a bracket with circular base is bolted to a wall by means of four bolts.
9. Explain the method of determining the size of the bolt when the bracket carries an eccentric load perpendicular to the axis of the bolt.

### OBJECTIVE TYPE QUESTIONS

1. The largest diameter of an external or internal screw thread is known as  
(a) minor diameter (b) major diameter  
(c) pitch diameter (d) none of these
2. The pitch diameter is the ..... diameter of an external or internal screw thread.  
(a) effective (b) smallest (c) largest
3. A screw is specified by its  
(a) major diameter (b) minor diameter



## 430 ■ A Textbook of Machine Design

- (c) pitch diameter  
(d) pitch
4. The railway carriage coupling have  
(a) square threads  
(b) acme threads  
(c) knuckle threads  
(d) buttress threads
5. The square threads are usually found on  
(a) spindles of bench vices  
(b) railway carriage couplings  
(c) feed mechanism of machine tools  
(d) screw cutting lathes
6. A locking device in which the bottom cylindrical portion is recessed to receive the tip of the locking set screw, is called  
(a) castle nut  
(b) jam nut  
(c) ring nut  
(d) screw nut
7. Which one is not a positive locking device ?  
(a) Spring washer  
(b) Cotter pin  
(c) Tongued washer  
(d) Spring wire lock
8. The washer is generally specified by its  
(a) outer diameter  
(b) hole diameter  
(c) thickness  
(d) mean diameter
9. A locking device extensively used in automobile industry is a  
(a) jam nut  
(b) castle nut  
(c) screw nut  
(d) ring nut
10. A bolt of M 24 × 2 means that  
(a) the pitch of the thread is 24 mm and depth is 2 mm  
(b) the cross-sectional area of the threads is 24 mm<sup>2</sup>  
(c) the nominal diameter of bolt is 24 mm and the pitch is 2 mm  
(d) the effective diameter of the bolt is 24 mm and there are two threads per cm
11. When a nut is tightened by placing a washer below it, the bolt will be subjected to  
(a) tensile stress  
(b) compressive stress  
(c) shear stress  
(d) none of these
12. The eye bolts are used for  
(a) transmission of power  
(b) locking devices  
(c) lifting and transporting heavy machines  
(d) absorbing shocks and vibrations
13. The shock absorbing capacity of a bolt may be increased by  
(a) increasing its shank diameter  
(b) decreasing its shank diameter  
(c) tightening the bolt properly  
(d) making the shank diameter equal to the core diameter of the thread.
14. The resilience of a bolt may be increased by  
(a) increasing its shank diameter  
(b) increasing its length  
(c) decreasing its shank diameter  
(d) decreasing its length
15. A bolt of uniform strength can be developed by  
(a) keeping the core diameter of threads equal to the diameter of unthreaded portion of the bolt  
(b) keeping the core diameter of threads smaller than the diameter of unthreaded portion of the bolt  
(c) keeping the nominal diameter of threads equal to the diameter of unthreaded portion of bolt  
(d) none of the above

### ANSWERS

- |         |         |         |         |         |
|---------|---------|---------|---------|---------|
| 1. (b)  | 2. (a)  | 3. (a)  | 4. (d)  | 5. (c)  |
| 6. (c)  | 7. (a)  | 8. (b)  | 9. (b)  | 10. (c) |
| 11. (a) | 12. (c) | 13. (b) | 14. (b) | 15. (a) |

**page 406**

**Solution.** Given :  $W = 30 \text{ kN}$  ;  $\sigma_t = 60 \text{ MPa} = 60 \text{ N/mm}^2$  ;  $L_1 = 80 \text{ mm}$  ;  $L_2 = 250 \text{ mm}$  ;  
 $L = 500 \text{ mm}$

**page 408**

Load

---

Cross-sectional area of the bracket at  $X - X$

**page 418**

$$\therefore (d_c)^2 = 4920 / 78.55 = 62.6 \quad \text{or} \quad d_c = 7.9 \text{ mm}$$

$W_H$

**page 421**

**Solution.** Given :  $n = 8$  ;  $d = 1.6 \text{ m}$  or  $r = 0.8 \text{ m}$  ;  $D = 2 \text{ m}$  or  $R = 1 \text{ m}$  ;  $W = 100 \text{ kN}$   
 $= 100 \times 10^3 \text{ N}$  ;  $e = 5 \text{ m}$  ;  $\sigma_t = 100 \text{ MPa} = 100 \text{ N/mm}^2$

**page 421**

**Solution.** Given :  $n = 4$  ;  $d = 500 \text{ mm}$  or  $r = 250 \text{ mm}$  ;  $D = 650 \text{ mm}$  or  $R = 325 \text{ mm}$  ;  
 $W = 400 \text{ kN} = 400 \times 10^3 \text{ N}$  ;  $L = 250 \text{ mm}$  ;  $\sigma_t = 60 \text{ MPa} = 60 \text{ N/mm}^2$

**page 424**

**Solution.** Given :  $D = 600 \text{ mm}$  or  $R = 300 \text{ mm}$  ;  $n = 4$  ;  $d_b = 30 \text{ mm}$  ;  $d = 500 \text{ mm}$  or  $r = 250 \text{ mm}$  ;  
 $W = 60 \text{ kN}$  ;  $\sigma_t = 60 \text{ MPa} = 60 \text{ N/mm}^2$

## 432 ■ A Textbook of Machine Design

### page 437

$$\therefore d^2 = 30 \times 10^3 / 39.3 = 763 \quad \text{or} \quad d = 27.6 \text{ say } 28 \text{ mm } \mathbf{Ans.}$$

### page 448

Width of gib,  $b_1 = 0.55 B$  ; and width of cotter,  $b = 0.45 B$

### page 453

find the value of  $d_3$  by substituting  $\sigma_c = 84 \text{ N/mm}^2$  in the above expression, *i.e.*

$$70\ 695 = (d_3 - 55) 16.5 \times 84 = (d_3 - 55) 1386$$

$$\therefore d_3 - 55 = 70\ 695 / 1386 = 51$$

or  $d_3 = 55 + 51 = 106 \text{ mm } \mathbf{Ans.}$

We know the tapered length of the piston rod,

$$L = 2.2 d_2 = 2.2 \times 55 = 121 \text{ mm } \mathbf{Ans.}$$

Assuming the taper of the piston rod as 1 in 20, therefore the diameter of the parallel part of the piston rod,

$$d = d_2 + \frac{L}{2} \times \frac{1}{20} = 55 + \frac{121}{2} \times \frac{1}{20} = 58 \text{ mm } \mathbf{Ans.}$$

and diameter of the piston rod at the tapered end,

$$d_1 = d_2 - \frac{L}{2} \times \frac{1}{20} = 55 - \frac{121}{2} \times \frac{1}{20} = 52 \text{ mm } \mathbf{Ans.}$$

### page 456



### page 456

$$\sigma_t = \frac{P}{A} = \frac{P}{\frac{\pi}{4} (d_c)^2}$$

**page 470**

We shall now discuss the above types of keys, in detail, in the following pages.

**page 479**

Shaft couplings are divided into two main groups as follows :

It is used to connect two shafts which are perfectly aligned. Following types of rigid coupling are important from the subject point of view :

- Sleeve or muff coupling.
- Clamp or split-muff or compression coupling, and
- Flange coupling.

It is used to connect two shafts having both lateral and angular misalignment. Following types of flexible coupling are important from the subject point of view :

- Bushed pin type coupling,
- Universal coupling, and
- Oldham coupling.

We shall now discuss the above types of couplings, in detail, in the following pages.

**page 481**

**Solution.** Given :  $P = 40 \text{ kW} = 40 \times 10^3 \text{ W}$ ;  
 $N = 350 \text{ r.p.m.}$ ;  $\tau_s = 40 \text{ MPa} = 40 \text{ N/mm}^2$ ;  $\sigma_{cs} = 80 \text{ MPa} = 80 \text{ N/mm}^2$ ;  
 $\tau_c = 15 \text{ MPa} = 15 \text{ N/mm}^2$

The muff coupling is shown in Fig. 13.10. It is designed as discussed below :

**page 481**

$$1100 \times 10^3 = \frac{\pi}{16} \times \tau_s \times d^3 = \frac{\pi}{16} \times 40 \times d^3 = 7.86 d^3$$

$$\therefore d^3 = 1100 \times 10^3 / 7.86 = 140 \times 10^3 \text{ or } d = 52 \text{ say } 55 \text{ mm Ans.}$$

**page 481**

$$1100 \times 10^3 = \frac{\pi}{16} \times \tau_c \left( \frac{D^4 - d^4}{D} \right) = \frac{\pi}{16} \times \tau_c \left[ \frac{(125)^4 - (55)^4}{125} \right]$$

$$= 370 \times 10^3 \tau_c$$

$$\therefore \tau_c = 1100 \times 10^3 / 370 \times 10^3 = 2.97 \text{ N/mm}^2$$

## 434 ■ A Textbook of Machine Design

### page 484

**Solution.** Given :  $P = 30 \text{ kW} = 30 \times 10^3 \text{ W}$  ;  $N = 100 \text{ r.p.m.}$  ;  $\tau = 40 \text{ MPa} = 40 \text{ N/mm}^2$  ;  
 $n = 6$  ;  $\sigma_t = 70 \text{ MPa} = 70 \text{ N/mm}^2$  ;  $\mu = 0.3$

### page 484

$$\therefore (d_b)^2 = 2865 \times 10^3 / 5830 = 492 \quad \text{or} \quad d_b = 22.2 \text{ mm}$$

### page 488

**Solution.** Given :  $P = 15 \text{ kW} = 15 \times 10^3 \text{ W}$  ;  $N = 900 \text{ r.p.m.}$  ; Service factor = 1.35 ;  $\tau_s = \tau_b$   
 $= \tau_k = 40 \text{ MPa} = 40 \text{ N/mm}^2$  ;  $\sigma_{cb} = \sigma_{ck} = 80 \text{ MPa} = 80 \text{ N/mm}^2$  ;  $\tau_c = 8 \text{ MPa} = 8 \text{ N/mm}^2$

### page 490

**Solution.** Given :  $P = 15 \text{ kW} = 15 \times 10^3 \text{ W}$  ;  $N = 200 \text{ r.p.m.}$  ;  $\tau_s = 40 \text{ MPa} = 40 \text{ N/mm}^2$  ;  
 $\tau_b = 30 \text{ MPa} = 30 \text{ N/mm}^2$  ;  $\sigma_{ck} = 2t_k$  ;  $T_{max} = 1.25 T_{mean}$  ;  $\tau_c = 14 \text{ MPa} = 14 \text{ N/mm}^2$

### page 492

$$\dots (\because J = \frac{\pi}{32} \times d^4)$$

