

Copyrighted Material

Fundamentals of
Digital Logic

with
**VHDL
Design**

Second Edition

**Stephen Brown
Zvonko Vranesic**

Copyrighted Material

Fundamentals of Digital Logic With VHDL Design teaches the basic design techniques for logic circuits. It emphasizes the synthesis of circuits and explains how circuits are implemented in real chips. Fundamental concepts are illustrated by using small examples, which are easy to understand. Then, a modular approach is used to show how larger circuits are designed. VHDL is used to demonstrate how the basic building blocks and larger systems are defined in a hardware description language, producing designs that can be implemented with modern CAD tools.

Use of VHDL is well integrated into the book to enable the student to quickly become involved in real designs. The book can be used with any CAD system for design and implementation of logic circuits. To make it easy for the user to obtain modern CAD tools, the book includes a CD-ROM that contains Altera's Quartus II CAD software. This software provides automatic mapping of designs written in VHDL into Field Programmable Gate Arrays (FPGAs) and Complex Programmable Logic Devices (CPLDs). The user will be able to:

- Enter a design into the CAD system
- Compile the design into a selected device
- Simulate the functionality and timing of the resulting circuit
- Implement the designs in actual devices (using the school's laboratory facilities).

VHDL is a complex language, so it is introduced gradually in the book. Each VHDL feature is presented as it becomes pertinent for the circuits being discussed. To teach the student to use the Quartus II software, the book includes three tutorials. A discussion of the complete CAD flow is also given.

FUNDAMENTALS OF DIGITAL LOGIC WITH VHDL DESIGN

SECOND EDITION

Stephen Brown and Zvonko Vranesic
Department of Electrical and Computer Engineering
University of Toronto

 **Higher Education**

Boston Burr Ridge, IL Dubuque, IA Madison, WI New York San Francisco St. Louis
Bangkok Bogotá Caracas Kuala Lumpur Lisbon London Madrid Mexico City
Milan Montreal New Delhi Santiago Seoul Singapore Sydney Taipei Toronto

FUNDAMENTALS OF DIGITAL LOGIC WITH VHDL DESIGN, SECOND EDITION

Published by McGraw-Hill, a business unit of The McGraw-Hill Companies, Inc., 1221 Avenue of the Americas, New York, NY 10020. Copyright © 2005, 2000 by The McGraw-Hill Companies, Inc. All rights reserved. No part of this publication may be reproduced or distributed in any form or by any means, or stored in a database or retrieval system, without the prior written consent of The McGraw-Hill Companies, Inc., including, but not limited to, in any network or other electronic storage or transmission, or broadcast for distance learning.

Some ancillaries, including electronic and print components, may not be available to customers outside the United States.

This book is printed on acid-free paper.

1 2 3 4 5 6 7 8 9 0 DOC/DOC 0 9 8 7 6 5 4

ISBN 0-07-246085-7

Publisher: *Elizabeth A. Jones*
Senior Sponsoring Editor: *Carlise Paulson*
Developmental Editor: *Melinda D. Bilecki*
Marketing Manager: *Dawn R. Bercier*
Senior Project Manager: *Kay J. Brimeyer*
Production Supervisor: *Kara Kudronowicz*
Media Technology Producer: *Eric A. Weber*
Senior Coordinator of Freelance Design: *Michelle D. Whitaker*
Cover Designer: *Rokusek Design*
(USE) Cover Image: *Rokusek Design*
Senior Photo Research Coordinator: *Lori Hancock*
Supplement Producer: *Brenda A. Ernzen*
Compositor: *Techsetters, Inc.*
Typeface: *10/12 Times Roman*
Printer: *R. R. Donnelley Crawfordsville, IN*

Library of Congress Control Number: 2004107780

To Susan and Anne

• • • • •

ABOUT THE AUTHORS

Stephen Brown received his B.A.Sc. degree in Electrical Engineering from the University of New Brunswick, Canada, and the M.A.Sc. and Ph.D. degrees in Electrical Engineering from the University of Toronto. He joined the University of Toronto faculty in 1992, where he is now an Associate Professor in the Department of Electrical & Computer Engineering. He is also a Senior Director of Software Development at the Altera Toronto Technology Center.

His research interests include field-programmable VLSI technology and computer architecture. He won the Canadian Natural Sciences and Engineering Research Council's 1992 Doctoral Prize for the best Ph.D. thesis in Canada.

He has won four awards for excellence in teaching electrical engineering, computer engineering, and computer science courses. He is a coauthor of two other books: *Fundamentals of Digital Logic with Verilog Design* and *Field-Programmable Gate Arrays*.

Zvonko Vranesic received his B.A.Sc., M.A.Sc., and Ph.D. degrees, all in Electrical Engineering, from the University of Toronto. From 1963–1965 he worked as a design engineer with the Northern Electric Co. Ltd. in Bramalea, Ontario. In 1968 he joined the University of Toronto, where he is now a Professor in the Departments of Electrical & Computer Engineering and Computer Science. During the 1978–79 academic year, he was a Senior Visitor at the University of Cambridge, England, and during 1984–85 he was at the University of Paris, 6. From 1995 to 2000 he served as Chair of the Division of Engineering Science at the University of Toronto. He is also involved in research and development at the Altera Toronto Technology Center.

His current research interests include computer architecture, field-programmable VLSI technology, and multiple-valued logic systems.

He is a coauthor of four other books: *Computer Organization*, 5th ed.; *Fundamentals of Digital Logic with Verilog Design*; *Microcomputer Structures*; and *Field-Programmable Gate Arrays*. In 1990, he received the Wighton Fellowship for “innovative and distinctive contributions to undergraduate laboratory instruction.” In 2004, he received the Faculty Teaching Award from the Faculty of Applied Science and Engineering at the University of Toronto.

He has represented Canada in numerous chess competitions. He holds the title of International Master.

McGraw-Hill Series in Electrical and Computer Engineering

Senior Consulting Editor

Stephen W. Director, University of Michigan, Ann Arbor

Circuits and Systems

Communications and Signal Processing

Computer Engineering

Control Theory and Robotics

Electromagnetics

Electronics and VLSI Circuits

Introductory

Power

Antennas, Microwaves, and Radar

Previous Consulting Editors

Ronald N. Bracewell, Colin Cherry, James F. Gibbons, Willis W. Harman, Hubert Heffner, Edward W. Herold, John G. Linvill, Simon Ramo, Ronald A. Rohrer, Anthony E. Siegman, Charles Susskind, Frederick E. Terman, John G. Truxal, Ernst Weber, and John R. Whinnery

PREFACE

This book is intended for an introductory course in digital logic design, which is a basic course in most electrical and computer engineering programs. A successful designer of digital logic circuits needs a good understanding of basic concepts and a firm grasp of computer-aided design (CAD) tools. The purpose of our book is to provide the desirable balance between teaching the basic concepts and practical application through CAD tools. To facilitate the learning process, the necessary CAD software is included as an integral part of the book package.

The main goals of the book are (1) to teach students the fundamental concepts in classical manual digital design and (2) illustrate clearly the way in which digital circuits are designed today, using CAD tools. Even though modern designers no longer use manual techniques, except in rare circumstances, our motivation for teaching such techniques is to give students an intuitive feeling for how digital circuits operate. Also, the manual techniques provide an illustration of the types of manipulations performed by CAD tools, giving students an appreciation of the benefits provided by design automation. Throughout the book, basic concepts are introduced by way of examples that involve simple circuit designs, which we perform using both manual techniques and modern CAD-tool-based methods. Having established the basic concepts, more complex examples are then provided, using the CAD tools. Thus our emphasis is on modern design methodology to illustrate how digital design is carried out in practice today.

TECHNOLOGY AND CAD SUPPORT

The book discusses modern digital circuit implementation technologies. The emphasis is on programmable logic devices (PLDs), which is the most appropriate technology for use in a textbook for two reasons. First, PLDs are widely used in practice and are suitable for almost all types of digital circuit designs. In fact, students are more likely to be involved in PLD-based designs at some point in their careers than in any other technology. Second, circuits are implemented in PLDs by end-user programming. Therefore, students can be provided with an opportunity, in a laboratory setting, to implement the book's design examples in actual chips. Students can also simulate the behavior of their designed circuits on their own computers. We use the two most popular types of PLDs for targeting of designs: complex programmable logic devices (CPLDs) and field-programmable gate arrays (FPGAs).

Our CAD support is based on Altera Quartus II software. Quartus II provides automatic mapping of a design into Altera CPLDs and FPGAs, which are among the most widely used PLDs in the industry. The features of Quartus II that are particularly attractive for our purposes are:

- It is a commercial product. The version included with the book supports all major features of the product. Students will be able to easily enter a design into the CAD

system, compile the design into a selected device (the choice of device can be changed at any time and the design retargeted to a different device), simulate the functionality and detailed timing of the resulting circuit, and if laboratory facilities are provided at the student's school, implement the designs in actual devices.

- It provides for design entry using both hardware description languages (HDLs) and schematic capture. In the book, we emphasize the HDL-based design because it is the most efficient design method to use in practice. We describe in detail the IEEE Standard VHDL language and use it extensively in examples. The CAD system included with the book has a VHDL compiler, which allows the student to automatically create circuits from the VHDL code and implement these circuits in real chips.
- It can automatically target a design to various types of devices. This feature allows us to illustrate the ways in which the architecture of the target device affects a designer's circuit.
- It can be used on most types of popular computers. The version of Quartus II provided with the book runs on computers using Microsoft windows NT, 2000, or XP. However, through Altera's university program the software is also available for other machines, such as SUN or HP workstations.

A Quartus II CD-ROM is included with each copy of the book. Use of the software is fully integrated into the book so that students can try, firsthand, all design examples. To teach the students how to use this software, the book includes three, progressively advanced, hands-on tutorials.

SCOPE OF THE BOOK

Chapter 1 provides a general introduction to the process of designing digital systems. It discusses the key steps in the design process and explains how CAD tools can be used to automate many of the required tasks.

Chapter 2 introduces the basic aspects of logic circuits. It shows how Boolean algebra is used to represent such circuits. It also gives the reader a first glimpse at VHDL, as an example of a hardware description language that may be used to specify the logic circuits.

The electronic aspects of digital circuits are presented in Chapter 3. This chapter shows how the basic gates are built using transistors and presents various factors that affect circuit performance. The emphasis is on the latest technologies, with particular focus on CMOS technology and programmable logic devices.

Chapter 4 deals with the synthesis of combinational circuits. It covers all aspects of the synthesis process, starting with an initial design and performing the optimization steps needed to generate a desired final circuit. It shows how CAD tools are used for this purpose.

Chapter 5 concentrates on circuits that perform arithmetic operations. It begins with a discussion of how numbers are represented in digital systems and then shows how such numbers can be manipulated using logic circuits. This chapter illustrates how VHDL can be used to specify the desired functionality and how CAD tools provide a mechanism for developing the required circuits. We chose to introduce the number representations at this point, rather than in the very beginning of the book, to make the discussion more mean-

ingful and interesting, because we can immediately provide examples of how numerical information may be processed by actual circuits.

Chapter 6 presents combinational circuits that are used as building blocks. It includes the encoder, decoder, and multiplexer circuits. These circuits are very convenient for illustrating the application of many VHDL constructs, giving the reader an opportunity to discover more advanced features of VHDL.

Storage elements are introduced in Chapter 7. The use of flip-flops to realize regular structures, such as shift registers and counters, is discussed. VHDL-specified designs of these structures are included. The chapter also shows how larger systems, such as a simple processor, may be designed.

Chapter 8 gives a detailed presentation of synchronous sequential circuits (finite state machines). It explains the behavior of these circuits and develops practical design techniques for both manual and automated design.

Asynchronous sequential circuits are discussed in Chapter 9. While this treatment is not exhaustive, it provides a good indication of the main characteristics of such circuits. Even though the asynchronous circuits are not used extensively in practice, they should be studied because they provide an excellent vehicle for gaining a deeper understanding of the operation of digital circuits in general. They illustrate the consequences of propagation delays and race conditions that may be inherent in the structure of a circuit.

Chapter 10 is a discussion of a number of practical issues that arise in the design of real systems. It highlights problems often encountered in practice and indicates how they can be overcome. Examples of larger circuits illustrate a hierarchical approach in designing digital systems. Complete VHDL code for these circuits is presented.

Chapter 11 introduces the topic of testing. A designer of logic circuits has to be aware of the need to test circuits and should be conversant with at least the most basic aspects of testing.

Chapter 12 presents a complete CAD flow that the designer experiences when designing, implementing, and testing a digital circuit.

Appendix A provides a complete summary of VHDL features. Although use of VHDL is integrated throughout the book, this appendix provides a convenient reference that the reader can consult from time to time when writing VHDL code.

Appendices B, C, and D contain a sequence of tutorials on the Quartus II CAD tools. This material is suitable for self-study; it shows the student in a step-by-step manner how to use the CAD software provided with the book.

Appendix E gives detailed information about the devices used in illustrative examples.

WHAT CAN BE COVERED IN A COURSE

All the material in the book can be covered in 2 one-quarter courses. A good coverage of the most important material can be achieved in a single one-semester, or even a one-quarter, course. This is possible only if the instructor does not spend too much time teaching the intricacies of VHDL and CAD tools. To make this approach possible, we organized the VHDL material in a modular style that is conducive to self-study. Our experience in teaching different classes of students at the University of Toronto shows that the instructor

may spend only 2 to 3 lecture hours on VHDL, concentrating mostly on the specification of sequential circuits. The VHDL examples given in the book are largely self-explanatory, and students can understand them easily. Moreover, the instructor need not teach how to use the CAD tools, because the Quartus II tutorials in Appendices B, C, and D are suitable for self-study.

The book is also suitable for a course in logic design that does not include exposure to VHDL. However, some knowledge of VHDL, even at a rudimentary level, is beneficial to the students, and it is a great preparation for a job as a design engineer.

One-Semester Course

A natural starting point for formal lectures is Chapter 2. The material in Chapter 1 is a general introduction that serves as a motivation for why logic circuits are important and interesting; students can read and understand this material easily.

The following material should be covered in lectures:

- Chapter 2—all sections.
- Chapter 3—sections 3.1 to 3.7. Also, it is useful to cover sections 3.8 and 3.9 if the students have some basic knowledge of electrical circuits.
- Chapter 4—sections 4.1 to 4.7 and section 4.12.
- Chapter 5—sections 5.1 to 5.5.
- Chapter 6—all sections.
- Chapter 7—all sections.
- Chapter 8—sections 8.1 to 8.9.

If time permits, it would also be very useful to cover sections 9.1 to 9.3 and section 9.6 in Chapter 9, as well as one or two examples in Chapter 10.

One-Quarter Course

In a one-quarter course the following material can be covered:

- Chapter 2—all sections.
- Chapter 3—sections 3.1 to 3.3.
- Chapter 4—sections 4.1 to 4.5 and section 4.12.
- Chapter 5—sections 5.1 to 5.3 and section 5.5.
- Chapter 6—all sections.
- Chapter 7—sections 7.1 to 7.10 and section 7.13.
- Chapter 8—Sections 8.1 to 8.5.

A MORE TRADITIONAL APPROACH

The material in Chapters 2 and 4 introduces Boolean algebra, combinational logic circuits, and basic minimization techniques. Chapter 2 provides initial exposure to these topics using

PREFACE

only AND, OR, NOT, NAND, and NOR gates. Then Chapter 3 discusses the implementation technology details, before proceeding with the synthesis techniques and other types of gates in Chapter 4. The material in Chapter 4 is appreciated better if students understand the technological reasons for the existence of NAND, NOR, and XOR gates, and the various programmable logic devices.

An instructor who favors a more traditional approach may cover Chapters 2 and 4 in succession. To understand the use of NAND, NOR, and XOR gates, it is necessary only that the instructor provide a functional definition of these gates.

VHDL

VHDL is a complex language, which some instructors feel is too hard for beginning students to grasp. We fully appreciate this issue and have attempted to solve it. It is not necessary to introduce the entire VHDL language. In the book we present the important VHDL constructs that are useful for the design and synthesis of logic circuits. Many other language constructs, such as those that have meaning only when using the language for simulation purposes, are omitted. The VHDL material is introduced gradually, with more advanced features being presented only at points where their use can be demonstrated in the design of relevant circuits.

The book includes more than 150 examples of VHDL code. These examples illustrate how VHDL is used to describe a wide range of logic circuits, from those that contain only a few gates to those that represent digital systems such as a simple processor.

SOLVED PROBLEMS

The chapters include examples of solved problems. They show how typical homework problems may be solved.

HOMEWORK PROBLEMS

More than 400 homework problems are provided in the book. Answers to selected problems are given at the back of the book. Solutions to all problems are available to instructors in the *Solutions Manual* that accompanies the book.

LABORATORY

The book can be used for a course that does not include laboratory exercises, in which case students can get useful practical experience by simulating the operation of their designed circuits by using the CAD tools provided with the book. If there is an accompanying laboratory, then a number of design examples in the book are suitable for laboratory experiments. Additional experiments are available on the authors' website.

ACKNOWLEDGMENTS

We wish to express our thanks to the people who have helped during the preparation of the book. Kelly Chan helped with the technical preparation of the manuscript. Dan Vranesic produced a substantial amount of artwork. He and Deshanand Singh also helped with the preparation of the solutions manual. Tom Czajkowski helped in checking the answers to some problems. The reviewers, William Barnes, New Jersey Institute of Technology; Thomas Bradicich, North Carolina State University; James Clark, McGill University; Stephen DeWeerth, Georgia Institute of Technology; Clay Gloster, Jr., North Carolina State University (Raleigh); Carl Hamacher, Queen's University; Vincent Heuring, University of Colorado; Yu Hen Hu, University of Wisconsin; Wei-Ming Lin, University of Texas (Austin); Wayne Loucks, University of Waterloo; Chris Myers, University of Utah; Vojin Oklobdzija, University of California (Davis); James Palmer, Rochester Institute of Technology; Gandhi Puvvada, University of Southern California; Teodoro Robles, Milwaukee School of Engineering; Tatyana Roziner, Boston University; Rob Rutenbar, Carnegie Mellon University; Eric Schwartz, University of Florida; Wen-Tsong Shiue, Oregon State University; Charles Silio, Jr., University of Maryland; Scott Smith, University of Missouri (Rolla); Arun Somani, Iowa State University; Bernard Svihel, University of Texas (Arlington); and Zeljko Zilic, McGill University provided constructive criticism and made numerous suggestions for improvements.

We are grateful to the Altera Corporation for providing the Quartus II system, especially to Chris Balough, Misha Burich, Joe Hanson, Mike Phipps, and Tim Southgate. The support of McGraw-Hill people has been exemplary. We truly appreciate the help of Dawn Bercier, Melinda Bilecki, Kay Brimeyer, Michaela Graham, Betsy Jones, Kara Kudronowicz, Carlise Paulson, Eric Weber, and Michelle Whitaker.

Stephen Brown and Zvonko Vranesic

CONTENTS

Chapter 1

DESIGN CONCEPTS 1

- 1.1 Digital Hardware 2
 - 1.1.1 Standard Chips 4
 - 1.1.2 Programmable Logic Devices 4
 - 1.1.3 Custom-Designed Chips 5
- 1.2 The Design Process 6
- 1.3 Design of Digital Hardware 8
 - 1.3.1 Basic Design Loop 8
 - 1.3.2 Structure of a Computer 9
 - 1.3.3 Design of a Digital Hardware Unit 12
- 1.4 Logic Circuit Design in This Book 16
- 1.5 Theory and Practice 16
 - References 17

Chapter 2

INTRODUCTION TO LOGIC CIRCUITS 19

- 2.1 Variables and Functions 20
- 2.2 Inversion 23
- 2.3 Truth Tables 24
- 2.4 Logic Gates and Networks 25
 - 2.4.1 Analysis of a Logic Network 27
- 2.5 Boolean Algebra 29
 - 2.5.1 The Venn Diagram 33
 - 2.5.2 Notation and Terminology 35
 - 2.5.3 Precedence of Operations 37
- 2.6 Synthesis Using AND, OR, and NOT Gates 37
 - 2.6.1 Sum-of-Products and Product-of-Sums Forms 39
- 2.7 NAND and NOR Logic Networks 45
- 2.8 Design Examples 50
 - 2.8.1 Three-Way Light Control 50
 - 2.8.2 Multiplexer Circuit 51
- 2.9 Introduction to CAD Tools 54
 - 2.9.1 Design Entry 54
 - 2.9.2 Synthesis 56
 - 2.9.3 Functional Simulation 57

- 2.9.4 Physical Design 57
- 2.9.5 Timing Simulation 57
- 2.9.6 Chip Configuration 58

- 2.10 Introduction to VHDL 58
 - 2.10.1 Representation of Digital Signals in VHDL 60
 - 2.10.2 Writing Simple VHDL Code 60
 - 2.10.3 How Not to Write VHDL Code 62
- 2.11 Concluding Remarks 63
- 2.12 Examples of Solved Problems 64
 - Problems 67
 - References 72

Chapter 3

IMPLEMENTATION TECHNOLOGY 73

- 3.1 Transistor Switches 75
- 3.2 NMOS Logic Gates 78
- 3.3 CMOS Logic Gates 81
 - 3.3.1 Speed of Logic Gate Circuits 87
- 3.4 Negative Logic System 87
- 3.5 Standard Chips 91
 - 3.5.1 7400-Series Standard Chips 91
- 3.6 Programmable Logic Devices 94
 - 3.6.1 Programmable Logic Array (PLA) 94
 - 3.6.2 Programmable Array Logic (PAL) 97
 - 3.6.3 Programming of PLAs and PALs 99
 - 3.6.4 Complex Programmable Logic Devices (CPLDs) 101
 - 3.6.5 Field-Programmable Gate Arrays 105
 - 3.6.6 Using CAD Tools to Implement Circuits in CPLDs and FPGAs 110
 - 3.6.7 Application of CPLDs and FPGAs 110
- 3.7 Custom Chips, Standard Cells, and Gate Arrays 110
- 3.8 Practical Aspects 114
 - 3.8.1 MOSFET Fabrication and Behavior 114
 - 3.8.2 MOSFET On-Resistance 117
 - 3.8.3 Voltage Levels in Logic Gates 118
 - 3.8.4 Noise Margin 119
 - 3.8.5 Dynamic Operation of Logic Gates 121

- 3.8.6 Power Dissipation in Logic Gates 124
- 3.8.7 Passing 1s and 0s Through Transistor Switches 126
- 3.8.8 Fan-in and Fan-out in Logic Gates 128
- 3.9 Transmission Gates 134
 - 3.9.1 Exclusive-OR Gates 135
 - 3.9.2 Multiplexer Circuit 136
- 3.10 Implementation Details for SPLDs, CPLDs, and FPGAs 136
 - 3.10.1 Implementation in FPGAs 142
- 3.11 Concluding Remarks 145
- 3.12 Examples of Solved Problems 145
 - Problems 153
 - References 162

Chapter 4

OPTIMIZED IMPLEMENTATION OF LOGIC FUNCTIONS 163

- 4.1 Karnaugh Map 164
- 4.2 Strategy for Minimization 172
 - 4.2.1 Terminology 173
 - 4.2.2 Minimization Procedure 175
- 4.3 Minimization of Product-of-Sums Forms 178
- 4.4 Incompletely Specified Functions 180
- 4.5 Multiple-Output Circuits 182
- 4.6 Multilevel Synthesis 185
 - 4.6.1 Factoring 186
 - 4.6.2 Functional Decomposition 190
 - 4.6.3 Multilevel NAND and NOR Circuits 195
- 4.7 Analysis of Multilevel Circuits 196
- 4.8 Cubical Representation 203
 - 4.8.1 Cubes and Hypercubes 203
- 4.9 A Tabular Method for Minimization 207
 - 4.9.1 Generation of Prime Implicants 208
 - 4.9.2 Determination of a Minimum Cover 209
 - 4.9.3 Summary of the Tabular Method 215
- 4.10 A Cubical Technique for Minimization 216
 - 4.10.1 Determination of Essential Prime Implicants 218
 - 4.10.2 Complete Procedure for Finding a Minimal Cover 220
- 4.11 Practical Considerations 223
- 4.12 Examples of Circuits Synthesized from VHDL Code 224

- 4.13 Concluding Remarks 228
- 4.14 Examples of Solved Problems 229
 - Problems 237
 - References 242

Chapter 5

NUMBER REPRESENTATION AND ARITHMETIC CIRCUITS 245

- 5.1 Positional Number Representation 246
 - 5.1.1 Unsigned Integers 246
 - 5.1.2 Conversion between Decimal and Binary Systems 247
 - 5.1.3 Octal and Hexadecimal Representations 248
- 5.2 Addition of Unsigned Numbers 250
 - 5.2.1 Decomposed Full-Adder 254
 - 5.2.2 Ripple-Carry Adder 255
 - 5.2.3 Design Example 256
- 5.3 Signed Numbers 256
 - 5.3.1 Negative Numbers 256
 - 5.3.2 Addition and Subtraction 260
 - 5.3.3 Adder and Subtractor Unit 264
 - 5.3.4 Radix-Complement Schemes 265
 - 5.3.5 Arithmetic Overflow 269
 - 5.3.6 Performance Issues 270
- 5.4 Fast Adders 271
 - 5.4.1 Carry-Lookahead Adder 271
- 5.5 Design of Arithmetic Circuits Using CAD Tools 278
 - 5.5.1 Design of Arithmetic Circuits Using Schematic Capture 278
 - 5.5.2 Design of Arithmetic Circuits Using VHDL 281
 - 5.5.3 Representation of Numbers in VHDL Code 284
 - 5.5.4 Arithmetic Assignment Statements
- 5.6 Multiplication 289
 - 5.6.1 Array Multiplier for Unsigned Numbers 291
 - 5.6.2 Multiplication of Signed Numbers
- 5.7 Other Number Representations 293
 - 5.7.1 Fixed-Point Numbers 293
 - 5.7.2 Floating-Point Numbers 295
 - 5.7.3 Binary-Coded Decimal Representation 297

- 5.8 ASCII Character Code 301
- 5.9 Examples of Solved Problems 304
 - Problems 310
 - References 314

- Chapter 6**
- COMBINATIONAL-CIRCUIT-BUILDING BLOCKS 315**
- 6.1 Multiplexers 316
 - 6.1.1 Synthesis of Logic Functions Using Multiplexers 321
 - 6.1.2 Multiplexer Synthesis Using Shannon's Expansion 324
- 6.2 Decoders 329
 - 6.2.1 Demultiplexers 333
- 6.3 Encoders 335
 - 6.3.1 Binary Encoders 335
 - 6.3.2 Priority Encoders 336
- 6.4 Code Converters 337
- 6.5 Arithmetic Comparison Circuits 338
- 6.6 VHDL for Combinational Circuits 339
 - 6.6.1 Assignment Statements 339
 - 6.6.2 Selected Signal Assignment 340
 - 6.6.2 Selected Signal Assignment 340
 - 6.6.3 Conditional Signal Assignment 344
 - 6.6.4 Generate Statements 348
 - 6.6.5 Concurrent and Sequential Assignment Statements 350
 - 6.6.6 Process Statement 350
 - 6.6.7 Case Statement 356
 - 6.6.8 VHDL Operators 359
- 6.7 Concluding Remarks 363
- 6.8 Examples of Solved Problems 364
 - Problems 372
 - References 377

- Chapter 7**
- FLIP-FLOPS, REGISTERS, COUNTERS, AND A SIMPLE PROCESSOR 379**
- 7.1 Basic Latch 381
- 7.2 Gated SR Latch 383
 - 7.2.1 Gated SR Latch with NAND Gates 385
- 7.3 Gated D Latch 386
 - 7.3.1 Effects of Propagation Delays 388
- 7.4 Master-Slave and Edge-Triggered D Flip-Flops 389
 - 7.4.1 Master-Slave D Flip-Flop 389
 - 7.4.2 Edge-Triggered D Flip-Flop 389
 - 7.4.3 D Flip-Flops with Clear and Preset 393
- 7.5 T Flip-Flop 394
 - 7.5.1 Configurable Flip-Flops 397
- 7.6 JK Flip-Flop 397
- 7.7 Summary of Terminology 398
- 7.8 Registers 399
 - 7.8.1 Shift Register 399
 - 7.8.2 Parallel-Access Shift Register 400
- 7.9 Counters 400
 - 7.9.1 Asynchronous Counters 401
 - 7.9.2 Synchronous Counters 404
 - 7.9.3 Counters with Parallel Load 408
- 7.10 Reset Synchronization 408
- 7.11 Other Types of Counters 412
 - 7.11.1 BCD Counter 412
 - 7.11.2 Ring Counter 413
 - 7.11.3 Johnson Counter 415
 - 7.11.4 Remarks on Counter Design 415
- 7.12 Using Storage Elements with CAD Tools 416
 - 7.12.1 Including Storage Elements in Schematics 416
 - 7.12.2 Using VHDL Constructs for Storage Elements 417
- 7.13 Using Registers and Counters with CAD Tools 423
 - 7.13.1 Including Registers and Counters in Schematics 423
 - 7.13.2 Registers and Counters in VHDL Code 426
 - 7.13.3 Using VHDL Sequential Statements for Registers and Counters 427
- 7.14 Design Examples 435
 - 7.14.1 Bus Structure 435
 - 7.14.2 Simple Processor 449
 - 7.14.3 Reaction Timer 460
 - 7.14.4 Register Transfer Level (RTL) Code 466
- 7.15 Concluding Remarks 466
- 7.16 Examples of Solved Problems 467
 - Problems 471
 - References 477

Chapter 8 SYNCHRONOUS SEQUENTIAL CIRCUITS 479

- 8.1 Basic Design Steps 481
 - 8.1.1 State Diagram 481
 - 8.1.2 State Table 483
 - 8.1.3 State Assignment 483
 - 8.1.4 Choice of Flip-Flops and Derivation of Next-State and Output Expressions 485
 - 8.1.5 Timing Diagram 486
 - 8.1.6 Summary of Design Steps 488
- 8.2 State-Assignment Problem 491
 - 8.2.1 One-Hot Encoding 494
- 8.3 Mealy State Model 496
- 8.4 Design of Finite State Machines Using CAD Tools 501
 - 8.4.1 VHDL Code for Moore-Type FSMs 502
 - 8.4.2 Synthesis of VHDL Code 504
 - 8.4.3 Simulating and Testing the Circuit 506
 - 8.4.4 An Alternative Style of VHDL Code 507
 - 8.4.5 Summary of Design Steps When Using CAD Tools 507
 - 8.4.6 Specifying the State Assignment in VHDL Code 509
 - 8.4.7 Specification of Mealy FSMs Using VHDL 511
- 8.5 Serial Adder Example 513
 - 8.5.1 Mealy-Type FSM for Serial Adder 514
 - 8.5.2 Moore-Type FSM for Serial Adder 516
 - 8.5.3 VHDL Code for the Serial Adder 518
- 8.6 State Minimization 522
 - 8.6.1 Partitioning Minimization Procedure 524
 - 8.6.2 Incompletely Specified FSMs 531
- 8.7 Design of a Counter Using the Sequential Circuit Approach 533
 - 8.7.1 State Diagram and State Table for a Modulo-8 Counter 533
 - 8.7.2 State Assignment 534
 - 8.7.3 Implementation Using D-Type Flip-Flops 535
 - 8.7.4 Implementation Using JK-Type Flip-Flops 536
 - 8.7.5 Example—A Different Counter 541
- 8.8 FSM as an Arbiter Circuit 543
 - 8.8.1 Implementation of the Arbiter Circuit 547

- 8.8.2 Minimizing the Output Delays for an FSM 550
- 8.8.3 Summary 551
- 8.9 Analysis of Synchronous Sequential Circuits 551
- 8.10 Algorithmic State Machine (ASM) Charts 555
- 8.11 Formal Model for Sequential Circuits 559
- 8.12 Concluding Remarks 560
- 8.13 Examples of Solved Problems 561
 - Problems 570
 - References 574

Chapter 9 ASYNCHRONOUS SEQUENTIAL CIRCUITS 577

- 9.1 Asynchronous Behavior 578
- 9.2 Analysis of Asynchronous Circuits 582
- 9.3 Synthesis of Asynchronous Circuits 590
- 9.4 State Reduction 603
- 9.5 State Assignment 618
 - 9.5.1 Transition Diagram 621
 - 9.5.2 Exploiting Unspecified Next-State Entries 624
 - 9.5.3 State Assignment Using Additional State Variables 628
 - 9.5.4 One-Hot State Assignment 633
- 9.6 Hazards 634
 - 9.6.1 Static Hazards 635
 - 9.6.2 Dynamic Hazards 639
 - 9.6.3 Significance of Hazards 640
- 9.7 A Complete Design Example 642
 - 9.7.1 The Vending-Machine Controller 642
- 9.8 Concluding Remarks 647
- 9.9 Examples of Solved Problems 649
 - Problems 657
 - References 661

Chapter 10 DIGITAL SYSTEM DESIGN 663

- 10.1 Building Block Circuits 664
 - 10.1.1 Flip-Flops and Registers with Enable Inputs 664

- 10.1.2 Shift Registers with Enable Inputs 666
- 10.1.3 Static Random Access Memory (SRAM) 668
- 10.1.4 SRAM Blocks in PLDs 673
- 10.2 Design Examples 673
 - 10.2.1 A Bit-Counting Circuit 673
 - 10.2.2 ASM Chart Implied Timing Information 675
 - 10.2.3 Shift-and-Add Multiplier 677
 - 10.2.4 Divider 686
 - 10.2.5 Arithmetic Mean 696
 - 10.2.6 Sort Operation 702
- 10.3 Clock Synchronization 713
 - 10.3.1 Clock Skew 713
 - 10.3.2 Flip-Flop Timing Parameters 714
 - 10.3.3 Asynchronous Inputs to Flip-Flops 717
 - 10.3.4 Switch Debouncing 718
- 10.4 Concluding Remarks 718
 - Problems 720
 - References 724

Chapter 11

TESTING OF LOGIC CIRCUITS 725

- 11.1 Fault Model 726
 - 11.1.1 Stuck-at Model 726
 - 11.1.2 Single and Multiple Faults 727
 - 11.1.3 CMOS Circuits 727
- 11.2 Complexity of a Test Set 727
- 11.3 Path Sensitizing 729
 - 11.3.1 Detection of a Specific Fault 731
- 11.4 Circuits with Tree Structure 733
- 11.5 Random Tests 734
- 11.6 Testing of Sequential Circuits 737
 - 11.6.1 Design for Testability 737
- 11.7 Built-in Self-Test 741
 - 11.7.1 Built-in Logic Block Observer 745
 - 11.7.2 Signature Analysis 747
 - 11.7.3 Boundary Scan 748
- 11.8 Printed Circuit Boards 748
 - 11.8.1 Testing of PCBs 750
 - 11.8.2 Instrumentation 751
- 11.9 Concluding Remarks 752
 - Problems 752
 - References 755

Chapter 12

COMPUTER AIDED DESIGN TOOLS 757

- 12.1 Synthesis 758
 - 12.1.1 Netlist Generation 758
 - 12.1.2 Gate Optimization 758
 - 12.1.3 Technology Mapping 760
- 12.2 Physical Design 764
 - 12.2.1 Placement 767
 - 12.2.2 Routing 768
 - 12.2.3 Static Timing Analysis 769
- 12.3 Concluding Remarks 771
 - References 771

Appendix A

VHDL REFERENCE 773

- A.1 Documentation in VHDL Code 774
- A.2 Data Objects 774
 - A.2.1 Data Object Names 774
 - A.2.2 Data Object Values and Numbers 774
 - A.2.3 SIGNAL Data Objects 775
 - A.2.4 BIT and BIT_VECTOR Types 775
 - A.2.5 STD_LOGIC and STD_LOGIC_VECTOR Types 776
 - A.2.6 STD_ULOGIC Type 776
 - A.2.7 SIGNED and UNSIGNED Types 777
 - A.2.8 INTEGER Type 778
 - A.2.9 BOOLEAN Type 778
 - A.2.10 ENUMERATION Type 778
 - A.2.11 CONSTANT Data Objects 779
 - A.2.12 VARIABLE Data Objects 779
 - A.2.13 Type Conversion 779
 - A.2.14 Arrays 780
- A.3 Operators 781
- A.4 VHDL Design Entity 781
 - A.4.1 ENTITY Declaration 782
 - A.4.2 Architecture 782
- A.5 Package 784
- A.6 Using Subcircuits 785
 - A.6.1 Declaring a COMPONENT in a Package 787
- A.7 Concurrent Assignment Statements 788
 - A.7.1 Simple Signal Assignment 789
 - A.7.2 Assigning Signal Values Using OTHERS 790

- A.7.3 Selected Signal Assignment 791
- A.7.4 Conditional Signal Assignment 792
- A.7.5 GENERATE Statement 793
- A.8 Defining an Entity with GENERICS 793
- A.9 Sequential Assignment Statements 794
 - A.9.1 PROCESS Statement 794
 - A.9.2 IF Statement 796
 - A.9.3 CASE Statement 796
 - A.9.4 Loop Statements 797
 - A.9.5 Using a Process for a Combinational Circuit 797
 - A.9.6 Statement Ordering 799
 - A.9.7 Using a VARIABLE in a PROCESS 800
- A.10 Sequential Circuits 805
 - A.10.1 A Gated D Latch 805
 - A.10.2 D Flip-Flop 806
 - A.10.3 Using a WAIT UNTIL Statement 807
 - A.10.4 A Flip-Flop with Asynchronous Reset 808
 - A.10.5 Synchronous Reset 808
 - A.10.6 Registers 808
 - A.10.7 Shift Registers 811
 - A.10.8 Counters 813
 - A.10.9 Using Subcircuits with GENERIC Parameters 813
 - A.10.10 A Moore-Type Finite State Machine 816
 - A.10.11 A Mealy-Type Finite State Machine 818
- A.11 Common Errors in VHDL Code 821
- A.12 Concluding Remarks 824
 - References 825

Appendix B

TUTORIAL 1—USING QUARTUS II CAD SOFTWARE 827

- B.1 Introduction 827
 - B.1.1 Getting Started 828
- B.2 Starting a New Project 830
- B.3 Design Entry Using Schematic Capture 832
 - B.3.1 Using the Block Editor 832
 - B.3.2 Synthesizing a Circuit from the Schematic 840
 - B.3.3 Simulating the Designed Circuit 842
- B.4 Design Entry Using VHDL 846
 - B.4.1 Create Another Project 848
 - B.4.2 Using the Text Editor 848
 - B.4.3 Synthesizing a Circuit from the VHDL Code 850
 - B.4.4 Performing Functional Simulation 850

- B.4.5 Using Quartus II to Debug VHDL Code 850
- B.5 Mixing Design-Entry Methods 851
 - B.5.1 Using Schematic Entry at the Top Level 851
 - B.5.2 Using VHDL at the Top Level 854
- B.6 Quartus II Windows 856
- B.7 Concluding Remarks 858

Appendix C

TUTORIAL 2—IMPLEMENTING CIRCUITS IN ALTERA DEVICES 859

- C.1 Implementing a Circuit in a MAX 7000 CPLD 859
 - C.1.1 Selecting a Chip 860
 - C.1.2 Compiling the Project 861
 - C.1.3 Performing Timing Simulation 862
 - C.1.4 Using the Floorplan Editor 863
- C.2 Implementing a Circuit in a Cyclone FPGA 864
- C.3 Implementing an Adder using Quartus II 866
 - C.3.1 The Ripple-Carry Adder Code 867
 - C.3.2 Simulating the Circuit 868
 - C.3.3 Timing Simulation 871
 - C.3.4 Implementation in a CPLD Chip 874
- C.4 Using an LPM Module 876
- C.5 Design of a Finite State Machine 881
 - C.5.1 Implementation in a CPLD 882
 - C.5.2 Implementation in an FPGA 886
- C.6 Concluding Remarks 887

Appendix D

TUTORIAL 3—PHYSICAL IMPLEMENTATION IN A PLD 889

- D.1 Making Pin Assignments 889
 - D.1.1 Examining Pin Assignments with the Floorplan Editor 892
 - D.1.2 Recompiling the Project with Pin Assignments 892
 - D.1.3 Changing Pin Assignments by using the Floorplan Editor 894
- D.2 Downloading a Circuit into a Device 895
- D.3 Concluding Remarks 897

Appendix E**COMMERCIAL DEVICES 899**

- E.1 Simple PLDs 899
 - E.1.1 The 22V10 PAL Device 899
- E.2 Complex PLDs 901
 - E.2.1 Altera MAX 7000 902
- E.3 Field-Programmable Gate Arrays 904
 - E.3.1 Altera FLEX 10K 904
 - E.3.2 Xilinx XC4000 907
 - E.3.3 Altera APEX 20K 909
 - E.3.4 Altera Stratix 909

- E.3.5 Altera Cyclone 911
- E.3.6 Altera Stratix II 911
- E.3.7 Xilinx Virtex 912
- E.3.8 Xilinx Virtex-II and Virtex-II Pro 912
- E.3.9 Xilinx Spartan-3 913
- E.4 Transistor-Transistor Logic 914
 - E.4.1 TTL Circuit Families 914
- References 916

ANSWERS 917**INDEX 933**

chapter

1

DESIGN CONCEPTS

CHAPTER OBJECTIVES

In this chapter you will be introduced to:

- Digital hardware components
- An overview of integrated circuit technology
- The design process for digital hardware

This book is about logic circuits—the circuits from which computers are built. Proper understanding of logic circuits is vital for today's electrical and computer engineers. These circuits are the key ingredient of computers and are also used in many other applications. They are found in commonly used products, such as digital watches, various household appliances, CD players, and electronic games, as well as in large systems, such as the equipment for telephone and television networks.

The material in this book will introduce the reader to the many issues involved in the design of logic circuits. It explains the key ideas with simple examples and shows how complex circuits can be derived from elementary ones. We cover the classical theory used in the design of logic circuits in great depth because it provides the reader with an intuitive understanding of the nature of such circuits. But throughout the book we also illustrate the modern way of designing logic circuits, using sophisticated *computer aided design (CAD)* software tools. The CAD methodology adopted in the book is based on the industry-standard design language called VHDL. Design with VHDL is first introduced in Chapter 2, and usage of VHDL and CAD tools is an integral part of each chapter in the book.

Logic circuits are implemented electronically, using transistors on an integrated circuit chip. With modern technology it is possible to fabricate chips that contain tens of millions of transistors, as in the case of computer processors. The basic building blocks for such circuits are easy to understand, but there is nothing simple about a circuit that contains tens of millions of transistors. The complexity that comes with the large size of logic circuits can be handled successfully only by using highly organized design techniques. We introduce these techniques in this chapter, but first we briefly describe the hardware technology used to build logic circuits.

1.1 DIGITAL HARDWARE

Logic circuits are used to build computer hardware, as well as many other types of products. All such products are broadly classified as *digital hardware*. The reason that the name *digital* is used will become clear later in the book—it derives from the way in which information is represented in computers, as electronic signals that correspond to digits of information.

The technology used to build digital hardware has evolved dramatically over the past four decades. Until the 1960s logic circuits were constructed with bulky components, such as transistors and resistors that came as individual parts. The advent of integrated circuits made it possible to place a number of transistors, and thus an entire circuit, on a single chip. In the beginning these circuits had only a few transistors, but as the technology improved they became larger. Integrated circuit chips are manufactured on a silicon wafer, such as the one shown in Figure 1.1. The wafer is cut to produce the individual chips, which are then placed inside a special type of chip package. By 1970 it was possible to implement all circuitry needed to realize a microprocessor on a single chip. Although early microprocessors had modest computing capability by today's standards, they opened the door for the information processing revolution by providing the means for implementation of affordable personal computers. About 30 years ago Gordon Moore, chairman of Intel Corporation, observed that integrated circuit technology was progressing at an astounding rate, doubling the number of transistors that could be placed on a chip every 1.5 to 2 years. This phenomenon, informally known as *Moore's law*, continues to the present day. Thus in the early 1990s microprocessors could be manufactured with a few million transistors, and




Figure 1.1 A silicon wafer (courtesy of Altera Corp.).

by the late 1990s it became possible to fabricate chips that contain more than 10 million transistors. Presently chips can have a few hundreds of millions of transistors.

Moore's law is expected to continue to hold true for at least the next decade. A consortium of integrated circuit manufacturers called the Semiconductor Industry Association (SIA) produces an estimate of how the technology is expected to evolve. Known as the *SIA Roadmap* [1], this estimate predicts the minimum size of a transistor that can be fabricated on an integrated circuit chip. The size of a transistor is measured by a parameter called its *gate length*, which we will discuss in Chapter 3. A sample of the SIA Roadmap is given in Table 1.1. In 2004 the minimum possible gate length that can be reliably manufactured is 90 nm. The first row of the table indicates that the minimum gate length is expected to

Table 1.1 A sample of the SIA Roadmap.

	Year					
	1999	2001	2004	2006	2009	2012
Transistor gate length	0.14 μm	0.12 μm	90 nm	65 nm	50 nm	35 nm
Transistors per cm^2	14 million	16 million	24 million	40 million	64 million	100 million
Chip size	800 mm^2	850 mm^2	900 mm^2	1000 mm^2	1100 mm^2	1300 mm^2

reduce steadily to about 35 nm by the year 2012. The size of a transistor determines how many transistors can be placed in a given amount of chip area, with the current maximum being about 30 million transistors per cm^2 . This number is expected to grow to 100 million transistors by the year 2012. The largest chip size is expected to be about 1300 mm^2 at that time; thus chips with up to 1.3 billion transistors will be possible! There is no doubt that this technology will have a huge impact on all aspects of people's lives.

The designer of digital hardware may be faced with designing logic circuits that can be implemented on a single chip or, more likely, designing circuits that involve a number of chips placed on a *printed circuit board (PCB)*. Frequently, some of the logic circuits can be realized in existing chips that are readily available. This situation simplifies the design task and shortens the time needed to develop the final product. Before we discuss the design process in more detail, we should introduce the different types of integrated circuit chips that may be used.

There exists a large variety of chips that implement various functions that are useful in the design of digital hardware. The chips range from very simple ones with low functionality to extremely complex chips. For example, a digital hardware product may require a microprocessor to perform some arithmetic operations, memory chips to provide storage capability, and interface chips that allow easy connection to input and output devices. Such chips are available from various vendors.

For most digital hardware products, it is also necessary to design and build some logic circuits from scratch. For implementing these circuits, three main types of chips may be used: standard chips, programmable logic devices, and custom chips. These are discussed next.

1.1.1 STANDARD CHIPS

Numerous chips are available that realize some commonly used logic circuits. We will refer to these as *standard chips*, because they usually conform to an agreed-upon standard in terms of functionality and physical configuration. Each standard chip contains a small amount of circuitry (usually involving fewer than 100 transistors) and performs a simple function. To build a logic circuit, the designer chooses the chips that perform whatever functions are needed and then defines how these chips should be interconnected to realize a larger logic circuit.

Standard chips were popular for building logic circuits until the early 1980s. However, as integrated circuit technology improved, it became inefficient to use valuable space on PCBs for chips with low functionality. Another drawback of standard chips is that the functionality of each chip is fixed and cannot be changed.

1.1.2 PROGRAMMABLE LOGIC DEVICES

In contrast to standard chips that have fixed functionality, it is possible to construct chips that contain circuitry that can be configured by the user to implement a wide range of different logic circuits. These chips have a very general structure and include a collection of *programmable switches* that allow the internal circuitry in the chip to be configured




Figure 1.2 A field-programmable gate array chip (courtesy of Altera Corp.).

in many different ways. The designer can implement whatever functions are needed for a particular application by choosing an appropriate configuration of the switches. The switches are programmed by the end user, rather than when the chip is manufactured. Such chips are known as *programmable logic devices (PLDs)*. We will introduce them in Chapter 3.

Most types of PLDs can be programmed multiple times. This capability is advantageous because a designer who is developing a prototype of a product can program a PLD to perform some function, but later, when the prototype hardware is being tested, can make corrections by reprogramming the PLD. Reprogramming might be necessary, for instance, if a designed function is not quite as intended or if new functions are needed that were not contemplated in the original design.

PLDs are available in a wide range of sizes. They can be used to realize much larger logic circuits than a typical standard chip can realize. Because of their size and the fact that they can be tailored to meet the requirements of a specific application, PLDs are widely used today. One of the most sophisticated types of PLD is known as a *field-programmable gate array (FPGA)*. FPGAs that contain more than 500 million transistors are now available [2, 3]. A photograph of an FPGA chip is shown in Figure 1.2. The chip consists of a large number of small logic circuit elements, which can be connected together using the programmable switches. The logic circuit elements are arranged in a regular two-dimensional structure.

1.1.3 CUSTOM-DESIGNED CHIPS

PLDs are available as off-the-shelf components that can be purchased from different suppliers. Because they are programmable, they can be used to implement most logic circuits found in digital hardware. However, PLDs also have a drawback in that the programmable switches consume valuable chip area and limit the speed of operation of implemented circuits. Thus in some cases PLDs may not meet the desired performance or cost objectives.

In such situations it is possible to design a chip from scratch; namely, the logic circuitry that must be included on the chip is designed first and then an appropriate technology is chosen to implement the chip. Finally, the chip is manufactured by a company that has the fabrication facilities. This approach is known as *custom* or *semi-custom design*, and such chips are called *custom* or *semi-custom chips*. Such chips are intended for use in specific applications and are sometimes called *application-specific integrated circuits (ASICs)*.

The main advantage of a custom chip is that its design can be optimized for a specific task; hence it usually leads to better performance. It is possible to include a larger amount of logic circuitry in a custom chip than would be possible in other types of chips. The cost of producing such chips is high, but if they are used in a product that is sold in large quantities, then the cost per chip, amortized over the total number of chips fabricated, may be lower than the total cost of off-the-shelf chips that would be needed to implement the same function(s). Moreover, if a single chip can be used instead of multiple chips to achieve the same goal, then a smaller area is needed on a PCB that houses the chips in the final product. This results in a further reduction in cost.

A disadvantage of the custom-design approach is that manufacturing a custom chip often takes a considerable amount of time, on the order of months. In contrast, if a PLD can be used instead, then the chips are programmed by the end user and no manufacturing delays are involved.

1.2 THE DESIGN PROCESS

The availability of computer-based tools has greatly influenced the design process in a wide variety of design environments. For example, designing an automobile is similar in the general approach to designing a furnace or a computer. Certain steps in the development cycle must be performed if the final product is to meet the specified objectives. We will start by introducing a typical development cycle in the most general terms. Then we will focus on the particular aspects that pertain to the design of logic circuits.

The flowchart in Figure 1.3 depicts a typical development process. We assume that the process is to develop a product that meets certain expectations. The most obvious requirements are that the product must function properly, that it must meet an expected level of performance, and that its cost should not exceed a given target.

The process begins with the definition of product specifications. The essential features of the product are identified, and an acceptable method of evaluating the implemented features in the final product is established. The specifications must be tight enough to ensure that the developed product will meet the general expectations, but should not be unnecessarily constraining (that is, the specifications should not prevent design choices that may lead to unforeseen advantages).

From a complete set of specifications, it is necessary to define the general structure of an initial design of the product. This step is difficult to automate. It is usually performed by a human designer because there is no clear-cut strategy for developing a product's overall structure—it requires considerable design experience and intuition.

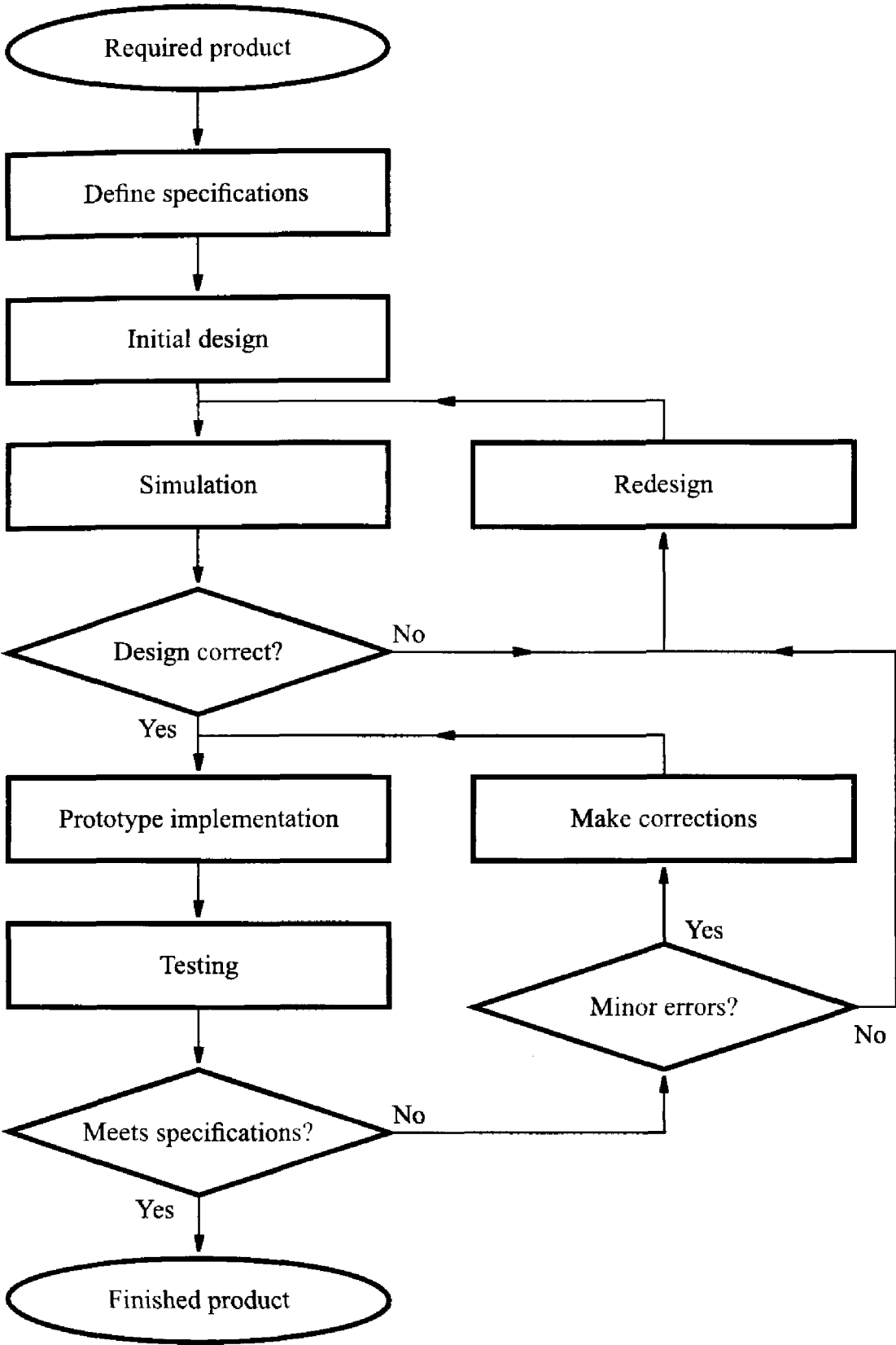


Figure 1.3 The development process.

After the general structure is established, CAD tools are used to work out the details. Many types of CAD tools are available, ranging from those that help with the design of individual parts of the system to those that allow the entire system's structure to be represented in a computer. When the initial design is finished, the results must be verified against the original specifications. Traditionally, before the advent of CAD tools, this step involved constructing a physical model of the designed product, usually including just the key parts. Today it is seldom necessary to build a physical model. CAD tools enable designers to simulate the behavior of incredibly complex products, and such simulations are used to determine whether the obtained design meets the required specifications. If errors are found, then appropriate changes are made and the verification of the new design is repeated through simulation. Although some design flaws may escape detection via simulation, usually all but the most subtle problems are discovered in this way.

When the simulation indicates that the design is correct, a complete physical prototype of the product is constructed. The prototype is thoroughly tested for conformance with the specifications. Any errors revealed in the testing must be fixed. The errors may be minor, and often they can be eliminated by making small corrections directly on the prototype of the product. In case of large errors, it is necessary to redesign the product and repeat the steps explained above. When the prototype passes all the tests, then the product is deemed to be successfully designed and it can go into production.

1.3 DESIGN OF DIGITAL HARDWARE

Our previous discussion of the development process is relevant in a most general way. The steps outlined in Figure 1.3 are fully applicable in the development of digital hardware. Before we discuss the complete sequence of steps in this development environment, we should emphasize the iterative nature of the design process.

1.3.1 BASIC DESIGN LOOP

Any design process comprises a basic sequence of tasks that are performed in various situations. This sequence is presented in Figure 1.4. Assuming that we have an initial concept about what should be achieved in the design process, the first step is to generate an initial design. This step often requires a lot of manual effort because most designs have some specific goals that can be reached only through the designer's knowledge, skill, and intuition. The next step is the simulation of the design at hand. There exist excellent CAD tools to assist in this step. To carry out the simulation successfully, it is necessary to have adequate input conditions that can be applied to the design that is being simulated and later to the final product that has to be tested. Applying these input conditions, the simulator tries to verify that the designed product will perform as required under the original product specifications. If the simulation reveals some errors, then the design must be changed to overcome the problems. The redesigned version is again simulated to determine whether the errors have disappeared. This loop is repeated until the simulation indicates a successful design. A prudent designer expends considerable effort to remedy errors during simulation

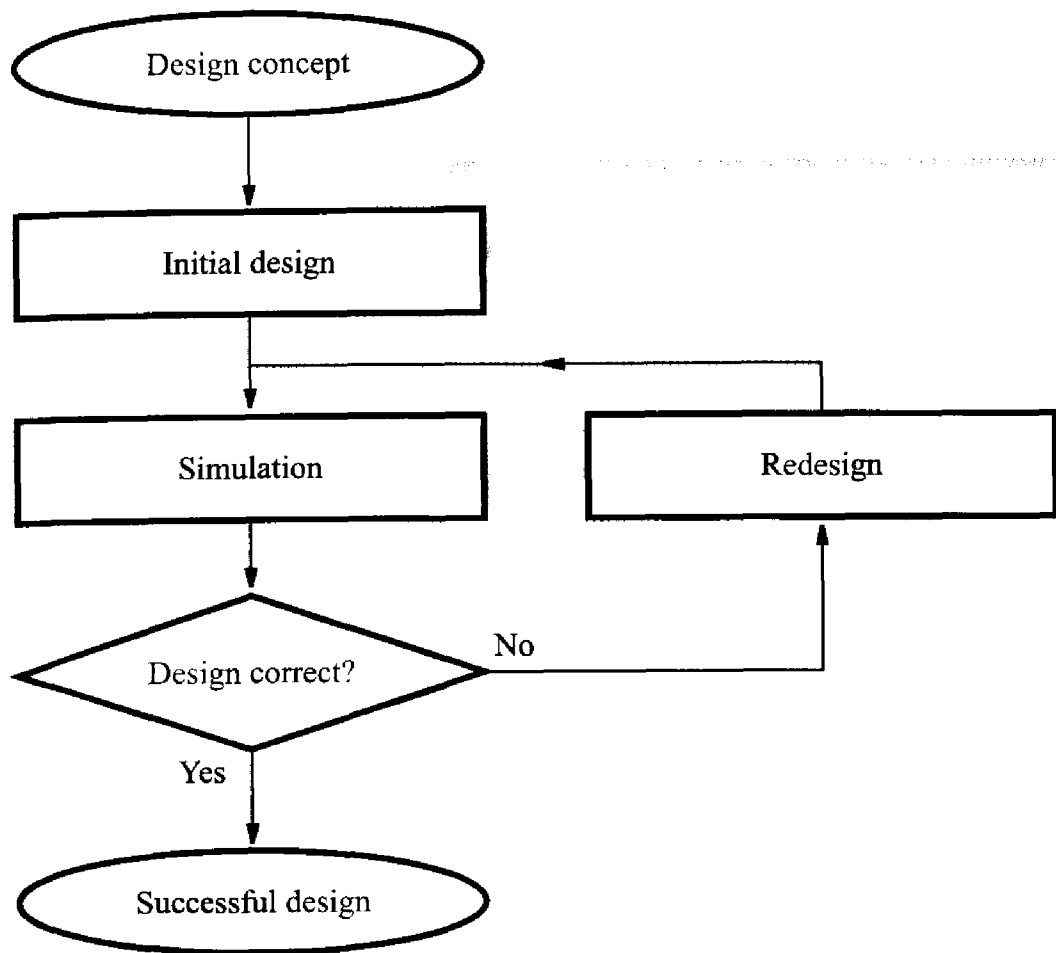


Figure 1.4 The basic design loop.

because errors are typically much harder to fix if they are discovered late in the design process. Even so, some errors may not be detected during simulation, in which case they have to be dealt with in later stages of the development cycle.

1.3.2 STRUCTURE OF A COMPUTER

To understand the role that logic circuits play in digital systems, consider the structure of a typical computer, as illustrated in Figure 1.5a. The computer case houses a number of printed circuit boards (PCBs), a power supply, and (not shown in the figure) storage units, like a hard disk and DVD or CD-ROM drives. Each unit is plugged into a main PCB, called the *motherboard*. As indicated on the bottom of Figure 1.5a, the motherboard holds several integrated circuit chips, and it provides slots for connecting other PCBs, such as audio, video, and network boards.

Figure 1.5b illustrates the structure of an integrated circuit chip. The chip comprises a number of subcircuits, which are interconnected to build the complete circuit. Examples of subcircuits are those that perform arithmetic operations, store data, or control the flow of data. Each of these subcircuits is a logic circuit. As shown in the middle of the figure, a

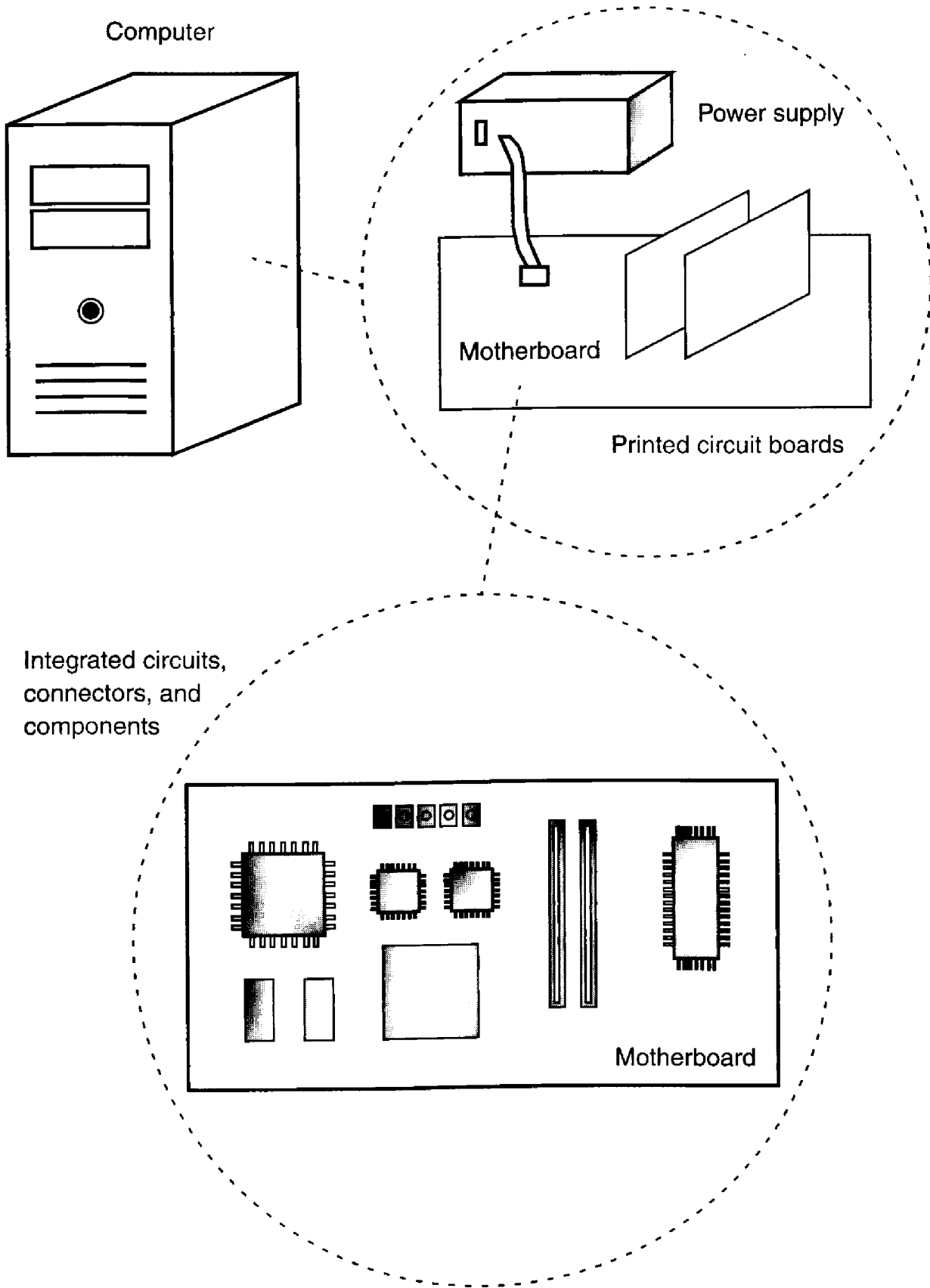


Figure 1.5 A digital hardware system (Part a).

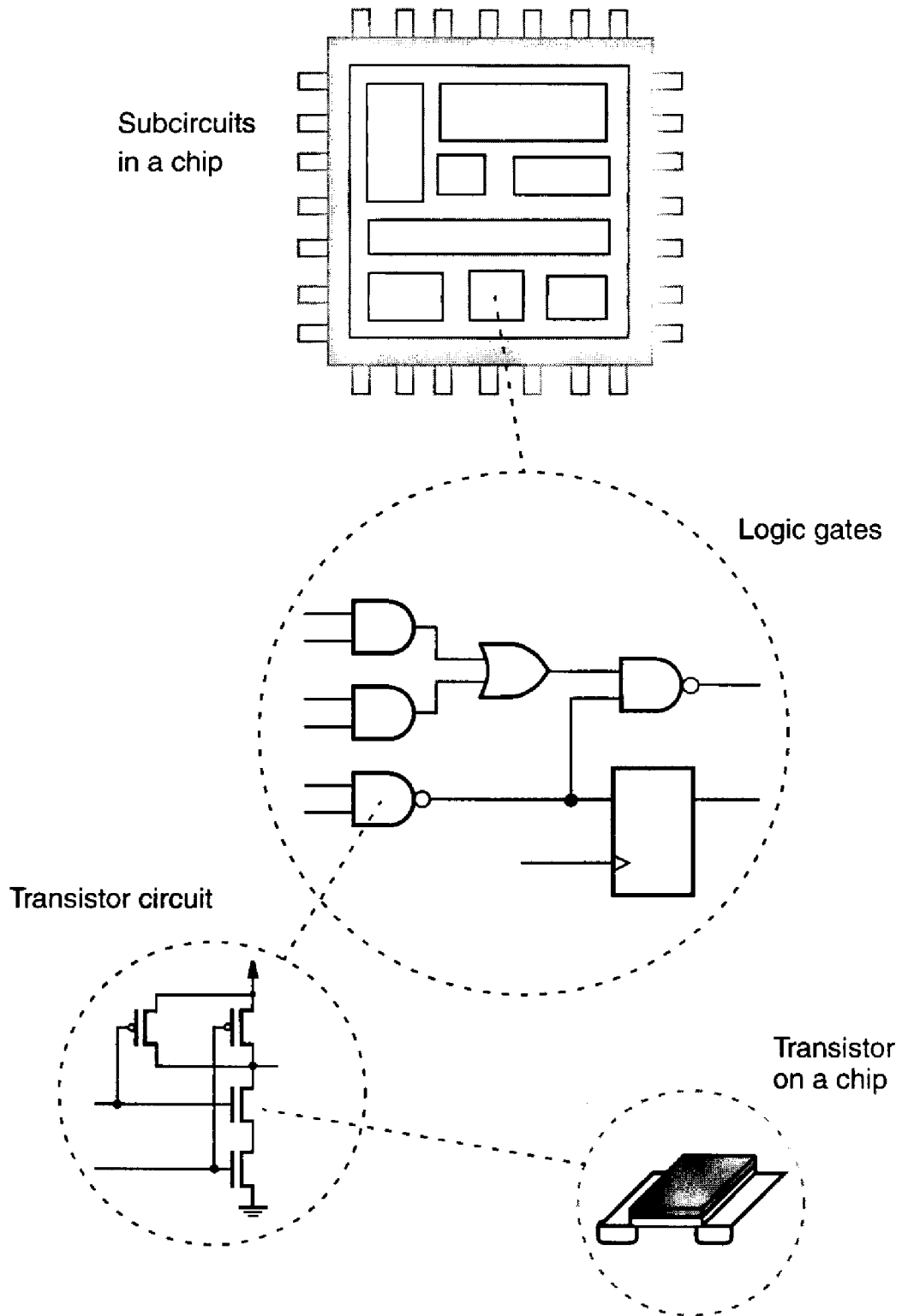


Figure 1.5 A digital hardware system (Part *b*).

logic circuit comprises a network of connected *logic gates*. Each logic gate performs a very simple function, and more complex operations are realized by connecting gates together. Logic gates are built with transistors, which in turn are implemented by fabricating various layers of material on a silicon chip.

This book is primarily concerned with the center portion of Figure 1.5*b*—the design of logic circuits. We explain how to design circuits that perform important functions, such as adding, subtracting, or multiplying numbers, counting, storing data, and controlling the processing of information. We show how the behavior of such circuits is specified, how the circuits are designed for minimum cost or maximum speed of operation, and how the circuits can be tested to ensure correct operation. We also briefly explain how transistors operate, and how they are built on silicon chips.

1.3.3 DESIGN OF A DIGITAL HARDWARE UNIT

As shown in Figure 1.5, digital hardware products usually involve one or more PCBs that contain many chips and other components. Development of such products starts with the definition of the overall structure. Then the required integrated circuit chips are selected, and the PCBs that house and connect the chips together are designed. If the selected chips include PLDs or custom chips, then these chips must be designed before the PCB-level design is undertaken. Since the complexity of circuits implemented on individual chips and on the circuit boards is usually very high, it is essential to make use of good CAD tools.

A photograph of a PCB is given in Figure 1.6. The PCB is a part of a large computer system designed at the University of Toronto. This computer, called *NUMachine* [4,5], is a *multiprocessor*, which means that it contains many processors that can be used together to work on a particular task. The PCB in the figure contains one processor chip and various memory and support chips. Complex logic circuits are needed to form the interface between the processor and the rest of the system. A number of PLDs are used to implement these logic circuits.

To illustrate the complete development cycle in more detail, we will consider the steps needed to produce a digital hardware unit that can be implemented on a PCB. This hardware could be viewed as a very complex logic circuit that performs the functions defined by the product specifications. Figure 1.7 shows the design flow, assuming that we have a design concept that defines the expected behavior and characteristics of this large circuit.

An orderly way of dealing with the complexity involved is to partition the circuit into smaller blocks and then to design each block separately. Breaking down a large task into more manageable smaller parts is known as the divide-and-conquer approach. The design of each block follows the procedure outlined in Figure 1.4. The circuitry in each block is defined, and the chips needed to implement it are chosen. The operation of this circuitry is simulated, and any necessary corrections are made.

Having successfully designed all blocks, the interconnection between the blocks must be defined, which effectively combines these blocks into a single large circuit. Now it is necessary to simulate this complete circuit and correct any errors. Depending on the errors encountered, it may be necessary to go back to the previous steps as indicated by the paths A, B, and C in the flowchart. Some errors may be caused by incorrect connections between the blocks, in which case these connections have to be redefined, following path C.




Figure 1.6 A printed circuit board.

Some blocks may not have been designed correctly, in which case path B is followed and the erroneous blocks are redesigned. Another possibility is that the very first step of partitioning the overall large circuit into blocks was not done well, in which case path A is followed. This may happen, for example, if none of the blocks implement some functionality needed in the complete circuit.

Successful completion of functional simulation suggests that the designed circuit will correctly perform all of its functions. The next step is to decide how to realize this circuit on a PCB. The physical location of each chip on the board has to be determined, and the wiring pattern needed to make connections between the chips has to be defined. We refer to this step as the *physical design of the PCB*. CAD tools are relied on heavily to perform this task automatically.

Once the placement of chips and the actual wire connections on the PCB have been established, it is desirable to see how this physical layout will affect the performance of the circuit on the finished board. It is reasonable to assume that if the previous functional

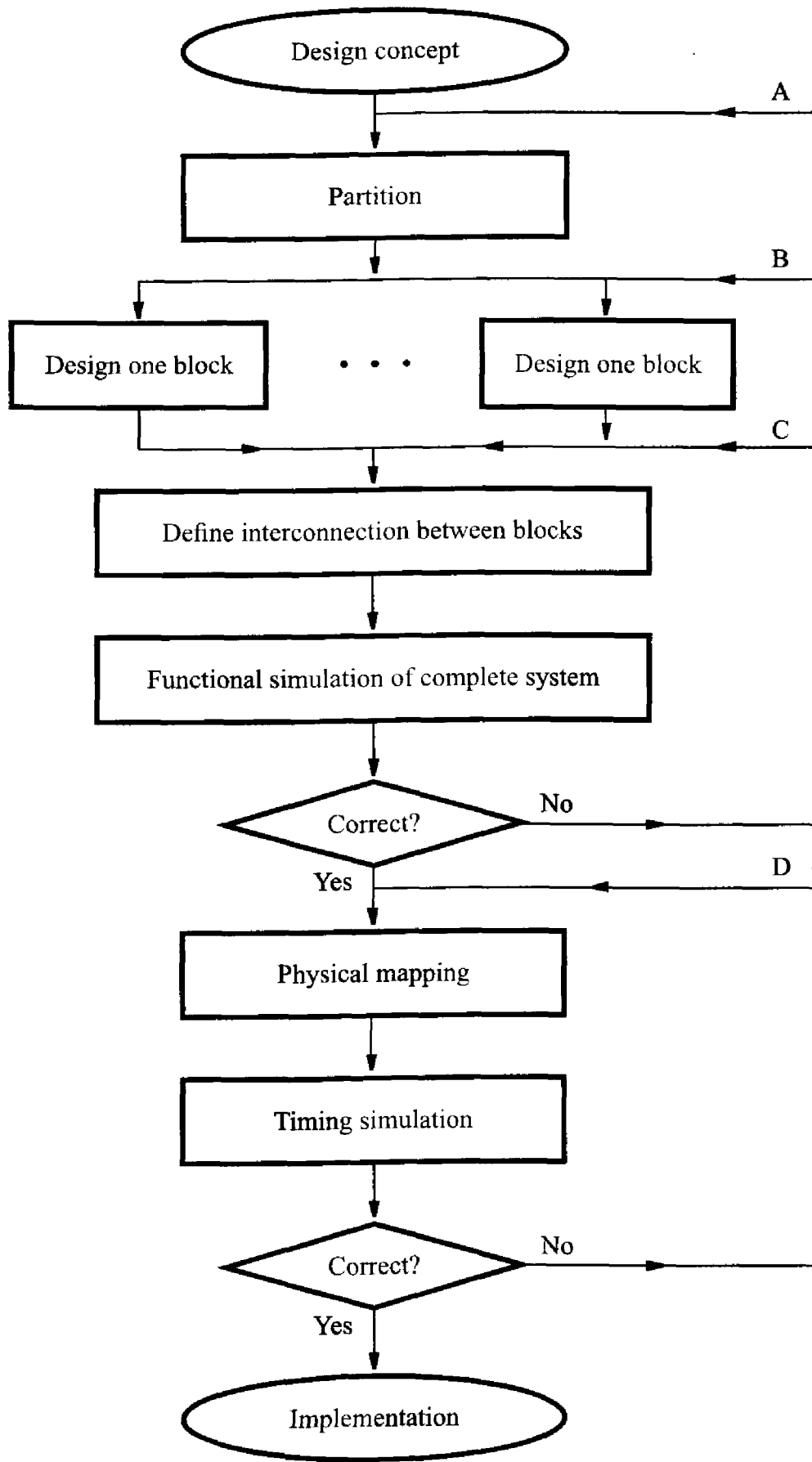


Figure 1.7 Design flow for logic circuits.

simulation indicated that all functions will be performed correctly, then the CAD tools used in the physical design step will ensure that the required functional behavior will not be corrupted by placing the chips on the board and wiring them together to realize the final circuit. However, even though the functional behavior may be correct, the realized circuit may operate more slowly than desired and thus lead to inadequate performance. This condition occurs because the physical wiring on the PCB involves metal traces that present resistance and capacitance to electrical signals and thus may have a significant impact on the speed of operation. To distinguish between simulation that considers only the functionality of the circuit and simulation that also considers timing behavior, it is customary to use the terms *functional simulation* and *timing simulation*. A timing simulation may reveal potential performance problems, which can then be corrected by using the CAD tools to make changes in the physical design of the PCB.

Having completed the design process, the designed circuit is ready for physical implementation. The steps needed to implement a prototype board are indicated in Figure 1.8. A first version of the board is built and tested. Most minor errors that are detected can usually be corrected by making changes directly on the prototype board. This may involve changes in wiring or perhaps reprogramming some PLDs. Larger problems require a more substantial redesign. Depending on the nature of the problem, the designer may have to return to any of the points A, B, C, or D in the design process of Figure 1.7.

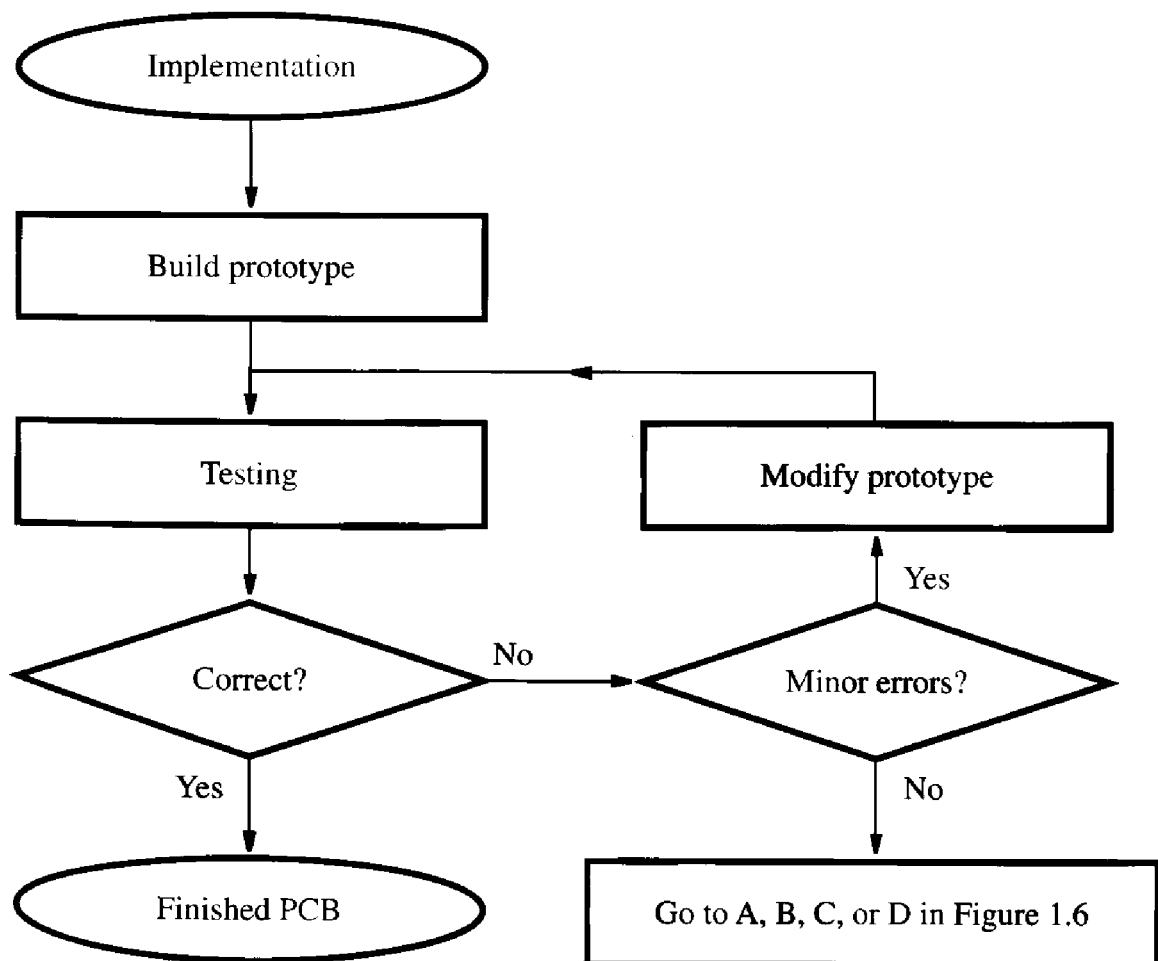


Figure 1.8 Completion of PCB development.

We have described the development process where the final circuit is implemented using many chips on a PCB. The material presented in this book is directly applicable to this type of design problem. However, for practical reasons the design examples that appear in the book are relatively small and can be realized in a single integrated circuit, either a custom-designed chip or a PLD. All the steps in Figure 1.7 are relevant in this case as well, with the understanding that the circuit blocks to be designed are on a smaller scale.

1.4 LOGIC CIRCUIT DESIGN IN THIS BOOK

In this book we use PLDs extensively to illustrate many aspects of logic circuit design. We selected this technology because it is widely used in real digital hardware products and because the chips are user programmable. PLD technology is particularly well suited for educational purposes because many readers have access to facilities for programming PLDs, which enables the reader to actually implement the sample circuits. To illustrate practical design issues, in this book we use two types of PLDs—they are the two types of devices that are widely used in digital hardware products today. One type is known as *complex programmable logic devices* (CPLDs) and the other as *field-programmable gate arrays* (FPGAs). These chips are introduced in Chapter 3.

To gain practical experience and a deeper understanding of logic circuits, we advise the reader to implement the examples in this book using CAD tools. Most of the major vendors of CAD systems provide their tools through university programs for educational use. Some examples are Altera, Cadence, Mentor Graphics, Synopsys, Synplicity, and Xilinx. The CAD systems offered by any of these companies can be used equally well with this book. For those who do not already have access to CAD tools, we include Altera's Quartus II CAD system on a CD-ROM. This state-of-the-art software supports all phases of the design cycle and is powerful and easy to use. The software is easily installed on a personal computer, and we provide a sequence of complete step-by-step tutorials in Appendices B, C, and D to illustrate the use of CAD tools in concert with the book.

For educational purposes, some PLD manufacturers provide laboratory development printed circuit boards that include one or more PLD chips and an interface to a personal computer. Once a logic circuit has been designed using the CAD tools, the circuit can be *downloaded* into a PLD on the board. Inputs can then be applied to the PLD by way of simple switches, and the generated outputs can be examined. These laboratory boards are described on the World Wide Web pages of the PLD suppliers.

1.5 THEORY AND PRACTICE

Modern design of logic circuits depends heavily on CAD tools, but the discipline of logic design evolved long before CAD tools were invented. This chronology is quite obvious because the very first computers were built with logic circuits, and there certainly were no computers available on which to design them!

Numerous manual design techniques have been developed to deal with logic circuits. Boolean algebra, which we will introduce in Chapter 2, was adopted as a mathematical means for representing such circuits. An enormous amount of “theory” was developed, showing how certain design issues may be treated. To be successful, a designer had to apply this knowledge in practice.

CAD tools not only made it possible to design incredibly complex circuits but also made the design work much simpler in general. They perform many tasks automatically, which may suggest that today’s designer need not understand the theoretical concepts used in the tasks performed by CAD tools. An obvious question would then be, Why should one study the theory that is no longer needed for manual design? Why not simply learn how to use the CAD tools?

There are three big reasons for learning the relevant theory. First, although the CAD tools perform the automatic tasks of optimizing a logic circuit to meet particular design objectives, the designer has to give the original description of the logic circuit. If the designer specifies a circuit that has inherently bad properties, then the final circuit will also be of poor quality. Second, the algebraic rules and theorems for design and manipulation of logic circuits are directly implemented in today’s CAD tools. It is not possible for a user of the tools to understand what the tools do without grasping the underlying theory. Third, CAD tools offer many optional processing steps that a user can invoke when working on a design. The designer chooses which options to use by examining the resulting circuit produced by the CAD tools and deciding whether it meets the required objectives. The only way that the designer can know whether or not to apply a particular option in a given situation is to know what the CAD tools will do if that option is invoked—again, this implies that the designer must be familiar with the underlying theory. We discuss the classical logic circuit theory extensively in this book, because it is not possible to become an effective logic circuit designer without understanding the fundamental concepts.

On a final note, there is another good reason to learn some logic circuit theory even if it were not required for CAD tools. Simply put, it is interesting and intellectually challenging. In the modern world filled with sophisticated automatic machinery, it is tempting to rely on tools as a substitute for thinking. However, in logic circuit design, as in any type of design process, computer-based tools are not a substitute for human intuition and innovation. Computer-based tools can produce good digital hardware designs only when employed by a designer who thoroughly understands the nature of logic circuits.

REFERENCES

1. Semiconductor Industry Association, “National Technology Roadmap for Semiconductors,” <http://www.semichips.org/>
2. Altera Corporation, “Stratix II Field Programmable Gate Arrays,” <http://www.altera.com>
3. Xilinx Corporation, “Virtex-II Pro Field Programmable Gate Arrays,” <http://www.xilinx.com>

4. S. Brown, N. Manjikian, Z. Vranesic, S. Caranci, A. Grbic, R. Grindley, M. Gusat, K. Loveless, Z. Zilic, and S. Srbljic, "Experience in Designing a Large-Scale Multiprocessor Using Field-Programmable Devices and Advanced CAD Tools," 33rd IEEE Design Automation Conference, Las Vegas, June 1996.
5. A. Grbic, S. Brown, S. Caranci, R. Grindley, M. Gusat, G. Lemieux, K. Loveless, N. Manjikian, S. Srbljic, M. Stumm, Z. Vranesic, and Z. Zilic, "The Design and Implementation of the NUMAchine Multiprocessor," IEEE Design Automation Conference, San Francisco, June 1998.

chapter

2

INTRODUCTION TO LOGIC CIRCUITS

CHAPTER OBJECTIVES

In this chapter you will be introduced to:

- Logic functions and circuits
- Boolean algebra for dealing with logic functions
- Logic gates and synthesis of simple circuits
- CAD tools and the VHDL hardware description language

The study of logic circuits is motivated mostly by their use in digital computers. But such circuits also form the foundation of many other digital systems where performing arithmetic operations on numbers is not of primary interest. For example, in a myriad of control applications actions are determined by some simple logical operations on input information, without having to do extensive numerical computations.

Logic circuits perform operations on digital signals and are usually implemented as electronic circuits where the signal values are restricted to a few discrete values. In *binary* logic circuits there are only two values, 0 and 1. In *decimal* logic circuits there are 10 values, from 0 to 9. Since each signal value is naturally represented by a digit, such logic circuits are referred to as *digital circuits*. In contrast, there exist *analog circuits* where the signals may take on a continuous range of values between some minimum and maximum levels.

In this book we deal with binary circuits, which have the dominant role in digital technology. We hope to provide the reader with an understanding of how these circuits work, how are they represented in mathematical notation, and how are they designed using modern design automation techniques. We begin by introducing some basic concepts pertinent to the binary logic circuits.

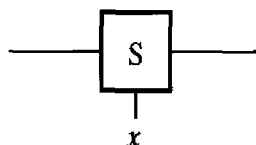
2.1 VARIABLES AND FUNCTIONS

The dominance of binary circuits in digital systems is a consequence of their simplicity, which results from constraining the signals to assume only two possible values. The simplest binary element is a switch that has two states. If a given switch is controlled by an input variable x , then we will say that the switch is open if $x = 0$ and closed if $x = 1$, as illustrated in Figure 2.1a. We will use the graphical symbol in Figure 2.1b to represent such switches in the diagrams that follow. Note that the control input x is shown explicitly in the symbol. In Chapter 3 we will explain how such switches are implemented with transistors.

Consider a simple application of a switch, where the switch turns a small lightbulb on or off. This action is accomplished with the circuit in Figure 2.2a. A battery provides the power source. The lightbulb glows when sufficient current passes through its filament, which is an electrical resistance. The current flows when the switch is closed, that is, when

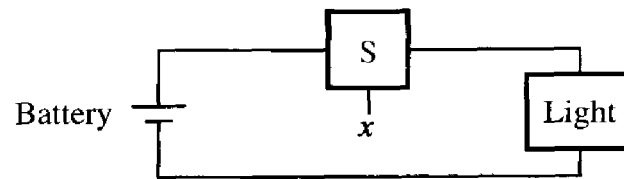


(a) Two states of a switch

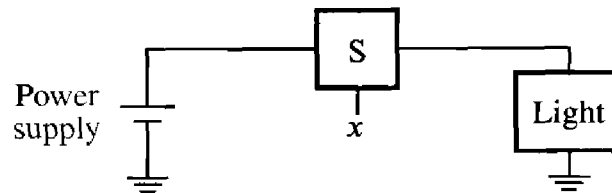


(b) Symbol for a switch

Figure 2.1 A binary switch.



(a) Simple connection to a battery



(b) Using a ground connection as the return path

Figure 2.2 A light controlled by a switch.

$x = 1$. In this example the input that causes changes in the behavior of the circuit is the switch control x . The output is defined as the state (or condition) of the light, which we will denote by the letter L . If the light is on, we will say that $L = 1$. If the light is off, we will say that $L = 0$. Using this convention, we can describe the state of the light as a function of the input variable x . Since $L = 1$ if $x = 1$ and $L = 0$ if $x = 0$, we can say that

$$L(x) = x$$

This simple *logic expression* describes the output as a function of the input. We say that $L(x) = x$ is a *logic function* and that x is an *input variable*.

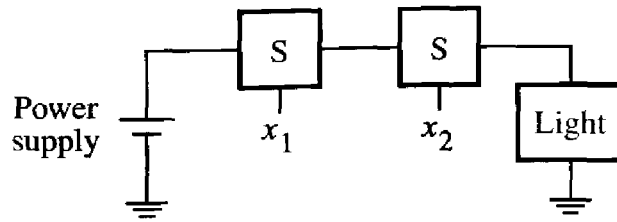
The circuit in Figure 2.2a can be found in an ordinary flashlight, where the switch is a simple mechanical device. In an electronic circuit the switch is implemented as a transistor and the light may be a light-emitting diode (LED). An electronic circuit is powered by a power supply of a certain voltage, perhaps 5 volts. One side of the power supply is connected to ground, as shown in Figure 2.2b. The ground connection may also be used as the return path for the current, to close the loop, which is achieved by connecting one side of the light to ground as indicated in the figure. Of course, the light can also be connected by a wire directly to the grounded side of the power supply, as in Figure 2.2a.

Consider now the possibility of using two switches to control the state of the light. Let x_1 and x_2 be the control inputs for these switches. The switches can be connected either in series or in parallel as shown in Figure 2.3. Using a series connection, the light will be turned on only if both switches are closed. If either switch is open, the light will be off. This behavior can be described by the expression

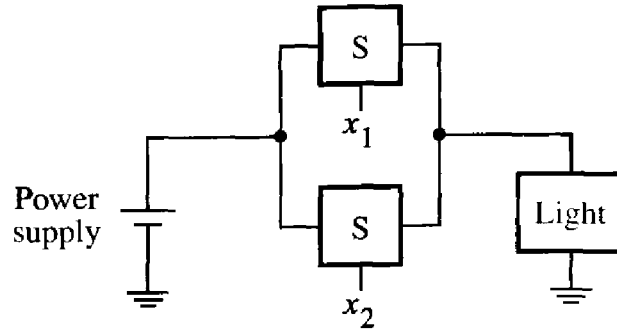
$$L(x_1, x_2) = x_1 \cdot x_2$$

where $L = 1$ if $x_1 = 1$ and $x_2 = 1$,

$L = 0$ otherwise.



(a) The logical AND function (series connection)



(b) The logical OR function (parallel connection)

Figure 2.3 Two basic functions.

The “.” symbol is called the *AND operator*, and the circuit in Figure 2.3a is said to implement a *logical AND function*.

The parallel connection of two switches is given in Figure 2.3b. In this case the light will be on if either x_1 or x_2 switch is closed. The light will also be on if both switches are closed. The light will be off only if both switches are open. This behavior can be stated as

$$L(x_1, x_2) = x_1 + x_2$$

where $L = 1$ if $x_1 = 1$ or $x_2 = 1$ or if $x_1 = x_2 = 1$,

$L = 0$ if $x_1 = x_2 = 0$.

The + symbol is called the *OR operator*, and the circuit in Figure 2.3b is said to implement a *logical OR function*.

In the above expressions for AND and OR, the output $L(x_1, x_2)$ is a logic function with input variables x_1 and x_2 . The AND and OR functions are two of the most important logic functions. Together with some other simple functions, they can be used as building blocks for the implementation of all logic circuits. Figure 2.4 illustrates how three switches can be used to control the light in a more complex way. This series-parallel connection of switches realizes the logic function

$$L(x_1, x_2, x_3) = (x_1 + x_2) \cdot x_3$$

The light is on if $x_3 = 1$ and, at the same time, at least one of the x_1 or x_2 inputs is equal to 1.

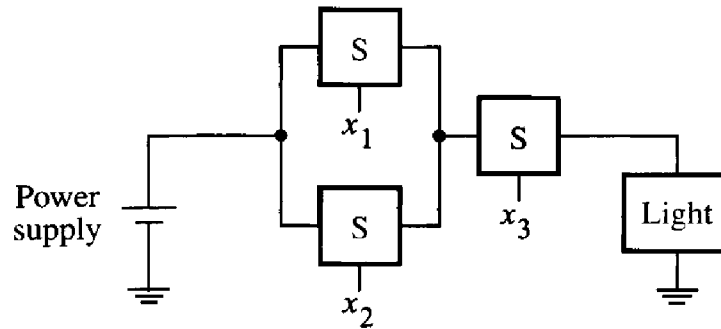


Figure 2.4 A series-parallel connection.

2.2 INVERSION

So far we have assumed that some positive action takes place when a switch is closed, such as turning the light on. It is equally interesting and useful to consider the possibility that a positive action takes place when a switch is opened. Suppose that we connect the light as shown in Figure 2.5. In this case the switch is connected in parallel with the light, rather than in series. Consequently, a closed switch will short-circuit the light and prevent the current from flowing through it. Note that we have included an extra resistor in this circuit to ensure that the closed switch does not short-circuit the power supply. The light will be turned on when the switch is opened. Formally, we express this functional behavior as

$$L(x) = \bar{x}$$

where $L = 1$ if $x = 0$,

$L = 0$ if $x = 1$

The value of this function is the inverse of the value of the input variable. Instead of using the word *inverse*, it is more common to use the term *complement*. Thus we say that $L(x)$ is a complement of x in this example. Another frequently used term for the same operation is the *NOT operation*. There are several commonly used notations for indicating the complementation. In the preceding expression we placed an overbar on top of x . This notation is probably the best from the visual point of view. However, when complements

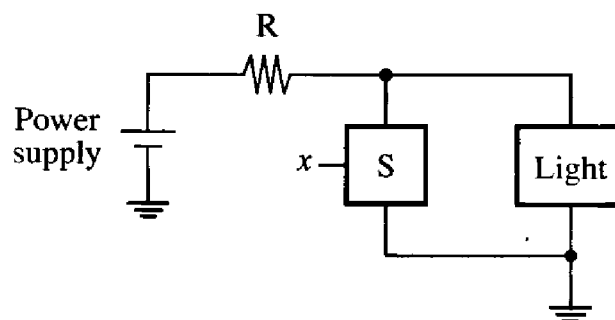


Figure 2.5 An inverting circuit.

are needed in expressions that are typed using a computer keyboard, which is often done when using CAD tools, it is impractical to use overbars. Instead, either an apostrophe is placed after the variable, or the exclamation mark (!) or the tilde character (\sim) or the word NOT is placed in front of the variable to denote the complementation. Thus the following are equivalent:

$$\bar{x} = x' = !x = \sim x = \text{NOT } x$$

The complement operation can be applied to a single variable or to more complex operations. For example, if

$$f(x_1, x_2) = x_1 + x_2$$

then the complement of f is

$$\bar{f}(x_1, x_2) = \overline{x_1 + x_2}$$

This expression yields the logic value 1 only when neither x_1 nor x_2 is equal to 1, that is, when $x_1 = x_2 = 0$. Again, the following notations are equivalent:

$$\overline{x_1 + x_2} = (x_1 + x_2)' = !(x_1 + x_2) = \sim(x_1 + x_2) = \text{NOT } (x_1 + x_2)$$

2.3 TRUTH TABLES

We have introduced the three most basic logic operations—AND, OR, and complement—by relating them to simple circuits built with switches. This approach gives these operations a certain “physical meaning.” The same operations can also be defined in the form of a table, called a *truth table*, as shown in Figure 2.6. The first two columns (to the left of the heavy vertical line) give all four possible combinations of logic values that the variables x_1 and x_2 can have. The next column defines the AND operation for each combination of values of x_1 and x_2 , and the last column defines the OR operation. Because we will frequently need to refer to “combinations of logic values” applied to some variables, we will adopt a shorter term, *valuation*, to denote such a combination of logic values.

x_1	x_2	$x_1 \cdot x_2$	$x_1 + x_2$
0	0	0	0
0	1	0	1
1	0	0	1
1	1	1	1

AND OR

Figure 2.6 A truth table for the AND and OR operations.

x_1	x_2	x_3	$x_1 \cdot x_2 \cdot x_3$	$x_1 + x_2 + x_3$
0	0	0	0	0
0	0	1	0	1
0	1	0	0	1
0	1	1	0	1
1	0	0	0	1
1	0	1	0	1
1	1	0	0	1
1	1	1	1	1

Figure 2.7 Three-input AND and OR operations.

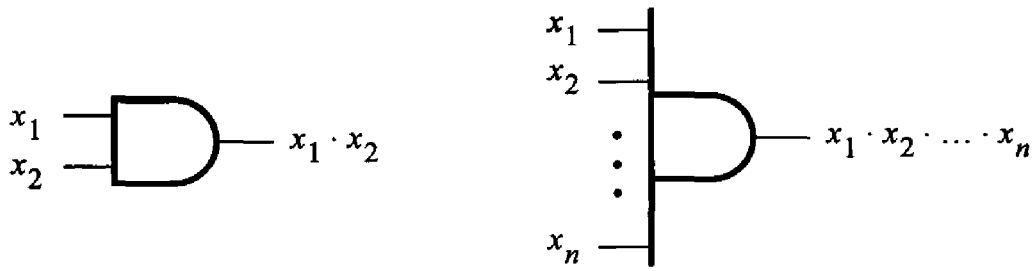
The truth table is a useful aid for depicting information involving logic functions. We will use it in this book to define specific functions and to show the validity of certain functional relations. Small truth tables are easy to deal with. However, they grow exponentially in size with the number of variables. A truth table for three input variables has eight rows because there are eight possible valuations of these variables. Such a table is given in Figure 2.7, which defines three-input AND and OR functions. For four input variables the truth table has 16 rows, and so on. In general, for n input variables the truth table has 2^n rows.

The AND and OR operations can be extended to n variables. An AND function of variables x_1, x_2, \dots, x_n has the value 1 only if all n variables are equal to 1. An OR function of variables x_1, x_2, \dots, x_n has the value 1 if at least one, or more, of the variables is equal to 1.

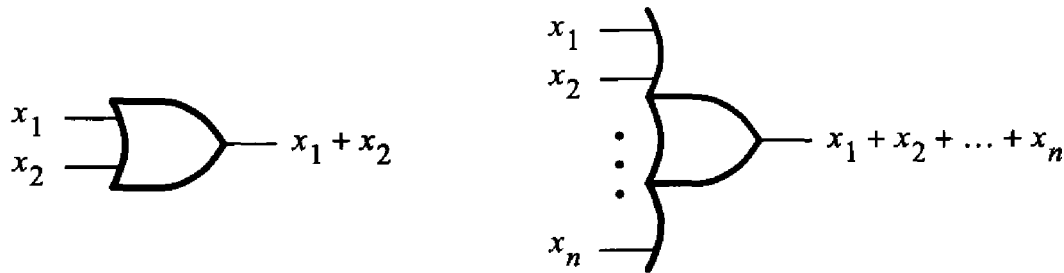
2.4 LOGIC GATES AND NETWORKS

The three basic logic operations introduced in the previous sections can be used to implement logic functions of any complexity. A complex function may require many of these basic operations for its implementation. Each logic operation can be implemented electronically with transistors, resulting in a circuit element called a *logic gate*. A logic gate has one or more inputs and one output that is a function of its inputs. It is often convenient to describe a logic circuit by drawing a circuit diagram, or *schematic*, consisting of graphical symbols representing the logic gates. The graphical symbols for the AND, OR, and NOT gates are shown in Figure 2.8. The figure indicates on the left side how the AND and OR gates are drawn when there are only a few inputs. On the right side it shows how the symbols are augmented to accommodate a greater number of inputs. We will show how logic gates are built using transistors in Chapter 3.

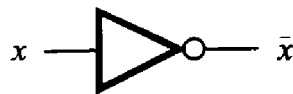
A larger circuit is implemented by a *network* of gates. For example, the logic function from Figure 2.4 can be implemented by the network in Figure 2.9. The complexity of a given network has a direct impact on its cost. Because it is always desirable to reduce



(a) AND gates



(b) OR gates



(c) NOT gate

Figure 2.8 The basic gates.

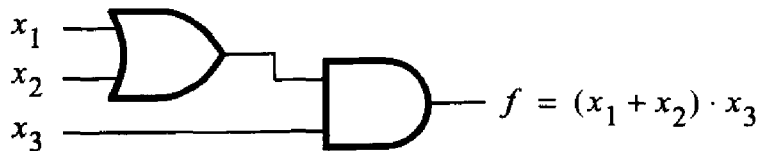


Figure 2.9 The function from Figure 2.4.

the cost of any manufactured product, it is important to find ways for implementing logic circuits as inexpensively as possible. We will see shortly that a given logic function can be implemented with a number of different networks. Some of these networks are simpler than others, hence searching for the solutions that entail minimum cost is prudent.

In technical jargon a network of gates is often called a *logic network* or simply a *logic circuit*. We will use these terms interchangeably.

2.4.1 ANALYSIS OF A LOGIC NETWORK

A designer of digital systems is faced with two basic issues. For an existing logic network, it must be possible to determine the function performed by the network. This task is referred to as the *analysis* process. The reverse task of designing a new network that implements a desired functional behavior is referred to as the *synthesis* process. The analysis process is rather straightforward and much simpler than the synthesis process.

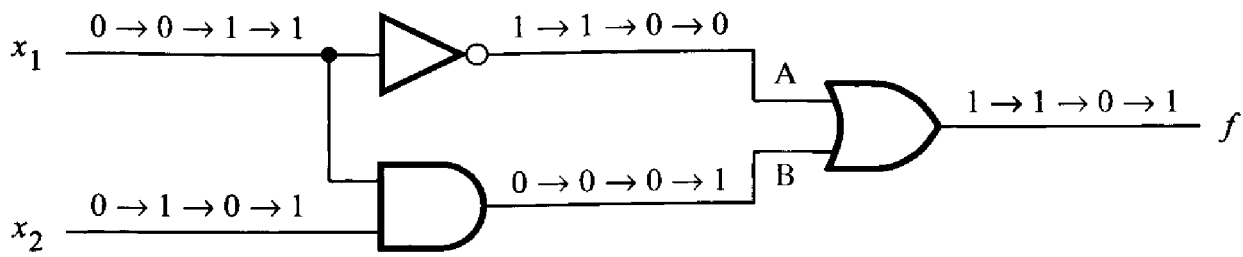
Figure 2.10a shows a simple network consisting of three gates. To determine its functional behavior, we can consider what happens if we apply all possible input signals to it. Suppose that we start by making $x_1 = x_2 = 0$. This forces the output of the NOT gate to be equal to 1 and the output of the AND gate to be 0. Because one of the inputs to the OR gate is 1, the output of this gate will be 1. Therefore, $f = 1$ if $x_1 = x_2 = 0$. If we let $x_1 = 0$ and $x_2 = 1$, then no change in the value of f will take place, because the outputs of the NOT and AND gates will still be 1 and 0, respectively. Next, if we apply $x_1 = 1$ and $x_2 = 0$, then the output of the NOT gate changes to 0 while the output of the AND gate remains at 0. Both inputs to the OR gate are then equal to 0; hence the value of f will be 0. Finally, let $x_1 = x_2 = 1$. Then the output of the AND gate goes to 1, which in turn causes f to be equal to 1. Our verbal explanation can be summarized in the form of the truth table shown in Figure 2.10b.

Timing Diagram

We have determined the behavior of the network in Figure 2.10a by considering the four possible valuations of the inputs x_1 and x_2 . Suppose that the signals that correspond to these valuations are applied to the network in the order of our discussion; that is, $(x_1, x_2) = (0, 0)$ followed by $(0, 1)$, $(1, 0)$, and $(1, 1)$. Then changes in the signals at various points in the network would be as indicated in blue in the figure. The same information can be presented in graphical form, known as a *timing diagram*, as shown in Figure 2.10c. The time runs from left to right, and each input valuation is held for some fixed period. The figure shows the waveforms for the inputs and output of the network, as well as for the internal signals at the points labeled *A* and *B*.

The timing diagram in Figure 2.10c shows that changes in the waveforms at points *A* and *B* and the output f take place instantaneously when the inputs x_1 and x_2 change their values. These idealized waveforms are based on the assumption that logic gates respond to changes on their inputs in zero time. Such timing diagrams are useful for indicating the *functional behavior* of logic circuits. However, practical logic gates are implemented using electronic circuits which need some time to change their states. Thus, there is a delay between a change in input values and a corresponding change in the output value of a gate. In chapters that follow we will use timing diagrams that incorporate such delays.

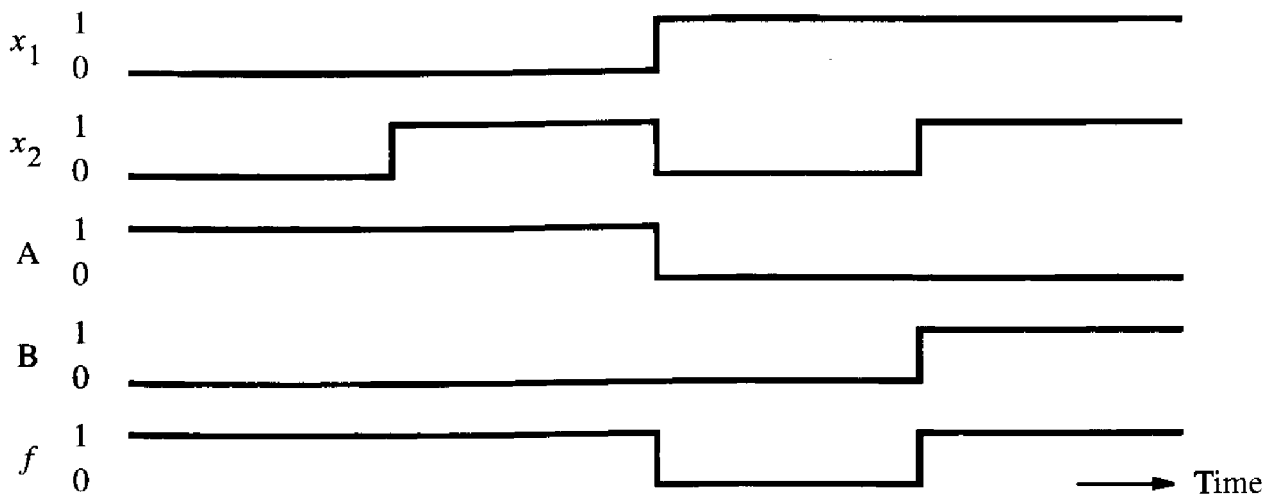
Timing diagrams are used for many purposes. They depict the behavior of a logic circuit in a form that can be observed when the circuit is tested using instruments such as logic analyzers and oscilloscopes. Also, they are often generated by CAD tools to show the designer how a given circuit is expected to behave before it is actually implemented electronically. We will introduce the CAD tools later in this chapter and will make use of them throughout the book.



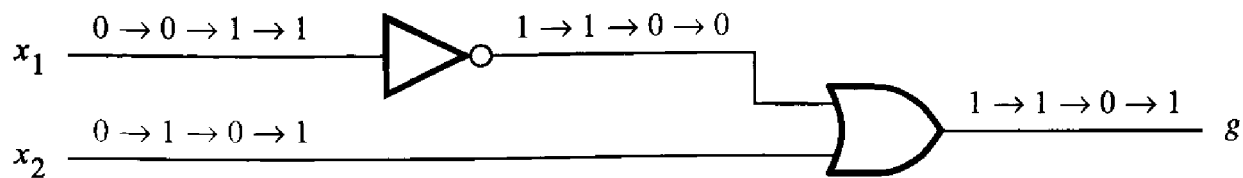
(a) Network that implements $f = \bar{x}_1 + x_1 \cdot x_2$

x_1	x_2	$f(x_1, x_2)$	A	B
0	0	1	1	0
0	1	1	1	0
1	0	0	0	0
1	1	1	0	1

(b) Truth table



(c) Timing diagram



(d) Network that implements $g = \bar{x}_1 + x_2$

Figure 2.10 An example of logic networks.

Functionally Equivalent Networks

Now consider the network in Figure 2.10d. Going through the same analysis procedure, we find that the output g changes in exactly the same way as f does in part (a) of the figure. Therefore, $g(x_1, x_2) = f(x_1, x_2)$, which indicates that the two networks are functionally equivalent; the output behavior of both networks is represented by the truth table in Figure

2.10*b*. Since both networks realize the same function, it makes sense to use the simpler one, which is less costly to implement.

In general, a logic function can be implemented with a variety of different networks, probably having different costs. This raises an important question: How does one find the best implementation for a given function? Many techniques exist for synthesizing logic functions. We will discuss the main approaches in Chapter 4. For now, we should note that some manipulation is needed to transform the more complex network in Figure 2.10*a* into the network in Figure 2.10*d*. Since $f(x_1, x_2) = \bar{x}_1 + x_1 \cdot x_2$ and $g(x_1, x_2) = \bar{x}_1 + x_2$, there must exist some rules that can be used to show the equivalence

$$\bar{x}_1 + x_1 \cdot x_2 = \bar{x}_1 + x_2$$

We have already established this equivalence through detailed analysis of the two circuits and construction of the truth table. But the same outcome can be achieved through algebraic manipulation of logic expressions. In the next section we will discuss a mathematical approach for dealing with logic functions, which provides the basis for modern design techniques.

2.5 BOOLEAN ALGEBRA

In 1849 George Boole published a scheme for the algebraic description of processes involved in logical thought and reasoning [1]. Subsequently, this scheme and its further refinements became known as *Boolean algebra*. It was almost 100 years later that this algebra found application in the engineering sense. In the late 1930s Claude Shannon showed that Boolean algebra provides an effective means of describing circuits built with switches [2]. The algebra can, therefore, be used to describe logic circuits. We will show that this algebra is a powerful tool that can be used for designing and analyzing logic circuits. The reader will come to appreciate that it provides the foundation for much of our modern digital technology.

Axioms of Boolean Algebra

Like any algebra, Boolean algebra is based on a set of rules that are derived from a small number of basic assumptions. These assumptions are called *axioms*. Let us assume that Boolean algebra B involves elements that take on one of two values, 0 and 1. Assume that the following axioms are true:

1*a*. $0 \cdot 0 = 0$

1*b*. $1 + 1 = 1$

2*a*. $1 \cdot 1 = 1$

2*b*. $0 + 0 = 0$

3*a*. $0 \cdot 1 = 1 \cdot 0 = 0$

3*b*. $1 + 0 = 0 + 1 = 1$

4*a*. If $x = 0$, then $\bar{x} = 1$

4*b*. If $x = 1$, then $\bar{x} = 0$

Single-Variable Theorems

From the axioms we can define some rules for dealing with single variables. These rules are often called *theorems*. If x is a variable in B , then the following theorems hold:

$$5a. \quad x \cdot 0 = 0$$

$$5b. \quad x + 1 = 1$$

$$6a. \quad x \cdot 1 = x$$

$$6b. \quad x + 0 = x$$

$$7a. \quad x \cdot x = x$$

$$7b. \quad x + x = x$$

$$8a. \quad x \cdot \bar{x} = 0$$

$$8b. \quad x + \bar{x} = 1$$

$$9. \quad \overline{\bar{x}} = x$$

It is easy to prove the validity of these theorems by perfect induction, that is, by substituting the values $x = 0$ and $x = 1$ into the expressions and using the axioms given above. For example, in theorem 5a, if $x = 0$, then the theorem states that $0 \cdot 0 = 0$, which is true according to axiom 1a. Similarly, if $x = 1$, then theorem 5a states that $1 \cdot 0 = 0$, which is also true according to axiom 3a. The reader should verify that theorems 5a to 9 can be proven in this way.

Duality

Notice that we have listed the axioms and the single-variable theorems in pairs. This is done to reflect the important *principle of duality*. Given a logic expression, its *dual* is obtained by replacing all $+$ operators with \cdot operators, and vice versa, and by replacing all 0s with 1s, and vice versa. The dual of any true statement (axiom or theorem) in Boolean algebra is also a true statement. At this point in the discussion, the reader will not appreciate why duality is a useful concept. However, this concept will become clear later in the chapter, when we will show that duality implies that at least two different ways exist to express every logic function with Boolean algebra. Often, one expression leads to a simpler physical implementation than the other and is thus preferable.

Two- and Three-Variable Properties

To enable us to deal with a number of variables, it is useful to define some two- and three-variable algebraic identities. For each identity, its dual version is also given. These identities are often referred to as *properties*. They are known by the names indicated below. If x , y , and z are the variables in B , then the following properties hold:

$$10a. \quad x \cdot y = y \cdot x \qquad \text{Commutative}$$

$$10b. \quad x + y = y + x$$

$$11a. \quad x \cdot (y \cdot z) = (x \cdot y) \cdot z \qquad \text{Associative}$$

$$11b. \quad x + (y + z) = (x + y) + z$$

$$12a. \quad x \cdot (y + z) = x \cdot y + x \cdot z \qquad \text{Distributive}$$

$$12b. \quad x + y \cdot z = (x + y) \cdot (x + z)$$

$$13a. \quad x + x \cdot y = x \qquad \text{Absorption}$$

x	y	$x \cdot y$	$\overline{x \cdot y}$	\bar{x}	\bar{y}	$\bar{x} + \bar{y}$
0	0	0	1	1	1	1
0	1	0	1	1	0	1
1	0	0	1	0	1	1
1	1	1	0	0	0	0

LHS
RHS

Figure 2.11 Proof of DeMorgan's theorem in 15a.

$$13b. \quad x \cdot (x + y) = x$$

$$14a. \quad x \cdot y + x \cdot \bar{y} = x$$

Combining

$$14b. \quad (x + y) \cdot (x + \bar{y}) = x$$

$$15a. \quad \overline{x \cdot y} = \bar{x} + \bar{y}$$

DeMorgan's theorem

$$15b. \quad \overline{\bar{x} + \bar{y}} = x \cdot y$$

$$16a. \quad x + \bar{x} \cdot y = x + y$$

$$16b. \quad x \cdot (\bar{x} + y) = x \cdot y$$

$$17a. \quad x \cdot y + y \cdot z + \bar{x} \cdot z = x \cdot y + \bar{x} \cdot z$$

Consensus

$$17b. \quad (x + y) \cdot (y + z) \cdot (\bar{x} + z) = (x + y) \cdot (\bar{x} + z)$$

Again, we can prove the validity of these properties either by perfect induction or by performing algebraic manipulation. Figure 2.11 illustrates how perfect induction can be used to prove DeMorgan's theorem, using the format of a truth table. The evaluation of left-hand and right-hand sides of the identity in 15a gives the same result.

We have listed a number of axioms, theorems, and properties. Not all of these are necessary to define Boolean algebra. For example, assuming that the $+$ and \cdot operations are defined, it is sufficient to include theorems 5 and 8 and properties 10 and 12. These are sometimes referred to as Huntington's basic postulates [3]. The other identities can be derived from these postulates.

The preceding axioms, theorems, and properties provide the information necessary for performing algebraic manipulation of more complex expressions.

Let us Let us prove the validity of the logic equation

Exan

$$(x_1 + x_3) \cdot (\bar{x}_1 + \bar{x}_3) = x_1 \cdot \bar{x}_3 + \bar{x}_1 \cdot x_3$$

The left-hand side can be manipulated as follows. Using the distributive property, 12a, gives

$$\text{LHS} = (x_1 + x_3) \cdot \bar{x}_1 + (x_1 + x_3) \cdot \bar{x}_3$$

Applying the distributive property again yields

$$\text{LHS} = x_1 \cdot \bar{x}_1 + x_3 \cdot \bar{x}_1 + x_1 \cdot \bar{x}_3 + x_3 \cdot \bar{x}_3$$

Note that the distributive property allows ANDing the terms in parenthesis in a way analogous to multiplication in ordinary algebra. Next, according to theorem 8a, the terms $x_1 \cdot \bar{x}_1$ and $x_3 \cdot \bar{x}_3$ are both equal to 0. Therefore,

$$\text{LHS} = 0 + x_3 \cdot \bar{x}_1 + x_1 \cdot \bar{x}_3 + 0$$

From 6b it follows that

$$\text{LHS} = x_3 \cdot \bar{x}_1 + x_1 \cdot \bar{x}_3$$

Finally, using the commutative property, 10a and 10b, this becomes

$$\text{LHS} = x_1 \cdot \bar{x}_3 + \bar{x}_1 \cdot x_3$$

which is the same as the right-hand side of the initial equation.

e 2.2 Consider the logic equation

$$x_1 \cdot \bar{x}_3 + \bar{x}_2 \cdot \bar{x}_3 + x_1 \cdot x_3 + \bar{x}_2 \cdot x_3 = \bar{x}_1 \cdot \bar{x}_2 + x_1 \cdot x_2 + x_1 \cdot \bar{x}_2$$

The left-hand side can be manipulated as follows

$$\begin{aligned} \text{LHS} &= x_1 \cdot \bar{x}_3 + x_1 \cdot x_3 + \bar{x}_2 \cdot \bar{x}_3 + \bar{x}_2 \cdot x_3 && \text{using 10b} \\ &= x_1 \cdot (\bar{x}_3 + x_3) + \bar{x}_2 \cdot (\bar{x}_3 + x_3) && \text{using 12a} \\ &= x_1 \cdot 1 + \bar{x}_2 \cdot 1 && \text{using 8b} \\ &= x_1 + \bar{x}_2 && \text{using 6a} \end{aligned}$$

The right-hand side can be manipulated as

$$\begin{aligned} \text{RHS} &= \bar{x}_1 \cdot \bar{x}_2 + x_1 \cdot (x_2 + \bar{x}_2) && \text{using 12a} \\ &= \bar{x}_1 \cdot \bar{x}_2 + x_1 \cdot 1 && \text{using 8b} \\ &= \bar{x}_1 \cdot \bar{x}_2 + x_1 && \text{using 6a} \\ &= x_1 + \bar{x}_1 \cdot \bar{x}_2 && \text{using 10b} \\ &= x_1 + \bar{x}_2 && \text{using 16a} \end{aligned}$$

Being able to manipulate both sides of the initial equation into identical expressions establishes the validity of the equation. Note that the same logic function is represented by either the left- or the right-hand side of the above equation; namely

$$\begin{aligned} f(x_1, x_2, x_3) &= x_1 \cdot \bar{x}_3 + \bar{x}_2 \cdot \bar{x}_3 + x_1 \cdot x_3 + \bar{x}_2 \cdot x_3 \\ &= \bar{x}_1 \cdot \bar{x}_2 + x_1 \cdot x_2 + x_1 \cdot \bar{x}_2 \end{aligned}$$

As a result of manipulation, we have found a much simpler expression

$$f(x_1, x_2, x_3) = x_1 + \bar{x}_2$$

which also represents the same function. This simpler expression would result in a lower-cost logic circuit that could be used to implement the function.

Examples 2.1 and 2.2 illustrate the purpose of the axioms, theorems, and properties as a mechanism for algebraic manipulation. Even these simple examples suggest that it is impractical to deal with highly complex expressions in this way. However, these theorems and properties provide the basis for automating the synthesis of logic functions in CAD tools. To understand what can be achieved using these tools, the designer needs to be aware of the fundamental concepts.

2.5.1 THE VENN DIAGRAM

We have suggested that perfect induction can be used to verify the theorems and properties. This procedure is quite tedious and not very informative from the conceptual point of view. A simple visual aid that can be used for this purpose also exists. It is called the Venn diagram, and the reader is likely to find that it provides for a more intuitive understanding of how two expressions may be equivalent.

The Venn diagram has traditionally been used in mathematics to provide a graphical illustration of various operations and relations in the algebra of sets. A set s is a collection of elements that are said to be the members of s . In the Venn diagram the elements of a set are represented by the area enclosed by a contour such as a square, a circle, or an ellipse. For example, in a universe N of integers from 1 to 10, the set of even numbers is $E = \{2, 4, 6, 8, 10\}$. A contour representing E encloses the even numbers. The odd numbers form the complement of E ; hence the area outside the contour represents $\bar{E} = \{1, 3, 5, 7, 9\}$.

Since in Boolean algebra there are only two values (elements) in the universe, $B = \{0, 1\}$, we will say that the area within a contour corresponding to a set s denotes that $s = 1$, while the area outside the contour denotes $s = 0$. In the diagram we will shade the area where $s = 1$. The concept of the Venn diagram is illustrated in Figure 2.12. The universe B is represented by a square. Then the constants 1 and 0 are represented as shown in parts (a) and (b) of the figure. A variable, say, x , is represented by a circle, such that the area inside the circle corresponds to $x = 1$, while the area outside the circle corresponds to $x = 0$. This is illustrated in part (c). An expression involving one or more variables is depicted by shading the area where the value of the expression is equal to 1. Part (d) indicates how the complement of x is represented.

To represent two variables, x and y , we draw two overlapping circles. Then the area where the circles overlap represents the case where $x = y = 1$, namely, the AND of x and y , as shown in part (e). Since this common area consists of the intersecting portions of x and y , the AND operation is often referred to formally as the *intersection* of x and y . Part (f) illustrates the OR operation, where $x + y$ represents the total area within both circles, namely, where at least one of x or y is equal to 1. Since this combines the areas in the circles, the OR operation is formally often called the *union* of x and y .

Part (g) depicts the product term $x \cdot \bar{y}$, which is represented by the intersection of the area for x with that for \bar{y} . Part (h) gives a three-variable example; the expression $x \cdot y + z$ is the union of the area for z with that of the intersection of x and y .

To see how we can use Venn diagrams to verify the equivalence of two expressions, let us demonstrate the validity of the distributive property, 12a, in section 2.5. Figure 2.13 gives the construction of the left and right sides of the identity that defines the property

$$x \cdot (y + z) = x \cdot y + x \cdot z$$

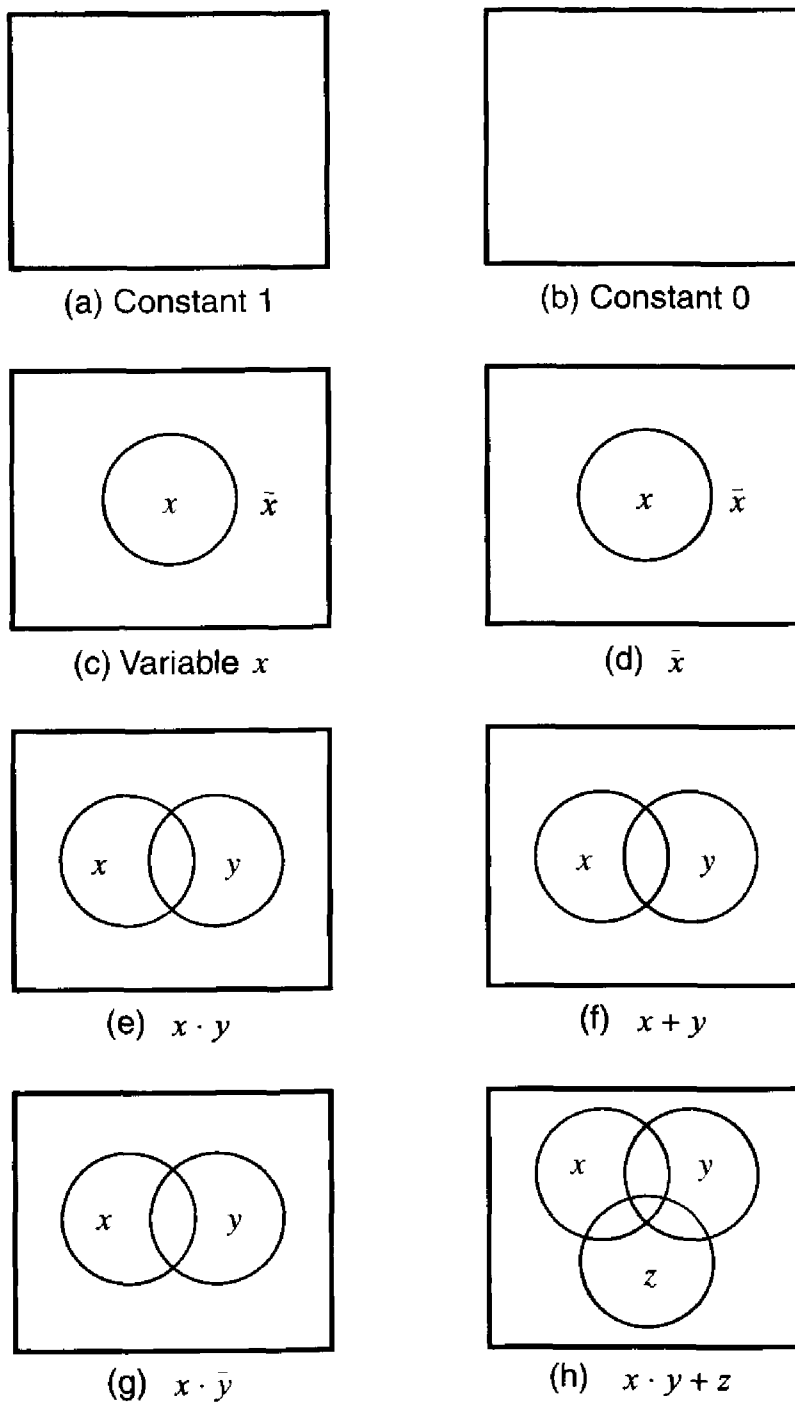


Figure 2.12 The Venn diagram representation.

Part (a) shows the area where $x = 1$. Part (b) indicates the area for $y + z$. Part (c) gives the diagram for $x \cdot (y + z)$, the intersection of shaded areas in parts (a) and (b). The right-hand side is constructed in parts (d), (e), and (f). Parts (d) and (e) describe the terms $x \cdot y$ and $x \cdot z$, respectively. The union of the shaded areas in these two diagrams then corresponds to the expression $x \cdot y + x \cdot z$, as seen in part (f). Since the shaded areas in parts (c) and (f) are identical, it follows that the distributive property is valid.

As another example, consider the identity

$$x \cdot y + \bar{x} \cdot z + y \cdot z = x \cdot y + \bar{x} \cdot z$$

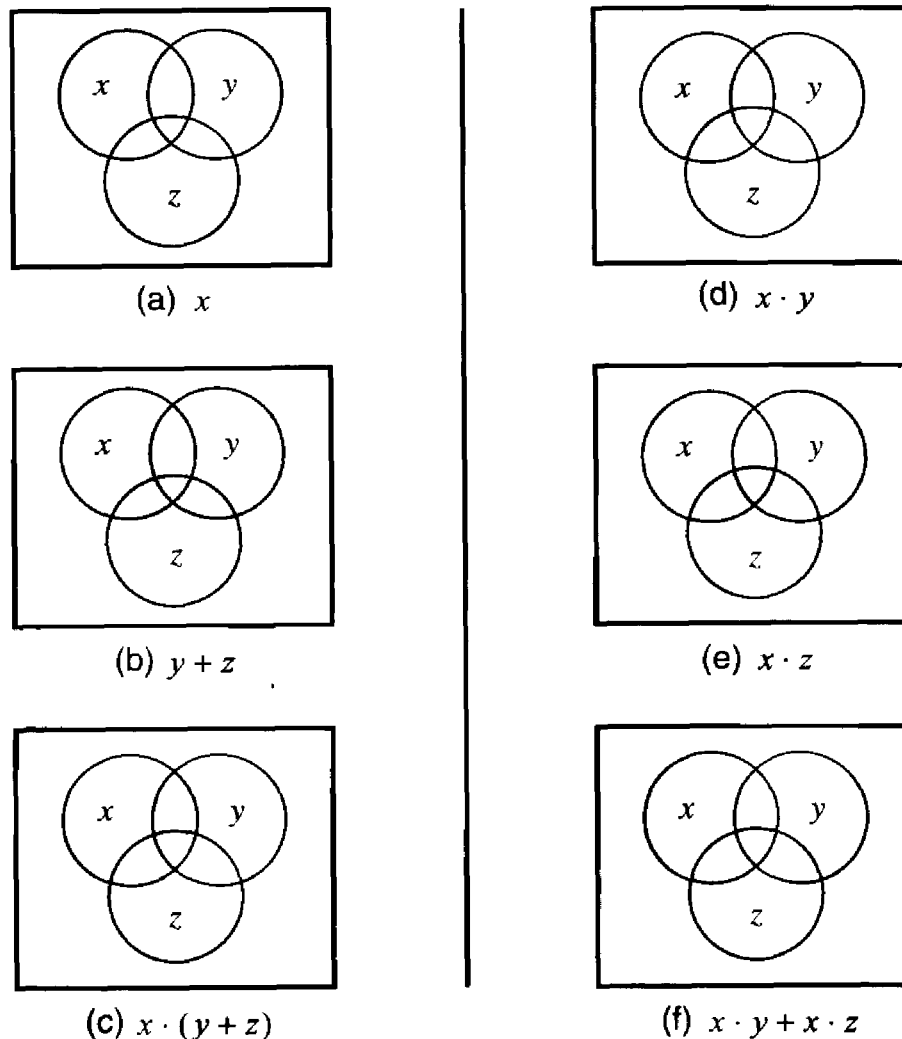


Figure 2.13 Verification of the distributive property $x \cdot (y + z) = x \cdot y + x \cdot z$.

which is illustrated in Figure 2.14. Notice that this identity states that the term $y \cdot z$ is fully covered by the terms $x \cdot y$ and $\bar{x} \cdot z$; therefore, this term can be omitted.

The reader should use the Venn diagram to prove some other identities. It is particularly instructive to prove the validity of DeMorgan's theorem in this way.

2.5.2 NOTATION AND TERMINOLOGY

Boolean algebra is based on the AND and OR operations. We have adopted the symbols \cdot and $+$ to denote these operations. These are also the standard symbols for the familiar arithmetic multiplication and addition operations. Considerable similarity exists between the Boolean operations and the arithmetic operations, which is the main reason why the same symbols are used. In fact, when single digits are involved there is only one significant difference; the result of $1 + 1$ is equal to 2 in ordinary arithmetic, whereas it is equal to 1 in Boolean algebra as defined by theorem 7b in section 2.5.

When dealing with digital circuits, most of the time the $+$ symbol obviously represents the OR operation. However, when the task involves the design of logic circuits that perform

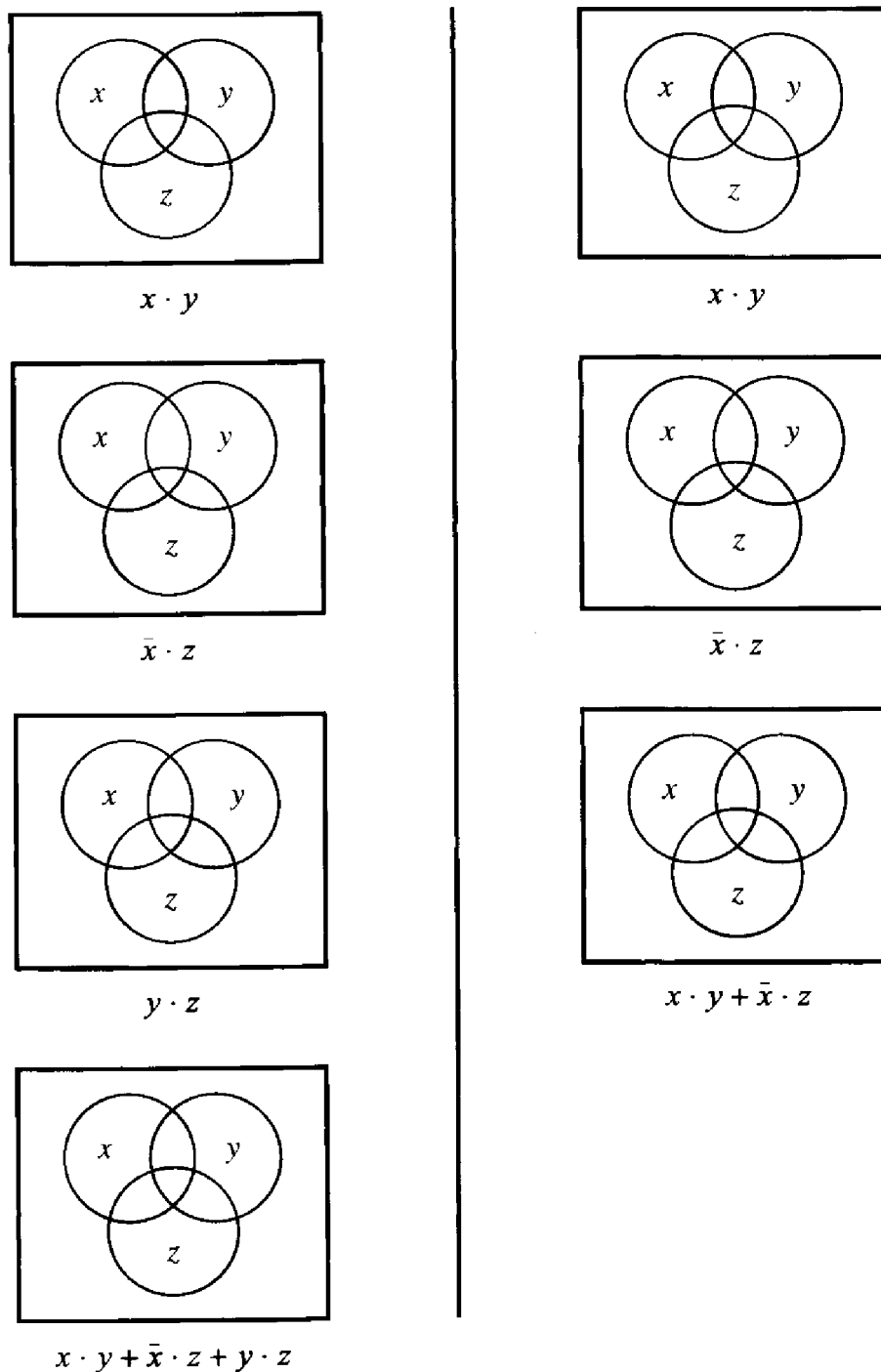


Figure 2.14 Verification of $x \cdot y + \bar{x} \cdot z + y \cdot z = x \cdot y + \bar{x} \cdot z$.

arithmetic operations, some confusion may develop about the use of the + symbol. To avoid such confusion, an alternative set of symbols exists for the AND and OR operations. It is quite common to use the \wedge symbol to denote the AND operation, and the \vee symbol for the OR operation. Thus, instead of $x_1 \cdot x_2$, we can write $x_1 \wedge x_2$, and instead of $x_1 + x_2$, we can write $x_1 \vee x_2$.

Because of the similarity with the arithmetic addition and multiplication operations, the OR and AND operations are often called the *logical sum* and *product* operations. Thus $x_1 + x_2$ is the logical sum of x_1 and x_2 , and $x_1 \cdot x_2$ is the logical product of x_1 and x_2 . Instead of saying “logical product” and “logical sum,” it is customary to say simply “product” and

“sum.” Thus we say that the expression

$$x_1 \cdot \bar{x}_2 \cdot x_3 + \bar{x}_1 \cdot x_4 + x_2 \cdot x_3 \cdot \bar{x}_4$$

is a sum of three product terms, whereas the expression

$$(\bar{x}_1 + x_3) \cdot (x_1 + \bar{x}_3) \cdot (\bar{x}_2 + x_3 + x_4)$$

is a product of three sum terms.

2.5.3 PRECEDENCE OF OPERATIONS

Using the three basic operations—AND, OR, and NOT—it is possible to construct an infinite number of logic expressions. Parentheses can be used to indicate the order in which the operations should be performed. However, to avoid an excessive use of parentheses, another convention defines the precedence of the basic operations. It states that in the absence of parentheses, operations in a logic expression must be performed in the order: NOT, AND, and then OR. Thus in the expression

$$x_1 \cdot x_2 + \bar{x}_1 \cdot \bar{x}_2$$

it is first necessary to generate the complements of x_1 and x_2 . Then the product terms $x_1 \cdot x_2$ and $\bar{x}_1 \cdot \bar{x}_2$ are formed, followed by the sum of the two product terms. Observe that in the absence of this convention, we would have to use parentheses to achieve the same effect as follows:

$$(x_1 \cdot x_2) + ((\bar{x}_1) \cdot (\bar{x}_2))$$

Finally, to simplify the appearance of logic expressions, it is customary to omit the \cdot operator when there is no ambiguity. Therefore, the preceding expression can be written as

$$x_1x_2 + \bar{x}_1\bar{x}_2$$

We will use this style throughout the book.

2.6 SYNTHESIS USING AND, OR, AND NOT GATES

Armed with some basic ideas, we can now try to implement arbitrary functions using the AND, OR, and NOT gates. Suppose that we wish to design a logic circuit with two inputs, x_1 and x_2 . Assume that x_1 and x_2 represent the states of two switches, either of which may be open (0) or closed (1). The function of the circuit is to continuously monitor the state of the switches and to produce an output logic value 1 whenever the switches (x_1, x_2) are in states (0, 0), (0, 1), or (1, 1). If the state of the switches is (1, 0), the output should be 0. Another way of stating the required functional behavior of this circuit is that the output must be equal to 0 if the switch x_1 is closed and x_2 is open; otherwise, the output must be 1. We can express the required behavior using a truth table, as shown in Figure 2.15.

A possible procedure for designing a logic circuit that implements the truth table is to create a product term that has a value of 1 for each valuation for which the output function f has to be 1. Then we can take a logical sum of these product terms to realize f . Let us

x_1	x_2	$f(x_1, x_2)$
0	0	1
0	1	1
1	0	0
1	1	1

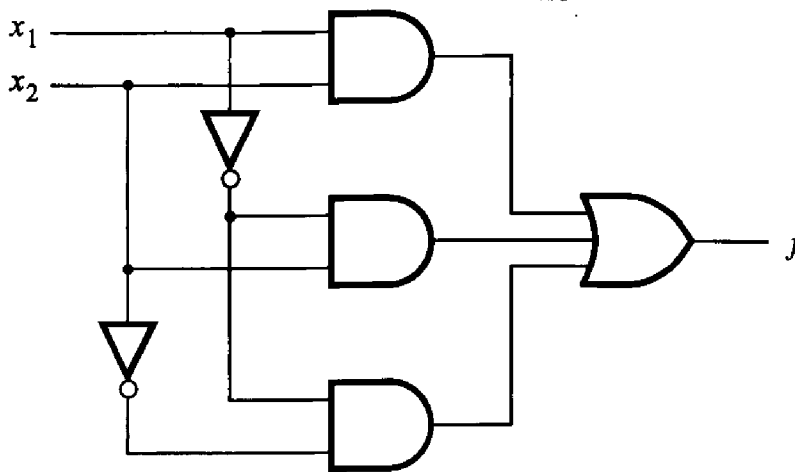
Figure 2.15 A function to be synthesized.

begin with the fourth row of the truth table, which corresponds to $x_1 = x_2 = 1$. The product term that is equal to 1 for this valuation is $x_1 \cdot x_2$, which is just the AND of x_1 and x_2 . Next consider the first row of the table, for which $x_1 = x_2 = 0$. For this valuation the value 1 is produced by the product term $\bar{x}_1 \cdot \bar{x}_2$. Similarly, the second row leads to the term $\bar{x}_1 \cdot x_2$. Thus f may be realized as

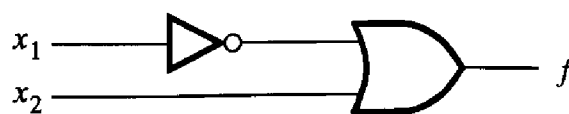
$$f(x_1, x_2) = x_1x_2 + \bar{x}_1\bar{x}_2 + \bar{x}_1x_2$$

The logic network that corresponds to this expression is shown in Figure 2.16a.

Although this network implements f correctly, it is not the simplest such network. To find a simpler network, we can manipulate the obtained expression using the theorems and properties from section 2.5. According to theorem 7b, we can replicate any term in a logical



(a) Canonical sum-of-products



(b) Minimal-cost realization

Figure 2.16 Two implementations of the function in Figure 2.15.

sum expression. Replicating the third product term, the above expression becomes

$$f(x_1, x_2) = x_1x_2 + \bar{x}_1\bar{x}_2 + \bar{x}_1x_2 + \bar{x}_1x_2$$

Using the commutative property 10*b* to interchange the second and third product terms gives

$$f(x_1, x_2) = x_1x_2 + \bar{x}_1x_2 + \bar{x}_1\bar{x}_2 + \bar{x}_1x_2$$

Now the distributive property 12*a* allows us to write

$$f(x_1, x_2) = (x_1 + \bar{x}_1)x_2 + \bar{x}_1(\bar{x}_2 + x_2)$$

Applying theorem 8*b* we get

$$f(x_1, x_2) = 1 \cdot x_2 + \bar{x}_1 \cdot 1$$

Finally, theorem 6*a* leads to

$$f(x_1, x_2) = x_2 + \bar{x}_1$$

The network described by this expression is given in Figure 2.16*b*. Obviously, the cost of this network is much less than the cost of the network in part (a) of the figure.

This simple example illustrates two things. First, a straightforward implementation of a function can be obtained by using a product term (AND gate) for each row of the truth table for which the function is equal to 1. Each product term contains all input variables, and it is formed such that if the input variable x_i is equal to 1 in the given row, then x_i is entered in the term; if $x_i = 0$, then \bar{x}_i is entered. The sum of these product terms realizes the desired function. Second, there are many different networks that can realize a given function. Some of these networks may be simpler than others. Algebraic manipulation can be used to derive simplified logic expressions and thus lower-cost networks.

The process whereby we begin with a description of the desired functional behavior and then generate a circuit that realizes this behavior is called *synthesis*. Thus we can say that we “synthesized” the networks in Figure 2.16 from the truth table in Figure 2.15. Generation of AND-OR expressions from a truth table is just one of many types of synthesis techniques that we will encounter in this book.

2.6.1 SUM-OF-PRODUCTS AND PRODUCT-OF-SUMS FORMS

Having introduced the synthesis process by means of a very simple example, we will now present it in more formal terms using the terminology that is encountered in the technical literature. We will also show how the principle of duality, which was introduced in section 2.5, applies broadly in the synthesis process.

If a function f is specified in the form of a truth table, then an expression that realizes f can be obtained by considering either the rows in the table for which $f = 1$, as we have already done, or by considering the rows for which $f = 0$, as we will explain shortly.

Minterms

For a function of n variables, a product term in which each of the n variables appears once is called a *minterm*. The variables may appear in a minterm either in uncomplemented or complemented form. For a given row of the truth table, the minterm is formed by including x_i if $x_i = 1$ and by including \bar{x}_i if $x_i = 0$.

To illustrate this concept, consider the truth table in Figure 2.17. We have numbered the rows of the table from 0 to 7, so that we can refer to them easily. (The reader who is already familiar with the binary number representation will realize that the row numbers chosen are just the numbers represented by the bit patterns of variables $x_1, x_2,$ and x_3 ; we will discuss number representation in Chapter 5.) The figure shows all minterms for the three-variable table. For example, in the first row the variables have the values $x_1 = x_2 = x_3 = 0$, which leads to the minterm $\bar{x}_1\bar{x}_2\bar{x}_3$. In the second row $x_1 = x_2 = 0$ and $x_3 = 1$, which gives the minterm $\bar{x}_1\bar{x}_2x_3$, and so on. To be able to refer to the individual minterms easily, it is convenient to identify each minterm by an index that corresponds to the row numbers shown in the figure. We will use the notation m_i to denote the minterm for row number i . Thus $m_0 = \bar{x}_1\bar{x}_2\bar{x}_3, m_1 = \bar{x}_1\bar{x}_2x_3$, and so on.

Sum-of-Products Form

A function f can be represented by an expression that is a sum of minterms, where each minterm is ANDed with the value of f for the corresponding valuation of input variables. For example, the two-variable minterms are $m_0 = \bar{x}_1\bar{x}_2, m_1 = \bar{x}_1x_2, m_2 = x_1\bar{x}_2,$ and $m_3 = x_1x_2$. The function in Figure 2.15 can be represented as

$$\begin{aligned} f &= m_0 \cdot 1 + m_1 \cdot 1 + m_2 \cdot 0 + m_3 \cdot 1 \\ &= m_0 + m_1 + m_3 \\ &= \bar{x}_1\bar{x}_2 + \bar{x}_1x_2 + x_1x_2 \end{aligned}$$

which is the form that we derived in the previous section using an intuitive approach. Only the minterms that correspond to the rows for which $f = 1$ appear in the resulting expression.

Any function f can be represented by a sum of minterms that correspond to the rows in the truth table for which $f = 1$. The resulting implementation is functionally correct and

Row number	x_1	x_2	x_3	Minterm	Maxterm
0	0	0	0	$m_0 = \bar{x}_1\bar{x}_2\bar{x}_3$	$M_0 = x_1 + x_2 + x_3$
1	0	0	1	$m_1 = \bar{x}_1\bar{x}_2x_3$	$M_1 = x_1 + x_2 + \bar{x}_3$
2	0	1	0	$m_2 = \bar{x}_1x_2\bar{x}_3$	$M_2 = x_1 + \bar{x}_2 + x_3$
3	0	1	1	$m_3 = \bar{x}_1x_2x_3$	$M_3 = x_1 + \bar{x}_2 + \bar{x}_3$
4	1	0	0	$m_4 = x_1\bar{x}_2\bar{x}_3$	$M_4 = \bar{x}_1 + x_2 + x_3$
5	1	0	1	$m_5 = x_1\bar{x}_2x_3$	$M_5 = \bar{x}_1 + x_2 + \bar{x}_3$
6	1	1	0	$m_6 = x_1x_2\bar{x}_3$	$M_6 = \bar{x}_1 + \bar{x}_2 + x_3$
7	1	1	1	$m_7 = x_1x_2x_3$	$M_7 = \bar{x}_1 + \bar{x}_2 + \bar{x}_3$

Figure 2.17 Three-variable minterms and maxterms.

unique, but it is not necessarily the lowest-cost implementation of f . A logic expression consisting of product (AND) terms that are summed (ORed) is said to be of the *sum-of-products (SOP)* form. If each product term is a minterm, then the expression is called a *canonical sum-of-products* for the function f . As we have seen in the example of Figure 2.16, the first step in the synthesis process is to derive a canonical sum-of-products expression for the given function. Then we can manipulate this expression, using the theorems and properties of section 2.5, with the goal of finding a functionally equivalent sum-of-products expression that has a lower cost.

As another example, consider the three-variable function $f(x_1, x_2, x_3)$, specified by the truth table in Figure 2.18. To synthesize this function, we have to include the minterms m_1 , m_4 , m_5 , and m_6 . Copying these minterms from Figure 2.17 leads to the following canonical sum-of-products expression for f

$$f(x_1, x_2, x_3) = \bar{x}_1\bar{x}_2x_3 + x_1\bar{x}_2\bar{x}_3 + x_1\bar{x}_2x_3 + x_1x_2\bar{x}_3$$

This expression can be manipulated as follows

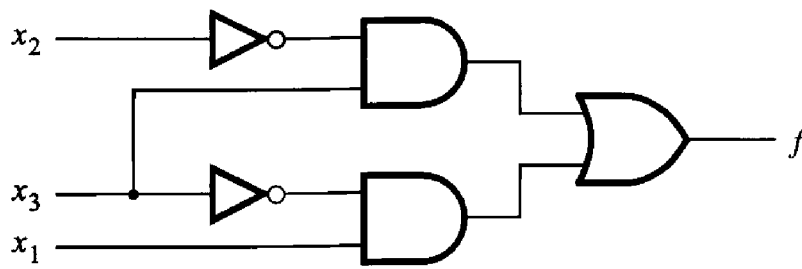
$$\begin{aligned} f &= (\bar{x}_1 + x_1)\bar{x}_2x_3 + x_1(\bar{x}_2 + x_2)\bar{x}_3 \\ &= 1 \cdot \bar{x}_2x_3 + x_1 \cdot 1 \cdot \bar{x}_3 \\ &= \bar{x}_2x_3 + x_1\bar{x}_3 \end{aligned}$$

This is the minimum-cost sum-of-products expression for f . It describes the circuit shown in Figure 2.19a. A good indication of the *cost* of a logic circuit is the total number of gates plus the total number of inputs to all gates in the circuit. Using this measure, the cost of the network in Figure 2.19a is 13, because there are five gates and eight inputs to the gates. By comparison, the network implemented on the basis of the canonical sum-of-products would have a cost of 27; from the preceding expression, the OR gate has four inputs, each of the four AND gates has three inputs, and each of the three NOT gates has one input.

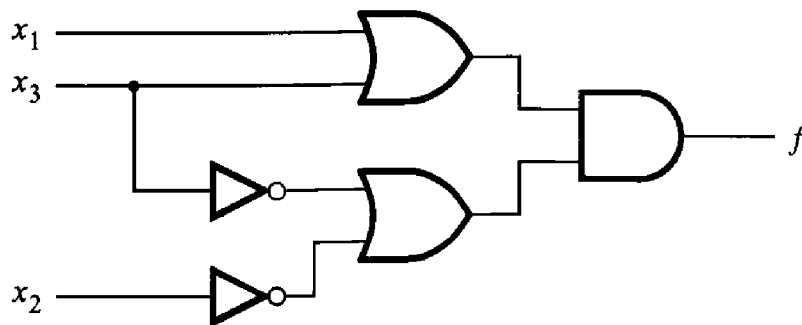
Minterms, with their row-number subscripts, can also be used to specify a given function in a more concise form. For example, the function in Figure 2.18 can be specified

Row number	x_1	x_2	x_3	$f(x_1, x_2, x_3)$
0	0	0	0	0
1	0	0	1	1
2	0	1	0	0
3	0	1	1	0
4	1	0	0	1
5	1	0	1	1
6	1	1	0	1
7	1	1	1	0

Figure 2.18 A three-variable function.



(a) A minimal sum-of-products realization



(b) A minimal product-of-sums realization

Figure 2.19 Two realizations of the function in Figure 2.18.

as

$$f(x_1, x_2, x_3) = \sum(m_1, m_4, m_5, m_6)$$

or even more simply as

$$f(x_1, x_2, x_3) = \sum m(1, 4, 5, 6)$$

The \sum sign denotes the logical sum operation. This shorthand notation is often used in practice.

Maxterms

The principle of duality suggests that if it is possible to synthesize a function f by considering the rows in the truth table for which $f = 1$, then it should also be possible to synthesize f by considering the rows for which $f = 0$. This alternative approach uses the complements of minterms, which are called *maxterms*. All possible maxterms for three-variable functions are listed in Figure 2.17. We will refer to a maxterm M_j by the same row number as its corresponding minterm m_j as shown in the figure.

Product-of-Sums Form

If a given function f is specified by a truth table, then its complement \bar{f} can be represented by a sum of minterms for which $\bar{f} = 1$, which are the rows where $f = 0$. For

example, for the function in Figure 2.15

$$\begin{aligned}\bar{f}(x_1, x_2) &= m_2 \\ &= x_1\bar{x}_2\end{aligned}$$

If we complement this expression using DeMorgan's theorem, the result is

$$\begin{aligned}\bar{\bar{f}} &= f = \overline{x_1\bar{x}_2} \\ &= \bar{x}_1 + x_2\end{aligned}$$

Note that we obtained this expression previously by algebraic manipulation of the canonical sum-of-products form for the function f . The key point here is that

$$f = \bar{m}_2 = M_2$$

where M_2 is the maxterm for row 2 in the truth table.

As another example, consider again the function in Figure 2.18. The complement of this function can be represented as

$$\begin{aligned}\bar{f}(x_1, x_2, x_3) &= m_0 + m_2 + m_3 + m_7 \\ &= \bar{x}_1\bar{x}_2\bar{x}_3 + \bar{x}_1x_2\bar{x}_3 + \bar{x}_1x_2x_3 + x_1x_2x_3\end{aligned}$$

Then f can be expressed as

$$\begin{aligned}f &= \overline{m_0 + m_2 + m_3 + m_7} \\ &= \bar{m}_0 \cdot \bar{m}_2 \cdot \bar{m}_3 \cdot \bar{m}_7 \\ &= M_0 \cdot M_2 \cdot M_3 \cdot M_7 \\ &= (x_1 + x_2 + x_3)(x_1 + \bar{x}_2 + x_3)(x_1 + \bar{x}_2 + \bar{x}_3)(\bar{x}_1 + \bar{x}_2 + \bar{x}_3)\end{aligned}$$

This expression represents f as a product of maxterms.

A logic expression consisting of sum (OR) terms that are the factors of a logical product (AND) is said to be of the *product-of-sums (POS)* form. If each sum term is a maxterm, then the expression is called a *canonical product-of-sums* for the given function. Any function f can be synthesized by finding its canonical product-of-sums. This involves taking the maxterm for each row in the truth table for which $f = 0$ and forming a product of these maxterms.

Returning to the preceding example, we can attempt to reduce the complexity of the derived expression that comprises a product of maxterms. Using the commutative property 10*b* and the associative property 11*b* from section 2.5, this expression can be written as

$$f = ((x_1 + x_3) + x_2)((x_1 + x_3) + \bar{x}_2)(x_1 + (\bar{x}_2 + \bar{x}_3))(\bar{x}_1 + (\bar{x}_2 + \bar{x}_3))$$

Then, using the combining property 14*b*, the expression reduces to

$$f = (x_1 + x_3)(\bar{x}_2 + \bar{x}_3)$$

The corresponding network is given in Figure 2.19*b*. The cost of this network is 13. While this cost happens to be the same as the cost of the sum-of-products version in Figure 2.19*a*, the reader should not assume that the cost of a network derived in the sum-of-products form

will in general be equal to the cost of a corresponding circuit derived in the product-of-sums form.

Using the shorthand notation, an alternative way of specifying our sample function is

$$f(x_1, x_2, x_3) = \Pi(M_0, M_2, M_3, M_7)$$

or more simply

$$f(x_1, x_2, x_3) = \Pi M(0, 2, 3, 7)$$

The Π sign denotes the logical product operation.

The preceding discussion has shown how logic functions can be realized in the form of logic circuits, consisting of networks of gates that implement basic functions. A given function may be realized with circuits of a different structure, which usually implies a difference in cost. An important objective for a designer is to minimize the cost of the designed circuit. We will discuss the most important techniques for finding minimum-cost implementations in Chapter 4.

e 2.3 Consider the function

$$f(x_1, x_2, x_3) = \sum m(2, 3, 4, 6, 7)$$

The canonical SOP expression for the function is derived using minterms

$$\begin{aligned} f &= m_2 + m_3 + m_4 + m_6 + m_7 \\ &= \bar{x}_1 x_2 \bar{x}_3 + \bar{x}_1 x_2 x_3 + x_1 \bar{x}_2 \bar{x}_3 + x_1 x_2 \bar{x}_3 + x_1 x_2 x_3 \end{aligned}$$

This expression can be simplified using the identities in section 2.5 as follows

$$\begin{aligned} f &= \bar{x}_1 x_2 (\bar{x}_3 + x_3) + x_1 (\bar{x}_2 + x_2) \bar{x}_3 + x_1 x_2 (\bar{x}_3 + x_3) \\ &= \bar{x}_1 x_2 + x_1 \bar{x}_3 + x_1 x_2 \\ &= (\bar{x}_1 + x_1) x_2 + x_1 \bar{x}_3 \\ &= x_2 + x_1 \bar{x}_3 \end{aligned}$$

e 2.4 Consider again the function in Example 2.3. Instead of using the minterms, we can specify this function as a product of maxterms for which $f = 0$, namely

$$f(x_1, x_2, x_3) = \Pi M(0, 1, 5)$$

Then, the canonical POS expression is derived as

$$\begin{aligned} f &= M_0 \cdot M_1 \cdot M_5 \\ &= (x_1 + x_2 + x_3)(x_1 + x_2 + \bar{x}_3)(\bar{x}_1 + x_2 + \bar{x}_3) \end{aligned}$$

A simplified POS expression can be derived as

$$\begin{aligned} f &= ((x_1 + x_2) + x_3)((x_1 + x_2) + \bar{x}_3)(x_1 + (x_2 + \bar{x}_3))(\bar{x}_1 + (x_2 + \bar{x}_3)) \\ &= ((x_1 + x_2) + x_3\bar{x}_3)(x_1\bar{x}_1 + (x_2 + \bar{x}_3)) \\ &= (x_1 + x_2)(x_2 + \bar{x}_3) \end{aligned}$$

Note that by using the distributive property 12*b*, this expression leads to

$$f = x_2 + x_1\bar{x}_3$$

which is the same as the expression derived in Example 2.3.

Suppose that a four-variable function is defined by

Exa

$$f(x_1, x_2, x_3, x_4) = \sum m(3, 7, 9, 12, 13, 14, 15)$$

The canonical SOP expression for this function is

$$f = \bar{x}_1\bar{x}_2x_3x_4 + \bar{x}_1x_2x_3x_4 + x_1\bar{x}_2\bar{x}_3x_4 + x_1x_2\bar{x}_3\bar{x}_4 + x_1x_2\bar{x}_3x_4 + x_1x_2x_3\bar{x}_4 + x_1x_2x_3x_4$$

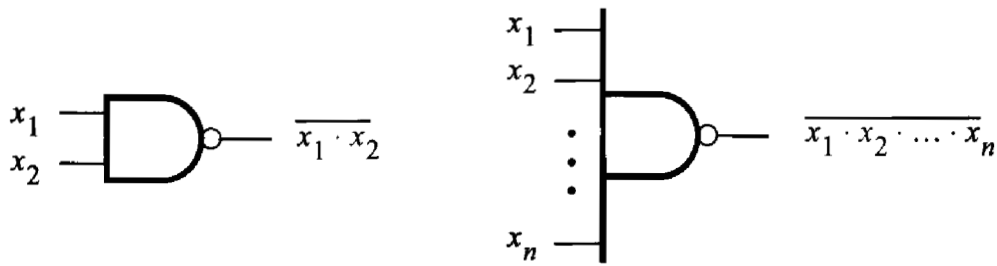
A simpler SOP expression can be obtained as follows

$$\begin{aligned} f &= \bar{x}_1(\bar{x}_2 + x_2)x_3x_4 + x_1(\bar{x}_2 + x_2)\bar{x}_3x_4 + x_1x_2\bar{x}_3(\bar{x}_4 + x_4) + x_1x_2x_3(\bar{x}_4 + x_4) \\ &= \bar{x}_1x_3x_4 + x_1\bar{x}_3x_4 + x_1x_2\bar{x}_3 + x_1x_2x_3 \\ &= \bar{x}_1x_3x_4 + x_1\bar{x}_3x_4 + x_1x_2(\bar{x}_3 + x_3) \\ &= \bar{x}_1x_3x_4 + x_1\bar{x}_3x_4 + x_1x_2 \end{aligned}$$

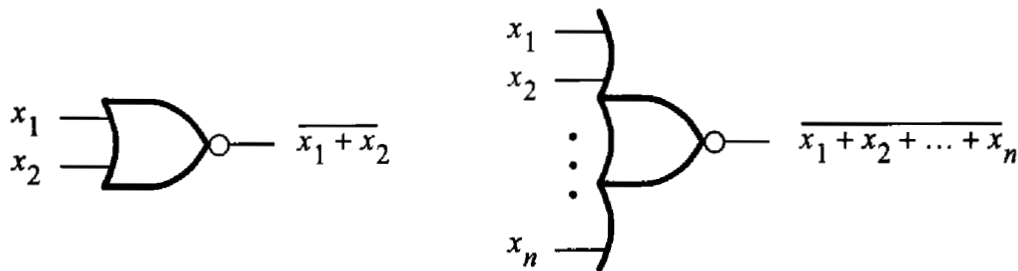
2.7 NAND AND NOR LOGIC NETWORKS

We have discussed the use of AND, OR, and NOT gates in the synthesis of logic circuits. There are other basic logic functions that are also used for this purpose. Particularly useful are the NAND and NOR functions which are obtained by complementing the output generated by AND and OR operations, respectively. These functions are attractive because they are implemented with simpler electronic circuits than the AND and OR functions, as we will see in Chapter 3. Figure 2.20 gives the graphical symbols for the NAND and NOR gates. A bubble is placed on the output side of the AND and OR gate symbols to represent the complemented output signal.

If NAND and NOR gates are realized with simpler circuits than AND and OR gates, then we should ask whether these gates can be used directly in the synthesis of logic circuits. In section 2.5 we introduced DeMorgan's theorem. Its logic gate interpretation is shown in Figure 2.21. Identity 15*a* is interpreted in part (a) of the figure. It specifies that a NAND of variables x_1 and x_2 is equivalent to first complementing each of the variables and then ORing them. Notice on the far-right side that we have indicated the NOT gates

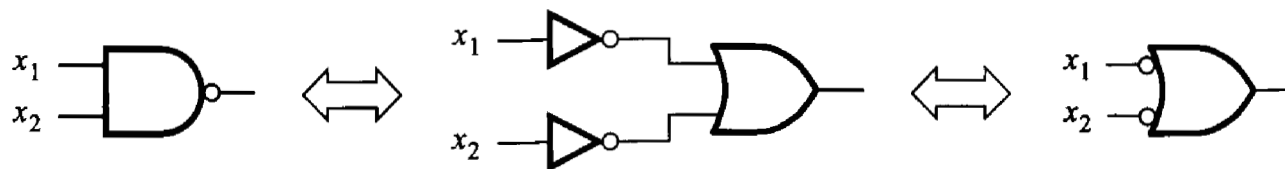


(a) NAND gates

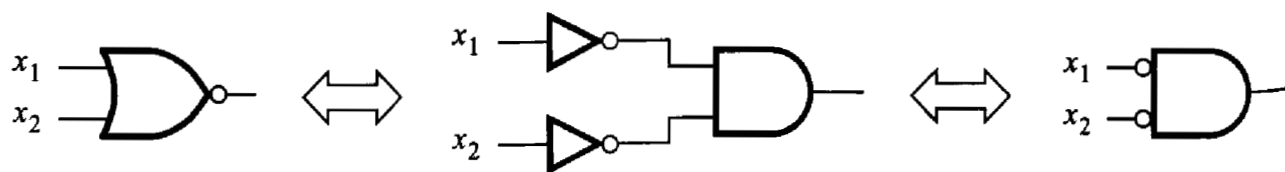


(b) NOR gates

Figure 2.20 NAND and NOR gates.



(a) $\overline{x_1 x_2} = \bar{x}_1 + \bar{x}_2$



(b) $\overline{x_1 + x_2} = \bar{x}_1 \bar{x}_2$

Figure 2.21 DeMorgan's theorem in terms of logic gates.

simply as **bubbles**, which denote inversion of the logic value at that point. The other half of DeMorgan's theorem, identity 15*b*, appears in part (b) of the figure. It states that the NOR function is equivalent to first inverting the input variables and then ANDing them.

In section 2.6 we explained how any logic function can be implemented either in sum-of-products or product-of-sums form, which leads to logic networks that have either an AND-OR or an OR-AND structure, respectively. We will now show that such networks can be implemented using only NAND gates or only NOR gates.

Consider the network in Figure 2.22 as a representative of general AND-OR networks. This network can be transformed into a network of NAND gates as shown in the figure. First, each connection between the AND gate and an OR gate is replaced by a connection that includes two inversions of the signal: one inversion at the output of the AND gate and the other at the input of the OR gate. Such double inversion has no effect on the behavior of the network, as stated formally in theorem 9 in section 2.5. According to Figure 2.21*a*, the OR gate with inversions at its inputs is equivalent to a NAND gate. Thus we can redraw the network using only NAND gates, as shown in Figure 2.22. This example shows that any AND-OR network can be implemented as a NAND-NAND network having the same topology.

Figure 2.23 gives a similar construction for a product-of-sums network, which can be transformed into a circuit with only NOR gates. The procedure is exactly the same as the one described for Figure 2.22 except that now the identity in Figure 2.21*b* is applied. The conclusion is that any OR-AND network can be implemented as a NOR-NOR network having the same topology.

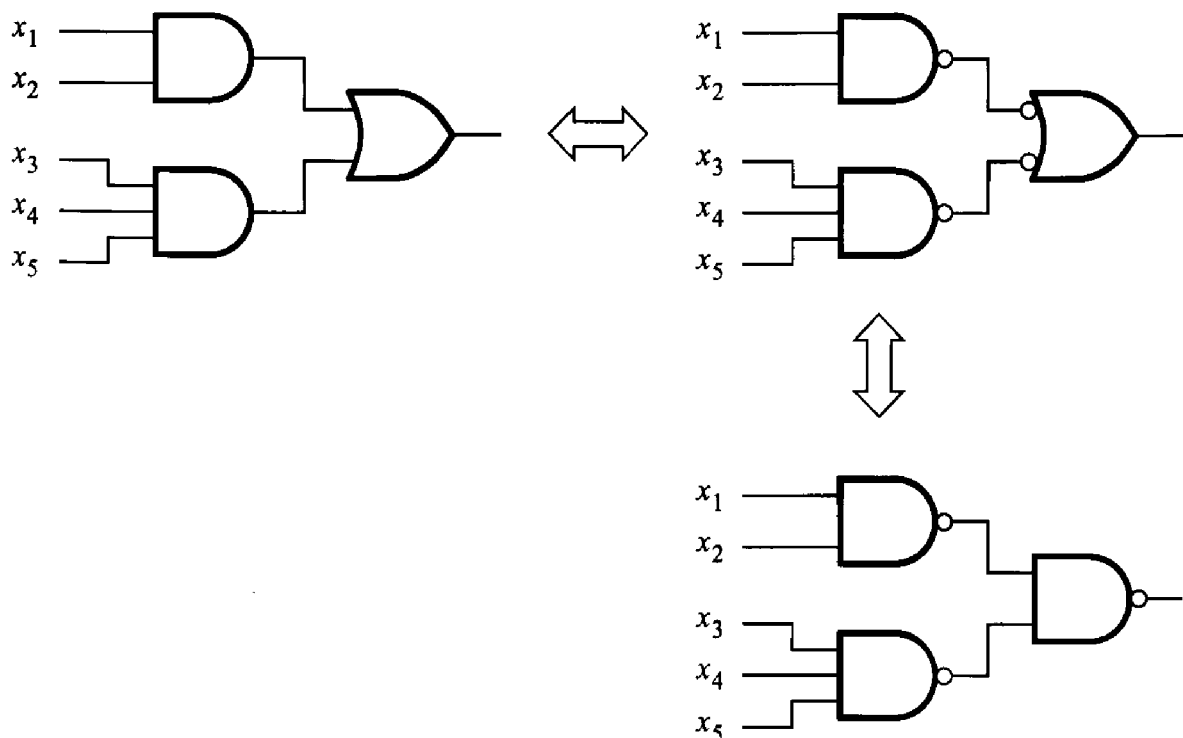


Figure 2.22 Using NAND gates to implement a sum-of-products.

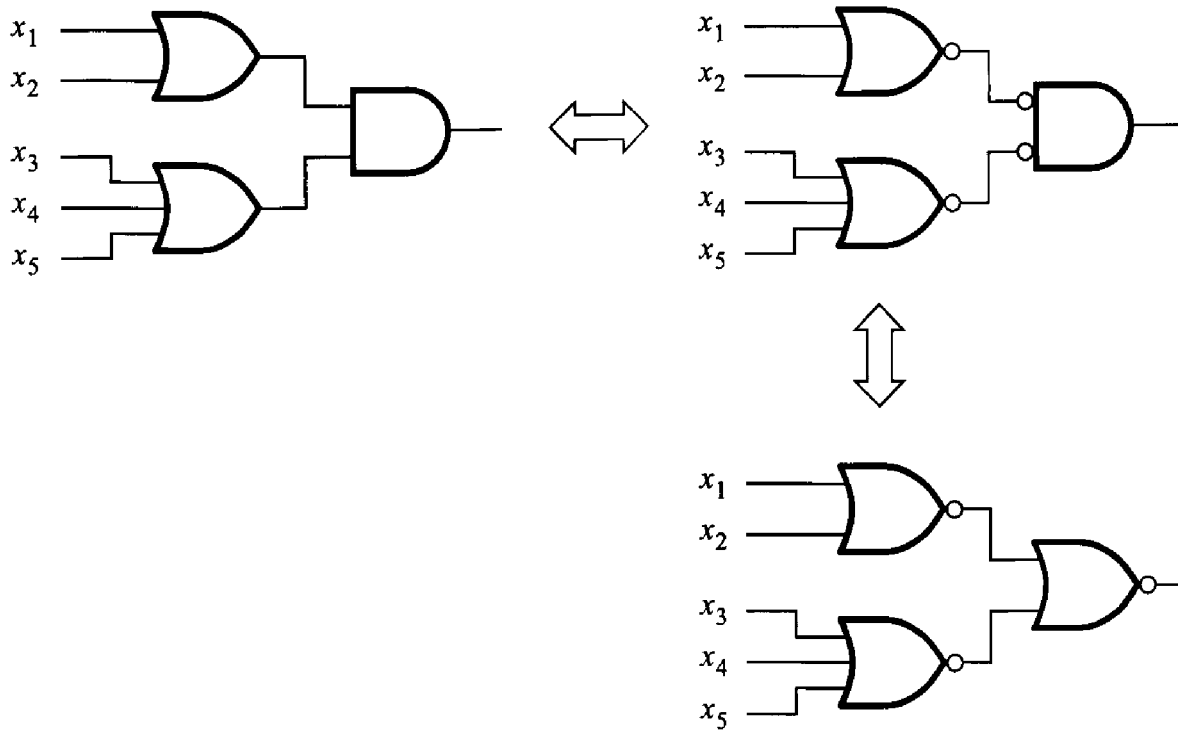


Figure 2.23 Using NOR gates to implement a product-of-sums.

Example 2.6 Let us implement the function

$$f(x_1, x_2, x_3) = \sum m(2, 3, 4, 6, 7)$$

using NOR gates only. In Example 2.4 we showed that the function can be represented by the POS expression

$$f = (x_1 + x_2)(x_2 + \bar{x}_3)$$

An OR-AND circuit that corresponds to this expression is shown in Figure 2.24a. Using the same structure of the circuit, a NOR-gate version is given in Figure 2.24b. Note that x_3 is inverted by a NOR gate that has its inputs tied together.

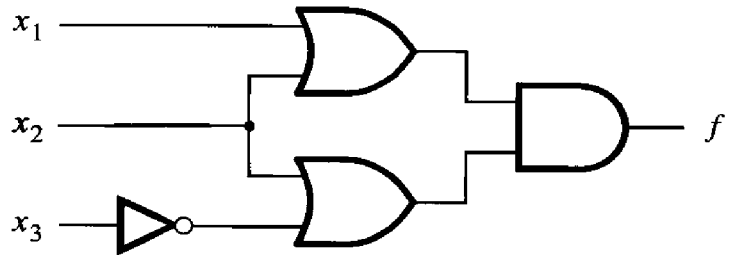
Example 2.7. Let us now implement the function

$$f(x_1, x_2, x_3) = \sum m(2, 3, 4, 6, 7)$$

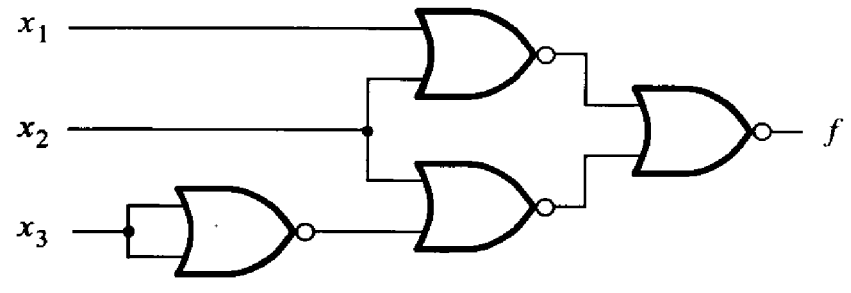
using NAND gates only. In Example 2.3 we derived the SOP expression

$$f = x_2 + x_1\bar{x}_3$$

which is realized using the circuit in Figure 2.25a. We can again use the same structure to obtain a circuit with NAND gates, but with one difference. The signal x_2 passes only through an OR gate, instead of passing through an AND gate and an OR gate. If we simply replace the OR gate with a NAND gate, this signal would be inverted which would result in a wrong output value. Since x_2 must either not be inverted, or it can be inverted twice,

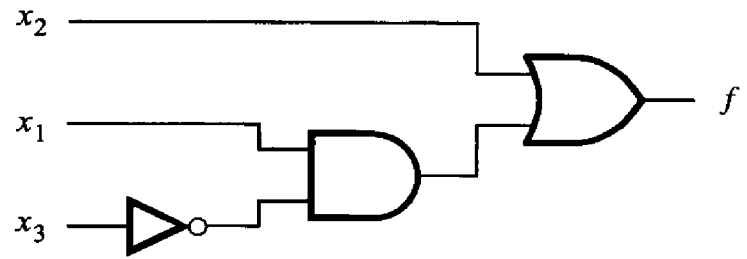


(a) POS implementation

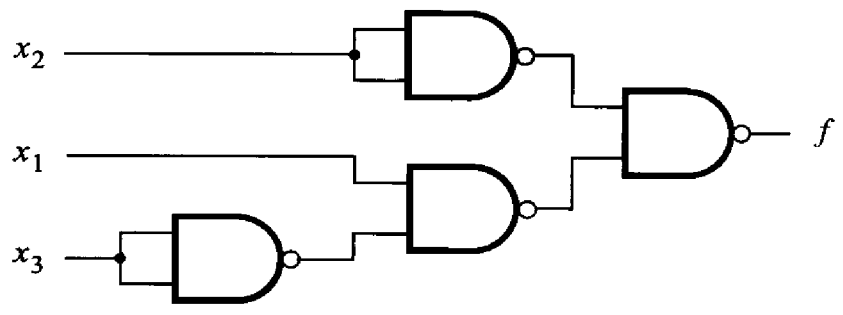


(b) NOR implementation

Figure 2.24 NOR-gate realization of the function in Example 2.4.



(a) SOP implementation



(b) NAND implementation

Figure 2.25 NAND-gate realization of the function in Example 2.3.

we can pass it through two NAND gates as depicted in Figure 2.25*b*. Observe that for this circuit the output f is

$$f = \overline{\overline{x_2} \cdot \overline{x_1 \bar{x}_3}}$$

Applying DeMorgan's theorem, this expression becomes

$$f = x_2 + x_1 \bar{x}_3$$

2.8 DESIGN EXAMPLES

Logic circuits provide a solution to a problem. They implement functions that are needed to carry out specific tasks. Within the framework of a computer, logic circuits provide complete capability for execution of programs and processing of data. Such circuits are complex and difficult to design. But regardless of the complexity of a given circuit, a designer of logic circuits is always confronted with the same basic issues. First, it is necessary to specify the desired behavior of the circuit. Second, the circuit has to be synthesized and implemented. Finally, the implemented circuit has to be tested to verify that it meets the specifications. The desired behavior is often initially described in words, which then must be turned into a formal specification. In this section we give two simple examples of design.

2.8.1 THREE-WAY LIGHT CONTROL

Assume that a large room has three doors and that a switch near each door controls a light in the room. It has to be possible to turn the light on or off by changing the state of any one of the switches.

As a first step, let us turn this word statement into a formal specification using a truth table. Let x_1 , x_2 , and x_3 be the input variables that denote the state of each switch. Assume that the light is off if all switches are open. Closing any one of the switches will turn the light on. Then turning on a second switch will have to turn off the light. Thus the light will be on if exactly one switch is closed, and it will be off if two (or no) switches are closed. If the light is off when two switches are closed, then it must be possible to turn it on by closing the third switch. If $f(x_1, x_2, x_3)$ represents the state of the light, then the required functional behavior can be specified as shown in the truth table in Figure 2.26. The canonical sum-of-products expression for the specified function is

$$\begin{aligned} f &= m_1 + m_2 + m_4 + m_7 \\ &= \bar{x}_1 \bar{x}_2 x_3 + \bar{x}_1 x_2 \bar{x}_3 + x_1 \bar{x}_2 \bar{x}_3 + x_1 x_2 x_3 \end{aligned}$$

This expression cannot be simplified into a lower-cost sum-of-products expression. The resulting circuit is shown in Figure 2.27*a*.

x_1	x_2	x_3	f
0	0	0	0
0	0	1	1
0	1	0	1
0	1	1	0
1	0	0	1
1	0	1	0
1	1	0	0
1	1	1	1

Figure 2.26 Truth table for the three-way light control.

An alternative realization for this function is in the product-of-sums form. The canonical expression of this type is

$$\begin{aligned} f &= M_0 \cdot M_3 \cdot M_5 \cdot M_6 \\ &= (x_1 + x_2 + x_3)(x_1 + \bar{x}_2 + \bar{x}_3)(\bar{x}_1 + x_2 + \bar{x}_3)(\bar{x}_1 + \bar{x}_2 + x_3) \end{aligned}$$

The resulting circuit is depicted in Figure 2.27b. It has the same cost as the circuit in part (a) of the figure.

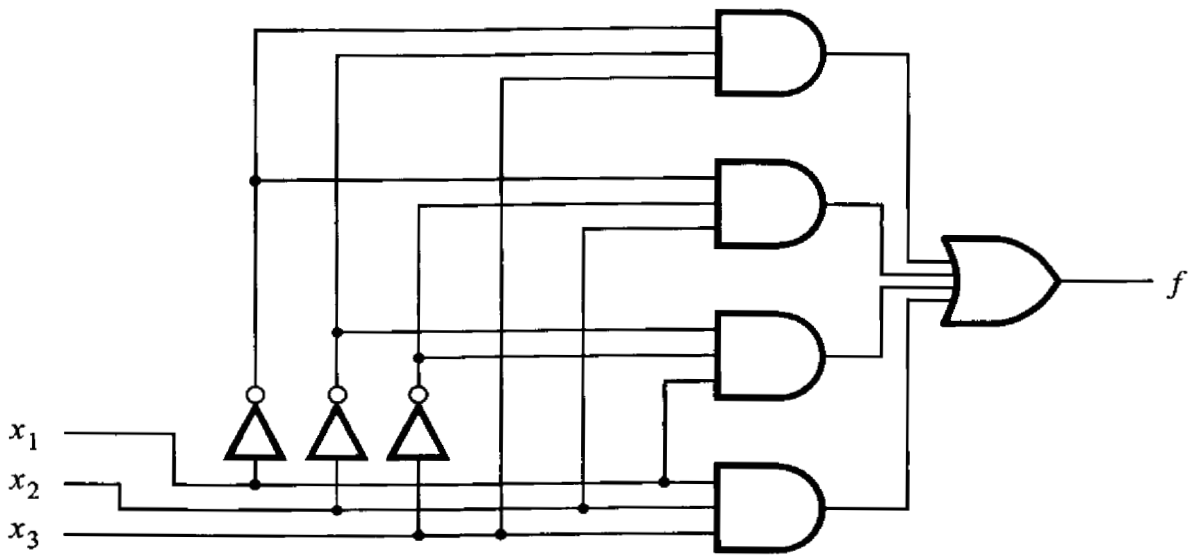
When the designed circuit is implemented, it can be tested by applying the various input valuations to the circuit and checking whether the output corresponds to the values specified in the truth table. A straightforward approach is to check that the correct output is produced for all eight possible input valuations.

2.8.2 MULTIPLEXER CIRCUIT

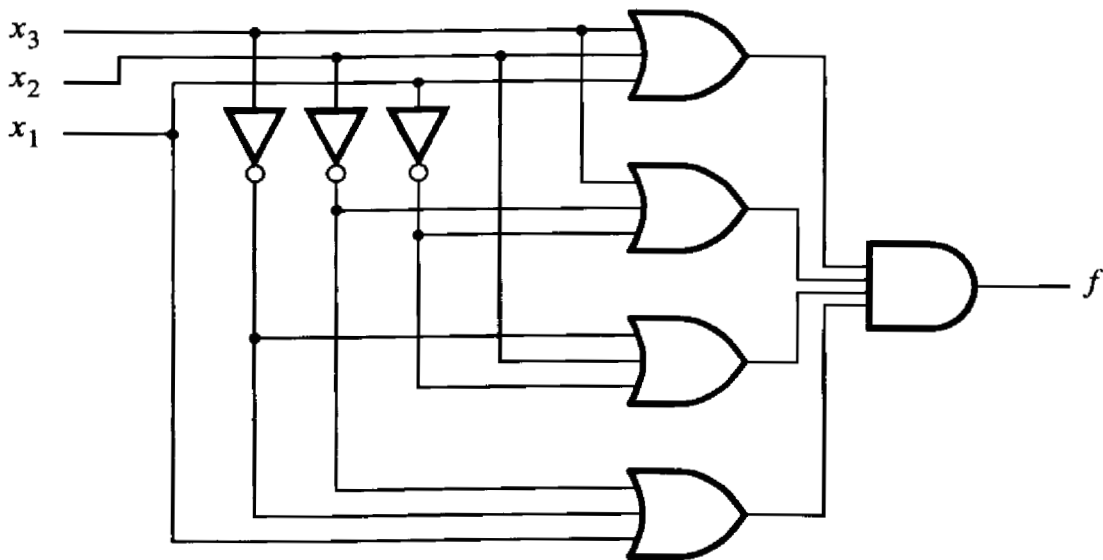
In computer systems it is often necessary to choose data from exactly one of a number of possible sources. Suppose that there are two sources of data, provided as input signals x_1 and x_2 . The values of these signals change in time, perhaps at regular intervals. Thus sequences of 0s and 1s are applied on each of the inputs x_1 and x_2 . We want to design a circuit that produces an output that has the same value as either x_1 or x_2 , dependent on the value of a selection control signal s . Therefore, the circuit should have three inputs: x_1 , x_2 , and s . Assume that the output of the circuit will be the same as the value of input x_1 if $s = 0$, and it will be the same as x_2 if $s = 1$.

Based on these requirements, we can specify the desired circuit in the form of a truth table given in Figure 2.28a. From the truth table, we derive the canonical sum of products

$$f(s, x_1, x_2) = \bar{s}x_1\bar{x}_2 + \bar{s}x_1x_2 + s\bar{x}_1x_2 + sx_1x_2$$



(a) Sum-of-products realization



(b) Product-of-sums realization

Figure 2.27 Implementation of the function in Figure 2.26.

Using the distributive property, this expression can be written as

$$f = \bar{s}x_1(\bar{x}_2 + x_2) + s(\bar{x}_1 + x_1)x_2$$

Applying theorem 8b yields

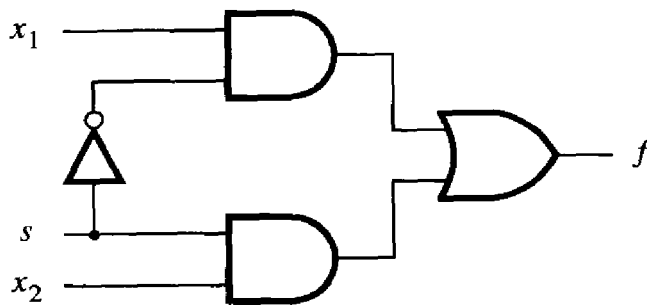
$$f = \bar{s}x_1 \cdot 1 + s \cdot 1 \cdot x_2$$

Finally, theorem 6a gives

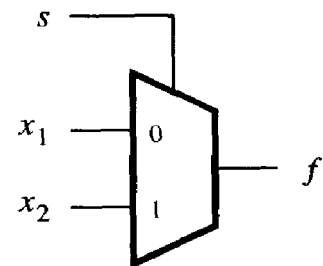
$$f = \bar{s}x_1 + sx_2$$

s	x_1	x_2	$f(s, x_1, x_2)$
0	0	0	0
0	0	1	0
0	1	0	1
0	1	1	1
1	0	0	0
1	0	1	1
1	1	0	0
1	1	1	1

(a) Truth table



(b) Circuit



(c) Graphical symbol

s	$f(s, x_1, x_2)$
0	x_1
1	x_2

(d) More compact truth-table representation

Figure 2.28 Implementation of a multiplexer.

A circuit that implements this function is shown in Figure 2.28b. Circuits of this type are used so extensively that they are given a special name. A circuit that generates an output that exactly reflects the state of one of a number of data inputs, based on the value of one or more selection control inputs, is called a *multiplexer*. We say that a multiplexer circuit “multiplexes” input signals onto a single output.

In this example we derived a multiplexer with two data inputs, which is referred to as a “2-to-1 multiplexer.” A commonly used graphical symbol for the 2-to-1 multiplexer is shown in Figure 2.28*c*. The same idea can be extended to larger circuits. A 4-to-1 multiplexer has four data inputs and one output. In this case two selection control inputs are needed to choose one of the four data inputs that is transmitted as the output signal. An 8-to-1 multiplexer needs eight data inputs and three selection control inputs, and so on.

Note that the statement “ $f = x_1$ if $s = 0$, and $f = x_2$ if $s = 1$ ” can be presented in a more compact form of a truth table, as indicated in Figure 2.28*d*. In later chapters we will have occasion to use such representation.

We showed how a multiplexer can be built using AND, OR, and NOT gates. The same circuit structure can be used to implement the multiplexer using NAND gates, as explained in section 2.7. In Chapter 3 we will show other possibilities for constructing multiplexers. In Chapter 6 we will discuss the use of multiplexers in considerable detail.

Designers of logic circuits rely heavily on CAD tools. We want to encourage the reader to become familiar with the CAD tool support provided with this book as soon as possible. We have reached a point where an introduction to these tools is useful. The next section presents some basic concepts that are needed to use these tools. We will also introduce, in section 2.10, a special language for describing logic circuits, called VHDL. This language is used to describe the circuits as an input to the CAD tools, which then proceed to derive a suitable implementation.

2.9 INTRODUCTION TO CAD TOOLS

The preceding sections introduced a basic approach for synthesis of logic circuits. A designer could use this approach manually for small circuits. However, logic circuits found in complex systems, such as today’s computers, cannot be designed manually—they are designed using sophisticated CAD tools that automatically implement the synthesis techniques.

To design a logic circuit, a number of CAD tools are needed. They are usually packaged together into a *CAD system*, which typically includes tools for the following tasks: design entry, synthesis and optimization, simulation, and physical design. We will introduce some of these tools in this section and will provide additional discussion in later chapters.

2.9.1 DESIGN ENTRY

The starting point in the process of designing a logic circuit is the conception of what the circuit is supposed to do and the formulation of its general structure. This step is done manually by the designer because it requires design experience and intuition. The rest of the design process is done with the aid of CAD tools. The first stage of this process involves entering into the CAD system a description of the circuit being designed. This stage is called *design entry*. We will describe two design entry methods: using schematic capture and writing source code in a hardware description language.

Schematic Capture

A logic circuit can be defined by drawing logic gates and interconnecting them with wires. A CAD tool for entering a designed circuit in this way is called a *schematic capture* tool. The word *schematic* refers to a diagram of a circuit in which circuit elements, such as logic gates, are depicted as graphical symbols and connections between circuit elements are drawn as lines.

A schematic capture tool uses the graphics capabilities of a computer and a computer mouse to allow the user to draw a schematic diagram. To facilitate inclusion of gates in the schematic, the tool provides a collection of graphical symbols that represent gates of various types with different numbers of inputs. This collection of symbols is called a *library*. The gates in the library can be imported into the user's schematic, and the tool provides a graphical way of interconnecting the gates to create a logic network.

Any subcircuits that have been previously created can be represented as graphical symbols and included in the schematic. In practice it is common for a CAD system user to create a circuit that includes within it other smaller circuits. This methodology is known as *hierarchical design* and provides a good way of dealing with the complexities of large circuits.

The schematic-capture facility is described in detail in Appendix B. It is simple to use, but becomes awkward when large circuits are involved. A better method for dealing with large circuits is to write source code using a hardware description language to represent the circuit.

Hardware Description Languages

A *hardware description language (HDL)* is similar to a typical computer programming language except that an HDL is used to describe hardware rather than a program to be executed on a computer. Many commercial HDLs are available. Some are proprietary, meaning that they are provided by a particular company and can be used to implement circuits only in the technology provided by that company. We will not discuss the proprietary HDLs in this book. Instead, we will focus on a language that is supported by virtually all vendors that provide digital hardware technology and is officially endorsed as an *Institute of Electrical and Electronics Engineers (IEEE)* standard. The IEEE is a worldwide organization that promotes technical activities to the benefit of society in general. One of its activities involves the development of standards that define how certain technological concepts can be used in a way that is suitable for a large body of users.

Two HDLs are IEEE standards: *VHDL (Very High Speed Integrated Circuit Hardware Description Language)* and *Verilog HDL*. Both languages are in widespread use in the industry. We use VHDL in this book, but a Verilog version of the book is also available from the same publisher [4]. Although the two languages differ in many ways, the choice of using one or the other when studying logic circuits is not particularly important, because both offer similar features. Concepts illustrated in this book using VHDL can be directly applied when using Verilog.

In comparison to performing schematic capture, using VHDL offers a number of advantages. Because it is supported by most organizations that offer digital hardware technology, VHDL provides design *portability*. A circuit specified in VHDL can be implemented in different types of chips and with CAD tools provided by different companies, without having

to change the VHDL specification. Design portability is an important advantage because digital circuit technology changes rapidly. By using a standard language, the designer can focus on the functionality of the desired circuit without being overly concerned about the details of the technology that will eventually be used for implementation.

Design entry of a logic circuit is done by writing VHDL code. Signals in the circuit can be represented as variables in the source code, and logic functions are expressed by assigning values to these variables. VHDL source code is plain text, which makes it easy for the designer to include within the code documentation that explains how the circuit works. This feature, coupled with the fact that VHDL is widely used, encourages sharing and reuse of VHDL-described circuits. This allows faster development of new products in cases where existing VHDL code can be adapted for use in the design of new circuits.

Similar to the way in which large circuits are handled in schematic capture, VHDL code can be written in a modular way that facilitates hierarchical design. Both small and large logic circuit designs can be efficiently represented in VHDL code. VHDL has been used to define circuits such as microprocessors with millions of transistors.

VHDL design entry can be combined with other methods. For example, a schematic-capture tool can be used in which a subcircuit in the schematic is described using VHDL. We will introduce VHDL in section 2.10.

2.9.2 SYNTHESIS

Synthesis is the process of generating a logic circuit from an initial specification that may be given in the form of a schematic diagram or code written in a hardware description language. Synthesis CAD tools generate efficient implementations of circuits from such specifications.

The process of translating, or *compiling*, VHDL code into a network of logic gates is part of synthesis. The output is a set of logic expressions that describe the logic functions needed to realize the circuit.

Regardless of what type of design entry is used, the initial logic expressions produced by the synthesis tools are not likely to be in an optimal form because they reflect the designer's input to the CAD tools. It is impossible for a designer to manually produce optimal results for large circuits. So, one of the important tasks of the synthesis tools is to manipulate the user's design to automatically generate an equivalent, but better circuit.

The measure of what makes one circuit better than another depends on the particular needs of a design project and the technology chosen for implementation. In section 2.6 we suggested that a good circuit might be one that has the lowest cost. There are other possible optimization goals, which are motivated by the type of hardware technology used for implementation of the circuit. We will discuss implementation technologies in Chapter 3 and return to the issue of optimization goals in Chapter 4.

The performance of a synthesized circuit can be assessed by physically constructing the circuit and testing it. But, its behavior can also be evaluated by means of simulation.

2.9.3 FUNCTIONAL SIMULATION

A circuit represented in the form of logic expressions can be simulated to verify that it will function as expected. The tool that performs this task is called a *functional simulator*. It uses the logic expressions (often referred to as equations) generated during synthesis, and assumes that these expressions will be implemented with perfect gates through which signals propagate instantaneously. The simulator requires the user to specify valuations of the circuit's inputs that should be applied during simulation. For each valuation, the simulator evaluates the outputs produced by the expressions. The results of simulation are usually provided in the form of a timing diagram which the user can examine to verify that the circuit operates as required. The functional simulation is discussed in detail in Appendix B.

2.9.4 PHYSICAL DESIGN

After logic synthesis the next step in the design flow is to determine exactly how to implement the circuit on a given chip. This step is often called *physical design*. As we will see in Chapter 3, there are several different technologies that may be used to implement logic circuits. The physical design tools map a circuit specified in the form of logic expressions into a realization that makes use of the resources available on the target chip. They determine the placement of specific logic elements, which are not necessarily simple gates of the type we have encountered so far. They also determine the wiring connections that have to be made between these elements to implement the desired circuit.

2.9.5 TIMING SIMULATION

Logic gates and other logic elements are implemented with electronic circuits, as we will discuss in Chapter 3. An electronic circuit cannot perform its function instantaneously. When the values of inputs to the circuit change, it takes a certain amount of time before a corresponding change occurs at the output. This is called a *propagation delay* of the circuit. The propagation delay consists of two kinds of delays. Each logic element needs some time to generate a valid output signal whenever there are changes in the values of its inputs. In addition to this delay, there is a delay caused by signals that must propagate through wires that connect various logic elements. The combined effect is that real circuits exhibit delays, which has a significant impact on their speed of operation.

A *timing simulator* evaluates the expected delays of a designed logic circuit. Its results can be used to determine if the generated circuit meets the timing requirements of the specification for the design. If the requirements are not met, the designer can ask the physical design tools to try again by indicating specific timing constraints that have to be met. If this does not succeed, then the designer has to try different optimizations in the synthesis step, or else improve the initial design that is presented to the synthesis tools.

2.9.6 CHIP CONFIGURATION

Having ascertained that the designed circuit meets all requirements of the specification, the circuit is implemented on an actual chip. This step is called chip *configuration* or *programming*.

The CAD tools discussed in this section are the essential parts of a CAD system. The complete design flow that we discussed is illustrated in Figure 2.29. This has been just a brief introductory discussion. A full presentation of the CAD tools is given in Chapter 12.

At this point the reader should have some appreciation for what is involved when using CAD tools. However, the tools can be fully appreciated only when they are used firsthand. In Appendices B to D, we provide step-by-step tutorials that illustrate how to use the Quartus II CAD system, which is included with this book. We strongly encourage the reader to work through the hands-on material in these appendices. Because the tutorials use VHDL for design entry, we provide an introduction to VHDL in the following section.

2.10 INTRODUCTION TO VHDL

In the 1980s rapid advances in integrated circuit technology lead to efforts to develop standard design practices for digital circuits. VHDL was developed as a part of that effort. VHDL has become the industry standard language for describing digital circuits, largely because it is an official IEEE standard. The original standard for VHDL was adopted in 1987 and called IEEE 1076. A revised standard was adopted in 1993 and called IEEE 1164.

VHDL was originally intended to serve two main purposes. First, it was used as a documentation language for describing the structure of complex digital circuits. As an official IEEE standard, VHDL provided a common way of documenting circuits designed by numerous designers. Second, VHDL provided features for modeling the behavior of a digital circuit, which allowed its use as input to software programs that were then used to simulate the circuit's operation.

In recent years, in addition to its use for documentation and simulation, VHDL has also become popular for use in design entry in CAD systems. The CAD tools are used to synthesize the VHDL code into a hardware implementation of the described circuit. In this book our main use of VHDL will be for synthesis.

VHDL is a complex, sophisticated language. Learning all of its features is a daunting task. However, for use in synthesis only a subset of these features is important. To simplify the presentation, we will focus the discussion on the features of VHDL that are actually used in the examples in the book. The material presented should be sufficient to allow the reader to design a wide range of circuits. The reader who wishes to learn the complete VHDL language can refer to one of the specialized texts [5–10].

VHDL is introduced in several stages throughout the book. Our general approach will be to introduce particular features only when they are relevant to the design topics covered in that part of the text. In Appendix A we provide a concise summary of the VHDL features covered in the book. The reader will find it convenient to refer to that material from time to

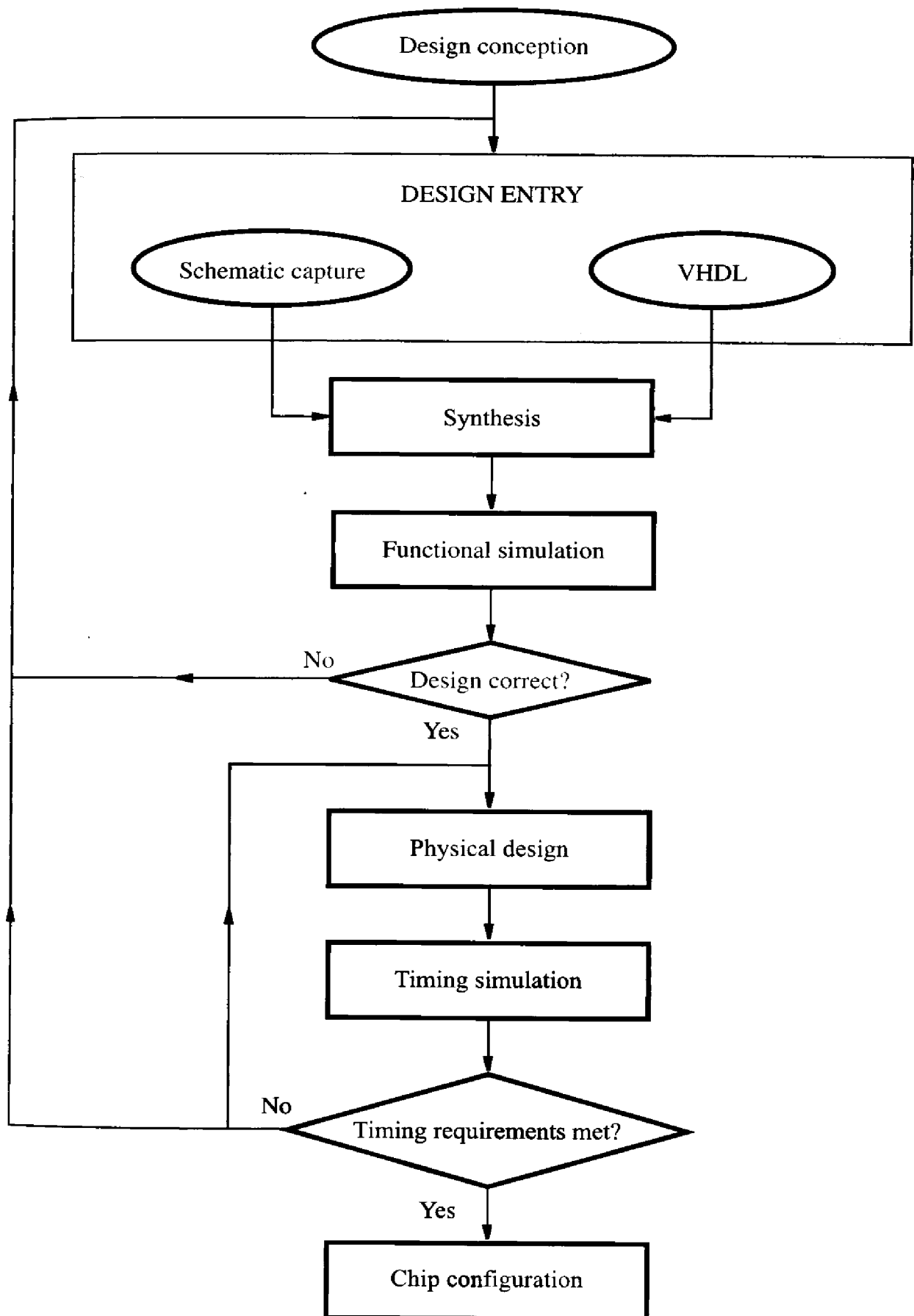


Figure 2.29 A typical CAD system.

time. In the remainder of this chapter, we discuss the most basic concepts needed to write simple VHDL code.

2.10.1 REPRESENTATION OF DIGITAL SIGNALS IN VHDL

When using CAD tools to synthesize a logic circuit, the designer can provide the initial description of the circuit in several different ways, as we explained in section 2.9.1. One efficient way is to write this description in the form of VHDL source code. The VHDL compiler translates this code into a logic circuit. Each logic signal in the circuit is represented in VHDL code as a data object. Just as the variables declared in any high-level programming language have associated types, such as integers or characters, data objects in VHDL can be of various types. The original VHDL standard, IEEE 1076, includes a data type called *BIT*. An object of this type is well suited for representing digital signals because *BIT* objects can have only two values, 0 and 1. In this chapter all signals in our examples will be of type *BIT*. Other data types are introduced in section 4.12 and are listed in Appendix A.

2.10.2 WRITING SIMPLE VHDL CODE

We will use an example to illustrate how to write simple VHDL source code. Consider the logic circuit in Figure 2.30. If we wish to write VHDL code to represent this circuit, the first step is to declare the input and output signals. This is done using a construct called an *entity*. An appropriate entity for this example appears in Figure 2.31. An entity must

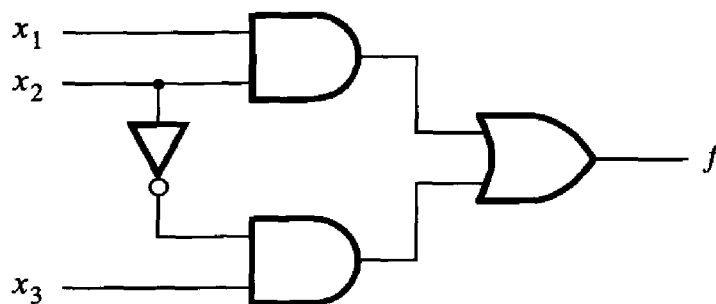


Figure 2.30 A simple logic function.

```
ENTITY example1 IS
    PORT ( x1, x2, x3 : IN  BIT ;
          f          : OUT BIT );
END example1 ;
```

Figure 2.31 VHDL entity declaration for the circuit in Figure 2.30.

be assigned a name; we have chosen the name *example1* for this first example. The input and output signals for the entity are called its *ports*, and they are identified by the keyword `PORT`. This name derives from the electrical jargon in which the word *port* refers to an input or output connection to an electronic circuit. Each port has an associated *mode* that specifies whether it is an input (IN) to the entity or an output (OUT) from the entity. Each port represents a signal, hence it has an associated type. The entity *example1* has four ports in total. The first three, x_1 , x_2 , and x_3 , are input signals of type BIT. The port named f is an output of type BIT.

In Figure 2.31 we have used simple signal names $x1$, $x2$, $x3$, and f for the entity's ports. Similar to most computer programming languages, VHDL has rules that specify which characters are allowed in signal names. A simple guideline is that signal names can include any letter or number, as well as the underscore character '_'. There are two caveats: a signal name must begin with a letter, and a signal name cannot be a VHDL keyword.

An entity specifies the input and output signals for a circuit, but it does not give any details as to what the circuit represents. The circuit's functionality must be specified with a VHDL construct called an *architecture*. An architecture for our example appears in Figure 2.32. It must be given a name, and we have chosen the name *LogicFunc*. Although the name can be any text string, it is sensible to assign a name that is meaningful to the designer. In this case we have chosen the name *LogicFunc* because the architecture specifies the functionality of the design using a logic expression. VHDL has built-in support for the following Boolean operators: AND, OR, NOT, NAND, NOR, XOR, and XNOR. (So far we have introduced AND, OR, NOT, NAND, and NOR operators; the others will be presented in Chapter 3.) Following the `BEGIN` keyword, our architecture specifies, using the VHDL signal assignment operator `<=`, that output f should be assigned the result of the logic expression on the right-hand side of the operator. Because VHDL does not assume any precedence of logic operators, parentheses are used in the expression. One might expect that an assignment statement such as

$$f \leq x1 \text{ AND } x2 \text{ OR NOT } x2 \text{ AND } x3$$

would have implied parentheses

$$f \leq (x1 \text{ AND } x2) \text{ OR } ((\text{NOT } x2) \text{ AND } x3)$$

But for VHDL code this assumption is not true. In fact, without the parentheses the VHDL compiler would produce a compile-time error for this expression.

Complete VHDL code for our example is given in Figure 2.33. This example has illustrated that a VHDL source code file has two main sections: an entity and an architecture.

```

ARCHITECTURE LogicFunc OF example1 IS
BEGIN
    f <= (x1 AND x2) OR (NOT x2 AND x3);
END LogicFunc ;

```

Figure 2.32 VHDL architecture for the entity in Figure 2.31.

```

ENTITY example1 IS
    PORT ( x1, x2, x3 : IN    BIT ;
          f           : OUT BIT ) ;
END example1 ;

ARCHITECTURE LogicFunc OF example1 IS
BEGIN
    f <= (x1 AND x2) OR (NOT x2 AND x3) ;
END LogicFunc ;

```

Figure 2.33 Complete VHDL code for the circuit in Figure 2.30.

```

ENTITY example2 IS
    PORT ( x1, x2, x3, x4 : IN    BIT ;
          f, g           : OUT BIT ) ;
END example2 ;

ARCHITECTURE LogicFunc OF example2 IS
BEGIN
    f <= (x1 AND x3) OR (NOT x3 AND x2) ;
    g <= (NOT x3 OR x1) AND (NOT x3 OR x4) ;
END LogicFunc ;

```

Figure 2.34 VHDL code for a four-input function.

A simple analogy for what each section represents is that the entity is equivalent to a symbol in a schematic diagram and the architecture specifies the logic circuitry inside the symbol.

A second example of VHDL code is given in Figure 2.34. This circuit has four input signals, called x_1 , x_2 , x_3 , and x_4 , and two output signals, named f and g . A logic expression is assigned to each output. A logic circuit produced by the VHDL compiler for this example is shown in Figure 2.35.

The preceding two examples indicate that one way to assign a value to a signal in VHDL code is by means of a logic expression. In VHDL terminology a logic expression is called a *simple assignment statement*. We will see later that VHDL also supports several other types of assignment statements and many other features that are useful for describing circuits that are much more complex.

2.10.3 HOW NOT TO WRITE VHDL CODE

When learning how to use VHDL or other hardware description languages, the tendency for the novice is to write code that resembles a computer program, containing many variables and loops. It is difficult to determine what logic circuit the CAD tools will produce when synthesizing such code. This book contains more than 100 examples of complete VHDL

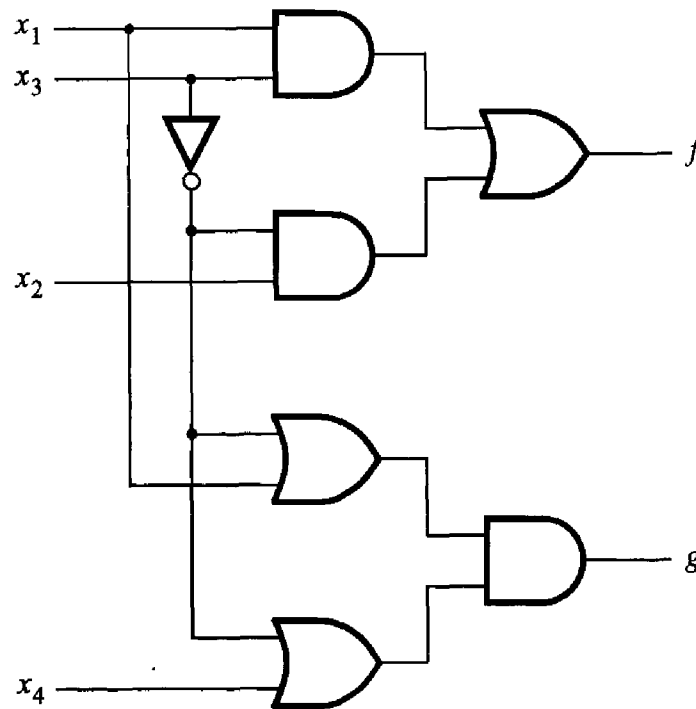


Figure 2.35 Logic circuit for the code in Figure 2.34.

code that represent a wide range of logic circuits. In these examples the code is easily related to the described logic circuit. The reader is advised to adopt the same style of code. A good general guideline is to assume that if the designer cannot readily determine what logic circuit is described by the VHDL code, then the CAD tools are not likely to synthesize the circuit that the designer is trying to model.

Once complete VHDL code is written for a particular design, the reader is encouraged to analyze the resulting circuit synthesized by the CAD tools. Much can be learned about VHDL, logic circuits, and logic synthesis through this process.

2.11 CONCLUDING REMARKS

In this chapter we introduced the concept of logic circuits. We showed that such circuits can be implemented using logic gates and that they can be described using a mathematical model called Boolean algebra. Because practical logic circuits are often large, it is important to have good CAD tools to help the designer. This book is accompanied by the Quartus II software, which is a CAD tool provided by Altera Corporation. We introduced a few basic features of this tool and urge the reader to start using this software as soon as possible.

Our discussion so far has been quite elementary. We will deal with both the logic circuits and the CAD tools in much more depth in the chapters that follow. But first, in Chapter 3 we will examine the most important electronic technologies used to construct logic circuits. This material will give the reader an appreciation of practical constraints that a designer of logic circuits must face.

2.12 EXAMPLES OF SOLVED PROBLEMS

This section presents some typical problems that the reader may encounter, and shows how such problems can be solved.

Example 2.8 Problem: Determine if the following equation is valid

$$\bar{x}_1\bar{x}_3 + x_2x_3 + x_1\bar{x}_2 = \bar{x}_1x_2 + x_1x_3 + \bar{x}_2\bar{x}_3$$

Solution: The equation is valid if the expressions on the left- and right-hand sides represent the same function. To perform the comparison, we could construct a truth table for each side and see if the truth tables are the same. An algebraic approach is to derive a canonical sum-of-product form for each expression.

Using the fact that $x + \bar{x} = 1$ (Theorem 8b), we can manipulate the left-hand side as follows:

$$\begin{aligned} \text{LHS} &= \bar{x}_1\bar{x}_3 + x_2x_3 + x_1\bar{x}_2 \\ &= \bar{x}_1(x_2 + \bar{x}_2)\bar{x}_3 + (x_1 + \bar{x}_1)x_2x_3 + x_1\bar{x}_2(x_3 + \bar{x}_3) \\ &= \bar{x}_1x_2\bar{x}_3 + \bar{x}_1\bar{x}_2\bar{x}_3 + x_1x_2x_3 + \bar{x}_1x_2x_3 + x_1\bar{x}_2x_3 + x_1\bar{x}_2\bar{x}_3 \end{aligned}$$

These product terms represent the minterms 2, 0, 7, 3, 5, and 4, respectively.

For the right-hand side we have

$$\begin{aligned} \text{RHS} &= \bar{x}_1x_2 + x_1x_3 + \bar{x}_2\bar{x}_3 \\ &= \bar{x}_1x_2(x_3 + \bar{x}_3) + x_1(x_2 + \bar{x}_2)x_3 + (x_1 + \bar{x}_1)\bar{x}_2\bar{x}_3 \\ &= \bar{x}_1x_2x_3 + \bar{x}_1x_2\bar{x}_3 + x_1x_2x_3 + x_1\bar{x}_2x_3 + x_1\bar{x}_2\bar{x}_3 + \bar{x}_1\bar{x}_2\bar{x}_3 \end{aligned}$$

These product terms represent the minterms 3, 2, 7, 5, 4, and 0, respectively. Since both expressions specify the same minterms, they represent the same function; therefore, the equation is valid. Another way of representing this function is by $\sum m(0, 2, 3, 4, 5, 7)$.

Example 2.9 Problem: Design the minimum-cost product-of-sums expression for the function $f(x_1, x_2, x_3, x_4) = \sum m(0, 2, 4, 5, 6, 7, 8, 10, 12, 14, 15)$.

Solution: The function is defined in terms of its minterms. To find a POS expression we should start with the definition in terms of maxterms, which is $f = \prod M(1, 3, 9, 11, 13)$.

Thus,

$$\begin{aligned} f &= M_1 \cdot M_3 \cdot M_9 \cdot M_{11} \cdot M_{13} \\ &= (x_1 + x_2 + x_3 + \bar{x}_4)(x_1 + x_2 + \bar{x}_3 + \bar{x}_4)(\bar{x}_1 + x_2 + x_3 + \bar{x}_4)(\bar{x}_1 + x_2 + \bar{x}_3 + \bar{x}_4)(\bar{x}_1 + \bar{x}_2 + x_3 + \bar{x}_4) \end{aligned}$$

We can rewrite the product of the first two maxterms as

$$\begin{aligned}
 M_1 \cdot M_3 &= (x_1 + x_2 + \bar{x}_4 + x_3)(x_1 + x_2 + \bar{x}_4 + \bar{x}_3) && \text{using commutative property 10b} \\
 &= x_1 + x_2 + \bar{x}_4 + x_3\bar{x}_3 && \text{using distributive property 12b} \\
 &= x_1 + x_2 + \bar{x}_4 + 0 && \text{using theorem 8a} \\
 &= x_1 + x_2 + \bar{x}_4 && \text{using theorem 6b}
 \end{aligned}$$

Similarly, $M_9 \cdot M_{11} = \bar{x}_1 + x_2 + \bar{x}_4$. Now, we can use M_{11} again, according to property 7a, to derive $M_{11} \cdot M_{13} = \bar{x}_1 + x_3 + \bar{x}_4$. Hence

$$f = (x_1 + x_2 + \bar{x}_4)(\bar{x}_1 + x_2 + \bar{x}_4)(\bar{x}_1 + x_3 + \bar{x}_4)$$

Applying 12b again, we get the final answer

$$f = (x_2 + \bar{x}_4)(\bar{x}_1 + x_3 + \bar{x}_4)$$

Problem: A circuit that controls a given digital system has three inputs: x_1 , x_2 , and x_3 . It **Exa** has to recognize three different conditions:

- Condition A is true if x_3 is true and either x_1 is true or x_2 is false
- Condition B is true if x_1 is true and either x_2 or x_3 is false
- Condition C is true if x_2 is true and either x_1 is true or x_3 is false

The control circuit must produce an output of 1 if at least two of the conditions A, B, and C are true. Design the simplest circuit that can be used for this purpose.

Solution: Using 1 for true and 0 for false, we can express the three conditions as follows:

$$\begin{aligned}
 A &= x_3(x_1 + \bar{x}_2) = x_3x_1 + x_3\bar{x}_2 \\
 B &= x_1(\bar{x}_2 + \bar{x}_3) = x_1\bar{x}_2 + x_1\bar{x}_3 \\
 C &= x_2(x_1 + \bar{x}_3) = x_2x_1 + x_2\bar{x}_3
 \end{aligned}$$

Then, the desired output of the circuit can be expressed as $f = AB + AC + BC$. These product terms can be determined as:

$$\begin{aligned}
 AB &= (x_3x_1 + x_3\bar{x}_2)(x_1\bar{x}_2 + x_1\bar{x}_3) \\
 &= x_3x_1x_1\bar{x}_2 + x_3x_1x_1\bar{x}_3 + x_3\bar{x}_2x_1\bar{x}_2 + x_3\bar{x}_2x_1\bar{x}_3 \\
 &= x_3x_1\bar{x}_2 + 0 + x_3\bar{x}_2x_1 + 0 \\
 &= x_1\bar{x}_2x_3
 \end{aligned}$$

$$\begin{aligned}
 AC &= (x_3x_1 + x_3\bar{x}_2)(x_2x_1 + x_2\bar{x}_3) \\
 &= x_3x_1x_2x_1 + x_3x_1x_2\bar{x}_3 + x_3\bar{x}_2x_2x_1 + x_3\bar{x}_2x_2\bar{x}_3 \\
 &= x_3x_1x_2 + 0 + 0 + 0 \\
 &= x_1x_2x_3
 \end{aligned}$$

$$\begin{aligned}
 BC &= (x_1\bar{x}_2 + x_1\bar{x}_3)(x_2x_1 + x_2\bar{x}_3) \\
 &= x_1\bar{x}_2x_2x_1 + x_1\bar{x}_2x_2\bar{x}_3 + x_1\bar{x}_3x_2x_1 + x_1\bar{x}_3x_2\bar{x}_3 \\
 &= 0 + 0 + x_1\bar{x}_3x_2 + x_1\bar{x}_3x_2 \\
 &= x_1x_2\bar{x}_3
 \end{aligned}$$

Therefore, f can be written as

$$\begin{aligned}
 f &= x_1\bar{x}_2x_3 + x_1x_2x_3 + x_1x_2\bar{x}_3 \\
 &= x_1(\bar{x}_2 + x_2)x_3 + x_1x_2(x_3 + \bar{x}_3) \\
 &= x_1x_3 + x_1x_2 \\
 &= x_1(x_3 + x_2)
 \end{aligned}$$

Example 2.11 Problem: Solve the problem in Example 2.10 by using Venn diagrams.

Solution: The Venn diagrams for functions A , B , and C in Example 2.10 are shown in parts a to c of Figure 2.36. Since the function f has to be true when two or more of A , B , and C are true, then the Venn diagram for f is formed by identifying the common shaded areas in the Venn diagrams for A , B , and C . Any area that is shaded in two or more of these diagrams is also shaded in f , as shown in Figure 2.36d. This diagram corresponds to the function

$$f = x_1x_2 + x_1x_3 = x_1(x_2 + x_3)$$

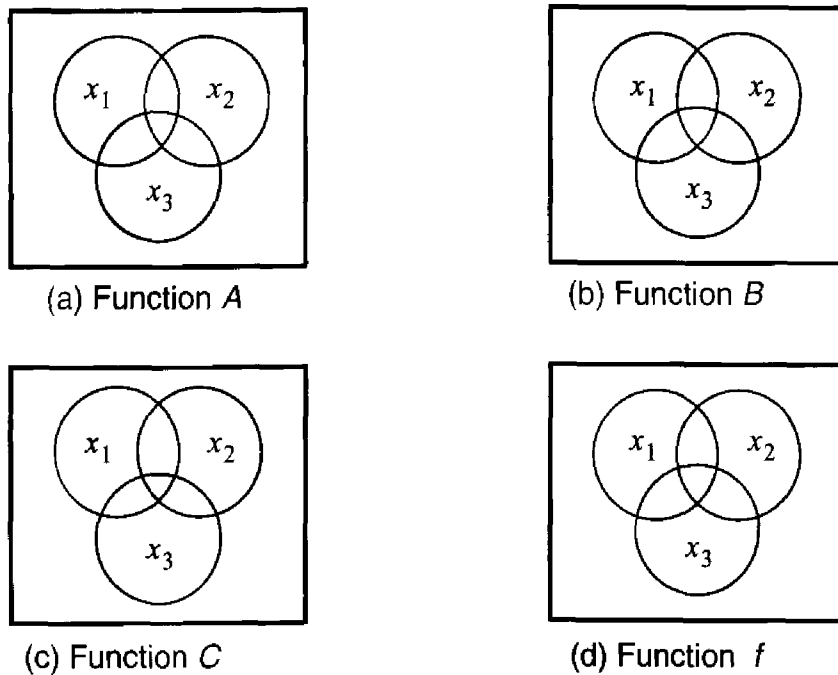


Figure 2.36 The Venn diagrams for Example 2.11.

Problem: Derive the simplest sum-of-products expression for the function

Exam

$$f = x_2\bar{x}_3x_4 + x_1x_3x_4 + x_1\bar{x}_2x_4$$

Solution: Applying the consensus property 17a to the first two terms yields

$$\begin{aligned} f &= x_2\bar{x}_3x_4 + x_1x_3x_4 + x_2x_4x_1x_4 + x_1\bar{x}_2x_4 \\ &= x_2\bar{x}_3x_4 + x_1x_3x_4 + x_1x_2x_4 + x_1\bar{x}_2x_4 \end{aligned}$$

Now, using the combining property 14a for the last two terms gives

$$f = x_2\bar{x}_3x_4 + x_1x_3x_4 + x_1x_4$$

Finally, using the absorption property 13a produces

$$f = x_2\bar{x}_3x_4 + x_1x_4$$

Problem: Derive the simplest product-of-sums expression for the function

Exam

$$f = (\bar{x}_1 + x_2 + x_3)(\bar{x}_1 + \bar{x}_2 + \bar{x}_4)(\bar{x}_1 + x_3 + x_4)$$

Solution: Applying the consensus property 17b to the first two terms yields

$$\begin{aligned} f &= (\bar{x}_1 + x_2 + x_3)(\bar{x}_1 + \bar{x}_2 + \bar{x}_4)(\bar{x}_1 + x_3 + \bar{x}_1 + \bar{x}_4)(\bar{x}_1 + x_3 + x_4) \\ &= (\bar{x}_1 + x_2 + x_3)(\bar{x}_1 + \bar{x}_2 + \bar{x}_4)(\bar{x}_1 + x_3 + \bar{x}_4)(\bar{x}_1 + x_3 + x_4) \end{aligned}$$

Now, using the combining property 14b for the last two terms gives

$$f = (\bar{x}_1 + x_2 + x_3)(\bar{x}_1 + \bar{x}_2 + \bar{x}_4)(\bar{x}_1 + x_3)$$

Finally, using the absorption property 13b on the first and last terms produces

$$f = (\bar{x}_1 + \bar{x}_2 + \bar{x}_4)(\bar{x}_1 + x_3)$$

PROBLEMS

Answers to problems marked by an asterisk are given at the back of the book.

- 2.1** Use algebraic manipulation to prove that $x + yz = (x + y) \cdot (x + z)$. Note that distributive rule, as stated in identity 12b in section 2.5.
- 2.2** Use algebraic manipulation to prove that $(x + y) \cdot (x + \bar{y}) = x$.
- 2.3** Use algebraic manipulation to prove that $xy + yz + \bar{x}z = xy + \bar{x}z$. Note that consensus property 17a in section 2.5.
- 2.4** Use the Venn diagram to prove the identity in problem 1.

2.5 Use the Venn diagram to prove DeMorgan's theorem, as given in expressions 15a and 15b in section 2.5.

2.6 Use the Venn diagram to prove that

$$(x_1 + x_2 + x_3) \cdot (x_1 + x_2 + \bar{x}_3) = x_1 + x_2$$

***2.7** Determine whether or not the following expressions are valid, i.e., whether the left- and right-hand sides represent same function.

(a) $\bar{x}_1x_3 + x_1x_2\bar{x}_3 + \bar{x}_1x_2 + x_1\bar{x}_2 = \bar{x}_2x_3 + x_1\bar{x}_3 + x_2\bar{x}_3 + \bar{x}_1x_2x_3$

(b) $x_1\bar{x}_3 + x_2x_3 + \bar{x}_2\bar{x}_3 = (x_1 + \bar{x}_2 + x_3)(x_1 + x_2 + \bar{x}_3)(\bar{x}_1 + x_2 + \bar{x}_3)$

(c) $(x_1 + x_3)(\bar{x}_1 + \bar{x}_2 + \bar{x}_3)(\bar{x}_1 + x_2) = (x_1 + x_2)(x_2 + x_3)(\bar{x}_1 + \bar{x}_3)$

2.8 Draw a timing diagram for the circuit in Figure 2.19a. Show the waveforms that can be observed on all wires in the circuit.

2.9 Repeat problem 2.8 for the circuit in Figure 2.19b.

2.10 Use algebraic manipulation to show that for three input variables x_1 , x_2 , and x_3

$$\sum m(1, 2, 3, 4, 5, 6, 7) = x_1 + x_2 + x_3$$

2.11 Use algebraic manipulation to show that for three input variables x_1 , x_2 , and x_3

$$\prod M(0, 1, 2, 3, 4, 5, 6) = x_1x_2x_3$$

2.12 Use algebraic manipulation to find the minimum sum-of-products expression for the function $f = x_1x_3 + x_1\bar{x}_2 + \bar{x}_1x_2x_3 + \bar{x}_1\bar{x}_2\bar{x}_3$.

2.13 Use algebraic manipulation to find the minimum sum-of-products expression for the function $f = x_1\bar{x}_2\bar{x}_3 + x_1x_2x_4 + x_1\bar{x}_2x_3\bar{x}_4$.

2.14 Use algebraic manipulation to find the minimum product-of-sums expression for the function $f = (x_1 + x_3 + x_4) \cdot (x_1 + \bar{x}_2 + x_3) \cdot (x_1 + \bar{x}_2 + \bar{x}_3 + x_4)$.

2.15 Use algebraic manipulation to find the minimum product-of-sums expression for the function $f = (x_1 + x_2 + x_3) \cdot (x_1 + \bar{x}_2 + x_3) \cdot (\bar{x}_1 + \bar{x}_2 + x_3) \cdot (x_1 + x_2 + \bar{x}_3)$.

2.16 (a) Show the location of all minterms in a three-variable Venn diagram.

(b) Show a separate Venn diagram for each product term in the function $f = x_1\bar{x}_2x_3 + x_1x_2 + \bar{x}_1x_3$. Use the Venn diagram to find the minimal sum-of-products form of f .

2.17 Represent the function in Figure 2.18 in the form of a Venn diagram and find its minimal sum-of-products form.

2.18 Figure P2.1 shows two attempts to draw a Venn diagram for four variables. For parts (a) and (b) of the figure, explain why the Venn diagram is not correct. (Hint: the Venn diagram must be able to represent all 16 minterms of the four variables.)

2.19 Figure P2.2 gives a representation of a four-variable Venn diagram and shows the location of minterms m_0 , m_1 , and m_2 . Show the location of the other minterms in the diagram. Represent the function $f = \bar{x}_1\bar{x}_2x_3\bar{x}_4 + x_1x_2x_3x_4 + \bar{x}_1x_2$ on this diagram.

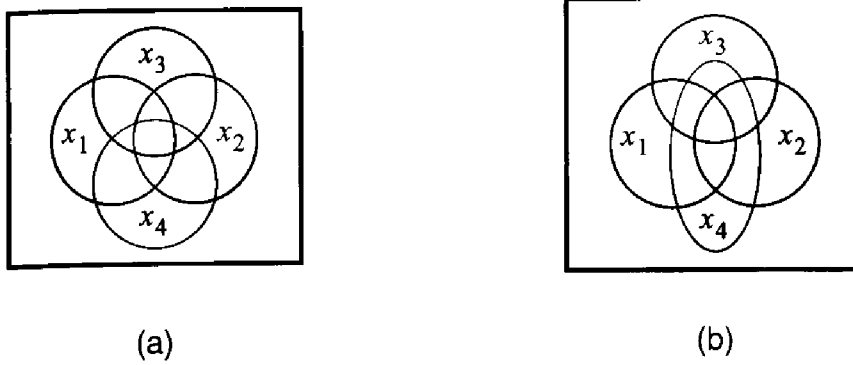


Figure P2.1 Two attempts to draw a four-variable Venn diagram.

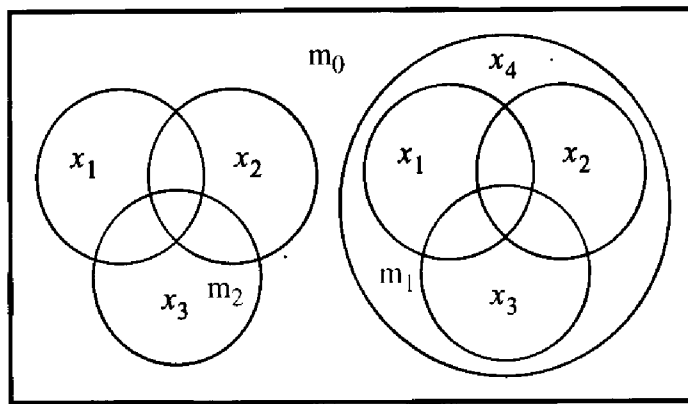


Figure P2.2 A four-variable Venn diagram.

- *2.20** Design the simplest sum-of-products circuit that implements the function $f(x_1, x_2, x_3) = \sum m(3, 4, 6, 7)$.
- 2.21** Design the simplest sum-of-products circuit that implements the function $f(x_1, x_2, x_3) = \sum m(1, 3, 4, 6, 7)$.
- 2.22** Design the simplest product-of-sums circuit that implements the function $f(x_1, x_2, x_3) = \Pi M(0, 2, 5)$.
- *2.23** Design the simplest product-of-sums expression for the function $f(x_1, x_2, x_3) = \Pi M(0, 1, 5, 7)$.
- 2.24** Derive the simplest sum-of-products expression for the function $f(x_1, x_2, x_3, x_4) = x_1\bar{x}_3\bar{x}_4 + x_2\bar{x}_3x_4 + x_1\bar{x}_2\bar{x}_3$.
- 2.25** Derive the simplest sum-of-products expression for the function $f(x_1, x_2, x_3, x_4, x_5) = \bar{x}_1\bar{x}_3\bar{x}_5 + \bar{x}_1\bar{x}_3\bar{x}_4 + \bar{x}_1x_4x_5 + x_1\bar{x}_2\bar{x}_3x_5$. (Hint: Use the consensus property 17a.)
- 2.26** Derive the simplest product-of-sums expression for the function $f(x_1, x_2, x_3, x_4) = (\bar{x}_1 + \bar{x}_3 + \bar{x}_4)(\bar{x}_2 + \bar{x}_3 + x_4)(x_1 + \bar{x}_2 + \bar{x}_3)$. (Hint: Use the consensus property 17b.)

- 2.27** Derive the simplest product-of-sums expression for the function $f(x_1, x_2, x_3, x_4, x_5) = (\bar{x}_2 + x_3 + x_5)(x_1 + \bar{x}_3 + x_5)(x_1 + x_2 + x_5)(x_1 + \bar{x}_4 + \bar{x}_5)$. (Hint: Use the consensus property 17b.)
- *2.28** Design the simplest circuit that has three inputs, x_1, x_2 , and x_3 , which produces an output value of 1 whenever two or more of the input variables have the value 1; otherwise, the output has to be 0.
- 2.29** Design the simplest circuit that has three inputs, x_1, x_2 , and x_3 , which produces an output value of 1 whenever exactly one or two of the input variables have the value 1; otherwise, the output has to be 0.
- 2.30** Design the simplest circuit that has four inputs, x_1, x_2, x_3 , and x_4 , which produces an output value of 1 whenever three or more of the input variables have the value 1; otherwise, the output has to be 0.
- 2.31** For the timing diagram in Figure P2.3, synthesize the function $f(x_1, x_2, x_3)$ in the simplest sum-of-products form.

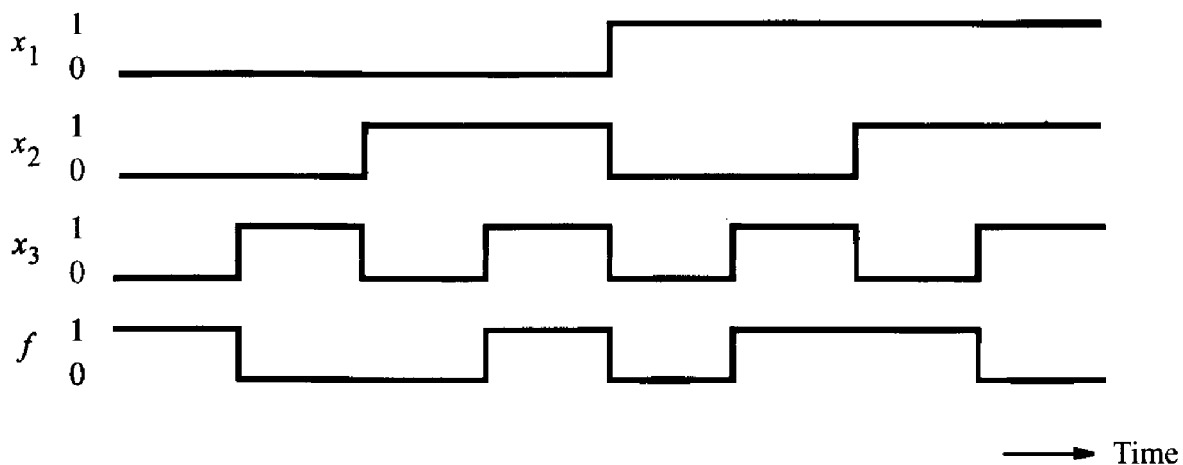


Figure P2.3 A timing diagram representing a logic function.

- *2.32** For the timing diagram in Figure P2.3, synthesize the function $f(x_1, x_2, x_3)$ in the simplest product-of-sums form.
- *2.33** For the timing diagram in Figure P2.4, synthesize the function $f(x_1, x_2, x_3)$ in the simplest sum-of-products form.
- 2.34** For the timing diagram in Figure P2.4, synthesize the function $f(x_1, x_2, x_3)$ in the simplest product-of-sums form.
- 2.35** Design a circuit with output f and inputs x_1, x_0, y_1 , and y_0 . Let $X = x_1x_0$ be a number, where the four possible values of X , namely, 00, 01, 10, and 11, represent the four numbers 0, 1, 2, and 3, respectively. (We discuss representation of numbers in Chapter 5.) Similarly, let $Y = y_1y_0$ represent another number with the same four possible values. The output f should be 1 if the numbers represented by X and Y are equal. Otherwise, f should be 0.
- (a) Show the truth table for f .
- (b) Synthesize the simplest possible product-of-sums expression for f .

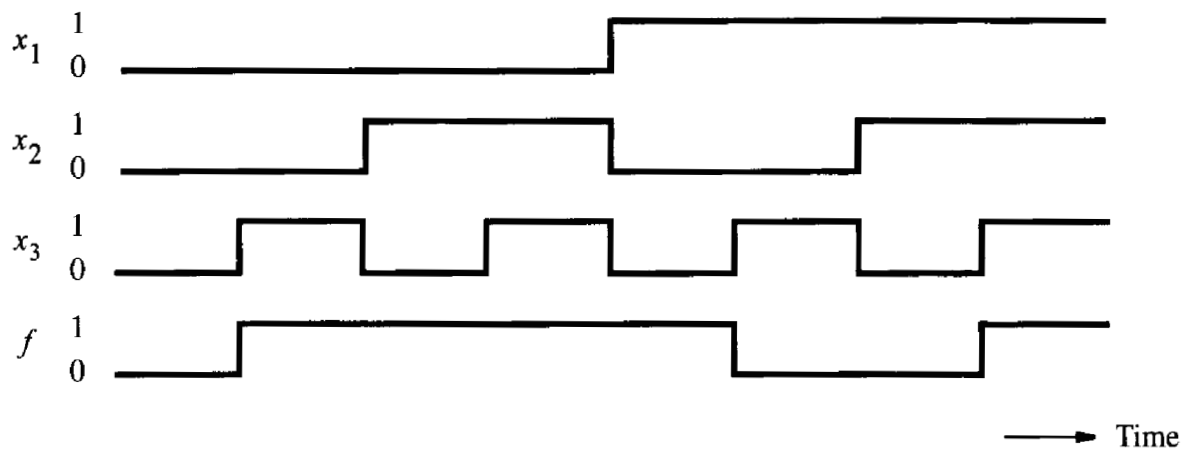


Figure P2.4 A timing diagram representing a logic function.

- 2.36** Repeat problem 2.35 for the case where f should be 1 only if $X \geq Y$.
 (a) Show the truth table for f .
 (b) Show the canonical sum-of-products expression for f .
 (c) Show the simplest possible sum-of-products expression for f .
- 2.37** Implement the function in Figure 2.26 using only NAND gates.
- 2.38** Implement the function in Figure 2.26 using only NOR gates.
- 2.39** Implement the circuit in Figure 2.35 using NAND and NOR gates.
- *2.40** Design the simplest circuit that implements the function $f(x_1, x_2, x_3) = \sum m(3, 4, 6)$, using NAND gates.
- 2.41** Design the simplest circuit that implements the function $f(x_1, x_2, x_3) = \sum m(1, 3, 4, 6)$, using NAND gates.
- *2.42** Repeat problem 2.40 using NOR gates.
- 2.43** Repeat problem 2.41 using NOR gates.
- 2.44** (a) Use a schematic capture tool to draw schematics for the following functions
- $$f_1 = x_2\bar{x}_3\bar{x}_4 + \bar{x}_1x_2x_4 + \bar{x}_1x_2x_3 + x_1x_2x_3$$
- $$f_2 = x_2\bar{x}_4 + \bar{x}_1x_2 + x_2x_3$$
- (b) Use functional simulation to prove that $f_1 = f_2$.
- 2.45** (a) Use a schematic capture tool to draw schematics for the following functions
- $$f_1 = (x_1 + x_2 + \bar{x}_4) \cdot (\bar{x}_2 + x_3 + \bar{x}_4) \cdot (\bar{x}_1 + x_3 + \bar{x}_4) \cdot (\bar{x}_1 + \bar{x}_3 + \bar{x}_4)$$
- $$f_2 = (x_2 + \bar{x}_4) \cdot (x_3 + \bar{x}_4) \cdot (\bar{x}_1 + \bar{x}_4)$$
- (b) Use functional simulation to prove that $f_1 = f_2$.
- 2.46** Write VHDL code to implement the function $f(x_1, x_2, x_3) = \sum m(0, 1, 3, 4, 5, 6)$.

2.47 (a) Write VHDL code to describe the following functions

$$f_1 = x_1\bar{x}_3 + x_2\bar{x}_3 + \bar{x}_3\bar{x}_4 + x_1x_2 + x_1\bar{x}_4$$

$$f_2 = (x_1 + \bar{x}_3) \cdot (x_1 + x_2 + \bar{x}_4) \cdot (x_2 + \bar{x}_3 + \bar{x}_4)$$

(b) Use functional simulation to prove that $f_1 = f_2$.

2.48 Consider the following VHDL assignment statements

```
f1 <= ((x1 AND x3) OR (NOT x1 AND NOT x3)) OR ((x2 AND x4) OR
(NOT x2 AND NOT x4)) ;
```

```
f2 <= (x1 AND x2 AND NOT x3 AND NOT x4) OR (NOT x1 AND NOT x2 AND x3 AND x4)
OR (x1 AND NOT x2 AND NOT x3 AND x4) OR
(NOT x1 AND x2 AND x3 AND NOT x4) ;
```

(a) Write complete VHDL code to implement f_1 and f_2 .

(b) Use functional simulation to prove that $f_1 = f_2$.

REFERENCES

1. G. Boole, *An Investigation of the Laws of Thought*, 1854, reprinted by Dover Publications, New York, 1954.
2. C. E. Shannon, "A Symbolic Analysis of Relay and Switching Circuits," *Transactions of AIEE* 57 (1938), pp. 713–723.
3. E. V. Huntington, "Sets of Independent Postulates for the Algebra of Logic," *Transactions of the American Mathematical Society* 5 (1904), pp. 288–309.
4. S. Brown and Z. Vranesic, *Fundamentals of Digital Logic with Verilog Design*, (McGraw-Hill: New York, 2003).
5. Z. Navabi, *VHDL—Analysis and Modeling of Digital Systems*, 2nd ed. (McGraw-Hill: New York, 1998).
6. D. L. Perry, *VHDL*, 3rd ed. (McGraw-Hill: New York, 1998).
7. J. Bhasker, *A VHDL Primer*, 3rd ed. (Prentice-Hall: Englewood Cliffs, NJ, 1998).
8. K. Skahill, *VHDL for Programmable Logic* (Addison-Wesley: Menlo Park, CA, 1996).
9. A. Dewey, *Analysis and Design of Digital Systems with VHDL* (PWS Publishing Co.: Boston, 1997).
10. D. J. Smith, *HDL Chip Design*, (Doone Publications: Madison, AL, 1996).

chapter

3

IMPLEMENTATION TECHNOLOGY

CHAPTER OBJECTIVES

In this chapter you will be introduced to:

- How transistors operate and form simple switches
- Integrated circuit technology
- CMOS logic gates
- Field-programmable gate arrays and other programmable logic devices
- Basic characteristics of electronic circuits

In section 1.2 we said that logic circuits are implemented using transistors and that a number of different technologies exist. We now explore technology issues in more detail.

Let us first consider how logic variables can be physically represented as signals in electronic circuits. Our discussion will be restricted to binary variables, which can take on only the values 0 and 1. In a circuit these values can be represented either as levels of voltage or current. Both alternatives are used in different technologies. We will focus on the simplest and most popular representation, using voltage levels.

The most obvious way of representing two logic values as voltage levels is to define a *threshold* voltage; any voltage below the threshold represents one logic value, and voltages above the threshold correspond to the other logic value. It is an arbitrary choice as to which logic value is associated with the low and high voltage levels. Usually, logic 0 is represented by the low voltage levels and logic 1 by the high voltages. This is known as a *positive logic* system. The opposite choice, in which the low voltage levels are used to represent logic 1 and the higher voltages are used for logic 0 is known as a *negative logic* system. In this book we use only the positive logic system, but negative logic is discussed briefly in section 3.4.

Using the positive logic system, the logic values 0 and 1 are referred to simply as “low” and “high.” To implement the threshold-voltage concept, a range of low and high voltage levels is defined, as shown in Figure 3.1. The figure gives the minimum voltage, called V_{SS} , and the maximum voltage, called V_{DD} , that can exist in the circuit. We will assume that V_{SS} is 0 volts, corresponding to electrical ground, denoted *Gnd*. The voltage V_{DD} represents the power supply voltage. The most common levels for V_{DD} are between 5 volts and 1 volt. In this chapter we will mostly use the value $V_{DD} = 5$ V. Figure 3.1 indicates that voltages in the range *Gnd* to $V_{0,max}$ represent logic value 0. The name $V_{0,max}$ means the maximum voltage level that a logic circuit must recognize as low. Similarly, the range from $V_{1,min}$ to V_{DD} corresponds to logic value 1, and $V_{1,min}$ is the minimum voltage level that a logic circuit must interpret as high. The exact levels of $V_{0,max}$ and $V_{1,min}$

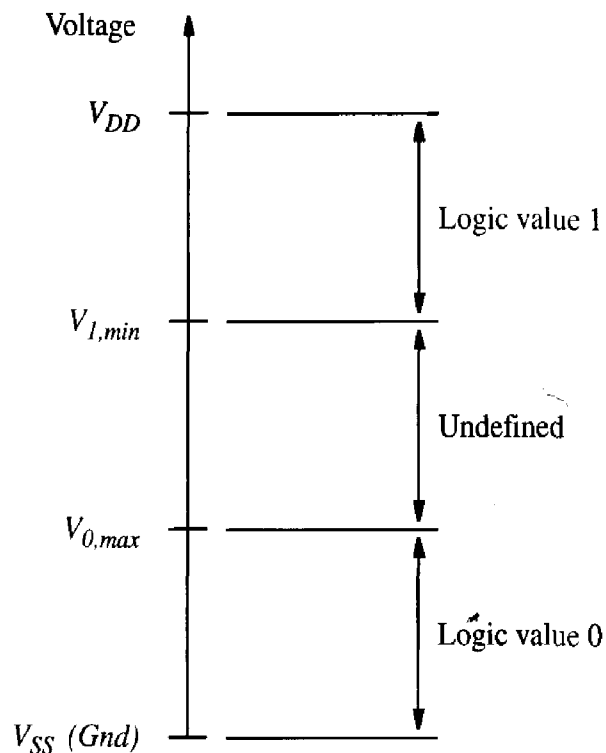


Figure 3.1 Representation of logic values by voltage levels.

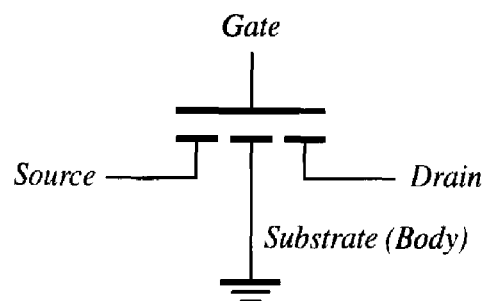
depend on the particular technology used; a typical example might set $V_{0,max}$ to 40 percent of V_{DD} and $V_{1,min}$ to 60 percent of V_{DD} . The range of voltages between $V_{0,max}$ and $V_{1,min}$ is undefined. Logic signals do not normally assume voltages in this range except in transition from one logic value to the other. We will discuss the voltage levels used in logic circuits in more depth in section 3.8.3.

3.1 TRANSISTOR SWITCHES

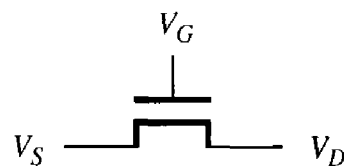
Logic circuits are built with transistors. A full treatment of transistor behavior is beyond the scope of this text; it can be found in electronics textbooks, such as [1] and [2]. For the purpose of understanding how logic circuits are built, we can assume that a transistor operates as a simple switch. Figure 3.2a shows a switch controlled by a logic signal, x . When x is low, the switch is open, and when x is high, the switch is closed. The most popular type of transistor for implementing a simple switch is the *metal oxide semiconductor field-effect transistor (MOSFET)*. There are two different types of MOSFETs, known as *n-channel*, abbreviated *NMOS*, and *p-channel*, denoted *PMOS*.



(a) A simple switch controlled by the input x



(b) NMOS transistor



(c) Simplified symbol for an NMOS transistor

Figure 3.2 NMOS transistor as a switch.

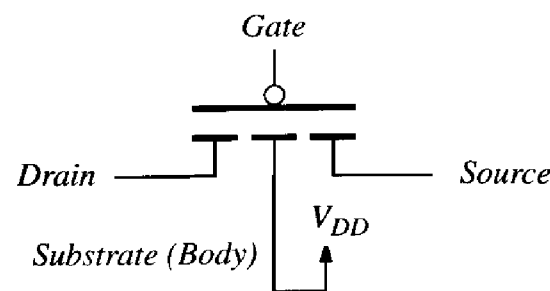
Figure 3.2*b* gives a graphical symbol for an NMOS transistor. It has four electrical terminals, called the *source*, *drain*, *gate*, and *substrate*. In logic circuits the substrate (also called *body*) terminal is connected to *Gnd*. We will use the simplified graphical symbol in Figure 3.2*c*, which omits the substrate node. There is no physical difference between the source and drain terminals. They are distinguished in practice by the voltage levels applied to the transistor; by convention, the terminal with the lower voltage level is deemed to be the source.

A detailed explanation of how the transistor operates will be presented in section 3.8.1. For now it is sufficient to know that it is controlled by the voltage V_G at the gate terminal. If V_G is low, then there is no connection between the source and drain, and we say that the transistor is *turned off*. If V_G is high, then the transistor is *turned on* and acts as a closed switch that connects the source and drain terminals. In section 3.8.2 we show how to calculate the resistance between the source and drain terminals when the transistor is turned on, but for now assume that the resistance is 0Ω .

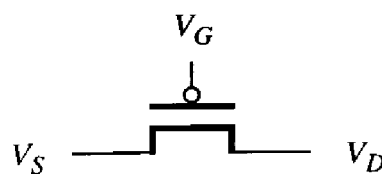
PMOS transistors have the opposite behavior of NMOS transistors. The former are used to realize the type of switch illustrated in Figure 3.3*a*, where the switch is open when the control input x is high and closed when x is low. A symbol is shown in Figure 3.3*b*. In logic circuits the substrate of the PMOS transistor is always connected to V_{DD} , leading



(a) A switch with the opposite behavior of Figure 3.2*a*



(b) PMOS transistor



(c) Simplified symbol for an PMOS transistor

Figure 3.3 PMOS transistor as a switch.

to the simplified symbol in Figure 3.3c. If V_G is high, then the PMOS transistor is turned off and acts like an open switch. When V_G is low, the transistor is turned on and acts as a closed switch that connects the source and drain. In the PMOS transistor the source is the node with the higher voltage.

Figure 3.4 summarizes the typical use of NMOS and PMOS transistors in logic circuits. An NMOS transistor is turned on when its gate terminal is high, while a PMOS transistor is turned on when its gate is low. When the NMOS transistor is turned on, its drain is *pulled down* to Gnd , and when the PMOS transistor is turned on, its drain is *pulled up* to V_{DD} . Because of the way the transistors operate, an NMOS transistor cannot be used to pull its drain terminal completely up to V_{DD} . Similarly, a PMOS transistor cannot be used to pull its drain terminal completely down to Gnd . We discuss the operation of MOSFETs in considerable detail in section 3.8.

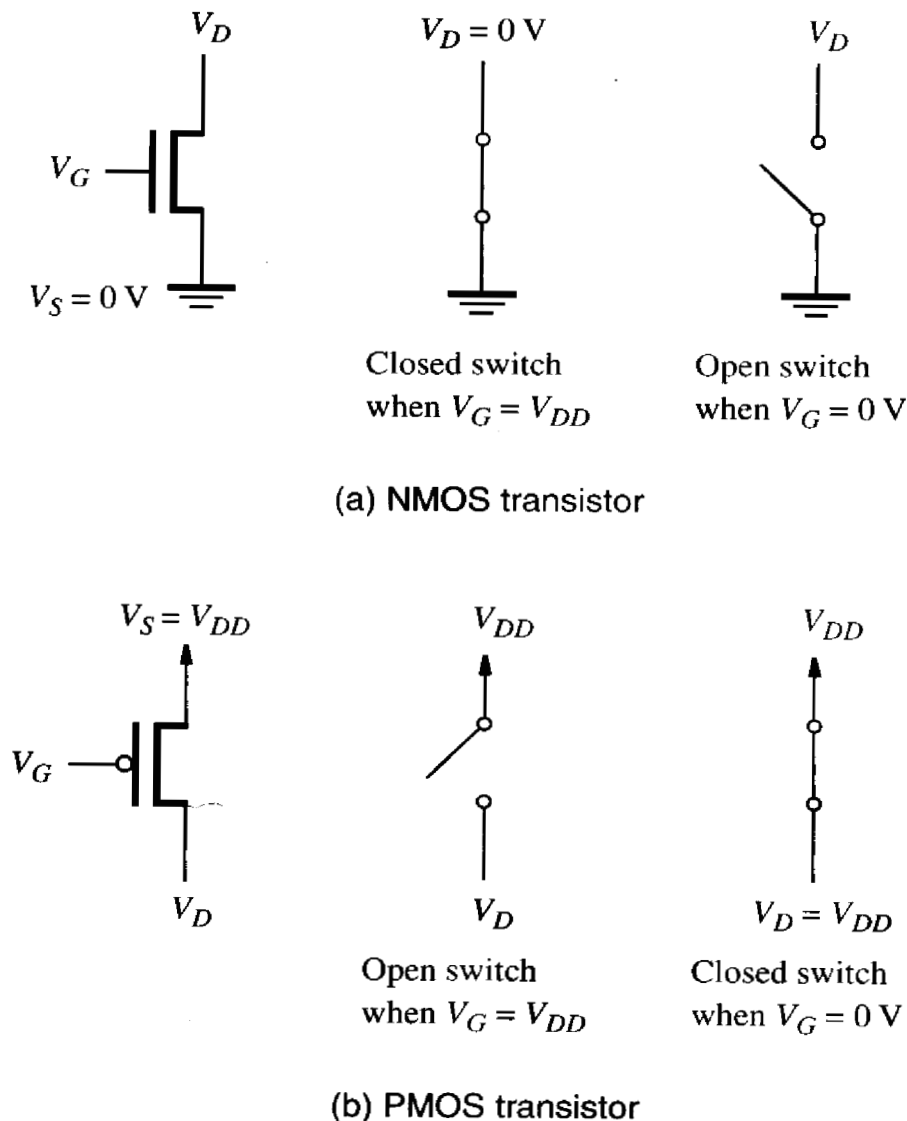


Figure 3.4 NMOS and PMOS transistors in logic circuits.

3.2 NMOS LOGIC GATES

The first schemes for building logic gates with MOSFETs became popular in the 1970s and relied on either PMOS or NMOS transistors, but not both. Since the early 1980s, a combination of both NMOS and PMOS transistors has been used. We will first describe how logic circuits can be built using NMOS transistors because these circuits are easier to understand. Such circuits are known as NMOS circuits. Then we will show how NMOS and PMOS transistors are combined in the presently popular technology known as *complementary MOS*, or *CMOS*.

In the circuit in Figure 3.5a, when $V_x = 0$ V, the NMOS transistor is turned off. No current flows through the resistor R , and $V_f = 5$ V. On the other hand, when $V_x = 5$ V, the transistor is turned on and pulls V_f to a low voltage level. The exact voltage level of V_f in this case depends on the amount of current that flows through the resistor and transistor. Typically, V_f is about 0.2 V (see section 3.8.3). If V_f is viewed as a function of V_x , then the circuit is an NMOS implementation of a NOT gate. In logic terms this circuit implements the function $f = \bar{x}$. Figure 3.5b gives a simplified circuit diagram in which the connection to the positive terminal on the power supply is indicated by an arrow labeled V_{DD} and the

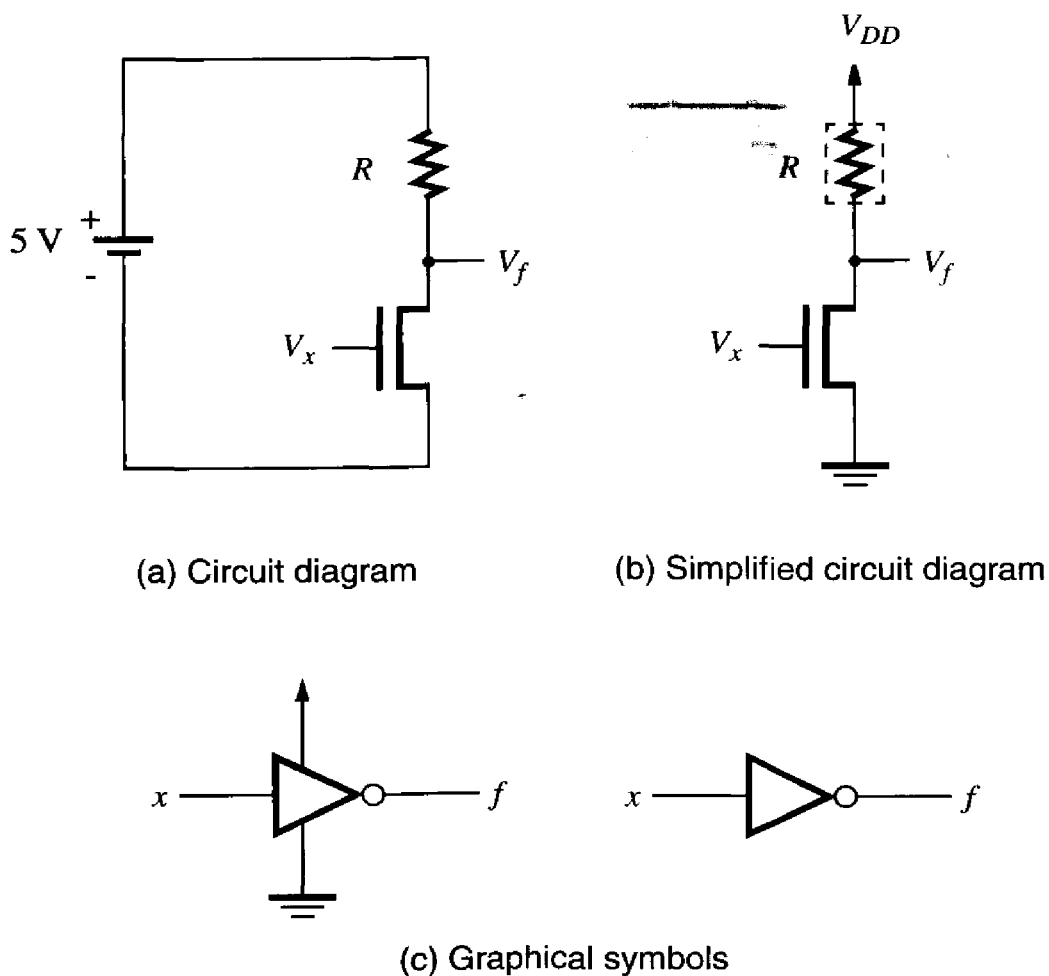


Figure 3.5 A NOT gate built using NMOS technology.

connection to the negative power-supply terminal is indicated by the *Gnd* symbol. We will use this simplified style of circuit diagram throughout this chapter.

The purpose of the resistor in the NOT gate circuit is to limit the amount of current that flows when $V_x = 5$ V. Rather than using a resistor for this purpose, a transistor is normally used. We will discuss this issue in more detail in section 3.8.3. In subsequent diagrams a dashed box is drawn around the resistor R as a reminder that it is implemented using a transistor.

Figure 3.5c presents the graphical symbols for a NOT gate. The left symbol shows the input, output, power, and ground terminals, and the right symbol is simplified to show only the input and output terminals. In practice only the simplified symbol is used. Another name often used for the NOT gate is *inverter*. We use both names interchangeably in this book.

In section 2.1 we saw that a series connection of switches corresponds to the logic AND function, while a parallel connection represents the OR function. Using NMOS transistors, we can implement the series connection as depicted in Figure 3.6a. If $V_{x_1} = V_{x_2} = 5$ V,

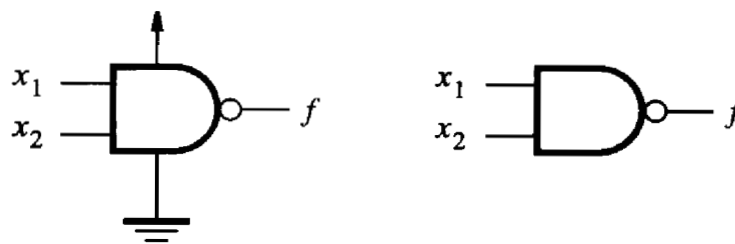
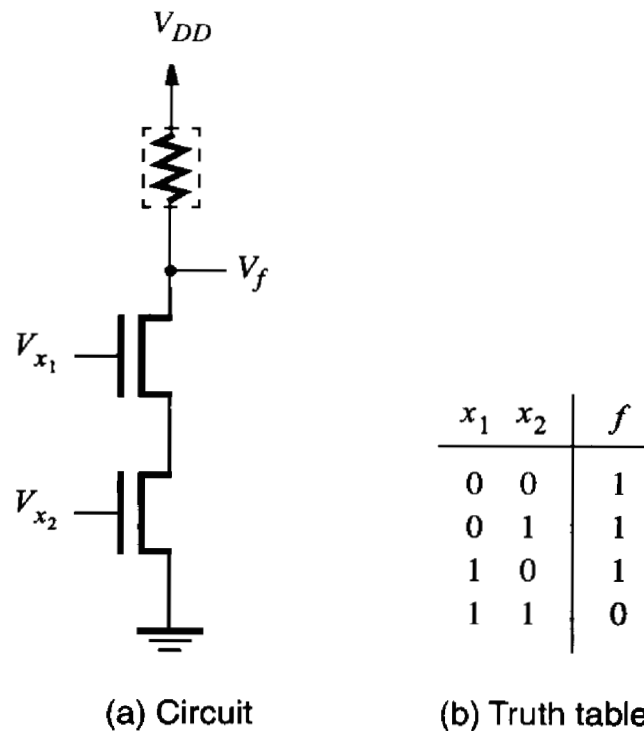


Figure 3.6 NMOS realization of a NAND gate.

both transistors will be on and V_f will be close to 0 V. But if either V_{x_1} or V_{x_2} is 0, then no current will flow through the series-connected transistors and V_f will be pulled up to 5 V. The resulting truth table for f , provided in terms of logic values, is given in Figure 3.6b. The realized function is the complement of the AND function, called the *NAND* function, for NOT-AND. The circuit realizes a NAND gate. Its graphical symbols are shown in Figure 3.6c.

The parallel connection of NMOS transistors is given in Figure 3.7a. Here, if either $V_{x_1} = 5$ V or $V_{x_2} = 5$ V, then V_f will be close to 0 V. Only if both V_{x_1} and V_{x_2} are 0 will V_f be pulled up to 5 V. A corresponding truth table is given in Figure 3.7b. It shows that the circuit realizes the complement of the OR function, called the *NOR* function, for NOT-OR. The graphical symbols for the NOR gate appear in Figure 3.7c.

In addition to the NAND and NOR gates just described, the reader would naturally be interested in the AND and OR gates that were used extensively in the previous chapter. Figure 3.8 indicates how an AND gate is built in NMOS technology by following a NAND gate with an inverter. Node A realizes the NAND of inputs x_1 and x_2 , and f represents the AND function. In a similar fashion an OR gate is realized as a NOR gate followed by an inverter, as depicted in Figure 3.9.

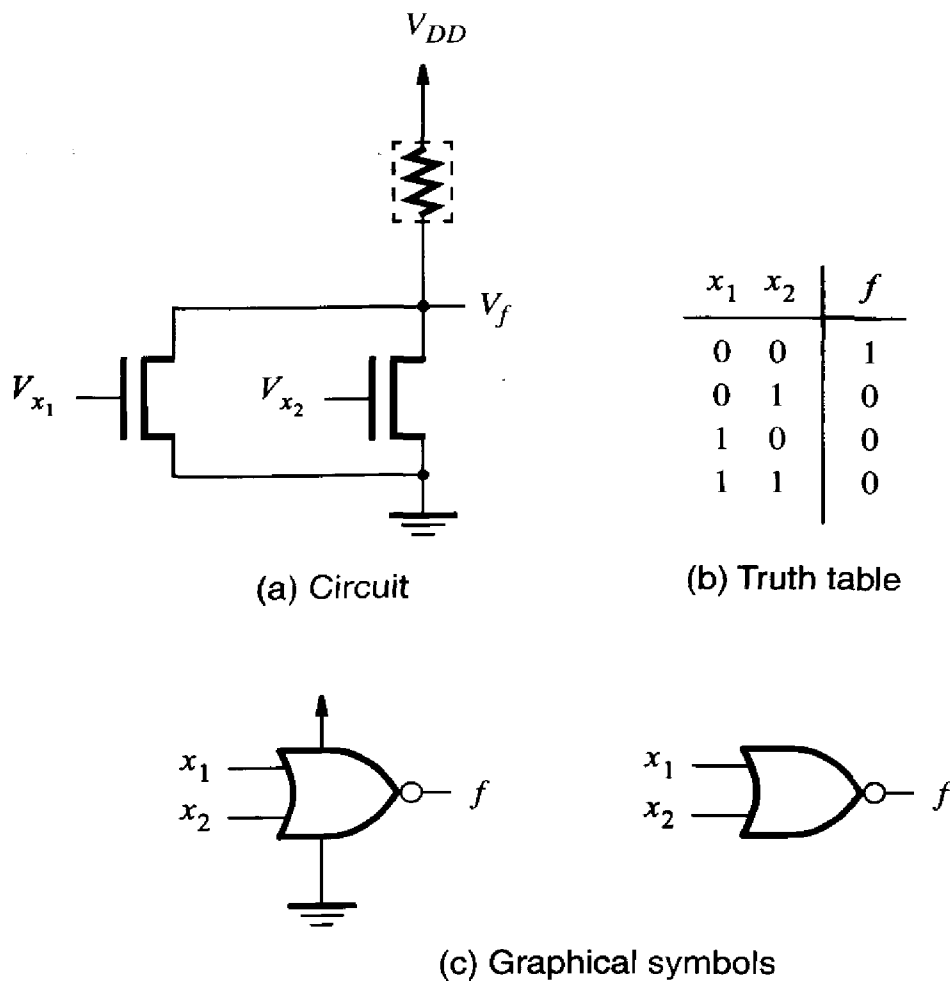


Figure 3.7 NMOS realization of a NOR gate.

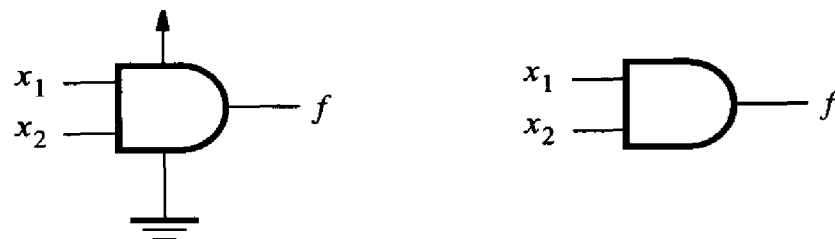
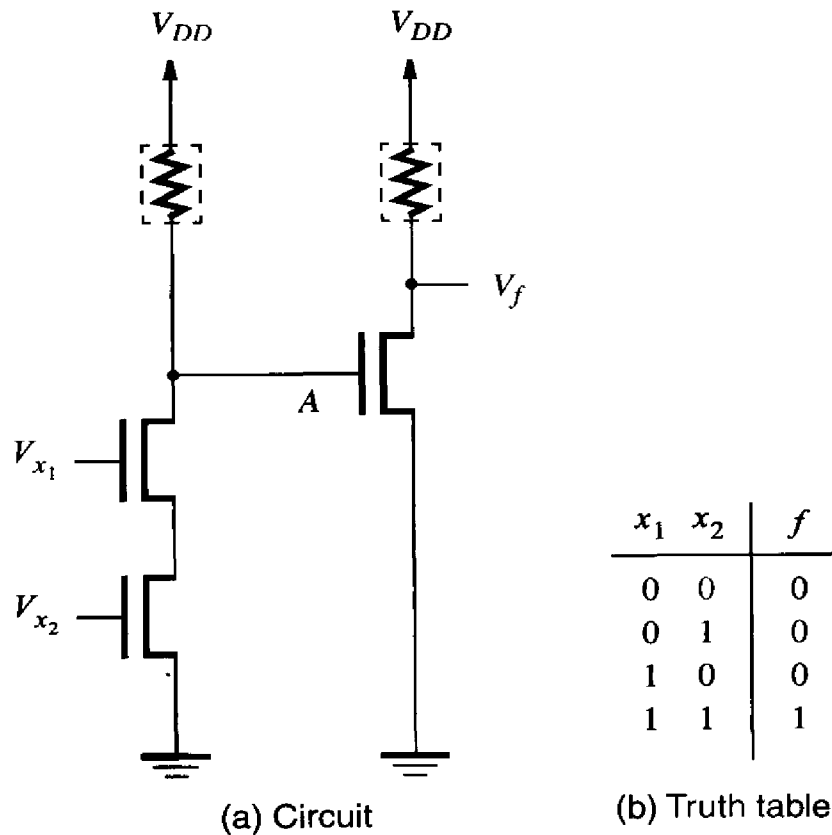


Figure 3.8 NMOS realization of an AND gate.

3.3 CMOS LOGIC GATES

So far we have considered how to implement logic gates using NMOS transistors. For each of the circuits that has been presented, it is possible to derive an equivalent circuit that uses PMOS transistors. However, it is more interesting to consider how both NMOS and PMOS transistors can be used together. The most popular such approach is known as CMOS technology. We will see in section 3.8 that CMOS technology offers some attractive practical advantages in comparison to NMOS technology.

In NMOS circuits the logic functions are realized by arrangements of NMOS transistors, combined with a pull-up device that acts as a resistor. We will refer to the part of the circuit that involves NMOS transistors as the *pull-down network (PDN)*. Then the structure of the

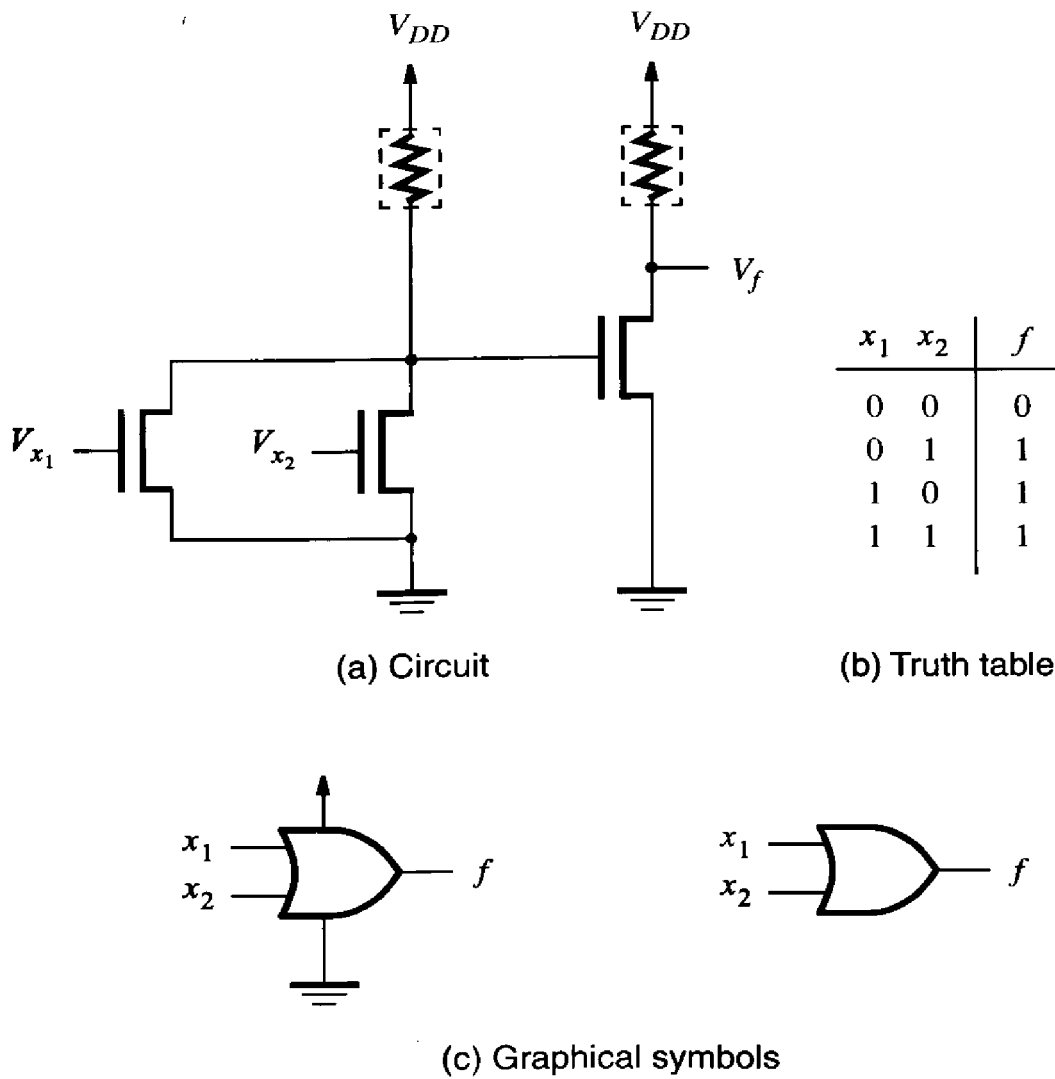


Figure 3.9 NMOS realization of an OR gate.

circuits in Figures 3.5 through 3.9 can be characterized by the block diagram in Figure 3.10. The concept of CMOS circuits is based on replacing the pull-up device with a *pull-up network (PUN)* that is built using PMOS transistors, such that the functions realized by the PDN and PUN networks are complements of each other. Then a logic circuit, such as a typical logic gate, is implemented as indicated in Figure 3.11. For any given valuation of the input signals, either the PDN pulls V_f down to Gnd or the PUN pulls V_f up to V_{DD} . The PDN and the PUN have equal numbers of transistors, which are arranged so that the two networks are *duals* of one another. Wherever the PDN has NMOS transistors in series, the PUN has PMOS transistors in parallel, and vice versa.

The simplest example of a CMOS circuit, a NOT gate, is shown in Figure 3.12. When $V_x = 0$ V, transistor T_2 is off and transistor T_1 is on. This makes $V_f = 5$ V, and since T_2 is off, no current flows through the transistors. When $V_x = 5$ V, T_2 is on and T_1 is off. Thus $V_f = 0$ V, and no current flows because T_1 is off.

A key point is that no current flows in a CMOS inverter when the input is either low or high. This is true for all CMOS circuits; no current flows, and hence no power is dissipated

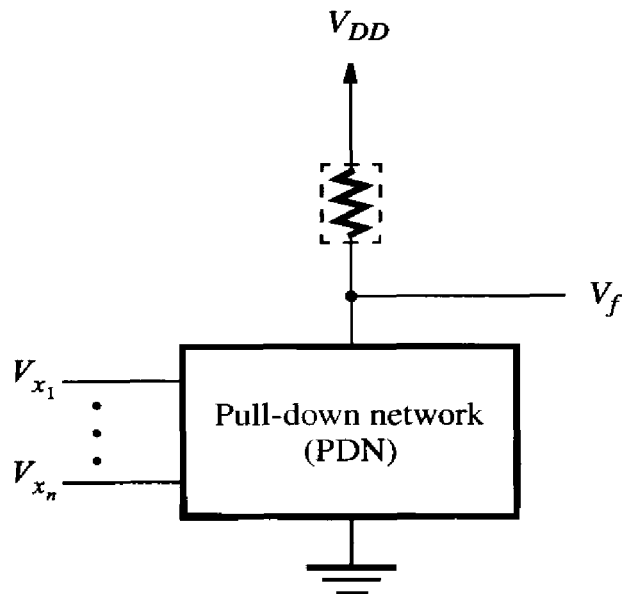


Figure 3.10 Structure of an NMOS circuit.

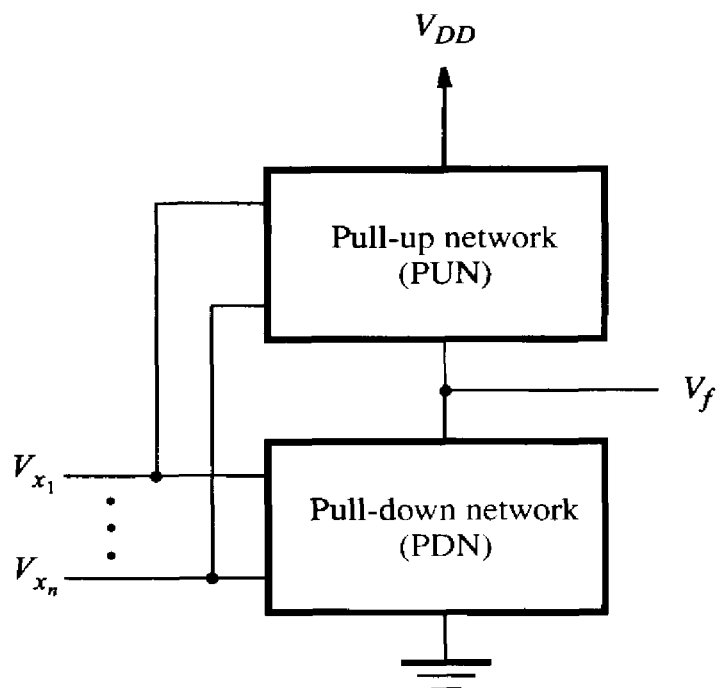
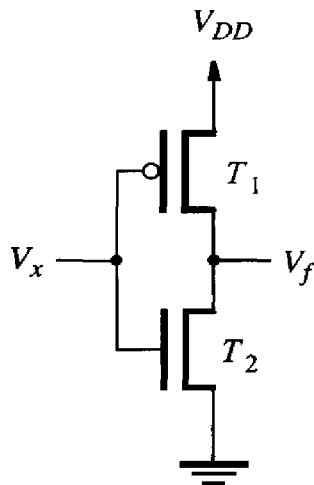


Figure 3.11 Structure of a CMOS circuit.

under steady state conditions. This property has led to CMOS becoming the most popular technology in use today for building logic circuits. We will discuss current flow and power dissipation in detail in section 3.8.

Figure 3.13 provides a circuit diagram of a CMOS NAND gate. It is similar to the NMOS circuit presented in Figure 3.6 except that the pull-up device has been replaced by the PUN with two PMOS transistors connected in parallel. The truth table in the figure

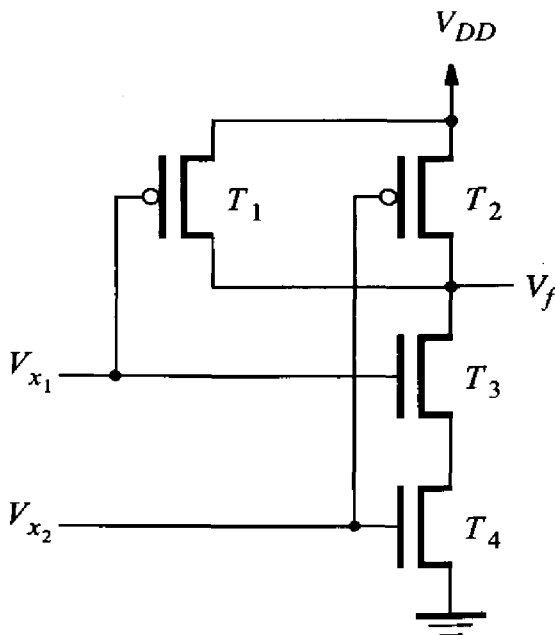


(a) Circuit

x	T_1	T_2	f
0	on	off	1
1	off	on	0

(b) Truth table and transistor states

Figure 3.12 CMOS realization of a NOT gate.



(a) Circuit

x_1	x_2	T_1	T_2	T_3	T_4	f
0	0	on	on	off	off	1
0	1	on	off	off	on	1
1	0	off	on	on	off	1
1	1	off	off	on	on	0

(b) Truth table and transistor states

Figure 3.13 CMOS realization of a NAND gate.

specifies the state of each of the four transistors for each logic valuation of inputs x_1 and x_2 . The reader can verify that the circuit properly implements the NAND function. Under static conditions no path exists for current flow from V_{DD} to Gnd .

The circuit in Figure 3.13 can be derived from the logic expression that defines the NAND operation, $f = \overline{x_1 x_2}$. This expression specifies the conditions for which $f = 1$;

hence it defines the PUN. Since the PUN consists of PMOS transistors, which are turned on when their control (gate) inputs are set to 0, an input variable x_i turns on a transistor if $x_i = 0$. From DeMorgan's law, we have

$$f = \overline{x_1 x_2} = \bar{x}_1 + \bar{x}_2$$

Thus $f = 1$ when *either* input x_1 or x_2 has the value 0, which means that the PUN must have two PMOS transistors connected in parallel. The PDN must implement the complement of f , which is

$$\bar{f} = x_1 x_2$$

Since $\bar{f} = 1$ when *both* x_1 and x_2 are 1, it follows that the PDN must have two NMOS transistors connected in series.

The circuit for a CMOS NOR gate is derived from the logic expression that defines the NOR operation

$$f = \overline{x_1 + x_2} = \bar{x}_1 \bar{x}_2$$

Since $f = 1$ only if both x_1 and x_2 have the value 0, then the PUN consists of two PMOS transistors connected in series. The PDN, which realizes $\bar{f} = x_1 + x_2$, has two NMOS transistors in parallel, leading to the circuit shown in Figure 3.14.

A CMOS AND gate is built by connecting a NAND gate to an inverter, as illustrated in Figure 3.15. Similarly, an OR gate is constructed with a NOR gate followed by a NOT gate.

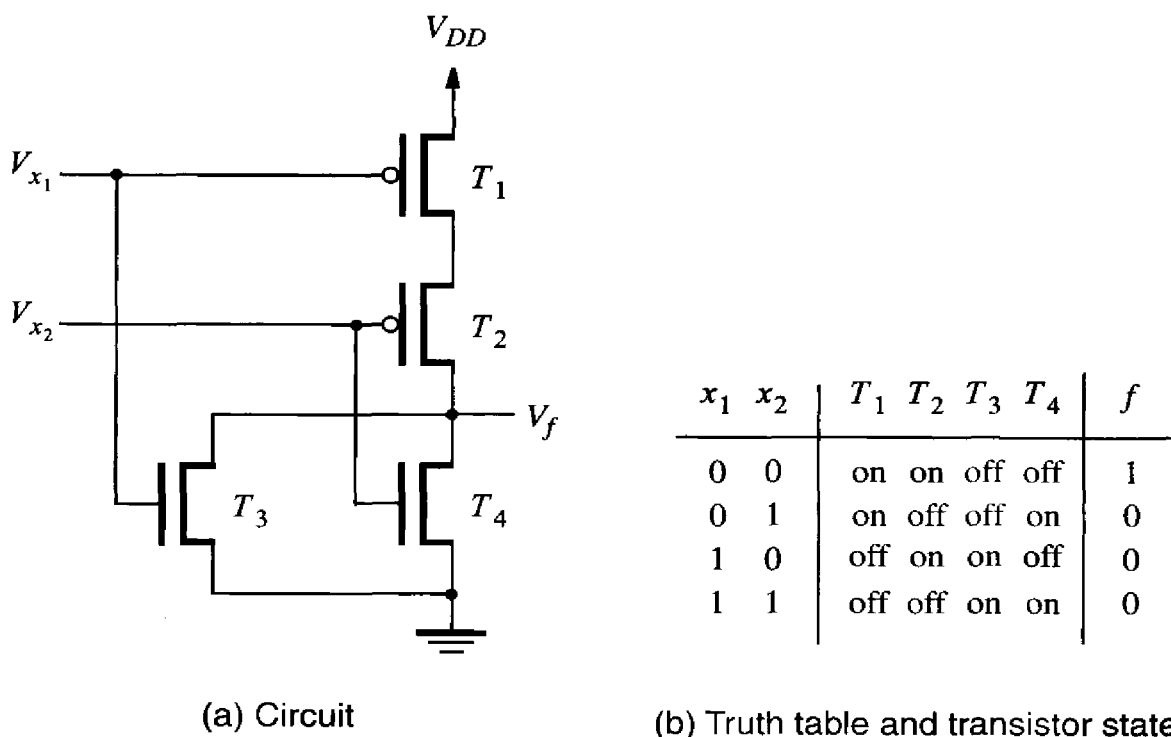


Figure 3.14 CMOS realization of a NOR gate.

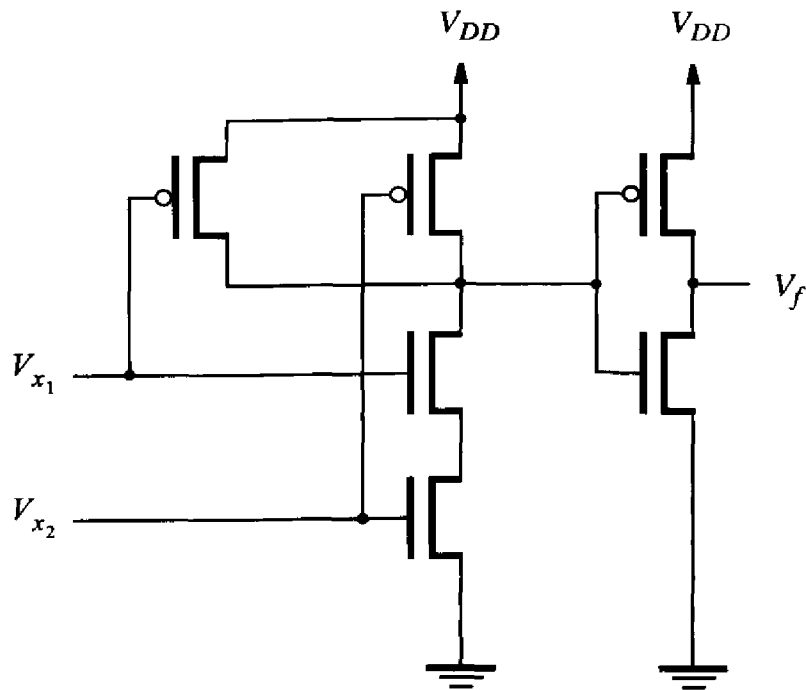


Figure 3.15 CMOS realization of an AND gate.

The above procedure for deriving a CMOS circuit can be applied to more general logic functions to create *complex gates*. This process is illustrated in the following two examples.

.1 Consider the function

$$f = \bar{x}_1 + \bar{x}_2\bar{x}_3$$

Since all variables appear in their complemented form, we can directly derive the PUN. It consists of a PMOS transistor controlled by x_1 in parallel with a series combination of PMOS transistors controlled by x_2 and x_3 . For the PDN we have

$$\bar{f} = \overline{\bar{x}_1 + \bar{x}_2\bar{x}_3} = x_1(x_2 + x_3)$$

This expression gives the PDN that has an NMOS transistor controlled by x_1 in series with a parallel combination of NMOS transistors controlled by x_2 and x_3 . The circuit is shown in Figure 3.16.

.2 Consider the function

$$f = \bar{x}_1 + (\bar{x}_2 + \bar{x}_3)\bar{x}_4$$

Then

$$\bar{f} = x_1(x_2x_3 + x_4)$$

These expressions lead directly to the circuit in Figure 3.17.

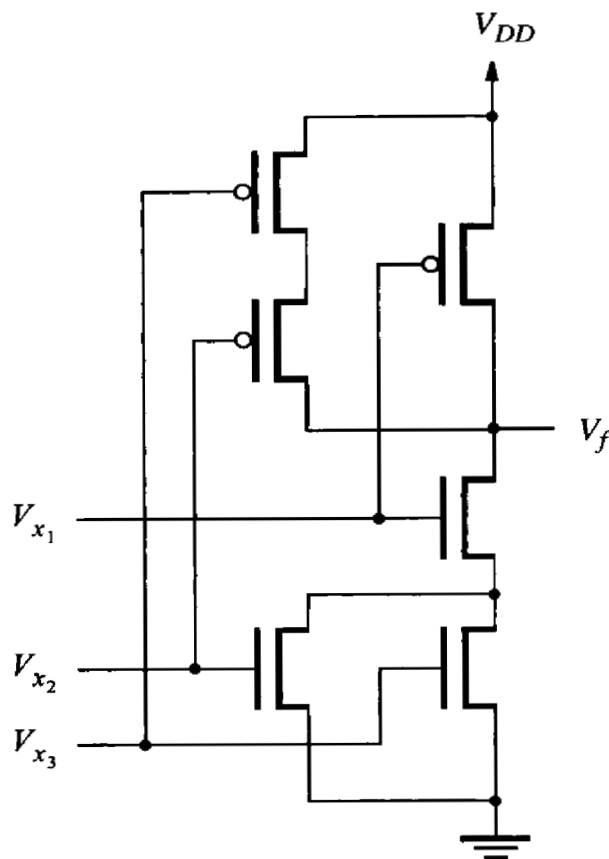


Figure 3.16 The circuit for Example 3.1.

The circuits in Figures 3.16 and 3.17 show that it is possible to implement fairly complex logic functions using combinations of series and parallel connections of transistors (acting as switches), without implementing each series or parallel connection as a complete AND (using the structure introduced in Figure 3.15) or OR gate.

3.3.1 SPEED OF LOGIC GATE CIRCUITS

In the preceding sections we have assumed that transistors operate as ideal switches that present no resistance to current flow. Hence, while we have derived circuits that realize the functionality needed in logic gates, we have ignored the important issue of the speed of operation of the circuits. In reality transistor switches have a significant resistance when turned on. Also, transistor circuits include capacitors, which are created as a side effect of the manufacturing process. These factors affect the amount of time required for signal values to propagate through logic gates. We provide a detailed discussion of the speed of logic circuits, as well as a number of other practical issues, in section 3.8.

3.4 NEGATIVE LOGIC SYSTEM

At the beginning of this chapter, we said that logic values are represented as two distinct ranges of voltage levels. We are using the convention that the higher voltage levels represent

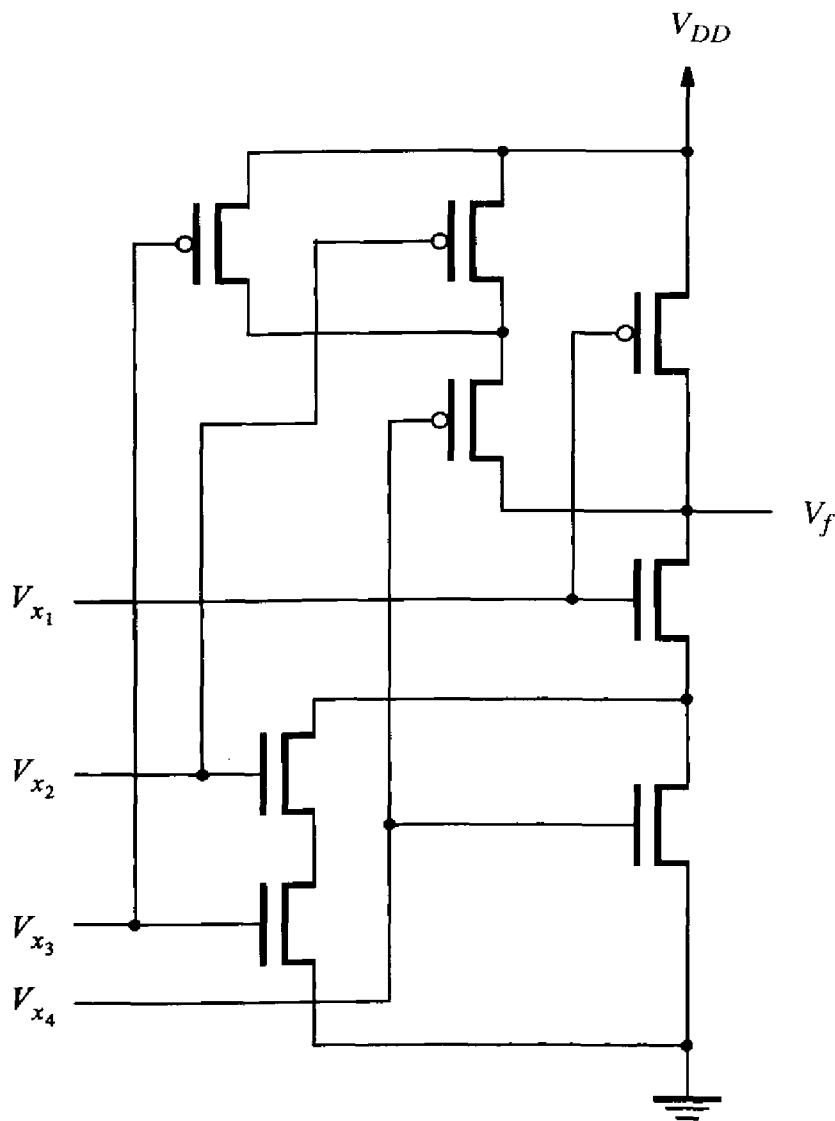


Figure 3.17 The circuit for Example 3.2.

logic value 1 and the lower voltages represent logic value 0. This convention is known as the positive logic system, and it is the one used in most practical applications. In this section we briefly consider the negative logic system in which the association between voltage levels and logic values is reversed.

Let us reconsider the CMOS circuit in Figure 3.13, which is reproduced in Figure 3.18a. Part (b) of the figure gives a truth table for the circuit, but the table shows voltage levels instead of logic values. In this table, L refers to the low voltage level in the circuit, which is 0 V, and H represents the high voltage level, which is V_{DD} . This is the style of truth table that manufacturers of integrated circuits often use in data sheets to describe the functionality of the chips. It is entirely up to the user of the chip as to whether L and H are interpreted in terms of logic values such that $L = 0$ and $H = 1$, or $L = 1$ and $H = 0$.

Figure 3.19a illustrates the positive logic interpretation in which $L = 0$ and $H = 1$. As we already know from the discussions of Figure 3.13, the circuit represents a NAND gate under this interpretation. The opposite interpretation is shown in Figure 3.19b. Here negative logic is used so that $L = 1$ and $H = 0$. The truth table specifies that the circuit

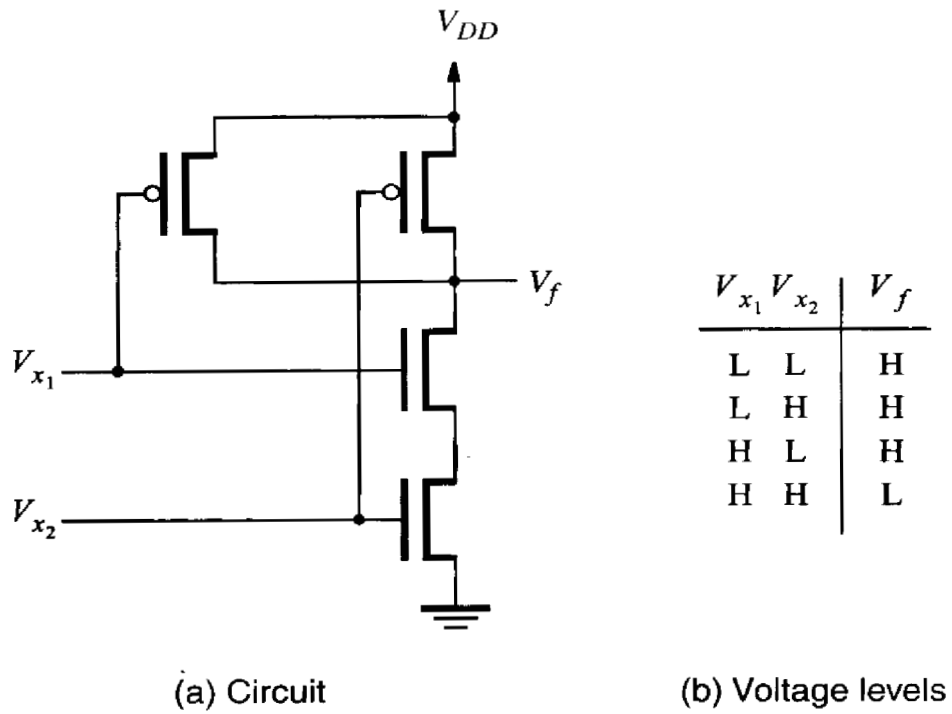
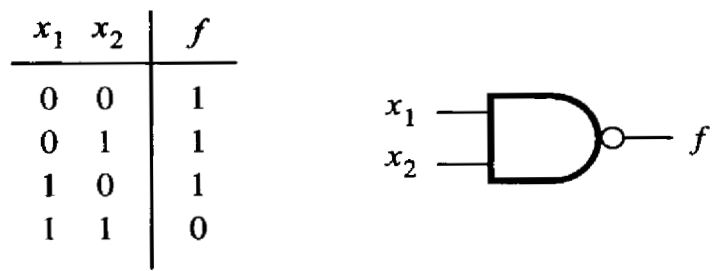
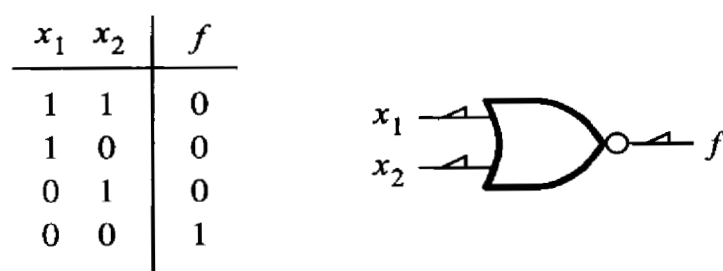


Figure 3.18 Voltage levels in the circuit in Figure 3.13.



(a) Positive logic truth table and gate symbol



(b) Negative logic truth table and gate symbol

Figure 3.19 Interpretation of the circuit in Figure 3.18.

represents a NOR gate in this case. Note that the truth table rows are listed in the opposite order from what we normally use, to be consistent with the L and H values in Figure 3.18b. Figure 3.19b also gives the logic gate symbol for the NOR gate, which includes small triangles on the gate's terminals to indicate that the negative logic system is used.

As another example, consider again the circuit in Figure 3.15. Its truth table, in terms of voltage levels, is given in Figure 3.20a. Using the positive logic system, this circuit represents an AND gate, as indicated in Figure 3.20b. But using the negative logic system, the circuit represents an OR gate, as depicted in Figure 3.20c.

It is possible to use a mixture of positive and negative logic in a single circuit, which is known as a *mixed logic system*. In practice, the positive logic system is used in most applications. We will not consider the negative logic system further in this book.

V_{x_1}	V_{x_2}	V_f
L	L	L
L	H	L
H	L	L
H	H	H

(a) Voltage levels

x_1	x_2	f
0	0	0
0	1	0
1	0	0
1	1	1



(b) Positive logic

x_1	x_2	f
1	1	1
1	0	1
0	1	1
0	0	0



(c) Negative logic


Figure 3.20 Interpretation of the circuit in Figure 3.15.

3.5 STANDARD CHIPS

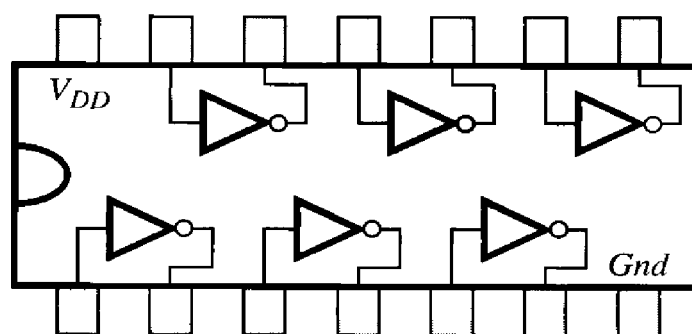
In Chapter 1 we mentioned that several different types of integrated circuit chips are available for implementation of logic circuits. We now discuss the available choices in some detail.

3.5.1 7400-SERIES STANDARD CHIPS

An approach used widely until the mid-1980s was to connect together multiple chips, each containing only a few logic gates. A wide assortment of chips, with different types of logic gates, is available for this purpose. They are known as 7400-series parts because the chip part numbers always begin with the digits 74. An example of a 7400-series part is given in Figure 3.21. Part (a) of the figure shows a type of package that the chip is provided in, called a *dual-inline package (DIP)*. Part (b) illustrates the 7404 chip, which comprises six NOT gates. The chip's external connections are called *pins* or *leads*. Two pins are used to connect to V_{DD} and Gnd , and other pins provide connections to the NOT gates. Many 7400-series chips exist, and they are described in the data books produced by manufacturers of these chips [3–7]. Diagrams of some of the chips are also included in several textbooks, such as [8–12].



(a) Dual-inline package



(b) Structure of 7404 chip

Figure 3.21 A 7400-series chip.

The 7400-series chips are produced in standard forms by a number of integrated circuit manufacturers, using agreed-upon specifications. Competition among various manufacturers works to the designer's advantage because it tends to lower the price of chips and ensures that parts are always readily available. For each specific 7400-series chip, several variants are built with different technologies. For instance, the part called 74LS00 is built with a technology called transistor-transistor logic (TTL), which is described in Appendix E, whereas the 74HC00 is fabricated using CMOS technology. In general, the most popular chips used today are the CMOS variants.

As an example of how a logic circuit can be implemented using 7400-series chips, consider the function $f = x_1x_2 + \bar{x}_2x_3$, which is shown in the form of a logic diagram in Figure 2.30. A NOT gate is required to produce \bar{x}_2 , as well as 2 two-input AND gates and a two-input OR gate. Figure 3.22 shows three 7400-series chips that can be used to implement the function. We assume that the three input signals x_1 , x_2 , and x_3 are produced as outputs by some other circuitry that can be connected by wires to the three chips. Notice that power and ground connections are included for all three chips. This example makes use of only a portion of the gates available on the three chips, hence the remaining gates can be used to realize other functions.

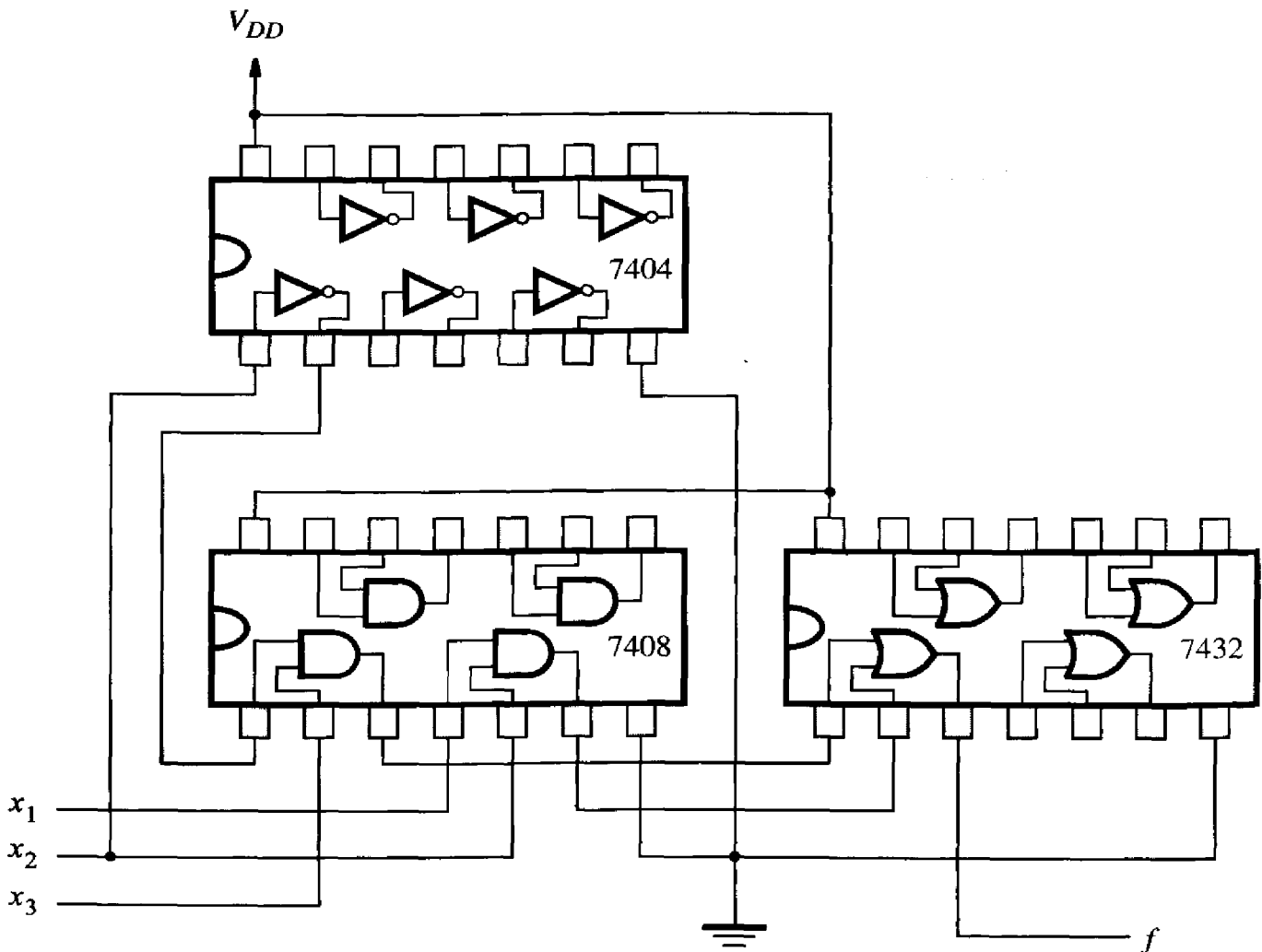


Figure 3.22 An implementation of $f = x_1x_2 + \bar{x}_2x_3$.

Because of their low logic capacity, the standard chips are seldom used in practice today, with one exception. Many modern products include standard chips that contain buffers. Buffers are logic gates that are usually used to improve the speed of circuits. An example of a buffer chip is depicted in Figure 3.23. It is the 74244 chip, which comprises eight *tri-state buffers*. We describe how tri-state buffers work in section 3.8.8. Rather than showing how the buffers are arranged inside the chip package, as we did for the NOT gates in Figure 3.21, we show only the pin numbers of the package pins that are connected to the buffers. The package has 20 pins, and they are numbered in the same manner as shown for Figure 3.21; Gnd and V_{DD} connections are provided on pins 10 and 20, respectively. Many other buffer chips also exist. For example, the 162244 chip has 16 tri-state buffers. It is part of a family of devices that are similar to the 7400-series chips but with twice as many gates in each chip. These chips are available in multiple types of packages, with the most popular being a *small-outline integrated circuit (SOIC)* package. An SOIC package has a similar shape to a DIP, but the SOIC is considerably smaller in physical size.

As integrated circuit technology has improved over time, a system of classifying chips according to their size has evolved. The earliest chips produced, such as the 7400-series chips, comprise only a few logic gates. The technology used to produce these chips is referred to as *small-scale integration (SSI)*. Chips that include slightly more logic circuitry, typically about 10 to 100 gates, represent *medium-scale integration (MSI)*. Until the mid-1980s chips that were too large to qualify as MSI were classified as *large-scale integration (LSI)*. In recent years the concept of classifying circuits according to their size has become of little practical use. Most integrated circuits today contain many thousands or millions of transistors. Regardless of their exact size, these large chips are said to be made with *very large scale integration (VLSI)* technology. The trend in digital hardware products is to integrate as much circuitry as possible onto a single chip. Thus most of the chips used today are built with VLSI technology, and the older types of chips are used rarely.

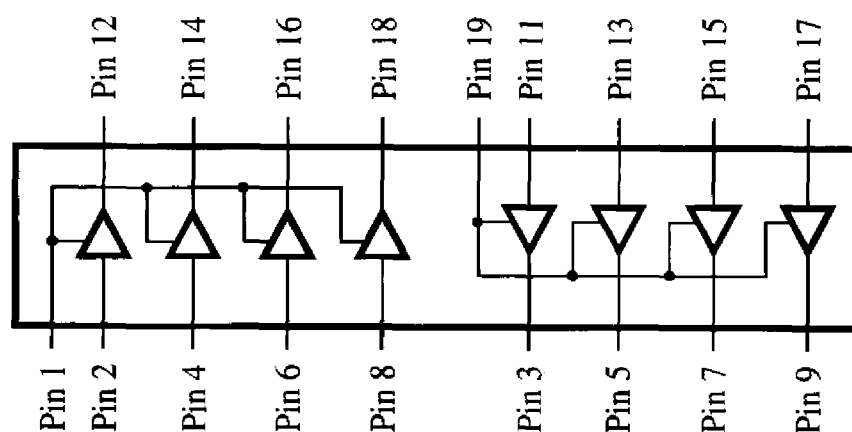


Figure 3.23 The 74244 buffer chip.

3.6 PROGRAMMABLE LOGIC DEVICES

The function provided by each of the 7400-series parts is fixed and cannot be tailored to suit a particular design situation. This fact, coupled with the limitation that each chip contains only a few logic gates, makes these chips inefficient for building large logic circuits. It is possible to manufacture chips that contain relatively large amounts of logic circuitry with a structure that is not fixed. Such chips were first introduced in the 1970s and are called *programmable logic devices (PLDs)*.

A PLD is a general-purpose chip for implementing logic circuitry. It contains a collection of logic circuit elements that can be customized in different ways. A PLD can be viewed as a “black box” that contains logic gates and programmable switches, as illustrated in Figure 3.24. The programmable switches allow the logic gates inside the PLD to be connected together to implement whatever logic circuit is needed.

3.6.1 PROGRAMMABLE LOGIC ARRAY (PLA)

Several types of PLDs are commercially available. The first developed was the *programmable logic array (PLA)*. The general structure of a PLA is depicted in Figure 3.25. Based on the idea that logic functions can be realized in sum-of-products form, a PLA comprises a collection of AND gates that feeds a set of OR gates. As shown in the figure, the PLA's inputs x_1, \dots, x_n pass through a set of buffers (which provide both the true value and complement of each input) into a circuit block called an *AND plane*, or *AND array*. The AND plane produces a set of product terms P_1, \dots, P_k . Each of these terms can be configured to implement any AND function of x_1, \dots, x_n . The product terms serve as the inputs to an *OR plane*, which produces the outputs f_1, \dots, f_m . Each output can be config-

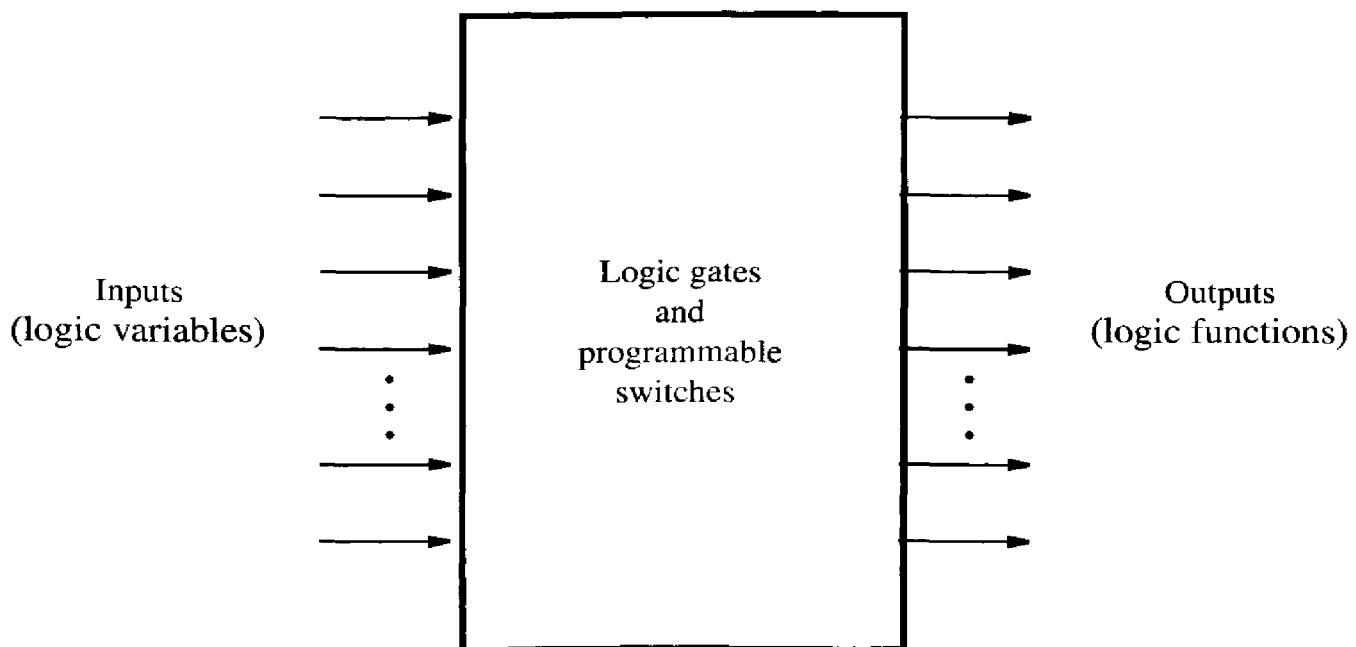


Figure 3.24 Programmable logic device as a black box.

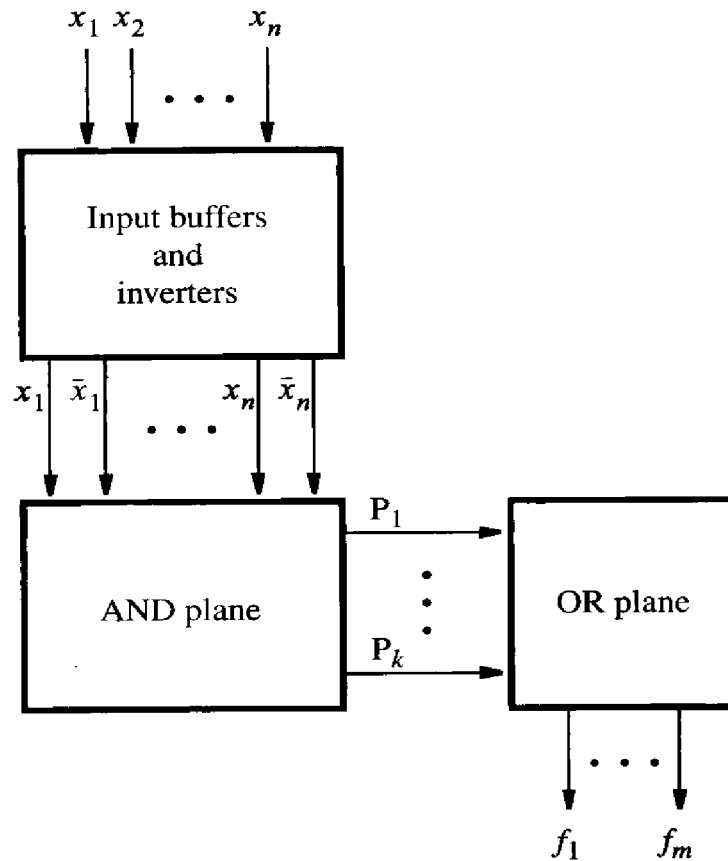


Figure 3.25 General structure of a PLA.

ured to realize any sum of P_1, \dots, P_k and hence any sum-of-products function of the PLA inputs.

A more detailed diagram of a small PLA is given in Figure 3.26, which shows a PLA with three inputs, four product terms, and two outputs. Each AND gate in the AND plane has six inputs, corresponding to the true and complemented versions of the three input signals. Each connection to an AND gate is programmable; a signal that is connected to an AND gate is indicated with a wavy line, and a signal that is not connected to the gate is shown with a broken line. The circuitry is designed such that any unconnected AND-gate inputs do not affect the output of the AND gate. In commercially available PLAs, several methods of realizing the programmable connections exist. Detailed explanation of how a PLA can be built using transistors is given in section 3.10.

In Figure 3.26 the AND gate that produces P_1 is shown connected to the inputs x_1 and x_2 . Hence $P_1 = x_1x_2$. Similarly, $P_2 = x_1\bar{x}_3$, $P_3 = \bar{x}_1\bar{x}_2x_3$, and $P_4 = x_1x_3$. Programmable connections also exist for the OR plane. Output f_1 is connected to product terms P_1 , P_2 , and P_3 . It therefore realizes the function $f_1 = x_1x_2 + x_1\bar{x}_3 + \bar{x}_1\bar{x}_2x_3$. Similarly, output $f_2 = x_1x_2 + \bar{x}_1\bar{x}_2x_3 + x_1x_3$. Although Figure 3.26 depicts the PLA programmed to implement the functions described above, by programming the AND and OR planes differently, each of the outputs f_1 and f_2 could implement various functions of x_1 , x_2 , and x_3 . The only constraint on the functions that can be implemented is the size of the AND plane because it produces only four product terms. Commercially available PLAs come in larger sizes than we have shown here. Typical parameters are 16 inputs, 32 product terms, and eight outputs.

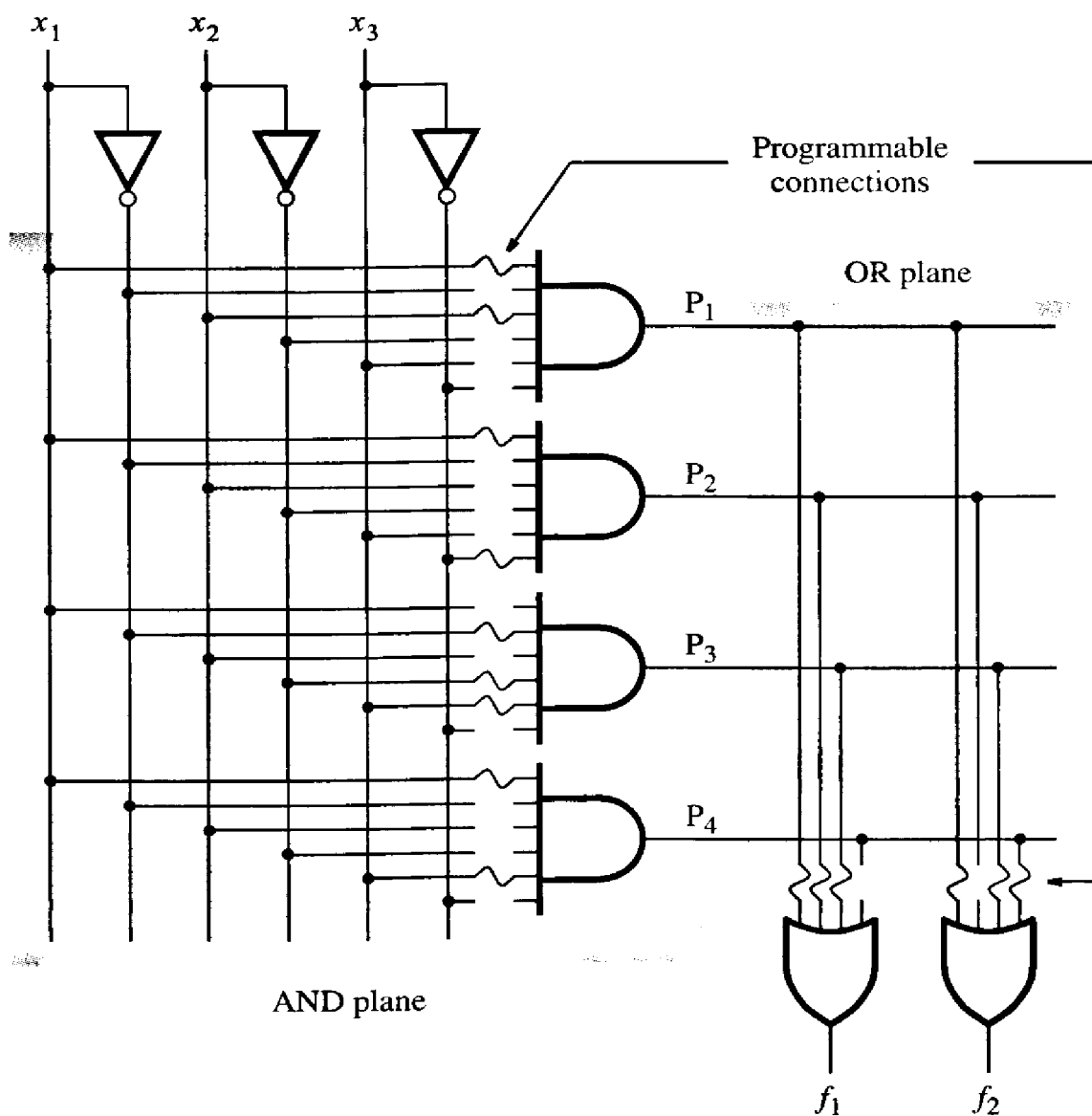


Figure 3.26 Gate-level diagram of a PLA.

Although Figure 3.26 illustrates clearly the functional structure of a PLA, this style of drawing is awkward for larger chips. Instead, it has become customary in technical literature to use the style shown in Figure 3.27. Each AND gate is depicted as a single horizontal line attached to an AND-gate symbol. The possible inputs to the AND gate are drawn as vertical lines that cross the horizontal line. At any crossing of a vertical and horizontal line, a programmable connection, indicated by an X, can be made. Figure 3.27 shows the programmable connections needed to implement the product terms in Figure 3.26. Each OR gate is drawn in a similar manner, with a vertical line attached to an OR-gate symbol. The AND-gate outputs cross these lines, and corresponding programmable connections can be formed. The figure illustrates the programmable connections that produce the functions f_1 and f_2 from Figure 3.26.

The PLA is efficient in terms of the area needed for its implementation on an integrated circuit chip. For this reason, PLAs are often included as part of larger chips, such as microprocessors. In this case a PLA is created so that the connections to the AND and OR

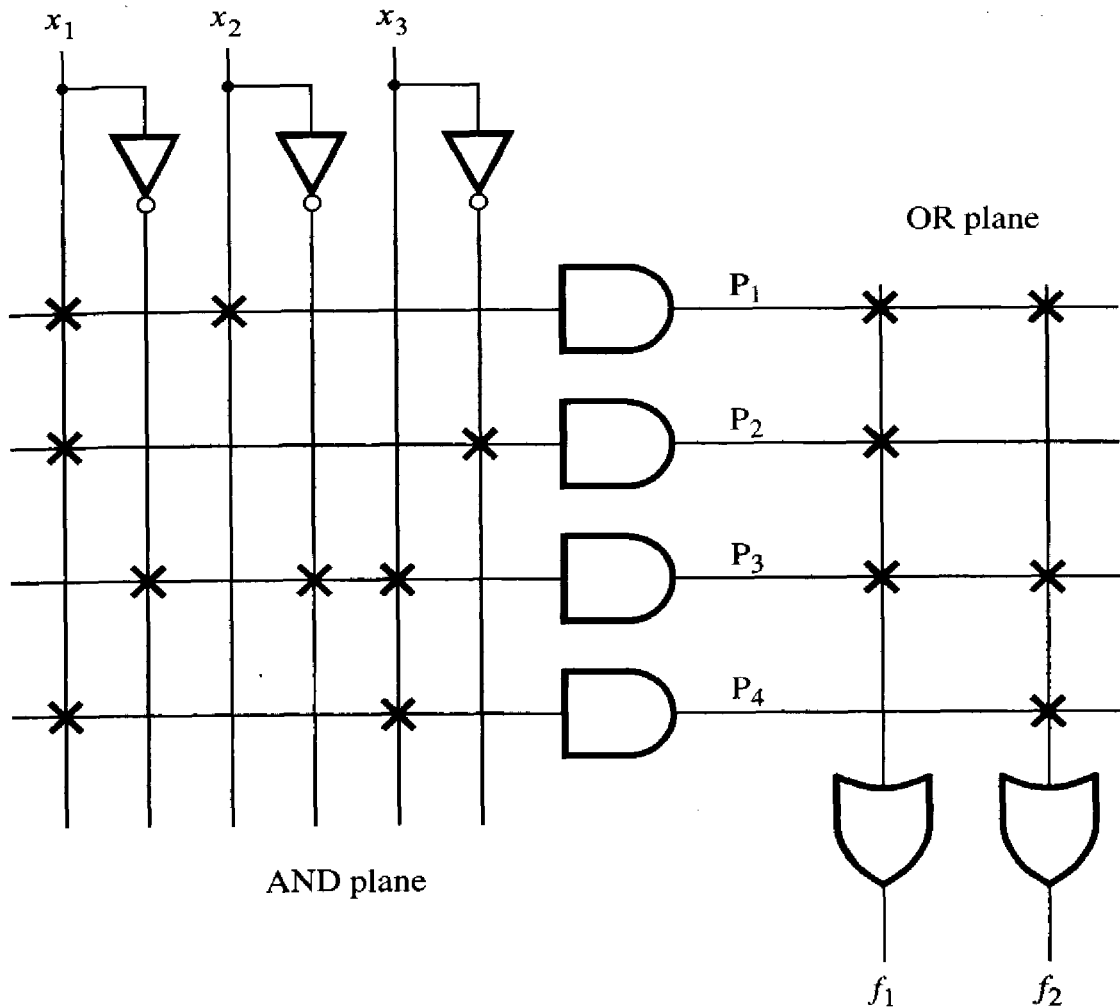


Figure 3.27 Customary schematic for the PLA in Figure 3.26.

gates are fixed, rather than programmable. In section 3.10 we will show that both fixed and programmable PLAs can be created with similar structures.

3.6.2 PROGRAMMABLE ARRAY LOGIC (PAL)

In a PLA both the AND and OR planes are programmable. Historically, the programmable switches presented two difficulties for manufacturers of these devices: they were hard to fabricate correctly, and they reduced the speed-performance of circuits implemented in the PLAs. These drawbacks led to the development of a similar device in which the AND plane is programmable, but the OR plane is fixed. Such a chip is known as a *programmable array logic (PAL)* device. Because they are simpler to manufacture, and thus less expensive than PLAs, and offer better performance, PALs have become popular in practical applications.

An example of a PAL with three inputs, four product terms, and two outputs is given in Figure 3.28. The product terms P_1 and P_2 are hardwired to one OR gate, and P_3 and P_4 are hardwired to the other OR gate. The PAL is shown programmed to realize the two logic functions $f_1 = x_1x_2\bar{x}_3 + \bar{x}_1x_2x_3$ and $f_2 = \bar{x}_1\bar{x}_2 + x_1x_2x_3$. In comparison to the PLA in Figure 3.27, the PAL offers less flexibility; the PLA allows up to four product terms per OR gate,

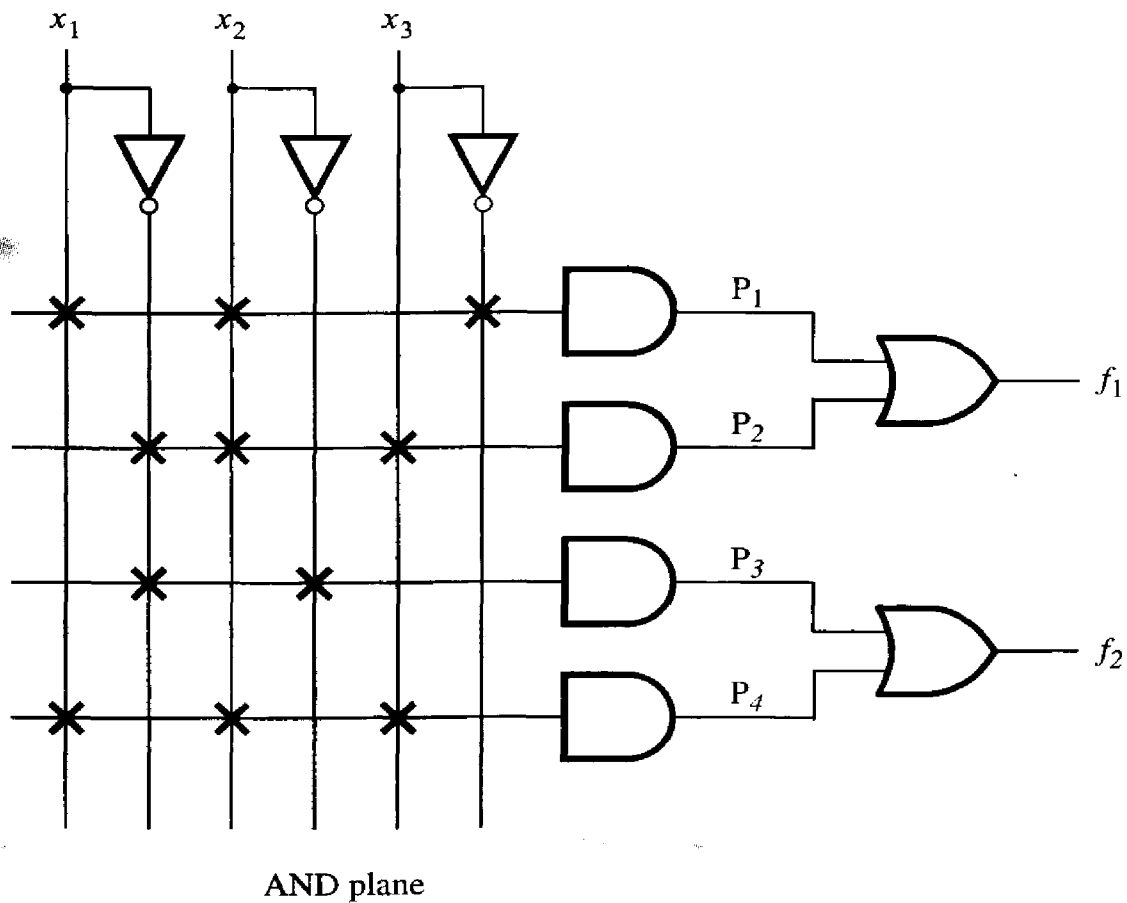


Figure 3.28 An example of a PAL.

whereas the OR gates in the PAL have only two inputs. To compensate for the reduced flexibility, PALs are manufactured in a range of sizes, with various numbers of inputs and outputs, and different numbers of inputs to the OR gates. An example of a commercial PAL is given in Appendix E.

So far we have assumed that the OR gates in a PAL, as in a PLA, connect directly to the output pins of the chip. In many PALs extra circuitry is added at the output of each OR gate to provide additional flexibility. It is customary to use the term *macrocell* to refer to the OR gate combined with the extra circuitry. An example of the flexibility that may be provided in a macrocell is given in Figure 3.29. The symbol labeled *flip-flop* represents a memory element. It stores the value produced by the OR gate output at a particular point in time and can hold that value indefinitely. The flip-flop is controlled by the signal called *clock*. When *clock* makes a transition from logic value 0 to 1, the flip-flop stores the value at its *D* input at that time and this value appears at the flip-flop's *Q* output. Flip-flops are used for implementing many types of logic circuits, as we will show in Chapter 7.

In section 2.8.2 we discussed a 2-to-1 multiplexer circuit. It has two data inputs, a select input, and one output. The select input is used to choose one of the data inputs as the multiplexer's output. In Figure 3.29 a 2-to-1 multiplexer selects as an output from the PAL either the OR-gate output or the flip-flop output. The multiplexer's select line can be programmed to be either 0 or 1. Figure 3.29 shows another logic gate, called a tri-state buffer, connected between the multiplexer and the PAL output. We discuss tri-state buffers

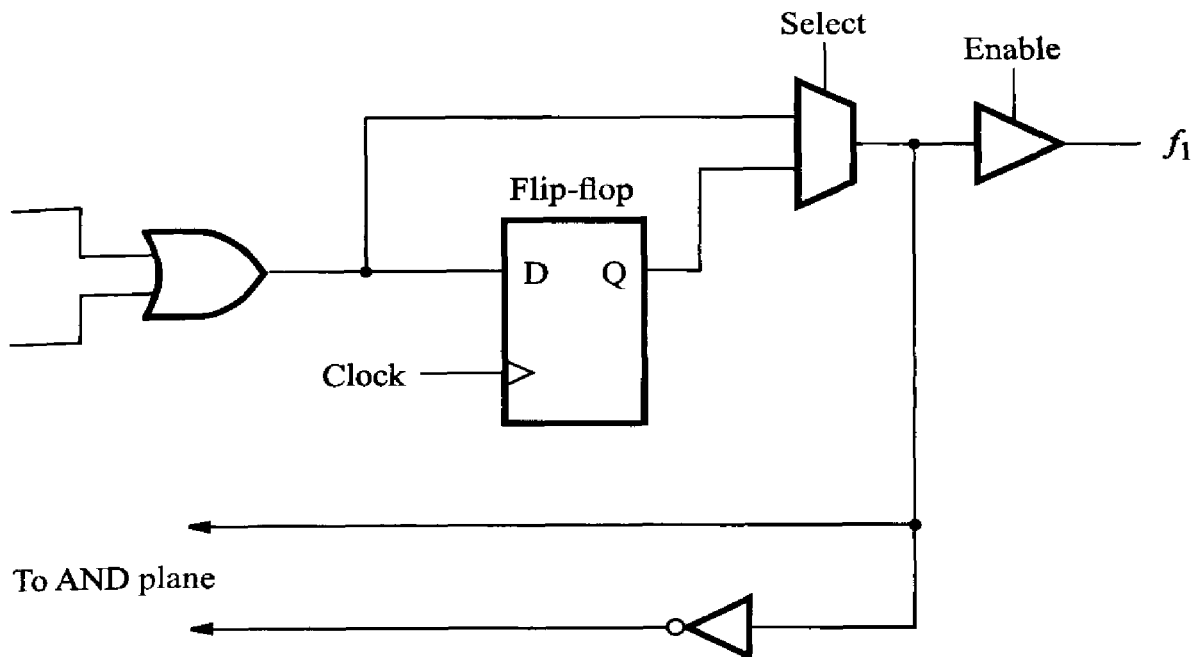


Figure 3.29 Extra circuitry added to OR-gate outputs from Figure 3.28.

in section 3.8.8. Finally, the multiplexer's output is "fed back" to the AND plane in the PAL. This feedback connection allows the logic function produced by the multiplexer to be used internally in the PAL, which allows the implementation of circuits that have multiple stages, or levels, of logic gates.

A number of companies manufacture PLAs or PALs, or other, similar types of *simple PLDs* (SPLDs). A partial list of companies, and the types of SPLDs that they manufacture, is given in Appendix E. An interested reader can examine the information that these companies provide on their products, which is available on the World Wide Web (WWW). The WWW locator for each company is given in Table E.1 in Appendix E.

3.6.3 PROGRAMMING OF PLAs AND PALs

In Figures 3.27 and 3.28, each connection between a logic signal in a PLA or PAL and the AND/OR gates is shown as an *X*. We describe how these switches are implemented using transistors in section 3.10. Users' circuits are implemented in the devices by *configuring*, or *programming*, these switches. Commercial chips contain a few thousand programmable switches; hence it is not feasible for a user of these chips to specify manually the desired programming state of each switch. Instead, CAD systems are employed for this purpose. We introduced CAD tools in Chapter 2 and described methods for design entry and simulation of circuits. For CAD systems that support targeting of circuits to PLDs, the tools have the capability to automatically produce the necessary information for programming each of the switches in the device. A computer system that runs the CAD tools is connected by a cable to a dedicated *programming unit*. Once the user has completed the design of a circuit, the CAD tools generate a file, often called a *programming file* or *fuse map*, that specifies the state that each switch in the PLD should have, to realize correctly the designed circuit. The

PLD is placed into the programming unit, and the programming file is transferred from the computer system. The programming unit then places the chip into a special *programming mode* and configures each switch individually. A photograph of a programming unit is shown in Figure 3.30. Several adaptors are shown beside the main unit; each adaptor is used for a specific type of chip package.

The programming procedure may take a few minutes to complete. Usually, the programming unit can automatically “read back” the state of each switch after programming, to verify that the chip has been programmed correctly. A detailed discussion of the process involved in using CAD tools to target designed circuits to programmable chips is given in Appendices B, C, and D.

PLAs or PALs used as part of a logic circuit usually reside with other chips on a printed circuit board (PCB). The procedure described above assumes that the chip can be removed from the circuit board for programming in the programming unit. Removal is made possible by using a socket on the PCB, as illustrated in Figure 3.31. Although PLAs and PALs are available in the DIP packages shown in Figure 3.21a, they are also available in another popular type of package, called a *plastic-leaded chip carrier (PLCC)*, which is depicted in Figure 3.31. On all four of its sides, the PLCC package has pins that “wrap around” the edges of the chip, rather than extending straight down as in the case of a DIP. The socket that houses the PLCC is attached by solder to the circuit board, and the PLCC is held in the socket by friction.

Instead of relying on a programming unit to configure a chip, it would be advantageous to be able to perform the programming while the chip is still attached to its circuit board. This method of programming is called *in-system programming (ISP)*. It is not usually provided for PLAs or PALs, but is available for the more sophisticated chips that are described below.




Figure 3.30 A PLD programming unit (courtesy of Data IO Corp.).

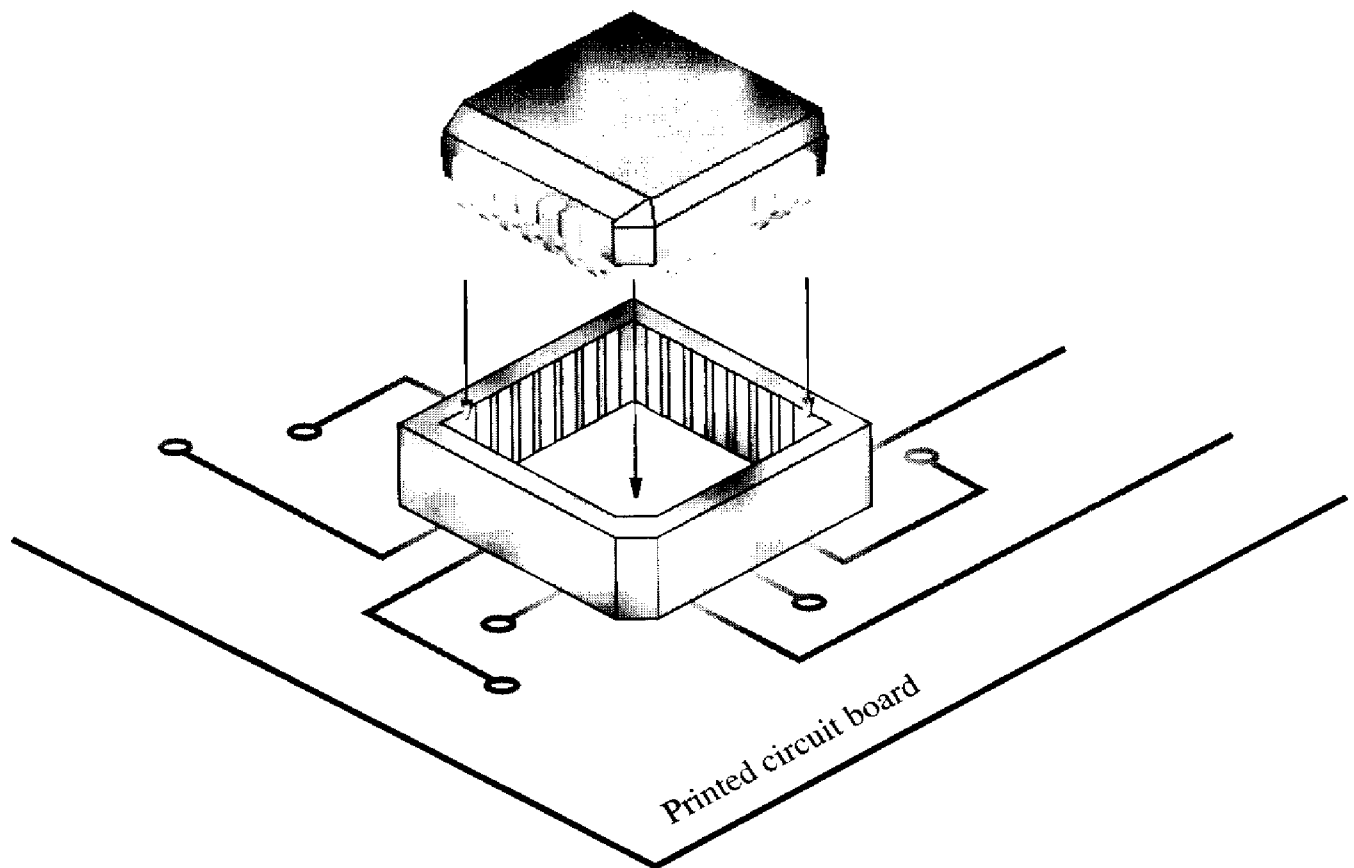


Figure 3.31 A PLCC package with socket.

3.6.4 COMPLEX PROGRAMMABLE LOGIC DEVICES (CPLDs)

PLAs and PALs are useful for implementing a wide variety of small digital circuits. Each device can be used to implement circuits that do not require more than the number of inputs, product terms, and outputs that are provided in the particular chip. These chips are limited to fairly modest sizes, typically supporting a combined number of inputs plus outputs of not more than 32. For implementation of circuits that require more inputs and outputs, either multiple PLAs or PALs can be employed or else a more sophisticated type of chip, called a *complex programmable logic device (CPLD)*, can be used.

A CPLD comprises multiple circuit blocks on a single chip, with internal wiring resources to connect the circuit blocks. Each circuit block is similar to a PLA or a PAL; we will refer to the circuit blocks as *PAL-like blocks*. An example of a CPLD is given in Figure 3.32. It includes four PAL-like blocks that are connected to a set of *interconnection wires*. Each PAL-like block is also connected to a subcircuit labeled *I/O block*, which is attached to a number of the chip's input and output pins.

Figure 3.33 shows an example of the wiring structure and the connections to a PAL-like block in a CPLD. The PAL-like block includes 3 macrocells (real CPLDs typically have about 16 macrocells in a PAL-like block), each consisting of a four-input OR gate (real CPLDs usually provide between 5 and 20 inputs to each OR gate). The OR-gate output is connected to another type of logic gate that we have not yet introduced. It is called an Exclusive-OR (XOR) gate. We discuss XOR gates in section 3.9.1. The behavior of an XOR gate is the same as for an OR gate except that if both of the inputs are 1, the XOR gate

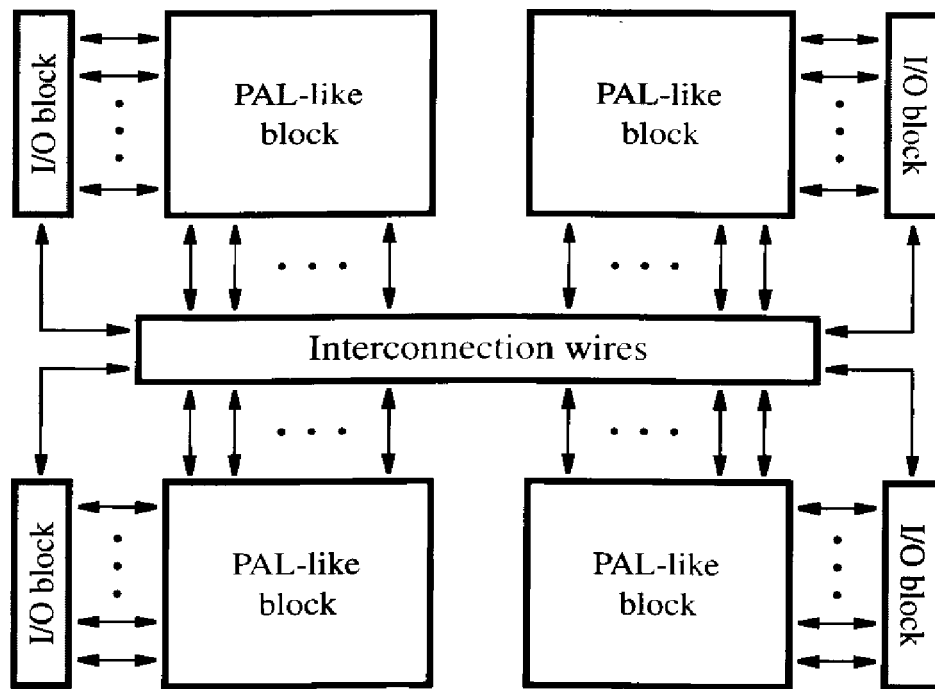


Figure 3.32 Structure of a complex programmable logic device (CPLD).

produces a 0. One input to the XOR gate in Figure 3.33 can be programmably connected to 1 or 0; if 1, then the XOR gate complements the OR-gate output, and if 0, then the XOR gate has no effect. The macrocell also includes a flip-flop, a multiplexer, and a tri-state buffer. As we mentioned in the discussion for Figure 3.29, the flip-flop is used to store the output value produced by the OR gate. Each tri-state buffer (see section 3.8.8) is connected to a pin on the CPLD package. The tri-state buffer acts as a switch that allows each pin to be used either as an output from the CPLD or as an input. To use a pin as an output, the corresponding tri-state buffer is enabled, acting as a switch that is turned on. If the pin is to be used as an input, then the tri-state buffer is disabled, acting as a switch that is turned off. In this case an external source can drive a signal onto the pin, which can be connected to other macrocells using the interconnection wiring.

The interconnection wiring contains programmable switches that are used to connect the PAL-like blocks. Each of the horizontal wires can be connected to some of the vertical wires that it crosses, but not to all of them. Extensive research has been done to decide how many switches should be provided for connections between the wires. The number of switches is chosen to provide sufficient flexibility for typical circuits without wasting many switches in practice. One detail to note is that when a pin is used as an input, the macrocell associated with that pin cannot be used and is therefore wasted. Some CPLDs include additional connections between the macrocells and the interconnection wiring that avoids wasting macrocells in such situations.

Commercial CPLDs range in size from only 2 PAL-like blocks to more than 100 PAL-like blocks. They are available in a variety of packages, including the PLCC package that is shown in Figure 3.31. Figure 3.34a shows another type of package used to house CPLD chips, called a *quad flat pack* (QFP). Like a PLCC package, the QFP package has pins on all

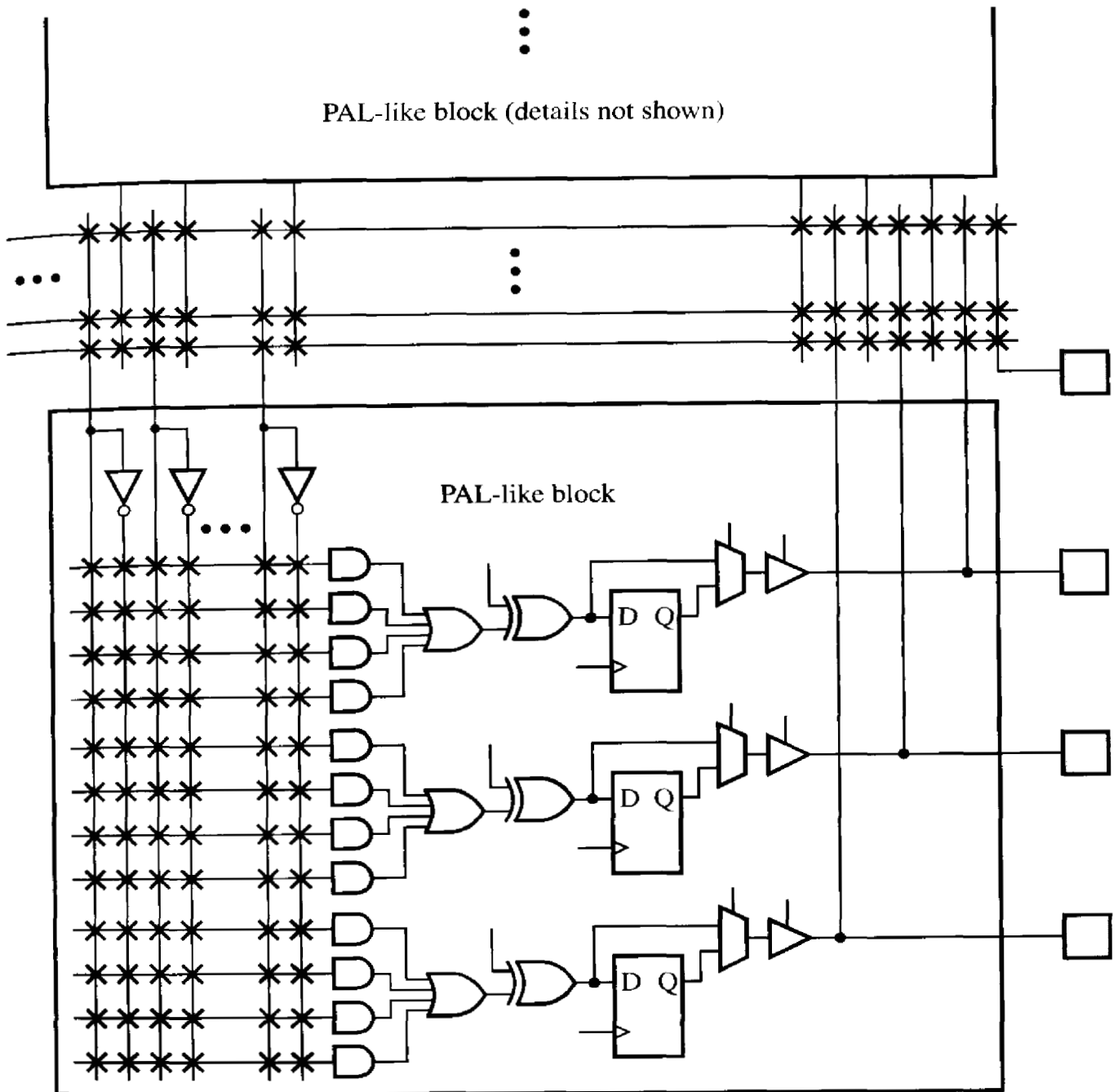
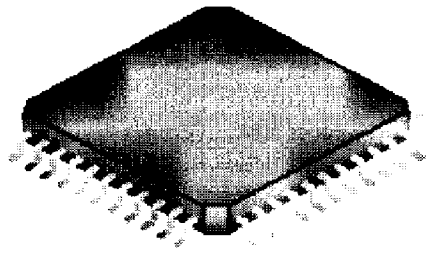


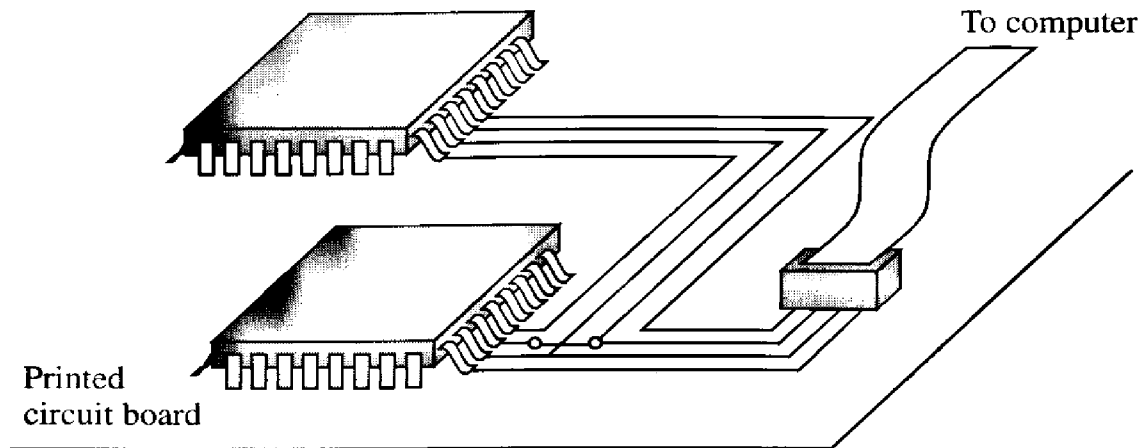
Figure 3.33 A section of the CPLD in Figure 3.32.

four sides, but whereas the PLCC's pins wrap around the edges of the package, the QFP's pins extend outward from the package, with a downward-curving shape. The QFP's pins are much thinner than those on a PLCC, which means that the package can support a larger number of pins; QFPs are available with more than 200 pins, whereas PLCCs are limited to fewer than 100 pins.

Most CPLDs contain the same type of programmable switches that are used in SPLDs, which are described in section 3.10. Programming of the switches may be accomplished using the same technique described in section 3.6.3, in which the chip is placed into a special-purpose programming unit. However, this programming method is rather inconvenient for large CPLDs for two reasons. First, large CPLDs may have more than 200 pins on the chip



(a) CPLD in a Quad Flat Pack (QFP) package



(b) JTAG programming

Figure 3.34 CPLD packaging and programming.

package, and these pins are often fragile and easily bent. Second, to be programmed in a programming unit, a socket is required to hold the chip. Sockets for large QFP packages are very expensive; they sometimes cost more than the CPLD device itself. For these reasons, CPLD devices usually support the ISP technique. A small connector is included on the PCB that houses the CPLD, and a cable is connected between that connector and a computer system. The CPLD is programmed by transferring the programming information generated by a CAD system through the cable, from the computer into the CPLD. The circuitry on the CPLD that allows this type of programming has been standardized by the IEEE and is usually called a *JTAG port*. It uses four wires to transfer information between the computer and the device being programmed. The term *JTAG* stands for Joint Test Action Group. Figure 3.34*b* illustrates the use of a JTAG port for programming two CPLDs on a circuit board. The CPLDs are connected together so that both can be programmed using the same connection to the computer system. Once a CPLD is programmed, it retains the programmed state permanently, even when the power supply for the chip is turned off. This property is called *nonvolatile* programming.

CPLDs are used for the implementation of many types of digital circuits. In industrial designs that employ some type of PLD device, CPLDs are used often, while SPLDs are becoming less common. A number of companies offer competing CPLDs. Appendix E lists,

in Table E.2, the names of the major companies involved and shows the companies' WWW locators. The reader is encouraged to examine the product information that each company provides on its Web pages. An example of a popular commercial CPLD is described in detail in Appendix E.

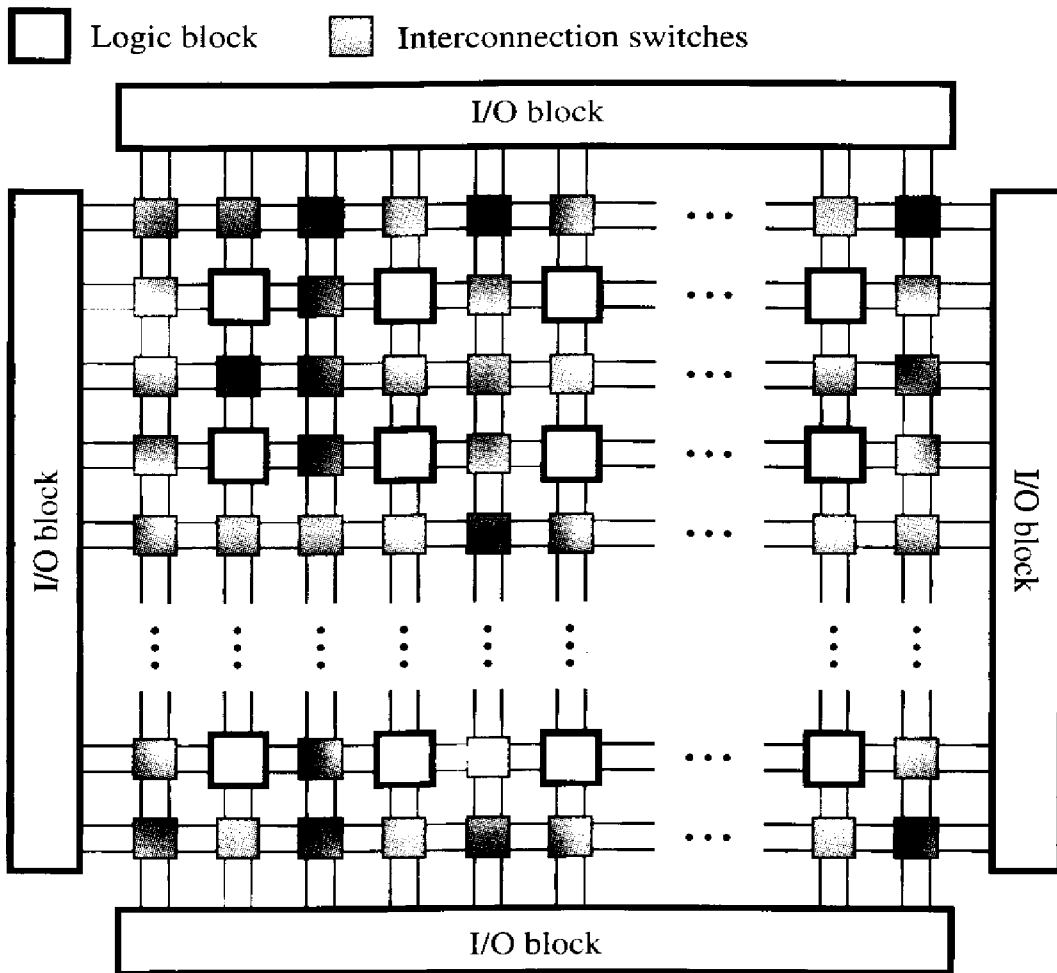
3.6.5 FIELD-PROGRAMMABLE GATE ARRAYS

The types of chips described above, 7400 series, SPLDs, and CPLDs, are useful for implementation of a wide range of logic circuits. Except for CPLDs, these devices are rather small and are suitable only for relatively simple applications. Even for CPLDs, only moderately large logic circuits can be accommodated in a single chip. For cost and performance reasons, it is prudent to implement a desired logic circuit using as few chips as possible, so the amount of circuitry on a given chip and its functional capability are important. One way to quantify a circuit's *size* is to assume that the circuit is to be built using only simple logic gates and then estimate how many of these gates are needed. A commonly used measure is the total number of two-input NAND gates that would be needed to build the circuit; this measure is often called the number of *equivalent gates*.

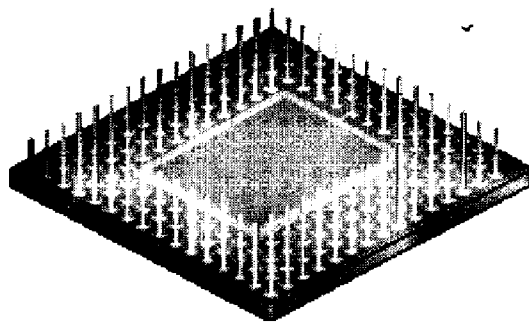
Using the equivalent-gates metric, the size of a 7400-series chip is simple to measure because each chip contains only simple gates. For SPLDs and CPLDs the typical measure used is that each macrocell represents about 20 equivalent gates. Thus a typical PAL that has eight macrocells can accommodate a circuit that needs up to about 160 gates, and a large CPLD that has 500 macrocells can implement circuits of up to about 10,000 equivalent gates.

By modern standards, a logic circuit with 10,000 gates is not large. To implement larger circuits, it is convenient to use a different type of chip that has a larger logic capacity. A *field-programmable gate array (FPGA)* is a programmable logic device that supports implementation of relatively large logic circuits. FPGAs are quite different from SPLDs and CPLDs because FPGAs do not contain AND or OR planes. Instead, FPGAs provide *logic blocks* for implementation of the required functions. The general structure of an FPGA is illustrated in Figure 3.35a. It contains three main types of resources: logic blocks, I/O blocks for connecting to the pins of the package, and interconnection wires and switches. The logic blocks are arranged in a two-dimensional array, and the interconnection wires are organized as horizontal and vertical *routing channels* between rows and columns of logic blocks. The routing channels contain wires and programmable switches that allow the logic blocks to be interconnected in many ways. Figure 3.35a shows two locations for programmable switches; the blue boxes adjacent to logic blocks hold switches that connect the logic block input and output terminals to the interconnection wires, and the blue boxes that are diagonally between logic blocks connect one interconnection wire to another (such as a vertical wire to a horizontal wire). Programmable connections also exist between the I/O blocks and the interconnection wires. The actual number of programmable switches and wires in an FPGA varies in commercially available chips.

FPGAs can be used to implement logic circuits of more than a million equivalent gates in size. Some examples of commercial FPGA products, from Altera and Xilinx, are described in Appendix E. FPGA chips are available in a variety of packages, including the



(a) General structure of an FPGA



(b) Pin grid array (PGA) package (bottom view)

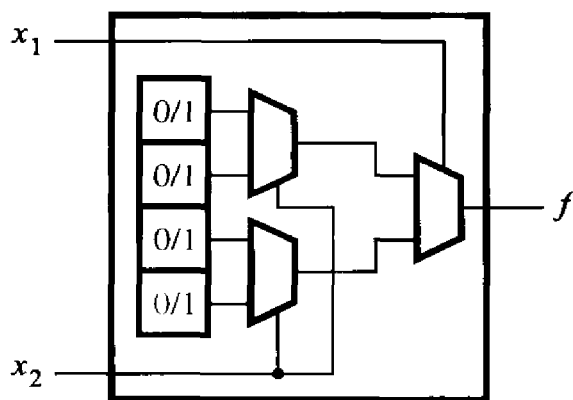
Figure 3.35 A field-programmable gate array (FPGA).

PLCC and QFP packages described earlier. Figure 3.35b depicts another type of package, called a *pin grid array (PGA)*. A PGA package may have up to a few hundred pins in total, which extend straight outward from the bottom of the package, in a grid pattern. Yet another packaging technology that has emerged is known as the *ball grid array (BGA)*. The BGA is similar to the PGA except that the pins are small round balls, instead of posts.

The advantage of BGA packages is that the pins are very small; hence more pins can be provided on a relatively small package.

Each logic block in an FPGA typically has a small number of inputs and outputs. A variety of FPGA products are on the market, featuring different types of logic blocks. The most commonly used logic block is a *lookup table (LUT)*, which contains *storage cells* that are used to implement a small logic function. Each cell is capable of holding a single logic value, either 0 or 1. The stored value is produced as the output of the storage cell. LUTs of various *sizes* may be created, where the size is defined by the number of inputs. Figure 3.36a shows the structure of a small LUT. It has two inputs, x_1 and x_2 , and one output, f . It is capable of implementing any logic function of two variables. Because a two-variable truth table has four rows, this LUT has four storage cells. One cell corresponds to the output value in each row of the truth table. The input variables x_1 and x_2 are used as the select inputs of three multiplexers, which, depending on the valuation of x_1 and x_2 , select the content of one of the four storage cells as the output of the LUT. We introduced multiplexers in section 2.8.2 and will discuss storage cells in Chapter 10.

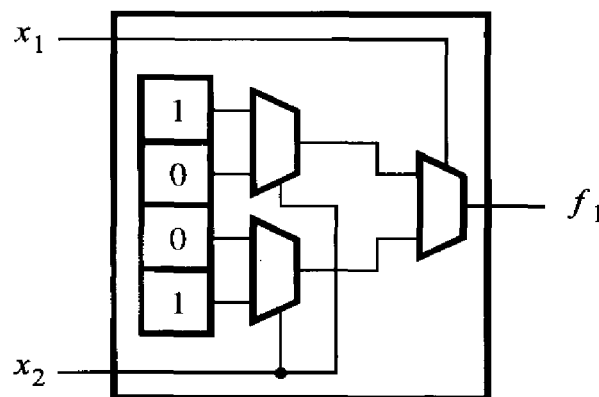
To see how a logic function can be realized in the two-input LUT, consider the truth table in Figure 3.36b. The function f_1 from this table can be stored in the LUT as illustrated in



(a) Circuit for a two-input LUT

x_1	x_2	f_1
0	0	1
0	1	0
1	0	0
1	1	1

(b) $f_1 = \bar{x}_1\bar{x}_2 + x_1x_2$



(c) Storage cell contents in the LUT

Figure 3.36 A two-input lookup table (LUT).

Figure 3.36c. The arrangement of multiplexers in the LUT correctly realizes the function f_1 . When $x_1 = x_2 = 0$, the output of the LUT is driven by the top storage cell, which represents the entry in the truth table for $x_1x_2 = 00$. Similarly, for all valuations of x_1 and x_2 , the logic value stored in the storage cell corresponding to the entry in the truth table chosen by the particular valuation appears on the LUT output. Providing access to the contents of storage cells is only one way in which multiplexers can be used to implement logic functions. A detailed presentation of the applications of multiplexers is given in Chapter 6.

Figure 3.37 shows a three-input LUT. It has eight storage cells because a three-variable truth table has eight rows. In commercial FPGA chips, LUTs usually have either four or five inputs, which require 16 and 32 storage cells, respectively. In Figure 3.29 we showed that PALs usually have extra circuitry included with their AND-OR gates. The same is true for FPGAs, which usually have extra circuitry, besides a LUT, in each logic block. Figure 3.38 shows how a flip-flop may be included in an FPGA logic block. As discussed for

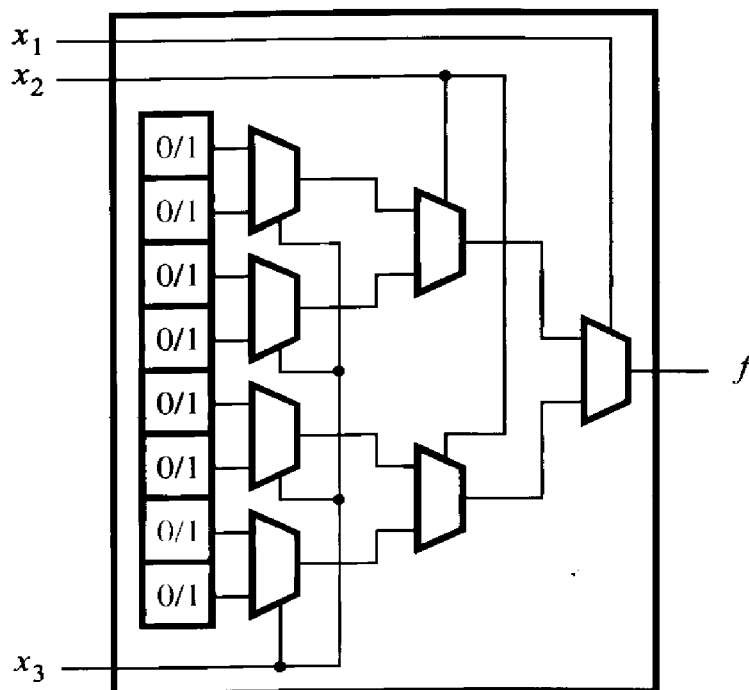


Figure 3.37 A three-input LUT.

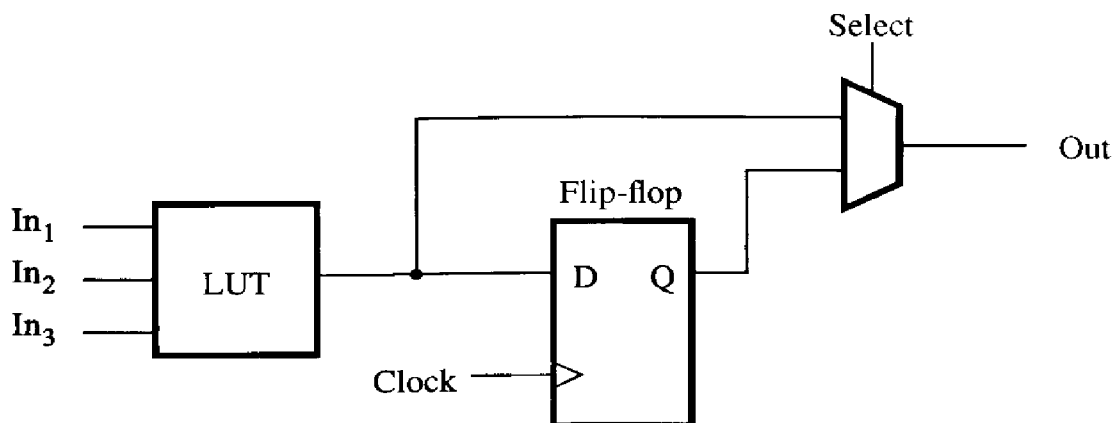


Figure 3.38 Inclusion of a flip-flop in an FPGA logic block.

Figure 3.29, the flip-flop is used to store the value of its D input under control of its *clock* input. Examples of logic blocks in commercial FPGAs are presented in Appendix E.

For a logic circuit to be realized in an FPGA, each logic function in the circuit must be small enough to fit within a single logic block. In practice, a user's circuit is automatically translated into the required form by using CAD tools (see Chapter 12). When a circuit is implemented in an FPGA, the logic blocks are programmed to realize the necessary functions and the routing channels are programmed to make the required interconnections between logic blocks. FPGAs are configured by using the ISP method, which we explained in section 3.6.4. The storage cells in the LUTs in an FPGA are *volatile*, which means that they lose their stored contents whenever the power supply for the chip is turned off. Hence the FPGA has to be programmed every time power is applied. Often a small memory chip that holds its data permanently, called a *programmable read-only memory (PROM)*, is included on the circuit board that houses the FPGA. The storage cells in the FPGA are loaded automatically from the PROM when power is applied to the chips.

A small FPGA that has been programmed to implement a circuit is depicted in Figure 3.39. The FPGA has two-input LUTs, and there are four wires in each routing channel. The figure shows the programmed states of both the logic blocks and wiring switches in a section of the FPGA. Programmable wiring switches are indicated by an X. Each switch shown in blue is turned on and makes a connection between a horizontal and vertical wire.

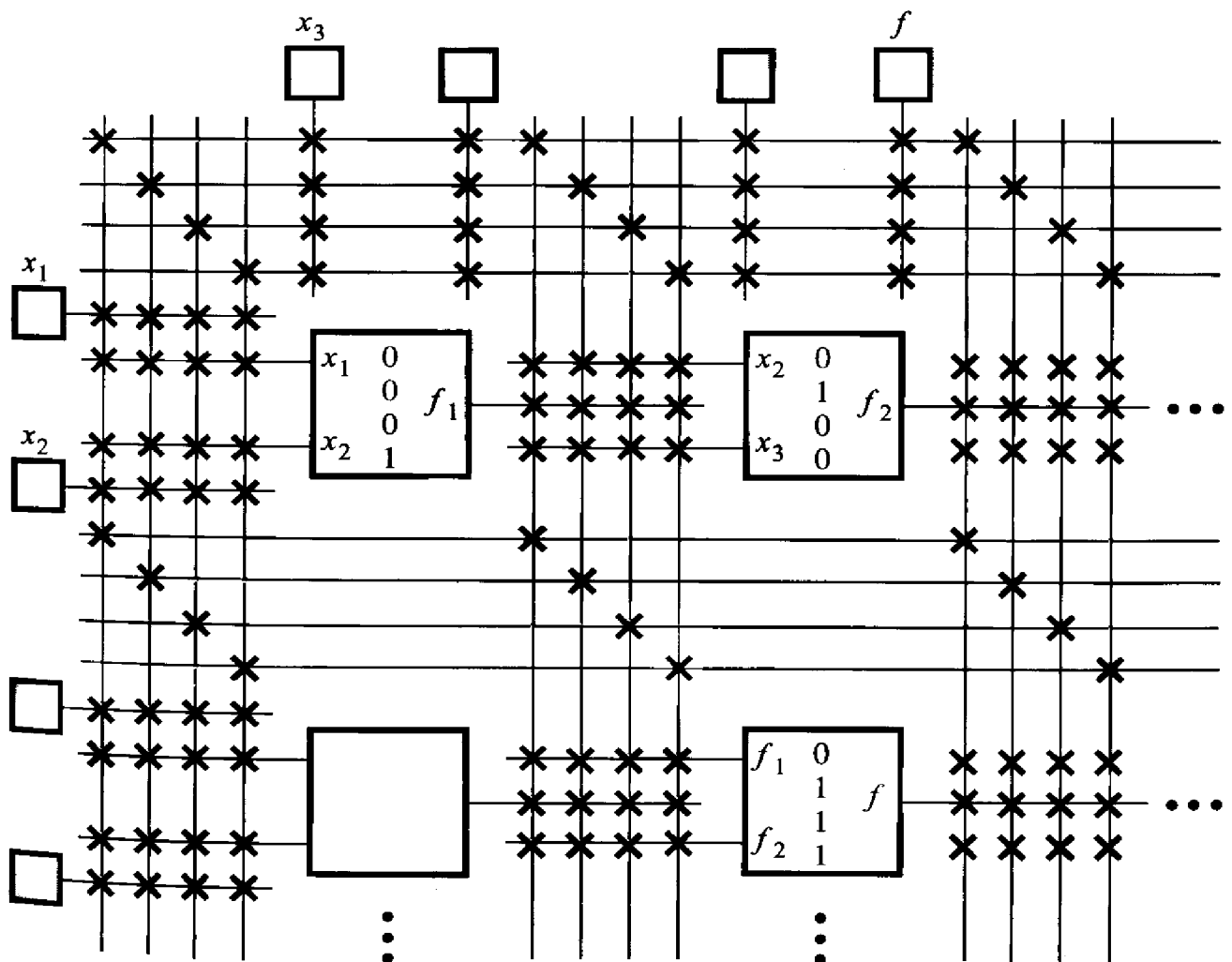


Figure 3.39 A section of a programmed FPGA.

The switches shown in black are turned off. We describe how the switches are implemented by using transistors in section 3.10.1. The truth tables programmed into the logic blocks in the top row of the FPGA correspond to the functions $f_1 = x_1x_2$ and $f_2 = \bar{x}_2x_3$. The logic block in the bottom right of the figure is programmed to produce $f = f_1 + f_2 = x_1x_2 + \bar{x}_2x_3$.

3.6.6 USING CAD TOOLS TO IMPLEMENT CIRCUITS IN CPLDS AND FPGAs

In section 2.9 we suggested the reader should work through Tutorial 1, in Appendix B, to gain some experience using real CAD tools. Tutorial 1 covers the steps of design entry and functional simulation. Now that we have discussed some of the details of the implementation of circuits in chips, the reader may wish to experiment further with the CAD tools. In Tutorials 2 and 3 (Appendices C and D) we show how circuits designed with CAD tools can be implemented in CPLD and FPGA chips.

3.6.7 APPLICATIONS OF CPLDS AND FPGAs

CPLDs and FPGAs are used today in many diverse applications, such as consumer products like DVD players and high-end television sets, controller circuits for automobile factories and test equipment, Internet routers and high-speed network switches, and computer equipment like large tape and disk storage systems.

In a given design situation a CPLD may be chosen when the needed circuit is not very large, or when the device has to perform its function immediately upon application of power to the circuit. FPGAs are not a good choice for this latter case because, as we mentioned before, they are configured by volatile storage elements that lose their stored contents when the power is turned off. This property results in a delay before the FPGA chip can perform its function when turned on.

FPGAs are suitable for implementation of circuits over a large range of size, from about 1000 to more than a million equivalent logic gates. In addition to size a designer will consider other criteria, such as the needed speed of operation of a circuit, power dissipation constraints, and the cost of the chips. When FPGAs do not meet one or more of the requirements, the user may choose to create a custom-manufactured chip as described below.

3.7 CUSTOM CHIPS, STANDARD CELLS, AND GATE ARRAYS

The key factor that limits the size of a circuit that can be accommodated in a PLD is the existence of programmable switches. Although these switches provide the important benefit of user programmability, they consume a significant amount of space on the chip, which leads to increased cost. They also result in a reduction in the speed of operation of circuits, and an increase in power consumption. In this section we will introduce some integrated circuit technologies that do not contain programmable switches.

To provide the largest number of logic gates, highest circuit speed, or lowest power, a so-called *custom chip* can be manufactured. Whereas a PLD is prefabricated, containing logic gates and programmable switches that are programmed to realize a user's circuit, a custom chip is created from scratch. The designer of a custom chip has complete flexibility to decide the size of the chip, the number of transistors the chip contains, the placement of each transistor on the chip, and the way the transistors are connected together. The process of defining exactly where on the chip each transistor and wire is situated is called *chip layout*. For a custom chip the designer may create any layout that is desired. A custom chip requires a large amount of design effort and is therefore expensive. Consequently, such chips are produced only when standard parts like FPGAs do not meet the requirements. To justify the expense of a custom chip, the product being designed must be expected to sell in sufficient quantities to recoup the cost. Two examples of products that are usually realized with custom chips are microprocessors and memory chips.

In situations where the chip designer does not need complete flexibility for the layout of each individual transistor in a custom chip, some of the design effort can be avoided by using a technology known as *standard cells*. Chips made using this technology are often called *application-specific integrated circuits (ASICs)*. This technology is illustrated in Figure 3.40, which depicts a small portion of a chip. The rows of logic gates may be connected by wires that are created in the *routing channels* between the rows of gates. In general, many types of logic gates may be used in such a chip. The available gates are prebuilt and are stored in a library that can be accessed by the designer. In Figure 3.40 the wires are drawn in two colors. This scheme is used because metal wires can be created on integrated circuits in multiple *layers*, which makes it possible for two wires to cross one another without creating a short circuit. The blue wires represent one layer of metal wires, and the black wires are a different layer. Each blue square represents a hard-wired connection (called a *via*) between a wire on one layer and a wire on the other layer. In current technology it is possible to have eight or more layers of metal wiring. Some of the

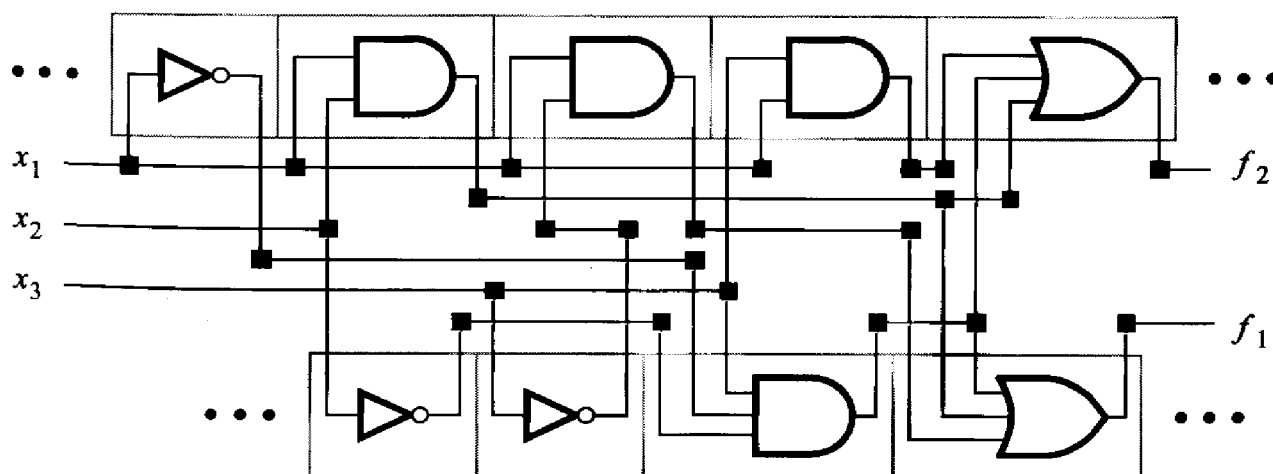


Figure 3.40 A section of two rows in a standard-cell chip.

metal layers can be placed on top of the transistors in the logic gates, resulting in a more efficient chip layout.

Like a custom chip, a standard-cell chip is created from scratch according to a user's specifications. The circuitry shown in Figure 3.40 implements the two logic functions that we realized in a PLA in Figure 3.26, namely, $f_1 = x_1x_2 + x_1\bar{x}_3 + \bar{x}_1\bar{x}_2x_3$ and $f_2 = x_1x_2 + \bar{x}_1\bar{x}_2x_3 + x_1x_3$. Because of the expense involved, a standard-cell chip would never be created for a small circuit such as this one, and thus the figure shows only a portion of a much larger chip. The layout of individual gates (standard cells) is predesigned and fixed. The chip layout can be created automatically by CAD tools because of the regular arrangement of the logic gates (cells) in rows. A typical chip has many long rows of logic gates with a large number of wires between each pair of rows. The I/O blocks around the periphery connect to the pins of the chip package, which is usually a QFP, PGA, or BGA package.

Another technology, similar to standard cells, is the *gate-array* technology. In a gate array parts of the chip are prefabricated, and other parts are custom fabricated for a particular user's circuit. This concept exploits the fact that integrated circuits are fabricated in a sequence of steps, some steps to create transistors and other steps to create wires to connect the transistors together. In gate-array technology, the manufacturer performs most of the fabrication steps, typically those involved in the creation of the transistors, without considering the requirements of a user's circuit. This process results in a silicon wafer (see Figure 1.1) of partially finished chips, called the *gate-array template*. Later the template is modified, usually by fabricating wires that connect the transistors together, to create a user's circuit in each finished chip. The gate-array approach provides cost savings in comparison to the custom-chip approach because the gate-array manufacturer can amortize the cost of chip fabrication over a large number of template wafers, all of which are identical. Many variants of gate-array technology exist. Some have relatively large logic cells, while others are configurable at the level of a single transistor.

An example of a gate-array template is given in Figure 3.41. The gate array contains a two-dimensional array of logic cells. The chip's general structure is similar to a standard-cell chip except that in the gate array all logic cells are identical. Although the types of logic cells used in gate arrays vary, one common example is a two- or three-input NAND gate. In some gate arrays empty spaces exist between the rows of logic cells to accommodate the wires that will be added later to connect the logic cells together. However, most gate arrays do not have spaces between rows of logic cells, and the interconnection wires are fabricated on top of the logic cells. This design is possible because, as discussed for Figure 3.40, metal wires can be created on a chip in multiple layers. This approach is known as the *sea-of-gates* technology. Figure 3.42 depicts a small section of a gate array that has been customized to implement the logic function $f = x_2\bar{x}_3 + x_1x_3$. As we showed in section 2.7, it is easy to verify that this circuit with only NAND gates is equivalent to the AND-OR form of the circuit.

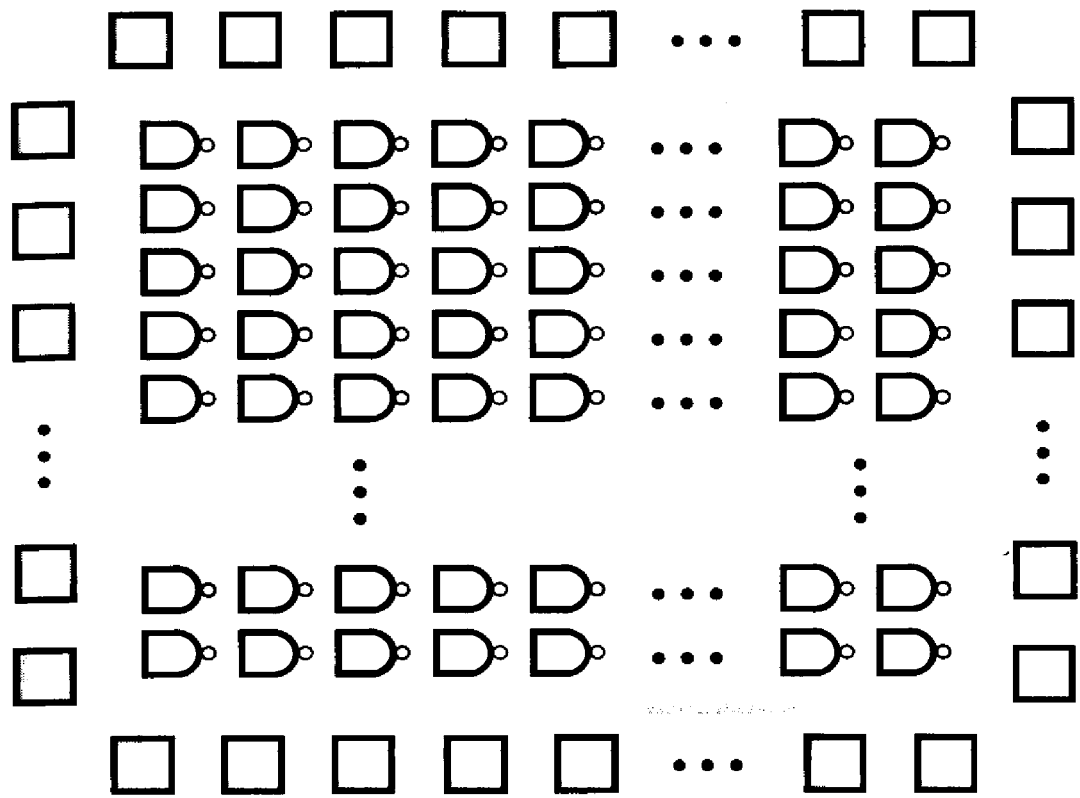


Figure 3.41 A sea-of-gates gate array.

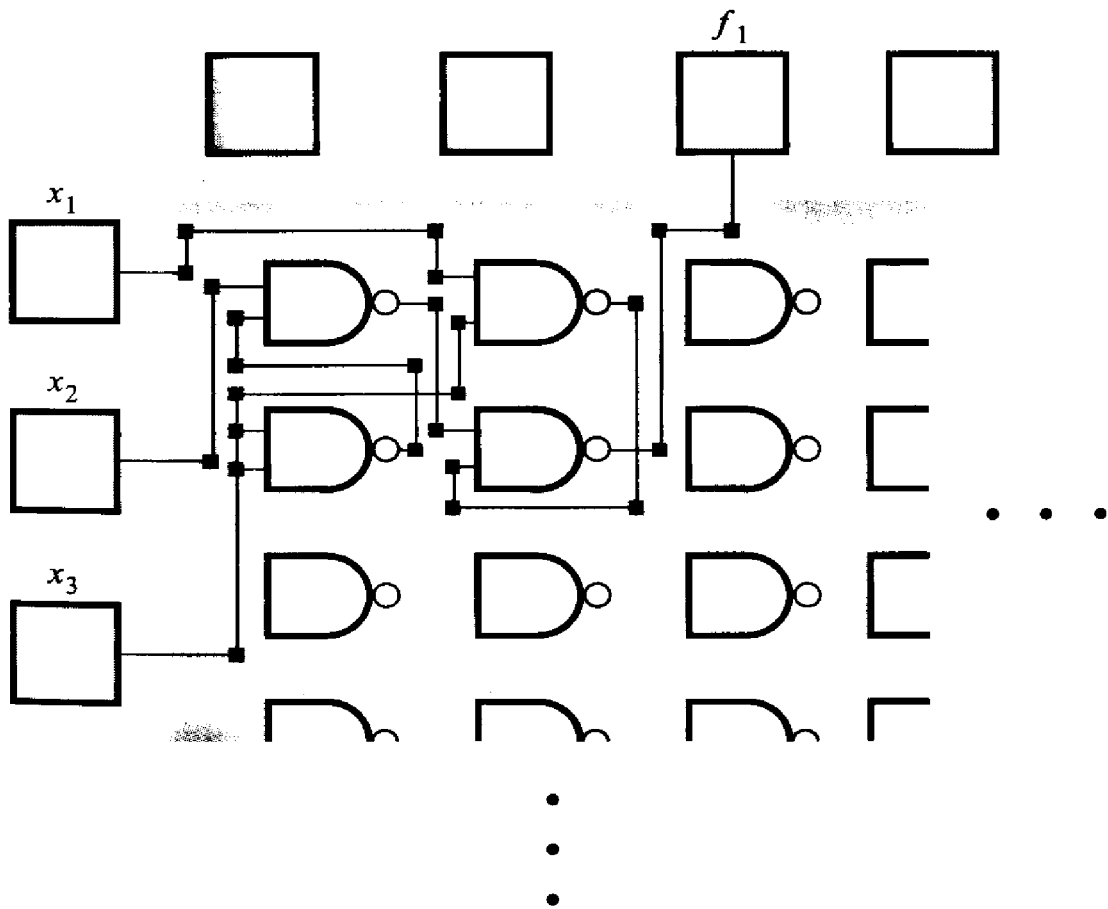


Figure 3.42 The logic function $f_1 = x_2\bar{x}_3 + x_1x_3$ in the gate array of Figure 3.41.

3.8 PRACTICAL ASPECTS

So far in this chapter, we have described the basic operation of logic gate circuits and given examples of commercial chips. In this section we provide more detailed information on several aspects of digital circuits. We describe how transistors are fabricated in silicon and give a detailed explanation of how transistors operate. We discuss the robustness of logic circuits and discuss the important issues of signal propagation delays and power dissipation in logic gates.

3.8.1 MOSFET FABRICATION AND BEHAVIOR

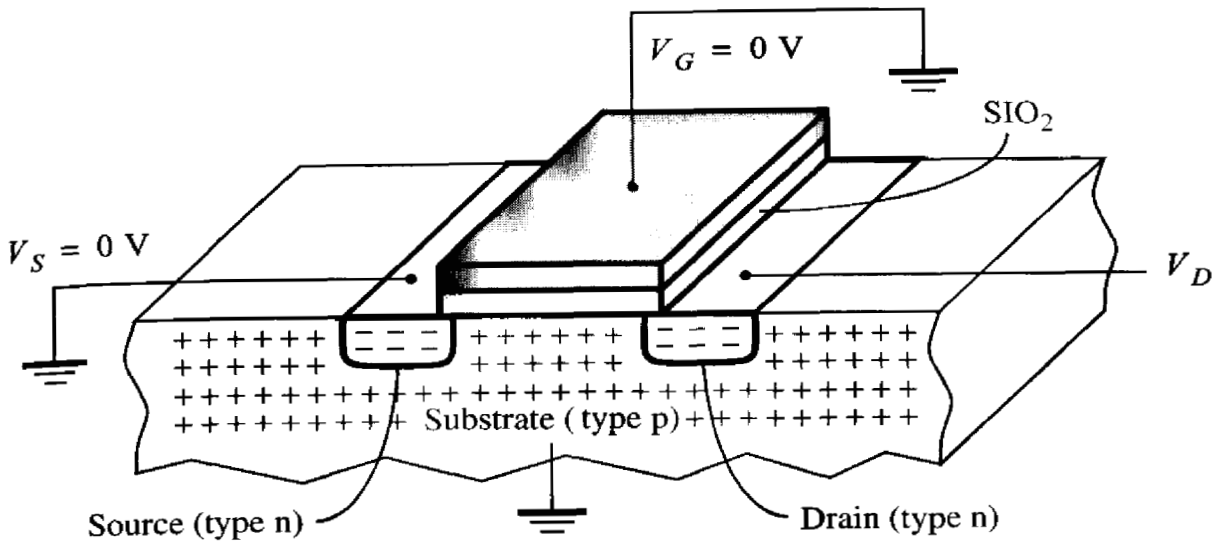
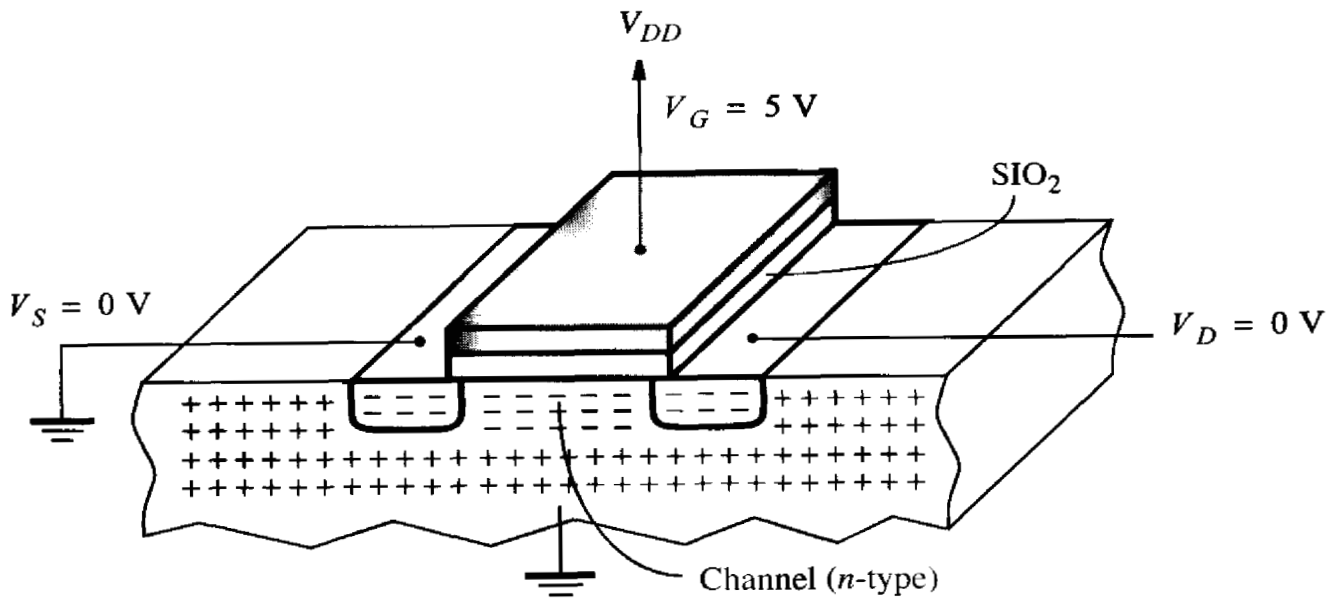
To understand the operation of NMOS and PMOS transistors, we need to consider how they are built in an integrated circuit. Integrated circuits are fabricated on silicon wafers. A silicon wafer (see Figure 1.1) is usually 6, 8, or 12 inches in diameter and is somewhat similar in appearance to an audio compact disc (CD). Many integrated circuit chips are fabricated on one wafer, and the wafer is then cut to provide the individual chips.

Silicon is an *electrical semiconductor*, which means that it can be manipulated such that it sometimes conducts electrical current and at other times does not. A transistor is fabricated by creating areas in the silicon substrate that have an excess of either positive or negative electrical charge. Negatively charged areas are called *type n*, and positively charged areas are *type p*. Figure 3.43 illustrates the structure of an NMOS transistor. It has *type n* silicon for both the source and drain terminals, and *type p* for the substrate terminal. Metal wiring is used to make electrical connections to the source and drain terminals.

When MOSFETs were invented, the gate terminal was made of metal. Now a material known as *polysilicon* is used. Like metal, polysilicon is a conductor, but polysilicon is preferable to metal because the former has properties that allow MOSFETs to be fabricated with extremely small dimensions. The gate is electrically isolated from the rest of the transistor by a layer of silicon dioxide (SiO_2), which is a type of glass that acts as an electrical insulator between the gate terminal and the substrate of the transistor. The transistor's operation is governed by electrical fields caused by voltages applied to its terminals, as discussed below.

In Figure 3.43 the voltage levels applied at the source, gate, and drain terminals are labeled V_S , V_G , and V_D , respectively. Consider first the situation depicted in Figure 3.43a in which both the source and gate are connected to *Gnd* ($V_S = V_G = 0$ V). The *type n* source and *type n* drain are isolated from one another by the *type p* substrate. In electrical terms two diodes exist between the source and drain. One diode is formed by the *p-n* junction between the substrate and source, and the other diode is formed by the *p-n* junction between the substrate and drain. These back-to-back diodes represent a very high resistance (about 10^{12} Ω [1]) between the drain and source that prevents current flow. We say that the transistor is *turned off*, or *cut off*, in this state.

Next consider the effect of increasing the voltage at the gate terminal with respect to the voltage at the source. Let V_{GS} represent the gate-to-source voltage. If V_{GS} is greater than a certain minimum positive voltage, called the *threshold voltage* V_T , then the transistor changes from an open switch to a closed switch, as explained below. The exact level of V_T depends on many factors, but it is typically about $0.2 V_{DD}$.

(a) When $V_{GS} = 0\text{ V}$, the transistor is off(b) When $V_{GS} = 5\text{ V}$, the transistor is on**Figure 3.43** Physical structure of an NMOS transistor.

The transistor's state when $V_{GS} > V_T$ is illustrated in Figure 3.43b. The gate terminal is connected to V_{DD} , resulting in $V_{GS} = 5\text{ V}$. The positive voltage on the gate attracts free electrons that exist in the type n source terminal, as well as in other areas of the transistor, toward the gate. Because the electrons cannot pass through the layer of glass under the gate, they gather in the region of the substrate between the source and drain, which is called the *channel*. This concentration of electrons *inverts* the silicon in the area of the channel from type p to type n , which effectively connects the source and the drain. The size of the channel is determined by the length and width of the gate. The channel length L is the dimension of the gate between the source and drain, and the channel width W is the other

dimension. The channel can also be thought of as having a depth, which is dependent on the applied voltages at the source, gate, and drain.

No current can flow through the gate node of the transistor, because of the layer of glass that insulates the gate from the substrate. A current I_D may flow from the drain node to the source. For a fixed value of $V_{GS} > V_T$, the value of I_D depends on the voltage applied across the channel V_{DS} . If $V_{DS} = 0$ V, then no current flows. As V_{DS} is increased, I_D increases approximately linearly with the applied V_{DS} , as long as V_D is sufficiently small to provide at least V_T volts across the drain end of the channel, that is $V_{GD} > V_T$. In this range of voltages, namely, $0 < V_{DS} < (V_{GS} - V_T)$, the transistor is said to operate in the *triode region*, also called the *linear region*. The relationship between voltage and current is approximated by the equation

$$I_D = k'_n \frac{W}{L} \left[(V_{GS} - V_T)V_{DS} - \frac{1}{2}V_{DS}^2 \right] \quad [3.1]$$

The symbol k'_n is called the *process transconductance parameter*. It is a constant that depends on the technology being used and has the units A/V^2 .

As V_D is increased, the current flow through the transistor increases, as given by equation 3.1, but only to a certain point. When $V_{DS} = V_{GS} - V_T$, the current reaches its maximum value. For larger values of V_{DS} , the transistor is no longer operating in the triode region. Since the current is at its saturated (maximum) value, we say that the transistor is in the *saturation region*. The current is now independent of V_{DS} and is given by the expression

$$I_D = \frac{1}{2}k'_n \frac{W}{L} (V_{GS} - V_T)^2 \quad [3.2]$$

Figure 3.44 shows the shape of the current-voltage relationship in the NMOS transistor for a fixed value of $V_{GS} > V_T$. The figure indicates the point at which the transistor leaves the triode region and enters the saturation region, which occurs at $V_{DS} = V_{GS} - V_T$.

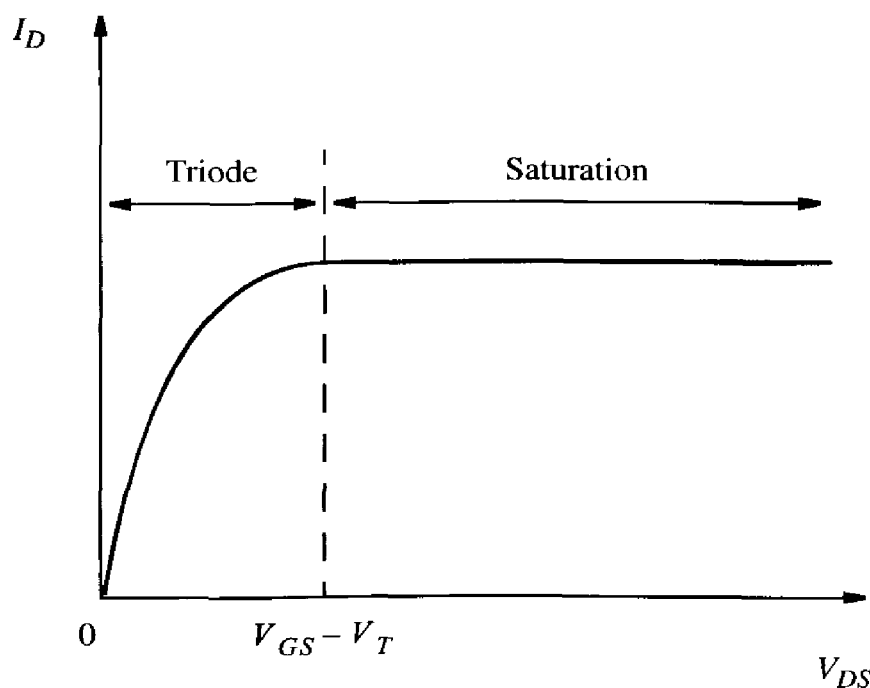


Figure 3.44 The current-voltage relationship in the NMOS transistor.

Assume the values $k'_n = 60 \mu\text{A}/\text{V}^2$, $W/L = 2.0 \mu\text{m}/0.5 \mu\text{m}$, $V_S = 0 \text{ V}$, $V_G = 5 \text{ V}$, and $V_T = 1 \text{ V}$. If $V_D = 2.5 \text{ V}$, the current in the transistor is given by equation 3.1 as $I_D \approx 1.7 \text{ mA}$. If $V_D = 5 \text{ V}$, the saturation current is calculated using equation 3.2 as $I_D \approx 2 \text{ mA}$.

The PMOS Transistor

The behavior of PMOS transistors is the same as for NMOS except that all voltages and currents are reversed. The source terminal of the PMOS transistor is the terminal with the higher voltage level (recall that for an NMOS transistor the source terminal is the one with the lower voltage level), and the threshold voltage required to turn the transistor on has a negative value. PMOS transistors have the same physical construction as NMOS transistors except that wherever the NMOS transistor has type n silicon, the PMOS transistor has type p , and vice versa. For a PMOS transistor the equivalent of Figure 3.43a is to connect both the source and gate nodes to V_{DD} , in which case the transistor is turned off. To turn the PMOS transistor on, equivalent to Figure 3.43b, we would set the gate node to Gnd , resulting in $V_{GS} = -5 \text{ V}$.

Because the channel is type p silicon, instead of type n , the physical mechanism for current conduction in PMOS transistors is different from that in NMOS transistors. A detailed discussion of this issue is beyond the scope of this book, but one implication has to be mentioned. Equations 3.1 and 3.2 use the parameter k'_n . The corresponding parameter for a PMOS transistor is k'_p , but current flows more readily in type n silicon than in type p , with the result that in a typical technology $k'_p \approx 0.4 \times k'_n$. For a PMOS transistor to have current capacity equal to that of an NMOS transistor, we must use W/L of about two to three times larger in the PMOS transistor. In logic gates the sizes of NMOS and PMOS transistors are usually chosen to account for this factor.

3.8.2 MOSFET ON-RESISTANCE

In section 3.1 we considered MOSFETs as ideal switches that have infinite resistance when turned off and zero resistance when on. The actual resistance in the channel when the transistor is turned on, referred to as the *on-resistance*, is given by V_{DS}/I_D . Using equation 3.1 we can calculate the on-resistance in the triode region, as shown in Example 3.4.

Consider a CMOS inverter in which the input voltage V_x is equal to 5 V. The NMOS transistor is turned on, and the output voltage V_f is close to 0 V. Hence V_{DS} for the NMOS transistor is close to zero and the transistor is operating in the triode region. In the curve in Figure 3.44, the transistor is operating at a point very close to the origin. Although the value of V_{DS} is small, it is not exactly zero. In the next section we explain that V_{DS} would typically be about 0.1 mV. Hence the current I_D is not exactly zero; it is defined by equation 3.1. In this equation we can ignore the term involving V_{DS}^2 because V_{DS} is small. In this case the

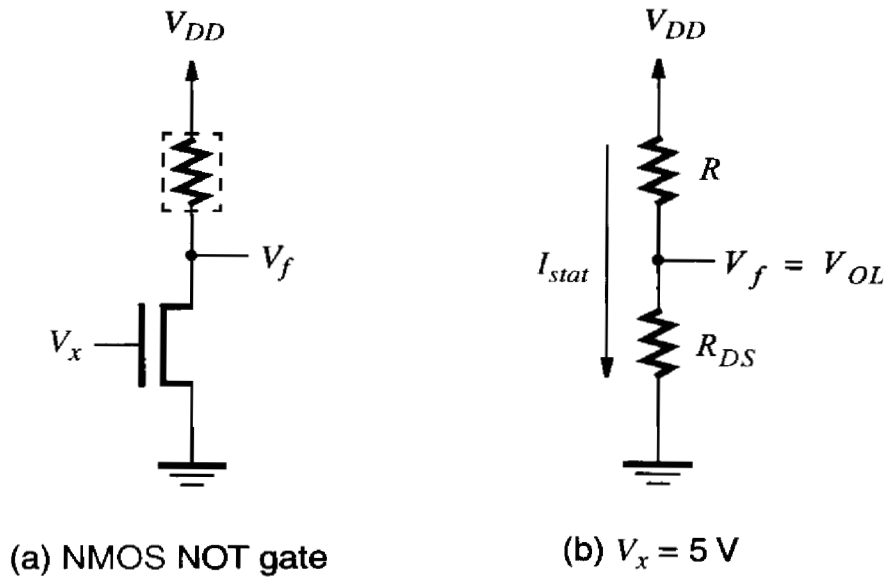


Figure 3.45 Voltage levels in the NMOS inverter.

on-resistance is approximated by

$$R_{DS} = V_{DS}/I_D = 1/\left[k'_n \frac{W}{L} (V_{GS} - V_T)\right] \quad [3.3]$$

Assuming the values $k'_n = 60 \mu\text{A}/\text{V}^2$, $W/L = 2.0 \mu\text{m}/0.5 \mu\text{m}$, $V_{GS} = 5 \text{ V}$, and $V_T = 1 \text{ V}$, we get $R_{DS} \approx 1 \text{ k}\Omega$.

3.8.3 VOLTAGE LEVELS IN LOGIC GATES

In Figure 3.1 we showed that the logic values are represented by a range of voltage levels. We should now consider the issue of voltage levels more carefully.

The high and low voltage levels in a logic family are characterized by the operation of its basic inverter. Figure 3.45a reproduces the circuit in Figure 3.5 for an inverter built with NMOS technology. When $V_x = 0 \text{ V}$, the NMOS transistor is turned off. No current flows; hence $V_f = 5 \text{ V}$. When $V_x = V_{DD}$, the NMOS transistor is turned on. To calculate the value of V_f , we can represent the NMOS transistor by a resistor with the value R_{DS} , as illustrated in Figure 3.45b. Then V_f is given by the voltage divider

$$V_f = V_{DD} \frac{R_{DS}}{R_{DS} + R}$$

3.5 Assume that $R = 25 \text{ k}\Omega$. Using the result from Example 3.4, $R_{DS} = 1 \text{ k}\Omega$, which gives $V_f \approx 0.2 \text{ V}$.

As indicated in Figure 3.45b, a current I_{stat} flows through the NMOS inverter under the static condition $V_x = V_{DD}$. This current is given by

$$I_{stat} = V_f / R_{DS} = 0.2 \text{ V} / 1 \text{ k}\Omega = 0.2 \text{ mA}$$

This static current has important implications, which we discuss in section 3.8.6.

In modern NMOS circuits, the pull-up device R is implemented using a PMOS transistor. Such circuits are referred to as *pseudo-NMOS circuits*. They are fully compatible with CMOS circuits; hence a single chip may contain both CMOS and pseudo-NMOS gates. Example 3.13 shows the circuit for a pseudo-NMOS inverter and discusses how to calculate its output voltage levels.

The CMOS Inverter

It is customary to use the symbols V_{OH} and V_{OL} to characterize the voltage levels in a logic circuit. The meaning of V_{OH} is the voltage produced when the output is high. Similarly, V_{OL} refers to the voltage produced when the output is low. As discussed above, in the NMOS inverter $V_{OH} = V_{DD}$ and V_{OL} is about 0.2 V.

Consider again the CMOS inverter in Figure 3.12a. Its output-input voltage relationship is summarized by the *voltage transfer characteristic* shown in Figure 3.46. The curve gives the steady-state value of V_f for each value of V_x . When $V_x = 0$ V, the NMOS transistor is off. No current flows; hence $V_f = V_{OH} = V_{DD}$. When $V_x = V_{DD}$, the PMOS transistor is off, no current flows, and $V_f = V_{OL} = 0$ V. For completeness we should mention that even when a transistor is turned off, a small current, called the *leakage current*, may flow through it. This current has a slight effect on V_{OH} and V_{OL} . For example, a typical value of V_{OL} is 0.1 mV, rather than 0 V [1].

Figure 3.46 includes labels at the points where the output voltage begins to change from high to low, and vice versa. The voltage V_{IL} represents the point where the output voltage is high and the slope of the curve equals -1 . This voltage level is defined as the maximum input voltage level that the inverter will interpret as low, hence producing a high output. Similarly, the voltage V_{IH} , which is the other point on the curve where the slope equals -1 , is the minimum input voltage level that the inverter will interpret as high, hence producing a low output. The parameters V_{OH} , V_{OL} , V_{IL} , and V_{IH} are important for quantifying the robustness of a logic family, as discussed below.

3.8.4 NOISE MARGIN

Consider the two NOT gates shown in Figure 3.47a. Let us refer to the gates on the left and right as N_1 and N_2 , respectively. Electronic circuits are constantly subjected to random perturbations, called *noise*, which can alter the output voltage levels produced by the gate N_1 . It is essential that this noise not cause the gate N_2 to misinterpret a low logic value as a high one, or vice versa. Consider the case where N_1 produces its low voltage level V_{OL} . The presence of noise may alter the voltage level, but as long as it remains less than V_{IL} , it will be interpreted correctly by N_2 . The ability to tolerate noise without affecting the

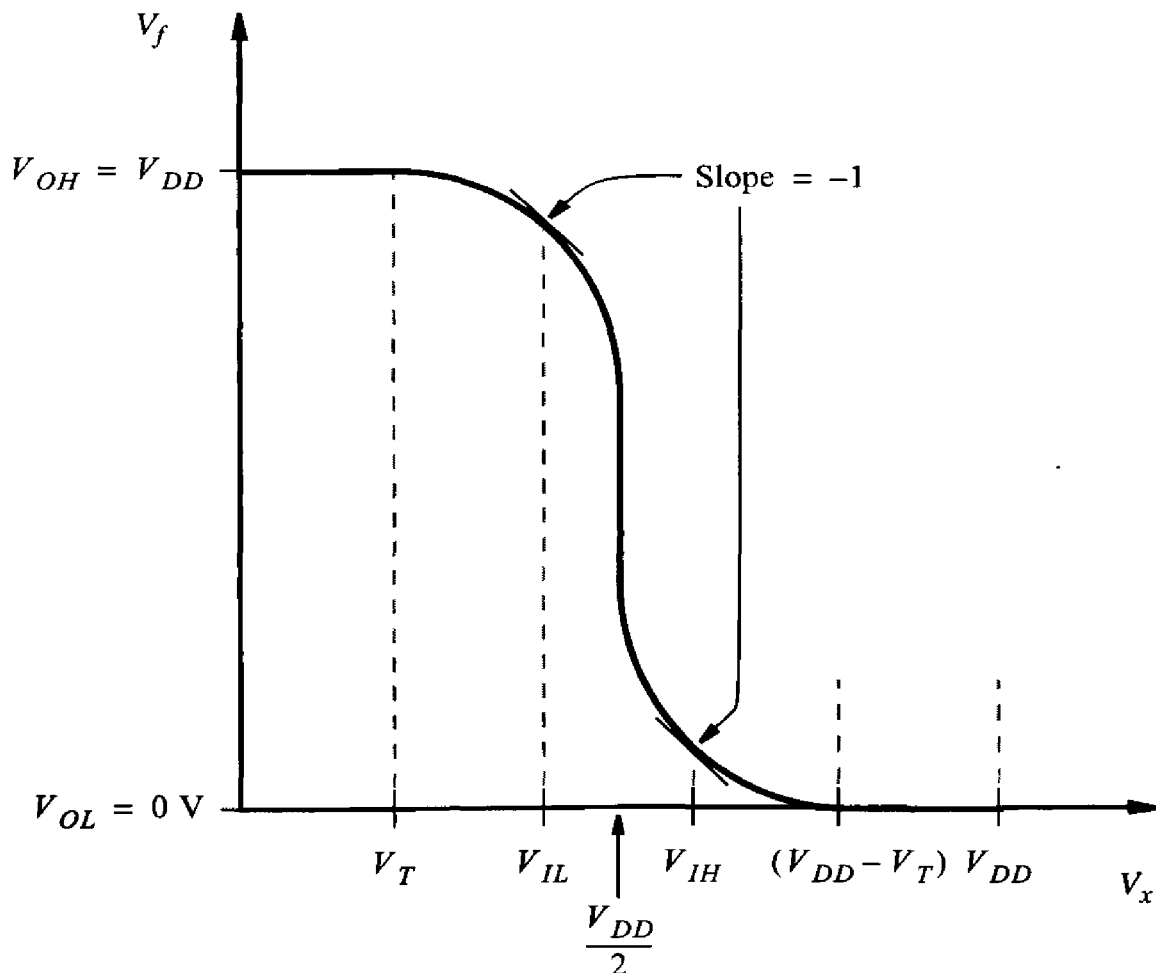


Figure 3.46 The voltage transfer characteristic for the CMOS inverter.

correct operation of the circuit is known as *noise margin*. For the low output voltage, we define the low *noise margin* as

$$NM_L = V_{IL} - V_{OL}$$

A similar situation exists when N_1 produces its high output voltage V_{OH} . Any existing noise in the circuit may alter the voltage level, but it will be interpreted correctly by N_2 as long as the voltage is greater than V_{IH} . The high noise margin is defined as

$$NM_H = V_{OH} - V_{IH}$$

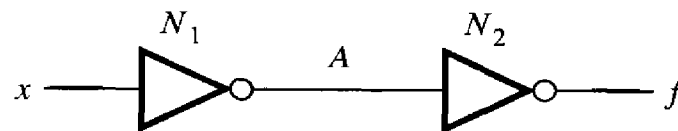
- 6** For a given technology the voltage transfer characteristic of the basic inverter determines the levels V_{OH} , V_{OL} , V_{IL} , and V_{IH} . For CMOS we showed in Figure 3.46 that $V_{OH} = V_{DD}$ and $V_{OL} = 0$ V. By finding the two points where the slope of the voltage transfer characteristic is equal to -1 , it can be shown [1] that $V_{IL} \cong \frac{1}{8}(3V_{DD} + 2V_T)$ and $V_{IH} \cong \frac{1}{8}(5V_{DD} - 2V_T)$. For the typical value $V_T = 0.2 V_{DD}$, this gives

$$NM_L = NM_H = 0.425 \times V_{DD}$$

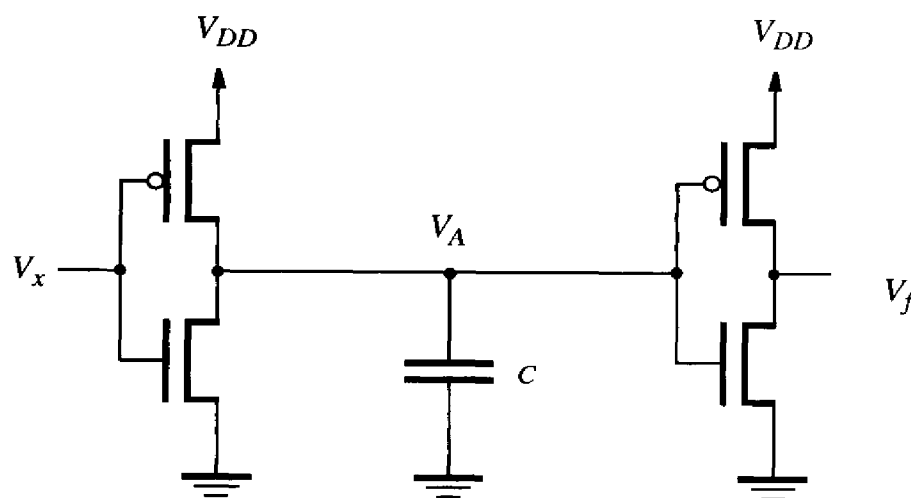
Hence the available noise margin depends on the power supply voltage level. For $V_{DD} = 5$ V, the noise margin is 2.1 V, and for $V_{DD} = 3.3$ V, the noise margin is 1.4 V.

3.8.5 DYNAMIC OPERATION OF LOGIC GATES

In Figure 3.47a the node between the two gates is labeled A . Because of the way in which transistors are constructed in silicon, N_2 has the effect of contributing to a capacitive load at node A . Figure 3.43 shows that transistors are constructed by using several layers of different materials. Wherever two types of material meet or overlap inside the transistor, a capacitor may be effectively created. This capacitance is called *parasitic*, or *stray*, capacitance because it results as an undesired side effect of transistor fabrication. In Figure 3.47 we are interested in the capacitance that exists at node A . A number of parasitic capacitors are attached to this node, some caused by N_1 and others caused by N_2 . One significant parasitic capacitor exists between the input of inverter N_2 and ground. The value of this capacitor depends on the sizes of the transistors in N_2 . Each transistor contributes a *gate capacitance*, $C_g = W \times L \times C_{ox}$. The parameter C_{ox} , called the *oxide capacitance*, is a constant for the technology being used and has the units $\text{fF}/\mu\text{m}^2$. Additional capacitance is caused by the transistors in N_1 and by the metal wiring that is attached to node A . It is possible to



(a) A NOT gate driving another NOT gate



(b) The capacitive load at node A

Figure 3.47 Parasitic capacitance in integrated circuits.

represent all of the parasitic capacitance by a single equivalent capacitance between node A and ground [2]. In Figure 3.47b this equivalent capacitance is labeled C .

The existence of stray capacitance has a negative effect on the speed of operation of logic circuits. Voltage across a capacitor cannot change instantaneously. The time needed to charge or discharge a capacitor depends on the size of the capacitance C and on the amount of current through the capacitor. In the circuit of Figure 3.47b, when the PMOS transistor in N_1 is turned on, the capacitor is charged to V_{DD} ; it is discharged when the NMOS transistor is turned on. In each case the current flow I_D through the involved transistor and the value of C determine the rate of charging and discharging the capacitor.

Chapter 2 introduced the concept of a timing diagram, and Figure 2.10 shows a timing diagram in which waveforms have perfectly vertical edges in transition from one logic level to the other. In real circuits, waveforms do not have this "ideal" shape, but instead have the appearance of those in Figure 3.48. The figure gives a waveform for the input V_x in Figure 3.47b and shows the resulting waveform at node A. We assume that V_x is initially at the voltage level V_{DD} and then makes a transition to 0. Once V_x reaches a sufficiently low voltage, N_1 begins to drive voltage V_A toward V_{DD} . Because of the parasitic capacitance, V_A cannot change instantaneously and a waveform with the shape indicated in the figure results. The time needed for V_A to change from low to high is called the *rise time*, t_r , which is defined as the time elapsed from when V_A is at 10 percent of V_{DD} until it reaches 90 percent of V_{DD} . Figure 3.48 also defines the total amount of time needed for the change at V_x to cause a change in V_A . This interval is called the *propagation delay*, often written t_p , of the inverter. It is the time from when V_x reaches 50 percent of V_{DD} until V_A reaches the same level.

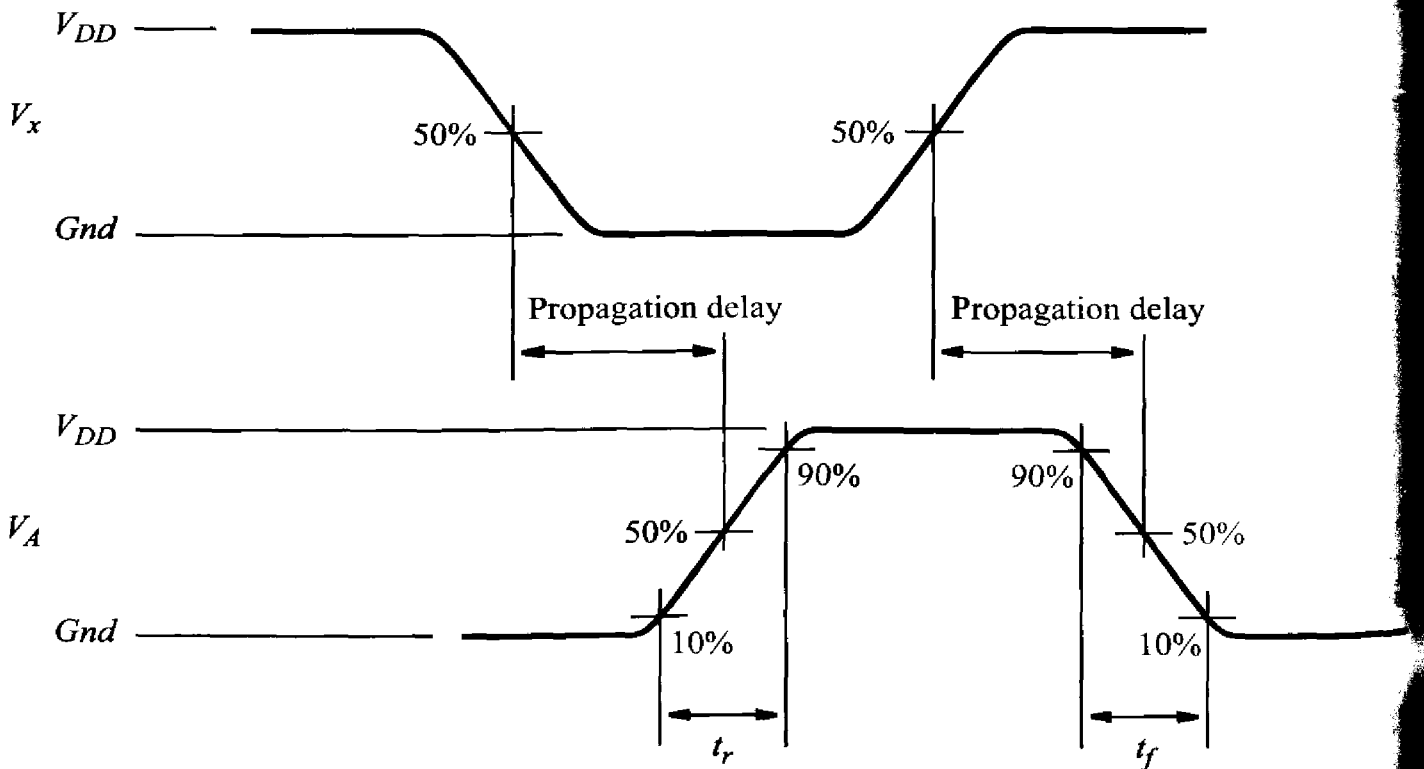


Figure 3.48 Voltage waveforms for logic gates.

After remaining at 0 V for some time, V_x then changes back to V_{DD} , causing N_1 to discharge C to Gnd . In this case the transition time at node A pertains to a change from high to low, which is referred to as the *fall time*, t_f , from 90 percent of V_{DD} to 10 percent of V_{DD} . As indicated in the figure, there is a corresponding propagation delay for the new change in V_x to affect V_A . In a given logic gate, the relative sizes of the PMOS and NMOS transistors are usually chosen such that t_r and t_f have about the same value.

Equations 3.1 and 3.2 specify the amount of current flow through an NMOS transistor. Given the value of C in Figure 3.47, it is possible to calculate the propagation delay for a change in V_A from high to low. For simplicity, assume that V_x is initially 0 V; hence the PMOS transistor is turned on, and $V_A = 5$ V. Then V_x changes to V_{DD} at time 0, causing the PMOS transistor to turn off and the NMOS to turn on. The propagation delay is then the time required to discharge C through the NMOS transistor to the voltage $V_{DD}/2$. When V_x first changes to V_{DD} , $V_A = 5$ V; hence the NMOS transistor will have $V_{DS} = V_{DD}$ and will be in the saturation region. The current I_D is given by equation 3.2. Once V_A drops below $V_{DD} - V_T$, the NMOS transistor will enter the triode region where I_D is given by equation 3.1. For our purposes, we can approximate the current flow as V_A changes from V_{DD} to $V_{DD}/2$ by finding the average of the values given by equation 3.2 with $V_{DS} = V_{DD}$ and equation 3.1 with $V_{DS} = V_{DD}/2$. Using the basic expression for the time needed to charge a capacitor (see Example 3.11), we have

$$t_p = \frac{C\Delta V}{I_D} = \frac{CV_{DD}/2}{I_D}$$

Substituting for the average value of I_D as discussed above, yields [1]

$$t_p \cong \frac{1.7 C}{k'_n \frac{W}{L} V_{DD}} \quad [3.4]$$

This expression specifies that the speed of the circuit depends both on the value of C and on the dimensions of the transistor. The delay can be reduced by making C smaller or by making the ratio W/L larger. The expression shows the propagation time when the output changes from a high level to a low level. The low-to-high propagation time is given by the same expression but using k'_p and W/L of the PMOS transistor.

In logic circuits, L is usually set to the minimum value that is permitted according to the specifications of the fabrication technology used. The value of W is chosen depending on the amount of current flow, hence propagation delay, that is desired. Figure 3.49 illustrates two sizes of transistors. Part (a) depicts a minimum-size transistor, which would be used in a circuit wherever capacitive loading is small or where speed of operation is not critical. Figure 3.49b shows a larger transistor, which has the same length as the transistor in part (a) but a larger width. There is a trade-off involved in choosing transistor sizes, because a larger transistor takes more space on a chip than a smaller one. Also, increasing W not only increases the amount of current flow in the transistor but also results in an increase in the parasitic capacitance (recall that the capacitance C_g between the gate terminal and ground is proportional to $W \times L$), which tends to offset some of the expected improvement in performance. In logic circuits large transistors are used where high capacitive loads must be driven and where signal propagation delays must be minimized.

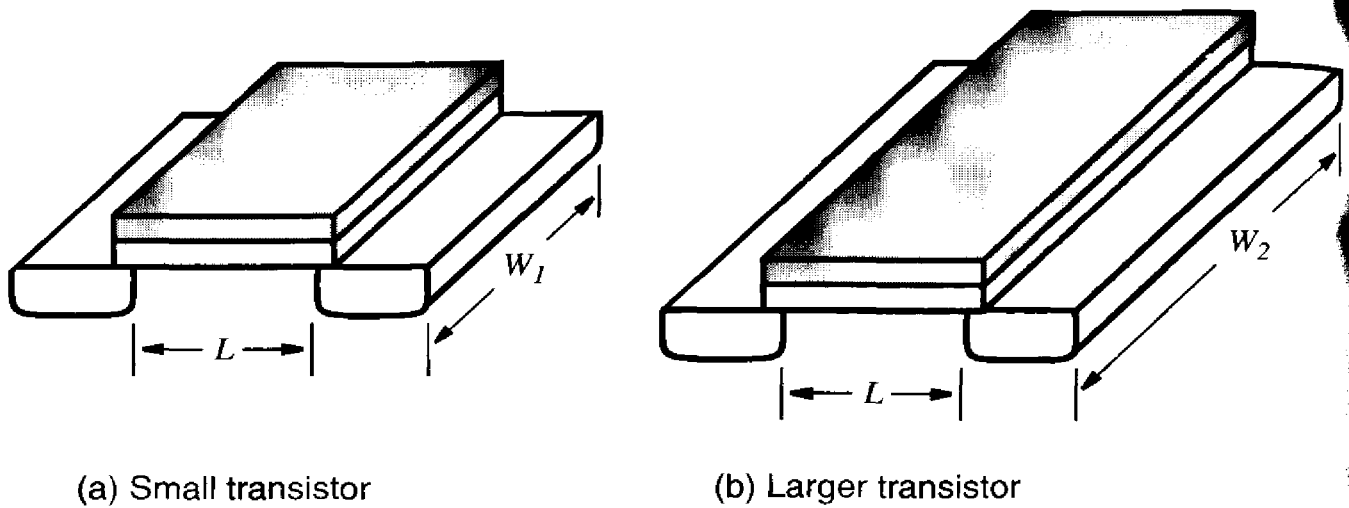


Figure 3.49 Transistor sizes.

3.7 In the circuit in Figure 3.47, assume that $C = 70 \text{ fF}$ and that $W/L = 2.0 \text{ }\mu\text{m}/0.5 \text{ }\mu\text{m}$. Also, $k'_n = 60 \text{ }\mu\text{A}/\text{V}^2$ and $V_{DD} = 5 \text{ V}$. Using equation 3.4, the high-to-low propagation delay of the inverter is $t_p \approx 0.1 \text{ ns}$.

3.8.6 POWER DISSIPATION IN LOGIC GATES

In an electronic circuit it is important to consider the amount of electrical power consumed by the transistors. Integrated circuit technology allows fabrication of millions of transistors on a single chip; hence the amount of power used by an individual transistor must be small. Power dissipation is an important consideration in all applications of logic circuits, but it is crucial in situations that involve battery-operated equipment, such as portable computers and the like.

Consider again the NMOS inverter in Figure 3.45. When $V_x = 0$, no current flows and hence no power is used. But when $V_x = 5 \text{ V}$, power is consumed because of the current I_{stat} . The power consumed in the steady state is given by $P_S = I_{stat} V_{DD}$. In Example 3.5 we calculated $I_{stat} = 0.2 \text{ mA}$. The power consumed is then $P_S = 0.2 \text{ mA} \times 5 \text{ V} = 1.0 \text{ mW}$. If we assume that a chip contains, say, the equivalent of 10,000 inverters, then the total power consumption is 10 W! Because of this large power consumption, NMOS-style gates are used only in special-purpose applications, which we discuss in section 3.8.8.

To distinguish between power consumed during steady-state conditions and power consumed when signals are changing, it is customary to define two types of power. *Static power* is dissipated by the current that flows in the steady state, and *dynamic power* is consumed when the current flows because of changes in signal levels. NMOS circuits consume static power as well as dynamic power, while CMOS circuits consume only dynamic power.

Consider the CMOS inverter presented in Figure 3.12a. When the input V_x is low, no current flows because the NMOS transistor is off. When V_x is high, the PMOS transistor is

off and again no current flows. Hence no current flows in a CMOS circuit under steady-state conditions. Current does flow in CMOS circuits, however, for a short time when signals change from one voltage level to another.

Figure 3.50a depicts the following situation. Assume that V_x has been at 0 V for some time; hence $V_f = 5$ V. Now let V_x change to 5 V. The NMOS transistor turns on, and it pulls V_f toward *Gnd*. Because of the parasitic capacitance C at node f , voltage V_f does not change instantaneously, and current I_D flows through the NMOS transistor for a short time while the capacitor is being discharged. A similar situation occurs when V_x changes from 5 V to 0, as illustrated in Figure 3.50b. Here the capacitor C initially has 0 volts across it and is then charged to 5 V by the PMOS transistor. Current flows from the power supply through the PMOS transistor while the capacitor is being charged.

The voltage transfer characteristic for the CMOS inverter, shown in Figure 3.46, indicates that a range of input voltage V_x exists for which both transistors in the inverter are turned on. Within this voltage range, specifically $V_T < V_x < (V_{DD} - V_T)$, current flows from V_{DD} to *Gnd* through both transistors. This current is often referred to as the *short-circuit current* in the gate. In comparison to the amount of current used to (dis)charge the capacitor C , the short-circuit current is negligible in most cases.

The power used by a single CMOS inverter is extremely small. Consider again the situation in Figure 3.50a when $V_f = V_{DD}$. The amount of energy stored in the capacitor is equal to $CV_{DD}^2/2$ (see Example 3.12). When the capacitor is discharged to 0 V, this stored energy is dissipated in the NMOS transistor. Similarly, for the situation in Figure 3.50b, the energy $CV_{DD}^2/2$ is dissipated in the PMOS transistor when C is charged up to V_{DD} . Thus for each cycle in which the inverter charges and discharges C , the amount of energy dissipated is equal to CV_{DD}^2 . Since power is defined as energy used per unit time, the power dissipated in the inverter is the product of the energy used in one discharge/charge cycle times the

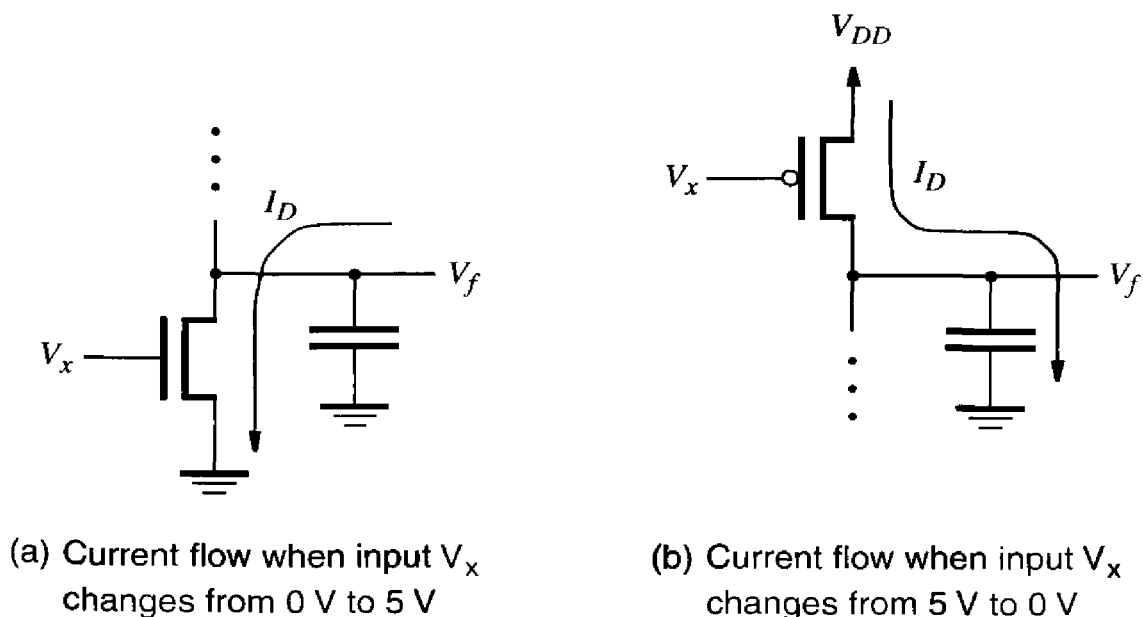


Figure 3.50 Dynamic current flow in CMOS circuits.

number of such cycles per second, f . Hence the dynamic power consumed is

$$P_D = fCV_{DD}^2$$

In practice, the total amount of dynamic power used in CMOS circuits is significantly lower than the total power needed in other technologies, such as NMOS. For this reason, virtually all large integrated circuits fabricated today are based on CMOS technology.

- 8 For a CMOS inverter, assume that $C = 70$ fF and $f = 100$ MHz. The dynamic power consumed by the gate is $P_D = 175$ μ W. If we assume that a chip contains the equivalent of 10,000 inverters and that, on average, 20 percent of the gates change values at any given time, then the total amount of dynamic power used in the chip is $P_D = 0.2 \times 10,000 \times 0.175$ μ W = 0.35 mW.

3.8.7 PASSING 1s AND 0s THROUGH TRANSISTOR SWITCHES

In Figure 3.4 we showed that NMOS transistors are used as pull-down devices and PMOS transistors are used as pull-up devices. We now consider using the transistors in the opposite way, that is, using an NMOS transistor to drive an output high and using a PMOS transistor to drive an output low.

Figure 3.51a illustrates the case of an NMOS transistor for which both the gate terminal and one side of the switch are driven to V_{DD} . Let us assume initially that both V_G and node A are at 0 V, and we then change V_G to 5 V. Node A is the transistor's source terminal because it has the lowest voltage. Since $V_{GS} = V_{DD}$, the transistor is turned on and drives node A toward V_{DD} . When the voltage at node A rises, V_{GS} decreases until the point when V_{GS} is no longer greater than V_T . At this point the transistor turns off. Thus in the steady state $V_A = V_{DD} - V_T$, which means that an NMOS transistor can only partially pass a high voltage signal.

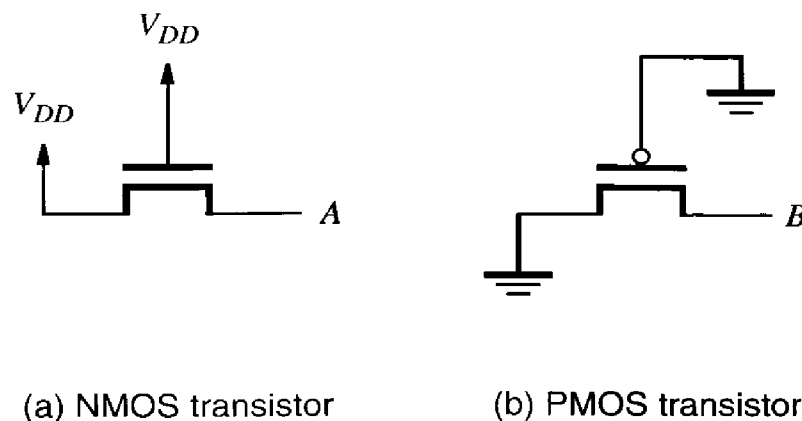


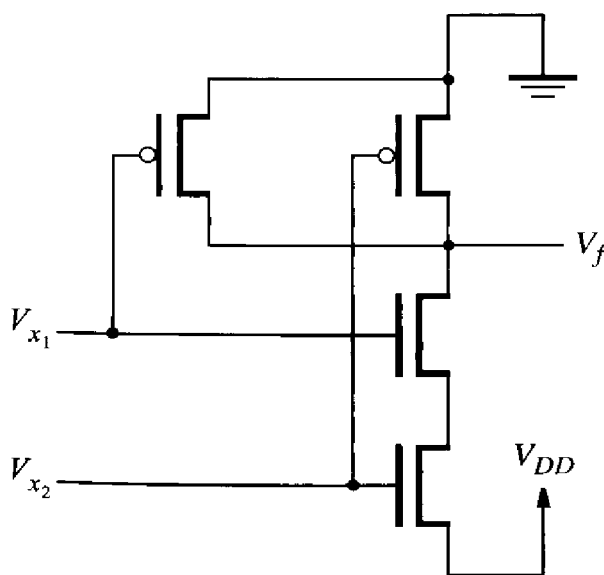
Figure 3.51 NMOS and PMOS transistors used in the opposite way from Figure 3.4.

A similar situation occurs when a PMOS transistor is used to pass a low voltage level, as depicted in Figure 3.51*b*. Here assume that initially both V_G and node B are at 5 V. Then we change V_G to 0 V so that the transistor turns on and drives the source node (node B) toward 0 V. When node B is decreased to V_T , the transistor turns off; hence the steady-state voltage is equal to V_T .

In section 3.1 we said that for an NMOS transistor the substrate (body) terminal is connected to Gnd and for a PMOS transistor the substrate is connected to V_{DD} . The voltage between the source and substrate terminals, V_{SB} , which is called the *substrate bias voltage*, is normally equal to 0 V in a logic circuit. But in Figure 3.51 both the NMOS and PMOS transistors have $V_{SB} = V_{DD}$. The bias voltage has the effect of increasing the threshold voltage in the transistor V_T by a factor of about 1.5 or higher [2, 1]. This issue is known as the *body effect*.

Consider the logic gate shown in Figure 3.52. In this circuit the V_{DD} and Gnd connections are reversed from the way in which they were used in previously discussed circuits. When both V_{x_1} and V_{x_2} are high, then V_f is pulled up to the high output voltage, $V_{OH} = V_{DD} - 1.5V_T$. If $V_{DD} = 5$ V and $V_T = 1$ V, then $V_{OH} = 3.5$ V. When either V_{x_1} or V_{x_2} is low, then V_f is pulled down to the low output voltage, $V_{OL} = 1.5V_T$, or about 1.5 V. As shown by the truth table in the figure, the circuit represents an AND gate. In comparison to the normal AND gate shown in Figure 3.15, the circuit in Figure 3.52 appears to be better because it requires fewer transistors. But a drawback of this circuit is that it offers a lower noise margin because of the poor levels of V_{OH} and V_{OL} .

Another important weakness of the circuit in Figure 3.52 is that it causes static power dissipation, unlike a normal CMOS AND gate. Assume that the output of such an AND gate drives the input of a CMOS inverter. When $V_f = 3.5$ V, the NMOS transistor in the inverter is turned on and the inverter output has a low voltage level. But the PMOS transistor in



(a) An AND gate circuit

Logic value		Voltage	Logic value
x_1	x_2	V_f	f
0	0	1.5 V	0
0	1	1.5 V	0
1	0	1.5 V	0
1	1	3.5 V	1

(b) Truth table and voltage levels

Figure 3.52 A poor implementation of a CMOS AND gate.

the inverter is not turned off, because its gate-to-source voltage is -1.5 V, which is larger than V_T . Static current flows from V_{DD} to Gnd through the inverter. A similar situation occurs when the AND gate produces the low output $V_f = 1.5$ V. Here the PMOS transistor in the inverter is turned on, but the NMOS transistor is not turned off. The AND gate implementation in Figure 3.52 is not used in practice.

3.8.8 FAN-IN AND FAN-OUT IN LOGIC GATES

The *fan-in* of a logic gate is defined as the number of inputs to the gate. Depending on how a logic gate is constructed, it may be impractical to increase the number of inputs beyond a small number. For example, consider the NMOS NAND gate in Figure 3.53, which has k inputs. We wish to consider the effect of k on the propagation delay t_p through the gate. Assume that all k NMOS transistors have the same width W and length L . Because the transistors are connected in series, we can consider them to be equivalent to one long transistor with length $k \times L$ and width W . Using equation 3.4 (which can be applied to both

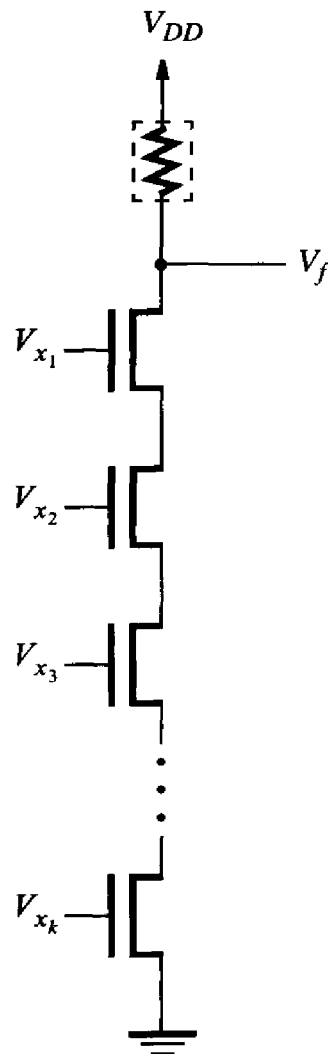


Figure 3.53 High fan-in NMOS NAND gate.

CMOS and NMOS gates), the propagation delay is given by

$$t_p \cong \frac{1.7 C}{k'_n \frac{W}{L} V_{DD}} \times k$$

Here C is the equivalent capacitance at the output of the gate, including the parasitic capacitance contributed by each of the k transistors. The performance of the gate can be improved somewhat by increasing W for each NMOS transistor. But this change further increases C and comes at the expense of chip area. Another drawback of the circuit is that each NMOS transistor has the effect of increasing V_{OL} , hence reducing the noise margin. It is practical to build NAND gates in this manner only if the fan-in is small.

As another example of fan-in, Figure 3.54 shows an NMOS k -input NOR gate. In this case the k NMOS transistors connected in parallel can be viewed as one large transistor with width $k \times W$ and length L . According to equation 3.4, the propagation delay should be decreased by the factor k . However, the parallel-connected transistors increase the load capacitance C at the gate's output and, more importantly, it is extremely unlikely that all of the transistors would be turned on when V_f is changing from a high to low level. It is thus practical to build high fan-in NOR gates in NMOS technology. We should note, however, that in an NMOS gate the low-to-high propagation delay may be slower than the high-to-low delay as a result of the current-limiting effect of the pull-up device (see Examples 3.13 and 3.14).

High fan-in CMOS logic gates always require either k NMOS or k PMOS transistors in series and are therefore never practical. In CMOS the only reasonable way to construct a high fan-in gate is to use two or more lower fan-in gates. For example, one way to realize a six-input AND gate is as 2 three-input AND gates that connect to a two-input AND gate. It is possible to build a six-input CMOS AND gate using fewer transistors than needed with this approach, but we leave this as an exercise for the reader (see problem 3.4).

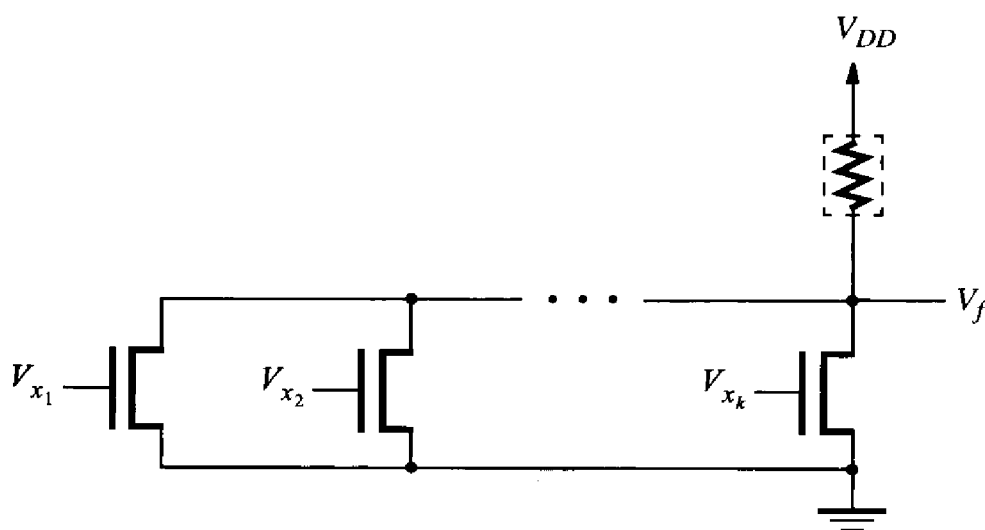
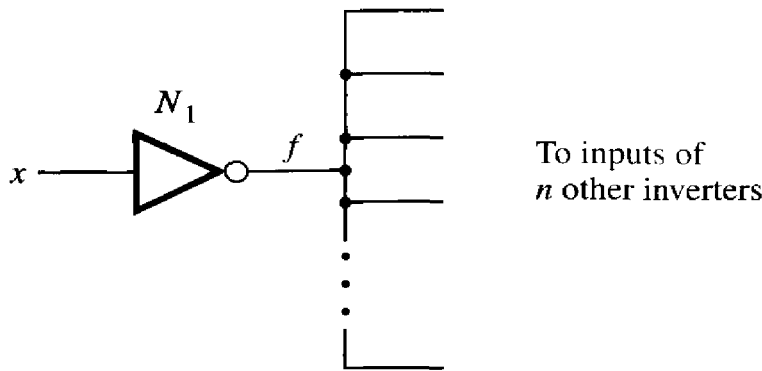


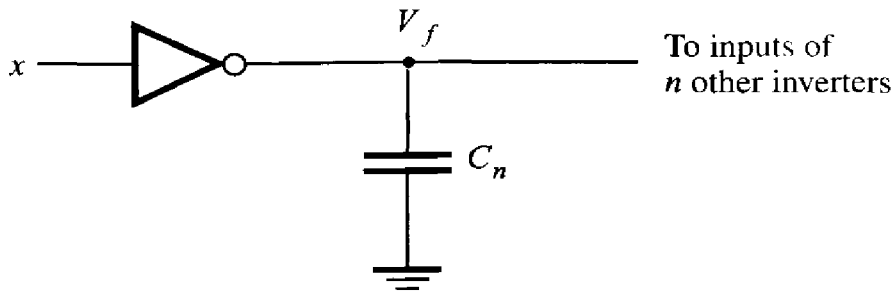
Figure 3.54 High fan-in NMOS NOR gate.

Fan-out

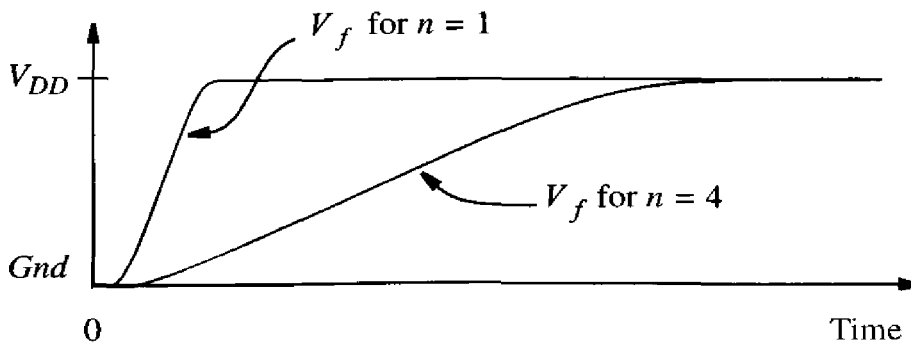
Figure 3.48 illustrated timing delays for one NOT gate driving another. In real circuits each logic gate may be required to drive several others. The number of other gates that a specific gate drives is called its *fan-out*. An example of fan-out is depicted in Figure 3.55a, which shows an inverter N_1 that drives the inputs of n other inverters. Each of the other inverters contributes to the total capacitive loading on node f . In part (b) of the figure, the n inverters are represented by one large capacitor C_n . For simplicity, assume that each inverter contributes a capacitance C and that $C_n = n \times C$. Equation 3.4 shows that the propagation delay increases in direct proportion to n .



(a) Inverter that drives n other inverters



(b) Equivalent circuit for timing purposes



(c) Propagation times for different values of n

Figure 3.55 The effect of fan-out on propagation delay.

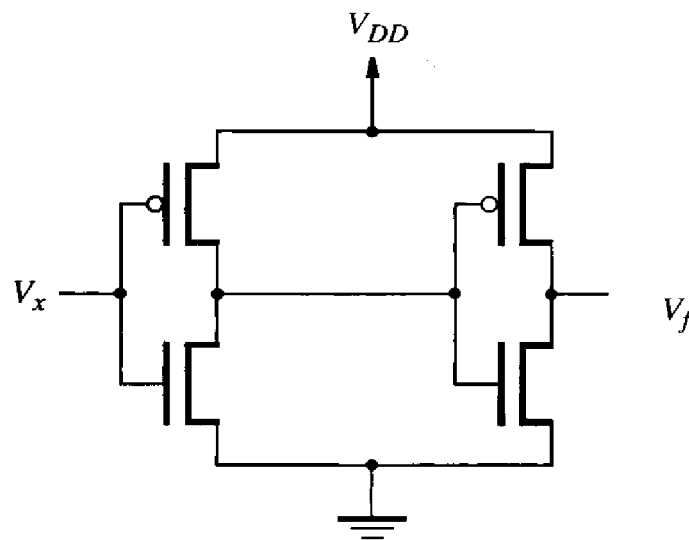
Figure 3.55c illustrates how n affects the propagation delay. It assumes that a change from logic value 1 to 0 on signal x occurs at time 0. One curve represents the case where $n = 1$, and the other curve corresponds to $n = 4$. Using the parameters from Example 3.7, when $n = 1$, we have $t_p = 0.1$ ns. Then for $n = 4$, $t_p \approx 0.4$ ns. It is possible to reduce t_p by increasing the W/L ratios of the transistors in N_1 .

Buffers

In circuits in which a logic gate has to drive a large capacitive load, buffers are often used to improve performance. A *buffer* is a logic gate with one input, x , and one output, f , which produces $f = x$. The simplest implementation of a buffer uses two inverters, as shown in Figure 3.56a. Buffers can be created with different amounts of *drive capability*, depending on the sizes of the transistors (see Figure 3.49). In general, because they are used for driving higher-than-normal capacitive loads, buffers have transistors that are larger than those in typical logic gates. The graphical symbol for a noninverting buffer is given in Figure 3.56b.

Another type of buffer is the *inverting buffer*. It produces the same output as an inverter, $f = \bar{x}$, but is built with relatively large transistors. The graphical symbol for the inverting buffer is the same as for the NOT gate; an inverting buffer is just a NOT gate that is capable of driving large capacitive loads. In Figure 3.55 for large values of n an inverting buffer could be used for the inverter labeled N_1 .

In addition to their use for improving the speed performance of circuits, buffers are also used when high current flow is needed to drive external devices. Buffers can handle



(a) Implementation of a buffer



(b) Graphical symbol

Figure 3.56 A noninverting buffer.

relatively large amounts of current flow because they are built with large transistors. A common example of this use of buffers is to control a light-emitting diode (LED). We describe an example of this application of buffers in section 7.14.3.

In general, fan-out, capacitive loading, and current flow are important issues that the designer of a digital circuit must consider carefully. In practice, the decision as to whether or not buffers are needed in a circuit is made with the aid of CAD tools.

Tri-state Buffers

In section 3.6.2 we mentioned that a type of buffer called a tri-state buffer is included in some standard chips and in PLDs. A tri-state buffer has one input, x , one output, f , and a control input, called *enable*, e . The graphical symbol for a tri-state buffer is given in Figure 3.57a. The enable input is used to determine whether or not the tri-state buffer produces an output signal, as illustrated in Figure 3.57b. When $e = 0$, the buffer is completely disconnected from the output f . When $e = 1$, the buffer drives the value of x onto f , causing $f = x$. This behavior is described in truth-table form in part (c) of the figure. For the two rows of the table where $e = 0$, the output is denoted by the logic value Z , which is called the *high-impedance state*. The name *tri-state* derives from the fact that there are two normal states for a logic signal, 0 and 1, and Z represents a third state that produces no output signal. Figure 3.57d shows a possible implementation of the tri-state buffer.

Figure 3.58 shows several types of tri-state buffers. The buffer in part (b) has the same behavior as the buffer in part (a), except that when $e = 1$, it produces $f = \bar{x}$. Part (c) of the figure gives a tri-state buffer for which the enable signal has the opposite behavior; that is, when $e = 0, f = x$, and when $e = 1, f = Z$. The term often used to describe this type

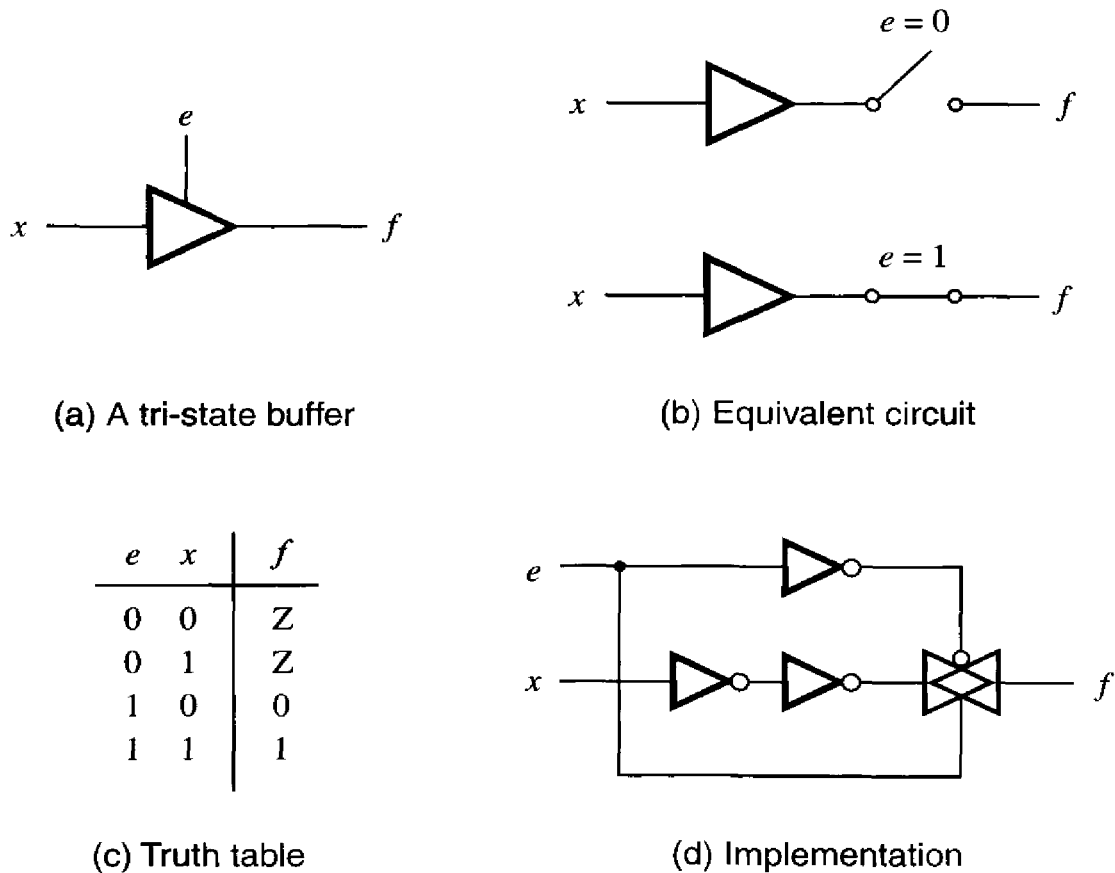


Figure 3.57 Tri-state buffer.

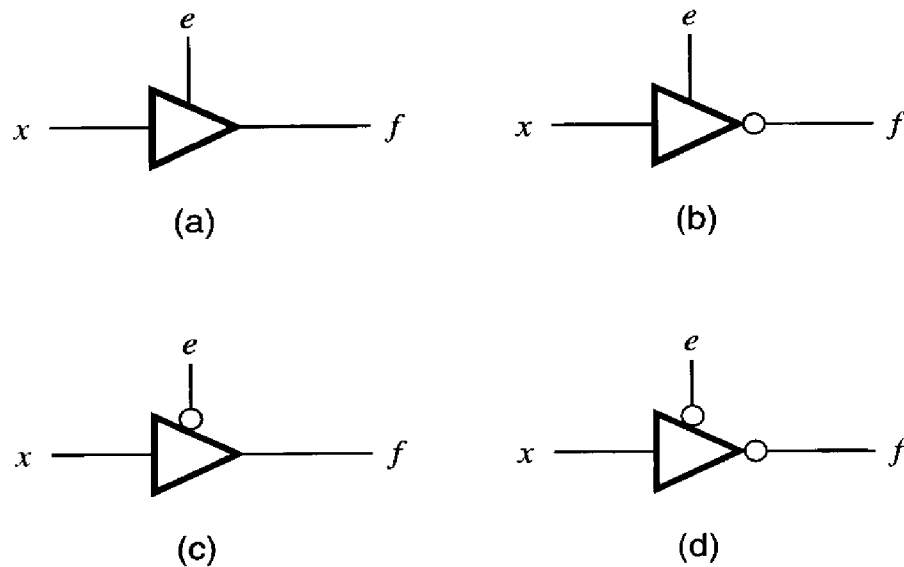


Figure 3.58 Four types of tri-state buffers.

of behavior is to say that the enable is *active low*. The buffer in Figure 3.58d also features an active-low enable, and it produces $f = \bar{x}$ when $e = 0$.

As a small example of how tri-state buffers can be used, consider the circuit in Figure 3.59. In this circuit the output f is equal to either x_1 or x_2 , depending on the value of s . When $s = 0$, $f = x_1$, and when $s = 1$, $f = x_2$. Circuits of this kind, which choose one of the inputs and reproduce the signal on this input at the output terminal, are called *multiplexer* circuits. A circuit that implements the multiplexer using AND and OR gates is shown in Figure 2.26. We will present another way of building multiplexer circuits in section 3.9.2 and will discuss them in detail in Chapter 6.

In the circuit of Figure 3.59, the outputs of the tri-state buffers are wired together. This connection is possible because the control input s is connected so that one of the two buffers is guaranteed to be in the high-impedance state. The x_1 buffer is active only when $s = 0$, and the x_2 buffer is active only when $s = 1$. It would be disastrous to allow both buffers to be active at the same time. Doing so would create a short circuit between V_{DD} and Gnd as soon as the two buffers produce different values. For example, assume that $x_1 = 1$ and $x_2 = 0$. The x_1 buffer produces the output V_{DD} , and the x_2 buffer produces Gnd . A short circuit is formed between V_{DD} and Gnd , through the transistors in the tri-state buffers. The amount of current that flows through such a short circuit is usually sufficient to destroy the circuit.

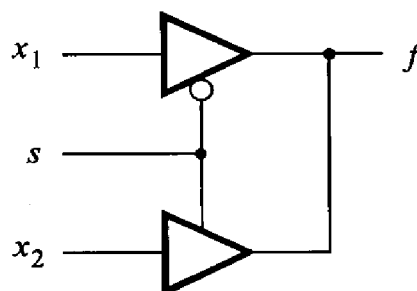


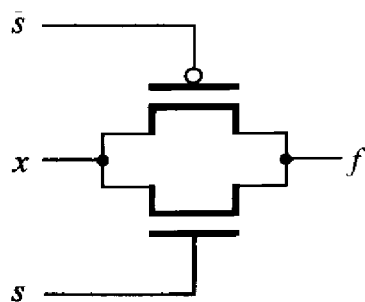
Figure 3.59 An application of tri-state buffers.

The kind of *wired* connection used for the tri-state buffers is not possible with ordinary logic gates, because their outputs are always active; hence a short circuit would occur. As we already know, for normal logic circuits the equivalent result of the wired connection is achieved by using an OR gate to combine signals, as is done in the sum-of-products form.

3.9 TRANSMISSION GATES

In section 3.8.7 we showed that an NMOS transistor passes 0 well and 1 poorly, while a PMOS transistor passes 1 well and 0 poorly. It is possible to combine an NMOS and a PMOS transistor into a single switch that is capable of driving its output terminal either to a low or high voltage equally well. Figure 3.60a gives the circuit for a *transmission gate*. As indicated in parts (b) and (c) of the figure, it acts as a switch that connects x to f . Switch control is provided by the *select* input s and its complement \bar{s} . The switch is turned on by setting $V_s = 5\text{ V}$ and $V_{\bar{s}} = 0$. When V_x is 0, the NMOS transistor will be turned on (because $V_{GS} = V_s - V_x = 5\text{ V}$) and V_f will be 0. On the other hand, when V_x is 5 V, then the PMOS transistor will be on ($V_{GS} = V_{\bar{s}} - V_x = -5\text{ V}$) and V_f will be 5 V. A graphical symbol for the transmission gate is given in Figure 3.60d.

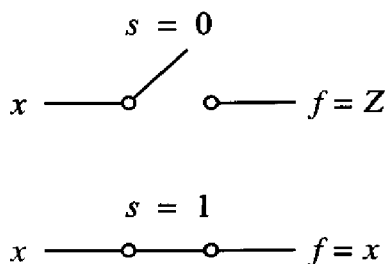
Transmission gates can be used in a variety of applications. We will show next how they lead to efficient implementations of *Exclusive OR (XOR)* logic gates and multiplexer circuits.



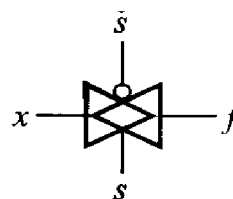
(a) Circuit

s	f
0	Z
1	x

(b) Truth table



(c) Equivalent circuit



(d) Graphical symbol

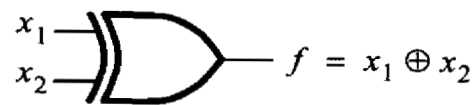
Figure 3.60 A transmission gate.

3.9.1 EXCLUSIVE-OR GATES

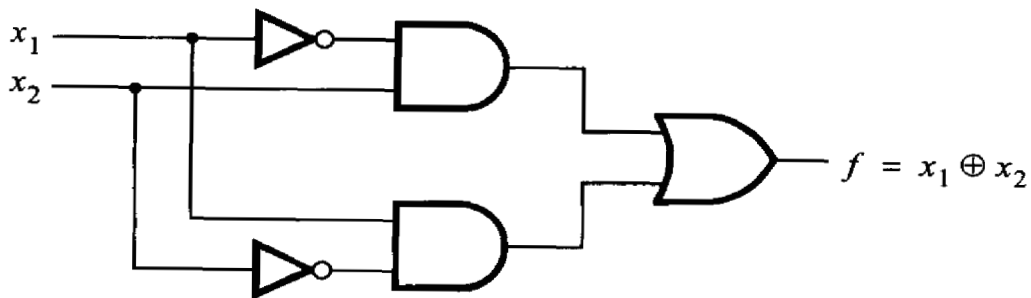
So far we have encountered AND, OR, NOT, NAND, and NOR gates as the basic elements from which logic circuits can be constructed. There is another basic element that is very useful in practice, particularly for building circuits that perform arithmetic operations, as we will see in Chapter 5. This element realizes the Exclusive-OR function defined in Figure 3.61a. The truth table for this function is similar to the OR function except that $f = 0$ when both inputs are 1. Because of this similarity, the function is called Exclusive-OR, which is commonly abbreviated as XOR. The graphical symbol for a gate that implements XOR is given in part (b) of the figure.

x_1	x_2	$f = x_1 \oplus x_2$
0	0	0
0	1	1
1	0	1
1	1	0

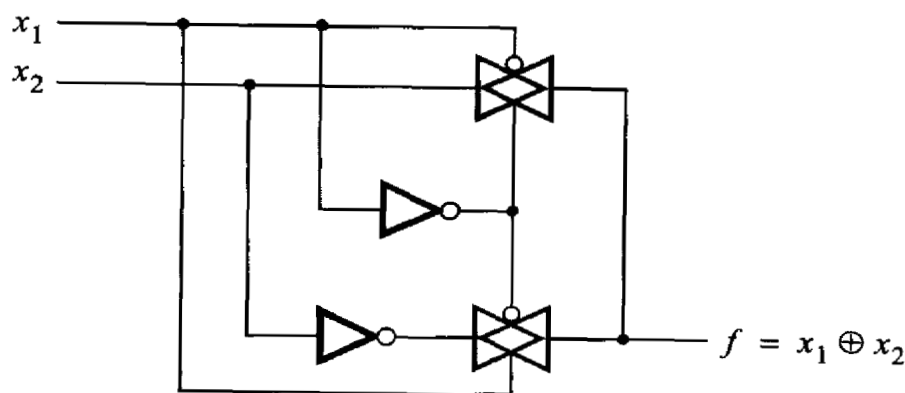
(a) Truth table



(b) Graphical symbol



(c) Sum-of-products implementation



(d) CMOS implementation

Figure 3.61 Exclusive-OR gate.

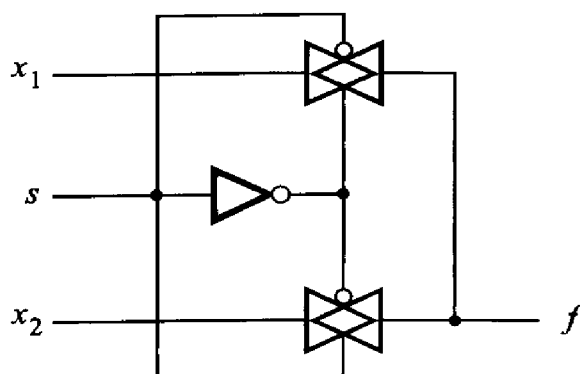


Figure 3.62 A 2-to-1 multiplexer built using transmission gates.

The XOR operation is usually denoted with the \oplus symbol. It can be realized in the sum-of-products form as

$$x_1 \oplus x_2 = \bar{x}_1 x_2 + x_1 \bar{x}_2$$

which leads to the circuit in Figure 3.61c. We know from section 3.3 that each AND and OR gate requires six transistors, while a NOT gate needs two transistors. Hence 22 transistors are required to implement this circuit in CMOS technology. It is possible to greatly reduce the number of transistors needed by making use of transmission gates. Figure 3.61d gives a circuit for an XOR gate that uses two transmission gates and two inverters. The output f is set to the value of x_2 when $x_1 = 0$ by the top transmission gate. The bottom transmission gate sets f to \bar{x}_2 when $x_1 = 1$. The reader can verify that this circuit properly implements the XOR function. We show how such circuits are derived in Chapter 6.

3.9.2 MULTIPLEXER CIRCUIT

In Figure 3.59 we showed how a multiplexer can be constructed with tri-state buffers. A similar structure can be used to realize a multiplexer with transmission gates, as indicated in Figure 3.62. The select input s is used to choose whether the output f should have the value of input x_1 or x_2 . If $s = 0$, then $f = x_1$; if $s = 1$, then $f = x_2$.

3.10 IMPLEMENTATION DETAILS FOR SPLDs, CPLDs, AND FPGAS

We introduced PLDs in section 3.6. In the chip diagrams shown in that section, the programmable switches are represented using the symbol X. We now show how these switches are implemented using transistors.

In commercial SPLDs two main technologies are used to manufacture the programmable switches. The oldest technology is based on using metal-alloy fuses as programmable links. In this technology the PLAs and PALs are manufactured so that each pair of horizontal and

vertical wires that cross is connected by a small metal fuse. When the chip is programmed, for every connection that is not wanted in the circuit being implemented, the associated fuse is melted. The programming process is not reversible, because the melted fuses are destroyed. We will not elaborate on this technology, because it has mostly been replaced by a newer, better method.

In currently produced PLAs and PALs, programmable switches are implemented using a special type of *programmable transistor*. Because CPLDs comprise PAL-like blocks, the technology used in SPLDs is also applicable to CPLDs. We will illustrate the main ideas by first describing PLAs. For a PLA to be useful for implementing a wide range of logic functions, it should support both functions of only a few variables and functions of many variables. In section 3.8.8 we discussed the issue of fan-in of logic gates. We showed that when the fan-in is high, the best type of gate to use is the NMOS NOR gate. Hence PLAs are usually based on this type of gate.

As a small example of PLA implementation, consider the circuit in Figure 3.63. The horizontal wire labeled S_1 is the output of an NMOS NOR gate with the inputs x_2 and \bar{x}_3 . Thus $S_1 = x_2 + \bar{x}_3$. Similarly, S_2 and S_3 are the outputs of NOR gates that produce

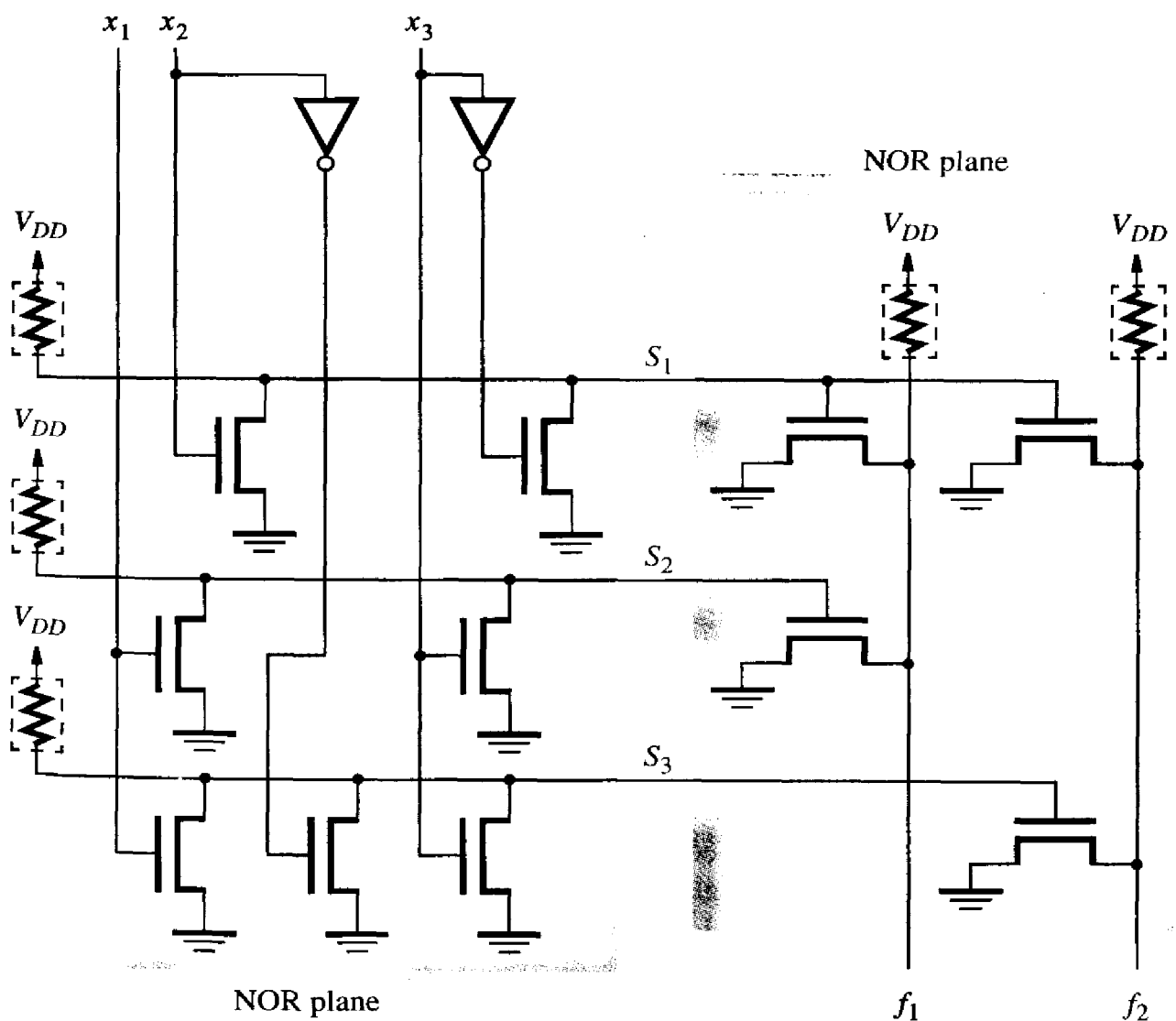


Figure 3.63 An example of a NOR-NOR PLA.

$S_2 = \overline{x_1 + x_3}$ and $S_3 = \overline{x_1 + \bar{x}_2 + x_3}$. The three NOR gates that produce S_1 , S_2 , and S_3 are arranged in a regular structure that is efficient to create on an integrated circuit. This structure is called a *NOR plane*. The NOR plane is extended to larger sizes by adding columns for additional inputs and adding rows for more NOR gates.

The signals S_1 , S_2 , and S_3 serve as inputs to a second NOR plane. This NOR plane is turned 90 degrees clockwise with respect to the first NOR plane to make the diagram easier to draw. The NOR gate that produces the output f_1 has the inputs S_1 and S_2 . Thus

$$f_1 = \overline{S_1 + S_2} = \overline{(x_2 + \bar{x}_3) + (x_1 + x_3)}$$

Using DeMorgan's theorem, this expression is equivalent to the product-of-sums expression

$$f_1 = \bar{S}_1 \bar{S}_2 = (x_2 + \bar{x}_3)(x_1 + x_3)$$

Similarly, the NOR gate with output f_2 has inputs S_1 and S_3 . Therefore,

$$f_2 = \overline{S_1 + S_3} = \overline{(x_2 + \bar{x}_3) + (x_1 + \bar{x}_2 + x_3)}$$

which is equivalent to

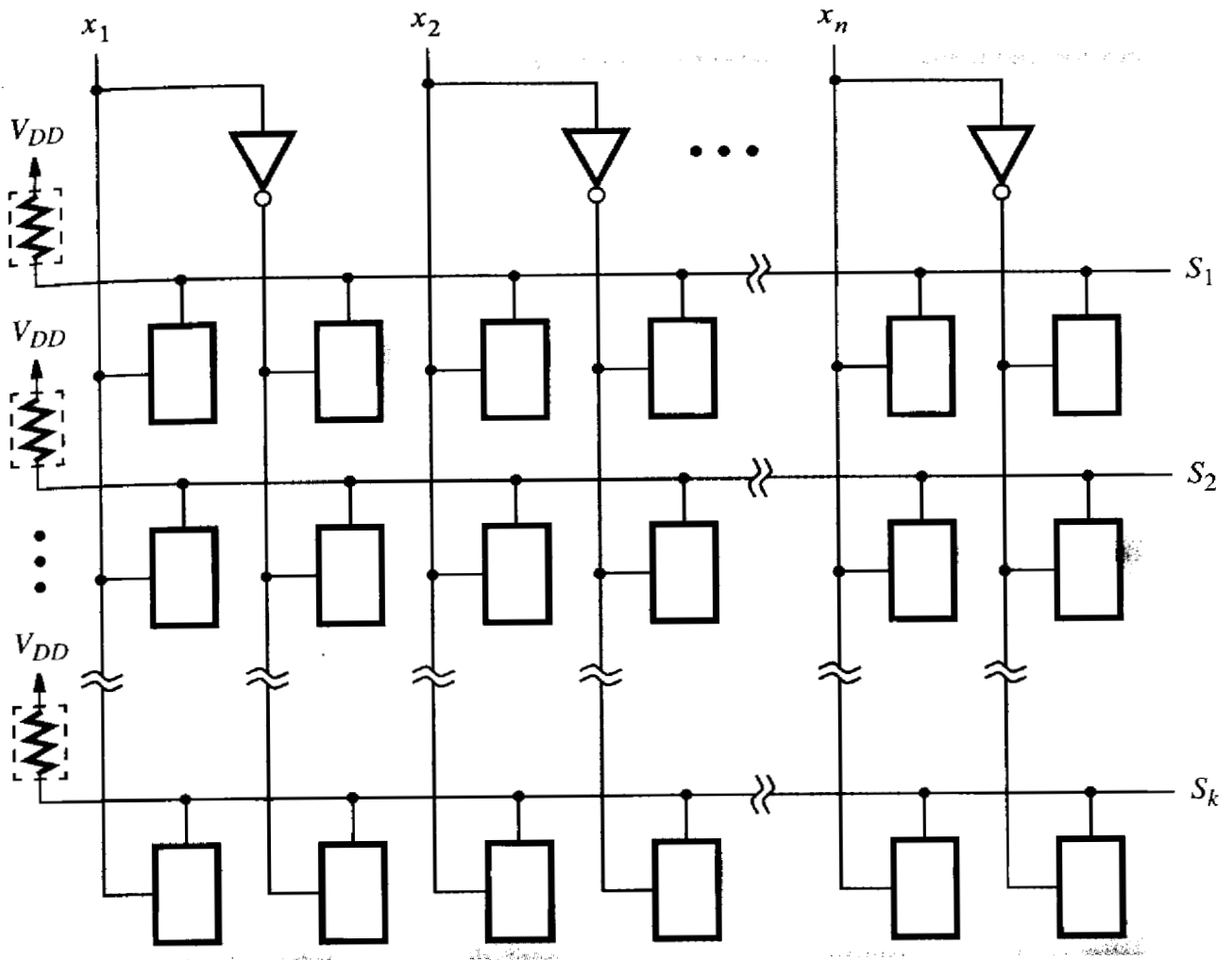
$$f_2 = \bar{S}_1 \bar{S}_3 = (x_2 + \bar{x}_3)(x_1 + \bar{x}_2 + x_3)$$

The style of PLA illustrated in Figure 3.63 is called a *NOR-NOR PLA*. Alternative implementations also exist, but because of its simplicity, the NOR-NOR style is the most popular choice. The reader should note that the PLA in Figure 3.63 is not programmable—with the transistors connected as shown, it realizes only the two specific logic functions f_1 and f_2 . But the NOR-NOR structure can be used in a programmable version of the PLA, as explained below.

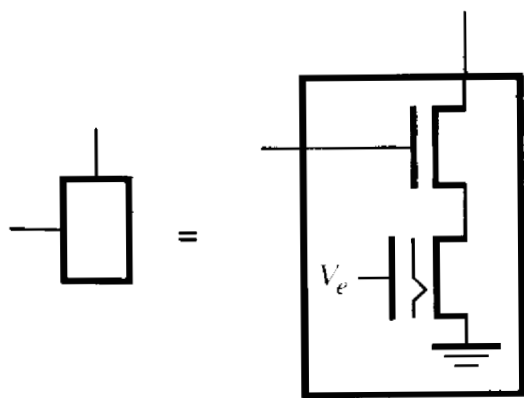
Strictly speaking, the term PLA should be used only for the fixed type of PLA depicted in Figure 3.63. The proper technical term for a programmable type of PLA is *field-programmable logic array (FPLA)*. However, it is common usage to omit the *F*. Figure 3.64a shows a programmable version of a NOR plane. It has n inputs, x_1, \dots, x_n , and k outputs, S_1, \dots, S_k . At each crossing point of a horizontal and vertical wire there exists a programmable switch. The switch comprises two transistors connected in series, an NMOS transistor and an *electrically erasable programmable read-only memory (EEPROM)* transistor.

The programmable switch is based on the behavior of the EEPROM transistor. Electronics textbooks, such as [1, 2], give detailed explanations of how EEPROM transistors operate. Here we will provide only a brief description. A programmable switch is depicted in Figure 3.64b, and the structure of the EEPROM transistor is given in Figure 3.64c. The EEPROM transistor has the same general appearance as the NMOS transistor (see Figure 3.43) with one major difference. The EEPROM transistor has two gates: the normal gate that an NMOS transistor has and a second *floating gate*. The floating gate is so named because it is surrounded by insulating glass and is not connected to any part of the transistor. When the transistor is in the original unprogrammed state, the floating gate has no effect on the transistor's operation and it works as a normal NMOS transistor. During normal use of the PLA, the voltage on the floating gate V_e is set to V_{DD} by circuitry not shown in the figure, and the EEPROM transistor is turned on.

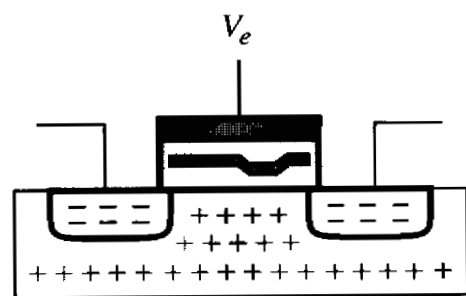
Programming of the EEPROM transistor is accomplished by turning on the transistor with a higher-than-normal voltage level (typically, $V_e = 12$ V), which causes a large amount



(a) Programmable NOR-plane



(b) A programmable switch



(c) EEPROM transistor

Figure 3.64 Using EEPROM transistors to create a programmable NOR plane.

of current to flow through the transistor's channel. Figure 3.64c shows that a part of the floating gate extends downward so that it is very close to the top surface of the channel. A high current flowing through the channel causes an effect, known as *Fowler-Nordheim tunneling*, in which some of the electrons in the channel "tunnel" through the insulating glass at its thinnest point and become trapped under the floating gate. After the programming

process is completed, the trapped electrons repel other electrons from entering the channel. When the voltage $V_e = 5$ V is applied to the EEPROM transistor, which would normally cause it to turn on, the trapped electrons keep the transistor turned off. Hence in the NOR plane in Figure 3.64a, programming is used to “disconnect” inputs from the NOR gates. For the inputs that should be connected to each NOR gate, the corresponding EEPROM transistors are left in the unprogrammed state.

Once an EEPROM transistor is programmed, it retains the programmed state permanently. However, the programming process can be reversed. This step is called *erasing*, and it is done using voltages that are of the opposite polarity to those used for programming. In this case, the applied voltage causes the electrons that are trapped under the floating gate to tunnel back to the channel. The EEPROM transistor returns to its original state and again acts like a normal NMOS transistor.

For completeness, we should also mention another technology that is similar to EEPROM, called *erasable PROM (EPROM)*. This type of transistor, which was actually created as the predecessor of EEPROM, is programmed in a similar fashion to EEPROM. However, erasing is done differently: to erase an EPROM transistor, it must be exposed to light energy of specific wavelengths. To facilitate this process, chips based on EPROM technology are housed in packages with a clear glass window through which the chip is visible. To erase a chip, it is placed under an *ultraviolet light* source for several minutes. Because erasure of EPROM transistors is more awkward than the electrical process used to erase EEPROM transistors, EPROM technology has essentially been replaced by EEPROM technology in practice.

A complete NOR-NOR PLA using EEPROM technology, with four inputs, six sum terms in the first NOR plane, and two outputs, is depicted in Figure 3.65. Each programmable switch that is programmed to the off state is shown as X in black, and each switch that is left unprogrammed is shown in blue. With the programming states shown in the figure, the PLA realizes the logic functions $f_1 = (x_1 + x_3)(x_1 + \bar{x}_2)(\bar{x}_1 + x_2 + \bar{x}_3)$ and $f_2 = (x_1 + \bar{x}_3)(\bar{x}_1 + x_2)(x_1 + \bar{x}_2)$.

Rather than implementing logic functions in product-of-sums form, a PLA can also be used to realize the sum-of-products form. For sum-of-products we need to implement AND gates in the first NOR plane of the PLA. If we first complement the inputs to the NOR plane, then according to DeMorgan’s theorem, this is equivalent to creating an AND plane. We can generate the complements at no cost in the PLA because each input is already provided in both true and complemented forms. An example that illustrates implementation of the sum-of-products form is given in Figure 3.66. The outputs from the first NOR plane are labeled P_1, \dots, P_6 to reflect our interpretation of them as product terms. The signal P_1 is programmed to realize $\overline{\bar{x}_1 + \bar{x}_2} = x_1x_2$. Similarly, $P_2 = x_1\bar{x}_3$, $P_3 = \bar{x}_1\bar{x}_2x_3$, and $P_4 = \bar{x}_1\bar{x}_2\bar{x}_3$. Having generated the desired product terms, we now need to OR them. This operation can be accomplished by complementing the outputs of the second NOR plane. Figure 3.66 includes NOT gates for this purpose. The states indicated for the programmable switches in the OR plane (the second NOR plane) in the figure yield the following outputs: $f_1 = P_1 + P_2 + P_3 = x_1x_2 + x_1\bar{x}_3 + \bar{x}_1\bar{x}_2x_3$, and $f_2 = P_1 + P_4 = x_1x_2 + \bar{x}_1\bar{x}_2\bar{x}_3$.

The concepts described above for PLAs can also be used in PALs. Figure 3.67 shows a PAL with four inputs and two outputs. Let us assume that the first NOR plane is programmed to realize product terms in the manner described above. Notice in the figure that the product

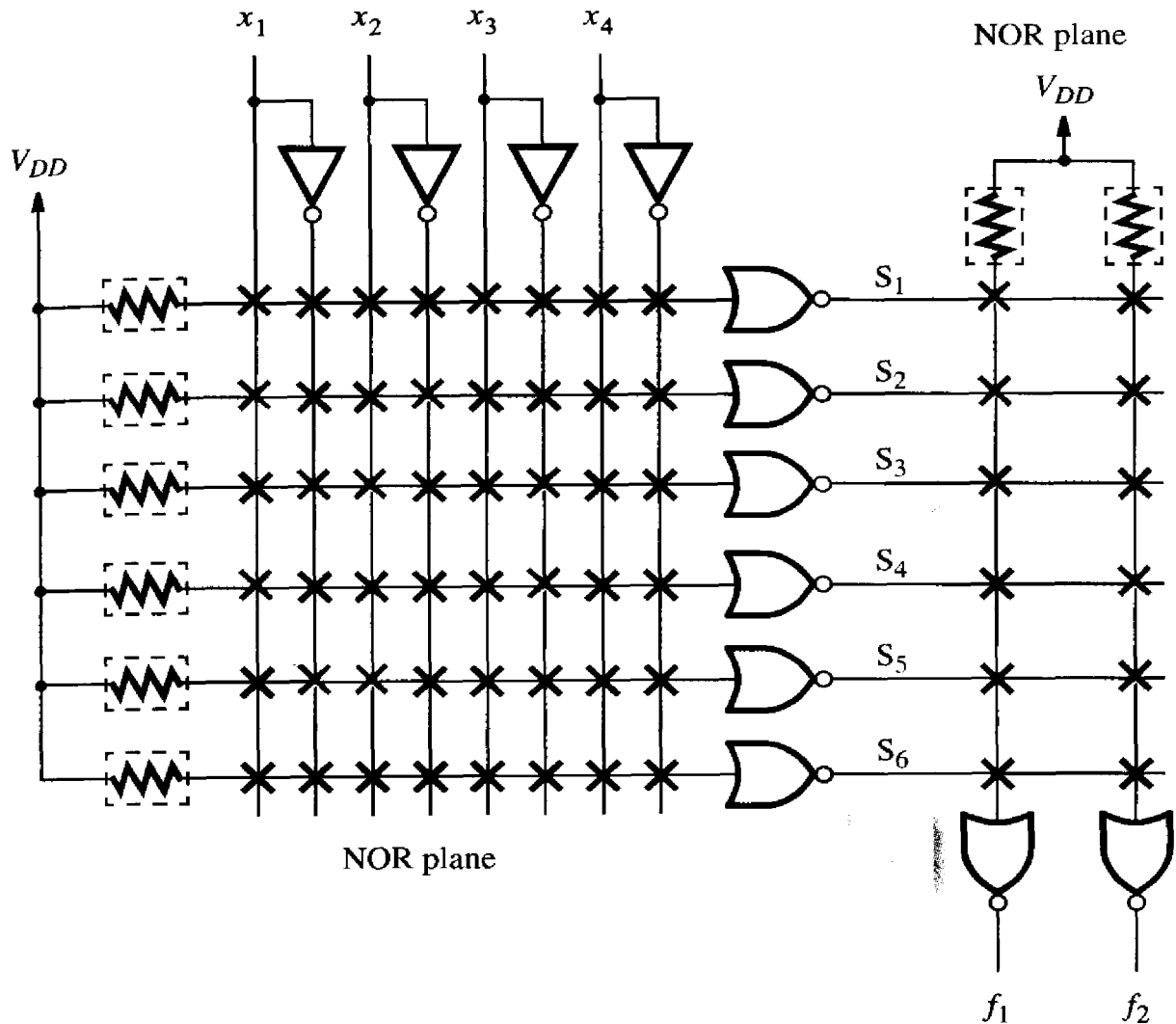


Figure 3.65 Programmable version of the NOR-NOR PLA.

terms are hardwired in groups of three to OR gates that produce the outputs of the PAL. As we illustrated in Figure 3.29, the PAL may also contain extra circuitry between the OR gates and the output pins, which is not shown in Figure 3.67. The PAL is programmed to realize the same logic functions, f_1 and f_2 , that were generated in the PLA in Figure 3.66. Observe that the product term x_1x_2 is implemented twice in the PAL, on both P_1 and P_4 . Duplication is necessary because in a PAL product terms cannot be shared by multiple outputs, as they can be in a PLA. Another detail to observe in Figure 3.67 is that although the function f_2 requires only two product terms, each OR gate is hardwired to three product terms. The extra product term P_6 must be set to logic value 0, so that it has no effect. This is accomplished by programming P_6 so that it produces the product of an input and that input's complement, which always results in 0. In the figure, $P_6 = x_1\bar{x}_1 = 0$, but any other input could also be used for this purpose.

The PAL-like blocks contained in CPLDs are usually implemented using the techniques discussed in this section. In a typical CPLD, the AND plane is built using NMOS NOR gates, with appropriate complementing of the inputs. The OR plane is hardwired as it is in

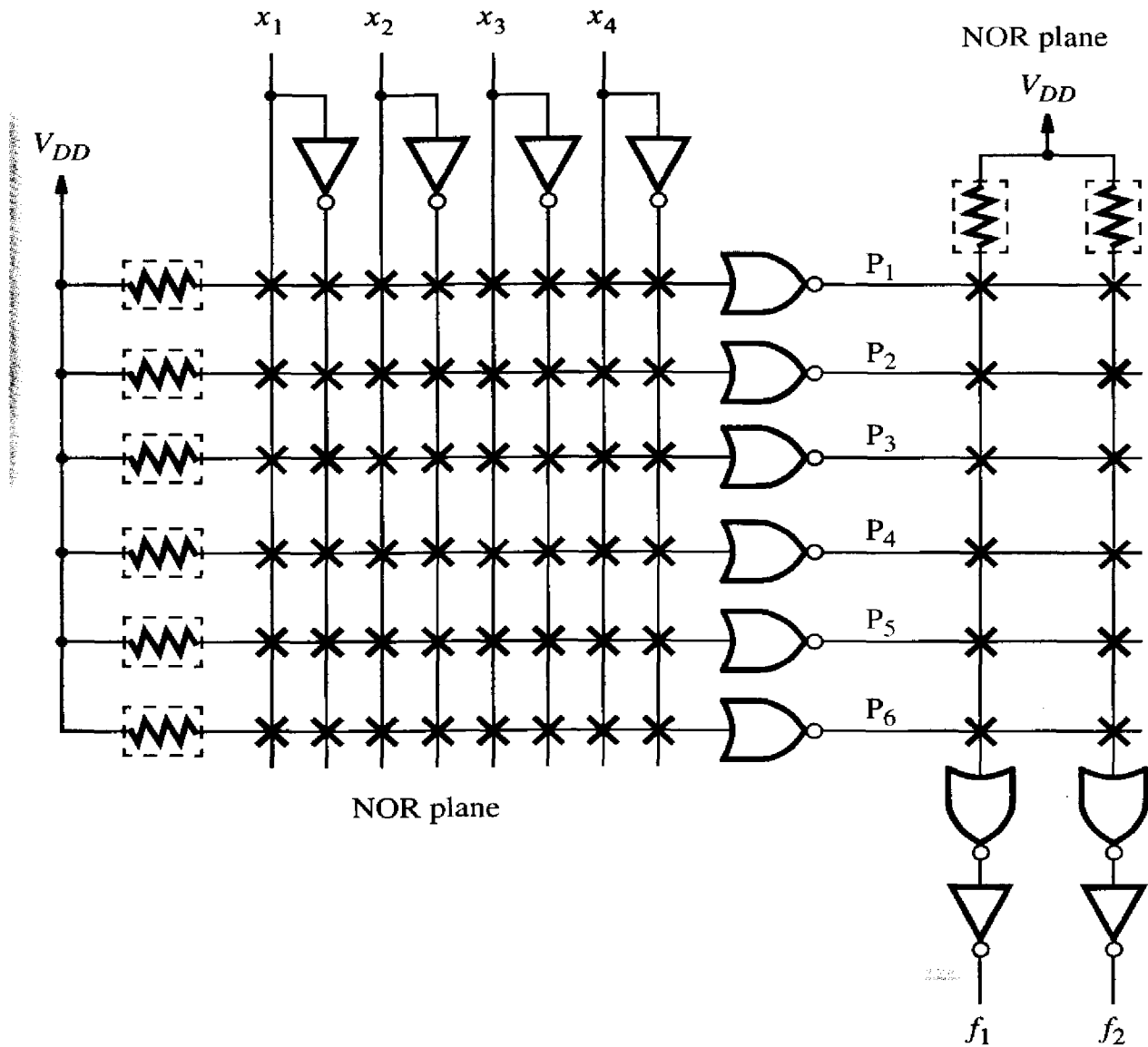


Figure 3.66 A NOR-NOR PLA used for sum-of-products.

a PAL, rather than being fully programmable as in a PLA. However, some flexibility exists in the number of product terms that feed each OR gate. This flexibility is accomplished by using a programmable circuit that can allocate the product terms to whichever OR gates the user desires. An example of this type of flexibility, provided in a commercial CPLD, is given in Appendix E.

3.10.1 IMPLEMENTATION IN FPGAs

FPGAs do not use EEPROM technology to implement the programmable switches. Instead, the programming information is stored in memory cells, called *static random access memory (SRAM)* cells. The operation of this type of storage cell is described in detail in section 10.1.3. For now it is sufficient to know that each cell can store either a logic 0 or 1, and it provides this stored value as an output. An SRAM cell is used for each truth-table value

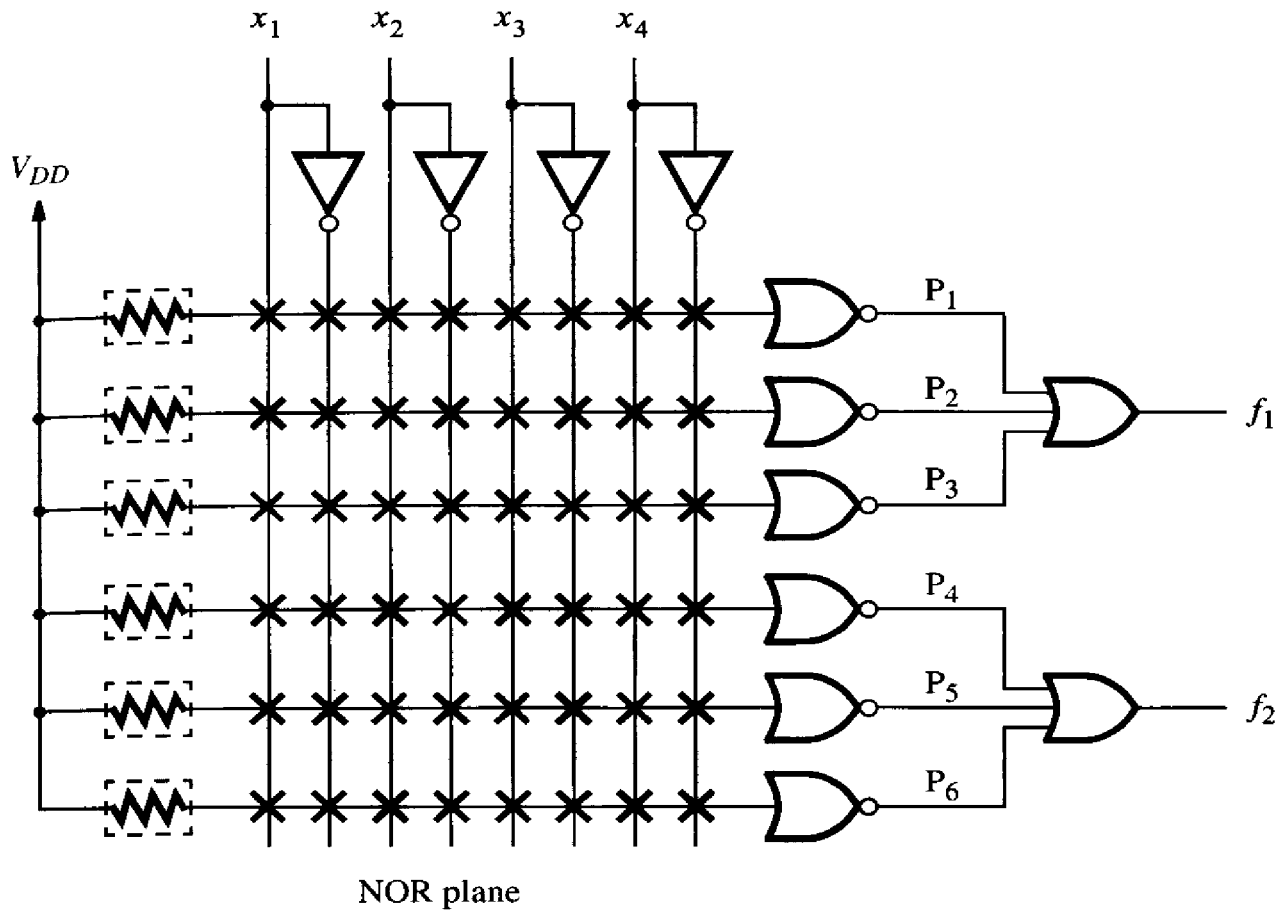


Figure 3.67 PAL programmed to implement the functions in Figure 3.66.

stored in a LUT. SRAM cells are also used to configure the interconnection wires in an FPGA.

Figure 3.68 depicts a small section of the FPGA from Figure 3.39. The logic block shown produces the output f_1 , which is driven onto the horizontal wire drawn in blue. This wire can be connected to some of the vertical wires that it crosses, using programmable

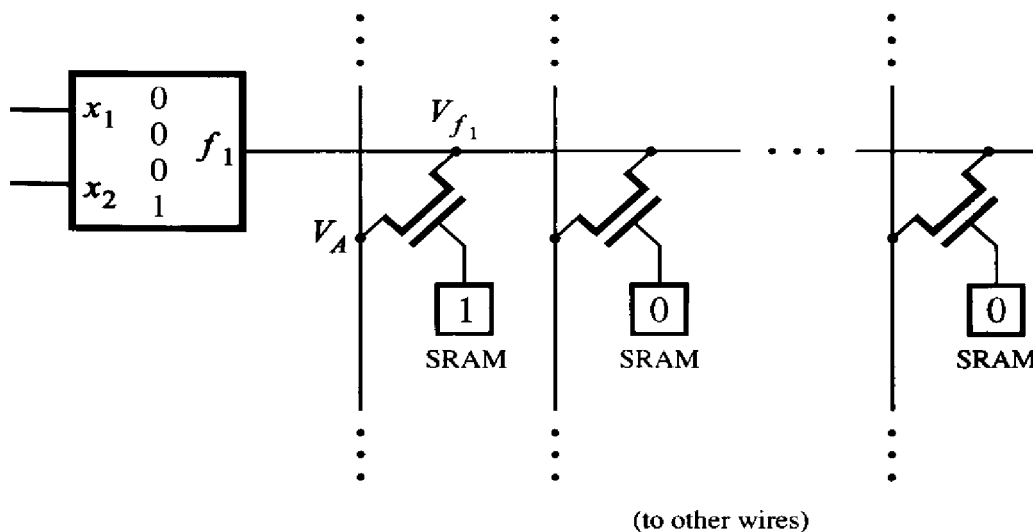


Figure 3.68 Pass-transistor switches in FPGAs.

switches. Each switch is implemented using an NMOS transistor, with its gate terminal controlled by an SRAM cell. Such a switch is known as a *pass-transistor switch*. If a 0 is stored in an SRAM cell, then the associated NMOS transistor is turned off. But if a 1 is stored in the SRAM cell, as shown for the switch drawn in blue, then the NMOS transistor is turned on. This switch forms a connection between the two wires attached to its source and drain terminals. The number of switches that are provided in the FPGA depends on the specific chip architecture. In some FPGAs some of the switches are implemented using tri-state buffers, instead of pass transistors. Examples of commercial FPGA chips are presented in Appendix E.

In section 3.8.7 we showed that an NMOS transistor can only partially pass a high logic value. Hence in Figure 3.68 if V_{fi} is a high voltage level, then V_A is only partially high. Using the values from section 3.8.7, if $V_{fi} = 5$ V, then $V_A = 3.5$ V. As we explained in section 3.8.7, this degraded voltage level has the result of causing static power to be consumed (see Example 3.15). One solution to this problem [1] is illustrated in Figure 3.69. We assume that the signal V_A passes through another pass-transistor switch before reaching its destination at another logic block. The signal V_B has the same value as V_A because the threshold voltage drop occurs only when passing through the first pass-transistor switch. To restore the level of V_B , it is buffered with an inverter. A PMOS transistor is connected between the input of the inverter and V_{DD} , and that transistor is controlled by the inverter's output. The PMOS transistor has no effect on the inverter's output voltage level when $V_B = 0$ V. But when $V_B = 3.5$ V, then the inverter output is low, which turns on the PMOS transistor. This transistor quickly restores V_B to the proper level of V_{DD} , thus preventing current from flowing in the steady state. Instead of using this pull-up transistor solution, another possible approach is to alter the threshold voltage of the PMOS transistor (during the integrated circuit manufacturing process) in the inverter in Figure 3.69, such that the magnitude of its threshold voltage is large enough to keep the transistor turned off when $V_B = 3.5$ V. In commercial FPGAs both of these solutions are used in different chips.

An alternative to using a single NMOS transistor is to use a transmission gate, described in section 3.9, for each switch. While this solves the voltage-level problem, it has two drawbacks. First, having both an NMOS and PMOS transistor in the switch increases the

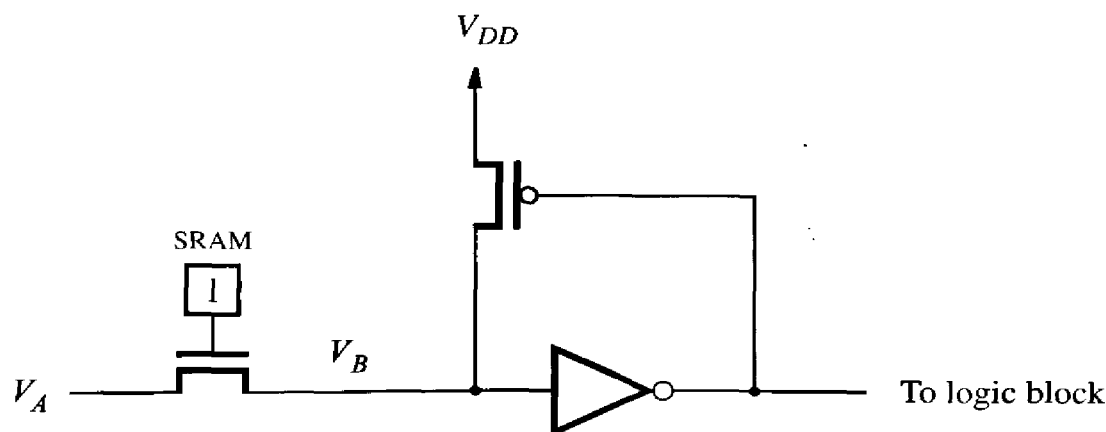


Figure 3.69 Restoring a high voltage level.

capacitive loading on the interconnection wires, which increases the propagation delays and power consumption. Second, the transmission gate takes more chip area than does a single NMOS transistor. For these reasons, commercial FPGA chips do not currently use transmission-gate switches.

3.11 CONCLUDING REMARKS

We have described the most important concepts that are needed to understand how logic gates are built using transistors. Our discussions of transistor fabrication, voltage levels, propagation delays, power dissipation, and the like are meant to give the reader an appreciation of the practical issues that have to be considered when designing and using logic circuits.

We have introduced several types of integrated circuit chips. Each type of chip is appropriate for specific types of applications. The standard chips, such as the 7400 series, contain only a few simple gates and are rarely used today. Exceptions to this are the buffer chips, which are employed in digital circuits that must drive large capacitive loads at high speeds. The various types of PLDs are widely used in many types of applications. Simple PLDs, like PLAs and PALs, are appropriate for implementation of small logic circuits. The SPLDs offer low cost and high speed. CPLDs can be used for the same applications as SPLDs, but CPLDs are also well suited for implementation of larger circuits, up to about 10,000 to 20,000 gates. Many of the applications that can be targeted to CPLDs can alternatively be realized with FPGAs. Which of these two types of chips are used in a specific design situation depends on many factors. Following the trend of putting as much circuitry as possible into a single chip, CPLDs and FPGAs are much more widely used than SPLDs. Most digital designs created in the industry today contain some type of PLD.

The gate-array, standard-cell, and custom-chip technologies are used in cases where PLDs are not appropriate. Typical applications are those that entail very large circuits, require extremely high speed-of-operation, need low power consumption, and where the designed product is expected to sell in large volume.

The next chapter examines the issue of optimization of logic functions. Some of the techniques discussed are appropriate for use in the synthesis of logic circuits regardless of what type of technology is used for implementation. Other techniques are suitable for synthesizing circuits so that they can be implemented in chips with specific types of resources. We will show that when synthesizing a logic function to create a circuit, the optimization methods used depend, at least in part, on which type of chip is being used.

3.12 EXAMPLES OF SOLVED PROBLEMS

This section presents some typical problems that the reader may encounter, and shows how such problems can be solved.

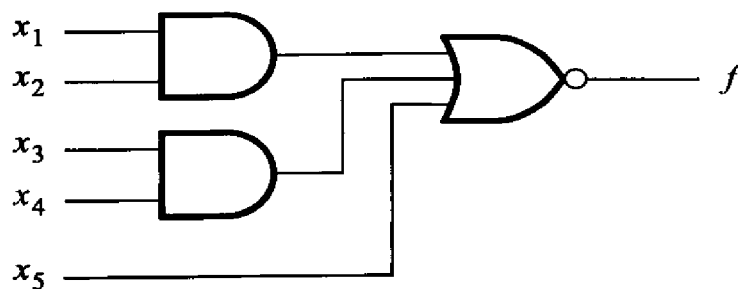


Figure 3.70 The AOI cell for Example 3.9.

Problem: We introduced standard cell technology in section 3.7. In this technology, circuits are built by interconnecting building-block cells that implement simple functions, like basic logic gates. A commonly used type of standard cell are the and-or-invert (AOI) cells, which can be efficiently built as CMOS complex gates. Consider the AOI cell shown in Figure 3.70. This cell implements the function $f = \overline{x_1 x_2} + \overline{x_3 x_4} + \overline{x_5}$. Derive the CMOS complex gate that implements this cell.

Solution: Applying Demorgan's theorem in two steps gives

$$\begin{aligned} f &= \overline{x_1 x_2} + \overline{x_3 x_4} + \overline{x_5} \\ &= (\overline{x_1} + \overline{x_2}) \cdot (\overline{x_3} + \overline{x_4}) \cdot \overline{x_5} \end{aligned}$$

Since all input variables are complemented in this expression, we can directly derive the pull-up network as having parallel-connected PMOS transistors controlled by x_1 and x_2 , in series with parallel-connected transistors controlled by x_3 and x_4 , in series with a transistor controlled by x_5 . This circuit, along with the corresponding pull-down network, is shown in Figure 3.71.

Problem: For the CMOS complex gate in Figure 3.71, determine the sizes of transistors that should be used such that the speed performance of this gate is similar to that of an inverter.

Solution: Recall from section 3.8.5 that a transistor with length L and width W has a drive strength proportional to the ratio W/L . Also recall that when transistors are connected in parallel their widths are effectively added, leading to an increase in drive strength. Similarly, when transistors are connected in series, their lengths are added, leading to a decrease in drive strength. Let us assume that all NMOS and PMOS transistors have the same length, $L_n = L_p = L$. For the pull-down network in Figure 3.71, the worst-case path involves just a single NMOS transistor. Thus, we can make the length, L_n , of each NMOS transistor the same size as in the inverter. For the pull-up network, the worst-case path involves three transistors in series. Since, as we said in section 3.8.1, PMOS transistors have about half the drive strength of NMOS transistors, we should make the effective size of the three PMOS transistors in series about twice that of an NMOS transistor. Therefore,

$$L_p = L_n \times 3 \times 2 = 6L_n$$

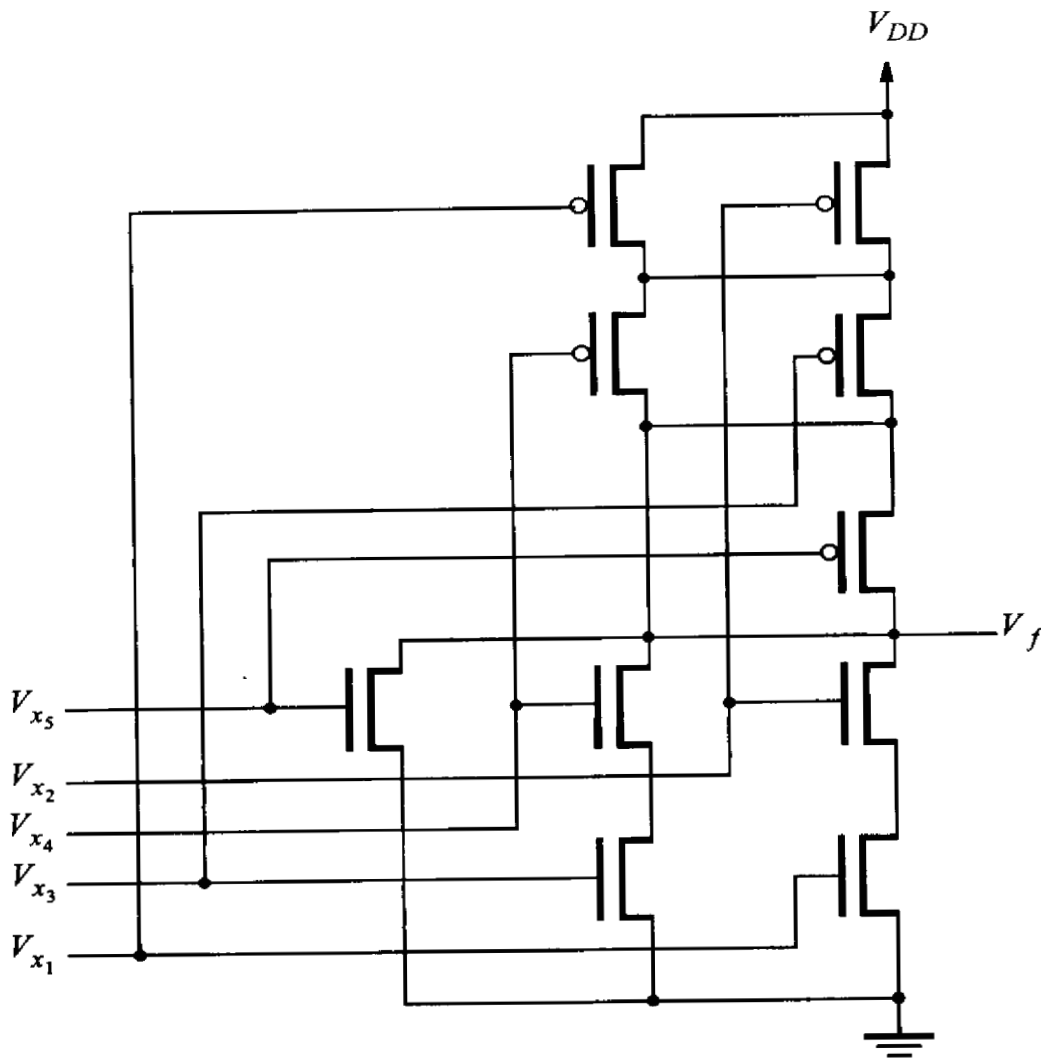


Figure 3.71 Circuit for Example 3.9.

Problem: In section 3.8.5, we said that the time needed to charge a capacitor is given by **E**

$$t_p = \frac{C\Delta V}{I}$$

Derive this expression.

Solution: As we stated in section 3.8.5, the voltage across a capacitor cannot change instantaneously. In Figure 3.50a, as V_f is charged from 0 volts toward V_{DD} , the voltage changes according to the equation

$$V_f = \frac{1}{C} \int_0^{\infty} i(t) dt$$

In this expression, the independent variable t is time, and $i(t)$ represents the instantaneous current flow through the capacitor at time t . Differentiating both sides of this expression

with respect to time, and rearranging gives

$$i(t) = C \frac{dV_f}{dt}$$

For the case where I is constant, we have

$$\frac{I}{C} = \frac{\Delta V}{\Delta t}$$

Therefore,

$$\Delta t = t_p = \frac{C\Delta V}{I}$$

3.12 Problem: In our discussion of Figure 3.50a, in section 3.8.6, we said that a capacitor, C , that has been charged to the voltage $V_f = V_{DD}$, stores an amount of energy equal to $CV_{DD}^2/2$. Derive this expression.

Solution: As shown in Example 3.11, the current flow through a charging capacitor, C , is related to the rate of change of voltage across the capacitor, according to

$$i(t) = C \frac{dV_f}{dt}$$

The instantaneous power dissipated in the capacitor is

$$P = i(t) \times V_f$$

Since energy is defined as the power used over a time period, we can calculate the energy, E_C , stored in the capacitor as V_f changes from 0 to V_{DD} by integrating the instantaneous power over time, as follows

$$E_C = \int_0^{\infty} i(t)V_f dt$$

Substituting the above expression for $i(t)$ gives

$$\begin{aligned} E_C &= \int_0^{\infty} C \frac{dV_f}{dt} V_f dt \\ &= C \int_0^{V_{DD}} V_f dV_f \\ &= \frac{1}{2} CV_{DD}^2 \end{aligned}$$

3.13 Problem: In the original NMOS technology, the pull-up device was an n -channel MOSFET. But most integrated circuits fabricated today use CMOS technology. Hence it is convenient to implement the pull-up resistor using a PMOS transistor, as shown in Figure 3.72. Such

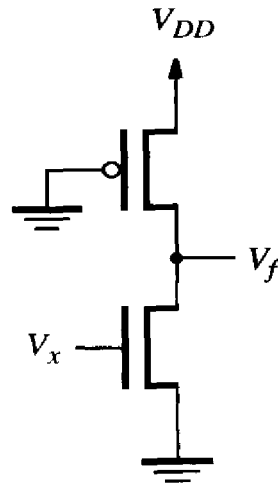


Figure 3.72 The pseudo-NMOS inverter.

a circuit is referred to as a *pseudo-NMOS* circuit. The pull-up device is called a “weak” PMOS transistor because it has a small W/L ratio.

When $V_x = V_{DD}$, V_f has a low value. The NMOS transistor is operating in the triode region, while the PMOS transistor limits the current flow because it is operating in the saturation region. The current through the NMOS and PMOS transistors has to be equal and is given by equations 3.1 and 3.2. Show that the low-output voltage, $V_f = V_{OL}$ is given by

$$V_f = (V_{DD} - V_T) \left[1 - \sqrt{1 - \frac{k_p}{k_n}} \right]$$

where k_p and k_n , called the *gain factors*, depend on the sizes of the PMOS and NMOS transistors, respectively. They are defined by $k_p = k'_p W_p/L_p$ and $k_n = k'_n W_n/L_n$.

Solution: For simplicity we will assume that the magnitude of the threshold voltages for both the NMOS and PMOS transistors are equal, so that

$$V_T = V_{TN} = -V_{TP}$$

The PMOS transistor is operating in the saturation region, so the current flowing through it is given by

$$\begin{aligned} I_D &= \frac{1}{2} k'_p \frac{W_p}{L_p} (-V_{DD} - V_{TP})^2 \\ &= \frac{1}{2} k_p (-V_{DD} - V_{TP})^2 \\ &= \frac{1}{2} k_p (V_{DD} - V_T)^2 \end{aligned}$$

Similarly, the NMOS transistor is operating in the triode region, and its current flow is defined by

$$\begin{aligned}
 I_D &= k'_n \frac{W_n}{L_n} \left[(V_x - V_{TN})V_f - \frac{1}{2}V_f^2 \right] \\
 &= k_n \left[(V_x - V_{TN})V_f - \frac{1}{2}V_f^2 \right] \\
 &= k_n \left[(V_{DD} - V_T)V_f - \frac{1}{2}V_f^2 \right]
 \end{aligned}$$

Since there is only one path for current to flow, we can equate the currents flowing through the NMOS and PMOS transistors and solve for the voltage V_f .

$$\begin{aligned}
 k_p(V_{DD} - V_T)^2 &= 2k_n \left[(V_{DD} - V_T)V_f - \frac{1}{2}V_f^2 \right] \\
 k_p(V_{DD} - V_T)^2 - 2k_n(V_{DD} - V_T)V_f + k_n V_f^2 &= 0
 \end{aligned}$$

This quadratic equation can be solved using the standard formula, with the parameters

$$a = k_n, \quad b = -2k_n(V_{DD} - V_T), \quad c = k_p(V_{DD} - V_T)^2$$

which gives

$$\begin{aligned}
 V_f &= \frac{-b}{2a} \pm \sqrt{\frac{b^2}{4a^2} - \frac{c}{a}} \\
 &= (V_{DD} - V_T) \pm \sqrt{(V_{DD} - V_T)^2 - \frac{k_p}{k_n}(V_{DD} - V_T)^2} \\
 &= (V_{DD} - V_T) \left[1 \pm \sqrt{1 - \frac{k_p}{k_n}} \right]
 \end{aligned}$$

Only one of these two solutions is valid, because we started with the assumption that the NMOS transistor is in the triode region while the PMOS is in the saturation region. Thus

$$V_f = (V_{DD} - V_T) \left[1 - \sqrt{1 - \frac{k_p}{k_n}} \right]$$

3.14 Problem: For the circuit in Figure 3.72, assume the values $k'_n = 60 \mu\text{A}/\text{V}^2$, $k'_p = 0.4k'_n$, $W_n/L_n = 2.0 \mu\text{m}/0.5 \mu\text{m}$, $W_p/L_p = 0.5 \mu\text{m}/0.5 \mu\text{m}$, $V_{DD} = 5 \text{ V}$, and $V_T = 1 \text{ V}$. When $V_x = V_{DD}$, calculate the following:

- The static current, I_{stat} .
- The on-resistance of the NMOS transistor.
- V_{OL} .
- The static power dissipated in the inverter.
- The on-resistance of the PMOS transistor.

(f) Assume that the inverter is used to drive a capacitive load of 70 fF. Using equation 3.4, calculate the low-to-high and high-to-low propagation delays.

Solution: (a) The PMOS transistor is saturated, therefore

$$\begin{aligned} I_{stat} &= \frac{1}{2} k'_p \frac{W_p}{L_p} (V_{DD} - V_T)^2 \\ &= 12 \frac{\mu\text{A}}{\text{V}^2} \times 1 \times (5 \text{ V} - 1 \text{ V})^2 = 192 \mu\text{A} \end{aligned}$$

(b) Using equation 3.3,

$$\begin{aligned} R_{DS} &= 1 / \left[k'_n \frac{W_n}{L_n} (V_{GS} - V_T) \right] \\ &= 1 / \left[0.060 \frac{\text{mA}}{\text{V}^2} \times 4 \times (5 \text{ V} - 1 \text{ V}) \right] = 1.04 \text{ k}\Omega \end{aligned}$$

(c) Using the expression derived in Example 3.13 we have

$$\begin{aligned} k_p &= k'_p \frac{W_p}{L_p} = 24 \frac{\mu\text{A}}{\text{V}^2} \\ k_n &= k'_n \frac{W_n}{L_n} = 240 \frac{\mu\text{A}}{\text{V}^2} \end{aligned}$$

$$\begin{aligned} V_{OL} = V_f &= (5 \text{ V} - 1 \text{ V}) \left[1 - \sqrt{1 - \frac{24}{240}} \right] \\ &= 0.21 \text{ V} \end{aligned}$$

(d)

$$\begin{aligned} P_D &= I_{stat} \times V_{DD} \\ &= 192 \mu\text{A} \times 5 \text{ V} = 960 \mu\text{W} \approx 1 \text{ mW} \end{aligned}$$

(e)

$$\begin{aligned} R_{SDP} &= V_{SD} / I_{SD} \\ &= (V_{DD} - V_f) / I_{stat} \\ &= (5 \text{ V} - 0.21 \text{ V}) / 0.192 \text{ mA} = 24.9 \text{ k}\Omega \end{aligned}$$

(f) The low-to-high propagation delay is

$$\begin{aligned} t_{PLH} &= \frac{1.7C}{k'_p \frac{W_p}{L_p} V_{DD}} \\ &= \frac{1.7 \times 70 \text{ fF}}{24 \frac{\mu\text{A}}{\text{V}^2} \times 1 \times 5 \text{ V}} = 0.99 \text{ ns} \end{aligned}$$

The high-to-low propagation delay is

$$\begin{aligned} t_{PHL} &= \frac{1.7C}{k'_n \frac{W_n}{L_n} V_{DD}} \\ &= \frac{1.7 \times 70 \text{ fF}}{60 \frac{\mu\text{A}}{\text{V}^2} \times 4 \times 5 \text{ V}} = 0.1 \text{ ns} \end{aligned}$$

15 Problem: In Figure 3.69 we showed a solution to the static power dissipation problem when NMOS pass transistors are used. Assume that the PMOS pull-up transistor is removed from this circuit. Assume the parameters $k'_n = 60 \mu\text{A}/\text{V}^2$, $k'_p = 0.5 \times k'_n$, $W_n/L_n = 2.0 \mu\text{m}/0.5 \mu\text{m}$, $W_p/L_p = 4.0 \mu\text{m}/0.5 \mu\text{m}$, $V_{DD} = 5 \text{ V}$, and $V_T = 1 \text{ V}$. For $V_B = 3.5 \text{ V}$, calculate the following:

- The static current I_{stat} .
- The voltage V_f at the output of the inverter.
- The static power dissipation in the inverter.
- If a chip contains 250,000 inverters used in this manner, find the total static power dissipation.

Solution: (a) If we assume that the PMOS transistor is operating in the saturation region, then the current flow through the inverter is defined by

$$\begin{aligned} I_{stat} &= \frac{1}{2} k'_p \frac{W_p}{L_p} (V_{GS} - V_{Tp})^2 \\ &= 120 \frac{\mu\text{A}}{\text{V}^2} \times ((3.5 \text{ V} - 5 \text{ V}) + 1 \text{ V})^2 = 30 \mu\text{A} \end{aligned}$$

(b) Since the static current, I_{stat} , flowing through the PMOS transistor also flows through the NMOS transistor, then assuming that the NMOS transistor is operating in the triode region, we have

$$\begin{aligned} I_{stat} &= k'_n \frac{W_n}{L_n} \left[(V_{GS} - V_{Tn}) V_{DS} - \frac{1}{2} V_{DS}^2 \right] \\ 30 \mu\text{A} &= 240 \frac{\mu\text{A}}{\text{V}^2} \times \left[2.5 \text{ V} \times V_f - \frac{1}{2} V_f^2 \right] \\ 1 &= 20V_f - 4V_f^2 \end{aligned}$$

Solving this quadratic equation yields $V_f = 0.05 \text{ V}$. Note that the output voltage V_f satisfies the assumption that the PMOS transistor is operating in the saturation region while the NMOS transistor is operating in the triode region.

(c) The static power dissipated in the inverter is

$$P_S = I_{stat} \times V_{DD} = 30 \mu\text{A} \times 5 \text{ V} = 150 \mu\text{W}$$

(d) The static power dissipated by 250,000 inverters is

$$250,000 \times P_S = 37.5 \text{ W}$$

PROBLEMS

Answers to problems marked by an asterisk are given at the back of the book.

3.1 Consider the circuit shown in Figure P3.1.

(a) Show the truth table for the logic function f .

(b) If each gate in the circuit is implemented as a CMOS gate, how many transistors are needed?

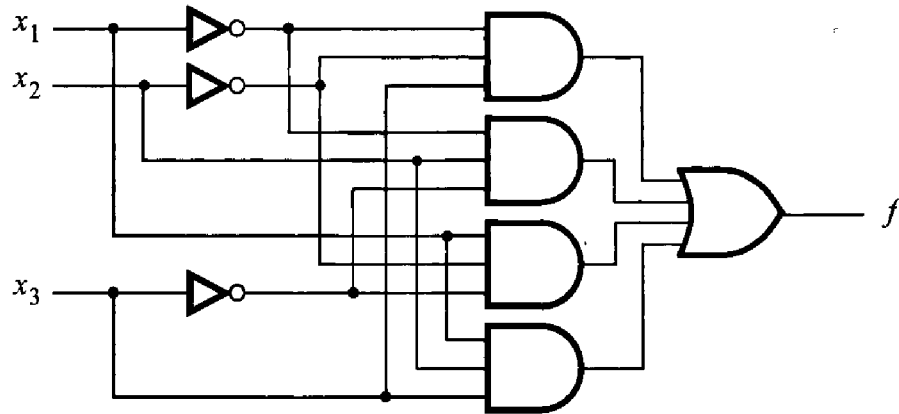


Figure P3.1 A sum-of-products CMOS circuit.

3.2 (a) Show that the circuit in Figure P3.2 is functionally equivalent to the circuit in Figure P3.1.

(b) How many transistors are needed to build this CMOS circuit?

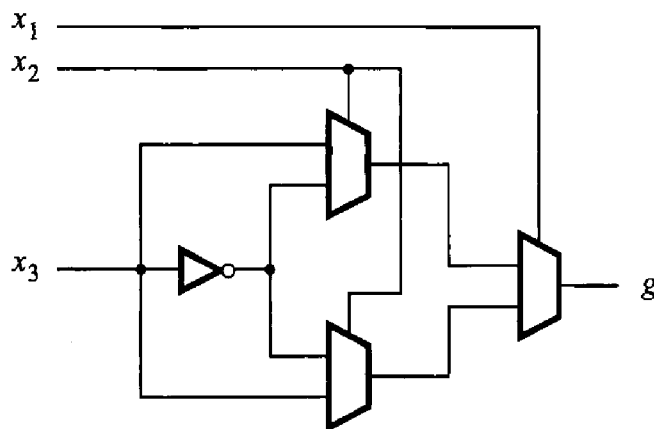


Figure P3.2 A CMOS circuit built with multiplexers.

3.3 (a) Show that the circuit in Figure P3.3 is functionally equivalent to the circuit in Figure P3.2.

(b) How many transistors are needed to build this CMOS circuit if each XOR gate is implemented using the circuit in Figure 3.61d?

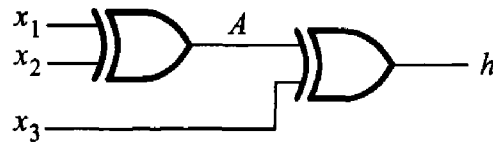


Figure P3.3 Circuit for problem 3.3.

- *3.4** In Section 3.8.8 we said that a six-input CMOS AND gate can be constructed using two three-input AND gates and a two-input AND gate. This approach requires 22 transistors. Show how you can use only CMOS NAND and NOR gates to build the six-input AND gate, and calculate the number of transistors needed. (Hint: use DeMorgan's theorem.)
- 3.5** Repeat problem 3.4 for an eight-input CMOS OR gate.
- 3.6** (a) Give the truth table for the CMOS circuit in Figure P3.4.
 (b) Derive a canonical sum-of-products expression for the truth table from part (a). How many transistors are needed to build a circuit representing the canonical form if only AND, OR, and NOT gates are used?

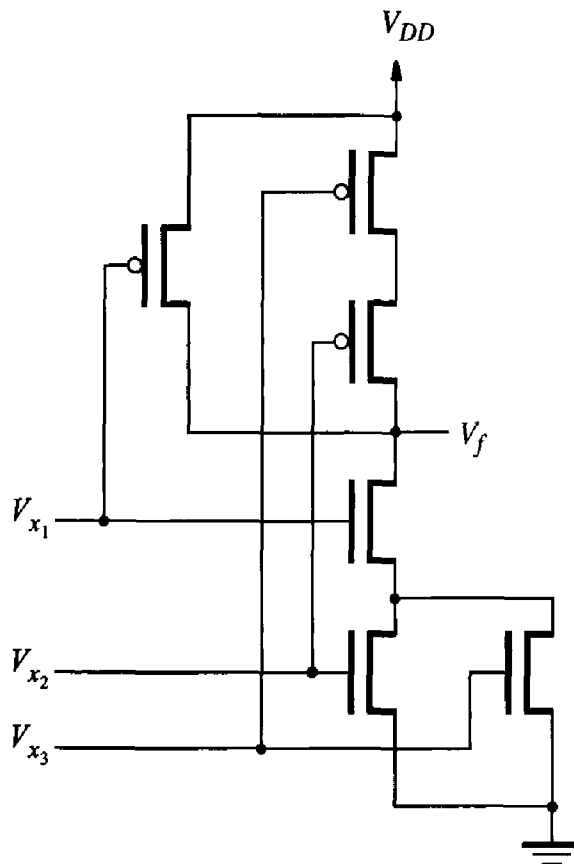


Figure P3.4 A three-input CMOS circuit.

- 3.7** (a) Give the truth table for the CMOS circuit in Figure P3.5.
 (b) Derive the simplest sum-of-products expression for the truth table in part (a). How many transistors are needed to build the sum-of-products circuit using CMOS AND, OR, and NOT gates?

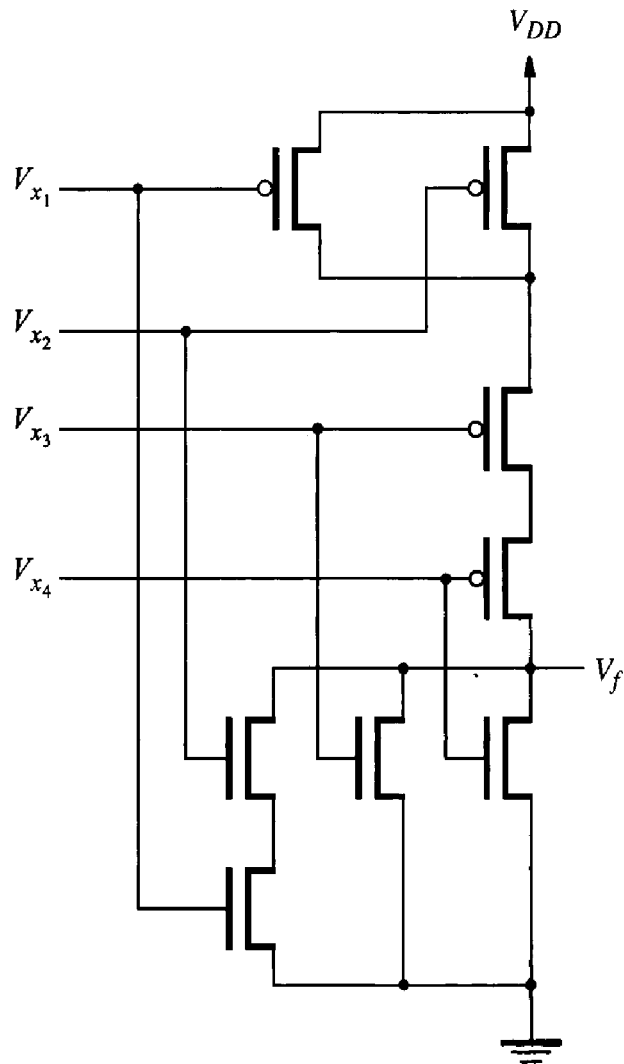


Figure P3.5 A four-input CMOS circuit.

***3.8** Figure P3.6 shows half of a CMOS circuit. Derive the other half that contains the PMOS transistors.

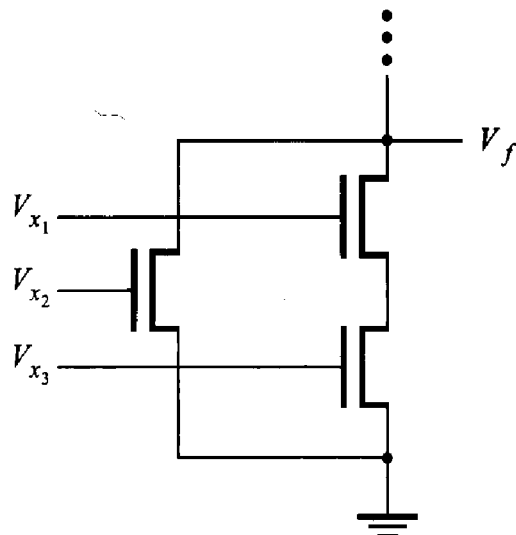


Figure P3.6 The PDN in a CMOS circuit.

3.9 Figure P3.7 shows half of a CMOS circuit. Derive the other half that contains the NMOS transistors.

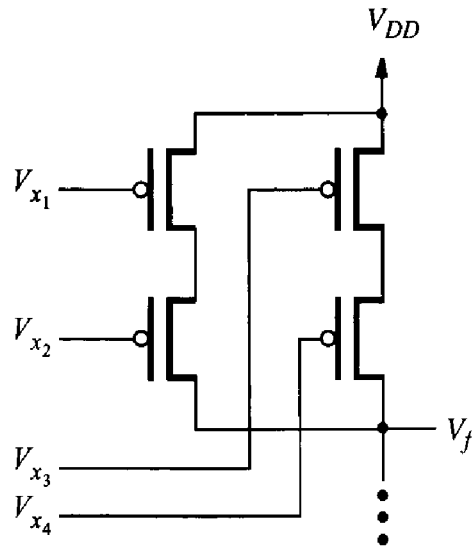


Figure P3.7 The PUN in a CMOS circuit.

- 3.10** Derive a CMOS complex gate for the logic function $f(x_1, x_2, x_3, x_4) = \sum m(0, 1, 2, 4, 5, 6, 8, 9, 10)$.
- 3.11** Derive a CMOS complex gate for the logic function $f(x_1, x_2, x_3, x_4) = \sum m(0, 1, 2, 4, 6, 8, 10, 12, 14)$.
- 3.12** Derive a CMOS complex gate for the logic function $f = xy + xz$. Use as few transistors as possible (Hint: consider \bar{f}).
- 3.13** Derive a CMOS complex gate for the logic function $f = xy + xz + yz$. Use as few transistors as possible (Hint: consider \bar{f}).
- 3.14** For an NMOS transistor, assume that $k'_n = 20 \mu\text{A}/\text{V}^2$, $W/L = 2.5 \mu\text{m}/0.5 \mu\text{m}$, $V_{GS} = 5 \text{ V}$, and $V_T = 1 \text{ V}$. Calculate
 (a) I_D when $V_{DS} = 5 \text{ V}$
 (b) I_D when $V_{DS} = 0.2 \text{ V}$
- 3.15** For a PMOS transistor, assume that $k'_p = 10 \mu\text{A}/\text{V}^2$, $W/L = 2.5 \mu\text{m}/0.5 \mu\text{m}$, $V_{GS} = -5 \text{ V}$, and $V_T = -1 \text{ V}$. Calculate
 (a) I_D when $V_{DS} = -5 \text{ V}$
 (b) I_D when $V_{DS} = -0.2 \text{ V}$
- 3.16** For an NMOS transistor, assume that $k'_n = 20 \mu\text{A}/\text{V}^2$, $W/L = 5.0 \mu\text{m}/0.5 \mu\text{m}$, $V_{GS} = 5 \text{ V}$, and $V_T = 1 \text{ V}$. For small V_{DS} , calculate R_{DS} .
- 3.17** For an NMOS transistor, assume that $k'_n = 40 \mu\text{A}/\text{V}^2$, $W/L = 3.5 \mu\text{m}/0.35 \mu\text{m}$, $V_{GS} = 3.3 \text{ V}$, and $V_T = 0.66 \text{ V}$. For small V_{DS} , calculate R_{DS} .

- 3.18** For a PMOS transistor, assume that $k'_p = 10 \mu\text{A}/\text{V}^2$, $W/L = 5.0 \mu\text{m}/0.5 \mu\text{m}$, $V_{GS} = -5 \text{ V}$, and $V_T = -1 \text{ V}$. For $V_{DS} = -4.8 \text{ V}$, calculate R_{DS} .
- 3.19** For a PMOS transistor, assume that $k'_p = 16 \mu\text{A}/\text{V}^2$, $W/L = 3.5 \mu\text{m}/0.35 \mu\text{m}$, $V_{GS} = -3.3 \text{ V}$, and $V_T = -0.66 \text{ V}$. For $V_{DS} = -3.2 \text{ V}$, calculate R_{DS} .
- 3.20** In Example 3.13 we showed how to calculate voltage levels in a pseudo-NMOS inverter. Figure P3.8 depicts a pseudo-PMOS inverter. In this technology, a weak NMOS transistor is used to implement a pull-down resistor.

When $V_x = 0$, V_f has a high value. The PMOS transistor is operating in the triode region, while the NMOS transistor limits the current flow, because it is operating in the saturation region. The current through the PMOS and NMOS transistors has to be the same and is given by equations 3.1 and 3.2. Find an expression for the high-output voltage, $V_f = V_{OH}$, in terms of V_{DD} , V_T , k_p , and k_n , where k_p and k_n are gain factors as defined in Example 3.13.

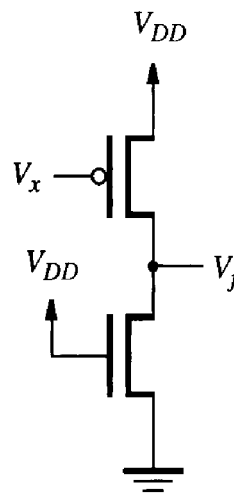


Figure P3.8 The pseudo-PMOS inverter.

- 3.21** For the circuit in Figure P3.8, assume the values $k'_n = 60 \mu\text{A}/\text{V}^2$, $k'_p = 0.4 k'_n$, $W_n/L_n = 0.5 \mu\text{m}/0.5 \mu\text{m}$, $W_p/L_p = 4.0 \mu\text{m}/0.5 \mu\text{m}$, $V_{DD} = 5 \text{ V}$ and $V_T = 1 \text{ V}$. When $V_x = 0$, calculate the following:
- The static current, I_{stat}
 - The on-resistance of the PMOS transistor
 - V_{OH}
 - The static power dissipated in the inverter
 - The on-resistance of the NMOS transistor
 - Assume that the inverter is used to drive a capacitive load of 70 fF. Using equation 3.4, calculate the low-to-high and high-to-low propagation delays.

- 3.22** Repeat problem 3.21 assuming that the size of the NMOS transistor is changed to $W_n/L_n = 4.0 \mu\text{m}/0.5 \mu\text{m}$.
- 3.23** Example 3.13 (see Figure 3.72) shows that in the pseudo-NMOS technology the pull-up device is implemented using a PMOS transistor. Repeat this problem for a NAND gate built with pseudo-NMOS technology. Assume that both of the NMOS transistors in the gate have the same parameters, as given in Example 3.14.
- 3.24** Repeat problem 3.23 for a pseudo-NMOS NOR gate.
- *3.25** (a) For $V_{IH} = 4 \text{ V}$, $V_{OH} = 4.5 \text{ V}$, $V_{IL} = 1 \text{ V}$, $V_{OL} = 0.3 \text{ V}$, and $V_{DD} = 5 \text{ V}$, calculate the noise margins NM_H and NM_L .
 (b) Consider an eight-input NAND gate built using NMOS technology. If the voltage drop across each transistor is 0.1 V , what is V_{OL} ? What is the corresponding NM_L using the other parameters from part (a).
- 3.26** Under steady-state conditions, for an n -input CMOS NAND gate, what are the voltage levels of V_{OL} and V_{OH} ? Explain.
- 3.27** For a CMOS inverter, assume that the load capacitance is $C = 150 \text{ fF}$ and $V_{DD} = 5 \text{ V}$. The inverter is cycled through the low and high voltage levels at an average rate of $f = 75 \text{ MHz}$.
 (a) Calculate the dynamic power dissipated in the inverter.
 (b) For a chip that contains the equivalent of 250,000 inverters, calculate the total dynamic power dissipated if 20 percent of the gates change values at any given time.
- *3.28** Repeat problem 3.27 for $C = 120 \text{ fF}$, $V_{DD} = 3.3 \text{ V}$, and $f = 125 \text{ MHz}$.
- 3.29** In a CMOS inverter, assume that $k'_n = 20 \mu\text{A}/\text{V}^2$, $k'_p = 0.4 \times k'_n$, $W_n/L_n = 5.0 \mu\text{m}/0.5 \mu\text{m}$, $W_p/L_p = 5.0 \mu\text{m}/0.5 \mu\text{m}$, and $V_{DD} = 5 \text{ V}$. The inverter drives a load capacitance of 150 fF .
 (a) Find the high-to-low propagation delay.
 (b) Find the low-to-high propagation delay.
 (c) What should be the dimensions of the PMOS transistor such that the low-to-high and high-to-low propagation delays are equal? Ignore the effect of the PMOS transistor's size on the load capacitance of the inverter.
- 3.30** Repeat problem 3.29 for the parameters $k'_n = 40 \mu\text{A}/\text{V}^2$, $k'_p = 0.4 \times k'_n$, $W_n/L_n = W_p/L_p = 3.5 \mu\text{m}/0.35 \mu\text{m}$, and $V_{DD} = 3.3 \text{ V}$.
- 3.31** In a CMOS inverter, assume that $W_n/L_n = 2$ and $W_p/L_p = 4$. For a CMOS NAND gate, calculate the required W/L ratios of the NMOS and PMOS transistors such that the available current in the gate to drive the output both low and high is equal to that in the inverter.
- *3.32** Repeat problem 3.31 for a CMOS NOR gate.
- 3.33** Repeat problem 3.31 for the CMOS complex gate in Figure 3.16. The transistor sizes should be chosen such that in the worst case the available current is at least as large as in the inverter.
- 3.34** Repeat problem 3.31 for the CMOS complex gate in Figure 3.17.

- 3.35** In Figure 3.69 we showed a solution to the static power dissipation problem when NMOS pass transistors are used. Assume that the PMOS pull-up transistor is removed from this circuit. Assume the parameters $k'_n = 60 \mu\text{A}/\text{V}^2$, $k'_p = 0.4 \times k'_n$, $W_n/L_n = 1.0 \mu\text{m}/0.25 \mu\text{m}$, $W_p/L_p = 2.0 \mu\text{m}/0.25 \mu\text{m}$, $V_{DD} = 2.5 \text{ V}$, and $V_T = 0.6 \text{ V}$. For $V_B = 1.6 \text{ V}$, calculate the following:
- the static current, I_{stat}
 - the voltage, V_f , at the output of the inverter
 - the static power dissipation in the inverter
 - If a chip contains 500,000 inverters used in this manner, find the total static power dissipation.
- 3.36** Using the style of drawing in Figure 3.66, draw a picture of a PLA programmed to implement $f_1(x_1, x_2, x_3) = \sum m(1, 2, 4, 7)$. The PLA should have the inputs x_1, \dots, x_3 ; the product terms P_1, \dots, P_4 ; and the outputs f_1 and f_2 .
- 3.37** Using the style of drawing in Figure 3.66, draw a picture of a PLA programmed to implement $f_1(x_1, x_2, x_3) = \sum m(0, 3, 5, 6)$. The PLA should have the inputs x_1, \dots, x_3 ; the product terms P_1, \dots, P_4 ; and the outputs f_1 and f_2 .
- 3.38** Show how the function f_1 from problem 3.36 can be realized in a PLA of the type shown in Figure 3.65. Draw a picture of such a PLA programmed to implement f_1 . The PLA should have the inputs x_1, \dots, x_3 ; the sum terms S_1, \dots, S_4 ; and the outputs f_1 and f_2 .
- 3.39** Show how the function f_1 from problem 3.37 can be realized in a PLA of the type shown in Figure 3.65. Draw a picture of such a PLA programmed to implement f_1 . The PLA should have the inputs x_1, \dots, x_3 ; the sum terms S_1, \dots, S_4 ; and the outputs f_1 and f_2 .
- 3.40** Repeat problem 3.38 using the style of PLA drawing shown in Figure 3.63.
- 3.41** Repeat problem 3.39 using the style of PLA drawing shown in Figure 3.63.
- 3.42** Given that f_1 is implemented as described in problem 3.36, list all of the other possible logic functions that can be realized using output f_2 in the PLA.
- 3.43** Given that f_1 is implemented as described in problem 3.37, list all of the other possible logic functions that can be realized using output f_2 in the PLA.
- 3.44** Consider the function $f(x_1, x_2, x_3) = x_1\bar{x}_2 + x_1x_3 + x_2\bar{x}_3$. Show a circuit using 5 two-input lookup-tables (LUTs) to implement this expression. As shown in Figure 3.39, give the truth table implemented in each LUT. You do not need to show the wires in the FPGA.
- *3.45** Consider the function $f(x_1, x_2, x_3) = \sum m(2, 3, 4, 6, 7)$. Show how it can be realized using two two-input LUTs. As shown in Figure 3.39, give the truth table implemented in each LUT. You do not need to show the wires in the FPGA.
- 3.46** Given the function $f = x_1x_2x_4 + x_2x_3\bar{x}_4 + \bar{x}_1\bar{x}_2\bar{x}_3$, a straightforward implementation in an FPGA with three-input LUTs requires four LUTs. Show how it can be done using only 3 three-input LUTs. Label the output of each LUT with an expression representing the logic function that it implements.

- 3.47** For f in problem 3.46, show a circuit of two-input LUTs that realizes the function. You are to use exactly seven two-input LUTs. Label the output of each LUT with an expression representing the logic function that it implements.
- 3.48** Figure 3.39 shows an FPGA programmed to implement a function. The figure shows one pin used for function f , and several pins that are unused. Without changing the programming of any switch that is turned *on* in the FPGA in the figure, list 10 other logic functions, in addition to f , that can be implemented on the unused pins.
- 3.49** Assume that a gate array contains the type of logic cell depicted in Figure P3.9. The inputs in_1, \dots, in_7 can be connected to either 1 or 0, or to any logic signal.
- (a) Show how the logic cell can be used to realize $f = x_1x_2 + x_3$.
- (b) Show how the logic cell can be used to realize $f = x_1x_3 + x_2x_3$.

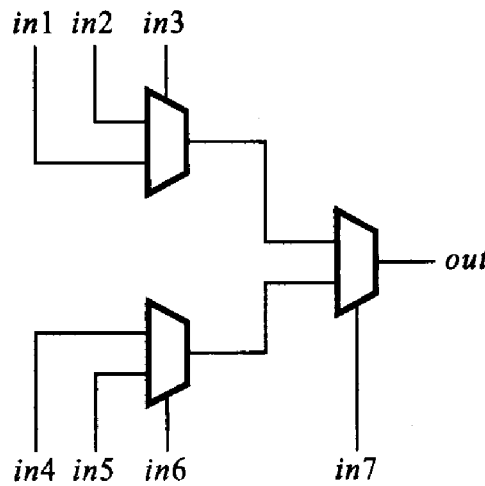


Figure P3.9 A gate-array logic cell.

- 3.50** Assume that a gate array exists in which the logic cell used is a three-input NAND gate. The inputs to each NAND gate can be connected to either 1 or 0, or to any logic signal. Show how the following logic functions can be realized in the gate array. (Hint: use DeMorgan's theorem.)
- (a) $f = x_1x_2 + x_3$
- (b) $f = x_1x_2x_4 + x_2x_3\bar{x}_4 + \bar{x}_1$
- 3.51** Write VHDL code to represent the function

$$f = x_2\bar{x}_3\bar{x}_4 + \bar{x}_1x_2x_4 + \bar{x}_1x_2x_3 + x_1x_2x_3$$

- (a) Use your CAD tools to implement f in some type of chip, such as a CPLD. Show the logic expression generated for f by the tools. Use timing simulation to determine the time needed for a change in inputs x_1, x_2 , or x_3 to propagate to the output f .
- (b) Repeat part (a) using a different chip, such as an FPGA for implementation of the circuit.

3.52 Repeat problem 3.51 for the function

$$f = (x_1 + x_2 + \bar{x}_4) \cdot (\bar{x}_2 + x_3 + \bar{x}_4) \cdot (\bar{x}_1 + x_3 + \bar{x}_4) \cdot (\bar{x}_1 + \bar{x}_3 + \bar{x}_4)$$

3.53 Repeat problem 3.51 for the function

$$f(x_1, \dots, x_7) = x_1x_3\bar{x}_6 + x_1x_4x_5\bar{x}_6 + x_2x_3x_7 + x_2x_4x_5x_7$$

3.54 What logic gate is realized by the circuit in Figure P3.10? Does this circuit suffer from any major drawbacks?

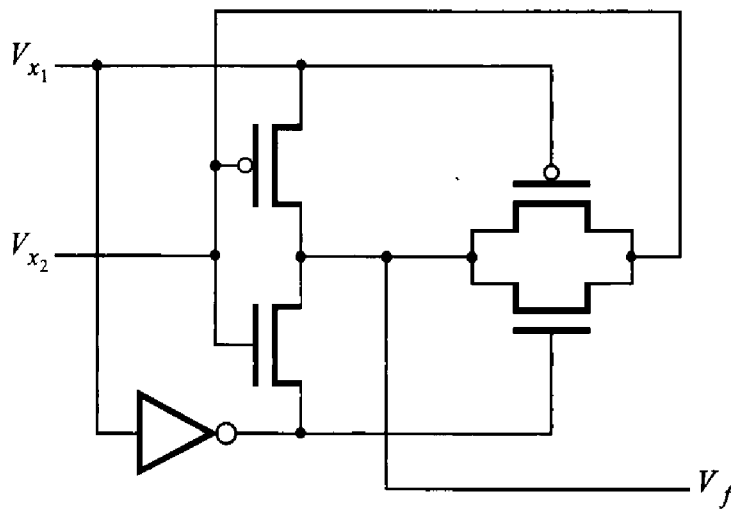


Figure P3.10 Circuit for problem 3.54.

***3.55** What logic gate is realized by the circuit in Figure P3.11? Does this circuit suffer from any major drawbacks?

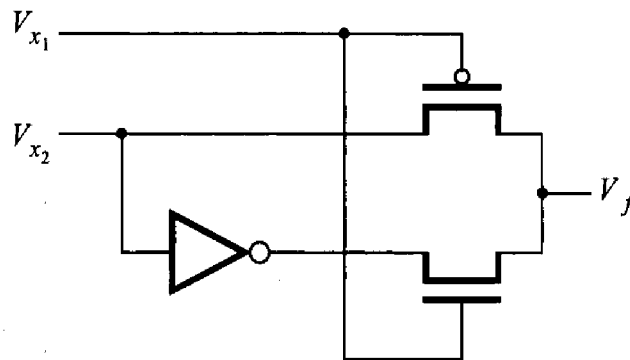


Figure P3.11 Circuit for problem 3.55.

REFERENCES

1. A. S. Sedra and K. C. Smith, *Microelectronic Circuits*, 5th ed. (Oxford University Press: New York, 2003).
2. J. M. Rabaey, *Digital Integrated Circuits*, (Prentice-Hall: Englewood Cliffs, NJ, 1996).
3. Texas Instruments, *Logic Products Selection Guide and Databook CD-ROM*, 1997.
4. National Semiconductor, *VHC/VHCT Advanced CMOS Logic Databook*, 1993.
5. Motorola, *CMOS Logic Databook*, 1996.
6. Toshiba America Electronic Components, *TC74VHC/VHCT Series CMOS Logic Databook*, 1994.
7. Integrated Devices Technology, *High Performance Logic Databook*, 1994.
8. J. F. Wakerly, *Digital Design Principles and Practices* 3rd ed. (Prentice-Hall: Englewood Cliffs, NJ, 1999).
9. M. M. Mano, *Digital Design* 3rd ed. (Prentice-Hall: Upper Saddle River, NJ, 2002).
10. R. H. Katz, *Contemporary Logic Design* (Benjamin/Cummings: Redwood City, CA, 1994).
11. J. P. Hayes, *Introduction to Logic Design* (Addison-Wesley: Reading, MA, 1993).
12. D. D. Gajski, *Principles of Digital Design* (Prentice-Hall: Upper Saddle River, NJ, 1997).

chapter**4****OPTIMIZED IMPLEMENTATION OF LOGIC
FUNCTIONS****CHAPTER OBJECTIVES**

In this chapter you will learn about:

- Synthesis of logic functions
- Analysis of logic circuits
- Techniques for deriving minimum-cost implementations of logic functions
- Graphical representation of logic functions in the form of Karnaugh maps
- Cubical representation of logic functions
- Use of CAD tools and VHDL to implement logic functions

In Chapter 2 we showed that algebraic manipulation can be used to find the lowest-cost implementations of logic functions. The purpose of that chapter was to introduce the basic concepts in the synthesis process. The reader is probably convinced that it is easy to derive a straightforward realization of a logic function in a canonical form, but it is not at all obvious how to choose and apply the theorems and properties of section 2.5 to find a minimum-cost circuit. Indeed, the algebraic manipulation is rather tedious and quite impractical for functions of many variables.

If CAD tools are used to design logic circuits, the task of minimizing the cost of implementation does not fall to the designer; the tools perform the necessary optimizations automatically. Even so, it is essential to know something about this process. Most CAD tools have many features and options that are under control of the user. To know when and how to apply these options, the user must have an understanding of what the tools do.

In this chapter we will introduce some of the optimization techniques implemented in CAD tools and show how these techniques can be automated. As a first step we will discuss a graphical approach, known as the Karnaugh map, which provides a neat way to manually derive minimum-cost implementations of simple logic functions. Although it is not suitable for implementation in CAD tools, it illustrates a number of key concepts. We will show how both two-level and multilevel circuits can be designed. Then we will describe a cubical representation for logic functions, which is suitable for use in CAD tools. We will also continue our discussion of the VHDL language.

4.1 KARNAUGH MAP

In section 2.6 we saw that the key to finding a minimum-cost expression for a given logic function is to reduce the number of product (or sum) terms needed in the expression, by applying the combining property 14a (or 14b) as judiciously as possible. The Karnaugh map approach provides a systematic way of performing this optimization. To understand how it works, it is useful to review the algebraic approach from Chapter 2. Consider the function f in Figure 4.1. The canonical sum-of-products expression for f consists of minterms m_0 , m_2 , m_4 , m_5 , and m_6 , so that

$$f = \bar{x}_1\bar{x}_2\bar{x}_3 + \bar{x}_1x_2\bar{x}_3 + x_1\bar{x}_2\bar{x}_3 + x_1\bar{x}_2x_3 + x_1x_2\bar{x}_3$$

The combining property 14a allows us to replace two minterms that differ in the value of only one variable with a single product term that does not include that variable at all. For example, both m_0 and m_2 include \bar{x}_1 and \bar{x}_3 , but they differ in the value of x_2 because m_0 includes \bar{x}_2 while m_2 includes x_2 . Thus

$$\begin{aligned} \bar{x}_1\bar{x}_2\bar{x}_3 + \bar{x}_1x_2\bar{x}_3 &= \bar{x}_1(\bar{x}_2 + x_2)\bar{x}_3 \\ &= \bar{x}_1 \cdot 1 \cdot \bar{x}_3 \\ &= \bar{x}_1\bar{x}_3 \end{aligned}$$

Row number	x_1	x_2	x_3	f
0	0	0	0	1
1	0	0	1	0
2	0	1	0	1
3	0	1	1	0
4	1	0	0	1
5	1	0	1	1
6	1	1	0	1
7	1	1	1	0

Figure 4.1 The function $f(x_1, x_2, x_3) = \sum m(0, 2, 4, 5, 6)$.

Hence m_0 and m_2 can be replaced by the single product term $\bar{x}_1\bar{x}_3$. Similarly, m_4 and m_6 differ only in the value of x_2 and can be combined using

$$\begin{aligned} x_1\bar{x}_2\bar{x}_3 + x_1x_2\bar{x}_3 &= x_1(\bar{x}_2 + x_2)\bar{x}_3 \\ &= x_1 \cdot 1 \cdot \bar{x}_3 \\ &= x_1\bar{x}_3 \end{aligned}$$

Now the two newly generated terms, $\bar{x}_1\bar{x}_3$ and $x_1\bar{x}_3$, can be combined further as

$$\begin{aligned} \bar{x}_1\bar{x}_3 + x_1\bar{x}_3 &= (\bar{x}_1 + x_1)\bar{x}_3 \\ &= 1 \cdot \bar{x}_3 \\ &= \bar{x}_3 \end{aligned}$$

These optimization steps indicate that we can replace the four minterms m_0 , m_2 , m_4 , and m_6 with the single product term \bar{x}_3 . In other words, the minterms m_0 , m_2 , m_4 , and m_6 are all *included* in the term \bar{x}_3 . The remaining minterm in f is m_5 . It can be combined with m_4 , which gives

$$x_1\bar{x}_2\bar{x}_3 + x_1\bar{x}_2x_3 = x_1\bar{x}_2$$

Recall that theorem 7b in section 2.5 indicates that

$$m_4 = m_4 + m_4$$

which means that we can use the minterm m_4 twice—to combine with minterms m_0 , m_2 , and m_6 to yield the term \bar{x}_3 as explained above and also to combine with m_5 to yield the term $x_1\bar{x}_2$.

We have now accounted for all the minterms in f ; hence all five input valuations for which $f = 1$ are covered by the minimum-cost expression

$$f = \bar{x}_3 + x_1\bar{x}_2$$

The expression has the product term \bar{x}_3 because $f = 1$ when $x_3 = 0$ regardless of the values of x_1 and x_2 . The four minterms m_0 , m_2 , m_4 , and m_6 represent all possible minterms for which $x_3 = 0$; they include all four valuations, 00, 01, 10, and 11, of variables x_1 and x_2 . Thus if $x_3 = 0$, then it is guaranteed that $f = 1$. This may not be easy to see directly from the truth table in Figure 4.1, but it is obvious if we write the corresponding valuations grouped together:

	x_1	x_2	x_3
m_0	0	0	0
m_2	0	1	0
m_4	1	0	0
m_6	1	1	0

In a similar way, if we look at m_4 and m_5 as a group of two

	x_1	x_2	x_3
m_4	1	0	0
m_5	1	0	1

it is clear that when $x_1 = 1$ and $x_2 = 0$, then $f = 1$ regardless of the value of x_3 .

The preceding discussion suggests that it would be advantageous to devise a method that allows easy discovery of groups of minterms for which $f = 1$ that can be combined into single terms. The Karnaugh map is a useful vehicle for this purpose.

The *Karnaugh map* [1] is an alternative to the truth-table form for representing a function. The map consists of *cells* that correspond to the rows of the truth table. Consider the two-variable example in Figure 4.2. Part (a) depicts the truth-table form, where each of the four rows is identified by a minterm. Part (b) shows the Karnaugh map, which has four cells. The columns of the map are labeled by the value of x_1 , and the rows are labeled by x_2 . This labeling leads to the locations of minterms as shown in the figure. Compared to the truth table, the advantage of the Karnaugh map is that it allows easy recognition of minterms that can be combined using property 14a from section 2.5. Minterms in any two cells that are adjacent, either in the same row or the same column, can be combined. For example, the minterms m_2 and m_3 can be combined as

$$\begin{aligned}
 m_2 + m_3 &= x_1\bar{x}_2 + x_1x_2 \\
 &= x_1(\bar{x}_2 + x_2) \\
 &= x_1 \cdot 1 \\
 &= x_1
 \end{aligned}$$

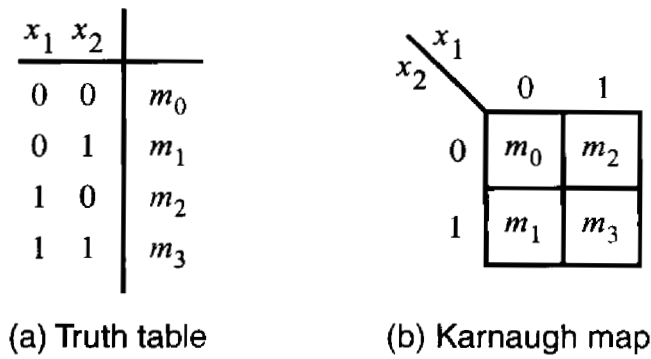


Figure 4.2 Location of two-variable minterms.

The Karnaugh map is not just useful for combining pairs of minterms. As we will see in several larger examples, the Karnaugh map can be used directly to derive a minimum-cost circuit for a logic function.

Two-Variable Map

A Karnaugh map for a two-variable function is given in Figure 4.3. It corresponds to the function f of Figure 2.15. The value of f for each valuation of the variables x_1 and x_2 is indicated in the corresponding cell of the map. Because a 1 appears in both cells of the bottom row and these cells are adjacent, there exists a single product term that can cause f to be equal to 1 when the input variables have the values that correspond to either of these cells. To indicate this fact, we have circled the cell entries in the map. Rather than using the combining property formally, we can derive the product term intuitively. Both of the cells are identified by $x_2 = 1$, but $x_1 = 0$ for the left cell and $x_1 = 1$ for the right cell. Thus if $x_2 = 1$, then $f = 1$ regardless of whether x_1 is equal to 0 or 1. The product term representing the two cells is simply x_2 .

Similarly, $f = 1$ for both cells in the first column. These cells are identified by $x_1 = 0$. Therefore, they lead to the product term \bar{x}_1 . Since this takes care of all instances where $f = 1$, it follows that the minimum-cost realization of the function is

$$f = x_2 + \bar{x}_1$$

Evidently, to find a minimum-cost implementation of a given function, it is necessary to find the smallest number of product terms that produce a value of 1 for all cases where

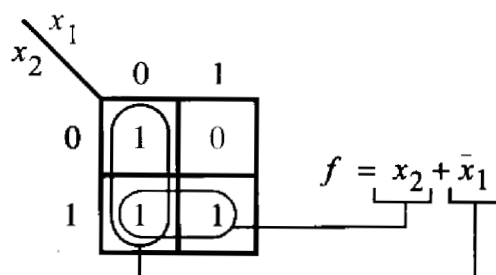


Figure 4.3 The function of Figure 2.15.

$f = 1$. Moreover, the cost of these product terms should be as low as possible. Note that a product term that covers two adjacent cells is cheaper to implement than a term that covers only a single cell. For our example once the two cells in the bottom row have been covered by the product term x_2 , only one cell (top left) remains. Although it could be covered by the term $\bar{x}_1\bar{x}_2$, it is better to combine the two cells in the left column to produce the product term \bar{x}_1 because this term is cheaper to implement.

Three-Variable Map

A three-variable Karnaugh map is constructed by placing 2 two-variable maps side by side. Figure 4.4 shows the map and indicates the locations of minterms in it. In this case each valuation of x_1 and x_2 identifies a column in the map, while the value of x_3 distinguishes the two rows. To ensure that minterms in the adjacent cells in the map can always be combined into a single product term, the adjacent cells must differ in the value of only one variable. Thus the columns are identified by the sequence of (x_1, x_2) values of 00, 01, 11, and 10, rather than the more obvious 00, 01, 10, and 11. This makes the second and third columns different only in variable x_1 . Also, the first and the fourth columns differ only in variable x_1 , which means that these columns can be considered as being adjacent. The reader may find it useful to visualize the map as a rectangle folded into a cylinder where the left and the right edges in Figure 4.4b are made to touch. (A sequence of codes, or valuations, where consecutive codes differ in one variable only is known as the *Gray code*. This code is used for a variety of purposes, some of which will be encountered later in the book.)

Figure 4.5a represents the function of Figure 2.18 in Karnaugh-map form. To synthesize this function, it is necessary to cover the four 1s in the map as efficiently as possible. It is not difficult to see that two product terms suffice. The first covers the 1s in the top row, which are represented by the term $x_1\bar{x}_3$. The second term is \bar{x}_2x_3 , which covers the 1s in the bottom row. Hence the function is implemented as

$$f = x_1\bar{x}_3 + \bar{x}_2x_3$$

which describes the circuit obtained in Figure 2.19a.

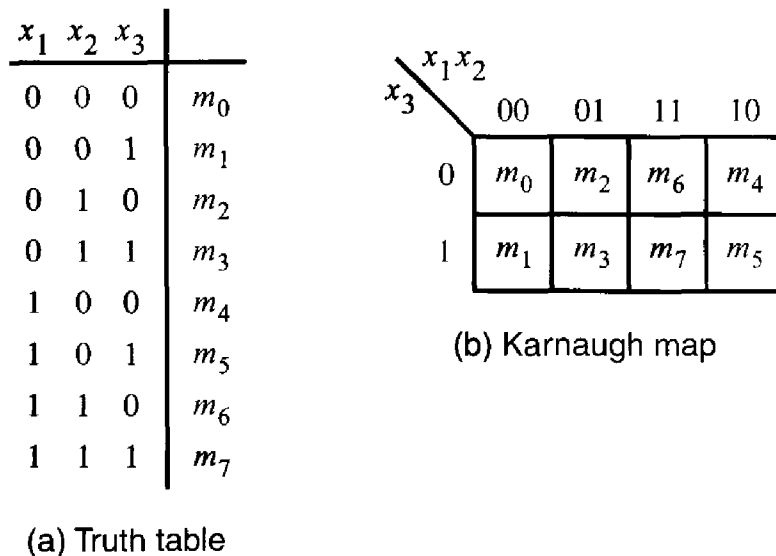
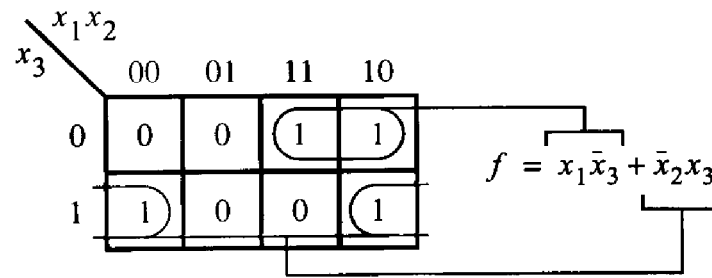
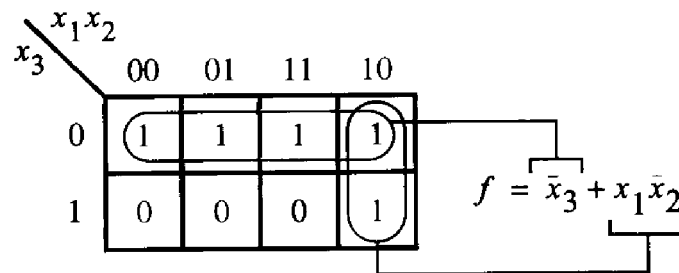


Figure 4.4 Location of three-variable minterms.



(a) The function of Figure 2.18



(b) The function of Figure 4.1

Figure 4.5 Examples of three-variable Karnaugh maps.

In a three-variable map it is possible to combine cells to produce product terms that correspond to a single cell, two adjacent cells, or a group of four adjacent cells. Realization of a group of four adjacent cells using a single product term is illustrated in Figure 4.5b, using the function from Figure 4.1. The four cells in the top row correspond to the (x_1, x_2, x_3) valuations 000, 010, 110, and 100. As we discussed before, this indicates that if $x_3 = 0$, then $f = 1$ for all four possible valuations of x_1 and x_2 , which means that the only requirement is that $x_3 = 0$. Therefore, the product term \bar{x}_3 represents these four cells. The remaining 1, corresponding to minterm m_5 , is best covered by the term $x_1 \bar{x}_2$, obtained by combining the two cells in the right-most column. The complete realization of f is

$$f = \bar{x}_3 + x_1 \bar{x}_2$$

It is also possible to have a group of eight 1s in a three-variable map. This is the trivial case where $f = 1$ for all valuations of input variables; in other words, f is equal to the constant 1.

The Karnaugh map provides a simple mechanism for generating the product terms that should be used to implement a given function. A product term must include only those variables that have the same value for all cells in the group represented by this term. If the variable is equal to 1 in the group, it appears uncomplemented in the product term; if it is equal to 0, it appears complemented. Each variable that is sometimes 1 and sometimes 0 in the group does not appear in the product term.

Four-Variable Map

A four-variable map is constructed by placing 2 three-variable maps together to create four rows in the same fashion as we used 2 two-variable maps to form the four columns in a three-variable map. Figure 4.6 shows the structure of the four-variable map and the location

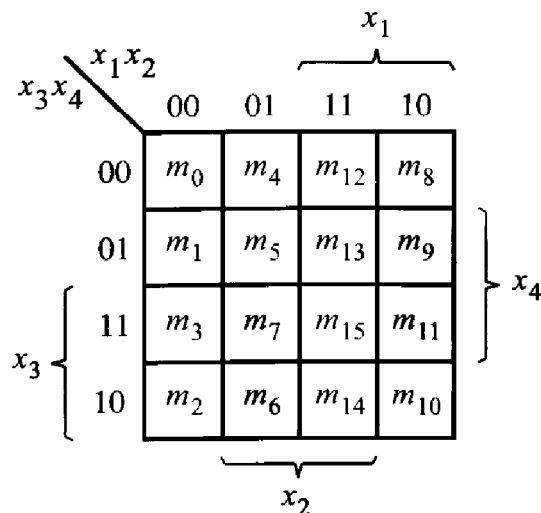


Figure 4.6 A four-variable Karnaugh map.

of minterms. We have included in this figure another frequently used way of designating the rows and columns. As shown in blue, it is sufficient to indicate the rows and columns for which a given variable is equal to 1. Thus $x_1 = 1$ for the two right-most columns, $x_2 = 1$ for the two middle columns, $x_3 = 1$ for the bottom two rows, and $x_4 = 1$ for the two middle rows.

Figure 4.7 gives four examples of four-variable functions. The function f_1 has a group of four 1s in adjacent cells in the bottom two rows, for which $x_2 = 0$ and $x_3 = 1$ —they are represented by the product term \bar{x}_2x_3 . This leaves the two 1s in the second row to be covered, which can be accomplished with the term $x_1\bar{x}_3x_4$. Hence the minimum-cost implementation of the function is

$$f_1 = \bar{x}_2x_3 + x_1\bar{x}_3x_4$$

The function f_2 includes a group of eight 1s that can be implemented by a single term, x_3 . Again, the reader should note that if the remaining two 1s were implemented separately, the result would be the product term $x_1\bar{x}_3x_4$. Implementing these 1s as a part of a group of four 1s, as shown in the figure, gives the less expensive product term x_1x_4 .

Just as the left and the right edges of the map are adjacent in terms of the assignment of the variables, so are the top and the bottom edges. Indeed, the four corners of the map are adjacent to each other and thus can form a group of four 1s, which may be implemented by the product term $\bar{x}_2\bar{x}_4$. This case is depicted by the function f_3 . In addition to this group of 1s, there are four other 1s that must be covered to implement f_3 . This can be done as shown in the figure.

In all examples that we have considered so far, a unique solution exists that leads to a minimum-cost circuit. The function f_4 provides an example where there is some choice. The groups of four 1s in the top-left and bottom-right corners of the map are realized by the terms $\bar{x}_1\bar{x}_3$ and x_1x_3 , respectively. This leaves the two 1s that correspond to the term $x_1x_2\bar{x}_3$. But these two 1s can be realized more economically by treating them as a part of a group of four 1s. They can be included in two different groups of four, as shown in the figure.

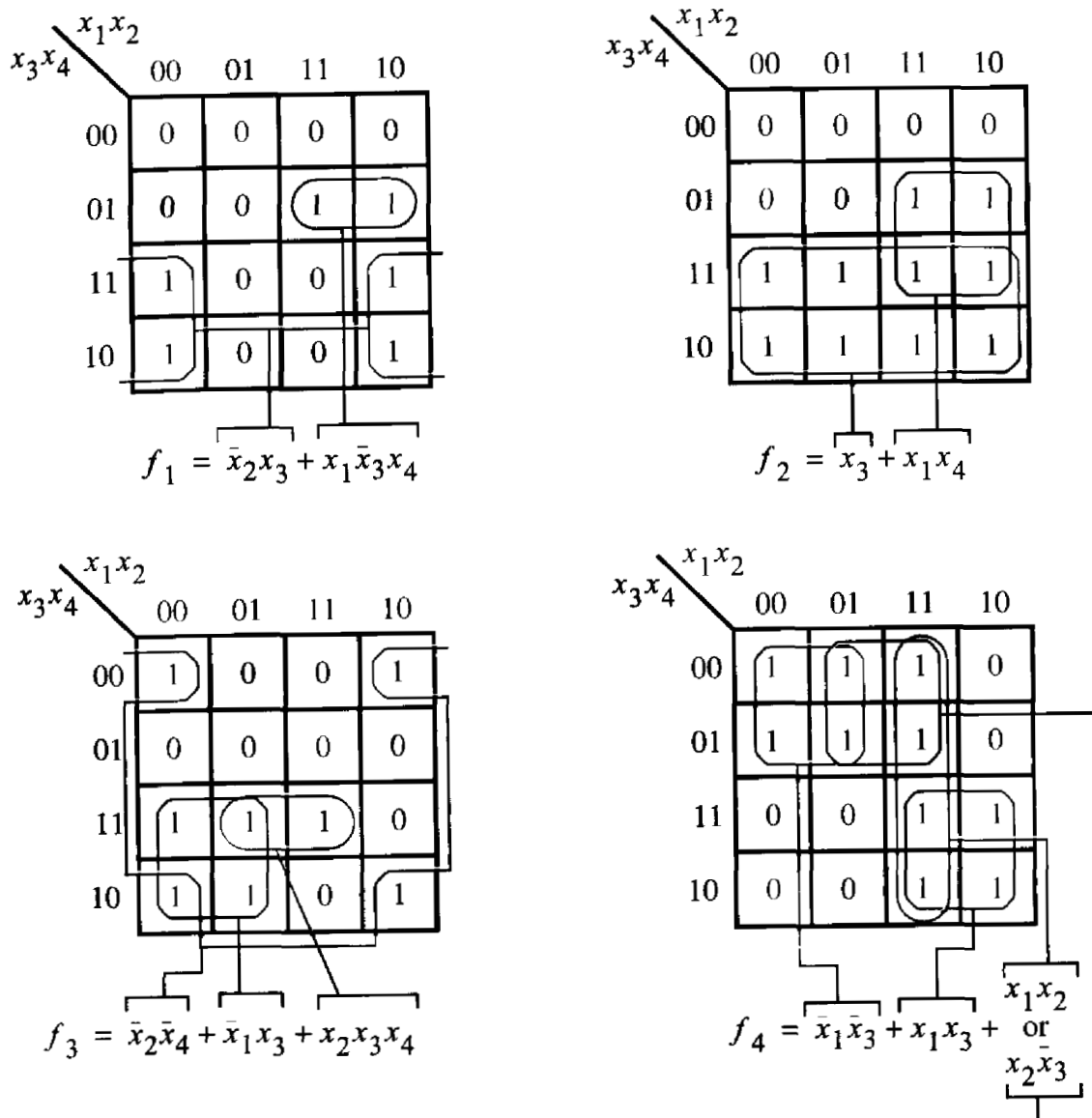


Figure 4.7 Examples of four-variable Karnaugh maps.

One choice leads to the product term x_1x_2 , and the other leads to $x_2\bar{x}_3$. Both of these terms have the same cost; hence it does not matter which one is chosen in the final circuit. Note that the complement of x_3 in the term $x_2\bar{x}_3$ does not imply an increased cost in comparison with x_1x_2 , because this complement must be generated anyway to produce the term $\bar{x}_1\bar{x}_3$, which is included in the implementation.

Five-Variable Map

We can use 2 four-variable maps to construct a five-variable map. It is easy to imagine a structure where one map is directly behind the other, and they are distinguished by $x_5 = 0$ for one map and $x_5 = 1$ for the other map. Since such a structure is awkward to draw, we can simply place the two maps side by side as shown in Figure 4.8. For the logic function given in this example, two groups of four 1s appear in the same place in both four-variable maps; hence their realization does not depend on the value of x_5 . The same is true for the two groups of two 1s in the second row. The 1 in the top-right corner appears only in the

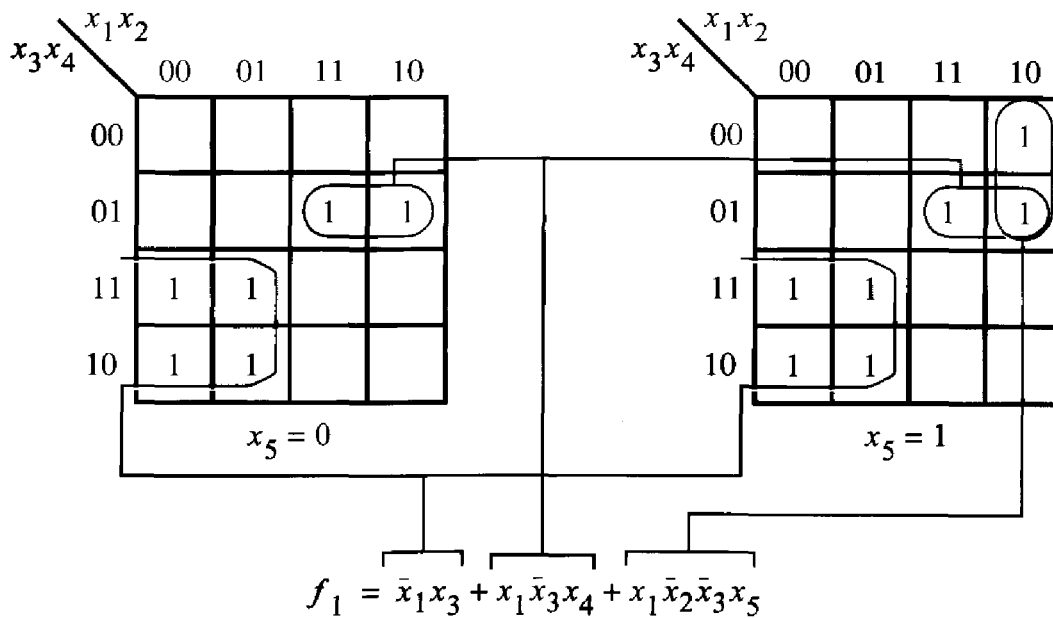


Figure 4.8 A five-variable Karnaugh map.

right map, where $x_5 = 1$; it is a part of the group of two 1s realized by the term $x_1\bar{x}_2\bar{x}_3x_5$. Note that in this map we left blank those cells for which $f = 0$, to make the figure more readable. We will do likewise in a number of maps that follow.

Using a five-variable map is obviously more awkward than using maps with fewer variables. Extending the Karnaugh map concept to more variables is not useful from the practical point of view. This is not troublesome, because practical synthesis of logic functions is done with CAD tools that perform the necessary minimization automatically. Although Karnaugh maps are occasionally useful for designing small logic circuits, our main reason for introducing the Karnaugh maps is to provide a simple vehicle for illustrating the ideas involved in the minimization process.

4.2 STRATEGY FOR MINIMIZATION

For the examples in the preceding section, we used an intuitive approach to decide how the 1s in a Karnaugh map should be grouped together to obtain the minimum-cost implementation of a given function. Our intuitive strategy was to find as few as possible and as large as possible groups of 1s that cover all cases where the function has a value of 1. Each group of 1s has to comprise cells that can be represented by a single product term. The larger the group of 1s, the fewer the number of variables in the corresponding product term. This approach worked well because the Karnaugh maps in our examples were small. For larger logic functions, which have many variables, such intuitive approach is unsuitable. Instead, we must have an organized method for deriving a minimum-cost implementation. In this section we will introduce a possible method, which is similar to the techniques that are

automated in CAD tools. To illustrate the main ideas, we will use Karnaugh maps. Later, in section 4.8, we will describe a different way of representing logic functions, which is used in CAD tools.

4.2.1 TERMINOLOGY

A huge amount of research work has gone into the development of techniques for synthesis of logic functions. The results of this research have been published in numerous papers. To facilitate the presentation of the results, certain terminology has evolved that avoids the need for using highly descriptive phrases. We define some of this terminology in the following paragraphs because it is useful for describing the minimization process.

Literal

A given product term consists of some number of variables, each of which may appear either in uncomplemented or complemented form. Each appearance of a variable, either uncomplemented or complemented, is called a *literal*. For example, the product term $x_1\bar{x}_2x_3$ has three literals, and the term $\bar{x}_1x_3\bar{x}_4x_6$ has four literals.

Implicant

A product term that indicates the input valuation(s) for which a given function is equal to 1 is called an *implicant* of the function. The most basic implicants are the minterms, which we introduced in section 2.6.1. For an n -variable function, a minterm is an implicant that consists of n literals.

Consider the three-variable function in Figure 4.9. There are 11 possible implicants for this function. This includes the five minterms: $\bar{x}_1\bar{x}_2\bar{x}_3$, $\bar{x}_1\bar{x}_2x_3$, $\bar{x}_1x_2\bar{x}_3$, $\bar{x}_1x_2x_3$, and $x_1x_2x_3$. Then there are the implicants that correspond to all possible pairs of minterms that can be combined, namely, $\bar{x}_1\bar{x}_2$ (m_0 and m_1), $\bar{x}_1\bar{x}_3$ (m_0 and m_2), \bar{x}_1x_3 (m_1 and m_3), \bar{x}_1x_2 (m_2 and m_3), and x_2x_3 (m_3 and m_7). Finally, there is one implicant that covers a group of four minterms, which consists of a single literal \bar{x}_1 .

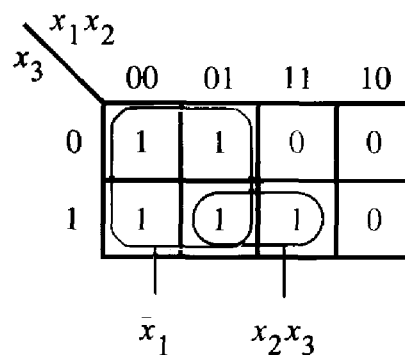


Figure 4.9 Three-variable function $f(x_1, x_2, x_3) = \sum m(0, 1, 2, 3, 7)$.

Prime Implicant

An implicant is called a *prime implicant* if it cannot be combined into another implicant that has fewer literals. Another way of stating this definition is to say that it is impossible to delete any literal in a prime implicant and still have a valid implicant.

In Figure 4.9 there are two prime implicants: \bar{x}_1 and x_2x_3 . It is not possible to delete a literal in either of them. Doing so for \bar{x}_1 would make it disappear. For x_2x_3 , deleting a literal would leave either x_2 or x_3 . But x_2 is not an implicant because it includes the valuation $(x_1, x_2, x_3) = 110$ for which $f = 0$, and x_3 is not an implicant because it includes $(x_1, x_2, x_3) = 101$ for which $f = 0$.

Cover

A collection of implicants that account for all valuations for which a given function is equal to 1 is called a *cover* of that function. A number of different covers exist for most functions. Obviously, a set of all minterms for which $f = 1$ is a cover. It is also apparent that a set of all prime implicants is a cover.

A cover defines a particular implementation of the function. In Figure 4.9 a cover consisting of minterms leads to the expression

$$f = \bar{x}_1\bar{x}_2\bar{x}_3 + \bar{x}_1\bar{x}_2x_3 + \bar{x}_1x_2\bar{x}_3 + \bar{x}_1x_2x_3 + x_1x_2x_3$$

Another valid cover is given by the expression

$$f = \bar{x}_1\bar{x}_2 + \bar{x}_1x_2 + x_2x_3$$

The cover comprising the prime implicants is

$$f = \bar{x}_1 + x_2x_3$$

While all of these expressions represent the function f correctly, the cover consisting of prime implicants leads to the lowest-cost implementation.

Cost

In Chapter 2 we suggested that a good indication of the cost of a logic circuit is the number of gates plus the total number of inputs to all gates in the circuit. We will use this definition of cost throughout the book. But we will assume that primary inputs, namely, the input variables, are available in both true and complemented forms at zero cost. Thus the expression

$$f = x_1\bar{x}_2 + x_3\bar{x}_4$$

has a cost of nine because it can be implemented using two AND gates and one OR gate, with six inputs to the AND and OR gates.

If an inversion is needed inside a circuit, then the corresponding NOT gate and its input are included in the cost. For example, the expression

$$g = \overline{x_1\bar{x}_2 + x_3}(\bar{x}_4 + x_5)$$

is implemented using two AND gates, two OR gates, and one NOT gate to complement $(x_1\bar{x}_2 + x_3)$, with nine inputs. Hence the total cost is 14.

4.2.2 MINIMIZATION PROCEDURE

We have seen that it is possible to implement a given logic function with various circuits. These circuits may have different structures and different costs. When designing a logic circuit, there are usually certain criteria that must be met. One such criterion is likely to be the cost of the circuit, which we considered in the previous discussion. In general, the larger the circuit, the more important the cost issue becomes. In this section we will assume that the main objective is to obtain a minimum-cost circuit.

Having said that cost is the primary concern, we should note that other optimization criteria may be more appropriate in some cases. For instance, in Chapter 3 we described several types of programmable-logic devices (PLDs) that have a predefined basic structure and can be programmed to realize a variety of different circuits. For such devices the main objective is to design a particular circuit so that it will fit into the target device. Whether or not this circuit has the minimum cost is not important if it can be realized successfully on the device. A CAD tool intended for design with a specific device in mind will automatically perform optimizations that are suitable for that device. We will show in section 4.6 that the way in which a circuit should be optimized may be different for different types of devices.

In the previous subsection we concluded that the lowest-cost implementation is achieved when the cover of a given function consists of prime implicants. The question then is how to determine the minimum-cost subset of prime implicants that will cover the function. Some prime implicants may have to be included in the cover, while for others there may be a choice. If a prime implicant includes a minterm for which $f = 1$ that is not included in any other prime implicant, then it must be included in the cover and is called an *essential prime implicant*. In the example in Figure 4.9, both prime implicants are essential. The term x_2x_3 is the only prime implicant that covers the minterm m_7 , and \bar{x}_1 is the only one that covers the minterms m_0 , m_1 , and m_2 . Notice that the minterm m_3 is covered by both of these prime implicants. The minimum-cost realization of the function is

$$f = \bar{x}_1 + x_2x_3$$

We will now present several examples in which there is a choice as to which prime implicants to include in the final cover. Consider the four-variable function in Figure 4.10. There are five prime implicants: \bar{x}_1x_3 , \bar{x}_2x_3 , $x_3\bar{x}_4$, $\bar{x}_1x_2x_4$, and $x_2\bar{x}_3x_4$. The essential ones (highlighted in blue) are \bar{x}_2x_3 (because of m_{11}), $x_3\bar{x}_4$ (because of m_{14}), and $x_2\bar{x}_3x_4$ (because of m_{13}). They must be included in the cover. These three prime implicants cover all minterms for which $f = 1$ except m_7 . It is clear that m_7 can be covered by either \bar{x}_1x_3 or $\bar{x}_1x_2x_4$. Because \bar{x}_1x_3 has a lower cost, it is chosen for the cover. Therefore, the minimum-cost realization is

$$f = \bar{x}_2x_3 + x_3\bar{x}_4 + x_2\bar{x}_3x_4 + \bar{x}_1x_3$$

From the preceding discussion, the process of finding a minimum-cost circuit involves the following steps:

1. Generate all prime implicants for the given function f .
2. Find the set of essential prime implicants.

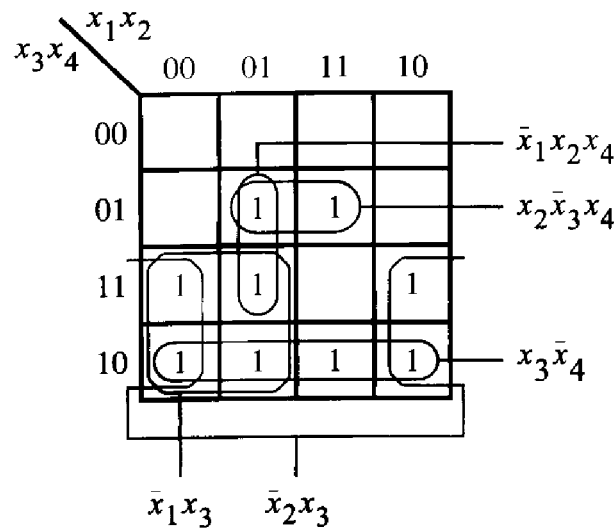


Figure 4.10 Four-variable function $f(x_1, \dots, x_4) = \sum m(2, 3, 5, 6, 7, 10, 11, 13, 14)$.

- If the set of essential prime implicants covers all valuations for which $f = 1$, then this set is the desired cover of f . Otherwise, determine the nonessential prime implicants that should be added to form a complete minimum-cost cover.

The choice of nonessential prime implicants to be included in the cover is governed by the cost considerations. This choice is often not obvious. Indeed, for large functions there may exist many possibilities, and some *heuristic* approach (i.e., an approach that considers only a subset of possibilities but gives good results most of the time) has to be used. One such approach is to arbitrarily select one nonessential prime implicant and include it in the cover and then determine the rest of the cover. Next, another cover is determined assuming that this prime implicant is not in the cover. The costs of the resulting covers are compared, and the less-expensive cover is chosen for implementation.

We can illustrate the process by using the function in Figure 4.11. Of the six prime implicants, only $\bar{x}_3\bar{x}_4$ is essential. Consider next $x_1x_2\bar{x}_3$ and assume first that it will be

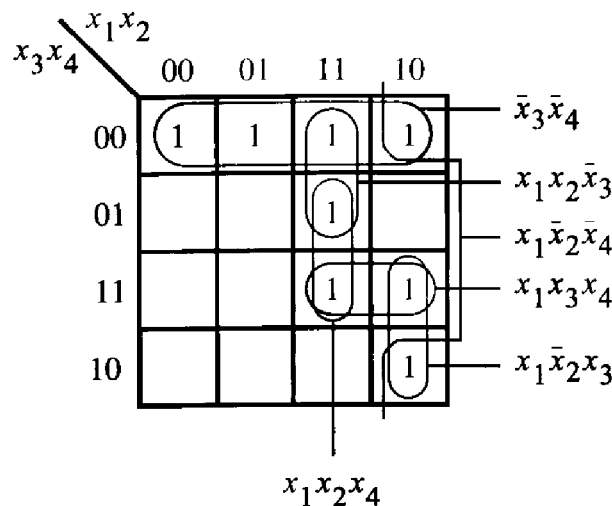


Figure 4.11 The function $f(x_1, \dots, x_4) = \sum m(0, 4, 8, 10, 11, 12, 13, 15)$.

included in the cover. Then the remaining three minterms, m_{10} , m_{11} , and m_{15} , will require two more prime implicants to be included in the cover. A possible implementation is

$$f = \bar{x}_3\bar{x}_4 + x_1x_2\bar{x}_3 + x_1x_3x_4 + x_1\bar{x}_2x_3$$

The second possibility is that $x_1x_2\bar{x}_3$ is not included in the cover. Then $x_1x_2x_4$ becomes essential because there is no other way of covering m_{13} . Because $x_1x_2x_4$ also covers m_{15} , only m_{10} and m_{11} remain to be covered, which can be achieved with $x_1\bar{x}_2x_3$. Therefore, the alternative implementation is

$$f = \bar{x}_3\bar{x}_4 + x_1x_2x_4 + x_1\bar{x}_2x_3$$

Clearly, this implementation is a better choice.

Sometimes there may not be any essential prime implicants at all. An example is given in Figure 4.12. Choosing any of the prime implicants and first including it, then excluding it from the cover leads to two alternatives of equal cost. One includes the prime implicants indicated in black, which yields

$$f = \bar{x}_1\bar{x}_3\bar{x}_4 + x_2\bar{x}_3x_4 + x_1x_3x_4 + \bar{x}_2x_3\bar{x}_4$$

The other includes the prime implicants indicated in blue, which yields

$$f = \bar{x}_1\bar{x}_2\bar{x}_4 + \bar{x}_1x_2\bar{x}_3 + x_1x_2x_4 + x_1\bar{x}_2x_3$$

This procedure can be used to find minimum-cost implementations of both small and large logic functions. For our small examples it was convenient to use Karnaugh maps to determine the prime implicants of a function and then choose the final cover. Other techniques based on the same principles are much more suitable for use in CAD tools; we will introduce such techniques in sections 4.9 and 4.10.

The previous examples have been based on the sum-of-products form. We will next illustrate that the same concepts apply for the product-of-sums form.

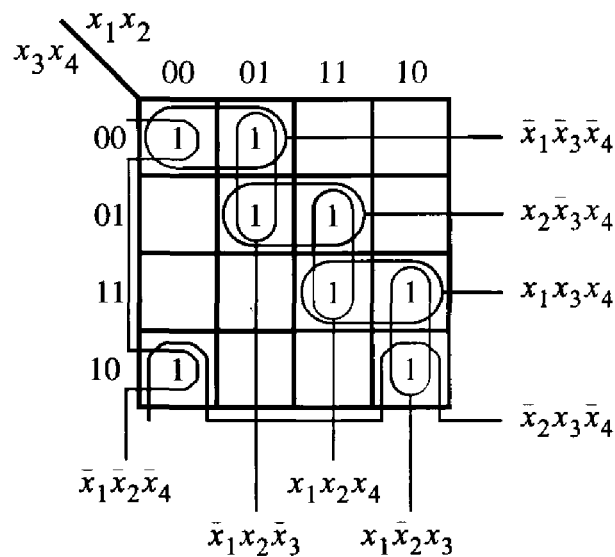


Figure 4.12 The function $f(x_1, \dots, x_4) = \sum m(0, 2, 4, 5, 10, 11, 13, 15)$.

4.3 MINIMIZATION OF PRODUCT-OF-SUMS FORMS

Now that we know how to find the minimum-cost sum-of-products (SOP) implementations of functions, we can use the same techniques and the principle of duality to obtain minimum-cost product-of-sums (POS) implementations. In this case it is the maxterms for which $f = 0$ that have to be combined into sum terms that are as large as possible. Again, a sum term is considered larger if it covers more maxterms, and the larger the term, the less costly it is to implement.

Figure 4.13 depicts the same function as Figure 4.9 depicts. There are three maxterms that must be covered: M_4 , M_5 , and M_6 . They can be covered by two sum terms shown in the figure, leading to the following implementation:

$$f = (\bar{x}_1 + x_2)(\bar{x}_1 + x_3)$$

A circuit corresponding to this expression has two OR gates and one AND gate, with two inputs for each gate. Its cost is greater than the cost of the equivalent SOP implementation derived in Figure 4.9, which requires only one OR gate and one AND gate.

The function from Figure 4.10 is reproduced in Figure 4.14. The maxterms for which $f = 0$ can be covered as shown, leading to the expression

$$f = (x_2 + x_3)(x_3 + x_4)(\bar{x}_1 + \bar{x}_2 + \bar{x}_3 + \bar{x}_4)$$

This expression represents a circuit with three OR gates and one AND gate. Two of the OR gates have two inputs, and the third has four inputs; the AND gate has three inputs. Assuming that both the complemented and uncomplemented versions of the input variables x_1 to x_4 are available at no extra cost, the cost of this circuit is 15. This compares favorably with the SOP implementation derived from Figure 4.10, which requires five gates and 13 inputs at a total cost of 18.

In general, as we already know from section 2.6.1, the SOP and POS implementations of a given function may or may not entail the same cost. The reader is encouraged to find the POS implementations for the functions in Figures 4.11 and 4.12 and compare the costs with the SOP forms.

We have shown how to obtain minimum-cost POS implementations by finding the largest sum terms that cover all maxterms for which $f = 0$. Another way of obtaining

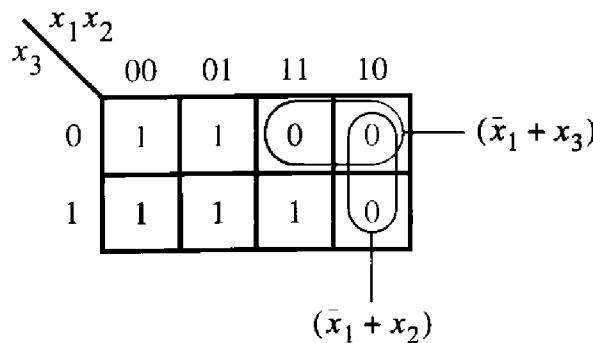


Figure 4.13 POS minimization of $f(x_1, x_2, x_3) = \Pi M(4, 5, 6)$.

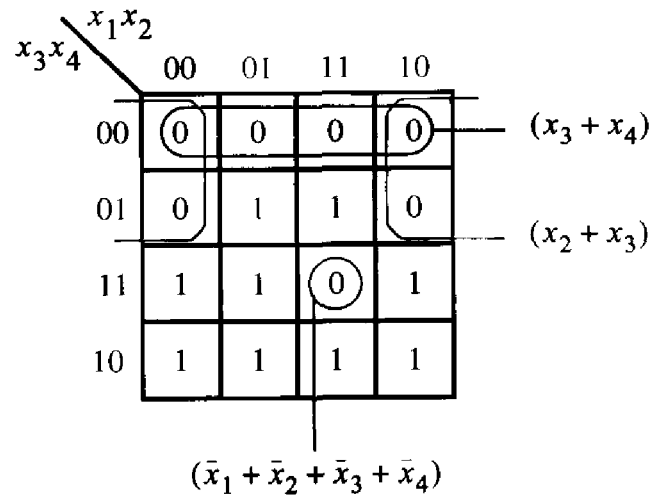


Figure 4.14 POS minimization of $f(x_1, \dots, x_4) = \Pi M(0, 1, 4, 8, 9, 12, 15)$.

the same result is by finding a minimum-cost SOP implementation of the complement of f . Then we can apply DeMorgan's theorem to this expression to obtain the simplest POS realization because $f = \overline{\overline{f}}$. For example, the simplest SOP implementation of \overline{f} in Figure 4.13 is

$$\overline{f} = x_1\bar{x}_2 + x_1\bar{x}_3$$

Complementing this expression using DeMorgan's theorem yields

$$\begin{aligned} f = \overline{\overline{f}} &= \overline{x_1\bar{x}_2 + x_1\bar{x}_3} \\ &= \overline{x_1\bar{x}_2} \cdot \overline{x_1\bar{x}_3} \\ &= (\bar{x}_1 + x_2)(\bar{x}_1 + x_3) \end{aligned}$$

which is the same result as obtained above.

Using this approach for the function in Figure 4.14 gives

$$\overline{f} = \bar{x}_2\bar{x}_3 + \bar{x}_3\bar{x}_4 + x_1x_2x_3x_4$$

Complementing this expression produces

$$\begin{aligned} f = \overline{\overline{f}} &= \overline{\bar{x}_2\bar{x}_3 + \bar{x}_3\bar{x}_4 + x_1x_2x_3x_4} \\ &= \overline{\bar{x}_2\bar{x}_3} \cdot \overline{\bar{x}_3\bar{x}_4} \cdot \overline{x_1x_2x_3x_4} \\ &= (x_2 + x_3)(x_3 + x_4)(\bar{x}_1 + \bar{x}_2 + \bar{x}_3 + \bar{x}_4) \end{aligned}$$

which matches the previously derived implementation.

4.4 INCOMPLETELY SPECIFIED FUNCTIONS

In digital systems it often happens that certain input conditions can never occur. For example, suppose that x_1 and x_2 control two interlocked switches such that both switches cannot be closed at the same time. Thus the only three possible states of the switches are that both switches are open or that one switch is open and the other switch is closed. Namely, the input valuations $(x_1, x_2) = 00, 01,$ and 10 are possible, but 11 is guaranteed not to occur. Then we say that $(x_1, x_2) = 11$ is a *don't-care condition*, meaning that a circuit with x_1 and x_2 as inputs can be designed by ignoring this condition. A function that has don't-care condition(s) is said to be *incompletely specified*.

Don't-care conditions, or *don't-cares* for short, can be used to advantage in the design of logic circuits. Since these input valuations will never occur, the designer may assume that the function value for these valuations is either 1 or 0, whichever is more useful in trying to find a minimum-cost implementation. Figure 4.15 illustrates this idea. The required function has a value of 1 for minterms $m_2, m_4, m_5, m_6,$ and m_{10} . Assuming the above-mentioned interlocked switches, the x_1 and x_2 inputs will never be equal to 1 at the same time; hence the minterms $m_{12}, m_{13}, m_{14},$ and m_{15} can all be used as don't-cares. The don't-

	x_1x_2			
x_3x_4	00	01	11	10
00	0	1	d	0
01	0	1	d	0
11	0	0	d	0
10	1	1	d	1

$x_2\bar{x}_3$

$x_3\bar{x}_4$

(a) SOP implementation

	x_1x_2			
x_3x_4	00	01	11	10
00	0	1	d	0
01	0	1	d	0
11	0	0	d	0
10	1	1	d	1

$(x_2 + x_3)$

$(\bar{x}_3 + \bar{x}_4)$

(b) POS implementation

Figure 4.15 Two implementations of the function $f(x_1, \dots, x_4) = \sum m(2, 4, 5, 6, 10) + D(12, 13, 14, 15)$.

cares are denoted by the letter d in the map. Using the shorthand notation, the function f is specified as

$$f(x_1, \dots, x_4) = \sum m(2, 4, 5, 6, 10) + D(12, 13, 14, 15)$$

where D is the set of don't-cares.

Part (a) of the figure indicates the best sum-of-products implementation. To form the largest possible groups of 1s, thus generating the lowest-cost prime implicants, it is necessary to assume that the don't-cares D_{12} , D_{13} , and D_{14} (corresponding to minterms m_{12} , m_{13} , and m_{14}) have the value of 1 while D_{15} has the value of 0. Then there are only two prime implicants, which provide a complete cover of f . The resulting implementation is

$$f = x_2\bar{x}_3 + x_3\bar{x}_4$$

Part (b) shows how the best product-of-sums implementation can be obtained. The same values are assumed for the don't-cares. The result is

$$f = (x_2 + x_3)(\bar{x}_3 + \bar{x}_4)$$

The freedom in choosing the value of don't-cares leads to greatly simplified realizations. If we were to naively exclude the don't-cares from the synthesis of the function, by assuming that they always have a value of 0, the resulting SOP expression would be

$$f = \bar{x}_1x_2\bar{x}_3 + \bar{x}_1x_3\bar{x}_4 + \bar{x}_2x_3\bar{x}_4$$

and the POS expression would be

$$f = (x_2 + x_3)(\bar{x}_3 + \bar{x}_4)(\bar{x}_1 + \bar{x}_2)$$

Both of these expressions have higher costs than the expressions obtained with a more appropriate assignment of values to don't-cares.

Although don't-care values can be assigned arbitrarily, an arbitrary assignment may not lead to a minimum-cost implementation of a given function. If there are k don't-cares, then there are 2^k possible ways of assigning 0 or 1 values to them. In the Karnaugh map we can usually see how best to do this assignment to find the simplest implementation.

In the example above, we chose the don't-cares D_{12} , D_{13} , and D_{14} to be equal to 1 and D_{15} equal to 0 for both the SOP and POS implementations. Thus the derived expressions represent the same function, which could also be specified as $\sum m(2, 4, 5, 6, 10, 12, 13, 14)$. Assigning the same values to the don't-cares for both SOP and POS implementations is not always a good choice. Sometimes it may be advantageous to give a particular don't-care the value 1 for SOP implementation and the value 0 for POS implementation, or vice versa. In such cases the optimal SOP and POS expressions will represent different functions, but these functions will differ only for the valuations that correspond to these don't-cares. Example 4.24 in section 4.14 illustrates this possibility.

Using interlocked switches to illustrate how don't-care conditions can occur in a real system may seem to be somewhat contrived. However, in Chapters 6, 8, and 9 we will encounter many examples of don't-cares that occur in the course of practical design of digital circuits.

4.5 MULTIPLE-OUTPUT CIRCUITS

In all previous examples we have considered single functions and their circuit implementations. In practical digital systems it is necessary to implement a number of functions as part of some large logic circuit. Circuits that implement these functions can often be combined into a less-expensive single circuit with multiple outputs by sharing some of the gates needed in the implementation of individual functions.

4.1 An example of gate sharing is given in Figure 4.16. Two functions, f_1 and f_2 , of the same variables are to be implemented. The minimum-cost implementations for these functions

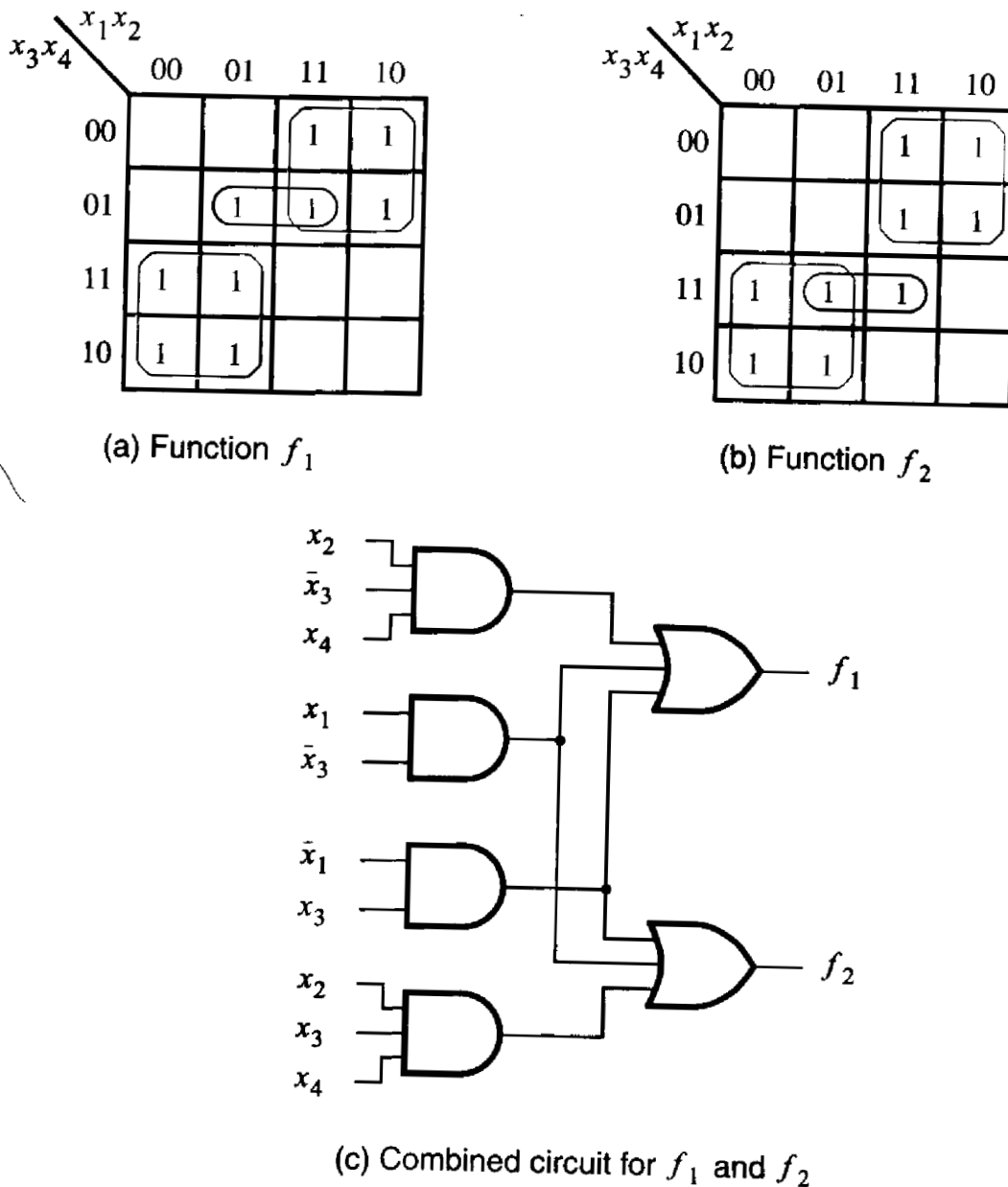


Figure 4.16 An example of multiple-output synthesis.

are obtained as shown in parts (a) and (b) of the figure. This results in the expressions

$$f_1 = x_1\bar{x}_3 + \bar{x}_1x_3 + x_2\bar{x}_3x_4$$

$$f_2 = x_1\bar{x}_3 + \bar{x}_1x_3 + x_2x_3x_4$$

The cost of f_1 is four gates and 10 inputs, for a total of 14. The cost of f_2 is the same. Thus the total cost is 28 if both functions are implemented by separate circuits. A less-expensive realization is possible if the two circuits are combined into a single circuit with two outputs. Because the first two product terms are identical in both expressions, the AND gates that implement them need not be duplicated. The combined circuit is shown in Figure 4.16c. Its cost is six gates and 16 inputs, for a total of 22.

In this example we reduced the overall cost by finding minimum-cost realizations of f_1 and f_2 and then sharing the gates that implement the common product terms. This strategy does not necessarily always work the best, as the next example shows.

Figure 4.17 shows two functions to be implemented by a single circuit. Minimum-cost realizations of the individual functions f_3 and f_4 are obtained from parts (a) and (b) of the figure. E

$$f_3 = \bar{x}_1x_4 + x_2x_4 + \bar{x}_1x_2x_3$$

$$f_4 = x_1x_4 + \bar{x}_2x_4 + \bar{x}_1x_2x_3\bar{x}_4$$

None of the AND gates can be shared, which means that the cost of the combined circuit would be six AND gates, two OR gates, and 21 inputs, for a total of 29.

But several alternative realizations are possible. Instead of deriving the expressions for f_3 and f_4 using only prime implicants, we can look for other implicants that may be shared advantageously in the combined realization of the functions. Figure 4.17c shows the best choice of implicants, which yields the realization

$$f_3 = x_1x_2x_4 + \bar{x}_1x_2x_3\bar{x}_4 + \bar{x}_1x_4$$

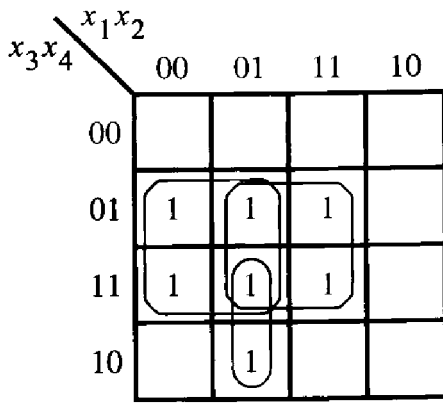
$$f_4 = x_1x_2x_4 + \bar{x}_1x_2x_3\bar{x}_4 + \bar{x}_2x_4$$

The first two implicants are identical in both expressions. The resulting circuit is given in Figure 4.17d. It has the cost of six gates and 17 inputs, for a total of 23.

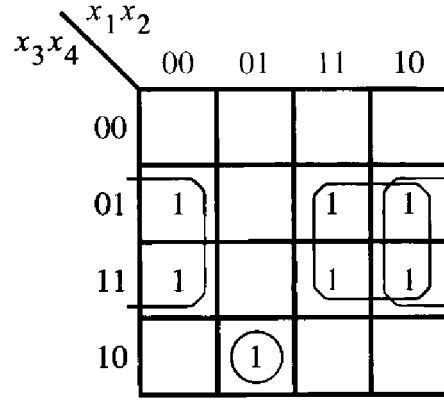
In Example 4.1 we sought the best SOP implementation for the functions f_1 and f_2 in Figure 4.16. We will now consider the POS implementation of the same functions. The minimum-cost POS expressions for f_1 and f_2 are E

$$f_1 = (\bar{x}_1 + \bar{x}_3)(x_1 + x_2 + x_3)(x_1 + x_3 + x_4)$$

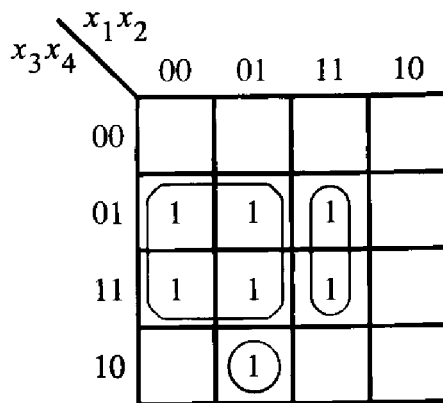
$$f_2 = (x_1 + x_3)(\bar{x}_1 + x_2 + \bar{x}_3)(\bar{x}_1 + \bar{x}_3 + x_4)$$



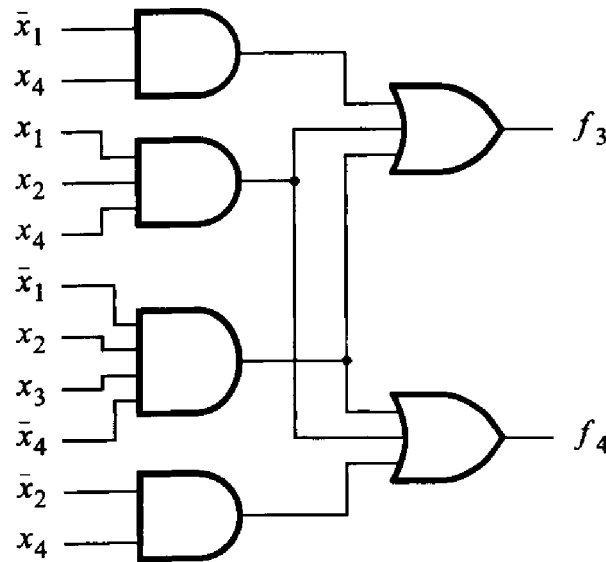
(a) Optimal realization of f_3



(b) Optimal realization of f_4



(c) Optimal realization of f_3 and f_4 together



(d) Combined circuit for f_3 and f_4

Figure 4.17 Another example of multiple-output synthesis.

T
n
n
b
t
i
r

-
C
C

T
C
g
A
g
c

-

o
S
o
t

-
4

I
p
t
e
v
t

t

There are no common sum terms in these expressions that could be shared in the implementation. Moreover, from the Karnaugh maps in Figure 4.16, it is apparent that there is no sum term (covering the cells where $f_1 = f_2 = 0$) that can be profitably used in realizing both f_1 and f_2 . Thus the best choice is to implement each function separately, according to the preceding expressions. Each function requires three OR gates, one AND gate, and 11 inputs. Therefore, the total cost of the circuit that implements both functions is 30. This realization is costlier than the SOP realization derived in Example 4.1.

Consider now the POS realization of the functions f_3 and f_4 in Figure 4.17. The minimum-cost POS expressions for f_3 and f_4 are

$$f_3 = (x_3 + x_4)(x_2 + x_4)(\bar{x}_1 + x_4)(\bar{x}_1 + x_2)$$

$$f_4 = (x_3 + x_4)(x_2 + x_4)(\bar{x}_1 + x_4)(x_1 + \bar{x}_2 + \bar{x}_4)$$

The first three sum terms are the same in both f_3 and f_4 ; they can be shared in a combined circuit. These terms require three OR gates and six inputs. In addition, one 2-input OR gate and one 4-input AND gate are needed for f_3 , and one 3-input OR gate and one 4-input AND gate are needed for f_4 . Thus the combined circuit comprises five OR gates, two AND gates, and 19 inputs, for a total cost of 26. This cost is slightly higher than the cost of the circuit derived in Example 4.2.

These examples show that the complexities of the best SOP or POS implementations of given functions may be quite different. For the functions in Figures 4.16 and 4.17, the SOP form gives better results. But if we are interested in implementing the complements of the four functions in these figures, then the POS form would be less costly.

Sophisticated CAD tools used to synthesize logic functions will automatically perform the types of optimizations illustrated in the preceding examples.

4.6 MULTILEVEL SYNTHESIS

In the preceding sections our objective was to find a minimum-cost sum-of-products or product-of-sums realization of a given logic function. Logic circuits of this type have *two levels* (stages) of gates. In the sum-of-products form, the first level comprises AND gates that are connected to a second-level OR gate. In the product-of-sums form, the first-level OR gates feed the second-level AND gate. We have assumed that both true and complemented versions of the input variables are available so that NOT gates are not needed to complement the variables.

A two-level realization is usually efficient for functions of a few variables. However, as the number of inputs increases, a two-level circuit may result in fan-in problems. Whether

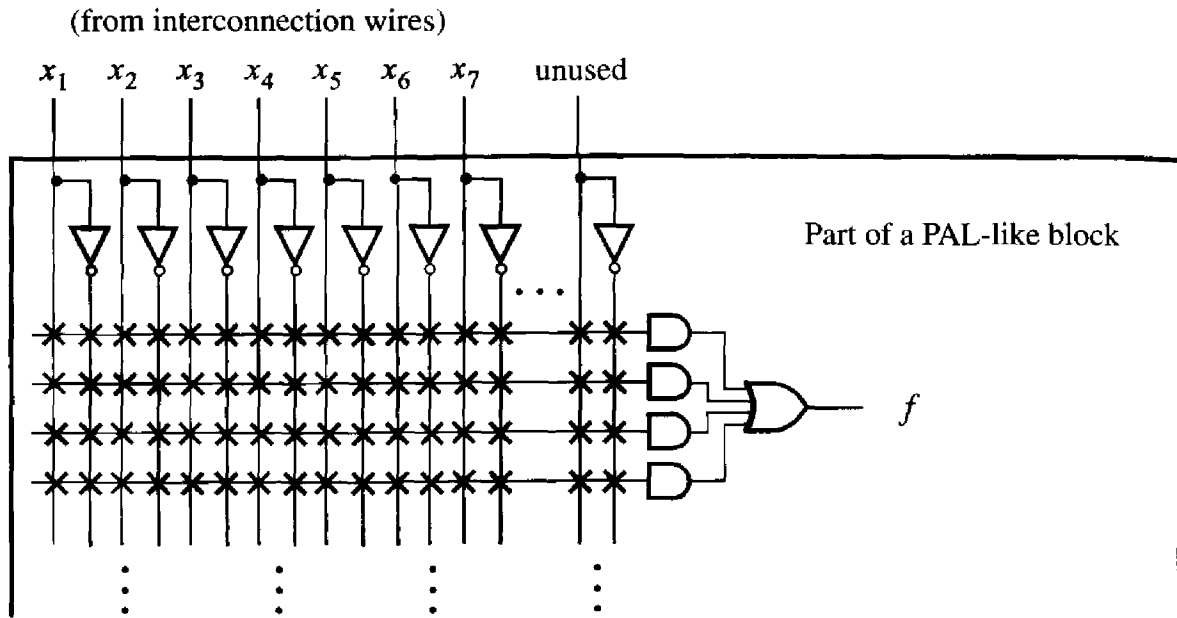


Figure 4.18 Implementation in a CPLD.

or not this is an issue depends on the type of technology that is used to implement the circuit. For example, consider the following function:

$$f(x_1, \dots, x_7) = x_1x_3\bar{x}_6 + x_1x_4x_5\bar{x}_6 + x_2x_3x_7 + x_2x_4x_5x_7$$

This is a minimum-cost SOP expression. Now consider implementing f in two types of PLDs: a CPLD and an FPGA. Figure 4.18 shows a part of one of the PAL-like blocks from Figure 3.33. The figure indicates in blue the circuitry used to realize the function f . Clearly, the SOP form of the function is well suited to the chip architecture of the CPLD.

Next, consider implementing f in an FPGA. For this example we will use the FPGA shown in Figure 3.39, which contains two-input LUTs. Since the SOP expression for f requires three- and four-input AND operations and a four-input OR, it cannot be directly implemented in this FPGA. The problem is that the fan-in required to implement the function is too high for our target chip architecture.

To solve the fan-in problem, f must be expressed in a form that has more than two levels of logic operations. Such a form is called a *multilevel* logic expression. There are several different approaches for synthesis of multilevel circuits. We will discuss two important techniques known as *factoring* and *functional decomposition*.

4.6.1 FACTORING

The distributive property in section 2.5 allows us to factor the preceding expression for f as follows

$$\begin{aligned} f &= x_1\bar{x}_6(x_3 + x_4x_5) + x_2x_7(x_3 + x_4x_5) \\ &= (x_1\bar{x}_6 + x_2x_7)(x_3 + x_4x_5) \end{aligned}$$

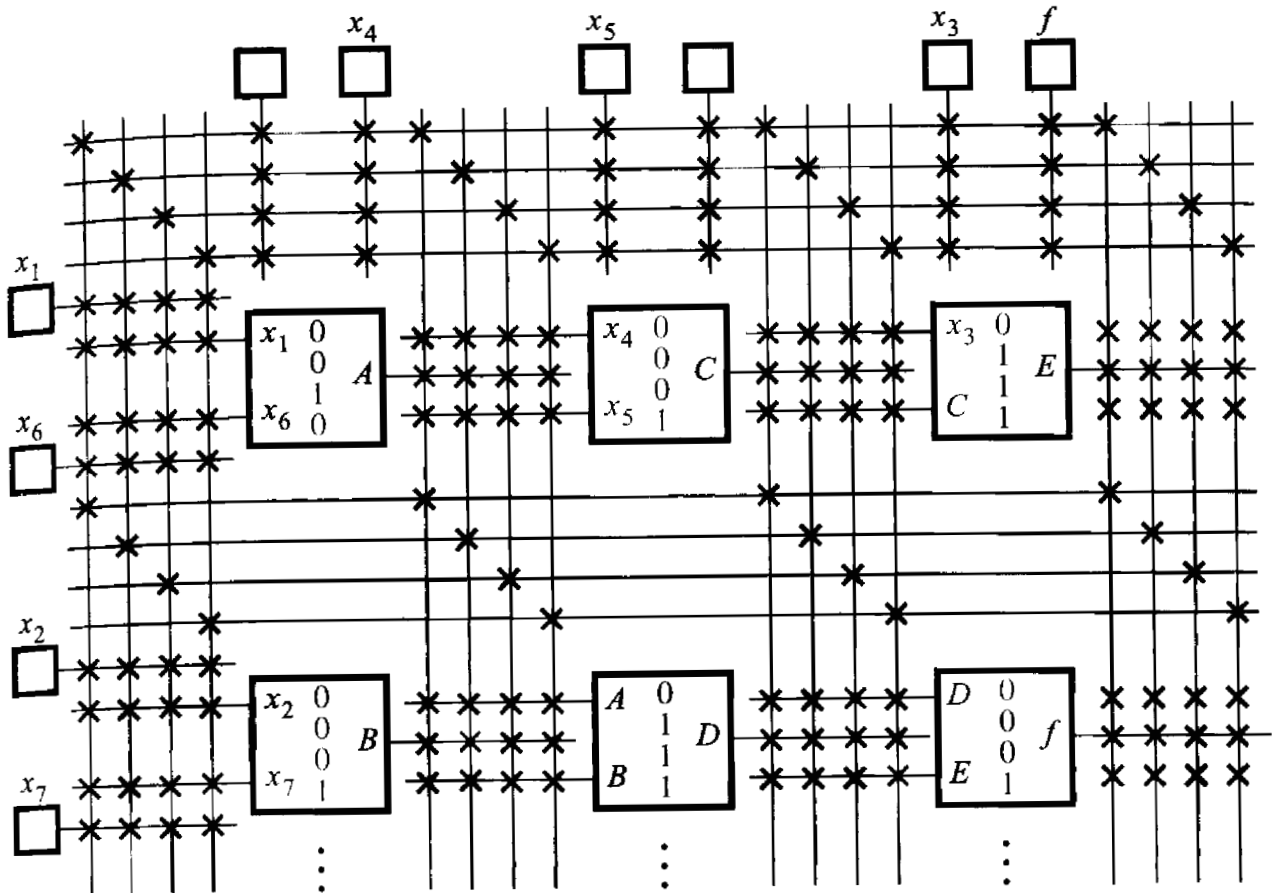


Figure 4.19 Implementation in an FPGA.

The corresponding circuit has a maximum fan-in of two; hence it can be realized using two-input LUTs. Figure 4.19 gives a possible implementation using the FPGA from Figure 3.39. Note that a two-variable function that has to be realized by each LUT is indicated in the box that represents the LUT.

Fan-in Problem

In the preceding example, the fan-in restrictions were caused by the fixed structure of the FPGA, where each LUT has only two inputs. However, even when the target chip architecture is not fixed, the fan-in may still be an issue. To illustrate this situation, let us consider the implementation of a circuit in a custom chip. Recall that custom chips usually contain a large number of gates. If the chip is fabricated using CMOS technology, then there will be fan-in limitations as discussed in section 3.8.8. In this technology the number of inputs to a logic gate should be small. For instance, we may wish to limit the number of inputs to an AND gate to be less than five. Under this restriction, if a logic expression includes a seven-input product term, we would have to use 2 four-input AND gates, as indicated in Figure 4.20.

Factoring can be used to deal with the fan-in problem. Suppose again that the available gates have a maximum fan-in of four and that we want to realize the function

$$f = x_1 \bar{x}_2 x_3 \bar{x}_4 x_5 x_6 + x_1 x_2 \bar{x}_3 \bar{x}_4 \bar{x}_5 x_6$$

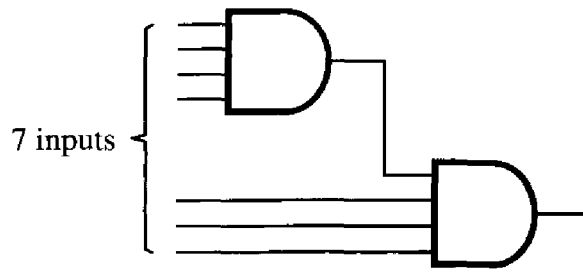


Figure 4.20 Using four-input AND gates to realize a seven-input product term.

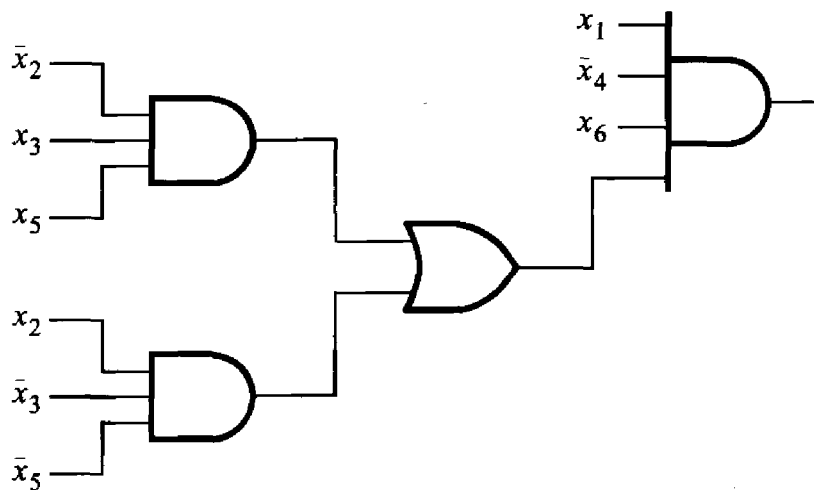


Figure 4.21 A factored circuit.

This is a minimal sum-of-products expression. Using the approach of Figure 4.20, we will need four AND gates and one OR gate to implement this expression. A better solution is to factor the expression as follows

$$f = x_1 \bar{x}_4 x_6 (\bar{x}_2 x_3 x_5 + x_2 \bar{x}_3 \bar{x}_5)$$

Then three AND gates and one OR gate suffice for realization of the required function, as shown in Figure 4.21.

- .5** In practical situations a designer of logic circuits often encounters specifications that naturally lead to an initial design where the logic expressions are in a factored form. Suppose we need a circuit that meets the following requirements. There are four inputs: x_1 , x_2 , x_3 , and x_4 . An output, f_1 , must have the value 1 if at least one of the inputs x_1 and x_2 is equal to 1 and both x_3 and x_4 are equal to 1; it must also be 1 if $x_1 = x_2 = 0$ and either x_3 or x_4 is 1. In all other cases $f_1 = 0$. A different output, f_2 , is to be equal to 1 in all cases except when both x_1 and x_2 are equal to 0 or when both x_3 and x_4 are equal to 0.

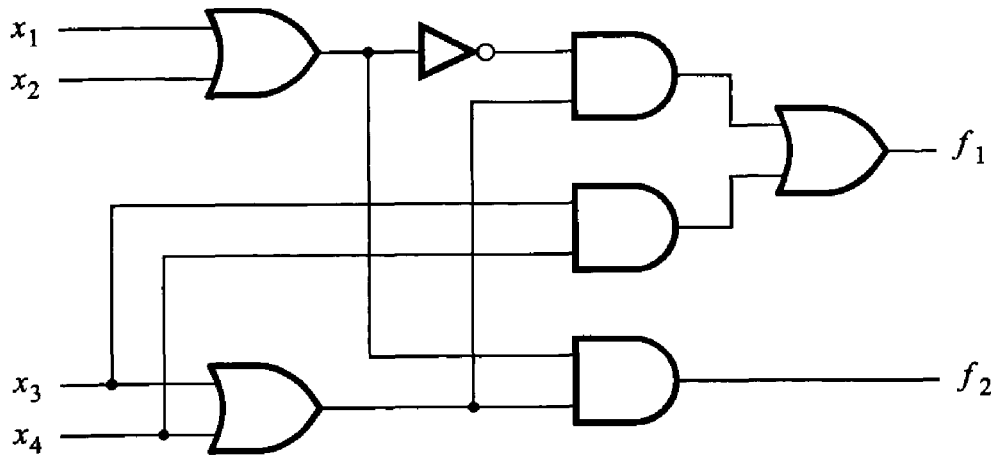


Figure 4.22 Circuit for Example 4.5.

From this specification, the function f_1 can be expressed as

$$f_1 = (x_1 + x_2)x_3x_4 + \bar{x}_1\bar{x}_2(x_3 + x_4)$$

This expression can be simplified to

$$f_1 = x_3x_4 + \bar{x}_1\bar{x}_2(x_3 + x_4)$$

which the reader can verify by using a Karnaugh map.

The second function, f_2 , is most easily defined in terms of its complement, such that

$$\bar{f}_2 = \bar{x}_1\bar{x}_2 + \bar{x}_3\bar{x}_4$$

Then using DeMorgan's theorem gives

$$f_2 = (x_1 + x_2)(x_3 + x_4)$$

which is the minimum-cost expression for f_2 ; the cost increases significantly if the SOP form is used.

Because our objective is to design the lowest-cost combined circuit that implements f_1 and f_2 , it seems that the best result can be achieved if we use the factored forms for both functions, in which case the sum term $(x_3 + x_4)$ can be shared. Moreover, observing that $\bar{x}_1\bar{x}_2 = \overline{x_1 + x_2}$, the sum term $(x_1 + x_2)$ can also be shared if we express f_1 in the form

$$f_1 = x_3x_4 + \overline{x_1 + x_2}(x_3 + x_4)$$

Then the combined circuit, shown in Figure 4.22, comprises three OR gates, three AND gates, one NOT gate, and 13 inputs, for a total of 20.

Impact on Wiring Complexity

The space on integrated circuit chips is occupied by the circuitry that implements logic gates and by the wires needed to make connections among the gates. The amount of space

needed for wiring is a substantial portion of the chip area. Therefore, it is useful to keep the wiring complexity as low as possible.

In a logic expression each literal corresponds to a wire in the circuit that carries the desired logic signal. Since factoring usually reduces the number of literals, it provides a powerful mechanism for reducing the wiring complexity in a logic circuit. In the synthesis process the CAD tools consider many different issues, including the cost of the circuit, the fan-in, and the wiring complexity.

4.6.2 FUNCTIONAL DECOMPOSITION

In the preceding examples, which illustrated the factoring approach, multilevel circuits were used to deal with fan-in limitations. However, such circuits may be preferable to their two-level equivalents even if fan-in is not a problem. In some cases the multilevel circuits may reduce the cost of implementation. On the other hand, they usually imply longer propagation delays, because they use multiple stages of logic gates. We will explore these issues by means of illustrative examples.

Complexity of a logic circuit, in terms of wiring and logic gates, can often be reduced by *decomposing* a two-level circuit into subcircuits, where one or more subcircuits implement functions that may be used in several places to construct the final circuit. To achieve this objective, a two-level logic expression is replaced by two or more new expressions, which are then combined to define a multilevel circuit. We can illustrate this idea by a simple example.

5 Consider the minimum-cost sum-of-products expression

$$f = \bar{x}_1 x_2 x_3 + x_1 \bar{x}_2 x_3 + x_1 x_2 x_4 + \bar{x}_1 \bar{x}_2 x_4$$

and assume that the inputs x_1 to x_4 are available only in their true form. Then the expression defines a circuit that has four AND gates, one OR gate, two NOT gates, and 18 inputs (wires) to all gates. The fan-in is three for the AND gates and four for the OR gate. The reader should observe that in this case we have included the cost of NOT gates needed to complement x_1 and x_2 , rather than assume that both true and complemented versions of all input variables are available, as we had done before.

Factoring x_3 from the first two terms and x_4 from the last two terms, this expression becomes

$$f = (\bar{x}_1 x_2 + x_1 \bar{x}_2) x_3 + (x_1 x_2 + \bar{x}_1 \bar{x}_2) x_4$$

Now let $g(x_1, x_2) = \bar{x}_1 x_2 + x_1 \bar{x}_2$ and observe that

$$\begin{aligned} \bar{g} &= \overline{\bar{x}_1 x_2 + x_1 \bar{x}_2} \\ &= \overline{\bar{x}_1 x_2} \cdot \overline{x_1 \bar{x}_2} \\ &= (x_1 + \bar{x}_2)(\bar{x}_1 + x_2) \\ &= x_1 \bar{x}_1 + x_1 x_2 + \bar{x}_2 \bar{x}_1 + \bar{x}_2 x_2 \\ &= 0 + x_1 x_2 + \bar{x}_1 \bar{x}_2 + 0 \\ &= x_1 x_2 + \bar{x}_1 \bar{x}_2 \end{aligned}$$

Then f can be written as

$$f = gx_3 + \bar{g}x_4$$

which leads to the circuit shown in Figure 4.23. This circuit requires an additional OR gate and a NOT gate to invert the value of g . But it needs only 15 inputs. Moreover, the largest fan-in has been reduced to two. The cost of this circuit is lower than the cost of its two-level equivalent. The trade-off is an increased propagation delay because the circuit has three more levels of logic.

In this example the subfunction g is a function of variables x_1 and x_2 . The subfunction is used as an input to the rest of the circuit that completes the realization of the required function f . Let h denote the function of this part of the circuit, which depends on only three inputs: g , x_3 , and x_4 . Then the decomposed realization of f can be expressed algebraically as

$$f(x_1, x_2, x_3, x_4) = h[g(x_1, x_2), x_3, x_4]$$

The structure of this decomposition can be described in block-diagram form as shown in Figure 4.24.

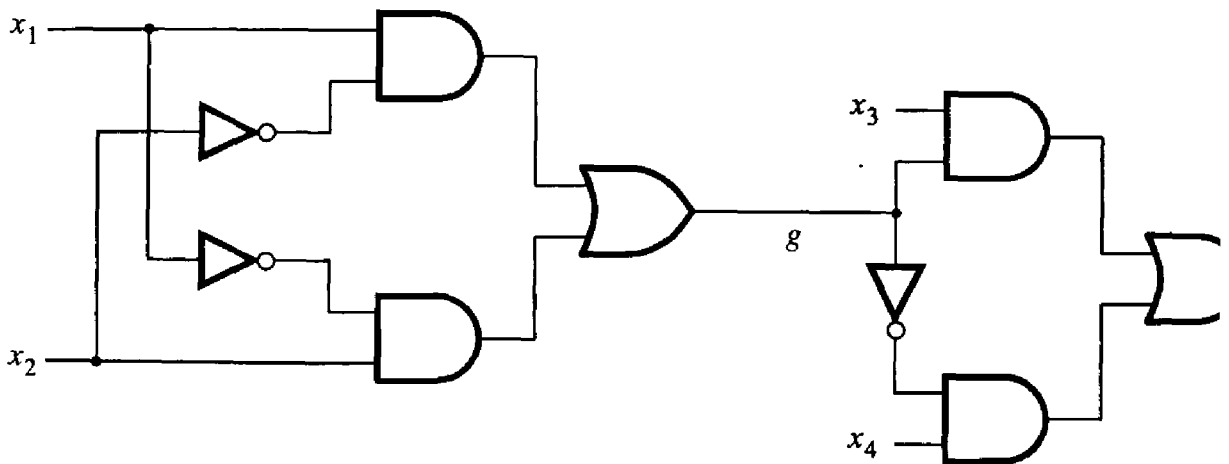


Figure 4.23 Logic circuit for Example 4.6.

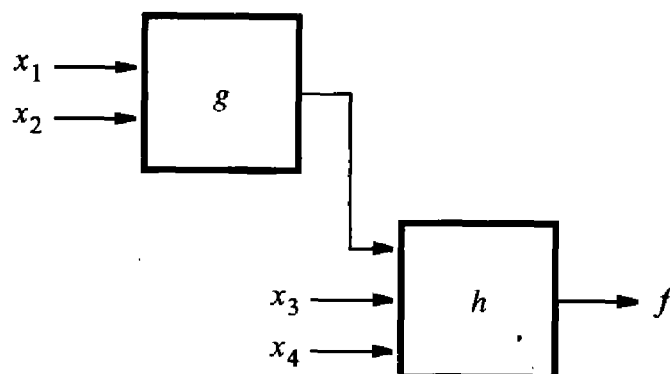
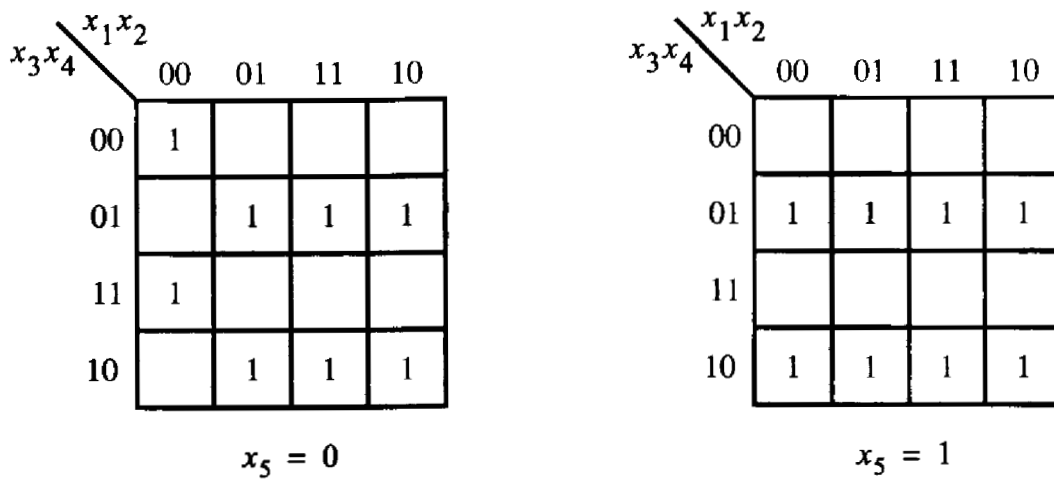


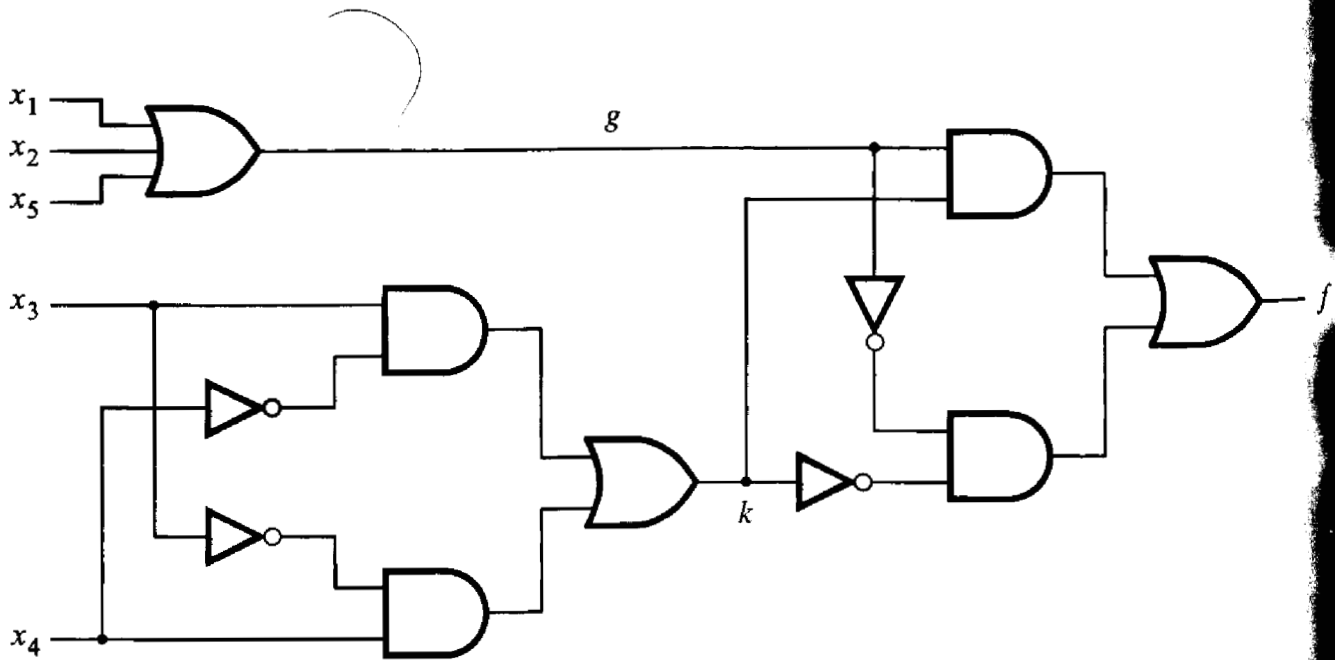
Figure 4.24 The structure of decomposition in Example 4.6.

While not evident from our first example, functional decomposition can lead to great reductions in the complexity and cost of circuits. The reader will get a good indication of this benefit from the next example.

7 Figure 4.25a defines a five-variable function f in the form of a Karnaugh map. In searching for a good decomposition for this function, it is necessary to first identify the variables that will be used as inputs to a subfunction. We can get a useful clue from the patterns of 1s in the map. Note that there are only two distinct patterns in the rows of the map. The second and fourth rows have one pattern, highlighted in blue, while the first and second rows have the other pattern. Once we specify which row each pattern is in, then the pattern itself



(a) Karnaugh map for the function f



(b) Circuit obtained using decomposition

Figure 4.25 Decomposition for Example 4.7.

depends only on the variables that define columns in each row, namely, x_1 , x_2 , and x_5 . Let a subfunction $g(x_1, x_2, x_5)$ represent the pattern in rows 2 and 4. This subfunction is just

$$g = x_1 + x_2 + x_5$$

because the pattern has a 1 wherever any of these variables is equal to 1. To specify the location of rows where the pattern g occurs, we use the variables x_3 and x_4 . The terms \bar{x}_3x_4 and $x_3\bar{x}_4$ identify the second and fourth rows, respectively. Thus the expression $(\bar{x}_3x_4 + x_3\bar{x}_4) \cdot g$ represents the part of f that is defined in rows 2 and 4.

Next, we have to find a realization for the pattern in rows 1 and 3. This pattern has a 1 only in the cell where $x_1 = x_2 = x_5 = 0$, which corresponds to the term $\bar{x}_1\bar{x}_2\bar{x}_5$. But we can make a useful observation that this term is just a complement of g . The location of rows 1 and 3 is identified by terms $\bar{x}_3\bar{x}_4$ and x_3x_4 , respectively. Thus the expression $(\bar{x}_3\bar{x}_4 + x_3x_4) \cdot \bar{g}$ represents f in rows 1 and 3.

We can make one other useful observation. The expressions $(\bar{x}_3x_4 + x_3\bar{x}_4)$ and $(\bar{x}_3\bar{x}_4 + x_3x_4)$ are complements of each other, as shown in Example 4.6. Therefore, if we let $k(x_3, x_4) = \bar{x}_3x_4 + x_3\bar{x}_4$, the complete decomposition of f can be stated as

$$\begin{aligned} f(x_1, x_2, x_3, x_4, x_5) &= h[g(x_1, x_2, x_5), k(x_3, x_4)] \\ &= kg + \bar{k}\bar{g} \end{aligned}$$

$$\begin{aligned} \text{where} \quad g &= x_1 + x_2 + x_5 \\ k &= \bar{x}_3x_4 + x_3\bar{x}_4 \end{aligned}$$

The resulting circuit is given in Figure 4.25b. It requires a total of 11 gates and 19 inputs. The largest fan-in is three.

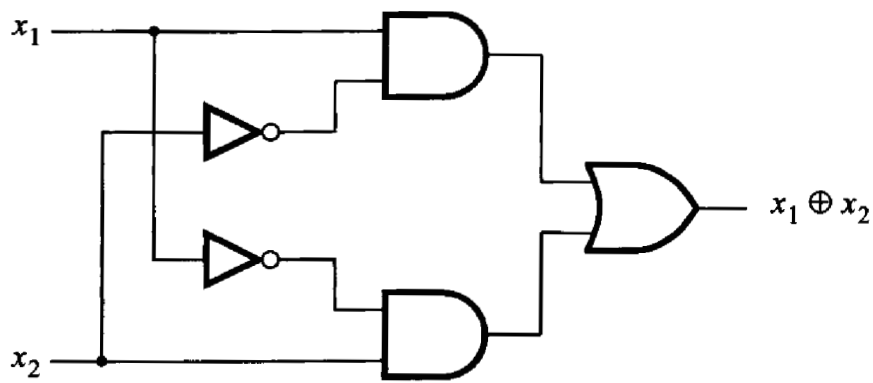
For comparison, a minimum-cost sum-of-products expression for f is

$$f = x_1\bar{x}_3x_4 + x_1x_3\bar{x}_4 + x_2\bar{x}_3x_4 + x_2x_3\bar{x}_4 + \bar{x}_3x_4x_5 + x_3\bar{x}_4x_5 + \bar{x}_1\bar{x}_2\bar{x}_3\bar{x}_4\bar{x}_5 + \bar{x}_1\bar{x}_2x_3x_4\bar{x}_5$$

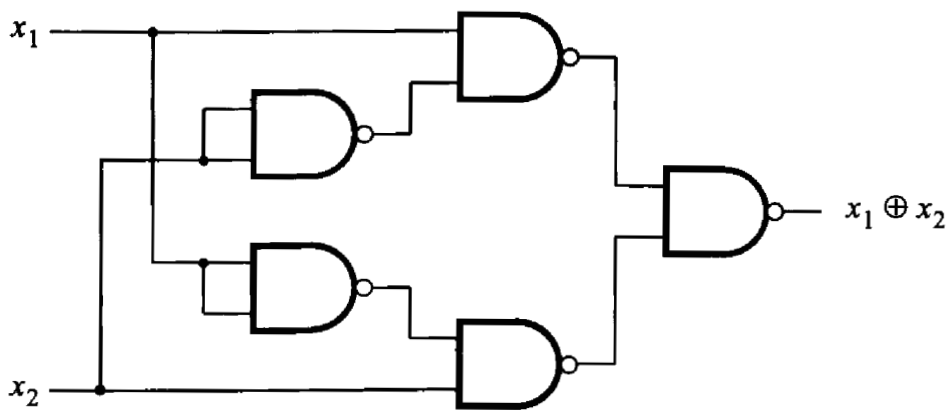
The corresponding circuit requires a total of 14 gates (including the five NOT gates to complement the primary inputs) and 41 inputs. The fan-in for the output OR gate is eight. Obviously, functional decomposition results in a much simpler implementation of this function.

In both of the preceding examples, the decomposition is such that a decomposed subfunction depends on some primary input variables, whereas the remainder of the implementation depends on the rest of the variables. Such decompositions are called *disjoint decompositions* in the technical literature. It is possible to have a *non-disjoint decomposition*, where the variables of the subfunction are also used in realizing the remainder of the circuit. The following example illustrates this possibility.

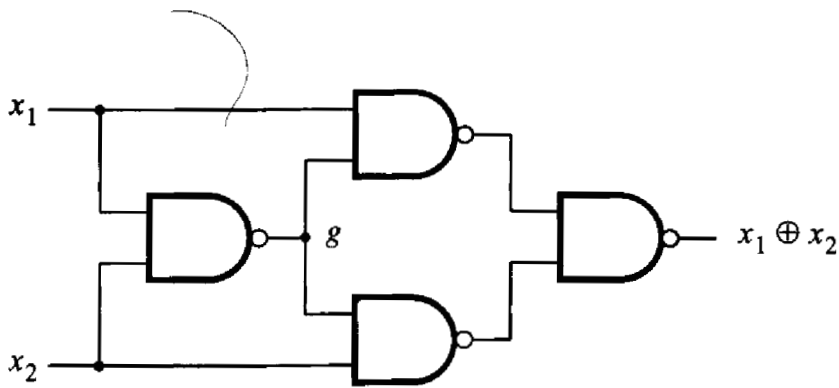
Exclusive-OR (XOR) is a very useful function. In section 3.9.1 we showed how it can be realized using a special circuit. It can also be realized using AND and OR gates as shown



(a) Sum-of-products implementation



(b) NAND gate implementation



(c) Optimal NAND gate implementation

Figure 4.26 Implementation of XOR.

in Figure 4.26a. In section 2.7 we explained how any AND-OR circuit can be realized as a NAND-NAND circuit that has the same structure.

Let us now try to exploit functional decomposition to find a better implementation of XOR using only NAND gates. Let the symbol \uparrow represent the NAND operation so that $x_1 \uparrow x_2 = \overline{x_1 \cdot x_2}$. A sum-of-products expression for the XOR function is

$$x_1 \oplus x_2 = x_1 \bar{x}_2 + \bar{x}_1 x_2$$

From the discussion in section 2.7, this expression can be written in terms of NAND operations as

$$x_1 \oplus x_2 = (x_1 \uparrow \bar{x}_2) \uparrow (\bar{x}_1 \uparrow x_2)$$

This expression requires five NAND gates, and it is implemented by the circuit in Figure 4.26*b*. Observe that an inverter is implemented using a two-input NAND gate by tying the two inputs together.

To find a decomposition, we can manipulate the term $(x_1 \uparrow \bar{x}_2)$ as follows:

$$(x_1 \uparrow \bar{x}_2) = \overline{(x_1 \bar{x}_2)} = \overline{(x_1(\bar{x}_1 + \bar{x}_2))} = (x_1 \uparrow (\bar{x}_1 + \bar{x}_2))$$

We can perform a similar manipulation for $(\bar{x}_1 \uparrow x_2)$ to generate

$$x_1 \oplus x_2 = (x_1 \uparrow (\bar{x}_1 + \bar{x}_2)) \uparrow ((\bar{x}_1 + \bar{x}_2) \uparrow x_2)$$

DeMorgan's theorem states that $\bar{x}_1 + \bar{x}_2 = x_1 \uparrow x_2$; hence we can write

$$x_1 \oplus x_2 = (x_1 \uparrow (x_1 \uparrow x_2)) \uparrow ((x_1 \uparrow x_2) \uparrow x_2)$$

Now we have a decomposition

$$x_1 \oplus x_2 = (x_1 \uparrow g) \uparrow (g \uparrow x_2)$$

$$g = x_1 \uparrow x_2$$

The corresponding circuit, which requires only four NAND gates, is given in Figure 4.26*c*.

Practical Issues

Functional decomposition is a powerful technique for reducing the complexity of circuits. It can also be used to implement general logic functions in circuits that have built-in constraints. For example, in programmable logic devices (PLDs) that were introduced in Chapter 3 it is necessary to "fit" a desired logic circuit into logic blocks that are available on these devices. The available blocks are a target for decomposed subfunctions that may be used to realize larger functions.

A big problem in functional decomposition is finding the possible subfunctions. For functions of many variables, an enormous number of possibilities should be tried. This situation precludes attempts at finding optimal solutions. Instead, heuristic approaches that lead to acceptable solutions are used.

Full discussion of functional decomposition and factoring is beyond the scope of this book. An interested reader may consult other references [2–5]. Modern CAD tools use the concept of decomposition extensively.

4.6.3 MULTILEVEL NAND AND NOR CIRCUITS

In section 2.7 we showed that two-level circuits consisting of AND and OR gates can be easily converted into circuits that can be realized with NAND and NOR gates, using the same gate arrangement. In particular, an AND-OR (sum-of-products) circuit can be realized

as a NAND-NAND circuit, while an OR-AND (product-of-sums) circuit becomes a NOR-NOR circuit. The same conversion approach can be used for multilevel circuits. We will illustrate this approach by an example.

4.9 Figure 4.27a gives a four-level circuit consisting of AND and OR gates. Let us first derive a functionally equivalent circuit that comprises only NAND gates. Each AND gate is converted to a NAND by inverting its output. Each OR gate is converted to a NAND by inverting its inputs. This is just an application of DeMorgan's theorem, as illustrated in Figure 2.21a. Figure 4.27b shows the necessary inversions in blue. Note that an inversion is applied at both ends of a given wire. Now each gate becomes a NAND gate. This accounts for most of the inversions added to the original circuit. But, there are still four inversions that are not a part of any gate; therefore, they must be implemented separately. These inversions are at inputs x_1 , x_5 , x_6 , and x_7 and at the output f . They can be implemented as two-input NAND gates, where the inputs are tied together. The resulting circuit is shown in Figure 4.27c.

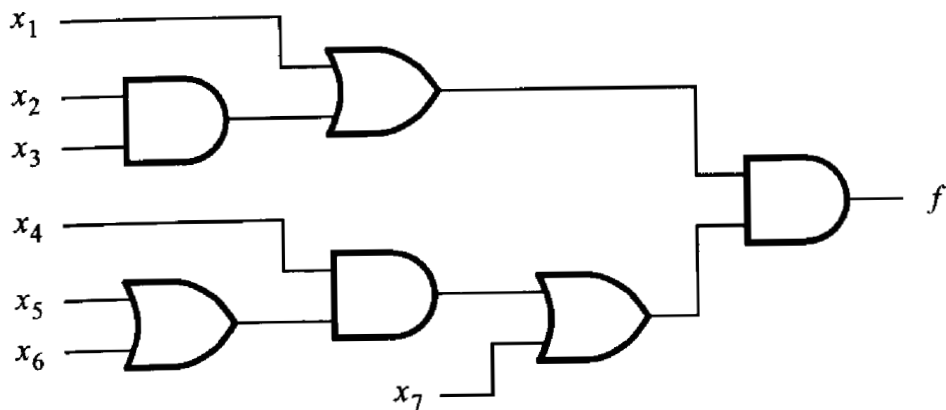
A similar approach can be used to convert the circuit in Figure 4.27a into a circuit that comprises only NOR gates. An OR gate is converted to a NOR gate by inverting its output. An AND becomes a NOR if its inputs are inverted, as indicated in Figure 2.21b. Using this approach, the inversions needed for our sample circuit are shown in blue in Figure 4.28a. Then each gate becomes a NOR gate. The three inversions at inputs x_2 , x_3 , and x_4 can be realized as two-input NOR gates, where the inputs are tied together. The resulting circuit is presented in Figure 4.28b.

It is evident that the basic topology of a circuit does not change substantially when converting from AND and OR gates to either NAND or NOR gates. However, it may be necessary to insert additional gates to serve as NOT gates that implement inversions not absorbed as a part of other gates in the circuit.

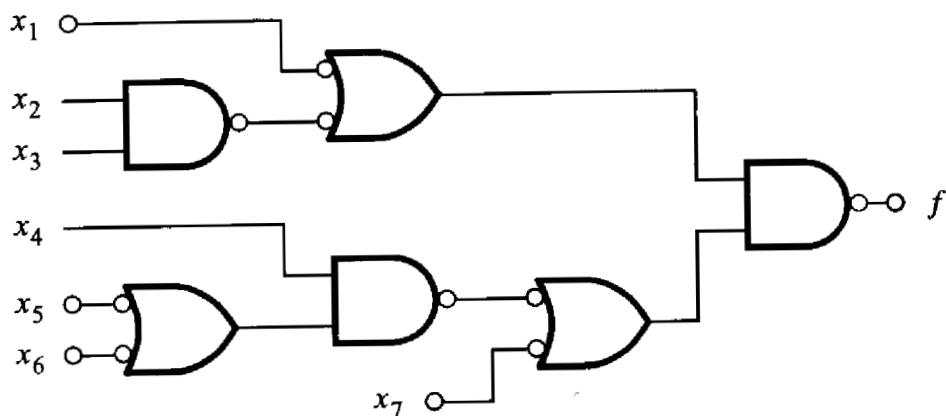
4.7 ANALYSIS OF MULTILEVEL CIRCUITS

The preceding section showed that it may be advantageous to implement logic functions using multilevel circuits. It also presented the most commonly used approaches for synthesizing functions in this way. In this section we will consider the task of analyzing an existing circuit to determine the function that it implements.

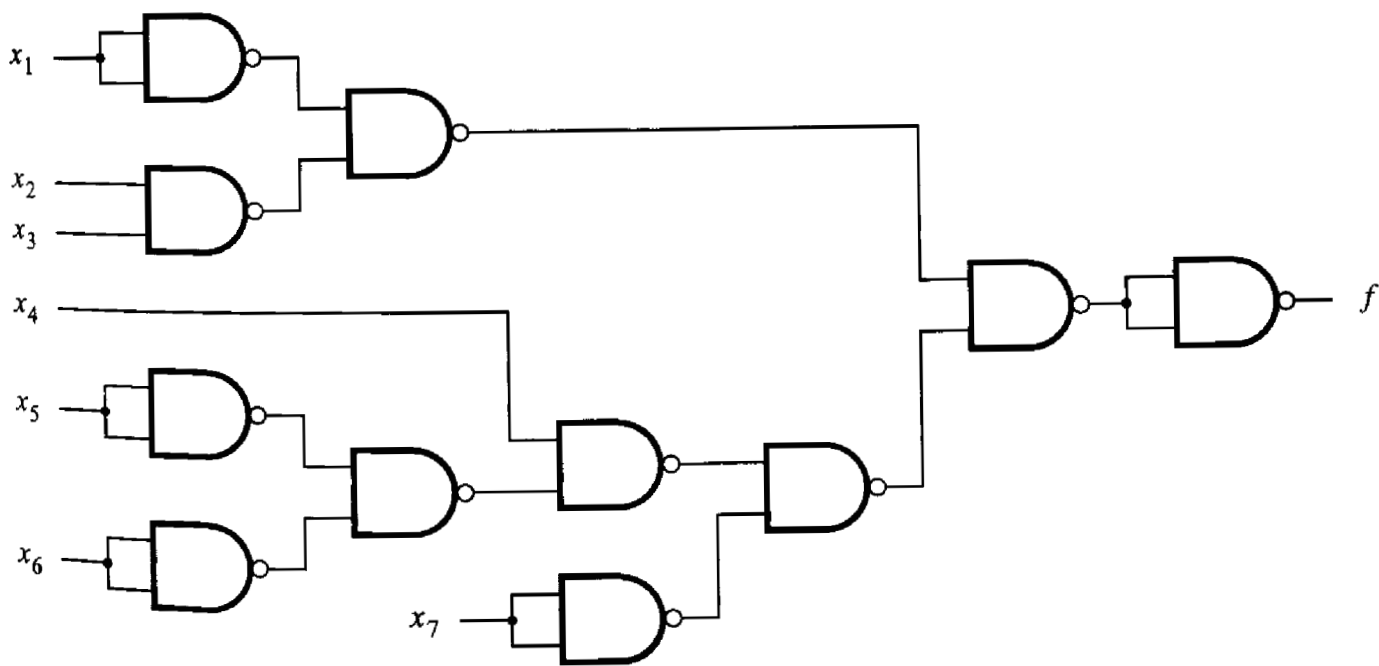
For two-level circuits the analysis process is simple. If a circuit has an AND-OR (NAND-NAND) structure, then its output function can be written in the SOP form by inspection. Similarly, it is easy to derive a POS expression for an OR-AND (NOR-NOR) circuit. The analysis task is more complicated for multilevel circuits because it is difficult to write an expression for the function by inspection. We have to derive the desired expression by tracing the circuit and determining its functionality. The tracing can be done either starting from the input side and working towards the output, or by starting at the output side and working back towards the inputs. At intermediate points in the circuit, it is necessary to evaluate the subfunctions realized by the logic gates.



(a) Circuit with AND and OR gates

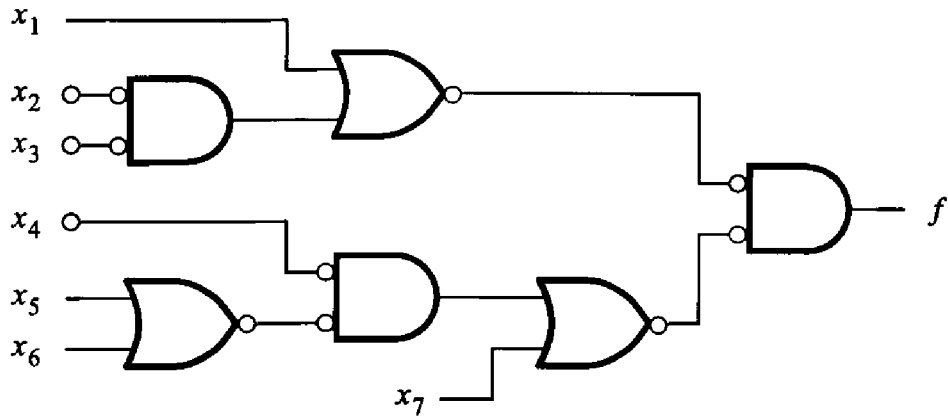


(b) Inversions needed to convert to NANDs

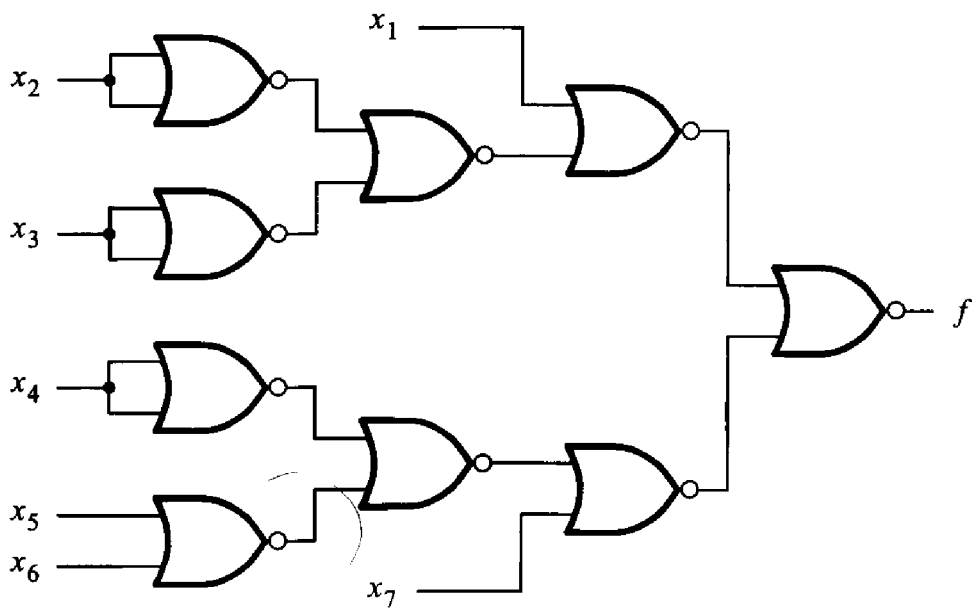


(c) NAND-gate circuit

Figure 4.27 Conversion to a NAND-gate circuit.



(a) Inversions needed to convert to NORs



(b) NOR-gate circuit

Figure 4.28 Conversion to a NOR-gate circuit.

10 Figure 4.29 replicates the circuit from Figure 4.27a. To determine the function f implemented by this circuit, we can consider the functionality at internal points that are the outputs of various gates. These points are labeled P_1 to P_5 in the figure. The functions realized at these points are

$$P_1 = x_2x_3$$

$$P_2 = x_5 + x_6$$

$$P_3 = x_1 + P_1 = x_1 + x_2x_3$$

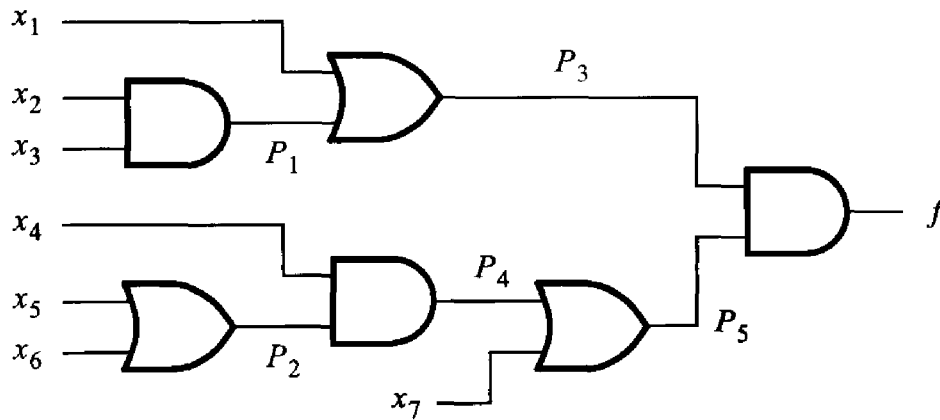


Figure 4.29 Circuit for Example 4.10.

$$P_4 = x_4 P_2 = x_4(x_5 + x_6)$$

$$P_5 = P_4 + x_7 = x_4(x_5 + x_6) + x_7$$

Then f can be evaluated as

$$\begin{aligned} f &= P_3 P_5 \\ &= (x_1 + x_2 x_3)(x_4(x_5 + x_6) + x_7) \end{aligned}$$

Applying the distributive property to eliminate the parentheses gives

$$f = x_1 x_4 x_5 + x_1 x_4 x_6 + x_1 x_7 + x_2 x_3 x_4 x_5 + x_2 x_3 x_4 x_6 + x_2 x_3 x_7$$

Note that the expression represents a circuit comprising six AND gates, one OR gate, and 25 inputs. The cost of this two-level circuit is higher than the cost of the circuit in Figure 4.29, but the circuit has lower propagation delay.

In Example 4.7 we derived the circuit in Figure 4.25b. In addition to AND gates and OR gates, the circuit has some NOT gates. It is reproduced in Figure 4.30, and the internal points are labeled from P_1 to P_{10} as shown. The following subfunctions occur

$$P_1 = x_1 + x_2 + x_5$$

$$P_2 = \bar{x}_4$$

$$P_3 = \bar{x}_3$$

$$P_4 = x_3 P_2$$

$$P_5 = x_4 P_3$$

$$P_6 = P_4 + P_5$$

$$P_7 = \bar{P}_1$$

$$P_8 = \bar{P}_6$$

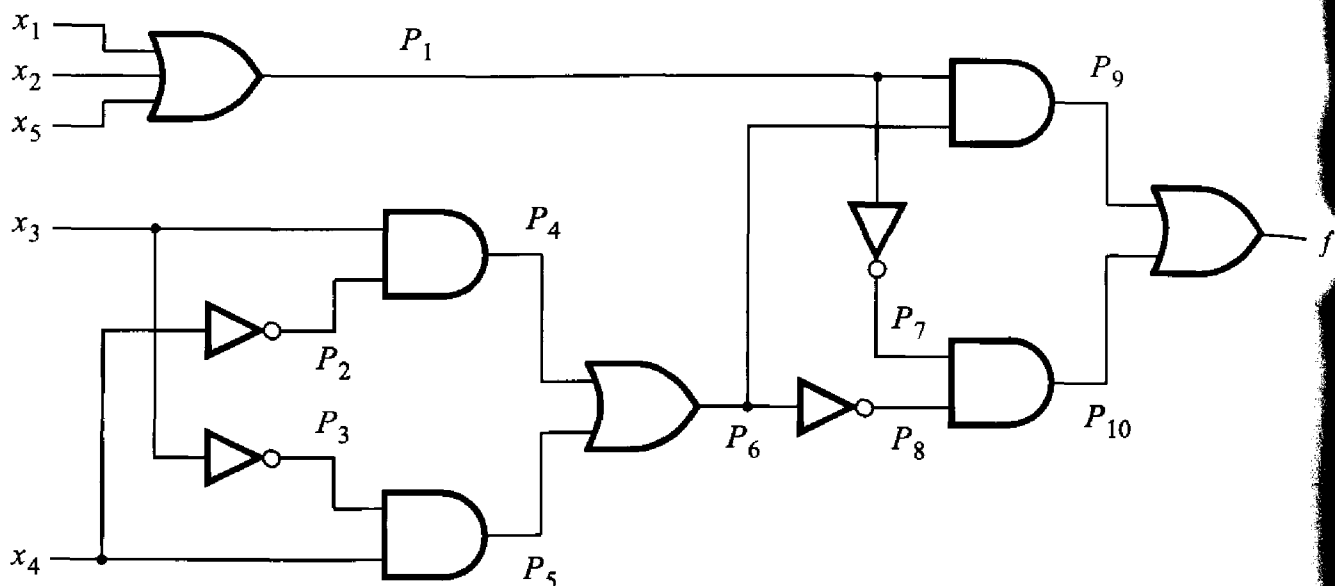


Figure 4.30 Circuit for Example 4.11.

$$P_9 = P_1 P_6$$

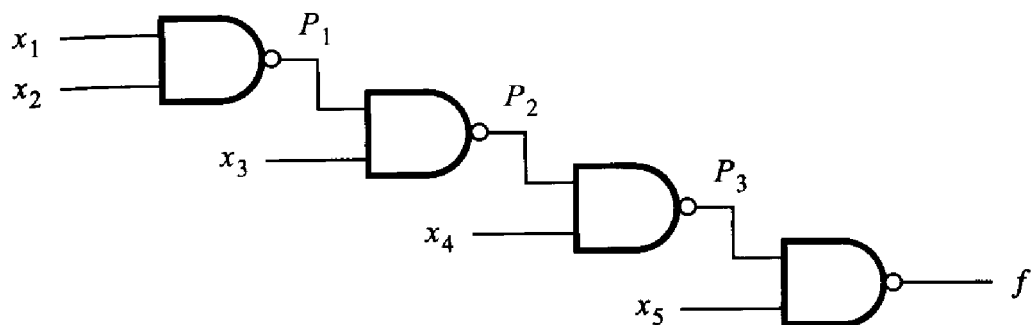
$$P_{10} = P_7 P_8$$

We can derive f by tracing the circuit from the output towards the inputs as follows

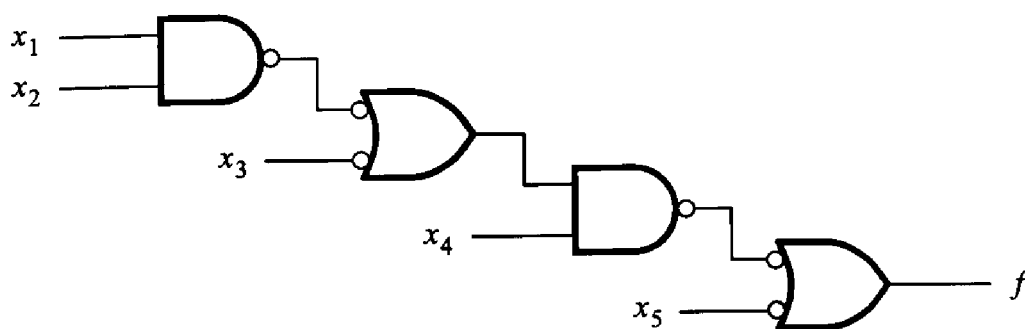
$$\begin{aligned}
 f &= P_9 + P_{10} \\
 &= P_1 P_6 + P_7 P_8 \\
 &= (x_1 + x_2 + x_5)(P_4 + P_5) + \bar{P}_1 \bar{P}_6 \\
 &= (x_1 + x_2 + x_5)(x_3 P_2 + x_4 P_3) + \bar{x}_1 \bar{x}_2 \bar{x}_5 \bar{P}_4 \bar{P}_5 \\
 &= (x_1 + x_2 + x_5)(x_3 \bar{x}_4 + x_4 \bar{x}_3) + \bar{x}_1 \bar{x}_2 \bar{x}_5 (\bar{x}_3 + \bar{P}_2)(\bar{x}_4 + \bar{P}_3) \\
 &= (x_1 + x_2 + x_5)(x_3 \bar{x}_4 + \bar{x}_3 x_4) + \bar{x}_1 \bar{x}_2 \bar{x}_5 (\bar{x}_3 + x_4)(\bar{x}_4 + x_3) \\
 &= x_1 x_3 \bar{x}_4 + x_1 \bar{x}_3 x_4 + x_2 x_3 \bar{x}_4 + x_2 \bar{x}_3 x_4 + x_5 x_3 \bar{x}_4 + x_5 \bar{x}_3 x_4 + \\
 &\quad \bar{x}_1 \bar{x}_2 \bar{x}_5 \bar{x}_3 \bar{x}_4 + \bar{x}_1 \bar{x}_2 \bar{x}_5 x_4 x_3
 \end{aligned}$$

This is the same expression as stated in Example 4.7.

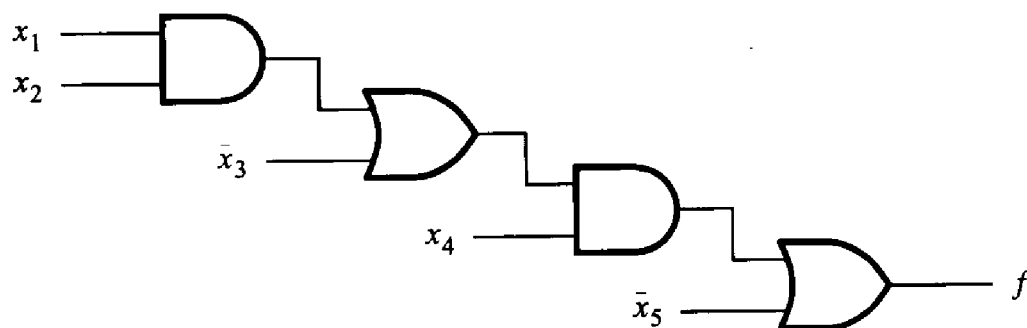
- 12** Circuits based on NAND and NOR gates are slightly more difficult to analyze because each gate involves an inversion. Figure 4.31a depicts a simple NAND-gate circuit that illustrates the effect of inversions. We can convert this circuit into a circuit with AND and OR gates using the reverse of the approach described in Example 4.9. Bubbles that denote inversions can be moved, according to DeMorgan's theorem, as indicated in Figure 4.31b. Then the circuit can be converted into the circuit in part (c) of the figure, which consists of AND and



(a) NAND-gate circuit



(b) Moving bubbles to convert to ANDs and ORs



(c) Circuit with AND and OR gates

Figure 4.31 Circuit for Example 4.12.

OR gates. Observe that in the converted circuit, the inputs x_3 and x_5 are complemented. From this circuit the function f is determined as

$$\begin{aligned} f &= (x_1x_2 + \bar{x}_3)x_4 + \bar{x}_5 \\ &= x_1x_2x_4 + \bar{x}_3x_4 + \bar{x}_5 \end{aligned}$$

It is not necessary to convert a NAND circuit into a circuit with AND and OR gates to determine its functionality. We can use the approach from Examples 4.10 and 4.11 to

derive f as follows. Let P_1 , P_2 , and P_3 label the internal points as shown in Figure 4.31a. Then

$$\begin{aligned}
 P_1 &= \overline{x_1 x_2} \\
 P_2 &= \overline{P_1 x_3} \\
 P_3 &= \overline{P_2 x_4} \\
 f &= \overline{P_3 x_5} = \overline{P_3} + \overline{x_5} \\
 &= \overline{\overline{P_2 x_4}} + \overline{x_5} = P_2 x_4 + \overline{x_5} \\
 &= \overline{\overline{P_1 x_3} x_4} + \overline{x_5} = (\overline{P_1} + \overline{x_3}) x_4 + \overline{x_5} \\
 &= (\overline{\overline{x_1 x_2}} + \overline{x_3}) x_4 + \overline{x_5} \\
 &= (x_1 x_2 + \overline{x_3}) x_4 + \overline{x_5} \\
 &= x_1 x_2 x_4 + \overline{x_3} x_4 + \overline{x_5}
 \end{aligned}$$

13 The circuit in Figure 4.32 consists of NAND and NOR gates. It can be analyzed as follows.

$$\begin{aligned}
 P_1 &= \overline{x_2 x_3} \\
 P_2 &= \overline{x_1 P_1} = \overline{x_1} + \overline{P_1} \\
 P_3 &= \overline{x_3 x_4} = \overline{x_3} + \overline{x_4} \\
 P_4 &= \overline{P_2 + P_3} \\
 f &= \overline{P_4 + x_5} = \overline{P_4} \overline{x_5} \\
 &= \overline{\overline{P_2 + P_3}} \cdot \overline{x_5}
 \end{aligned}$$

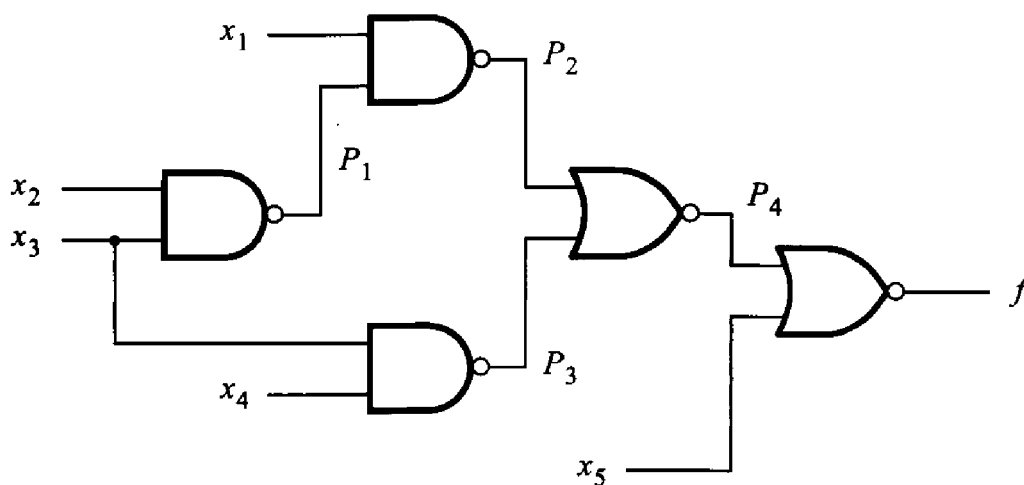


Figure 4.32 Circuit for Example 4.13.

$$\begin{aligned}
&= (P_2 + P_3)\bar{x}_5 \\
&= (\bar{x}_1 + \bar{P}_1 + \bar{x}_3 + \bar{x}_4)\bar{x}_5 \\
&= (\bar{x}_1 + x_2x_3 + \bar{x}_3 + \bar{x}_4)\bar{x}_5 \\
&= (\bar{x}_1 + x_2 + \bar{x}_3 + \bar{x}_4)\bar{x}_5 \\
&= \bar{x}_1\bar{x}_5 + x_2\bar{x}_5 + \bar{x}_3\bar{x}_5 + \bar{x}_4\bar{x}_5
\end{aligned}$$

Note that in deriving the second to the last line, we used property 16a in section 2.5 to simplify $x_2x_3 + \bar{x}_3$ into $x_2 + \bar{x}_3$.

Analysis of circuits is much simpler than synthesis. With a little practice one can develop an ability to easily analyze even fairly complex circuits.

We have now covered a considerable amount of material on synthesis and analysis of logic functions. We have used the Karnaugh map as a vehicle for illustrating the concepts involved in finding optimal implementations of logic functions. We have also shown that logic functions can be realized in a variety of forms, both with two levels of logic and with multiple levels. In a modern design environment, logic circuits are synthesized using CAD tools, rather than by hand. The concepts that we have discussed in this chapter are quite general; they are representative of the strategies implemented in CAD algorithms. As we have said before, the Karnaugh map scheme for representing logic functions is not appropriate for use in CAD tools. In the next section we discuss an alternative representation of logic functions, which is suitable for use in CAD algorithms.

4.8 CUBICAL REPRESENTATION

The Karnaugh map is an excellent vehicle for illustrating concepts, and it is even useful for manual design if the functions have only a few variables. To deal with larger functions it is necessary to have techniques that are algebraic, rather than graphical, which can be applied to functions of any number of variables.

Many algebraic optimization techniques have been developed. We will not pursue these techniques in great detail, but we will attempt to provide the reader with an appreciation of the tasks involved. This helps in gaining an understanding of what the CAD tools can do and what results can be expected from them. The approaches that we will present make use of a cubical representation of logic functions.

4.8.1 CUBES AND HYPERCUBES

So far in this book, we have encountered four different forms for representing logic functions: truth tables, algebraic expressions, Venn diagrams, and Karnaugh maps. Another possibility is to map a function of n variables onto an n -dimensional cube.

Two-Dimensional Cube

A two-dimensional cube is shown in Figure 4.33. The four corners in the cube are called *vertices*, which correspond to the four rows of a truth table. Each vertex is identified by two coordinates. The horizontal coordinate is assumed to correspond to variable x_1 , and vertical coordinate to x_2 . Thus vertex 00 is the bottom-left corner, which corresponds to row 0 in the truth table. Vertex 01 is the top-left corner, where $x_1 = 0$ and $x_2 = 1$, which corresponds to row 1 in the truth table, and so on for the other two vertices.

We will map a function onto the cube by indicating with blue circles those vertices for which $f = 1$. In Figure 4.33 $f = 1$ for vertices 01, 10, and 11. We can express the function as a set of vertices, using the notation $f = \{01, 10, 11\}$. The function f is also shown in the form of a truth table in the figure.

An edge joins two vertices for which the labels differ in the value of only one variable. Therefore, if two vertices for which $f = 1$ are joined by an edge, then this edge represents that portion of the function just as well as the two individual vertices. For example, $f = 1$ for vertices 10 and 11. They are joined by the edge that is labeled $1x$. It is customary to use the letter x to denote the fact that the corresponding variable can be either 0 or 1. Hence $1x$ means that $x_1 = 1$, while x_2 can be either 0 or 1. Similarly, vertices 01 and 11 are joined by the edge labeled $x1$, indicating that x_1 can be either 0 or 1, but $x_2 = 1$. The reader must not confuse the use of the letter x for this purpose, in contrast to the subscripted use where x_1 and x_2 refer to the variables.

Two vertices being represented by a single edge is the embodiment of the combining property 14a from section 2.5. The edge $1x$ is the logical sum of vertices 10 and 11. It essentially defines the term x_1 , which is the sum of minterms $x_1\bar{x}_2$ and x_1x_2 . The property 14a indicates that

$$x_1\bar{x}_2 + x_1x_2 = x_1$$

Therefore, finding edges for which $f = 1$ is equivalent to applying the combining property. Of course, this is also analogous to finding pairs of adjacent cells in a Karnaugh map for which $f = 1$.

The edges $1x$ and $x1$ define fully the function in Figure 4.33; hence we can represent the function as $f = \{1x, x1\}$. This corresponds to the logic expression

$$f = x_1 + x_2$$

which is also obvious from the truth table in the figure.

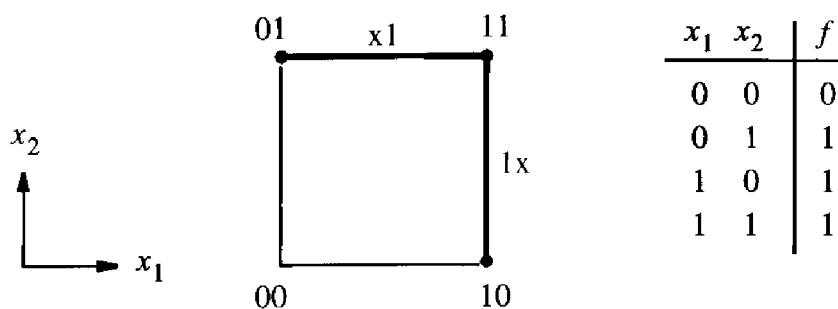


Figure 4.33 Representation of $f(x_1, x_2) = \sum m(1, 2, 3)$.

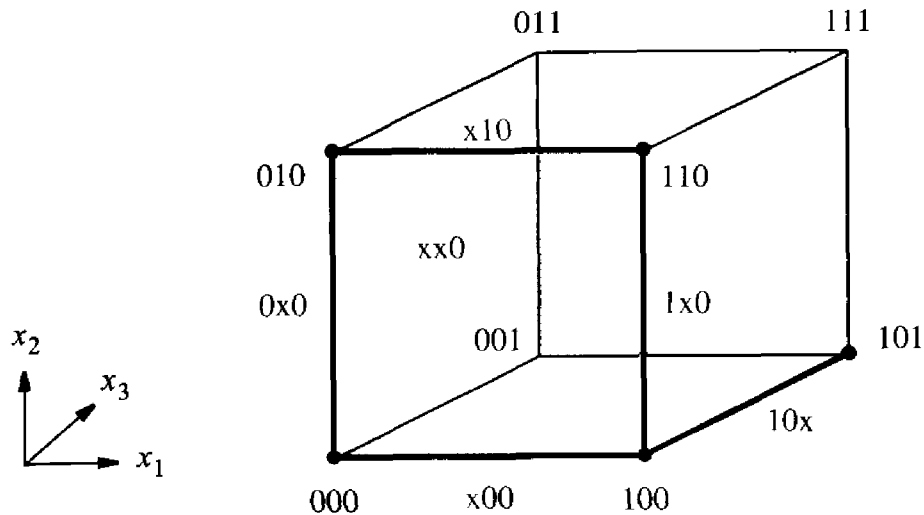


Figure 4.34 Representation of $f(x_1, x_2, x_3) = \sum m(0, 2, 4, 5, 6)$.

Three-Dimensional Cube

Figure 4.34 illustrates a three-dimensional cube. The x_1 , x_2 , and x_3 coordinates are as shown on the left. Each vertex is identified by a specific valuation of the three variables. The function f mapped onto the cube is the function from Figure 4.1, which was used in Figure 4.5b. There are five vertices for which $f = 1$, namely, 000, 010, 100, 101, and 110. These vertices are joined by the five edges shown in blue, namely, $x00$, $0x0$, $x10$, $1x0$, and $10x$. Because the vertices 000, 010, 100, and 110 include all valuations of x_1 and x_2 , when x_3 is 0, they can be specified by the term $xx0$. This term means that $f = 1$ if $x_3 = 0$, regardless of the values of x_1 and x_2 . Notice that $xx0$ represents the front side of the cube, which is shaded in blue.

From the preceding discussion it is evident that the function f can be represented in several ways. Some of the possibilities are

$$\begin{aligned}
 f &= \{000, 010, 100, 101, 110\} \\
 &= \{0x0, 1x0, 101\} \\
 &= \{x00, x10, 101\} \\
 &= \{x00, x10, 10x\} \\
 &= \{xx0, 10x\}
 \end{aligned}$$

In a physical realization each of the above terms is a product term implemented by an AND gate. Obviously, the least-expensive circuit is obtained if $f = \{xx0, 10x\}$, which is equivalent to the logic expression

$$f = \bar{x}_3 + x_1\bar{x}_2$$

This is the expression that we derived using the Karnaugh map in Figure 4.5b.

Four-Dimensional Cube

Graphical images of two- and three-dimensional cubes are easy to draw. A four-dimensional cube is more difficult. It consists of 2 three-dimensional cubes with their

corners connected. The simplest way to visualize a four-dimensional cube is to have one cube placed inside the other cube, as depicted in Figure 4.35. We have assumed that the x_1 , x_2 , and x_3 coordinates are the same as in Figure 4.34, while $x_4 = 0$ defines the outer cube and $x_4 = 1$ defines the inner cube. Figure 4.35 indicates how the function f_3 of Figure 4.7 is mapped onto the four-dimensional cube. To avoid cluttering the figure with too many labels, we have labeled only those vertices for which $f_3 = 1$. Again, all edges that connect these vertices are highlighted in blue.

There are two groups of four adjacent vertices for which $f_3 = 1$ that can be represented as planes. The group comprising 0000, 0010, 1000, and 1010 is represented by x_0x_0 . The group 0010, 0011, 0110, and 0111 is represented by $0x_1x$. These planes are shaded in the figure. The function f_3 can be represented in several ways, for example

$$\begin{aligned} f_3 &= \{0000, 0010, 0011, 0110, 0111, 1000, 1010, 1111\} \\ &= \{00x_0, 10x_0, 0x10, 0x11, x111\} \\ &= \{x_0x_0, 0x1x, x111\} \end{aligned}$$

Since each x indicates that the corresponding variable can be ignored, because it can be either 0 or 1, the simplest circuit is obtained if $f = \{x_0x_0, 0x_1x, x_111\}$, which is equivalent

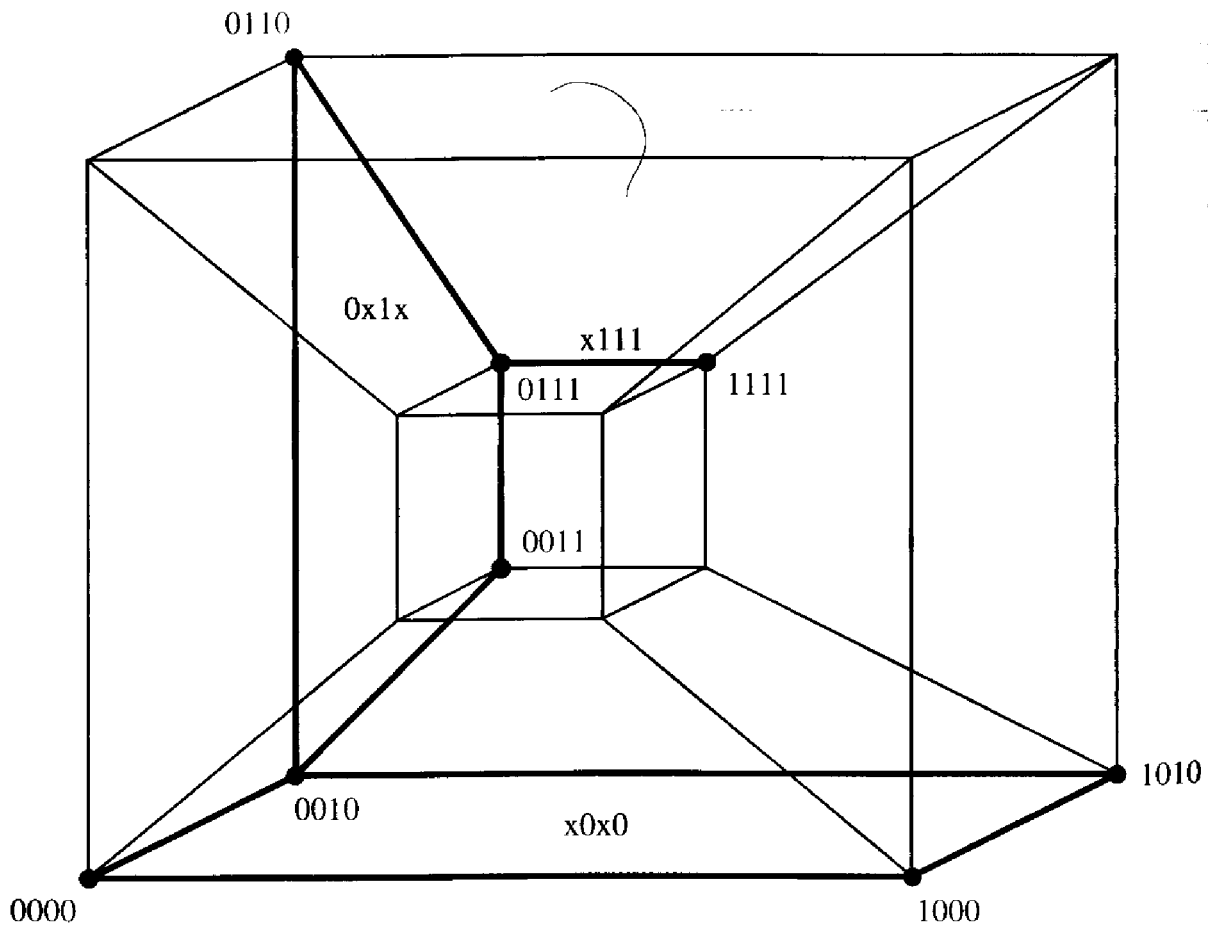


Figure 4.35 Representation of function f_3 from Figure 4.7.

to the expression

$$f_3 = \bar{x}_2\bar{x}_4 + \bar{x}_1x_3 + x_2x_3x_4$$

We derived the same expression in Figure 4.7.

***n*-Dimensional Cube**

A function that has n variables can be mapped onto an n -dimensional cube. Although it is impractical to draw graphical images of cubes that have more than four variables, it is not difficult to extend the ideas introduced above to a general n -variable case. Because visual interpretation is not possible and because we normally use the word *cube* only for a three-dimensional structure, many people use the word *hypercube* to refer to structures with more than three dimensions. We will continue to use the word *cube* in our discussion.

It is convenient to refer to a cube as being of a certain *size* that reflects the number of vertices in the cube. Vertices have the smallest size. Each variable has a value of 0 or 1 in a vertex. A cube that has an x in one variable position is larger because it consists of two vertices. For example, the cube $1x01$ consists of vertices 1001 and 1101. A cube that has two x 's consists of four vertices, and so on. A cube that has k x 's consists of 2^k vertices.

An n -dimensional cube has 2^n vertices. Two vertices are adjacent if they differ in the value of only one coordinate. Because there are n coordinates (axes in the n -dimensional cube), each vertex is adjacent to n other vertices. The n -dimensional cube contains cubes of lower dimensionality. Cubes of the lowest dimension are vertices. Because their dimension is zero, we will call them *0-cubes*. Edges are cubes of dimension 1; hence we will call them *1-cubes*. A side of a three-dimensional cube is a *2-cube*. An entire three-dimensional cube is a *3-cube*, and so on. In general, we will refer to a set of 2^k adjacent vertices as a *k-cube*.

From the examples in Figures 4.34 and 4.35, it is apparent that the largest possible *k-cubes* that exist for a given function are equivalent to its prime implicants. Next, we will discuss minimization techniques that use the cubical representation of functions.

4.9 A TABULAR METHOD FOR MINIMIZATION

Cubical representation of logic functions is well suited for implementation of minimization algorithms that can be programmed and run efficiently on computers. Such algorithms are included in modern CAD tools. While the CAD tools can be used effectively without detailed knowledge of how their minimization algorithms are implemented, the reader may find it interesting to gain some insight into how this may be accomplished. In this section we will describe a relatively simple tabular method, which illustrates the main concepts and indicates some of the problems that arise.

A tabular approach for minimization was proposed in the 1950s by Willard Quine [6] and Edward McCluskey [7]. It became popular under the name *Quine-McCluskey method*. While it is not efficient enough to be used in modern CAD tools, it is a simple method that illustrates the key issues. We will present it using the cubical notation discussed in section 4.8.

4.9.1 GENERATION OF PRIME IMPLICANTS

As mentioned in section 4.8, the prime implicants of a given logic function f are the largest possible k -cubes for which $f = 1$. For incompletely specified functions, which include a set of don't-care vertices, the prime implicants are the largest k -cubes for which either $f = 1$ or f is unspecified.

Assume that the initial specification of f is given in terms of minterms for which $f = 1$. Also, let the don't-cares be specified as minterms. This allows us to create a list of vertices for which either $f = 1$ or it is a don't-care condition. We can compare these vertices in pairwise fashion to see if they can be combined into larger cubes. Then we can attempt to combine these new cubes into still larger cubes and continue the process until we find the prime implicants.

The basis of the method is the combining property of Boolean algebra

$$x_i x_j + x_i \bar{x}_j = x_i$$

which we used in section 4.8 to develop the cubical representation. If we have two cubes that are identical in all variables (coordinates) except one, for which one cube has the value 0 and the other has 1, then these cubes can be combined into a larger cube. For example, consider $f(x_1, \dots, x_4) = \{1000, 1001, 1010, 1011\}$. The cubes 1000 and 1001 differ only in variable x_4 ; they can be combined into a new cube 100x. Similarly, 1010 and 1011 can be combined into 101x. Then we can combine 100x and 101x into a larger cube 10xx, which means that the function can be expressed simply as $f = x_1 \bar{x}_2$.

Figure 4.36 shows how we can generate the prime implicants for the function, f , in Figure 4.11. The function is defined as

$$f(x_1, \dots, x_4) = \sum m(0, 4, 8, 10, 11, 12, 13, 15)$$

There are no don't-care conditions. Since larger cubes can be generated only from the minterms that differ in just one variable, we can reduce the number of pairwise comparisons by placing the minterms into groups such that the cubes in each group have the same number

List 1	List 2	List 3																																																					
<table style="width: 100%; border-collapse: collapse;"> <tr><td style="border: 1px solid black; padding: 2px;">0</td><td style="border: 1px solid black; padding: 2px;">0 0 0 0</td><td style="padding: 2px;">✓</td></tr> <tr><td style="border: 1px solid black; padding: 2px;">4</td><td style="border: 1px solid black; padding: 2px;">0 1 0 0</td><td style="padding: 2px;">✓</td></tr> <tr><td style="border: 1px solid black; padding: 2px;">8</td><td style="border: 1px solid black; padding: 2px;">1 0 0 0</td><td style="padding: 2px;">✓</td></tr> <tr><td style="border: 1px solid black; padding: 2px;">10</td><td style="border: 1px solid black; padding: 2px;">1 0 1 0</td><td style="padding: 2px;">✓</td></tr> <tr><td style="border: 1px solid black; padding: 2px;">12</td><td style="border: 1px solid black; padding: 2px;">1 1 0 0</td><td style="padding: 2px;">✓</td></tr> <tr><td style="border: 1px solid black; padding: 2px;">11</td><td style="border: 1px solid black; padding: 2px;">1 0 1 1</td><td style="padding: 2px;">✓</td></tr> <tr><td style="border: 1px solid black; padding: 2px;">13</td><td style="border: 1px solid black; padding: 2px;">1 1 0 1</td><td style="padding: 2px;">✓</td></tr> <tr><td style="border: 1px solid black; padding: 2px;">15</td><td style="border: 1px solid black; padding: 2px;">1 1 1 1</td><td style="padding: 2px;">✓</td></tr> </table>	0	0 0 0 0	✓	4	0 1 0 0	✓	8	1 0 0 0	✓	10	1 0 1 0	✓	12	1 1 0 0	✓	11	1 0 1 1	✓	13	1 1 0 1	✓	15	1 1 1 1	✓	<table style="width: 100%; border-collapse: collapse;"> <tr><td style="border: 1px solid black; padding: 2px;">0,4</td><td style="border: 1px solid black; padding: 2px;">0 x 0 0</td><td style="padding: 2px;">✓</td></tr> <tr><td style="border: 1px solid black; padding: 2px;">0,8</td><td style="border: 1px solid black; padding: 2px;">x 0 0 0</td><td style="padding: 2px;">✓</td></tr> <tr><td style="border: 1px solid black; padding: 2px;">8,10</td><td style="border: 1px solid black; padding: 2px;">1 0 x 0</td><td style="padding: 2px;"></td></tr> <tr><td style="border: 1px solid black; padding: 2px;">4,12</td><td style="border: 1px solid black; padding: 2px;">x 1 0 0</td><td style="padding: 2px;">✓</td></tr> <tr><td style="border: 1px solid black; padding: 2px;">8,12</td><td style="border: 1px solid black; padding: 2px;">1 x 0 0</td><td style="padding: 2px;">✓</td></tr> <tr><td style="border: 1px solid black; padding: 2px;">10,11</td><td style="border: 1px solid black; padding: 2px;">1 0 1 x</td><td style="padding: 2px;"></td></tr> <tr><td style="border: 1px solid black; padding: 2px;">12,13</td><td style="border: 1px solid black; padding: 2px;">1 1 0 x</td><td style="padding: 2px;"></td></tr> <tr><td style="border: 1px solid black; padding: 2px;">11,15</td><td style="border: 1px solid black; padding: 2px;">1 x 1 1</td><td style="padding: 2px;"></td></tr> <tr><td style="border: 1px solid black; padding: 2px;">13,15</td><td style="border: 1px solid black; padding: 2px;">1 1 x 1</td><td style="padding: 2px;"></td></tr> </table>	0,4	0 x 0 0	✓	0,8	x 0 0 0	✓	8,10	1 0 x 0		4,12	x 1 0 0	✓	8,12	1 x 0 0	✓	10,11	1 0 1 x		12,13	1 1 0 x		11,15	1 x 1 1		13,15	1 1 x 1		<table style="width: 100%; border-collapse: collapse;"> <tr><td style="border: 1px solid black; padding: 2px;">0,4,8,12</td><td style="border: 1px solid black; padding: 2px;">x x 0 0</td></tr> </table>	0,4,8,12	x x 0 0
0	0 0 0 0	✓																																																					
4	0 1 0 0	✓																																																					
8	1 0 0 0	✓																																																					
10	1 0 1 0	✓																																																					
12	1 1 0 0	✓																																																					
11	1 0 1 1	✓																																																					
13	1 1 0 1	✓																																																					
15	1 1 1 1	✓																																																					
0,4	0 x 0 0	✓																																																					
0,8	x 0 0 0	✓																																																					
8,10	1 0 x 0																																																						
4,12	x 1 0 0	✓																																																					
8,12	1 x 0 0	✓																																																					
10,11	1 0 1 x																																																						
12,13	1 1 0 x																																																						
11,15	1 x 1 1																																																						
13,15	1 1 x 1																																																						
0,4,8,12	x x 0 0																																																						

Figure 4.36 Generation of prime implicants for the function in Figure 4.11.

of 1s, and sort the groups by the number of 1s. Thus, it will be necessary to compare each cube in a given group only with all cubes in the immediately preceding group. In Figure 4.36, the minterms are ordered in this way in list 1. (Note that we indicated the decimal equivalents of the minterms as well, to facilitate our discussion.) The minterms, which are also called 0-cubes as explained in section 4.8, can be combined into 1-cubes shown in list 2. To make the entries easily understood we indicated the minterms that are combined to form each 1-cube. Next, we check if the 0-cubes are included in the 1-cubes and place a check mark beside each cube that is included. We now generate 2-cubes from the 1-cubes in list 2. The only 2-cube that can be generated is $xx00$, which is placed in list 3. Again, the check marks are placed against the 1-cubes that are included in the 2-cube. Since there exists just one 2-cube, there can be no 3-cubes for this function. The cubes in each list without a check mark are the prime implicants of f . Therefore, the set, P , of prime implicants is

$$\begin{aligned} P &= \{10x0, 101x, 110x, 1x11, 11x1, xx00\} \\ &= \{p_1, p_2, p_3, p_4, p_5, p_6\} \end{aligned}$$

4.9.2 DETERMINATION OF A MINIMUM COVER

Having generated the set of all prime implicants, it is necessary to choose a minimum-cost subset that covers all minterms for which $f = 1$. As a simple measure we will assume that the cost is directly proportional to the number of inputs to all gates, which means to the number of literals in the prime implicants chosen to implement the function.

To find a minimum-cost cover, we construct a *prime implicant cover table* in which there is a row for each prime implicant and a column for each minterm that must be covered. Then we place check marks to indicate the minterms covered by each prime implicant. Figure 4.37a shows the table for the prime implicants derived in Figure 4.36. If there is a single check mark in some column of the cover table, then the prime implicant that covers the minterm of this column is *essential* and it must be included in the final cover. Such is the case with p_6 , which is the only prime implicant that covers minterms 0 and 4. The next step is to remove the row(s) corresponding to the essential prime implicants and the column(s) covered by them. Hence we remove p_6 and columns 0, 4, 8, and 12, which leads to the table in Figure 4.37b.

Now, we can use the concept of *row dominance* to reduce the cover table. Observe that p_1 covers only minterm 10 while p_2 covers both 10 and 11. We say that p_2 *dominates* p_1 . Since the cost of p_2 is the same as the cost of p_1 , it is prudent to choose p_2 rather than p_1 , so we will remove p_1 from the table. Similarly, p_5 dominates p_3 , hence we will remove p_3 from the table. Thus, we obtain the table in Figure 4.37c. This table indicates that we must choose p_2 to cover minterm 10 and p_5 to cover minterm 13, which also takes care of covering minterms 11 and 15. Therefore, the final cover is

$$\begin{aligned} C &= \{p_2, p_5, p_6\} \\ &= \{101x, 11x1, xx00\} \end{aligned}$$

Prime implicant	Minterm								
	0	4	8	10	11	12	13	15	
$p_1 = 1\ 0\ x\ 0$			✓	✓					
$p_2 = 1\ 0\ 1\ x$				✓	✓				
$p_3 = 1\ 1\ 0\ x$						✓	✓		
$p_4 = 1\ x\ 1\ 1$					✓			✓	
$p_5 = 1\ 1\ x\ 1$							✓	✓	
$p_6 = x\ x\ 0\ 0$	✓	✓	✓			✓			

(a) Initial prime implicant cover table

Prime implicant	Minterm			
	10	11	13	15
p_1	✓			
p_2	✓	✓		
p_3			✓	
p_4		✓		✓
p_5			✓	✓

(b) After the removal of essential prime implicants

Prime implicant	Minterm			
	10	11	13	15
p_2	✓	✓		
p_4		✓		✓
p_5			✓	✓

(c) After the removal of dominated rows

Figure 4.37 Selection of a cover for the function in Figure 4.11.

which means that the minimum-cost implementation of the function is

$$f = x_1\bar{x}_2x_3 + x_1x_2x_4 + \bar{x}_3\bar{x}_4$$

This is the same expression as the one derived in section 4.2.2.

In this example we used the concept of row dominance to reduce the cover table. We removed the dominated rows because they cover fewer minterms and the cost of their prime

implicants is the same as the cost of the prime implicants of the dominating rows. However, a dominated row should not be removed if the cost of its prime implicant is less than the cost of the dominating row's prime implicant. An example of this situation can be found in problem 4.25.

The tabular method can be used with don't-care conditions as illustrated in the following example.

The don't-care minterms are included in the initial list in the same way as the minterms for which $f = 1$. Consider the function

$$f(x_1, \dots, x_4) = \sum m(0, 2, 5, 6, 7, 8, 9, 13) + D(1, 12, 15)$$

We encourage the reader to derive a Karnaugh map for this function as an aid in visualizing the derivation that follows. Figure 4.38 depicts the generation of prime implicants, producing the result

$$P = \{00x0, 0x10, 011x, x00x, xx01, 1x0x, x1x1\}$$

$$= \{p_1, p_2, p_3, p_4, p_5, p_6, p_7\}$$

The initial prime implicant cover table is shown in Figure 4.39a. The don't-care minterms are not included in the table because they do not have to be covered. There are no essential prime implicants. Examining this table, we see that column 8 has check marks in the same rows as column 9. Moreover, column 9 has an additional check mark in row p_5 . Hence column 9 dominates column 8. We refer to this as the concept of *column dominance*. When one column dominates another, we can remove the dominating column, which is

List 1	List 2	List 3
0	0,1	0,1,8,9
1	0,2	1,5,9,13
2	0,8	8,9,12,13
8	1,5	5,7,13,15
5	2,6	
6	1,9	
9	8,9	
12	8,12	
7	5,7	
13	6,7	
15	5,13	
	9,13	
	12,13	
	7,15	
	13,15	

Figure 4.38 Generation of prime implicants for the function in Example 4.14.

Prime implicant	Minterm								
	0	2	5	6	7	8	9	13	
$p_1 = 0\ 0\ x\ 0$	✓	✓							
$p_2 = 0\ x\ 1\ 0$		✓		✓					
$p_3 = 0\ 1\ 1\ x$				✓	✓				
$p_4 = x\ 0\ 0\ x$	✓						✓	✓	
$p_5 = x\ x\ 0\ 1$			✓				✓	✓	
$p_6 = 1\ x\ 0\ x$							✓	✓	✓
$p_7 = x\ 1\ x\ 1$			✓		✓			✓	

(a) Initial prime implicant cover table

Prime implicant	Minterm					
	0	2	5	6	7	8
$p_1 = 0\ 0\ x\ 0$	✓	✓				
$p_2 = 0\ x\ 1\ 0$		✓		✓		
$p_3 = 0\ 1\ 1\ x$				✓	✓	
$p_4 = x\ 0\ 0\ x$	✓					✓
$p_5 = x\ x\ 0\ 1$			✓			
$p_6 = 1\ x\ 0\ x$						✓
$p_7 = x\ 1\ x\ 1$			✓		✓	

(b) After the removal of columns 9 and 13

Prime implicant	Minterm					
	0	2	5	6	7	8
p_1	✓	✓				
p_2		✓		✓		
p_3				✓	✓	
p_4	✓					✓
p_7			✓		✓	

(c) After the removal of rows p_5 and p_6

Prime implicant	Minterm	
	2	6
p_1	✓	
p_2	✓	✓
p_3		✓

(d) After including p_4 and p_7 in the cover

Figure 4.39 Selection of a cover for the function in Example 4.14.

column 9 in this case. Note that this is in contrast to rows where we remove dominated (rather than dominating) rows. The reason is that when we choose a prime implicant to cover the minterm that corresponds to the dominated column, this prime implicant will also cover the minterm corresponding to the dominating column. In our example, choosing either p_4 or p_6 covers both minterms 8 and 9. Similarly, column 13 dominates column 5, hence column 13 can be deleted.

After removing columns 9 and 13, we obtain the reduced table in Figure 4.39b. In this table row p_4 dominates p_6 and row p_7 dominates p_5 . This means that p_5 and p_6 can be removed, giving the table in Figure 4.39c. Now, p_4 and p_7 are essential to cover minterms 8 and 5, respectively. Thus, the table in Figure 4.39d is obtained, from which it is obvious that p_2 covers the remaining minterms 2 and 6. Note that row p_2 dominates both rows p_1 and p_3 .

The final cover is

$$\begin{aligned} C &= \{p_2, p_4, p_7\} \\ &= \{0x10, x00x, x1x1\} \end{aligned}$$

and the function is implemented as

$$f = \bar{x}_1x_3\bar{x}_4 + \bar{x}_2\bar{x}_3 + x_2x_4$$

In Figures 4.37 and 4.39, we used the concept of row and column dominance to reduce the cover table. This is not always possible, as illustrated in the following example.

Consider the function

$$f(x_1, \dots, x_4) = \sum m(0, 3, 10, 15) + D(1, 2, 7, 8, 11, 14)$$

The prime implicants for this function are

$$\begin{aligned} P &= \{00xx, x0x0, x01x, xx11, 1x1x\} \\ &= \{p_1, p_2, p_3, p_4, p_5\} \end{aligned}$$

The initial prime implicant cover table is shown in Figure 4.40a. There are no essential prime implicants. Also, there are no dominant rows or columns. Moreover, all prime implicants have the same cost because each of them is implemented with two literals. Thus, the table does not provide any clues that can be used to select a minimum-cost cover.

A good practical approach is to use the concept of *branching*, which was introduced in section 4.2.2. We can choose any prime implicant, say p_3 , and first choose to include this prime implicant in the final cover. Then we can determine the rest of the final cover in the usual way and compute its cost. Next we try the other possibility by excluding p_3 from the final cover and determine the resulting cost. We compare the costs and choose the less expensive alternative.

Figure 4.40b gives the cover table that is left if p_3 is included in the final cover. The table does not include minterms 3 and 10 because they are covered by p_3 . The table indicates

Prime implicant	Minterm			
	0	3	10	15
$p_1 = 0\ 0\ x\ x$	✓	✓		
$p_2 = x\ 0\ x\ 0$	✓		✓	
$p_3 = x\ 0\ 1\ x$		✓	✓	
$p_4 = x\ x\ 1\ 1$		✓		✓
$p_5 = 1\ x\ 1\ x$			✓	✓

(a) Initial prime implicant cover table

Prime implicant	Minterm	
	0	15
p_1	✓	
p_2	✓	
p_4		✓
p_5		✓

(b) After including p_2 in the cover

Prime implicant	Minterm			
	0	3	10	15
p_1	✓	✓		
p_2	✓		✓	
p_4		✓		✓
p_5			✓	✓

(c) After excluding p_2 from the cover

Figure 4.40 Selection of a cover for the function in Example 4.15.

that a complete cover must include either p_1 or p_2 to cover minterm 0 and either p_4 or p_5 to cover minterm 15. Therefore, a complete cover can be

$$C = \{p_1, p_3, p_4\}$$

The alternative of excluding p_3 leads to the cover table in Figure 4.40c. Here, we see that a minimum-cost cover requires only two prime implicants. One possibility is to choose p_1

and p_5 . The other possibility is to choose p_2 and p_4 . Hence a minimum-cost cover is just

$$\begin{aligned} C_{min} &= \{p_1, p_5\} \\ &= \{00xx, 1x1x\} \end{aligned}$$

The function is realized as

$$f = \bar{x}_1\bar{x}_2 + x_1x_3$$

4.9.3 SUMMARY OF THE TABULAR METHOD

The tabular method can be summarized as follows:

1. Starting with a list of cubes that represent the minterms where $f = 1$ or a don't-care condition, generate the prime implicants by successive pairwise comparisons of the cubes.
2. Derive a cover table which indicates the minterms where $f = 1$ that are covered by each prime implicant.
3. Include the essential prime implicants (if any) in the final cover and reduce the table by removing both these prime implicants and the covered minterms.
4. Use the concept of row and column dominance to reduce the cover table further. A dominated row is removed only if the cost of its prime implicant is greater than or equal to the cost of the dominating row's prime implicant.
5. Repeat steps 3 and 4 until the cover table is either empty or no further reduction of the table is possible.
6. If the reduced cover table is not empty, then use the branching approach to determine the remaining prime implicants that should be included in a minimum cost cover.

The tabular method illustrates how an algebraic technique can be used to generate the prime implicants. It also shows a simple approach for dealing with the covering problem, to find a minimum-cost cover. The method has some practical limitations. In practice, functions are seldom defined in the form of minterms. They are usually given either in the form of algebraic expressions or as sets of cubes. The need to start the minimization process with a list of minterms means that the expressions or sets have to be expanded into this form. This list may be very large. As larger cubes are generated, there will be numerous comparisons performed and the computation will be slow. Using the cover table to select the optimal set of prime implicants is also computationally intensive when large functions are involved.

Many algebraic techniques have been developed, which aim to reduce the time that it takes to generate the optimal covers. While most of these techniques are beyond the scope of this book, we will briefly discuss one possible approach in the next section. A reader who intends to use the CAD tools, but is not interested in the details of automated minimization, may skip this section without loss of continuity.

4.10 A CUBICAL TECHNIQUE FOR MINIMIZATION

Assume that the initial specification of a function f is given in terms of implicants that are not necessarily either minterms or prime implicants. Then it is convenient to define an operation that will generate other implicants that are not given explicitly in the initial specification, but which will eventually lead to the prime implicants of f . One such possibility is known as the **-product* operation, which is usually pronounced the “star-product” operation. We will refer to it simply as the **-operation*.

*-Operation

The **-operation* provides a simple way of deriving a new cube by combining two cubes that differ in the value of only one variable. Let $A = A_1A_2 \cdots A_n$ and $B = B_1B_2 \cdots B_n$ be two cubes that are implicants of an n -variable function. Thus each coordinate A_i and B_i is specified as having the value 0, 1, or x . There are two distinct steps in the **-operation*. First, the **-operation* is evaluated for each pair A_i and B_i , in coordinates $i = 1, 2, \dots, n$, according to the table in Figure 4.41. Then based on the results of using the table, a set of rules is applied to determine the overall result of the **-operation*. The table in Figure 4.41 defines the coordinate **-operation*, $A_i * B_i$. It specifies the result of $A_i * B_i$ for each possible combination of values of A_i and B_i . This result is the intersection (i.e., the common part) of A and B in this coordinate. Note that when A_i and B_i have the opposite values (0 and 1, or vice versa), the result of the coordinate **-operation* is indicated by the symbol \emptyset . We say that the intersection of A_i and B_i is empty. Using the table, the complete **-operation* for A and B is defined as follows:

$$C = A * B, \text{ such that}$$

1. $C = \emptyset$ if $A_i * B_i = \emptyset$ for more than one i .
2. Otherwise, $C_i = A_i * B_i$ when $A_i * B_i \neq \emptyset$, and $C_i = x$ for the coordinate where $A_i * B_i = \emptyset$.

For example, let $A = \{0x0\}$ and $B = \{111\}$. Then $A_1 * B_1 = 0 * 1 = \emptyset$, $A_2 * B_2 = x * 1 = 1$, and $A_3 * B_3 = 0 * 1 = \emptyset$. Because the result is \emptyset in two coordinates, it follows from condition 1 that $A * B = \emptyset$. In other words, these two cubes cannot be combined into another cube, because they differ in two coordinates.

As another example, consider $A = \{11x\}$ and $B = \{10x\}$. In this case $A_1 * B_1 = 1 * 1 = 1$, $A_2 * B_2 = 1 * 0 = \emptyset$, and $A_3 * B_3 = x * x = x$. According to condition 2 above, $C_1 = 1$,

$A_i \backslash B_i$	0	1	x	
0	0	\emptyset	0	$A_i * B_i$
1	\emptyset	1	1	
x	0	1	x	

Figure 4.41 The coordinate **-operation*.

$C_2 = x$, and $C_3 = x$, which gives $C = A * B = \{1xx\}$. A larger 2-cube is created from two 1-cubes that differ in one coordinate only.

The result of the $*$ -operation may be a smaller cube than the two cubes involved in the operation. Consider $A = \{1x1\}$ and $B = \{11x\}$. Then $C = A * B = \{111\}$. Notice that C is included in both A and B , which means that this cube will not be useful in searching for prime implicants. Therefore, it should be discarded by the minimization algorithm.

As a final example, consider $A = \{x10\}$ and $B = \{0x1\}$. Then $C = A * B = \{01x\}$. All three of these cubes are the same size, but C is not included in either A or B . Hence C has to be considered in the search for prime implicants. The reader may find it helpful to draw a Karnaugh map to see how cube C is related to cubes A and B .

Using the $*$ -Operation to Find Prime Implicants

The essence of the $*$ -operation is to find new cubes from pairs of existing cubes. In particular, it is of interest to find new cubes that are not included in the existing cubes. A procedure for finding the prime implicants may be organized as follows.

Suppose that a function f is specified by means of a set of implicants that are represented as cubes. Let this set be denoted as the cover C^k of f . Let c^i and c^j be any two cubes in C^k . Then apply the $*$ -operation to all pairs of cubes in C^k ; let G^{k+1} be the set of newly generated cubes. Hence

$$G^{k+1} = c^i * c^j \text{ for all } c^i, c^j \in C^k$$

Now a new cover for f may be formed by using the cubes in C^k and G^{k+1} . Some of these cubes may be redundant because they are included in other cubes; they should be removed. Let the new cover be

$$C^{k+1} = C^k \cup G^{k+1} - \text{redundant cubes}$$

where \cup denotes the logical union of two sets, and the minus sign ($-$) denotes the removal of elements of a set. If $C^{k+1} \neq C^k$, then a new cover C^{k+2} is generated using the same process. If $C^{k+1} = C^k$, then the cubes in the cover are the prime implicants of f . For an n -variable function, it is necessary to repeat the step at most n times.

Redundant cubes that have to be removed are identified through pairwise comparison of cubes. Cube $A = A_1A_2 \cdots A_n$ should be removed if it is included in some cube $B = B_1B_2 \cdots B_n$, which is the case if $A_i = B_i$ or $B_i = x$ for every coordinate i .

Consider the function $f(x_1, x_2, x_3)$ of Figure 4.9. Assume that f is initially specified as a set of vertices that correspond to the minterms, m_0, m_1, m_2, m_3 , and m_7 . Hence let the initial cover be $C^0 = \{000, 001, 010, 011, 111\}$. Using the $*$ -operation to generate a new set of cubes, we obtain $G^1 = \{00x, 0x0, 0x1, 01x, x11\}$. Then $C^1 = C^0 \cup G^1 - \text{redundant cubes}$. Observe that each cube in C^0 is included in one of the cubes in G^1 ; therefore, all cubes in C^0 are redundant. Thus $C^1 = G^1$.

The next step is to apply the $*$ -operation to the cubes in C^1 , which yields $G^2 = \{000, 001, 0xx, 0x1, 010, 01x, 011\}$. Note that all of these cubes are included in the cube $0xx$;

therefore, all but $0xx$ are redundant. Now it is easy to see that

$$\begin{aligned} C^2 &= C^1 \cup G^2 - \text{redundant terms} \\ &= \{x11, 0xx\} \end{aligned}$$

since all cubes of C^1 , except $x11$, are redundant because they are covered by $0xx$.

Applying the $*$ -operation to C^2 yields $G^3 = \{011\}$ and

$$\begin{aligned} C^3 &= C^2 \cup G^3 - \text{redundant terms} \\ &= \{x11, 0xx\} \end{aligned}$$

Since $C^3 = C^2$, the conclusion is that the prime implicants of f are the cubes $\{x11, 0xx\}$, which represent the product terms x_2x_3 and \bar{x}_1 . This is the same set of prime implicants that we derived using a Karnaugh map in Figure 4.9.

Observe that the derivation of prime implicants in this example is similar to the tabular method explained in section 4.9 because the starting point was a function, f , given as a set of minterms.

7 As another example, consider the four-variable function of Figure 4.10. Assume that this function is initially specified as the cover $C^0 = \{0101, 1101, 1110, 011x, x01x\}$. Then successive applications of the $*$ -operation and removing the redundant terms gives

$$\begin{aligned} C^1 &= \{x01x, x101, 01x1, x110, 1x10, 0x1x\} \\ C^2 &= \{x01x, x101, 01x1, 0x1x, xx10\} \\ C^3 &= C^2 \end{aligned}$$

Therefore, the prime implicants are \bar{x}_2x_3 , $x_2\bar{x}_3x_4$, $\bar{x}_1x_2x_4$, \bar{x}_1x_3 , and $x_3\bar{x}_4$.

4.10.1 DETERMINATION OF ESSENTIAL PRIME IMPLICANTS

From a cover that consists of all prime implicants, it is necessary to extract a minimal cover. As we saw in section 4.2.2, all *essential* prime implicants must be included in the minimal cover. To find the essential prime implicants, it is useful to define an operation that determines a part of a cube (implicant) that is *not* covered by another cube. One such operation is called the *#-operation* (pronounced the “sharp operation”), which is defined as follows.

#-Operation

Again, let $A = A_1A_2 \cdots A_n$ and $B = B_1B_2 \cdots B_n$ be two cubes (implicants) of an n -variable function. The sharp operation $A\#B$ leaves as a result “that part of A that is not covered by B .” Similar to the $*$ -operation, the $\#$ -operation has two steps: $A_i\#B_i$ is evaluated for each coordinate i , and then a set of rules is applied to determine the overall

$A_i \backslash B_i$	0	1	x	
0	ε	\emptyset	ε	$A_i \# B_i$
1	\emptyset	ε	ε	
x	1	0	ε	

Figure 4.42 The coordinate #-operation.

result. The sharp operation for each coordinate is defined in Figure 4.42. After this operation is performed for all pairs (A_i, B_i) , the complete #-operation is defined as follows:

$$C = A \# B, \text{ such that}$$

1. $C = A$ if $A_i \# B_i = \emptyset$ for some i .
2. $C = \emptyset$ if $A_i \# B_i = \varepsilon$ for all i .
3. Otherwise, $C = \bigcup_i (A_1, A_2, \dots, \bar{B}_i, \dots, A_n)$, where the union is for all i for which $A_i = x$ and $B_i \neq x$.

The first condition corresponds to the case where cubes A and B do not intersect at all; namely, A and B differ in the value of at least one variable, which means that no part of A is covered by B . For example, let $A = 0x1$ and $B = 11x$. The coordinate #-products are $A_1 \# B_1 = \emptyset$, $A_2 \# B_2 = 0$, and $A_3 \# B_3 = \varepsilon$. Then from rule 1 it follows that $0x1 \# 11x = 0x1$. The second condition reflects the case where A is fully covered by B . For example, $0x1 \# 0xx = \emptyset$. The third condition is for the case where only a part of A is covered by B . In this case the #-operation generates one or more cubes. Specifically, it generates one cube for each coordinate i that is x in A_i , but is not x in B_i . Each cube generated is identical to A , except that A_i is replaced by \bar{B}_i . For example, $0xx \# 01x = 00x$, and $0xx \# 010 = \{00x, 0x1\}$.

We will now show how the #-operation can be used to find the essential prime implicants. Let P be the set of all prime implicants of a given function f . Let p^i denote one prime implicant in the set P and let DC denote the don't-care vertices for f . (We use superscripts to refer to different prime implicants in this section because we are using subscripts to refer to coordinate positions in cubes.) Then p^i is an essential prime implicant if and only if

$$p^i \# (P - p^i) \# DC \neq \emptyset$$

This means that p^i is essential if there exists at least one vertex for which $f = 1$ that is covered by p^i , but not by any other prime implicant. The #-operation is also performed with the set of don't-care cubes because vertices in p^i that correspond to don't-care conditions are not essential to cover. The meaning of $p^i \# (P - p^i)$ is that the #-operation is applied successively to each prime implicant in P . For example, consider $P = \{p^1, p^2, p^3, p^4\}$ and $DC = \{d^1, d^2\}$. To check whether p^3 is essential, we evaluate

$$(((p^3 \# p^1) \# p^2) \# p^4) \# d^1) \# d^2$$

If the result of this expression is not \emptyset , then p^3 is essential.

8 In Example 4.16 we determined that the cubes $x11$ and $0xx$ are the prime implicants of the function f in Figure 4.9. We can discover whether each of these prime implicants is essential as follows

$$x11 \# 0xx = 111 \neq \emptyset$$

$$0xx \# x11 = \{00x, 0x0\} \neq \emptyset$$

The cube $x11$ is essential because it is the only prime implicant that covers the vertex 111 , for which $f = 1$. The prime implicant $0xx$ is essential because it is the only one that covers the vertices 000 , 001 , and 010 . This can be seen in the Karnaugh map in Figure 4.9.

9 In Example 4.17 we found that the prime implicants of the function in Figure 4.10 are $P = \{x01x, x101, 01x1, 0x1x, xx10\}$. Because this function has no don't-cares, we compute

$$x01x \# (P - x01x) = 1011 \neq \emptyset$$

This is computed in the following steps: $x01x \# x101 = x01x$, then $x01x \# 01x1 = x01x$, then $x01x \# 0x1x = 101x$, and finally $101x \# xx10 = 1011$. Similarly, we obtain

$$x101 \# (P - x101) = 1101 \neq \emptyset$$

$$01x1 \# (P - 01x1) = \emptyset$$

$$0x1x \# (P - 0x1x) = \emptyset$$

$$xx10 \# (P - xx10) = 1110 \neq \emptyset$$

Therefore, the essential prime implicants are $x01x$, $x101$, and $xx10$ because they are the only ones that cover the vertices 1011 , 1101 , and 1110 , respectively. This is obvious from the Karnaugh map in Figure 4.10.

When checking whether a cube A is essential, the $\#$ -operation with one of the cubes in $P - A$ may generate multiple cubes. If so, then each of these cubes has to be checked using the $\#$ -operation with all of the remaining cubes in $P - A$.

4.10.2 COMPLETE PROCEDURE FOR FINDING A MINIMAL COVER

Having introduced the $*$ - and $\#$ -operations, we can now outline a complete procedure for finding a minimal cover for any n -variable function. Assume that the function f is specified in terms of vertices for which $f = 1$; these vertices are often referred to as the *ON-set* of the function. Also, assume that the don't-care conditions are specified as a *DC-set*. Then the initial cover for f is a union of the ON and DC sets.

Prime implicants of f can be generated using the $*$ -operation, as explained in section 4.10. Then the $\#$ -operation can be used to find the essential prime implicants as presented in section 4.10.1. If the essential prime implicants cover the entire ON-set, then they form the minimum-cost cover for f . Otherwise, it is necessary to include other prime implicants until all vertices in the ON-set are covered.

A nonessential prime implicant p^i should be deleted if there exists a less-expensive prime implicant p^j that covers all vertices of the ON-set that are covered by p^i . If the remaining nonessential prime implicants have the same cost, then a possible heuristic approach is to arbitrarily select one of them, include it in the cover, and determine the rest of the cover. Then an alternative cover is generated by excluding this prime implicant, and the lower-cost cover is chosen for implementation. We already used this approach, which is often referred to as the *branching heuristic*, in sections 4.2.2 and 4.9.2.

The preceding discussion can be summarized in the form of the following minimization procedure:

1. Let $C^0 = ON \cup DC$ be the initial cover of function f and its don't-care conditions.
2. Find all prime implicants of C^0 using the $*$ -operation; let P be this set of prime implicants.
3. Find the essential prime implicants using the $\#$ -operation. A prime implicant p^i is essential if $p^i \# (P - p^i) \# DC \neq \emptyset$. If the essential prime implicants cover all vertices of the ON-set, then these implicants form the minimum-cost cover.
4. Delete any nonessential p^i that is more expensive (i.e., a smaller cube) than some other prime implicant p^j if $p^i \# DC \# p^j = \emptyset$.
5. Choose the lowest-cost prime implicants to cover the remaining vertices of the ON-set. Use the branching heuristic on the prime implicants of equal cost and retain the cover with the lowest cost.

To illustrate the minimization procedure, we will use the function

$$f(x_1, x_2, x_3, x_4, x_5) = \sum m(0, 1, 4, 8, 13, 15, 20, 21, 23, 26, 31) + D(5, 10, 24, 28)$$

To help the reader follow the discussion, this function is also shown in the form of a Karnaugh map in Figure 4.43.

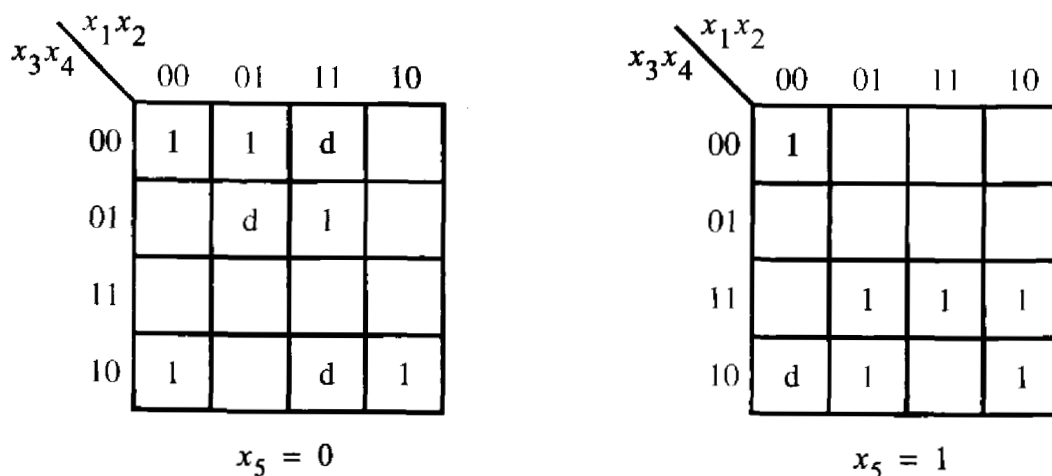


Figure 4.43 The function for Example 4.20.

Instead of f being specified in terms of minterms, let us assume that f is given as the following SOP expression

$$f = \bar{x}_1\bar{x}_3\bar{x}_4\bar{x}_5 + x_1x_2\bar{x}_3x_4\bar{x}_5 + \bar{x}_1\bar{x}_2\bar{x}_3\bar{x}_4x_5 + \bar{x}_1x_2x_3x_5 + x_1\bar{x}_2x_3x_5 + x_1x_3x_4x_5 + \bar{x}_2x_3\bar{x}_4\bar{x}_5$$

Also, we will assume that don't-cares are specified using the expression

$$DC = x_1x_2\bar{x}_4\bar{x}_5 + \bar{x}_1x_2\bar{x}_3x_4\bar{x}_5 + \bar{x}_1\bar{x}_2x_3\bar{x}_4x_5$$

Thus, the ON-set expressed as cubes is

$$ON = \{0x000, 11010, 00001, 011x1, 101x1, 1x111, x0100\}$$

and the don't-care set is

$$DC = \{11x00, 01010, 00101\}$$

The initial cover C^0 consists of the ON-set and the DC-set:

$$C^0 = \{0x000, 11010, 00001, 011x1, 101x1, 1x111, x0100, 11x00, 01010, 00101\}$$

Using the $*$ -operation, the subsequent covers obtained are

$$C^1 = \{0x000, 011x1, 101x1, 1x111, x0100, 11x00, 0000x, 00x00, x1000, 010x0, 110x0, x1010, 00x01, x1111, 0x101, 1010x, x0101, 1x100, 0010x\}$$

$$C^2 = \{0x000, 011x1, 101x1, 1x111, 11x00, x1111, 0x101, 1x100, x010x, 00x0x, x10x0\}$$

$$C^3 = C^2$$

Therefore, $P = C^2$.

Using the $\#$ -operation, we find that there are two essential prime implicants: $00x0x$ (because it is the only one that covers the vertex 00001) and $x10x0$ (because it is the only one that covers the vertex 11010). The minterms of f covered by these two prime implicants are $m(0, 1, 4, 8, 26)$.

Next, we find that $1x100$ can be deleted because the only ON-set vertex that it covers is 10100 (m_{20}), which is also covered by $x010x$ and the cost of this prime implicant is lower. Note that having removed $1x100$, the prime implicant $x010x$ becomes essential because none of the other remaining prime implicants covers the vertex 10100 . Therefore, $x010x$ has to be included in the final cover. It covers $m(20, 21)$.

There remains to find prime implicants to cover $m(13, 15, 23, 31)$. Using the branching heuristic, the lowest-cost cover is obtained by including the prime implicants $011x1$ and $1x111$. Thus the final cover is

$$C_{\text{minimum}} = \{00x0x, x10x0, x010x, 011x1, 1x111\}$$

The corresponding sum-of-products expression is

$$f = \bar{x}_1\bar{x}_2\bar{x}_4 + x_2\bar{x}_3\bar{x}_5 + \bar{x}_2x_3\bar{x}_4 + \bar{x}_1x_2x_3x_5 + x_1x_3x_4x_5$$

Although this procedure is tedious when performed by hand, it is not difficult to write a computer program to implement the algorithm automatically. The reader should check the validity of our solution by finding the optimal realization from the Karnaugh map in Figure 4.43.

4.11 PRACTICAL CONSIDERATIONS

The purpose of the preceding section was to give the reader some idea about how minimization of logic functions may be automated for use in CAD tools. We chose a scheme that is not too difficult to explain. From the practical point of view, this scheme has some drawbacks. The main difficulty is that the number of cubes that must be considered in the process can be extremely large.

If the goal of minimization is relaxed so that it is not imperative to find a minimum-cost implementation, then it is possible to derive heuristic techniques that produce good results in reasonable time. A technique of this type forms the basis of the widely used Espresso program, which is available from the University of California at Berkeley via the World Wide Web. Espresso is a two-level optimization program. Both input to the program and its output are specified in the format of cubes. Instead of using the $*$ -operation to find the prime implicants, Espresso uses an implicant-expansion technique. (See problem 4.30 for an illustration of the expansion of implicants.) A comprehensive explanation of Espresso is given in [19], while simplified outlines can be found in [3, 12].

The University of California at Berkeley also provides two software programs that can be used for design of multilevel circuits, called MIS [20] and SIS [21]. They allow a user to apply various multilevel optimization techniques to a logic circuit. The user can experiment with different optimization strategies by applying techniques such as factoring and decomposition to all or part of a circuit. SIS also includes the Espresso algorithm for two-level minimization of functions, as well as many other optimization techniques.

Numerous commercial CAD systems are on the market. Four companies whose products are widely used are Cadence Design Systems, Mentor Graphics, Synopsys, and Synplicity. Information on their products is available on the World Wide Web. Each company provides logic synthesis software that can be used to target various types of chips, such as PLDs, gate arrays, standard cells, and custom chips. Because there are many possible ways to synthesize a given circuit, as we saw in the previous sections, each commercial product uses a proprietary logic optimization strategy based on heuristics.

To describe CAD tools, some new terminology has been invented. In particular, we should mention two terms that are widely used in industry: *technology-independent logic synthesis* and *technology mapping*. The first term refers to techniques that are applied when optimizing a circuit without considering the resources available in the target chip. Most of the techniques presented in this chapter are of this type. The second term, technology mapping, refers to techniques that are used to ensure that the circuit produced by logic synthesis can be realized using the logic resources available in the target chip. A good example of technology mapping is the transformation from a circuit in the form of logic operations such as AND and OR into a circuit that consists of only NAND operations. This type of technology mapping is done when targeting a circuit to a gate array that contains only NAND gates. Another example is the translation from logic operations to lookup tables, which is done when targeting a design to an FPGA.

Chapter 12 discusses the CAD tools in detail. It presents a typical design flow that a designer may use to implement a digital system.

4.12 EXAMPLES OF CIRCUITS SYNTHESIZED FROM VHDL CODE

Section 2.10 shows how simple VHDL programs can be written to describe logic functions. This section introduces additional features of VHDL and provides further examples of circuits designed using VHDL code.

Recall that a logic signal is represented in VHDL as a data object, and each data object has an associated type. In the examples in section 2.10, all data objects have the type BIT, which means that they can assume only the values 0 and 1. To give more flexibility, VHDL provides another data type called *STD_LOGIC*. Signals represented using this type can have several different values.

As its name implies, *STD_LOGIC* is meant to serve as the standard data type for representation of logic signals. An example using the *STD_LOGIC* type is given in Figure 4.44. The logic expression for f corresponds to the truth table in Figure 4.1; it describes f in the canonical form, which consists of minterms. To use the *STD_LOGIC* type, VHDL code must include the two lines given at the beginning of the figure. These statements serve as directives to the VHDL compiler. They are needed because the original VHDL standard, IEEE 1076, did not include the *STD_LOGIC* type. The way that the new type was added to the language, in the IEEE 1164 standard, was to provide the definition of *STD_LOGIC* as a set of files that can be included with VHDL code when compiled. The set of files is called a *library*. The purpose of the first line in Figure 4.44 is to declare that the code will make use of the IEEE library.

```

LIBRARY ieee ;
USE ieee.std_logic_1164.all ;

ENTITY func1 IS
    PORT ( x1, x2, x3 : IN  STD_LOGIC ;
          f          : OUT STD_LOGIC ) ;
END func1 ;

ARCHITECTURE LogicFunc OF func1 IS
BEGIN
    f <= (NOT x1 AND NOT x2 AND NOT x3) OR
        (NOT x1 AND x2 AND NOT x3) OR
        (x1 AND NOT x2 AND NOT x3) OR
        (x1 AND NOT x2 AND x3) OR
        (x1 AND x2 AND NOT x3) ;
END LogicFunc ;

```

Figure 4.44 The VHDL code for the function in Figure 4.1.

In VHDL there are two main aspects to the definition of a new data type. First, the set of values that a data object of the new type can assume must be specified. For `STD_LOGIC`, there are a number of legal values, but the ones that are the most important for describing logic functions are 0, 1, Z, and $-$. We introduced the logic value Z, which represents the high-impedance state, in section 3.8.8. The $-$ logic value represents the don't-care condition, which we labeled as d in section 4.4. The second requirement is that all legal uses in VHDL code of the new data type must be specified. For example, it is necessary to specify that the type `STD_LOGIC` is legal for use with Boolean operators.

In the IEEE library one of the files defines the `STD_LOGIC` data type itself and specifies some basic legal uses, such as for Boolean operations. In Figure 4.44 the second line of code tells the VHDL compiler to use the definitions in this file when compiling the code. The file encapsulates the definition of `STD_LOGIC` in what is known as a *package*. The package is named `std_logic_1164`. It is possible to instruct the VHDL compiler to use only a subset of the package, but the normal use is to specify the word *all* to indicate that the entire package is of interest, as we have done in the figure.

For the examples of VHDL code given in this book, we will almost always use only the type `STD_LOGIC`. Besides simplifying the code, using just one data type has another benefit. VHDL is a strongly type-checked language. This means that the VHDL compiler carefully checks all data object assignment statements to ensure that the type of the data object on the left side of the assignment statement is exactly the same as the type of the data object on the right side. Even if two data objects seem compatible from an intuitive point of view, such as an object of type `BIT` and one of type `STD_LOGIC`, the VHDL compiler will not allow one to be assigned to the other. Many synthesis tools provide conversion utilities to convert from one type to another, but we will avoid this issue by using only the `STD_LOGIC` data type in most cases. In the remainder of this section, a few examples of VHDL code are presented. We show the results of synthesizing the code for implementation in two different types of chips, a CPLD and an FPGA.

We compiled the VHDL code in Figure 4.44 for implementation in a CPLD, and the CAD tools produced the expression

$$f = \bar{x}_3 + x_1\bar{x}_2$$

which is the minimal sum-of-products form that we derived using the Karnaugh map in Figure 4.5b. Figure 4.45 shows how this expression may be implemented in a CPLD. The switches that are programmed to be closed are shown in blue. The gates used to implement f are also highlighted in blue. Observe that only the top two AND gates are used in this case. The bottom three AND gates have no effect because each is connected to both the true and complemented versions of an unused input, which causes the output of the AND gate to be 0.

Figure 4.46 gives the results of synthesizing the VHDL code in Figure 4.44 into an FPGA. We assume that the compiler generates the same sum-of-products form as above. Because the logic cells in the chip are four-input lookup tables, only a single logic cell is needed for this function. The figure shows that the variables x_1 , x_2 , and x_3 are connected

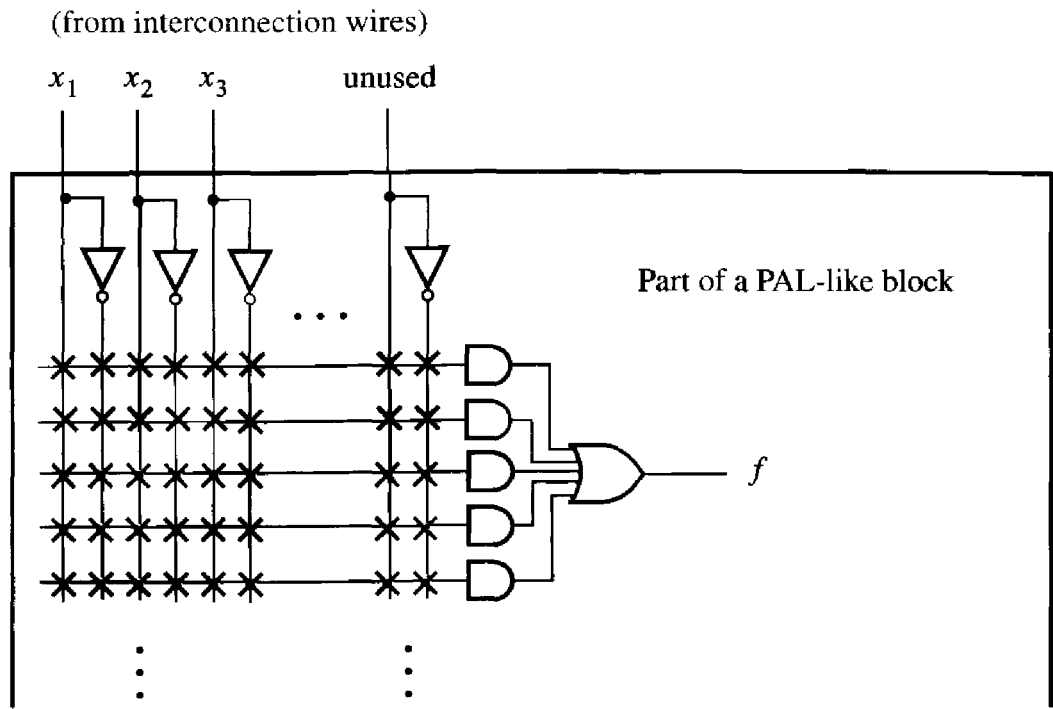


Figure 4.45 Implementation of the VHDL code in Figure 4.44.

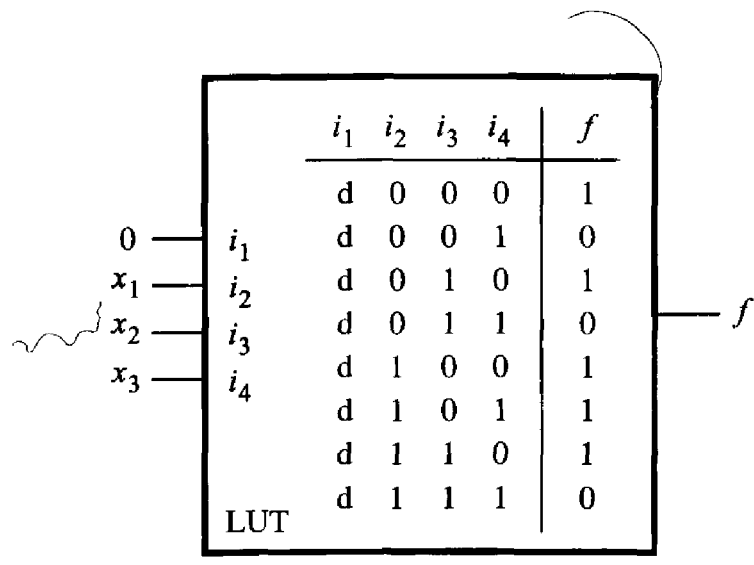


Figure 4.46 The VHDL code in Figure 4.44 implemented in a LUT.

to the LUT inputs called i_2 , i_3 , and i_4 . Input i_1 is not used because the function requires only three inputs. The truth table in the LUT indicates that the unused input is treated as a don't-care. Thus only half of the rows in the table are shown, since the other half is identical. The unused LUT input is shown connected to 0 in the figure, but it could just as well be connected to 1.

It is interesting to consider the benefits provided by the optimizations used in logic synthesis. For the implementation in the CPLD, the function was simplified from the

original five product terms in the canonical form to just two product terms. However, both the optimized and nonoptimized forms fit into a single macrocell in the chip, and thus they have the same cost (the macrocell in Figure 4.45 has five product terms). Similarly, for the FPGA it does not matter whether the function is minimized, because it fits in a single LUT. The reason is that our example circuit is very small. For large circuits it is essential to perform the optimization. Examples 4.22 and 4.23 illustrate logic functions for which the cost of implementation is reduced when optimized.

The VHDL code in Figure 4.47 corresponds to the function f_1 in Figure 4.7. Since there are six product terms in the canonical form, two macrocells of the type in Figure 4.45 would be needed. When synthesized by the CAD tools, the resulting expression might be

$$f = \bar{x}_2x_3 + x_1\bar{x}_3x_4$$

which is the same as the expression derived in Figure 4.7. Because the optimized expression has only two product terms, it can be realized using just one macrocell and hence results in a lower cost.

When f_1 is synthesized for implementation in an FPGA, the expression generated may be the same as for the CPLD. Since the function has only four inputs, it needs just one LUT.

```

LIBRARY ieee ;
USE ieee.std_logic_1164.all ;

ENTITY func2 IS
    PORT ( x1, x2, x3, x4 : IN  STD_LOGIC ;
          f              : OUT STD_LOGIC ) ;
END func2 ;

ARCHITECTURE LogicFunc OF func2 IS
BEGIN
    f <= (NOT x1 AND NOT x2 AND x3 AND NOT x4) OR
        (NOT x1 AND NOT x2 AND x3 AND x4) OR
        (x1 AND NOT x2 AND NOT x3 AND x4) OR
        (x1 AND NOT x2 AND x3 AND NOT x4) OR
        (x1 AND NOT x2 AND x3 AND x4) OR
        (x1 AND x2 AND NOT x3 AND x4) ;
END LogicFunc ;

```

Figure 4.47 The VHDL code for f_1 in Figure 4.7.


```

LIBRARY ieee ;
USE ieee.std_logic_1164.all ;

ENTITY func3 IS
    PORT ( x1, x2, x3, x4, x5, x6, x7 : IN    STD_LOGIC ;
          f                               : OUT STD_LOGIC ) ;
END func3 ;

ARCHITECTURE LogicFunc OF func3 IS
BEGIN
    f <= (x1 AND x3 AND NOT x6) OR
        (x1 AND x4 AND x5 AND NOT x6) OR
        (x2 AND x3 AND x7) OR
        (x2 AND x4 AND x5 AND x7) ;
END LogicFunc ;

```

Figure 4.48 The VHDL code for the function of section 4.7.

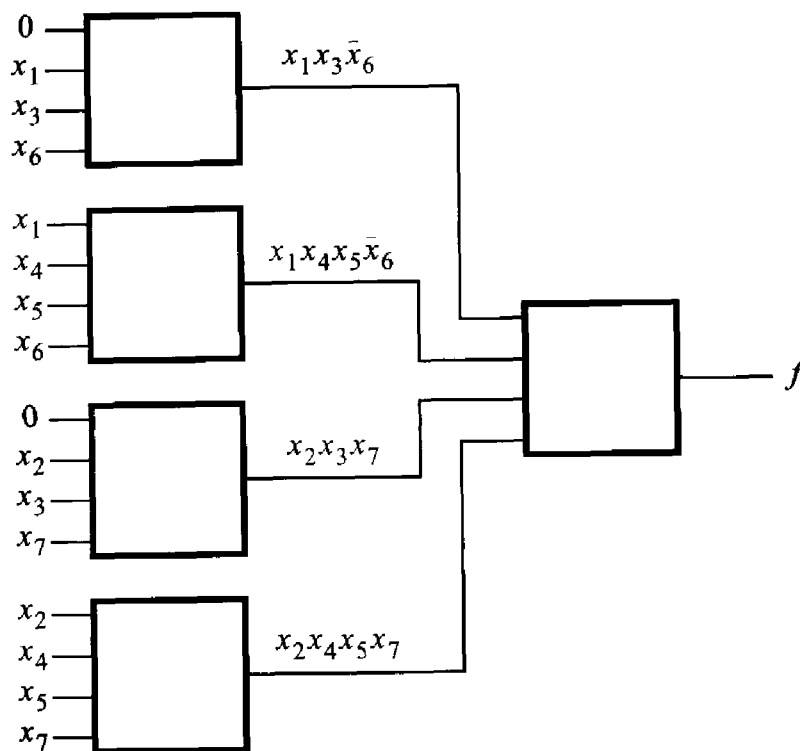
.23 In section 4.6 we used a seven-variable logic function as a motivation for multilevel synthesis. This function is given in the VHDL code in Figure 4.48. The logic expression is in minimal sum-of-products form. When it is synthesized for implementation in a CPLD, no optimizations are performed by the CAD tools. The function requires one macrocell. This function is more interesting when we consider its implementation in an FPGA with four-input LUTs. Because there are seven inputs, more than one LUT is required. If the function is implemented directly as given in the VHDL code, then five LUTs are needed as depicted in Figure 4.49a. Rather than showing the truth table programmed in each LUT, we show the logic function that is implemented at the LUT output. But, if the function is synthesized as

$$f = (x_1\bar{x}_6 + x_2x_7)(x_3 + x_4x_5)$$

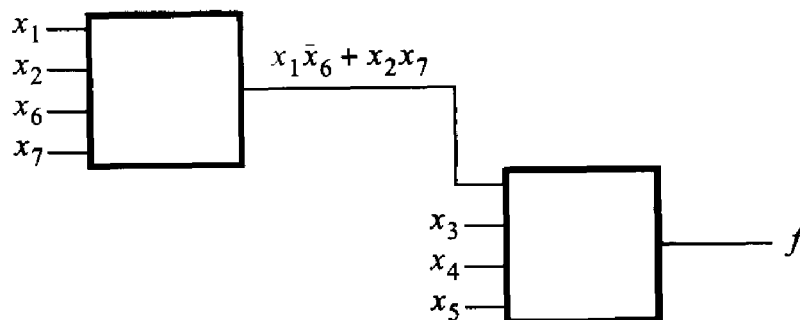
which is the expression we derived by using factoring in section 4.6, then f can be implemented using only two LUTs as illustrated in Figure 4.49b. One LUT produces the term $S = x_1\bar{x}_6 + x_2x_7$. The other LUT implements the four-input function $f = Sx_3 + Sx_4x_5$.

4.13 CONCLUDING REMARKS

This chapter has attempted to provide the reader with an understanding of various aspects of synthesis for logic functions. Now that the reader is comfortable with the fundamental concepts, we can examine digital circuits of a more sophisticated nature. The next chapter describes circuits that perform arithmetic operations, which are a key part of computers.



(a) Sum-of-products realization



(b) Factored realization

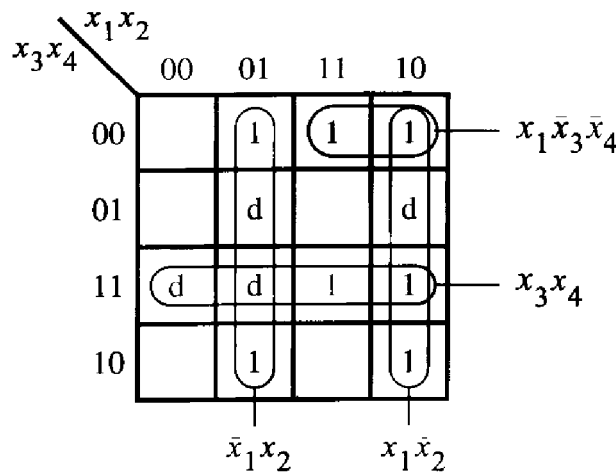
Figure 4.49 Implementation of the VHDL code in Figure 4.48.

4.14 EXAMPLES OF SOLVED PROBLEMS

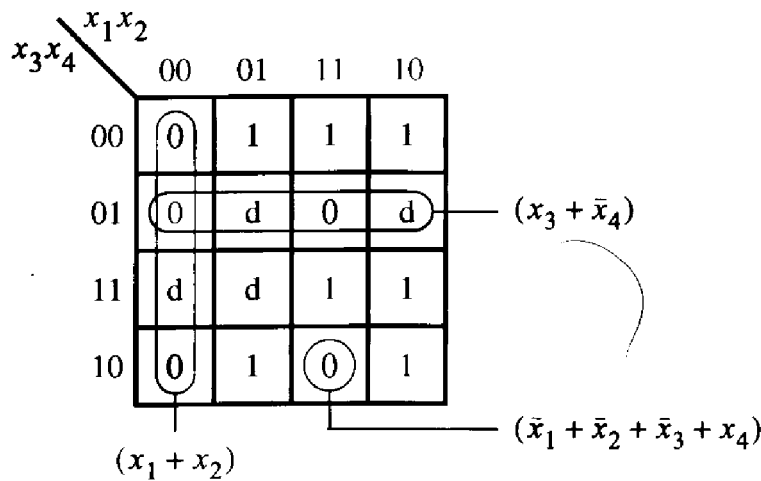
This section presents some typical problems that the reader may encounter, and shows how such problems can be solved.

Problem: Determine the minimum-cost SOP and POS expressions for the function $f(x_1, x_2, x_3, x_4) = \sum m(4, 6, 8, 10, 11, 12, 15) + D(3, 5, 7, 9)$.

Solution: The function can be represented in the form of a Karnaugh map as shown in Figure 4.50a. Note that the location of minterms in the map is as indicated in Figure 4.6.



(a) Determination of the SOP expression



(b) Determination of the POS expression

Figure 4.50 Karnaugh maps for Example 4.24.

To find the minimum-cost SOP expression, it is necessary to find the prime implicants that cover all 1s in the map. The don't-cares may be used as desired. Minterm m_6 is covered only by the prime implicant \bar{x}_1x_2 , hence this prime implicant is essential and it must be included in the final expression. Similarly, the prime implicants $x_1\bar{x}_2$ and x_3x_4 are essential because they are the only ones that cover m_{10} and m_{15} , respectively. These three prime implicants cover all minterms for which $f = 1$ except m_{12} . This minterm can be covered in two ways, by choosing either $x_1\bar{x}_3\bar{x}_4$ or $x_2\bar{x}_3\bar{x}_4$. Since both of these prime implicants have the same cost, we can choose either of them. Choosing the former, the desired SOP expression is

$$f = \bar{x}_1x_2 + x_1\bar{x}_2 + x_3x_4 + x_1\bar{x}_3\bar{x}_4$$

These prime implicants are encircled in the map.

The desired POS expression can be found as indicated in Figure 4.50*b*. In this case, we have to find the sum terms that cover all 0s in the function. Note that we have written 0s explicitly in the map to emphasize this fact. The term $(x_1 + x_2)$ is essential to cover the 0s in squares 0 and 2, which correspond to maxterms M_0 and M_2 . The terms $(x_3 + \bar{x}_4)$ and $(\bar{x}_1 + \bar{x}_2 + \bar{x}_3 + x_4)$ must be used to cover the 0s in squares 13 and 14, respectively. Since these three sum terms cover all 0s in the map, the POS expression is

$$f = (x_1 + x_2)(x_3 + \bar{x}_4)(\bar{x}_1 + \bar{x}_2 + \bar{x}_3 + x_4)$$

The chosen sum terms are encircled in the map.

Observe the use of don't-cares in this example. To get a minimum-cost SOP expression we assumed that all four don't-cares have the value 1. But, the minimum-cost POS expression becomes possible only if we assume that don't-cares 3, 5, and 9 have the value 0 while the don't-care 7 has the value 1. This means that the resulting SOP and POS expressions are not identical in terms of the functions they represent. They cover identically all valuations for which f is specified as 1 or 0, but they differ in the valuations 3, 5, and 9. Of course, this difference does not matter, because the don't-care valuations will never be applied as inputs to the implemented circuits.

Problem: Use Karnaugh maps to find the minimum-cost SOP and POS expressions for the function

$$f(x_1, \dots, x_4) = \bar{x}_1\bar{x}_3\bar{x}_4 + x_3x_4 + \bar{x}_1\bar{x}_2x_4 + x_1x_2\bar{x}_3x_4$$

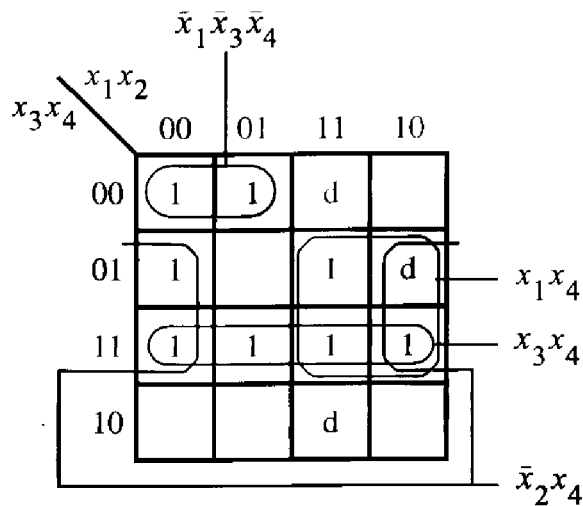
assuming that there are also don't-cares defined as $D = \sum(9, 12, 14)$.

Solution: The Karnaugh map that represents this function is shown in Figure 4.51*a*. The map is derived by placing 1s that correspond to each product term in the expression used to specify f . The term $\bar{x}_1\bar{x}_3\bar{x}_4$ corresponds to minterms 0 and 4. The term x_3x_4 represents the third row in the map, comprising minterms 3, 7, 11, and 15. The term $\bar{x}_1\bar{x}_2x_4$ specifies minterms 1 and 3. The fourth product term represents the minterm 13. The map also includes the three don't-care conditions.

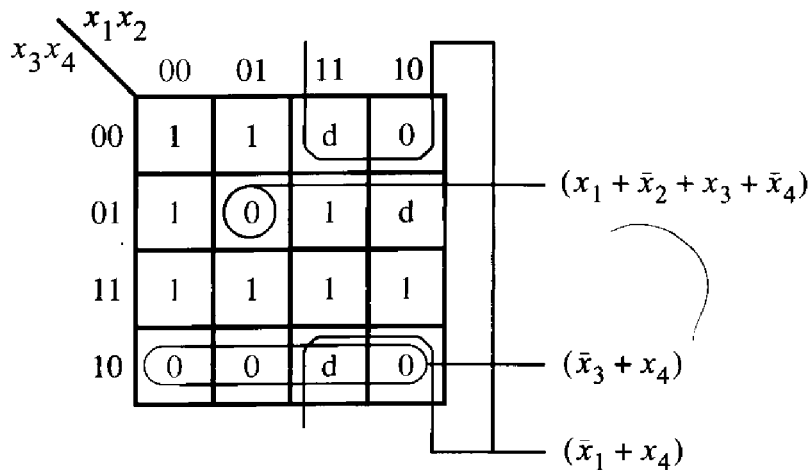
To find the desired SOP expression, we must find the least-expensive set of prime implicants that covers all 1s in the map. The term x_3x_4 is a prime implicant which must be included because it is the only prime implicant that covers the minterm 7; it also covers minterms 3, 11, and 15. Minterm 4 can be covered with either $\bar{x}_1\bar{x}_3\bar{x}_4$ or $x_2\bar{x}_3\bar{x}_4$. Both of these terms have the same cost; we will choose $\bar{x}_1\bar{x}_3\bar{x}_4$ because it also covers the minterm 0. Minterm 1 may be covered with either $\bar{x}_1\bar{x}_2\bar{x}_3$ or \bar{x}_2x_4 ; we should choose the latter because its cost is lower. This leaves only the minterm 13 to be covered, which can be done with either x_1x_4 or x_1x_2 at equal costs. Choosing x_1x_4 , the minimum-cost SOP expression is

$$f = x_3x_4 + \bar{x}_1\bar{x}_3\bar{x}_4 + \bar{x}_2x_4 + x_1x_4$$

Figure 4.51*b* shows how we can find the POS expression. The sum term $(\bar{x}_3 + x_4)$ covers the 0s in the bottom row. To cover the 0 in square 8 we must include $(\bar{x}_1 + x_4)$. The



(a) Determination of the SOP expression



(b) Determination of the POS expression

Figure 4.51 Karnaugh maps for Example 4.25.

remaining 0, in square 5, must be covered with $(x_1 + \bar{x}_2 + x_3 + \bar{x}_4)$. Thus, the minimum-cost POS expression is

$$f = (\bar{x}_3 + x_4)(\bar{x}_1 + x_4)(x_1 + \bar{x}_2 + x_3 + \bar{x}_4)$$

16 Problem: Use the tabular method of section 4.9 to derive a minimum-cost SOP expression for the function

$$f(x_1, \dots, x_4) = \bar{x}_1\bar{x}_3\bar{x}_4 + x_3x_4 + \bar{x}_1\bar{x}_2x_4 + x_1x_2\bar{x}_3x_4$$

assuming that there are also don't-cares defined as $D = \sum(9, 12, 14)$.

Solution: The tabular method requires that we start with the function defined in the form of minterms. As found in Figure 4.51a, the function f can also be represented as

$$f(x_1, \dots, x_4) = \sum m(0, 1, 3, 4, 7, 11, 13, 15) + D(9, 12, 14)$$

The corresponding eleven 0-cubes are placed in list 1 in Figure 4.52.

Now, perform a pairwise comparison of all 0-cubes to determine the 1-cubes shown in list 2, which are obtained by combining pairs of 0-cubes. Note that all 0-cubes are included in the 1-cubes, as indicated by the checkmarks in list 1. Next, perform a pairwise comparison of all 1-cubes to obtain the 2-cubes in list 3. Some of these 2-cubes can be generated in multiple ways, but it is not useful to list a 2-cube more than once (for example, $x0x1$ in list 3 can be obtained by combining from list 2 the cubes 1,3 and 9,11 or by using the cubes 1,9 and 3,11). Note that all but three 1-cubes are included in the 2-cubes. It is not possible to generate any 3-cubes, hence all terms that are not included in some other term (the unchecked terms in list 2 and all terms in list 3) are the prime implicants of f . The set of prime implicants is

$$P = \{000x, 0x00, x100, x0x1, xx11, 1xx1, 11xx\}$$

$$= \{p_1, p_2, p_3, p_4, p_5, p_6, p_7\}$$

To find the minimum-cost cover for f , construct the table in Figure 4.53a which shows all prime implicants and the minterms that must be covered, namely those for which $f = 1$. A checkmark is placed to indicate that a minterm is covered by a particular prime implicant. Since minterm 7 is covered only by p_5 , this prime implicant must be included in the final

List 1			List 2			List 3	
0	0 0 0 0	✓	0,1	0 0 0 x		1,3,9,11	x 0 x 1
1	0 0 0 1	✓	0,4	0 x 0 0			
4	0 1 0 0	✓	1,3	0 0 x 1	✓	3,7,11,15	x x 1 1
3	0 0 1 1	✓	1,9	x 0 0 1	✓	9,11,13,15	1 x x 1
9	1 0 0 1	✓	4,12	x 1 0 0		12,13,14,15	1 1 x x
12	1 1 0 0	✓	3,7	0 x 1 1	✓		
7	0 1 1 1	✓	3,11	x 0 1 1	✓		
11	1 0 1 1	✓	9,11	1 0 x 1	✓		
13	1 1 0 1	✓	9,13	1 x 0 1	✓		
14	1 1 1 0	✓	12,13	1 1 0 x	✓		
15	1 1 1 1	✓	12,14	1 1 x 0	✓		
			7,15	x 1 1 1	✓		
			11,15	1 x 1 1	✓		
			13,15	1 1 x 1	✓		
			14,15	1 1 1 x	✓		

Figure 4.52 Generation of prime implicants for the function in Example 4.26.

Prime implicant	Minterm							
	0	1	3	4	7	11	13	15
$p_1 = 0\ 0\ 0\ x$	✓	✓						
$p_2 = 0\ x\ 0\ 0$	✓			✓				
$p_3 = x\ 1\ 0\ 0$				✓				
$p_4 = x\ 0\ x\ 1$		✓	✓			✓		
$p_5 = x\ x\ 1\ 1$			✓		✓	✓		✓
$p_6 = 1\ x\ x\ 1$						✓	✓	✓
$p_7 = 1\ 1\ x\ x$							✓	✓

(a) Initial prime implicant cover table

Prime implicant	Minterm			
	0	1	4	13
$p_1 = 0\ 0\ 0\ x$	✓	✓		
$p_2 = 0\ x\ 0\ 0$	✓		✓	
$p_4 = x\ 0\ x\ 1$		✓		
$p_6 = 1\ x\ x\ 1$				✓

 (b) After the removal of rows p_3 , p_5 and p_7 , and columns 3, 7, 11 and 13

Figure 4.53 Selection of a cover for the function in Example 4.26.

cover. Observe that row p_2 dominates row p_3 , hence the latter can be removed. Similarly, row p_6 dominates row p_7 . Removing rows p_5 , p_3 , and p_7 , as well as columns 3, 7, 11, and 15 (which are covered by p_5), leads to the reduced table in Figure 4.53b. In this table, p_2 and p_6 are essential. They cover minterms 0, 4, and 13. Thus, it remains only to cover minterm 1, which can be done by choosing either p_1 or p_4 . Since p_4 has a lower cost, it should be chosen. Therefore, the final cover is

$$\begin{aligned} C &= \{p_2, p_4, p_5, p_6\} \\ &= \{0x00, x0x1, xx11, 1xx1\} \end{aligned}$$

and the function is implemented as

$$f = \bar{x}_1\bar{x}_3\bar{x}_4 + \bar{x}_2x_4 + x_3x_4 + x_1x_4$$

Problem: Use the *-product operation to find all prime implicants of the function

$$f(x_1, \dots, x_4) = \bar{x}_1\bar{x}_3\bar{x}_4 + x_3x_4 + \bar{x}_1\bar{x}_2x_4 + x_1x_2\bar{x}_3x_4$$

assuming that there are also don't-cares defined as $D = \sum(9, 12, 14)$.

Solution: The ON-set for this function is

$$\text{ON} = \{0x00, xx11, 00x1, 1101\}$$

The initial cover, consisting of the ON-set and the don't-cares, is

$$C^0 = \{0x00, xx11, 00x1, 1101, 1001, 1100, 1110\}$$

Using the *-operation, the subsequent covers obtained are

$$C^1 = \{0x00, xx11, 00x1, 000x, x100, 11x1, 10x1, 111x, x001, 1x01, 110x, 11x0\}$$

$$C^2 = \{0x00, xx11, 000x, x100, x0x1, 1xx1, 11xx\}$$

$$C^3 = C^2$$

Therefore, the set of all prime implicants is

$$P = \{\bar{x}_1\bar{x}_3\bar{x}_4, x_3x_4, \bar{x}_1\bar{x}_2\bar{x}_3, x_2\bar{x}_3\bar{x}_4, \bar{x}_2x_4, x_1x_4, x_1x_2\}$$

Problem: Find the minimum-cost implementation for the function

$$f(x_1, \dots, x_4) = \bar{x}_1\bar{x}_3\bar{x}_4 + x_3x_4 + \bar{x}_1\bar{x}_2x_4 + x_1x_2\bar{x}_3x_4$$

assuming that there are also don't-cares defined as $D = \sum(9, 12, 14)$.

Solution: This is the same function used in Examples 4.25 through 4.27. In those examples, we found that the minimum-cost SOP implementation is

$$f = x_3x_4 + \bar{x}_1\bar{x}_3\bar{x}_4 + \bar{x}_2x_4 + x_1x_4$$

which requires four AND gates, one OR gate, and 13 inputs to the gates, for a total cost of 18.

The minimum-cost POS implementation is

$$f = (\bar{x}_3 + x_4)(\bar{x}_1 + x_4)(x_1 + \bar{x}_2 + x_3 + \bar{x}_4)$$

which requires three OR gates, one AND gate, and 11 inputs to the gates, for a total cost of 15.

We can also consider a multilevel realization for the function. Applying the factoring concept to the above SOP expression yields

$$f = (x_1 + \bar{x}_2 + x_3)x_4 + \bar{x}_1\bar{x}_3\bar{x}_4$$

This implementation requires two AND gates, two OR gates, and 10 inputs to the gates, for a total cost of 14. Compared to the SOP and POS implementations, this has the lowest cost

in terms of gates and inputs, but it results in a slower circuit because there are three levels of gates through which the signals must propagate. Of course, if this function is implemented in an FPGA, then only one LUT is needed.

4.29 Problem: In several commercial FPGAs the logic blocks are four-input LUTs. Two such LUTs, connected as shown in Figure 4.54, can be used to implement functions of seven variables by using the decomposition

$$f(x_1, \dots, x_7) = f[g(x_1, \dots, x_4), x_5, x_6, x_7]$$

It is easy to see that functions such as $f = x_1x_2x_3x_4x_5x_6x_7$ and $f = x_1 + x_2 + x_3 + x_4 + x_5 + x_6 + x_7$ can be implemented in this form. Show that there exist other seven-variable functions that cannot be implemented with 2 four-input LUTs.

Solution: The truth table for a seven-variable function can be arranged as depicted in Figure 4.55. There are $2^7 = 128$ minterms. Each valuation of the variables $x_1, x_2, x_3,$ and x_4 selects one of the 16 columns in the truth table, while each valuation of $x_5, x_6,$ and x_7 selects one of 8 rows. Since we have to use the circuit in Figure 4.54, the truth table for f can also be defined in terms of the subfunction g . In this case, it is g that selects one of the 16 columns in the truth table, instead of $x_1, x_2, x_3,$ and x_4 . Since g can have only two possible values, 0 and 1, we can have only two columns in the truth table. This is possible if there exist only two distinct patterns of 1s and 0s in the 16 columns in Figure 4.54. Therefore, only a relatively small subset of seven-variable functions can be realized with just two LUTs.

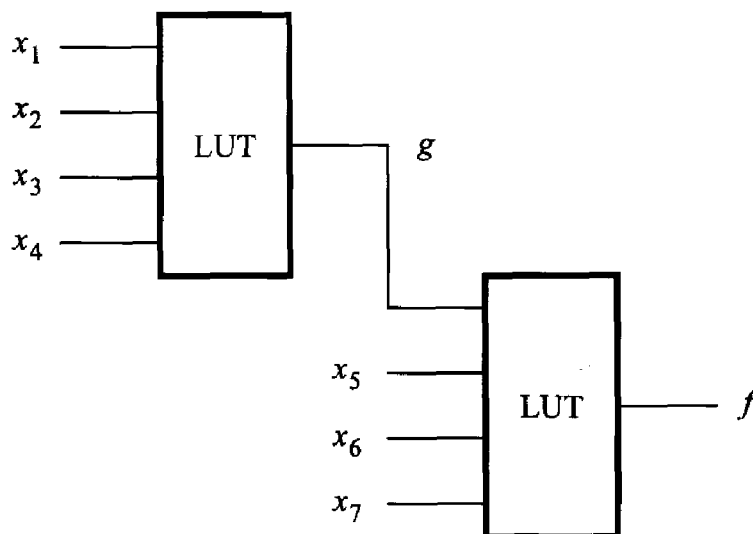


Figure 4.54 Circuit for Example 4.29.

	$x_1x_2x_3x_4$				
$x_5x_6x_7$	0000	0001	...	1110	1111
000	m_0	m_8		m_{112}	m_{120}
001	m_1	m_9		m_{113}	m_{121}
010	m_2	m_{10}		m_{114}	m_{122}
011	m_3	m_{11}	...	m_{115}	m_{123}
100	m_4	m_{12}		m_{116}	m_{124}
101	m_5	m_{13}		m_{117}	m_{125}
110	m_6	m_{14}		m_{118}	m_{126}
111	m_7	m_{15}		m_{119}	m_{127}

Figure 4.55 A possible format for truth tables of seven-variable functions.

PROBLEMS

Answers to problems marked by an asterisk are given at the back of the book.

- *4.1** Find the minimum-cost SOP and POS forms for the function $f(x_1, x_2, x_3) = \sum m(1, 2, 3, 5)$.
- *4.2** Repeat problem 4.1 for the function $f(x_1, x_2, x_3) = \sum m(1, 4, 7) + D(2, 5)$.
- 4.3** Repeat problem 4.1 for the function $f(x_1, \dots, x_4) = \prod M(0, 1, 2, 4, 5, 7, 8, 9, 10, 12, 14, 15)$.
- 4.4** Repeat problem 4.1 for the function $f(x_1, \dots, x_4) = \sum m(0, 2, 8, 9, 10, 15) + D(1, 3, 6, 7)$.
- *4.5** Repeat problem 4.1 for the function $f(x_1, \dots, x_5) = \prod M(1, 4, 6, 7, 9, 12, 15, 17, 20, 21, 22, 23, 28, 31)$.
- 4.6** Repeat problem 4.1 for the function $f(x_1, \dots, x_5) = \sum m(0, 1, 3, 4, 6, 8, 9, 11, 13, 14, 16, 19, 20, 21, 22, 24, 25) + D(5, 7, 12, 15, 17, 23)$.
- 4.7** Repeat problem 4.1 for the function $f(x_1, \dots, x_5) = \sum m(1, 4, 6, 7, 9, 10, 12, 15, 17, 19, 20, 23, 25, 26, 27, 28, 30, 31) + D(8, 16, 21, 22)$.
- 4.8** Find 5 three-variable functions for which the product-of-sums form has lower cost than the sum-of-products form.
- *4.9** A four-variable logic function that is equal to 1 if any three or all four of its variables are equal to 1 is called a *majority* function. Design a minimum-cost SOP circuit that implements this majority function.
- 4.10** Derive a minimum-cost realization of the four-variable function that is equal to 1 if exactly two or exactly three of its variables are equal to 1; otherwise it is equal to 0.

***4.11** Prove or show a counter-example for the statement: If a function f has a unique minimum-cost SOP expression, then it also has a unique minimum-cost POS expression.

***4.12** A circuit with two outputs has to implement the following functions

$$f(x_1, \dots, x_4) = \sum m(0, 2, 4, 6, 7, 9) + D(10, 11)$$

$$g(x_1, \dots, x_4) = \sum m(2, 4, 9, 10, 15) + D(0, 13, 14)$$

Design the minimum-cost circuit and compare its cost with combined costs of two circuits that implement f and g separately. Assume that the input variables are available in both uncomplemented and complemented forms.

4.13 Repeat problem 4.12 for the following functions

$$f(x_1, \dots, x_5) = \sum m(1, 4, 5, 11, 27, 28) + D(10, 12, 14, 15, 20, 31)$$

$$g(x_1, \dots, x_5) = \sum m(0, 1, 2, 4, 5, 8, 14, 15, 16, 18, 20, 24, 26, 28, 31) + D(10, 11, 12, 27)$$

***4.14** Implement the logic circuit in Figure 4.23 using NAND gates only.

***4.15** Implement the logic circuit in Figure 4.23 using NOR gates only.

4.16 Implement the logic circuit in Figure 4.25 using NAND gates only.

4.17 Implement the logic circuit in Figure 4.25 using NOR gates only.

***4.18** Consider the function $f = x_3x_5 + \bar{x}_1x_2x_4 + x_1\bar{x}_2\bar{x}_4 + x_1x_3\bar{x}_4 + \bar{x}_1x_3x_4 + \bar{x}_1x_2x_5 + x_1\bar{x}_2x_5$. Derive a minimum-cost circuit that implements this function using NOT, AND, and OR gates.

4.19 Derive a minimum-cost circuit that implements the function $f(x_1, \dots, x_4) = \sum m(4, 7, 8, 11) + D(12, 15)$.

4.20 Find the simplest realization of the function $f(x_1, \dots, x_4) = \sum m(0, 3, 4, 7, 9, 10, 13, 14)$, assuming that the logic gates have a maximum fan-in of two.

***4.21** Find the minimum-cost circuit for the function $f(x_1, \dots, x_4) = \sum m(0, 4, 8, 13, 14, 15)$. Assume that the input variables are available in uncomplemented form only. (Hint: use functional decomposition.)

4.22 Use functional decomposition to find the best implementation of the function $f(x_1, \dots, x_5) = \sum m(1, 2, 7, 9, 10, 18, 19, 25, 31) + D(0, 15, 20, 26)$. How does your implementation compare with the lowest-cost SOP implementation? Give the costs.

***4.23** Use the tabular method discussed in section 4.9 to find a minimum cost SOP realization for the function

$$f(x_1, \dots, x_4) = \sum m(0, 2, 4, 5, 7, 8, 9, 15)$$

4.24 Repeat problem 4.23 for the function

$$f(x_1, \dots, x_4) = \sum m(0, 4, 6, 8, 9, 15) + D(3, 7, 11, 13)$$

4.25 Repeat problem 4.23 for the function

$$f(x_1, \dots, x_4) = \sum m(0, 3, 4, 5, 7, 9, 11) + D(8, 12, 13, 14)$$

4.26 Show that the following distributive-like rules are valid

$$(A \cdot B)\#C = (A\#C) \cdot (B\#C)$$

$$(A + B)\#C = (A\#C) + (B\#C)$$

4.27 Use the cubical representation and the method discussed in section 4.10 to find a minimum-cost SOP realization of the function $f(x_1, \dots, x_4) = \sum m(0, 2, 4, 5, 7, 8, 9, 15)$.

4.28 Repeat problem 4.27 for the function $f(x_1, \dots, x_5) = \bar{x}_1\bar{x}_3\bar{x}_5 + x_1x_2\bar{x}_3 + x_2x_3\bar{x}_4x_5 + x_1\bar{x}_2\bar{x}_3x_4 + x_1x_2x_3x_4\bar{x}_5 + \bar{x}_1x_2x_4\bar{x}_5 + \bar{x}_1\bar{x}_3x_4x_5$.

4.29 Use the cubical representation and the method discussed in section 4.10 to find a minimum-cost SOP realization of the function $f(x_1, \dots, x_4)$ defined by the ON-set $ON = \{00x0, 100x, x010, 1111\}$ and the don't-care set $DC = \{00x1, 011x\}$.

4.30 In section 4.10.1 we showed how the $*$ -product operation can be used to find the prime implicants of a given function f . Another possibility is to find the prime implicants by expanding the implicants in the initial cover of the function. An implicant is *expanded* by removing one literal to create a larger implicant (in terms of the number of vertices covered). A larger implicant is valid only if it does not include any vertices for which $f = 0$. The largest valid implicants obtained in the process of expansion are the prime implicants. Figure P4.1 illustrates the expansion of the implicant $\bar{x}_1x_2x_3$ of the function in Figure 4.9, which is also used in Example 4.16. Note from Figure 4.9 that

$$\bar{f} = x_1\bar{x}_2\bar{x}_3 + x_1\bar{x}_2x_3 + x_1x_2\bar{x}_3$$

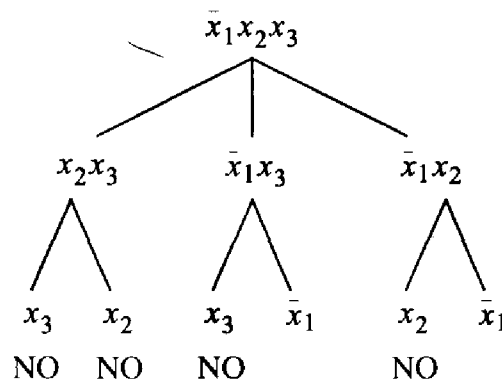


Figure P4.1 Expansion of implicant $\bar{x}_1x_2x_3$.

In Figure P4.1 the word NO is used to indicate that the expanded term is not valid, because it includes one or more vertices from \bar{f} . From the graph it is clear that the largest valid implicants that arise from this expansion are x_2x_3 and \bar{x}_1 ; they are prime implicants of f .

Expand the other four implicants given in the initial cover in Example 4.14 to find all prime implicants of f . What is the relative complexity of this procedure compared to the $*$ -product technique?

4.31 Repeat problem 4.30 for the function in Example 4.17. Expand the implicants given in the initial cover C^0 .

***4.32** Consider the logic expressions

$$f = x_1\bar{x}_2\bar{x}_5 + \bar{x}_1\bar{x}_2\bar{x}_4\bar{x}_5 + x_1x_2x_4x_5 + \bar{x}_1\bar{x}_2x_3\bar{x}_4 + x_1\bar{x}_2x_3x_5 + \bar{x}_2\bar{x}_3x_4\bar{x}_5 + x_1x_2x_3x_4\bar{x}_5$$

$$g = \bar{x}_2x_3\bar{x}_4 + \bar{x}_2\bar{x}_3\bar{x}_4\bar{x}_5 + x_1x_3x_4\bar{x}_5 + x_1\bar{x}_2x_4\bar{x}_5 + x_1x_3x_4x_5 + \bar{x}_1\bar{x}_2\bar{x}_3\bar{x}_5 + x_1x_2\bar{x}_3x_4x_5$$

Prove or disprove that $f = g$.

4.33 Consider the circuit in Figure P4.2, which implements functions f and g . What is the cost of this circuit, assuming that the input variables are available in both true and complemented forms? Redesign the circuit to implement the same functions, but at as low a cost as possible. What is the cost of your circuit?

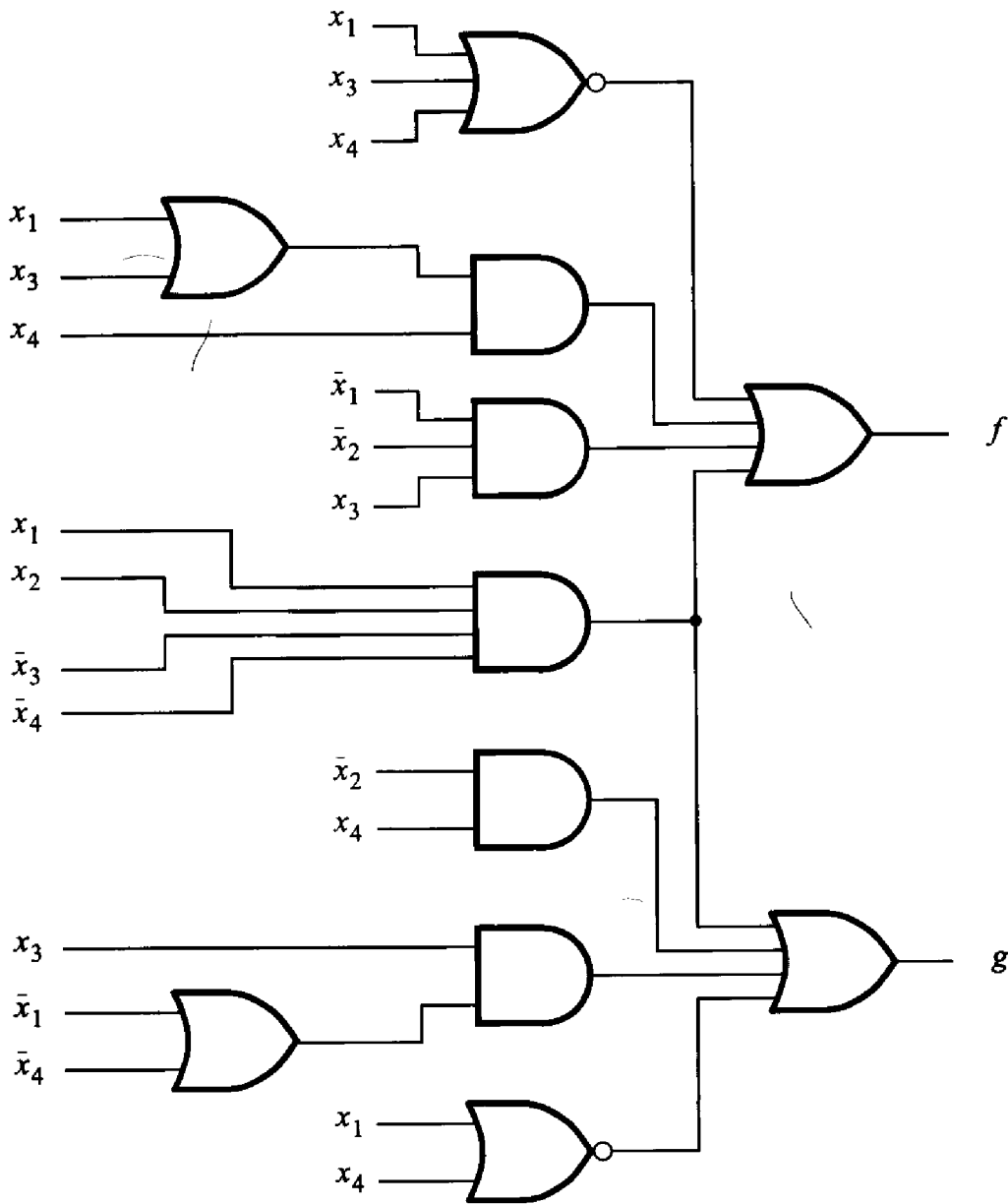


Figure P4.2 Circuit for problem 4.33.

4.34 Repeat problem 4.33 for the circuit in Figure P4.3. Use only NAND gates in your circuit.

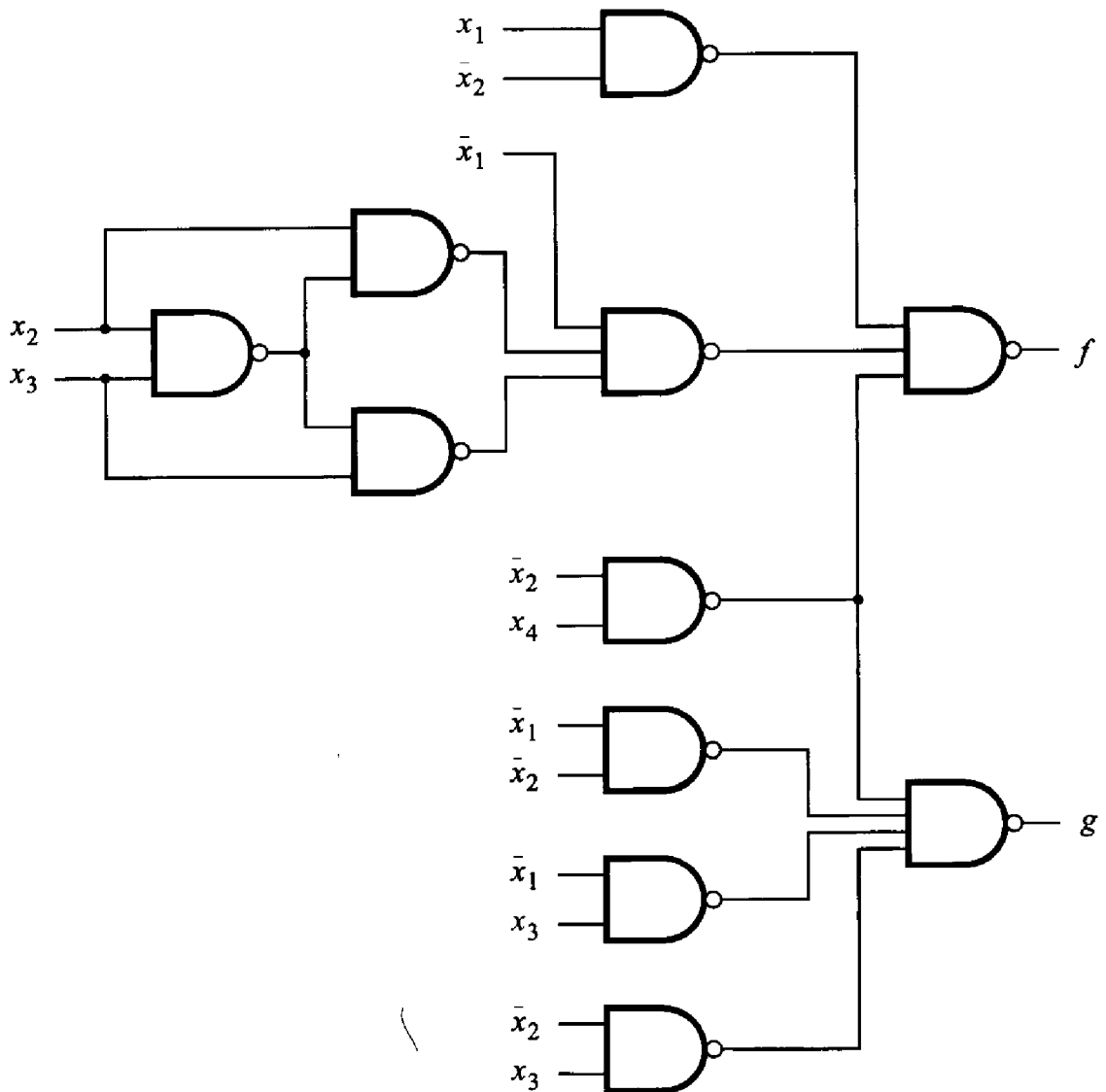


Figure P4.3 Circuit for problem 4.34.

- 4.35** Write VHDL code to implement the circuit in Figure 4.25b.
- 4.36** Write VHDL code to implement the circuit in Figure 4.27c.
- 4.37** Write VHDL code to implement the circuit in Figure 4.28b.
- 4.38** Write VHDL code to implement the function $f(x_1, \dots, x_4) = \sum m(0, 1, 2, 4, 5, 7, 8, 9, 11, 12, 14, 15)$.
- 4.39** Write VHDL code to implement the function $f(x_1, \dots, x_4) = \sum m(1, 4, 7, 14, 15) + D(0, 5, 9)$.

- 4.40** Write VHDL code to implement the function $f(x_1, \dots, x_4) = \Pi M(6, 8, 9, 12, 13)$.
- 4.41** Write VHDL code to implement the function $f(x_1, \dots, x_4) = \Pi M(3, 11, 14) + D(0, 2, 10, 12)$.

REFERENCES

1. M. Karnaugh, "A Map Method for Synthesis of Combinatorial Logic Circuits," *Transactions of AIEE, Communications and Electronics* 72, part 1, November 1953, pp. 593–599.
2. R. L. Ashenurst, "The Decomposition of Switching Functions," Proc. of the Symposium on the Theory of Switching, 1957, *Vol. 29 of Annals of Computation Laboratory* (Harvard University: Cambridge, MA, 1959), pp. 74–116.
3. F. J. Hill and G. R. Peterson, *Computer Aided Logical Design with Emphasis on VLSI*, 4th ed. (Wiley: New York, 1993).
4. T. Sasao, *Logic Synthesis and Optimization* (Kluwer: Boston, MA, 1993).
5. S. Devadas, A. Gosh, and K. Keutzer, *Logic Synthesis* (McGraw-Hill: New York, 1994).
6. W. V. Quine, "The Problem of Simplifying Truth Functions," *Amer. Math. Monthly* 59 (1952), pp. 521–531.
7. E. J. McCluskey Jr., "Minimization of Boolean Functions," *Bell System Tech. Journal*, November 1956, pp. 1417–1444.
8. E. J. McCluskey, *Logic Design Principles* (Prentice-Hall: Englewood Cliffs, NJ, 1986).
9. J. F. Wakerly, *Digital Design Principles and Practices*, 3rd ed. (Prentice-Hall: Englewood Cliffs, NJ, 1999).
10. J. P. Hayes, *Introduction to Logic Design* (Addison-Wesley: Reading, MA, 1993).
11. C. H. Roth Jr., *Fundamentals of Logic Design*, 4th ed. (West: St. Paul, MN, 1993).
12. R. H. Katz, *Contemporary Logic Design* (Benjamin/Cummings: Redwood City, CA, 1994).
13. V. P. Nelson, H. T. Nagle, B. D. Carroll, and J. D. Irwin, *Digital Logic Circuit Analysis and Design* (Prentice-Hall: Englewood Cliffs, NJ, 1995).
14. J. P. Daniels, *Digital Design from Zero to One* (Wiley: New York, 1996).
15. P. K. Lala, *Practical Digital Logic Design and Testing* (Prentice-Hall: Englewood Cliffs, NJ, 1996).
16. A. Dewey, *Analysis and Design of Digital Systems with VHDL* (PWS Publishing Co.: Boston, MA, 1997).
17. M. M. Mano, *Digital Design*, 3rd ed. (Prentice-Hall: Upper Saddle River, NJ, 2001).

18. D. D. Gajski, *Principles of Digital Design* (Prentice-Hall: Upper Saddle River, NJ, 1997).
19. R. K. Brayton, G. D. Hachtel, C. T. McMullen, and A. L. Sangiovanni-Vincentelli, *Logic Minimization Algorithms for VLSI Synthesis* (Kluwer: Boston, MA, 1984).
20. R. K. Brayton, R. Rudell, A. Sangiovanni-Vincentelli, and A. R. Wang, "MIS: A Multiple-Level Logic Synthesis Optimization System," *IEEE Transactions on Computer-Aided Design*, CAD-6, November 1987, pp. 1062–81.
21. E. M. Sentovic, K. J. Singh, L. Lavagno, C. Moon, R. Murgai, A. Saldanha, H. Savoj, P. R. Stephan, R. K. Brayton, and A. Sangiovanni-Vincentelli, "SIS: A System for Sequential Circuit Synthesis," Technical Report UCB/ERL M92/41, Electronics Research Laboratory, Department of Electrical Engineering and Computer Science, University of California, Berkeley, 1992.
22. G. De Micheli, *Synthesis and Optimization of Digital Circuits* (McGraw-Hill: New York, 1994).
23. N. Sherwani, *Algorithms for VLSI Physical Design Automation* (Kluwer: Boston, MA, 1995).
24. B. Preas and M. Lorenzetti, *Physical Design Automation of VLSI Systems* (Benjamin/Cummings: Redwood City, CA, 1988).

chapter

5

NUMBER REPRESENTATION AND ARITHMETIC CIRCUITS

CHAPTER OBJECTIVES

In this chapter you will learn about:

- Representation of numbers in computers
- Circuits used to perform arithmetic operations
- Performance issues in large circuits
- Use of VHDL to specify arithmetic circuits

In this chapter we will discuss logic circuits that perform arithmetic operations. We will explain how numbers can be added, subtracted, and multiplied. We will also show how to write VHDL code to describe the arithmetic circuits. These circuits provide an excellent platform for illustrating the power and versatility of VHDL in specifying complex logic-circuit assemblies. The concepts involved in the design of the arithmetic circuits are easily applied to a wide variety of other circuits.

Before tackling the design of arithmetic circuits, it is necessary to discuss how numbers are represented in digital systems. In the previous chapters we dealt with logic variables in a general way, using variables to represent either the states of switches or some general conditions. Now we will use the variables to represent numbers. Several variables are needed to specify a number, with each variable corresponding to one digit of the number.

5.1 POSITIONAL NUMBER REPRESENTATION

When dealing with numbers and arithmetic operations, it is convenient to use standard symbols. Thus to represent addition we use the plus (+) symbol, and for subtraction we use the minus (−) symbol. In previous chapters we used the + symbol to represent the logical OR operation and − to denote the deletion of an element from a set. Even though we will now use the same symbols for two different purposes, the meaning of each symbol will usually be clear from the context of the discussion. In cases where there may be some ambiguity, the meaning will be stated explicitly.

5.1.1 UNSIGNED INTEGERS

The simplest numbers to consider are the integers. We will begin by considering positive integers and then expand the discussion to include negative integers. Numbers that are positive only are called *unsigned*, and numbers that can also be negative are called *signed*. Representation of numbers that include a radix point (real numbers) is discussed later in the chapter.

In the familiar decimal system, a number consists of digits that have 10 possible values, from 0 to 9, and each digit represents a multiple of a power of 10. For example, the number 8547 represents $8 \times 10^3 + 5 \times 10^2 + 4 \times 10^1 + 7 \times 10^0$. We do not normally write the powers of 10 with the number, because they are implied by the positions of the digits. In general, a decimal integer is expressed by an n -tuple comprising n decimal digits

$$D = d_{n-1}d_{n-2} \cdots d_1d_0$$

which represents the value

$$V(D) = d_{n-1} \times 10^{n-1} + d_{n-2} \times 10^{n-2} + \cdots + d_1 \times 10^1 + d_0 \times 10^0$$

This is referred to as the *positional number representation*.

Because the digits have 10 possible values and each digit is weighted as a power of 10, we say that decimal numbers are *base-10*, or *radix-10* numbers. Decimal numbers are familiar, convenient, and easy to understand. However, in digital circuits it is not practical

to use digits that can assume 10 values. In digital systems we use the binary, or *base-2*, system in which digits can be 0 or 1. Each binary digit is called a *bit*. In the binary number system, the same positional number representation is used so that

$$B = b_{n-1}b_{n-2}\cdots b_1b_0$$

represents an integer that has the value

$$\begin{aligned} V(B) &= b_{n-1} \times 2^{n-1} + b_{n-2} \times 2^{n-2} + \cdots + b_1 \times 2^1 + b_0 \times 2^0 & [5.1] \\ &= \sum_{i=0}^{n-1} b_i \times 2^i \end{aligned}$$

For example, the binary number 1101 represents the value

$$V = 1 \times 2^3 + 1 \times 2^2 + 0 \times 2^1 + 1 \times 2^0$$

Because a particular digit pattern has different meanings for different radices, we will indicate the radix as a subscript when there is potential for confusion. Thus to specify that 1101 is a base-2 number, we will write $(1101)_2$. Evaluating the preceding expression for V gives $V = 8 + 4 + 1 = 13$. Hence

$$(1101)_2 = (13)_{10}$$

Note that the range of integers that can be represented by a binary number depends on the number of bits used. For example, with four bits the largest number is $(1111)_2 = (15)_{10}$. An example of a larger number is $(10110111)_2 = (183)_{10}$. In general, using n bits allows representation of integers in the range 0 to $2^n - 1$.

In a binary number the right-most bit is usually referred to as the *least-significant bit (LSB)*. The left-most bit of an unsigned integer, which has the highest power of 2 associated with it, is called the *most-significant bit (MSB)*. In digital systems it is often convenient to consider several bits together as a group. A group of four bits is called a *nibble*, and a group of eight bits is called a *byte*.

5.1.2 CONVERSION BETWEEN DECIMAL AND BINARY SYSTEMS

A binary number is converted into a decimal number simply by applying Equation 5.1 and evaluating it using decimal arithmetic. Converting a decimal number into a binary number is not quite as straightforward. The conversion can be performed by successively dividing the decimal number by 2 as follows. Suppose that a decimal number $D = d_{k-1}\cdots d_1d_0$, with a value V , is to be converted into a binary number $B = b_{n-1}\cdots b_2b_1b_0$. Thus

$$V = b_{n-1} \times 2^{n-1} + \cdots + b_2 \times 2^2 + b_1 \times 2^1 + b_0$$

If we divide V by 2, the result is

$$\frac{V}{2} = b_{n-1} \times 2^{n-2} + \cdots + b_2 \times 2^1 + b_1 + \frac{b_0}{2}$$

The quotient of this integer division is $b_{n-1} \times 2^{n-2} + \dots + b_2 \times 2 + b_1$, and the remainder is b_0 . If the remainder is 0, then $b_0 = 0$; if it is 1, then $b_0 = 1$. Observe that the quotient is just another binary number, which comprises $n - 1$ bits, rather than n bits. Dividing this number by 2 yields the remainder b_1 . The new quotient is

$$b_{n-1} \times 2^{n-3} + \dots + b_2$$

Continuing the process of dividing the new quotient by 2, and determining one bit in each step, will produce all bits of the binary number. The process continues until the quotient becomes 0. Figure 5.1 illustrates the conversion process, using the example $(857)_{10} = (1101011001)_2$. Note that the least-significant bit (LSB) is generated first and the most-significant bit (MSB) is generated last.

5.1.3 OCTAL AND HEXADECIMAL REPRESENTATIONS

The positional number representation can be used for any radix. If the radix is r , then the number

$$K = k_{n-1}k_{n-2} \dots k_1k_0$$

has the value

$$V(K) = \sum_{i=0}^{n-1} k_i \times r^i$$

Our interest is limited to those radices that are most practical. We will use decimal numbers because they are used by people, and we will use binary numbers because they are used by computers. In addition, two other radices are useful—8 and 16. Numbers represented with

Convert $(857)_{10}$

	Remainder	
$857 \div 2 = 428$	1	LSB
$428 \div 2 = 214$	0	
$214 \div 2 = 107$	0	
$107 \div 2 = 53$	1	
$53 \div 2 = 26$	1	
$26 \div 2 = 13$	0	
$13 \div 2 = 6$	1	
$6 \div 2 = 3$	0	
$3 \div 2 = 1$	1	
$1 \div 2 = 0$	1	MSB

Result is $(1101011001)_2$

Figure 5.1 Conversion from decimal to binary.

radix 8 are called *octal* numbers, while radix-16 numbers are called *hexadecimal* numbers. In octal representation the digit values range from 0 to 7. In hexadecimal representation (often abbreviated as *hex*), each digit can have one of 16 values. The first 10 are denoted the same as in the decimal system, namely, 0 to 9. Digits that correspond to the decimal values 10, 11, 12, 13, 14, and 15 are denoted by the letters, A, B, C, D, E, and F. Table 5.1 gives the first 18 integers in these number systems.

Table 5.1 Numbers in different systems.

Decimal	Binary	Octal	Hexadecimal
00	00000	00	00
01	00001	01	01
02	00010	02	02
03	00011	03	03
04	00100	04	04
05	00101	05	05
06	00110	06	06
07	00111	07	07
08	01000	10	08
09	01001	11	09
10	01010	12	0A
11	01011	13	0B
12	01100	14	0C
13	01101	15	0D
14	01110	16	0E
15	01111	17	0F
16	10000	20	10
17	10001	21	11
18	10010	22	12

In computers the dominant number system is binary. The reason for using the octal and hexadecimal systems is that they serve as a useful shorthand notation for binary numbers. One octal digit represents three bits. Thus a binary number is converted into an octal number by taking groups of three bits, starting from the least-significant bit, and replacing them with the corresponding octal digit. For example, 101011010111 is converted as

$$\underbrace{101}_5 \quad \underbrace{011}_3 \quad \underbrace{010}_2 \quad \underbrace{111}_7$$

which means that $(101011010111)_2 = (5327)_8$. If the number of bits is not a multiple of three, then we add 0s to the left of the most-significant bit. For example, $(10111011)_2 = (273)_8$ because

$$\underbrace{010}_2 \quad \underbrace{111}_7 \quad \underbrace{011}_3$$

Conversion from octal to binary is just as straightforward; each octal digit is simply replaced by three bits that denote the same value.

Similarly, a hexadecimal digit is represented using four bits. For example, a 16-bit number is represented using four hex digits, as in

$$(1010111100100101)_2 = (AF25)_{16}$$

because

$$\begin{array}{cccc} \underbrace{1010} & \underbrace{1111} & \underbrace{0010} & \underbrace{0101} \\ A & F & 2 & 5 \end{array}$$

Zeros are added to the left of the most-significant bit if the number of bits is not a multiple of four. For example, $(1101101000)_2 = (368)_{16}$ because

$$\begin{array}{ccc} \underbrace{0011} & \underbrace{0110} & \underbrace{1000} \\ 3 & 6 & 8 \end{array}$$

Conversion from hexadecimal to binary involves straightforward substitution of each hex digit by four bits that denote the same value.

Binary numbers used in modern computers often have 32 or 64 bits. Written as binary n -tuples (sometimes called bit vectors), such numbers are awkward for people to deal with. It is much simpler to deal with them in the form of 8- or 16-digit hex numbers. Because the arithmetic operations in a digital system usually involve binary numbers, we will focus on circuits that use such numbers. We will sometimes use the hexadecimal representation as a convenient shorthand description.

We have introduced the simplest numbers—unsigned integers. It is necessary to be able to deal with several other types of numbers. We will discuss the representation of signed numbers, fixed-point numbers, and floating-point numbers later in this chapter. But first we will examine some simple circuits that operate on numbers to give the reader a feeling for digital circuits that perform arithmetic operations and to provide motivation for further discussion.

5.2 ADDITION OF UNSIGNED NUMBERS

Binary addition is performed in the same way as decimal addition except that the values of individual digits can be only 0 or 1. The addition of 2 one-bit numbers entails four possible combinations, as indicated in Figure 5.2a. Two bits are needed to represent the result of the addition. The right-most bit is called the *sum*, s . The left-most bit, which is produced as a carry-out when both bits being added are equal to 1, is called the *carry*, c . The addition operation is defined in the form of a truth table in part (b) of the figure. The sum bit s is the XOR function, which was introduced in section 3.9.1. The carry c is the AND function of inputs x and y . A circuit realization of these functions is shown in Figure 5.2c. This circuit, which implements the addition of only two bits, is called a *half-adder*.

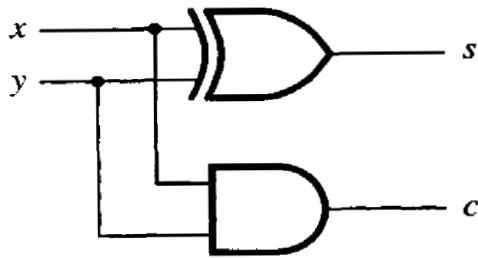
A more interesting case is when larger numbers that have multiple bits are involved. Then it is still necessary to add each pair of bits, but for each bit position i , the addition operation may include a *carry-in* from bit position $i - 1$.

x	0	0	1	1
$+ y$	<u>+ 0</u>	<u>+ 1</u>	<u>+ 0</u>	<u>+ 1</u>
$c \ s$	0 0	0 1	0 1	1 0

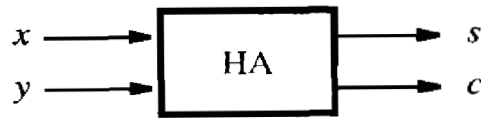
(a) The four possible cases

x	y	Carry c	Sum s
0	0	0	0
0	1	0	1
1	0	0	1
1	1	1	0

(b) Truth table



(c) Circuit



(d) Graphical symbol

Figure 5.2 Half-adder.

Figure 5.3 presents an example of the addition operation. The two operands are $X = (01111)_2 = (15)_{10}$ and $Y = (01010)_2 = (10)_{10}$. Note that five bits are used to represent X and Y . Using five bits, it is possible to represent integers in the range from 0 to 31; hence the sum $S = X + Y = (25)_{10}$ can also be denoted as a five-bit integer. Note also the labeling of individual bits, such that $X = x_4x_3x_2x_1x_0$ and $Y = y_4y_3y_2y_1y_0$. The figure shows the

$X = x_4x_3x_2x_1x_0$	0 1 1 1 1	(15) ₁₀
$+ Y = y_4y_3y_2y_1y_0$	<u>0 1 0 1 0</u>	(10) ₁₀
	1 1 1 0	← Generated carries
$S = s_4s_3s_2s_1s_0$	<u>1 1 0 0 1</u>	(25) ₁₀

Figure 5.3 An example of addition.

carries generated during the addition process. For example, a carry of 0 is generated when x_0 and y_0 are added, a carry of 1 is produced when x_1 and y_1 are added, and so on.

In Chapters 2 and 4 we designed logic circuits by first specifying their behavior in the form of a truth table. This approach is impractical in designing an adder circuit that can add the five-bit numbers in Figure 5.3. The required truth table would have 10 input variables, 5 for each number X and Y . It would have $2^{10} = 1024$ rows! A better approach is to consider the addition of each pair of bits, x_i and y_i , separately.

For bit position 0, there is no carry-in, and hence the addition is the same as for Figure 5.2. For each other bit position i , the addition involves bits x_i and y_i , and a carry-in c_i . The sum and carry-out functions of variables x_i , y_i , and c_i are specified in the truth table in Figure 5.4a. The sum bit, s_i , is the modulo-2 sum of x_i , y_i , and c_i . The carry-out, c_{i+1} , is equal to 1 if the sum of x_i , y_i , and c_i is equal to either 2 or 3. Karnaugh maps for these functions are shown in part (b) of the figure. For the carry-out function the optimal sum-of-products realization is

$$c_{i+1} = x_i y_i + x_i c_i + y_i c_i$$

For the s_i function a sum-of-products realization is

$$s_i = \bar{x}_i y_i \bar{c}_i + x_i \bar{y}_i \bar{c}_i + \bar{x}_i \bar{y}_i c_i + x_i y_i c_i$$

A more attractive way of implementing this function is by using the XOR gates, as explained below.

Use of XOR Gates

The XOR function of two variables is defined as $x_1 \oplus x_2 = \bar{x}_1 x_2 + x_1 \bar{x}_2$. The preceding expression for the sum bit can be manipulated into a form that uses only XOR operations as follows

$$\begin{aligned} s_i &= (\bar{x}_i y_i + x_i \bar{y}_i) \bar{c}_i + (\bar{x}_i \bar{y}_i + x_i y_i) c_i \\ &= (x_i \oplus y_i) \bar{c}_i + \overline{(x_i \oplus y_i)} c_i \\ &= (x_i \oplus y_i) \oplus c_i \end{aligned}$$

The XOR operation is associative; hence we can write

$$s_i = x_i \oplus y_i \oplus c_i$$

Therefore, a single three-input XOR gate can be used to realize s_i .

The XOR gate generates as an output a modulo-2 sum of its inputs. The output is equal to 1 if an odd number of inputs have the value 1, and it is equal to 0 otherwise. For this reason the XOR is sometimes referred to as the *odd* function. Observe that the XOR has no minterms that can be combined into a larger product term, as evident from the checkerboard pattern for function s_i in the map in Figure 5.4b. The logic circuit implementing the truth table in Figure 5.4a is given in Figure 5.4c. This circuit is known as a *full-adder*.

Another interesting feature of XOR gates is that a two-input XOR gate can be thought of as using one input as a control signal that determines whether the true or complemented value of the other input will be passed through the gate as the output value. This is clear from the definition of XOR, where $x_i \oplus y_i = \bar{x}_i y_i + x_i \bar{y}_i$. Consider x to be the control input. Then if $x = 0$, the output will be equal to the value of y . But if $x = 1$, the output will

c_i	x_i	y_i	c_{i+1}	s_i
0	0	0	0	0
0	0	1	0	1
0	1	0	0	1
0	1	1	1	0
1	0	0	0	1
1	0	1	1	0
1	1	0	1	0
1	1	1	1	1

(a) Truth table

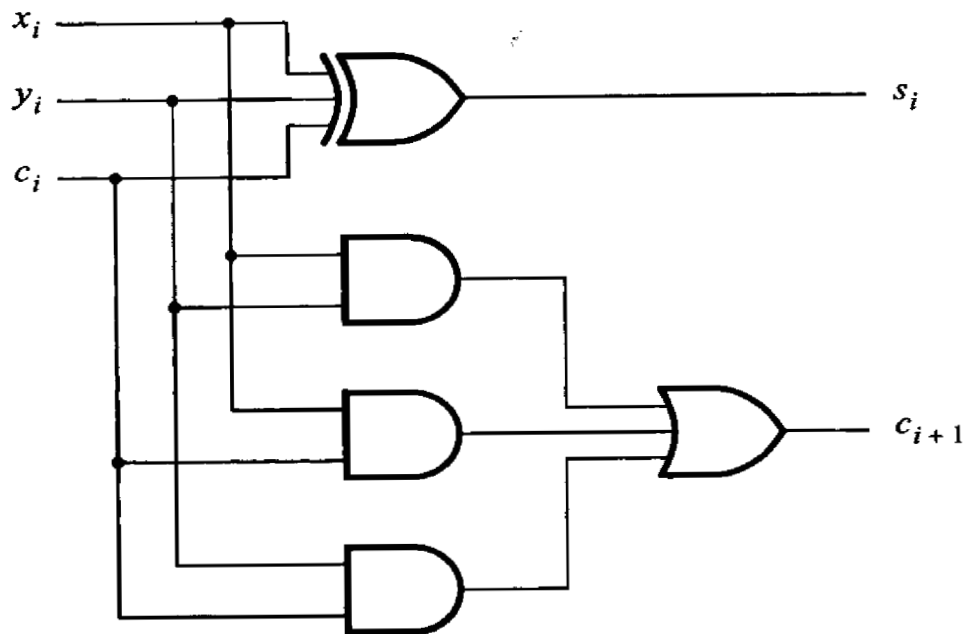
$c_i \backslash x_i y_i$	00	01	11	10
0		1		1
1	1		1	

$$s_i = x_i \oplus y_i \oplus c_i$$

$c_i \backslash x_i y_i$	00	01	11	10
0			1	
1		1	1	1

$$c_{i+1} = x_i y_i + x_i c_i + y_i c_i$$

(b) Karnaugh maps



(c) Circuit

Figure 5.4 Full-adder.

be equal to the complement of y . In the derivation above, we used algebraic manipulation to derive $s_i = (x_i \oplus y_i) \oplus c_i$. We could have obtained the same expression immediately by making the following observation. In the top half of the truth table in Figure 5.4a, c_i is equal to 0, and the sum function s_i is the XOR of x_i and y_i . In the bottom half of the table, c_i is equal to 1, while s_i is the complemented version of its top half. This observation

leads directly to our expression using 2 two-input XOR operations. We will encounter an important example of using XOR gates to pass true or complemented signals under the control of another signal in section 5.3.3.

In the preceding discussion we encountered the complement of the XOR operation, which we denoted as $\overline{x \oplus y}$. This operation is used so commonly that it is given the distinct name *XNOR*. A special symbol, \odot , is often used to denote the XNOR operation, namely

$$x \odot y = \overline{x \oplus y}$$

The XNOR is sometimes also referred to as the *coincidence* operation because it produces the output of 1 when its inputs coincide in value; that is, they are both 0 or both 1.

5.2.1 DECOMPOSED FULL-ADDER

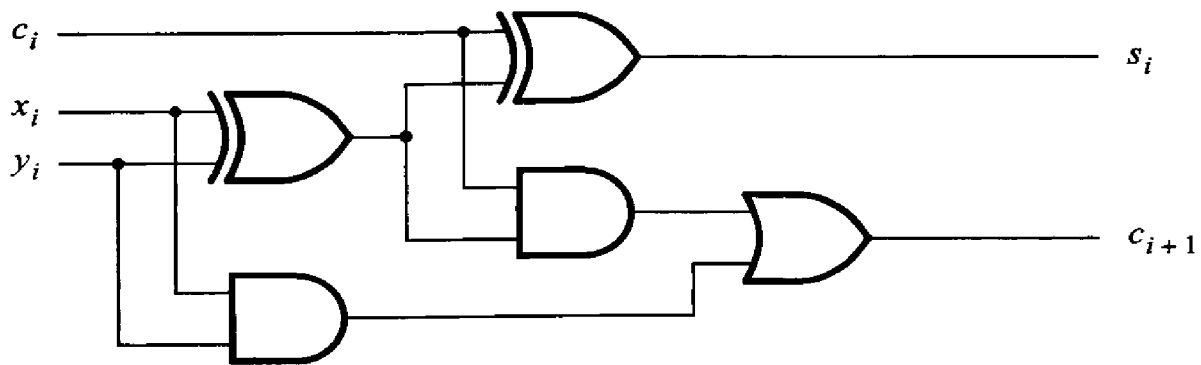
In view of the names used for the circuits, one can expect that a full-adder can be constructed using half-adders. This can be accomplished by creating a multilevel circuit of the type discussed in section 4.6.2. The circuit is given in Figure 5.5. It uses two half-adders to form a full-adder. The reader should verify the functional correctness of this circuit.

5.2.2 RIPPLE-CARRY ADDER

To perform addition by hand, we start from the least-significant digit and add pairs of digits, progressing to the most-significant digit. If a carry is produced in position i , then this carry is



(a) Block diagram



(b) Detailed diagram

Figure 5.5 A decomposed implementation of the full-adder circuit.

added to the operands in position $i + 1$. The same arrangement can be used in a logic circuit that performs addition. For each bit position we can use a full-adder circuit, connected as shown in Figure 5.6. Note that to be consistent with the customary way of writing numbers, the least-significant bit position is on the right. Carries that are produced by the full-adders propagate to the left.

When the operands X and Y are applied as inputs to the adder, it takes some time before the output sum, S , is valid. Each full-adder introduces a certain delay before its s_i and c_{i+1} outputs are valid. Let this delay be denoted as Δt . Thus the carry-out from the first stage, c_1 , arrives at the second stage Δt after the application of the x_0 and y_0 inputs. The carry-out from the second stage, c_2 , arrives at the third stage with a $2\Delta t$ delay, and so on. The signal c_{n-1} is valid after a delay of $(n - 1)\Delta t$, which means that the complete sum is available after a delay of $n\Delta t$. Because of the way the carry signals “ripple” through the full-adder stages, the circuit in Figure 5.6 is called a *ripple-carry adder*.

The delay incurred to produce the final sum and carry-out in a ripple-carry adder depends on the size of the numbers. When 32- or 64-bit numbers are used, this delay may become unacceptably high. Because the circuit in each full-adder leaves little room for a drastic reduction in the delay, it may be necessary to seek different structures for implementation of n -bit adders. We will discuss a technique for building high-speed adders in section 5.4.

So far we have dealt with unsigned integers only. The addition of such numbers does not require a carry-in for stage 0. In Figure 5.6 we included c_0 in the diagram so that the ripple-carry adder can also be used for subtraction of numbers, as we will see in section 5.3.

5.2.3 DESIGN EXAMPLE

Suppose that we need a circuit that multiplies an eight-bit unsigned number by 3. Let $A = a_7a_6 \cdots a_1a_0$ denote the number and $P = p_9p_8 \cdots p_1p_0$ denote the product $P = 3A$. Note that 10 bits are needed to represent the product.

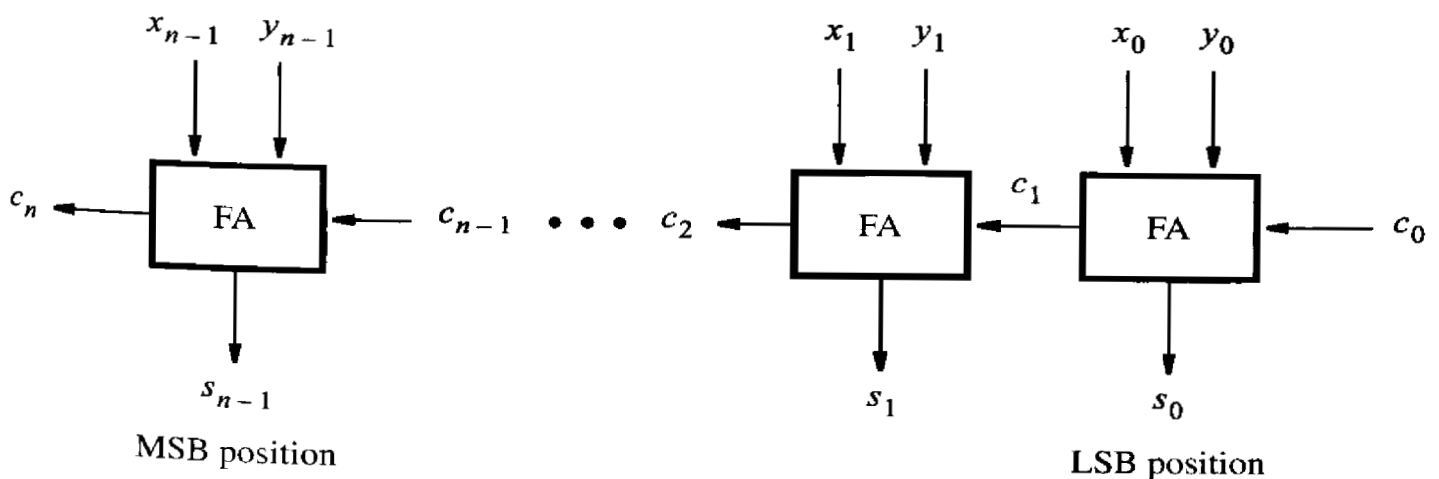


Figure 5.6 An n -bit ripple-carry adder.

A simple approach to design the required circuit is to use two ripple-carry adders to add three copies of the number A , as illustrated in Figure 5.7a. The symbol that denotes each adder is a commonly used graphical symbol for adders. The letters x_i , y_i , s_i , and c_i indicate the meaning of the inputs and outputs according to Figure 5.6. The first adder produces $A + A = 2A$. Its result is represented as eight sum bits and the carry from the most-significant bit. The second adder produces $2A + A = 3A$. It has to be a nine-bit adder to be able to handle the nine bits of $2A$, which are generated by the first adder. Because the y_i inputs have to be driven only by the eight bits of A , the ninth input y_8 is connected to a constant 0.

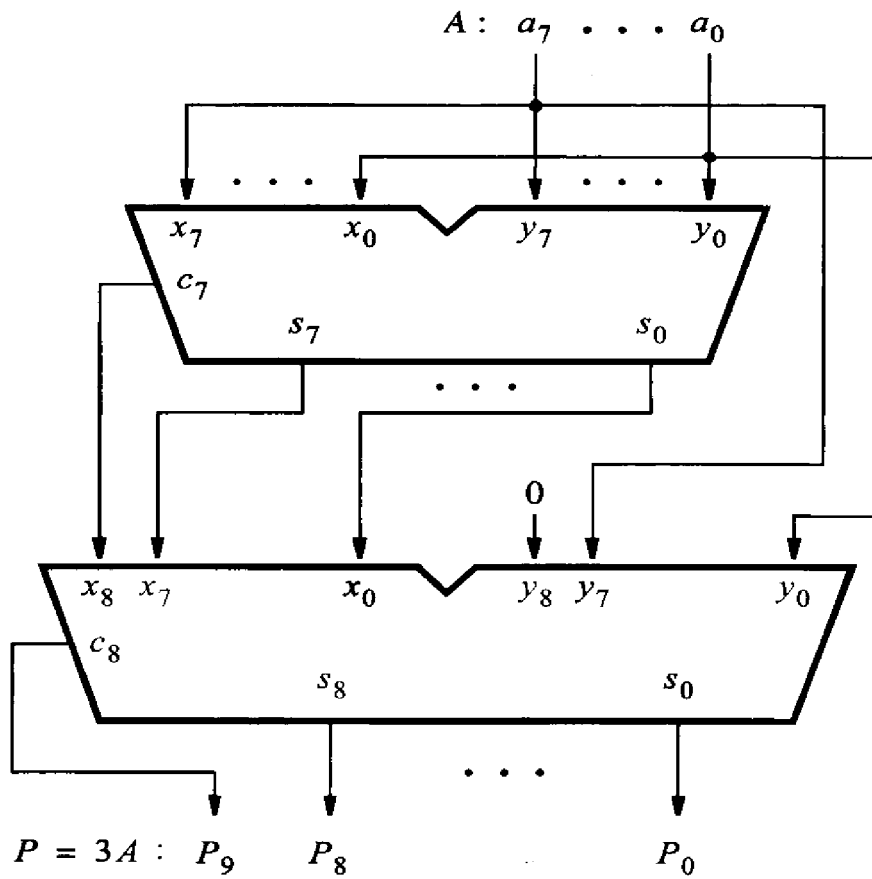
This approach is straightforward, but not very efficient. Because $3A = 2A + A$, we can observe that $2A$ can be generated by shifting the bits of A one bit-position to the left, which gives the bit pattern $a_7a_6a_5a_4a_3a_2a_1a_00$. According to equation 5.1, this pattern is equal to $2A$. Then a single ripple-carry adder suffices for implementing $3A$, as shown in Figure 5.7b. This is essentially the same circuit as the second adder in part (a) of the figure. Note that the input x_0 is connected to a constant 0. Note also that in the second adder in part (a) the value of x_0 is always 0, even though it is driven by the least-significant bit, s_0 , of the sum of the first adder. Because $x_0 = y_0 = a_0$ in the first adder, the sum bit s_0 will be 0, whether a_0 is 0 or 1.

5.3 SIGNED NUMBERS

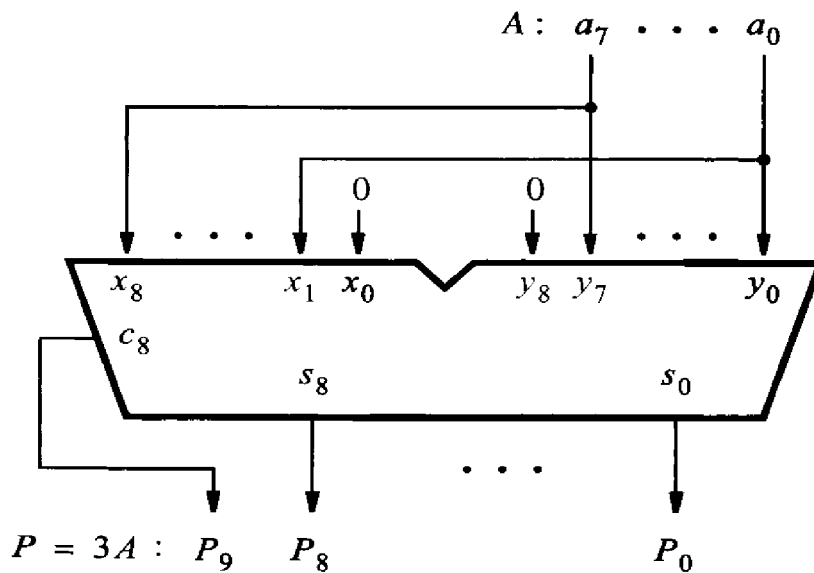
In the decimal system the sign of a number is indicated by a $+$ or $-$ symbol to the left of the most-significant digit. In the binary system the *sign* of a number is denoted by the left-most bit. For a positive number the left-most bit is equal to 0, and for a negative number it is equal to 1. Therefore, in signed numbers the left-most bit represents the sign, and the remaining $n - 1$ bits represent the magnitude, as illustrated in Figure 5.8. It is important to note the difference in the location of the most-significant bit (MSB). In unsigned numbers all bits represent the magnitude of a number; hence all n bits are *significant* in defining the magnitude. Therefore, the MSB is the left-most bit, b_{n-1} . In signed numbers there are $n - 1$ significant bits, and the MSB is in bit position b_{n-2} .

5.3.1 NEGATIVE NUMBERS

Positive numbers are represented using the positional number representation as explained in the previous section. Negative numbers can be represented in three different ways: sign-and-magnitude, 1's complement, and 2's complement.



(a) Naive approach



(b) Efficient design

Figure 5.7 Circuit that multiplies an eight-bit unsigned number by 3.

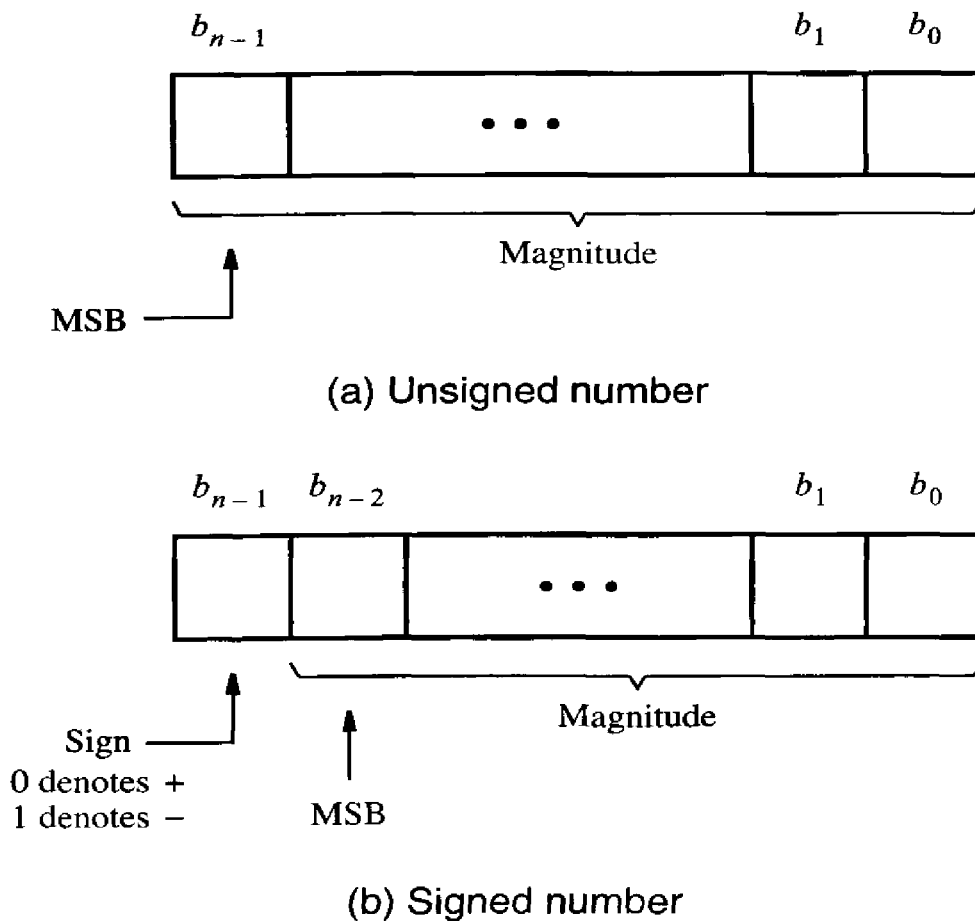


Figure 5.8 Formats for representation of integers.

Sign-and-Magnitude Representation

In the familiar decimal representation, the magnitude of both positive and negative numbers is expressed in the same way. The sign symbol distinguishes a number as being positive or negative. This scheme is called the *sign-and-magnitude* number representation. The same scheme can be used with binary numbers in which case the sign bit is 0 or 1 for positive or negative numbers, respectively. For example, if we use four-bit numbers, then $+5 = 0101$ and $-5 = 1101$. Because of its similarity to decimal sign-and-magnitude numbers, this representation is easy to understand. However, as we will see shortly, this representation is not well suited for use in computers. More suitable representations are based on complementary systems, explained below.

1's Complement Representation

In a complementary number system, the negative numbers are defined according to a subtraction operation involving positive numbers. We will consider two schemes for binary numbers: the 1's complement and the 2's complement. In the *1's complement* scheme, an n -bit negative number, K , is obtained by subtracting its equivalent positive number, P , from $2^n - 1$; that is, $K = (2^n - 1) - P$. For example, if $n = 4$, then $K = (2^4 - 1) - P = (15)_{10} - P = (1111)_2 - P$. If we convert $+5$ to a negative, we get $-5 = 1111 - 0101 = 1010$.

Similarly, $+3 = 0011$ and $-3 = 1111 - 0011 = 1100$. Clearly, the 1's complement can be obtained simply by complementing each bit of the number, including the sign bit. While 1's complement numbers are easy to derive, they have some drawbacks when used in arithmetic operations, as we will see in the next section.

2's Complement Representation

In the 2's complement scheme, a negative number, K , is obtained by subtracting its equivalent positive number, P , from 2^n ; namely, $K = 2^n - P$. Using our four-bit example, $-5 = 10000 - 0101 = 1011$, and $-3 = 10000 - 0011 = 1101$. Finding 2's complements in this manner requires performing a subtraction operation that involves borrows. However, we can observe that if K_1 is the 1's complement of P and K_2 is the 2's complement of P , then

$$\begin{aligned}K_1 &= (2^n - 1) - P \\K_2 &= 2^n - P\end{aligned}$$

It follows that $K_2 = K_1 + 1$. Thus a simpler way of finding a 2's complement of a number is to add 1 to its 1's complement because finding a 1's complement is trivial. This is how 2's complement numbers are obtained in logic circuits that perform arithmetic operations.

The reader will need to develop an ability to find 2's complement numbers quickly. There is a simple rule that can be used for this purpose.

Rule for Finding 2's Complements Given a signed number, $B = b_{n-1}b_{n-2} \cdots b_1b_0$, its 2's complement, $K = k_{n-1}k_{n-2} \cdots k_1k_0$, can be found by examining the bits of B from right to left and taking the following action: copy all bits of B that are 0 and the first bit that is 1; then simply complement the rest of the bits.

For example, if $B = 0110$, then we copy $k_0 = b_0 = 0$ and $k_1 = b_1 = 1$, and complement the rest so that $k_2 = \bar{b}_2 = 0$ and $k_3 = \bar{b}_3 = 1$. Hence $K = 1010$. As another example, if $B = 10110100$, then $K = 01001100$. We leave the proof of this rule as an exercise for the reader.

Table 5.2 illustrates the interpretation of all 16 four-bit patterns in the three signed-number representations that we have considered. Note that for both sign-and-magnitude representation and for 1's complement representation there are two patterns that represent the value zero. For 2's complement there is only one such pattern. Also, observe that the range of numbers that can be represented with four bits in 2's complement form is -8 to $+7$, while in the other two representations it is -7 to $+7$.

Using 2's-complement representation, an n -bit number $B = b_{n-1}b_{n-2} \cdots b_1b_0$ represents the value

$$V(B) = (-b_{n-1} \times 2^{n-1}) + b_{n-2} \times 2^{n-2} + \cdots + b_1 \times 2^1 + b_0 \times 2^0 \quad [5.2]$$

Thus the largest negative number, $100 \dots 00$, has the value -2^{n-1} . The largest positive number, $011 \dots 11$, has the value $2^{n-1} - 1$.

Table 5.2 Interpretation of four-bit signed integers.

$b_3b_2b_1b_0$	Sign and magnitude	1's complement	2's complement
0111	+7	+7	+7
0110	+6	+6	+6
0101	+5	+5	+5
0100	+4	+4	+4
0011	+3	+3	+3
0010	+2	+2	+2
0001	+1	+1	+1
0000	+0	+0	+0
1000	-0	-7	-8
1001	-1	-6	-7
1010	-2	-5	-6
1011	-3	-4	-5
1100	-4	-3	-4
1101	-5	-2	-3
1110	-6	-1	-2
1111	-7	-0	-1

5.3.2 ADDITION AND SUBTRACTION

To assess the suitability of different number representations, it is necessary to investigate their use in arithmetic operations—particularly in addition and subtraction. We can illustrate the good and bad aspects of each representation by considering very small numbers. We will use four-bit numbers, consisting of a sign bit and three significant bits. Thus the numbers have to be small enough so that the magnitude of their sum can be expressed in three bits, which means that the sum cannot exceed the value 7.

Addition of positive numbers is the same for all three number representations. It is actually the same as the addition of unsigned numbers discussed in section 5.2. But there are significant differences when negative numbers are involved. The difficulties that arise become apparent if we consider operands with different combinations of signs.

Sign-and-Magnitude Addition

If both operands have the same sign, then the addition of sign-and-magnitude numbers is simple. The magnitudes are added, and the resulting sum is given the sign of the operands. However, if the operands have opposite signs, the task becomes more complicated. Then it is necessary to subtract the smaller number from the larger one. This means that logic circuits that compare and subtract numbers are also needed. We will see shortly that it is possible to perform subtraction without the need for this circuitry. For this reason, the sign-and-magnitude representation is not used in computers.

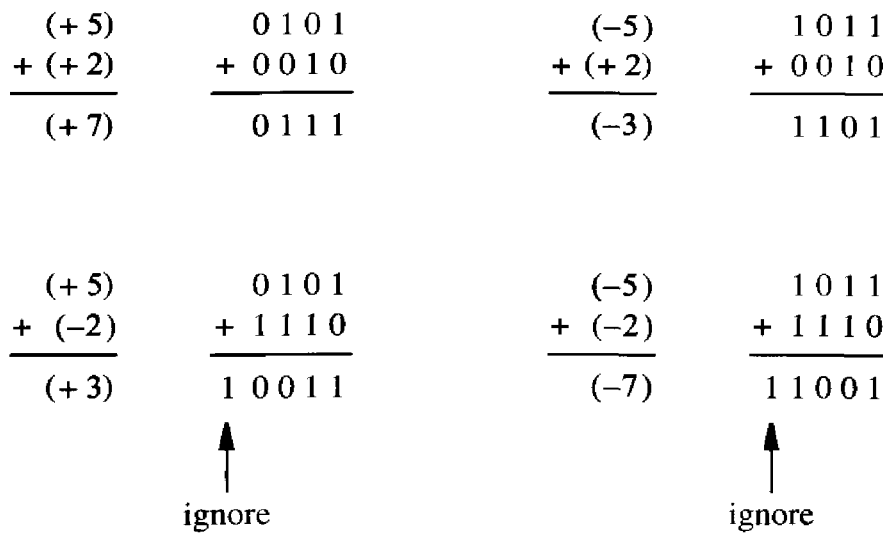


Figure 5.10 Examples of 2's complement addition.

As illustrated by these examples, the addition of 2's complement numbers is very simple. When the numbers are added, the result is always correct. If there is a carry-out from the sign-bit position, it is simply ignored. Therefore, the addition process is the same, regardless of the signs of the operands. It can be performed by an adder circuit, such as the one shown in Figure 5.6. Hence the 2's complement notation is highly suitable for the implementation of addition operations. We will now consider its use in subtraction operations.

2's Complement Subtraction

The easiest way of performing subtraction is to negate the subtrahend and add it to the minuend. This is done by finding the 2's complement of the subtrahend and then performing the addition. Figure 5.11 illustrates the process. The operation $5 - (+2) = 3$ involves finding the 2's complement of +2, which is 1110. When this number is added to 0101, the result is 0011 = (+3) and a carry-out from the sign-bit position occurs, which is ignored. A similar situation arises for $(-5) - (+2) = (-7)$. In the remaining two cases there is no carry-out, and the result is correct.

As a graphical aid to visualize the addition and subtraction examples in Figures 5.10 and 5.11, we can place all possible four-bit patterns on a modulo-16 circle given in Figure 5.12. If these bit patterns represented unsigned integers, they would be numbers 0 to 15. If they represent 2's-complement integers, then the numbers range from -8 to +7, as shown. The addition operation is done by stepping in the clockwise direction by the magnitude of the number to be added. For example, $-5 + 2$ is determined by starting at 1011 (= -5) and moving clockwise two steps, giving the result 1101 (= -3). Subtraction is performed by stepping in the counterclockwise direction. For example, $-5 - (+2)$ is determined by starting at 1011 and moving counterclockwise two steps, which gives 1001 (= -7).

The key conclusion of this section is that the subtraction operation can be realized as the addition operation, using a 2's complement of the subtrahend, regardless of the signs of

$$\begin{array}{r}
 (+5) \quad 0101 \\
 - (+2) \quad -0010 \\
 \hline
 (+3)
 \end{array}
 \quad \Rightarrow \quad
 \begin{array}{r}
 0101 \\
 + 1110 \\
 \hline
 10011 \\
 \uparrow \\
 \text{ignore}
 \end{array}$$

$$\begin{array}{r}
 (-5) \quad 1011 \\
 - (+2) \quad -0010 \\
 \hline
 (-7)
 \end{array}
 \quad \Rightarrow \quad
 \begin{array}{r}
 1011 \\
 + 1110 \\
 \hline
 11001 \\
 \uparrow \\
 \text{ignore}
 \end{array}$$

$$\begin{array}{r}
 (+5) \quad 0101 \\
 - (-2) \quad -1110 \\
 \hline
 (+7)
 \end{array}
 \quad \Rightarrow \quad
 \begin{array}{r}
 0101 \\
 + 0010 \\
 \hline
 0111
 \end{array}$$

$$\begin{array}{r}
 (-5) \quad 1011 \\
 - (-2) \quad -1110 \\
 \hline
 (-3)
 \end{array}
 \quad \Rightarrow \quad
 \begin{array}{r}
 1011 \\
 + 0010 \\
 \hline
 1101
 \end{array}$$

Figure 5.11 Examples of 2's complement subtraction.

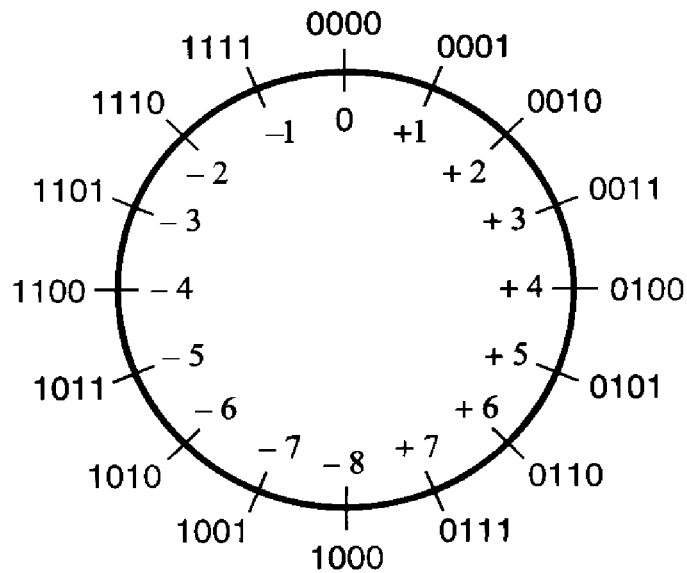


Figure 5.12 Graphical interpretation of four-bit 2's complement numbers.

the two operands. Therefore, it should be possible to use the same adder circuit to perform both addition and subtraction.

5.3.3 ADDER AND SUBTRACTOR UNIT

The only difference between performing addition and subtraction is that for subtraction it is necessary to use the 2's complement of one operand. Let X and Y be the two operands, such that Y serves as the subtrahend in subtraction. From section 5.3.1 we know that a 2's complement can be obtained by adding 1 to the 1's complement of Y . Adding 1 in the least-significant bit position can be accomplished simply by setting the carry-in bit c_0 to 1. A 1's complement of a number is obtained by complementing each of its bits. This could be done with NOT gates, but we need a more flexible circuit where we can use the true value of Y for addition and its complement for subtraction.

In section 5.2 we explained that two-input XOR gates can be used to choose between true and complemented versions of an input value, under the control of the other input. This idea can be applied in the design of the adder/subtractor unit as follows. Assume that there exists a control signal that chooses whether addition or subtraction is to be performed. Let this signal be called $\overline{\text{Add/Sub}}$. Also, let its value be 0 for addition and 1 for subtraction. To indicate this fact, we placed a bar over Add. This is a commonly used convention, where a bar over a name means that the action specified by the name is to be taken if the control signal has the value 0. Now let each bit of Y be connected to one input of an XOR gate, with the other input connected to $\overline{\text{Add/Sub}}$. The outputs of the XOR gates represent Y if $\overline{\text{Add/Sub}} = 0$, and they represent the 1's complement of Y if $\overline{\text{Add/Sub}} = 1$. This leads to the circuit in Figure 5.13. The main part of the circuit is an n -bit adder, which can be implemented using the ripple-carry structure of Figure 5.6. Note that the control signal

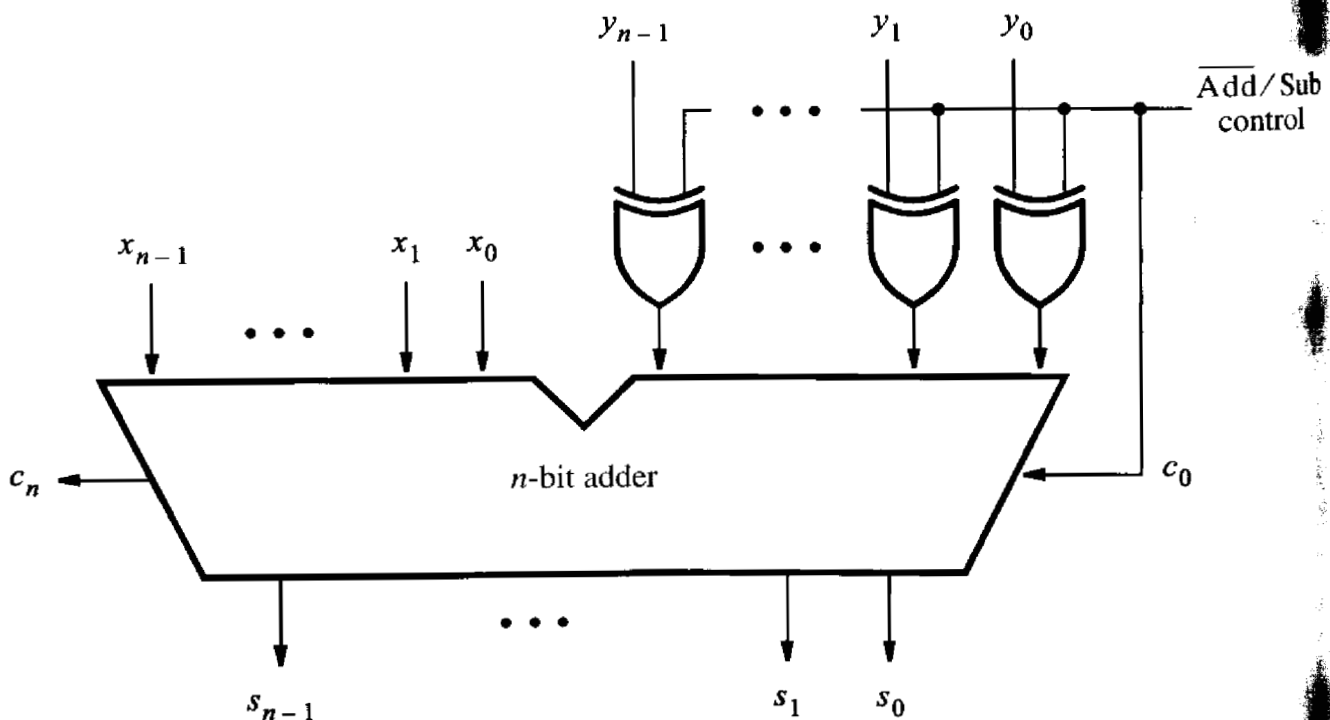


Figure 5.13 Adder/subtractor unit.

$\overline{\text{Add/Sub}}$ is also connected to the carry-in c_0 . This makes $c_0 = 1$ when subtraction is to be performed, thus adding the 1 that is needed to form the 2's complement of Y . When the addition operation is performed, we will have $c_i = 0$.

The combined adder/subtractor unit is a good example of an important concept in the design of logic circuits. It is useful to design circuits to be as flexible as possible and to exploit common portions of circuits for as many tasks as possible. This approach minimizes the number of gates needed to implement such circuits, and it reduces the wiring complexity substantially.

5.3.4 RADIX-COMPLEMENT SCHEMES

The idea of performing a subtraction operation by addition of a complement of the subtrahend is not restricted to binary numbers. We can gain some insight into the workings of the 2's complement scheme by considering its counterpart in the decimal number system. Consider the subtraction of two-digit decimal numbers. Computing a result such as $74 - 33 = 41$ is simple because each digit of the subtrahend is smaller than the corresponding digit of the minuend; therefore, no borrow is needed in the computation. But computing $74 - 36 = 38$ is not as simple because a borrow is needed in subtracting the least-significant digit. If a borrow occurs, the computation becomes more complicated.

Suppose that we restructure the required computation as follows

$$\begin{aligned} 74 - 36 &= 74 + 100 - 100 - 36 \\ &= 74 + (100 - 36) - 100 \end{aligned}$$

Now two subtractions are needed. Subtracting 36 from 100 still involves borrows. But noting that $100 = 99 + 1$, these borrows can be avoided by writing

$$\begin{aligned} 74 - 36 &= 74 + (99 + 1 - 36) - 100 \\ &= 74 + (99 - 36) + 1 - 100 \end{aligned}$$

The subtraction in parentheses does not require borrows; it is performed by subtracting each digit of the subtrahend from 9. We can see a direct correlation between this expression and the one used for 2's complement, as reflected in the circuit in Figure 5.13. The operation $(99 - 36)$ is analogous to complementing the subtrahend Y to find its 1's complement, which is the same as subtracting each bit from 1. Using decimal numbers, we find the 9's complement of the subtrahend by subtracting each digit from 9. In Figure 5.13 we add the carry-in of 1 to form the 2's complement of Y . In our decimal example we perform $(99 - 36) + 1 = 64$. Here 64 is the 10's complement of 36. For an n -digit decimal number, N , its 10's complement, K_{10} , is defined as $K_{10} = 10^n - N$, while its 9's complement, K_9 , is $K_9 = (10^n - 1) - N$.

Thus the required subtraction $(74 - 36)$ can be performed by addition of the 10's complement of the subtrahend, as in

$$\begin{aligned} 74 - 36 &= 74 + 64 - 100 \\ &= 138 - 100 \\ &= 38 \end{aligned}$$

The subtraction $138 - 100$ is trivial because it means that the leading digit in 138 is simply deleted. This is analogous to ignoring the carry-out from the circuit in Figure 5.13, as discussed for the subtraction examples in Figure 5.11.

Suppose that A and B are n -digit decimal numbers. Using the above 10's-complement approach, B can be subtracted from A as follows:

$$A - B = A + (10^n - B) - 10^n$$

If $A \geq B$, then the operation $A + (10^n - B)$ produces a carry-out of 1. This carry is equivalent to 10^n ; hence it can be simply ignored.

But if $A < B$, then the operation $A + (10^n - B)$ produces a carry-out of 0. Let the result obtained be M , so that

$$A - B = M - 10^n$$

We can rewrite this as

$$10^n - (B - A) = M$$

The left side of this equation is the 10's complement of $(B - A)$. The 10's complement of a positive number represents a negative number that has the same magnitude. Hence M correctly represents the negative value obtained from the computation $A - B$ when $A < B$. This concept is illustrated in the examples that follow.

When dealing with binary signed numbers we use 0 in the left-most bit position to denote a positive number and 1 to denote a negative number. If we wanted to build hardware that operates on signed decimal numbers, we could use a similar approach. Let 0 in the left-most digit position denote a positive number and let 9 denote a negative number. Note that 9 is the 9's complement of 0 in the decimal system, just as 1 is the 1's complement of 0 in the binary system.

Thus, using three-digit signed numbers, $A = 045$ and $B = 027$ are positive numbers with magnitudes 45 and 27, respectively. The number B can be subtracted from A as follows

$$\begin{aligned} A - B &= 045 - 027 \\ &= 045 + 1000 - 1000 - 027 \\ &= 045 + (999 - 027) + 1 - 1000 \\ &= 045 + 972 + 1 - 1000 \\ &= 1018 - 1000 \\ &= 018 \end{aligned}$$

This gives the correct answer of +18.

Next consider the case where the minuend has lower value than the subtrahend. This is illustrated by the computation

$$\begin{aligned}
 B - A &= 027 - 045 \\
 &= 027 + 1000 - 1000 - 045 \\
 &= 027 + (999 - 045) + 1 - 1000 \\
 &= 027 + 954 + 1 - 1000 \\
 &= 982 - 1000
 \end{aligned}$$

From this expression it appears that we still need to perform the subtraction $982 - 1000$. But as seen in Example 5.1, this can be rewritten as

$$\begin{aligned}
 982 &= 1000 + B - A \\
 &= 1000 - (A - B)
 \end{aligned}$$

Therefore, 982 is the negative number that results when forming the 10's complement of $(A - B)$. From the previous computation we know that $(A - B) = 018$, which denotes +18. Thus the signed number 982 is the 10's complement representation of -18 , which is the required result.

Let $C = 955$ and $D = 973$; hence the values of C and D are -45 and -27 , respectively. The number D can be subtracted from C as follows

$$\begin{aligned}
 C - D &= 955 - 973 \\
 &= 955 + 1000 - 1000 - 973 \\
 &= 955 + (999 - 973) + 1 - 1000 \\
 &= 955 + 026 + 1 - 1000 \\
 &= 982 - 1000
 \end{aligned}$$

The number 982 is the 10's complement representation of -18 , which is the correct result. Consider now the case $D - A$, where $D = 973$ and $A = 045$:

$$\begin{aligned}
 D - A &= 973 - 045 \\
 &= 973 + 1000 - 1000 - 045 \\
 &= 973 + (999 - 045) + 1 - 1000 \\
 &= 973 + 954 + 1 - 1000 \\
 &= 1928 - 1000 \\
 &= 928
 \end{aligned}$$

The result 928 is the 10's complement representation of -72 .

These examples illustrate that signed numbers can be subtracted without using a subtraction operation that involves borrows. The only subtraction needed is in forming the 9's complement of the subtrahend, in which case each digit is simply subtracted from 9.

Thus a circuit that forms the 9's complement, combined with a normal adder circuit, will suffice for both addition and subtraction of decimal signed numbers. A key point is that the hardware needs to deal only with n digits if n -digit numbers are used. Any carry that may be generated from the left-most digit position is simply ignored.

The concept of subtracting a number by adding its radix-complement is general. If the radix is r , then the r 's complement, K_r , of an n -digit number, N , is determined as $K_r = r^n - N$. The $(r - 1)$'s complement, K_{r-1} , is defined as $K_{r-1} = (r^n - 1) - N$; it is computed simply by subtracting each digit of N from the value $(r - 1)$. The $(r - 1)$'s complement is referred to as the *diminished-radix complement*. Circuits for forming the $(r - 1)$'s complements are simpler than those for general subtraction that involves borrows. The circuits are particularly simple in the binary case, where the 1's complement requires just inverting each bit.

In Figure 5.11 we illustrated the subtraction operation on binary numbers given in 2's-complement representation. Consider the computation $(+5) - (+2) = (+3)$, using the approach discussed above. Each number is represented by a four-bit pattern. The value 2^4 is represented as 10000. Then

$$\begin{aligned} 0101 - 0010 &= 0101 + (10000 - 0010) - 10000 \\ &= 0101 + (1111 - 0010) + 1 - 10000 \\ &= 0101 + 1101 + 1 - 10000 \\ &= 10011 - 10000 \\ &= 0011 \end{aligned}$$

Because $5 > 2$, there is a carry from the fourth bit position. It represents the value 2^4 , denoted by the pattern 10000.

Consider now the computation $(+2) - (+5) = (-3)$, which gives

$$\begin{aligned} 0010 - 0101 &= 0010 + (10000 - 0101) - 10000 \\ &= 0010 + (1111 - 0101) + 1 - 10000 \\ &= 0010 + 1010 + 1 - 10000 \\ &= 1101 - 10000 \end{aligned}$$

Because $2 < 5$, there is no carry from the fourth bit position. The answer, 1101, is the 2's-complement representation of -3 . Note that

$$\begin{aligned} 1101 &= 10000 + 0010 - 0101 \\ &= 10000 - (0101 - 0010) \\ &= 10000 - 0011 \end{aligned}$$

indicating that 1101 is the 2's complement of 0011 (+3).

Finally, consider the case where the subtrahend is a negative number. The computation $(+5) - (-2) = (+7)$ is done as follows

$$\begin{aligned} 0101 - 1110 &= 0101 + (10000 - 1110) - 10000 \\ &= 0101 + (1111 - 1110) + 1 - 10000 \\ &= 0101 + 0001 + 1 - 10000 \\ &= 0111 - 10000 \end{aligned}$$

While $5 > (-2)$, the pattern 1110 is greater than the pattern 0101 when the patterns are treated as unsigned numbers. Therefore, there is no carry from the fourth bit position. The answer 0111 is the 2's complement representation of +7. Note that

$$\begin{aligned} 0111 &= 10000 + 0101 - 1110 \\ &= 10000 - (1110 - 0101) \\ &= 10000 - 1001 \end{aligned}$$

and 1001 represents -7 .

5.3.5 ARITHMETIC OVERFLOW

The result of addition or subtraction is supposed to fit within the significant bits used to represent the numbers. If n bits are used to represent signed numbers, then the result must be in the range -2^{n-1} to $2^{n-1} - 1$. If the result does not fit in this range, then we say that *arithmetic overflow* has occurred. To ensure the correct operation of an arithmetic circuit, it is important to be able to detect the occurrence of overflow.

Figure 5.14 presents the four cases where 2's-complement numbers with magnitudes of 7 and 2 are added. Because we are using four-bit numbers, there are three significant bits, b_{2-0} . When the numbers have opposite signs, there is no overflow. But if both numbers have the same sign, the magnitude of the result is 9, which cannot be represented with just

(+7)	0 1 1 1	(-7)	1 0 0 1
+ (+2)	+ 0 0 1 0	+ (+2)	+ 0 0 1 0
(+9)	1 0 0 1	(-5)	1 0 1 1
	$c_4 = 0$		$c_4 = 0$
	$c_3 = 1$		$c_3 = 0$
(+7)	0 1 1 1	(-7)	1 0 0 1
+ (-2)	+ 1 1 1 0	+ (-2)	+ 1 1 1 0
(+5)	1 0 1 0 1	(-9)	1 0 1 1 1
	$c_4 = 1$		$c_4 = 1$
	$c_3 = 1$		$c_3 = 0$

Figure 5.14 Examples for determination of overflow.

three significant bits; therefore, overflow occurs. The key to determining whether overflow occurs is the carry-out from the MSB position, called c_3 in the figure, and from the sign-bit position, called c_4 . The figure indicates that overflow occurs when these carry-outs have different values, and a correct sum is produced when they have the same value. Indeed, this is true in general for both addition and subtraction of 2's-complement numbers. As a quick check of this statement, consider the examples in Figure 5.10 where the numbers are small enough so that overflow does not occur in any case. In the top two examples in the figure, there is a carry-out of 0 from both sign and MSB positions. In the bottom two examples, there is a carry-out of 1 from both positions. Therefore, for the examples in Figures 5.10 and 5.14, the occurrence of overflow is detected by

$$\begin{aligned}\text{Overflow} &= c_3\bar{c}_4 + \bar{c}_3c_4 \\ &= c_3 \oplus c_4\end{aligned}$$

For n -bit numbers we have

$$\text{Overflow} = c_{n-1} \oplus c_n$$

Thus the circuit in Figure 5.13 can be modified to include overflow checking with the addition of one XOR gate.

5.3.6 PERFORMANCE ISSUES

When buying a digital system, such as a computer, the buyer pays particular attention to the performance that the system is expected to provide and to the cost of acquiring the system. Superior performance usually comes at a higher cost. However, a large increase in performance can often be achieved at a modest increase in cost. A commonly used indicator of the value of a system is its *price/performance ratio*.

The addition and subtraction of numbers are fundamental operations that are performed frequently in the course of a computation. The speed with which these operations are performed has a strong impact on the overall performance of a computer. In light of this, let us take a closer look at the speed of the adder/subtractor unit in Figure 5.13. We are interested in the largest delay from the time the operands X and Y are presented as inputs, until the time all bits of the sum S and the final carry-out, c_n , are valid. Most of this delay is caused by the n -bit adder circuit. Assume that the adder is implemented using the ripple-carry structure in Figure 5.6 and that each full-adder stage is the circuit in Figure 5.4c. The delay for the carry-out signal in this circuit, Δt , is equal to two gate delays. From section 5.2.2 we know that the final result of the addition will be valid after a delay of $n\Delta t$, which is equal to $2n$ gate delays. In addition to the delay in the ripple-carry path, there is also a delay in the XOR gates that feed either the true or complemented value of Y to the adder inputs. If this delay is equal to one gate delay, then the total delay of the circuit in Figure 5.13 is $2n + 1$ gate delays. For a large n , say $n = 32$ or $n = 64$, the delay would lead to unacceptably poor performance. Therefore, it is important to find faster circuits to perform addition.

The speed of any circuit is limited by the longest delay along the paths through the circuit. In the case of the circuit in Figure 5.13, the longest delay is along the path from

the y_i input, through the XOR gate and through the carry circuit of each adder stage. The longest delay is often referred to as the *critical-path delay*, and the path that causes this delay is called the *critical path*.

5.4 FAST ADDERS

The performance of a large digital system is dependent on the speed of circuits that form its various functional units. Obviously, better performance can be achieved using faster circuits. This can be accomplished by using superior (usually newer) technology in which the delays in basic gates are reduced. But it can also be accomplished by changing the overall structure of a functional unit, which may lead to even more impressive improvement. In this section we will discuss an alternative for implementation of an n -bit adder, which substantially reduces the time needed to add numbers.

5.4.1 CARRY-LOOKAHEAD ADDER

To reduce the delay caused by the effect of carry propagation through the ripple-carry adder, we can attempt to evaluate quickly for each stage whether the carry-in from the previous stage will have a value 0 or 1. If a correct evaluation can be made in a relatively short time, then the performance of the complete adder will be improved.

From Figure 5.4*b* the carry-out function for stage i can be realized as

$$c_{i+1} = x_i y_i + x_i c_i + y_i c_i$$

If we factor this expression as

$$c_{i+1} = x_i y_i + (x_i + y_i) c_i$$

then it can be written as

$$c_{i+1} = g_i + p_i c_i \quad [5.3]$$

where

$$g_i = x_i y_i$$

$$p_i = x_i + y_i$$

The function g_i is equal to 1 when both inputs x_i and y_i are equal to 1, regardless of the value of the incoming carry to this stage, c_i . Since in this case stage i is guaranteed to generate a carry-out, g is called the *generate* function. The function p_i is equal to 1 when at least one of the inputs x_i and y_i is equal to 1. In this case a carry-out is produced if $c_i = 1$. The effect is that the carry-in of 1 is propagated through stage i ; hence p_i is called the *propagate* function.

Expanding the expression 5.3 in terms of stage $i - 1$ gives

$$\begin{aligned} c_{i+1} &= g_i + p_i(g_{i-1} + p_{i-1}c_{i-1}) \\ &= g_i + p_i g_{i-1} + p_i p_{i-1} c_{i-1} \end{aligned}$$

The same expansion for other stages, ending with stage 0, gives

$$c_{i+1} = g_i + p_i g_{i-1} + p_i p_{i-1} g_{i-2} + \cdots + p_i p_{i-1} \cdots p_2 p_1 g_0 + p_i p_{i-1} \cdots p_1 p_0 c_0 \quad [5.4]$$

This expression represents a two-level AND-OR circuit in which c_{i+1} is evaluated very quickly. An adder based on this expression is called a *carry-lookahead adder*.

To appreciate the physical meaning of expression 5.4, it is instructive to consider its effect on the construction of a fast adder in comparison with the details of the ripple-carry adder. We will do so by examining the detailed structure of the two stages that add the least-significant bits, namely, stages 0 and 1. Figure 5.15 shows the first two stages of a ripple-carry adder in which the carry-out functions are implemented as indicated in expression 5.3. Each stage is essentially the circuit from Figure 5.4c except that an extra

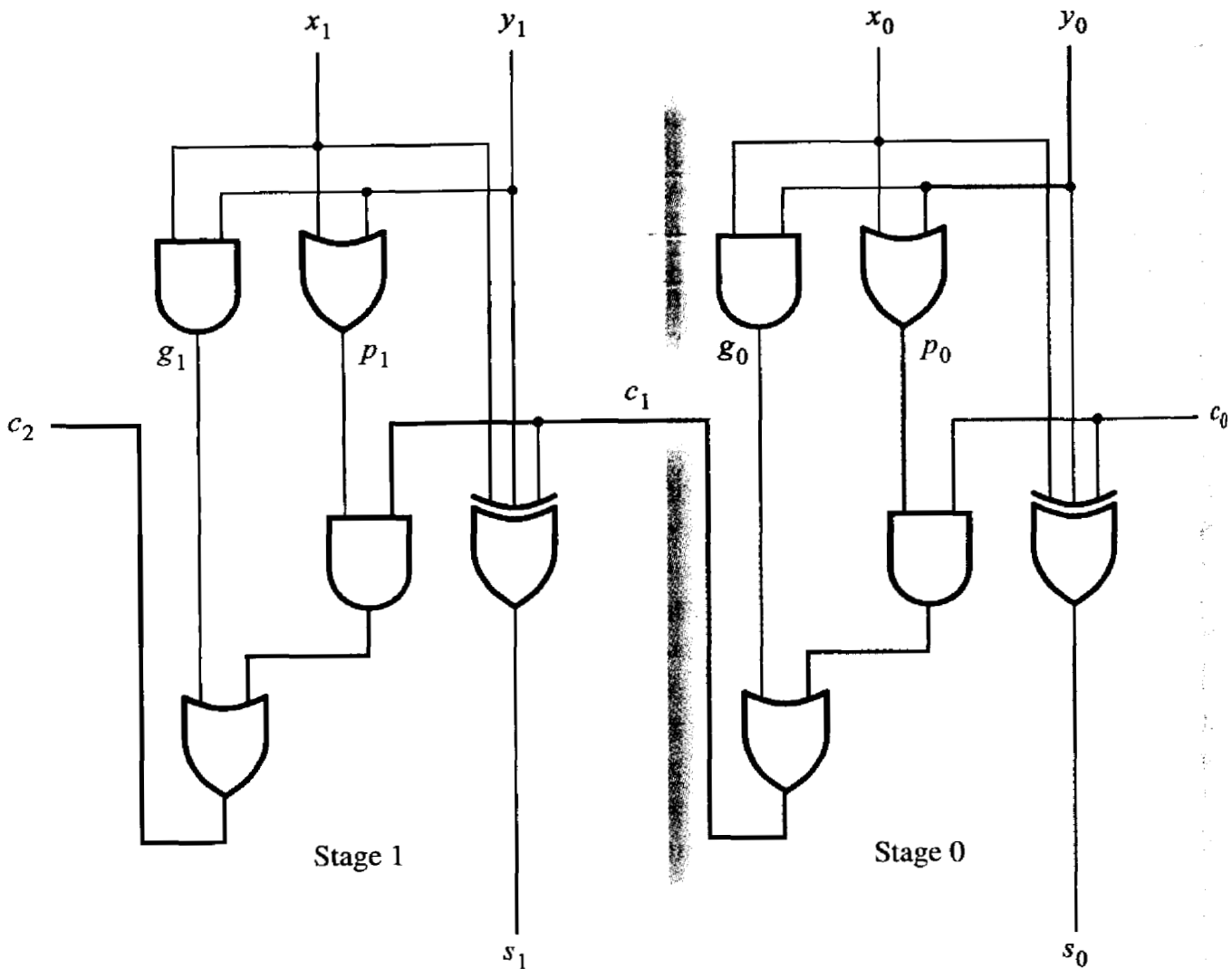


Figure 5.15 A ripple-carry adder based on expression 5.3.

OR gate is used (which produces the p_i signal), instead of an AND gate because we factored the sum-of-products expression for c_{i+1} .

The slow speed of the ripple-carry adder is caused by the long path along which a carry signal must propagate. In Figure 5.15 the critical path is from inputs x_0 and y_0 to the output c_2 . It passes through five gates, as highlighted in blue. The path in other stages of an n -bit adder is the same as in stage 1. Therefore, the total delay along the critical path is $2n + 1$.

Figure 5.16 gives the first two stages of the carry-lookahead adder, using expression 5.4 to implement the carry-out functions. Thus

$$c_1 = g_0 + p_0c_0$$

$$c_2 = g_1 + p_1g_0 + p_1p_0c_0$$

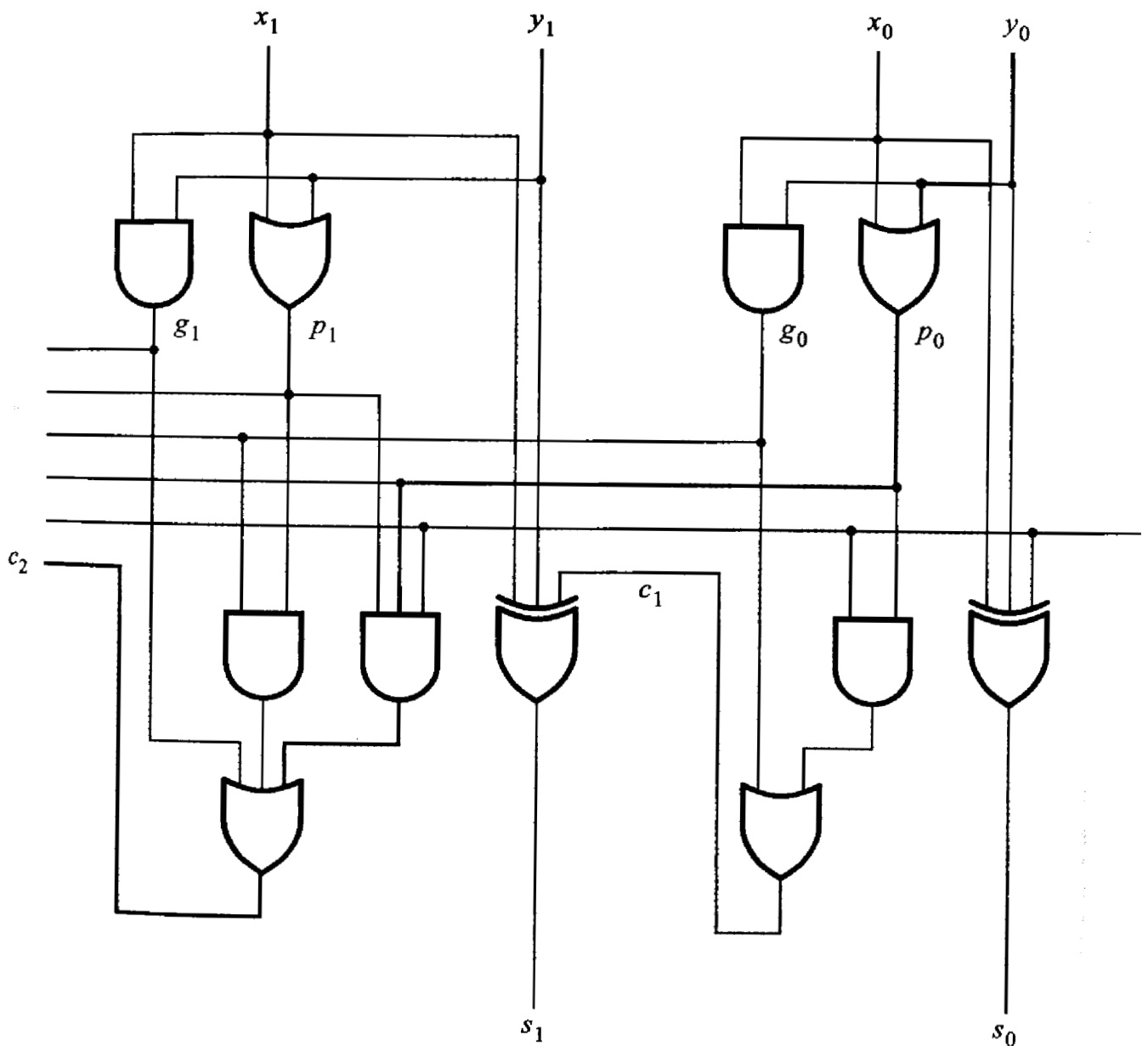


Figure 5.16 The first two stages of a carry-lookahead adder.

The critical path for producing the c_2 signal is highlighted in blue. In this circuit, c_2 is produced just as quickly as c_1 , after a total of three gate delays. Extending the circuit to n bits, the final carry-out signal c_n would also be produced after only three gate delays because expression 5.4 is just a large two-level (AND-OR) circuit.

The total delay in the n -bit carry-lookahead adder is four gate delays. The values of all g_i and p_i signals are determined after one gate delay. It takes two more gate delays to evaluate all carry signals. Finally, it takes one more gate delay (XOR) to generate all sum bits. The key to the good performance of the adder is quick evaluation of carry signals.

The complexity of an n -bit carry-lookahead adder increases rapidly as n becomes larger. To reduce the complexity, we can use a *hierarchical* approach in designing large adders. Suppose that we want to design a 32-bit adder. We can divide this adder into 4 eight-bit blocks, such that bits b_{7-0} are block 0, bits b_{15-8} are block 1, bits b_{23-16} are block 2, and bits b_{31-24} are block 3. Then we can implement each block as an eight-bit carry-lookahead adder. The carry-out signals from the four blocks are c_8 , c_{16} , c_{24} , and c_{32} . Now we have two possibilities. We can connect the four blocks as four stages in a ripple-carry adder. Thus while carry-lookahead is used within each block, the carries ripple between the blocks. This circuit is illustrated in Figure 5.17.

Instead of using a ripple-carry approach between blocks, a faster circuit can be designed in which a second-level carry-lookahead is performed to produce quickly the carry signals between blocks. The structure of this “hierarchical carry-lookahead adder” is shown in Figure 5.18. Each block in the top row includes an eight-bit carry-lookahead adder, based on generate signals, g_i , and propagate signals, p_i , for each stage in the block, as discussed before. However, instead of producing a carry-out signal from the most-significant bit of the block, each block produces generate and propagate signals for the entire block. Let G_j and P_j denote these signals for each block j . Now G_j and P_j can be used as inputs to a second-level carry-lookahead circuit, at the bottom of Figure 5.18, which evaluates all carries between blocks. We can derive the block generate and propagate signals for block 0 by examining the expression for c_8

$$c_8 = g_7 + p_7g_6 + p_7p_6g_5 + p_7p_6p_5g_4 + p_7p_6p_5p_4g_3 + p_7p_6p_5p_4p_3g_2 + p_7p_6p_5p_4p_3p_2g_1 + p_7p_6p_5p_4p_3p_2p_1g_0 + p_7p_6p_5p_4p_3p_2p_1p_0c_0$$

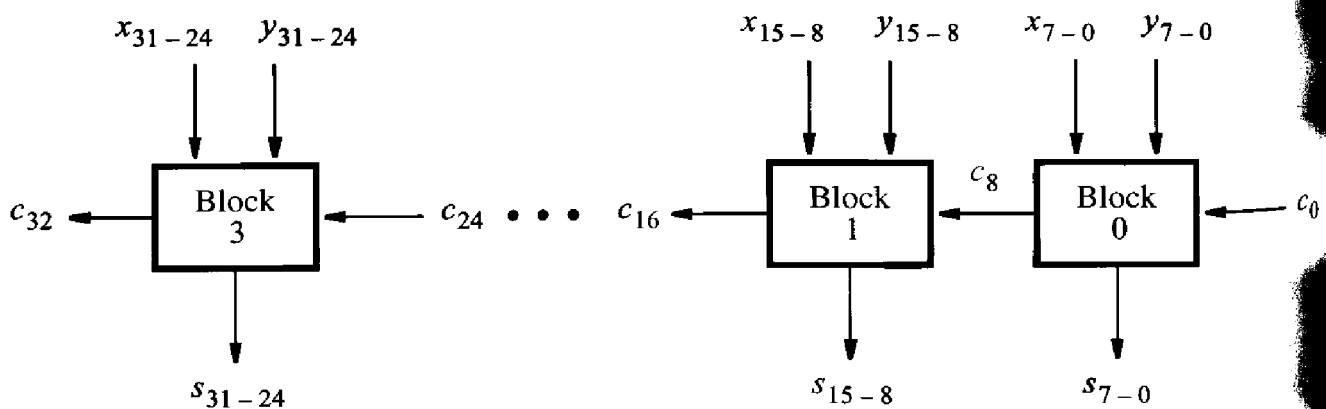


Figure 5.17 A hierarchical carry-lookahead adder with ripple-carry between blocks.

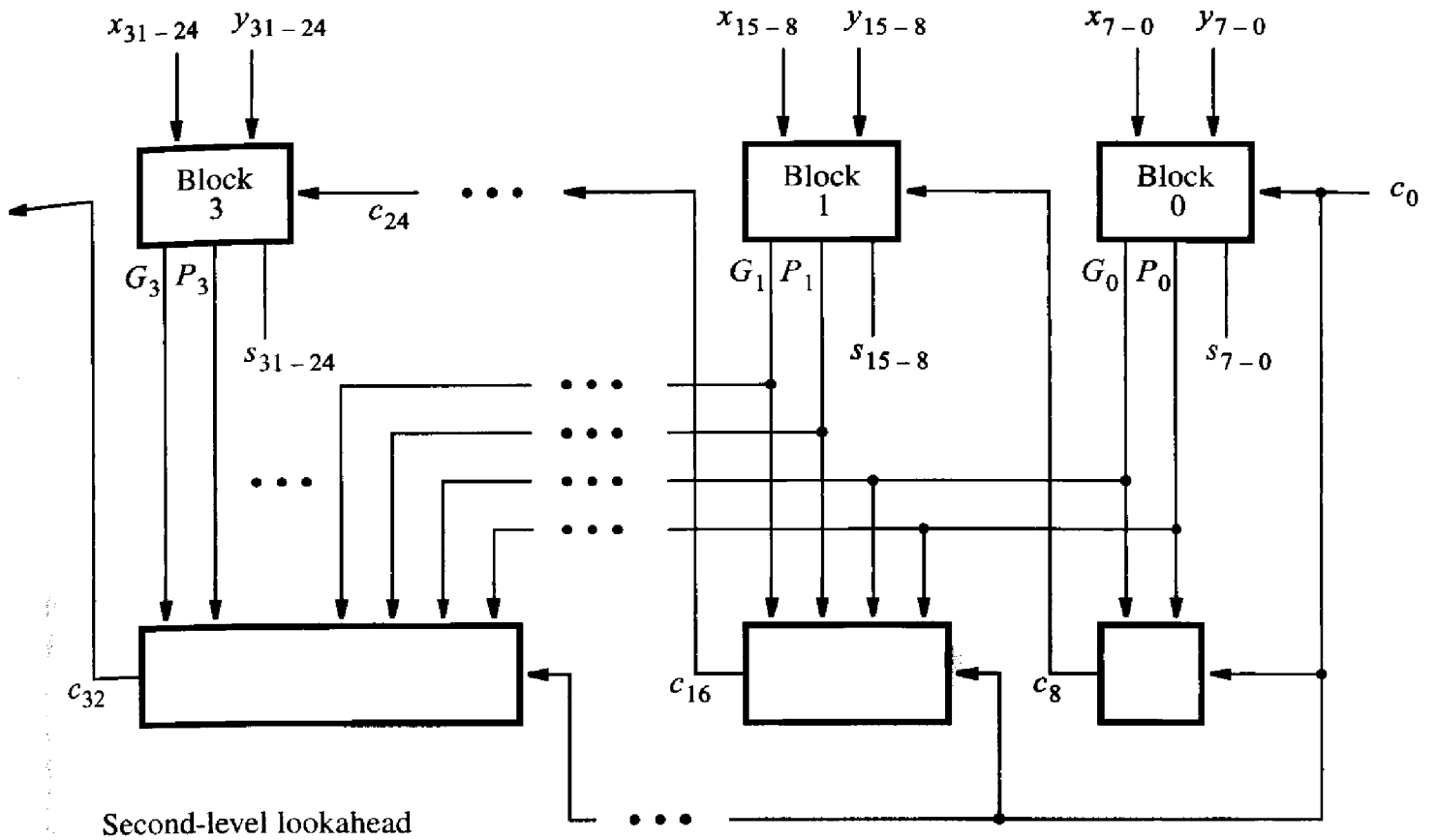


Figure 5.18 A hierarchical carry-lookahead adder.

The last term in this expression specifies that, if all eight propagate functions are 1, then the carry-in c_0 is propagated through the entire block. Hence

$$P_0 = p_7 p_6 p_5 p_4 p_3 p_2 p_1 p_0$$

The rest of the terms in the expression for c_8 represent all other cases when the block produces a carry-out. Thus

$$G_0 = g_7 + p_7 g_6 + p_7 p_6 g_5 + \cdots + p_7 p_6 p_5 p_4 p_3 p_2 p_1 g_0$$

The expression for c_8 in the hierarchical adder is given by

$$c_8 = G_0 + P_0 c_0$$

For block 1 the expressions for G_1 and P_1 have the same form as for G_0 and P_0 except that each subscript i is replaced by $i + 8$. The expressions for G_2 , P_2 , G_3 , and P_3 are derived in the same way. The expression for the carry-out of block 1, c_{16} , is

$$\begin{aligned} c_{16} &= G_1 + P_1 c_8 \\ &= G_1 + P_1 G_0 + P_1 P_0 c_0 \end{aligned}$$

Similarly, the expressions for c_{24} and c_{32} are

$$\begin{aligned} c_{24} &= G_2 + P_2 G_1 + P_2 P_1 G_0 + P_2 P_1 P_0 c_0 \\ c_{32} &= G_3 + P_3 G_2 + P_3 P_2 G_1 + P_3 P_2 P_1 G_0 + P_3 P_2 P_1 P_0 c_0 \end{aligned}$$

Using this scheme, it takes two more gate delays to produce the carry signals c_8 , c_{16} , and c_{24} than the time needed to generate the G_j and P_j functions. Therefore, since G_j and P_j require three gate delays, c_8 , c_{16} , and c_{24} are available after five gate delays. The time needed to add two 32-bit numbers involves these five gate delays plus two more to produce the internal carries in blocks 1, 2, and 3, plus one more gate delay (XOR) to generate each sum bit. This gives a total of eight gate delays.

In section 5.3.5 we determined that it takes $2n + 1$ gate delays to add two numbers using a ripple-carry adder. For 32-bit numbers this implies 65 gate delays. It is clear that the carry-lookahead adder offers a large performance improvement. The trade-off is much greater complexity of the required circuit.

Technology Considerations

The preceding delay analysis assumes that gates with any number of inputs can be used. We know from Chapters 3 and 4 that the technology used to implement the gates limits the fan-in to a rather small number of inputs. Therefore the reality of fan-in constraints must be taken into account. To illustrate this problem, consider the expressions for the first eight carries:

$$c_1 = g_0 + p_0c_0$$

$$c_2 = g_1 + p_1g_0 + p_1p_0c_0$$

$$\vdots$$

$$c_8 = g_7 + p_7g_6 + p_7p_6g_5 + p_7p_6p_5g_4 + p_7p_6p_5p_4g_3 + p_7p_6p_5p_4p_3g_2 \\ + p_7p_6p_5p_4p_3p_2g_1 + p_7p_6p_5p_4p_3p_2p_1g_0 + p_7p_6p_5p_4p_3p_2p_1p_0c_0$$

Suppose that the maximum fan-in of the gates is four inputs. Then it is impossible to implement all of these expressions with a two-level AND-OR circuit. The biggest problem is c_8 , where one of the AND gates requires nine inputs; moreover, the OR gate also requires nine inputs. To meet the fan-in constraint, we can rewrite the expression for c_8 as

$$c_8 = (g_7 + p_7g_6 + p_7p_6g_5 + p_7p_6p_5g_4) + [(p_7p_6p_5p_4)(g_3 + p_3g_2 + p_3p_2g_1 + p_3p_2p_1g_0)] \\ + (p_7p_6p_5p_4)(p_3p_2p_1p_0)c_0$$

To implement this expression we need 11 AND gates and three OR gates. The propagation delay in generating c_8 consists of one gate delay to develop all g_i and p_i , two gate delays to produce the sum-of-products terms in parentheses, one gate delay to form the product term in square brackets, and one delay for the final ORing of terms. Hence c_8 is valid after five gate delays, rather than the three gates delays that would be needed without the fan-in constraint.

Because fan-in limitations reduce the speed of the carry-lookahead adder, some devices that are characterized by low fan-in include dedicated circuitry for implementation of fast adders. Examples of such devices include FPGAs whose logic blocks are based on lookup tables.

Before we leave the topic of the carry-lookahead adder, we should consider an alternative implementation of the structure in Figure 5.16. The same functionality can be achieved by using the circuit in Figure 5.19. In this case stage 0 is implemented using the circuit of

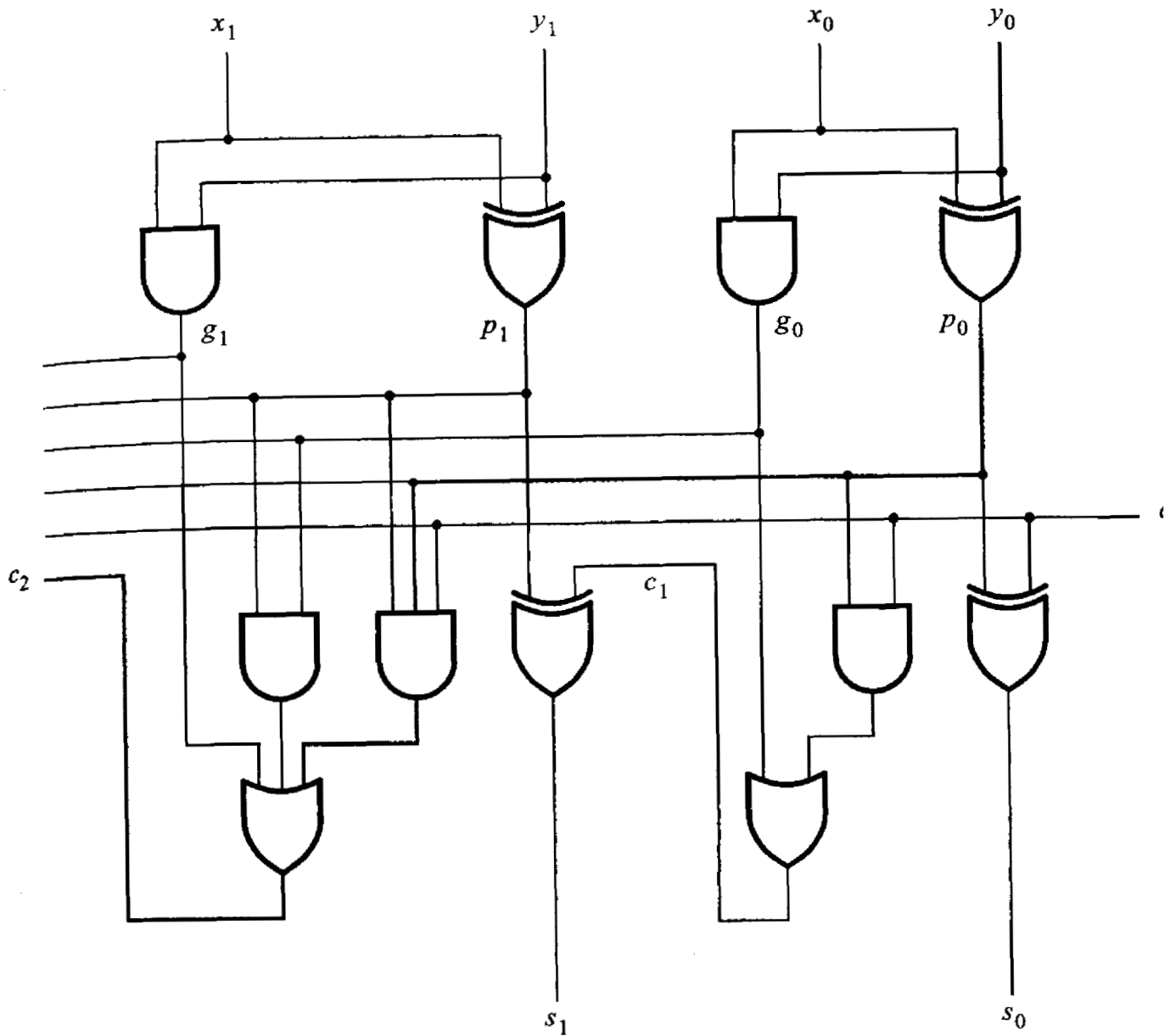


Figure 5.19 An alternative design for a carry-lookahead adder.

Figure 5.5 in which 2 two-input XOR gates are used to generate the sum bit, rather than having 1 three-input XOR gate. The output of the first XOR gate can also serve as the propagate signal p_0 . Thus the corresponding OR gate in Figure 5.16 is not needed. Stage 1 is constructed using the same approach.

The circuits in Figures 5.16 and 5.19 require the same number of gates. But is one of them better in some way? The answer must be sought by considering the specific aspects of the technology that is used to implement the circuits. If a CPLD or an FPGA is used, such as those in Figures 3.33 and 3.39, then it does not matter which circuit is chosen. A three-input XOR function can be realized by one macrocell in the CPLD, using the sum-of-products

expression

$$s_i = x_i \bar{y}_i \bar{c}_i + \bar{x}_i y_i \bar{c}_i + \bar{x}_i \bar{y}_i c_i + x_i y_i c_i$$

because the macrocell allows for implementation of four product terms.

In the FPGA any three-input function can be implemented in a single logic cell; hence it is easy to realize a three-input XOR. However, suppose that we want to build a carry-lookahead adder on a custom chip. If the XOR gate is constructed using the approach discussed in section 3.9.1, then a three-input XOR would actually be implemented using 2 two-input XOR gates, as we have done for the sum bits in Figure 5.19. Therefore, if the first XOR gate realizes the function $x_i \oplus y_i$, which is also the propagate function p_i , then it is obvious that the alternative in Figure 5.19 is more attractive. The important point of this discussion is that optimization of logic circuits may depend on the target technology. The CAD tools take this fact into account.

The carry-lookahead adder is a well-known concept. There exist standard chips that implement a portion of the carry-lookahead circuitry. They are called *carry-lookahead generators*. CAD tools often include predesigned subcircuits for adders, which designers can use to design larger units.

5.5 DESIGN OF ARITHMETIC CIRCUITS USING CAD TOOLS

In this section we show how the arithmetic circuits can be designed by using CAD tools. Two different design methods are discussed: using schematic capture and using VHDL code.

5.5.1 DESIGN OF ARITHMETIC CIRCUITS USING SCHEMATIC CAPTURE

An obvious way to design an arithmetic circuit via schematic capture is to draw a schematic that contains the necessary logic gates. For example, to create an n -bit adder, we could first draw a schematic that represents a full-adder. Then an n -bit ripple-carry adder could be created by drawing a higher-level schematic that connects together n instances of the full-adder. A hierarchical schematic created in this manner would look like the circuit shown in Figure 5.6. We could also use this methodology to create an adder/subtractor circuit, such as the circuit depicted in Figure 5.13.

The main problem with this approach is that it is cumbersome, especially when the number of bits is large. This problem is even more apparent if we consider creating a schematic for a carry-lookahead adder. As shown in section 5.4.1, the carry circuitry in each stage of the carry-lookahead adder becomes increasingly more complex. Hence it is necessary to draw a separate schematic for each stage of the adder. A better approach for creating arithmetic circuits via schematic capture is to use predefined subcircuits.

We mentioned in section 2.9.1 that schematic capture tools provide a library of graphical symbols that represent basic logic gates. These gates are used to create schematics of relatively simple circuits. In addition to basic gates, most schematic capture tools also

provide a library of commonly used circuits, such as adders. Each circuit is provided as a module that can be imported into a schematic and used as part of a larger circuit. In some CAD systems the modules are referred to as *macrofunctions*, or *megafunctions*.

There are two main types of macrofunctions: technology dependent and technology independent. A *technology-dependent macrofunction* is designed to suit a specific type of chip. For example, in section 5.4.1 we described an expression for a carry-lookahead adder that was designed to meet a fan-in constraint of four-input gates. A macrofunction that implements this expression would be *technology specific*. A *technology-independent macrofunction* can be implemented in any type of chip. A macrofunction for an adder that represents different circuits for different types of chips is a *technology-independent macrofunction*.

A good example of a library of macrofunctions is the *Library of Parameterized Modules (LPM)* that is included as part of the Quartus II CAD system. Each module in the library is technology independent. Also, each module is *parameterized*, which means that it can be used in a variety of ways. For example, the LPM library includes an n -bit adder module, named *lpm_add_sub*.

A schematic illustrating the *lpm_add_sub* module's capability is given in Figure 5.20. The module has several associated parameters, which are configured by using the CAD tools. The two most important parameters for the purposes of our discussion are named LPM_WIDTH and LPM_REPRESENTATION. The LPM_WIDTH parameter specifies the number of bits, n , in the adder. The LPM_REPRESENTATION parameter specifies whether signed or unsigned integers are used. This affects only the part of the module that determines when arithmetic overflow occurs. For the schematic shown, LPM_WIDTH = 16, and signed numbers are used. The module can perform addition or subtraction, determined by

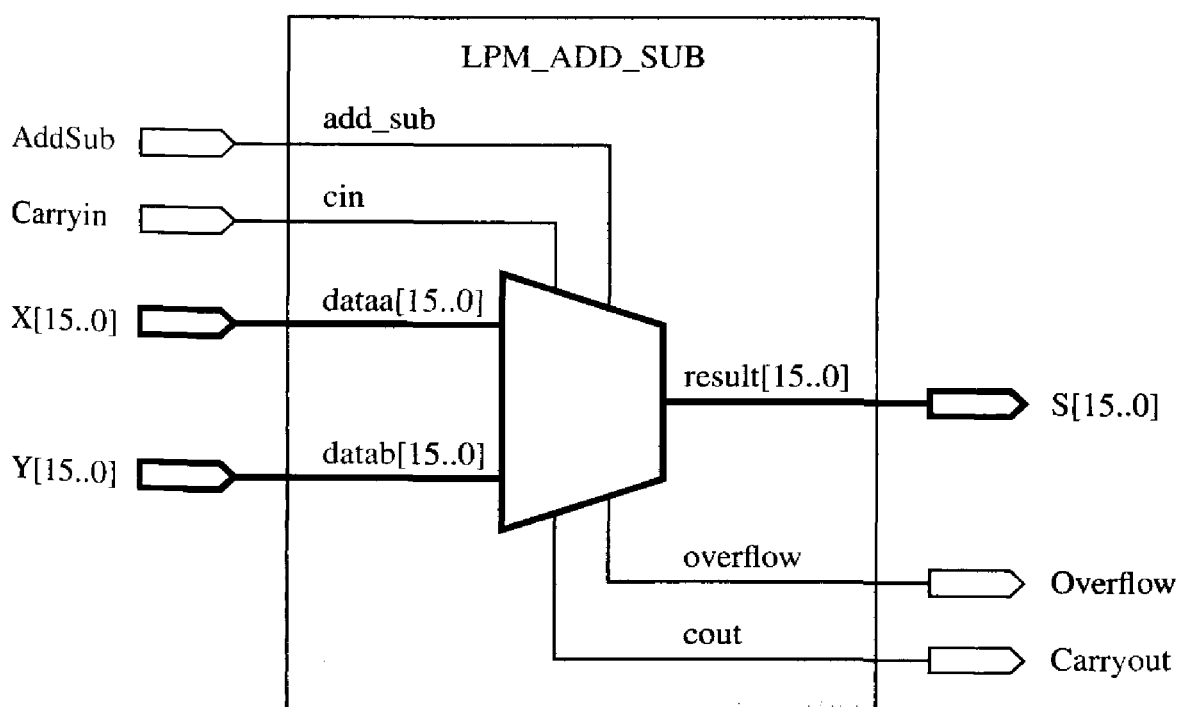


Figure 5.20 Schematic using an LPM adder/subtractor module.

the input *add_sub*. Thus the module represents an adder/subtractor circuit, such as the one shown in Figure 5.13.

The numbers to be added by the *lpm_add_sub* module are connected to the terminals called *dataa* [15..0] and *datab* [15..0]. The square brackets in these names mean that they represent multibit numbers. In the schematic, we connected *dataa* and *datab* to the 16-bit input signals *X*[15..0] and *Y*[15..0]. The meaning of the syntax *X*[15..0] is that the signal *X* represents 16 bits, named *X*[15], *X*[14], . . . , *X*[0]. The *lpm_add_sub* module produces the sum on the terminal called *result* [15..0], which we connected to the output *S*[15..0]. Figure 5.20 also shows that the LPM supports a carry-in input, as well as the carry-out and overflow outputs.

To assess the effectiveness of the LPM, we configured the *lpm_add_sub* module to realize just a 16-bit adder that computes the sum, carry-out, and overflow outputs; this means that the *add_sub* and *cin* signals are not needed. We used CAD tools to implement this circuit in an FPGA chip, and simulated its performance. The resulting timing diagram is shown in Figure 5.21, which is a screen capture of the timing simulator. The values of the 16-bit signals *X*, *Y*, and *S* are shown in the simulation output as hexadecimal numbers. At the beginning of the simulation, both *X* and *Y* are set to 0000. After 50 ns, *Y* is changed to 0001 which causes *S* to change to 0001. The next change in the inputs occurs at 150 ns, when *X* changes to 3FFF. To produce the new sum, which is 4000, the adder must wait for its carry signals to ripple from the first stage to the last stage. This is seen in the simulation output as a sequence of rapid changes in the value of *S*, eventually settling at the correct sum. Observe that the simulator's reference line, the heavy vertical line in the figure, shows that the correct sum is produced 160.93 ns from the start of the simulation. Because the change in inputs happened at 150 ns, the adder takes $160.93 - 150 = 10.93$ ns to compute the sum. At 250 ns, *X* changes to 7FFF, which causes the sum to be 8000. This sum is too large for a positive 16-bit signed number; hence *Overflow* is set to 1 to indicate the arithmetic overflow.

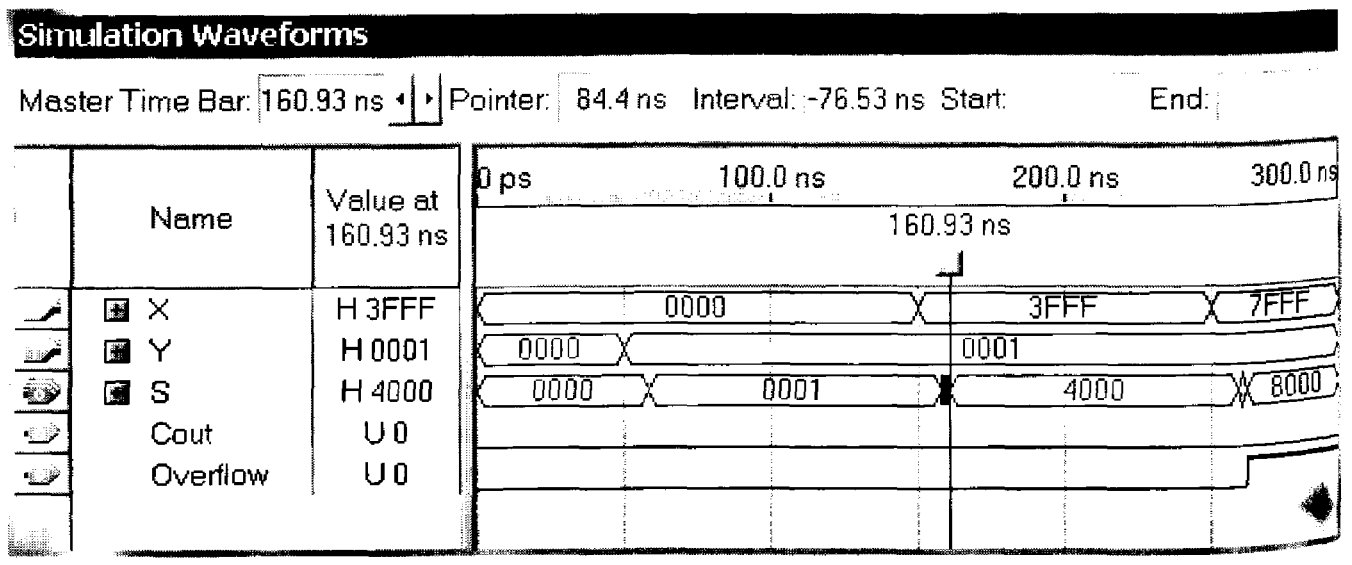


Figure 5.21 Simulation results for the LPM adder.

5.5.2 DESIGN OF ARITHMETIC CIRCUITS USING VHDL

We said in section 5.5.1 that an obvious way to create an n -bit adder is to draw a hierarchical schematic that contains n full-adders. This approach can also be followed by using VHDL, by first creating a VHDL entity for a full-adder and then creating a higher-level entity that uses four *instances* of the full-adder. As a first attempt at designing arithmetic circuits by using VHDL, we will show how to write the hierarchical code for a ripple-carry adder.

The complete code for a full-adder entity is given in Figure 5.22. It has the inputs Cin , x , and y and produces the outputs s and $Cout$. The sum, s , and carry-out, $Cout$, are described by logic equations.

We now need to create a separate VHDL entity for the ripple-carry adder, which uses the *fulladd* entity as a subcircuit. One method of doing so is shown in Figure 5.23. It gives the code for a four-bit ripple-carry adder entity, named *adder4*. One of the four-bit numbers to be added is represented by the four signals x_3, x_2, x_1, x_0 , and the other number is represented by y_3, y_2, y_1, y_0 . The sum is represented by s_3, s_2, s_1, s_0 .

Observe that the architecture body has the name *Structure*. We chose this name because the style of code in which a circuit is described in a hierarchical fashion, by connecting together subcircuits, is usually called the *structural* style. In previous examples of VHDL code, all signals that were used were declared as ports in the entity declaration. As shown in Figure 5.23, signals can also be declared preceding the BEGIN keyword in the architecture body. The three signals declared, called c_1, c_2 , and c_3 , are used as carry-out signals from the first three stages of the adder. The next statement is called a *component declaration* statement. It uses syntax similar to that in an entity declaration. This statement allows the *fulladd* entity to be used as a component (subcircuit) in the architecture body.

The four-bit adder in Figure 5.23 is described using four *instantiation* statements. Each statement begins with an *instance name*, which can be any legal VHDL name, followed by the colon character. The names must be unique. The least-significant stage in the adder is named *stage0*, and the most-significant stage is *stage3*. The colon is followed by the name of

```

LIBRARY ieee ;
USE ieee.std_logic_1164.all ;

ENTITY fulladd IS
    PORT ( Cin, x, y : IN    STD_LOGIC ;
          s, Cout   : OUT  STD_LOGIC ) ;
END fulladd ;

ARCHITECTURE LogicFunc OF fulladd IS
BEGIN
    s <= x XOR y XOR Cin ;
    Cout <= (x AND y) OR (Cin AND x) OR (Cin AND y) ;
END LogicFunc ;

```

Figure 5.22 VHDL code for the full-adder.

```

LIBRARY ieee ;
USE ieee.std_logic_1164.all ;

ENTITY adder4 IS
    PORT ( Cin          : IN   STD_LOGIC ;
          x3, x2, x1, x0 : IN   STD_LOGIC ;
          y3, y2, y1, y0 : IN   STD_LOGIC ;
          s3, s2, s1, s0 : OUT  STD_LOGIC ;
          Cout          : OUT  STD_LOGIC ) ;
END adder4 ;

ARCHITECTURE Structure OF adder4 IS
    SIGNAL c1, c2, c3 : STD_LOGIC ;
    COMPONENT fulladd
        PORT ( Cin, x, y : IN   STD_LOGIC ;
              s, Cout  : OUT  STD_LOGIC ) ;
    END COMPONENT ;
BEGIN
    stage0: fulladd PORT MAP ( Cin, x0, y0, s0, c1 ) ;
    stage1: fulladd PORT MAP ( c1, x1, y1, s1, c2 ) ;
    stage2: fulladd PORT MAP ( c2, x2, y2, s2, c3 ) ;
    stage3: fulladd PORT MAP (
        Cin => c3, Cout => Cout, x => x3, y => y3, s => s3 ) ;
END Structure ;

```

Figure 5.23 VHDL code for a four-bit adder.

the component, *fulladd*, and then the keyword PORT MAP. The signal names in the *adder4* entity that are to be connected to each input and output port on the *fulladd* component are then listed. Observe that in the first three instantiation statements, the signals are listed in the same order as in the *fulladd* COMPONENT declaration statement, namely, the order *Cin*, *x*, *y*, *s*, *Cout*. It is also possible to list the signal names in other orders by specifying explicitly which signal is to be connected to which port on the component. An example of this style is shown for the *stage3* instance. This style of component instantiation is known as *named association* in the VHDL jargon, whereas the style used for the other three instances is called *positional association*. Note that for the *stage3* instance, the signal name *Cout* is used as both the name of the component port and the name of the signal in the *adder4* entity. This does not cause a problem for the VHDL compiler, because the component port name is always the one on the left side of the => characters.

The signal names associated with each instance of the *fulladd* component implicitly specify how the full-adders are connected together. For example, the carry-out of the *stage0* instance is connected to the carry-in of the *stage1* instance. When the code in Figure 5.23 is analyzed by the VHDL compiler, it automatically searches for the code to use for the

fulladd component, given in Figure 5.22. The synthesized circuit has the same structure as the one shown in Figure 5.6.

Alternative Style of Code

In Figure 5.23 a component declaration statement for the *fulladd* entity is included in the *adder4* architecture. An alternative approach is to place the component declaration statement in a VHDL *package*. In general, a package allows VHDL constructs to be defined in one source code file and then used in other source code files. Two examples of constructs that are often placed in a package are data type declarations and component declarations.

We have already seen an example of using a package for a data type. In Chapter 4 we introduced the package named *std_logic_1164*, which defines the STD_LOGIC signal type. Recall that to access this package, VHDL code must include the statements

```
LIBRARY ieee ;
USE ieee.std_logic_1164.all ;
```

These statements appear in Figures 5.22 and 5.23 because the STD_LOGIC type is used in the code. The first statement provides access to the library named *ieee*. As we discussed in section 4.12, the library represents the location, or *directory*, in the computer file system where the *std_logic_1164* package is stored.

The code in Figure 5.24 defines the package named *fulladd_package*. This code can be stored in a separate VHDL source code file, or it can be included in the same source code file used to store the code for the *fulladd* entity, shown in Figure 5.22. The VHDL syntax requires that the package declaration have its own LIBRARY and USE clauses; hence they are included in the code. Inside the package the *fulladd* entity is declared as a COMPONENT. When this code is compiled, the *fulladd_package* package is created and stored in the working directory where the code is stored.

Any VHDL entity can then use the *fulladd* component as a subcircuit by making use of the *fulladd_package* package. The package is accessed using the two statements

```
LIBRARY work;
USE work.fulladd_package.all ;
```

```
LIBRARY ieee ;
USE ieee.std_logic_1164.all ;

PACKAGE fulladd_package IS
  COMPONENT fulladd
    PORT ( Cin, x, y : IN  STD_LOGIC ;
          s, Cout   : OUT STD_LOGIC ) ;
  END COMPONENT ;
END fulladd_package ;
```

Figure 5.24 Declaration of a package.


```

LIBRARY ieee ;
USE ieee.std_logic_1164.all ;
USE work.fulladd_package.all ;

ENTITY adder4 IS
    PORT ( Cin          : IN   STD_LOGIC ;
          x3, x2, x1, x0 : IN   STD_LOGIC ;
          y3, y2, y1, y0 : IN   STD_LOGIC ;
          s3, s2, s1, s0 : OUT  STD_LOGIC ;
          Cout          : OUT  STD_LOGIC ) ;
END adder4 ;

ARCHITECTURE Structure OF adder4 IS
    SIGNAL c1, c2, c3 : STD_LOGIC ;
BEGIN
    stage0: fulladd PORT MAP ( Cin, x0, y0, s0, c1 ) ;
    stage1: fulladd PORT MAP ( c1, x1, y1, s1, c2 ) ;
    stage2: fulladd PORT MAP ( c2, x2, y2, s2, c3 ) ;
    stage3: fulladd PORT MAP (
        Cin => c3, Cout => Cout, x => x3, y => y3, s => s3 ) ;
END Structure ;

```

Figure 5.25 A different way of specifying a four-bit adder.

The library named *work* represents the working directory where the VHDL code that defines the package is stored. This statement is actually not necessary, because the VHDL compiler always has access to the working directory.

Figure 5.25 shows how the code in Figure 5.23 can be rewritten to make use of the *fulladd_package*. The code is the same as that in Figure 5.23 with two exceptions: the extra USE clause is added, and the component declaration statement is deleted in the architecture. The circuits synthesized from the two versions of the code are identical.

In Figures 5.23 and 5.25, each of the four-bit inputs and the four-bit output of the adder is represented using single-bit signals. A more convenient style of code is to use multibit signals to represent the numbers.

5.5.3 REPRESENTATION OF NUMBERS IN VHDL CODE

Just as a number is represented in a logic circuit as signals on multiple wires, a number is represented in VHDL code as a multibit SIGNAL data object. An example of a multibit signal is

```
SIGNAL C : STD_LOGIC_VECTOR (1 TO 3) ;
```

The STD_LOGIC_VECTOR data type represents a linear array of STD_LOGIC data objects. In VHDL jargon the STD_LOGIC_VECTOR is said to be a subtype of STD_LOGIC. There exists a similar subtype, called BIT_VECTOR, corresponding to the BIT type that

was used in section 2.10.2. The preceding SIGNAL declaration defines C as a three-bit STD_LOGIC signal. It can be used in VHDL code as a three-bit quantity simply by using the name C , or else each individual bit can be referred to separately using the names $C(1)$, $C(2)$, and $C(3)$. The syntax 1 TO 3 in the declaration statement specifies that the most-significant bit in C is called $C(1)$ and the least-significant bit is called $C(3)$. A three-bit signal value can be assigned to C as follows:

$$C \leq "100";$$

The three-bit value is denoted using double quotes, instead of the single quotes used for one-bit values, as in '1' or '0'. The assignment statement results in $C(1) = 1$, $C(2) = 0$, and $C(3) = 0$. The numbering of the bits in the signal C , with the highest index used for the least-significant bit, is a natural way of representing signals that are simply grouped together for convenience but do not represent a number. For example, this numbering scheme would be an appropriate way of declaring the three carry signals named c_1 , c_2 , and c_3 in Figure 5.25. However, when a multibit signal is used to represent a binary number, it makes more sense to number the bits in the opposite way, with the highest index used for the most-significant bit. For this purpose VHDL provides a second way to declare a multibit signal

$$\text{SIGNAL } X : \text{STD_LOGIC_VECTOR (3 DOWNT0 0)};$$

This statement defines X as a four-bit STD_LOGIC_VECTOR signal. The syntax 3 DOWNT0 0 specifies that the most-significant bit in X is called $X(3)$ and the least-significant bit is $X(0)$. This scheme is a more natural way of numbering the bits if X is to be used in VHDL code to represent a binary number because the index of each bit corresponds to its position in the number. The assignment statement

$$X \leq "1100";$$

results in $X(3) = 1$, $X(2) = 1$, $X(1) = 0$, and $X(0) = 0$.

Figure 5.26 illustrates how the code in Figure 5.25 can be written to use multibit signals. The data inputs are the four-bit signals X and Y , and the sum output is the four-bit signal S . The intermediate carry signals are declared in the architecture as the three-bit signal C .

Using hierarchical VHDL code to define large arithmetic circuits can be cumbersome. For this reason, arithmetic circuits are usually implemented in VHDL in a different way, using arithmetic assignment statements and multibit signals.

5.5.4 ARITHMETIC ASSIGNMENT STATEMENTS

If the following signals are defined

$$\text{SIGNAL } X, Y, S : \text{STD_LOGIC_VECTOR (15 DOWNT0 0)};$$

then the arithmetic assignment statement

$$S \leq X + Y;$$

represents a 16-bit adder.

In addition to the $+$ operator, which is used for addition, VHDL provides other arithmetic operators. They are listed in Table A.1, in Appendix A. The complete VHDL code that

```

LIBRARY ieee ;
USE ieee.std_logic_1164.all ;
USE work.fulladd_package.all ;

ENTITY adder4 IS
    PORT ( Cin   : IN   STD_LOGIC ;
          X, Y   : IN   STD_LOGIC_VECTOR(3 DOWNT0 0) ;
          S     : OUT  STD_LOGIC_VECTOR(3 DOWNT0 0) ;
          Cout  : OUT  STD_LOGIC ) ;
END adder4 ;

ARCHITECTURE Structure OF adder4 IS
    SIGNAL C : STD_LOGIC_VECTOR(1 TO 3) ;
BEGIN
    stage0: fulladd PORT MAP ( Cin, X(0), Y(0), S(0), C(1) ) ;
    stage1: fulladd PORT MAP ( C(1), X(1), Y(1), S(1), C(2) ) ;
    stage2: fulladd PORT MAP ( C(2), X(2), Y(2), S(2), C(3) ) ;
    stage3: fulladd PORT MAP ( C(3), X(3), Y(3), S(3), Cout ) ;
END Structure ;

```

Figure 5.26 A four-bit adder defined using multibit signals.

includes the preceding statement is given in Figure 5.27. The *std_logic_1164* package does not specify that `STD_LOGIC` signals can be used with arithmetic operators. The second package included in the code, named *std_logic_signed*, allows the signals to be used in this way. When the code in the figure is translated by the VHDL compiler, it generates an adder circuit to implement the $+$ operator. When using the Quartus II CAD system, the adder used by the compiler is actually the *lpm_add_sub* module shown in Figure 5.20. The compiler automatically sets the parameters for the module so that it represents a 16-bit adder.

```

LIBRARY ieee ;
USE ieee.std_logic_1164.all ;
USE ieee.std_logic_signed.all ;

ENTITY adder16 IS
    PORT ( X, Y : IN   STD_LOGIC_VECTOR(15 DOWNT0 0) ;
          S   : OUT  STD_LOGIC_VECTOR(15 DOWNT0 0) ) ;
END adder16 ;

ARCHITECTURE Behavior OF adder16 IS
BEGIN
    S <= X + Y ;
END Behavior ;

```

Figure 5.27 VHDL code for a 16-bit adder.

```

LIBRARY ieee ;
USE ieee.std_logic_1164.all ;
USE ieee.std_logic_signed.all ;

ENTITY adder16 IS
    PORT ( Cin           : IN   STD_LOGIC ;
          X, Y           : IN   STD_LOGIC_VECTOR(15 DOWNTO 0) ;
          S              : OUT  STD_LOGIC_VECTOR(15 DOWNTO 0) ;
          Cout, Overflow : OUT  STD_LOGIC ) ;
END adder16 ;

ARCHITECTURE Behavior OF adder16 IS
    SIGNAL Sum : STD_LOGIC_VECTOR(16 DOWNTO 0) ;
BEGIN
    Sum <= ('0' & X) + Y + Cin ;
    S <= Sum(15 DOWNTO 0) ;
    Cout <= Sum(16) ;
    Overflow <= Sum(16) XOR X(15) XOR Y(15) XOR Sum(15) ;
END Behavior ;

```

Figure 5.28 The 16-bit adder from Figure 5.27 with carry and overflow signals.

The code in Figure 5.27 does not include carry-in or carry-out signals. Also, it does not provide the arithmetic overflow signal. One way in which these signals can be added is given in Figure 5.28. The 17-bit signal named *Sum* is defined in the architecture. The extra bit, *Sum*(16), is used for the carry-out from bit-position 15 in the adder. The statement used to assign the sum of *X*, *Y*, and the carry-in, *Cin*, to the *Sum* signal uses an unusual syntax. The meaning of the term in parentheses, namely ('0' & *X*), is that a 0 is concatenated to the 16-bit signal *X* to create a 17-bit signal. In VHDL the & operator is called the *concatenate* operator. The reader should not confuse this meaning with the more traditional meaning of & in other hardware description languages in which it is the logical AND operator. The reason that the concatenate operator is needed in Figure 5.28 is that VHDL requires at least one of the operands of an arithmetic expression to have the same number of bits as the result. Because *Sum* is a 17-bit operand, then at least one of *X* or *Y* must be modified to become a 17-bit number.

Another detail to observe from the figure is the statement

$$S \leq \text{Sum}(15 \text{ DOWNTO } 0) ;$$

This statement assigns the lower 16 bits of *Sum* to the output sum *S*. The next statement assigns the carry-out from the addition, *Sum*(16), to the carry-out signal, *Cout*. The expression for arithmetic overflow was defined in section 5.3.5 as $c_{n-1} \oplus c_n$. In our case, c_n corresponds to *Sum*(16), but there is no direct way of accessing c_{n-1} , which is the carry-out from bit-position 14. The reader should verify that the expression $X(15) \oplus Y(15) \oplus \text{Sum}(15)$ corresponds to c_{n-1} .

We said that the VHDL compiler can generate an adder circuit to implement the + operator, and that the Quartus II system actually uses the *lpm_add_sub* module for this.

For completeness, we should also mention that the *lpm_add_sub* module can be directly instantiated in VHDL code, in a similar way that the *fulladd* component was instantiated in Figure 5.23. An example is given in section A.6, in Appendix A.

The code in Figure 5.28 uses the package *std_logic_signed* to allow the STD_LOGIC signals to be used with arithmetic operators. The *std_logic_signed* package actually uses another package, which is named *std_logic_arith*. This package defines two data types, called SIGNED and UNSIGNED, for use in arithmetic circuits that deal with signed or unsigned numbers. These data types are the same as the STD_LOGIC_VECTOR type; each one is an array of STD_LOGIC signals. The code in Figure 5.28 can be written to directly use the *std_logic_arith* package as shown in Figure 5.29. The multibit signals *X*, *Y*, *S*, and *Sum* have the type SIGNED. The code is otherwise identical to that in Figure 5.28 and results in the same circuit.

It is an arbitrary choice whether to use the *std_logic_signed* package and STD_LOGIC_VECTOR signals, as in Figure 5.28, or the *std_logic_arith* package and SIGNED signals, as in Figure 5.29. For use with unsigned numbers, there are also two options. We can use the *std_logic_unsigned* package with STD_LOGIC_VECTOR signals or the *std_logic_arith* package with UNSIGNED signals. For our example code in Figures 5.28 and 5.29, the same circuit would be generated whether we assume signed or unsigned numbers. But for unsigned numbers we should not produce a separate *Overflow* output, because the carry-out represents the arithmetic overflow for unsigned numbers.

Before leaving our discussion of arithmetic statements in VHDL, we should mention another signal data type that can be used for arithmetic. The following statement defines

```

LIBRARY ieee ;
USE ieee.std_logic_1164.all ;
USE ieee.std_logic_arith.all ;

ENTITY adder16 IS
    PORT ( Cin           : IN   STD_LOGIC ;
          X, Y           : IN   SIGNED(15 DOWNT0 0) ;
          S              : OUT  SIGNED(15 DOWNT0 0) ;
          Cout, Overflow : OUT  STD_LOGIC ) ;
END adder16 ;

ARCHITECTURE Behavior OF adder16 IS
    SIGNAL Sum : SIGNED(16 DOWNT0 0) ;
BEGIN
    Sum <= ('0' & X) + Y + Cin ;
    S <= Sum(15 DOWNT0 0) ;
    Cout <= Sum(16);
    Overflow <= Sum(16) XOR X(15) XOR Y(15) XOR Sum(15) ;
END Behavior ;

```

Figure 5.29 Use of the arithmetic package.

```

ENTITY adder16 IS
    PORT ( X, Y : IN  INTEGER RANGE -32768 TO 32767 ;
          S      : OUT INTEGER RANGE -32768 TO 32767 ) ;
END adder16 ;

ARCHITECTURE Behavior OF adder16 IS
BEGIN
    S <= X + Y ;
END Behavior ;

```

Figure 5.30 The 16-bit adder from Figure 5.27 using INTEGER signals.

the signal X as an INTEGER

```
SIGNAL X : INTEGER RANGE -32768 TO 32767 ;
```

For an INTEGER data object, the number of bits is not specified explicitly. Instead, the *range* of numbers to be represented is specified. For a 16-bit signed integer, the range of representable numbers is -32768 to 32767 . An example of using the INTEGER data type in code corresponding to Figure 5.27 is shown in Figure 5.30. No LIBRARY or USE clause appears in the code, because the INTEGER type is predefined in standard VHDL. Although the code in the figure is straightforward, it is more difficult to modify this code to include carry signals and the overflow output shown in Figures 5.28 and 5.29. The method that we used, in which the bits from the signal *Sum* are used to define the carry-out and arithmetic overflow signals, cannot be used for INTEGER objects.

5.6 MULTIPLICATION

Before we discuss the general issue of multiplication, we should note that a binary number, B , can be multiplied by 2 simply by adding a zero to the right of its least-significant bit. This effectively moves all bits of B to the left, and we say that B is *shifted* left by one bit position. Thus if $B = b_{n-1}b_{n-2} \cdots b_1b_0$, then $2 \times B = b_{n-1}b_{n-2} \cdots b_1b_00$. (We have already used this fact in section 5.2.3.) Similarly, a number is multiplied by 2^k by shifting it left by k bit positions. This is true for both unsigned and signed numbers.

We should also consider what happens if a binary number is shifted right by k bit positions. According to the positional number representation, this action divides the number by 2^k . For unsigned numbers the shifting amounts to adding k zeros to the left of the most-significant bit. For example, if B is an unsigned number, then $B \div 2 = 0b_{n-1}b_{n-2} \cdots b_2b_1$. Note that bit b_0 is lost when shifting to the right. For signed numbers it is necessary to preserve the sign. This is done by shifting the bits to the right and filling from the left with the value of the sign bit. Hence if B is a signed number, then $B \div 2 = b_{n-1}b_{n-1}b_{n-2} \cdots b_2b_1$. For instance, if $B = 011000 = (24)_{10}$, then $B \div 2 = 001100 = (12)_{10}$ and $B \div 4 = 000110 = (6)_{10}$. Similarly, if $B = 101000 = -(24)_{10}$, then $B \div 2 = 110100 = -(12)_{10}$

and $B \div 4 = 111010 = -(6)_{10}$. The reader should also observe that the smaller the positive number, the more 0s there are to the left of the first 1, while for a negative number there are more 1s to the left of the first 0.

Now we can turn our attention to the general task of multiplication. Two binary numbers can be multiplied using the same method as we use for decimal numbers. We will focus our discussion on multiplication of unsigned numbers. Figure 5.31a shows how multiplication is performed manually, using four-bit numbers. Each multiplier bit is examined from right to left. If a bit is equal to 1, an appropriately shifted version of the multiplicand is added to form a *partial product*. If the multiplier bit is equal to 0, then nothing is added. The sum of all shifted versions of the multiplicand is the desired product. Note that the product occupies eight bits.

The same scheme can be used to design a multiplier circuit. We will stay with four-bit numbers to keep the discussion simple. Let the multiplicand, multiplier, and product be denoted as $M = m_3m_2m_1m_0$, $Q = q_3q_2q_1q_0$, and $P = p_7p_6p_5p_4p_3p_2p_1p_0$, respectively. One simple way of implementing the multiplication scheme is to use a sequential approach, where an eight-bit adder is used to compute partial products. As a first step, the bit q_0 is

Multiplicand M	(14)	1 1 1 0
Multiplier Q	(11)	× 1 0 1 1
		<hr style="width: 100%;"/>
		1 1 1 0
		1 1 1 0
		0 0 0 0
		1 1 1 0
		<hr style="width: 100%;"/>
Product P	(154)	1 0 0 1 1 0 1 0

(a) Multiplication by hand

Multiplicand M	(11)	1 1 1 0
Multiplier Q	(14)	× 1 0 1 1
		<hr style="width: 100%;"/>
Partial product 0		1 1 1 0
		+ 1 1 1 0
		<hr style="width: 100%;"/>
Partial product 1		1 0 1 0 1
		+ 0 0 0 0
		<hr style="width: 100%;"/>
Partial product 2		0 1 0 1 0
		+ 1 1 1 0
		<hr style="width: 100%;"/>
Product P	(154)	1 0 0 1 1 0 1 0

(b) Multiplication for implementation in hardware

Figure 5.31 Multiplication of unsigned numbers.

examined. If $q_0 = 1$, then M is added to the initial partial product, which is initialized to 0. If $q_0 = 0$, then 0 is added to the partial product. Next q_1 is examined. If $q_1 = 1$, then the value $2 \times M$ is added to the partial product. The value $2 \times M$ is created simply by shifting M one bit position to the left. Similarly, $4 \times M$ is added to the partial product if $q_2 = 1$, and $8 \times M$ is added if $q_3 = 1$. We will show in Chapter 10 how such a circuit may be implemented.

This sequential approach leads to a relatively slow circuit, primarily because a single eight-bit adder is used to perform all additions needed to generate the partial products and the final product. A much faster circuit can be obtained if multiple adders are used to compute the partial products.

5.6.1 ARRAY MULTIPLIER FOR UNSIGNED NUMBERS

Figure 5.31*b* indicates how multiplication may be performed by using multiple adders. In each step a four-bit adder is used to compute the new partial product. Note that as the computation progresses, the least-significant bits are not affected by subsequent additions; hence they can be passed directly to the final product, as indicated by blue arrows. Of course, these bits are a part of the partial products as well.

A fast multiplier circuit can be designed using an array structure that is similar to the organization in Figure 5.31*b*. Consider a 4×4 example, where the multiplicand and multiplier are $M = m_3m_2m_1m_0$ and $Q = q_3q_2q_1q_0$, respectively. The partial product 0, $PP0 = pp0_3 pp0_2 pp0_1 pp0_0$, can be generated using the AND of q_0 with each bit of M . Thus

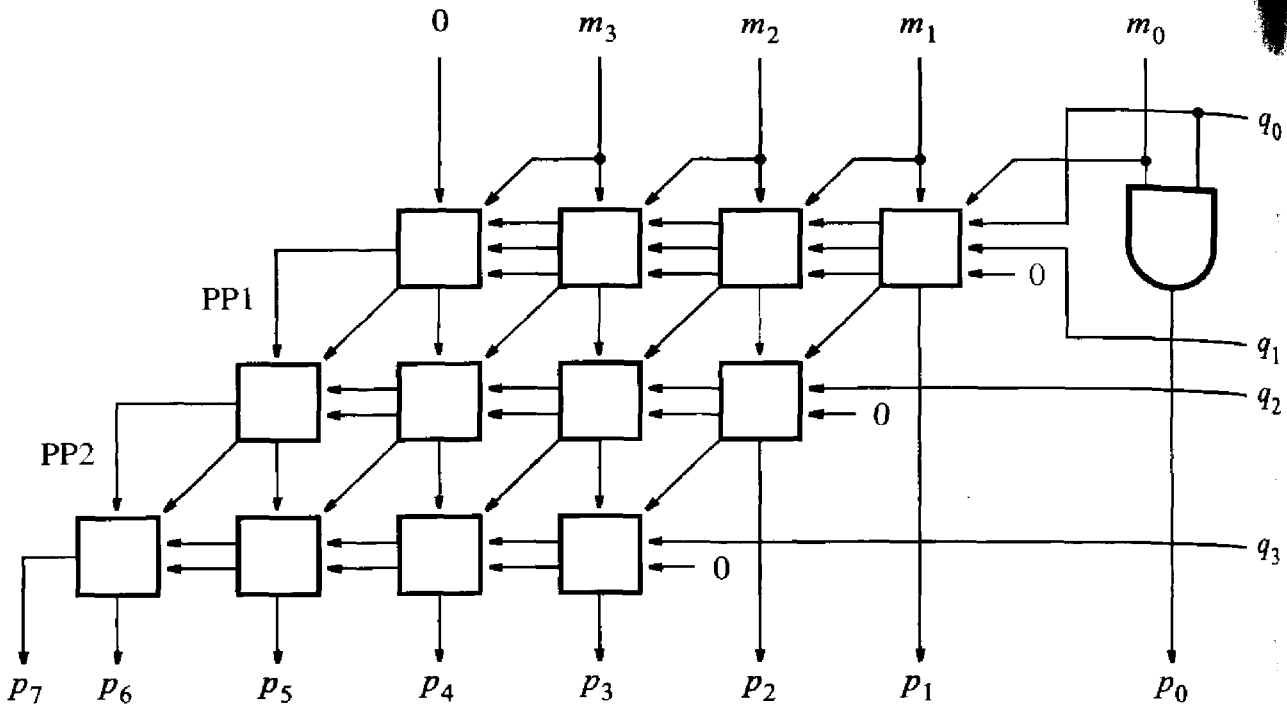
$$PP0 = m_3q_0 \ m_2q_0 \ m_1q_0 \ m_0q_0$$

Partial product 1, $PP1$, is generated using the AND of q_1 with M and adding it to $PP0$ as follows

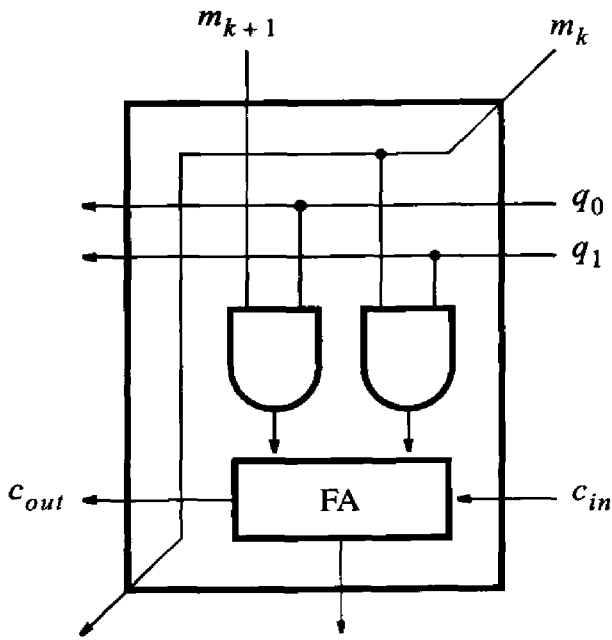
$$\begin{array}{rcccccc}
 PP0: & & 0 & pp0_3 & pp0_2 & pp0_1 & pp0_0 \\
 & + & m_3q_1 & m_2q_1 & m_1q_1 & m_0q_1 & 0 \\
 \hline
 PP1: & & pp1_4 & pp1_3 & pp1_2 & pp1_1 & pp1_0
 \end{array}$$

Similarly, partial product 2, $PP2$, is generated using the AND of q_2 with M and adding to $PP1$, and so on.

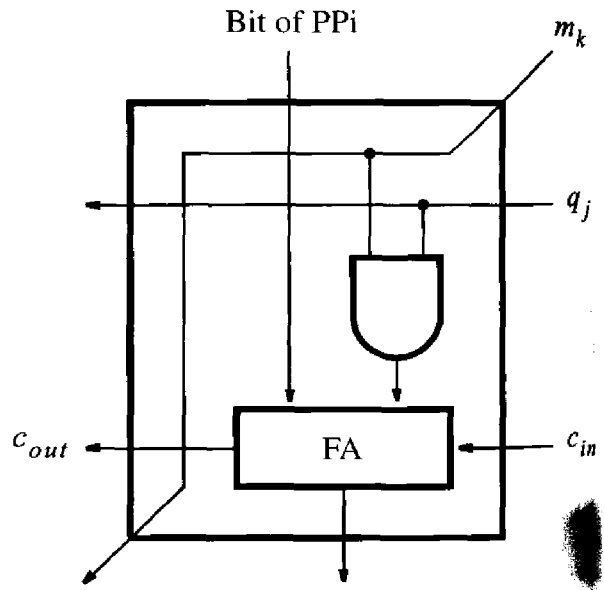
A circuit that implements the preceding operations is arranged in an array, as shown in Figure 5.32*a*. There are two types of blocks in the array. Part (b) of the figure shows the details of the blocks in the top row, and part (c) shows the block used in the second and third rows. Observe that the shifted versions of the multiplicand are provided by routing the m_k signals diagonally from one block to another. The full-adder included in each block implements a ripple-carry adder to generate each partial product. It is possible to design even faster multipliers by using other types of adders [1].



(a) Structure of the circuit



(b) A block in the top row



(c) A block in the bottom two rows

Figure 5.32 A 4 × 4 multiplier circuit.

5.6.2 MULTIPLICATION OF SIGNED NUMBERS

Multiplication of unsigned numbers illustrates the main issues involved in the design of multiplier circuits. Multiplication of signed numbers is somewhat more complex.

If the multiplier operand is positive, it is possible to use essentially the same scheme as for unsigned numbers. For each bit of the multiplier operand that is equal to 1, a properly

shifted version of the multiplicand must be added to the partial product. The multiplicand can be either positive or negative.

Since shifted versions of the multiplicand are added to the partial products, it is important to ensure that the numbers involved are represented correctly. For example, if the two right-most bits of the multiplier are both equal to 1, then the first addition must produce the partial product $PP1 = M + 2M$, where M is the multiplicand. If $M = m_{n-1}m_{n-2} \cdots m_1m_0$, then $PP1 = m_{n-1}m_{n-2} \cdots m_1m_0 + m_{n-1}m_{n-2} \cdots m_1m_00$. The adder that performs this addition comprises circuitry that adds two operands of equal length. Since shifting the multiplicand to the left, to generate $2M$, results in one of the operands having $n + 1$ bits, the required addition has to be performed using the second operand, M , represented also as an $(n + 1)$ -bit number. An n -bit signed number is represented as an $(n + 1)$ -bit number by replicating the sign bit as the new left-most bit. Thus $M = m_{n-1}m_{n-2} \cdots m_1m_0$ is represented using $(n + 1)$ bits as $M = m_{n-1}m_{n-1}m_{n-2} \cdots m_1m_0$. The value of a positive number does not change if 0's are appended as the most-significant bits; the value of a negative number does not change if 1's are appended as the most-significant bits. Such replication of the sign bit is called *sign extension*.

When a shifted version of the multiplicand is added to a partial product, overflow has to be avoided. Hence the new partial product must be larger by one extra bit. Figure 5.33a illustrates the process of multiplying two positive numbers. The sign-extended bits are shown in blue. Part (b) of the figure involves a negative multiplicand. Note that the resulting product has $2n$ bits in both cases.

For a negative multiplier operand, it is possible to convert both the multiplier and the multiplicand into their 2's complements because this will not change the value of the result. Then the scheme for a positive multiplier can be used.

We have presented a relatively simple scheme for multiplication of signed numbers. There exist other techniques that are more efficient but also more complex. We will not pursue these techniques, but an interested reader may consult reference [1].

We have discussed circuits that perform addition, subtraction, and multiplication. Another arithmetic operation that is needed in computer systems is division. Circuits that perform division are more complex; we will present an example in Chapter 10. Various techniques for performing division are usually discussed in books on the subject of computer organization, and can be found in references [1, 2].

5.7 OTHER NUMBER REPRESENTATIONS

In the previous sections we dealt with binary integers represented in the positional number representation. Other types of numbers are also used in digital systems. In this section we will discuss briefly three other types: fixed-point, floating-point, and binary-coded decimal numbers.

5.7.1 FIXED-POINT NUMBERS

A *fixed-point* number consists of integer and fraction parts. It can be written in the positional number representation as

Multiplicand M	(+14)	0 1 1 1 0
Multiplier Q	(+11)	× 0 1 0 1 1
Partial product 0		0 0 0 1 1 1 0
		+ 0 0 1 1 1 0
Partial product 1		0 0 1 0 1 0 1
		+ 0 0 0 0 0 0
Partial product 2		0 0 0 1 0 1 0
		+ 0 0 1 1 1 0
Partial product 3		0 0 1 0 0 1 1
		+ 0 0 0 0 0 0
Product P	(+154)	0 0 1 0 0 1 1 0 1 0

(a) Positive multiplicand

Multiplicand M	(-14)	1 0 0 1 0
Multiplier Q	(+11)	× 0 1 0 1 1
Partial product 0		1 1 1 0 0 1 0
		+ 1 1 0 0 1 0
Partial product 1		1 1 0 1 0 1 1
		+ 0 0 0 0 0 0
Partial product 2		1 1 1 0 1 0 1
		+ 1 1 0 0 1 0
Partial product 3		1 1 0 1 1 0 0
		+ 0 0 0 0 0 0
Product P	(-154)	1 1 0 1 1 0 0 1 1 0

(b) Negative multiplicand

Figure 5.33 Multiplication of signed numbers.

$$B = b_{n-1}b_{n-2} \cdots b_1b_0.b_{-1}b_{-2} \cdots b_{-k}$$

The value of the number is

$$V(B) = \sum_{i=-k}^{n-1} b_i \times 2^i$$

The position of the radix point is assumed to be fixed; hence the name fixed-point number. If the radix point is not shown, then it is assumed to be to the right of the least-significant digit, which means that the number is an integer.

Logic circuits that deal with fixed-point numbers are essentially the same as those used for integers. We will not discuss them separately.

5.7.2 FLOATING-POINT NUMBERS

Fixed-point numbers have a range that is limited by the significant digits used to represent the number. For example, if we use eight digits and a sign to represent decimal integers, then the range of values that can be represented is 0 to ± 99999999 . If eight digits are used to represent a fraction, then the representable range is 0.00000001 to ± 0.99999999 . In scientific applications it is often necessary to deal with numbers that are very large or very small. Instead of using the fixed-point representation, which would require many significant digits, it is better to use the floating-point representation in which numbers are represented by a *mantissa* comprising the significant digits and an *exponent* of the radix R . The format is

$$\text{Mantissa} \times R^{\text{Exponent}}$$

The numbers are often *normalized*, such that the radix point is placed to the right of the first nonzero digit, as in 5.234×10^{43} or 6.31×10^{-28} .

Binary floating-point representation has been standardized by the Institute of Electrical and Electronic Engineers (IEEE) [3]. Two sizes of formats are specified in this standard—a *single-precision* 32-bit format and a *double-precision* 64-bit format. Both formats are illustrated in Figure 5.34.

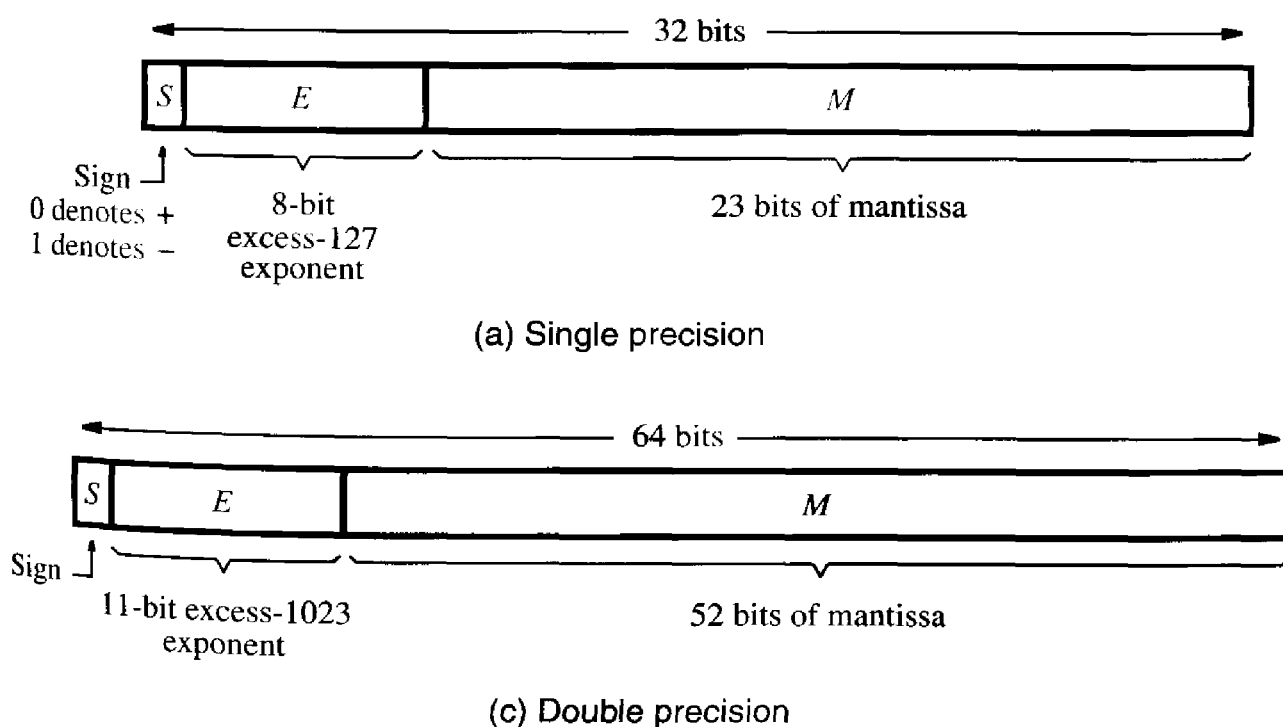


Figure 5.34 IEEE Standard floating-point formats.

Single-Precision Floating-Point Format

Figure 5.34a depicts the single-precision format. The left-most bit is the sign bit—0 for positive and 1 for negative numbers. There is an 8-bit exponent field, E , and a 23-bit mantissa field, M . The exponent is with respect to the radix 2. Because it is necessary to be able to represent both very large and very small numbers, the exponent can be either positive or negative. Instead of simply using an 8-bit signed number as the exponent, which would allow exponent values in the range -128 to 127 , the IEEE standard specifies the exponent in the *excess-127* format. In this format the value 127 is added to the value of the actual exponent so that

$$\text{Exponent} = E - 127$$

In this way E becomes a positive integer. This format is convenient for adding and subtracting floating-point numbers because the first step in these operations involves comparing the exponents to determine whether the mantissas must be appropriately shifted to add/subtract the significant bits. The range of E is 0 to 255. The extreme values of $E = 0$ and $E = 255$ are taken to denote the exact zero and infinity, respectively. Therefore, the normal range of the exponent is -126 to 127 , which is represented by the values of E from 1 to 254.

The mantissa is represented using 23 bits. The IEEE standard calls for a normalized mantissa, which means that the most-significant bit is always equal to 1. Thus it is not necessary to include this bit explicitly in the mantissa field. Therefore, if M is the bit vector in the mantissa field, the actual value of the mantissa is $1.M$, which gives a 24-bit mantissa. Consequently, the floating-point format in Figure 5.34a represents the number

$$\text{Value} = \pm 1.M \times 2^{E-127}$$

The size of the mantissa field allows the representation of numbers that have the precision of about seven decimal digits. The exponent field range of 2^{-126} to 2^{127} corresponds to about $10^{\pm 38}$.

Double-Precision Floating-Point Format

Figure 5.34b shows the double-precision format, which uses 64 bits. Both the exponent and mantissa fields are larger. This format allows greater range and precision of numbers. The exponent field has 11 bits, and it specifies the exponent in the *excess-1023* format, where

$$\text{Exponent} = E - 1023$$

The range of E is 0 to 2047, but again the values $E = 0$ and $E = 2047$ are used to indicate the exact 0 and infinity, respectively. Thus the normal range of the exponent is -1022 to 1023 , which is represented by the values of E from 1 to 2046.

The mantissa field has 52 bits. Since the mantissa is assumed to be normalized, its actual value is again $1.M$. Therefore, the value of a floating-point number is

$$\text{Value} = \pm 1.M \times 2^{E-1023}$$

This format allows representation of numbers that have the precision of about 16 decimal digits and the range of approximately $10^{\pm 308}$.

Arithmetic operations using floating-point operands are significantly more complex than signed integer operations. Because this is a rather specialized domain, we will not elaborate on the design of logic circuits that can perform such operations. For a more complete discussion of floating-point operations, the reader may consult references [1, 2].

5.7.3 BINARY-CODED-DECIMAL REPRESENTATION

In digital systems it is possible to represent decimal numbers simply by encoding each digit in binary form. This is called the *binary-coded-decimal (BCD)* representation. Because there are 10 digits to encode, it is necessary to use four bits per digit. Each digit is encoded by the binary pattern that represents its unsigned value, as shown in Table 5.3. Note that only 10 of the 16 available patterns are used in BCD, which means that the remaining 6 patterns should not occur in logic circuits that operate on BCD operands; these patterns are usually treated as don't-care conditions in the design process. BCD representation was used in some early computers as well as in many handheld calculators. Its main virtue is that it provides a format that is convenient when numerical information is to be displayed on a simple digit-oriented display. Its drawbacks are complexity of circuits that perform arithmetic operations and the fact that six of the possible code patterns are wasted.

Even though the importance of BCD representation has diminished, it is still encountered. To give the reader an indication of the complexity of the required circuits, we will consider BCD addition in some detail.

BCD Addition

The addition of two BCD digits is complicated by the fact that the sum may exceed 9, in which case a correction will have to be made. Let $X = x_3x_2x_1x_0$ and $Y = y_3y_2y_1y_0$ represent the two BCD digits and let $S = s_3s_2s_1s_0$ be the desired sum digit, $S = X + Y$. Obviously, if $X + Y \leq 9$, then the addition is the same as the addition of 2 four-bit unsigned

Table 5.3 Binary-coded decimal digits.

Decimal digit	BCD code
0	0000
1	0001
2	0010
3	0011
4	0100
5	0101
6	0110
7	0111
8	1000
9	1001

binary numbers. But, if $X + Y > 9$, then the result requires two BCD digits. Moreover, the four-bit sum obtained from the four-bit adder may be incorrect.

There are two cases where some correction has to be made: when the sum is greater than 9 but no carry-out is generated using four bits, and when the sum is greater than 15 so that a carry-out is generated using four bits. Figure 5.35 illustrates these cases. In the first case the four-bit addition yields $7 + 5 = 12 = Z$. To obtain a correct BCD result, we must generate $S = 2$ and a carry-out of 1. The necessary correction is apparent from the fact that the four-bit addition is a modulo-16 scheme, whereas decimal addition is a modulo-10 scheme. Therefore, a correct decimal digit can be generated by adding 6 to the result of four-bit addition whenever this result exceeds 9. Thus we can arrange the computation as follows

$$Z = X + Y$$

If $Z \leq 9$, then $S = Z$ and carry-out = 0

if $Z > 9$, then $S = Z + 6$ and carry-out = 1

The second example in Figure 5.35 shows what happens when $X + Y > 15$. In this case the four least-significant bits of Z represent the digit 1, which is wrong. But a carry is generated, which corresponds to the value 16, that must be taken into account. Again adding 6 to the intermediate sum Z provides the necessary correction.

Figure 5.36 gives a block diagram of a one-digit BCD adder that is based on this scheme. The block that detects whether $Z > 9$ produces an output signal, Adjust, which controls the multiplexer that provides the correction when needed. A second four-bit adder generates the corrected sum bits. If Adjust = 0, then $S = Z + 0$; if Adjust = 1, then $S = Z + 6$ and carry-out = 1.

X	0 1 1 1	7
+ Y	+ 0 1 0 1	+ 5
Z	1 1 0 0	12
	+ 0 1 1 0	
carry →	1 0 0 1 0	
	S = 2	
X	1 0 0 0	8
+ Y	+ 1 0 0 1	+ 9
Z	1 0 0 0 1	17
	+ 0 1 1 0	
carry →	1 0 1 1 1	
	S = 7	

Figure 5.35 Addition of BCD digits.

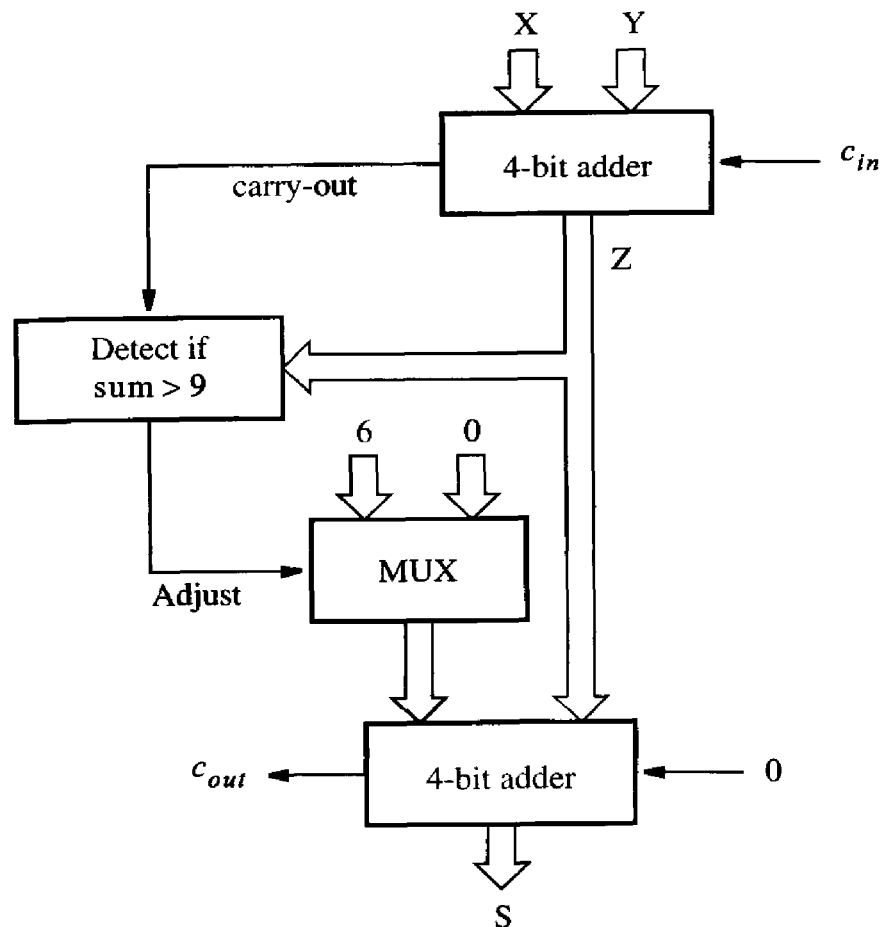


Figure 5.36 Block diagram for a one-digit BCD adder.

An implementation of this block diagram, using VHDL code, is shown in Figure 5.37. Inputs X and Y are defined as four-bit numbers. The sum output, S , is defined as a five-bit number, which allows for the carry-out to appear in bit S_4 , while the sum is produced in bits S_{3-0} . The intermediate sum Z is also defined as a five-bit number. Recall from the discussion in section 5.5.4 that VHDL requires at least one of the operands of an arithmetic operation to have the same number of bits as in the result. This requirement explains why we have concatenated a 0 to input X in the expression $Z \leq ('0' \& X) + Y$.

The statement

$$\text{Adjust} \leq '1' \text{ WHEN } Z > 9 \text{ ELSE } '0';$$

uses a type of VHDL signal assignment statement that we have not seen before. It is called a *selected signal assignment* and is used to assign one of multiple values to a signal, based on some criterion. In this case the criterion is the condition $Z > 9$. If this condition is satisfied, the statement assigns 1 to Adjust; otherwise, it assigns 0 to Adjust. Other examples of the selected signal assignment are given in Chapter 6.

We should also note that we have included the *Adjust* signal in the VHDL code only to be consistent with Figure 5.36. We could just as easily have eliminated the *Adjust* signal and written the expression as

$$S \leq Z \text{ WHEN } Z < 10 \text{ ELSE } Z + 6;$$


```

LIBRARY ieee ;
USE ieee.std_logic_1164.all ;
USE ieee.std_logic_unsigned.all ;

ENTITY BCD IS
    PORT ( X, Y : IN    STD_LOGIC_VECTOR(3 DOWNTO 0) ;
          S      : OUT  STD_LOGIC_VECTOR(4 DOWNTO 0) ) ;
END BCD ;

ARCHITECTURE Behavior OF BCD IS
    SIGNAL Z : STD_LOGIC_VECTOR(4 DOWNTO 0) ;
    SIGNAL Adjust : STD_LOGIC ;
BEGIN
    Z <= ('0' & X) + Y ;
    Adjust <= '1' WHEN Z > 9 ELSE '0' ;
    S <= Z WHEN (Adjust = '0') ELSE Z + 6 ;
END Behavior ;

```

Figure 5.37 VHDL code for a one-digit BCD adder.

To verify the functional correctness of the code, we performed a functional simulation. An example of the obtained results is given in Figure 5.38.

If we wish to derive a circuit to implement the block diagram in Figure 5.36 by hand, instead of by using VHDL, then the following approach can be used. To define the *Adjust* function, we can observe that the intermediate sum will exceed 9 if the carry-out from the four-bit adder is equal to 1, or if $z_3 = 1$ and either z_2 or z_1 (or both) are equal to 1. Hence the logic expression for this function is

$$\text{Adjust} = \text{Carry-out} + z_3(z_2 + z_1)$$

Instead of implementing another complete four-bit adder to perform the correction, we can use a simpler circuit because the addition of constant 6 does not require the full capability of a four-bit adder. Note that the least-significant bit of the sum, s_0 , is not affected at all; hence $s_0 = z_0$. A two-bit adder may be used to develop bits s_2 and s_1 . Bit s_3 is the same as

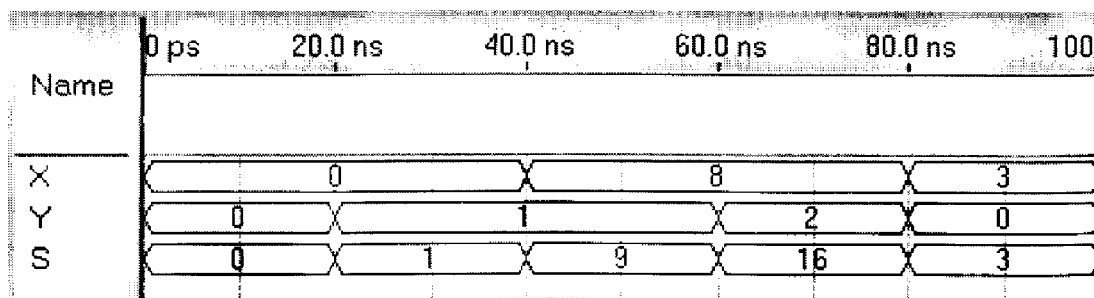


Figure 5.38 Functional simulation of the VHDL code in Figure 5.37.

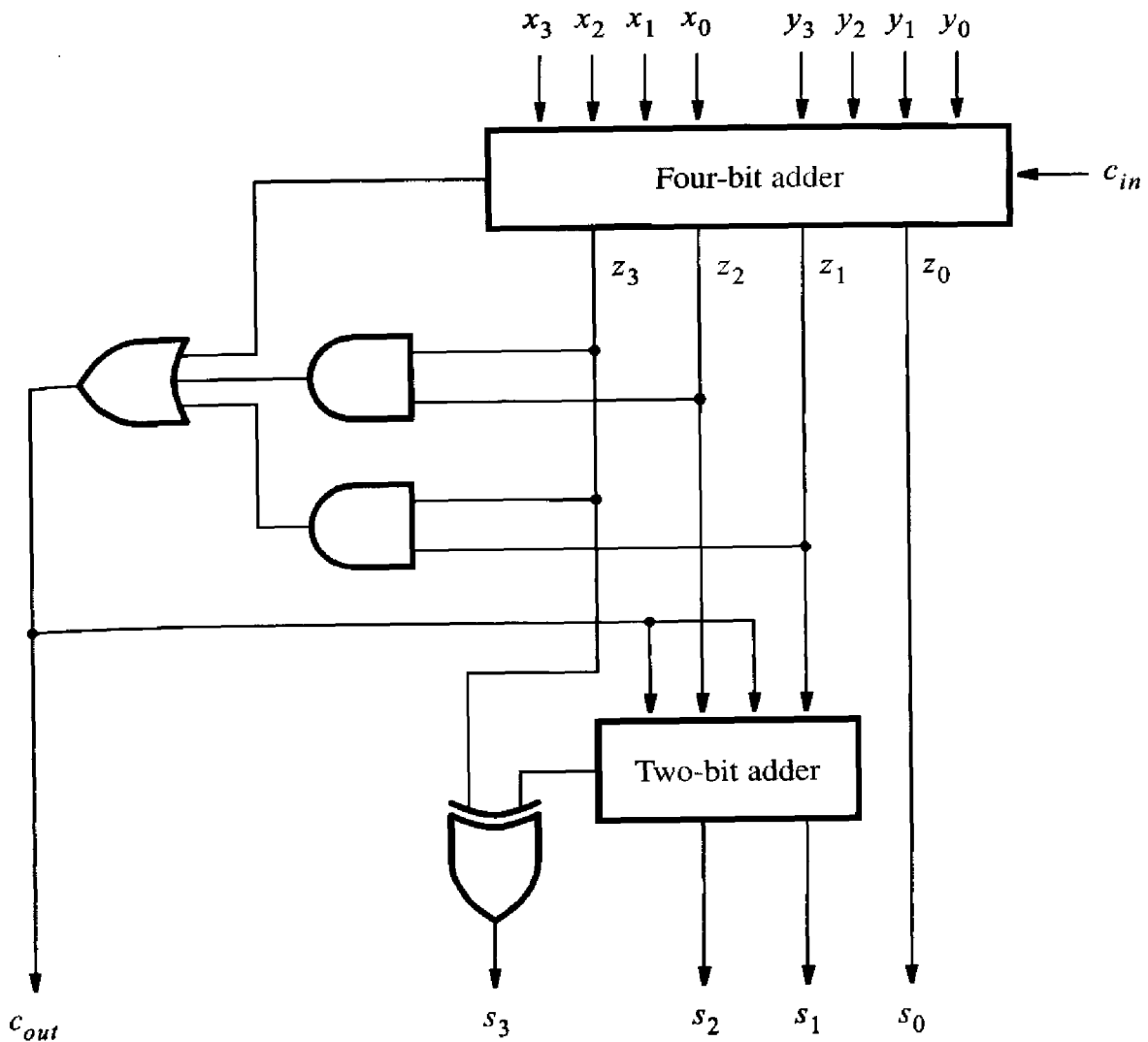


Figure 5.39 Circuit for a one-digit BCD adder.

z_3 if the carry-out from the two-bit adder is 0, and it is equal to \bar{z}_3 if this carry-out is equal to 1. A complete circuit that implements this scheme is shown in Figure 5.39. Using the one-digit BCD adder as a basic block, it is possible to build larger BCD adders in the same way as a binary full-adder is used to build larger ripple-carry binary adders.

Subtraction of BCD numbers can be handled with the radix-complement approach. Just as we use 2's complement representation to deal with negative binary numbers, we can use 10's complement representation to deal with decimal numbers. We leave the development of such a scheme as an exercise for the reader (see problem 5.19).

5.8 ASCII CHARACTER CODE

The most popular code for representing information in digital systems is used for both letters and numbers, as well as for some control characters. It is known as the *ASCII code*, which stands for the American Standard Code for Information Interchange. The code specified by this standard is presented in Table 5.4.

Table 5.4 The seven-bit ASCII code.

Bit positions	Bit positions 654							
	000	001	010	011	100	101	110	111
3210								
0000	NUL	DLE	SPACE	0	@	P	'	p
0001	SOH	DC1	!	1	A	Q	a	q
0010	STX	DC2	"	2	B	R	b	r
0011	ETX	DC3	#	3	C	S	c	s
0100	EOT	DC4	\$	4	D	T	d	t
0101	ENQ	NAK	%	5	E	U	e	u
0110	ACK	SYN	&	6	F	V	f	v
0111	BEL	ETB	'	7	G	W	g	w
1000	BS	CAN	(8	H	X	h	x
1001	HT	EM)	9	I	Y	i	y
1010	LF	SUB	*	:	J	Z	j	z
1011	VT	ESC	+	;	K	[k	{
1100	FF	FS	.	<	L	\	l	
1101	CR	GS	-	=	M]	m	}
1110	SO	RS	.	>	N	^	n	~
1111	SI	US	/	?	O	—	o	DEL

NUL	Null/Idle	SI	Shift in
SOH	Start of header	DLE	Data link escape
STX	Start of text	DC1-DC4	Device control
ETX	End of text	NAK	Negative acknowledgement
EOT	End of transmission	SYN	Synchronous idle
ENQ	Enquiry	ETB	End of transmitted block
ACK	Acknowledgement	CAN	Cancel (error in data)
BEL	Audible signal	EM	End of medium
BS	Back space	SUB	Special sequence
HT	Horizontal tab	ESC	Escape
LF	Line feed	FS	File separator
VT	Vertical tab	GS	Group separator
FF	Form feed	RS	Record separator
CR	Carriage return	US	Unit separator
SO	Shift out	DEL	Delete/Idle

Bit positions of code format =

6	5	4	3	2	1	0
---	---	---	---	---	---	---

The ASCII code uses seven-bit patterns to denote 128 different characters. Ten of the characters are decimal digits 0 to 9. Note that the high-order bits have the same pattern, $b_6b_5b_4 = 011$, for all 10 digits. Each digit is identified by the low-order four bits, b_{3-0} , using the binary patterns for these digits. Capital and lowercase letters are encoded in a way that makes sorting of textual information easy. The codes for A to Z are in ascending numerical sequence, which means that the task of sorting letters (or words) is accomplished by a simple arithmetic comparison of the codes that represent the letters.

Characters that are either letters of the alphabet or numbers are referred to as *alphanumeric* characters. In addition to these characters, the ASCII code includes punctuation marks such as ! and ?; commonly used symbols such as & and %; and a collection of control characters. The control characters are those needed in computer systems to handle and transfer data among various devices. For example, the carriage return character, which is abbreviated as CR in the table, indicates that the carriage, or cursor position, of an output device, say, printer or display, should return to the left-most column.

The ASCII code is used to encode information that is handled as text. It is not convenient for representation of numbers that are used as operands in arithmetic operations. For this purpose, it is best to convert ASCII-encoded numbers into a binary representation that we discussed before.

The ASCII standard uses seven bits to encode a character. In computer systems a more natural size is eight bits, or one byte. There are two common ways of fitting an ASCII-encoded character into a byte. One is to set the eighth bit, b_7 , to 0. Another is to use this bit to indicate the parity of the other seven bits, which means showing whether the number of 1s in the seven-bit code is even or odd.

Parity

The concept of *parity* is widely used in digital systems for error-checking purposes. When digital information is transmitted from one point to another, perhaps by long wires, it is possible for some bits to become corrupted during the transmission process. For example, the sender may transmit a bit whose value is equal to 1, but the receiver observes a bit whose value is 0. Suppose that a data item consists of n bits. A simple error-checking mechanism can be implemented by including an extra bit, p , which indicates the parity of the n -bit item. Two kinds of parity can be used. For *even parity* the p bit is given the value such that the total number of 1s in the $n + 1$ transmitted bits (comprising the n -bit data and the parity bit p) is even. For *odd parity* the p bit is given the value that makes the total number of 1s odd. The sender generates the p bit based on the n -bit data item that is to be transmitted. The receiver checks whether the parity of the received item is correct.

Parity generating and checking circuits can be realized with XOR gates. For example, for a four-bit data item consisting of bits $x_3x_2x_1x_0$, the even parity bit can be generated as

$$p = x_3 \oplus x_2 \oplus x_1 \oplus x_0$$

At the receiving end the checking is done using

$$c = p \oplus x_3 \oplus x_2 \oplus x_1 \oplus x_0$$

If $c = 0$, then the received item shows the correct parity. If $c = 1$, then an error has occurred. Note that observing $c = 0$ is not a guarantee that the received item is correct.

If two or any even number of bits have their values inverted during the transmission, the parity of the data item will not be changed; hence the error will not be detected. But if an odd number of bits are corrupted, then the error will be detected.

The attractiveness of parity checking lies in its simplicity. There exist other more sophisticated schemes that provide more reliable error-checking mechanisms [4]. We will discuss parity circuits again in section 9.3.

5.9 EXAMPLES OF SOLVED PROBLEMS

This section presents some typical problems that the reader may encounter, and shows how such problems can be solved.

Problem: Convert the decimal number 14959 into a hexadecimal number.

Solution: An integer is converted into the hexadecimal representation by successive divisions by 16, such that in each step the remainder is a hex digit. To see why this is true, consider a four-digit number $H = h_3h_2h_1h_0$. Its value is

$$V = h_3 \times 16^3 + h_2 \times 16^2 + h_1 \times 16 + h_0$$

If we divide this by 16, we obtain

$$\frac{V}{16} = h_3 \times 16^2 + h_2 \times 16 + h_1 + \frac{h_0}{16}$$

Thus, the remainder gives h_0 . Figure 5.40 shows the steps needed to perform the conversion $(14959)_{10} = (3A6F)_{16}$.

Convert $(14959)_{10}$

		Remainder	Hex digit	
$14959 \div 16$	$= 934$	15	F	LSB
$934 \div 16$	$= 58$	6	6	
$58 \div 16$	$= 3$	10	A	
$3 \div 16$	$= 0$	3	3	MSB

Result is $(3A6F)_{16}$

Figure 5.40 Conversion from decimal to hexadecimal.

Problem: Convert the decimal fraction 0.8254 into binary representation.

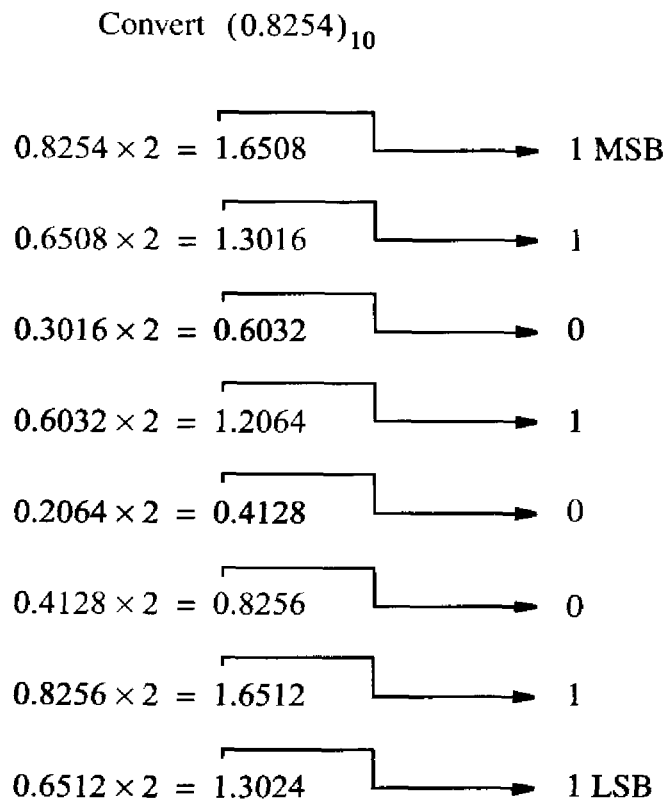
Solution: As indicated in section 5.7.1, a binary fraction is represented as the bit pattern $B = 0.b_{-1}b_{-2}\cdots b_{-m}$ and its value is

$$V = b_{-1} \times 2^{-1} + b_{-2} \times 2^{-2} + \cdots + b_{-m} \times 2^{-m}$$

Multiplying this expression by 2 gives

$$b_{-1} + b_{-2} \times 2^{-1} + \cdots + b_{-m} \times 2^{-(m-1)}$$

Here, the leftmost term is the first bit to the right of the radix point. The remaining terms constitute another binary fraction which can be manipulated in the same way. Therefore, to convert a decimal fraction into a binary fraction, we multiply the decimal number by 2 and set the computed bit to 0 if the product is less than 1, and set it to 1 if the product is greater than or equal to 1. We repeat this calculation until a sufficient number of bits are obtained to meet the desired accuracy. Note that it may not be possible to represent a decimal fraction with a binary fraction that has exactly the same value. Figure 5.41 shows the required computation that yields $(0.8254)_{10} = (0.11010011\dots)_2$.



$$(0.8254)_{10} = (0.11010011\dots)_2$$

Figure 5.41 Conversion of fractions from decimal to binary.

Problem: Convert the decimal fixed point number 214.45 into a binary fixed point number.

Solution: For the integer part perform successive division by 2 as illustrated in Figure 5.1. For the fractional part perform successive multiplication by 2 as described in Example 5.8. The complete computation is presented in Figure 5.42, producing $(214.45)_{10} = (11010110.0111001\dots)_2$.

Problem: In computer computations it is often necessary to compare numbers. Two four-bit signed numbers, $X = x_3x_2x_1x_0$ and $Y = y_3y_2y_1y_0$, can be compared by using the subtractor circuit in Figure 5.43, which performs the operation $X - Y$. The three outputs denote the following:

- $Z = 1$ if the result is 0; otherwise $Z = 0$
- $N = 1$ if the result is negative; otherwise $N = 0$
- $V = 1$ if arithmetic overflow occurs; otherwise $V = 0$

Show how Z , N , and V can be used to determine the cases $X = Y$, $X < Y$, $X \leq Y$, $X > Y$, and $X \geq Y$.

Solution: Consider first the case $X < Y$, where the following possibilities may arise:

- If X and Y have the same sign there will be no overflow, hence $V = 0$. Then for both positive and negative X and Y the difference will be negative ($N = 1$).
- If X is negative and Y is positive, the difference will be negative ($N = 1$) if there is no overflow ($V = 0$); but the result will be positive ($N = 0$) if there is overflow ($V = 1$).

Therefore, if $X < Y$ then $N \oplus V = 1$.

The case $X = Y$ is detected by $Z = 1$. Then, $X \leq Y$ is detected by $Z + (N \oplus V) = 1$. The last two cases are just simple inverses: $X > Y$ if $\overline{Z + (N \oplus V)} = 1$ and $X \geq Y$ if $\overline{N \oplus V} = 1$.

Problem: Write VHDL code to specify the circuit in Figure 5.43.

Solution: We can specify the circuit using the structural approach presented in Figure 5.26, as indicated in Figure 5.44. The four full-adders are defined in a package in Figure 5.24.

This approach becomes awkward when large circuits are involved, as would be the case if the comparator had 32-bit operands. An alternative is to use a behavioral specification, as shown in Figure 5.45, which is based on the scheme given in Figure 5.28. Note that we specified directly that Y should be subtracted from X , so that we don't have to complement Y explicitly. Since the VHDL compiler will implement the circuit using a library module, we have to specify the overflow signal, V , in terms of the S bits only, because the interstage carry signals are not accessible as explained in the discussion of Figure 5.28.

Convert $(214.45)_{10}$

$$\frac{214}{2} = 107 + \frac{0}{2} \rightarrow 0 \text{ LSB}$$

$$\frac{107}{2} = 53 + \frac{1}{2} \rightarrow 1$$

$$\frac{53}{2} = 26 + \frac{1}{2} \rightarrow 1$$

$$\frac{26}{2} = 13 + \frac{0}{2} \rightarrow 0$$

$$\frac{13}{2} = 6 + \frac{1}{2} \rightarrow 1$$

$$\frac{6}{2} = 3 + \frac{0}{2} \rightarrow 0$$

$$\frac{3}{2} = 1 + \frac{1}{2} \rightarrow 1$$

$$\frac{1}{2} = 0 + \frac{1}{2} \rightarrow 1 \text{ MSB}$$

$$0.45 \times 2 = 0.90 \rightarrow 0 \text{ MSB}$$

$$0.90 \times 2 = 1.80 \rightarrow 1$$

$$0.80 \times 2 = 1.60 \rightarrow 1$$

$$0.60 \times 2 = 1.20 \rightarrow 1$$

$$0.20 \times 2 = 0.40 \rightarrow 0$$

$$0.40 \times 2 = 0.80 \rightarrow 0$$

$$0.80 \times 2 = 1.60 \rightarrow 1 \text{ LSB}$$

$$(214.45)_{10} = (11010110.0111001 \dots)_2$$

Figure 5.42 Conversion of fixed point numbers from decimal to binary.

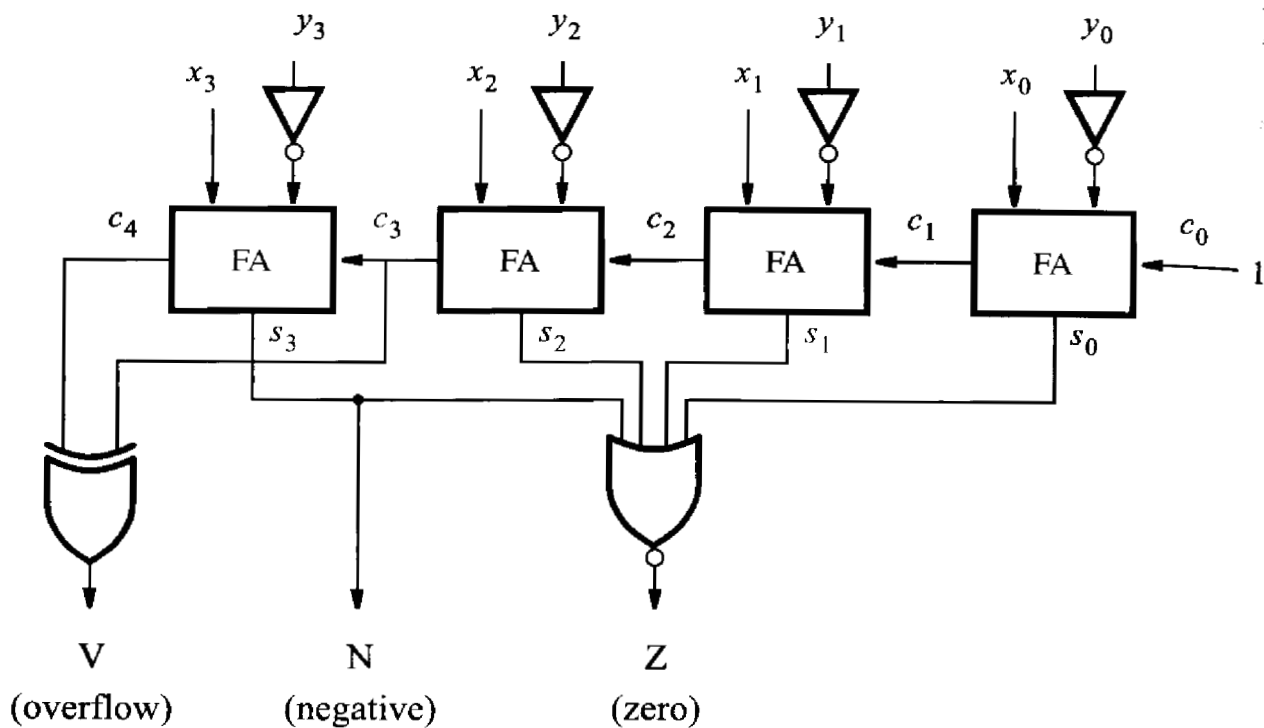


Figure 5.43 A comparator circuit.

```

LIBRARY ieee ;
USE ieee.std_logic_1164.all ;
USE work.fulladd_package.all ;

ENTITY comparator IS
    PORT ( X, Y : IN  STD_LOGIC_VECTOR(3 DOWNTO 0) ;
          V, N, Z : OUT STD_LOGIC ) ;
END comparator ;

ARCHITECTURE Structure OF comparator IS
    SIGNAL S : STD_LOGIC_VECTOR(3 DOWNTO 0) ;
    SIGNAL C : STD_LOGIC_VECTOR(1 TO 4) ;
BEGIN
    stage0: fulladd PORT MAP ( '1', X(0), NOT Y(0), S(0), C(1) ) ;
    stage1: fulladd PORT MAP ( C(1), X(1), NOT Y(1), S(1), C(2) ) ;
    stage2: fulladd PORT MAP ( C(2), X(2), NOT Y(2), S(2), C(3) ) ;
    stage3: fulladd PORT MAP ( C(3), X(3), NOT Y(3), S(3), C(4) ) ;
    V <= C(4) XOR C(3) ;
    N <= S(3) ;
    Z <= '1' WHEN S(3 DOWNTO 0) = "0000" ELSE '0' ;
END Structure ;

```

Figure 5.44 Structural VHDL code for the comparator circuit.

```

LIBRARY ieee ;
USE ieee.std_logic_1164.all ;
USE ieee.std_logic_signed.all ;

ENTITY comparator IS
    PORT ( X, Y      : IN   STD_LOGIC_VECTOR(3 DOWNTO 0) ;
          V, N, Z    : OUT  STD_LOGIC ) ;
END comparator ;

ARCHITECTURE Behavior OF comparator IS
    SIGNAL S : STD_LOGIC_VECTOR(4 DOWNTO 0) ;
BEGIN
    S <= ('0' & X) + Y ;
    V <= S(4) XOR X(3) XOR Y(3) XOR S(3) ;
    N <= S(3) ;
    Z <= '1' WHEN S(3 DOWNTO 0) = 0 ELSE '0' ;
END Behavior ;

```

Figure 5.45 Behavioral VHDL code for the comparator circuit.

Problem: Figure 5.32 depicts a four-bit multiplier circuit. Each row consists of four full-adder (FA) blocks connected in a ripple-carry configuration. The delay caused by the carry signals rippling through the rows has a significant impact on the time needed to generate the output product. In an attempt to speed up the circuit, we may use the arrangement in Figure 5.46. Here, the carries in a given row are “saved” and included in the next row at the correct bit position. Then, in the first row the full-adders can be used to add three properly shifted bits of the multiplicand as selected by the multiplier bits. For example, in bit position 2 the three inputs are m_2q_0 , m_1q_1 , and m_0q_2 . In the last row it is still necessary to use the ripple-carry adder. A circuit that consists of an array of full-adders connected in this manner is called a *carry-save* adder array.

What is the total delay of the circuit in Figure 5.46 compared to that of the circuit in Figure 5.32?

Solution: In the circuit in Figure 5.32a the longest path is through the rightmost two full-adders in the top row, followed by the two rightmost FAs in the second row, and then through all four FAs in the bottom row. Hence this delay is eight times the delay through a full-adder block. In addition, there is the AND-gate delay needed to form the inputs to the first FA in the top row. These combined delays are the critical delay, which determines the speed of the multiplier circuit.

In the circuit in Figure 5.46, the longest path is through the rightmost FAs in the first and second rows, followed by all four FAs in the bottom row. Therefore, the critical delay is six times the delay through a full-adder block plus the AND-gate delay needed to form the inputs to the first FA in the top row.

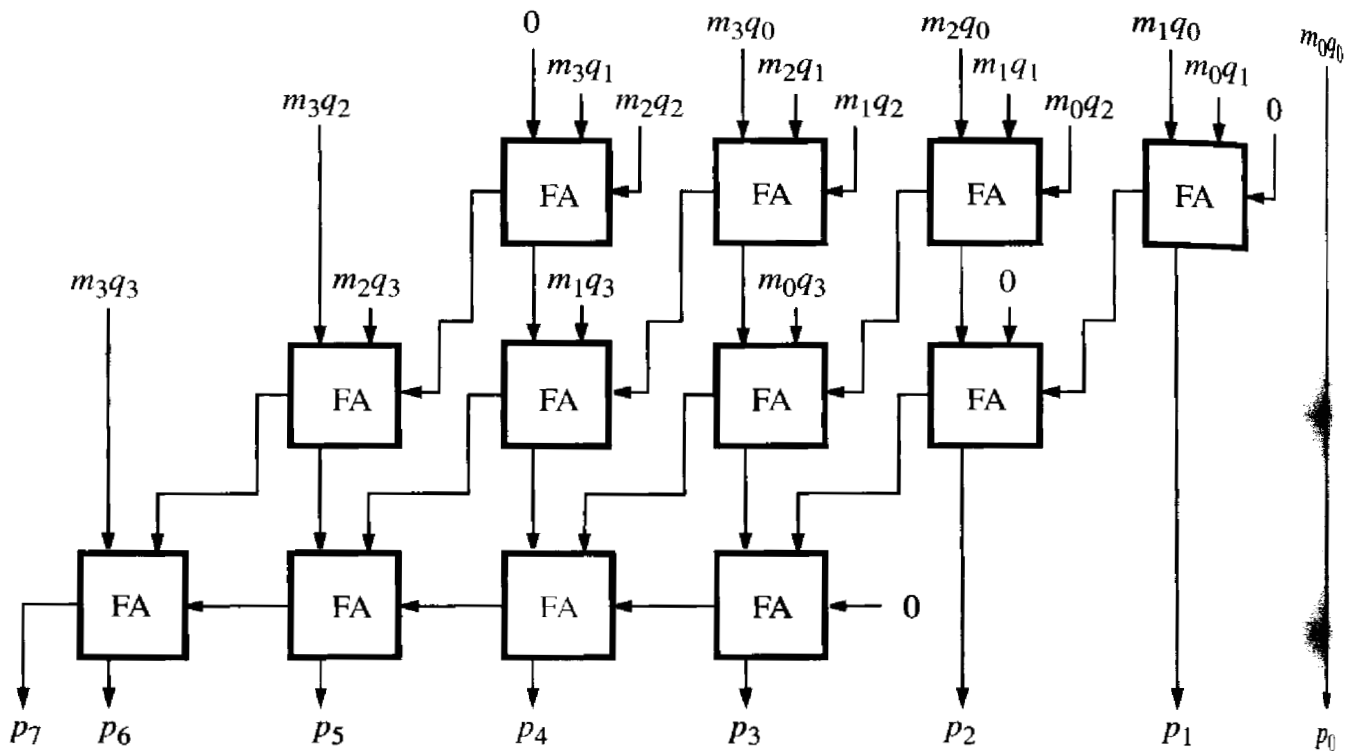


Figure 5.46 Multiplier carry-save array.

PROBLEMS

Answers to problems marked by an asterisk are given at the back of the book.

- *5.1** Determine the decimal values of the following unsigned numbers:
 - (a) $(0111011110)_2$
 - (b) $(1011100111)_2$
 - (c) $(3751)_8$
 - (d) $(A25F)_{16}$
 - (e) $(F0F0)_{16}$
- *5.2** Determine the decimal values of the following 1's complement numbers:
 - (a) 0111011110
 - (b) 1011100111
 - (c) 1111111110
- *5.3** Determine the decimal values of the following 2's complement numbers:
 - (a) 0111011110
 - (b) 1011100111
 - (c) 1111111110
- *5.4** Convert the decimal numbers 73, 1906, -95, and -1630 into signed 12-bit numbers in the following representations:
 - (a) Sign and magnitude
 - (b) 1's complement
 - (c) 2's complement

- 5.5** Perform the following operations involving eight-bit 2's complement numbers and indicate whether arithmetic overflow occurs. Check your answers by converting to decimal sign-and-magnitude representation.

$\begin{array}{r} 00110110 \\ + 01000101 \\ \hline \end{array}$	$\begin{array}{r} 01110101 \\ + 11011110 \\ \hline \end{array}$	$\begin{array}{r} 11011111 \\ + 10111000 \\ \hline \end{array}$
$\begin{array}{r} 00110110 \\ - 00101011 \\ \hline \end{array}$	$\begin{array}{r} 01110101 \\ - 11010110 \\ \hline \end{array}$	$\begin{array}{r} 11010011 \\ - 11101100 \\ \hline \end{array}$

- 5.6** Prove that the XOR operation is associative, which means that $x_i \oplus (y_i \oplus z_i) = (x_i \oplus y_i) \oplus z_i$.
- 5.7** Show that the circuit in Figure 5.5 implements the full-adder specified in Figure 5.4a.
- 5.8** Prove the validity of the simple rule for finding the 2's complement of a number, which was presented in section 5.3. Recall that the rule states that scanning a number from right to left, all 0s and the first 1 are copied; then all remaining bits are complemented.
- 5.9** Prove the validity of the expression $\text{Overflow} = c_n \oplus c_{n-1}$ for addition of n -bit signed numbers.
- 5.10** In section 5.5.4 we stated that a carry-out signal, c_k , from bit position $k - 1$ of an adder circuit can be generated as $c_k = x_k \oplus y_k \oplus s_k$, where x_k and y_k are inputs and s_k is the sum bit. Verify the correctness of this statement.
- *5.11** Consider the circuit in Figure P5.1. Can this circuit be used as one stage in a carry-ripple adder? Discuss the pros and cons.
- *5.12** Determine the number of gates needed to implement an n -bit carry-lookahead adder, assuming no fan-in constraints. Use AND, OR, and XOR gates with any number of inputs.
- *5.13** Determine the number of gates needed to implement an eight-bit carry-lookahead adder assuming that the maximum fan-in for the gates is four.
- 5.14** In Figure 5.18 we presented the structure of a hierarchical carry-lookahead adder. Show the complete circuit for a four-bit version of this adder, built using 2 two-bit blocks.
- 5.15** What is the critical delay path in the multiplier in Figure 5.32? What is the delay along this path in terms of the number of gates?
- 5.16** (a) Write a VHDL entity to describe the circuit block in Figure 5.32b. Use the CAD tools to synthesize a circuit from the code and verify its functional correctness.
 (b) Write a VHDL entity to describe the circuit block in Figure 5.32c. Use the CAD tools to synthesize a circuit from the code and verify its functional correctness.
 (c) Write a VHDL entity to describe the 4×4 multiplier shown in Figure 5.32a. Your code should be hierarchical and should use the subcircuits designed in parts (a) and (b). Synthesize a circuit from the code and verify its functional correctness.
- *5.17** Consider the VHDL code in Figure P5.2. Given the relationship between the signals IN and OUT, what is the functionality of the circuit described by the code? Comment on whether or not this code represents a good style to use for the functionality that it represents.

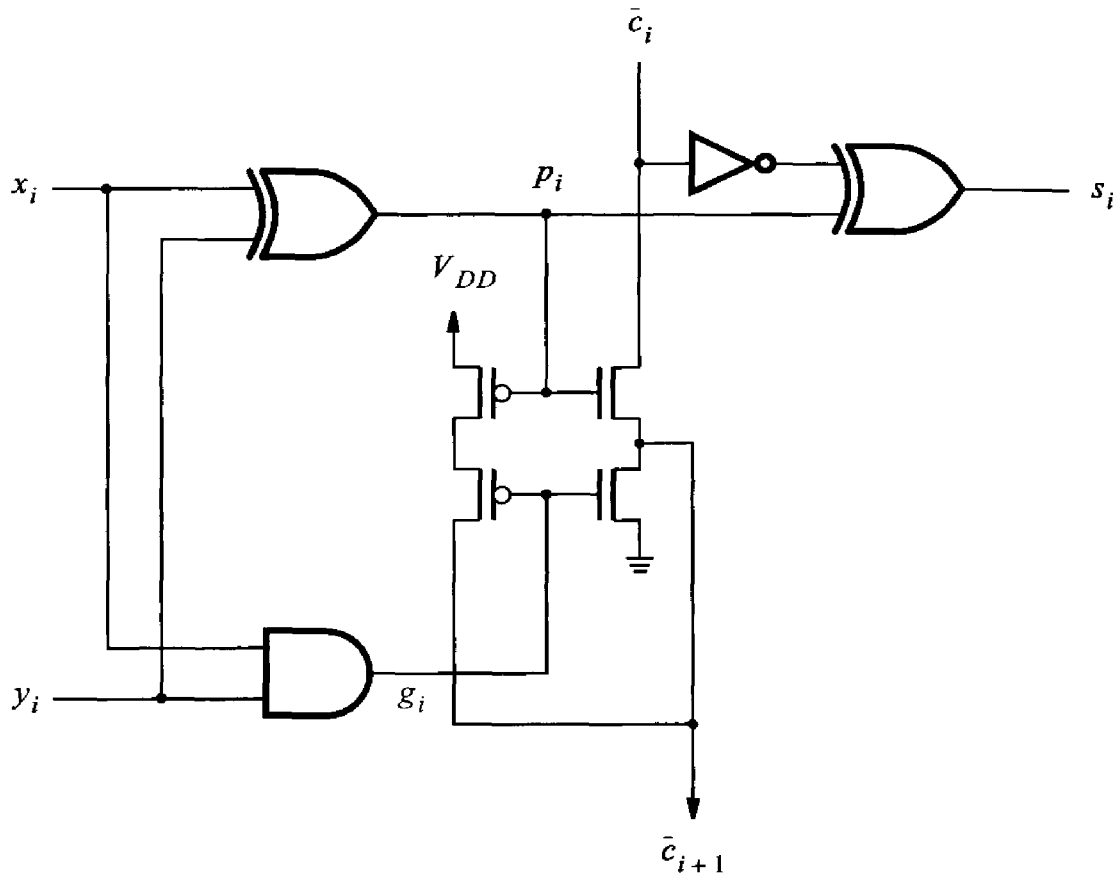


Figure P5.1 Circuit for problem 5.11.

- 5.18** Design a circuit that generates the 9's complement of a BCD digit. Note that the 9's complement of d is $9 - d$.
- 5.19** Derive a scheme for performing subtraction using BCD operands. Show a block diagram for the subtractor circuit.
Hint: Subtraction can be performed easily if the operands are in the 10's complement (radix complement) representation. In this representation the sign digit is 0 for a positive number and 9 for a negative number.
- 5.20** Write complete VHDL code for the circuit that you derived in problem 5.19.
- *5.21** Suppose that we want to determine how many of the bits in a three-bit unsigned number are equal to 1. Design the simplest circuit that can accomplish this task.
- 5.22** Repeat problem 5.21 for a six-bit unsigned number.
- 5.23** Repeat problem 5.21 for an eight-bit unsigned number.
- 5.24** Show a graphical interpretation of three-digit decimal numbers, similar to Figure 5.12. The left-most digit is 0 for positive numbers and 9 for negative numbers. Verify the validity of your answer by trying a few examples of addition and subtraction.
- 5.25** In a ternary number system there are three digits: 0, 1, and 2. Figure P5.3 defines a ternary half-adder. Design a circuit that implements this half-adder using binary-encoded signals, such that two bits are used for each ternary digit. Let $A = a_1a_0$, $B = b_1b_0$, and $Sum = s_1s_0$; note that $Carry$ is just a binary signal. Use the following encoding: $00 = (0)_3$, $01 = (1)_3$, and $10 = (2)_3$. Minimize the cost of the circuit.

```

LIBRARY ieee ;
USE ieee.std_logic_1164.all ;

ENTITY problem IS
    PORT ( Input   : IN   STD_LOGIC_VECTOR(3 DOWNTO 0) ;
          Output   : OUT  STD_LOGIC_VECTOR(3 DOWNTO 0) ) ;
END problem ;

ARCHITECTURE LogicFunc OF problem IS
BEGIN
    WITH Input SELECT
        Output <= "0001" WHEN "0101",
                 "0010" WHEN "0110",
                 "0011" WHEN "0111",
                 "0010" WHEN "1001",
                 "0100" WHEN "1010",
                 "0110" WHEN "1011",
                 "0011" WHEN "1101",
                 "0110" WHEN "1110",
                 "1001" WHEN "1111",
                 "0000" WHEN OTHERS ;
END LogicFunc ;

```

Figure P5.2 The code for problem 5.17.

<i>A B</i>	<i>Carry</i>	<i>Sum</i>
0 0	0	0
0 1	0	1
0 2	0	2
1 0	0	1
1 1	0	2
1 2	1	0
2 0	0	2
2 1	1	0
2 2	1	1

Figure P5.3 Ternary half-adder.

chapter

6

COMBINATIONAL-CIRCUIT BUILDING BLOCKS

CHAPTER OBJECTIVES

In this chapter you will learn about:

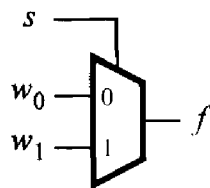
- Commonly used combinational subcircuits
- Multiplexers, which can be used for selection of signals and for implementation of general logic functions
- Circuits used for encoding, decoding, and code-conversion purposes
- Key VHDL constructs used to define combinational circuits

Previous chapters have introduced the basic techniques for design of logic circuits. In practice, a few types of logic circuits are often used as building blocks in larger designs. This chapter discusses a number of these blocks and gives examples of their use. The chapter also includes a major section on VHDL, which describes several key features of the language.

6.1 MULTIPLEXERS

Multiplexers were introduced briefly in Chapters 2 and 3. A multiplexer circuit has a number of data inputs, one or more select inputs, and one output. It passes the signal value on one of the data inputs to the output. The data input is selected by the values of the select inputs. Figure 6.1 shows a 2-to-1 multiplexer. Part (a) gives the symbol commonly used. The *select* input, s , chooses as the output of the multiplexer either input w_0 or w_1 . The multiplexer's functionality can be described in the form of a truth table as shown in part (b) of the figure. Part (c) gives a sum-of-products implementation of the 2-to-1 multiplexer, and part (d) illustrates how it can be constructed with transmission gates.

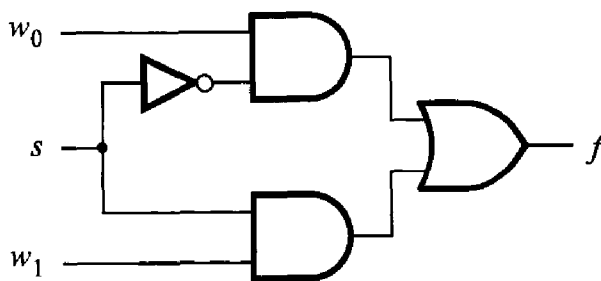
Figure 6.2a depicts a larger multiplexer with four data inputs, w_0, \dots, w_3 , and two select inputs, s_1 and s_0 . As shown in the truth table in part (b) of the figure, the two-bit number represented by s_1s_0 selects one of the data inputs as the output of the multiplexer.



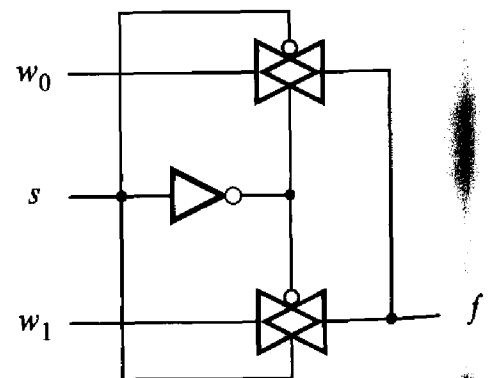
(a) Graphical symbol

s	f
0	w_0
1	w_1

(b) Truth table



(c) Sum-of-products circuit



(d) Circuit with transmission gates

Figure 6.1 A 2-to-1 multiplexer.

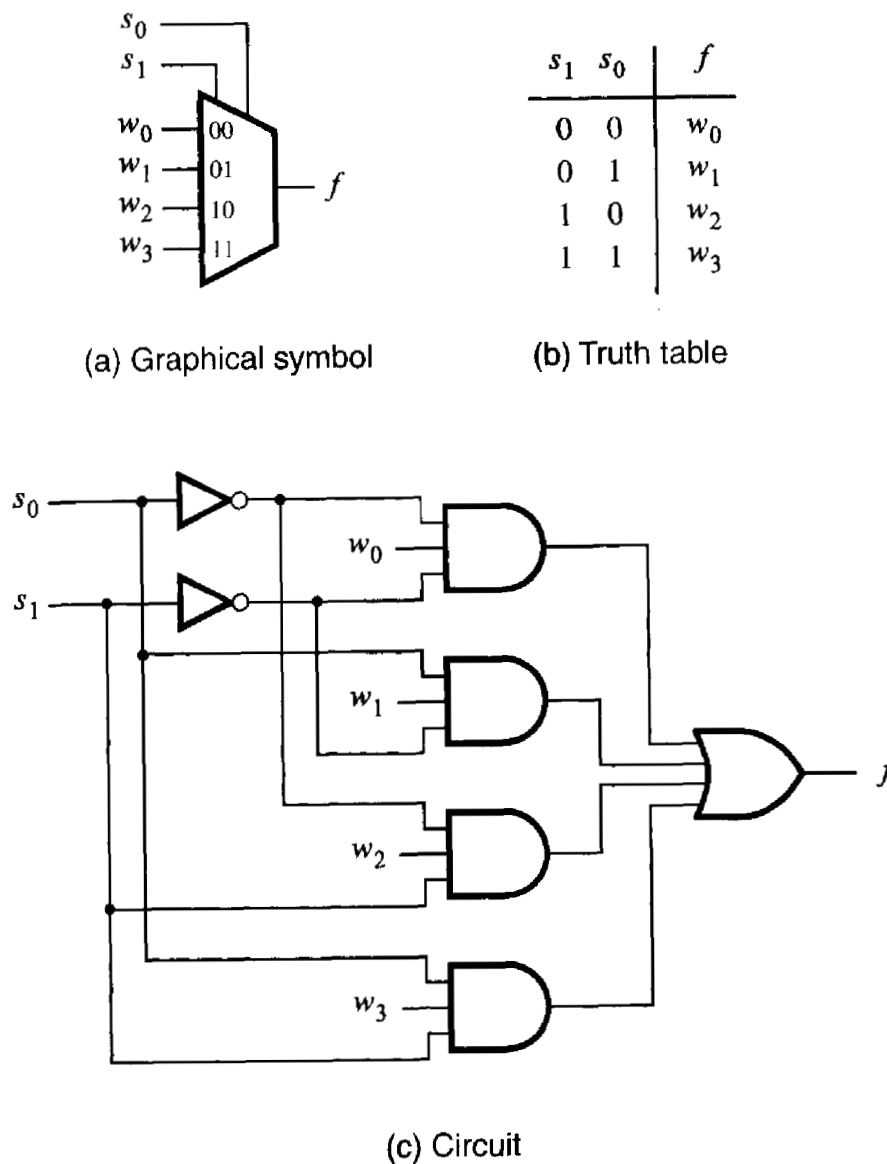


Figure 6.2 A 4-to-1 multiplexer.

A sum-of-products implementation of the 4-to-1 multiplexer appears in Figure 6.2c. It realizes the multiplexer function

$$f = \bar{s}_1\bar{s}_0w_0 + \bar{s}_1s_0w_1 + s_1\bar{s}_0w_2 + s_1s_0w_3$$

It is possible to build larger multiplexers using the same approach. Usually, the number of data inputs, n , is an integer power of two. A multiplexer that has n data inputs, w_0, \dots, w_{n-1} , requires $\lceil \log_2 n \rceil$ select inputs. Larger multiplexers can also be constructed from smaller multiplexers. For example, the 4-to-1 multiplexer can be built using three 2-to-1 multiplexers as illustrated in Figure 6.3. If the 4-to-1 multiplexer is implemented using transmission gates, then the structure in this figure is always used. Figure 6.4 shows how a 16-to-1 multiplexer is constructed with five 4-to-1 multiplexers.

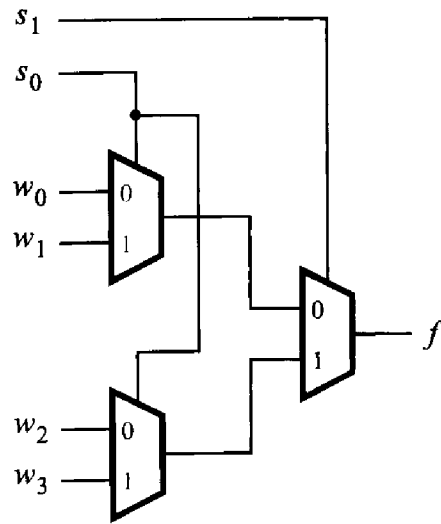


Figure 6.3 Using 2-to-1 multiplexers to build a 4-to-1 multiplexer.

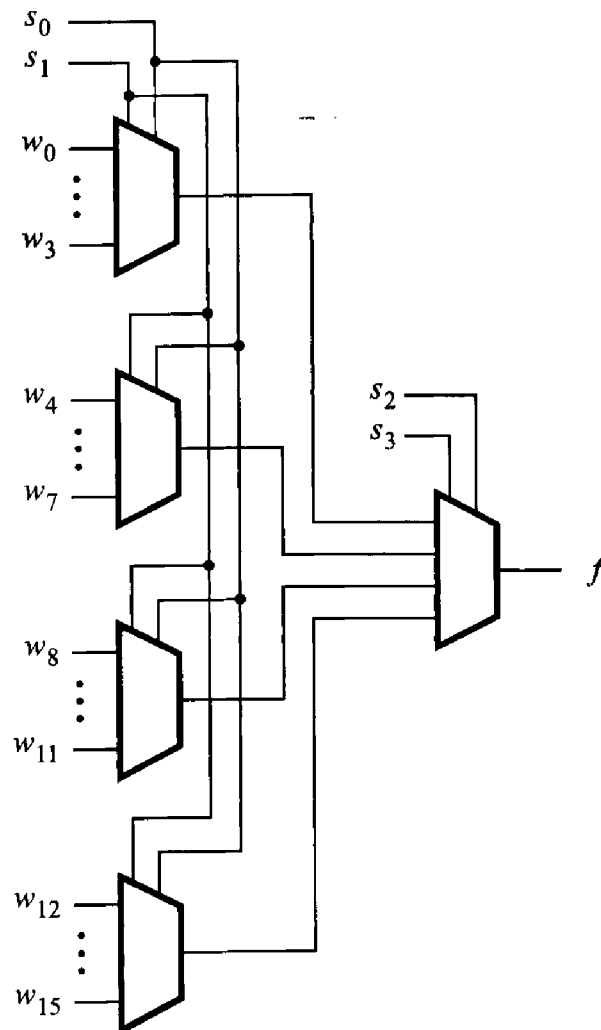
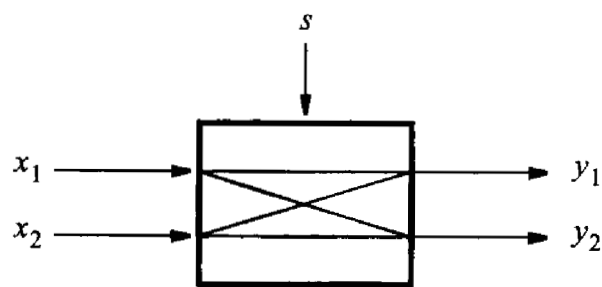


Figure 6.4 A 16-to-1 multiplexer.

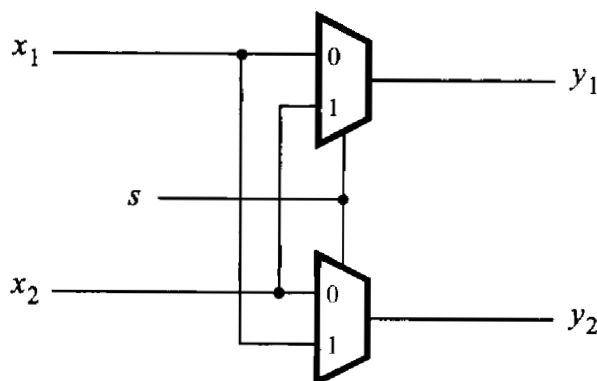
Figure 6.5 shows a circuit that has two inputs, x_1 and x_2 , and two outputs, y_1 and y_2 . As indicated by the blue lines, the function of the circuit is to allow either of its inputs to be connected to either of its outputs, under the control of another input, s . A circuit that has n inputs and k outputs, whose sole function is to provide a capability to connect any input to any output, is usually referred to as an $n \times k$ crossbar switch. Crossbars of various sizes can be created, with different numbers of inputs and outputs. When there are two inputs and two outputs, it is called a 2×2 crossbar.

Figure 6.5b shows how the 2×2 crossbar can be implemented using 2-to-1 multiplexers. The multiplexer select inputs are controlled by the signal s . If $s = 0$, the crossbar connects x_1 to y_1 and x_2 to y_2 , while if $s = 1$, the crossbar connects x_1 to y_2 and x_2 to y_1 . Crossbar switches are useful in many practical applications in which it is necessary to be able to connect one set of wires to another set of wires, where the connection pattern changes from time to time.

We introduced field-programmable gate array (FPGA) chips in section 3.6.5. Figure 3.39 depicts a small FPGA that is programmed to implement a particular circuit. The logic blocks in the FPGA have two inputs, and there are four tracks in each routing channel. Each of the programmable switches that connects a logic block input or output to an interconnection wire is shown as an X. A small part of Figure 3.39 is reproduced in Figure 6.6a. For clarity,

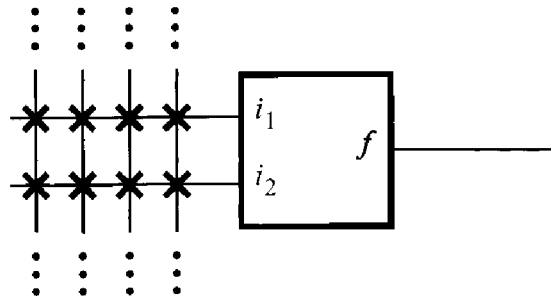


(a) A 2×2 crossbar switch

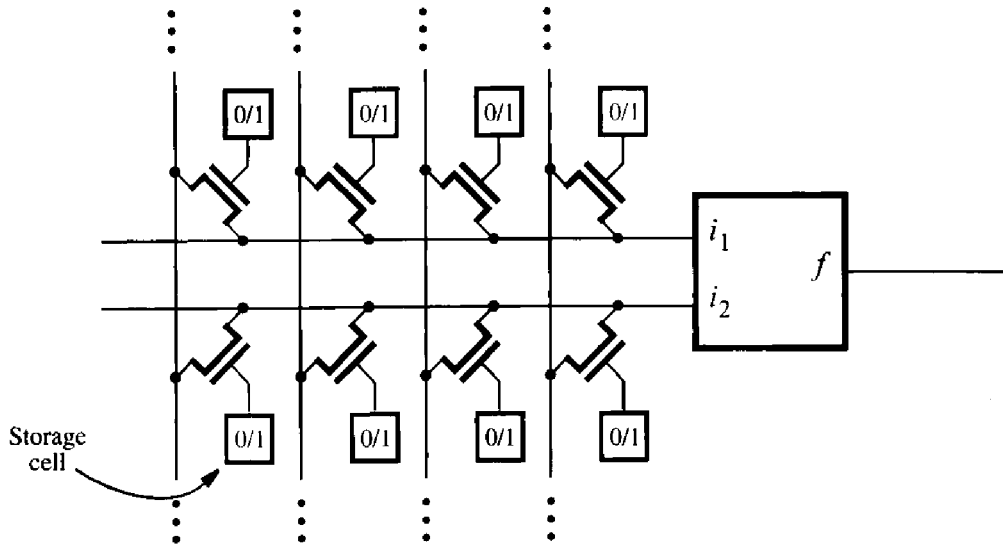


(b) Implementation using multiplexers

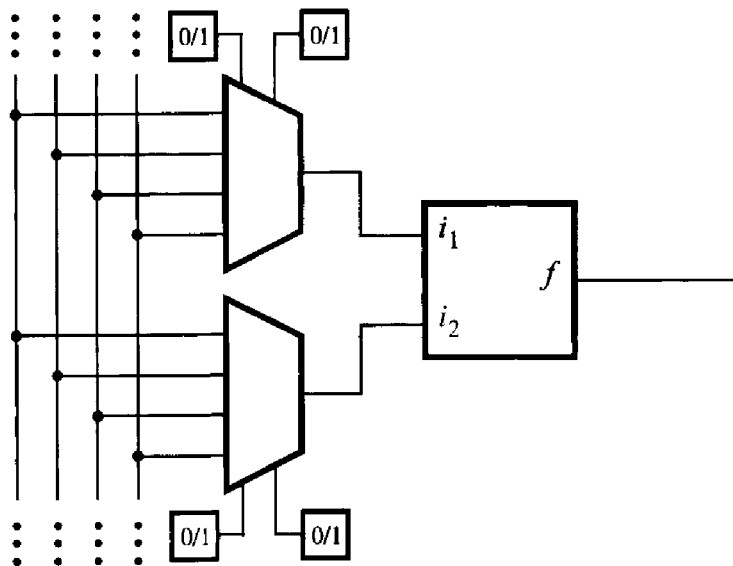
Figure 6.5 A practical application of multiplexers.



(a) Part of the FPGA in Figure 3.39



(b) Implementation using pass transistors



(c) Implementation using multiplexers

Figure 6.6 Implementing programmable switches in an FPGA.

the figure shows only a single logic block and the interconnection wires and switches associated with its input terminals.

One way in which the programmable switches can be implemented is illustrated in Figure 6.6*b*. Each X in part (a) of the figure is realized using an NMOS transistor controlled by a storage cell. This type of programmable switch was also shown in Figure 3.68. We described storage cells briefly in section 3.6.5 and will discuss them in more detail in section 10.1. Each cell stores a single logic value, either 0 or 1, and provides this value as the output of the cell. Each storage cell is built by using several transistors. Thus the eight cells shown in the figure use a significant amount of chip area.

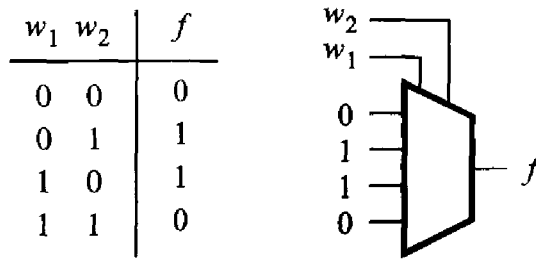
The number of storage cells needed can be reduced by using multiplexers, as shown in Figure 6.6*c*. Each logic block input is fed by a 4-to-1 multiplexer, with the select inputs controlled by storage cells. This approach requires only four storage cells, instead of eight. In commercial FPGAs the multiplexer-based approach is usually adopted.

6.1.1 SYNTHESIS OF LOGIC FUNCTIONS USING MULTIPLEXERS

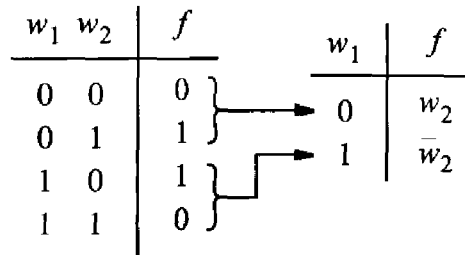
Multiplexers are useful in many practical applications, such as those described above. They can also be used in a more general way to synthesize logic functions. Consider the example in Figure 6.7*a*. The truth table defines the function $f = w_1 \oplus w_2$. This function can be implemented by a 4-to-1 multiplexer in which the values of f in each row of the truth table are connected as constants to the multiplexer data inputs. The multiplexer select inputs are driven by w_1 and w_2 . Thus for each valuation of $w_1 w_2$, the output f is equal to the function value in the corresponding row of the truth table.

The above implementation is straightforward, but it is not very efficient. A better implementation can be derived by manipulating the truth table as indicated in Figure 6.7*b*, which allows f to be implemented by a single 2-to-1 multiplexer. One of the input signals, w_1 in this example, is chosen as the select input of the 2-to-1 multiplexer. The truth table is redrawn to indicate the value of f for each value of w_1 . When $w_1 = 0$, f has the same value as input w_2 , and when $w_1 = 1$, f has the value of \bar{w}_2 . The circuit that implements this truth table is given in Figure 6.7*c*. This procedure can be applied to synthesize a circuit that implements any logic function.

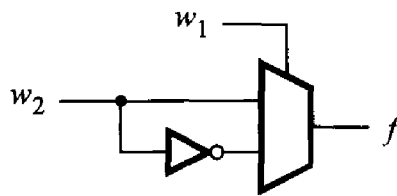
Figure 6.8*a* gives the truth table for the three-input majority function, and it shows how the truth table can be modified to implement the function using a 4-to-1 multiplexer. Any two of the three inputs may be chosen as the multiplexer select inputs. We have chosen w_1 and w_2 for this purpose, resulting in the circuit in Figure 6.8*b*. E



(a) Implementation using a 4-to-1 multiplexer



(b) Modified truth table

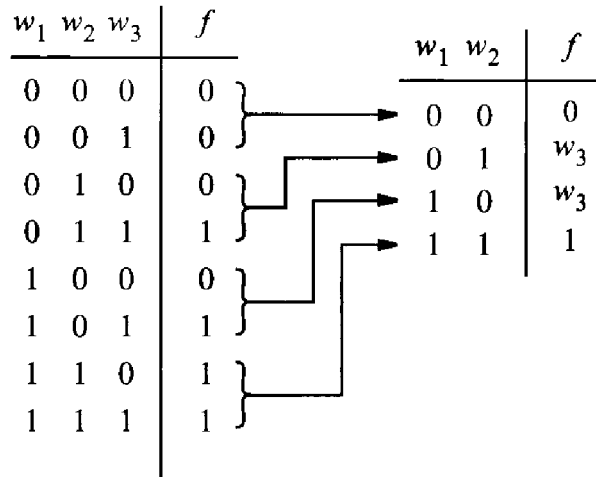


(c) Circuit

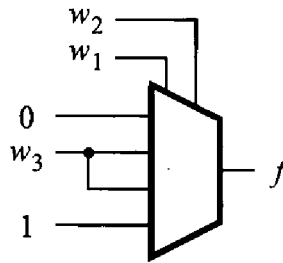
Figure 6.7 Synthesis of a logic function using multiplexers.

4.4 Figure 6.9a indicates how the function $f = w_1 \oplus w_2 \oplus w_3$ can be implemented using 2-to-1 multiplexers. When $w_1 = 0$, f is equal to the XOR of w_2 and w_3 , and when $w_1 = 1$, f is the XNOR of w_2 and w_3 . The left multiplexer in the circuit produces $w_2 \oplus w_3$, using the result from Figure 6.7, and the right multiplexer uses the value of w_1 to select either $w_2 \oplus w_3$ or its complement. Note that we could have derived this circuit directly by writing the function as $f = (w_2 \oplus w_3) \oplus w_1$.

Figure 6.10 gives an implementation of the three-input XOR function using a 4-to-1 multiplexer. Choosing w_1 and w_2 for the select inputs results in the circuit shown.



(a) Modified truth table

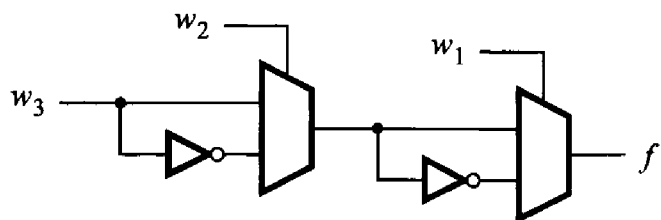


(b) Circuit

Figure 6.8 Implementation of the three-input majority function using a 4-to-1 multiplexer.

w_1	w_2	w_3	f
0	0	0	0
0	0	1	1
0	1	0	1
0	1	1	0
1	0	0	1
1	0	1	0
1	1	0	0
1	1	1	1

(a) Truth table

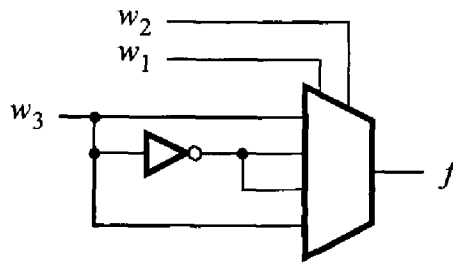


(b) Circuit

Figure 6.9 Three-input XOR implemented with 2-to-1 multiplexers.

w_1	w_2	w_3	f
0	0	0	0
0	0	1	1
0	1	0	1
0	1	1	0
1	0	0	1
1	0	1	0
1	1	0	0
1	1	1	1

(a) Truth table



(b) Circuit

Figure 6.10 Three-input XOR implemented with a 4-to-1 multiplexer.

6.1.2 MULTIPLEXER SYNTHESIS USING SHANNON'S EXPANSION

Figures 6.8 through 6.10 illustrate how truth tables can be interpreted to implement logic functions using multiplexers. In each case the inputs to the multiplexers are the constants 0 and 1, or some variable or its complement. Besides using such simple inputs, it is possible to connect more complex circuits as inputs to a multiplexer, allowing functions to be synthesized using a combination of multiplexers and other logic gates. Suppose that we want to implement the three-input majority function in Figure 6.8 using a 2-to-1 multiplexer in this way. Figure 6.11 shows an intuitive way of realizing this function. The truth table can be modified as shown on the right. If $w_1 = 0$, then $f = w_2w_3$, and if $w_1 = 1$, then $f = w_2 + w_3$. Using w_1 as the select input for a 2-to-1 multiplexer leads to the circuit in Figure 6.11b.

This implementation can be derived using algebraic manipulation as follows. The function in Figure 6.11a is expressed in sum-of-products form as

$$f = \bar{w}_1w_2w_3 + w_1\bar{w}_2w_3 + w_1w_2\bar{w}_3 + w_1w_2w_3$$

It can be manipulated into

$$\begin{aligned} f &= \bar{w}_1(w_2w_3) + w_1(\bar{w}_2w_3 + w_2\bar{w}_3 + w_2w_3) \\ &= \bar{w}_1(w_2w_3) + w_1(w_2 + w_3) \end{aligned}$$

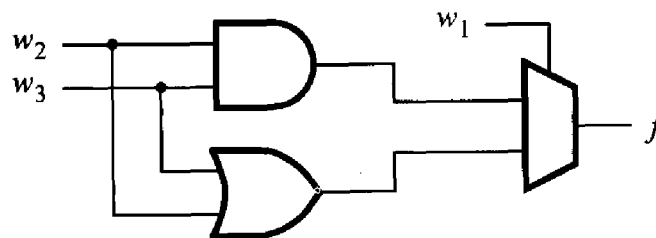
which corresponds to the circuit in Figure 6.11b.

Multiplexer implementations of logic functions require that a given function be decomposed in terms of the variables that are used as the select inputs. This can be accomplished by means of a theorem proposed by Claude Shannon [1].

w_1	w_2	w_3	f
0	0	0	0
0	0	1	0
0	1	0	0
0	1	1	1
1	0	0	0
1	0	1	1
1	1	0	1
1	1	1	1

w_1	f
0	$w_2 w_3$
1	$w_2 + w_3$

(a) Truth table



(b) Circuit

Figure 6.11 The three-input majority function implemented using a 2-to-1 multiplexer.

Shannon's Expansion Theorem

Any Boolean function $f(w_1, \dots, w_n)$ can be written in the form

$$f(w_1, w_2, \dots, w_n) = \bar{w}_1 \cdot f(0, w_2, \dots, w_n) + w_1 \cdot f(1, w_2, \dots, w_n)$$

This expansion can be done in terms of any of the n variables. We will leave the proof of the theorem as an exercise for the reader (see problem 6.9).

To illustrate its use, we can apply the theorem to the three-input majority function, which can be written as

$$f(w_1, w_2, w_3) = w_1 w_2 + w_1 w_3 + w_2 w_3$$

Expanding this function in terms of w_1 gives

$$f = \bar{w}_1(w_2 w_3) + w_1(w_2 + w_3)$$

which is the expression that we derived above.

For the three-input XOR function, we have

$$\begin{aligned} f &= w_1 \oplus w_2 \oplus w_3 \\ &= \bar{w}_1 \cdot (w_2 \oplus w_3) + w_1 \cdot \overline{(w_2 \oplus w_3)} \end{aligned}$$

which gives the circuit in Figure 6.9b.

In Shannon's expansion the term $f(0, w_2, \dots, w_n)$ is called the *cofactor* of f with respect to \bar{w}_1 ; it is denoted in shorthand notation as $f_{\bar{w}_1}$. Similarly, the term $f(1, w_2, \dots, w_n)$ is called the cofactor of f with respect to w_1 , written f_{w_1} . Hence we can write

$$f = \bar{w}_1 f_{\bar{w}_1} + w_1 f_{w_1}$$

In general, if the expansion is done with respect to variable w_i , then f_{w_i} denotes $f(w_1, \dots, w_{i-1}, 1, w_{i+1}, \dots, w_n)$ and

$$f(w_1, \dots, w_n) = \bar{w}_i f_{\bar{w}_i} + w_i f_{w_i}$$

The complexity of the logic expression may vary, depending on which variable, w_i , is used, as illustrated in Example 6.5.

5.5 For the function $f = \bar{w}_1 w_3 + w_2 \bar{w}_3$, decomposition using w_1 gives

$$\begin{aligned} f &= \bar{w}_1 f_{\bar{w}_1} + w_1 f_{w_1} \\ &= \bar{w}_1 (w_3 + w_2) + w_1 (w_2 \bar{w}_3) \end{aligned}$$

Using w_2 instead of w_1 produces

$$\begin{aligned} f &= \bar{w}_2 f_{\bar{w}_2} + w_2 f_{w_2} \\ &= \bar{w}_2 (\bar{w}_1 w_3) + w_2 (\bar{w}_1 + \bar{w}_3) \end{aligned}$$

Finally, using w_3 gives

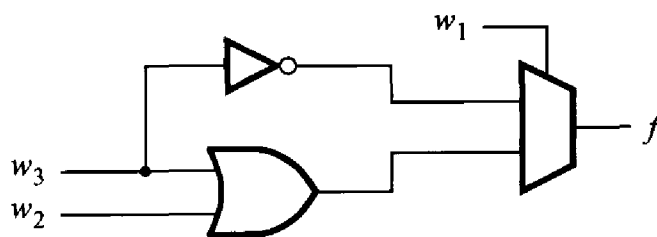
$$\begin{aligned} f &= \bar{w}_3 f_{\bar{w}_3} + w_3 f_{w_3} \\ &= \bar{w}_3 (w_2) + w_3 (\bar{w}_1) \end{aligned}$$

The results generated using w_1 and w_2 have the same cost, but the expression produced using w_3 has a lower cost. In practice, the CAD tools that perform decompositions of this type try a number of alternatives and choose the one that produces the best result.

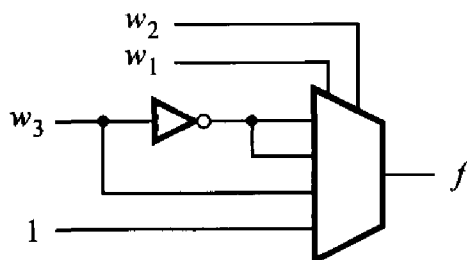
Shannon's expansion can be done in terms of more than one variable. For example, expanding a function in terms of w_1 and w_2 gives

$$\begin{aligned} f(w_1, \dots, w_n) &= \bar{w}_1 \bar{w}_2 \cdot f(0, 0, w_3, \dots, w_n) + \bar{w}_1 w_2 \cdot f(0, 1, w_3, \dots, w_n) \\ &\quad + w_1 \bar{w}_2 \cdot f(1, 0, w_3, \dots, w_n) + w_1 w_2 \cdot f(1, 1, w_3, \dots, w_n) \end{aligned}$$

This expansion gives a form that can be implemented using a 4-to-1 multiplexer. If Shannon's expansion is done in terms of all n variables, then the result is the canonical sum-of-products form, which was defined in section 2.6.1.



(a) Using a 2-to-1 multiplexer



(b) Using a 4-to-1 multiplexer

Figure 6.12 The circuits synthesized in Example 6.6.

Assume that we wish to implement the function

$$f = \bar{w}_1\bar{w}_3 + w_1w_2 + w_1w_3$$

using a 2-to-1 multiplexer and any other necessary gates. Shannon's expansion using w_1 gives

$$\begin{aligned} f &= \bar{w}_1f_{\bar{w}_1} + w_1f_{w_1} \\ &= \bar{w}_1(\bar{w}_3) + w_1(w_2 + w_3) \end{aligned}$$

The corresponding circuit is shown in Figure 6.12a. Assume now that we wish to use a 4-to-1 multiplexer instead. Further decomposition using w_2 gives

$$\begin{aligned} f &= \bar{w}_1\bar{w}_2f_{\bar{w}_1\bar{w}_2} + \bar{w}_1w_2f_{\bar{w}_1w_2} + w_1\bar{w}_2f_{w_1\bar{w}_2} + w_1w_2f_{w_1w_2} \\ &= \bar{w}_1\bar{w}_2(\bar{w}_3) + \bar{w}_1w_2(\bar{w}_3) + w_1\bar{w}_2(w_3) + w_1w_2(1) \end{aligned}$$

The circuit is shown in Figure 6.12b.

Consider the three-input majority function

$$f = w_1w_2 + w_1w_3 + w_2w_3$$

Ex

Ex

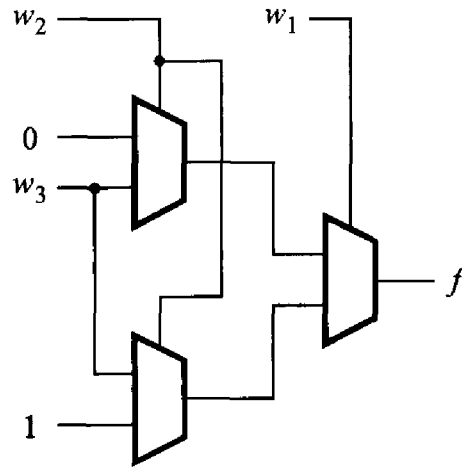


Figure 6.13 The circuit synthesized in Example 6.7.

We wish to implement this function using only 2-to-1 multiplexers. Shannon’s expansion using w_1 yields

$$\begin{aligned} f &= \bar{w}_1(w_2w_3) + w_1(w_2 + w_3 + w_2w_3) \\ &= \bar{w}_1(w_2w_3) + w_1(w_2 + w_3) \end{aligned}$$

Let $g = w_2w_3$ and $h = w_2 + w_3$. Expansion of both g and h using w_2 gives

$$\begin{aligned} g &= \bar{w}_2(0) + w_2(w_3) \\ h &= \bar{w}_2(w_3) + w_2(1) \end{aligned}$$

The corresponding circuit is shown in Figure 6.13. It is equivalent to the 4-to-1 multiplexer circuit derived using a truth table in Figure 6.8.

- 8** In section 3.6.5 we said that most FPGAs use lookup tables for their logic blocks. Assume that an FPGA exists in which each logic block is a three-input lookup table (3-LUT). Because it stores a truth table, a 3-LUT can realize any logic function of three variables. Using Shannon’s expansion, any four-variable function can be realized with at most three 3-LUTs. Consider the function

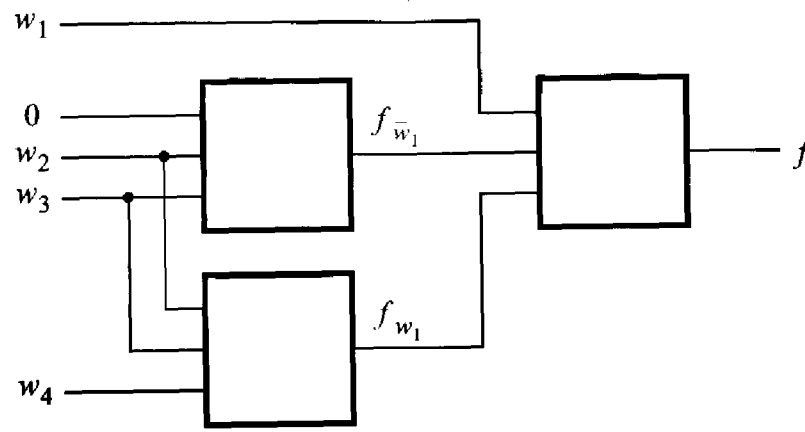
$$f = \bar{w}_2w_3 + \bar{w}_1w_2\bar{w}_3 + w_2\bar{w}_3w_4 + w_1\bar{w}_2\bar{w}_4$$

Expansion in terms of w_1 produces

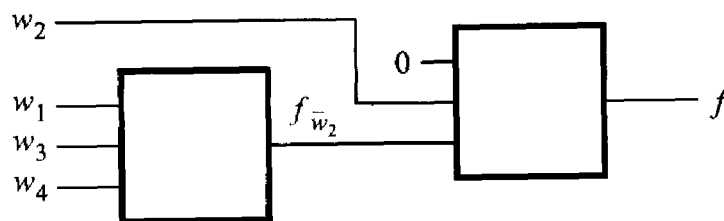
$$\begin{aligned} f &= \bar{w}_1f_{\bar{w}_1} + w_1f_{w_1} \\ &= \bar{w}_1(\bar{w}_2w_3 + w_2\bar{w}_3 + w_2\bar{w}_3w_4) + w_1(\bar{w}_2w_3 + w_2\bar{w}_3w_4 + \bar{w}_2\bar{w}_4) \\ &= \bar{w}_1(\bar{w}_2w_3 + w_2\bar{w}_3) + w_1(\bar{w}_2w_3 + w_2\bar{w}_3w_4 + \bar{w}_2\bar{w}_4) \end{aligned}$$

A circuit with three 3-LUTs that implements this expression is shown in Figure 6.14a. Decomposition of the function using w_2 , instead of w_1 , gives

$$\begin{aligned} f &= \bar{w}_2f_{\bar{w}_2} + w_2f_{w_2} \\ &= \bar{w}_2(w_3 + w_1\bar{w}_4) + w_2(\bar{w}_1\bar{w}_3 + \bar{w}_3w_4) \end{aligned}$$



(a) Using three 3-LUTs



(b) Using two 3-LUTs

Figure 6.14 Circuits synthesized in Example 6.8.

Observe that $\bar{f}_{\bar{w}_2} = f_{w_2}$; hence only two 3-LUTs are needed, as illustrated in Figure 6.14*b*. The LUT on the right implements the two-variable function $\bar{w}_2 f_{\bar{w}_2} + w_2 f_{w_2}$.

Since it is possible to implement any logic function using multiplexers, general-purpose chips exist that contain multiplexers as their basic logic resources. Both Actel Corporation [2] and QuickLogic Corporation [3] offer FPGAs in which the logic block comprises an arrangement of multiplexers. Texas Instruments offers gate array chips that have multiplexer-based logic blocks [4].

6.2 DECODERS

Decoder circuits are used to decode encoded information. A binary decoder, depicted in Figure 6.15, is a logic circuit with n inputs and 2^n outputs. Only one output is asserted at a time, and each output corresponds to one valuation of the inputs. The decoder also has an enable input, En , that is used to disable the outputs; if $En = 0$, then none of the decoder outputs is asserted. If $En = 1$, the valuation of $w_{n-1} \cdots w_1 w_0$ determines which of the outputs is asserted. An n -bit binary code in which exactly one of the bits is set to 1 at a

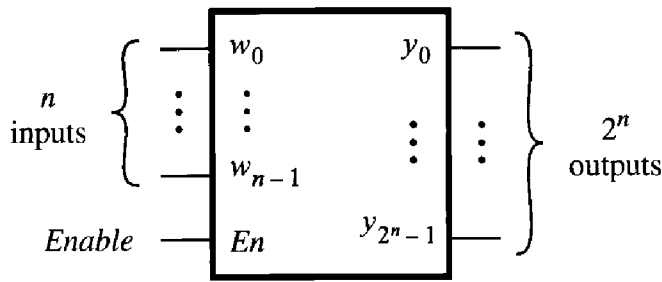
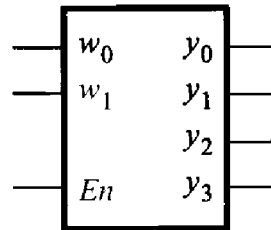


Figure 6.15 An n -to- 2^n binary decoder.

time is referred to as *one-hot encoded*, meaning that the single bit that is set to 1 is deemed to be “hot.” The outputs of a binary decoder are one-hot encoded.

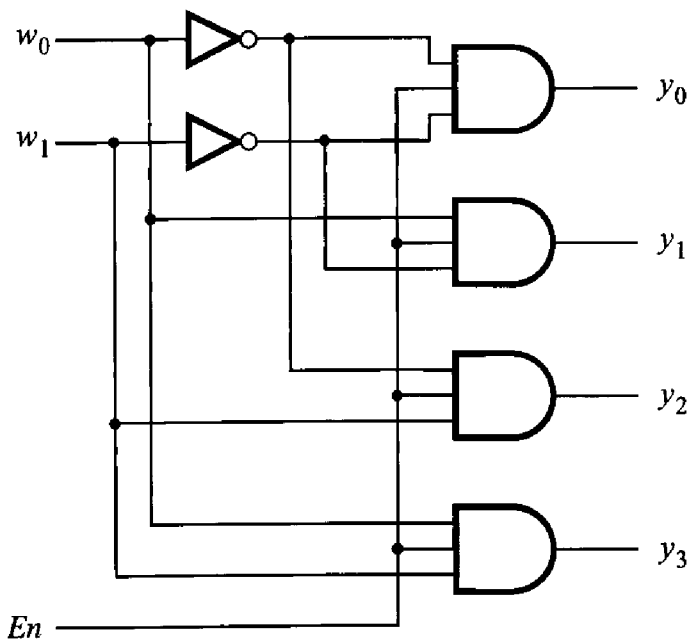
A 2-to-4 decoder is given in Figure 6.16. The two data inputs are w_1 and w_0 . They represent a two-bit number that causes the decoder to assert one of the outputs y_0, \dots, y_3 . Although a decoder can be designed to have either active-high or active-low outputs, in

En	w_1	w_0	y_0	y_1	y_2	y_3
1	0	0	1	0	0	0
1	0	1	0	1	0	0
1	1	0	0	0	1	0
1	1	1	0	0	0	1
0	x	x	0	0	0	0



(a) Truth table

(b) Graphical symbol



(c) Logic circuit

Figure 6.16 A 2-to-4 decoder.

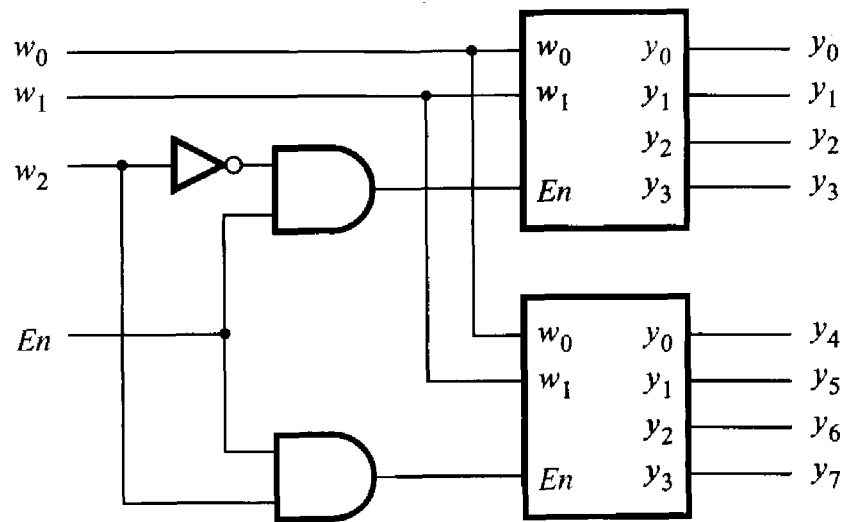


Figure 6.17 A 3-to-8 decoder using two 2-to-4 decoders.

Figure 6.16 active-high outputs are assumed. Setting the inputs w_1w_0 to 00, 01, 10, or 11 causes the output y_0 , y_1 , y_2 , or y_3 to be set to 1, respectively. A graphical symbol for the decoder is given in part (b) of the figure, and a logic circuit is shown in part (c).

Larger decoders can be built using the sum-of-products structure in Figure 6.16c, or else they can be constructed from smaller decoders. Figure 6.17 shows how a 3-to-8 decoder is built with two 2-to-4 decoders. The w_2 input drives the enable inputs of the two decoders. The top decoder is enabled if $w_2 = 0$, and the bottom decoder is enabled if $w_2 = 1$. This concept can be applied for decoders of any size. Figure 6.18 shows how five 2-to-4 decoders can be used to construct a 4-to-16 decoder. Because of its treelike structure, this type of circuit is often referred to as a *decoder tree*.

Ex Decoders are useful for many practical purposes. In Figure 6.2c we showed the sum-of-products implementation of the 4-to-1 multiplexer, which requires AND gates to distinguish the four different valuations of the select inputs s_1 and s_0 . Since a decoder evaluates the values on its inputs, it can be used to build a multiplexer as illustrated in Figure 6.19. The enable input of the decoder is not needed in this case, and it is set to 1. The four outputs of the decoder represent the four valuations of the select inputs.

Exc In Figure 3.59 we showed how a 2-to-1 multiplexer can be constructed using two tri-state buffers. This concept can be applied to any size of multiplexer, with the addition of a decoder. An example is shown in Figure 6.20. The decoder enables one of the tri-state buffers for each valuation of the select lines, and that tri-state buffer drives the output, f , with the selected data input. We have now seen that multiplexers can be implemented in various ways. The choice of whether to employ the sum-of-products form, transmission gates, or tri-state buffers depends on the resources available in the chip being used. For instance, most FPGAs that use lookup tables for their logic blocks do not contain tri-state

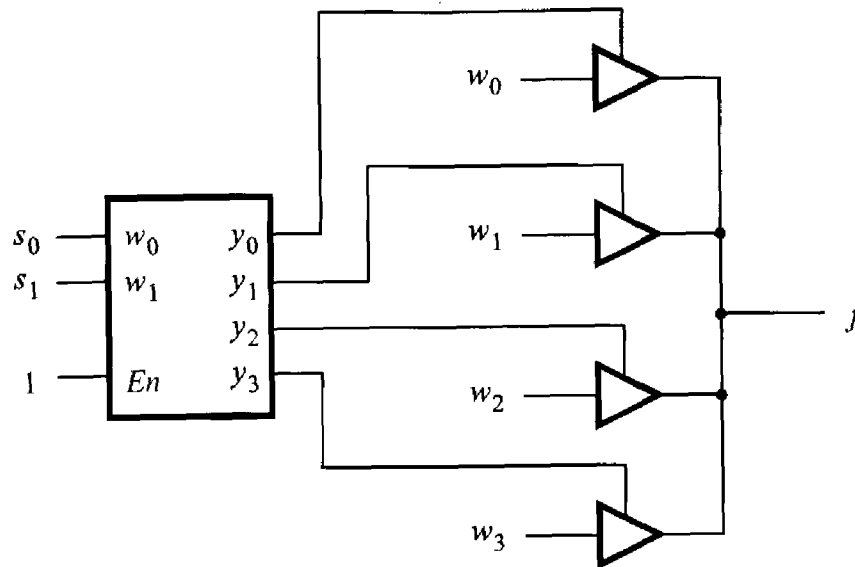


Figure 6.20 A 4-to-1 multiplexer built using a decoder and tri-state buffers.

buffers. Hence multiplexers must be implemented in the sum-of-products form using the lookup tables (see Example 6.30).

6.2.1 DEMULTIPLEXERS

We showed in section 6.1 that a multiplexer has one output, n data inputs, and $\lceil \log_2 n \rceil$ select inputs. The purpose of the multiplexer circuit is to *multiplex* the n data inputs onto the single data output under control of the select inputs. A circuit that performs the opposite function, namely, placing the value of a single data input onto multiple data outputs, is called a *demultiplexer*. The demultiplexer can be implemented using a decoder circuit. For example, the 2-to-4 decoder in Figure 6.16 can be used as a 1-to-4 demultiplexer. In this case the En input serves as the data input for the demultiplexer, and the y_0 to y_3 outputs are the data outputs. The valuation of $w_1 w_0$ determines which of the outputs is set to the value of En . To see how the circuit works, consider the truth table in Figure 6.16a. When $En = 0$, all the outputs are set to 0, including the one selected by the valuation of $w_1 w_0$. When $En = 1$, the valuation of $w_1 w_0$ sets the appropriate output to 1.

In general, an n -to- 2^n decoder circuit can be used as a 1-to- n demultiplexer. However, in practice decoder circuits are used much more often as decoders rather than as demultiplexers. In many applications the decoder's En input is not actually needed; hence it can be omitted. In this case the decoder always asserts one of its data outputs, y_0, \dots, y_{2^n-1} , according to the valuation of the data inputs, $w_{n-1} \cdots w_0$. Example 6.11 uses a decoder that does not have the En input.

6.11 One of the most important applications of decoders is in memory blocks, which are used to store information. Such memory blocks are included in digital systems, such as computers, where there is a need to store large amounts of information electronically. One type of memory block is called a *read-only memory* (ROM). A ROM consists of a collection of storage cells, where each cell permanently stores a single logic value, either 0 or 1. Figure 6.21 shows an example of a ROM block. The storage cells are arranged in 2^m rows with n cells per row. Thus each row stores n bits of information. The location of each row in the ROM is identified by its *address*. In the figure the row at the top of the ROM has address 0, and the row at the bottom has address $2^m - 1$. The information stored in the rows can be accessed by asserting the select lines, Sel_0 to Sel_{2^m-1} . As shown in the figure, a decoder with m inputs and 2^m outputs is used to generate the signals on the select lines. Since the inputs to the decoder choose the particular address (row) selected, they are called the *address* lines. The information stored in the row appears on the data outputs of the ROM, d_{n-1}, \dots, d_0 , which are called the *data* lines. Figure 6.21 shows that each data line has an associated tri-state buffer that is enabled by the ROM input named *Read*. To access, or *read*, data from the ROM, the address of the desired row is placed on the address lines and *Read* is set to 1.

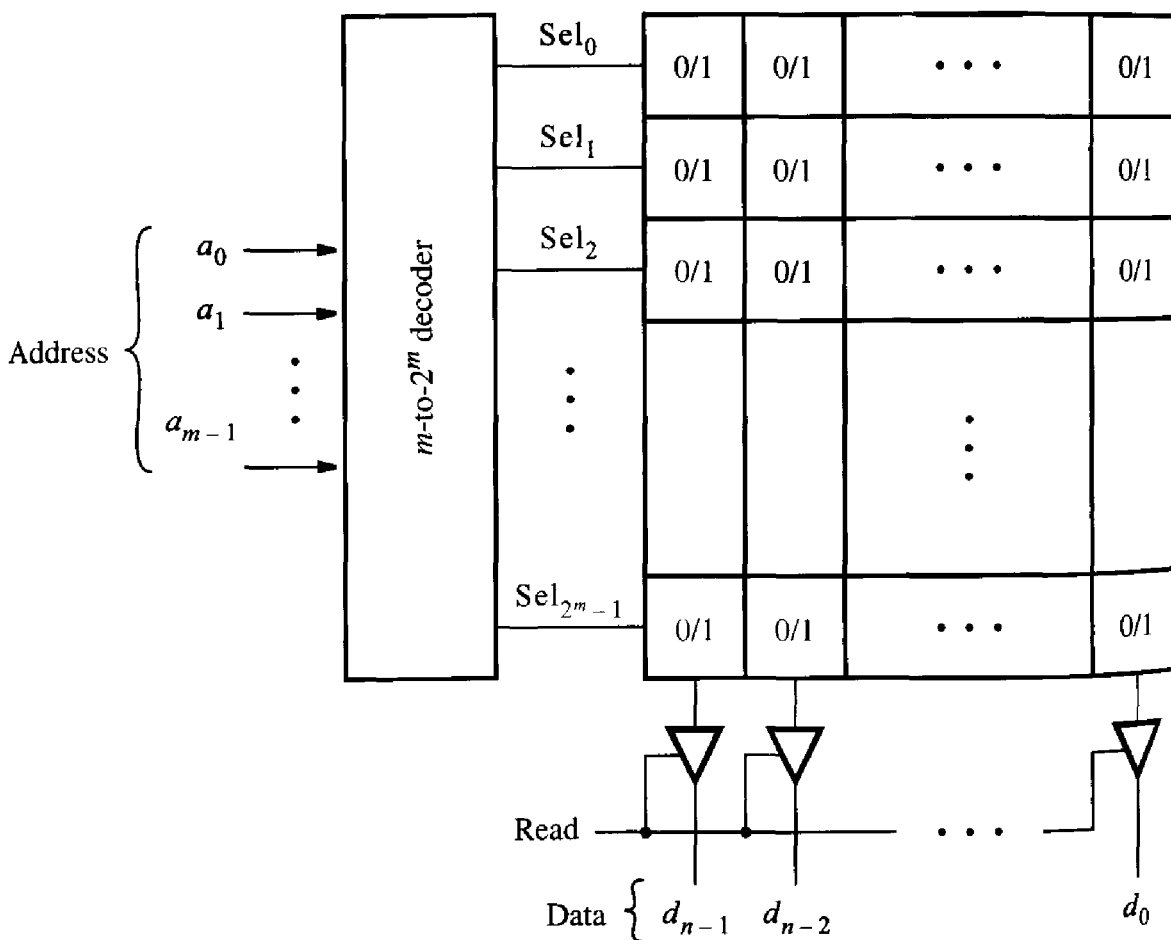


Figure 6.21 A $2^m \times n$ read-only memory (ROM) block.

6.11 One of the most important applications of decoders is in memory blocks, which are used to store information. Such memory blocks are included in digital systems, such as computers, where there is a need to store large amounts of information electronically. One type of memory block is called a *read-only memory* (ROM). A ROM consists of a collection of storage cells, where each cell permanently stores a single logic value, either 0 or 1. Figure 6.21 shows an example of a ROM block. The storage cells are arranged in 2^m rows with n cells per row. Thus each row stores n bits of information. The location of each row in the ROM is identified by its *address*. In the figure the row at the top of the ROM has address 0, and the row at the bottom has address $2^m - 1$. The information stored in the rows can be accessed by asserting the select lines, Sel_0 to Sel_{2^m-1} . As shown in the figure, a decoder with m inputs and 2^m outputs is used to generate the signals on the select lines. Since the inputs to the decoder choose the particular address (row) selected, they are called the *address lines*. The information stored in the row appears on the data outputs of the ROM, d_{n-1}, \dots, d_0 , which are called the *data lines*. Figure 6.21 shows that each data line has an associated tri-state buffer that is enabled by the ROM input named *Read*. To access, or *read*, data from the ROM, the address of the desired row is placed on the address lines and *Read* is set to 1.

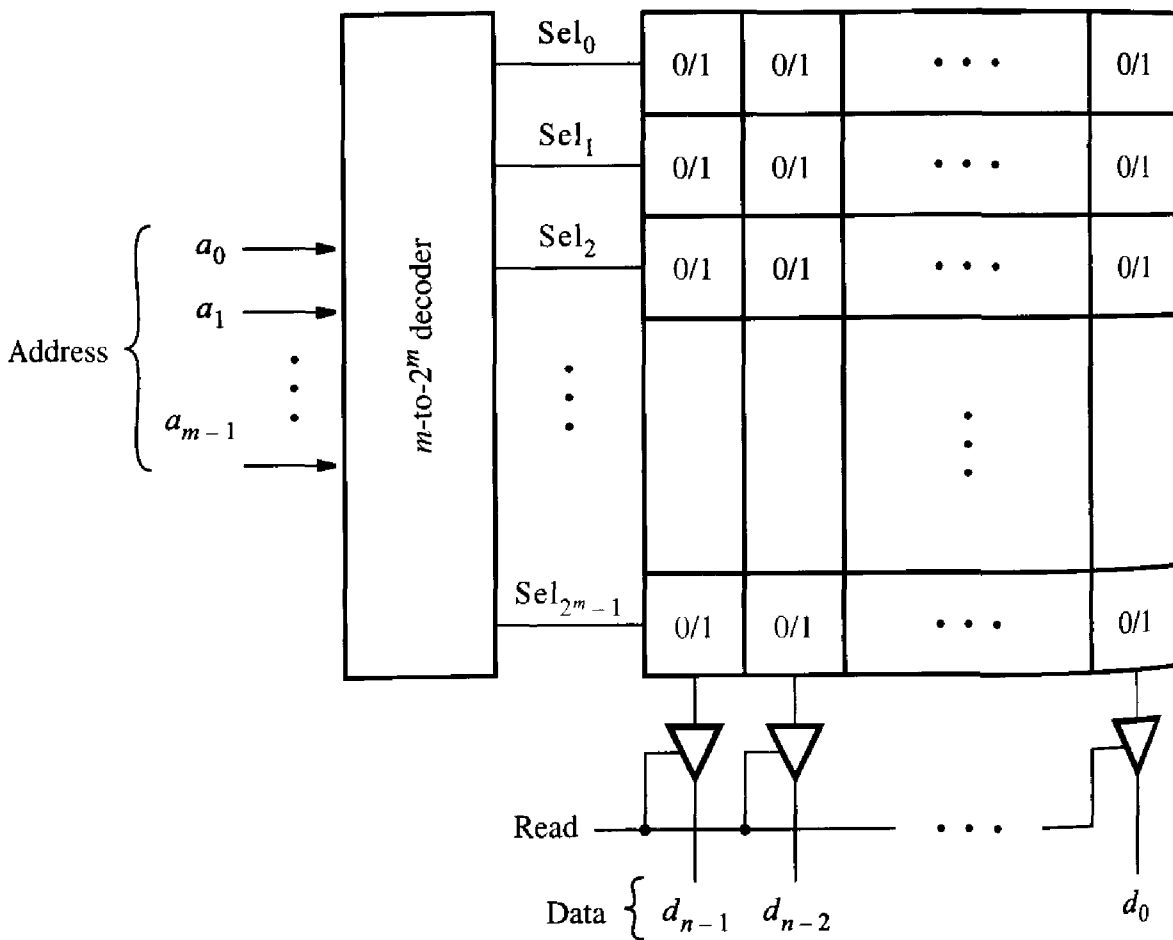


Figure 6.21 A $2^m \times n$ read-only memory (ROM) block.

Many different types of memory blocks exist. In a ROM the stored information can be read out of the storage cells, but it cannot be changed (see problem 6.32). Another type of ROM allows information to be both read out of the storage cells and stored, or *written*, into them. Reading its contents is the normal operation, whereas writing requires a special procedure. Such a memory block is called a programmable ROM (PROM). The storage cells in a PROM are usually implemented using EEPROM transistors. We discussed EEPROM transistors in section 3.10 to show how they are used in PLDs. Other types of memory blocks are discussed in section 10.1.

6.3 ENCODERS

An encoder performs the opposite function of a decoder. It encodes given information into a more compact form.

6.3.1 BINARY ENCODERS

A *binary encoder* encodes information from 2^n inputs into an n -bit code, as indicated in Figure 6.22. Exactly one of the input signals should have a value of 1, and the outputs present the binary number that identifies which input is equal to 1. The truth table for a 4-to-2 encoder is provided in Figure 6.23a. Observe that the output y_0 is 1 when either input w_1 or w_3 is 1, and output y_1 is 1 when input w_2 or w_3 is 1. Hence these outputs can be generated by the circuit in Figure 6.23b. Note that we assume that the inputs are one-hot encoded. All input patterns that have multiple inputs set to 1 are not shown in the truth table, and they are treated as don't-care conditions.

Encoders are used to reduce the number of bits needed to represent given information. A practical use of encoders is for transmitting information in a digital system. Encoding the information allows the transmission link to be built using fewer wires. Encoding is also useful if information is to be stored for later use because fewer bits need to be stored.

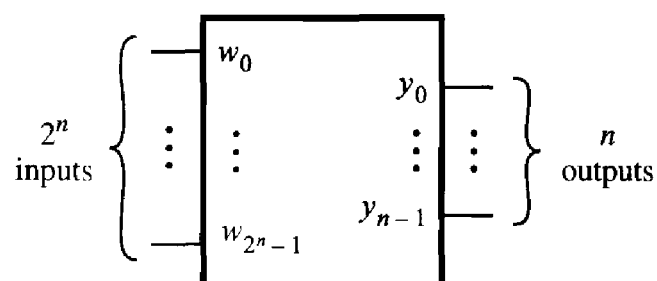
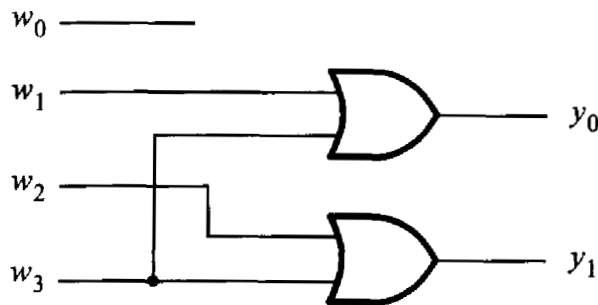


Figure 6.22 A 2^n -to- n binary encoder.

w_3	w_2	w_1	w_0	y_1	y_0
0	0	0	1	0	0
0	0	1	0	0	1
0	1	0	0	1	0
1	0	0	0	1	1

(a) Truth table



(b) Circuit

Figure 6.23 A 4-to-2 binary encoder.

6.3.2 PRIORITY ENCODERS

Another useful class of encoders is based on the priority of input signals. In a *priority encoder* each input has a priority level associated with it. The encoder outputs indicate the active input that has the highest priority. When an input with a high priority is asserted, the other inputs with lower priority are ignored. The truth table for a 4-to-2 priority encoder is shown in Figure 6.24. It assumes that w_0 has the lowest priority and w_3 the highest. The outputs y_1 and y_0 represent the binary number that identifies the highest priority input set to 1. Since it is possible that none of the inputs is equal to 1, an output, z , is provided to indicate this condition. It is set to 1 when at least one of the inputs is equal to 1. It is set to

w_3	w_2	w_1	w_0	y_1	y_0	z
0	0	0	0	d	d	0
0	0	0	1	0	0	1
0	0	1	x	0	1	1
0	1	x	x	1	0	1
1	x	x	x	1	1	1

Figure 6.24 Truth table for a 4-to-2 priority encoder.

0 when all inputs are equal to 0. The outputs y_1 and y_0 are not meaningful in this case, and hence the first row of the truth table can be treated as a don't-care condition for y_1 and y_0 .

The behavior of the priority encoder is most easily understood by first considering the last row in the truth table. It specifies that if input w_3 is 1, then the outputs are set to $y_1y_0 = 11$. Because w_3 has the highest priority level, the values of inputs w_2 , w_1 , and w_0 do not matter. To reflect the fact that their values are irrelevant, w_2 , w_1 , and w_0 are denoted by the symbol x in the truth table. The second-last row in the truth table stipulates that if $w_2 = 1$, then the outputs are set to $y_1y_0 = 10$, but only if $w_3 = 0$. Similarly, input w_1 causes the outputs to be set to $y_1y_0 = 01$ only if both w_3 and w_2 are 0. Input w_0 produces the outputs $y_1y_0 = 00$ only if w_0 is the only input that is asserted.

A logic circuit that implements the truth table can be synthesized by using the techniques developed in Chapter 4. However, a more convenient way to derive the circuit is to define a set of intermediate signals, i_0, \dots, i_3 , based on the observations above. Each signal, i_k , is equal to 1 only if the input with the same index, w_k , represents the highest-priority input that is set to 1. The logic expressions for i_0, \dots, i_3 are

$$i_0 = \bar{w}_3\bar{w}_2\bar{w}_1w_0$$

$$i_1 = \bar{w}_3\bar{w}_2w_1$$

$$i_2 = \bar{w}_3w_2$$

$$i_3 = w_3$$

Using the intermediate signals, the rest of the circuit for the priority encoder has the same structure as the binary encoder in Figure 6.23, namely

$$y_0 = i_1 + i_3$$

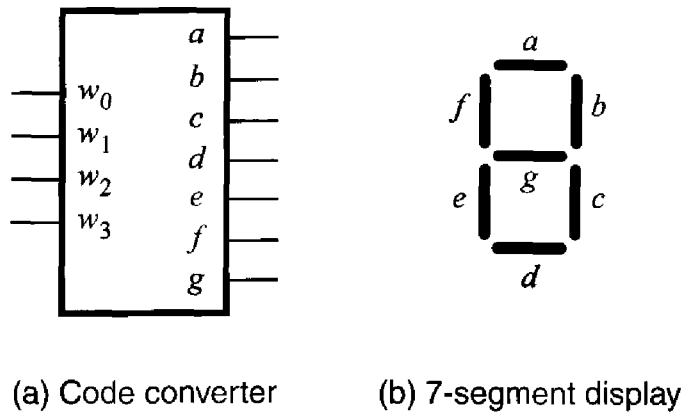
$$y_1 = i_2 + i_3$$

The output z is given by

$$z = i_0 + i_1 + i_2 + i_3$$

6.4 CODE CONVERTERS

The purpose of the decoder and encoder circuits is to convert from one type of input encoding to a different output encoding. For example, a 3-to-8 binary decoder converts from a binary number on the input to a one-hot encoding at the output. An 8-to-3 binary encoder performs the opposite conversion. There are many other possible types of code converters. One common example is a BCD-to-7-segment decoder, which converts one binary-coded decimal (BCD) digit into information suitable for driving a digit-oriented display. As illustrated in Figure 6.25a, the circuit converts the BCD digit into seven signals that are used to drive the segments in the display. Each segment is a small light-emitting diode (LED), which glows when driven by an electrical signal. The segments are labeled from a to g in the figure. The truth table for the BCD-to-7-segment decoder is given in Figure 6.25c. For each valuation of the inputs w_3, \dots, w_0 , the seven outputs are set to



(a) Code converter (b) 7-segment display

w_3	w_2	w_1	w_0	a	b	c	d	e	f	g
0	0	0	0	1	1	1	1	1	1	0
0	0	0	1	0	1	1	0	0	0	0
0	0	1	0	1	1	0	1	1	0	1
0	0	1	1	1	1	1	1	0	0	1
0	1	0	0	0	1	1	0	0	1	1
0	1	0	1	1	0	1	1	0	1	1
0	1	1	0	1	0	1	1	1	1	1
0	1	1	1	1	1	1	0	0	0	0
1	0	0	0	1	1	1	1	1	1	1
1	0	0	1	1	1	1	1	0	1	1

(c) Truth table

Figure 6.25 A BCD-to-7-segment display code converter.

display the appropriate BCD digit. Note that the last 6 rows of a complete 16-row truth table are not shown. They represent don't-care conditions because they are not legal BCD codes and will never occur in a circuit that deals with BCD data. A circuit that implements the truth table can be derived using the synthesis techniques discussed in Chapter 4. Finally, we should note that although the word *decoder* is traditionally used for this circuit, a more appropriate term is *code converter*. The term *decoder* is more appropriate for circuits that produce one-hot encoded outputs.

6.5 ARITHMETIC COMPARISON CIRCUITS

Chapter 5 presented arithmetic circuits that perform addition, subtraction, and multiplication of binary numbers. Another useful type of arithmetic circuit compares the relative sizes of two binary numbers. Such a circuit is called a *comparator*. This section considers the

```

LIBRARY ieee ;
USE ieee.std_logic_1164.all ;

ENTITY mux2to1 IS
    PORT ( w0, w1, s : IN  STD_LOGIC ;
          f          : OUT STD_LOGIC ) ;
END mux2to1 ;

ARCHITECTURE Behavior OF mux2to1 IS
BEGIN
    WITH s SELECT
        f <=  w0 WHEN '0',
              w1 WHEN OTHERS ;
END Behavior ;

```

Figure 6.27 VHDL code for a 2-to-1 multiplexer.

Since it has the `STD_LOGIC` type, discussed in section 4.12, s can take the values 0, 1, Z, –, and others. The keyword `OTHERS` provides a convenient way of accounting for all logic values that are not explicitly listed in a `WHEN` clause.

A 4-to-1 multiplexer is described by the entity named *mux4to1*, shown in Figure 6.28. The two select inputs, which are called s_1 and s_0 in Figure 6.2, are represented by the two-bit `STD_LOGIC_VECTOR` signal s . The selected signal assignment sets f to the value of one of the inputs w_0, \dots, w_3 , depending on the valuation of s . Compiling the code results in the circuit shown in Figure 6.2c. At the end of Figure 6.28, the *mux4to1* entity is defined as a component in the package named *mux4to1_package*. We showed in section 5.5.2 that the component declaration allows the entity to be used as a subcircuit in other VHDL code. **Exo**

Figure 6.4 showed how a 16-to-1 multiplexer is built using five 4-to-1 multiplexers. Figure 6.29 presents VHDL code for this circuit, using the *mux4to1* component. The lines of code are numbered so that we can easily refer to them. The *mux4to1_package* is included in the code, because it provides the component declaration for *mux4to1*. **Exo**

The data inputs to the *mux16to1* entity are the 16-bit signal named w , and the select inputs are the four-bit signal named s . In the VHDL code signal names are needed for the outputs of the four 4-to-1 multiplexers on the left of Figure 6.4. Line 11 defines a four-bit signal named m for this purpose, and lines 13 to 16 instantiate the four multiplexers. For instance, line 13 corresponds to the multiplexer at the top left of Figure 6.4. Its first four ports, which correspond to w_0, \dots, w_3 in Figure 6.28, are driven by the signals $w(0), \dots, w(3)$.

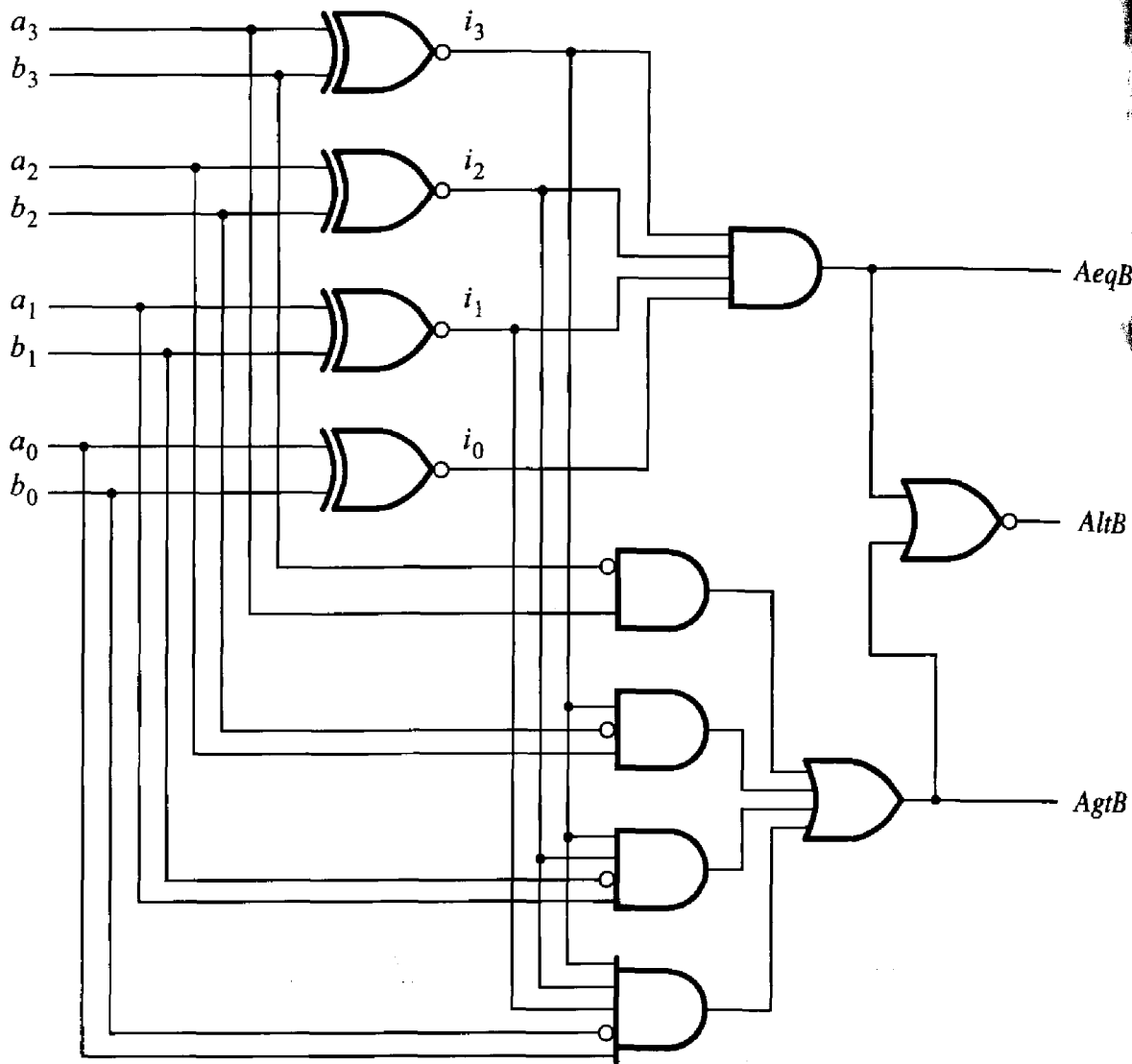


Figure 6.26 A four-bit comparator circuit.

assignment statements, which are called selected signal assignments, conditional signal assignments, generate statements, if-then-else statements, and case statements.

6.6.2 SELECTED SIGNAL ASSIGNMENT

A selected signal assignment allows a signal to be assigned one of several values, based on a selection criterion. Figure 6.27 shows how it can be used to describe a 2-to-1 multiplexer. The entity, named *mux2to1*, has the inputs w_0 , w_1 , and s , and the output f . The selected signal assignment begins with the keyword **WITH**, which specifies that s is to be used for the selection criterion. The two **WHEN** clauses state that f is assigned the value of w_0 when $s = 0$; otherwise, f is assigned the value of w_1 . The **WHEN** clause that selects w_1 uses the word **OTHERS**, instead of the value 1. This is required because the VHDL syntax specifies that a **WHEN** clause must be included for every possible value of the selection signal s .

```

LIBRARY ieee ;
USE ieee.std_logic_1164.all ;

ENTITY mux2to1 IS
    PORT ( w0, w1, s : IN  STD_LOGIC ;
          f          : OUT STD_LOGIC ) ;
END mux2to1 ;

ARCHITECTURE Behavior OF mux2to1 IS
BEGIN
    WITH s SELECT
        f <= w0 WHEN '0',
            w1 WHEN OTHERS ;
END Behavior ;

```

Figure 6.27 VHDL code for a 2-to-1 multiplexer.

Since it has the `STD_LOGIC` type, discussed in section 4.12, s can take the values 0, 1, Z, –, and others. The keyword `OTHERS` provides a convenient way of accounting for all logic values that are not explicitly listed in a `WHEN` clause.

A 4-to-1 multiplexer is described by the entity named *mux4to1*, shown in Figure 6.28. The two select inputs, which are called s_1 and s_0 in Figure 6.2, are represented by the two-bit `STD_LOGIC_VECTOR` signal s . The selected signal assignment sets f to the value of one of the inputs w_0, \dots, w_3 , depending on the valuation of s . Compiling the code results in the circuit shown in Figure 6.2c. At the end of Figure 6.28, the *mux4to1* entity is defined as a component in the package named *mux4to1_package*. We showed in section 5.5.2 that the component declaration allows the entity to be used as a subcircuit in other VHDL code. **Exc**

Figure 6.4 showed how a 16-to-1 multiplexer is built using five 4-to-1 multiplexers. Figure 6.29 presents VHDL code for this circuit, using the *mux4to1* component. The lines of code are numbered so that we can easily refer to them. The *mux4to1_package* is included in the code, because it provides the component declaration for *mux4to1*. **Exc**

The data inputs to the *mux16to1* entity are the 16-bit signal named w , and the select inputs are the four-bit signal named s . In the VHDL code signal names are needed for the outputs of the four 4-to-1 multiplexers on the left of Figure 6.4. Line 11 defines a four-bit signal named m for this purpose, and lines 13 to 16 instantiate the four multiplexers. For instance, line 13 corresponds to the multiplexer at the top left of Figure 6.4. Its first four ports, which correspond to w_0, \dots, w_3 in Figure 6.28, are driven by the signals $w(0), \dots, w(3)$.

```

LIBRARY ieee ;
USE ieee.std_logic_1164.all ;

ENTITY mux4to1 IS
    PORT ( w0, w1, w2, w3 : IN    STD_LOGIC ;
          s                : IN    STD_LOGIC_VECTOR(1 DOWNTO 0);
          f                : OUT   STD_LOGIC );
END mux4to1 ;

ARCHITECTURE Behavior OF mux4to1 IS
BEGIN
    WITH s SELECT
        f <= w0 WHEN "00",
            w1 WHEN "01",
            w2 WHEN "10",
            w3 WHEN OTHERS ;
END Behavior ;

LIBRARY ieee ;
USE ieee.std_logic_1164.all ;
PACKAGE mux4to1_package IS
    COMPONENT mux4to1
        PORT ( w0, w1, w2, w3 : IN    STD_LOGIC ;
              s                : IN    STD_LOGIC_VECTOR(1 DOWNTO 0);
              f                : OUT   STD_LOGIC );
    END COMPONENT ;
END mux4to1_package ;

```

Figure 6.28 VHDL code for a 4-to-1 multiplexer.

The syntax $s(1 \text{ DOWNTO } 0)$ is used to attach the signals $s(1)$ and $s(0)$ to the two-bit s port of the *mux4to1* component. The $m(0)$ signal is connected to the multiplexer's output port.

Line 17 instantiates the multiplexer on the right of Figure 6.4. The signals m_0, \dots, m_3 are connected to its data inputs, and bits $s(3)$ and $s(2)$, which are specified by the syntax $s(3 \text{ DOWNTO } 2)$, are attached to the select inputs. The output port generates the *mux16to1* output f . Compiling the code results in the multiplexer function

$$f = \bar{s}_3\bar{s}_2\bar{s}_1\bar{s}_0w_0 + \bar{s}_3\bar{s}_2\bar{s}_1s_0w_1 + \bar{s}_3\bar{s}_2s_1\bar{s}_0w_2 + \dots + s_3s_2s_1\bar{s}_0w_{14} + s_3s_2s_1s_0w_{15}$$

6.14 The selected signal assignments can also be used to describe other types of circuits. Figure 6.30 shows how a selected signal assignment can be used to describe the truth table for a 2-to-4 binary decoder. The entity is called *dec2to4*. The data inputs are the two-bit signal

```

1  LIBRARY ieee ;
2  USE ieee.std_logic_1164.all ;
3  LIBRARY work ;
4  USE work.mux4to1_package.all ;

5  ENTITY mux16to1 IS
6      PORT ( w : IN  STD_LOGIC_VECTOR(0 TO 15) ;
7            s : IN  STD_LOGIC_VECTOR(3 DOWNT0 0) ;
8            f : OUT STD_LOGIC ) ;
9  END mux16to1 ;

10 ARCHITECTURE Structure OF mux16to1 IS
11     SIGNAL m : STD_LOGIC_VECTOR(0 TO 3) ;
12 BEGIN
13     Mux1: mux4to1 PORT MAP
14         ( w(0), w(1), w(2), w(3), s(1 DOWNT0 0), m(0) ) ;
15     Mux2: mux4to1 PORT MAP
16         ( w(4), w(5), w(6), w(7), s(1 DOWNT0 0), m(1) ) ;
17     Mux3: mux4to1 PORT MAP
18         ( w(8), w(9), w(10), w(11), s(1 DOWNT0 0), m(2) ) ;
19     Mux4: mux4to1 PORT MAP
20         ( w(12), w(13), w(14), w(15), s(1 DOWNT0 0), m(3) ) ;
21     Mux5: mux4to1 PORT MAP
22         ( m(0), m(1), m(2), m(3), s(3 DOWNT0 2), f ) ;
23 END Structure ;

```

Figure 6.29 Hierarchical code for a 16-to-1 multiplexer.

named w , and the enable input is En . The four outputs are represented by the four-bit signal y .

In the truth table for the decoder in Figure 6.16a, the inputs are listed in the order $En w_1 w_0$. To represent these three signals, the VHDL code defines the three-bit signal named Enw . The statement $Enw <= En \& w$ uses the VHDL concatenate operator, which was discussed in section 5.5.4, to combine the En and w signals into the Enw signal. Hence $Enw(2) = En$, $Enw(1) = w_1$, and $Enw(0) = w_0$. The Enw signal is used as the selection signal in the selected signal assignment statement. It describes the truth table in Figure 6.16a. In the first four WHEN clauses, $En = 1$, and the decoder outputs have the same patterns as in the first four rows of the truth table. The last WHEN clause uses the OTHERS keyword and sets the decoder outputs to 0000, because it represents the cases where $En = 0$.

```

LIBRARY ieee ;
USE ieee.std_logic_1164.all ;

ENTITY dec2to4 IS
    PORT ( w   : IN   STD_LOGIC_VECTOR(1 DOWNTO 0);
          En  : IN   STD_LOGIC ;
          y   : OUT  STD_LOGIC_VECTOR(0 TO 3) );
END dec2to4 ;

ARCHITECTURE Behavior OF dec2to4 IS
    SIGNAL Enw : STD_LOGIC_VECTOR(2 DOWNTO 0);
BEGIN
    Enw <= En & w ;
    WITH Enw SELECT
        y <= "1000" WHEN "100",
            "0100" WHEN "101",
            "0010" WHEN "110",
            "0001" WHEN "111",
            "0000" WHEN OTHERS ;
END Behavior ;

```

Figure 6.30 VHDL code for a 2-to-4 binary decoder.

6.6.3 CONDITIONAL SIGNAL ASSIGNMENT

Similar to the selected signal assignment, a conditional signal assignment allows a signal to be set to one of several values. Figure 6.31 shows a modified version of the 2-to-1 multiplexer entity from Figure 6.27. It uses a conditional signal assignment to specify that f is assigned the value of w_0 when $s = 0$, or else f is assigned the value of w_1 . Compiling

```

LIBRARY ieee ;
USE ieee.std_logic_1164.all ;

ENTITY mux2to1 IS
    PORT ( w0, w1, s : IN   STD_LOGIC ;
          f         : OUT  STD_LOGIC ) ;
END mux2to1 ;

ARCHITECTURE Behavior OF mux2to1 IS
BEGIN
    f <= w0 WHEN s = '0' ELSE w1 ;
END Behavior ;

```

Figure 6.31 Specification of a 2-to-1 multiplexer using a conditional signal assignment.

the code generates the same circuit as the code in Figure 6.27. In this small example the conditional signal assignment has only one WHEN clause. A more complex example, which better illustrates the features of the conditional signal assignment, is given in Example 6.15.

Figure 6.24 gives the truth table for a 4-to-2 priority encoder. VHDL code that describes this truth table is shown in Figure 6.32. The inputs to the encoder are represented by the four-bit signal named w . The encoder has the outputs y , which is a two-bit signal, and z . **Ex**

The conditional signal assignment specifies that y is assigned the value 11 when input $w(3) = 1$. If this condition is true, then the other WHEN clauses that follow the ELSE keyword do not affect the value of f . Hence the values of $w(2)$, $w(1)$, and $w(0)$ do not matter, which implements the desired priority scheme. The second WHEN clause states that when $w(2) = 1$, then y is assigned the value 10. This can occur only if $w(3) = 0$. Each successive WHEN clause can affect y only if none of the conditions associated with the preceding WHEN clauses are true. Figure 6.32 includes a second conditional signal assignment for the output z . It states that when all four inputs are 0, z is assigned the value 0; else z is assigned the value 1.

The priority level associated with each WHEN clause in the conditional signal assignment is a key difference from the selected signal assignment, which has no such priority scheme. It is possible to describe the priority encoder using a selected signal assignment, but the code is more awkward. One possibility is shown by the architecture in Figure 6.33. The first WHEN clause sets y to 00 when w_0 is the only input that is 1. The next two clauses state that y should be 01 when $w_3 = w_2 = 0$ and $w_1 = 1$. The next four clauses specify that y should be 10 if $w_3 = 0$ and $w_2 = 1$. Finally, the last WHEN clause states that y should be 1 for all other input valuations, which includes all valuations for which w_3 is 1. Note that

```

LIBRARY ieee ;
USE ieee.std_logic_1164.all ;

ENTITY priority IS
    PORT ( w : IN  STD_LOGIC_VECTOR(3 DOWNTO 0) ;
          y : OUT STD_LOGIC_VECTOR(1 DOWNTO 0) ;
          z : OUT STD_LOGIC ) ;
END priority ;

ARCHITECTURE Behavior OF priority IS
BEGIN
    y <= "11" WHEN w(3) = '1' ELSE
        "10" WHEN w(2) = '1' ELSE
        "01" WHEN w(1) = '1' ELSE
        "00" ;
    z <= '0' WHEN w = "0000" ELSE '1' ;
END Behavior ;

```

Figure 6.32 VHDL code for a priority encoder.

```

LIBRARY ieee ;
USE ieee.std_logic_1164.all ;

ENTITY priority IS
    PORT ( w : IN  STD_LOGIC_VECTOR(3 DOWNTO 0) ;
          y : OUT STD_LOGIC_VECTOR(1 DOWNTO 0) ;
          z : OUT STD_LOGIC ) ;
END priority ;

ARCHITECTURE Behavior OF priority IS
BEGIN
    WITH w SELECT
        y <= "00" WHEN "0001",
            "01" WHEN "0010",
            "01" WHEN "0011",
            "10" WHEN "0100",
            "10" WHEN "0101",
            "10" WHEN "0110",
            "10" WHEN "0111",
            "11" WHEN OTHERS ;
    WITH w SELECT
        z <= '0' WHEN "0000",
            '1' WHEN OTHERS ;
END Behavior ;

```

Figure 6.33 Less efficient code for a priority encoder.

the OTHERS clause includes the input valuation 0000. This pattern results in $z = 0$, and the value of y does not matter in this case.

6 We derived the circuit for a comparator in Figure 6.26. Figure 6.34 shows how this circuit can be described with VHDL code. Each of the three conditional signal assignments determines the value of one of the comparator outputs. The package named *std_logic_unsigned* is included in the code because it specifies that *STD_LOGIC_VECTOR* signals, namely, A and B , can be used as unsigned binary numbers with VHDL relational operators. The relational operators provide a convenient way of specifying the desired functionality.

The circuit generated from the code in Figure 6.34 is similar, but not identical, to the circuit in Figure 6.26. The VHDL compiler instantiates a predefined module to implement each of the comparison operations. In Quartus II the modules that are instantiated are from the LPM library, which was introduced in section 5.5.

```

LIBRARY ieee ;
USE ieee.std_logic_1164.all ;
USE ieee.std_logic_unsigned.all ;

ENTITY compare IS
    PORT ( A, B          : IN  STD_LOGIC_VECTOR(3 DOWNTO 0) ;
          AeqB, AgtB, AltB : OUT STD_LOGIC ) ;
END compare ;

ARCHITECTURE Behavior OF compare IS
BEGIN
    AeqB <= '1' WHEN A = B ELSE '0' ;
    AgtB <= '1' WHEN A > B ELSE '0' ;
    AltB <= '1' WHEN A < B ELSE '0' ;
END Behavior ;

```

Figure 6.34 VHDL code for a four-bit comparator.

Instead of using the *std_logic_unsigned* library, another way to specify that the generated circuit should use unsigned numbers is to include the library named *std_logic_arith*. In this case the signals *A* and *B* should be defined with the type *UNSIGNED*, rather than *STD_LOGIC_VECTOR*. If we want the circuit to work with signed numbers, signals *A* and *B* should be defined with the type *SIGNED*. This code is given in Figure 6.35.

```

LIBRARY ieee ;
USE ieee.std_logic_1164.all ;
USE ieee.std_logic_arith.all ;

ENTITY compare IS
    PORT ( A, B          : IN  SIGNED(3 DOWNTO 0) ;
          AeqB, AgtB, AltB : OUT STD_LOGIC ) ;
END compare ;

ARCHITECTURE Behavior OF compare IS
BEGIN
    AeqB <= '1' WHEN A = B ELSE '0' ;
    AgtB <= '1' WHEN A > B ELSE '0' ;
    AltB <= '1' WHEN A < B ELSE '0' ;
END Behavior ;

```

Figure 6.35 The code from Figure 6.34 for signed numbers.

6.6.4 GENERATE STATEMENTS

Figure 6.29 gives VHDL code for a 16-to-1 multiplexer using five instances of a 4-to-1 multiplexer subcircuit. The regular structure of the code suggests that it could be written in a more compact form using a loop. VHDL provides a feature called the FOR GENERATE statement for describing regularly structured hierarchical code.

Figure 6.36 shows the code from Figure 6.29 rewritten using a FOR GENERATE statement. The generate statement must have a label, so we have used the label *G1* in the code. The loop instantiates four copies of the *mux4to1* component, using the loop index *i* in the range from 0 to 3. The variable *i* is not explicitly declared in the code; it is automatically defined as a local variable whose scope is limited to the FOR GENERATE statement. The first loop iteration corresponds to the instantiation statement labeled *Mux1* in Figure 6.29. The * operator represents multiplication; hence for the first loop iteration the VHDL compiler translates the signal names $w(4 * i)$, $w(4 * i + 1)$, $w(4 * i + 2)$, and $w(4 * i + 3)$ into signal names $w(0)$, $w(1)$, $w(2)$, and $w(3)$. The loop iterations for $i = 1$, $i = 2$, and $i = 3$ correspond to the statements labeled *Mux2*, *Mux3*, and *Mux4* in Figure 6.29. The statement labeled *Mux5* in Figure 6.29 does not fit within the loop, so it is included as a separate statement in Figure 6.36. The circuit generated from the code in Figure 6.36 is identical to the circuit produced by using the code in Figure 6.29.

```

LIBRARY ieee ;
USE ieee.std_logic_1164.all ;
USE work.mux4to1_package.all ;

ENTITY mux16to1 IS
    PORT ( w : IN    STD_LOGIC_VECTOR(0 TO 15) ;
          s : IN    STD_LOGIC_VECTOR(3 DOWNTO 0) ;
          f : OUT  STD_LOGIC ) ;
END mux16to1 ;

ARCHITECTURE Structure OF mux16to1 IS
    SIGNAL m : STD_LOGIC_VECTOR(0 TO 3) ;
BEGIN
    G1: FOR i IN 0 TO 3 GENERATE
        Muxes: mux4to1 PORT MAP (
            w(4*i), w(4*i+1), w(4*i+2), w(4*i+3), s(1 DOWNTO 0), m(i) ) ;
    END GENERATE ;
    Mux5: mux4to1 PORT MAP ( m(0), m(1), m(2), m(3), s(3 DOWNTO 2), f ) ;
END Structure ;

```

Figure 6.36 Code for a 16-to-1 multiplexer using a generate statement.

In addition to the FOR GENERATE statement, VHDL provides another type of generate statement called IF GENERATE. Figure 6.37 illustrates the use of both types of generate statements. The code shown is a hierarchical description of the 4-to-16 decoder given in Figure 6.18, using five instances of the *dec2to4* component defined in Figure 6.30. The decoder inputs are the four-bit signal *w*, the enable is *En*, and the outputs are the 16-bit signal *y*. **Ex**

Following the component declaration for the *dec2to4* subcircuit, the architecture defines the signal *m*, which represents the outputs of the 2-to-4 decoder on the left of Figure 6.18. The five copies of the *dec2to4* component are instantiated by the FOR GENERATE statement. In each iteration of the loop, the statement labeled *Dec_ri* instantiates a *dec2to4* component that corresponds to one of the 2-to-4 decoders on the right side of Figure 6.18. The first loop iteration generates the *dec2to4* component with data inputs w_1 and w_0 , enable input m_0 , and outputs y_0, y_1, y_2, y_3 . The other loop iterations also use data inputs $w_1 w_0$, but use different bits of *m* and *y*.

The IF GENERATE statement, labeled *G2*, instantiates a *dec2to4* component in the last loop iteration, for which the condition $i = 3$ is true. This component represents the 2-to-4 decoder on the left of Figure 6.18. It has the two-bit data inputs w_3 and w_2 , the enable *En*, and

```

LIBRARY ieee ;
USE ieee.std_logic_1164.all ;

ENTITY dec4to16 IS
    PORT ( w   : IN   STD_LOGIC_VECTOR(3 DOWNTO 0) ;
          En  : IN   STD_LOGIC ;
          y   : OUT  STD_LOGIC_VECTOR(0 TO 15) ) ;
END dec4to16 ;

ARCHITECTURE Structure OF dec4to16 IS
    COMPONENT dec2to4
        PORT ( w   : IN   STD_LOGIC_VECTOR(1 DOWNTO 0) ;
              En  : IN   STD_LOGIC ;
              y   : OUT  STD_LOGIC_VECTOR(0 TO 3) ) ;
    END COMPONENT ;
    SIGNAL m : STD_LOGIC_VECTOR(0 TO 3) ;
BEGIN
    G1: FOR i IN 0 TO 3 GENERATE
        Dec_ri: dec2to4 PORT MAP ( w(1 DOWNTO 0), m(i), y(4*i TO 4*i+3) ) ;
        G2: IF i=3 GENERATE
            Dec_left: dec2to4 PORT MAP ( w(i DOWNTO i-1), En, m ) ;
        END GENERATE ;
    END GENERATE ;
END Structure ;

```

Figure 6.37 Hierarchical code for a 4-to-16 binary decoder.

the outputs m_0 , m_1 , m_2 , and m_3 . Note that instead of using the IF GENERATE statement, we could have instantiated this component outside the FOR GENERATE statement. We have written the code as shown simply to give an example of the IF GENERATE statement.

The generate statements in Figures 6.36 and 6.37 are used to instantiate components. Another use of generate statements is to generate a set of logic equations. An example of this use will be given in Figure 7.73.

6.6.5 CONCURRENT AND SEQUENTIAL ASSIGNMENT STATEMENTS

We have introduced several types of assignment statements: simple assignment statements, which involve logic or arithmetic expressions, selected assignment statements, and conditional assignment statements. All of these statements share the property that the order in which they appear in VHDL code does not affect the meaning of the code. Because of this property, these statements are called the *concurrent assignment statements*.

VHDL also provides a second category of statements, called *sequential assignment statements*, for which the ordering of the statements may affect the meaning of the code. We will discuss two types of sequential assignment statements, called if-then-else statements and case statements. VHDL requires that the sequential assignment statements be placed inside another type of statement, called a process statement.

6.6.6 PROCESS STATEMENT

Figures 6.27 and 6.31 show two ways of describing a 2-to-1 multiplexer, using the selected and conditional signal assignments. The same circuit can also be described using an if-then-else statement, but this statement must be placed inside a process statement. Figure 6.38 shows such code. The process statement, or simply *process*, begins with the PROCESS keyword, followed by a parenthesized list of signals, called the *sensitivity list*. For a combinational circuit like the multiplexer, the sensitivity list includes all input signals that are used inside the process. The process statement is translated by the VHDL compiler into logic equations. In the figure the process consists of the single if-then-else statement that describes the multiplexer function. Thus the sensitivity list comprises the data inputs, w_0 and w_1 , and the select input s .

In general, there can be a number of statements inside a process. These statements are considered as follows. Using VHDL jargon, we say that when there is a change in the value of any signal in the process's sensitivity list, then the process becomes *active*. Once active, the statements inside the process are evaluated in sequential order. Any assignments made to signals inside the process are not visible outside the process until all of the statements in the process have been evaluated. If there are multiple assignments to the same signal, only the last one has any visible effect. This is illustrated in Example 6.18.

```

LIBRARY ieee ;
USE ieee.std_logic_1164.all ;

ENTITY mux2to1 IS
    PORT ( w0, w1, s : IN  STD_LOGIC ;
          f          : OUT STD_LOGIC ) ;
END mux2to1 ;

ARCHITECTURE Behavior OF mux2to1 IS
BEGIN
    PROCESS ( w0, w1, s )
    BEGIN
        IF s = '0' THEN
            f <= w0 ;
        ELSE
            f <= w1 ;
        END IF ;
    END PROCESS ;
END Behavior ;

```

Figure 6.38 A 2-to-1 multiplexer specified using the if-then-else statement.

The code in Figure 6.39 is equivalent to the code in Figure 6.38. The first statement in the process assigns the value of w_0 to f . This provides a *default* value for f but the assignment does not actually take place until the end of the process. In VHDL jargon we say that the assignment is *scheduled* to occur after all of the statements in the process have been evaluated. If another assignment to f takes place while the process is active, the default assignment will be overridden. The second statement in the process assigns the value of w_1 to f if the value of s is equal to 1. If this condition is true, then the default assignment is overridden. Thus if $s = 0$, then $f = w_0$, and if $s = 1$, then $f = w_1$, which defines the 2-to-1 multiplexer. Compiling this code results in the same circuit as for Figures 6.27, 6.31, and 6.38, namely, $f = \bar{s}w_0 + sw_1$.

The process statement in Figure 6.39 illustrates that the ordering of the statements in a process can affect the meaning of the code. Consider reversing the order of the two statements so that the if-then-else statement is evaluated first. If $s = 1$, f is assigned the value of w_1 . This assignment is scheduled and does not take place until the end of the process. However, the statement $f <= w_0$ is evaluated last. It overrides the first assignment, and f is assigned the value of w_0 regardless of the value of s . Hence instead of describing a multiplexer, when the statements inside the process are reversed, the code represents the trivial circuit $f = w_0$.

```

LIBRARY ieee ;
USE ieee.std_logic_1164.all ;

ENTITY mux2to1 IS
    PORT ( w0, w1, s : IN  STD_LOGIC ;
          f          : OUT STD_LOGIC ) ;
END mux2to1 ;

ARCHITECTURE Behavior OF mux2to1 IS
BEGIN
    PROCESS ( w0, w1, s )
    BEGIN
        f <= w0 ;
        IF s = '1' THEN
            f <= w1 ;
        END IF ;
    END PROCESS ;
END Behavior ;

```

Figure 6.39 Alternative code for the 2-to-1 multiplexer using an if-then-else statement.

19 Figure 6.40 gives an example that contains both a concurrent assignment statement and a process statement. It describes a priority encoder and is equivalent to the code in Figure 6.32. The process describes the desired priority scheme using an if-then-else statement. It specifies that if the input w_3 is 1, then the output is set to $y = 11$. This assignment does not depend on the values of inputs w_2 , w_1 , or w_0 ; hence their values do not matter. The other clauses in the if-then-else statement are evaluated only if $w_3 = 0$. The first ELSIF clause states that if w_2 is 1, then $y = 10$. If $w_2 = 0$, then the next ELSIF clause results in $y = 01$ if $w_1 = 1$. If $w_3 = w_2 = w_1 = 0$, then the ELSE clause results in $y = 00$. This assignment is done whether or not w_0 is 1; Figure 6.24 indicates that y can be set to any pattern when $w = 0000$ because z will be set to 0 in this case.

The priority encoder's output z must be set to 1 whenever at least one of the data inputs is 1. This output is defined by the conditional assignment statement at the end of Figure 6.40. The VHDL syntax does not allow a conditional assignment statement (or a selected assignment statement) to appear inside a process. An alternative would be to specify the value of z by using an if-then-else statement inside the process. The reason that we have written the code as given in the figure is to illustrate that concurrent assignment statements can be used in conjunction with process statements. The process statement serves the purpose of separating the sequential statements from the concurrent statements. Note that the ordering of the process statement and the conditional assignment statement does not matter. VHDL stipulates that while the statements inside a process are sequential statements, the process statement itself is a concurrent statement.

```

LIBRARY ieee ;
USE ieee.std_logic_1164.all ;

ENTITY priority IS
    PORT ( w : IN    STD_LOGIC_VECTOR(3 DOWNT0 0) ;
          y : OUT  STD_LOGIC_VECTOR(1 DOWNT0 0) ;
          z : OUT  STD_LOGIC ) ;
END priority ;

ARCHITECTURE Behavior OF priority IS
BEGIN
    PROCESS ( w )
    BEGIN
        IF w(3) = '1' THEN
            y <= "11" ;
        ELSIF w(2) = '1' THEN
            y <= "10" ;
        ELSIF w(1) = '1' THEN
            y <= "01" ;
        ELSE
            y <= "00" ;
        END IF ;
    END PROCESS ;
    z <= '0' WHEN w = "0000" ELSE '1' ;
END Behavior ;

```

Figure 6.40 A priority encoder specified using the if-then-else statement.

Figure 6.41 shows an alternative style of code for the priority encoder, using if-then-else statements. The first statement in the process provides the default value of 00 for y_1y_0 . The second statement overrides this if w_1 is 1, and sets y_1y_0 to 01. Similarly, the third and fourth statements override the previous ones if w_2 or w_3 are 1, and set y_1y_0 to 10 and 11, respectively. These four statements are equivalent to the single if-then-else statement in Figure 6.40 that describes the priority scheme. The value of z is specified using a default assignment statement, followed by an if-then-else statement that overrides the default if $w = 0000$. Although the examples in Figures 6.40 and 6.41 are equivalent, the meaning of the code in Figure 6.40 is probably easier to understand. **Ex**

Figure 6.34 specifies a four-bit comparator that produces the three outputs $AeqB$, $AgtB$, and $AltB$. Figure 6.42 shows how such specification can be written using if-then-else statements. For simplicity, one-bit numbers are used for the inputs A and B , and only the code for the **Ex**

```

LIBRARY ieee ;
USE ieee.std_logic_1164.all ;

ENTITY priority IS
    PORT ( w : IN    STD_LOGIC_VECTOR(3 DOWNTO 0);
          y : OUT STD_LOGIC_VECTOR(1 DOWNTO 0);
          z : OUT STD_LOGIC );
END priority ;

ARCHITECTURE Behavior OF priority IS
BEGIN
    PROCESS ( w )
    BEGIN
        y <= "00";
        IF w(1) = '1' THEN y <= "01"; END IF ;
        IF w(2) = '1' THEN y <= "10"; END IF ;
        IF w(3) = '1' THEN y <= "11"; END IF ;

        z <= '1' ;
        IF w = "0000" THEN z <= '0' ; END IF ;
    END PROCESS ;
END Behavior ;

```

Figure 6.41 Alternative code for the priority encoder.

```

LIBRARY ieee ;
USE ieee.std_logic_1164.all ;

ENTITY compare1 IS
    PORT ( A, B : IN    STD_LOGIC ;
          AeqB : OUT STD_LOGIC );
END compare1 ;

ARCHITECTURE Behavior OF compare1 IS
BEGIN
    PROCESS ( A, B )
    BEGIN
        AeqB <= '0' ;
        IF A = B THEN
            AeqB <= '1' ;
        END IF ;
    END PROCESS ;
END Behavior ;

```

Figure 6.42 Code for a one-bit equality comparator.

```

LIBRARY ieee ;
USE ieee.std_logic_1164.all ;

ENTITY implied IS
    PORT ( A, B : IN  STD_LOGIC ;
          AeqB : OUT STD_LOGIC ) ;
END implied ;

ARCHITECTURE Behavior OF implied IS
BEGIN
    PROCESS ( A, B )
    BEGIN
        IF A = B THEN
            AeqB <= '1' ;
        END IF ;
    END PROCESS ;
END Behavior ;

```

Figure 6.43 An example of code that results in implied memory.

$AeqB$ output is shown. The process assigns the default value of 0 to $AeqB$ and then the if-then-else statement changes $AeqB$ to 1 if A and B are equal. It is instructive to consider the effect on the semantics of the code if the default assignment statement is removed, as illustrated in Figure 6.43.

With only the if-then-else statement, the code does not specify what value $AeqB$ should have if the condition $A = B$ is not true. The VHDL semantics stipulate that in cases where the code does not specify the value of a signal, the signal should retain its current value. For the code in Figure 6.43, once A and B are equal, resulting in $AeqB = 1$, then $AeqB$ will remain set to 1 indefinitely, even if A and B are no longer equal. In the VHDL jargon, the $AeqB$ output is said to have *implied memory* because the circuit synthesized from the code will “remember,” or store the value $AeqB = 1$. Figure 6.44 shows the circuit synthesized from the code. The XOR gate produces a 1 when A and B are equal, and the OR gate ensures that $AeqB$ remains set to 1 indefinitely.

The implied memory that results from the code in Figure 6.43 is not useful, because it generates a comparator circuit that does not function correctly. However, we will show

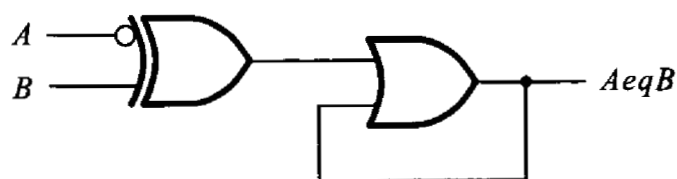


Figure 6.44 The circuit generated from the code in Figure 6.43.

in Chapter 7 that the semantics of implied memory are useful for other types of circuits, which have the capability to store logic signal values in memory elements.

6.6.7 CASE STATEMENT

A case statement is similar to a selected signal assignment in that the case statement has a selection signal and includes WHEN clauses for various valuations of this selection signal. Figure 6.45 shows how the case statement can be used as yet another way of describing the 2-to-1 multiplexer circuit. The case statement begins with the CASE keyword, which specifies that s is to be used as the selection signal. The first WHEN clause specifies, following the \Rightarrow symbol, the statements that should be evaluated when $s = 0$. In this example the only statement evaluated when $s = 0$ is $f \leq w_0$. The case statement must include a WHEN clause for all possible valuations of the selection signal. Hence the second WHEN clause, which contains $f \leq w_1$, uses the OTHERS keyword.

2 Figure 6.30 gives the code for a 2-to-4 decoder. A different way of describing this circuit, using sequential assignment statements, is shown in Figure 6.46. The process first uses an if-then-else statement to check the value of the decoder enable signal En . If $En = 1$, the

```

LIBRARY ieee ;
USE ieee.std_logic_1164.all ;

ENTITY mux2to1 IS
    PORT ( w0, w1, s : IN  STD_LOGIC ;
          f          : OUT STD_LOGIC ) ;
END mux2to1 ;

ARCHITECTURE Behavior OF mux2to1 IS
BEGIN
    PROCESS ( w0, w1, s )
    BEGIN
        CASE s IS
            WHEN '0' =>
                f <= w0 ;
            WHEN OTHERS =>
                f <= w1 ;
        END CASE ;
    END PROCESS ;
END Behavior ;

```

Figure 6.45 A case statement that represents a 2-to-1 multiplexer.

```

LIBRARY ieee ;
USE ieee.std_logic_1164.all ;

ENTITY dec2to4 IS
    PORT ( w   : IN   STD_LOGIC_VECTOR(1 DOWNTO 0) ;
          En  : IN   STD_LOGIC ;
          y   : OUT  STD_LOGIC_VECTOR(0 TO 3) ) ;
END dec2to4 ;

ARCHITECTURE Behavior OF dec2to4 IS
BEGIN
    PROCESS ( w, En )
    BEGIN
        IF En = '1' THEN
            CASE w IS
                WHEN "00" =>
                    y <= "1000" ;
                WHEN "01" =>
                    y <= "0100" ;
                WHEN "10" =>
                    y <= "0010" ;
                WHEN OTHERS =>
                    y <= "0001" ;
            END CASE ;
        ELSE
            y <= "0000" ;
        END IF ;
    END PROCESS ;
END Behavior ;

```

Figure 6.46 A process statement that describes a 2-to-4 binary decoder.

case statement sets the output y to the appropriate value based on the input w . The case statement represents the first four rows of the truth table in Figure 6.16a. If $En = 0$, the ELSE clause sets y to 0000, as specified in the bottom row of the truth table.

Another example of a case statement is given in Figure 6.47. The entity is named *seg7*, and it represents the BCD-to-7-segment decoder in Figure 6.25. The BCD input is represented by the four-bit signal named *bcd*, and the seven outputs are the seven-bit signal named *leds*. The case statement is formatted so that it resembles the truth table in Figure 6.25c. Note that there is a comment to the right of the case statement, which labels the seven outputs

```

LIBRARY ieee ;
USE ieee.std_logic_1164.all ;

ENTITY seg7 IS
    PORT ( bcd : IN  STD_LOGIC_VECTOR(3 DOWNTO 0) ;
          leds : OUT STD_LOGIC_VECTOR(1 TO 7) ) ;
END seg7 ;

ARCHITECTURE Behavior OF seg7 IS
BEGIN
    PROCESS ( bcd )
    BEGIN
        CASE bcd IS
            -- abcdefg
            WHEN "0000" => leds <= "1111110" ;
            WHEN "0001" => leds <= "0110000" ;
            WHEN "0010" => leds <= "1101101" ;
            WHEN "0011" => leds <= "1111001" ;
            WHEN "0100" => leds <= "0110011" ;
            WHEN "0101" => leds <= "1011011" ;
            WHEN "0110" => leds <= "1011111" ;
            WHEN "0111" => leds <= "1110000" ;
            WHEN "1000" => leds <= "1111111" ;
            WHEN "1001" => leds <= "1110011" ;
            WHEN OTHERS => leds <= "-----" ;
        END CASE ;
    END PROCESS ;
END Behavior ;

```

Figure 6.47 Code that represents a BCD-to-7-segment decoder.

with the letters from *a* to *g*. These labels indicate to the reader the correlation between the seven-bit *leds* signal in the VHDL code and the seven segments in Figure 6.25*b*. The final **WHEN** clause in the case statement sets all seven bits of *leds* to —. Recall that — is used in VHDL to denote a don't-care condition. This clause represents the don't-care conditions discussed for Figure 6.25, which are the cases where the *bcd* input does not represent a valid BCD digit.

24 An arithmetic logic unit (ALU) is a logic circuit that performs various Boolean and arithmetic operations on *n*-bit operands. In section 3.5 we discussed a family of standard chips called the 7400-series chips. We said that some of these chips contain basic logic gates, and others provide commonly used logic circuits. One example of an ALU is the standard chip called the 74381. Table 6.1 specifies the functionality of this chip. It has 2 four-bit data inputs, named *A* and *B*; a three-bit select input *s*; and a four-bit output *F*. As the table shows,

```

WHEN "10" => -- define signals asserted in time step T2
  CASE I IS
    WHEN "10" => -- Add
      Rout <= Y ; Gin <= '1' ;
    WHEN "11" => -- Sub
      Rout <= Y ; AddSub <= '1' ; Gin <= '1' ;
    WHEN OTHERS => -- Load, Move
  END CASE ;
WHEN OTHERS => -- define signals asserted in time step T3
  CASE I IS
    WHEN "00" => -- Load
    WHEN "01" => -- Move
    WHEN OTHERS => -- Add, Sub
      Gout <= '1' ; Rin <= X ; Done <= '1' ;
  END CASE ;
END CASE ;
END PROCESS ;
reg0: regn PORT MAP ( BusWires, Rin(0), Clock, R0 ) ;
reg1: regn PORT MAP ( BusWires, Rin(1), Clock, R1 ) ;
reg2: regn PORT MAP ( BusWires, Rin(2), Clock, R2 ) ;
reg3: regn PORT MAP ( BusWires, Rin(3), Clock, R3 ) ;
regA: regn PORT MAP ( BusWires, Ain, Clock, A ) ;
alu: WITH AddSub SELECT
  Sum <= A + BusWires WHEN '0',
        A - BusWires WHEN OTHERS ;
regG: regn PORT MAP ( Sum, Gin, Clock, G ) ;
Sel <= Rout & Gout & Extern ;
WITH Sel SELECT
  BusWires <= R0 WHEN "100000",
            R1 WHEN "010000",
            R2 WHEN "001000",
            R3 WHEN "000100",
            G WHEN "000010",
            Data WHEN OTHERS ;
END Behavior ;

```

Figure 7.74 Alternative code for the processor (Part *b*).

next positive clock edge. The next operation loads 55 into register *R1*, and the subsequent operation loads 22 into *R2*. At 850 ns the value of the input *F* is 10, while $R_x = 01$ and $R_y = 00$. This operation is "Add *R1*, *R0*." In the following clock cycle, the contents of *R1* (55) appear on the bus. This data is loaded into register *A* by the clock edge at 950 ns, which also results in the contents of *R0* (2A) being placed on the bus. The adder/subtractor module generates the correct sum (7F), which is loaded into register *G* at 1050 ns. After

```

LIBRARY ieee ;
USE ieee.std_logic_1164.all ;
USE ieee.std_logic_unsigned.all ;

ENTITY alu IS
    PORT ( s      : IN   STD_LOGIC_VECTOR(2 DOWNTO 0) ;
          A, B    : IN   STD_LOGIC_VECTOR(3 DOWNTO 0) ;
          F      : OUT  STD_LOGIC_VECTOR(3 DOWNTO 0) ) ;
END alu ;

ARCHITECTURE Behavior OF alu IS
BEGIN
    PROCESS ( s, A, B )
    BEGIN
        CASE s IS
            WHEN "000" =>
                F <= "0000" ;
            WHEN "001" =>
                F <= B - A ;
            WHEN "010" =>
                F <= A - B ;
            WHEN "011" =>
                F <= A + B ;
            WHEN "100" =>
                F <= A XOR B ;
            WHEN "101" =>
                F <= A OR B ;
            WHEN "110" =>
                F <= A AND B ;
            WHEN OTHERS =>
                F <= "1111" ;
        END CASE ;
    END PROCESS ;
END Behavior ;

```

Figure 6.48 Code that represents the functionality of the 74381 ALU chip.

produces the result $c_2 = \bar{a}_2$, $c_1 = \bar{a}_1$, and $c_0 = \bar{a}_0$, where a_i and c_i are the bits of the vectors A and C .

The statement

$$C \leq A \text{ AND } B;$$

generates $c_2 = a_2 \cdot b_2$, $c_1 = a_1 \cdot b_1$, and $c_0 = a_0 \cdot b_0$. The other operators lead to similar evaluations.

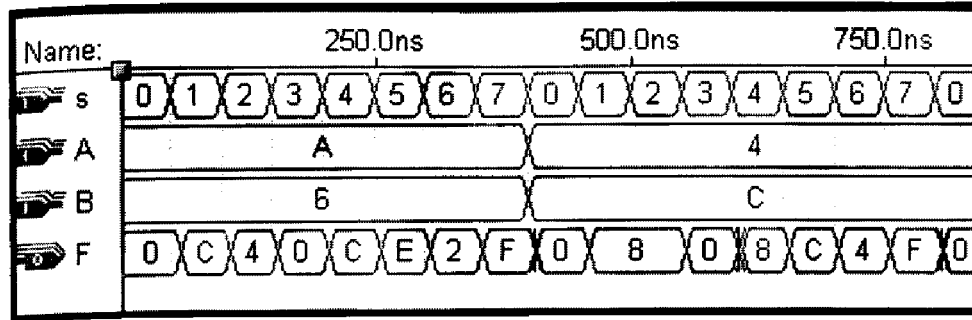


Figure 6.49 Timing simulation for the code in Figure 6.48.

Table 6.2 VHDL operators (used for synthesis).

Operator category	Operator symbol	Operation performed
Logical	AND OR NAND NOR XOR XNOR NOT	AND OR Not AND Not OR XOR Not XOR NOT
Relational	= /= > < >= <=	Equality Inequality Greater than Less than Greater than or equal to Less than or equal to
Arithmetic	+ - * /	Addition Subtraction Multiplication Division
Concatenation	&	Concatenation
Shift and Rotate	SLL SRL SLA SRA ROL ROR	Shift left logical Shift right logical Shift left arithmetic Shift right arithmetic Rotate left Rotate right

Relational Operators

The relational operators are used to compare expressions. The result of the comparison is TRUE or FALSE. The expressions that are compared must be of the same type. For example, if $A = 011$ and $B = 010$ then $A > B$ evaluates to TRUE, and $B /= "010"$ evaluates to FALSE.

Arithmetic Operators

We have already encountered the arithmetic operators in Chapter 5. They perform standard arithmetic operations. Thus

$$C \leq A + B;$$

puts the three-bit sum of A plus B into C , while

$$C \leq A - B;$$

puts the difference of A and B into C . The operation

$$C \leq -A;$$

places the 2's complement of A into C .

The addition, subtraction, and multiplication operations are supported by most CAD synthesis tools. However, the division operation is often not supported. When the VHDL compiler encounters an arithmetic operator, it usually synthesizes it by using an appropriate module from a library.

Concatenate Operator

This operator concatenates two or more vectors to create a larger vector. For example,

$$D \leq A \& B;$$

defines the six-bit vector $D = a_2a_1a_0b_2b_1b_0$. Similarly, the concatenation

$$E \leq "111" \& A \& "00";$$

produces the eight-bit vector $E = 111a_2a_1a_000$.

Shift and Rotate Operators

A vector operand can be shifted to the right or left by a number of bits specified as a constant. When bits are shifted, the vacant bit positions are filled with 0s. For example,

$$B \leq A \text{ SLL } 1;$$

results in $b_2 = a_1$, $b_1 = a_0$, and $b_0 = 0$. Similarly,

$$B \leq A \text{ SRL } 2;$$

yields $b_2 = b_1 = 0$ and $b_0 = a_2$.

The arithmetic shift left, SLA, has the same effect as SLL. But, the arithmetic shift right, SRA, performs the sign extension by replicating the sign bit into the positions left vacant after shifting. Hence

$$B \leq A \text{ SRA } 1;$$

gives $b_2 = a_2$, $b_1 = a_2$, and $b_0 = a_1$.

An operand can also be rotated, in which case the bits shifted out from one end are placed into the vacated positions at the other end. For example,

$$B \leq A \text{ ROR } 2;$$

produces $b_2 = a_1$, $b_1 = a_0$, and $b_0 = a_2$.

Operator Precedence

Operators in different categories have different precedence. Operators in the same category have the same precedence, and are evaluated from left to right in a given expression. It is a good practice to use parentheses to indicate the desired order of operations in the expression. To illustrate this point, consider the statement

$$S \leq A + B + C + D;$$

which defines the addition of four vector operands. The VHDL compiler will synthesize a circuit as if the expression was written in the form $((A + B) + C) + D$, which gives a cascade of three adders so that the final sum will be available after a propagation delay through three adders. By writing the statement as

$$S \leq (A + B) + (C + D);$$

the synthesized circuit will still have three adders, but since the sums $A + B$ and $C + D$ are generated in parallel, the final sum will be available after a propagation delay through only two adders.

Table 6.2 groups the operators informally according to their functionality. It shows only those operators that are used to synthesize logic circuits. The VHDL Standard specifies additional operators, which are useful for simulation and documentation purposes. All operators are grouped into different classes, with a defined precedence ordering between classes. We discuss this issue in Appendix A, section A.3.

6.7 CONCLUDING REMARKS

This chapter has introduced a number of circuit building blocks. Examples using these blocks to construct larger circuits will be presented in Chapters 7 and 10. To describe the building block circuits efficiently, several VHDL constructs have been introduced. In many cases a given circuit can be described in various ways, using different constructs. A circuit that can be described using a selected signal assignment can also be described using a case statement. Circuits that fit well with conditional signal assignments are also well-suited to if-then-else statements. In general, there are no clear rules that dictate when one type of assignment statement should be preferred over another. With experience the user develops a sense for which types of statements work well in a particular design situation. Personal preference also influences how the code is written.

VHDL is not a programming language, and VHDL code should not be written as if it were a computer program. The concurrent and sequential assignment statements discussed in this chapter can be used to create large, complex circuits. A good way to design such circuits is to construct them using well-defined modules, in the manner that we illustrated for the multiplexers, decoders, encoders, and so on. Additional examples using the VHDL statements introduced in this chapter are given in Chapters 7 and 8. In Chapter 10 we provide a number of examples of using VHDL code to describe larger digital systems. For more information on VHDL, the reader can consult more specialized books [5–10].

In the next chapter we introduce logic circuits that include the ability to store logic signal values in memory elements.

6.8 EXAMPLES OF SOLVED PROBLEMS

This section presents some typical problems that the reader may encounter, and shows how such problems can be solved.

Example 6.25 Problem: Implement the function $f(w_1, w_2, w_3) = \sum m(0, 1, 3, 4, 6, 7)$ by using a 3-to-8 binary decoder and an OR gate.

Solution: The decoder generates a separate output for each minterm of the required function. These outputs are then combined in the OR gate, giving the circuit in Figure 6.50.

Example 6.26 Problem: Derive a circuit that implements an 8-to-3 binary encoder.

Solution: The truth table for the encoder is shown in Figure 6.51. Only those rows for which a single input variable is equal to 1 are shown; the other rows can be treated as don't care cases. From the truth table it is seen that the desired circuit is defined by the equations

$$y_2 = w_4 + w_5 + w_6 + w_7$$

$$y_1 = w_2 + w_3 + w_6 + w_7$$

$$y_0 = w_1 + w_3 + w_5 + w_7$$

Example 6.27 Problem: Implement the function

$$f(w_1, w_2, w_3, w_4) = \bar{w}_1\bar{w}_2\bar{w}_4\bar{w}_5 + w_1w_2 + w_1w_3 + w_1w_4 + w_3w_4w_5$$

by using a 4-to-1 multiplexer and as few other gates as possible. Assume that only the uncomplemented inputs $w_1, w_2, w_3,$ and w_4 are available.

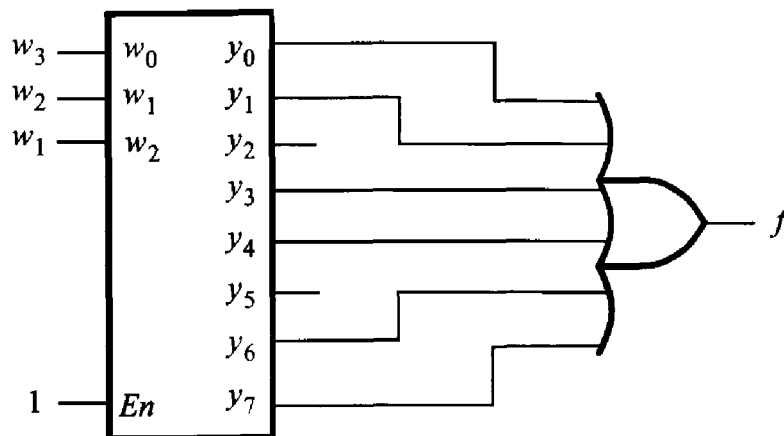


Figure 6.50 Circuit for Example 6.25.

w_7	w_6	w_5	w_4	w_3	w_2	w_1	w_0	y_2	y_1	y_0
0	0	0	0	0	0	0	1	0	0	0
0	0	0	0	0	0	1	0	0	0	1
0	0	0	0	0	1	0	0	0	1	0
0	0	0	0	1	0	0	0	0	1	1
0	0	0	1	0	0	0	0	1	0	0
0	0	1	0	0	0	0	0	1	0	1
0	1	0	0	0	0	0	0	1	1	0
1	0	0	0	0	0	0	0	1	1	1

Figure 6.51 Truth table for an 8-to-3 binary encoder.

Solution: Since variables w_1 and w_4 appear in more product terms in the expression for f than the other three variables, let us perform Shannon's expansion with respect to these two variables. The expansion gives

$$\begin{aligned} f &= \bar{w}_1 \bar{w}_4 f_{\bar{w}_1 \bar{w}_4} + \bar{w}_1 w_4 f_{\bar{w}_1 w_4} + w_1 \bar{w}_4 f_{w_1 \bar{w}_4} + w_1 w_4 f_{w_1 w_4} \\ &= \bar{w}_1 \bar{w}_4 (\bar{w}_2 \bar{w}_5) + \bar{w}_1 w_4 (w_3 w_5) + w_1 \bar{w}_4 (w_2 + w_3) + w_1 w_4 (1) \end{aligned}$$

We can use a NOR gate to implement $\bar{w}_2 \bar{w}_5 = \overline{w_2 + w_5}$. We also need an AND gate and an OR gate. The complete circuit is presented in Figure 6.52.

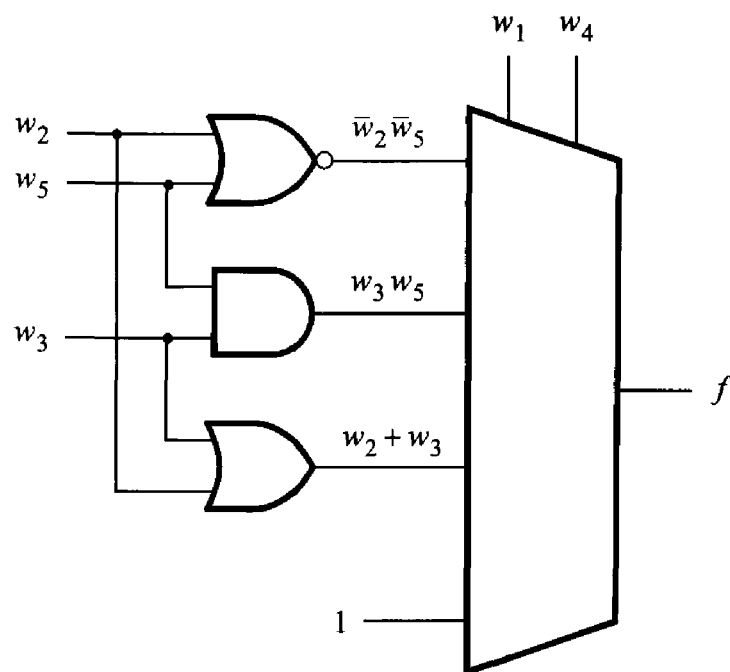


Figure 6.52 Circuit for Example 6.27.

b_2	b_1	b_0	g_2	g_1	g_0
0	0	0	0	0	0
0	0	1	0	0	1
0	1	0	0	1	1
0	1	1	0	1	0
1	0	0	1	1	0
1	0	1	1	1	1
1	1	0	1	0	1
1	1	1	1	0	0

Figure 6.53 Binary to Gray code conversion.

6.28 Problem: In Chapter 4 we pointed out that the rows and columns of a Karnaugh map are labeled using Gray code. This is a code in which consecutive valuations differ in one variable only. Figure 6.53 depicts the conversion between three-bit binary and Gray codes. Design a circuit that can convert a binary code into a Gray according the figure.

Solution: From the figure it follows that

$$\begin{aligned}
 g_2 &= b_2 \\
 g_1 &= b_1\bar{b}_2 + \bar{b}_1b_2 \\
 &= b_1 \oplus b_2 \\
 g_0 &= b_0\bar{b}_1 + \bar{b}_0b_1 \\
 &= b_0 \oplus b_1
 \end{aligned}$$

6.29 Problem: In section 6.1.2 we showed that any logic function can be decomposed using Shannon's expansion theorem. For a four-variable function, $f(w_1, \dots, w_4)$, the expansion with respect to w_1 is

$$f(w_1, \dots, w_4) = \bar{w}_1 f_{\bar{w}_1} + w_1 f_{w_1}$$

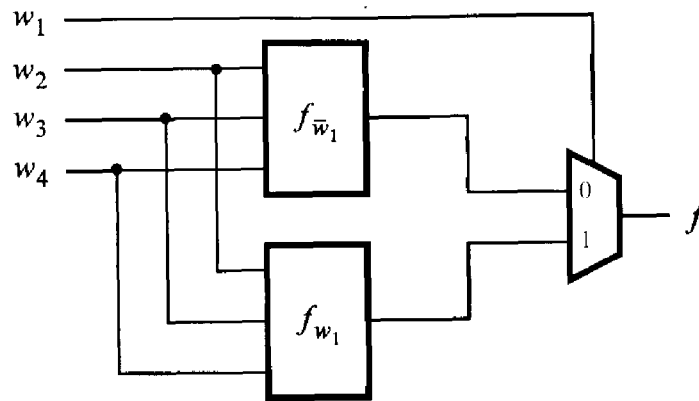
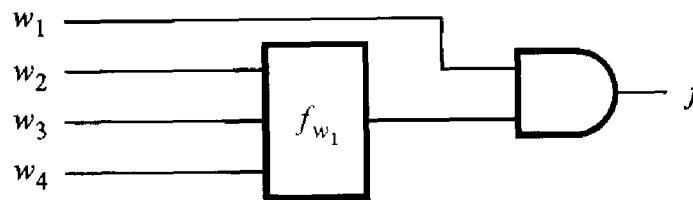
A circuit that implements this expression is given in Figure 6.54a.

(a) If the decomposition yields $f_{\bar{w}_1} = 0$, then the multiplexer in the figure can be replaced by a single logic gate. Show this circuit.

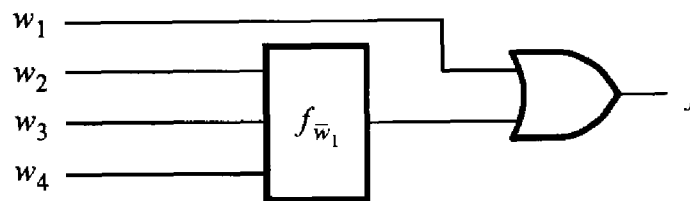
(b) Repeat part (a) for the case where $f_{w_1} = 1$.

Solution: The desired circuits are shown in parts (b) and (c) of Figure 6.54.

6.30 Problem: In several commercial FPGAs the logic blocks are 4-LUTs. What is the minimum number of 4-LUTs needed to construct a 4-to-1 multiplexer with select inputs s_1 and s_0 and data inputs w_3, w_2, w_1 , and w_0 ?

(a) Shannon's expansion of the function f .

(b) Solution for part a



(c) Solution for part b

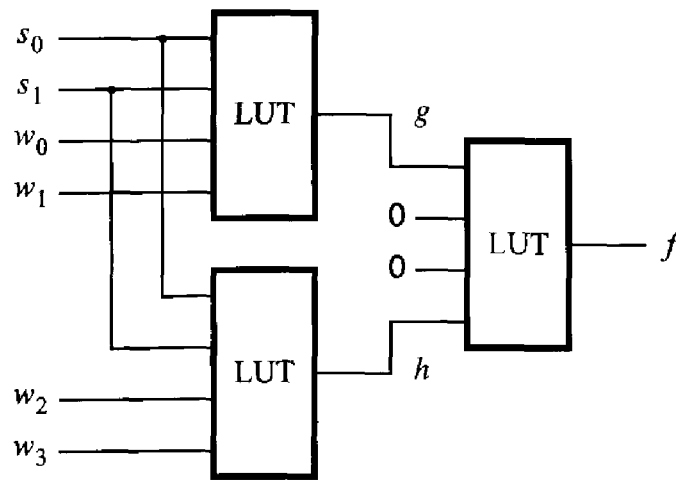
Figure 6.54 Circuits for Example 6.29.

Solution: A straightforward attempt is to use directly the expression that defines the 4-to-1 multiplexer

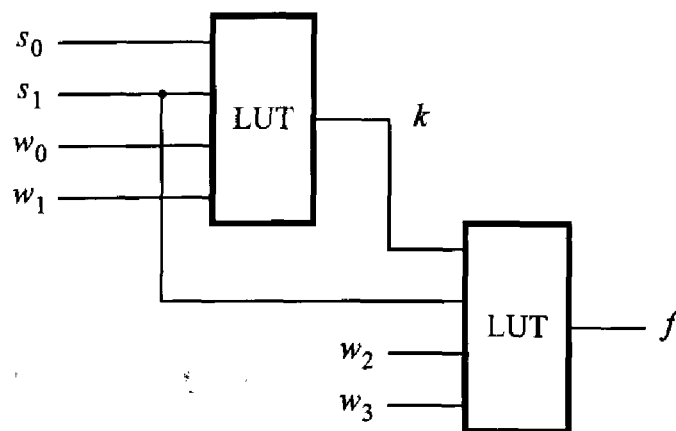
$$f = \bar{s}_1 \bar{s}_0 w_0 + \bar{s}_1 s_0 w_1 + s_1 \bar{s}_0 w_2 + s_1 s_0 w_3$$

Let $g = \bar{s}_1 \bar{s}_0 w_0 + \bar{s}_1 s_0 w_1$ and $h = s_1 \bar{s}_0 w_2 + s_1 s_0 w_3$, so that $f = g + h$. This decomposition leads to the circuit in Figure 6.55a, which requires three LUTs.

When designing logic circuits, one can sometimes come up with a clever idea which leads to a superior implementation. Figure 6.55b shows how it is possible to implement the multiplexer with just two LUTs, based on the following observation. The truth table in Figure 6.2b indicates that when $s_1 = 0$ the output must be either w_0 or w_1 , as determined by the value of s_0 . This can be generated by the first LUT. The second LUT must make the choice between w_2 and w_3 when $s_1 = 1$. But, the choice can be made only by knowing the value of s_0 . Since it is impossible to have five inputs in the LUT, more information has to



(a) Using three LUTs



(b) Using two LUTs

Figure 6.55 Circuits for Example 6.30.

be passed from the first to the second LUT. Observe that when $s_1 = 1$ the output f will be equal to either w_2 or w_3 , in which case it is not necessary to know the values of w_0 and w_1 . Hence, in this case we can pass on the value of s_0 through the first LUT, rather than w_0 or w_1 . This can be done by making the function of this LUT

$$k = \bar{s}_1 \bar{s}_0 w_0 + \bar{s}_1 s_0 w_1 + s_1 s_0$$

Then, the second LUT performs the function

$$f = \bar{s}_1 k + s_1 \bar{k} w_3 + s_1 k w_4$$

e 6.31 Problem: In digital systems it is often necessary to have circuits that can shift the bits of a vector by one or more bit positions to the left or right. Design a circuit that can shift a

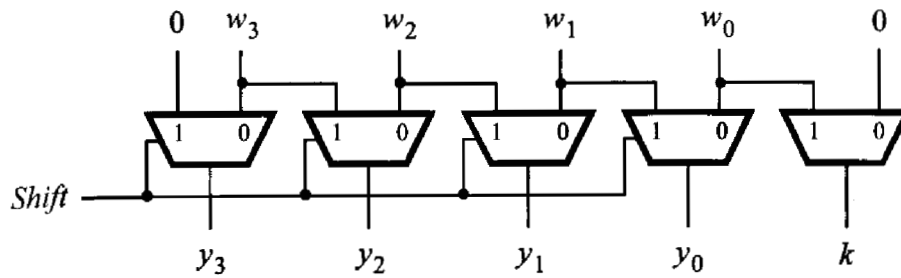


Figure 6.56 A shifter circuit.

four-bit vector $W = w_3w_2w_1w_0$ one bit position to the right when a control signal $Shift$ is equal to 1. Let the outputs of the circuit be a four-bit vector $Y = y_3y_2y_1y_0$ and a signal k , such that if $Shift = 1$ then $y_3 = 0$, $y_2 = w_3$, $y_1 = w_2$, $y_0 = w_1$, and $k = w_0$. If $Shift = 0$ then $Y = W$ and $k = 0$.

Solution: The required circuit can be implemented with five 2-to-1 multiplexers as shown in Figure 6.56. The $Shift$ signal is used as the select input to each multiplexer.

Problem: The shifter circuit in Example 6.31 shifts the bits of an input vector by one bit position to the right. It fills the vacated bit on the left side with 0. A more versatile shifter circuit may be able to shift by more bit positions at a time. If the bits that are shifted out are placed into the vacated positions on the left, then the circuit effectively rotates the bits of the input vector by a specified number of bit positions. Such a circuit is often called a *barrel shifter*. Design a four-bit barrel shifter that rotates the bits by 0, 1, 2, or 3 bit positions as determined by the valuation of two control signals s_1 and s_0 . **Ex**

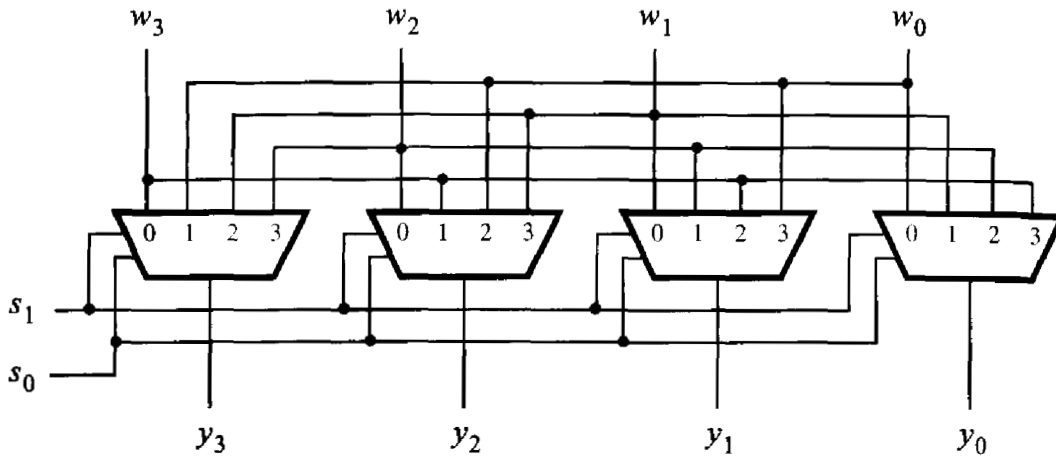
Solution: The required action is given in Figure 6.57a. The barrel shifter can be implemented with four 4-to-1 multiplexers as shown in Figure 6.57b. The control signals s_1 and s_0 are used as the select inputs to the multiplexers.

Problem: Write VHDL code that represents the circuit in Figure 6.19. Use the *dec2to4* entity in Figure 6.30 as a subcircuit in your code. **Ex**

Solution: The code is shown in Figure 6.58. Note that the *dec2to4* entity can be included in the same file as we have done in the figure, but it can also be in a separate file in the project directory.

s_1	s_0	y_3	y_2	y_1	y_0
0	0	w_3	w_2	w_1	w_0
0	1	w_0	w_3	w_2	w_1
1	0	w_1	w_0	w_3	w_2
1	1	w_2	w_1	w_0	w_3

(a) Truth table



(b) Circuit

Figure 6.57 A barrel shifter circuit.

14 Problem: Write VHDL code that represents the shifter circuit in Figure 6.56.

Solution: There are two possible approaches: structural and behavioral. A structural description is given in Figure 6.59. The IF construct is used to define the desired shifting of individual bits. A typical VHDL compiler will implement this code with 2-to-1 multiplexers as depicted in Figure 6.56.

A behavioral specification is given in Figure 6.60. It makes use of the shift operator SRL. Since the shift and rotate operators are supported in the *ieee.numeric_std.all* library, this library must be included in the code. Note that the vectors w and y are defined to be of UNSIGNED type.

35 Problem: Write VHDL code that defines the barrel shifter in Figure 6.57.

Solution: The easiest way to specify the barrel shifter is by using the VHDL rotate operator. The complete code is presented in Figure 6.61.

```

LIBRARY ieee ;
USE ieee.std_logic_1164.all ;

ENTITY mux4to1 IS
    PORT ( s : IN    STD_LOGIC_VECTOR( 1 DOWNT0 0 ) ;
          w : IN    STD_LOGIC_VECTOR( 3 DOWNT0 0 ) ;
          f : OUT  STD_LOGIC ) ;
END mux4to1 ;

ARCHITECTURE Structure OF mux4to1 IS
    COMPONENT dec2to4
        PORT ( w : IN    STD_LOGIC_VECTOR(1 DOWNT0 0) ;
              En : IN   STD_LOGIC ;
              y : OUT  STD_LOGIC_VECTOR(0 TO 3) ) ;
    END COMPONENT ;
    SIGNAL High : STD_LOGIC ;
    SIGNAL y : STD_LOGIC_VECTOR( 3 DOWNT0 0 ) ;
BEGIN
    decoder: dec2to4 PORT MAP ( s, '1', y ) ;
    f <= (w(0) AND y(0)) OR (w(1) AND y(1)) OR
        (w(2) AND y(2)) OR w(3) AND y(3) ;
END Structure ;

```

```

LIBRARY ieee ;
USE ieee.std_logic_1164.all ;

ENTITY dec2to4 IS
    PORT ( w : IN    STD_LOGIC_VECTOR(1 DOWNT0 0) ;
          En : IN   STD_LOGIC ;
          y : OUT  STD_LOGIC_VECTOR(0 TO 3) ) ;
END dec2to4 ;

ARCHITECTURE Behavior OF dec2to4 IS
    SIGNAL Enw : STD_LOGIC_VECTOR(2 DOWNT0 0) ;
BEGIN
    Enw <= En & w ;
    WITH Enw SELECT
        y <= "1000" WHEN "100",
            "0100" WHEN "101",
            "0010" WHEN "110",
            "0001" WHEN "111",
            "0000" WHEN OTHERS ;
END Behavior ;

```

Figure 6.58 VHDL code for Example 6.38.


```

LIBRARY ieee ;
USE ieee.std_logic_1164.all ;

ENTITY shifter IS
    PORT ( w      : IN  STD_LOGIC_VECTOR(3 DOWNTO 0) ;
          Shift   : IN  STD_LOGIC ;
          y       : OUT STD_LOGIC_VECTOR(3 DOWNTO 0) ;
          k       : OUT STD_LOGIC ) ;
END shifter ;

ARCHITECTURE Behavior OF shifter IS
BEGIN
    PROCESS (Shift, w)
    BEGIN
        IF Shift = '1' THEN
            y(3) <= '0' ;
            y(2 DOWNTO 0) <= w(3 DOWNTO 1) ;
            k <= w(0) ;
        ELSE
            y <= w ;
            k <= '0' ;
        END IF ;
    END PROCESS ;
END Behavior ;

```

Figure 6.59 Structural VHDL code that specifies the shifter circuit in Figure 6.56.

PROBLEMS

Answers to problems marked by an asterisk are given at the back of the book.

- 6.1** Show how the function $f(w_1, w_2, w_3) = \sum m(0, 2, 3, 4, 5, 7)$ can be implemented using a 3-to-8 binary decoder and an OR gate.
- 6.2** Show how the function $f(w_1, w_2, w_3) = \sum m(1, 2, 3, 5, 6)$ can be implemented using a 3-to-8 binary decoder and an OR gate.
- *6.3** Consider the function $f = \bar{w}_1\bar{w}_3 + w_2\bar{w}_3 + \bar{w}_1w_2$. Use the truth table to derive a circuit for f that uses a 2-to-1 multiplexer.
- 6.4** Repeat problem 6.3 for the function $f = \bar{w}_2\bar{w}_3 + w_1w_2$.
- *6.5** For the function $f(w_1, w_2, w_3) = \sum m(0, 2, 3, 6)$, use Shannon's expansion to derive an implementation using a 2-to-1 multiplexer and any other necessary gates.
- 6.6** Repeat problem 6.5 for the function $f(w_1, w_2, w_3) = \sum m(0, 4, 6, 7)$.

```

LIBRARY ieee ;
USE ieee.std_logic_1164.all ;
USE ieee.numeric_std.all ;

ENTITY shifter IS
    PORT ( w      : IN   UNSIGNED(3 DOWNTO 0) ;
          Shift  : IN   STD_LOGIC ;
          y      : OUT  UNSIGNED(3 DOWNTO 0) ;
          k      : OUT  STD_LOGIC ) ;
END shifter ;

ARCHITECTURE Behavior OF shifter IS
BEGIN
    PROCESS (Shift, w)
    BEGIN
        IF Shift = "1" THEN
            y <= w SRL 1 ;
            k <= w(0) ;
        ELSE
            y <= w ;
            k <= "0" ;
        END IF ;
    END PROCESS ;
END Behavior ;

```

Figure 6.60 Behavioral VHDL code that specifies the shifter circuit in Figure 6.56.

- 6.7** Consider the function $f = \bar{w}_2 + \bar{w}_1 \bar{w}_3 + w_1 w_3$. Show how repeated application of Shannon's expansion can be used to derive the minterms of f .
- 6.8** Repeat problem 6.7 for $f = w_2 + \bar{w}_1 \bar{w}_3$.
- 6.9** Prove Shannon's expansion theorem presented in section 6.1.2.
- *6.10** Section 6.1.2 shows Shannon's expansion in sum-of-products form. Using the principle of duality, derive the equivalent expression in product-of-sums form.
- 6.11** Consider the function $f = \bar{w}_1 \bar{w}_2 + \bar{w}_2 \bar{w}_3 + w_1 w_2 w_3$. Give a circuit that implements f using the minimal number of two-input LUTs. Show the truth table implemented inside each LUT.
- *6.12** For the function in problem 6.11, the cost of the minimal sum-of-products expression is 14, which includes four gates and 10 inputs to the gates. Use Shannon's expansion to derive a multilevel circuit that has a lower cost and give the cost of your circuit.
- 6.13** Consider the function $f(w_1, w_2, w_3, w_4) = \sum m(0, 1, 3, 6, 8, 9, 14, 15)$. Derive an implementation using the minimum possible number of three-input LUTs.

```

LIBRARY ieee ;
USE ieee.std_logic_1164.all ;
USE ieee.numeric_std.all ;

ENTITY barrel IS
    PORT ( w : IN    UNSIGNED(3 DOWNT0 0) ;
          s : IN    UNSIGNED(1 DOWNT0 0) ) ;
          y : OUT   UNSIGNED(3 DOWNT0 0) ) ;
END barrel ;

ARCHITECTURE Behavior OF barrel IS
BEGIN
    PROCESS (s, w)
    BEGIN
        CASE s IS
            WHEN "00" =>
                y <= w ;
            WHEN "01" =>
                y <= w ROR 1 ;
            WHEN "10" =>
                y <= w ROR 2 ;
            WHEN OTHERS =>
                y <= w ROR 3 ;
        END CASE ;
    END PROCESS ;
END Behavior ;

```

Figure 6.61 VHDL code that specifies the barrel shifter circuit in Figure 6.57.

- *6.14** Give two examples of logic functions with five inputs, w_1, \dots, w_5 , that can be realized using 2 four-input LUTs.
- 6.15** For the function, f , in Example 6.27 perform Shannon's expansion with respect to variables w_1 and w_2 , rather than w_1 and w_4 . How does the resulting circuit compare with the circuit in Figure 6.52?
- 6.16** Actel Corporation manufactures an FPGA family called Act 1, which has the multiplexer-based logic block illustrated in Figure P6.1. Show how the function $f = w_2\bar{w}_3 + w_1w_3 + \bar{w}_2w_3$ can be implemented using only one Act 1 logic block.
- 6.17** Show how the function $f = w_1\bar{w}_3 + \bar{w}_1w_3 + w_2\bar{w}_3 + w_1\bar{w}_2$ can be realized using Act 1 logic blocks. Note that there are no NOT gates in the chip; hence complements of signals have to be generated using the multiplexers in the logic block.

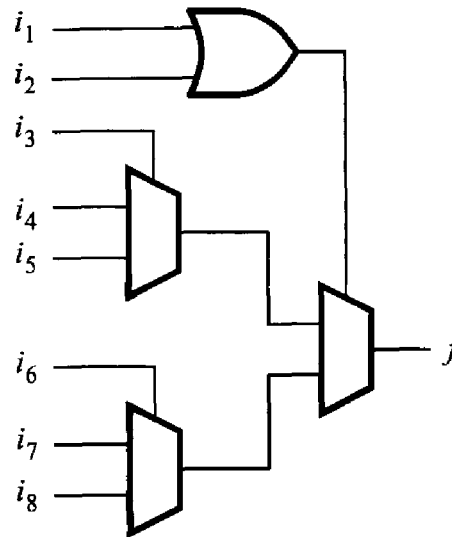


Figure P6.1 The Actel Act 1 logic block.

- *6.18** Consider the VHDL code in Figure P6.2. What type of circuit does the code represent? Comment on whether or not the style of code used is a good choice for the circuit that it represents.
- 6.19** Write VHDL code that represents the function in problem 6.1, using one selected signal assignment.
- 6.20** Write VHDL code that represents the function in problem 6.2, using one selected signal assignment.
- 6.21** Using a selected signal assignment, write VHDL code for a 4-to-2 binary encoder.
- 6.22** Using a conditional signal assignment, write VHDL code for an 8-to-3 binary encoder.
- 6.23** Derive the circuit for an 8-to-3 priority encoder.
- 6.24** Using a conditional signal assignment, write VHDL code for an 8-to-3 priority encoder.
- 6.25** Repeat problem 6.24, using an if-then-else statement.
- 6.26** Create a VHDL entity named *if2to4* that represents a 2-to-4 binary decoder using an if-then-else statement. Create a second entity named *h3to8* that represents the 3-to-8 binary decoder in Figure 6.17, using two instances of the *if2to4* entity.
- 6.27** Create a VHDL entity named *h6to64* that represents a 6-to-64 binary decoder. Use the treelike structure in Figure 6.18, in which the 6-to-64 decoder is built using five instances of the *h3to8* decoder created in problem 6.26.
- 6.28** Write VHDL code for a BCD-to-7-segment code converter, using a selected signal assignment.
- *6.29** Derive minimal sum-of-products expressions for the outputs *a*, *b*, and *c* of the 7-segment display in Figure 6.25.

```

LIBRARY ieee ;
USE ieee.std_logic_1164.all ;

ENTITY problem IS
    PORT ( w          : IN  STD_LOGIC_VECTOR(1 DOWNTO 0);
          En         : IN  STD_LOGIC ;
          y0, y1, y2, y3 : OUT STD_LOGIC ) ;
END problem ;

ARCHITECTURE Behavior OF problem IS
BEGIN
    PROCESS (w, En)
    BEGIN
        y0 <= '0' ; y1 <= '0' ; y2 <= '0' ; y3 <= '0' ;
        IF En = '1' THEN
            IF w = "00" THEN y0 <= '1' ;
            ELSIF w = "01" THEN y1 <= '1' ;
            ELSIF w = "10" THEN y2 <= '1' ;
            ELSE y3 <= '1' ;
            END IF ;
        END IF ;
    END PROCESS ;
END Behavior ;

```

Figure P6.2 Code for problem 6.18.

- 6.30** Derive minimal sum-of-products expressions for the outputs d , e , f , and g of the 7-segment display in Figure 6.25.
- 6.31** Design a shifter circuit, similar to the one in Figure 6.56, which can shift a four-bit input vector, $W = w_3w_2w_1w_0$, one bit-position to the right when the control signal $Right$ is equal to 1, and one bit-position to the left when the control signal $Left$ is equal to 1. When $Right = Left = 0$, the output of the circuit should be the same as the input vector. Assume that the condition $Right = Left = 1$ will never occur.
- 6.32** Figure 6.21 shows a block diagram of a ROM. A circuit that implements a small ROM, with four rows and four columns, is depicted in Figure P6.3. Each X in the figure represents a switch that determines whether the ROM produces a 1 or 0 when that location is read.
- Show how a switch (X) can be realized using a single NMOS transistor.
 - Draw the complete 4×4 ROM circuit, using your switches from part (a). The ROM should be programmed to store the bits 0101 in row 0 (the top row), 1010 in row 1, 1100 in row 2, and 0011 in row 3 (the bottom row).
 - Show how each (X) can be implemented as a programmable switch (as opposed to providing either a 1 or 0 permanently), using an EEPROM cell as shown in Figure 3.64. Briefly describe how the storage cell is used.

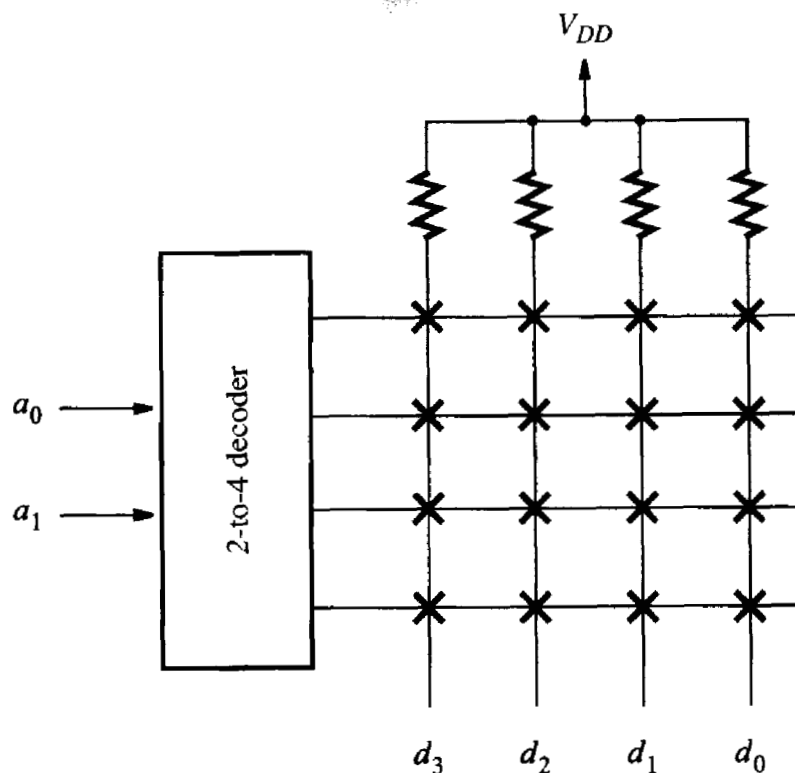


Figure P6.3 A 4×4 ROM circuit.

6.33 Show the complete circuit for a ROM using the storage cells designed in Part (a) of problem 6.33 that realizes the logic functions

$$d_3 = a_0 \oplus a_1$$

$$d_2 = \overline{a_0 \oplus a_1}$$

$$d_1 = a_0 a_1$$

$$d_0 = a_0 + a_1$$

REFERENCES

1. C. E. Shannon, "Symbolic Analysis of Relay and Switching Circuits," *Transactions AIEE* 57 (1938), pp. 713–723.
2. Actel Corporation, "MX FPGA Data Sheet," <http://www.actel.com>.
3. QuickLogic Corporation, "pASIC 3 FPGA Data Sheet," <http://www.quicklogic.com>.

4. R. Landers, S. Mahant-Shetti, and C. Lemonds, "A Multiplexer-Based Architecture for High-Density, Low Power Gate Arrays," *IEEE Journal of Solid-State Circuits* 30, no. 4 (April 1995).
5. Z. Navabi, *VHDL—Analysis and Modeling of Digital Systems*, 2nd ed. (McGraw-Hill: New York, 1998).
6. J. Bhasker, *A VHDL Primer*, 3rd ed. (Prentice-Hall: Englewood Cliffs, NJ, 1998).
7. D. L. Perry, *VHDL*, 3rd ed. (McGraw-Hill: New York, 1998).
8. K. Skahill, *VHDL for Programmable Logic* (Addison-Wesley: Menlo Park, CA, 1996).
9. A. Dewey, *Analysis and Design of Digital Systems with VHDL* (PWS Publishing Co.: Boston, 1997).
10. D. J. Smith, *HDL Chip Design* (Doone Publications: Madison, AL, 1996).

FLIP-FLOPS, REGISTERS, COUNTERS, AND A SIMPLE PROCESSOR

CHAPTER OBJECTIVES

In this chapter you will learn about:

- Logic circuits that can store information
- Flip-flops, which store a single bit
- Registers, which store multiple bits
- Shift registers, which shift the contents of the register
- Counters of various types
- VHDL constructs used to implement storage elements
- Design of small subsystems

In previous chapters we considered combinational circuits where the value of each output depends solely on the values of signals applied to the inputs. There exists another class of logic circuits in which the values of the outputs depend not only on the present values of the inputs but also on the past behavior of the circuit. Such circuits include storage elements that store the values of logic signals. The contents of the storage elements are said to represent the *state* of the circuit. When the circuit's inputs change values, the new input values either leave the circuit in the same state or cause it to change into a new state. Over time the circuit changes through a sequence of states as a result of changes in the inputs. Circuits that behave in this way are referred to as *sequential circuits*.

In this chapter we will introduce circuits that can be used as storage elements. But first, we will motivate the need for such circuits by means of a simple example. Suppose that we wish to control an alarm system, as shown in Figure 7.1. The alarm mechanism responds to the control input On/\overline{Off} . It is turned on when $On/\overline{Off} = 1$, and it is off when $On/\overline{Off} = 0$. The desired operation is that the alarm turns on when the sensor generates a positive voltage signal, *Set*, in response to some undesirable event. Once the alarm is triggered, it must remain active even if the sensor output goes back to zero. The alarm is turned off manually by means of a *Reset* input. The circuit requires a memory element to remember that the alarm has to be active until the *Reset* signal arrives.

Figure 7.2 gives a rudimentary memory element, consisting of a loop that has two inverters. If we assume that $A = 0$, then $B = 1$. The circuit will maintain these values indefinitely. We say that the circuit is in the *state* defined by these values. If we assume that $A = 1$, then $B = 0$, and the circuit will remain in this second state indefinitely. Thus the circuit has two possible states. This circuit is not useful, because it lacks some practical means for changing its state.

A more useful circuit is shown in Figure 7.3. It includes a mechanism for changing the state of the circuit in Figure 7.2, using two transmission gates of the type discussed in section 3.9. One transmission gate, *TG1*, is used to connect the *Data* input terminal to point

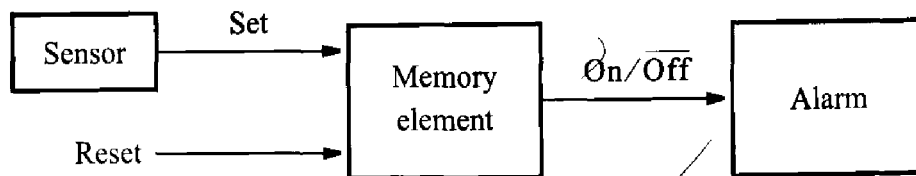


Figure 7.1 Control of an alarm system.

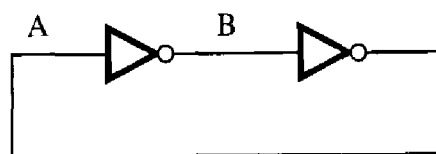


Figure 7.2 A simple memory element.

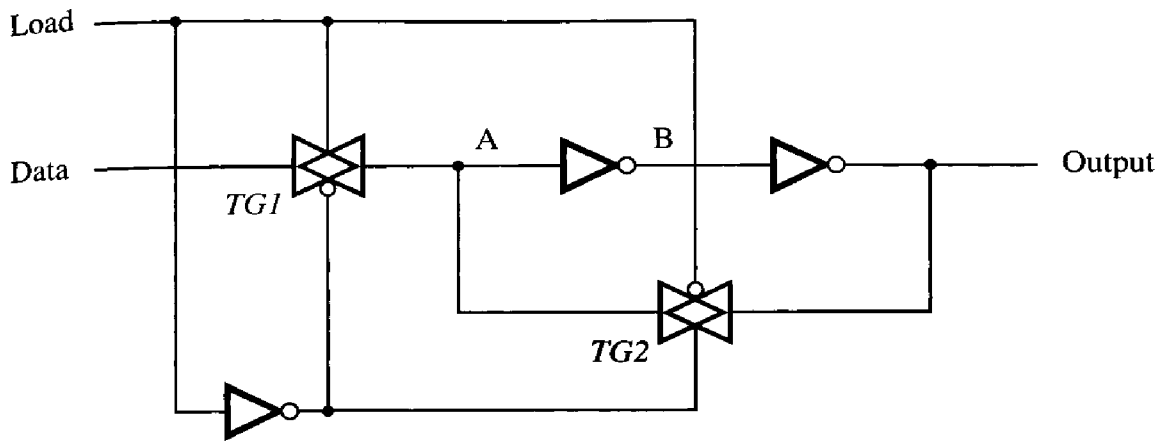


Figure 7.3 A controlled memory element.

A in the circuit. The second, $TG2$, is used as a switch in the *feedback loop* that maintains the state of the circuit. The transmission gates are controlled by the $Load$ signal. If $Load = 1$, then $TG1$ is on and the point A will have the same value as the $Data$ input. Since the value presently stored at $Output$ may not be the same value as $Data$, the feedback loop is broken by having $TG2$ turned off when $Load = 1$. When $Load$ changes to zero, then $TG1$ turns off and $TG2$ turns on. The feedback path is closed and the memory element will retain its state as long as $Load = 0$. This memory element cannot be applied directly to the system in Figure 7.1, but it is useful for many other applications, as we will see later.

7.1 BASIC LATCH

Instead of using the transmission gates, we can construct a similar circuit using ordinary logic gates. Figure 7.4 presents a memory element built with NOR gates. Its inputs, Set and $Reset$, provide the means for changing the state, Q , of the circuit. A more usual way of drawing this circuit is given in Figure 7.5a, where the two NOR gates are said to be connected in cross-coupled style. The circuit is referred to as a *basic latch*. Its behavior is described by the table in Figure 7.5b. When both inputs, R and S , are equal to 0 the latch maintains its existing state. This state may be either $Q_a = 0$ and $Q_b = 1$, or $Q_a = 1$ and $Q_b = 0$, which is indicated in the table by stating that the Q_a and Q_b outputs have values

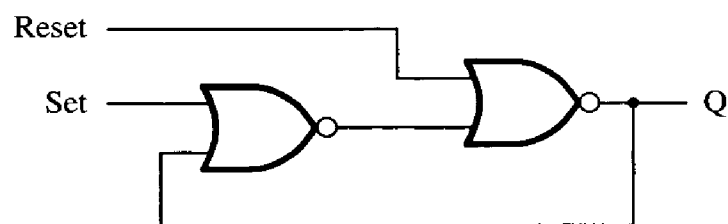


Figure 7.4 A memory element with NOR gates.

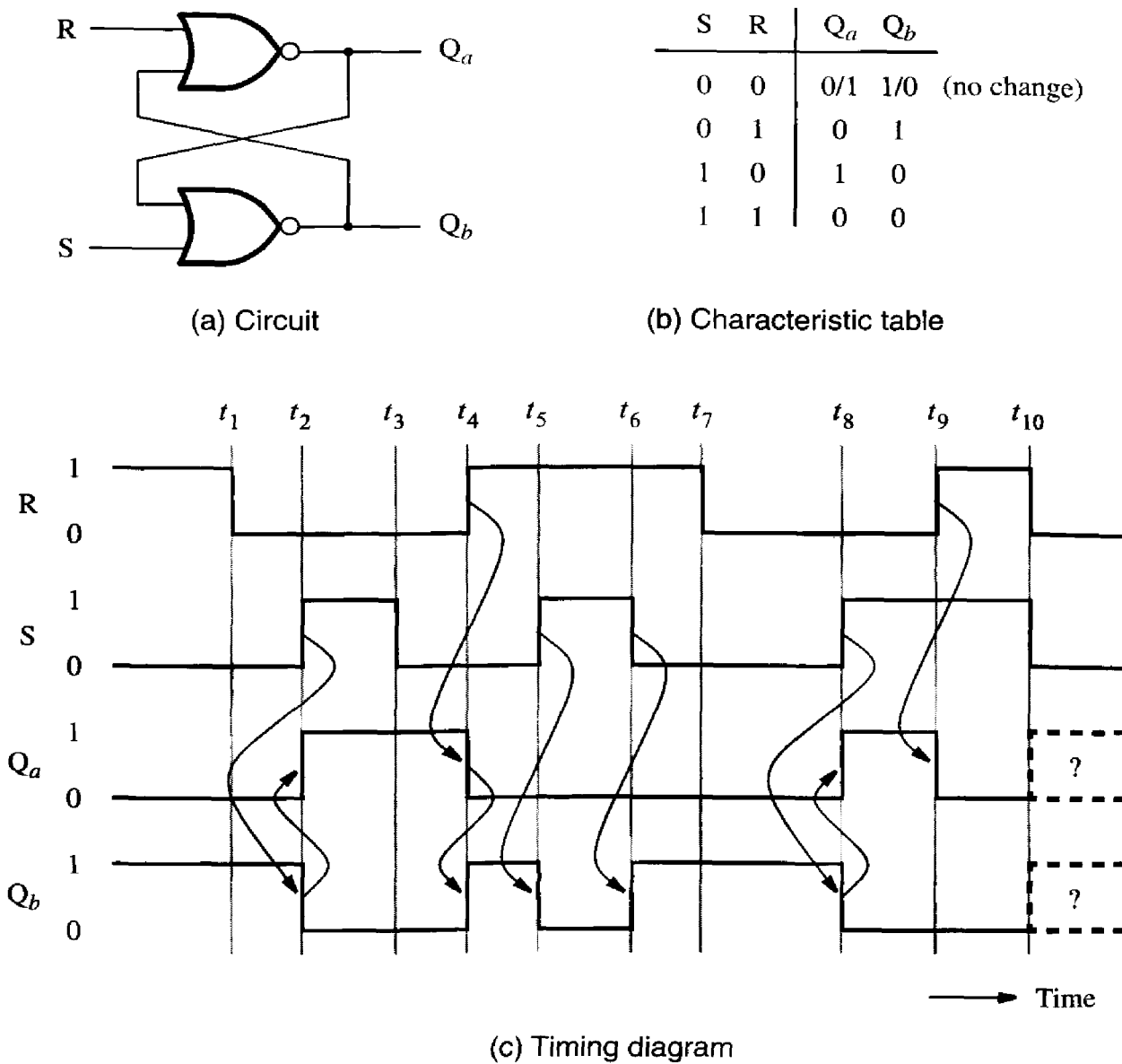


Figure 7.5 A basic latch built with NOR gates.

0/1 and 1/0, respectively. Observe that Q_a and Q_b are complements of each other in this case. When $R = 0$ and $S = 1$, the latch is *set* into a state where $Q_a = 1$ and $Q_b = 0$. When $R = 1$ and $S = 0$, the latch is *reset* into a state where $Q_a = 0$ and $Q_b = 1$. The fourth possibility is to have $R = S = 1$. In this case both Q_a and Q_b will be 0. The table in Figure 7.5b resembles a truth table. However, since it does not represent a combinational circuit in which the values of the outputs are determined solely by the current values of the inputs, it is often called a *characteristic table* rather than a truth table.

Figure 7.5c gives a timing diagram for the latch, assuming that the propagation delay through the NOR gates is negligible. Of course, in a real circuit the changes in the waveforms would be delayed according to the propagation delays of the gates. We assume that initially $Q_a = 0$ and $Q_b = 1$. The state of the latch remains unchanged until time t_2 , when S becomes equal to 1, causing Q_b to change to 0, which in turn causes Q_a to change to 1.

The causality relationship is indicated by the arrows in the diagram. When S goes to 0 at t_3 , there is no change in the state because both S and R are then equal to 0. At t_4 we have $R = 1$, which causes Q_a to go to 0, which in turn causes Q_b to go to 1. At t_5 both S and R are equal to 1, which forces both Q_a and Q_b to be equal to 0. As soon as S returns to 0, at t_6 , Q_b becomes equal to 1 again. At t_8 we have $S = 1$ and $R = 0$, which causes $Q_b = 0$ and $Q_a = 1$. An interesting situation occurs at t_{10} . From t_9 to t_{10} we have $Q_a = Q_b = 0$ because $R = S = 1$. Now if both R and S change to 0 at t_{10} , both Q_a and Q_b will go to 1. But having both Q_a and Q_b equal to 1 will immediately force $Q_a = Q_b = 0$. There will be an oscillation between $Q_a = Q_b = 0$ and $Q_a = Q_b = 1$. If the delays through the two NOR gates are exactly the same, the oscillation will continue indefinitely. In a real circuit there will invariably be some difference in the delays through these gates, and the latch will eventually settle into one of its two stable states, but we don't know which state it will be. This uncertainty is indicated in the waveforms by dashed lines.

The oscillations discussed above illustrate that even though the basic latch is a simple circuit, careful analysis has to be done to fully appreciate its behavior. In general, any circuit that contains one or more feedback paths, such that the state of the circuit depends on the propagation delays through logic gates, has to be designed carefully. We discuss timing issues in detail in Chapter 9.

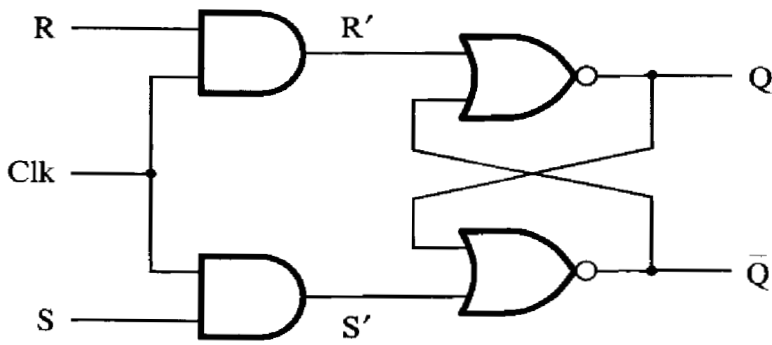
The latch in Figure 7.5a can perform the functions needed for the memory element in Figure 7.1, by connecting the *Set* signal to the S input and *Reset* to the R input. The Q_a output provides the desired *On/Off* signal. To initialize the operation of the alarm system, the latch is reset. Thus the alarm is off. When the sensor generates the logic value 1, the latch is set and Q_a becomes equal to 1. This turns on the alarm mechanism. If the sensor output returns to 0, the latch retains its state where $Q_a = 1$; hence the alarm remains turned on. The only way to turn off the alarm is by resetting the latch, which is accomplished by making the *Reset* input equal to 1.

7.2 GATED SR LATCH

In section 7.1 we saw that the basic SR latch can serve as a useful memory element. It remembers its state when both the S and R inputs are 0. It changes its state in response to changes in the signals on these inputs. The state changes occur at the time when the changes in the signals occur. If we cannot control the time of such changes, then we don't know when the latch may change its state.

In the alarm system of Figure 7.1, it may be desirable to be able to enable or disable the entire system by means of a control input, *Enable*. Thus when enabled, the system would function as described above. In the disabled mode, changing the *Set* input from 0 to 1 would not cause the alarm to turn on. The latch in Figure 7.5a cannot provide the desired operation. But the latch circuit can be modified to respond to the input signals S and R only when $Enable = 1$. Otherwise, it would maintain its state.

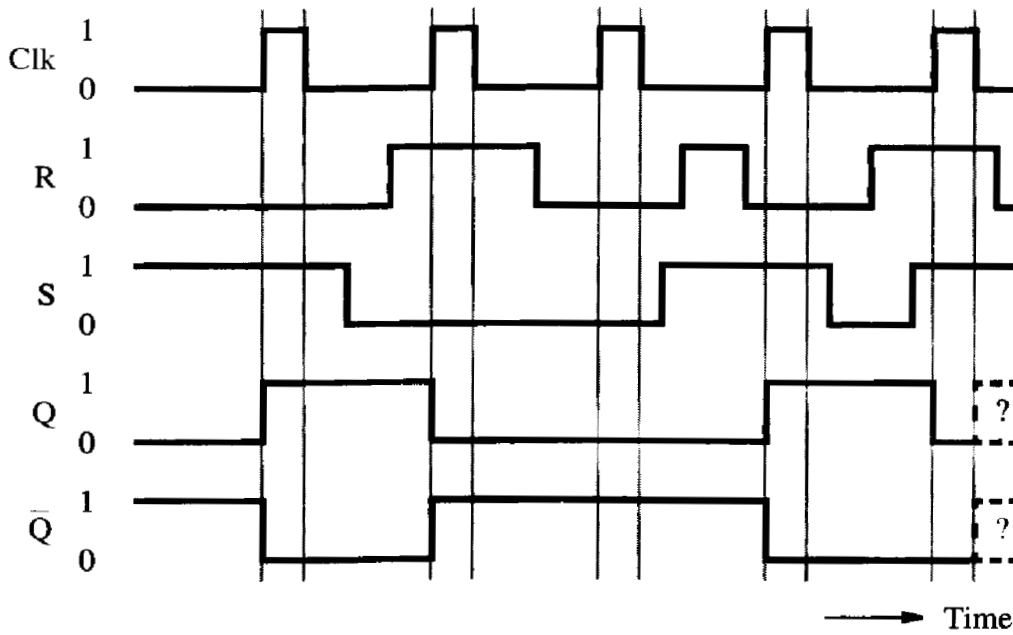
The modified circuit is depicted in Figure 7.6a. It includes two AND gates that provide the desired control. When the control signal Clk is equal to 0, the S' and R' inputs to the latch will be 0, regardless of the values of signals S and R . Hence the latch will maintain its



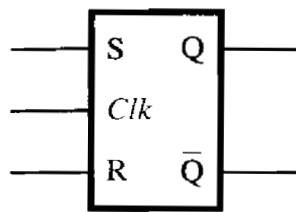
(a) Circuit

Clk	S	R	$Q(t+1)$
0	x	x	$Q(t)$ (no change)
1	0	0	$Q(t)$ (no change)
1	0	1	0
1	1	0	1
1	1	1	x

(b) Characteristic table



(c) Timing diagram



(d) Graphical symbol

Figure 7.6 Gated SR latch.

existing state as long as $Clk = 0$. When Clk changes to 1, the S' and R' signals will be the same as the S and R signals, respectively. Therefore, in this mode the latch will behave as we described in section 7.1. Note that we have used the name Clk for the control signal that allows the latch to be set or reset, rather than call it the *Enable* signal. The reason is that such circuits are often used in digital systems where it is desirable to allow the changes in

the states of memory elements to occur only at well-defined time intervals, as if they were controlled by a clock. The control signal that defines these time intervals is usually called the *clock signal*. The name *Clk* is meant to reflect this nature of the signal.

Circuits of this type, which use a control signal, are called *gated latches*. Because our circuit exhibits set and reset capability, it is called a *gated SR latch*. Figure 7.6b describes its behavior. It defines the state of the Q output at time $t + 1$, namely, $Q(t + 1)$, as a function of the inputs S , R , and Clk . When $Clk = 0$, the latch will remain in the state it is in at time t , that is, $Q(t)$, regardless of the values of inputs S and R . This is indicated by specifying $S = x$ and $R = x$, where x means that the signal value can be either 0 or 1. (Recall that we already used this notation in Chapter 4.) When $Clk = 1$, the circuit behaves as the basic latch in Figure 7.5. It is set by $S = 1$ and reset by $R = 1$. The last row of the table, where $S = R = 1$, shows that the state $Q(t + 1)$ is undefined because we don't know whether it will be 0 or 1. This corresponds to the situation described in section 7.1 in conjunction with the timing diagram in Figure 7.5 at time t_{10} . At this time both S and R inputs go from 1 to 0, which causes the oscillatory behavior that we discussed. If $S = R = 1$, this situation will occur as soon as Clk goes from 1 to 0. To ensure a meaningful operation of the gated SR latch, it is essential to avoid the possibility of having both the S and R inputs equal to 1 when Clk changes from 1 to 0.

A timing diagram for the gated SR latch is given in Figure 7.6c. It shows Clk as a periodic signal that is equal to 1 at regular time intervals to suggest that this is how the clock signal usually appears in a real system. The diagram presents the effect of several combinations of signal values. Observe that we have labeled one output as Q and the other as its complement \bar{Q} , rather than Q_a and Q_b as in Figure 7.5. Since the undefined mode, where $S = R = 1$, must be avoided in practice, the normal operation of the latch will have the outputs as complements of each other. Moreover, we will often say that the latch is *set* when $Q = 1$, and it is *reset* when $Q = 0$. A graphical symbol for the gated SR latch is given in Figure 7.6d.

7.2.1 GATED SR LATCH WITH NAND GATES

So far we have implemented the basic latch with cross-coupled NOR gates. We can also construct the latch with NAND gates. Using this approach, we can implement the gated SR latch as depicted in Figure 7.7. The behavior of this circuit is described by the table in Figure 7.6b. Note that in this circuit, the clock is gated by NAND gates, rather than by

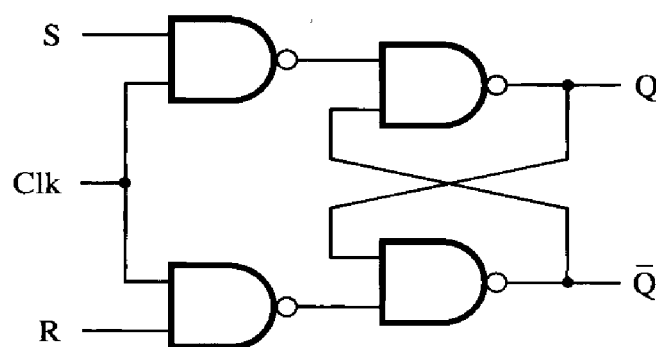


Figure 7.7 Gated SR latch with NAND gates.

AND gates. Note also that the S and R inputs are reversed in comparison with the circuit in Figure 7.6a. The circuit with NAND gates requires fewer transistors than the circuit with AND gates. We will use the circuit in Figure 7.7, in preference to the circuit in Figure 7.6a.

7.3 GATED D LATCH

In section 7.2 we presented the gated SR latch and showed how it can be used as the memory element in the alarm system of Figure 7.1. This latch is useful for many other applications. In this section we describe another gated latch that is even more useful in practice. It has a single data input, called D , and it stores the value on this input, under the control of a clock signal. It is called a *gated D latch*.

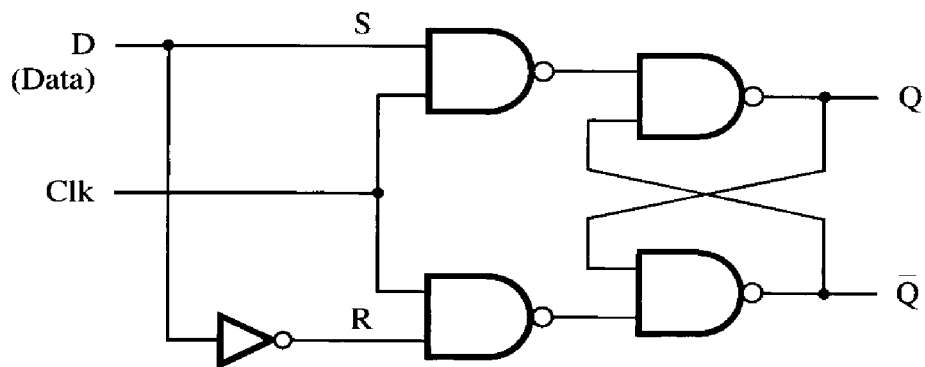
To motivate the need for a gated D latch, consider the adder/subtractor unit discussed in Chapter 5 (Figure 5.13). When we described how that circuit is used to add numbers, we did not discuss what is likely to happen with the sum bits that are produced by the adder. Adder/subtractor units are often used as part of a computer. The result of an addition or subtraction operation is often used as an operand in a subsequent operation. Therefore, it is necessary to be able to remember the values of the sum bits generated by the adder until they are needed again. We might think of using the basic latches to remember these bits, one bit per latch. In this context, instead of saying that a latch remembers the value of a bit, it is more illuminating to say that the latch *stores* the value of the bit or simply “stores the bit.” We should think of the latch as a storage element.

But can we obtain the desired operation using the basic latches? We can certainly reset all latches before the addition operation begins. Then we would expect that by connecting a sum bit to the S input of a latch, the latch would be set to 1 if the sum bit has the value 1; otherwise, the latch would remain in the 0 state. This would work fine if all sum bits are 0 at the start of the addition operation and, after some propagation delay through the adder, some of these bits become equal to 1 to give the desired sum. Unfortunately, the propagation delays that exist in the adder circuit cause a big problem in this arrangement. Suppose that we use a ripple-carry adder. When the X and Y inputs are applied to the adder, the sum outputs may alternate between 0 and 1 a number of times as the carries ripple through the circuit. This situation was illustrated in the timing diagram in Figure 5.21. The problem is that if we connect a sum bit to the S input of a latch, then if the sum bit is temporarily a 1 and then settles to 0 in the final result, the latch will remain set to 1 erroneously.

The problem caused by the alternating values of the sum bits in the adder could be solved by using the gated SR latches, instead of the basic latches. Then we could arrange that the clock signal is 0 during the time needed by the adder to produce a correct sum. After allowing for the maximum propagation delay in the adder circuit, the clock should go to 1 to store the values of the sum bits in the gated latches. As soon as the values have been stored, the clock can return to 0, which ensures that the stored values will be retained until the next time the clock goes to 1. To achieve the desired operation, we would also have to reset all latches to 0 prior to loading the sum-bit values into these latches. This is an awkward way of dealing with the problem, and it is preferable to use the gated D latches instead.

Figure 7.8a shows the circuit for a gated D latch. It is based on the gated SR latch, but instead of using the S and R inputs separately, it has just one data input, D . For convenience we have labeled the points in the circuit that are equivalent to the S and R inputs. If $D = 1$, then $S = 1$ and $R = 0$, which forces the latch into the state $Q = 1$. If $D = 0$, then $S = 0$ and $R = 1$, which causes $Q = 0$. Of course, the changes in state occur only when $Clk = 1$.

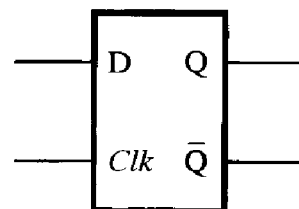
It is important to observe that in this circuit it is impossible to have the troublesome situation where $S = R = 1$. In the gated D latch, the output Q merely tracks the value of the input D while $Clk = 1$. As soon as Clk goes to 0, the state of the latch is frozen until the next time the clock signal goes to 1. Therefore, the gated D latch stores the value of the D



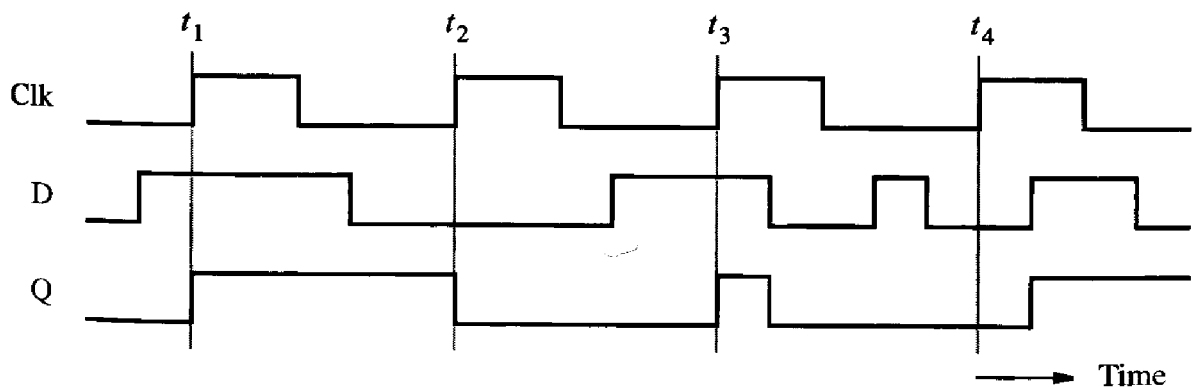
(a) Circuit

Clk	D	$Q(t+1)$
0	x	$Q(t)$
1	0	0
1	1	1

(b) Characteristic table

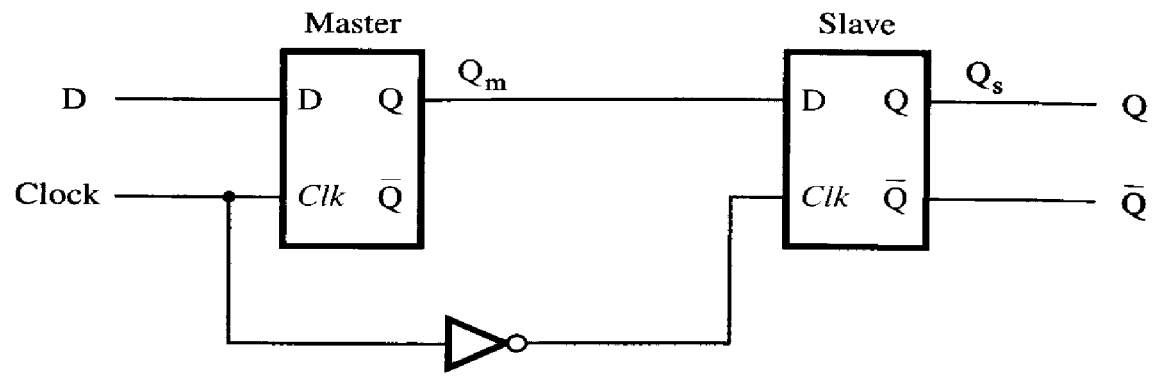


(c) Graphical symbol

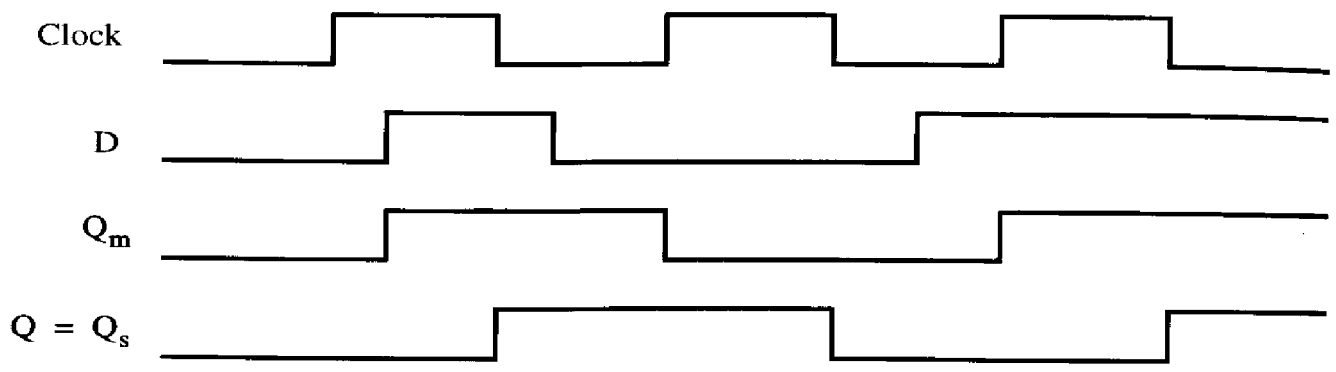


(d) Timing diagram

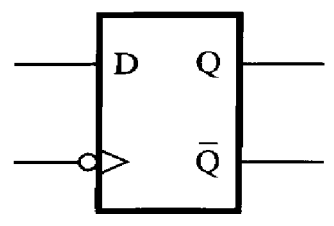
Figure 7.8 Gated D latch.



(a) Circuit



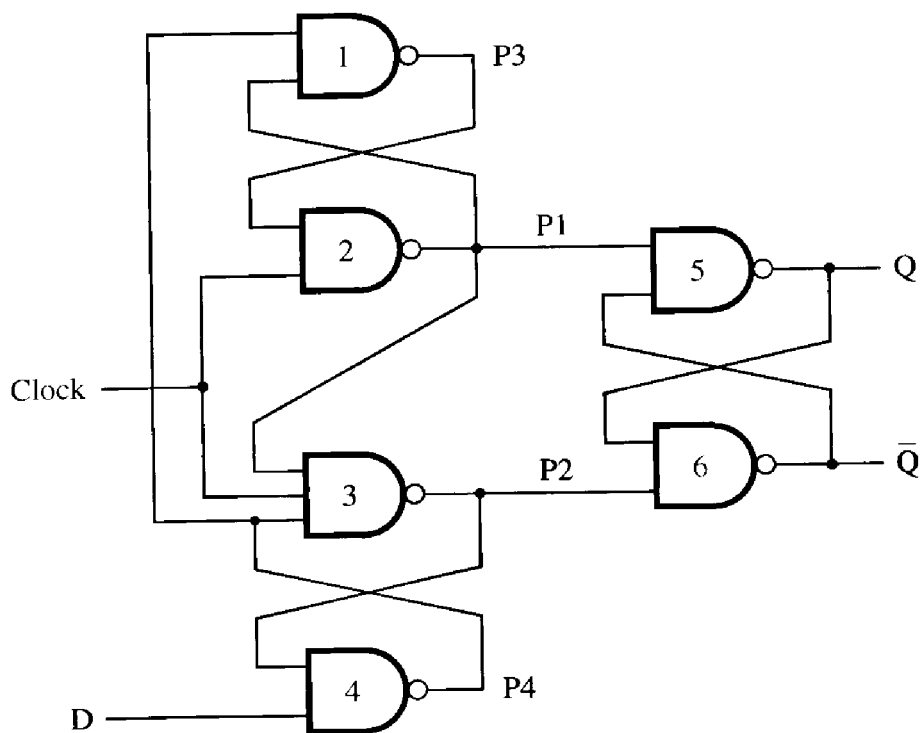
(b) Timing diagram



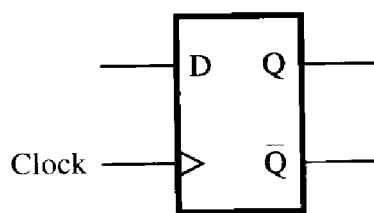
(c) Graphical symbol

Figure 7.10 Master-slave D flip-flop.

the clock. A different circuit that accomplishes the same task is presented in Figure 7.11a. It requires only six NAND gates and, hence, fewer transistors. The operation of the circuit is as follows. When $Clock = 0$, the outputs of gates 2 and 3 are high. Thus $P1 = P2 = 1$, which maintains the output latch, comprising gates 5 and 6, in its present state. At the same time, the signal $P3$ is equal to D , and $P4$ is equal to its complement \bar{D} . When $Clock$ changes



(a) Circuit



(b) Graphical symbol

Figure 7.11 A positive-edge-triggered D flip-flop.

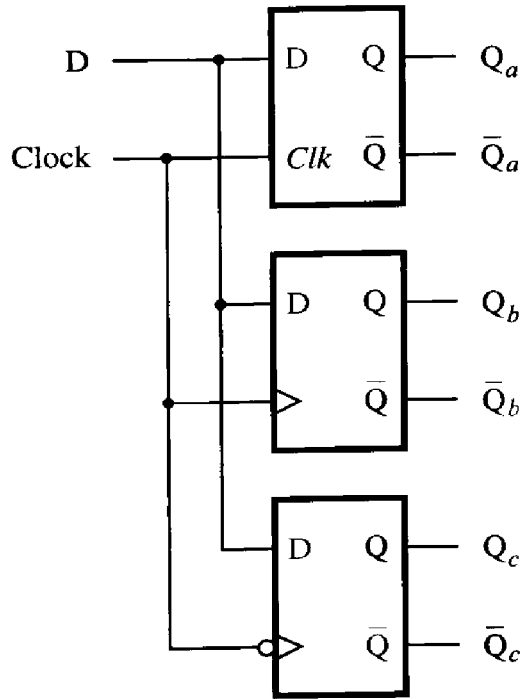
to 1, the following changes take place. The values of $P3$ and $P4$ are transmitted through gates 2 and 3 to cause $P1 = \bar{D}$ and $P2 = D$, which sets $Q = D$ and $\bar{Q} = \bar{D}$. To operate reliably, $P3$ and $P4$ must be stable when $Clock$ changes from 0 to 1. Hence the setup time of the flip-flop is equal to the delay from the D input through gates 4 and 1 to $P3$. The hold time is given by the delay through gate 3 because once $P2$ is stable, the changes in D no longer matter.

For proper operation it is necessary to show that, after $Clock$ changes to 1, any further changes in D will not affect the output latch as long as $Clock = 1$. We have to consider two cases. Suppose first that $D = 0$ at the positive edge of the clock. Then $P2 = 0$, which will keep the output of gate 4 equal to 1 as long as $Clock = 1$, regardless of the value of the D input. The second case is if $D = 1$ at the positive edge of the clock. Then $P1 = 0$, which forces the outputs of gates 1 and 3 to be equal to 1, regardless of the D input. Therefore, the flip-flop ignores changes in the D input while $Clock = 1$.

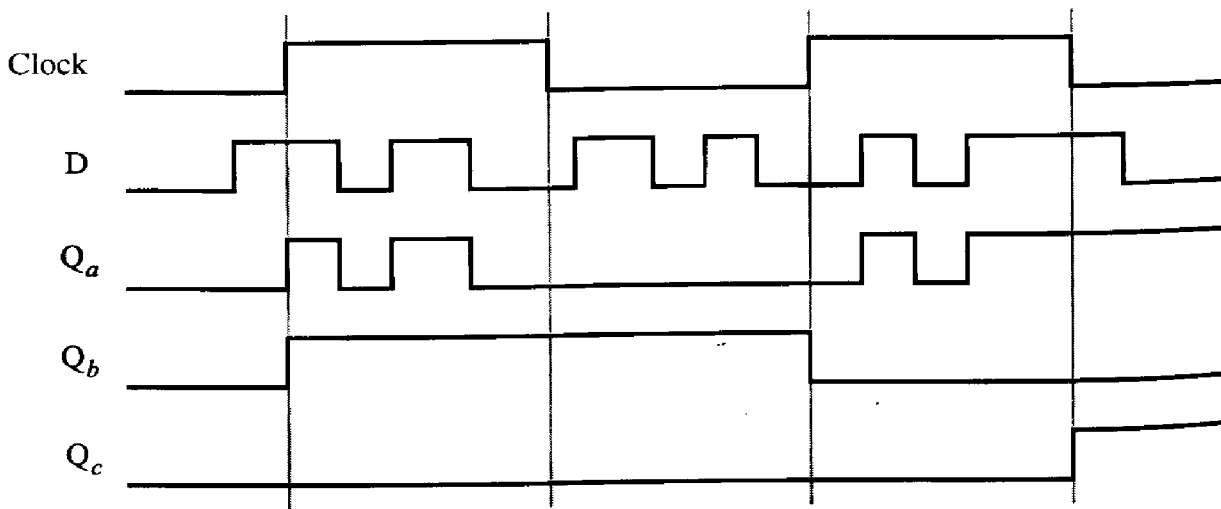
Figure 7.11b gives a graphical symbol for this flip-flop. The clock input indicates that the positive edge of the clock is the active edge. A similar circuit, constructed with NOR gates, can be used as a negative-edge-triggered flip-flop.

Level-Sensitive versus Edge-Triggered Storage Elements

Figure 7.12 shows three different types of storage elements that are driven by the same data and clock inputs. The first element is a gated D latch, which is level sensitive. The second one is a positive-edge-triggered D flip-flop, and the third one is a negative-edge-triggered D flip-flop. To accentuate the differences between these storage elements, the



(a) Circuit



(b) Timing diagram

Figure 7.12 Comparison of level-sensitive and edge-triggered D storage elements.

D input changes its values more than once during each half of the clock cycle. Observe that the gated D latch follows the D input as long as the clock is high. The positive-edge-triggered flip-flop responds only to the value of D when the clock changes from 0 to 1. The negative-edge-triggered flip-flop responds only to the value of D when the clock changes from 1 to 0.

7.4.3 D FLIP-FLOPS WITH CLEAR AND PRESET

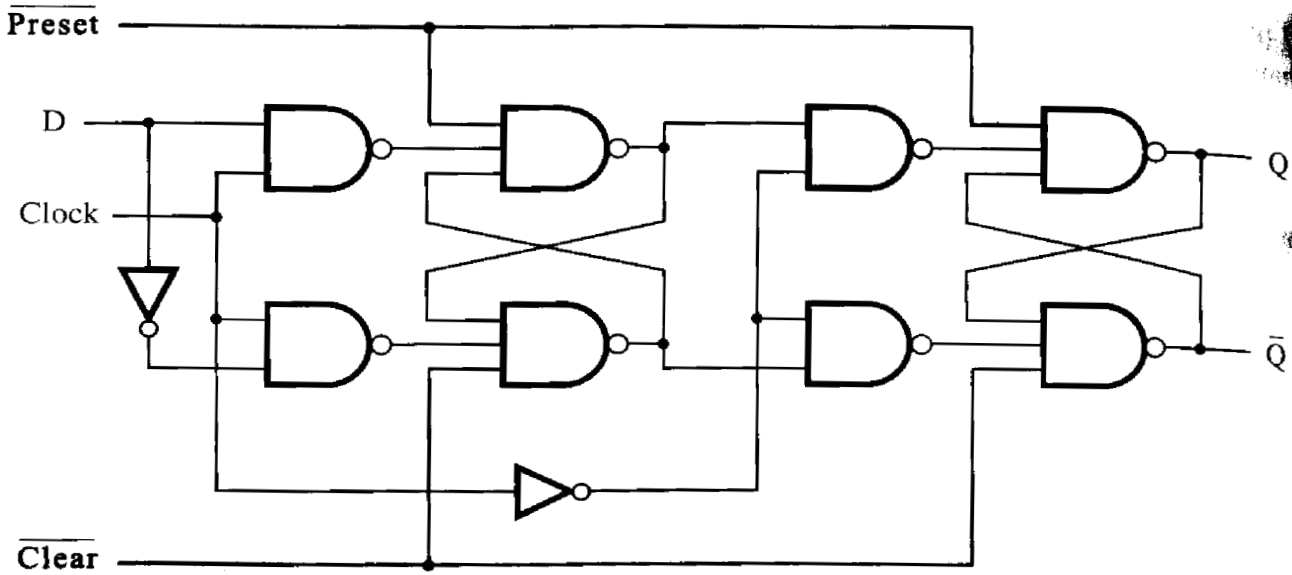
Flip-flops are often used for implementation of circuits that can have many possible states, where the response of the circuit depends not only on the present values of the circuit's inputs but also on the particular state that the circuit is in at that time. We will discuss a general form of such circuits in Chapter 8. A simple example is a counter circuit that counts the number of occurrences of some event, perhaps passage of time. We will discuss counters in detail in section 7.9. A counter comprises a number of flip-flops, whose outputs are interpreted as a number. The counter circuit has to be able to increment or decrement the number. It is also important to be able to force the counter into a known initial state (count). Obviously, it must be possible to clear the count to zero, which means that all flip-flops must have $Q = 0$. It is equally useful to be able to preset each flip-flop to $Q = 1$, to insert some specific count as the initial value in the counter. These features can be incorporated into the circuits of Figures 7.10 and 7.11 as follows.

Figure 7.13a shows an implementation of the circuit in Figure 7.10a using NAND gates. The master stage is just the gated D latch of Figure 7.8a. Instead of using another latch of the same type for the slave stage, we can use the slightly simpler gated SR latch of Figure 7.7. This eliminates one NOT gate from the circuit.

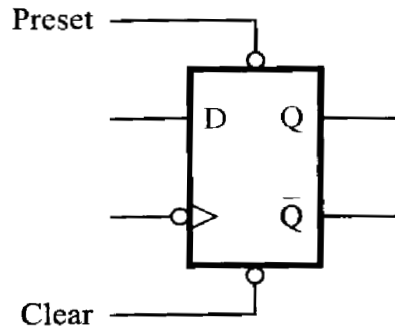
A simple way of providing the clear and preset capability is to add an extra input to each NAND gate in the cross-coupled latches, as indicated in blue. Placing a 0 on the *Clear* input will force the flip-flop into the state $Q = 0$. If *Clear* = 1, then this input will have no effect on the NAND gates. Similarly, *Preset* = 0 forces the flip-flop into the state $Q = 1$, while *Preset* = 1 has no effect. To denote that the *Clear* and *Preset* inputs are active when their value is 0, we placed an overbar on the names in the figure. We should note that the circuit that uses this flip-flop should not try to force both *Clear* and *Preset* to 0 at the same time. A graphical symbol for this flip-flop is shown in Figure 7.13b.

A similar modification can be done on the edge-triggered flip-flop of Figure 7.11a, as indicated in Figure 7.14a. Again, both *Clear* and *Preset* inputs are active low. They do not disturb the flip-flop when they are equal to 1.

In the circuits in Figures 7.13a and 7.14a, the effect of a low signal on either the *Clear* or *Preset* input is immediate. For example, if *Clear* = 0 then the flip-flop goes into the state $Q = 0$ immediately, regardless of the value of the clock signal. In such a circuit, where the *Clear* signal is used to clear a flip-flop without regard to the clock signal, we say that the flip-flop has an *asynchronous clear*. In practice, it is often preferable to clear the flip-flops on the active edge of the clock. Such *synchronous clear* can be accomplished as shown in Figure 7.15. The flip-flop operates normally when the *Clear* input is equal to 1. But if *Clear* goes to 0, then on the next positive edge of the clock the flip-flop will be cleared to 0. We will examine the clearing of flip-flops in more detail in section 7.10.



(a) Circuit

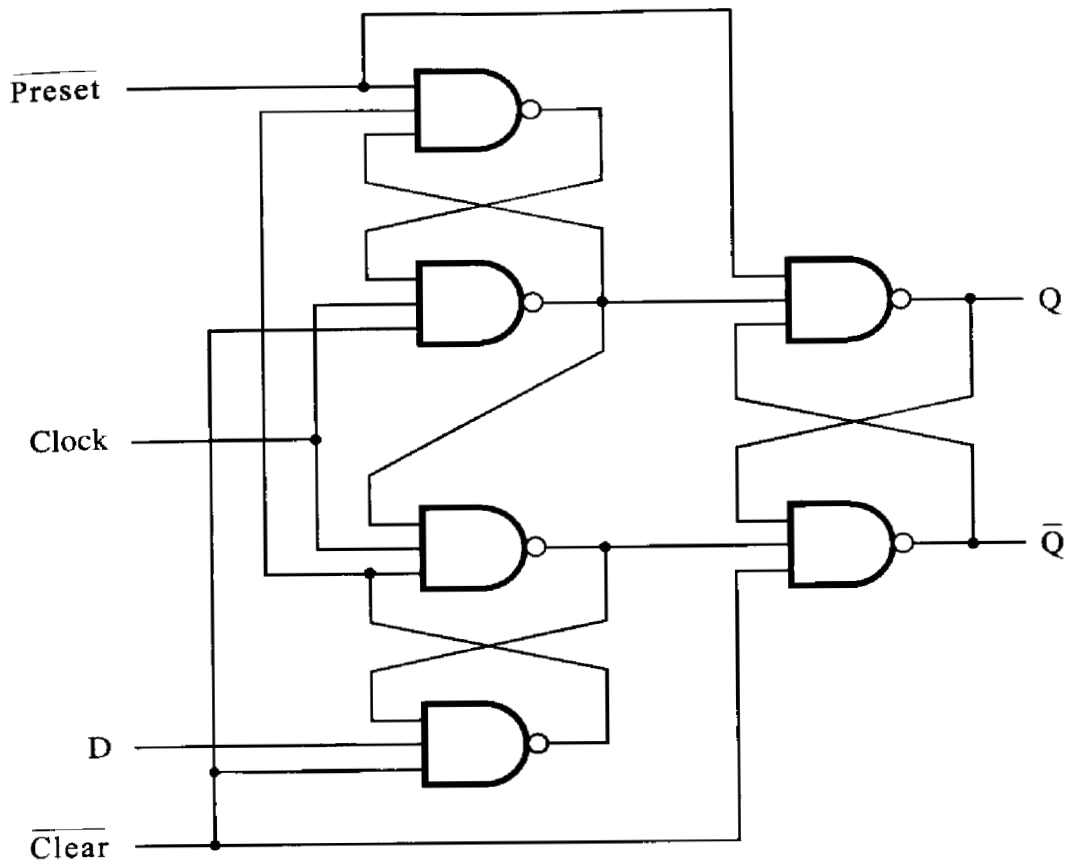


(b) Graphical symbol

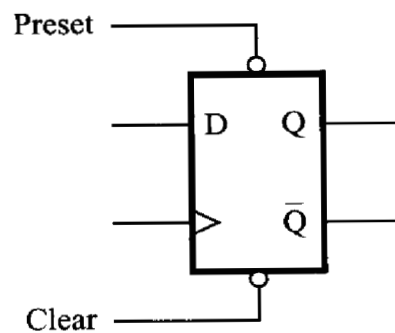
Figure 7.13 Master-slave D flip-flop with *Clear* and *Preset*.

7.5 T FLIP-FLOP

The D flip-flop is a versatile storage element that can be used for many purposes. By including some simple logic circuitry to drive its input, the D flip-flop may appear to be a different type of storage element. An interesting modification is presented in Figure 7.16a. This circuit uses a positive-edge-triggered D flip-flop. The *feedback* connections make the input signal D equal to either the value of Q or \overline{Q} under the control of the signal that is labeled T . On each positive edge of the clock, the flip-flop may change its state $Q(t)$. If $T = 0$, then $D = Q$ and the state will remain the same, that is, $Q(t + 1) = Q(t)$. But if $T = 1$, then $D = \overline{Q}$ and the new state will be $Q(t + 1) = \overline{Q}(t)$. Therefore, the overall operation of the circuit is that it retains its present state if $T = 0$, and it reverses its present state if $T = 1$.



(a) Circuit



(b) Graphical symbol

Figure 7.14 Positive-edge-triggered D flip-flop with *Clear* and *Preset*.

The operation of the circuit is specified in the form of a characteristic table in Figure 7.16b. Any circuit that implements this table is called a *T flip-flop*. The name T flip-flop derives from the behavior of the circuit, which “toggles” its state when $T = 1$. The toggle feature makes the T flip-flop a useful element for building counter circuits, as we will see in section 7.9.

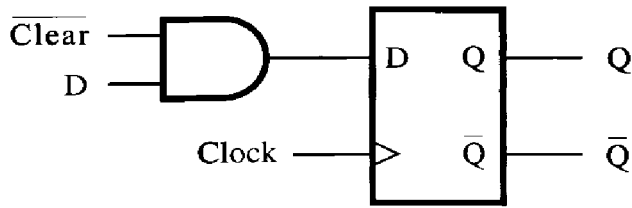
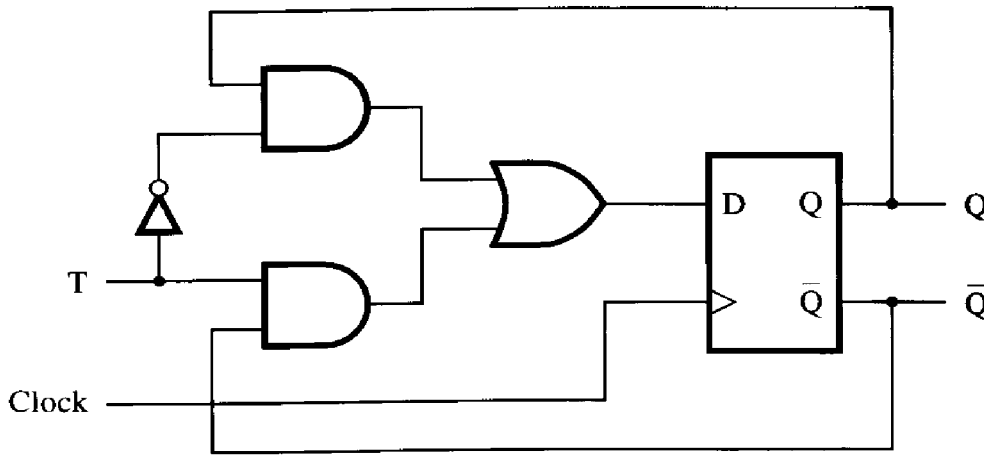


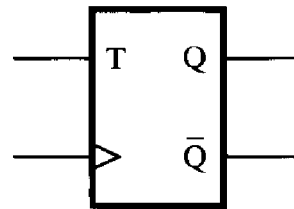
Figure 7.15 Synchronous reset for a D flip-flop.



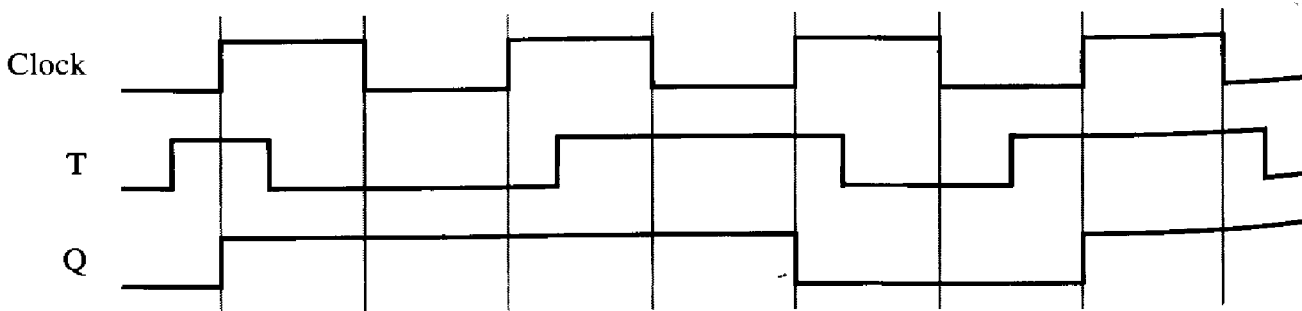
(a) Circuit

T	$Q(t+1)$
0	$Q(t)$
1	$\bar{Q}(t)$

(b) Characteristic table



(c) Graphical symbol



(d) Timing diagram

Figure 7.16 T flip-flop.

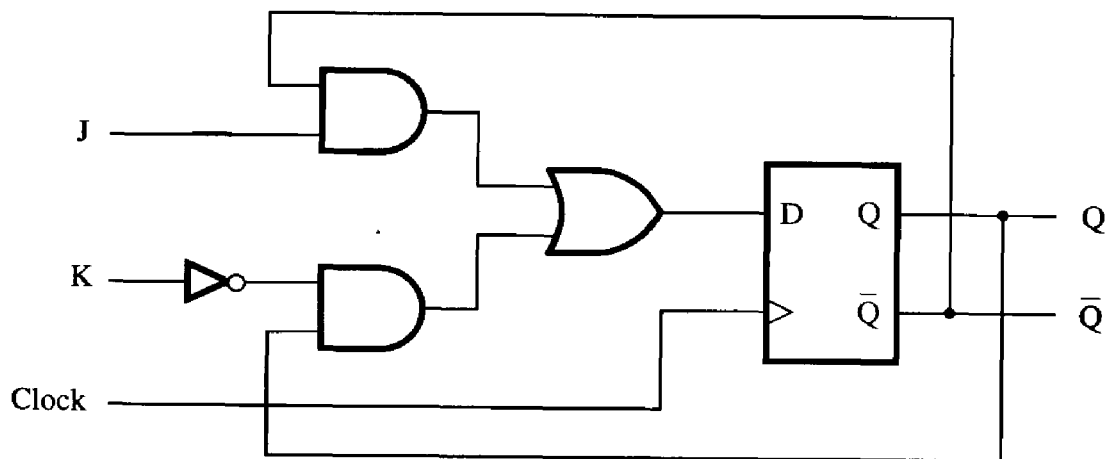
7.5.1 CONFIGURABLE FLIP-FLOPS

For some circuits one type of flip-flop may lead to a more efficient implementation than a different type of flip-flop. In general purpose chips like PLDs, the flip-flops that are provided are sometimes *configurable*, which means that a flip-flop circuit can be configured to be either D, T, or some other type. For example, in some PLDs the flip-flops can be configured as either D or T types (see problems 7.6 and 7.8).

7.6 JK FLIP-FLOP

Another interesting circuit can be derived from Figure 7.16a. Instead of using a single control input, T , we can use two inputs, J and K , as indicated in Figure 7.17a. For this circuit the input D is defined as

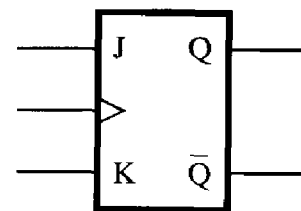
$$D = J\bar{Q} + \bar{K}Q$$



(a) Circuit

J	K	$Q(t+1)$
0	0	$Q(t)$
0	1	0
1	0	1
1	1	$\bar{Q}(t)$

(b) Characteristic table



(c) Graphical symbol

Figure 7.17 JK flip-flop.

A corresponding characteristic table is given in Figure 7.17*b*. The circuit is called a *JK flip-flop*. It combines the behaviors of SR and T flip-flops in a useful way. It behaves as the SR flip-flop, where $J = S$ and $K = R$, for all input values except $J = K = 1$. For the latter case, which has to be avoided in the SR flip-flop, the JK flip-flop toggles its state like the T flip-flop.

The JK flip-flop is a versatile circuit. It can be used for straight storage purposes, just like the D and SR flip-flops. But it can also serve as a T flip-flop by connecting the J and K inputs together.

7.7 SUMMARY OF TERMINOLOGY

We have used the terminology that is quite common. But the reader should be aware that different interpretations of the terms *latch* and *flip-flop* can be found in the literature. Our terminology can be summarized as follows:

Basic latch is a feedback connection of two NOR gates or two NAND gates, which can store one bit of information. It can be set to 1 using the S input and reset to 0 using the R input.

Gated latch is a basic latch that includes input gating and a control input signal. The latch retains its existing state when the control input is equal to 0. Its state may be changed when the control signal is equal to 1. In our discussion we referred to the control input as the clock. We considered two types of gated latches:

- **Gated SR latch** uses the S and R inputs to set the latch to 1 or reset it to 0, respectively.
- **Gated D latch** uses the D input to force the latch into a state that has the same logic value as the D input.

A **flip-flop** is a storage element based on the gated latch principle, which can have its output state changed only on the edge of the controlling clock signal. We considered two types:

- **Edge-triggered flip-flop** is affected only by the input values present when the active edge of the clock occurs.
- **Master-slave flip-flop** is built with two gated latches. The master stage is active during half of the clock cycle, and the slave stage is active during the other half. The output value of the flip-flop changes on the edge of the clock that activates the transfer into the slave stage. Master-slave flip-flops can be edge-triggered or level sensitive. If the master stage is a gated D latch, then it behaves as an edge-triggered flip-flop. If the master stage is a gated SR latch, then the flip-flop is level sensitive (see problem 7.19).

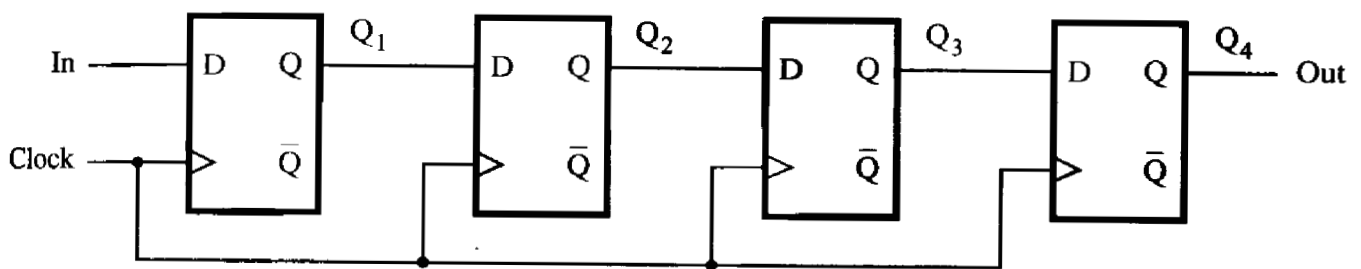
7.8 REGISTERS

A flip-flop stores one bit of information. When a set of n flip-flops is used to store n bits of information, such as an n -bit number, we refer to these flip-flops as a *register*. A common clock is used for each flip-flop in a register, and each flip-flop operates as described in the previous sections. The term register is merely a convenience for referring to n -bit structures consisting of flip-flops.

7.8.1 SHIFT REGISTER

In section 5.6 we explained that a given number is multiplied by 2 if its bits are shifted one bit position to the left and a 0 is inserted as the new least-significant bit. Similarly, the number is divided by 2 if the bits are shifted one bit-position to the right. A register that provides the ability to shift its contents is called a *shift register*.

Figure 7.18a shows a four-bit shift register that is used to shift its contents one bit-position to the right. The data bits are loaded into the shift register in a serial fashion using



(a) Circuit

	In	Q ₁	Q ₂	Q ₃	Q ₄ = Out
t_0	1	0	0	0	0
t_1	0	1	0	0	0
t_2	1	0	1	0	0
t_3	1	1	0	1	0
t_4	1	1	1	0	1
t_5	0	1	1	1	0
t_6	0	0	1	1	1
t_7	0	0	0	1	1

(b) A sample sequence

Figure 7.18 A simple shift register.

the *In* input. The contents of each flip-flop are transferred to the next flip-flop at each positive edge of the clock. An illustration of the transfer is given in Figure 7.18*b*, which shows what happens when the signal values at *In* during eight consecutive clock cycles are 1, 0, 1, 1, 1, 0, 0, and 0, assuming that the initial state of all flip-flops is 0.

To implement a shift register, it is necessary to use either edge-triggered or master-slave flip-flops. The level-sensitive gated latches are not suitable, because a change in the value of *In* would propagate through more than one latch during the time when the clock is equal to 1.

7.8.2 PARALLEL-ACCESS SHIFT REGISTER

In computer systems it is often necessary to transfer *n*-bit data items. This may be done by transmitting all bits at once using *n* separate wires, in which case we say that the transfer is performed in *parallel*. But it is also possible to transfer all bits using a single wire, by performing the transfer one bit at a time, in *n* consecutive clock cycles. We refer to this scheme as *serial* transfer. To transfer an *n*-bit data item serially, we can use a shift register that can be loaded with all *n* bits in parallel (in one clock cycle). Then during the next *n* clock cycles, the contents of the register can be shifted out for serial transfer. The reverse operation is also needed. If bits are received serially, then after *n* clock cycles the contents of the register can be accessed in parallel as an *n*-bit item.

Figure 7.19 shows a four-bit shift register that allows the parallel access. Instead of using the normal shift register connection, the *D* input of each flip-flop is connected to two different sources. One source is the preceding flip-flop, which is needed for the shift-register operation. The other source is the external input that corresponds to the bit that is to be loaded into the flip-flop as a part of the parallel-load operation. The control signal *Shift/Load* is used to select the mode of operation. If $\overline{\text{Shift/Load}} = 0$, then the circuit operates as a shift register. If $\overline{\text{Shift/Load}} = 1$, then the parallel input data are loaded into the register. In both cases the action takes place on the positive edge of the clock.

In Figure 7.19 we have chosen to label the flip-flops outputs as Q_3, \dots, Q_0 because shift registers are often used to hold binary numbers. The contents of the register can be accessed in parallel by observing the outputs of all flip-flops. The flip-flops can also be accessed serially, by observing the values of Q_0 during consecutive clock cycles while the contents are being shifted. A circuit in which data can be loaded in series and then accessed in parallel is called a series-to-parallel converter. Similarly, the opposite type of circuit is a parallel-to-series converter. The circuit in Figure 7.19 can perform both of these functions.

7.9 COUNTERS

In Chapter 5 we dealt with circuits that perform arithmetic operations. We showed how adder/subtractor circuits can be designed, either using a simple cascaded (ripple-carry) structure that is inexpensive but slow or using a more complex carry-lookahead structure that is both more expensive and faster. In this section we examine special types of addition and subtraction operations, which are used for the purpose of counting. In particular, we want to design circuits that can increment or decrement a count by 1. Counter circuits are

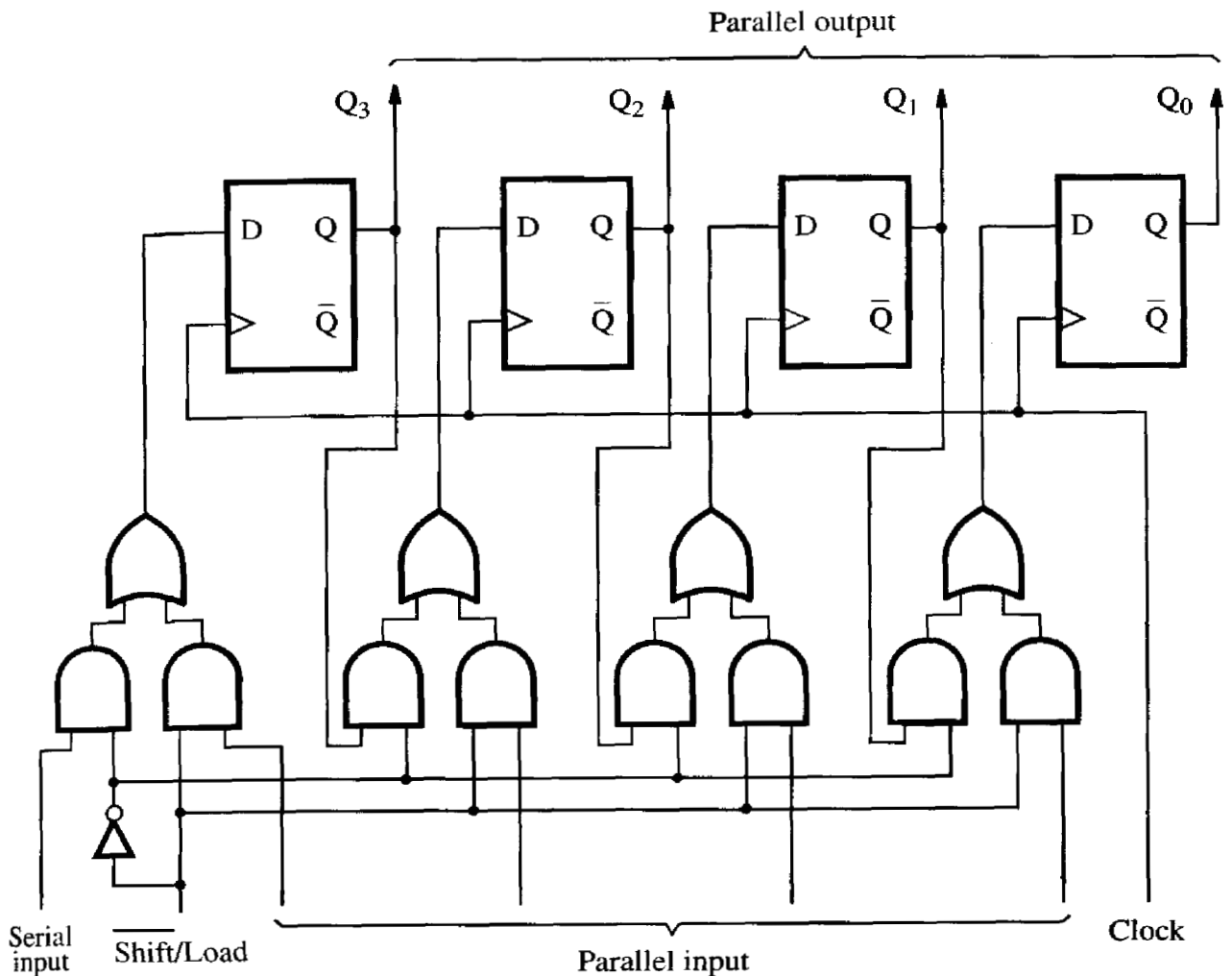


Figure 7.19 Parallel-access shift register.

used in digital systems for many purposes. They may count the number of occurrences of certain events, generate timing intervals for control of various tasks in a system, keep track of time elapsed between specific events, and so on.

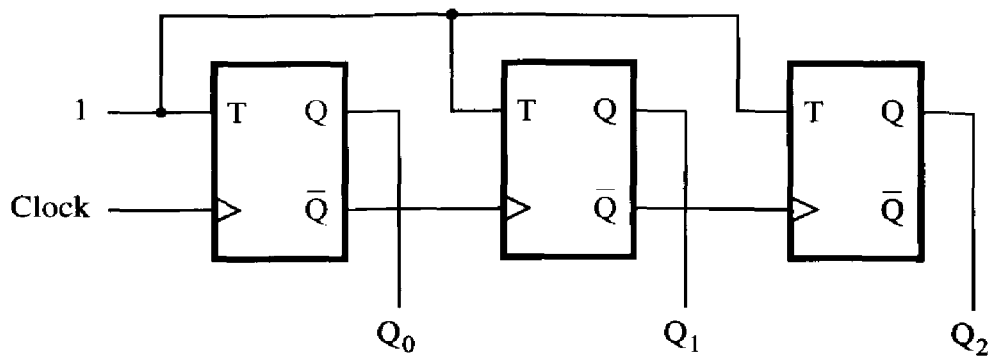
Counters can be implemented using the adder/subtractor circuits discussed in Chapter 5 and the registers discussed in section 7.8. However, since we only need to change the contents of a counter by 1, it is not necessary to use such elaborate circuits. Instead, we can use much simpler circuits that have a significantly lower cost. We will show how the counter circuits can be designed using T and D flip-flops.

7.9.1 ASYNCHRONOUS COUNTERS

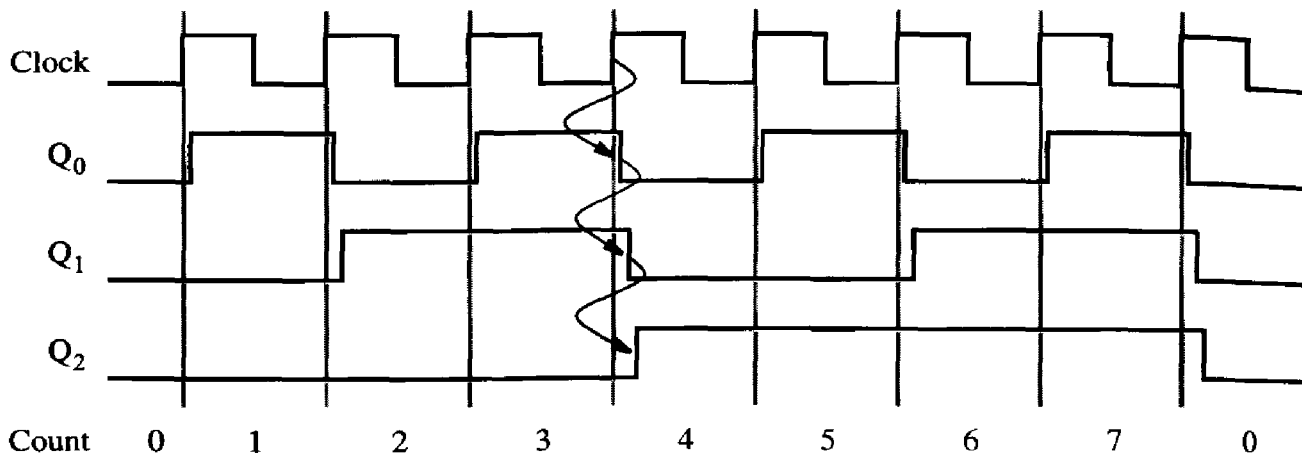
The simplest counter circuits can be built using T flip-flops because the toggle feature is naturally suited for the implementation of the counting operation.

Up-Counter with T Flip-Flops

Figure 7.20a gives a three-bit counter capable of counting from 0 to 7. The clock inputs of the three flip-flops are connected in cascade. The T input of each flip-flop is connected to a constant 1, which means that the state of the flip-flop will be reversed (toggled) at each



(a) Circuit



(b) Timing diagram

Figure 7.20 A three-bit up-counter.

positive edge of its clock. We are assuming that the purpose of this circuit is to count the number of pulses that occur on the primary input called *Clock*. Thus the clock input of the first flip-flop is connected to the *Clock* line. The other two flip-flops have their clock inputs driven by the \bar{Q} output of the preceding flip-flop. Therefore, they toggle their state whenever the preceding flip-flop changes its state from $Q = 1$ to $Q = 0$, which results in a positive edge of the \bar{Q} signal.

Figure 7.20b shows a timing diagram for the counter. The value of Q_0 toggles once each clock cycle. The change takes place shortly after the positive edge of the *Clock* signal. The delay is caused by the propagation delay through the flip-flop. Since the second flip-flop is clocked by \bar{Q}_0 , the value of Q_1 changes shortly after the negative edge of the Q_0 signal. Similarly, the value of Q_2 changes shortly after the negative edge of the Q_1 signal. If we look at the values $Q_2Q_1Q_0$ as the count, then the timing diagram indicates that the counting sequence is 0, 1, 2, 3, 4, 5, 6, 7, 0, 1, and so on. This circuit is a modulo-8 counter. Because it counts in the upward direction, we call it an *up-counter*.

The counter in Figure 7.20a has three *stages*, each comprising a single flip-flop. Only the first stage responds directly to the *Clock* signal; we say that this stage is *synchronized* to the clock. The other two stages respond after an additional delay. For example, when *Count* = 3, the next clock pulse will cause the *Count* to go to 4. As indicated by the arrows

in the timing diagram in Figure 7.20b, this change requires the toggling of the states of all three flip-flops. The change in Q_0 is observed only after a propagation delay from the positive edge of *Clock*. The Q_1 and Q_2 flip-flops have not yet changed; hence for a brief time the count is $Q_2Q_1Q_0 = 010$. The change in Q_1 appears after a second propagation delay, at which point the count is 000. Finally, the change in Q_2 occurs after a third delay, at which point the stable state of the circuit is reached and the count is 100. This behavior is similar to the rippling of carries in the ripple-carry adder circuit of Figure 5.6. The circuit in Figure 7.20a is an *asynchronous counter*, or a *ripple counter*.

Down-Counter with T Flip-Flops

A slight modification of the circuit in Figure 7.20a is presented in Figure 7.21a. The only difference is that in Figure 7.21a the clock inputs of the second and third flip-flops are driven by the Q outputs of the preceding stages, rather than by the \bar{Q} outputs. The timing diagram, given in Figure 7.21b, shows that this circuit counts in the sequence 0, 7, 6, 5, 4, 3, 2, 1, 0, 7, and so on. Because it counts in the downward direction, we say that it is a *down-counter*.

It is possible to combine the functionality of the circuits in Figures 7.20a and 7.21a to form a counter that can count either up or down. Such a counter is called an *up/down-*

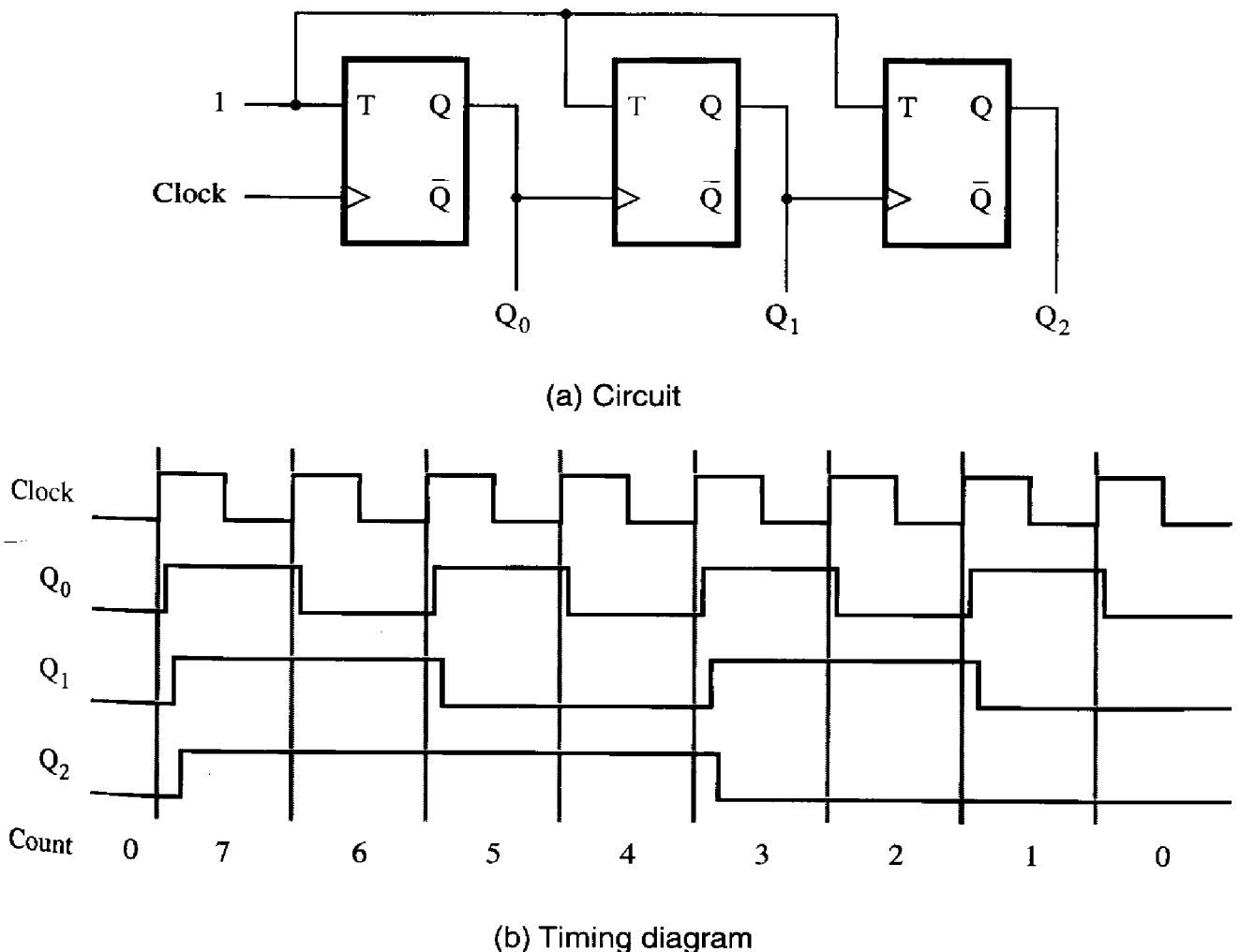


Figure 7.21 A three-bit down-counter.

counter. We leave the derivation of this counter as an exercise for the reader (problem 7.16).

7.9.2 SYNCHRONOUS COUNTERS

The asynchronous counters in Figures 7.20a and 7.21a are simple, but not very fast. If a counter with a larger number of bits is constructed in this manner, then the delays caused by the cascaded clocking scheme may become too long to meet the desired performance requirements. We can build a faster counter by clocking all flip-flops at the same time, using the approach described below.

Synchronous Counter with T Flip-Flops

Table 7.1 shows the contents of a three-bit up-counter for eight consecutive clock cycles, assuming that the count is initially 0. Observing the pattern of bits in each row of the table, it is apparent that bit Q_0 changes on each clock cycle. Bit Q_1 changes only when $Q_0 = 1$. Bit Q_2 changes only when both Q_1 and Q_0 are equal to 1. In general, for an n -bit up-counter, a given flip-flop changes its state only when all the preceding flip-flops are in the state $Q = 1$. Therefore, if we use T flip-flops to realize the counter, then the T inputs are defined as

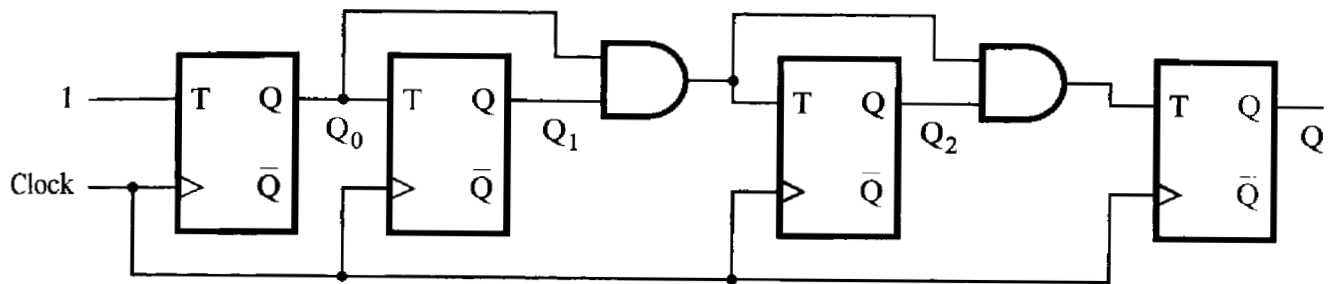
$$\begin{aligned}
 T_0 &= 1 \\
 T_1 &= Q_0 \\
 T_2 &= Q_0Q_1 \\
 T_3 &= Q_0Q_1Q_2 \\
 &\vdots \\
 &\vdots \\
 &\vdots \\
 T_n &= Q_0Q_1 \cdots Q_{n-1}
 \end{aligned}$$

Table 7.1 Derivation of the synchronous up-counter.

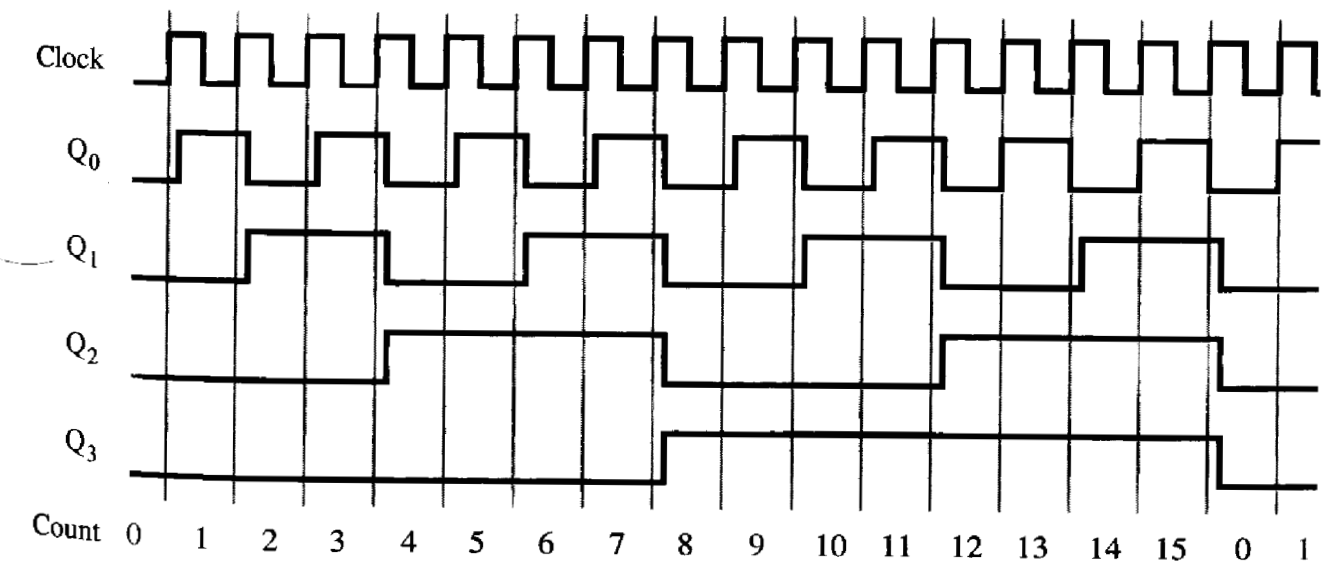
Clock cycle	Q_2	Q_1	Q_0
0	0	0	0
1	0	0	1
2	0	1	0
3	0	1	1
4	1	0	0
5	1	0	1
6	1	1	0
7	1	1	1
8	0	0	0

An example of a four-bit counter based on these expressions is given in Figure 7.22a. Instead of using AND gates of increased size for each stage, which may lead to fan-in problems, we use a factored arrangement, as shown in the figure. This arrangement does not slow down the response of the counter, because all flip-flops change their states after a propagation delay from the positive edge of the clock. Note that a change in the value of Q_0 may have to propagate through several AND gates to reach the flip-flops in the higher stages of the counter, which requires a certain amount of time. This time must not exceed the clock period. Actually, it must be less than the clock period minus the setup time for the flip-flops.

Figure 7.22b gives a timing diagram. It shows that the circuit behaves as a modulo-16 up-counter. Because all changes take place with the same delay after the active edge of the Clock signal, the circuit is called a *synchronous counter*.



(a) Circuit



(b) Timing diagram

Figure 7.22 A four-bit synchronous up-counter.

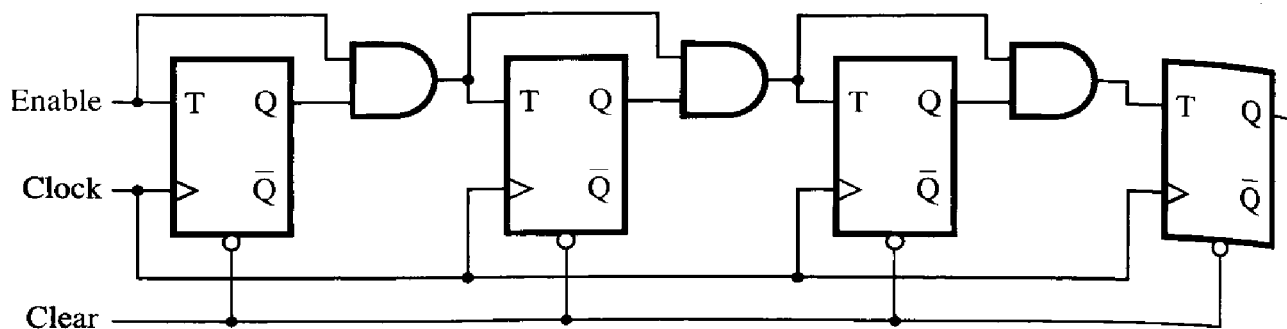


Figure 7.23 Inclusion of Enable and Clear capability.

Enable and Clear Capability

The counters in Figures 7.20 through 7.22 change their contents in response to each clock pulse. Often it is desirable to be able to inhibit counting, so that the count remains in its present state. This may be accomplished by including an *Enable* control signal, as indicated in Figure 7.23. The circuit is the counter of Figure 7.22, where the *Enable* signal controls directly the *T* input of the first flip-flop. Connecting the *Enable* also to the AND-gate chain means that if $Enable = 0$, then all *T* inputs will be equal to 0. If $Enable = 1$, then the counter operates as explained previously.

In many applications it is necessary to start with the count equal to zero. This is easily achieved if the flip-flops can be cleared, as explained in section 7.4.3. The clear inputs on all flip-flops can be tied together and driven by a *Clear* control input.

Synchronous Counter with D Flip-Flops

While the toggle feature makes T flip-flops a natural choice for the implementation of counters, it is also possible to build counters using other types of flip-flops. The JK flip-flops can be used in exactly the same way as the T flip-flops because if the *J* and *K* inputs are tied together, a JK flip-flop becomes a T flip-flop. We will now consider using D flip-flops for this purpose.

It is not obvious how D flip-flops can be used to implement a counter. We will present a formal method for deriving such circuits in Chapter 8. Here we will present a circuit structure that meets the requirements but will leave the derivation for Chapter 8. Figure 7.24 gives a four-bit up-counter that counts in the sequence 0, 1, 2, ..., 14, 15, 0, 1, and so on. The count is indicated by the flip-flop outputs $Q_3Q_2Q_1Q_0$. If we assume that $Enable = 1$, then the *D* inputs of the flip-flops are defined by the expressions

$$D_0 = \bar{Q}_0 = 1 \oplus Q_0$$

$$D_1 = Q_1 \oplus Q_0$$

$$D_2 = Q_2 \oplus Q_1Q_0$$

$$D_3 = Q_3 \oplus Q_2Q_1Q_0$$

For a larger counter the *i*th stage is defined by

$$D_i = Q_i \oplus Q_{i-1}Q_{i-2} \cdots Q_1Q_0$$

We will show how to derive these equations in Chapter 8.

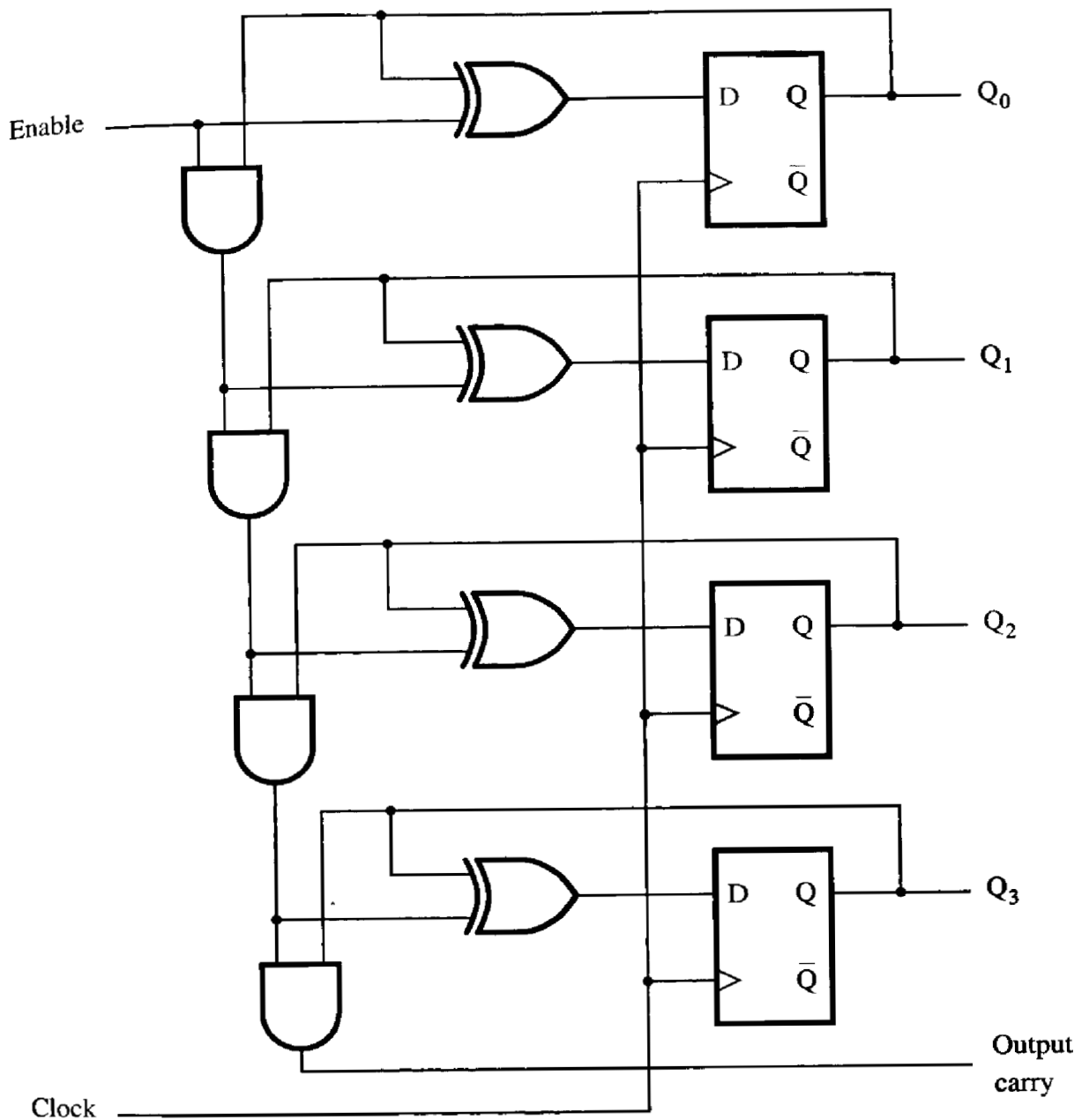


Figure 7.24 A four-bit counter with D flip-flops.

We have included the *Enable* control signal so that the counter counts the clock pulses only if $Enable = 1$. In effect, the above equations are modified to implement the circuit in the figure as follows

$$D_0 = Q_0 \oplus Enable$$

$$D_1 = Q_1 \oplus Q_0 \cdot Enable$$

$$D_2 = Q_2 \oplus Q_1 \cdot Q_0 \cdot Enable$$

$$D_3 = Q_3 \oplus Q_2 \cdot Q_1 \cdot Q_0 \cdot Enable$$

The operation of the counter is based on our observation for Table 7.1 that the state of the flip-flop in stage i changes only if all preceding flip-flops are in the state $Q = 1$. This

makes the output of the AND gate that feeds stage i equal to 1, which causes the output of the XOR gate connected to D_i to be equal to \bar{Q}_i . Otherwise, the output of the XOR gate provides $D_i = Q_i$, and the flip-flop remains in the same state. This resembles the carry propagation in a carry-lookahead adder circuit (see section 5.4); hence the AND-gate chain can be thought of as the *carry chain*. Even though the circuit is only a four-bit counter, we have included an extra AND that produces the “output carry.” This signal makes it easy to concatenate two such four-bit counters to create an eight-bit counter.

Finally, the reader should note that the counter in Figure 7.24 is essentially the same as the circuit in Figure 7.23. We showed in Figure 7.16a that a T flip-flop can be formed from a D flip-flop by providing the extra gating that gives

$$\begin{aligned} D &= QT + \bar{Q}\bar{T} \\ &= Q \oplus T \end{aligned}$$

Thus in each stage in Figure 7.24, the D flip-flop and the associated XOR gate implement the functionality of a T flip-flop.

7.9.3 COUNTERS WITH PARALLEL LOAD

Often it is necessary to start counting with the initial count being equal to 0. This state can be achieved by using the capability to clear the flip-flops as indicated in Figure 7.23. But sometimes it is desirable to start with a different count. To allow this mode of operation, a counter circuit must have some inputs through which the initial count can be loaded. Using the *Clear* and *Preset* inputs for this purpose is a possibility, but a better approach is discussed below.

The circuit of Figure 7.24 can be modified to provide the parallel-load capability as shown in Figure 7.25. A two-input multiplexer is inserted before each D input. One input to the multiplexer is used to provide the normal counting operation. The other input is a data bit that can be loaded directly into the flip-flop. A control input, *Load*, is used to choose the mode of operation. The circuit counts when $Load = 0$. A new initial value, $D_3D_2D_1D_0$, is loaded into the counter when $Load = 1$.

7.10 RESET SYNCHRONIZATION

We have already mentioned that it is important to be able to clear, or *reset*, the contents of a counter prior to commencing a counting operation. This can be done using the clear capability of the individual flip-flops. But we may also be interested in resetting the count to 0 during the normal counting process. An n -bit up-counter functions naturally as a modulo- 2^n counter. Suppose that we wish to have a counter that counts modulo some base that is not a power of 2. For example, we may want to design a modulo-6 counter, for which the counting sequence is 0, 1, 2, 3, 4, 5, 0, 1, and so on.

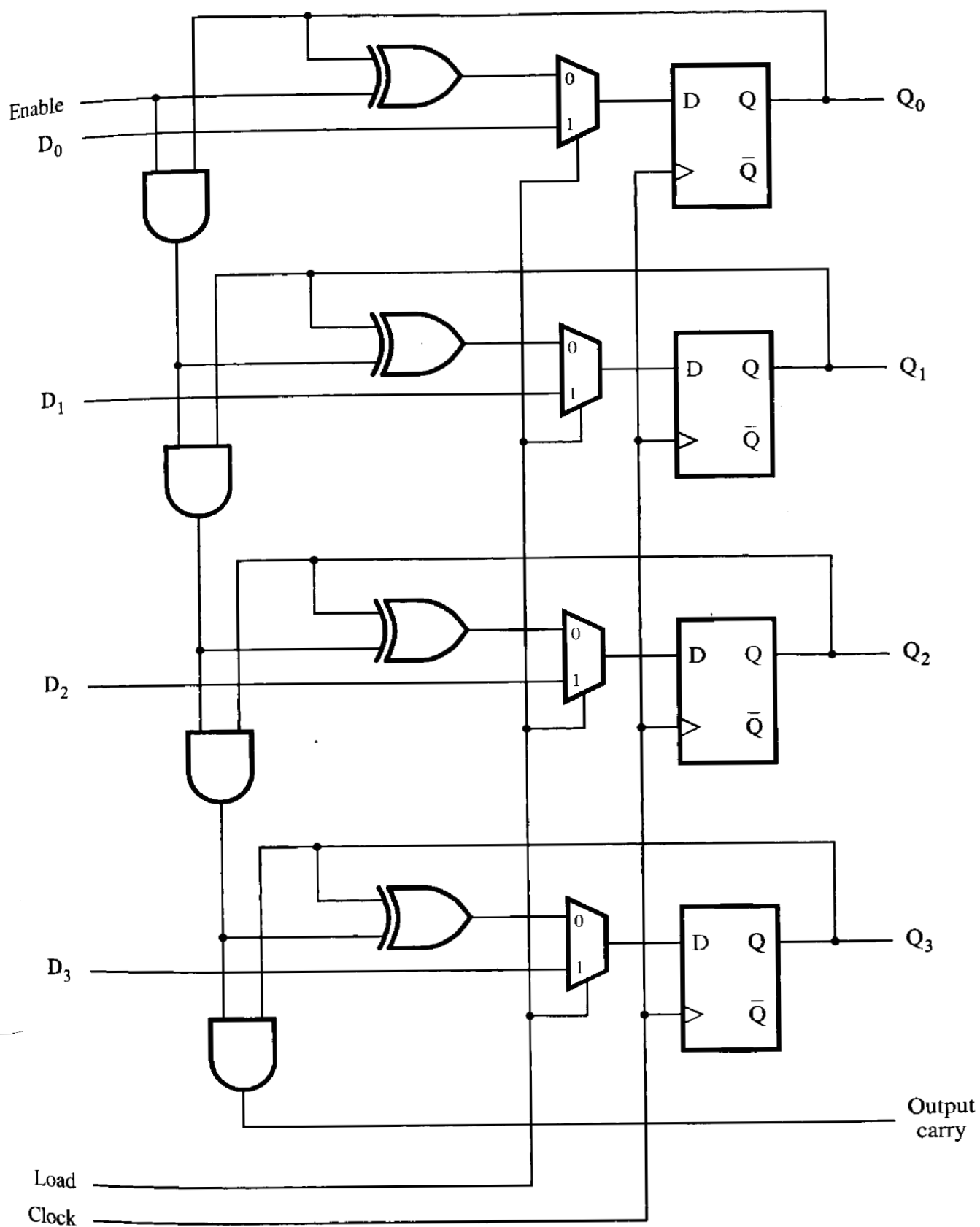
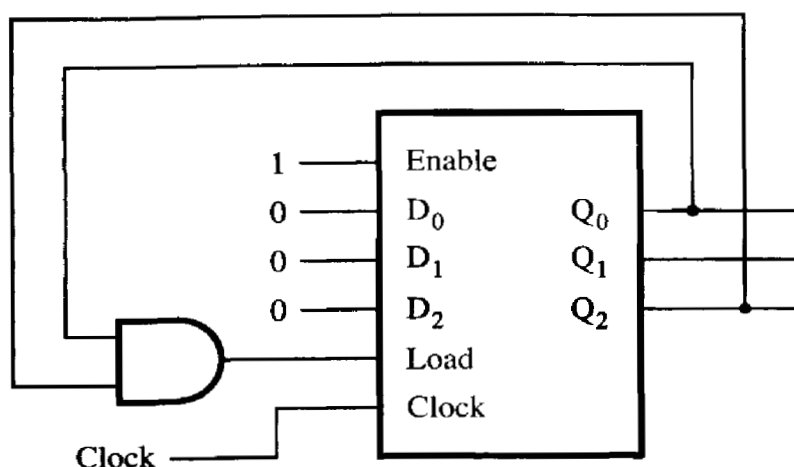
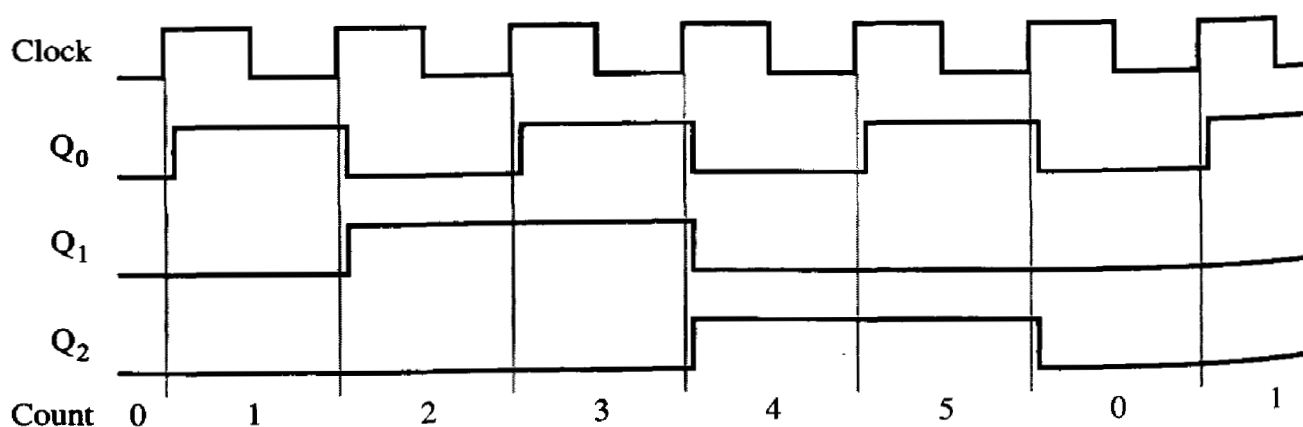


Figure 7.25 A counter with parallel-load capability.

The most straightforward approach is to recognize when the count reaches 5 and then reset the counter. An AND gate can be used to detect the occurrence of the count of 5. Actually, it is sufficient to ascertain that $Q_2 = Q_0 = 1$, which is true only for 5 in our desired counting sequence. A circuit based on this approach is given in Figure 7.26a. It uses a three-bit synchronous counter of the type depicted in Figure 7.25. The parallel-load feature of the counter is used to reset its contents when the count reaches 5. The resetting action takes place at the positive clock edge after the count has reached 5. It involves loading $D_2D_1D_0 = 000$ into the flip-flops. As seen in the timing diagram in Figure 7.26b, the desired counting sequence is achieved, with each value of the count being established for one full clock cycle. Because the counter is reset on the active edge of the clock, we say that this type of counter has a *synchronous reset*.



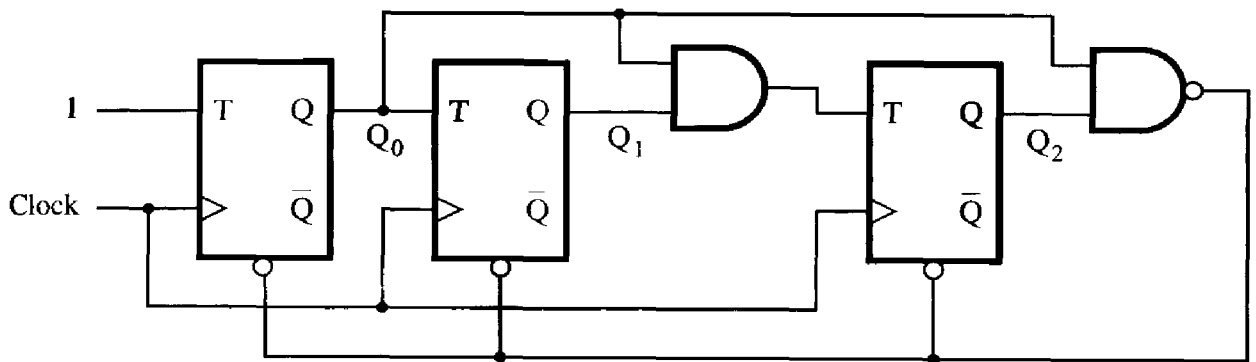
(a) Circuit



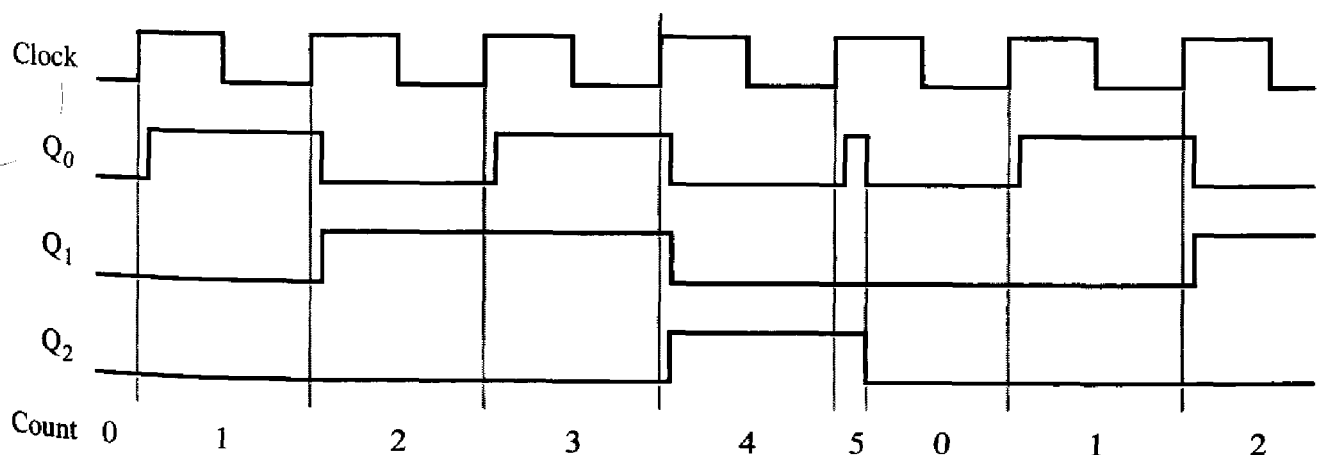
(b) Timing diagram

Figure 7.26 A modulo-6 counter with synchronous reset.

Consider now the possibility of using the clear feature of individual flip-flops, rather than the parallel-load approach. The circuit in Figure 7.27a illustrates one possibility. It uses the counter structure of Figure 7.22a. Since the clear inputs are active when low, a NAND gate is used to detect the occurrence of the count of 5 and cause the clearing of all three flip-flops. Conceptually, this seems to work fine, but closer examination reveals a potential problem. The timing diagram for this circuit is given in Figure 7.27b. It shows a difficulty that arises when the count is equal to 5. As soon as the count reaches this value, the NAND gate triggers the resetting action. The flip-flops are cleared to 0 a short time after the NAND gate has detected the count of 5. This time depends on the gate delays in the circuit, but not on the clock. Therefore, signal values $Q_2Q_1Q_0 = 101$ are maintained for a time that is much less than a clock cycle. Depending on a particular application of such a counter, this may be adequate, but it may also be completely unacceptable. For example, if the counter is used in a digital system where all operations in the system are synchronized by the same clock, then this narrow pulse denoting $Count = 5$ would not be seen by the rest of the system. To solve this problem, we could try to use a modulo-7 counter instead,



(a) Circuit



(b) Timing diagram

Figure 7.27 A modulo-6 counter with asynchronous reset.

assuming that the system would ignore the short pulse that denotes the count of 6. This is not a good way of designing circuits, because undesirable pulses often cause unforeseen difficulties in practice. The approach employed in Figure 7.27a is said to use *asynchronous reset*.

The timing diagrams in Figures 7.26b and 7.27b suggest that synchronous reset is a better choice than asynchronous reset. The same observation is true if the natural counting sequence has to be broken by loading some value other than zero. The new value of the count can be established cleanly using the parallel-load feature. The alternative of using the clear and preset capability of individual flip-flops to set their states to reflect the desired count has the same problems as discussed in conjunction with the asynchronous reset.

7.11 OTHER TYPES OF COUNTERS

In this section we discuss three other types of counters that can be found in practical applications. The first uses the decimal counting sequence, and the other two generate sequences of codes that do not represent binary numbers.

7.11.1 BCD COUNTER

Binary-coded-decimal (BCD) counters can be designed using the approach explained in section 7.10. A two-digit BCD counter is presented in Figure 7.28. It consists of two modulo-10 counters, one for each BCD digit, which we implemented using the parallel-load four-bit counter of Figure 7.25. Note that in a modulo-10 counter it is necessary to reset the four flip-flops after the count of 9 has been obtained. Thus the *Load* input to each stage is equal to 1 when $Q_3 = Q_0 = 1$, which causes 0s to be loaded into the flip-flops at the next positive edge of the clock signal. Whenever the count in stage 0, BCD_0 , reaches 9 it is necessary to enable the second stage so that it will be incremented when the next clock pulse arrives. This is accomplished by keeping the *Enable* signal for BCD_1 low at all times except when $BCD_0 = 9$.

In practice, it has to be possible to clear the contents of the counter by activating some control signal. Two OR gates are included in the circuit for this purpose. The control input *Clear* can be used to load 0s into the counter. Observe that in this case *Clear* is active when high. VHDL code for a two-digit BCD counter is given in Figure 7.77.

In any digital system there is usually one or more clock signals used to drive all synchronous circuitry. In the preceding counter, as well as in all counters presented in the previous figures, we have assumed that the objective is to count the number of clock pulses. Of course, these counters can be used to count the number of pulses in any signal that may be used in place of the clock signal.

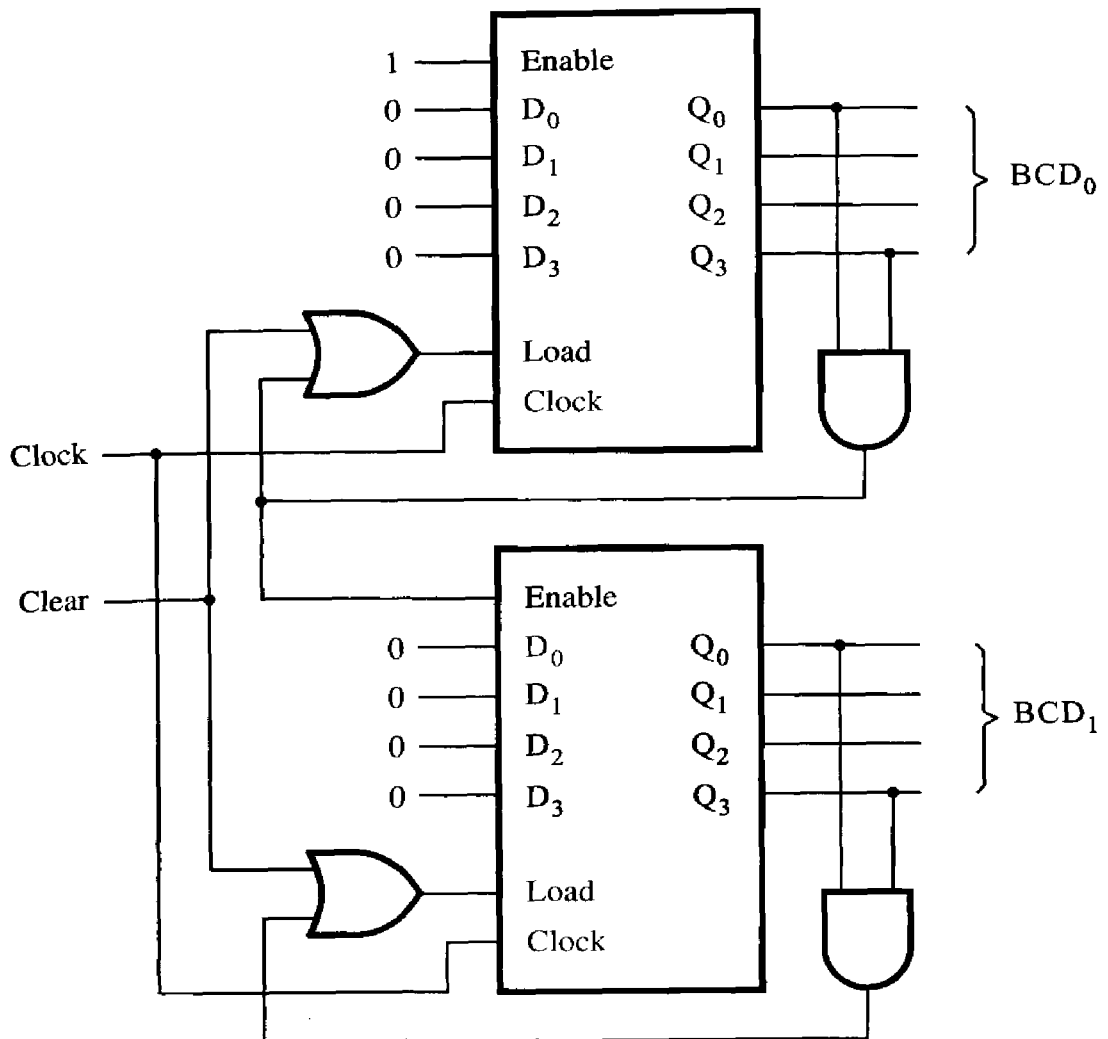
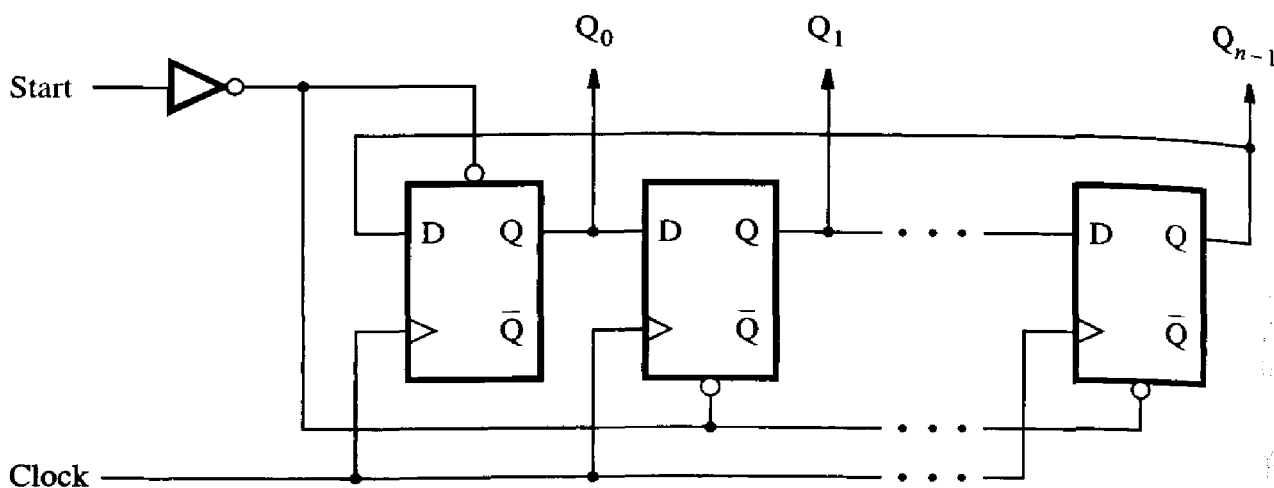


Figure 7.28 A two-digit BCD counter.

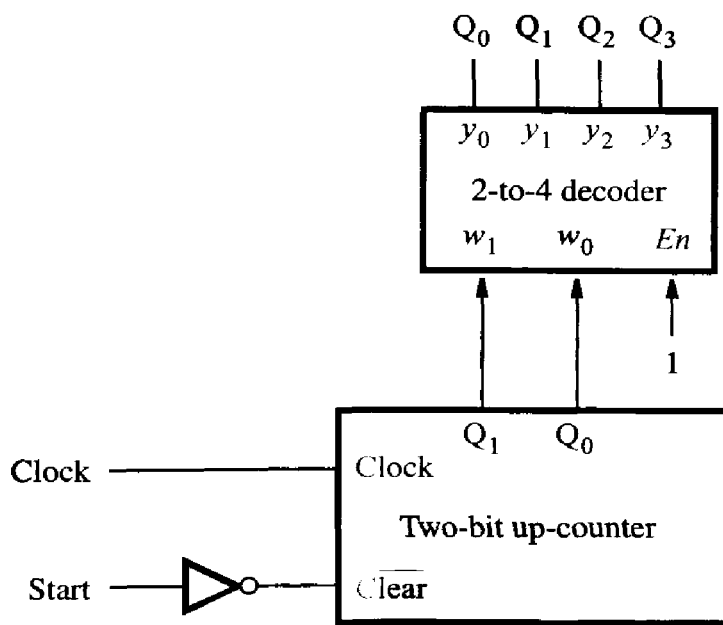
7.11.2 RING COUNTER

In the preceding counters the count is indicated by the state of the flip-flops in the counter. In all cases the count is a binary number. Using such counters, if an action is to be taken as a result of a particular count, then it is necessary to detect the occurrence of this count. This may be done using AND gates, as illustrated in Figures 7.26 through 7.28.

It is possible to devise a counterlike circuit in which each flip-flop reaches the state $Q_i = 1$ for exactly one count, while for all other counts $Q_i = 0$. Then Q_i indicates directly an occurrence of the corresponding count. Actually, since this does not represent binary numbers, it is better to say that the outputs of the flip-flops represent a code. Such a circuit can be constructed from a simple shift register, as indicated in Figure 7.29a. The Q output of the last stage in the shift register is fed back as the input to the first stage, which creates a ringlike structure. If a single 1 is injected into the ring, this 1 will be shifted through the ring at successive clock cycles. For example, in a four-bit structure, the possible codes



(a) An n -bit ring counter



(b) A four-bit ring counter

Figure 7.29 Ring counter.

$Q_0Q_1Q_2Q_3$ will be 1000, 0100, 0010, and 0001. As we said in section 6.2, such encoding, where there is a single 1 and the rest of the code variables are 0, is called a *one-hot code*.

The circuit in Figure 7.29a is referred to as a *ring counter*. Its operation has to be initialized by injecting a 1 into the first stage. This is achieved by using the *Start* control signal, which presets the left-most flip-flop to 1 and clears the others to 0. We assume that all changes in the value of the *Start* signal occur shortly after an active clock edge so that the flip-flop timing parameters are not violated.

The circuit in Figure 7.29a can be used to build a ring counter with any number of bits, n . For the specific case of $n = 4$, part (b) of the figure shows how a ring counter can be constructed using a two-bit up-counter and a decoder. When *Start* is set to 1, the counter is reset to 00. After *Start* changes back to 0, the counter increments its value in the normal way. The 2-to-4 decoder, described in section 6.2, changes the counter output into a one-hot code. For the count values 00, 01, 10, 11, 00, and so on, the decoder produces $Q_0Q_1Q_2Q_3 = 1000, 0100, 0010, 0001, 1000$, and so on. This circuit structure can be used for larger ring counters, as long as the number of bits is a power of two. We will give an example of a larger circuit that uses the ring counter in Figure 7.29b as a subcircuit in section 7.14.

7.11.3 JOHNSON COUNTER

An interesting variation of the ring counter is obtained if, instead of the Q output, we take the \bar{Q} output of the last stage and feed it back to the first stage, as shown in Figure 7.30. This circuit is known as a *Johnson counter*. An n -bit counter of this type generates a counting sequence of length $2n$. For example, a four-bit counter produces the sequence 0000, 1000, 1100, 1110, 1111, 0111, 0011, 0001, 0000, and so on. Note that in this sequence, only a single bit has a different value for two consecutive codes.

To initialize the operation of the Johnson counter, it is necessary to reset all flip-flops, as shown in the figure. Observe that neither the Johnson nor the ring counter will generate the desired counting sequence if not initialized properly.

7.11.4 REMARKS ON COUNTER DESIGN

The sequential circuits presented in this chapter, namely, registers and counters, have a regular structure that allows the circuits to be designed using an intuitive approach. In Chapter 8 we will present a more formal approach to design of sequential circuits and show how the circuits presented in this chapter can be derived using this approach.

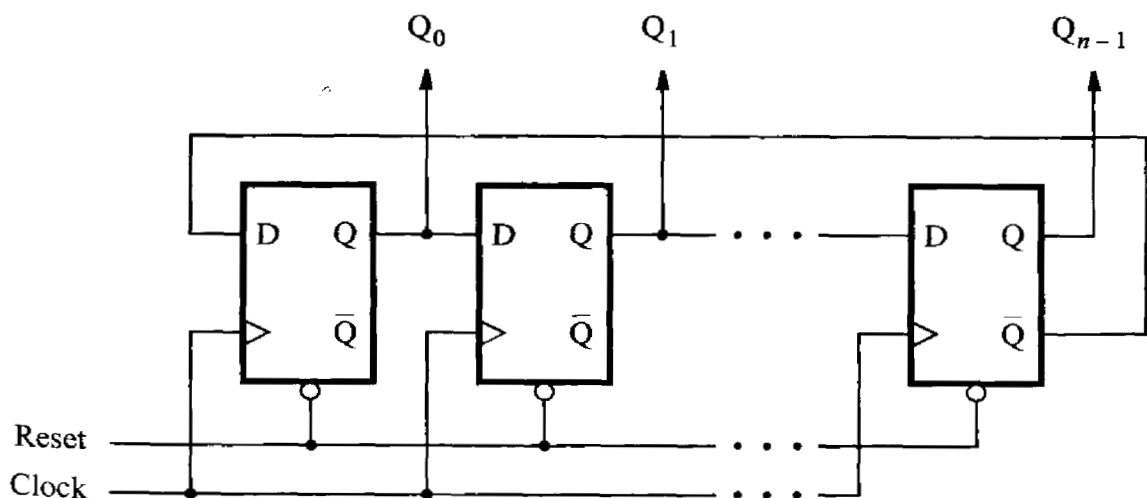


Figure 7.30 Johnson counter.

7.12 USING STORAGE ELEMENTS WITH CAD TOOLS

This section shows how circuits with storage elements can be designed using either schematic capture or VHDL code.

7.12.1 INCLUDING STORAGE ELEMENTS IN SCHEMATICS

One way to create a circuit is to draw a schematic that builds latches and flip-flops from logic gates. Because these storage elements are used in many applications, most CAD systems provide them as prebuilt modules. Figure 7.31 shows a schematic created with a schematic capture tool, which includes three types of flip-flops that are imported from a library provided as part of the CAD system. The top element is a gated D latch, the middle element is a positive-edge-triggered D flip-flop, and the bottom one is a positive-edge-triggered T flip-flop. The D and T flip-flops have asynchronous, active-low clear and preset inputs. If these inputs are not connected in a schematic, then the CAD tool makes them inactive by assigning the default value of 1 to them.

When the gated D latch is synthesized for implementation in a chip, the CAD tool may not generate the cross-coupled NOR or NAND gates shown in section 7.2. In some chips, such as a CPLD, the AND-OR circuit depicted in Figure 7.32 may be preferable. This circuit is functionally equivalent to the cross-coupled version in section 7.2. The sum-of-products circuit is used because it is more suitable for implementation in a CPLD macrocell. One

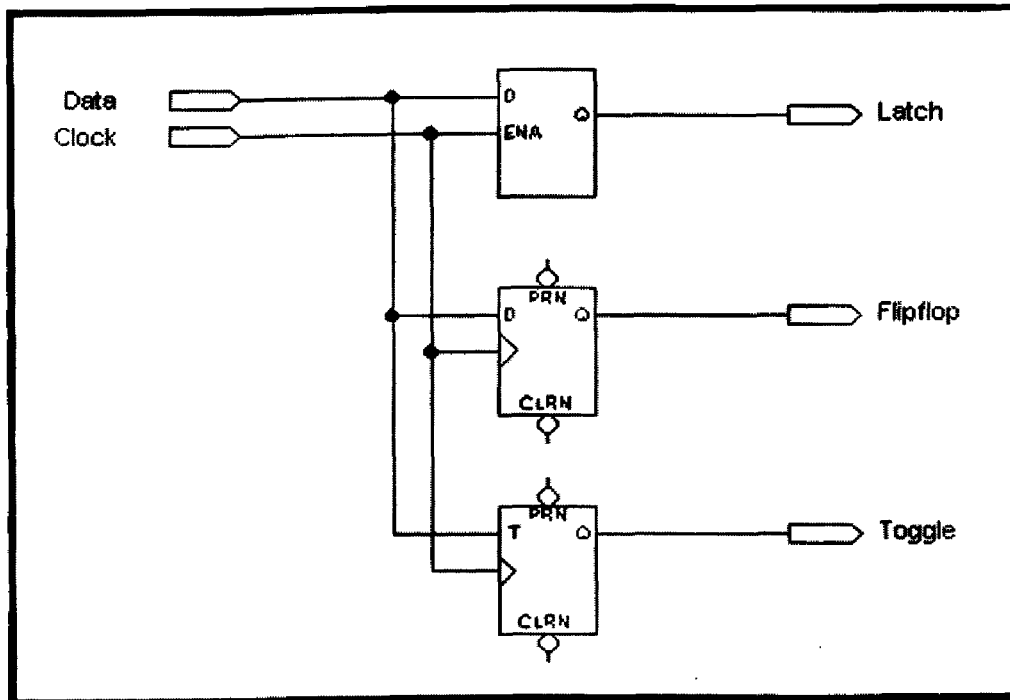


Figure 7.31 Three types of storage elements in a schematic.

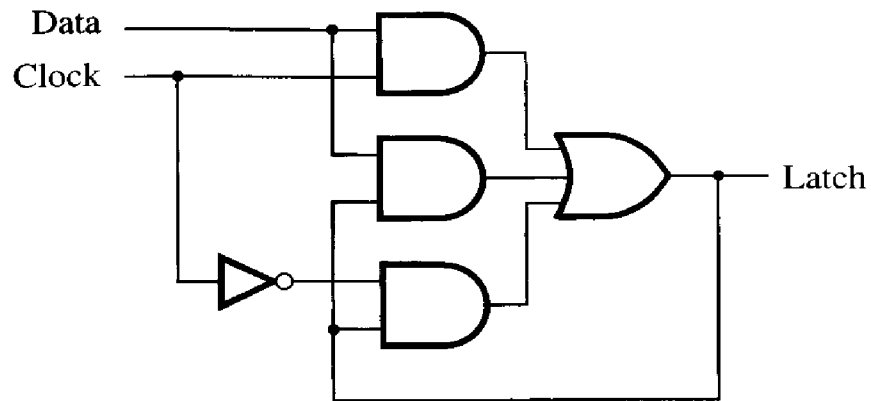


Figure 7.32 Gated D latch generated by CAD tools.

aspect of this circuit should be mentioned. From the functional point of view, it appears that the circuit can be simplified by removing the AND gate with the inputs *Data* and *Latch*. Without this gate, the top AND gate sets the value stored in the latch when the clock is 1, and the bottom AND gate maintains the stored value when the clock is 0. But without this gate, the circuit has a timing problem known as a *static hazard*. A detailed explanation of hazards will be given in section 9.6.

The circuit in Figure 7.31 can be implemented in a CPLD as shown in Figure 7.33. The D and T flip-flops are realized using the flip-flops on the chip that are configurable as either D or T types. The figure depicts in blue the gates and wires needed to implement the circuit in Figure 7.31.

The results of a timing simulation for the implementation in Figure 7.33 are given in Figure 7.34. The *Latch* signal, which is the output of the gated D latch, implemented as indicated in Figure 7.32, follows the *Data* input whenever the *Clock* signal is 1. Because of propagation delays in the chip, the *Latch* signal is delayed in time with respect to the *Data* signal. Since the *Flipflop* signal is the output of the D flip-flop, it changes only after a positive clock edge. Similarly, the output of the T flip-flop, called *Toggle* in the figure, toggles when *Data* = 1 and a positive clock edge occurs. The timing diagram illustrates the delay from when the positive clock edge occurs at the input pin of the chip until a change in the flip-flop output appears at the output pin of the chip. This time is called the *clock-to-output time*, t_{co} .

7.12.2 USING VHDL CONSTRUCTS FOR STORAGE ELEMENTS

In section 6.6 we described a number of VHDL assignment statements. The IF and CASE statements were introduced as two types of sequential assignment statements. In this section we show how these statements can be used to describe storage elements.

Figure 6.43, which is repeated in Figure 7.35, gives an example of VHDL code that has implied memory. Because the code does not specify what value the *AeqB* signal should have when the condition for the IF statement is not satisfied, the semantics specify that in

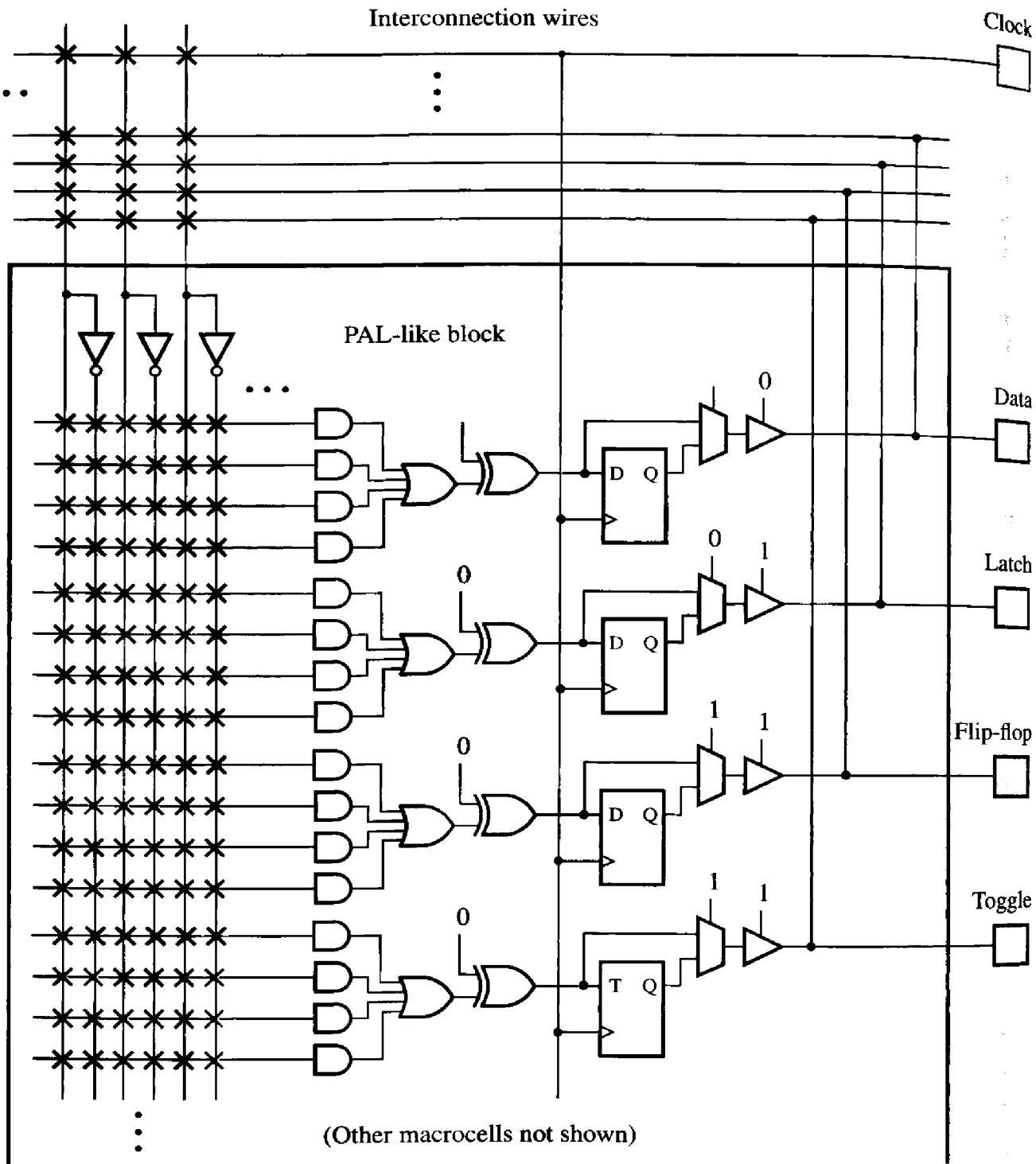


Figure 7.33 Implementation of the schematic in Figure 7.31 in a CPLD.

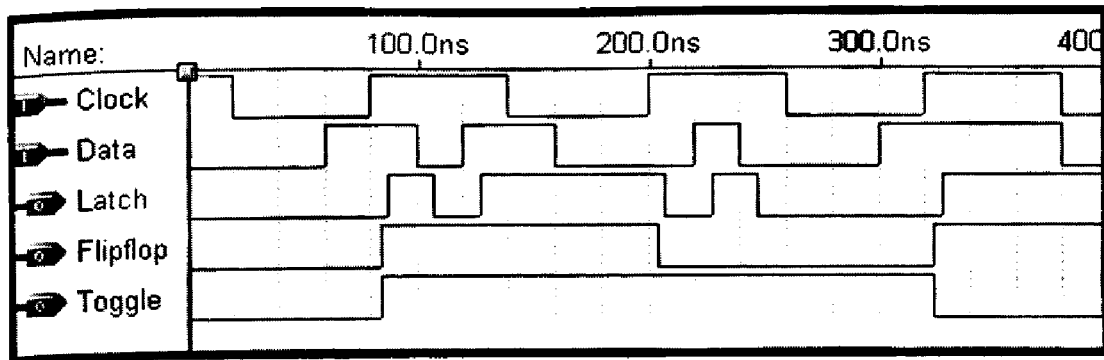


Figure 7.34 Timing simulation for the storage elements in Figure 7.31.

```

LIBRARY ieee ;
USE ieee.std_logic_1164.all ;

ENTITY implied IS
    PORT ( A, B : IN  STD_LOGIC ;
          AeqB : OUT STD_LOGIC ) ;
END implied ;

ARCHITECTURE Behavior OF implied IS
BEGIN
    PROCESS ( A, B )
    BEGIN
        IF A = B THEN
            AeqB <= '1' ;
        END IF ;
    END PROCESS ;
END Behavior ;

```

Figure 7.35 The code from Figure 6.43, illustrating implied memory.

this case *AeqB* should retain its current value. The implied memory is the key concept used for describing sequential circuit elements, which we will illustrate using several examples.

CODE FOR A GATED D LATCH The code in Figure 7.36 defines an entity named *latch*, which has the inputs *D* and *Clk* and the output *Q*. The process uses an if-then-else statement to define the value of the *Q* output. When *Clk* = 1, *Q* takes the value of *D*. For the case when *Clk* is not 1, the code does not specify what value *Q* should have. Hence *Q* will retain its current value in this case, and the code describes a gated D latch. The process sensitivity


```

LIBRARY ieee ;
USE ieee.std_logic_1164.all ;

ENTITY latch IS
    PORT ( D, Clk : IN  STD_LOGIC ;
          Q       : OUT STD_LOGIC) ;
END latch ;

ARCHITECTURE Behavior OF latch IS
BEGIN
    PROCESS ( D, Clk )
    BEGIN
        IF Clk = '1' THEN
            Q <= D ;
        END IF ;
    END PROCESS ;
END Behavior ;

```

Figure 7.36 Code for a gated D latch.

list includes both *Clk* and *D* because these signals can cause a change in the value of the Q output.

CODE FOR A D FLIP-FLOP Figure 7.37 defines an entity named *flipflop*, which is a positive-edge-triggered D flip-flop. The code is identical to Figure 7.36 with two exceptions. First, the process sensitivity list contains only the clock signal because it is the only signal that can cause a change in the Q output. Second, the if-then-else statement uses a different condition from the one used in the latch. The syntax *Clock'EVENT* uses a VHDL construct called an *attribute*. An attribute refers to a property of an object, such as a signal. In this case the *'EVENT* attribute refers to any change in the *Clock* signal. Combining the *Clock'EVENT* condition with the condition *Clock = 1* means that “the value of the *Clock* signal has just changed, and the value is now equal to 1.” Hence the condition refers to a positive clock edge. Because the Q output changes only as a result of a positive clock edge, the code describes a positive-edge-triggered D flip-flop.

ALTERNATIVE CODE FOR A D FLIP-FLOP The process in Figure 7.38 uses a different syntax from that in Figure 7.37 to describe a D flip-flop. It uses the statement *WAIT UNTIL Clock'EVENT AND Clock = '1'*. This statement has the same effect as the *IF* statement in Figure 7.37. A process that uses a *WAIT UNTIL* statement is a special case because the sensitivity list is omitted. The *WAIT UNTIL* construct implies that the sensitivity list includes only the clock signal. In our use of VHDL, which is for synthesis of circuits, a process can use a *WAIT UNTIL* statement only if this is the first statement in the process.

```

LIBRARY ieee ;
USE ieee.std_logic_1164.all ;

ENTITY flipflop IS
    PORT ( D, Clock : IN  STD_LOGIC ;
          Q          : OUT STD_LOGIC ) ;
END flipflop ;

ARCHITECTURE Behavior OF flipflop IS
BEGIN
    PROCESS ( Clock )
    BEGIN
        IF Clock'EVENT AND Clock = '1' THEN
            Q <= D ;
        END IF ;
    END PROCESS ;
END Behavior ;

```

Figure 7.37 Code for a D flip-flop.

```

LIBRARY ieee;
USE ieee.std_logic_1164.all;

ENTITY flipflop IS
    PORT ( D, Clock : IN  STD_LOGIC ;
          Q          : OUT STD_LOGIC ) ;
END flipflop ;

ARCHITECTURE Behavior OF flipflop IS
BEGIN
    PROCESS
    BEGIN
        WAIT UNTIL Clock'EVENT AND Clock = '1' ;
        Q <= D ;
    END PROCESS ;
END Behavior ;

```

Figure 7.38 Equivalent code to Figure 7.37, using a WAIT UNTIL statement.

Actually, the attribute 'EVENT is redundant in the WAIT UNTIL statement. We can write simply

```
WAIT UNTIL Clock = '1';
```

which also implies that the action occurs when the *Clock* signal becomes equal to 1, namely, at the edge when the signal changes from 0 to 1. However, some CAD synthesis tools require the inclusion of the 'EVENT attribute, which is the reason why we use this style in the book.

In general, whenever it is desired to include in VHDL code flip-flops that are clocked by the positive clock edge, the condition Clock'EVENT AND Clock '1' is used. When this condition appears in an IF statement, any signals that are assigned values inside the IF statement are implemented as the outputs of flip-flops. When the condition is used in a WAIT UNTIL statement, any signal that is assigned a value in the entire process is implemented as the output of a flip-flop.

The differences in using the IF and WAIT UNTIL statements are discussed in more detail in Appendix A, section A.10.3.

ASYNCHRONOUS CLEAR Figure 7.39 gives a process that is similar to the one in Figure 7.37. It describes a D flip-flop with an asynchronous active-low reset (clear) input. When *Resetn*, the reset input, is equal to 0, the flip-flop's Q output is set to 0.

```
LIBRARY ieee ;
USE ieee.std_logic_1164.all ;

ENTITY flipflop IS
    PORT ( D, Resetn, Clock : IN  STD_LOGIC ;
          Q                 : OUT STD_LOGIC) ;
END flipflop ;

ARCHITECTURE Behavior OF flipflop IS
BEGIN
    PROCESS ( Resetn, Clock )
    BEGIN
        IF Resetn = '0' THEN
            Q <= '0' ;
        ELSIF Clock'EVENT AND Clock = '1' THEN
            Q <= D ;
        END IF ;
    END PROCESS ;
END Behavior ;
```

Figure 7.39 D flip-flop with asynchronous reset.

```

LIBRARY ieee ;
USE ieee.std_logic_1164.all ;

ENTITY flipflop IS
    PORT ( D, Resetn, Clock : IN  STD_LOGIC ;
          Q                 : OUT STD_LOGIC);
END flipflop;

ARCHITECTURE Behavior OF flipflop IS
BEGIN
    PROCESS
    BEGIN
        WAIT UNTIL Clock'EVENT AND Clock = '1' ;
        IF Resetn = '0' THEN
            Q <= '0' ;
        ELSE
            Q <= D ;
        END IF ;
    END PROCESS ;
END Behavior ;

```

Figure 7.40 D flip-flop with synchronous reset.

SYNCHRONOUS CLEAR Figure 7.40 shows how a D flip-flop with a synchronous reset input can be described. In this case the reset signal is acted upon only when a positive clock edge arrives. The code generates the circuit in Figure 7.15, which has an AND gate connected to the flip-flop's D input. Ex

Figure A.33a in Appendix A shows how the same circuit is specified by using an IF statement instead of WAIT UNTIL.

7.13 USING REGISTERS AND COUNTERS WITH CAD TOOLS

In this section we show how registers and counters can be included in circuits designed with the aid of CAD tools. Examples are given using both schematic capture and VHDL code.

7.13.1 INCLUDING REGISTERS AND COUNTERS IN SCHEMATICS

In section 5.5.1 we explained that a CAD system usually includes libraries of prebuilt subcircuits. We introduced the library of parameterized modules (LPM) and used the

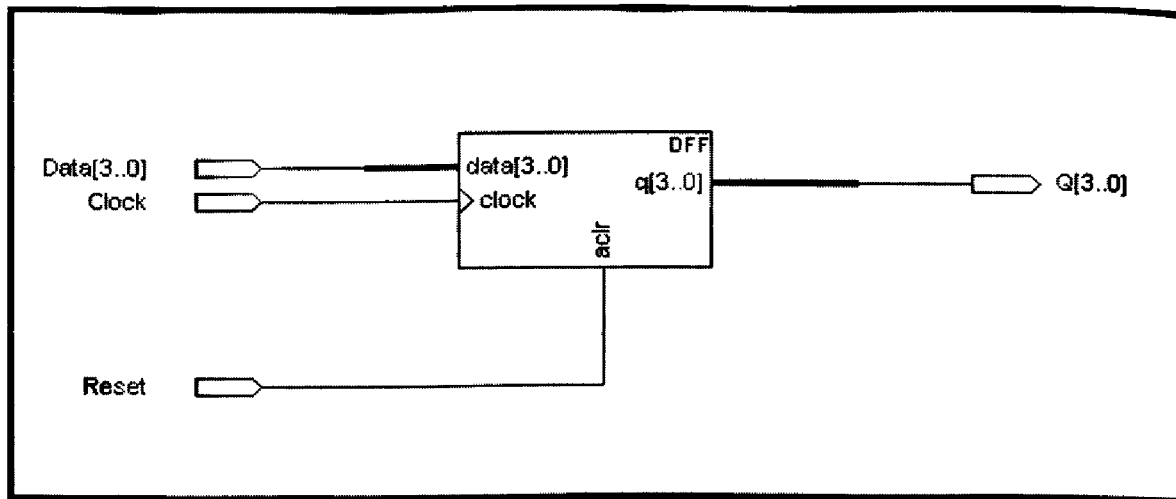


Figure 7.41 The *lpm_ff* parameterized flip-flop module.

adder/subtractor module, *lpm_add_sub*, as an example. The LPM includes subcircuits that have modules that constitute flip-flops, registers, counters, and many other useful circuits. Figure 7.41 shows a symbol that represents the *lpm_ff* module. This module is a register with one or more positive-edge-triggered flip-flops that can be of either D or T type. The module has parameters that allow the number of flip-flops and flip-flop type to be chosen. In this case we chose to have four D flip-flops. The tutorial in Appendix C explains how the configuration of the module is done.

The D inputs to the four flip-flops, called *data* on the graphical symbol, are connected to the four-bit input signal *Data[3..0]*. The module's asynchronous active-high reset (clear) input, *aclr*, is shown in the schematic. The flip-flop outputs, *q*, are attached to the output symbol labeled *Q[3..0]*.

In section 7.3 we said that a useful application of D flip-flops is to hold the results of an arithmetic computation, such as the output from an adder circuit. An example is given in Figure 7.42, which uses two LPM modules, *lpm_add_sub* and *lpm_ff*. The *lpm_add_sub* module was described in section 5.5.1. Its parameters, which are not shown in Figure 7.42, are set to configure the module as a four-bit adder circuit. The adder's four-bit data input *dataa* is driven by the *Data[3..0]* input signal. The sum bits, *result*, are connected to the *data* inputs of the *lpm_ff*, which is configured as a four-bit D register with asynchronous clear. The register generates the output of the circuit, *Q[3..0]*, which appears on the left side of the schematic. This signal is fed back to the *datab* input of the adder. The sum bits from the adder are also provided as an output of the circuit, *Sum[3..0]*, for ease of reference in the discussion that follows. If the register is first cleared to 0000, then the circuit can be used to add the binary numbers on the *Data[3..0]* input to a sum that is being accumulated in the register, if a new number is applied to the input during each clock cycle. A circuit that performs this function is referred to as an *accumulator* circuit.

We synthesized a circuit from the schematic and implemented the four-bit adder using the carry-lookahead structure. A timing simulation for the circuit appears in Figure 7.43. After resetting the circuit, the *Data* input is set to 0001. The adder produces the sum

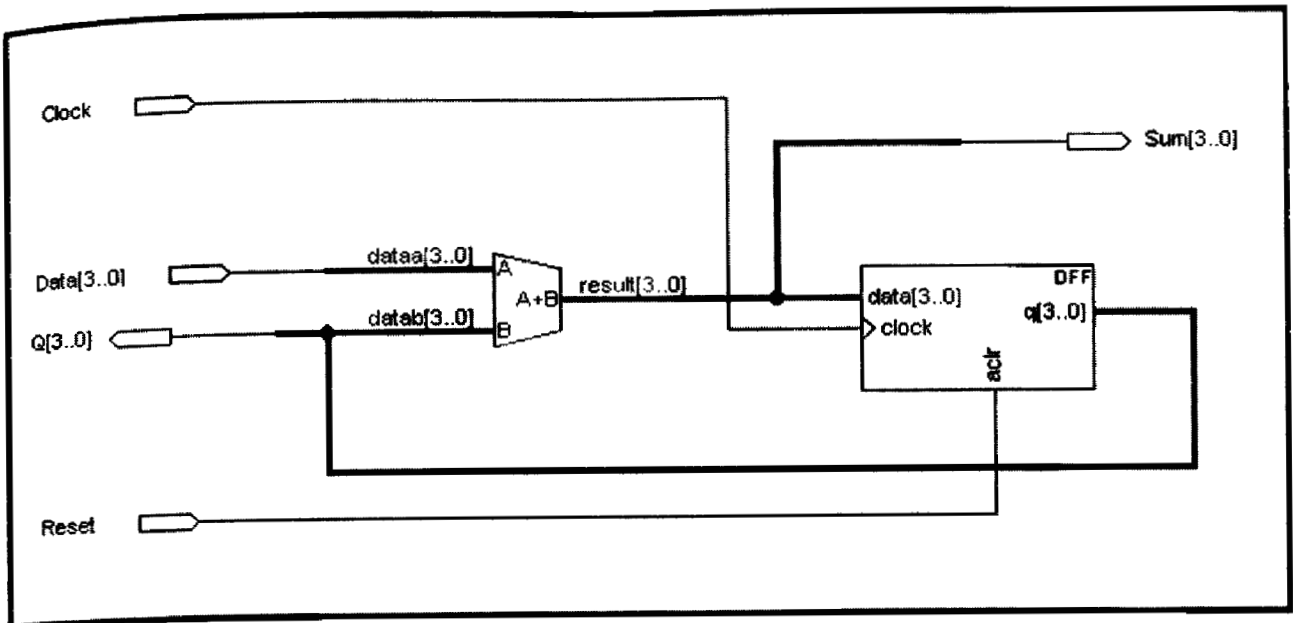


Figure 7.42 An adder with registered feedback.

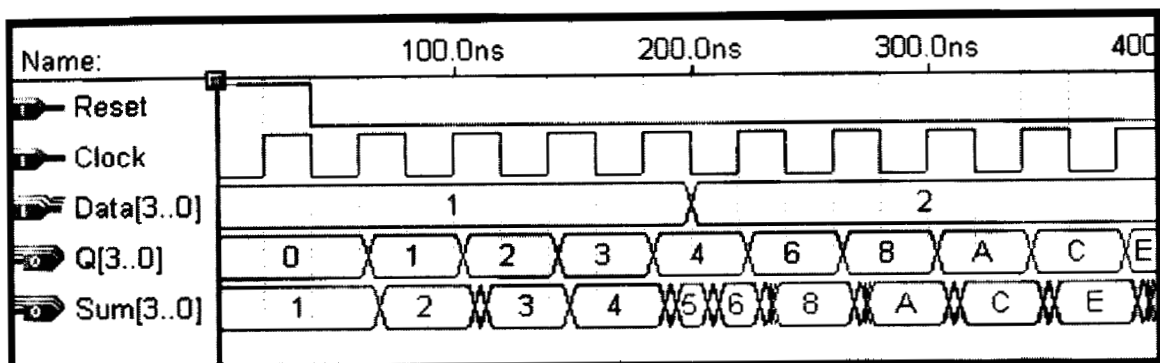


Figure 7.43 Timing simulation of the circuit from Figure 7.42.

$0000 + 0001 = 0001$, which is then clocked into the register at the 60 ns point in time. After the t_{co} delay, $Q[3..0]$ becomes 0001, and this causes the adder to produce the new sum $0001 + 0001 = 0010$. The time needed to generate the new sum is determined by the speed of the adder circuit, which produces the sum after 12.5 ns in this case. The new sum does not appear at the Q output until after the next positive clock edge, at 100 ns. The adder then produces 0011 as the next sum. When *Sum* changes from 0010 to 0011, some oscillations appear in the timing diagram, caused by the propagation of carry signals through the adder circuit. These oscillations are not seen at the Q output, because *Sum* is stable by the time the next positive clock edge occurs. Moving forward to the 180 ns point in time, *Sum* = 0100, and this value is clocked into the register. The adder produces the new sum 0101. Then at 200 ns *Data* is changed to 0010, which causes the sum to change to $0100 + 0010 = 0110$.

At the next positive clock edge, Q is set to 0110; the value $Sum = 0101$ that was present temporarily in the circuit is not observed at the Q output. The circuit continues to add 0010 to the Q output at each successive positive clock edge.

Having simulated the behavior of the circuit, we should consider whether or not we can conclude with some certainty that the circuit works properly. Ideally, it is prudent to test all possible combinations of a circuit's inputs before declaring that it works as desired. However, in practice such testing is often not feasible because of the number of input combinations that exist. For the circuit in Figure 7.42, we could verify that a correct sum is produced by the adder, and we could also check that each of the four flip-flops in the register properly stores either 0 or 1. We will discuss issues associated with the testing of circuits in Chapter 11.

For the circuit in Figure 7.42 to work properly, the following timing constraints must be met. When the register is clocked by a positive clock edge, a change of signal value at the register's output must propagate through the feedback path to the *data* input of the adder. The adder then produces a new sum, which must propagate to the *data* input of the register. For the chip used to implement the circuit, the total delay incurred is 14 ns. The delay can be broken down as follows: It takes 2 ns from when the register is clocked until a change in its output reaches the *data* input of the adder. The adder produces a new sum in 8 ns, and it takes 4 ns for the sum to propagate to the register's *data* input. In Figure 7.43 the clock period is 40 ns. Hence after the new sum arrives at the *data* input of the register, there remain $40 - 14 = 26$ ns until the next positive clock edge occurs. The *data* input must be stable for the amount of the setup time, $t_{su} = 3$ ns, before the clock edge. Hence we have $26 - 3 = 23$ ns to spare. The clock period can be decreased by as much as 23 ns, and the circuit will still work. But if the clock period is less than $40 - 23 = 17$ ns, then the circuit will not function properly. Of course, if a different chip were used to implement the circuit, then different timing results would be produced. CAD systems provide tools that can automatically determine the minimum allowable clock period for which a circuit will work correctly. The tutorial in Appendix C shows how this is done using the tools that accompany the book.

7.13.2 REGISTERS AND COUNTERS IN VHDL CODE

The predefined subcircuits in the LPM library can be instantiated in VHDL code. Figure 7.44 instantiates the *lpm_shiftreg* module, which is an n -bit shift register. The module's parameters are set using the GENERIC MAP construct, as shown. The GENERIC MAP construct is similar to the PORT MAP construct that is used to assign signal names to the ports of a subcircuit. GENERIC MAP is used to assign values to the parameters of the subcircuit. The number of flip-flops in the shift register is set to 4 using the parameter $LPM_WIDTH \Rightarrow 4$. The module can be configured to shift either left or right. The parameter $LPM_DIRECTION \Rightarrow RIGHT$ sets the shift direction to be from the left to the right. The code uses the module's asynchronous active-high clear input, *aclr*, and the active-high parallel-load input, *load*, which allows the shift register to be loaded with the parallel data on the module's *data* input. When shifting takes place, the value on the *shiftin* input is shifted into the left-most flip-flop and the bit shifted out appears on the right-most

```

LIBRARY ieee ;
USE ieee.std_logic_1164.all ;
LIBRARY lpm ;
USE lpm.lpm_components.all ;

ENTITY shift IS
    PORT ( Clock      : IN   STD_LOGIC ;
          Reset       : IN   STD_LOGIC ;
          Shiftin, Load : IN   STD_LOGIC ;
          R           : IN   STD_LOGIC_VECTOR(3 DOWNTO 0) ;
          Q           : OUT  STD_LOGIC_VECTOR(3 DOWNTO 0) ) ;
END shift ;

ARCHITECTURE Structure OF shift IS
BEGIN
    instance: lpm_shiftreg
        GENERIC MAP (LPM_WIDTH => 4, LPM_DIRECTION => "RIGHT")
        PORT MAP (data => R, clock => Clock, aclr => Reset,
                 load => Load, shiftin => Shiftin, q => Q ) ;
END Structure ;

```

Figure 7.44 Instantiation of the *lpm_shiftreg* module.

bit of the q parallel output. The code uses the named association, described in section 5.5.2, to connect the input and output signals of the *shift* entity to the ports of the module. For example, the R input signal is connected to the module's *data* port. When translated into a circuit, the *lpm_shiftreg* has the structure shown in Figure 7.19.

Predefined modules also exist for various types of counters, which are commonly needed in logic circuits. An example is the *lpm_counter* module, which is a variable-width counter with parallel-load inputs.

7.13.3 USING VHDL SEQUENTIAL STATEMENTS FOR REGISTERS AND COUNTERS

Rather than instantiating predefined subcircuits for registers, shift registers, counters, and the like, the circuits can be described in VHDL using sequential statements. Figure 7.39 gives code for a D flip-flop. A straightforward way to describe an n -bit register is to write hierarchical code that includes n instances of the D flip-flop subcircuit. A simpler approach is shown in Figure 7.45. It uses the same code as in Figure 7.39 except that the D input and Q output are defined as multibit signals. The code represents an eight-bit register with asynchronous clear.


```

LIBRARY ieee ;
USE ieee.std_logic_1164.all ;

ENTITY reg8 IS
    PORT ( D          : IN  STD_LOGIC_VECTOR(7 DOWNTO 0) ;
          Resetn, Clock : IN  STD_LOGIC ;
          Q           : OUT STD_LOGIC_VECTOR(7 DOWNTO 0) ) ;
END reg8 ;

ARCHITECTURE Behavior OF reg8 IS
BEGIN
    PROCESS ( Resetn, Clock )
    BEGIN
        IF Resetn = '0' THEN
            Q <= "00000000" ;
        ELSIF Clock'EVENT AND Clock = '1' THEN
            Q <= D ;
        END IF ;
    END PROCESS ;
END Behavior ;

```

Figure 7.45 Code for an eight-bit register with asynchronous clear.

7.6 AN N-BIT REGISTER Since registers of different sizes are often needed in logic circuits, it is advantageous to define a register entity for which the number of flip-flops can be easily changed. Figure 7.46 shows how the code in Figure 7.45 can be extended to include a parameter that sets the number of flip-flops. The parameter is an integer, N , which is defined using the VHDL construct called **GENERIC**. The value of N is set to 16 using the $:=$ assignment operator. By changing this parameter, the code can represent a register of any size. If the register is declared as a component, then it can be used as a subcircuit in other code. That code can either use the default value of the **GENERIC** parameter or else specify a different parameter using the **GENERIC MAP** construct. An example showing how **GENERIC MAP** is used is shown in Figure 7.44.

The D and Q signals in Figure 7.46 are defined in terms of N . The statement that resets all the bits of Q to 0 uses the odd-looking syntax $Q <= (\text{OTHERS} => '0')$. For the default value of $N = 16$, this statement is equivalent to the statement $Q <= "0000000000000000"$. The $(\text{OTHERS} => '0')$ syntax results in a '0' digit being assigned to each bit of Q , regardless of how many bits Q has. It allows the code to be used for any value of N , rather than only for $N = 16$.

7.7 A FOUR-BIT SHIFT REGISTER Assume that we wish to write VHDL code that represents the four-bit shift register in Figure 7.19. One approach is to write hierarchical code that uses four subcircuits. Each subcircuit consists of a D flip-flop with a 2-to-1 multiplexer connected to the D input. Figure 7.47 defines the entity named *muxdff*, which represents this subcircuit. The two data inputs are named D_0 and D_1 , and they are selected using the

```

LIBRARY ieee ;
USE ieee.std_logic_1164.all ;

ENTITY regn IS
    GENERIC ( N : INTEGER := 16 ) ;
    PORT ( D          : IN  STD_LOGIC_VECTOR(N-1 DOWNTO 0) ;
          Resetn, Clock : IN  STD_LOGIC ;
          Q           : OUT STD_LOGIC_VECTOR(N-1 DOWNTO 0) ) ;
END regn ;

ARCHITECTURE Behavior OF regn IS
BEGIN
    PROCESS ( Resetn, Clock )
    BEGIN
        IF Resetn = '0' THEN
            Q <= (OTHERS => '0') ;
        ELSIF Clock'EVENT AND Clock = '1' THEN
            Q <= D ;
        END IF ;
    END PROCESS ;
END Behavior ;

```

Figure 7.46 Code for an n -bit register with asynchronous clear.

```

LIBRARY ieee ;
USE ieee.std_logic_1164.all ;

ENTITY muxdff IS
    PORT ( D0, D1, Sel, Clock : IN  STD_LOGIC ;
          Q                   : OUT STD_LOGIC ) ;
END muxdff ;

ARCHITECTURE Behavior OF muxdff IS
BEGIN
    PROCESS
    BEGIN
        WAIT UNTIL Clock'EVENT AND Clock = '1' ;
        IF Sel = '0' THEN
            Q <= D0 ;
        ELSE
            Q <= D1 ;
        END IF ;
    END PROCESS ;
END Behavior ;

```

Figure 7.47 Code for a D flip-flop with a 2-to-1 multiplexer on the D input.

```

LIBRARY ieee ;
USE ieee.std_logic_1164.all ;

ENTITY shift4 IS
    PORT ( R          : IN          STD_LOGIC_VECTOR(3 DOWNTO 0) ;
          L, w, Clock : IN          STD_LOGIC ;
          Q          : BUFFER STD_LOGIC_VECTOR(3 DOWNTO 0) ) ;
END shift4 ;

ARCHITECTURE Structure OF shift4 IS
    COMPONENT muxdff
        PORT ( D0, D1, Sel, Clock : IN    STD_LOGIC ;
              Q                  : OUT  STD_LOGIC ) ;
    END COMPONENT ;
BEGIN
    Stage3: muxdff PORT MAP ( w, R(3), L, Clock, Q(3) ) ;
    Stage2: muxdff PORT MAP ( Q(3), R(2), L, Clock, Q(2) ) ;
    Stage1: muxdff PORT MAP ( Q(2), R(1), L, Clock, Q(1) ) ;
    Stage0: muxdff PORT MAP ( Q(1), R(0), L, Clock, Q(0) ) ;
END Structure ;

```

Figure 7.48 Hierarchical code for a four-bit shift register.

Sel input. The process statement specifies that on the positive clock edge if $Sel = 0$, then Q is assigned the value of D_0 ; otherwise, Q is assigned the value of D_1 .

Figure 7.48 defines the four-bit shift register. The statement labeled *Stage3* instantiates the left-most flip-flop, which has the output Q_3 , and the statement labeled *Stage0* instantiates the right-most flip-flop, Q_0 . When $L = 1$, it is loaded in parallel from the R input, and when $L = 0$, shifting takes place in the left to right direction. Serial data is shifted into the most-significant bit, Q_3 , from the w input.

- 7.8 ALTERNATIVE CODE FOR A FOUR-BIT SHIFT REGISTER** A different style of code for the four-bit shift register is given in Figure 7.49. The lines of code are numbered for ease of reference. Instead of using subcircuits, the shift register is described using sequential statements. Due to the WAIT UNTIL statement in line 13, any signal that is assigned a value inside the process has to be implemented as the output of a flip-flop. Lines 14 and 15 specify the parallel loading of the shift register when $L = 1$. The ELSE clause in lines 16 to 20 specifies the shifting operation. Line 17 shifts the value of Q_1 into the flip-flop with the output Q_0 . Lines 18 and 19 shift the values of Q_2 and Q_3 into the flip-flops with the outputs Q_1 and Q_2 , respectively. Finally, line 20 shifts the value of w into the left-most flip-flop, which has the output Q_3 . Note that the process semantics, described in section 6.6.6, stipulate that the four assignments in lines 17 to 20 are scheduled to occur only after all of the statements in the process have been evaluated. Hence all four flip-flops change their values at the same time, as required in the shift register. The code generates the same shift-register circuit as the code in Figure 7.48.

```

1  LIBRARY ieee ;
2  USE ieee.std_logic_1164.all ;

3  ENTITY shift4 IS
4      PORT ( R      : IN      STD_LOGIC_VECTOR(3 DOWNTO 0) ;
5            Clock  : IN      STD_LOGIC ;
6            L, w   : IN      STD_LOGIC ;
7            Q      : BUFFER  STD_LOGIC_VECTOR(3 DOWNTO 0) ) ;
8  END shift4 ;

9  ARCHITECTURE Behavior OF shift4 IS
10 BEGIN
11     PROCESS
12     BEGIN
13         WAIT UNTIL Clock'EVENT AND Clock = '1' ;
14         IF L = '1' THEN
15             Q <= R ;
16         ELSE
17             Q(0) <= Q(1) ;
18             Q(1) <= Q(2) ;
19             Q(2) <= Q(3) ;
20             Q(3) <= w ;
21         END IF ;
22     END PROCESS ;
23 END Behavior ;

```

Figure 7.49 Alternative code for a shift register.

It is instructive to consider the effect of reversing the ordering of lines 17 through 20 in Figure 7.49, as indicated in Figure 7.50. In this case the first shift operation specified in the code, in line 17, shifts the value of w into the left-most flip-flop with the output Q_3 . Due to the semantics of the process statement, the assignment to Q_3 does not take effect until all of the subsequent statements inside the process are evaluated. Hence line 18 shifts the present value of Q_3 , before it is changed as a result of line 17, into the flip-flop with the output Q_2 . Similarly, lines 19 and 20 shift the present values of Q_2 and Q_1 into the flip-flops with the outputs Q_1 and Q_0 , respectively. The code produces the same circuit as it did with the ordering of the statements in Figure 7.49.

N-BIT SHIFT REGISTER Figure 7.51 shows code that can be used to represent shift registers of any size. The GENERIC parameter N , which has the default value 8 in the figure, sets the number of flip-flops. The code is identical to that in Figure 7.49 with two exceptions. First, R and Q are defined in terms of N . Second, the ELSE clause that describes the shifting operation is generalized to work for any number of flip-flops.

```

1  LIBRARY ieee ;
2  USE ieee.std_logic_1164.all ;

3  ENTITY shift4 IS
4      PORT ( R      : IN      STD_LOGIC_VECTOR(3 DOWNTO 0) ;
5            Clock  : IN      STD_LOGIC ;
6            L, w   : IN      STD_LOGIC ;
7            Q      : BUFFER  STD_LOGIC_VECTOR(3 DOWNTO 0) ) ;
8  END shift4 ;

9  ARCHITECTURE Behavior OF shift4 IS
10 BEGIN
11     PROCESS
12     BEGIN
13         WAIT UNTIL Clock'EVENT AND Clock = '1' ;
14         IF L = '1' THEN
15             Q <= R ;
16         ELSE
17             Q(3) <= w ;
18             Q(2) <= Q(3) ;
19             Q(1) <= Q(2) ;
20             Q(0) <= Q(1) ;
21         END IF ;
22     END PROCESS ;
23 END Behavior ;

```

Figure 7.50 Code that reverses the ordering of statements in Figure 7.49.

Lines 18 to 20 specify the shifting operation for the right-most $N - 1$ flip-flops, which have the outputs Q_{N-2} to Q_0 . The construct used is called a FOR LOOP. It is similar to the FOR GENERATE statement, introduced in section 6.6.4, which is used to generate a set of concurrent statements. The FOR LOOP is used to generate a set of sequential statements. The first loop iteration shifts the present value of Q_1 into the flip-flop with the output Q_0 . The next loop iteration shifts Q_2 into the flip-flop with the output Q_1 , and so on, with the final iteration shifting Q_{N-1} into the flip-flop with the output Q_{N-2} . Line 21 completes the shift operation by shifting the value of the serial input w into the left-most flip-flop with the output Q_{N-1} .

UP-COUNTER Figure 7.52 shows the code for a four-bit up-counter that has a reset input, *Resetn*, and an enable input, *E*. In the architecture body the flip-flops in the counter are represented by the signal named *Count*. The process statement specifies an asynchronous reset of *Count* if *Resetn* = 0. The ELSIF clause specifies that on the positive clock edge, if *E* = 1, the count is incremented. If *E* = 0, the code explicitly assigns $Count \leq Count$.

```

1  LIBRARY ieee ;
2  USE ieee.std_logic_1164.all ;

3  ENTITY shiftn IS
4      GENERIC ( N : INTEGER := 8 ) ;
5      PORT ( R      : IN      STD_LOGIC_VECTOR(N-1 DOWNT0) ;
6           Clock  : IN      STD_LOGIC ;
7           L, w   : IN      STD_LOGIC ;
8           Q      : BUFFER  STD_LOGIC_VECTOR(N-1 DOWNT0) ) ;
9  END shiftn ;

10 ARCHITECTURE Behavior OF shiftn IS
11 BEGIN
12     PROCESS
13     BEGIN
14         WAIT UNTIL Clock'EVENT AND Clock = '1' ;
15         IF L = '1' THEN
16             Q <= R ;
17         ELSE
18             Genbits: FOR i IN 0 TO N-2 LOOP
19                 Q(i) <= Q(i + 1) ;
20             END LOOP ;
21             Q(N-1) <= w ;
22         END IF ;
23     END PROCESS ;
24 END Behavior ;

```

Figure 7.51 Code for an n -bit left-to-right shift register.

This statement is not required to correctly describe the counter, because of the implied memory semantics, but it may be included for clarity. The Q outputs are assigned the value of *Count* at the end of the code. The code produces the circuit shown in Figure 7.23 if the VHDL compiler opts to use T flip-flops, and it generates the circuit in Figure 7.24 (with the reset input added) if the compiler chooses D flip-flops.

USING INTEGER SIGNALS IN A COUNTER Counters are often defined in VHDL using **Ex** the `INTEGER` type, which was introduced in section 5.5.4. The code in Figure 7.53 defines an up-counter that has a parallel-load input in addition to a reset input. The parallel data, R , as well as the counter's output, Q , are defined using the `INTEGER` type. Since they have the range from 0 to 15, both of these signals represent four-bit quantities. In Figure 7.52 the signal *Count* is defined to represent the flip-flops in the counter. This signal is not

```

LIBRARY ieee ;
USE ieee.std_logic_1164.all ;
USE ieee.std_logic_unsigned.all ;

ENTITY upcount IS
    PORT ( Clock, Resetn, E : IN  STD_LOGIC ;
          Q : OUT STD_LOGIC_VECTOR (3 DOWNTO 0));
END upcount ;

ARCHITECTURE Behavior OF upcount IS
    SIGNAL Count : STD_LOGIC_VECTOR (3 DOWNTO 0) ;
BEGIN
    PROCESS ( Clock, Resetn )
    BEGIN
        IF Resetn = '0' THEN
            Count <= "0000" ;
        ELSIF (Clock'EVENT AND Clock = '1') THEN
            IF E = '1' THEN
                Count <= Count + 1 ;
            ELSE
                Count <= Count ;
            END IF ;
        END IF ;
    END PROCESS ;
    Q <= Count ;
END Behavior ;

```

Figure 7.52 Code for a four-bit up-counter.

needed if the Q outputs have the BUFFER mode, as shown in Figure 7.53. The if-then-else statement at the beginning of the process includes the same asynchronous reset as in Figure 7.53. The ELSIF clause specifies that on the positive clock edge, if $L = 1$, the flip-flops in the counter are loaded in parallel from the R inputs. If $L = 0$, the count is incremented.

7.12 DOWN-COUNTER Figure 7.54 shows the code for a down-counter named *downcnt*. To make it easy to change the starting count, it is defined as a GENERIC parameter named *modulus*. On the positive clock edge, if $L = 1$, the counter is loaded with the value *modulus*−1, and if $L = 0$, the count is decremented. The counter also includes an enable input, *E*. Setting $E = 1$ allows the count to be decremented when an active clock edge occurs.

```

LIBRARY ieee ;
USE ieee.std_logic_1164.all ;

ENTITY upcount IS
    PORT ( R           : IN      INTEGER RANGE 0 TO 15 ;
          Clock, Resetn, L : IN      STD_LOGIC ;
          Q           : BUFFER INTEGER RANGE 0 TO 15 ) ;
END upcount ;

ARCHITECTURE Behavior OF upcount IS
BEGIN
    PROCESS ( Clock, Resetn )
    BEGIN
        IF Resetn = '0' THEN
            Q <= 0 ;
        ELSIF (Clock'EVENT AND Clock = '1') THEN
            IF L = '1' THEN
                Q <= R ;
            ELSE
                Q <= Q + 1 ;
            END IF;
        END IF;
    END PROCESS;
END Behavior;

```

Figure 7.53 A four-bit counter with parallel load, using INTEGER signals.

7.14 DESIGN EXAMPLES

This section presents two examples of digital systems that make use of some of the building blocks described in this chapter and in Chapter 6.

7.14.1 BUS STRUCTURE

Digital systems often contain a set of registers used to store data. Figure 7.55 gives an example of a system that has k n -bit registers, R_1 to R_k . Each register is connected to a common set of n wires, which are used to transfer data into and out of the registers. This common set of wires is usually called a *bus*. In addition to registers, in a real system other types of circuit blocks would be connected to the bus. The figure shows how n bits of data can be placed on the bus from another circuit block, using the control input *Extern*. The data stored in any of the registers can be transferred via the bus to a different register or to another circuit block that is connected to the bus.


```

LIBRARY ieee ;
USE ieee.std_logic_1164.all ;

ENTITY downcnt IS
    GENERIC ( modulus : INTEGER := 8 ) ;
    PORT ( Clock, L, E : IN STD_LOGIC ;
          Q : OUT INTEGER RANGE 0 TO modulus-1 ) ;
END downcnt ;

ARCHITECTURE Behavior OF downcnt IS
    SIGNAL Count : INTEGER RANGE 0 TO modulus-1 ;
BEGIN
    PROCESS
    BEGIN
        WAIT UNTIL (Clock'EVENT AND Clock = '1') ;
        IF L = '1' THEN
            Count <= modulus-1 ;
        ELSE
            IF E = '1' THEN
                Count <= Count-1 ;
            END IF ;
        END IF ;
    END PROCESS ;
    Q <= Count ;
END Behavior ;

```

Figure 7.54 Code for a down-counter.

It is essential to ensure that only one circuit block attempts to place data onto the bus wires at any given time. In Figure 7.55 each register is connected to the bus through an n -bit tri-state buffer. A control circuit is used to ensure that only one of the tri-state buffer enable inputs, $R1_{out}, \dots, Rk_{out}$, is asserted at a given time. The control circuit also produces the signals $R1_{in}, \dots, Rk_{in}$, which control when data is loaded into each register. In general, the control circuit could perform a number of functions, such as transferring the data stored in one register into another register and the like. Figure 7.55 shows an input signal named *Function* that instructs the control circuit to perform a particular task. The control circuit is synchronized by a clock input, which is the same clock signal that controls the k registers.

Figure 7.56 provides a more detailed view of how the registers from Figure 7.55 can be connected to a bus. To keep the picture simple, 2 two-bit registers are shown, but the same scheme can be used for larger registers. For register $R1$, two tri-state buffers enabled by $R1_{out}$ are used to connect each flip-flop output to a wire in the bus. The D input on each flip-flop is connected to a 2-to-1 multiplexer, whose select input is controlled by $R1_{in}$. If $R1_{in} = 0$, the flip-flops are loaded from their Q outputs; hence the stored data does not change. But if $R1_{in} = 1$, data is loaded into the flip-flops from the bus. Instead of using multiplexers on the flip-flop inputs, one could attempt to connect the D inputs on

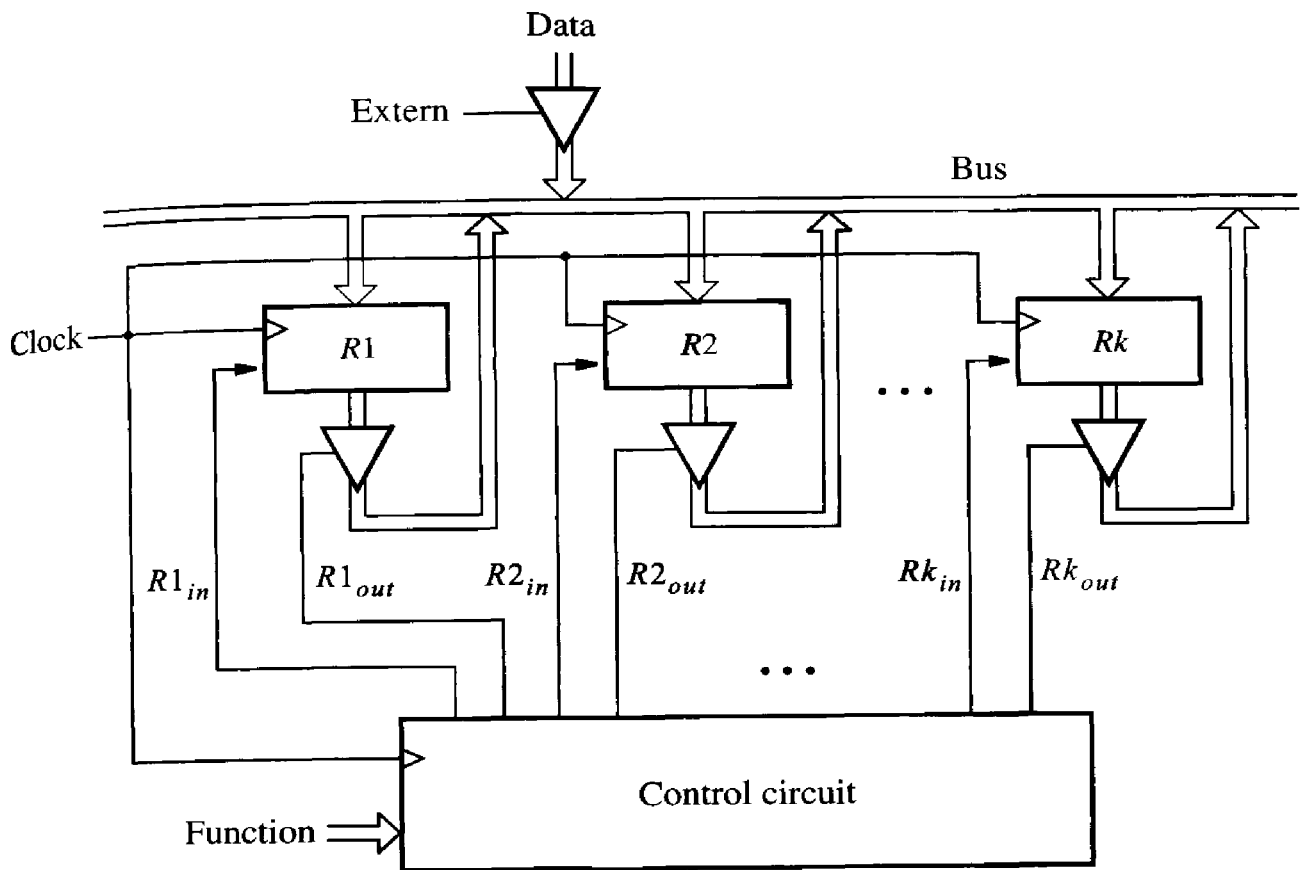


Figure 7.55 A digital system with k registers.

the flip-flops directly to the bus. Then it is necessary to control the clock inputs on all flip-flops to ensure that they are clocked only when new data should be loaded into the register. This approach is not good because it may happen that different flip-flops will be clocked at slightly different times, leading to a problem known as *clock skew*. A detailed discussion of the issues related to the clocking of flip-flops is provided in section 10.3.

The system in Figure 7.55 can be used in many different ways, depending on the design of the control circuit and on how many registers and other circuit blocks are connected to the bus. As a simple example, consider a system that has three registers, $R1$, $R2$, and $R3$. Each register is connected to the bus as indicated in Figure 7.56. We will design a control circuit that performs a single function—it swaps the contents of registers $R1$ and $R2$, using $R3$ for temporary storage.

The required swapping is done in three steps, each needing one clock cycle. In the first step the contents of $R2$ are transferred into $R3$. Then the contents of $R1$ are transferred into $R2$. Finally, the contents of $R3$, which are the original contents of $R2$, are transferred into $R1$. Note that we say that the contents of one register, R_i , are “transferred” into another register, R_j . This jargon is commonly used to indicate that the new contents of R_j will be a copy of the contents of R_i . The contents of R_i are not changed as a result of the transfer. Therefore, it would be more precise to say that the contents of R_i are “copied” into R_j .

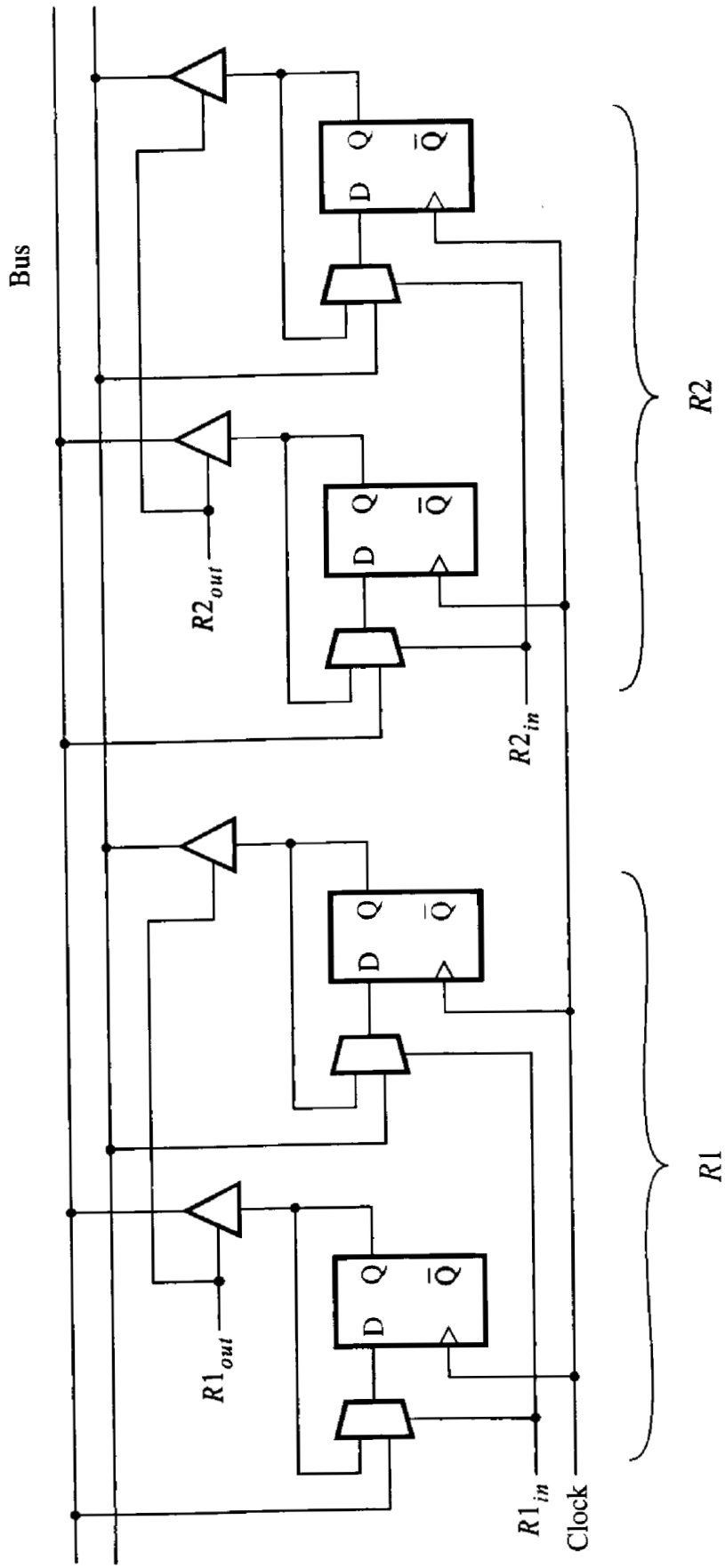


Figure 7.56 Details for connecting registers to a bus.

Using a Shift Register for Control

There are many ways to design a suitable control circuit for the swap operation. One possibility is to use the left-to-right shift register shown in Figure 7.57. Assume that the reset input is used to clear the flip-flops to 0. Hence the control signals $R1_{in}$, $R1_{out}$, and so on are not asserted, because the shift register outputs have the value 0. The serial input w normally has the value 0. We assume that changes in the value of w are synchronized to occur shortly after the active clock edge. This assumption is reasonable because w would normally be generated as the output of some circuit that is controlled by the same clock signal. When the desired swap should be performed, w is set to 1 for one clock cycle, and then w returns to 0. After the next active clock edge, the output of the left-most flip-flop becomes equal to 1, which asserts both $R2_{out}$ and $R3_{in}$. The contents of register $R2$ are placed onto the bus wires and are loaded into register $R3$ on the next active clock edge. This clock edge also shifts the contents of the shift register, resulting in $R1_{out} = R2_{in} = 1$. Note that since w is now 0, the first flip-flop is cleared, causing $R2_{out} = R3_{in} = 0$. The contents of $R1$ are now on the bus and are loaded into $R2$ on the next clock edge. After this clock edge the shift register contains 001 and thus asserts $R3_{out}$ and $R1_{in}$. The contents of $R3$ are now on the bus and are loaded into $R1$ on the next clock edge.

Using the control circuit in Figure 7.57, when w changes to 1 the swap operation does not begin until after the next active clock edge. We can modify the control circuit so that it starts the swap operation in the same clock cycle in which w changes to 1. One possible approach is illustrated in Figure 7.58. The reset signal is used to set the shift-register contents to 100, by presetting the left-most flip-flop to 1 and clearing the other two flip-flops. As long as $w = 0$, the output control signals are not asserted. When w changes to 1, the signals $R2_{out}$ and $R3_{in}$ are immediately asserted and the contents of $R2$ are placed onto the bus. The next active clock edge loads this data into $R3$ and also shifts the shift register contents to 010. Since the signal $R1_{out}$ is now asserted, the contents of $R1$ appear on the bus. The next clock edge loads this data into $R2$ and changes the shift register contents to 001. The contents of $R3$ are now on the bus; this data is loaded into $R1$ at the next clock edge, which also changes the shift register contents to 100. We assume that w had the value 1 for only one clock cycle; hence the output control signals are not asserted at this point.

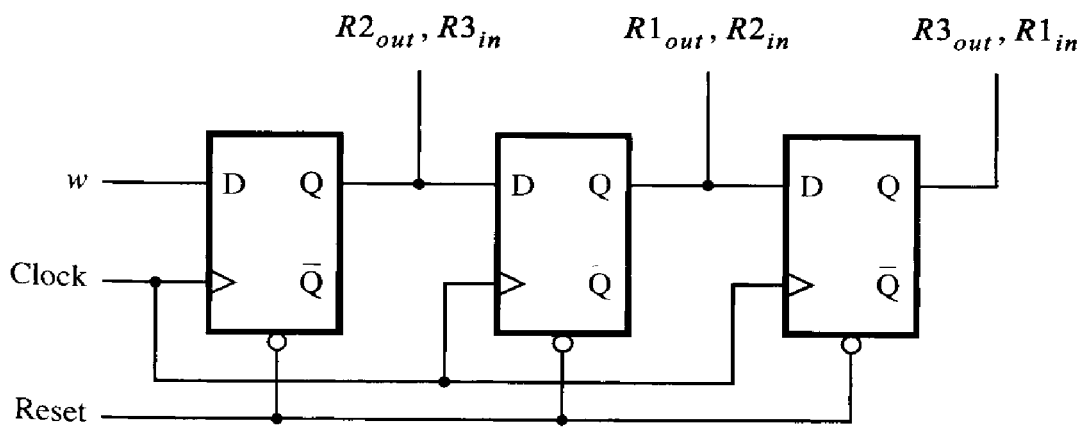


Figure 7.57 A shift-register control circuit.

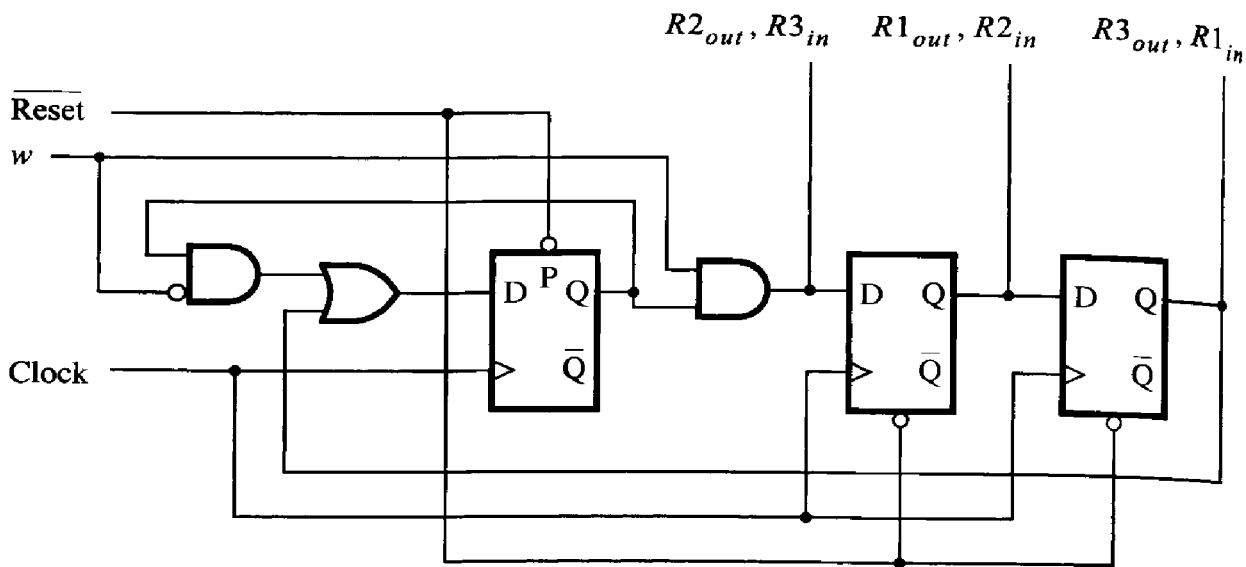


Figure 7.58 A modified control circuit.

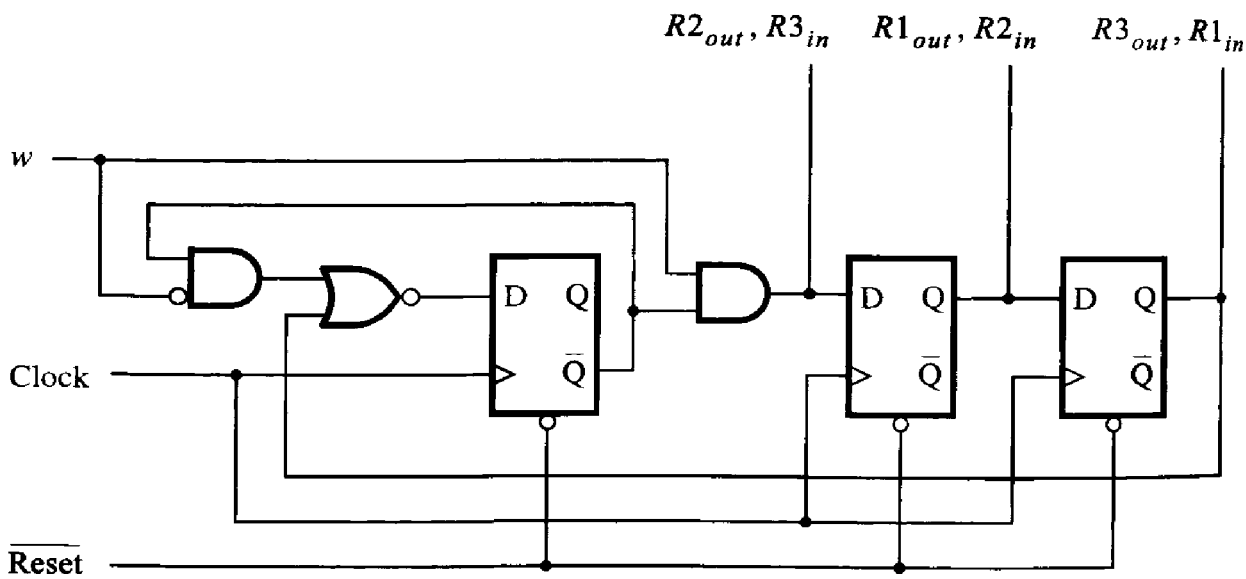


Figure 7.59 A modified version of the circuit in Figure 7.58.

It may not be obvious to the reader how to design a circuit such as the one in Figure 7.58, because we have presented the design in an ad hoc fashion. In section 8.3 we will show how this circuit can be designed using a more formal approach.

The circuit in Figure 7.58 assumes that a preset input is available on the left-most flip-flop. If the flip-flop has only a clear input, then we can use the equivalent circuit shown in Figure 7.59. In this circuit we use the \bar{Q} output of the left-most flip-flop and also complement the input to this flip-flop by using a NOR gate instead of an OR gate.

Using a Multiplexer to Implement a Bus

In Figure 7.55 we used tri-state buffers to control access to the bus. An alternative approach is to use multiplexers, as depicted in Figure 7.60. The outputs of each register are connected to a multiplexer. This multiplexer's output is connected to the inputs of the registers, thus realizing the bus. The multiplexer select inputs determine which register's contents appear on the bus. Although the figure shows just one multiplexer symbol, we actually need one multiplexer for each bit in the registers. For example, assume that there are 4 eight-bit registers, $R1$ to $R4$, plus the externally-supplied eight-bit *Data*. To interconnect them, we need eight 5-to-1 multiplexers. In Figure 7.57 we used a shift register to implement the control circuit. A similar approach can be used with multiplexers. The signals that control when data is loaded into a register, like $R1_{in}$, can still be connected directly to the shift-register outputs. However, instead of using control signals like $R1_{out}$ to place the contents of a register onto the bus, we have to generate the select inputs for the multiplexers. One way to do so is to connect the shift-register outputs to an encoder circuit that produces the select inputs for the multiplexer. We discussed encoder circuits in section 6.3.

The tri-state buffer and multiplexer approaches for implementing a bus are both equally valid. However, some types of chips, such as most PLDs, do not contain a sufficient number of tri-state buffers to realize even moderately large buses. In such chips the multiplexer-based approach is the only practical alternative. In practice, circuits are designed with CAD tools. If the designer describes the circuit using tri-state buffers, but there are not enough such buffers in the target device, then the CAD tools automatically produce an equivalent circuit that uses multiplexers.

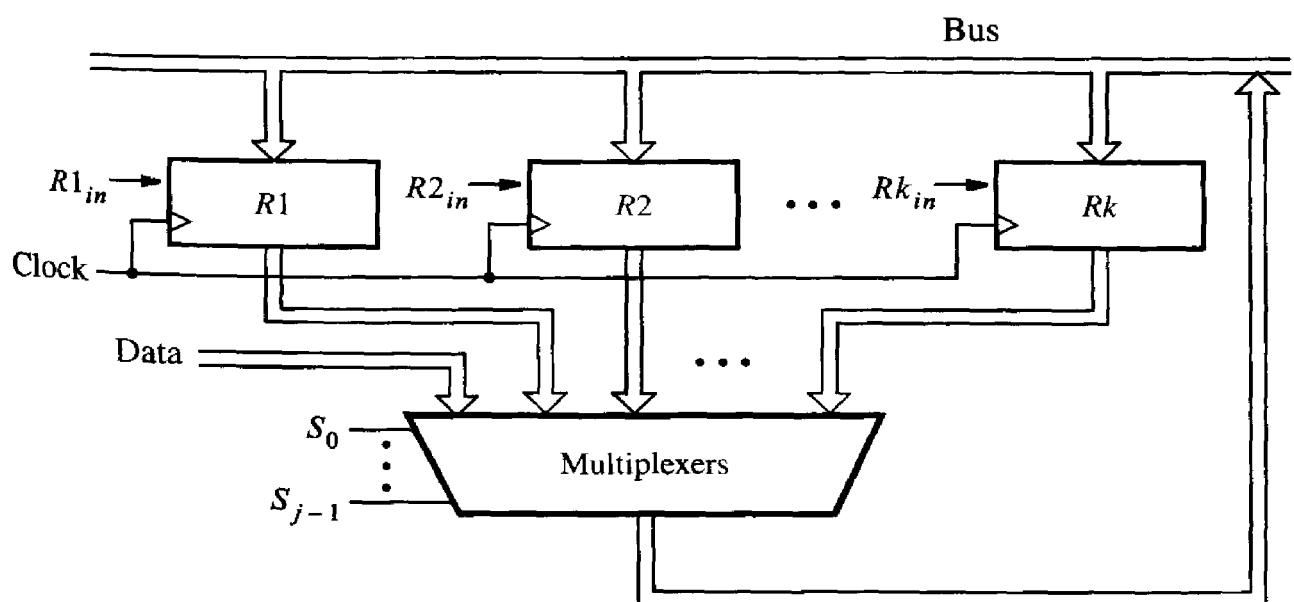


Figure 7.60 Using multiplexers to implement a bus.

VHDL Code

This section presents VHDL code for our circuit example that swaps the contents of two registers. We first give the code for the style of circuit in Figure 7.55 that uses tri-state buffers to implement the bus and then give the code for the style of circuit in Figure 7.60 that uses multiplexers. The code is written in a hierarchical fashion, using subcircuits for the registers, tri-state buffers, and the shift register. Figure 7.61 gives the code for an n -bit register of the type in Figure 7.56. The number of bits in the register is set by the generic parameter N , which has the default value of 8. The process that describes the register specifies that if the input $Rin = 1$, then the flip-flops are loaded from the n -bit input R . Otherwise, the flip-flops retain their presently stored values. The circuit synthesized from this code has a 2-to-1 multiplexer controlled by Rin connected to the D input on each flip-flop, as depicted in Figure 7.56.

Figure 7.62 gives the code for a subcircuit that represents n tri-state buffers, each enabled by the input E . The number of buffers is set by the generic parameter N . The inputs to the buffers are the n -bit signal X , and the outputs are the n -bit signal F . The architecture uses the syntax (OTHERS => 'Z') to specify that the output of each buffer is set to the value Z if $E = 0$; otherwise, the output is set to $F = X$.

Figure 7.63 provides the code for a shift register that can be used to implement the control circuit in Figure 7.57. The number of flip-flops is set by the generic parameter K , which has the default value of 4. The shift register has an active-low asynchronous reset input. The shift operation is defined with a FOR LOOP in the style used in Example 7.9.

```

LIBRARY ieee ;
USE ieee.std_logic_1164.all ;

ENTITY regn IS
    GENERIC ( N : INTEGER := 8 ) ;
    PORT ( R      : IN  STD_LOGIC_VECTOR(N-1 DOWNTO 0) ;
          Rin, Clock : IN  STD_LOGIC ;
          Q      : OUT STD_LOGIC_VECTOR(N-1 DOWNTO 0) ) ;
END regn ;

ARCHITECTURE Behavior OF regn IS
BEGIN
    PROCESS
    BEGIN
        WAIT UNTIL Clock'EVENT AND Clock = '1' ;
        IF Rin = '1' THEN
            Q <= R ;
        END IF ;
    END PROCESS ;
END Behavior ;

```

Figure 7.61 Code for an n -bit register of the type in Figure 7.56.

```

LIBRARY ieee ;
USE ieee.std_logic_1164.all ;

ENTITY trin IS
    GENERIC ( N : INTEGER := 8 ) ;
    PORT ( X : IN  STD_LOGIC_VECTOR(N-1 DOWNTO 0) ;
          E : IN  STD_LOGIC ;
          F : OUT STD_LOGIC_VECTOR(N-1 DOWNTO 0) ) ;
END trin ;

ARCHITECTURE Behavior OF trin IS
BEGIN
    F <= (OTHERS => 'Z') WHEN E = '0' ELSE X ;
END Behavior ;

```

Figure 7.62 Code for an n -bit tri-state buffer.

```

LIBRARY ieee ;
USE ieee.std_logic_1164.all ;

ENTITY shiftr IS -- left-to-right shift register with async reset
    GENERIC ( K : INTEGER := 4 ) ;
    PORT ( Resetn, Clock, w : IN  STD_LOGIC ;
          Q : BUFFER STD_LOGIC_VECTOR(1 TO K) ) ;
END shiftr ;

ARCHITECTURE Behavior OF shiftr IS
BEGIN
    PROCESS ( Resetn, Clock )
    BEGIN
        IF Resetn = '0' THEN
            Q <= (OTHERS => '0') ;
        ELSIF Clock'EVENT AND Clock = '1' THEN
            Genbits: FOR i IN K DOWNTO 2 LOOP
                Q(i) <= Q(i-1) ;
            END LOOP ;
            Q(1) <= w ;
        END IF ;
    END PROCESS ;
END Behavior ;

```

Figure 7.63 Code for the shift register in Figure 7.57.

To use the entities in Figures 7.61 through 7.63 as subcircuits, we have to provide component declarations for each one. For convenience, we placed these declarations inside a single package, named *components*, which is shown in Figure 7.64. This package is used in the code given in Figure 7.65. It represents the digital system in Figure 7.55 with 3 eight-bit registers, *R1*, *R2*, and *R3*.

The circuit in Figure 7.55 includes tri-state buffers that are used to place *n* bits of externally supplied data on the bus. In the code in Figure 7.65, these buffers are instantiated in the statement labeled *tri_ext*. Each of the eight buffers is enabled by the input signal *Extern*, and the data inputs on the buffers are attached to the eight-bit signal *Data*. When *Extern* = 1, the value of *Data* is placed on the bus, which is represented by the signal *BusWires*. The *BusWires* port represents the circuit's output. This port has the mode INOUT, which is required because *BusWires* is connected to the outputs of tri-state buffers and these buffers are connected to the inputs of the registers.

We assume that a three-bit control signal named *RinExt* exists, which is used to allow the externally supplied data to be loaded from the bus into registers *R1*, *R2*, or *R3*. The

```

LIBRARY ieee ;
USE ieee.std_logic_1164.all ;

PACKAGE components IS

    COMPONENT regn -- register
        GENERIC ( N : INTEGER := 8 ) ;
        PORT ( R          : IN   STD_LOGIC_VECTOR(N-1 DOWNTO 0) ;
              Rin, Clock : IN   STD_LOGIC ;
              Q          : OUT  STD_LOGIC_VECTOR(N-1 DOWNTO 0) ) ;
    END COMPONENT ;

    COMPONENT shiftr -- left-to-right shift register with async reset
        GENERIC ( K : INTEGER := 4 ) ;
        PORT ( Resetn, Clock, w : IN   STD_LOGIC ;
              Q                : BUFFER STD_LOGIC_VECTOR(1 TO K) ) ;
    END component ;

    COMPONENT trin -- tri-state buffers
        GENERIC ( N : INTEGER := 8 ) ;
        PORT ( X : IN   STD_LOGIC_VECTOR(N-1 DOWNTO 0) ;
              E : IN   STD_LOGIC ;
              F : OUT  STD_LOGIC_VECTOR(N-1 DOWNTO 0) ) ;
    END COMPONENT ;

END components ;

```

Figure 7.64 Package and component declarations.

```

LIBRARY ieee ;
USE ieee.std_logic_1164.all ;
USE work.components.all ;

ENTITY swap IS
    PORT ( Data      : IN      STD_LOGIC_VECTOR(7 DOWNTO 0) ;
          Resetn, w  : IN      STD_LOGIC ;
          Clock, Extern : IN    STD_LOGIC ;
          RinExt     : IN      STD_LOGIC_VECTOR(1 TO 3) ;
          BusWires   : INOUT  STD_LOGIC_VECTOR(7 DOWNTO 0) ) ;
END swap ;

ARCHITECTURE Behavior OF swap IS
    SIGNAL Rin, Rout, Q : STD_LOGIC_VECTOR(1 TO 3) ;
    SIGNAL R1, R2, R3 : STD_LOGIC_VECTOR(7 DOWNTO 0) ;
BEGIN
    control: shiftr GENERIC MAP ( K => 3 )
        PORT MAP ( Resetn, Clock, w, Q ) ;
    Rin(1) <= RinExt(1) OR Q(3) ;
    Rin(2) <= RinExt(2) OR Q(2) ;
    Rin(3) <= RinExt(3) OR Q(1) ;
    Rout(1) <= Q(2) ; Rout(2) <= Q(1) ; Rout(3) <= Q(3) ;

    tri_ext: trin PORT MAP ( Data, Extern, BusWires ) ;
    reg1: regn PORT MAP ( BusWires, Rin(1), Clock, R1 ) ;
    reg2: regn PORT MAP ( BusWires, Rin(2), Clock, R2 ) ;
    reg3: regn PORT MAP ( BusWires, Rin(3), Clock, R3 ) ;
    tri1: trin PORT MAP ( R1, Rout(1), BusWires ) ;
    tri2: trin PORT MAP ( R2, Rout(2), BusWires ) ;
    tri3: trin PORT MAP ( R3, Rout(3), BusWires ) ;
END Behavior ;

```

Figure 7.65 A digital system like the one in Figure 7.55.

RinExt input is not shown in Figure 7.55, to keep the figure simple, but it would be generated by the same external circuit block that produces *Extern* and *Data*. When *RinExt*(1) = 1, the data on the bus is loaded into register *R1*; when *RinExt*(2) = 1, the data is loaded into *R2*; and when *RinExt*(3) = 1, the data is loaded into *R3*.

In Figure 7.65 the three-bit shift register is instantiated in the statement labeled *control*. The outputs of the shift register are the three-bit signal *Q*. The next three statements connect *Q* to the control signals that determine when data is loaded into each register, which are represented by the three-bit signal *Rin*. The signals *Rin*(1), *Rin*(2), and *Rin*(3) in the code correspond to the signals *R1_{in}*, *R2_{in}*, and *R3_{in}* in Figure 7.55. As specified in Figure 7.57, the left-most shift-register output, *Q*(1), controls when data is loaded into register *R3*.

Similarly, $Q(2)$ controls register $R2$, and $Q(3)$ controls $R1$. Each bit in Rin is ORed with the corresponding bit in $RinExt$ so that externally supplied data can be stored in the registers as discussed above. The code also connects the shift-register outputs to the enable inputs, called $Rout$, on the tri-state buffers that connect the registers to the bus. Figure 7.57 shows that $Q(1)$ is used to put the contents of $R2$ onto the bus; hence $Rout(2)$ is assigned the value of $Q(1)$. Similarly, $Rout(1)$ is assigned the value of $Q(2)$, and $Rout(3)$ is assigned the value of $Q(3)$. The remaining statements in the code instantiate the registers and tri-state buffers in the system.

VHDL Code Using Multiplexers

Figure 7.66 shows how the code in Figure 7.65 can be modified to use multiplexers instead of tri-state buffers. Using the circuit structure shown in Figure 7.60, the bus is implemented using eight 4-to-1 multiplexers. Three of the data inputs on each 4-to-1 multiplexer are connected to one bit from registers $R1$, $R2$, and $R3$. The fourth data input is connected to one bit of the $Data$ input signal to allow externally supplied data to be written into the registers. When the shift register's contents are 000, the multiplexers select $Data$ to be placed on the bus. This data is loaded into the register selected by $RinExt$. It is loaded into $R1$ if $RinExt(1) = 1$, $R2$ if $RinExt(2) = 1$, and $R3$ if $RinExt(3) = 1$.

The $Rout$ signal in Figure 7.65, which is used as the enable inputs on the tri-state buffers connected to the bus, is not needed for the multiplexer implementation. Instead, we have to provide the select inputs on the multiplexers. In the architecture body in Figure 7.66, the shift-register outputs are called Q . These signals are used to generate the Rin control signals for the registers in the same way as shown in Figure 7.65. We said in the discussion concerning Figure 7.60 that an encoder is needed between the shift-register outputs and the multiplexer select inputs. A suitable encoder is described in the selected signal assignment labeled *encoder*. It produces the multiplexer select inputs, which are named S . It sets $S = 00$ when the shift register contains 000, $S = 10$ when the shift register contains 100, and so on, as given in the code. The multiplexers are described by the selected signal assignment labeled *muxes*. This statement places the value of $Data$ onto the bus ($BusWires$) if $S = 00$, the contents of register $R1$ if $S = 01$, and so on. Using this scheme, when the swap operation is not active, the multiplexers place the bits from the $Data$ input on the bus.

In Figure 7.66 we use two selected signal assignments, one to describe an encoder and the other to describe the bus multiplexers. A simpler approach is to use a single selected signal assignment as shown in Figure 7.67. The statement labeled *muxes* specifies directly which signal should appear on $BusWires$ for each pattern of the shift-register outputs. The circuit synthesized from this statement is similar to an 8-to-1 multiplexer with the three select inputs connected to the shift-register outputs. However, only half of the multiplexer circuit is actually generated by the synthesis tools because there are only four data inputs. The circuit generated from the code in Figure 7.67 is the same as the one generated from the code in Figure 7.66.

Figure 7.68 gives an example of a timing simulation for a circuit synthesized from the code in Figure 7.67. In the first half of the simulation, the circuit is reset, and the contents of registers $R1$ and $R2$ are initialized. The hex value 55 is loaded into $R1$, and the value AA is loaded into $R2$. The clock edge at 275 ns, marked by the vertical reference line in Figure 7.68, loads the value $w = 1$ into the shift register. The contents of $R2$ (AA) then appear on

```

LIBRARY ieee ;
USE ieee.std_logic_1164.all ;
USE work.components.all ;
ENTITY swapmux IS
    PORT ( Data      : IN      STD_LOGIC_VECTOR(7 DOWNTO 0) ;
          Resetn, w  : IN      STD_LOGIC ;
          Clock      : IN      STD_LOGIC ;
          RinExt     : IN      STD_LOGIC_VECTOR(1 TO 3) ;
          BusWires   : BUFFER  STD_LOGIC_VECTOR(7 DOWNTO 0) ) ;
END swapmux ;

ARCHITECTURE Behavior OF swapmux IS
    SIGNAL Rin, Q : STD_LOGIC_VECTOR(1 TO 3) ;
    SIGNAL S : STD_LOGIC_VECTOR(1 DOWNTO 0) ;
    SIGNAL R1, R2, R3 : STD_LOGIC_VECTOR(7 DOWNTO 0) ;
BEGIN
    control: shiftr GENERIC MAP ( K => 3 )
        PORT MAP ( Resetn, Clock, w, Q ) ;
    Rin(1) <= RinExt(1) OR Q(3) ;
    Rin(2) <= RinExt(2) OR Q(2) ;
    Rin(3) <= RinExt(3) OR Q(1) ;

    reg1: regn PORT MAP ( BusWires, Rin(1), Clock, R1 ) ;
    reg2: regn PORT MAP ( BusWires, Rin(2), Clock, R2 ) ;
    reg3: regn PORT MAP ( BusWires, Rin(3), Clock, R3 ) ;
    encoder:
    WITH Q SELECT
        S <= "00" WHEN "000",
            "10" WHEN "100",
            "01" WHEN "010",
            "11" WHEN OTHERS;
    muxes: --eight 4-to-1 multiplexers
    WITH S SELECT
        BusWires <= Data WHEN "00",
            R1 WHEN "01",
            R2 WHEN "10",
            R3 WHEN OTHERS ;
END Behavior ;

```

Figure 7.66 Using multiplexers to implement a bus.

```

ARCHITECTURE Behavior OF swapmux IS
  SIGNAL Rin, Q : STD_LOGIC_VECTOR(1 TO 3) ;
  SIGNAL R1, R2, R3 : STD_LOGIC_VECTOR(7 DOWNTO 0) ;
BEGIN
  control: shiftr GENERIC MAP ( K => 3 )
    PORT MAP ( Resetn, Clock, w, Q ) ;
  Rin(1) <= RinExt(1) OR Q(3) ;
  Rin(2) <= RinExt(2) OR Q(2) ;
  Rin(3) <= RinExt(3) OR Q(1) ;

  reg1: regn PORT MAP ( BusWires, Rin(1), Clock, R1 ) ;
  reg2: regn PORT MAP ( BusWires, Rin(2), Clock, R2 ) ;
  reg3: regn PORT MAP ( BusWires, Rin(3), Clock, R3 ) ;

  muxes:
  WITH Q SELECT
    BusWires <= Data WHEN "000",
              R2  WHEN "100",
              R1  WHEN "010",
              R3  WHEN OTHERS ;
END Behavior ;

```

Figure 7.67 A simplified version of the architecture in Figure 7.66.

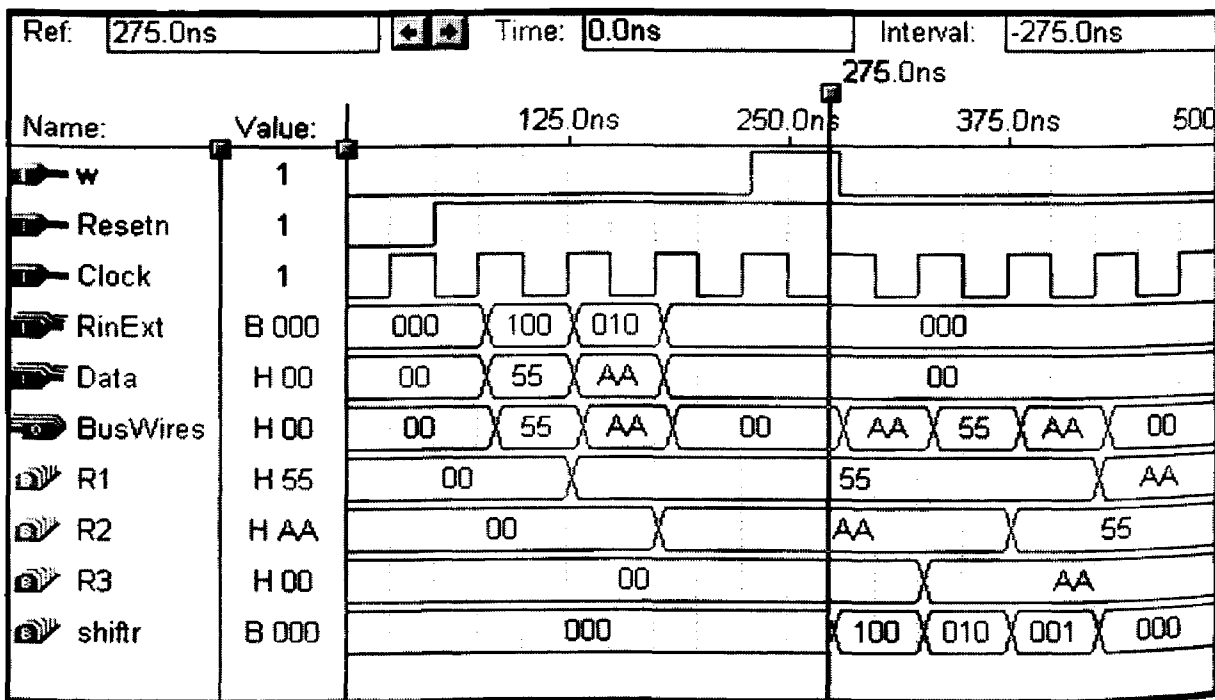


Figure 7.68 Timing simulation for the VHDL code in Figure 7.67.

the bus and are loaded into $R3$ by the clock edge at 325 ns. Following this clock edge, the contents of the shift register are 010, and the data stored in $R1$ (55) is on the bus. The clock edge at 375 ns loads this data into $R2$ and changes the shift register to 001. The contents of $R3$ (AA) now appear on the bus and are loaded into $R1$ by the clock edge at 425 ns. The shift register is now in state 000, and the swap is completed.

7.14.2 SIMPLE PROCESSOR

A second example of a digital system like the one in Figure 7.55 is shown in Figure 7.69. It has four n -bit registers, $R0, \dots, R3$, that are connected to the bus using tri-state buffers. External data can be loaded into the registers from the n -bit *Data* input, which is connected to the bus using tri-state buffers enabled by the *Extern* control signal. The system also includes an adder/subtractor module. One of its data inputs is provided by an n -bit register, A , that is attached to the bus, while the other data input, B , is directly connected to the bus. If the *AddSub* signal has the value 0, the module generates the sum $A + B$; if $AddSub = 1$, the module generates the difference $A - B$. To perform the subtraction, we assume that the adder/subtractor includes the required XOR gates to form the 2's complement of B , as discussed in section 5.3. The register G stores the output produced by the adder/subtractor. The A and G registers are controlled by the signals A_{in} , G_{in} , and G_{out} .

The system in Figure 7.69 can perform various functions, depending on the design of the control circuit. As an example, we will design a control circuit that can perform the four operations listed in Table 7.2. The left column in the table shows the name of an operation and its operands; the right column indicates the function performed in the operation. For the *Load* operation the meaning of $R_x \leftarrow Data$ is that the data on the external *Data* input is transferred across the bus into any register, R_x , where R_x can be $R0$ to $R3$. The *Move* operation copies the data stored in register R_y into register R_x . In the table the square brackets, as in $[R_x]$, refer to the *contents* of a register. Since only a single transfer across the bus is needed, both the *Load* and *Move* operations require only one step (clock cycle) to be completed. The *Add* and *Sub* operations require three steps, as follows: In the first step the contents of R_x are transferred across the bus into register A . Then in the next step, the contents of R_y are placed onto the bus. The adder/subtractor module performs the required function, and the results are stored in register G . Finally, in the third step the contents of G are transferred into R_x .

A digital system that performs the types of operations listed in Table 7.2 is usually called a *processor*. The specific operation to be performed at any given time is indicated using the control circuit input named *Function*. The operation is initiated by setting the w input to 1, and the control circuit asserts the *Done* output when the operation is completed.

In Figure 7.55 we used a shift register to implement the control circuit. It is possible to use a similar design for the system in Figure 7.69. To illustrate a different approach, we will base the design of the control circuit on a counter. This circuit has to generate the required control signals in each step of each operation. Since the longest operations (*Add* and *Sub*) need three steps (clock cycles), a two-bit counter can be used. Figure 7.70 shows a two-bit up-counter connected to a 2-to-4 decoder. Decoders are discussed in section 6.2. The decoder is enabled at all times by setting its enable (En) input permanently to the

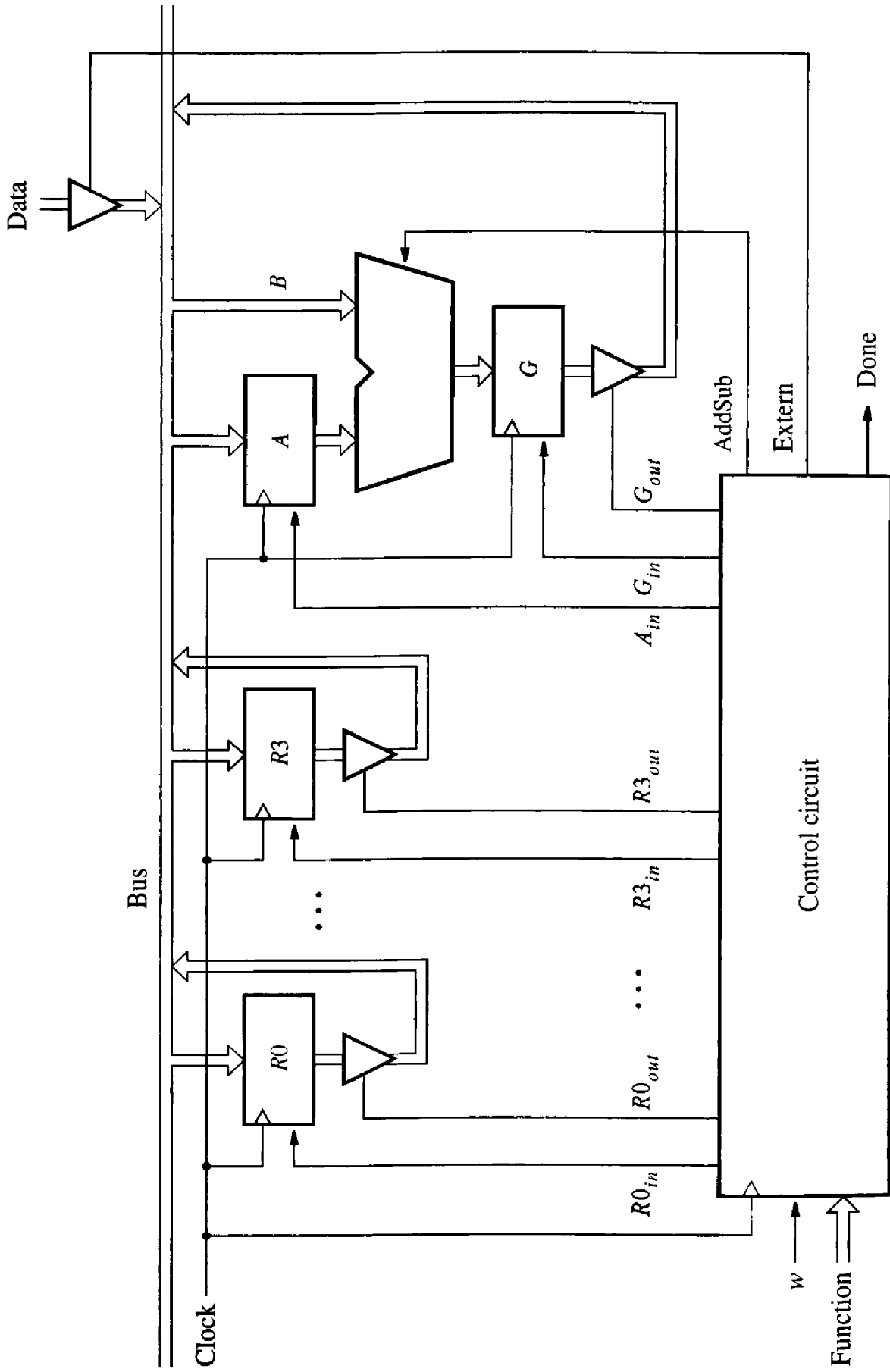


Figure 7.69 A digital system that implements a simple processor.

Table 7.2 Operations performed in the processor.

Operation	Function Performed
Load Rx , Data	$Rx \leftarrow Data$
Move Rx , Ry	$Rx \leftarrow [Ry]$
Add Rx , Ry	$Rx \leftarrow [Rx] + [Ry]$
Sub Rx , Ry	$Rx \leftarrow [Rx] - [Ry]$

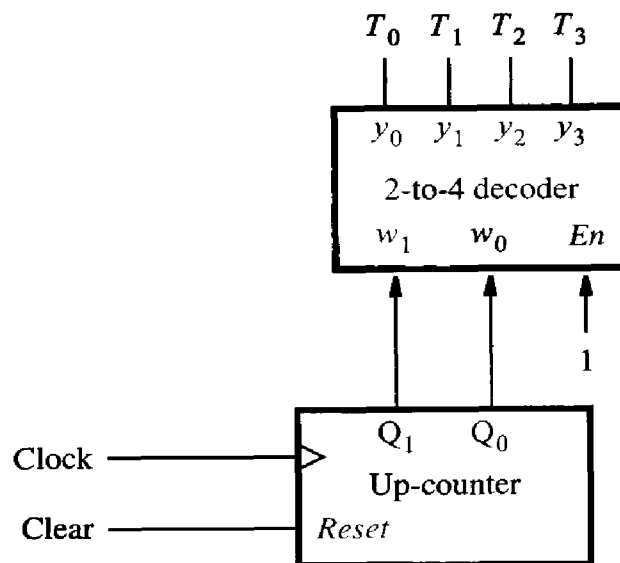


Figure 7.70 A part of the control circuit for the processor.

value 1. Each of the decoder outputs represents a step in an operation. When no operation is currently being performed, the count value is 00; hence the T_0 output of the decoder is asserted. In the first step of an operation, the count value is 01, and T_1 is asserted. During the second and third steps of the *Add* and *Sub* operations, T_2 and T_3 are asserted, respectively.

In each of steps T_0 to T_3 , various control signal values have to be generated by the control circuit, depending on the operation being performed. Figure 7.71 shows that the operation is specified with six bits, which form the *Function* input. The two left-most bits, $F = f_1f_0$, are used as a two-bit number that identifies the operation. To represent *Load*, *Move*, *Add*, and *Sub*, we use the codes $f_1f_0 = 00, 01, 10$, and 11 , respectively. The inputs Rx_1Rx_0 are a binary number that identifies the Rx operand, while Ry_1Ry_0 identifies the Ry operand. The *Function* inputs are stored in a six-bit Function Register when the FR_{in} signal is asserted.

Figure 7.71 also shows three 2-to-4 decoders that are used to decode the information encoded in the F , Rx , and Ry inputs. We will see shortly that these decoders are included

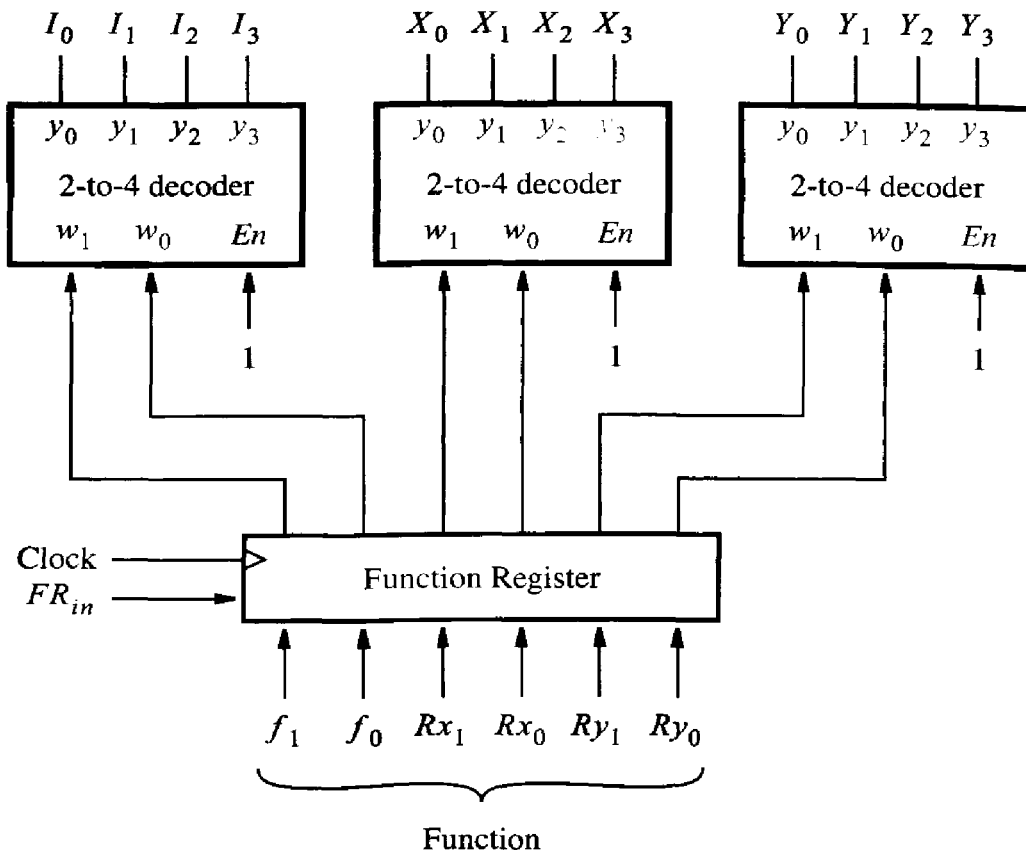


Figure 7.71 The function register and decoders.

as a convenience because their outputs provide simple-looking logic expressions for the various control signals.

The circuits in Figures 7.70 and 7.71 form a part of the control circuit. Using the input w and the signals $T_0, \dots, T_3, I_0, \dots, I_3, X_0, \dots, X_3$, and Y_0, \dots, Y_3 , we will show how to derive the rest of the control circuit. It has to generate the outputs *Extern*, *Done*, A_{in} , G_{in} , G_{out} , *AddSub*, $RO_{in}, \dots, R3_{in}$, and $RO_{out}, \dots, R3_{out}$. The control circuit also has to generate the *Clear* and FR_{in} signals used in Figures 7.70 and 7.71.

Clear and FR_{in} are defined in the same way for all operations. *Clear* is used to ensure that the count value remains at 00 as long as $w = 0$ and no operation is being executed. Also, it is used to clear the count value to 00 at the end of each operation. Hence an appropriate logic expression is

$$Clear = \bar{w}T_0 + Done$$

The FR_{in} signal is used to load the values on the *Function* inputs into the Function Register when w changes to 1. Hence

$$FR_{in} = wT_0$$

The rest of the outputs from the control circuit depend on the specific step being performed in each operation. The values that have to be generated for each signal are shown in Table 7.3. Each row in the table corresponds to a specific operation, and each column represents

Table 7.3 Control signals asserted in each operation/time step.

	T_1	T_2	T_3
(Load): I_0	<i>Extern</i> , $R_{in} = X$, <i>Done</i>		
(Move): I_1	$R_{in} = X$, $R_{out} = Y$, <i>Done</i>		
(Add): I_2	$R_{out} = X$, A_{in}	$R_{out} = Y$, G_{in} , <i>AddSub</i> = 0	G_{out} , $R_{in} = X$, <i>Done</i>
(Sub): I_3	$R_{out} = X$, A_{in}	$R_{out} = Y$, G_{in} , <i>AddSub</i> = 1	G_{out} , $R_{in} = X$, <i>Done</i>

one time step. The *Extern* signal is asserted only in the first step of the *Load* operation. Therefore, the logic expression that implements this signal is

$$\textit{Extern} = I_0 T_1$$

Done is asserted in the first step of *Load* and *Move*, as well as in the third step of *Add* and *Sub*. Hence

$$\textit{Done} = (I_0 + I_1) T_1 + (I_2 + I_3) T_3$$

The A_{in} , G_{in} , and G_{out} signals are asserted in the *Add* and *Sub* operations. A_{in} is asserted in step T_1 , G_{in} is asserted in T_2 , and G_{out} is asserted in T_3 . The *AddSub* signal has to be set to 0 in the *Add* operation and to 1 in the *Sub* operation. This is achieved with the following logic expressions

$$A_{in} = (I_2 + I_3) T_1$$

$$G_{in} = (I_2 + I_3) T_2$$

$$G_{out} = (I_2 + I_3) T_3$$

$$\textit{AddSub} = I_3$$

The values of $RO_{in}, \dots, R3_{in}$ are determined using either the X_0, \dots, X_3 signals or the Y_0, \dots, Y_3 signals. In Table 7.3 these actions are indicated by writing either $R_{in} = X$ or $R_{in} = Y$. The meaning of $R_{in} = X$ is that $RO_{in} = X_0$, $R1_{in} = X_1$, and so on. Similarly, the values of $RO_{out}, \dots, R3_{out}$ are specified using either $R_{out} = X$ or $R_{out} = Y$.

We will develop the expressions for RO_{in} and RO_{out} by examining Table 7.3 and then show how to derive the expressions for the other register control signals. The table shows that RO_{in} is set to the value of X_0 in the first step of both the *Load* and *Move* operations and in the third step of both the *Add* and *Sub* operations, which leads to the expression

$$RO_{in} = (I_0 + I_1) T_1 X_0 + (I_2 + I_3) T_3 X_0$$

Similarly, $R0_{out}$ is set to the value of Y_0 in the first step of *Move*. It is set to X_0 in the first step of *Add* and *Sub* and to Y_0 in the second step of these operations, which gives

$$R0_{out} = I_1 T_1 Y_0 + (I_2 + I_3)(T_1 X_0 + T_2 Y_0)$$

The expressions for $R1_{in}$ and $R1_{out}$ are the same as those for $R0_{in}$ and $R0_{out}$ except that X_1 and Y_1 are used in place of X_0 and Y_0 . The expressions for $R2_{in}$, $R2_{out}$, $R3_{in}$, and $R3_{out}$ are derived in the same way.

The circuits shown in Figures 7.70 and 7.71, combined with the circuits represented by the above expressions, implement the control circuit in Figure 7.69.

Processors are extremely useful circuits that are widely used. We have presented only the most basic aspects of processor design. However, the techniques presented can be extended to design realistic processors, such as modern microprocessors. The interested reader can refer to books on computer organization for more details on processor design [1–2].

VHDL Code

In this section we give two different styles of VHDL code for describing the system in Figure 7.69. The first style uses tri-state buffers to represent the bus, and it gives the logic expressions shown above for the outputs of the control circuit. The second style of code uses multiplexers to represent the bus, and it uses CASE statements that correspond to Table 7.3 to describe the outputs of the control circuit.

VHDL code for an up-counter is shown in Figure 7.52. A modified version of this counter, named *upcount*, is shown in the code in Figure 7.72. It has a synchronous reset input, which is active high. In Figure 7.64 we defined the package named *components*, which provides component declarations for a number of subcircuits. In the VHDL code for the processor, we will use the *regn* and *trin* components listed in Figure 7.64, but not the *shiftr* component. We created a new package called *subccts* for use with the processor. The code is not shown here, but it includes component declarations for *regn* (Figure 7.61), *trin* (Figure 7.62), *upcount*, and *dec2to4* (Figure 6.30).

Complete code for the processor is given in Figure 7.73. In the architecture body, the statements labeled *counter* and *decT* instantiate the subcircuits in Figure 7.70. Note that we have assumed that the circuit has an active-high reset input, *Reset*, which is used to initialize the counter to 00. The statement `Func <= F & Rx & Ry` uses the concatenate operator to create the six-bit signal *Func*, which represents the inputs to the Function Register in Figure 7.71. The next statement instantiates the Function Register with the data inputs *Func* and the outputs *FuncReg*. The statements labeled *decI*, *decX*, and *decY* instantiate the decoders in Figure 7.71. Following these statements the previously derived logic expressions for the outputs of the control circuit are given. For $R0_{in}, \dots, R3_{in}$ and $R0_{out}, \dots, R3_{out}$, a GENERATE statement is used to produce the expressions.

At the end of the code, the tri-state buffers and registers in the processor are instantiated, and the adder/subtractor module is described using a selected signal assignment.

Using Multiplexers and CASE Statements

We showed in Figure 7.60 that a bus can be implemented using multiplexers, rather than tri-state buffers. VHDL code that describes the processor using this approach is shown in

```

LIBRARY ieee ;
USE ieee.std_logic_1164.all ;
USE ieee.std_logic_unsigned.all ;

ENTITY upcount IS
    PORT ( Clear, Clock : IN          STD_LOGIC ;
          Q             : BUFFER STD_LOGIC_VECTOR(1 DOWNTO 0) );
END upcount ;

ARCHITECTURE Behavior OF upcount IS
BEGIN
    upcount: PROCESS ( Clock )
    BEGIN
        IF (Clock'EVENT AND Clock = '1') THEN
            IF Clear = '1' THEN
                Q <= "00" ;
            ELSE
                Q <= Q + '1' ;
            END IF ;
        END IF ;
    END PROCESS ;
END Behavior ;

```

Figure 7.72 Code for a two-bit up-counter with synchronous reset.

Figure 7.74. The same entity declaration given in Figure 7.73 can be used and is not shown in Figure 7.74. The code illustrates a different way of describing the control circuit in the processor. It does not give logic expressions for the signals *Extern*, *Done*, and so on, as we did in Figure 7.73. Instead, CASE statements are used to represent the information shown in Table 7.3. These statements are provided inside the process labeled *controlsignals*. Each control signal is first assigned the value 0, as a default. This is required because the CASE statements specify the values of the control signals only when they should be asserted, as we did in Table 7.3. As explained for Figure 7.35, when the value of a signal is not specified, the signal retains its current value. This implied memory results in a feedback connection in the synthesized circuit. We avoid this problem by providing the default value of 0 for each of the control signals involved in the CASE statements.

In Figure 7.73 the statements labeled *decT* and *decI* are used to decode the *Count* signal and the stored values of the *F* input, respectively. The *decT* decoder has the outputs T_0, \dots, T_3 , and *decI* produces I_0, \dots, I_3 . In Figure 7.74 these two decoders are not used, because they do not serve a useful purpose in this code. Instead, the signals *T* and *I* are defined as two-bit signals, which are used in the CASE statements. The code sets *T* to the value of *Count*, while *I* is set to the value of the two left-most bits in the Function Register, which correspond to the stored values of the input *F*.

```

LIBRARY ieee ;
USE ieee.std_logic_1164.all ;
USE ieee.std_logic_signed.all ;
USE work.subccts.all ;

ENTITY proc IS
    PORT ( Data      : IN      STD_LOGIC_VECTOR(7 DOWNTO 0) ;
          Reset, w   : IN      STD_LOGIC ;
          Clock      : IN      STD_LOGIC ;
          F, Rx, Ry  : IN      STD_LOGIC_VECTOR(1 DOWNTO 0) ;
          Done       : BUFFER  STD_LOGIC ;
          BusWires   : INOUT   STD_LOGIC_VECTOR(7 DOWNTO 0) ) ;
END proc ;

ARCHITECTURE Behavior OF proc IS
    SIGNAL Rin, Rout : STD_LOGIC_VECTOR(0 TO 3) ;
    SIGNAL Clear, High, AddSub : STD_LOGIC ;
    SIGNAL Extern, Ain, Gin, Gout, FRin : STD_LOGIC ;
    SIGNAL Count, Zero : STD_LOGIC_VECTOR(1 DOWNTO 0) ;
    SIGNAL T, I, X, Y : STD_LOGIC_VECTOR(0 TO 3) ;
    SIGNAL R0, R1, R2, R3 : STD_LOGIC_VECTOR(7 DOWNTO 0) ;
    SIGNAL A, Sum, G : STD_LOGIC_VECTOR(7 DOWNTO 0) ;
    SIGNAL Func, FuncReg : STD_LOGIC_VECTOR(1 TO 6) ;
BEGIN
    Zero <= "00" ; High <= '1' ;
    Clear <= Reset OR Done OR (NOT w AND T(0)) ;
    counter: upcount PORT MAP ( Clear, Clock, Count ) ;
    decT: dec2to4 PORT MAP ( Count, High, T ) ;
    Func <= F & Rx & Ry ;
    FRin <= w AND T(0) ;
    functionreg: regn GENERIC MAP ( N => 6 )
        PORT MAP ( Func, FRin, Clock, FuncReg ) ;
    decI: dec2to4 PORT MAP ( FuncReg(1 TO 2), High, I ) ;
    decX: dec2to4 PORT MAP ( FuncReg(3 TO 4), High, X ) ;
    decY: dec2to4 PORT MAP ( FuncReg(5 TO 6), High, Y ) ;
    Extern <= I(0) AND T(1) ;
    Done <= ((I(0) OR I(1)) AND T(1)) OR ((I(2) OR I(3)) AND T(3)) ;
    Ain <= (I(2) OR I(3)) AND T(1) ;
    Gin <= (I(2) OR I(3)) AND T(2) ;
    Gout <= (I(2) OR I(3)) AND T(3) ;
    AddSub <= I(3) ;

```

... continued in Part *b*.

Figure 7.73 Code for the processor (Part *a*).

```

RegCntl:
FOR k IN 0 TO 3 GENERATE
    Rin(k) <= ((I(0) OR I(1)) AND T(1) AND X(k)) OR
              ((I(2) OR I(3)) AND T(3) AND X(k)) ;
    Rout(k) <= (I(1) AND T(1) AND Y(k)) OR
              ((I(2) OR I(3)) AND ((T(1) AND X(k)) OR (T(2) AND Y(k)))) ;
END GENERATE RegCntl ;
tri_extern: trin PORT MAP ( Data, Extern, BusWires ) ;
reg0: regn PORT MAP ( BusWires, Rin(0), Clock, R0 ) ;
reg1: regn PORT MAP ( BusWires, Rin(1), Clock, R1 ) ;
reg2: regn PORT MAP ( BusWires, Rin(2), Clock, R2 ) ;
reg3: regn PORT MAP ( BusWires, Rin(3), Clock, R3 ) ;
tri0: trin PORT MAP ( R0, Rout(0), BusWires ) ;
tri1: trin PORT MAP ( R1, Rout(1), BusWires ) ;
tri2: trin PORT MAP ( R2, Rout(2), BusWires ) ;
tri3: trin PORT MAP ( R3, Rout(3), BusWires ) ;
regA: regn PORT MAP ( BusWires, Ain, Clock, A ) ;
alu:
WITH AddSub SELECT
    Sum <= A + BusWires WHEN '0',
           A - BusWires WHEN OTHERS ;
regG: regn PORT MAP ( Sum, Gin, Clock, G ) ;
triG: trin PORT MAP ( G, Gout, BusWires ) ;
END Behavior ;

```

Figure 7.73 Code for the processor (Part *b*).

There are two nested levels of CASE statements. The first one enumerates the possible values of T . For each WHEN clause in this CASE statement, which represents a column in Table 7.3, there is a nested CASE statement that enumerates the four values of I . As indicated by the comments in the code, the nested CASE statements correspond exactly to the information given in Table 7.3.

At the end of Figure 7.74, the bus is described using a selected signal assignment. This statement represents multiplexers that place the appropriate data onto *BusWires*, depending on the values of R_{out} , G_{out} , and *Extern*.

The circuits synthesized from the code in Figures 7.73 and 7.74 are functionally equivalent. The style of code in Figure 7.74 has the advantage that it does not require the manual effort of analyzing Table 7.3 to generate the logic expressions for the control signals used for Figure 7.73. By using the style of code in Figure 7.74, these expressions are produced automatically by the VHDL compiler as a result of analyzing the CASE statements. The style of code in Figure 7.74 is less prone to careless errors. Also, using this style of code it would be straightforward to provide additional capabilities in the processor, such as adding other operations.

ARCHITECTURE Behavior OF proc IS

```

SIGNAL X, Y, Rin, Rout : STD_LOGIC_VECTOR(0 TO 3) ;
SIGNAL Clear, High, AddSub : STD_LOGIC ;
SIGNAL Extern, Ain, Gin, Gout, FRin : STD_LOGIC ;
SIGNAL Count, Zero, T, I : STD_LOGIC_VECTOR(1 DOWNT0 0) ;
SIGNAL R0, R1, R2, R3 : STD_LOGIC_VECTOR(7 DOWNT0 0) ;
SIGNAL A, Sum, G : STD_LOGIC_VECTOR(7 DOWNT0 0) ;
SIGNAL Func, FuncReg, Sel : STD_LOGIC_VECTOR(1 TO 6) ;

```

BEGIN

```

Zero <= "00" ; High <= '1' ;
Clear <= Reset OR Done OR (NOT w AND NOT T(1) AND NOT T(0)) ;
counter: upcount PORT MAP ( Clear, Clock, Count ) ;
T <= Count ;
Func <= F & Rx & Ry ;
FRin <= w AND NOT T(1) AND NOT T(0) ;
functionreg: regn GENERIC MAP ( N => 6 )
    PORT MAP ( Func, FRin, Clock, FuncReg ) ;
I <= FuncReg(1 TO 2) ;
decX: dec2to4 PORT MAP ( FuncReg(3 TO 4), High, X ) ;
decY: dec2to4 PORT MAP ( FuncReg(5 TO 6), High, Y ) ;

```

```

controlsignals: PROCESS ( T, I, X, Y )

```

BEGIN

```

    Extern <= '0' ; Done <= '0' ; Ain <= '0' ; Gin <= '0' ;
    Gout <= '0' ; AddSub <= '0' ; Rin <= "0000" ; Rout <= "0000" ;
    CASE T IS
        WHEN "00" => -- no signals asserted in time step T0
        WHEN "01" => -- define signals asserted in time step T1
            CASE I IS
                WHEN "00" => -- Load
                    Extern <= '1' ; Rin <= X ; Done <= '1' ;
                WHEN "01" => -- Move
                    Rout <= Y ; Rin <= X ; Done <= '1' ;
                WHEN OTHERS => -- Add, Sub
                    Rout <= X ; Ain <= '1' ;
            END CASE ;

```

... continued in Part *b*

Figure 7.74 Alternative code for the processor (Part *a*).

We synthesized a circuit to implement the code in Figure 7.74 in a chip. Figure 7.75 gives an example of the results of a timing simulation. Each clock cycle in which $w = 1$ in this timing diagram indicates the start of an operation. In the first such operation, at 250 ns in the simulation time, the values of both inputs F and R_x are 00. Hence the operation corresponds to “Load $R_0, Data$.” The value of $Data$ is 2A, which is loaded into R_0 on the

```

WHEN "10" => -- define signals asserted in time step T2
  CASE I IS
    WHEN "10" => -- Add
      Rout <= Y ; Gin <= '1' ;
    WHEN "11" => -- Sub
      Rout <= Y ; AddSub <= '1' ; Gin <= '1' ;
    WHEN OTHERS => -- Load, Move
  END CASE ;
WHEN OTHERS => -- define signals asserted in time step T3
  CASE I IS
    WHEN "00" => -- Load
    WHEN "01" => -- Move
    WHEN OTHERS => -- Add, Sub
      Gout <= '1' ; Rin <= X ; Done <= '1' ;
  END CASE ;
END CASE ;
END PROCESS ;
reg0: regn PORT MAP ( BusWires, Rin(0), Clock, R0 ) ;
reg1: regn PORT MAP ( BusWires, Rin(1), Clock, R1 ) ;
reg2: regn PORT MAP ( BusWires, Rin(2), Clock, R2 ) ;
reg3: regn PORT MAP ( BusWires, Rin(3), Clock, R3 ) ;
regA: regn PORT MAP ( BusWires, Ain, Clock, A ) ;
alu: WITH AddSub SELECT
  Sum <= A + BusWires WHEN '0',
  A - BusWires WHEN OTHERS ;
regG: regn PORT MAP ( Sum, Gin, Clock, G ) ;
Sel <= Rout & Gout & Extern ;
WITH Sel SELECT
  BusWires <= R0 WHEN "100000",
  R1 WHEN "010000",
  R2 WHEN "001000",
  R3 WHEN "000100",
  G WHEN "000010",
  Data WHEN OTHERS ;
END Behavior ;

```

Figure 7.74 Alternative code for the processor (Part *b*).

next positive clock edge. The next operation loads 55 into register *R1*, and the subsequent operation loads 22 into *R2*. At 850 ns the value of the input *F* is 10, while $R_x = 01$ and $R_y = 00$. This operation is "Add *R1*, *R0*." In the following clock cycle, the contents of *R1* (55) appear on the bus. This data is loaded into register *A* by the clock edge at 950 ns, which also results in the contents of *R0* (2A) being placed on the bus. The adder/subtractor module generates the correct sum (7F), which is loaded into register *G* at 1050 ns. After

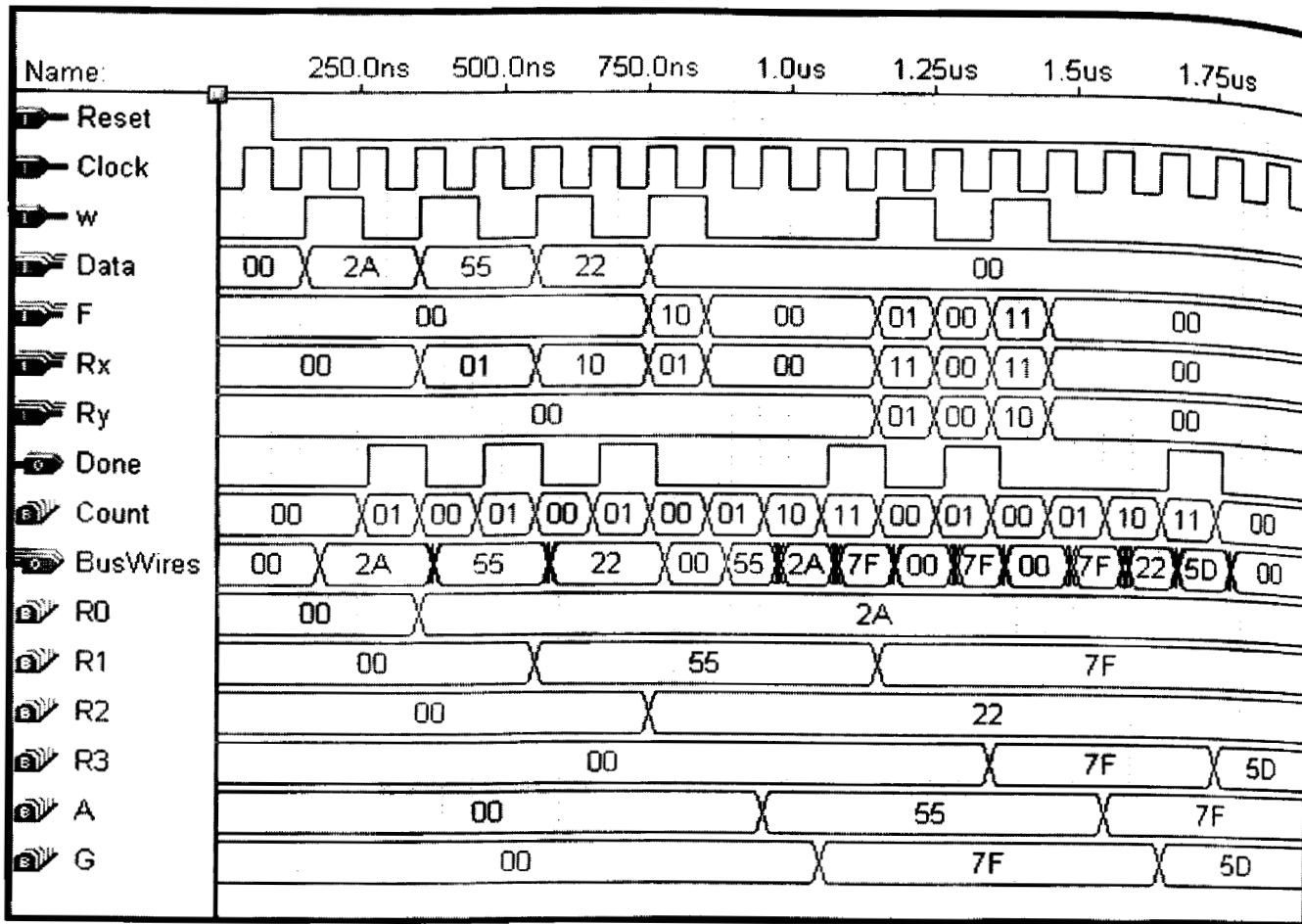


Figure 7.75 Timing simulation for the VHDL code in Figure 7.74.

this clock edge the new contents of *G* (7F) are placed on the bus and loaded into register *R1* at 1150 ns. Two more operations are shown in the timing diagram. The one at 1250 ns (“*Move R3,R1*”) copies the contents of *R1* (7F) into *R3*. Finally, the operation starting at 1450 ns (“*Sub R3,R2*”) subtracts the contents of *R2* (22) from the contents of *R3* (7F), producing the correct result, $7F - 22 = 5D$.

7.14.3 REACTION TIMER

We showed in Chapter 3 that electronic devices operate at remarkably fast speeds, with the typical delay through a logic gate being less than 1 ns. In this example we use a logic circuit to measure the speed of a much slower type of device—a person.

We will design a circuit that can be used to measure the reaction time of a person to a specific event. The circuit turns on a small light, called a *light-emitting diode (LED)*. In response to the LED being turned on, the person attempts to press a switch as quickly as possible. The circuit measures the elapsed time from when the LED is turned on until the switch is pressed.

To measure the reaction time, a clock signal with an appropriate frequency is needed. In this example we use a 100 Hz clock, which measures time at a resolution of 1/100 of a

second. The reaction time can then be displayed using two digits that represent fractions of a second from 00/100 to 99/100.

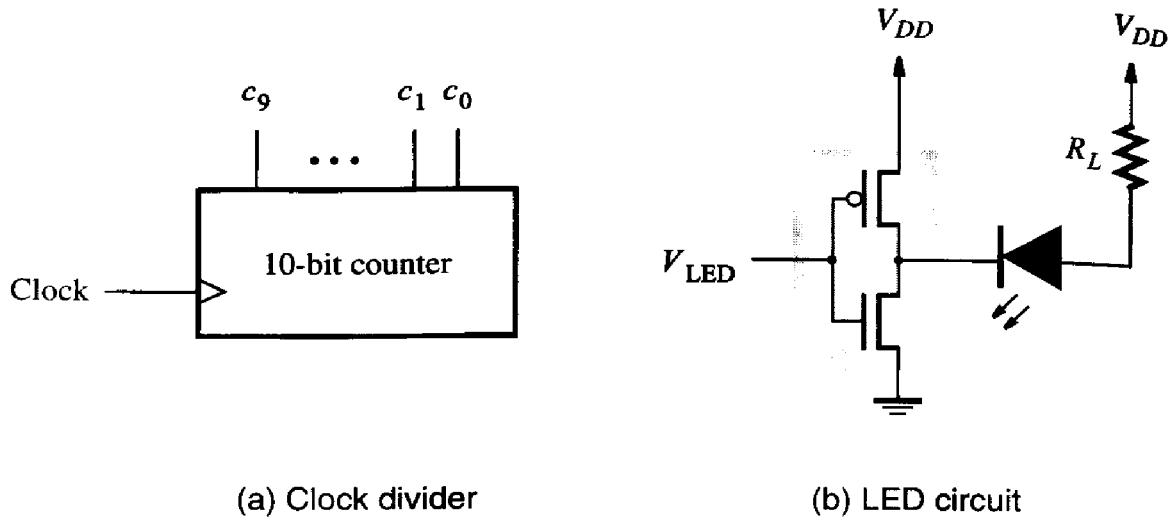
Digital systems often include high-frequency clock signals to control various subsystems. In this case assume the existence of an input clock signal with the frequency 102.4 kHz. From this signal we can derive the required 100 Hz signal by using a counter as a *clock divider*. A timing diagram for a four-bit counter is given in Figure 7.22. It shows that the least-significant bit output, Q_0 , of the counter is a periodic signal with half the frequency of the clock input. Hence we can view Q_0 as dividing the clock frequency by two. Similarly, the Q_1 output divides the clock frequency by four. In general, output Q_i in an n -bit counter divides the clock frequency by 2^{i+1} . In the case of our 102.4 kHz clock signal, we can use a 10-bit counter, as shown in Figure 7.76a. The counter output c_9 has the required 100 Hz frequency because $102400 \text{ Hz}/1024 = 100 \text{ Hz}$.

The reaction timer circuit has to be able to turn an LED on and off. The graphical symbol for an LED is shown in blue in Figure 7.76b. Small blue arrows in the symbol represent the light that is emitted when the LED is turned on. The LED has two terminals: the one on the left in the figure is the *cathode*, and the terminal on the right is the *anode*. To turn the LED on, the cathode has to be set to a lower voltage than the anode, which causes a current to flow through the LED. If the voltages on its two terminals are equal, the LED is off.

Figure 7.76b shows one way to control the LED, using an inverter. If the input voltage $V_{LED} = 0$, then the voltage at the cathode is equal to V_{DD} ; hence the LED is off. But if $V_{LED} = V_{DD}$, the cathode voltage is 0 V and the LED is on. The amount of current that flows is limited by the value of the resistor R_L . This current flows through the LED and the NMOS transistor in the inverter. Since the current flows *into* the inverter, we say that the inverter *sinks* the current. The maximum current that a logic gate can sink without sustaining permanent damage is usually called I_{OL} , which stands for the “maximum current when the output is low.” The value of R_L is chosen such that the current is less than I_{OL} . As an example assume that the inverter is implemented inside a PLD device. The typical value of I_{OL} , which would be specified in the data sheet for the PLD, is about 12 mA. For $V_{DD} = 5 \text{ V}$, this leads to $R_L \approx 450 \Omega$ because $5 \text{ V}/450 \Omega = 11 \text{ mA}$ (there is actually a small voltage drop across the LED when it is turned on, but we ignore this for simplicity). The amount of light emitted by the LED is proportional to the current flow. If 11 mA is insufficient, then the inverter should be implemented in a buffer chip, like those described in section 3.5, because buffers provide a higher value of I_{OL} .

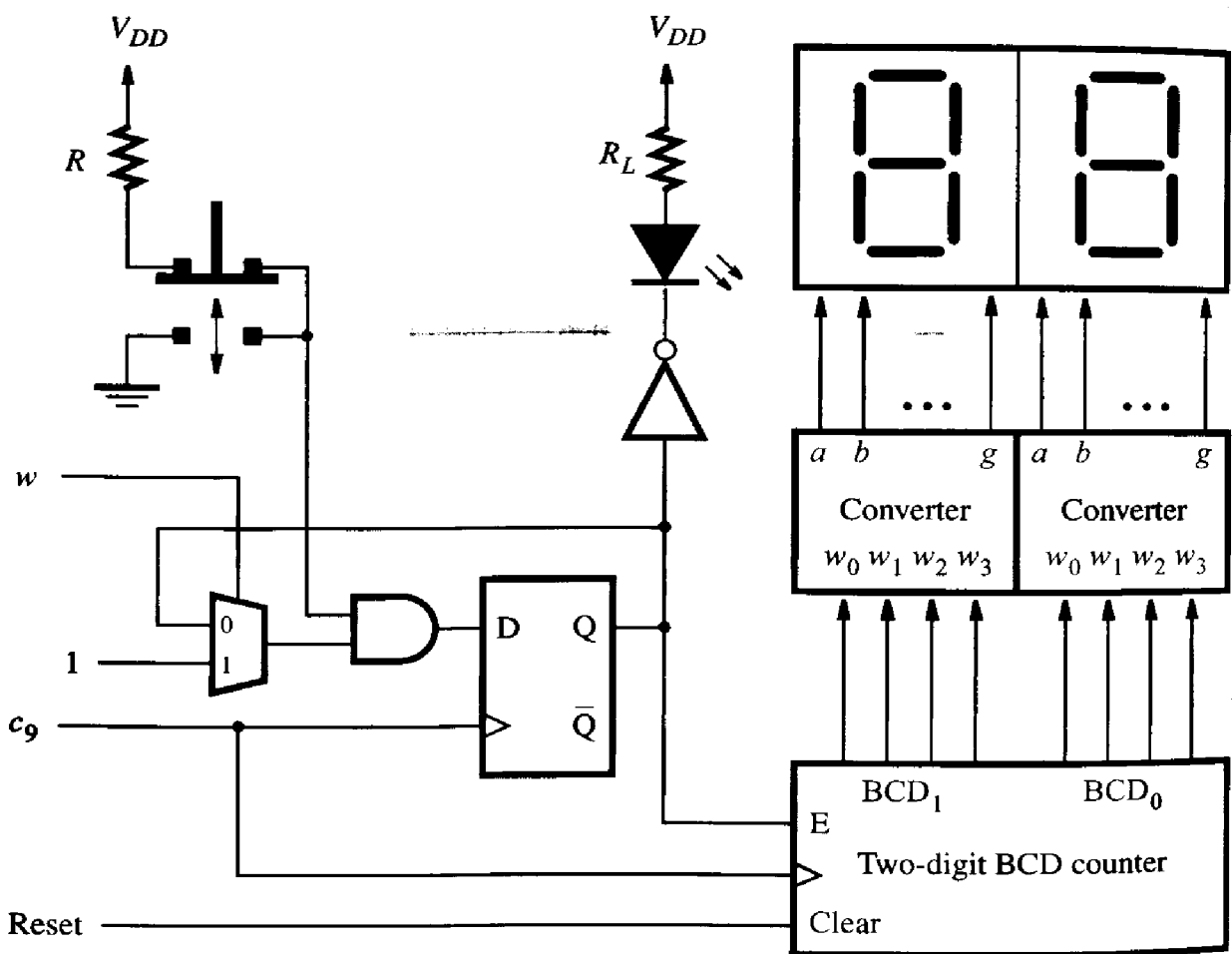
The complete reaction-timer circuit is illustrated in Figure 7.76c, with the inverter from part (b) shaded in grey. The graphical symbol for a push-button switch is shown in the top left of the diagram. The switch normally makes contact with the top terminals, as depicted in the figure. When depressed, the switch makes contact with the bottom terminals; when released, it automatically springs back to the top position. In the figure the switch is connected such that it normally produces a logic value of 1, and it produces a 0 pulse when pressed.

When depressed, the push-button switch causes the D flip-flop to be synchronously reset. The output of this flip-flop determines whether the LED is on or off, and it also provides the count enable input to a two-digit BCD counter. As discussed in section 7.11, each digit in a BCD counter has four bits that take the values 0000 to 1001. Thus the



(a) Clock divider

(b) LED circuit



(c) Push-button switch, LED, and 7-segment displays

Figure 7.76 A reaction-timer circuit.

counting sequence can be viewed as decimal numbers from 00 to 99. A circuit for the BCD counter is given in Figure 7.28. In Figure 7.76c both the flip-flop and the counter are clocked by the c_9 output of the clock divider in part (a) of the figure. The intended use of the reaction-timer circuit is to first depress the switch to turn off the LED and disable the counter. Then the *Reset* input is asserted to clear the contents of the counter to 00. The input w normally has the value 0, which keeps the flip-flop cleared and prevents the count value from changing. The reaction test is initiated by setting $w = 1$ for one c_9 clock cycle. After the next positive edge of c_9 , the flip-flop output becomes a 1, which turns on the LED. We assume that w returns to 0 after one clock cycle, but the flip-flop output remains at 1 because of the 2-to-1 multiplexer connected to the D input. The counter is then incremented every 1/100 of a second. Each digit in the counter is connected through a code converter to a 7-segment display, which we described in the discussion for Figure 6.25. When the user depresses the switch, the flip-flop is cleared, which turns off the LED and stops the counter. The two-digit display shows the elapsed time to the nearest 1/100 of a second from when the LED was turned on until the user was able to respond by depressing the switch.

VHDL Code

To describe the circuit in Figure 7.76c using VHDL code, we can make use of subcircuits for the BCD counter and the 7-segment code converter. The code for the latter subcircuit is given in Figure 6.47 and is not repeated here. Code for the BCD counter, which represents the circuit in Figure 7.28, is shown in Figure 7.77. The two-digit BCD output is represented by the 2 four-bit signals *BCD1* and *BCD0*. The *Clear* input is used to provide a synchronous reset for both digits in the counter. If $E = 1$, the count value is incremented on the positive clock edge, and if $E = 0$, the count value is unchanged. Each digit can take the values from 0000 to 1001.

Figure 7.78 gives the code for the reaction timer. The input signal *Pushn* represents the value produced by the push-button switch. The output signal *LEDn* represents the output of the inverter that is used to control the LED. The two 7-segment displays are controlled by the seven-bit signals *Digit1* and *Digit0*.

In Figure 7.56 we showed how a register, *R*, can be designed with a control signal R_{in} . If $R_{in} = 1$ data is loaded into the register on the active clock edge and if $R_{in} = 0$, the stored contents of the register are not changed. The flip-flop in Figure 7.76 is used in the same way. If $w = 1$, the flip-flop is loaded with the value 1, but if $w = 0$ the stored value in the flip-flop is not changed. This circuit is described by the process labeled *flipflop* in Figure 7.78, which also includes a synchronous reset input. We have chosen to use a synchronous reset because the flip-flop output is connected to the enable input *E* on the BCD counter. As we know from the discussion in section 7.3, it is important that all signals connected to flip-flops meet the required setup and hold times. The push-button switch can be pressed at any time and is not synchronized to the c_9 clock signal. By using a synchronous reset for the flip-flop in Figure 7.76, we avoid possible timing problems in the counter.

The flip-flop output is called *LED*, which is inverted to produce the *LEDn* signal that controls the LED. In the device used to implement the circuit, *LEDn* would be generated by a buffer that is connected to an output pin on the chip package. If a PLD is used, this buffer has the associated value of $I_{OL} = 12$ mA that we mentioned earlier. At the end of Figure 7.78, the BCD counter and 7-segment code converters are instantiated as subcircuits.

```

LIBRARY ieee ;
USE ieee.std_logic_1164.all ;
USE ieee.std_logic_unsigned.all ;

ENTITY BCDcount IS
    PORT ( Clock      : IN      STD_LOGIC ;
          Clear, E    : IN      STD_LOGIC ;
          BCD1, BCD0 : BUFFER  STD_LOGIC_VECTOR(3 DOWNTO 0) );
END BCDcount ;

ARCHITECTURE Behavior OF BCDcount IS
BEGIN
    PROCESS ( Clock )
    BEGIN
        IF Clock'EVENT AND Clock = '1' THEN
            IF Clear = '1' THEN
                BCD1 <= "0000" ; BCD0 <= "0000" ;
            ELSIF E = '1' THEN
                IF BCD0 = "1001" THEN
                    BCD0 <= "0000" ;
                    IF BCD1 = "1001" THEN
                        BCD1 <= "0000" ;
                    ELSE
                        BCD1 <= BCD1 + '1' ;
                    END IF ;
                ELSE
                    BCD0 <= BCD0 + '1' ;
                END IF ;
            END IF ;
        END IF ;
    END PROCESS ;
END Behavior ;

```

Figure 7.77 Code for the two-digit BCD counter in Figure 7.28.

A simulation of the reaction-timer circuit implemented in a chip is shown in Figure 7.79. Initially, *Pushn* is set to 0 to simulate depressing the switch to turn off the LED, and then *Pushn* returns to 1. Also, *Reset* is asserted to clear the counter. When *w* changes to 1, the circuit sets *LEDn* to 0, which represents the LED being turned on. After some amount of time, the switch will be depressed. In the simulation we arbitrarily set *Pushn* to 0 after 18 c_9 clock cycles. Thus this choice represents the case when the person's reaction time is about 0.18 seconds. In human terms this duration is a very short time; for electronic circuits it is a very long time. An inexpensive personal computer can perform tens of millions of operations in 0.18 seconds!

The causality relationship is indicated by the arrows in the diagram. When S goes to 0 at t_3 , there is no change in the state because both S and R are then equal to 0. At t_4 we have $R = 1$, which causes Q_a to go to 0, which in turn causes Q_b to go to 1. At t_5 both S and R are equal to 1, which forces both Q_a and Q_b to be equal to 0. As soon as S returns to 0, at t_6 , Q_b becomes equal to 1 again. At t_8 we have $S = 1$ and $R = 0$, which causes $Q_b = 0$ and $Q_a = 1$. An interesting situation occurs at t_{10} . From t_9 to t_{10} we have $Q_a = Q_b = 0$ because $R = S = 1$. Now if both R and S change to 0 at t_{10} , both Q_a and Q_b will go to 1. But having both Q_a and Q_b equal to 1 will immediately force $Q_a = Q_b = 0$. There will be an oscillation between $Q_a = Q_b = 0$ and $Q_a = Q_b = 1$. If the delays through the two NOR gates are exactly the same, the oscillation will continue indefinitely. In a real circuit there will invariably be some difference in the delays through these gates, and the latch will eventually settle into one of its two stable states, but we don't know which state it will be. This uncertainty is indicated in the waveforms by dashed lines.

The oscillations discussed above illustrate that even though the basic latch is a simple circuit, careful analysis has to be done to fully appreciate its behavior. In general, any circuit that contains one or more feedback paths, such that the state of the circuit depends on the propagation delays through logic gates, has to be designed carefully. We discuss timing issues in detail in Chapter 9.

The latch in Figure 7.5a can perform the functions needed for the memory element in Figure 7.1, by connecting the *Set* signal to the S input and *Reset* to the R input. The Q_a output provides the desired *On/Off* signal. To initialize the operation of the alarm system, the latch is reset. Thus the alarm is off. When the sensor generates the logic value 1, the latch is set and Q_a becomes equal to 1. This turns on the alarm mechanism. If the sensor output returns to 0, the latch retains its state where $Q_a = 1$; hence the alarm remains turned on. The only way to turn off the alarm is by resetting the latch, which is accomplished by making the *Reset* input equal to 1.

7.2 GATED SR LATCH

In section 7.1 we saw that the basic SR latch can serve as a useful memory element. It remembers its state when both the S and R inputs are 0. It changes its state in response to changes in the signals on these inputs. The state changes occur at the time when the changes in the signals occur. If we cannot control the time of such changes, then we don't know when the latch may change its state.

In the alarm system of Figure 7.1, it may be desirable to be able to enable or disable the entire system by means of a control input, *Enable*. Thus when enabled, the system would function as described above. In the disabled mode, changing the *Set* input from 0 to 1 would not cause the alarm to turn on. The latch in Figure 7.5a cannot provide the desired operation. But the latch circuit can be modified to respond to the input signals S and R only when *Enable* = 1. Otherwise, it would maintain its state.

The modified circuit is depicted in Figure 7.6a. It includes two AND gates that provide the desired control. When the control signal *Clk* is equal to 0, the S' and R' inputs to the latch will be 0, regardless of the values of signals S and R . Hence the latch will maintain its

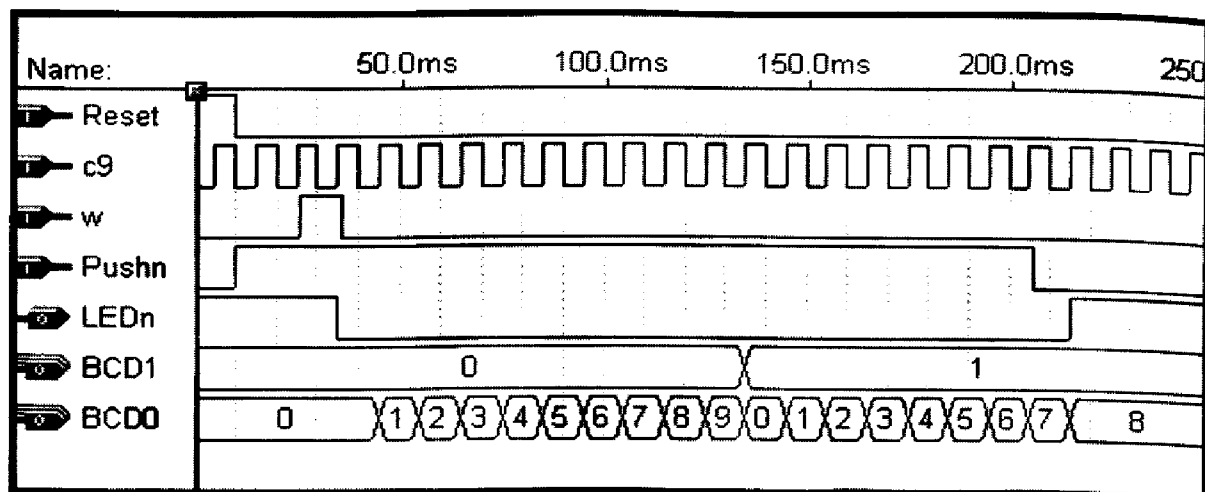


Figure 7.79 Simulation of the reaction-timer circuit.

7.14.4 REGISTER TRANSFER LEVEL (RTL) CODE

At this point, we have introduced most of the VHDL constructs that are needed for synthesis. Most of our examples give behavioral code, utilizing IF-THEN-ELSE statements, CASE statements, FOR loops, and so on. It is possible to write behavioral code in a style that resembles a computer program, in which there is a complex flow of control with many loops and branches. With such code, sometimes called *high-level* behavioral code, it is difficult to relate the code to the final hardware implementation; it may even be difficult to predict what circuit a high-level synthesis tool will produce. In this book we do not use the high-level style of code. Instead, we present VHDL code in such a way that the code can be easily related to the circuit that is being described. Most design modules presented are fairly small, to facilitate simple descriptions. Larger designs are built by interconnecting the smaller modules. This approach is usually referred to as the *register-transfer level* (RTL) style of code. It is the most popular design method used in practice. RTL code is characterized by a straightforward flow of control through the code; it comprises well-understood subcircuits that are connected together in a simple way.

7.15 CONCLUDING REMARKS

In this chapter we have presented circuits that serve as basic storage elements in digital systems. These elements are used to build larger units such as registers, shift registers, and counters. Many other texts that deal with this material are available [3–11]. We have illustrated how circuits with flip-flops can be described using VHDL code. More information on VHDL can be found in [12–17]. In the next chapter a more formal method for designing circuits with flip-flops will be presented.

7.16 EXAMPLES OF SOLVED PROBLEMS

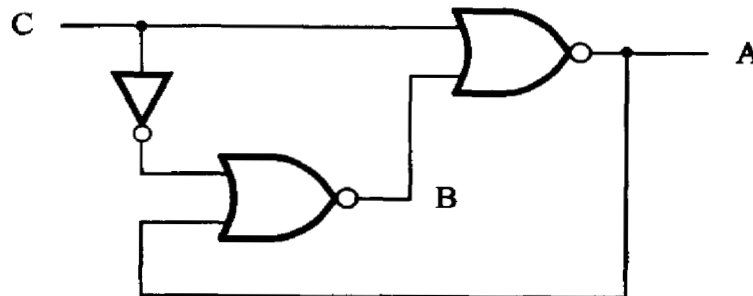
This section presents some typical problems that the reader may encounter, and shows how such problems can be solved.

Problem: Consider the circuit in Figure 7.80a. Assume that the input C is driven by a square wave signal with a 50% duty cycle. Draw a timing diagram that shows the waveforms at points A and B . Assume that the propagation delay through each gate is Δ seconds.

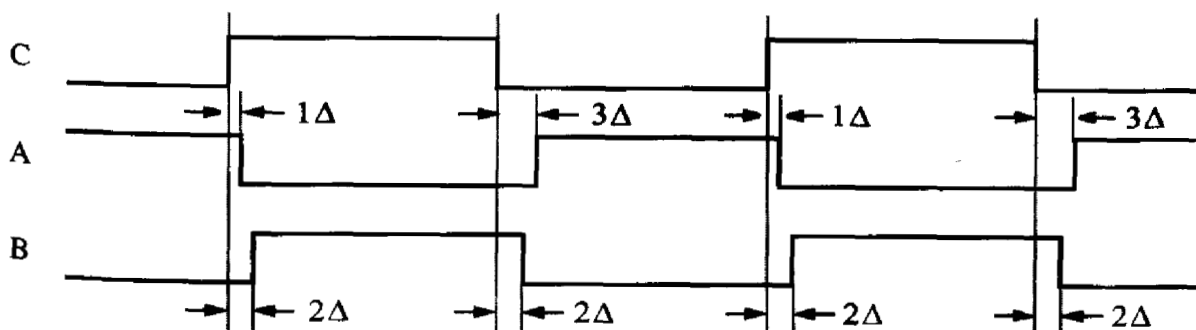
Solution: The timing diagram is shown in Figure 7.80b.

Problem: Determine the functional behavior of the circuit in Figure 7.81. Assume that input w is driven by a square wave signal.

Solution: When both flip-flops are cleared, their outputs are $Q_0 = Q_1 = 0$. After the Clear input goes high, each pulse on the w input will cause a change in the flip-flops as indicated



(a) Circuit



(b) Timing diagram

Figure 7.80 Circuit for Example 7.13.

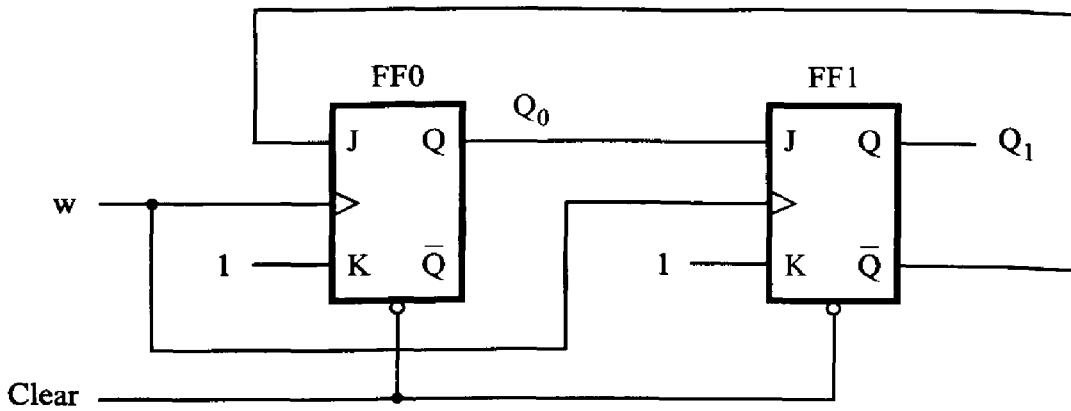


Figure 7.81 Circuit for Example 7.14.

Time interval	FF0			FF1		
	J_0	K_0	Q_0	J_1	K_1	Q_1
Clear	1	1	0	0	1	0
t_1	1	1	1	1	1	0
t_2	0	1	0	0	1	1
t_3	1	1	0	0	1	0
t_4	1	1	1	1	1	0

Figure 7.82 Summary of the behavior of the circuit in Figure 7.81.

in Figure 7.82. Note that the figure shows the state of the signals after the changes caused by the rising edge of a pulse have taken place.

In consecutive time intervals the values of $Q_1 Q_0$ are 00, 01, 10, 00, 01, and so on. Therefore, the circuit generates the counting sequence: 0, 1, 2, 0, 1, and so on. Hence, the circuit is a modulo-3 counter.

15 Problem: Figure 7.70 shows a circuit that generates four timing control signals $T_0, T_1, T_2,$ and T_3 . Design a circuit that generates six such signals, T_0 to T_5 .

Solution: The scheme of Figure 7.70 can be extended by using a modulo-6 counter, given in Figure 7.26, and a decoder that produces the six timing signals. A simpler alternative is possible by using a Johnson counter. Using three D-type flip-flops in a structure depicted in Figure 7.30, we can generate six patterns of bits $Q_0 Q_1 Q_2$ as shown in Figure 7.83. Then, using only six more two-input AND gates, as shown in the figure, we can obtain the desired signals. Note that the patterns $Q_0 Q_1 Q_2$ equal to 010 and 101 cannot occur in the Johnson counter, so these cases are treated as don't care conditions.

Clock cycle	Q ₀	Q ₁	Q ₂	Control signal
0	0	0	0	$T_0 = \bar{Q}_0\bar{Q}_2$
1	1	0	0	$T_1 = Q_0\bar{Q}_1$
2	1	1	0	$T_2 = Q_1\bar{Q}_2$
3	1	1	1	$T_3 = Q_0Q_2$
4	0	1	1	$T_4 = \bar{Q}_0Q_1$
5	0	0	1	$T_5 = \bar{Q}_1Q_2$

Figure 7.83 Timing signals for Example 7.15.

Problem: Design a circuit that can be used to control a vending machine. The circuit has five inputs: Q (quarter), D (dime), N (nickel), *Coin*, and *Resetn*. When a coin is deposited in the machine, a coin-sensing mechanism generates a pulse on the appropriate input (Q, D, or N). To signify the occurrence of the event, the mechanism also generates a pulse on the line *Coin*. The circuit is reset by using the *Resetn* signal (active low). When at least 30 cents has been deposited, the circuit activates its output, Z. No change is given if the amount exceeds 30 cents.

Design the required circuit by using the following components: a six-bit adder, a six-bit register, and any number of AND, OR, and NOT gates.

Solution: Figure 7.84 gives a possible circuit. The value of each coin is represented by a corresponding five-bit number. It is added to the current total, which is held in register *S*. The required output is

$$Z = s_5 + s_4s_3s_2s_1$$

The register is clocked by the negative edge of the *Coin* signal. This allows for a propagation delay through the adder, and ensures that a correct sum will be placed into the register.

In Chapter 9 we will show how this type of control circuit can be designed using a more structured approach.

Problem: Write VHDL code to implement the circuit in Figure 7.84.

Solution: Figure 7.85 gives the desired code.

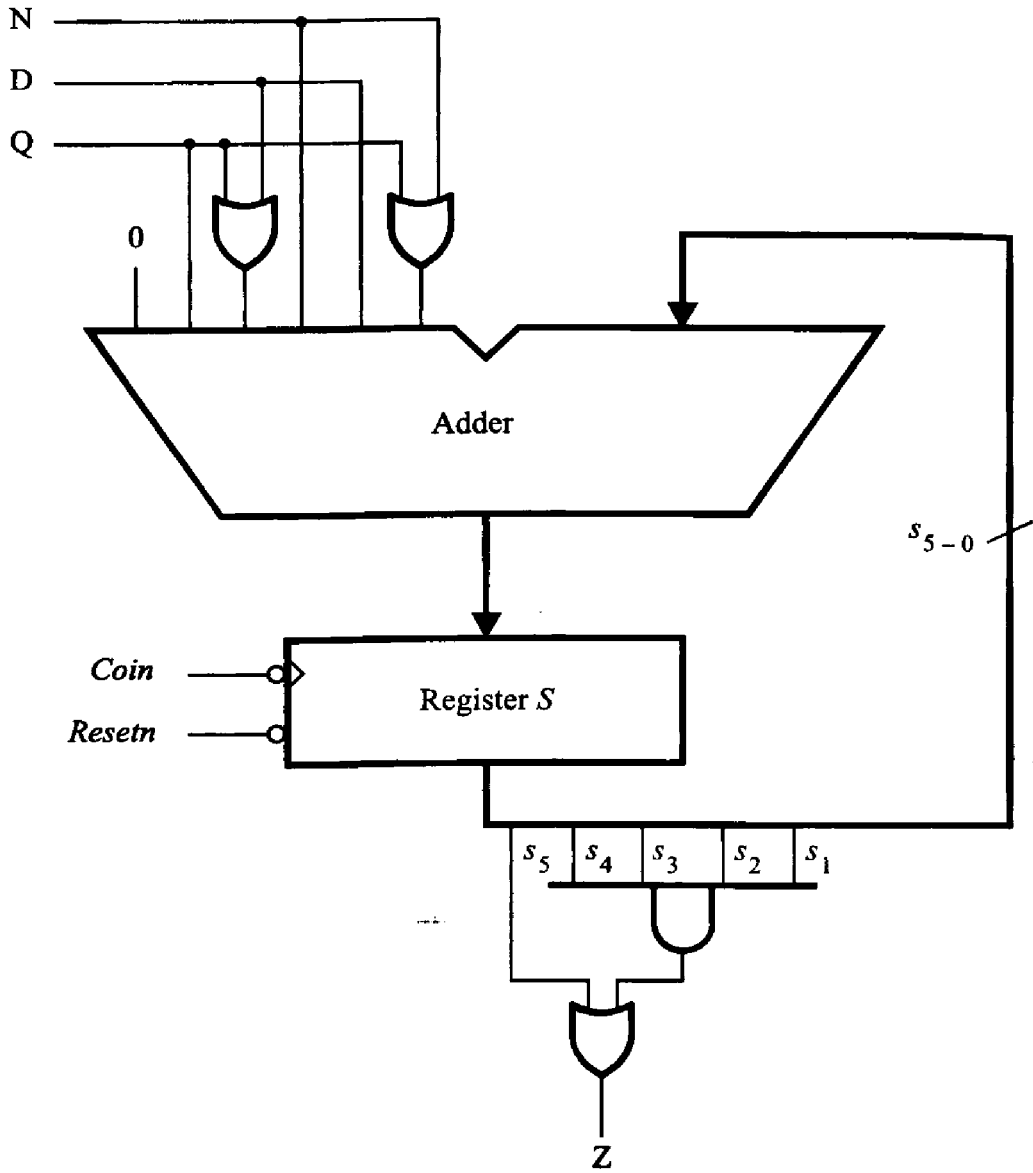


Figure 7.84 Circuit for Example 7.16.

```

LIBRARY ieee ;
USE ieee.std_logic_1164.all ;
USE ieee.std_logic_signed.all ;

ENTITY vend IS
    PORT ( N, D, Q, Resetn, Coin : IN    STD_LOGIC ;
          Z                       : OUT  STD_LOGIC ) ;
END vend ;

ARCHITECTURE Behavior OF vend IS
    SIGNAL X: STD_LOGIC_VECTOR(4 DOWNTO 0) ;
    SIGNAL S: STD_LOGIC_VECTOR(5 DOWNTO 0) ;
BEGIN
    X(0) <= N OR Q ;
    X(1) <= D ;
    X(2) <= N ;
    X(3) <= D OR Q ;
    X(4) <= Q ;
    PROCESS ( Resetn, Coin )
    BEGIN
        IF Resetn = '0' THEN
            S <= "000000" ;
        ELSIF Coin'EVENT AND Coin = '0' THEN
            S <= ('0' & X) + S ;
        END IF ;
    END PROCESS ;
    Z <= S(5) OR (S(4) AND S(3) AND S(2) AND S(1)) ;
END Behavior ;

```

Figure 7.85 Code for Example 7.17.

PROBLEMS

Answers to problems marked by an asterisk are given at the back of the book.

- 7.1** Consider the timing diagram in Figure P7.1. Assuming that the *D* and *Clock* inputs shown are applied to the circuit in Figure 7.12, draw waveforms for the Q_a , Q_b , and Q_c signals.
- 7.2** Can the circuit in Figure 7.3 be modified to implement an SR latch? Explain your answer.
- 7.3** Figure 7.5 shows a latch built with NOR gates. Draw a similar latch using NAND gates. Derive its characteristic table and show its timing diagram.
- *7.4** Show a circuit that implements the gated SR latch using NAND gates only.

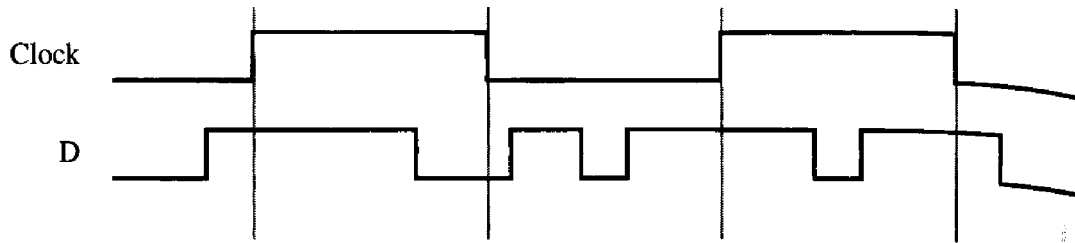


Figure P7.1 Timing diagram for Problem 7.1.

- 7.5 Given a 100-MHz clock signal, derive a circuit using D flip-flops to generate 50-MHz and 25-MHz clock signals. Draw a timing diagram for all three clock signals, assuming reasonable delays.
- *7.6 An SR flip-flop is a flip-flop that has set and reset inputs like a gated SR latch. Show how an SR flip-flop can be constructed using a D flip-flop and other logic gates.
- 7.7 The gated SR latch in Figure 7.6a has unpredictable behavior if the S and R inputs are both equal to 1 when the Clk changes to 0. One way to solve this problem is to create a *set-dominant* gated SR latch in which the condition $S = R = 1$ causes the latch to be set to 1. Design a set-dominant gated SR latch and show the circuit.
- 7.8 Show how a JK flip-flop can be constructed using a T flip-flop and other logic gates.
- *7.9 Consider the circuit in Figure P7.2. Assume that the two NAND gates have much longer (about four times) propagation delay than the other gates in the circuit. How does this circuit compare with the circuits that we discussed in this chapter?

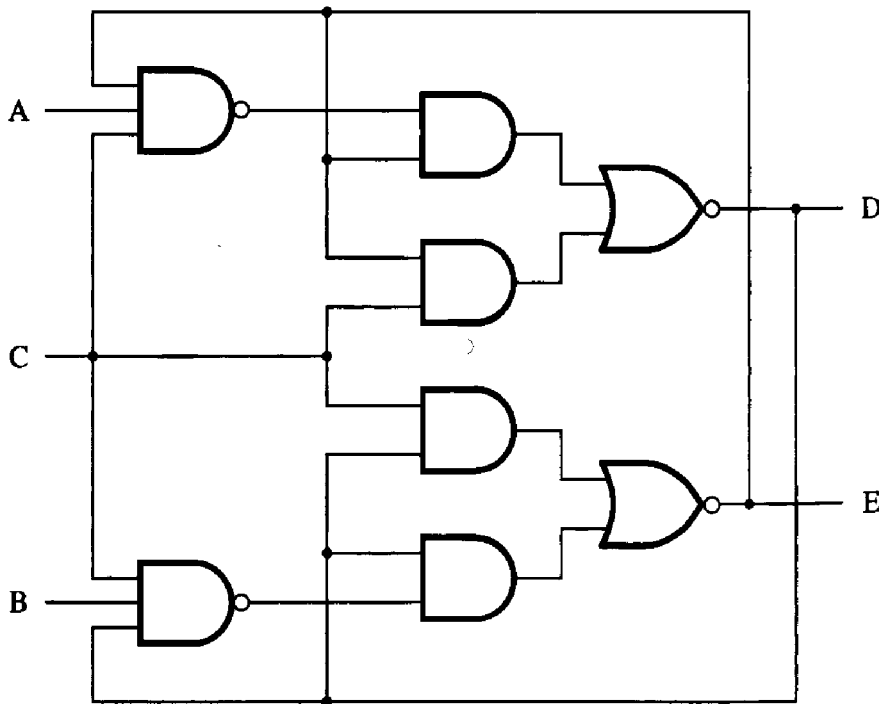


Figure P7.2 Circuit for Problem 7.9.

- 7.10** Write VHDL code that represents a T flip-flop with an asynchronous clear input. Use behavioral code, rather than structural code.
- 7.11** Write VHDL code that represents a JK flip-flop. Use behavioral code, rather than structural code.
- 7.12** Synthesize a circuit for the code written for problem 7.11 by using your CAD tools. Simulate the circuit and show a timing diagram that verifies the desired functionality.
- 7.13** A universal shift register can shift in both the left-to-right and right-to-left directions, and it has parallel-load capability. Draw a circuit for such a shift register.
- 7.14** Write VHDL code for a universal shift register with n bits.
- 7.15** Design a four-bit synchronous counter with parallel load. Use T flip-flops, instead of the D flip-flops used in section 7.9.3.
- *7.16** Design a three-bit up/down counter using T flip-flops. It should include a control input called $\overline{Up/Down}$. If $\overline{Up/Down} = 0$, then the circuit should behave as an up-counter. If $\overline{Up/Down} = 1$, then the circuit should behave as a down-counter.
- 7.17** Repeat problem 7.16 using D flip-flops.
- *7.18** The circuit in Figure P7.3 looks like a counter. What is the sequence that this circuit counts in?

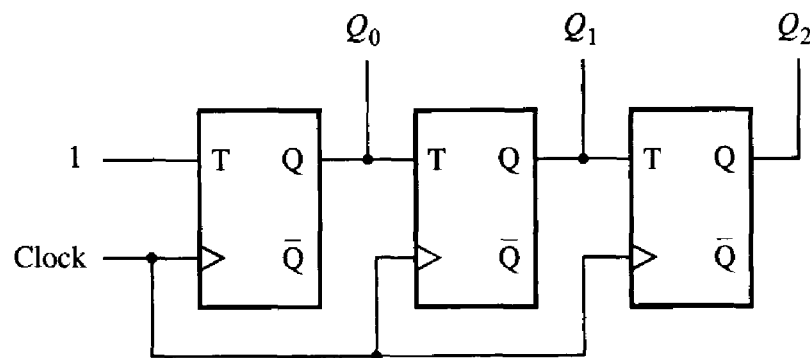


Figure P7.3 The circuit for Problem 7.18.

- 7.19** Consider the circuit in Figure P7.4. How does this circuit compare with the circuit in Figure 7.17? Can the circuits be used for the same purposes? If not, what is the key difference between them?
- 7.20** Construct a NOR-gate circuit, similar to the one in Figure 7.11a, which implements a negative-edge-triggered D flip-flop.
- 7.21** Write behavioral VHDL code that represents a 24-bit up/down-counter with parallel load and asynchronous reset.
- 7.22** Modify the VHDL code in Figure 7.52 by adding a parameter that sets the number of flip-flops in the counter.

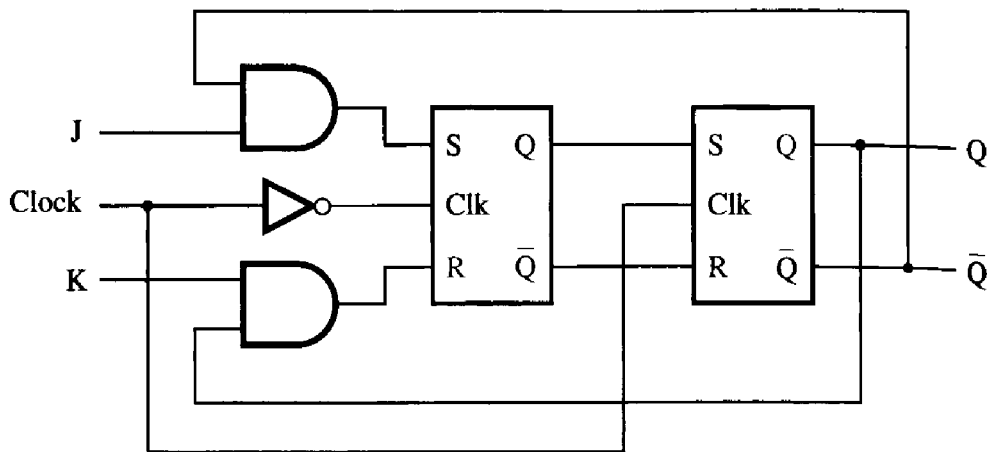


Figure P7.4 Circuit for Problem 7.19.

- 7.23** Write behavioral VHDL code that represents a modulo-12 up-counter with synchronous reset.
- *7.24** For the flip-flops in the counter in Figure 7.25, assume that $t_{su} = 3$ ns, $t_h = 1$ ns, and the propagation delay through a flip-flop is 1 ns. Assume that each AND gate, XOR gate, and 2-to-1 multiplexer has the propagation delay equal to 1 ns. What is the maximum clock frequency for which the circuit will operate correctly?
- 7.25** Write hierarchical code (structural) for the circuit in Figure 7.28. Use the counter in Figure 7.25 as a subcircuit.
- 7.26** Write VHDL code that represents an eight-bit Johnson counter. Synthesize the code with your CAD tools and give a timing simulation that shows the counting sequence.
- 7.27** Write behavioral VHDL code in the style shown in Figure 7.51 that represents a ring counter. Your code should have a parameter N that sets the number of flip-flops in the counter.
- *7.28** Write behavioral VHDL code that describes the functionality of the circuit shown in Figure 7.42.
- 7.29** Figure 7.65 gives VHDL code for a digital system that swaps the contents of two registers, $R1$ and $R2$, using register $R3$ for temporary storage. Create an equivalent schematic using your CAD tools for this system. Synthesize a circuit for this schematic and perform a timing simulation.
- 7.30** Repeat problem 7.29 using the control circuit in Figure 7.59.
- 7.31** Modify the code in Figure 7.67 to use the control circuit in Figure 7.59. Synthesize the code for implementation in a chip and perform a timing simulation.
- 7.32** In section 7.14.2 we designed a processor that performs the operations listed in Table 7.3. Design a modified circuit that performs an additional operation $\text{Swap } R_x, R_y$. This operation swaps the contents of registers R_x and R_y . Use three bits $f_2 f_1 f_0$ to represent the input F shown in Figure 7.71 because there are now five operations, rather than four. Add a new register, named Tmp , into the system, to be used for temporary storage during the swap operation. Show logic expressions for the outputs of the control circuit, as was done in section 7.14.2.

7.33 A ring oscillator is a circuit that has an odd number, n , of inverters connected in a ringlike structure, as shown in Figure P7.5. The output of each inverter is a periodic signal with a certain period.

(a) Assume that all the inverters are identical; hence they all have the same delay, called t_p . Let the output of one of the inverters be named f . Give an equation that expresses the period of the signal f in terms of n and t_p .

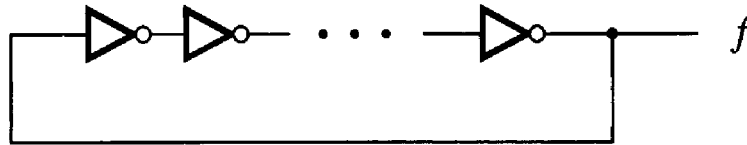


Figure P7.5 A ring oscillator.

(b) For this part you are to design a circuit that can be used to experimentally measure the delay t_p through one of the inverters in the ring oscillator. Assume the existence of an input called *Reset* and another called *Interval*. The timing of these two signals is shown in Figure P7.6. The length of time for which *Interval* has the value 1 is known. Assume that this length of time is 100 ns. Design a circuit that uses the *Reset* and *Interval* signals and the signal f from part (a) to experimentally measure t_p . In your design you may use logic gates and subcircuits such as adders, flip-flops, counters, registers, and so on.

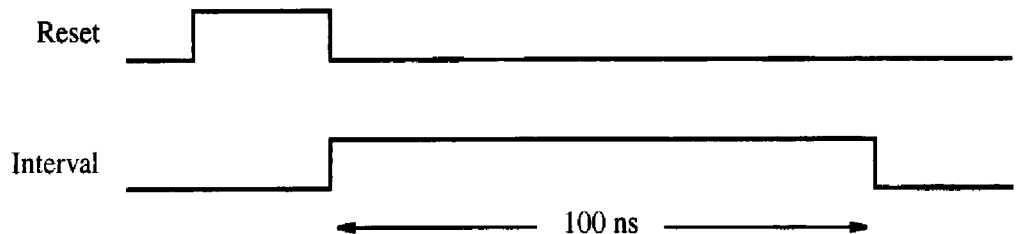


Figure P7.6 Timing of signals for Problem 7.31

7.34 A circuit for a gated D latch is shown in Figure P7.7. Assume that the propagation delay through either a NAND gate or an inverter is 1 ns. Complete the timing diagram given in the figure, which shows the signal values with 1 ns resolution.

***7.35** A logic circuit has two inputs, *Clock* and *Start*, and two outputs, f and g . The behavior of the circuit is described by the timing diagram in Figure P7.8. When a pulse is received on the *Start* input, the circuit produces pulses on the f and g outputs as shown in the timing diagram. Design a suitable circuit using only the following components: a three-bit resettable positive-edge-triggered synchronous counter and basic logic gates. For your answer assume that the delays through all logic gates and the counter are negligible.

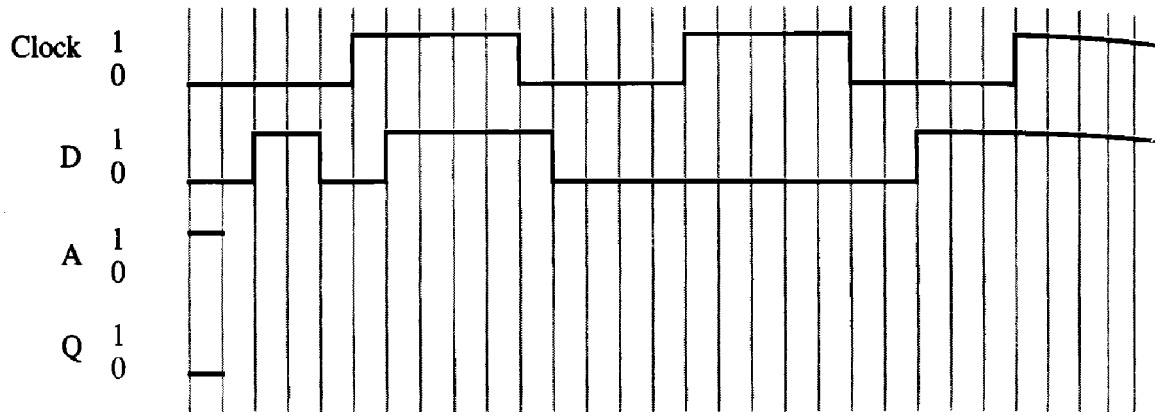
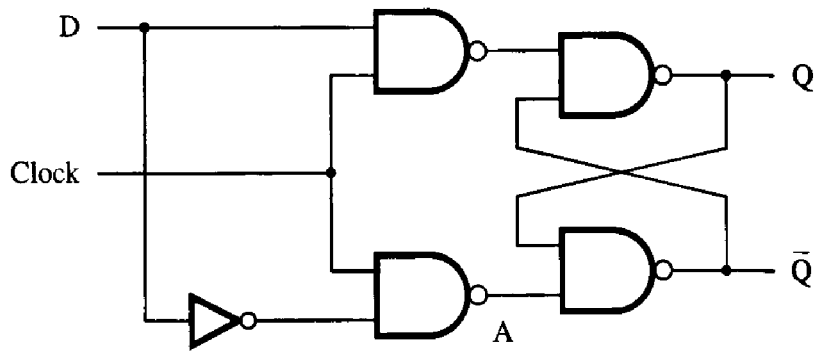


Figure P7.7 Circuit and timing diagram for Problem 7.32.

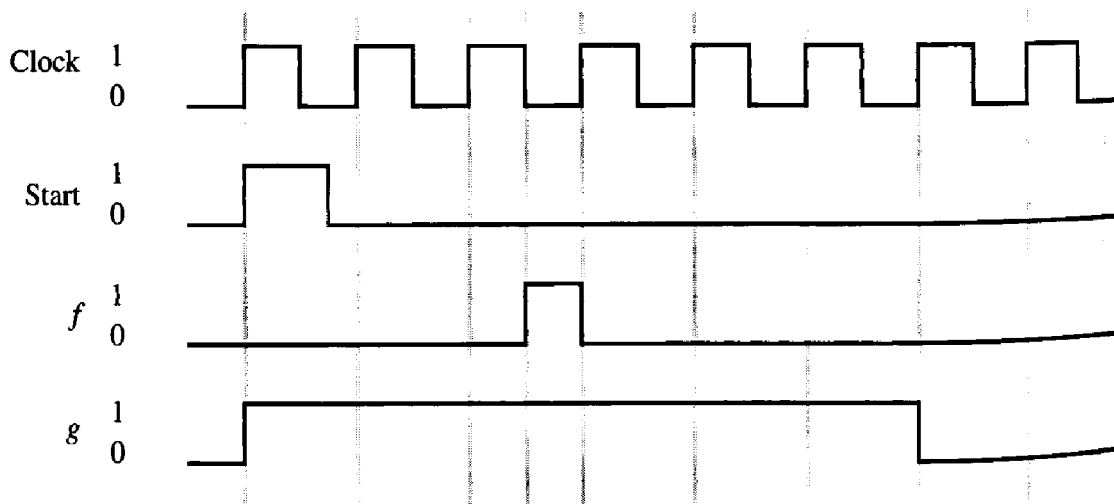


Figure P7.8 Timing diagram for Problem 7.33.

REFERENCES

1. V. C. Hamacher, Z. G. Vranesic, and S. G. Zaky, *Computer Organization*, 5th ed., (McGraw-Hill: New York, 2002).
2. D. A. Patterson and J. L. Hennessy, *Computer Organization and Design—The Hardware/Software Interface*, 2nd ed., (Morgan Kaufmann: San Francisco, Ca., 1998).
3. D. D. Gajski, *Principles of Digital Design*, (Prentice-Hall: Upper Saddle River, N.J., 1997).
4. M. M. Mano, *Digital Design*, 3rd ed. (Prentice-Hall: Upper Saddle River, N.J., 2002).
5. J. P. Daniels, *Digital Design from Zero to One*, (Wiley: New York, 1996).
6. V. P. Nelson, H. T. Nagle, B. D. Carroll, and J. D. Irwin, *Digital Logic Circuit Analysis and Design*, (Prentice-Hall: Englewood Cliffs, N.J., 1995).
7. R. H. Katz, *Contemporary Logic Design*, (Benjamin/Cummings: Redwood City, Ca., 1994).
8. J. P. Hayes, *Introduction to Logic Design*, (Addison-Wesley: Reading, Ma., 1993).
9. C. H. Roth Jr., *Fundamentals of Logic Design*, 4th ed., (West: St. Paul, Mn., 1993).
10. J. F. Wakerly, *Digital Design Principles and Practices*, 3rd ed. (Prentice-Hall: Englewood Cliffs, N.J., 1999).
11. E. J. McCluskey, *Logic Design Principles*, (Prentice-Hall: Englewood Cliffs, N.J., 1986).
12. Institute of Electrical and Electronics Engineers, "1076-1993 IEEE Standard VHDL Language Reference Manual," 1993.
13. D. L. Perry, *VHDL*, 3rd ed., (McGraw-Hill: New York, 1998).
14. Z. Navabi, *VHDL—Analysis and Modeling of Digital Systems*, 2nd ed. (McGraw-Hill: New York, 1998).
15. J. Bhasker, *A VHDL Primer*, 3rd ed. (Prentice-Hall: Englewood Cliffs, N.J., 1998).
16. K. Skahill, *VHDL for Programmable Logic*, (Addison-Wesley: Menlo Park, Ca., 1996).
17. A. Dewey, *Analysis and Design of Digital Systems with VHDL*, (PWS Publishing Co.: Boston, Ma., 1997).

chapter

8

SYNCHRONOUS SEQUENTIAL CIRCUITS

CHAPTER OBJECTIVES

In this chapter you will learn about:

- Design techniques for circuits that use flip-flops
- The concept of states and their implementation with flip-flops
- Synchronous control by using a clock signal
- Sequential behavior of digital circuits
- A complete procedure for designing synchronous sequential circuits
- VHDL specification of sequential circuits
- The concept of finite state machines

In preceding chapters we considered combinational logic circuits in which outputs are determined fully by the present values of inputs. We also discussed how simple storage elements can be implemented in the form of flip-flops. The output of a flip-flop depends on the state of the flip-flop rather than the value of its inputs at any given time; the inputs cause changes in the state.

In this chapter we deal with a general class of circuits in which the outputs depend on the past behavior of the circuit, as well as on the present values of inputs. They are called *sequential circuits*. In most cases a clock signal is used to control the operation of a sequential circuit; such a circuit is called a *synchronous sequential circuit*. The alternative, in which no clock signal is used, is called an *asynchronous sequential circuit*. Synchronous circuits are easier to design and are used in a vast majority of practical applications; they are the topic of this chapter. Asynchronous circuits will be discussed in Chapter 9.

Synchronous sequential circuits are realized using combinational logic and one or more flip-flops. The general structure of such a circuit is shown in Figure 8.1. The circuit has a set of primary inputs, W , and produces a set of outputs, Z . The values of the outputs of the flip-flops are referred to as the *state*, Q , of the circuit. Under control of the clock signal, the flip-flop outputs change their state as determined by the combinational logic that feeds the inputs of these flip-flops. Thus the circuit moves from one state to another. To ensure that only one transition from one state to another takes place during one clock cycle, the flip-flops have to be of the edge-triggered type. They can be triggered either by the positive (0 to 1 transition) or by the negative (1 to 0 transition) edge of the clock. We will use the term *active clock edge* to refer to the clock edge that causes the change in state.

The combinational logic that provides the input signals to the flip-flops derives its inputs from two sources: the primary inputs, W , and the present (current) outputs of the flip-flops, Q . Thus changes in state depend on both the present state and the values of the primary inputs.

Figure 8.1 indicates that the outputs of the sequential circuit are generated by another combinational circuit, such that the outputs are a function of the present state of the flip-flops and of the primary inputs. Although the outputs always depend on the present state, they do not necessarily have to depend directly on the primary inputs. Thus the connection shown in blue in the figure may or may not exist. To distinguish between these two possibilities, it is customary to say that sequential circuits whose outputs depend only on the state of the circuit are of *Moore* type, while those whose outputs depend on both the state and the primary inputs are of *Mealy* type. These names are in honor of Edward Moore and George Mealy, who investigated the behavior of such circuits in the 1950s.

Sequential circuits are also called *finite state machines (FSMs)*, which is a more formal name that is often found in technical literature. The name derives from the fact that the functional behavior of these circuits can be represented using a finite number of states. In this chapter we will often use the term *finite state machine*, or simply *machine*, when referring to sequential circuits.

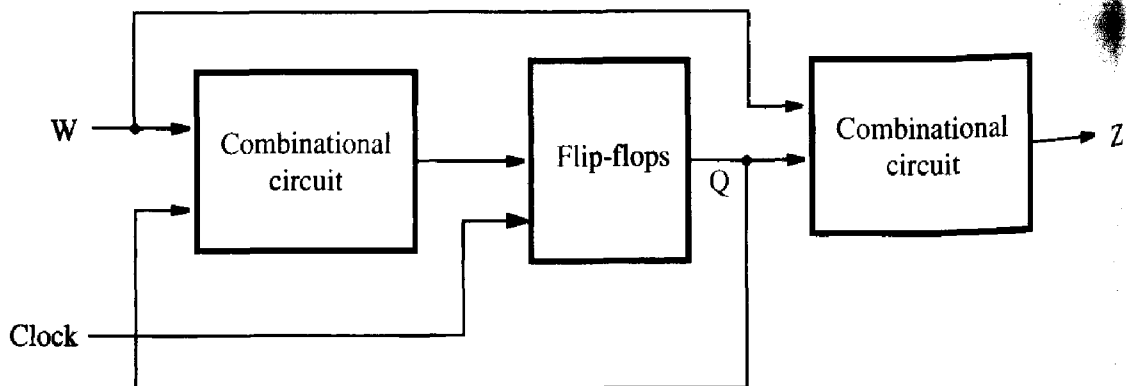


Figure 8.1 The general form of a sequential circuit.

8.1 BASIC DESIGN STEPS

We will introduce the techniques for designing sequential circuits by means of a simple example. Suppose that we wish to design a circuit that meets the following specification:

1. The circuit has one input, w , and one output, z .
2. All changes in the circuit occur on the positive edge of a clock signal.
3. The output z is equal to 1 if during two immediately preceding clock cycles the input w was equal to 1. Otherwise, the value of z is equal to 0.

Thus, the circuit detects if two or more consecutive 1s occur on its input w . Circuits that detect the occurrence of a particular pattern on its input(s) are referred to as *sequence detectors*.

From this specification it is apparent that the output z cannot depend solely on the present value of w . To illustrate this, consider the sequence of values of the w and z signals during 11 clock cycles, as shown in Figure 8.2. The values of w are assumed arbitrarily; the values of z correspond to our specification. These sequences of input and output values indicate that for a given input value the output may be either 0 or 1. For example, $w = 0$ during clock cycles t_2 and t_5 , but $z = 0$ during t_2 and $z = 1$ during t_5 . Similarly, $w = 1$ during t_1 and t_8 , but $z = 0$ during t_1 and $z = 1$ during t_8 . This means that z is not determined only by the present value of w , so there must exist different states in the circuit that determine the value of z .

8.1.1 STATE DIAGRAM

The first step in designing a finite state machine is to determine how many states are needed and which transitions are possible from one state to another. There is no set procedure for this task. The designer must think carefully about what the machine has to accomplish. A good way to begin is to select one particular state as a *starting* state; this is the state that the circuit should enter when power is first turned on or when a *reset* signal is applied. For our example let us assume that the starting state is called state A . As long as the input w is 0, the circuit need not do anything, and so each active clock edge should result in the circuit remaining in state A . When w becomes equal to 1, the machine should recognize this, and move to a different state, which we will call state B . This transition takes place on the next active clock edge after w has become equal to 1. In state B , as in state A , the circuit should keep the value of output z at 0, because it has not yet seen $w = 1$ for two consecutive clock cycles. When in state B , if w is 0 at the next active clock edge, the circuit should move back to state A . However, if $w = 1$ when in state B , the circuit should change to a third state, called C , and it should then generate an output $z = 1$. The circuit should remain in

Clock cycle:	t_0	t_1	t_2	t_3	t_4	t_5	t_6	t_7	t_8	t_9	t_{10}
w :	0	1	0	1	1	0	1	1	1	0	1
z :	0	0	0	0	0	1	0	0	1	1	0

Figure 8.2 Sequences of input and output signals.

state *C* as long as $w = 1$ and should continue to maintain $z = 1$. When w becomes 0, the machine should move back to state *A*. Since the preceding description handles all possible values of input w that the machine can encounter in its various states, we can conclude that three states are needed to implement the desired machine.

Now that we have determined in an informal way the possible transitions between states, we will describe a more formal procedure that can be used to design the corresponding sequential circuit. Behavior of a sequential circuit can be described in several different ways. The conceptually simplest method is to use a pictorial representation in the form of a *state diagram*, which is a graph that depicts states of the circuit as nodes (circles) and transitions between states as directed arcs. The state diagram in Figure 8.3 defines the behavior that corresponds to our specification. States *A*, *B*, and *C* appear as nodes in the diagram. Node *A* represents the starting state, and it is also the state that the circuit will reach *after* an input $w = 0$ is applied. In this state the output z should be 0, which is indicated as $A/z=0$ in the node. The circuit should remain in state *A* as long as $w = 0$, which is indicated by an arc with a label $w = 0$ that originates and terminates at this node. The first occurrence of $w = 1$ (following the condition $w = 0$) is recorded by moving from state *A* to state *B*. This transition is indicated on the graph by an arc originating at *A* and terminating at *B*. The label $w = 1$ on this arc denotes the input value that causes the transition. In state *B* the output remains at 0, which is indicated as $B/z=0$ in the node.

When the circuit is in state *B*, it will change to state *C* if w is still equal to 1 at the next active clock edge. In state *C* the output z becomes equal to 1. If w stays at 1 during subsequent clock cycles, the circuit will remain in state *C* maintaining $z = 1$. However, if w becomes 0 when the circuit is either in state *B* or in state *C*, the next active clock edge will cause a transition to state *A* to take place.

In the diagram we indicated that the *Reset* input is used to force the circuit into state *A*, which is possible regardless of what state the circuit happens to be in. We could treat

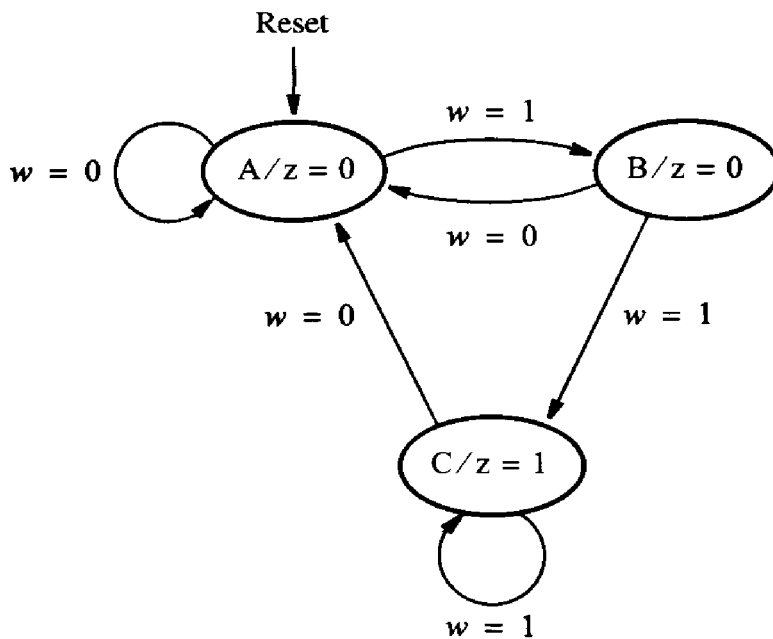


Figure 8.3 State diagram of a simple sequential circuit.

Reset as just another input to the circuit, and show a transition from each state to the starting state *A* under control of the input *Reset*. This would complicate the diagram unnecessarily. States in a finite state machine are implemented using flip-flops. Since flip-flops usually have reset capability, as discussed in Chapter 7, we can assume that the *Reset* input is used to clear all flip-flops to 0 by using this capability. We will indicate this as shown in Figure 8.3 to keep the diagrams as simple as possible.

8.1.2 STATE TABLE

Although the state diagram provides a description of the behavior of a sequential circuit that is easy to understand, to proceed with the implementation of the circuit, it is convenient to translate the information contained in the state diagram into a tabular form. Figure 8.4 shows the *state table* for our sequential circuit. The table indicates all transitions from each *present state* to the *next state* for different values of the input signal. Note that the output *z* is specified with respect to the present state, namely, the state that the circuit is in at present time. Note also that we did not include the *Reset* input; instead, we made an implicit assumption that the first state in the table is the starting state.

We now show the design steps that will produce the final circuit. To explain the basic design concepts, we first go through a traditional process of manually performing each design step. This is followed by a discussion of automated design techniques that use modern computer aided design (CAD) tools.

8.1.3 STATE ASSIGNMENT

The state table in Figure 8.4 defines the three states in terms of letters *A*, *B*, and *C*. When implemented in a logic circuit, each state is represented by a particular valuation (combination of values) of *state variables*. Each state variable may be implemented in the form of a flip-flop. Since three states have to be realized, it is sufficient to use two state variables. Let these variables be y_1 and y_2 .

Now we can adapt the general block diagram in Figure 8.1 to our example as shown in Figure 8.5, to indicate the structure of the circuit that implements the required finite state machine. Two flip-flops represent the state variables. In the figure we have not specified the type of flip-flops to be used; this issue is addressed in the next subsection. From the

Present state	Next state		Output <i>z</i>
	$w = 0$	$w = 1$	
A	A	B	0
B	A	C	0
C	A	C	1

Figure 8.4 State table for the sequential circuit in Figure 8.3.

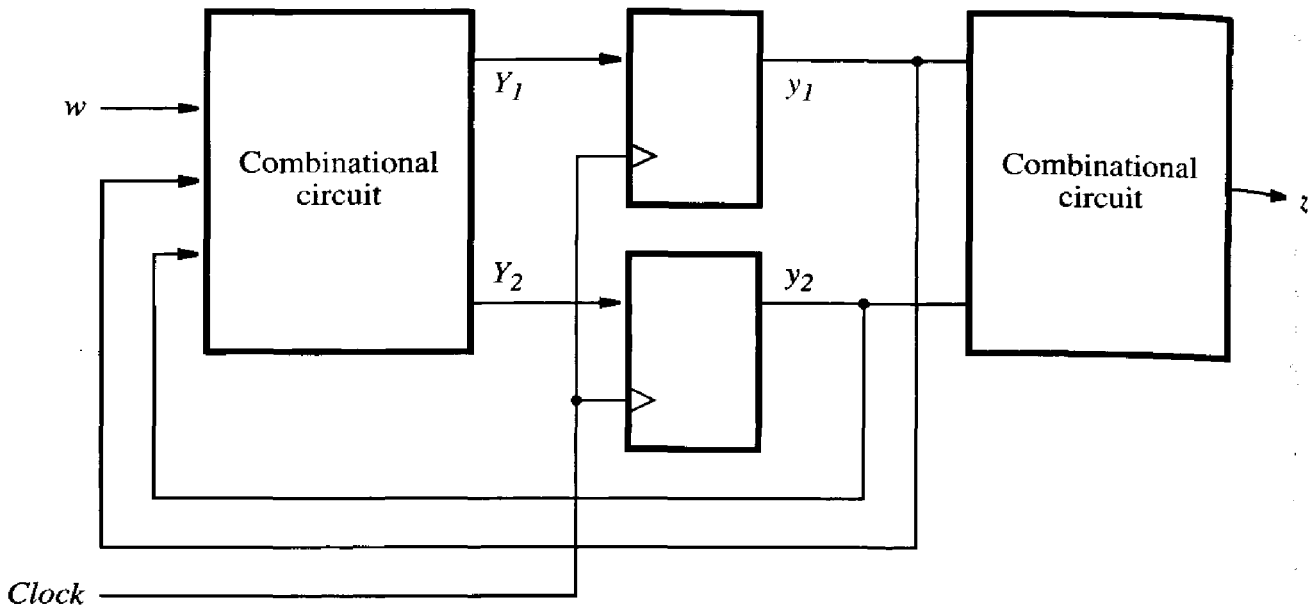


Figure 8.5 A general sequential circuit with input w , output z , and two state flip-flops.

specification in Figures 8.3 and 8.4, the output z is determined only by the present state of the circuit. Thus the block diagram in Figure 8.5 shows that z is a function of only y_1 and y_2 ; our design is of Moore type. We need to design a combinational circuit that uses y_1 and y_2 as input signals and generates a correct output signal z for all possible valuations of these inputs.

The signals y_1 and y_2 are also fed back to the combinational circuit that determines the next state of the FSM. This circuit also uses the primary input signal w . Its outputs are two signals, Y_1 and Y_2 , which are used to set the state of the flip-flops. Each active edge of the clock will cause the flip-flops to change their state to the values of Y_1 and Y_2 at that time. Therefore, Y_1 and Y_2 are called the *next-state variables*, and y_1 and y_2 are called the *present-state variables*. We need to design a combinational circuit with inputs w , y_1 , and y_2 , such that for all valuations of these inputs the outputs Y_1 and Y_2 will cause the machine to move to the next state that satisfies our specification. The next step in the design process is to create a truth table that defines this circuit, as well as the circuit that generates z .

To produce the desired truth table, we assign a specific valuation of variables y_1 and y_2 to each state. One possible assignment is given in Figure 8.6, where the states A , B , and C are represented by $y_2y_1 = 00, 01,$ and 10 , respectively. The fourth valuation, $y_2y_1 = 11$, is not needed in this case.

The type of table given in Figure 8.6 is usually called a *state-assigned table*. This table can serve directly as a truth table for the output z with the inputs y_1 and y_2 . Although for the next-state functions Y_1 and Y_2 the table does not have the appearance of a normal truth table, because there are two separate columns in the table for each value of w , it is obvious that the table includes all of the information that defines the next-state functions in terms of valuations of inputs w , y_1 , and y_2 .

	Present state	Next state		Output z
		$w = 0$	$w = 1$	
	y_2y_1	Y_2Y_1	Y_2Y_1	
A	00	00	01	0
B	01	00	10	0
C	10	00	10	1
	11	dd	dd	d

Figure 8.6 State-assigned table for the sequential circuit in Figure 8.4.

8.1.4 CHOICE OF FLIP-FLOPS AND DERIVATION OF NEXT-STATE AND OUTPUT EXPRESSIONS

From the state-assigned table in Figure 8.6, we can derive the logic expressions for the next-state and output functions. But first we have to decide on the type of flip-flops that will be used in the circuit. The most straightforward choice is to use D-type flip-flops, because in this case the values of Y_1 and Y_2 are simply clocked into the flip-flops to become the new values of y_1 and y_2 . In other words, if the inputs to the flip-flops are called D_1 and D_2 , then these signals are the same as Y_1 and Y_2 . Note that the diagram in Figure 8.5 corresponds exactly to this use of D-type flip-flops. For other types of flip-flops, such as JK type, the relationship between the next-state variable and inputs to a flip-flop is not as straightforward; we will consider this situation in section 8.7.

The required logic expressions can be derived as shown in Figure 8.7. We use Karnaugh maps to make it easy for the reader to verify the validity of the expressions. Recall that in Figure 8.6 we needed only three of the four possible binary valuations to represent the states. The fourth valuation, $y_2y_1 = 11$, should never occur in the circuit because the circuit is constrained to move only within states A, B, and C; therefore, we may choose to treat this valuation as a don't-care condition. The resulting don't-care squares in the Karnaugh maps are denoted by d's. Using the don't cares to simplify the expressions, we obtain

$$\begin{aligned}
 Y_1 &= w\bar{y}_1\bar{y}_2 \\
 Y_2 &= w(y_1 + y_2) \\
 z &= y_2
 \end{aligned}$$

If we do not use don't cares, then the resulting expressions are slightly more complex; they are shown in the gray-shaded area of Figure 8.7.

Since $D_1 = Y_1$ and $D_2 = Y_2$, the logic circuit that corresponds to the preceding expressions is implemented as shown in Figure 8.8. Observe that a clock signal is included, and the circuit is provided with an active-low reset capability. Connecting the clear input on the flip-flops to an external *Resetn* signal, as shown in the figure, provides a simple means

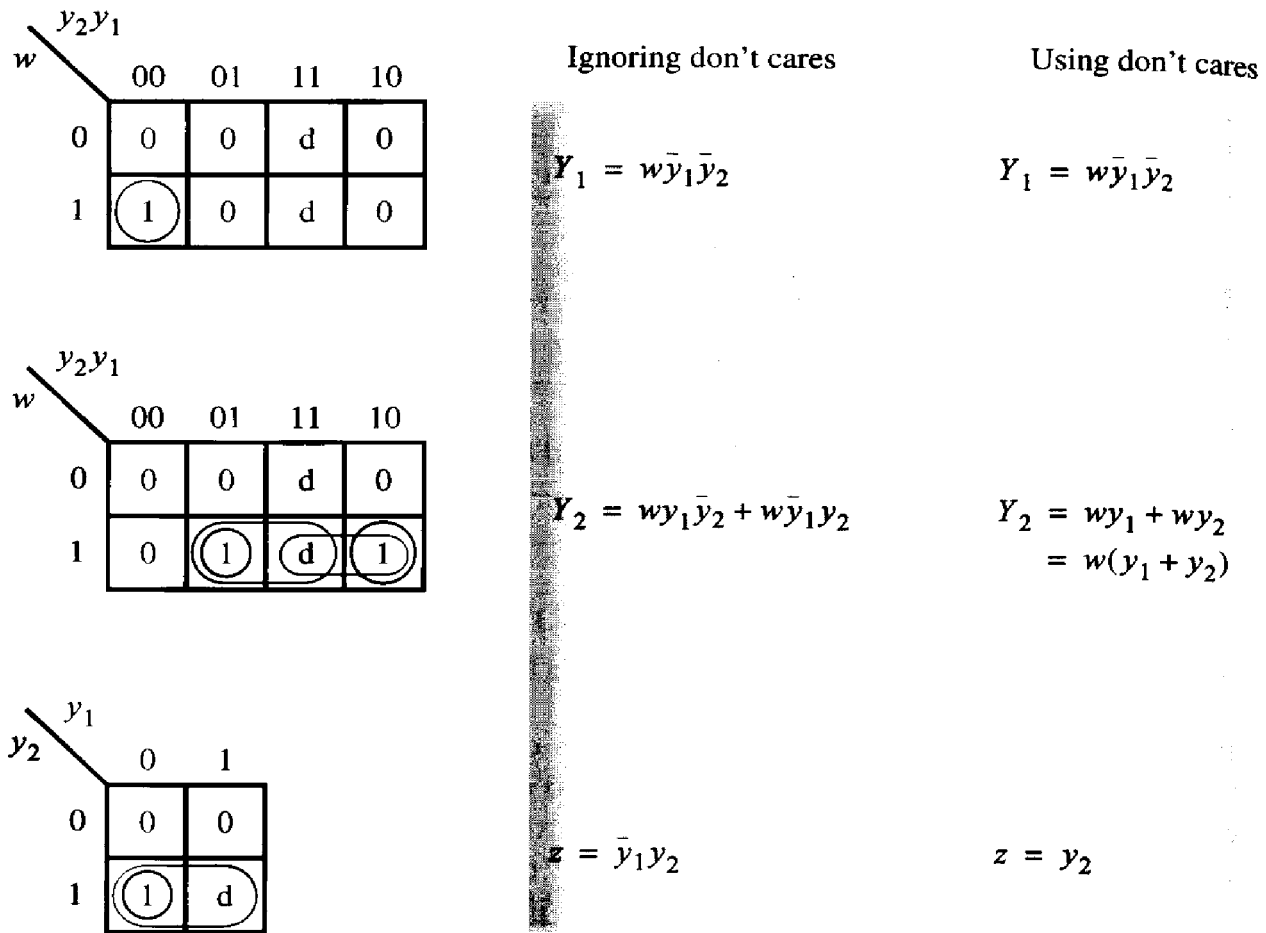


Figure 8.7 Derivation of logic expressions for the sequential circuit in Figure 8.6.

for forcing the circuit into a known state. If we apply the signal $Resetn = 0$ to the circuit, then both flip-flops will be cleared to 0, placing the FSM into the state $y_2y_1 = 00$.

8.1.5 TIMING DIAGRAM

To understand fully the operation of the circuit in Figure 8.8, let us consider its timing diagram presented in Figure 8.9. The diagram depicts the signal waveforms that correspond to the sequences of values in Figure 8.2.

Because we are using positive-edge-triggered flip-flops, all changes in the signals occur shortly after the positive edge of the clock. The amount of delay from the clock edge depends on the propagation delays through the flip-flops. Note that the input signal w is also shown to change slightly after the active edge of the clock. This is a good assumption because in a typical digital system an input such as w would be just an output of another circuit that is synchronized by the same clock. We discuss the synchronization of input signals with the clock signal in section 10.3.

A key point to observe is that even though w changes slightly after the active clock edge, and thus the value of w is equal to 1 (or 0) for almost the entire clock cycle, no change in the circuit will occur until the beginning of the next clock cycle when the positive edge

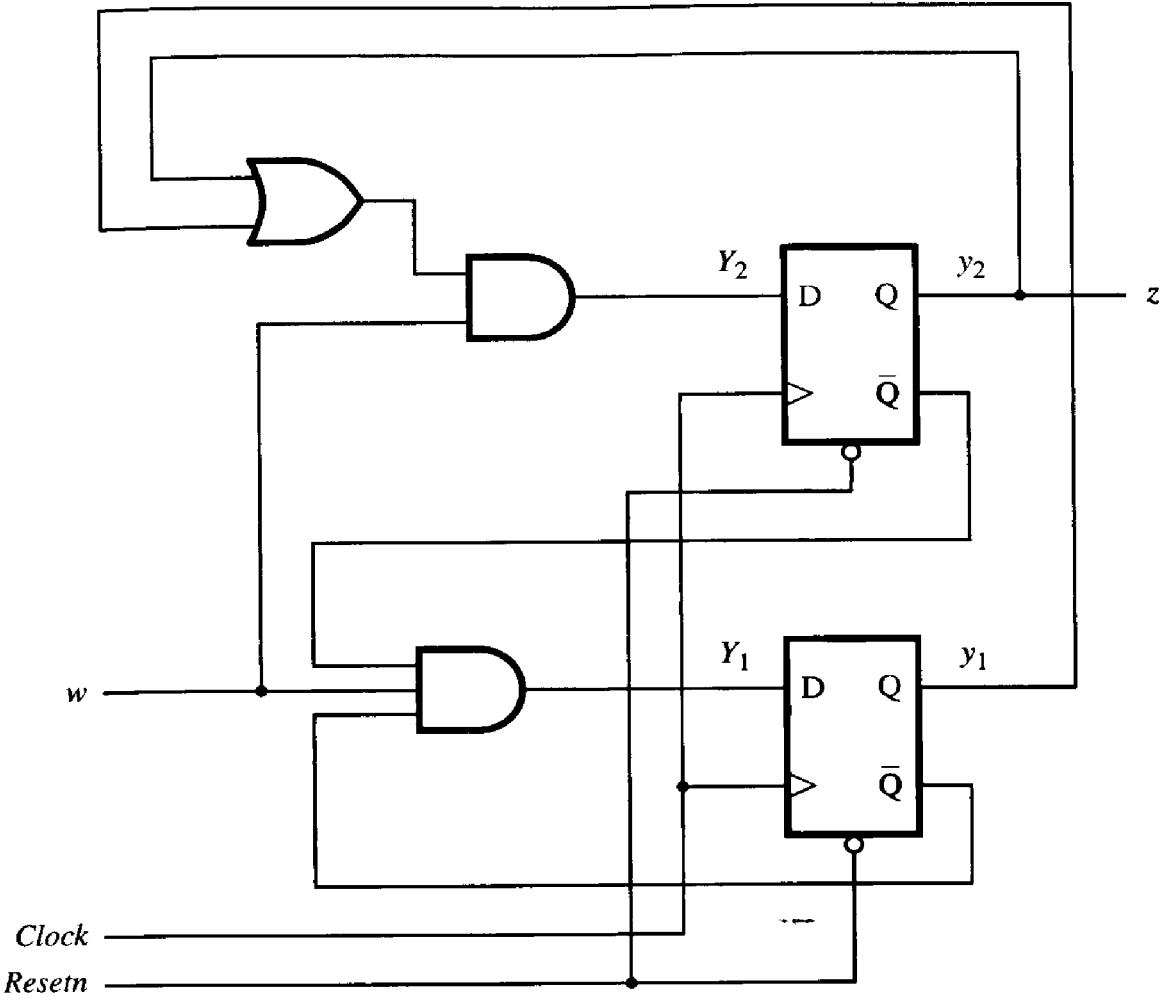


Figure 8.8 Final implementation of the sequential circuit in Figure 8.7.

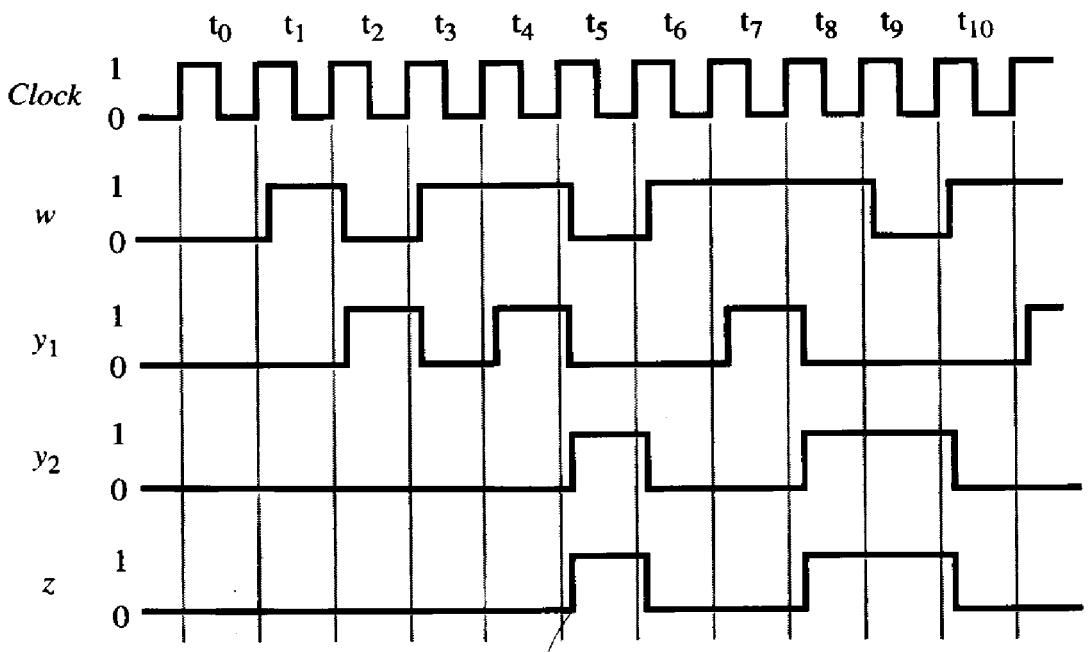


Figure 8.9 Timing diagram for the circuit in Figure 8.8.

causes the flip-flops to change their state. Thus the value of w must be equal to 1 for two clock cycles if the circuit is to reach state C and generate the output $z = 1$.

8.1.6 SUMMARY OF DESIGN STEPS

We can summarize the steps involved in designing a synchronous sequential circuit as follows:

1. Obtain the specification of the desired circuit.
2. Derive the states for the machine by first selecting a starting state. Then, given the specification of the circuit, consider all valuations of the inputs to the circuit and create new states as needed for the machine to respond to these inputs. To keep track of the states as they are visited, create a state diagram. When completed, the state diagram shows all states in the machine and gives the conditions under which the circuit moves from one state to another.
3. Create a state table from the state diagram. Alternatively, it may be convenient to directly create the state table in step 2, rather than first creating a state diagram.
4. In our sequential circuit example, there were only three states; hence it was a simple matter to create the state table that does not contain more states than necessary. However, in practice it is common to deal with circuits that have a large number of states. In such cases it is unlikely that the first attempt at deriving a state table will produce optimal results. Almost certainly we will have more states than is really necessary. This can be corrected by a procedure that minimizes the number of states. We will discuss the process of state minimization in section 8.6.
5. Decide on the number of state variables needed to represent all states and perform the state assignment. There are many different state assignments possible for a given sequential circuit. Some assignments may be better than others. In the preceding example we used what seemed to be a natural state assignment. We will return to this example in section 8.2 and show that a different assignment may lead to a simpler circuit.
6. Choose the type of flip-flops to be used in the circuit. Derive the next-state logic expressions to control the inputs to all flip-flops and then derive logic expressions for the outputs of the circuit. So far we have used only D-type flip-flops. We will consider other types of flip-flops in section 8.7.
7. Implement the circuit as indicated by the logic expressions.

I We have illustrated the design steps using a very simple sequential circuit. From the reader's point of view, a circuit that detects that an input signal was high for two consecutive clock pulses may not have much practical significance. We will now consider an example that is closely tied to practical application.

Section 7.14 introduced the concept of a bus and showed the connections that have to be made to allow the contents of a register to be transferred into another register. The

circuit in Figure 7.55 shows how tri-state buffers can be used to place the contents of a selected register onto the bus and how the data on the bus can be loaded into a register. Figure 7.57 shows how a control mechanism that swaps the contents of registers $R1$ and $R2$ can be realized using a shift register. We will now design the desired control mechanism, using the finite state machine approach.

The contents of registers $R1$ and $R2$ can be swapped using register $R3$ as a temporary storage location as follows: The contents of $R2$ are first loaded into $R3$, using the control signals $R2_{out} = 1$ and $R3_{in} = 1$. Then the contents of $R1$ are transferred into $R2$, using $R1_{out} = 1$ and $R2_{in} = 1$. Finally, the contents of $R3$ (which are the previous contents of $R2$) are transferred into $R1$, using $R3_{out} = 1$ and $R1_{in} = 1$. Since this step completes the required swap, we will indicate that the task is completed by setting the signal $Done = 1$. Assume that the swapping is performed in response to a pulse on an input signal called w , which has a duration of one clock cycle. Figure 8.10 indicates the external signals involved in the desired control circuit. Figure 8.11 gives a state diagram for a sequential circuit that generates the output control signals in the required sequence. Note that to keep the diagram simple, we have indicated the output signals only when they are equal to 1. In all other cases the output signals are equal to 0.

In the starting state, A , no transfer is indicated, and all output signals are 0. The circuit remains in this state until a request to swap arrives in the form of w changing to 1. In state B the signals required to transfer the contents of $R2$ into $R3$ are asserted. The next active clock edge places these contents into $R3$. It also causes the circuit to change to state C , regardless of whether w is equal to 0 or 1. In this state the signals for transferring $R1$ into $R2$ are asserted. The transfer takes place at the next active clock edge, and the circuit changes to state D regardless of the value of w . The final transfer, from $R3$ to $R1$, is performed on the clock edge that leaves state D , which also causes the circuit to return to state A .

Figure 8.12 presents the same information in a state table. Since there are four states, it is necessary to use two state variables, y_2 and y_1 . A straightforward state assignment where the states A , B , C , and D are assigned the valuations $y_2y_1 = 00, 01, 10$, and 11 , respectively, leads to the state-assigned table in Figure 8.13. Using this assignment and D-type flip-flops,

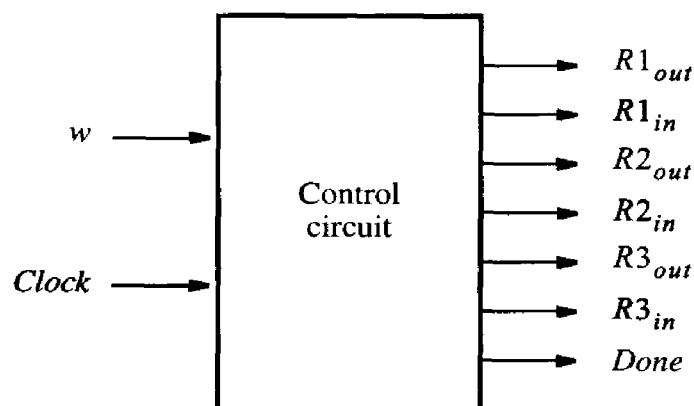


Figure 8.10 Signals needed in Example 8.1.

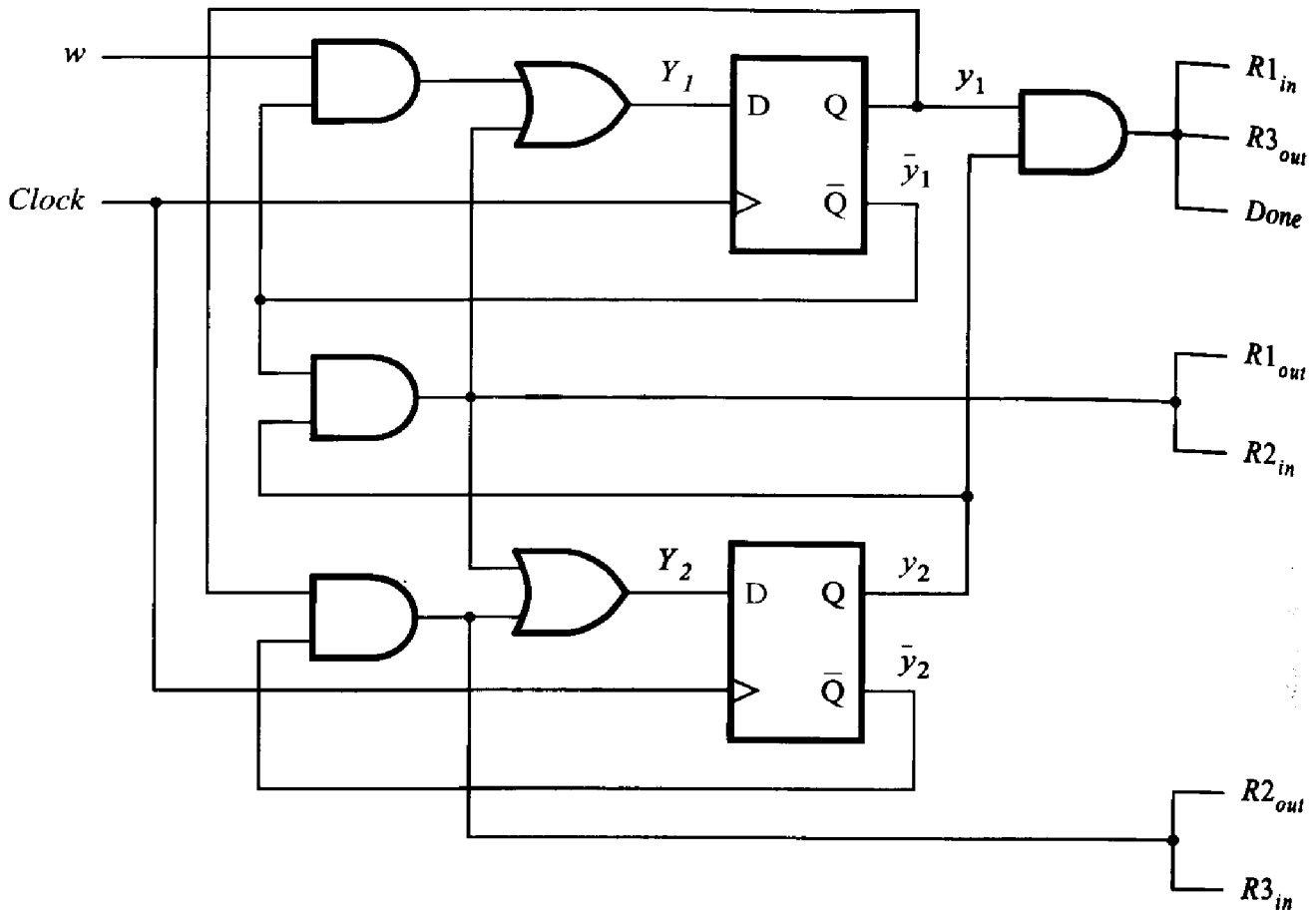


Figure 8.15 Final implementation of the sequential circuit in Figure 8.13.

	Present state y_2y_1	Next state		Output z
		$w = 0$	$w = 1$	
		Y_2Y_1	Y_2Y_1	
A	00	00	01	0
B	01	00	11	0
C	11	00	11	1
	10	dd	dd	d

Figure 8.16 Improved state assignment for the sequential circuit in Figure 8.4.

implement the circuit using D-type flip-flops, the next-state and output expressions derived from the figure will be

$$Y_1 = D_1 = w$$

$$Y_2 = D_2 = wy_1$$

$$z = y_2$$

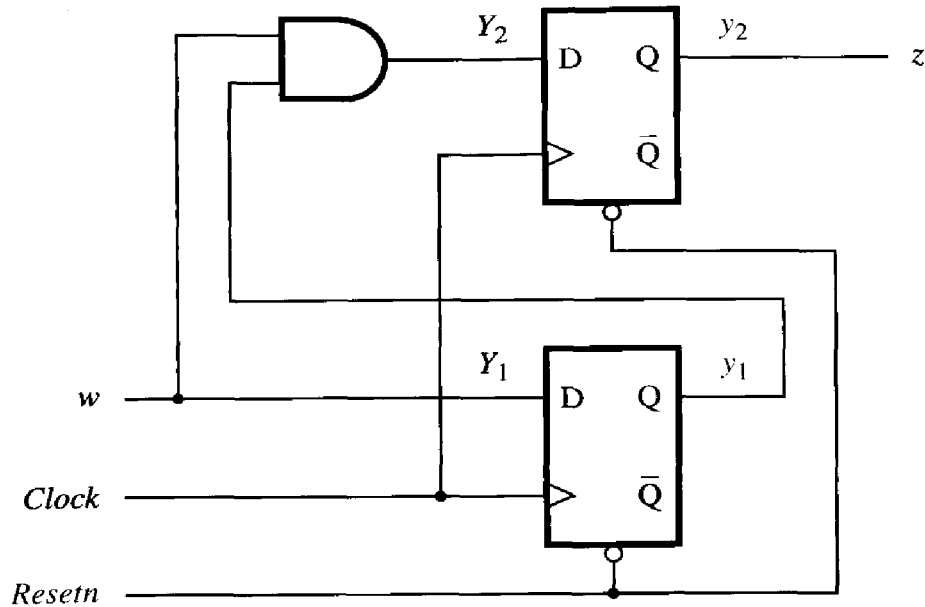


Figure 8.17 Final circuit for the improved state assignment in Figure 8.16.

These expressions define the circuit shown in Figure 8.17. Comparing this circuit with the one in Figure 8.8, we see that the cost of the new circuit is lower because it requires fewer gates.

In general, circuits are much larger than our example, and different state assignments can have a substantial effect on the cost of the final implementation. While highly desirable, it is often impossible to find the best state assignment for a large circuit. The exhaustive approach of trying all possible state assignments is not practical because the number of available state assignments is huge. CAD tools usually perform the state assignment using heuristic techniques. These techniques are usually proprietary, and their details are seldom published.

In Figure 8.13 we used a straightforward state assignment for the sequential circuit in Figure 8.12. Consider now the effect of interchanging the valuations assigned to states *C* and *D*, as shown in Figure 8.18. Then the next-state expressions are **E**

$$Y_1 = w\bar{y}_2 + y_1\bar{y}_2$$

$$Y_2 = y_1$$

as derived in Figure 8.19. The output expressions are

$$R1_{out} = R2_{in} = y_1y_2$$

$$R1_{in} = R3_{out} = Done = \bar{y}_1y_2$$

$$R2_{out} = R3_{in} = y_1\bar{y}_2$$

These expressions lead to a slightly simpler circuit than the one given in Figure 8.15.

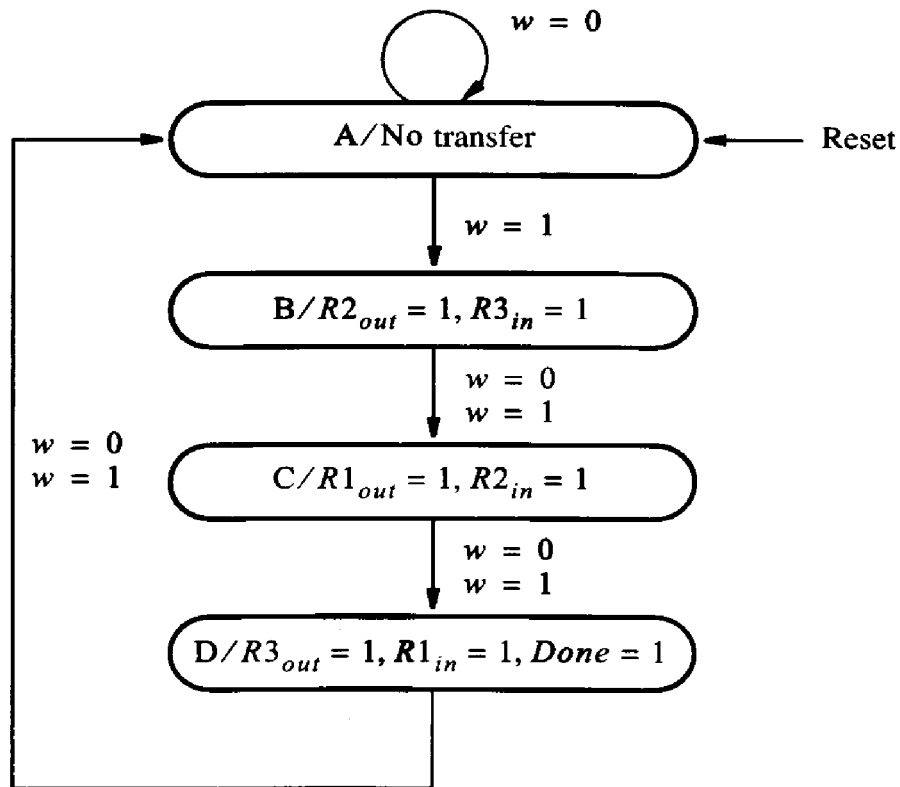


Figure 8.11 State diagram for Example 8.1.

Present state	Next state		Outputs						
	$w = 0$	$w = 1$	$R1_{out}$	$R1_{in}$	$R2_{out}$	$R2_{in}$	$R3_{out}$	$R3_{in}$	$Done$
A	A	B	0	0	0	0	0	0	0
B	C	C	0	0	1	0	0	1	0
C	D	D	1	0	0	1	0	0	0
D	A	A	0	1	0	0	1	0	1

Figure 8.12 State table for Example 8.1.

	Present state	Next state		Outputs						
		$w = 0$	$w = 1$							
	y_2y_1	Y_2Y_1	Y_2Y_1	$R1_{out}$	$R1_{in}$	$R2_{out}$	$R2_{in}$	$R3_{out}$	$R3_{in}$	$Done$
A	00	00	01	0	0	0	0	0	0	0
B	01	10	10	0	0	1	0	0	1	0
C	10	11	11	1	0	0	1	0	0	0
D	11	00	00	0	1	0	0	1	0	1

Figure 8.13 State-assigned table for the sequential circuit in Figure 8.12.

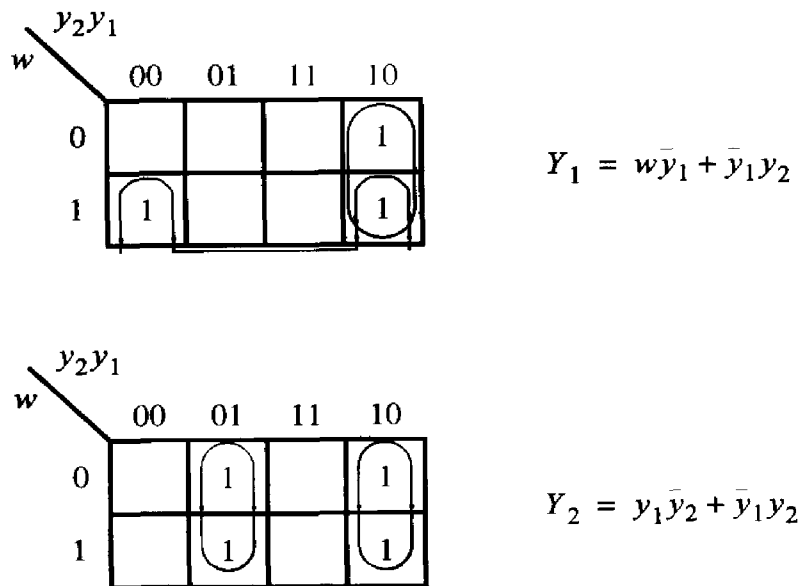


Figure 8.14 Derivation of next-state expressions for the sequential circuit in Figure 8.13.

the next-state expressions can be derived as shown in Figure 8.14. They are

$$Y_1 = w\bar{y}_1 + \bar{y}_1y_2$$

$$Y_2 = y_1\bar{y}_2 + \bar{y}_1y_2$$

The output control signals are derived as

$$R1_{out} = R2_{in} = \bar{y}_1y_2$$

$$R1_{in} = R3_{out} = Done = y_1y_2$$

$$R2_{out} = R3_{in} = y_1\bar{y}_2$$

These expressions lead to the circuit in Figure 8.15. This circuit appears more complex than the shift register in Figure 7.57, but it has only two flip-flops, rather than three.

8.2 STATE-ASSIGNMENT PROBLEM

Having introduced the basic concepts involved in the design of sequential circuits, we should revisit some details where alternative choices are possible. In section 8.1.6 we suggested that some state assignments may be better than others. To illustrate this we can reconsider the example in Figure 8.4. We already know that the state assignment in Figure 8.6 leads to a simple-looking circuit in Figure 8.8. But can the FSM of Figure 8.4 be implemented with an even simpler circuit by using a different state assignment?

Figure 8.16 gives one possible alternative. In this case we represent the states *A*, *B*, and *C* with the valuations $y_2y_1 = 00$, 01 , and 11 , respectively. The remaining valuation, $y_2y_1 = 10$, is not needed, and we will treat it as a don't-care condition. If we again choose to

	Present state	Next state		Outputs						
		$w = 0$	$w = 1$							
	y_2y_1	Y_2Y_1	Y_2Y_1	$R1_{out}$	$R1_{in}$	$R2_{out}$	$R2_{in}$	$R3_{out}$	$R3_{in}$	Done
A	00	00	01	0	0	0	0	0	0	0
B	01	11	11	0	0	1	0	0	1	0
C	11	10	10	1	0	0	1	0	0	0
D	10	00	00	0	1	0	0	1	0	1

Figure 8.18 Improved state assignment for the sequential circuit in Figure 8.12.

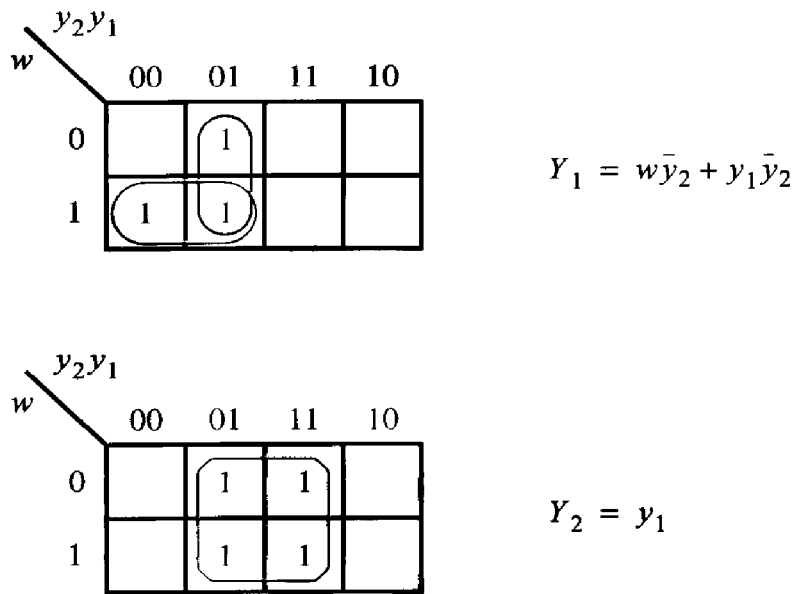


Figure 8.19 Derivation of next-state expressions for the sequential circuit in Figure 8.18.

8.2.1 ONE-HOT ENCODING

Another interesting possibility is to use as many state variables as there are states in a sequential circuit. In this method, for each state all but one of the state variables are equal to 0. The variable whose value is 1 is deemed to be “hot.” The approach is known as the *one-hot encoding* method.

Figure 8.20 shows how one-hot state assignment can be applied to the sequential circuit of Figure 8.4. Because there are three states, it is necessary to use three state variables. The chosen assignment is to represent the states *A*, *B*, and *C* using the valuations $y_3y_2y_1 = 001$, 010 , and 100 , respectively. The remaining five valuations of the state variables are not used.

	Present state $y_3y_2y_1$	Next state		Output z
		$w = 0$	$w = 1$	
		$Y_3Y_2Y_1$	$Y_3Y_2Y_1$	
A	001	001	010	0
B	010	001	100	0
C	100	001	100	1

Figure 8.20 One-hot state assignment for the sequential circuit in Figure 8.4.

They can be treated as don't cares in the derivation of the next-state and output expressions. Using this assignment, the resulting expressions are

$$Y_1 = \bar{w}$$

$$Y_2 = wy_1$$

$$Y_3 = w\bar{y}_1$$

$$z = y_3$$

These expressions are not simpler than those obtained using the state assignment in Figure 8.16. Although in this case the one-hot assignment is not advantageous, there are many cases where this approach is attractive.

The one-hot state assignment can be applied to the sequential circuit of Figure 8.12 as indicated in Figure 8.21. Four state variables are needed, and the states A, B, C, and D are encoded as $y_4y_3y_2y_1 = 0001, 0010, 0100, \text{ and } 1000$, respectively. Treating the remaining

E)

	Present state $y_4y_3y_2y_1$	Next state		Outputs						
		$w = 0$	$w = 1$							
		$Y_4Y_3Y_2Y_1$	$Y_4Y_3Y_2Y_1$	$R1_{out}$	$R1_{in}$	$R2_{out}$	$R2_{in}$	$R3_{out}$	$R3_{in}$	Done
A	0001	0001	0010	0	0	0	0	0	0	0
B	0010	0100	0100	0	0	1	0	0	1	0
C	0100	1000	1000	1	0	0	1	0	0	0
D	1000	0001	0001	0	1	0	0	1	0	1

Figure 8.21 One-hot state assignment for the sequential circuit in Figure 8.12.

12 valuations of the state variables as don't cares, the next-state expressions are

$$Y_1 = \bar{w}y_1 + y_4$$

$$Y_2 = wy_1$$

$$Y_3 = y_2$$

$$Y_4 = y_3$$

It is instructive to note that we can derive these expressions simply by inspecting the state diagram in Figure 8.11. Flip-flop y_1 should be set to 1 if the FSM is in state A and $w = 0$, or if the FSM is in state D ; hence $Y_1 = \bar{w}y_1 + y_4$. Flip-flop y_2 should be set to 1 if the present state is A and $w = 1$; hence $Y_2 = wy_1$. Flip-flops y_3 and y_4 should be set to 1 if the FSM is presently in state B or C , respectively; hence $Y_3 = y_2$ and $Y_4 = y_3$.

The output expressions are just the outputs of the flip-flops, such that

$$R1_{out} = R2_{in} = y_3$$

$$R1_{in} = R3_{out} = Done = y_4$$

$$R2_{out} = R3_{in} = y_2$$

These expressions are simpler than those derived in Example 8.2, but four flip-flops are needed, rather than two.

An important feature of the one-hot state assignment is that it often leads to simpler output expressions than do assignments with the minimal number of state variables. Simpler output expressions may lead to a faster circuit. For instance, if the outputs of the sequential circuit are just the outputs of the flip-flops, as is the case in our example, then these output signals are valid as soon as the flip-flops change their states. If more complex output expressions are involved, then the propagation delay through the gates that implement these expressions must be taken into account. We will consider this issue in section 8.8.2.

The examples considered to this point show that there are many ways to implement a given finite state machine as a sequential circuit. Each implementation is likely to have a different cost and different timing characteristics. In the next section we introduce another way of modeling FSMs that leads to even more possibilities.

8.3 MEALY STATE MODEL

Our introductory examples were sequential circuits in which each state had specific values of the output signals associated with it. As we explained at the beginning of the chapter, such finite state machines are said to be of Moore type. We will now explore the concept of Mealy-type machines in which the output values are generated based on both the state of the circuit and the present values of its inputs. This provides additional flexibility in the design of sequential circuits. We will introduce the Mealy-type machines, using a slightly altered version of a previous example.

The essence of the first sequential circuit in section 8.1 is to generate an output $z = 1$ whenever a second occurrence of the input $w = 1$ is detected in consecutive clock cycles. The specification requires that the output z be equal to 1 in the clock cycle that follows

the detection of the second occurrence of $w = 1$. Suppose now that we eliminate this latter requirement and specify instead that the output z should be equal to 1 in the same clock cycle when the second occurrence of $w = 1$ is detected. Then a suitable input-output sequence may be as shown in Figure 8.22. To see how we can realize the behavior given in this table, we begin by selecting a starting state, A . As long as $w = 0$, the machine should remain in state A , producing an output $z = 0$. When $w = 1$, the machine has to move to a new state, B , to record the fact that an input of 1 has occurred. If w remains equal to 1 when the machine is in state B , which happens if $w = 1$ for at least two consecutive clock cycles, the machine should remain in state B and produce an output $z = 1$. As soon as w becomes 0, z should immediately become 0 and the machine should move back to state A at the next active edge of the clock. Thus the behavior specified in Figure 8.22 can be achieved with a two-state machine, which has a state diagram shown in Figure 8.23. Only two states are needed because we have allowed the output value to depend on the present value of the input as well as the present state of the machine. The diagram indicates that if the machine is in state A , it will remain in state A if $w = 0$ and the output will be 0. This is indicated by an arc with the label $w = 0/z = 0$. When w becomes 1, the output stays at 0 until the machine moves to state B at the next active clock edge. This is denoted by the arc from A to B with the label $w = 1/z = 0$. In state B the output will be 1 if $w = 1$, and the machine will remain in state B , as indicated by the label $w = 1/z = 1$ on the corresponding arc. However, if $w = 0$ in state B , then the output will be 0 and a transition to state A will take place at the next active clock edge. A key point to understand is that during the present clock cycle the output value corresponds to the label on the arc emanating from the present-state node.

We can implement the FSM in Figure 8.23, using the same design steps as in section 8.1. The state table is shown in Figure 8.24. The table shows that the output z depends on the present value of input w and not just on the present state. Figure 8.25 gives the

Clock cycle:	t_0	t_1	t_2	t_3	t_4	t_5	t_6	t_7	t_8	t_9	t_{10}
w :	0	1	0	1	1	0	1	1	1	0	1
z :	0	0	0	0	1	0	0	1	1	0	0

Figure 8.22 Sequences of input and output signals.

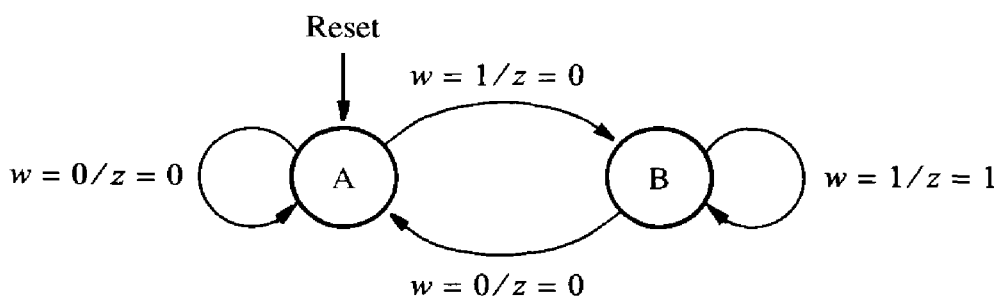


Figure 8.23 State diagram of an FSM that realizes the task in Figure 8.22.

Present state	Next state		Output z	
	$w = 0$	$w = 1$	$w = 0$	$w = 1$
A	A	B	0	0
B	A	B	0	1

Figure 8.24 State table for the FSM in Figure 8.23.

	Present state	Next state		Output	
		$w = 0$	$w = 1$	$w = 0$	$w = 1$
	y	Y	Y	z	z
A	0	0	1	0	0
B	1	0	1	0	1

Figure 8.25 State-assigned table for the FSM in Figure 8.24.

state-assigned table. Because there are only two states, it is sufficient to use a single state variable, y . Assuming that y is realized as a D-type flip-flop, the required next-state and output expressions are

$$Y = D = w$$

$$z = wy$$

The resulting circuit is presented in Figure 8.26 along with a timing diagram. The timing diagram corresponds to the input-output sequences in Figure 8.22.

The greater flexibility of Mealy-type FSMs often leads to simpler circuit realizations. This certainly seems to be the case in our examples that produced the circuits in Figures 8.8, 8.17, and 8.26, assuming that the design requirement is only to detect two consecutive occurrences of input w being equal to 1. We should note, however, that the circuit in Figure 8.26 is not the same in terms of output behavior as the circuits in Figures 8.8 and 8.17. The difference is a shift of one clock cycle in the output signal in Figure 8.26*b*. If we wanted to produce exactly the same output behavior using the Mealy approach, we could modify the circuit in Figure 8.26*a* by adding another flip-flop as shown in Figure 8.27. This flip-flop merely delays the output signal, Z , by one clock cycle with respect to z , as indicated in the timing diagram. By making this change, we effectively turn the Mealy-type circuit into a Moore-type circuit with output Z . Note that the circuit in Figure 8.27 is essentially the same as the circuit in Figure 8.17.

e 8.4 In Example 8.1 we considered the control circuit needed to swap the contents of two registers, implemented as a Moore-type finite state machine. The same task can be achieved using a

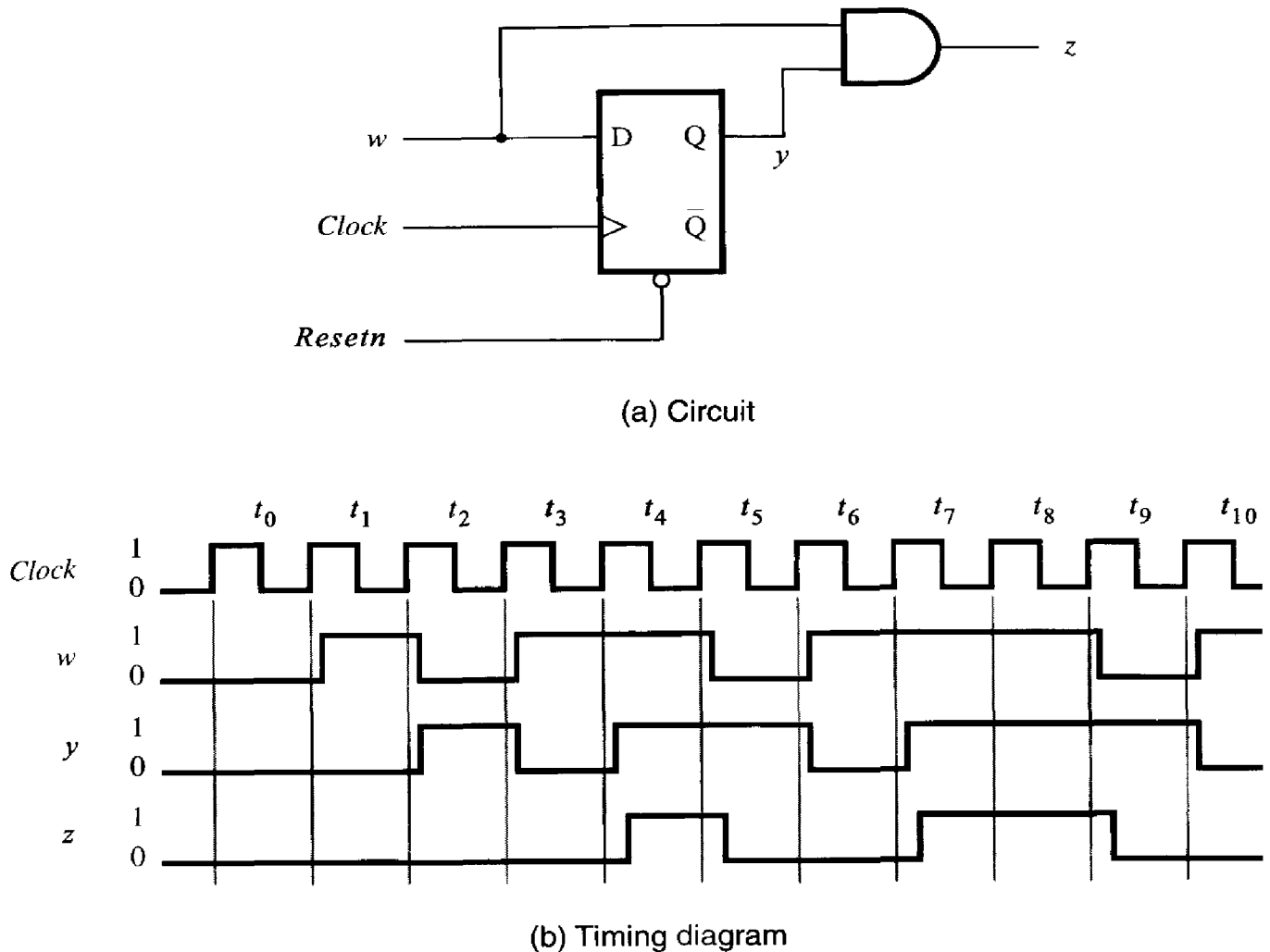


Figure 8.26 Implementation of FSM in Figure 8.25.

Mealy-type FSM, as indicated in Figure 8.28. State A still serves as the reset state. But as soon as w changes from 0 to 1, the output control signals $R2_{out}$ and $R3_{in}$ are asserted. They remain asserted until the beginning of the next clock cycle, when the circuit will leave state A and change to B. In state B the outputs $R1_{out}$ and $R2_{in}$ are asserted for both $w = 0$ and $w = 1$. Finally, in state C the swap is completed by asserting $R3_{out}$ and $R1_{in}$.

The Mealy-type realization of the control circuit requires three states. This does not necessarily imply a simpler circuit because two flip-flops are still needed to implement the state variables. The most important difference in comparison with the Moore-type realization is the timing of output signals. A circuit that implements the FSM in Figure 8.28 generates the output control signals one clock cycle sooner than the circuits derived in Examples 8.1 and 8.2.

Note also that using the FSM in Figure 8.28, the entire process of swapping the contents of R1 and R2 takes three clock cycles, starting and finishing in state A. Using the Moore-type FSM in Example 8.1, the swapping process involves four clock cycles before the circuit returns to state A.

Suppose that we wish to implement this FSM using one-hot encoding. Then three flip-flops are needed, and the states A, B, and C may be assigned the valuations $y_3y_2y_1 = 001, 010, \text{ and } 100$, respectively. Examining the state diagram in Figure 8.28, we can derive

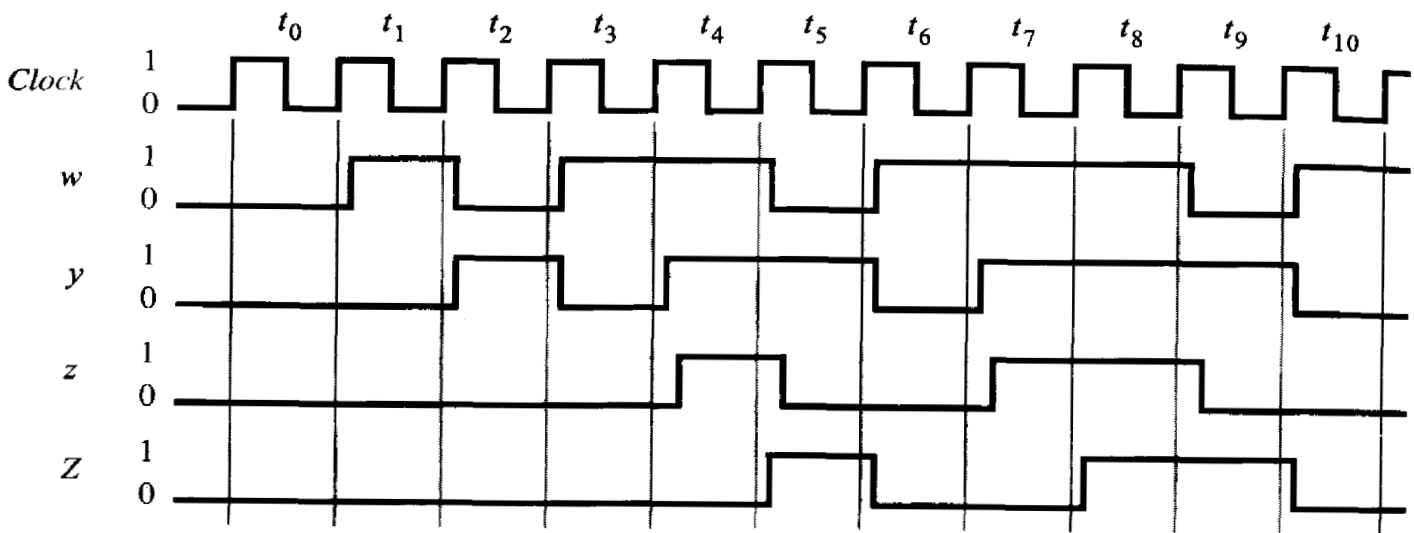
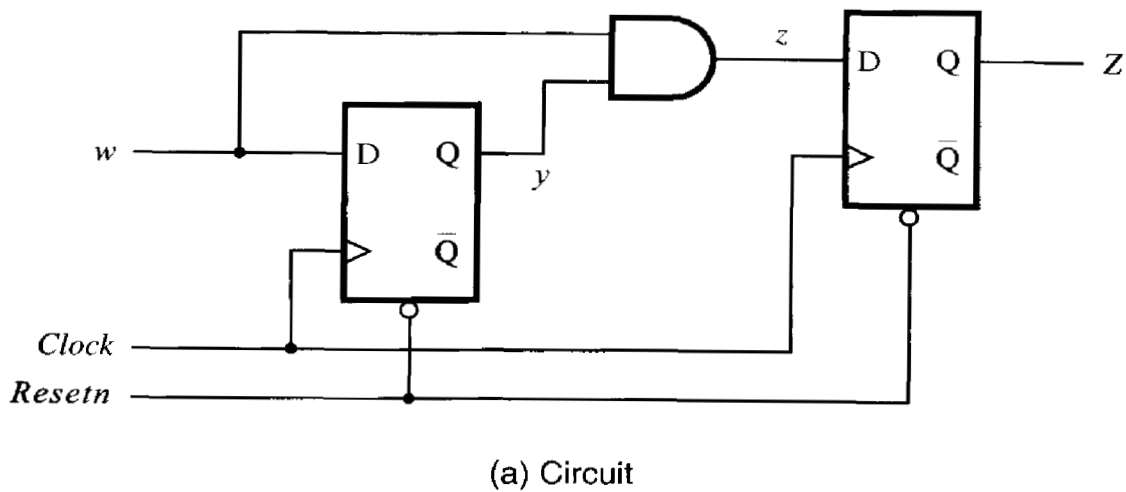


Figure 8.27 Circuit that implements the specification in Figure 8.2.

the next-state equations by inspection. The input to flip-flop y_1 should have the value 1 if the FSM is in state A and $w = 0$ or if the FSM is in state C; hence $Y_1 = \bar{w}y_1 + y_3$. Flip-flop y_2 should be set to 1 if the FSM is in state A and $w = 1$; hence $Y_2 = wy_1$. Flip-flop y_3 should be set to 1 if the present state is B; hence $Y_3 = y_2$. The derivation of the output expressions, which we leave as an exercise for the reader, can also be done by inspection. The corresponding circuit is shown in Figure 7.58, in section 7.14, where it was derived using an ad hoc approach.

The preceding discussion deals with the basic principles involved in the design of sequential circuits. Although it is essential to understand these principles, the manual approach used in the examples is difficult and tedious when large circuits are involved. We will now show how CAD tools are used to greatly simplify the design task.

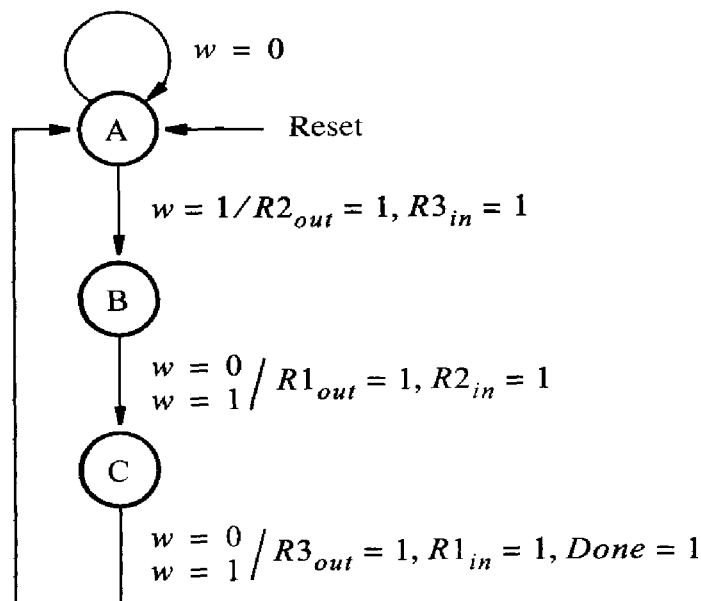


Figure 8.28 State diagram for Example 8.4.

8.4 DESIGN OF FINITE STATE MACHINES USING CAD TOOLS

Sophisticated CAD tools are available for finite state machine design, and we introduce them in this section. A rudimentary way of using CAD tools for FSM design could be as follows: The designer employs the manual techniques described previously to derive a circuit that contains flip-flops and logic gates from a state diagram. This circuit is entered into the CAD system by drawing a schematic diagram or by writing structural hardware description language (HDL) code. The designer then uses the CAD system to simulate the behavior of the circuit and uses the CAD tools to automatically implement the circuit in a chip, such as a PLD.

It is tedious to manually synthesize a circuit from a state diagram. Since CAD tools are meant to obviate this type of task, more attractive ways of utilizing CAD tools for FSM design have been developed. A better approach is to directly enter the state diagram into the CAD system and perform the entire synthesis process automatically. CAD tools support this approach in two main ways. One method is to allow the designer to draw the state diagram using a graphical tool similar to the schematic capture tool. The designer draws circles to represent states and arcs to represent state transitions and indicates the outputs that the machine should generate. Another and more popular approach is to use an HDL to write code that represents the state diagram, as described below.

Many HDLs provide constructs that allow the designer to represent a state diagram. To show how this is done, we will provide VHDL code that represents the simple machine designed manually as the first example in section 8.1. Then we will use the CAD tools to synthesize a circuit that implements the machine in a chip.

8.4.1 VHDL CODE FOR MOORE-TYPE FSMs

VHDL does not define a standard way of describing a finite state machine. Hence while adhering to the required VHDL syntax, there is more than one way to describe a given FSM. An example of VHDL code for the FSM of Figure 8.3 is given in Figure 8.29. For the convenience of discussion, the lines of code are numbered on the left side. Lines 1 to 6 declare an entity named *simple*, which has input ports *Clock*, *Resetn*, and *w*, and output port *z*. In line 7 we have used the name *Behavior* for the architecture body, but of course, any valid VHDL name could be used instead.

Line 8 introduces the TYPE keyword, which is a feature of VHDL that we have not used previously. The TYPE keyword allows us to create a user-defined signal type. The new signal type is named *State_type*, and the code specifies that a signal of this type can have three possible values: *A*, *B*, or *C*. Line 9 defines a signal named *y* that is of the *State_type* type. The *y* signal is used in the architecture body to represent the outputs of the flip-flops that implement the states in the FSM. The code does not specify the number of bits represented by *y*. Instead, it specifies that *y* can have the three symbolic values *A*, *B*, and *C*. This means that we have not specified the number of state flip-flops that should be used for the FSM. As we will see below, the VHDL compiler automatically chooses an appropriate number of state flip-flops when synthesizing a circuit to implement the machine. It also chooses the state assignment for states *A*, *B*, and *C*. Some CAD systems, such as Quartus II, assume that the first state listed in the TYPE statement (line 8) is the reset state for the machine. The state assignment that has all flip-flop outputs equal to 0 is used for this state. Later in this section, we will show how it is possible to manually specify the state encoding in the VHDL code if so desired.

Having defined a signal to represent the state flip-flops, the next step is to specify the transitions between states. Figure 8.29 gives one way to describe the state diagram. It is represented by the process in lines 11 to 37. The PROCESS statement describes the finite state machine as a sequential circuit. It is based on the approach we used to describe an edge-triggered D flip-flop in section 7.12.2. The signals used by the process are *Clock*, *Resetn*, *w*, and *y*, and the only signal modified by the process is *y*. The input signals that can cause the process to change *y* are *Clock* and *Resetn*; hence these signals appear in the sensitivity list. Note that *w* is not included in the sensitivity list because a change in the value of *w* cannot affect *y* until a change occurs in the *Clock* signal.

Lines 13 and 14 specify that the machine should enter state *A*, the reset state, if *Resetn* = 0. Since the condition for the IF statement does not depend on the clock signal, the reset is asynchronous, which is why *Resetn* is included in the sensitivity list in line 11.

When the reset signal is not asserted, the ELSIF statement in line 15 specifies that the circuit waits for the positive edge of the clock signal. Observe that the ELSIF condition is the same as the condition that we used to describe a positive-edge-triggered D flip-flop in Figure 7.39. The behavior of *y* is defined by the CASE statement in lines 16 to 35. It corresponds to the state diagram in Figure 8.3. Since the CASE statement is inside the ELSIF condition, any change in *y* can take place only as a result of a positive clock edge. In other words, the ELSIF condition implies that *y* must be implemented as the output of one or more flip-flops. Each WHEN clause in the CASE statement represents one state of the machine. For example, the WHEN clause in lines 17 to 22 describes the machine's

```

1  LIBRARY ieee ;
2  USE ieee.std_logic_1164.all ;

3  ENTITY simple IS
4      PORT ( Clock, Resetn, w      : IN   STD_LOGIC ;
5             z                      : OUT  STD_LOGIC ) ;
6  END simple ;

7  ARCHITECTURE Behavior OF simple IS
8      TYPE State_type IS (A, B, C) ;
9      SIGNAL y : State_type ;
10 BEGIN
11     PROCESS ( Resetn, Clock )
12     BEGIN
13         IF Resetn = '0' THEN
14             y <= A ;
15         ELSIF (Clock'EVENT AND Clock = '1') THEN
16             CASE y IS
17                 WHEN A =>
18                     IF w = '0' THEN
19                         y <= A ;
20                     ELSE
21                         y <= B ;
22                     END IF ;
23                 WHEN B =>
24                     IF w = '0' THEN
25                         y <= A ;
26                     ELSE
27                         y <= C ;
28                     END IF ;
29                 WHEN C =>
30                     IF w = '0' THEN
31                         y <= A ;
32                     ELSE
33                         y <= C ;
34                     END IF ;
35             END CASE ;
36         END IF ;
37     END PROCESS ;
38     z <= '1' WHEN y = C ELSE '0' ;
39 END Behavior ;

```

Figure 8.29 VHDL code for the FSM in Figure 8.3.

behavior when it is in state *A*. According to the IF statement beginning in line 18, when the FSM is in state *A*, if $w = 0$, the machine should remain in state *A*; but if $w = 1$, the machine should change to state *B*. The WHEN clauses in the CASE statement correspond exactly to the state diagram in Figure 8.3.

The final part of the state machine description appears in line 38. It specifies that if the machine is in state *C*, then the output z should be 1; otherwise, z should be 0.

8.4.2 SYNTHESIS OF VHDL CODE

To give an example of the circuit produced by a synthesis tool, we synthesised the code in Figure 8.29 for implementation in a CPLD. The synthesis resulted in two flip-flops, with inputs Y_1 and Y_2 , and outputs y_1 and y_2 . The next-state expressions generated by the synthesis tool are

$$Y_1 = w\bar{y}_1\bar{y}_2$$

$$Y_2 = wy_1 + wy_2$$

The output expression is

$$z = y_2$$

These expressions correspond to the case in Figure 8.7 when the unused state pattern $y_2y_1 = 11$ is treated as don't-cares in the Karnaugh maps for Y_1 , Y_2 , and z .

Figure 8.30 depicts a part of the FSM circuit implemented in a CPLD. To keep the figure simple, only the logic resources used for the two macrocells that implement y_1 , y_2 , and z are shown. The parts of the macrocells used for the circuit are highlighted in blue.

The w input to the circuit is shown connected to one of the interconnection wires in the CPLD. The source node in the chip that generates w is not shown. It could be either an input pin, or else w might be the output of another macrocell, assuming that the CPLD may contain other circuitry that is connected to our FSM. The *Clock* signal is assigned to a pin on the chip that is dedicated for use by clock signals. From this dedicated pin a *global wire* distributes the clock signal to all of the flip-flops in the chip. The global wire distributes the clock signal to the flip-flops such that the difference in the arrival time, or *clock skew*, of the clock signal at each flip-flop is minimized. The concept of clock skew is discussed in section 10.3. A global wire is also used for the reset signal.

The top macrocell in Figure 8.30 produces the state variable y_1 . The other macrocell generates y_2 . For signal y_1 the top macrocell produces the required product term, as shown. The other product-term wires in the macrocell are not shown in the figure, but each is set to 0 so that it does not affect the OR gate. The output of the OR gate passes through the XOR gate whose other input is 0. Although the XOR gate has no impact on this circuit's behavior, except to cause a small propagation delay, it is a part of the macrocell and cannot be avoided when implementing our circuit. The output of the XOR gate drives the flip-flop that represents y_1 . The multiplexer select input is set to 1 so that the signal y_1 is passed through to the tri-state buffer. Similar to the XOR gate, this buffer is not needed in our circuit, but since it is present in the macrocell it must be used; hence its output enable control signal is set to 1. The signal y_1 is connected to the interconnection wires in the CPLD and

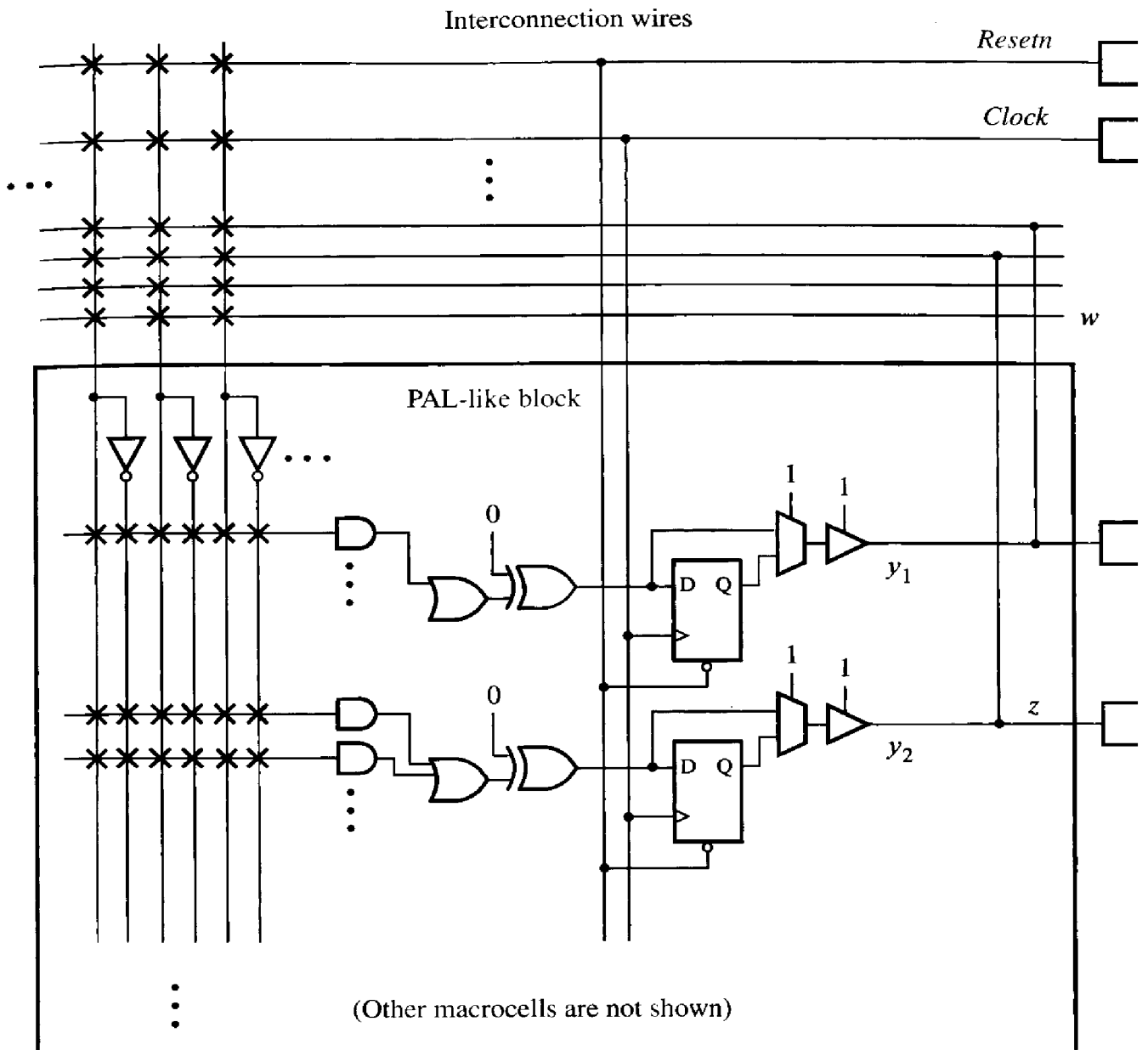


Figure 8.30 Implementation of the FSM of Figure 8.3 in a CPLD.

fed back to the macrocells. Observe that although y_1 is not an output of the circuit, it uses a signal path that is attached to one of the chip's pins. Therefore, this pin cannot be used for any other purpose. The implementation of y_2 is similar to that for y_1 , except that two product terms are involved. The signal y_2 is connected to the pin labeled z , which realizes the required output signal.

Figure 8.31 illustrates how the circuit might be assigned to the pins on a small CPLD in a 44-pin PLCC package. The figure is drawn with a part of the top of the chip package cut away, revealing a conceptual view of the two macrocells from Figure 8.30, which are indicated in blue. Our simple circuit uses only a small portion of the device.

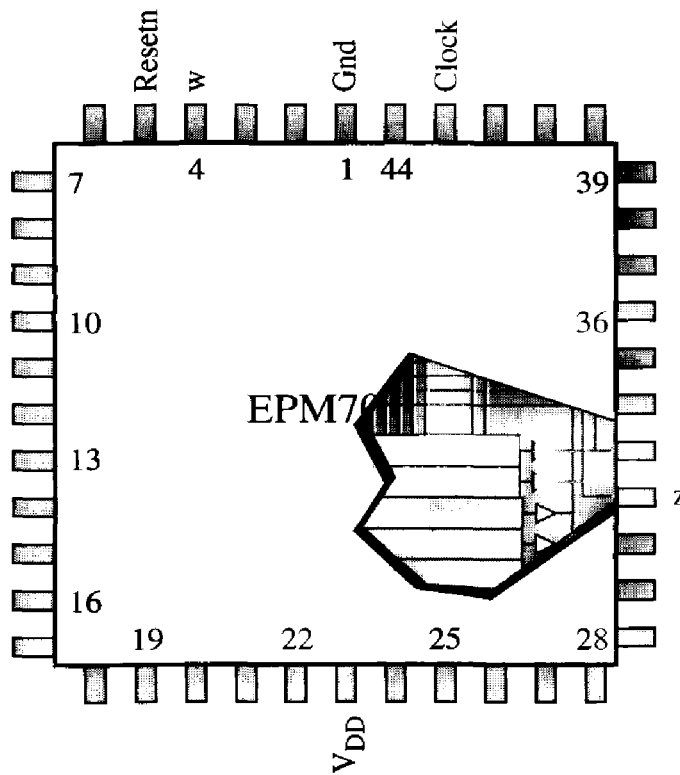


Figure 8.31 The circuit from Figure 8.30 in a small CPLD.

8.4.3 SIMULATING AND TESTING THE CIRCUIT

The behavior of the circuit implemented in the CPLD chip can be tested using timing simulation, as depicted in Figure 8.32. The figure gives the waveforms that correspond to the timing diagram in Figure 8.9, assuming that a 100 ns clock period is used. The *Resetn* signal is set to 0 at the beginning of the simulation and then set to 1. The circuit produces the output $z = 1$ for one clock cycle after w has been equal to 1 for two successive clock cycles. When w is 1 for three clock cycles, z becomes 1 for two clock cycles, as it should be. We show the changes in state by using the letters *A*, *B*, and *C* for readability purposes. (The simulator included with the book actually shows the corresponding binary codes for the states.)

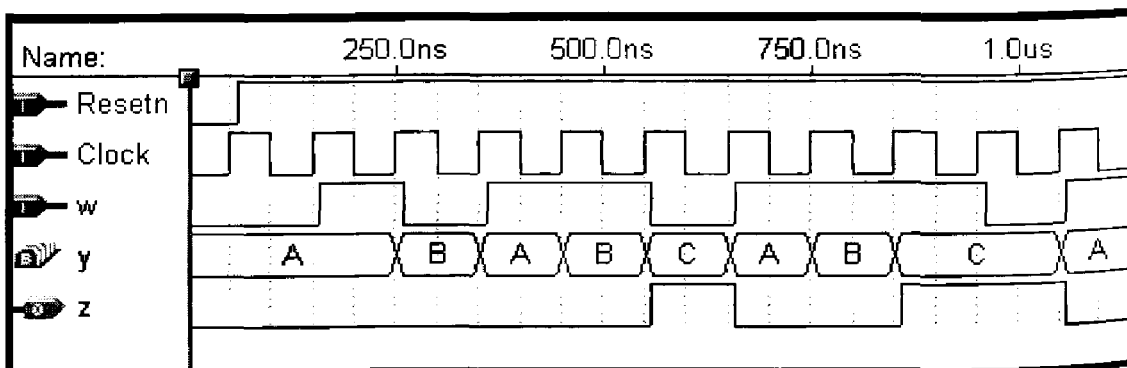


Figure 8.32 Simulation results for the circuit in Figure 8.30.

Having examined the simulation output, we should consider the question of whether we can conclude that the circuit functions correctly and satisfies all requirements. For our simple example it is not difficult to answer this question because the circuit has only one input and its behavior is straightforward. It is easy to see that the circuit works properly. However, in general it is difficult to ascertain with a high degree of confidence whether a sequential circuit will work properly for all possible input sequences, because a very large number of input patterns may be possible. For large finite state machines, the designer must think carefully about patterns of inputs that may be used in simulation for testing purposes.

8.4.4 AN ALTERNATIVE STYLE OF VHDL CODE

We mentioned earlier in this section that VHDL does not specify a standard way for writing code that represents a finite state machine. The code given in Figure 8.29 is only one possibility. A second example of code for our simple machine is given in Figure 8.33. Only the architecture body is shown because the entity declaration is the same as in Figure 8.29. Two signals are used to represent the state of the machine. The signal named *y_present* corresponds to the present state, and *y_next* corresponds to the next state. In terms of the notation used in section 8.1.3, *y_present* is the same as *y*, and *y_next* is *Y*. We cannot use *y* to denote the present state and *Y* for the next state in the code, because VHDL does not distinguish between lower- and uppercase letters. Both the *y_present* and *y_next* signals are of the *State_type* type.

The machine is specified by two separate processes. The first process describes the state table as a combinational circuit. It uses a CASE statement to give the value of *y_next* for each value of *y_present* and *w*. The code can be related to the general form of FSMs in Figure 8.5. The process corresponds to the combinational circuit on the left side of the figure.

The second process introduces flip-flops into the circuit. It stipulates that after each positive clock edge the *y_present* signal should take the value of the *y_next* signal. The process also specifies that *y_present* should take the value *A* when *Resetn* = 0, which provides the asynchronous reset.

We have shown two styles of VHDL code for our FSM example. The circuit produced by the VHDL compiler for each version of the code is likely to be somewhat different because, as the reader is well aware by this point, there are many ways to implement a given logic function. However, the circuits produced from the two versions of the code provide identical functionality.

8.4.5 SUMMARY OF DESIGN STEPS WHEN USING CAD TOOLS

In section 8.1.6 we summarized the design steps needed to derive sequential circuits manually. We have now seen that CAD tools can automatically perform much of the work. However, it is important to realize that the CAD tools have not replaced *all* manual steps. With reference to the list given in section 8.1.6, the first two steps, in which the machine specification is obtained and a state diagram is derived, still have to be done manually. Given the state diagram information as input, the CAD tools then automatically perform the tasks needed to generate a circuit with logic gates and flip-flops. In addition to the

```

ARCHITECTURE Behavior OF simple IS
  TYPE State_type IS (A, B, C) ;
  SIGNAL y_present, y_next : State_type ;
BEGIN
  PROCESS ( w, y_present )
  BEGIN
    CASE y_present IS
      WHEN A =>
        IF w = '0' THEN
          y_next <= A ;
        ELSE
          y_next <= B ;
        END IF ;
      WHEN B =>
        IF w = '0' THEN
          y_next <= A ;
        ELSE
          y_next <= C ;
        END IF ;
      WHEN C =>
        IF w = '0' THEN
          y_next <= A ;
        ELSE
          y_next <= C ;
        END IF ;
    END CASE ;
  END PROCESS ;

  PROCESS (Clock, Resetn)
  BEGIN
    IF Resetn = '0' THEN
      y_present <= A ;
    ELSIF (Clock'EVENT AND Clock = '1') THEN
      y_present <= y_next ;
    END IF ;
  END PROCESS ;

  z <= '1' WHEN y_present = C ELSE '0' ;
END Behavior ;

```

Figure 8.33 Alternative style of VHDL code for the FSM in Figure 8.3.

design steps given in section 8.1.6, we should add the testing and simulation stage. We will defer detailed discussion of this issue until Chapter 11.

8.4.6 SPECIFYING THE STATE ASSIGNMENT IN VHDL CODE

In section 8.2 we saw that the state assignment may have an impact on the complexity of the designed circuit. An obvious objective of the state-assignment process is to minimize the cost of implementation. The cost function that should be optimized may be simply the number of gates and flip-flops. But it could also be based on other considerations that may be representative of the structure of PLD chips used to implement the design. For example, the CAD software may try to find state encodings that minimize the total number of AND terms needed in the resulting circuit when the target chip is a CPLD.

In VHDL code it is possible to specify the state assignment that should be used, but there is no standardized way of doing so. Hence while adhering to VHDL syntax, each CAD system permits a slightly different method of specifying the state assignment. The Quartus II system recommends that state assignment be done by using the attribute feature of VHDL. An *attribute* refers to some type of information about an object in VHDL code. All signals automatically have a number of associated *predefined* attributes. An example is the EVENT attribute that we use to specify a clock edge, as in Clock'EVENT.

In addition to the predefined attributes, it is possible to create a user-defined attribute. The *user-defined* attribute can be used to associate some desired type of information with an object in VHDL code. In Quartus II manual state assignment can be done by creating a user-defined attribute associated with the State_type type. This is illustrated in Figure 8.34, which shows the first few lines of the architecture from Figure 8.33 with the addition of a user-defined attribute. We first define the new attribute called ENUM_ENCODING, which has the type STRING. The next line associates ENUM_ENCODING with the State_type type and specifies that the attribute has the value "00 01 11". When translating the VHDL code, the Quartus II compiler uses the value of ENUM_ENCODING to make the state assignment $A = 00$, $B = 01$, and $C = 11$.

The ENUM_ENCODING attribute is specific to Quartus II. Hence we may not be able to use this method of state assignment in other CAD systems. A different way of giving the state assignment, which will work with any CAD system, is shown in Figure 8.35. Instead

```

ARCHITECTURE Behavior OF simple IS
  TYPE State_TYPE IS (A, B, C) ;
  ATTRIBUTE ENUM_ENCODING                               : STRING ;
  ATTRIBUTE ENUM_ENCODING OF State_type                : TYPE IS "00 01 11" ;
  SIGNAL y_present, y_next                             : State_type ;
BEGIN
  .
  .
  .

```

Figure 8.34 A user-defined attribute for manual state assignment.

```

LIBRARY ieee ;
USE ieee.std_logic_1164.all ;

ENTITY simple IS
    PORT ( Clock, Resetn, w : IN  STD_LOGIC ;
          z : OUT STD_LOGIC ) ;
END simple ;

ARCHITECTURE Behavior OF simple IS
    SIGNAL y_present, y_next : STD_LOGIC_VECTOR(1 DOWNTO 0);
    CONSTANT A : STD_LOGIC_VECTOR(1 DOWNTO 0) := "00" ;
    CONSTANT B : STD_LOGIC_VECTOR(1 DOWNTO 0) := "01" ;
    CONSTANT C : STD_LOGIC_VECTOR(1 DOWNTO 0) := "11" ;
BEGIN
    PROCESS ( w, y_present )
    BEGIN
        CASE y_present IS
            WHEN A =>
                IF w = '0' THEN y_next <= A ;
                ELSE y_next <= B ;
                END IF ;
            WHEN B =>
                IF w = '0' THEN y_next <= A ;
                ELSE y_next <= C ;
                END IF ;
            WHEN C =>
                IF w = '0' THEN y_next <= A ;
                ELSE y_next <= C ;
                END IF ;
            WHEN OTHERS =>
                y_next <= A ;
        END CASE ;
    END PROCESS ;
    PROCESS ( Clock, Resetn )
    BEGIN
        IF Resetn = '0' THEN
            y_present <= A ;
        ELSIF (Clock'EVENT AND Clock = '1') THEN
            y_present <= y_next ;
        END IF ;
    END PROCESS ;
    z <= '1' WHEN y_present = C ELSE '0' ;
END Behavior ;

```

Figure 8.35 Using constants for manual state assignment.

of using the `State_type` type as in previous examples, `y_present` and `y_next` are defined as two-bit `STD_LOGIC_VECTOR` signals. Each of the symbolic names for the three states, `A`, `B`, and `C`, are defined as constants, with the value of each constant corresponding to the desired encoding. Note that the syntax for assigning a value to a constant uses the `:=` assignment operator, rather than the `<=` operator that is used for signals. When the code is translated, the VHDL compiler replaces the symbolic names `A`, `B`, and `C` with their assigned constant values.

The CASE statement that defines the state diagram is identical to that in Figure 8.33 with one exception. VHDL requires that the CASE statement for `y_present` include a WHEN clause for all possible values of `y_present`. In Figure 8.33 `y_present` can have only the three values `A`, `B`, and `C` because it has the `State_type` type. But since `y_present` is a `STD_LOGIC_VECTOR` signal in Figure 8.35, we must provide a WHEN OTHERS clause, as shown. In practice, the machine should never enter the unused state, which corresponds to `y_present = 10`. As we said earlier, there is a slight possibility that this could occur due to erroneous behavior of the circuit. As a pragmatic choice, we have specified that the FSM should change back to the reset state if such an error occurs.

8.4.7 SPECIFICATION OF MEALY FSMs USING VHDL

A Mealy-type FSM can be specified in a similar manner as a Moore-type FSM. Figure 8.36 gives complete VHDL code for the FSM in Figure 8.23. The state transitions are described in the same way as in our original VHDL example in Figure 8.29. The signal `y` represents the state flip-flops, and `State_type` specifies that `y` can have the values `A` and `B`. Compared to the code in Figure 8.29, the major difference in the case of a Mealy-type FSM is the way in which the code for the output is written. In Figure 8.36 the output `z` is defined using a CASE statement. It states that when the FSM is in state `A`, `z` should be 0, but when in state `B`, `z` should take the value of `w`. This CASE statement properly describes the logic needed for `z`, but it may not be obvious why we have used a second CASE statement in the code, rather than specify the value of `z` inside the CASE statement that defines the state transitions. The reason is that the CASE statement for the state transitions is nested inside the IF statement that waits for a clock edge to occur. Hence if we placed the code for `z` inside this CASE statement, then the value of `z` could change only as a result of a clock edge. This does not meet the requirements of the Mealy-type FSM, because the value of `z` must depend not only on the state of the machine but also on the input `w`.

Implementing the FSM specified in Figure 8.36 in a CPLD chip yields the same equations as we derived manually in section 8.3. Simulation results for the synthesized circuit appear in Figure 8.37. The input waveform for `w` is the same as the one we used for the Moore-type machine in Figure 8.32. Our Mealy-type machine behaves correctly, with `z` becoming 1 just after the start of the second consecutive clock cycle in which `w` is 1.

In the simulation results we have given in this section, all changes in the input `w` occur immediately following a positive clock edge. This is based on the assumption stated in section 8.1.5 that in a real circuit `w` would be synchronized with respect to the clock that controls the FSM. In Figure 8.38 we illustrate a problem that may arise if `w` does not meet this specification. In this case we have assumed that the changes in `w` take place at the

```

LIBRARY ieee ;
USE ieee.std_logic_1164.all ;

ENTITY mealy IS
    PORT ( Clock, Resetn, w : IN  STD_LOGIC ;
          z : OUT STD_LOGIC ) ;
END mealy ;

ARCHITECTURE Behavior OF mealy IS
    TYPE State_type IS (A, B) ;
    SIGNAL y : State_type ;
BEGIN
    PROCESS ( Resetn, Clock )
    BEGIN
        IF Resetn = '0' THEN
            y <= A ;
        ELSIF (Clock'EVENT AND Clock = '1') THEN
            CASE y IS
                WHEN A =>
                    IF w = '0' THEN y <= A ;
                    ELSE y <= B ;
                    END IF ;
                WHEN B =>
                    IF w = '0' THEN y <= A ;
                    ELSE y <= B ;
                    END IF ;
            END CASE ;
        END IF ;
    END PROCESS ;

    PROCESS ( y, w )
    BEGIN
        CASE y IS
            WHEN A =>
                z <= '0' ;
            WHEN B =>
                z <= w ;
        END CASE ;
    END PROCESS ;
END Behavior ;

```

Figure 8.36 VHDL code for the Mealy machine of Figure 8.23.

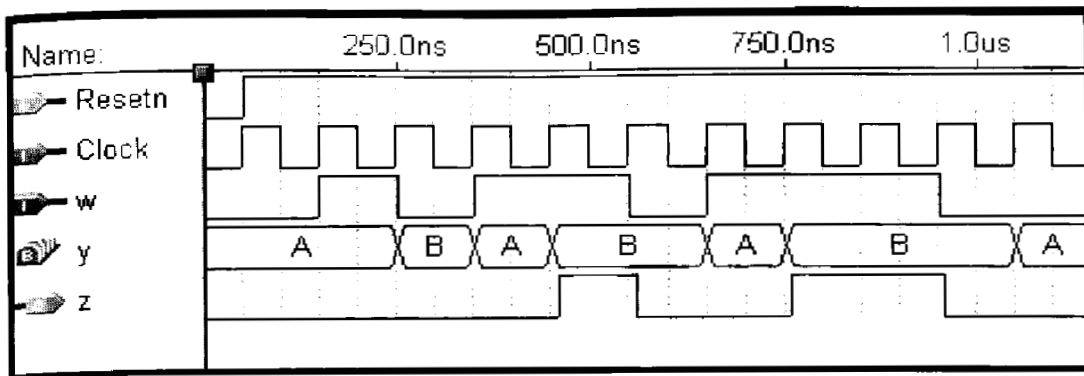


Figure 8.37 Simulation results for the Mealy machine.

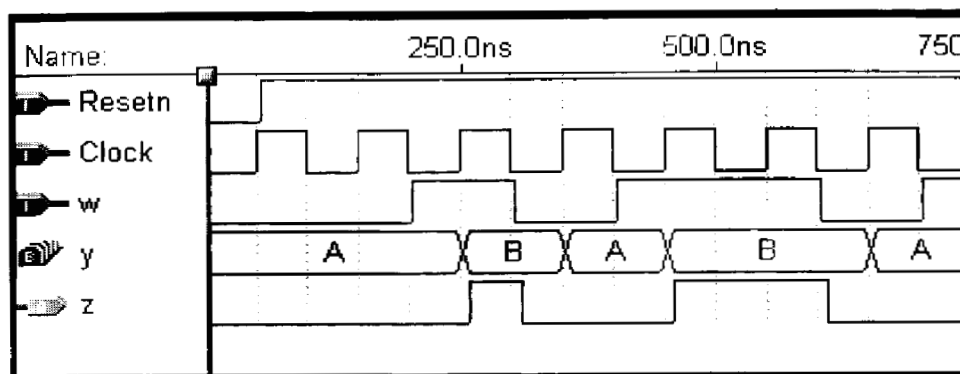


Figure 8.38 Potential problem with asynchronous inputs to a Mealy FSM.

negative edge of the clock, rather than at the positive edge when the FSM changes its state. The first pulse on the w input is 100 ns long. This should not cause the output z to become equal to 1. But the circuit does not behave in this manner. After the signal w becomes equal to 1, the first positive edge of the clock causes the FSM to change from state A to state B . As soon as the circuit reaches the state B , the w input is still equal to 1 for another 50 ns, which causes z to go to 1. When w returns to 0, the z signal does likewise. Thus an erroneous 50-ns pulse is generated on the output z .

We should pursue the consequences of this problem a little further. If z is used to drive another circuit that is not controlled by the same clock, then the extraneous pulse is likely to cause big problems. But if z is used as an input to a circuit (perhaps another FSM) that is controlled by the same clock, then the 50-ns pulse will be ignored by this circuit if $z = 0$ before the next positive edge of the clock (accounting for the setup time).

8.5 SERIAL ADDER EXAMPLE

We will now present another simple example that illustrates the complete design process. In Chapter 5 we discussed the addition of binary numbers in detail. We explained several

schemes that can be used to add two n -bit numbers in parallel, ranging from carry-ripple to carry-lookahead adders. In these schemes the speed of the adder unit is an important design parameter. Fast adders are more complex and thus more expensive. If speed is not of great importance, then a cost-effective option is to use a *serial adder*, in which bits are added a pair at a time.

8.5.1 MEALY-TYPE FSM FOR SERIAL ADDER

Let $A = a_{n-1}a_{n-2} \dots a_0$ and $B = b_{n-1}b_{n-2} \dots b_0$ be two unsigned numbers that have to be added to produce $Sum = s_{n-1}s_{n-2} \dots s_0$. Our task is to design a circuit that will perform serial addition, dealing with a pair of bits in one clock cycle. The process starts by adding bits a_0 and b_0 . In the next clock cycle, bits a_1 and b_1 are added, including a possible carry from the bit-position 0, and so on. Figure 8.39 shows a block diagram of a possible implementation. It includes three shift registers that are used to hold A , B , and Sum as the computation proceeds. Assuming that the input shift registers have parallel-load capability, as depicted in Figure 7.19, the addition task begins by loading the values of A and B into these registers. Then in each clock cycle, a pair of bits is added by the adder FSM, and at the end of the cycle the resulting sum bit is shifted into the Sum register. We will use positive-edge-triggered flip-flops in which case all changes take place soon after the positive edge of the clock, depending on the propagation delays within the various flip-flops. At this time the contents of all three shift registers are shifted to the right; this shifts the existing sum bit into Sum , and it presents the next pair of input bits a_i and b_i to the adder FSM.

Now we are ready to design the required FSM. This cannot be a combinational circuit because different actions will have to be taken, depending on the value of the carry from the previous bit position. Hence two states are needed: let G and H denote the states where the carry-in values are 0 and 1, respectively. Figure 8.40 gives a suitable state diagram, defined as a Mealy model. The output value, s , depends on both the state and the present value of the inputs a and b . Each transition is labeled using the notation ab/s , which indicates the value of s for a given valuation ab . In state G the input valuation 00 will produce $s = 0$, and the FSM will remain in the same state. For input valuations 01 and 10, the output will be $s = 1$, and the FSM will remain in G . But for 11, $s = 0$ is generated, and the machine

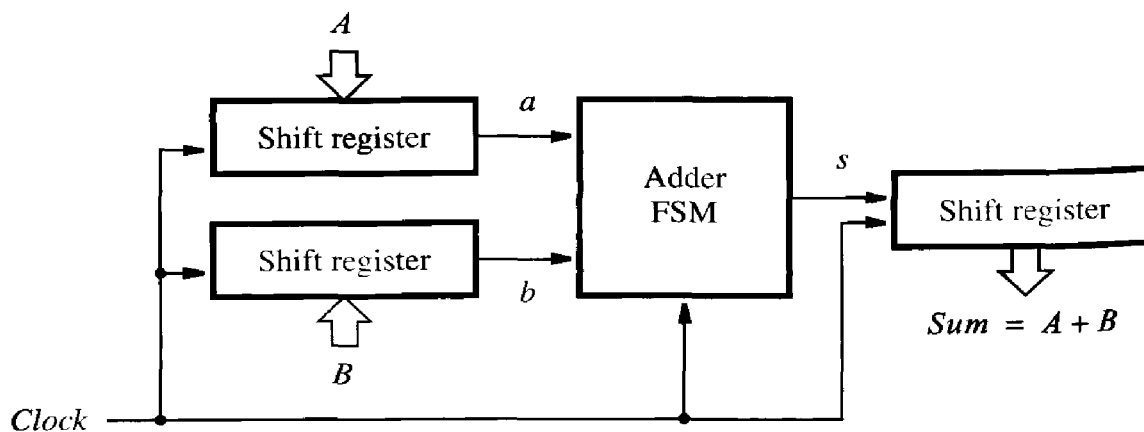


Figure 8.39 Block diagram for the serial adder.

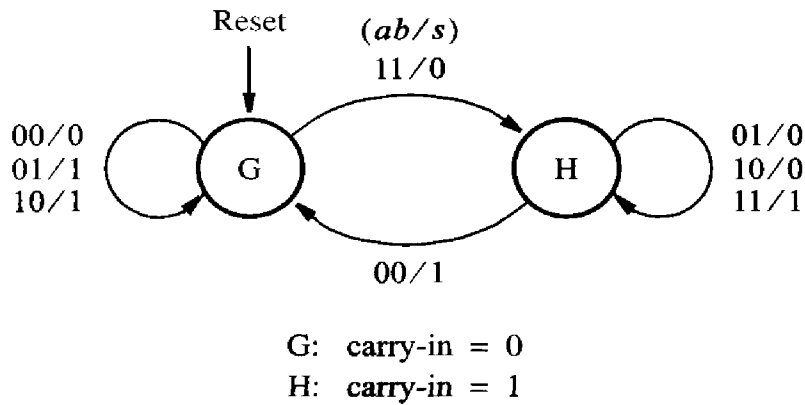


Figure 8.40 State diagram for the serial adder FSM.

moves to state *H*. In state *H* valuations 01 and 10 cause $s = 0$, while 11 causes $s = 1$. In all three of these cases, the machine remains in *H*. However, when the valuation 00 occurs, the output of 1 is produced and a change into state *G* takes place.

The corresponding state table is presented in Figure 8.41. A single flip-flop is needed to represent the two states. The state assignment can be done as indicated in Figure 8.42. This assignment leads to the following next-state and output equations

$$Y = ab + ay + by$$

$$s = a \oplus b \oplus y$$

Present state	Next state				Output <i>s</i>			
	<i>ab</i> = 00	01	10	11	00	01	10	11
G	G	G	G	H	0	1	1	0
H	G	H	H	H	1	0	0	1

Figure 8.41 State table for the serial adder FSM.

Present state	Next state				Output			
	<i>ab</i> = 00	01	10	11	00	01	10	11
<i>y</i>	<i>Y</i>				<i>s</i>			
0	0	0	0	1	0	1	1	0
1	0	1	1	1	1	0	0	1

Figure 8.42 State-assigned table for Figure 8.41.

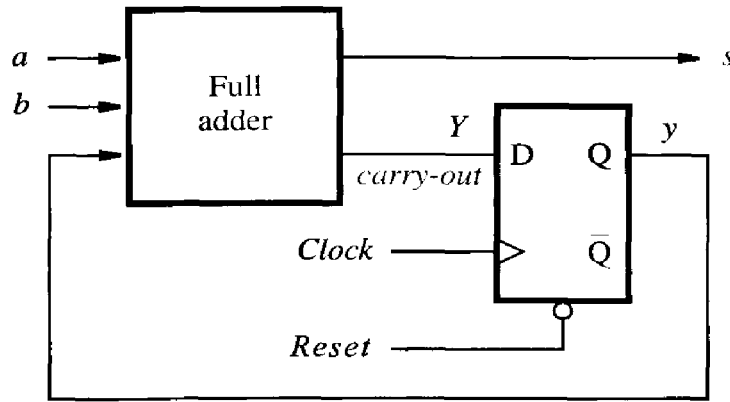


Figure 8.43 Circuit for the adder FSM in Figure 8.39.

Comparing these expressions with those for the full-adder in section 5.2, it is obvious that y is the carry-in, Y is the carry-out, and s is the sum of the full-adder. Therefore, the adder FSM box in Figure 8.39 consists of the circuit shown in Figure 8.43. The flip-flop can be cleared by the *Reset* signal at the start of the addition operation.

The serial adder is a simple circuit that can be used to add numbers of any length. The structure in Figure 8.39 is limited in length only by the size of the shift registers.

8.5.2 MOORE-TYPE FSM FOR SERIAL ADDER

In the preceding example we saw that a Mealy-type FSM nicely meets the requirement for implementing the serial adder. Now we will try to achieve the same objective using a Moore-type FSM. A good starting point is the state diagram in Figure 8.40. In a Moore-type FSM, the output must depend only on the state of the machine. Since in both states, G and H , it is possible to produce two different outputs depending on the valuations of the inputs a and b , a Moore-type FSM will need more than two states. We can derive a suitable state diagram by splitting both G and H into two states. Instead of G , we will use G_0 and G_1 to denote the fact that the carry is 0 and that the sum is either 0 or 1, respectively. Similarly, instead of H , we will use H_0 and H_1 . Then the information in Figure 8.40 can be mapped into the Moore-type state diagram in Figure 8.44 in a straightforward manner.

The corresponding state table is given in Figure 8.45 and the state-assigned table in Figure 8.46. The next-state and output expressions are

$$\begin{aligned}
 Y_1 &= a \oplus b \oplus y_2 \\
 Y_2 &= ab + ay_2 + by_2 \\
 s &= y_1
 \end{aligned}$$

The expressions for Y_1 and Y_2 correspond to the sum and carry-out expressions in the full-adder circuit. The FSM is implemented as shown in Figure 8.47. It is interesting to observe that this circuit is very similar to the circuit in Figure 8.43. The only difference is that in the Moore-type circuit, the output signal, s , is passed through an extra flip-flop and thus delayed by one clock cycle with respect to the Mealy-type sequential circuit. Recall

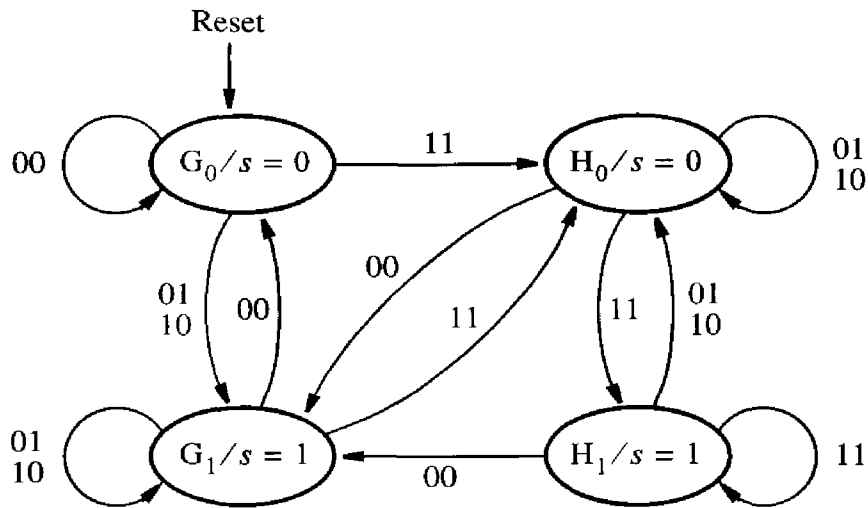


Figure 8.44 State diagram for the Moore-type serial adder FSM.

Present state	Next state				Output s
	$ab = 00$	01	10	11	
G_0	G_0	G_1	G_1	H_0	0
G_1	G_0	G_1	G_1	H_0	1
H_0	G_1	H_0	H_0	H_1	0
H_1	G_1	H_0	H_0	H_1	1

Figure 8.45 State table for the Moore-type serial adder FSM.

Present state y_2y_1	Next state Y_2Y_1				Output s
	$ab = 00$	01	10	11	
00	00	01	01	10	0
01	00	01	01	10	1
10	01	10	10	11	0
11	01	10	10	11	1

Figure 8.46 State-assigned table for Figure 8.45.

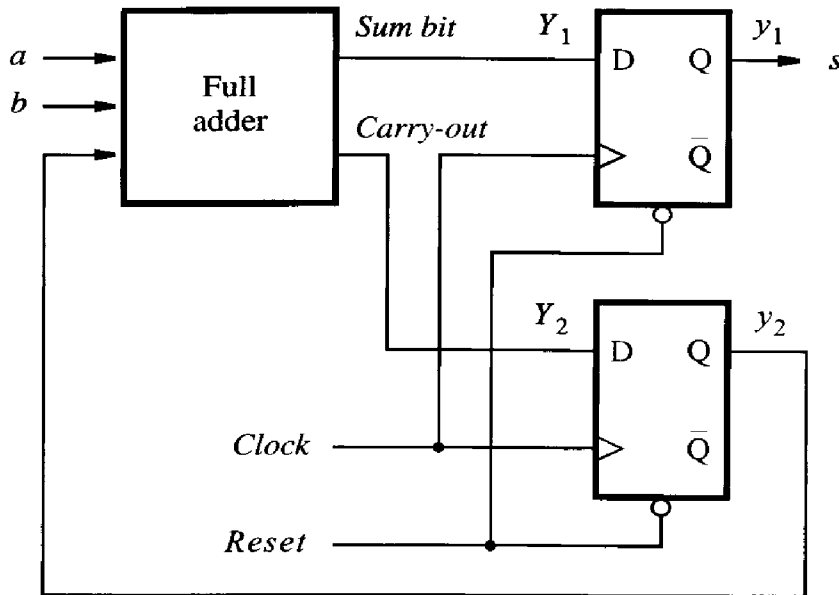


Figure 8.47 Circuit for the Moore-type serial adder FSM.

that we observed the same difference in our previous example, as depicted in Figures 8.26 and 8.27.

A key difference between the Mealy and Moore types of FSMs is that in the former a change in inputs reflects itself immediately in the outputs, while in the latter the outputs do not change until the change in inputs forces the machine into a new state, which takes place one clock cycle later. We encourage the reader to draw the timing diagrams for the circuits in Figures 8.43 and 8.47, which will exemplify further this key difference between the two types of FSMs.

8.5.3 VHDL CODE FOR THE SERIAL ADDER

The serial adder can be described in VHDL by writing code for the shift registers and the adder FSM. We will first design the shift register and then use it as a subcircuit in the serial adder.

Shift Register Subcircuit

Figure 7.51 gives VHDL code for an n -bit shift register. In the serial adder it is beneficial to have the ability to prevent the shift register contents from changing when an active clock edge occurs. Figure 8.48 gives the code for a shift register named *shiftrne*, which has an enable input, E . When $E = 1$, the shift register behaves in the same way as the one in Figure 7.51. Setting $E = 0$ prevents the contents of the shift register from changing. The E input is usually called the *enable* input. It is useful for many types of circuits, as we will see in Chapter 10.

```

LIBRARY ieee ;
USE ieee.std_logic_1164.all ;

-- left-to-right shift register with parallel load and enable
ENTITY shiftreg IS
    GENERIC ( N : INTEGER := 4 ) ;
    PORT ( R      : IN          STD_LOGIC_VECTOR(N-1 DOWNT0 0) ;
          L, E, w : IN          STD_LOGIC ;
          Clock   : IN          STD_LOGIC ;
          Q       : BUFFER STD_LOGIC_VECTOR(N-1 DOWNT0 0) ) ;
END shiftreg ;

ARCHITECTURE Behavior OF shiftreg IS
BEGIN
    PROCESS
    BEGIN
        WAIT UNTIL Clock'EVENT AND Clock = '1' ;
        IF E = '1' THEN
            IF L = '1' THEN
                Q <= R ;
            ELSE
                Genbits: FOR i IN 0 TO N-2 LOOP
                    Q(i) <= Q(i+1);
                END LOOP ;
                Q(N-1) <= w ;
            END IF ;
        END IF ;
    END PROCESS ;
END Behavior ;

```

Figure 8.48 Code for a left-to-right shift register with an enable input.

Complete Code

The code for the serial adder is shown in Figure 8.49. It instantiates three shift registers for the inputs *A* and *B* and the output *Sum*. The shift registers are loaded with parallel data when the circuit is reset. The state diagram for the adder FSM is described by a single process, using the style of code in Figure 8.29. In addition to the components of the serial adder shown in Figure 8.39, the VHDL code includes a down-counter to determine when the adder should be halted because all *n* bits of the required sum are present in the output shift register. When the circuit is reset, the counter is loaded with the number of bits in the serial adder, *n*. The counter counts down to 0, and then stops and disables further changes in the output shift register.

```

1  LIBRARY ieee ;
2  USE ieee.std_logic_1164.all ;

3  ENTITY serial IS
4      GENERIC ( length : INTEGER := 8 ) ;
5      PORT ( Clock : IN          STD_LOGIC ;
6            Reset  : IN          STD_LOGIC ;
7            A, B   : IN          STD_LOGIC_VECTOR(length-1 DOWNT0) ;
8            Sum   : BUFFER STD_LOGIC_VECTOR(length-1 DOWNT0) );
9  END serial ;

10 ARCHITECTURE Behavior OF serial IS
11     COMPONENT shiftrne
12         GENERIC ( N : INTEGER := 4 ) ;
13         PORT( R      : IN          STD_LOGIC_VECTOR(N-1 DOWNT0) ;
14              L, E, w : IN          STD_LOGIC ;
15              Clock  : IN          STD_LOGIC ;
16              Q      : BUFFER STD_LOGIC_VECTOR(N-1 DOWNT0) );
17     END COMPONENT ;

18     SIGNAL QA, QB, Null_in : STD_LOGIC_VECTOR(length-1 DOWNT0) ;
19     SIGNAL s, Low, High, Run : STD_LOGIC ;
20     SIGNAL Count : INTEGER RANGE 0 TO length ;
21     TYPE State_type IS (G, H) ;
22     SIGNAL y : State_type ;

    ...continued in Part b

```

Figure 8.49 VHDL code for the serial adder (Part *a*).

The lines of code in Figure 8.49 are numbered on the left for reference. The `GENERIC` parameter *length* sets the number of bits in the serial adder. Since the value of *length* is equal to 8, the code represents a serial adder for eight-bit numbers. By changing the value of *length*, the same code can be used to synthesize a serial adder circuit for any number of bits.

Lines 18 to 22 define several signals used in the code. The signals *QA* and *QB* correspond to the parallel outputs of the shift registers with inputs *A* and *B* in Figure 8.39. The signal named *s* represents the output of the adder FSM. The other signals will be described along with the lines of code where they are used.

In Figure 8.39 the shift registers for inputs *A* and *B* do not use a serial input or an enable input. However, the *shiftrne* component, which is used for all three shift registers, includes these ports and so signals must be connected to them. The enable input for the two shift registers can be connected to logic value 1. The value shifted into the serial input does not matter, so it can be connected to either 1 or 0. In lines 26 and 28, the enable input

```

23 BEGIN
24     Low <= '0' ; High <= '1' ;
25     ShiftA: shiftrne GENERIC MAP (N => length)
26         PORT MAP ( A, Reset, High, Low, Clock, QA ) ;
27     ShiftB: shiftrne GENERIC MAP (N => length)
28         PORT MAP ( B, Reset, High, Low, Clock, QB ) ;
29     AdderFSM: PROCESS ( Reset, Clock )
30     BEGIN
31         IF Reset = '1' THEN
32             y <= G ;
33         ELSIF Clock'EVENT AND Clock = '1' THEN
34             CASE y IS
35                 WHEN G =>
36                     IF QA(0) = '1' AND QB(0) = '1' THEN y <= H ;
37                     ELSE y <= G ;
38                     END IF ;
39                 WHEN H =>
40                     IF QA(0) = '0' AND QB(0) = '0' THEN y <= G ;
41                     ELSE y <= H ;
42                     END IF ;
43             END CASE ;
44         END IF ;
45     END PROCESS AdderFSM ;

46     WITH y SELECT
47         s <= QA(0) XOR QB(0) WHEN G,
48         NOT ( QA(0) XOR QB(0) ) WHEN H ;
49     Null_in <= (OTHERS => '0') ;
50     ShiftSum: shiftrne GENERIC MAP ( N => length )
51         PORT MAP ( Null_in, Reset, Run, s, Clock, Sum ) ;
52     Stop: PROCESS
53     BEGIN
54         WAIT UNTIL (Clock'EVENT AND Clock = '1') ;
55         IF Reset = '1' THEN
56             Count <= length ;
57         ELSIF Run = '1' THEN
58             Count <= Count - 1 ;
59         END IF ;
60     END PROCESS ;
61     Run <= '0' WHEN Count = 0 ELSE '1' ; -- stops counter and ShiftSum
62 END Behavior ;

```

Figure 8.49 VHDL code for the serial adder (Part *b*).

is connected to the signal named *High*, which is set to 1, and the serial inputs are tied to the signal *Low*, which is 0. These signals are needed because the VHDL syntax does not allow the constants 0 or 1 to be attached to the ports of a component. The n parameter for each shift register is set to *length* using GENERIC MAP. If the GENERIC MAP were not provided, then the default value of $N = 4$ given in the code in Figure 8.48 would be used. The shift registers are loaded in parallel by the *Reset* signal. We have chosen to use an active-high reset signal for the circuit.

The adder FSM is specified in lines 29 to 45, which describes the state transitions in Figure 8.41. Lines 46 to 48 define the output, s , of the adder FSM. This statement results from observing in Figure 8.41 that when the FSM is in state G , the sum is $s = a \oplus b$, and when in state H , the sum is $s = \overline{a \oplus b}$.

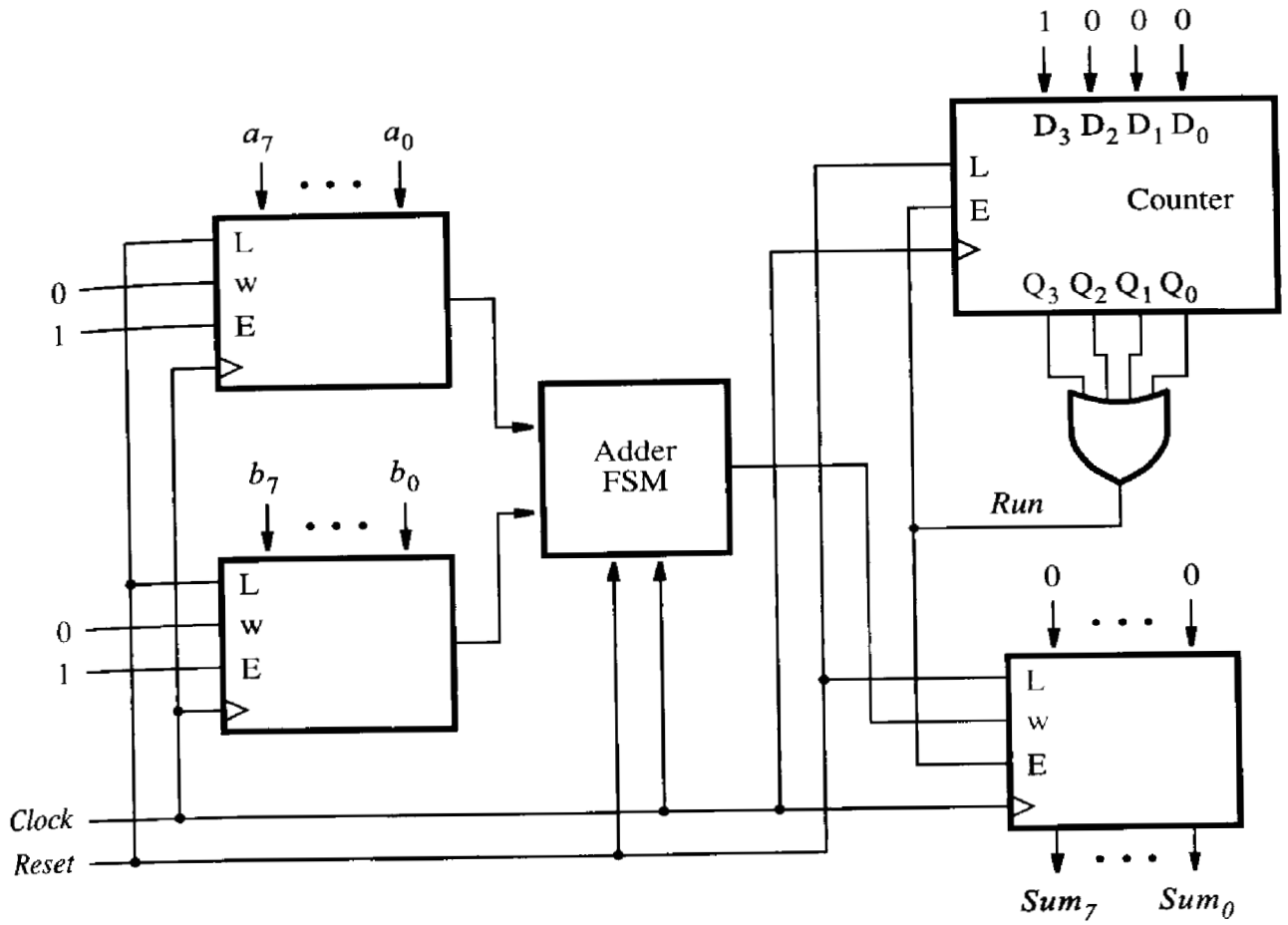
The output shift register does not need a parallel data input. But because the *shiftrne* component has this port, a signal must be connected to it. The signal named *Null_in* is used for this purpose. Line 49 sets *Null_in*, which is a STD_LOGIC_VECTOR signal, to all 0s. The number of bits in this signal is defined by the *length* constant. Hence we cannot use the normal VHDL syntax, namely, a string of 0s inside double quotes, to set all of its bits to 0. A solution to this problem is to use the syntax (OTHERS => '0'), which we explained in the discussion regarding Figure 7.46. The enable input for the shift register is named *Run*. It is derived from the outputs of the down-counter described in lines 52 to 60. When *Reset* = 1, *Count* is initialized to the value of *length*. Then as long as *Run* = 1, *Count* is decremented in each clock cycle. In line 61 *Run* is set to 0 when *Count* is equal to 0. Note that no quotes are used in the condition *Count* = 0, because the 0 without quotes has the integer type.

Synthesis and Simulation of the VHDL Code

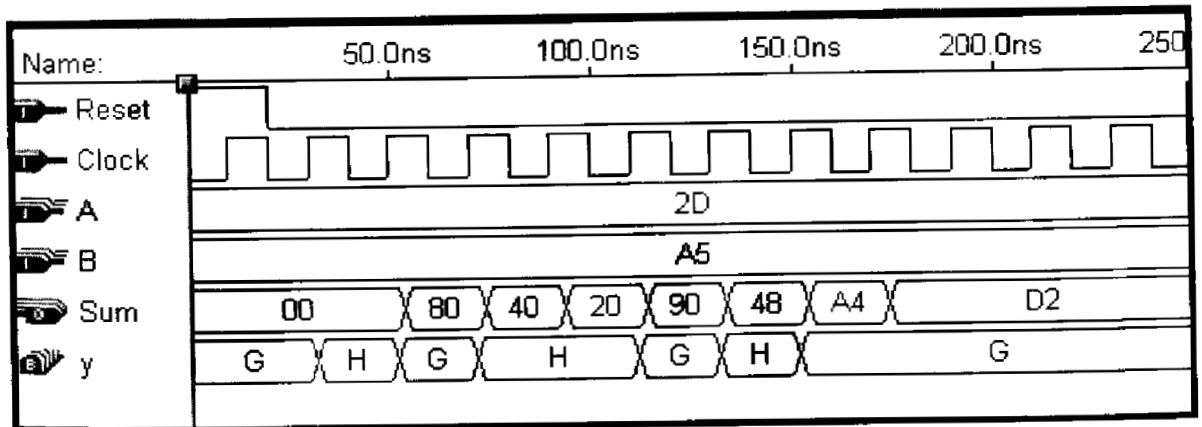
The results of synthesizing a circuit from the code in Figure 8.49 are illustrated in Figure 8.50a. The outputs of the counter are ORed to provide the *Run* signal, which enables clocking of both the output shift register and the counter. A sample of a timing simulation for the circuit is shown in Figure 8.50b. The circuit is first reset, resulting in the values of A and B being loaded into the input shift registers, and the value of *length* (8) loaded into the down-counter. After each clock cycle one pair of bits of the input numbers is added by the adder FSM, and the sum bit is shifted into the output shift register. After eight clock cycles the output shift register contains the correct sum, and shifting is halted by the *Run* signal becoming equal to 0.

8.6 STATE MINIMIZATION

Our introductory examples of finite state machines were so simple that it was easy to see that the number of states that we used was the minimum possible to perform the required function. When a designer has to design a more complex FSM, it is likely that the initial attempt will result in a machine that has more states than is actually required. Minimizing the number of states is of interest because fewer flips-flops may be needed to represent the states and the complexity of the combinational circuit needed in the FSM may be reduced.



(a) Circuit



(b) Simulation Results

Figure 8.50 Synthesized serial adder.

If the number of states in an FSM can be reduced, then some states in the original design must be equivalent to other states in their contribution to the overall behavior of the FSM. We can express this more formally in the following definition.

Definition 8.1 – Two states S_i and S_j are said to be equivalent if and only if for every possible input sequence, the same output sequence will be produced regardless of whether S_i or S_j is the initial state.

It is possible to define a minimization procedure that searches for any states that are equivalent. Such a procedure is very tedious to perform manually, but it can be automated for use in CAD tools. We will not pursue it here, because of its tediousness. However, to provide some appreciation of the impact of state minimization, we will present an alternative approach, which is much more efficient but not quite as broad in scope.

Instead of trying to show that some states in a given FSM are equivalent, it is often easier to show that some states are definitely **not** equivalent. This idea can be exploited to define a simple minimization procedure.

8.6.1 PARTITIONING MINIMIZATION PROCEDURE

Suppose that a state machine has a single input w . Then if the input signal $w = 0$ is applied to this machine in state S_i and the result is that the machine moves to state S_u , we will say that S_u is a *0-successor* of S_i . Similarly, if $w = 1$ is applied in the state S_i and it causes the machine to move to state S_v , we will say that S_v is a *1-successor* of S_i . In general, we will refer to the successors of S_i as its k -successors. When the FSM has only one input, k can be either 0 or 1. But if there are multiple inputs to the FSM, then k represents the set of all possible combinations (valuations) of the inputs.

From Definition 8.1 it follows that if the states S_i and S_j are equivalent, then their corresponding k -successors (for all k) are also equivalent. Using this fact, we can formulate a minimization procedure that involves considering the states of the machine as a set and then breaking the set into *partitions* that comprise subsets that are definitely not equivalent.

Definition 8.2 – A partition consists of one or more blocks, where each block comprises a subset of states that may be equivalent, but the states in a given block are definitely not equivalent to the states in other blocks.

Let us assume initially that all states are equivalent; this forms the initial partition, P_1 , in which all states are in the same block. As the next step, we will form the partition P_2 in which the set of states is partitioned into blocks such that the states in each block generate the same output values. Obviously, the states that generate different outputs cannot possibly be equivalent. Then we will continue to form new partitions by testing whether the k -successors of the states in each block are contained in one block. Those states whose k -successors are in different blocks cannot be in one block. Thus new blocks are formed in each new partition. The process ends when a new partition is the same as the previous partition. Then all states in any one block are equivalent. To illustrate the procedure, consider Example 8.5.

Figure 8.51 shows a state table for a particular FSM. In an attempt to minimize the number of states, let us apply the partitioning procedure. The initial partition contains all states in a single block

$$P_1 = (ABCDEFGG)$$

The next partition separates the states that have different outputs (note that this FSM is of Moore type), which means that the states *A*, *B*, and *D* must be different from the states *C*, *E*, *F*, and *G*. Thus the new partition has two blocks

$$P_2 = (ABD)(CEFG)$$

Now we must consider all 0- and 1-successors of the states in each block. For the block (*ABD*), the 0-successors are (*BDB*), respectively. Since all of these successor states are in the same block in P_2 , we should still assume that the states *A*, *B*, and *D* may be equivalent. The 1-successors for these states are (*CFG*). Since these successors are also in the same block in P_2 , we conclude that (*ABD*) should remain in one block of P_3 . Next consider the block (*CEFG*). Its 0-successors are (*FFEF*), respectively. They are in the same block in P_2 . The 1-successors are (*ECDG*). Since these states are not in the same block in P_2 , it means that at least one of the states in the block (*CEFG*) is not equivalent to the others. In particular, the state *F* must be different from the states *C*, *E*, and *G* because its 1-successor is *D*, which is in a different block than *C*, *E*, and *G*. Hence

$$P_3 = (ABD)(CEG)(F)$$

Repeating the process yields the following. The 0-successors of (*ABD*) are (*BDB*), which are in the same block of P_3 . The 1-successors are (*CFG*), which are not in the same block. Since *F* is in a different block than *C* and *G*, it follows that the state *B* cannot be equivalent to states *A* and *D*. The 0- and 1-successors of (*CEG*) are (*FFF*) and (*ECG*), respectively. Both of these subsets are accommodated in the blocks of P_3 . Therefore

$$P_4 = (AD)(B)(CEG)(F)$$

Present state	Next state		Output <i>z</i>
	<i>w</i> = 0	<i>w</i> = 1	
A	B	C	1
B	D	F	1
C	F	E	0
D	B	G	1
E	F	C	0
F	E	D	0
G	F	G	0

Figure 8.51 State table for Example 8.5.

Present state	Next state		Output z
	$w = 0$	$w = 1$	
A	B	C	1
B	A	F	1
C	F	C	0
F	C	A	0

Figure 8.52 Minimized state table for Example 8.5.

If we follow the same approach to check the 0- and 1-successors of the blocks (AD) and (CEG), we find that

$$P_5 = (AD)(B)(CEG)(F)$$

Since $P_5 = P_4$ and no new blocks are generated, it follows that states in each block are equivalent. If the states in some block were not equivalent, then their k -successors would have to be in different blocks. Therefore, states A and D are equivalent, and C , E , and G are equivalent. Since each block can be represented by a single state, only four states are needed to implement the FSM defined by the state table in Figure 8.51. If we let the symbol A represent both the states A and D in the figure and the symbol C represent the states C , E , and G , then the state table reduces to the state table in Figure 8.52.

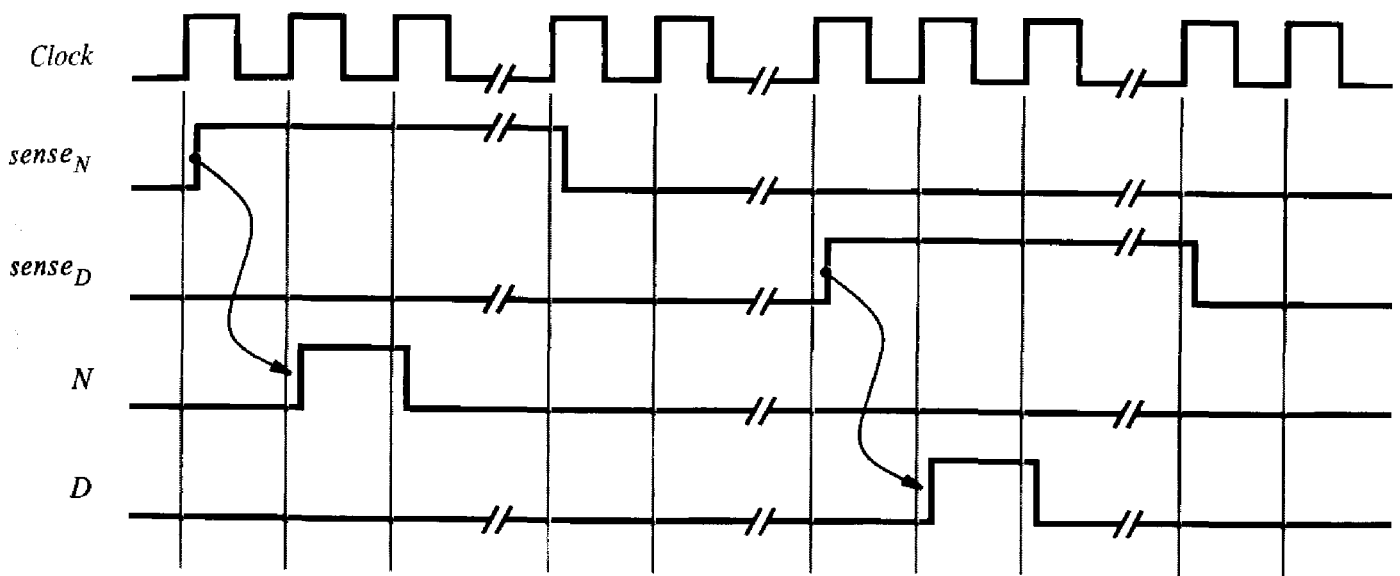
The effect of the minimization is that we have found a solution that requires only two flip-flops to realize the four states of the minimized state table, instead of needing three flip-flops for the original design. The expectation is that the FSM with fewer states will be simpler to implement, although this is not always the case.

The state minimization concept is based on the fact that two different FSMs may exhibit identical behavior in terms of the outputs produced in response to all possible inputs. Such machines are functionally equivalent, even though they are implemented with circuits that may be vastly different. In general, it is not easy to determine whether or not two arbitrary FSMs are equivalent. Our minimization procedure ensures that a simplified FSM is functionally equivalent to the original one. We encourage the reader to get an intuitive feeling that the FSMs in Figures 8.51 and 8.52 are indeed functionally equivalent by implementing both machines and simulating their behavior using the CAD tools.

6 As another example of minimization, we will consider the design of a practical sequential circuit that could be used in a vending machine. Suppose that a coin-operated vending machine dispenses candy under the following conditions:

- The machine accepts nickels and dimes.
- It takes 15 cents for a piece of candy to be released from the machine.
- If 20 cents is deposited, the machine will not return the change, but it will credit the buyer with 5 cents and wait for the buyer to make a second purchase.

All electronic signals in the vending machine are synchronized to the positive edge of a clock signal, named *Clock*. The exact frequency of the clock signal is not important for our example, but we will assume a clock period of 100 ns. The vending machine's coin-receptor mechanism generates two signals, $sense_D$ and $sense_N$, which are asserted when a dime or a nickel is detected. Because the coin receptor is a mechanical device and thus very slow compared to an electronic circuit, inserting a coin causes $sense_D$ or $sense_N$ to be set to 1 for a large number of clock cycles. We will assume that the coin receptor also generates two other signals, named D and N . The D signal is set to 1 for one clock cycle after $sense_D$ becomes 1, and N is set to 1 for one clock cycle after $sense_N$ becomes 1. The timing relationships between *Clock*, $sense_D$, $sense_N$, D , and N are illustrated in Figure 8.53a. The hash marks on the waveforms indicate that $sense_D$ or $sense_N$ may be 1 for many clock cycles. Also, there may be an arbitrarily long time between the insertion of two consecutive coins. Note that since the coin receptor can accept only one coin at a time, it is not possible to have both D and N set to 1 at once. Figure 8.53b illustrates how the N signal may be generated from the $sense_N$ signal.



(a) Timing diagram

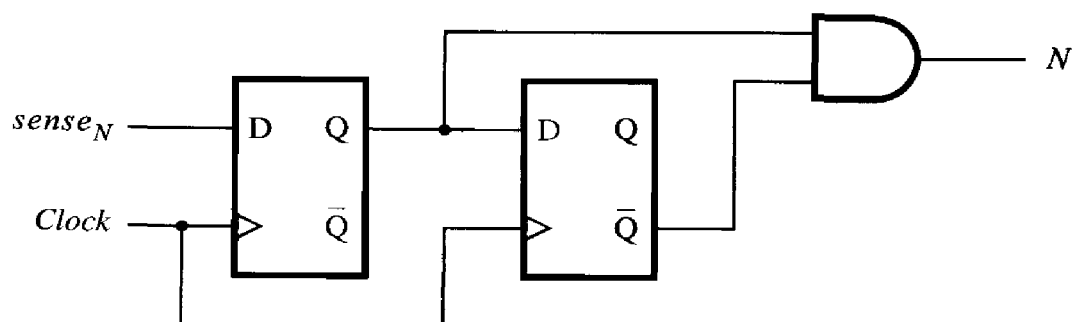
(b) Circuit that generates N

Figure 8.53 Signals for the vending machine.

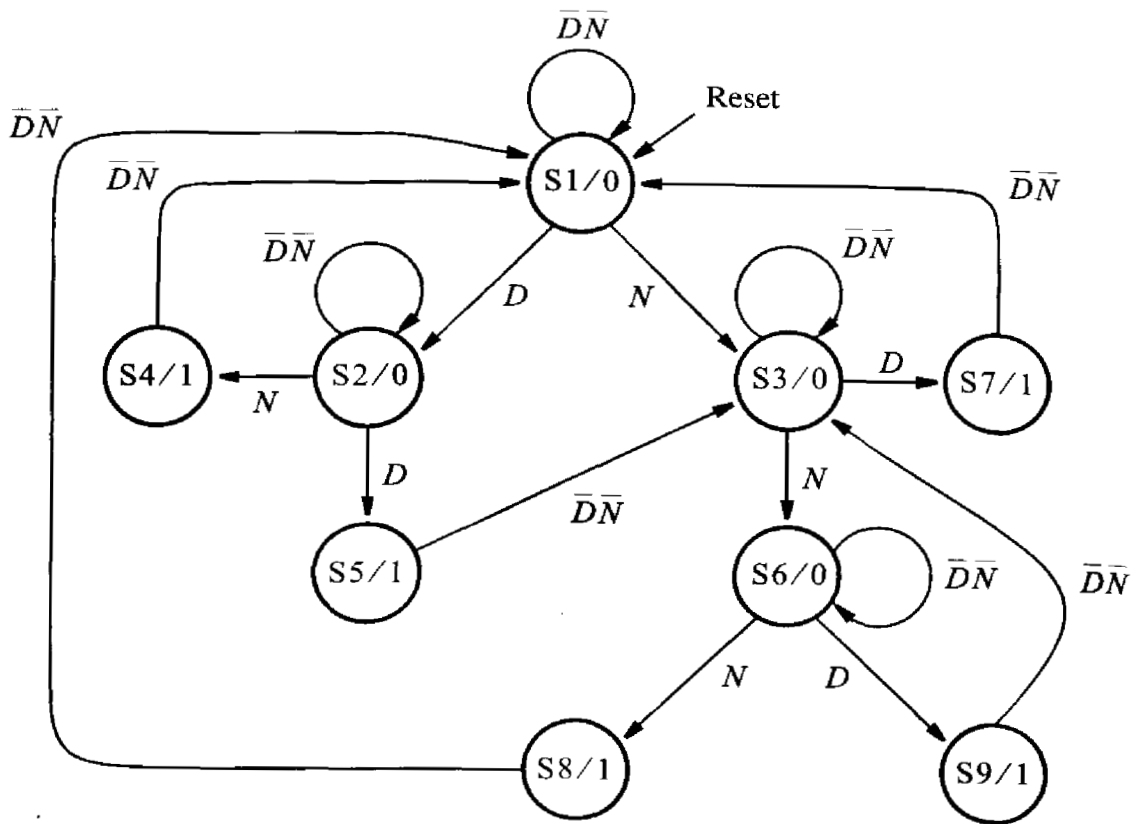


Figure 8.54 State diagram for Example 8.6.

Based on these assumptions, we can develop an initial state diagram in a fairly straightforward manner, as indicated in Figure 8.54. The inputs to the FSM are D and N , and the starting state is $S1$. As long as $\bar{D} = \bar{N} = 0$, the machine remains in state $S1$, which is indicated by the arc labeled $\bar{D} \cdot \bar{N} = 1$. Inserting a dime leads to state $S2$, while inserting a nickel leads to state $S3$. In both cases the deposited amount is less than 15 cents, which is not sufficient to release the candy. This is indicated by the output, z , being equal to 0, as in $S2/0$ and $S3/0$. The machine will remain in state $S2$ or $S3$ until another coin is deposited because $D = N = 0$. In state $S2$ a nickel will cause a transition to $S4$ and a dime to $S5$. In both of these states, sufficient money is deposited to activate the output mechanism that releases the candy; hence the state nodes have the labels $S4/1$ and $S5/1$. In $S4$ the deposited amount is 15 cents, which means that on the next active clock edge the machine should return to the reset state $S1$. The condition $\bar{D} \cdot \bar{N}$ on the arc leaving $S4$ is guaranteed to be true because the machine remains in state $S4$ for only 100 ns, which is far too short a time for a new coin to have been deposited.

The state $S5$ denotes that an amount of 20 cents has been deposited. The candy is released, and on the next clock edge the FSM makes a transition to state $S3$, which represents a credit of 5 cents. A similar reasoning when the machine is in state $S3$ leads to states $S6$ through $S9$. This completes the state diagram for the desired FSM. A state table version of the same information is given in Figure 8.55.

Note that the condition $D = N = 1$ is denoted as don't care in the table. Note also other don't cares in states $S4$, $S5$, $S7$, $S8$, and $S9$. They correspond to cases where there is

Present state	Next state				Output z
	$DN = 00$	01	10	11	
S1	S1	S3	S2	—	0
S2	S2	S4	S5	—	0
S3	S3	S6	S7	—	0
S4	S1	—	—	—	1
S5	S3	—	—	—	1
S6	S6	S8	S9	—	0
S7	S1	—	—	—	1
S8	S1	—	—	—	1
S9	S3	—	—	—	1

Figure 8.55 State table for Example 8.6.

no need to check the D and N signals because the machine changes to another state in an amount of time that is too short for a new coin to have been inserted.

Using the minimization procedure, we obtain the following partitions

$$P_1 = (S1, S2, S3, S4, S5, S6, S7, S8, S9)$$

$$P_2 = (S1, S2, S3, S6)(S4, S5, S7, S8, S9)$$

$$P_3 = (S1)(S3)(S2, S6)(S4, S5, S7, S8, S9)$$

$$P_4 = (S1)(S3)(S2, S6)(S4, S7, S8)(S5, S9)$$

$$P_5 = (S1)(S3)(S2, S6)(S4, S7, S8)(S5, S9)$$

The final partition has five blocks. Let $S2$ denote its equivalence to $S6$, let $S4$ denote the same with respect to $S7$ and $S8$, and let $S5$ represent $S9$. This leads to the minimized state table in Figure 8.56. The actual circuit that implements this table can be designed as explained in the previous sections.

Present state	Next state				Output z
	$DN = 00$	01	10	11	
S1	S1	S3	S2	—	0
S2	S2	S4	S5	—	0
S3	S3	S2	S4	—	0
S4	S1	—	—	—	1
S5	S3	—	—	—	1

Figure 8.56 Minimized state table for Example 8.6.

In this example we used a straightforward approach to derive the original state diagram, which we then minimized using the partitioning procedure. Figure 8.57 presents the information in the state table of Figure 8.56 in the form of a state diagram. Looking at this diagram, the reader can probably see that it may have been quite feasible to derive the optimized diagram directly, using the following reasoning. Suppose that the states correspond to the various amounts of money deposited. In particular, the states, S_1 , S_3 , S_2 , S_4 , and S_5 correspond to the amounts of 0, 5, 10, 15, and 20 cents, respectively. With this interpretation of the states, it is not difficult to derive the transition arcs that define the desired FSM. In practice, the designer can often produce initial designs that do not have a large number of superfluous states.

We have found a solution that requires five states, which is the minimum number of states for a Moore-type FSM that realizes the desired vending control task. From section 8.3 we know that Mealy-type FSMs may need fewer states than Moore-type machines, although they do not necessarily lead to simpler overall implementations. If we use the Mealy model, we can eliminate states S_4 and S_5 in Figure 8.57. The result is shown in Figure 8.58. This version requires only three states, but the output functions become more complicated. The reader is encouraged to compare the complexity of implementations by completing the design steps for the FSMs in Figures 8.57 and 8.58.

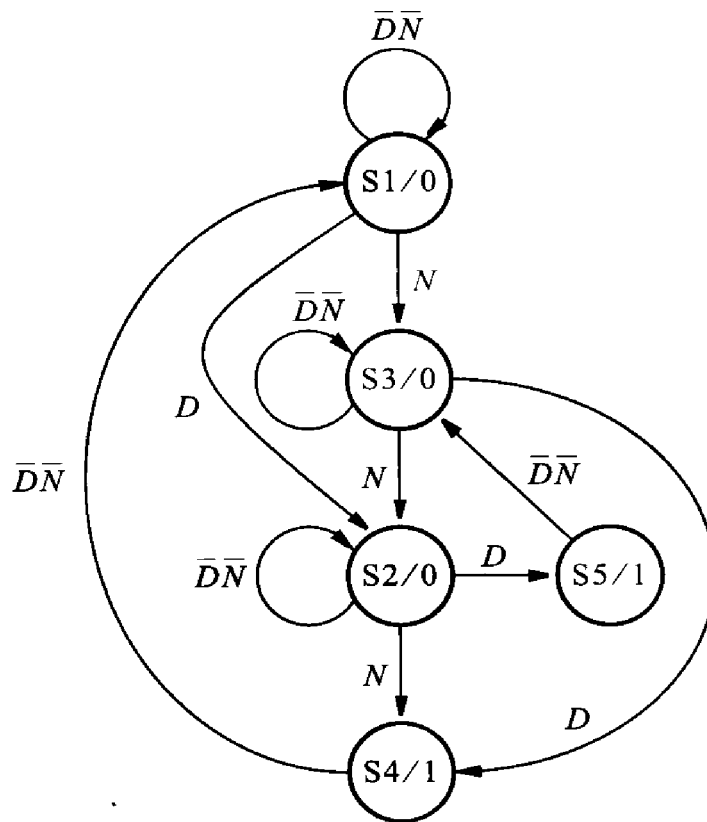


Figure 8.57 Minimized state diagram for Example 8.6.

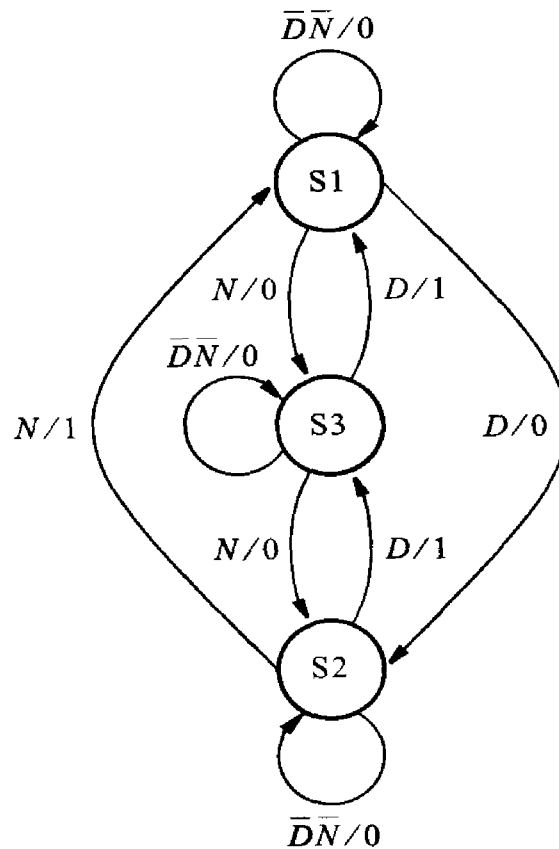


Figure 8.58 Mealy-type FSM for Example 8.6.

8.6.2 INCOMPLETELY SPECIFIED FSMs

The partitioning scheme for minimization of states works well when all entries in the state table are specified. Such is the case for the FSM defined in Figure 8.51. FSMs of this type are said to be *completely specified*. If one or more entries in the state table are not specified, corresponding to don't-care conditions, then the FSM is said to be *incompletely specified*. An example of such an FSM is given in Figure 8.55. As seen in Example 8.6, the partitioning scheme works well for this FSM also. But in general, the partitioning scheme is less useful when incompletely specified FSMs are involved, as illustrated by Example 8.7.

Consider the FSM in Figure 8.59 which has four unspecified entries, because we have assumed that the input $w = 1$ will not occur when the machine is in states B or G . Accordingly, neither a state transition nor an output value is specified for these two cases. An important difference between this FSM and the one in Figure 8.55 is that some outputs in this FSM are unspecified, whereas in the other FSM all outputs are specified. **Ex**

The partitioning minimization procedure can be applied to Mealy-type FSMs in the same way as for Moore-type FSMs illustrated in Examples 8.5 and 8.6. Two states are

Present state	Next state		Output z	
	$w = 0$	$w = 1$	$w = 0$	$w = 1$
A	B	C	0	0
B	D	—	0	—
C	F	E	0	1
D	B	G	0	0
E	F	C	0	1
F	E	D	0	1
G	F	—	0	—

Figure 8.59 Incompletely specified state table for Example 8.7.

considered equivalent, and are thus placed in the same block of a partition, if their outputs are equal for all corresponding input valuations. To perform the partitioning process, we can assume that the unspecified outputs have a specific value. Not knowing whether these values should be 0 or 1, let us first assume that both unspecified outputs have a value of 0. Then the first two partitions are

$$P_1 = (ABCDEFGG)$$

$$P_2 = (ABDG)(CEF)$$

Note that the states $A, B, D,$ and G are in the same block because their outputs are equal to 0 for both $w = 0$ and $w = 1$. Also, the states $C, E,$ and F are in one block because they have the same output behavior; they all generate $z = 0$ if $w = 0$, and $z = 1$ if $w = 1$. Continuing the partitioning procedure gives the remaining partitions

$$P_3 = (AB)(D)(G)(CE)(F)$$

$$P_4 = (A)(B)(D)(G)(CE)(F)$$

$$P_5 = P_4$$

The result is an FSM that is specified by six states.

Next consider the alternative of assuming that both unspecified outputs in Figure 8.59 have a value of 1. This would lead to the partitions

$$P_1 = (ABCDEFGG)$$

$$P_2 = (AD)(BCEFG)$$

$$P_3 = (AD)(B)(CEFG)$$

$$P_4 = (AD)(B)(CEG)(F)$$

$$P_5 = P_4$$

This solution involves four states. Evidently, the choice of values assigned to unspecified outputs is of considerable importance.

We will not pursue the issue of state minimization of incompletely specified FSMs any further. As we already mentioned, it is possible to develop a minimization technique that searches for equivalent states based directly on Definition 8.1. This approach is described in many books on logic design [2, 5–8, 12–14].

Finally, it is important to mention that reducing the number of states in a given FSM will not necessarily lead to a simpler implementation. Interestingly, the effect of state assignment, discussed in section 8.2, may have a greater influence on the simplicity of implementation than does the state minimization. In a modern design environment, the designer relies on the CAD tools to implement state machines efficiently.

8.7 DESIGN OF A COUNTER USING THE SEQUENTIAL CIRCUIT APPROACH

In this section we discuss the design of a counter circuit using the general approach for designing sequential circuits. From Chapter 7 we already know that counters can be realized as cascaded stages of flip-flops and some gating logic, where each stage divides the number of incoming pulses by two. To keep our example simple, we choose a counter of small size but also show how the design can be extended to larger sizes. The specification for the counter is

- The counting sequence is 0, 1, 2, ..., 6, 7, 0, 1, ...
- There exists an input signal w . The value of this signal is considered during each clock cycle. If $w = 0$, the present count remains the same; if $w = 1$, the count is incremented.

The counter can be designed as a synchronous sequential circuit using the design techniques introduced in the previous sections. We show first the classical manual approach to designing the counter, which illustrates the basic concepts involved in the design process. After that we show how the design task is accomplished using CAD tools, which is much easier to do and indicates how the task would be tackled in practice.

8.7.1 STATE DIAGRAM AND STATE TABLE FOR A MODULO-8 COUNTER

Figure 8.60 gives a state diagram for the desired counter. There is a state associated with each count. In the diagram state A corresponds to count 0, state B to count 1, and so on. We show the transitions between the states needed to implement the counting sequence. Note that the output signals are specified as depending only on the state of the counter at a given time, which is the Moore model of sequential circuits.

The state diagram may be represented in the state-table form as shown in Figure 8.61.

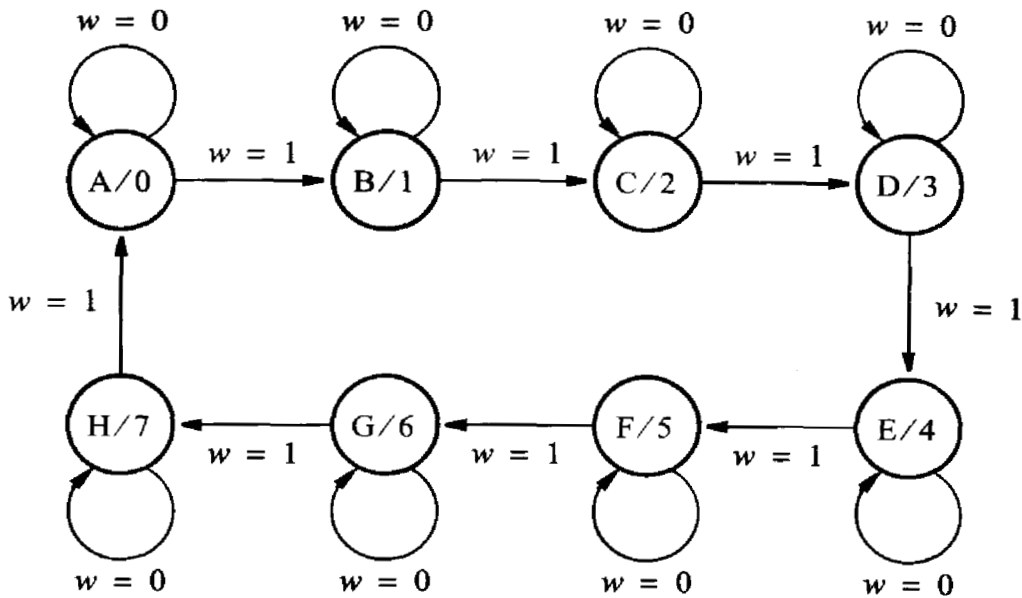


Figure 8.60 State diagram for the counter.

Present state	Next state		Output
	$w = 0$	$w = 1$	
A	A	B	0
B	B	C	1
C	C	D	2
D	D	E	3
E	E	F	4
F	F	G	5
G	G	H	6
H	H	A	7

Figure 8.61 State table for the counter.

8.7.2 STATE ASSIGNMENT

Three state variables are needed to represent the eight states. Let these variables, denoting the present state, be called y_2 , y_1 , and y_0 . Let Y_2 , Y_1 , and Y_0 denote the corresponding next-state functions. The most convenient (and simplest) state assignment is to encode each state with the binary number that the counter should give as output in that state. Then the required output signals will be the same as the signals that represent the state variables. This leads to the state-assigned table in Figure 8.62.

The final step in the design is to choose the type of flip-flops and derive the expressions that control the flip-flop inputs. The most straightforward choice is to use D-type flip-flops.

	Present state $y_2y_1y_0$	Next state		Count $z_2z_1z_0$
		$w = 0$	$w = 1$	
		$Y_2Y_1Y_0$	$Y_2Y_1Y_0$	
A	000	000	001	000
B	001	001	010	001
C	010	010	011	010
D	011	011	100	011
E	100	100	101	100
F	101	101	110	101
G	110	110	111	110
H	111	111	000	111

Figure 8.62 State-assigned table for the counter.

We pursue this approach first. Then we show the alternative of using JK-type flip-flops. In either case the flip-flops must be edge triggered to ensure that only one transition takes place during a single clock cycle.

8.7.3 IMPLEMENTATION USING D-TYPE FLIP-FLOPS

When using D-type flip-flops to realize the finite state machine, each next-state function, Y_i , is connected to the D input of the flip-flop that implements the state variable y_i . The next-state functions are derived from the information in Figure 8.62. Using Karnaugh maps in Figure 8.63, we obtain the following implementation

$$D_0 = Y_0 = \bar{w}y_0 + w\bar{y}_0$$

$$D_1 = Y_1 = \bar{w}y_1 + y_1\bar{y}_0 + wy_0\bar{y}_1$$

$$D_2 = Y_2 = \bar{w}y_2 + \bar{y}_0y_2 + \bar{y}_1y_2 + wy_0y_1\bar{y}_2$$

The resulting circuit is given in Figure 8.64. It is not obvious how to extend this circuit to implement a larger counter, because no clear pattern is discernible in the expressions for D_0 , D_1 , and D_2 . However, we can rewrite these expressions as follows

$$\begin{aligned} D_0 &= \bar{w}y_0 + w\bar{y}_0 \\ &= w \oplus y_0 \end{aligned}$$

$$\begin{aligned} D_1 &= \bar{w}y_1 + y_1\bar{y}_0 + wy_0\bar{y}_1 \\ &= (\bar{w} + \bar{y}_0)y_1 + wy_0\bar{y}_1 \\ &= \bar{w}\bar{y}_0y_1 + wy_0\bar{y}_1 \\ &= \bar{w}y_0 \oplus y_1 \end{aligned}$$

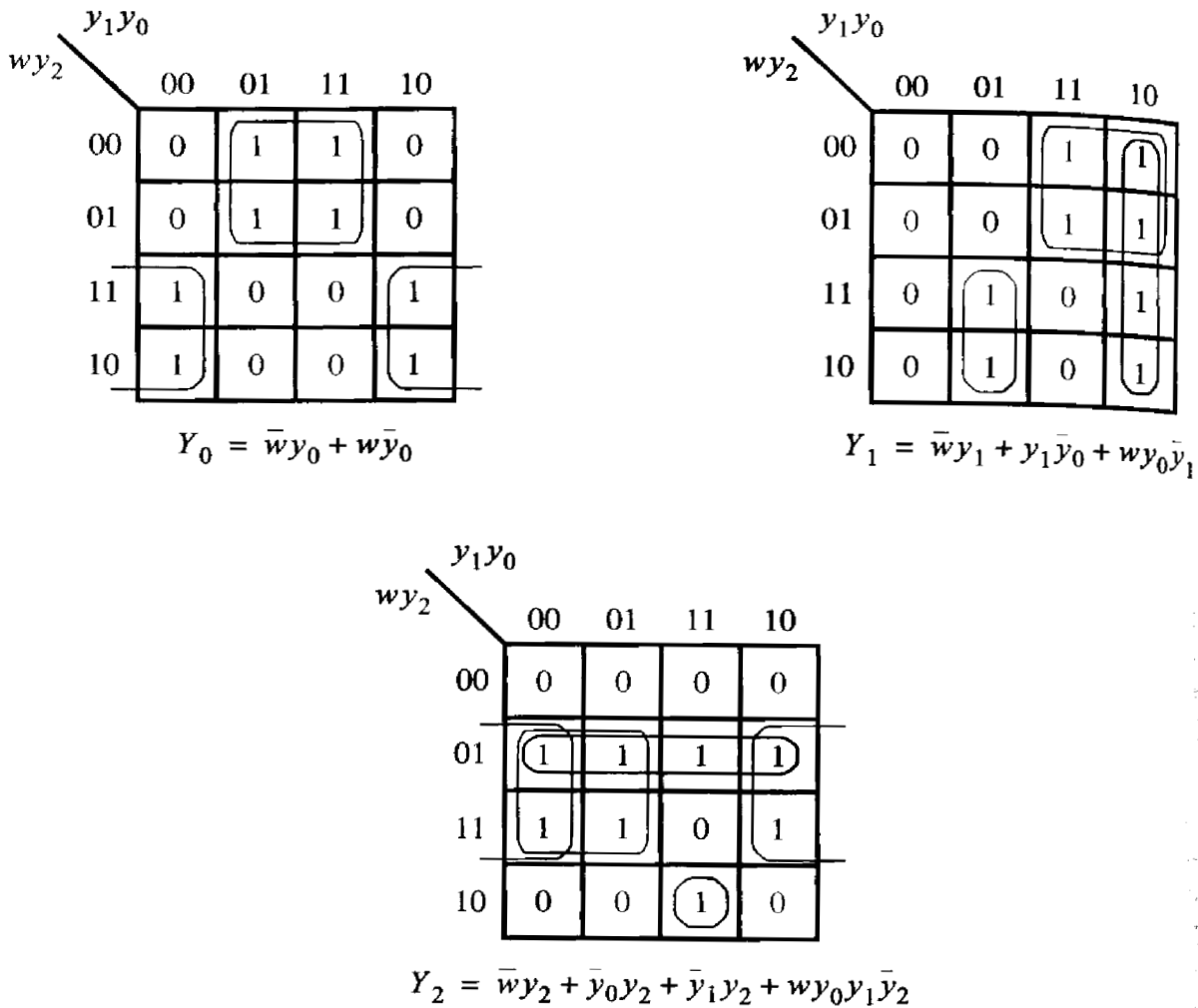


Figure 8.63 Karnaugh maps for D flip-flops for the counter.

$$\begin{aligned}
 D_2 &= \bar{w}y_2 + \bar{y}_0y_2 + \bar{y}_1y_2 + wy_0y_1\bar{y}_2 \\
 &= (\bar{w} + \bar{y}_0 + \bar{y}_1)y_2 + wy_0y_1\bar{y}_2 \\
 &= \overline{wy_0\bar{y}_1}y_2 + wy_0y_1\bar{y}_2 \\
 &= wy_0y_1 \oplus y_2
 \end{aligned}$$

Then an obvious pattern emerges, which leads to the circuit in Figure 7.24.

8.7.4 IMPLEMENTATION USING JK-TYPE FLIP-FLOPS

JK-type flip-flops provide an attractive alternative. Using these flip-flops to implement the sequential circuit specified in Figure 8.62 requires derivation of J and K inputs for each flip-flop. The following control is needed:

- If a flip-flop in state 0 is to remain in state 0, then $J = 0$ and $K = d$ (where d means that K can be equal to either 0 or 1).

8.7 DESIGN OF A COUNTER USING THE SEQUENTIAL CIRCUIT APPROACH

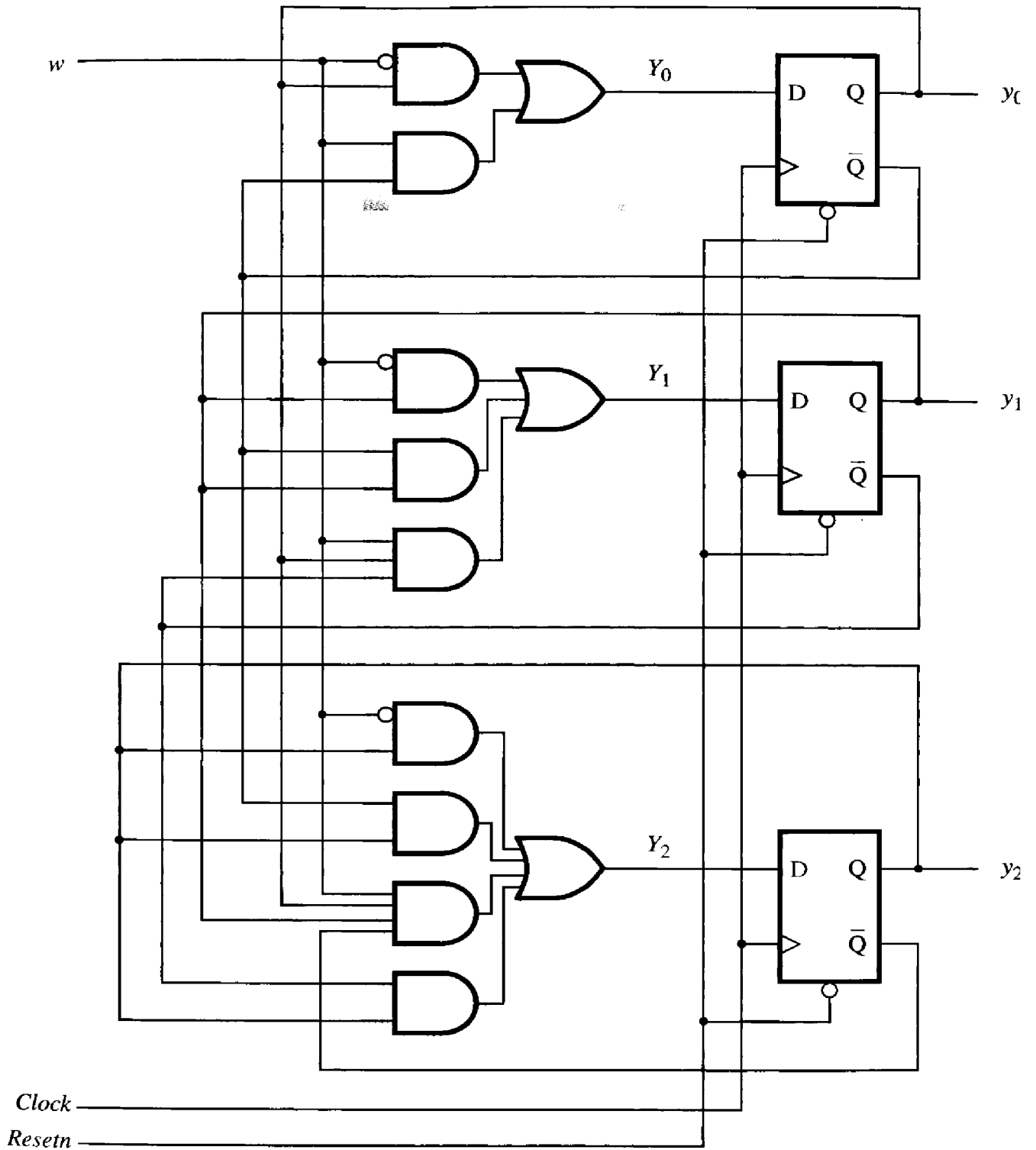


Figure 8.64 Circuit diagram for the counter implemented with D flip-flops.

- If a flip-flop in state 0 is to change to state 1, then $J = 1$ and $K = d$.
- If a flip-flop in state 1 is to remain in state 1, then $J = d$ and $K = 0$.
- If a flip-flop in state 1 is to change to state 0, then $J = d$ and $K = 1$.

Following these guidelines, we can create a truth table that specifies the required values of the J and K inputs for the three flip-flops in our design. Figure 8.65 shows a modified version of the state-assigned table in Figure 8.62, with the J and K input functions included. To see how this table is derived, consider the first row in which the present state is $y_2y_1y_0 = 000$. If $w = 0$, then the next state is also $Y_2Y_1Y_0 = 000$. Thus the present value of each flip-flop is 0, and it should remain 0. This implies the control $J = 0$ and $K = d$ for all three flip-flops. Continuing with the first row, if $w = 1$, the next state will be $Y_2Y_1Y_0 = 001$. Thus flip-flops y_2 and y_1 still remain at 0 and have the control $J = 0$ and $K = d$. However, flip-flop y_0 must change from 0 to 1, which is accomplished with $J = 1$ and $K = d$. The rest of the table is derived in the same manner by considering each present state $y_2y_1y_0$ and providing the necessary control signals to reach the new state $Y_2Y_1Y_0$.

A state-assigned table is essentially the state table in which each state is encoded using the state variables. When D flip-flops are used to implement an FSM, the next-state entries in the state-assigned table correspond directly to the signals that must be applied to the D inputs. This is not the case if some other type of flip-flops is used. A table that gives the state information in the form of the flip-flop inputs that must be “excited” to cause the transitions to the next states is usually called an *excitation table*. The excitation table in Figure 8.65 indicates how JK flip-flops can be used. In many books the term excitation table is used even when D flip-flops are involved, in which case it is synonymous with the state-assigned table.

Once the table in Figure 8.65 has been derived, it provides a truth table with inputs y_2, y_1, y_0 , and w , and outputs J_2, K_2, J_1, K_1, J_0 , and K_0 . We can then derive expressions for

	Present state $y_2y_1y_0$	Flip-flop inputs								Count $z_2z_1z_0$
		$w = 0$				$w = 1$				
		$Y_2Y_1Y_0$	J_2K_2	J_1K_1	J_0K_0	$Y_2Y_1Y_0$	J_2K_2	J_1K_1	J_0K_0	
A	000	000	0d	0d	0d	001	0d	0d	1d	000
B	001	001	0d	0d	d0	010	0d	1d	d1	001
C	010	010	0d	d0	0d	011	0d	d0	1d	010
D	011	011	0d	d0	d0	100	1d	d1	d1	011
E	100	100	d0	0d	0d	101	d0	0d	1d	100
F	101	101	d0	0d	d0	110	d0	1d	d1	101
G	110	110	d0	d0	0d	111	d0	d0	1d	110
H	111	111	d0	d0	d0	000	d1	d1	d1	111

Figure 8.65 Excitation table for the counter with JK flip-flops.

8.7 DESIGN OF A COUNTER USING THE SEQUENTIAL CIRCUIT APPROACH

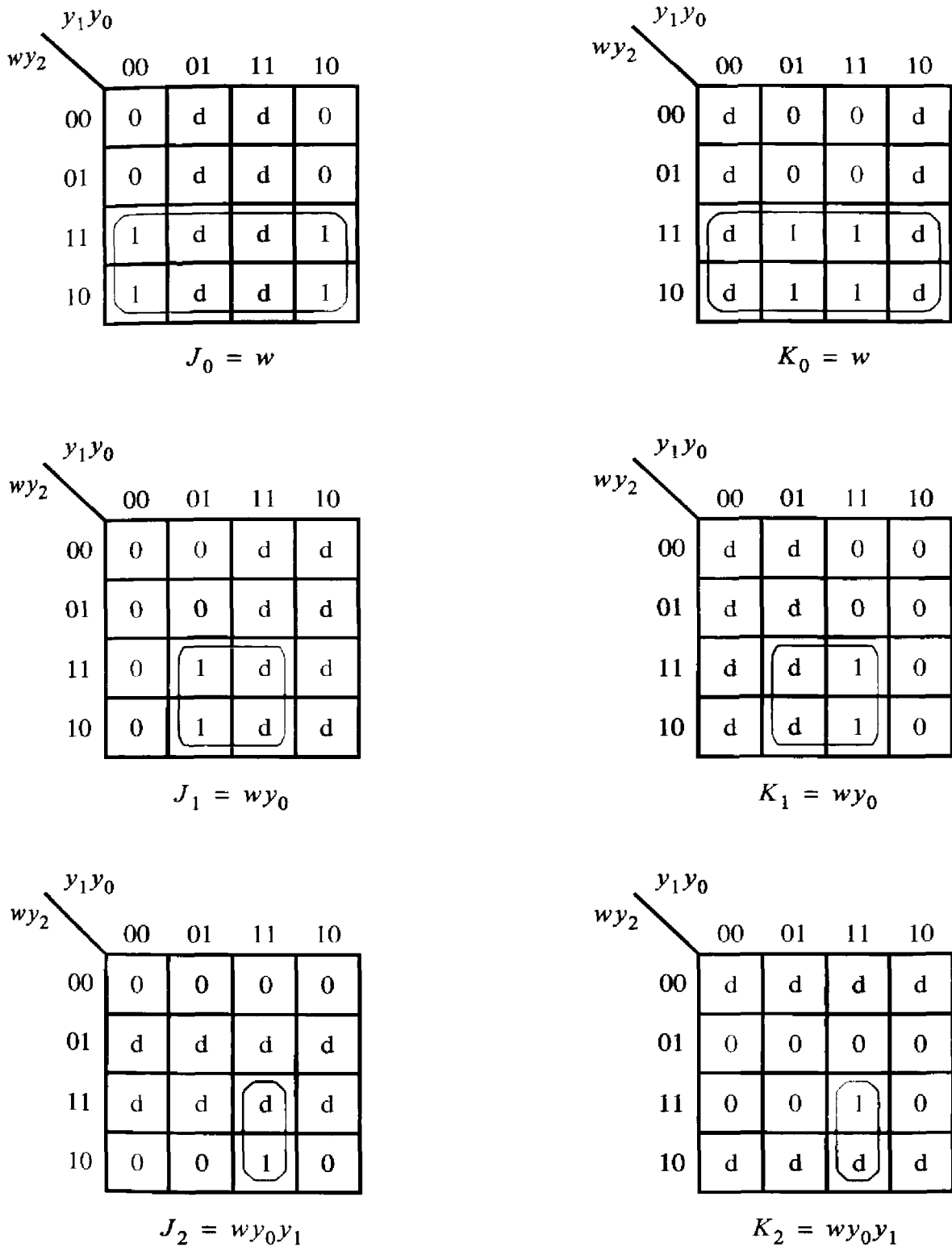


Figure 8.66 Karnaugh maps for JK flip-flops in the counter.

these outputs as shown in Figure 8.66. The resulting expressions are

$$J_0 = K_0 = w$$

$$J_1 = K_1 = wy_0$$

$$J_2 = K_2 = wy_0y_1$$

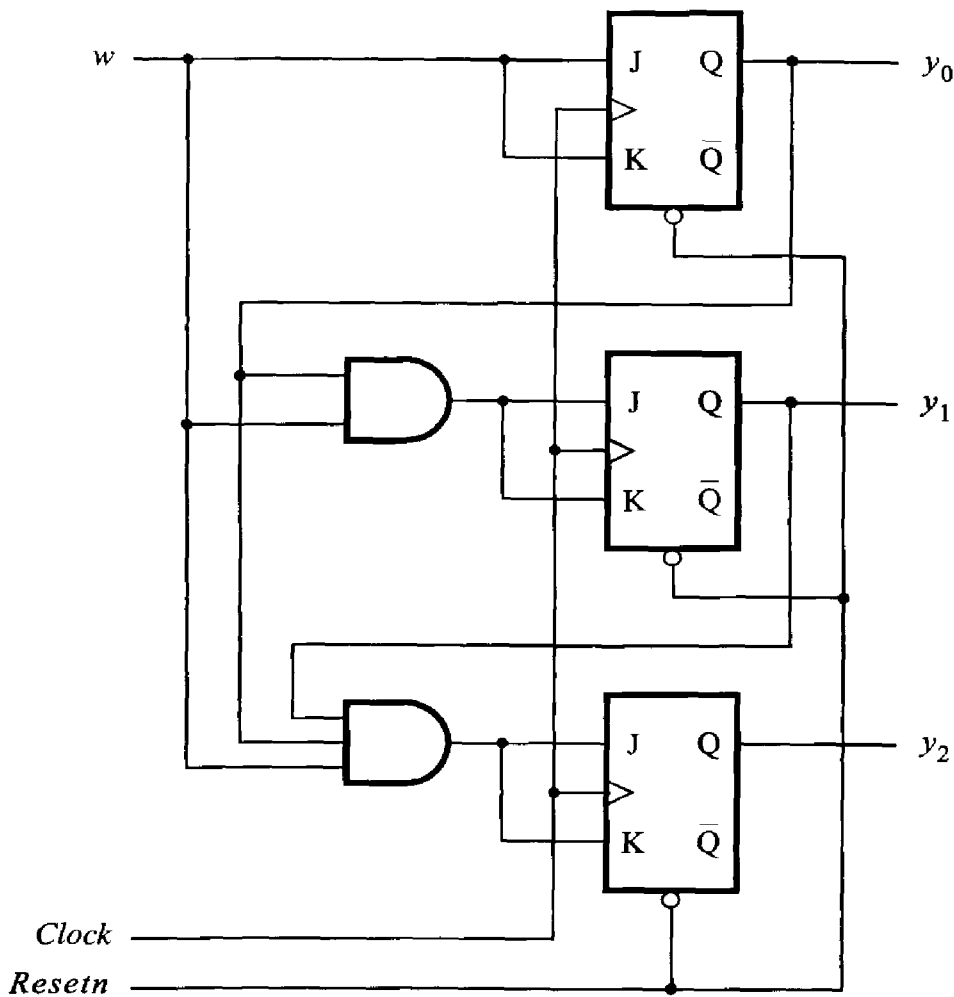


Figure 8.67 Circuit diagram using JK flip-flops.

This leads to the circuit shown in Figure 8.67. It is apparent that this design can be extended easily to larger counters. The pattern $J_n = K_n = wy_0y_1 \cdots y_{n-1}$ defines the circuit for each stage in the counter. Note that the size of the AND gate that implements the product term $y_0y_1 \cdots y_{n-1}$ grows with successive stages. A circuit with a more regular structure can be obtained by factoring out the previously needed terms as we progress through the stages of the counter. This gives

$$\begin{aligned}
 J_2 = K_2 &= (wy_0)y_1 &= J_1y_1 \\
 J_n = K_n &= (wy_0 \cdots y_{n-2})y_{n-1} &= J_{n-1}y_{n-1}
 \end{aligned}$$

Using the factored form, the counter circuit can be realized as indicated in Figure 8.68. In this circuit all stages (except the first) look the same. Note that this circuit has the same structure as the circuit in Figure 7.23 because connecting the J and K inputs of a flip-flop together turns the flip-flop into a T flip-flop.

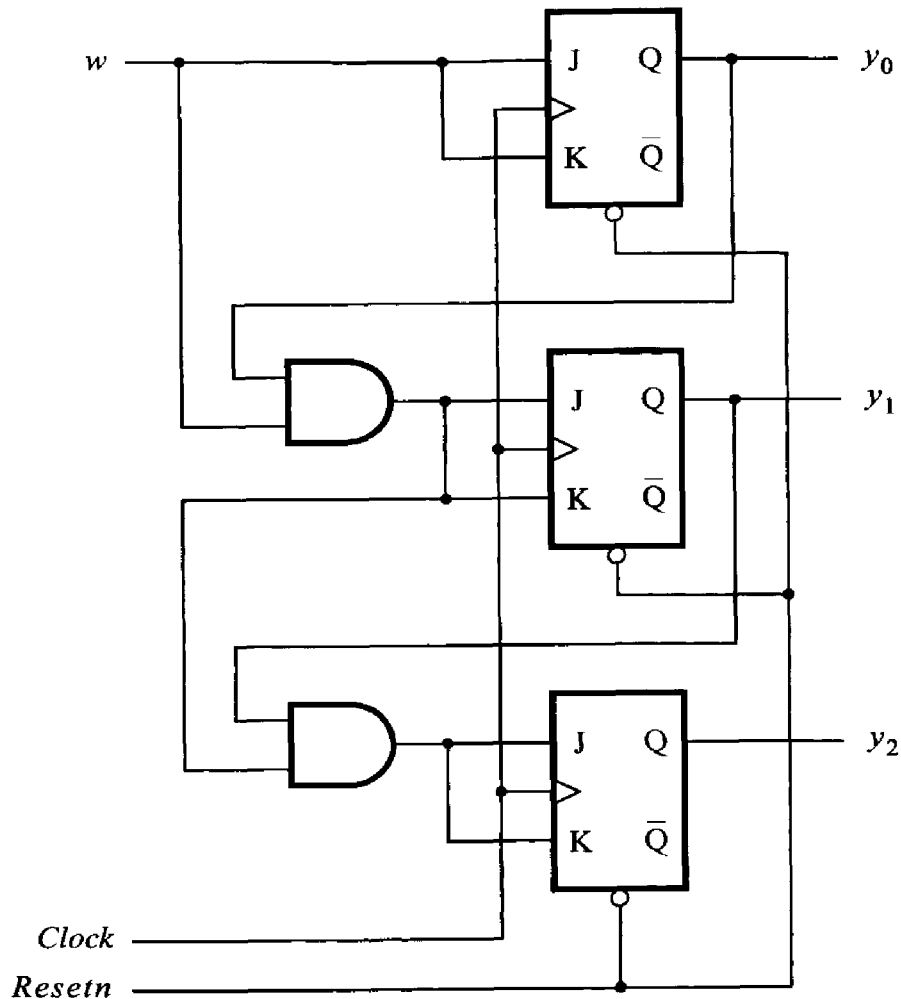


Figure 8.68 Factored-form implementation of the counter.

8.7.5 EXAMPLE—A DIFFERENT COUNTER

Having considered the design of an ordinary counter, we will now apply this knowledge to design a slightly different counterlike circuit. Suppose that we wish to derive a three-bit counter that counts the pulses on an input line, w . But instead of displaying the count as 0, 1, 2, 3, 4, 5, 6, 7, 0, 1, . . . , this counter must display the count in the sequence 0, 4, 2, 6, 1, 5, 3, 7, 0, 4, and so on. The count is to be represented directly by the flip-flop values themselves, without using any extra gates. Namely, $\text{Count} = Q_2Q_1Q_0$.

Since we wish to count the pulses on the input line w , it makes sense to use w as the clock input to the flip-flops. Thus the counter circuit should always be enabled, and it should change its state whenever the next pulse on the w line appears. The desired counter can be designed in a straightforward manner using the FSM approach. Figures 8.69 and 8.70 give the required state table and a suitable state assignment. Using D flip-flops, we obtain the next-state equations

$$D_2 = Y_2 = \bar{y}_2$$

$$D_1 = Y_1 = y_1 \oplus y_2$$

Present state	Next state	Output $z_2z_1z_0$
A	B	000
B	C	100
C	D	010
D	E	110
E	F	001
F	G	101
G	H	011
H	A	111

Figure 8.69 State table for counterlike example.

Present state $y_2y_1y_0$	Next state $Y_2Y_1Y_0$	Output $z_2z_1z_0$
000	100	000
100	010	100
010	110	010
110	001	110
001	101	001
101	011	101
011	111	011
111	000	111

Figure 8.70 State-assigned table for Figure 8.69.

$$\begin{aligned}
 D_0 = Y_0 &= y_0\bar{y}_1 + y_0\bar{y}_2 + \bar{y}_0y_1y_2 \\
 &= y_0(\bar{y}_1 + \bar{y}_2) + \bar{y}_0y_1y_2 \\
 &= y_0 \oplus y_1y_2
 \end{aligned}$$

This leads to the circuit in Figure 8.71.

The reader should compare this circuit with the normal up-counter in Figure 7.24. Take the first three stages of that counter, set the *Enable* input to 1, and let *Clock* = *w*. Then the two circuits are essentially the same with one small difference in the order of bits in the count. In Figure 7.24 the top flip-flop corresponds to the least-significant bit of the count, whereas in Figure 8.71 the top flip-flop corresponds to the most-significant bit of the count. This is not just a coincidence. In Figure 8.70 the required count is defined as $Count = y_2y_1y_0$. However, if the bit patterns that define the states are viewed in the reverse order and interpreted as binary numbers, such that $Count = y_0y_1y_2$, then the states

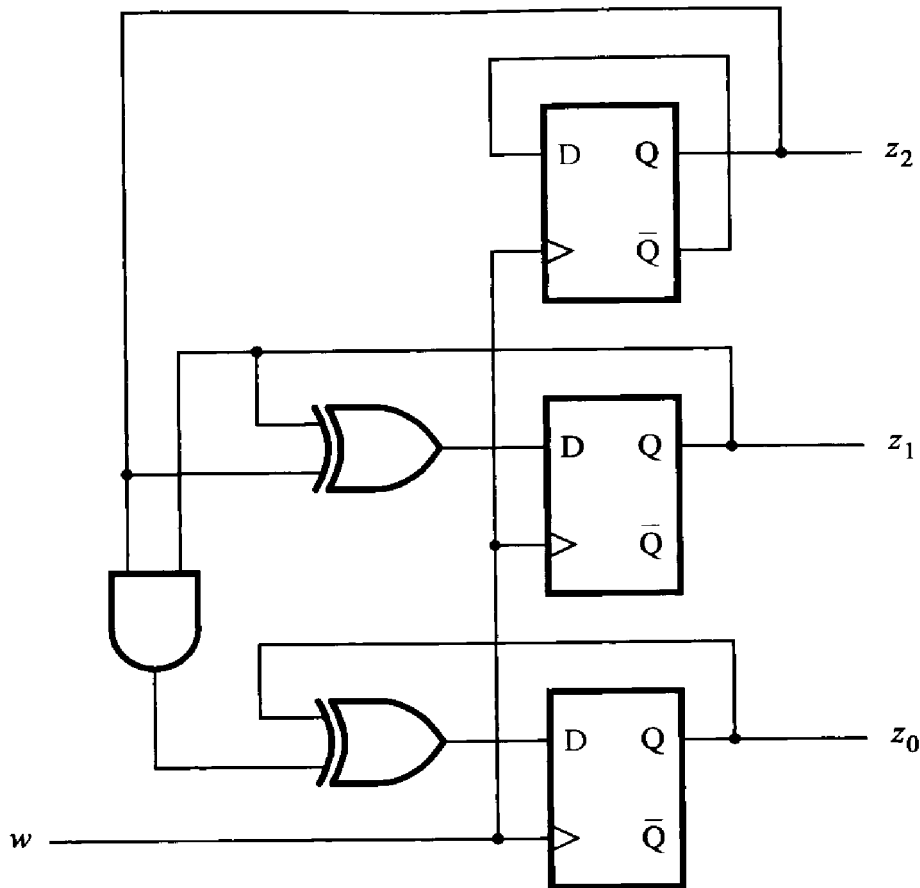


Figure 8.71 Circuit for Figure 8.70.

A, B, C, \dots, H have the values $0, 1, 2, \dots, 7$. These values are the same as the values that are associated with the normal three-bit up-counter.

8.8 FSM AS AN ARBITER CIRCUIT

In this section we present the design of an FSM that is slightly more complex than the previous examples. The purpose of the machine is to control access by various devices to a shared resource in a given system. Only one device can use the resource at a time. Assume that all signals in the system can change values only on the positive edge of the clock signal. Each device provides one input to the FSM, called a *request*, and the FSM produces a separate output for each device, called a *grant*. A device indicates its need to use the resource by asserting its request signal. Whenever the shared resource is not already in use, the FSM considers all requests that are active. Based on a priority scheme, it selects one of the requesting devices and asserts its grant signal. When the device is finished using the resource, it deasserts its request signal.

We will assume that there are three devices in the system, called device 1, device 2, and device 3. It is easy to see how the FSM can be extended to handle more devices. The request signals are named $r_1, r_2,$ and r_3 , and the grant signals are called $g_1, g_2,$ and g_3 . The devices are assigned a priority level such that device 1 has the highest priority, device 2 has

the next highest, and device 3 has the lowest priority. Thus if more than one request signal is asserted when the FSM assigns a grant, the grant is given to the requesting device that has the highest priority.

A state diagram for the desired FSM, designed as a Moore-type machine, is depicted in Figure 8.72. Initially, on reset the machine is in the state called *Idle*. No grant signals are asserted, and the shared resource is not in use. There are three other states, called *gnt1*, *gnt2*, and *gnt3*. Each of these states asserts the grant signal for one of the devices.

The FSM remains in the *Idle* state as long as all of the request signals are 0. In the state diagram the condition $r_1r_2r_3 = 000$ is indicated by the arc labeled 000. When one or more request signals become 1, the machine moves to one of the grant states, according to the priority scheme. If r_1 is asserted, then device 1 will receive the grant because it has the highest priority. This is indicated by the arc labeled 1xx that leads to state *gnt1*, which sets $g_1 = 1$. The meaning of 1xx is that the request signal r_1 is 1, and the values of signals r_2 and r_3 are irrelevant because of the priority scheme. As before, we use the symbol x to indicate that the value of the corresponding variable can be either 0 or 1. The machine stays in state *gnt1* as long as r_1 is 1. When $r_1 = 0$, the arc labeled 0xx causes a change on the next positive clock edge back to state *Idle*, and g_1 is deasserted. If other requests are active at this time, then the FSM will change to a new grant state after the next clock edge.

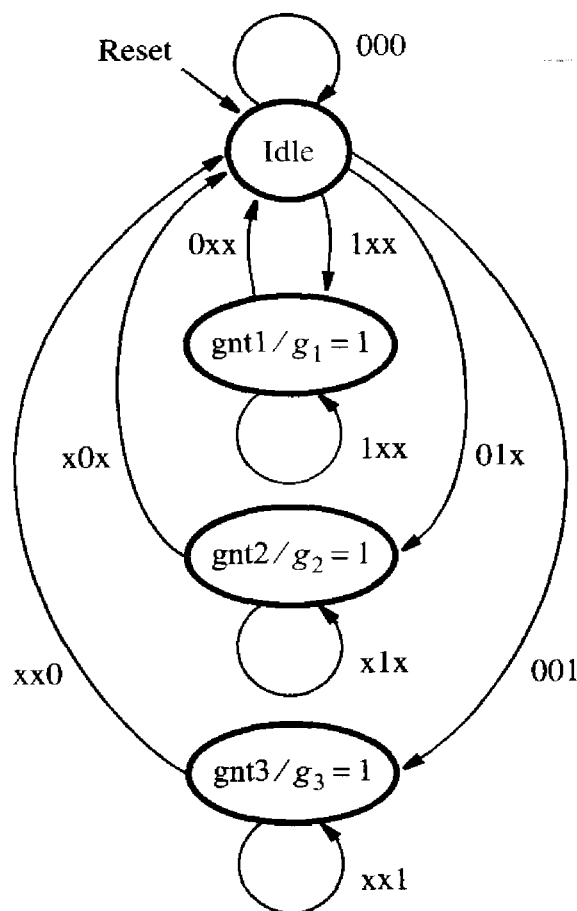


Figure 8.72 State diagram for the arbiter.

The arc that causes a change to state *gnt2* is labeled 01x. This label adheres to the priority scheme because it represents the condition that $r_2 = 1$, but $r_1 = 0$. Similarly, the condition for entering state *gnt3* is given as 001, which indicates that the only request signal asserted is r_3 .

The state diagram is repeated in Figure 8.73. The only difference between this diagram and Figure 8.72 is the way in which the arcs are labeled. Figure 8.73 uses a simpler labeling scheme that is more intuitive. For the condition that leads from state *Idle* to state *gnt1*, the arc is labeled as r_1 , instead of 1xx. This label means that if $r_1 = 1$, the FSM changes to state *gnt1*, regardless of the other inputs. The arc with the label $\bar{r}_1 r_2$ that leads from state *Idle* to *gnt2* represents the condition $r_1 r_2 = 01$, while the value of r_3 is irrelevant. There is no standardized scheme for labeling the arcs in state diagrams. Some designers prefer the style of Figure 8.72, while others prefer a style more similar to Figure 8.73.

Figure 8.74 gives the VHDL code for the machine. The three request and grant signals are specified as three-bit STD_LOGIC_VECTOR signals. The FSM is described using a CASE statement in the style used for Figure 8.29. As shown in the WHEN clause for state *Idle*, it is easy to describe the required priority scheme. The IF statement specifies that if $r_1 = 1$, then the next state for the machine is *gnt1*. If r_1 is not asserted, then the ELSIF

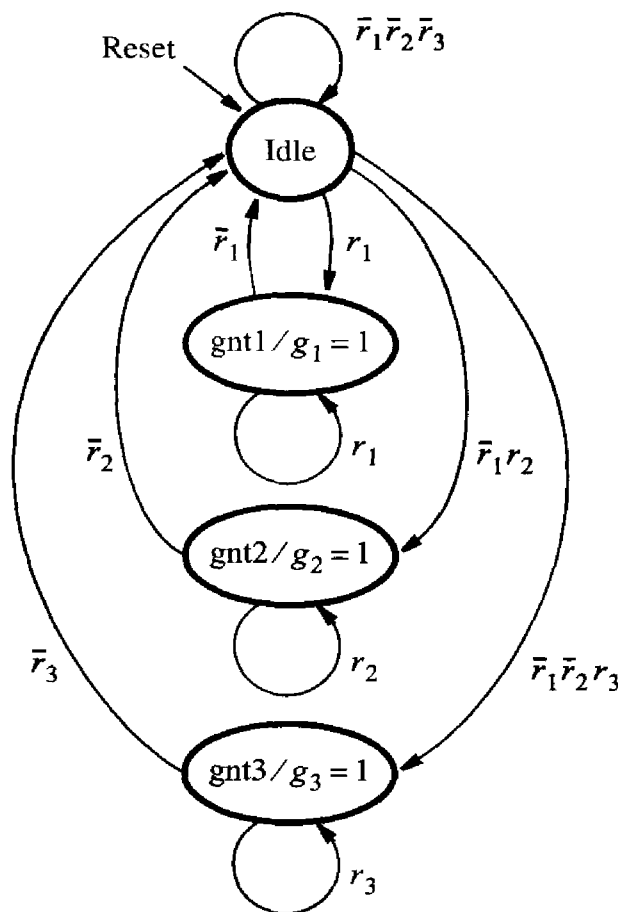


Figure 8.73 Alternative style of state diagram for the arbiter.

```

LIBRARY ieee ;
USE ieee.std_logic_1164.all ;

ENTITY arbiter IS
    PORT ( Clock, Resetn : IN    STD_LOGIC ;
          r               : IN    STD_LOGIC_VECTOR(1 TO 3) ;
          g               : OUT   STD_LOGIC_VECTOR(1 TO 3) );
END arbiter ;

ARCHITECTURE Behavior OF arbiter IS
    TYPE State_type IS (Idle, gnt1, gnt2, gnt3) ;
    SIGNAL y : State_type ;
BEGIN
    PROCESS ( Resetn, Clock )
    BEGIN
        IF Resetn = '0' THEN y <= Idle ;
        ELSIF (Clock'EVENT AND Clock = '1') THEN
            CASE y IS
                WHEN Idle =>
                    IF r(1) = '1' THEN y <= gnt1 ;
                    ELSIF r(2) = '1' THEN y <= gnt2 ;
                    ELSIF r(3) = '1' THEN y <= gnt3 ;
                    ELSE y <= Idle ;
                    END IF ;
                WHEN gnt1 =>
                    IF r(1) = '1' THEN y <= gnt1 ;
                    ELSE y <= Idle ;
                    END IF ;
                WHEN gnt2 =>
                    IF r(2) = '1' THEN y <= gnt2 ;
                    ELSE y <= Idle ;
                    END IF ;
                WHEN gnt3 =>
                    IF r(3) = '1' THEN y <= gnt3 ;
                    ELSE y <= Idle ;
                    END IF ;
            END CASE ;
        END IF ;
    END PROCESS ;
    g(1) <= '1' WHEN y = gnt1 ELSE '0' ;
    g(2) <= '1' WHEN y = gnt2 ELSE '0' ;
    g(3) <= '1' WHEN y = gnt3 ELSE '0' ;
END Behavior ;

```

Figure 8.74 VHDL code for the arbiter.

condition is evaluated, which stipulates that if $r_2 = 1$, then the next state will be *gnt2*. Each successive ELSIF clause considers a lower-priority request signal only if all of the higher-priority request signals are not asserted.

The WHEN clause for each grant state is straightforward. For state *gnt1* it specifies that as long as $r_1 = 1$, the next state remains *gnt1*. When $r_1 = 0$, the next state is *Idle*. The other grant states have the same structure.

The code for the grant signals, g_1 , g_2 , and g_3 is given at the end. It sets g_1 to 1 when the machine is in state *gnt1*, and otherwise g_1 is set to 0. Similarly, each of the other grant signals is 1 only in the appropriate grant state.

Instead of the three conditional assignment statements used for g_1 , g_2 , and g_3 , it may seem reasonable to substitute the process shown in Figure 8.75, which contains an IF statement. This code is incorrect, but the reason is not obvious. Recall from the discussion concerning Figure 6.43 that when using an IF statement, if there is no ELSE clause or default value for a signal, then that signal retains its value when the IF condition is not met. This is called implied memory. In Figure 8.75 the signal g_1 is set to 1 when the FSM first enters state *gnt1*, and then g_1 will retain the value 1 no matter what state the FSM changes to. Similarly, the code for g_2 and g_3 is also incorrect. If we wish to write the code using an IF statement, then it should be structured as shown in Figure 8.76. Each grant signal is assigned a default value of 0, which avoids the problem of implied memory.

8.8.1 IMPLEMENTATION OF THE ARBITER CIRCUIT

We will now consider the effects of implementing the arbiter in both a CPLD and an FPGA. Any differences between the two implementations are likely to be more pronounced if the complexity of the FSM is greater. Hence instead of directly using the code in Figure 8.74, we will implement a larger version of the arbiter that controls eight devices. The request signals are called r_1, r_2, \dots, r_8 , and the grant signals are g_1, g_2, \dots, g_8 . It is easy to see how the code in Figure 8.74 is extended to allow eight requesting devices, so we will not show it here.

```

.
.
.
PROCESS( y )
BEGIN
    IF y = gnt1 THEN g(1) <= '1' ;
    ELSIF y = gnt2 THEN g(2) <= '1' ;
    ELSIF y = gnt3 THEN g(3) <= '1' ;
    END IF ;
END PROCESS ;
END Behavior ;

```

Figure 8.75 Incorrect VHDL code for the grant signals.

```

.
.
.
PROCESS( y )
BEGIN
    g(1) <= '0' ;
    g(2) <= '0' ;
    g(3) <= '0' ;
    IF y = gnt1 THEN g(1) <= '1' ;
    ELSIF y = gnt2 THEN g(2) <= '1' ;
    ELSIF y = gnt3 THEN g(3) <= '1' ;
    END IF ;
END PROCESS ;
END Behavior ;

```

Figure 8.76 Correct VHDL code for the grant signals.

Implementation in a CPLD

We first consider implementation of the arbiter in a CPLD. To represent the nine states in the FSM, the synthesis tool uses four flip-flops, called y_4 , y_3 , y_2 , and y_1 . The reset state, *Idle*, is assigned the code $y_4y_3y_2y_1 = 0000$. The other states are encoded as $gnt1 = 0001$, $gnt2 = 0010$, $gnt3 = 0100$, $gnt4 = 1000$, $gnt5 = 0011$, $gnt6 = 0101$, $gnt7 = 0110$, and $gnt8 = 1001$.

It is not obvious why the synthesis tool selected this particular state assignment. The tool considers many different state assignments and selects one that minimizes the cost of the final circuit. For the CPLD implementation the synthesis tool attempts to choose the state assignment that results in the fewest product terms in the final circuit.

To see the complexity of the circuit, we need to examine the logic expressions generated for both the grant signals and the inputs to the state flip-flops. The expression for each grant signal is a direct result of the encoding used for the state that produces the grant. For instance, state $gnt8$ is encoded as 1001, resulting in $g_8 = y_4\bar{y}_3\bar{y}_2y_1$.

The logic feeding the state flip-flops is more complex. For example, the expression derived by the tool for the input, Y_4 , to flip-flop y_4 is

$$Y_4 = \bar{r}_1\bar{r}_2\bar{r}_3\bar{r}_5\bar{r}_6\bar{r}_7r_8\bar{y}_1\bar{y}_2\bar{y}_3\bar{y}_4 + \bar{r}_1\bar{r}_2\bar{r}_3r_4\bar{y}_1\bar{y}_2\bar{y}_3 + r_8\bar{y}_1\bar{y}_2\bar{y}_3y_4 + r_4\bar{y}_1\bar{y}_2\bar{y}_3y_4$$

Figure 8.77 gives a timing simulation for the CPLD implementation. For simplicity only the request signals r_1 , r_2 , and r_8 are displayed, along with the grant signals g_1 , g_2 , and g_8 . After the machine is reset at the beginning of the simulation, all three requests r_1 , r_2 , and r_8 are asserted. Although not shown in the timing diagram, all of the other request signals are set to 0. The machine first changes to state $gnt1$ and asserts g_1 . After r_1 becomes 0 the machine changes back to state *Idle*. On the next clock cycle a transition to state $gnt2$ takes place and g_2 is asserted. After r_2 becomes 0 the machine changes back to state *Idle*, and then to state $gnt8$ to assert g_8 . The simulation results indicate that the required priority scheme is properly implemented by our VHDL code.

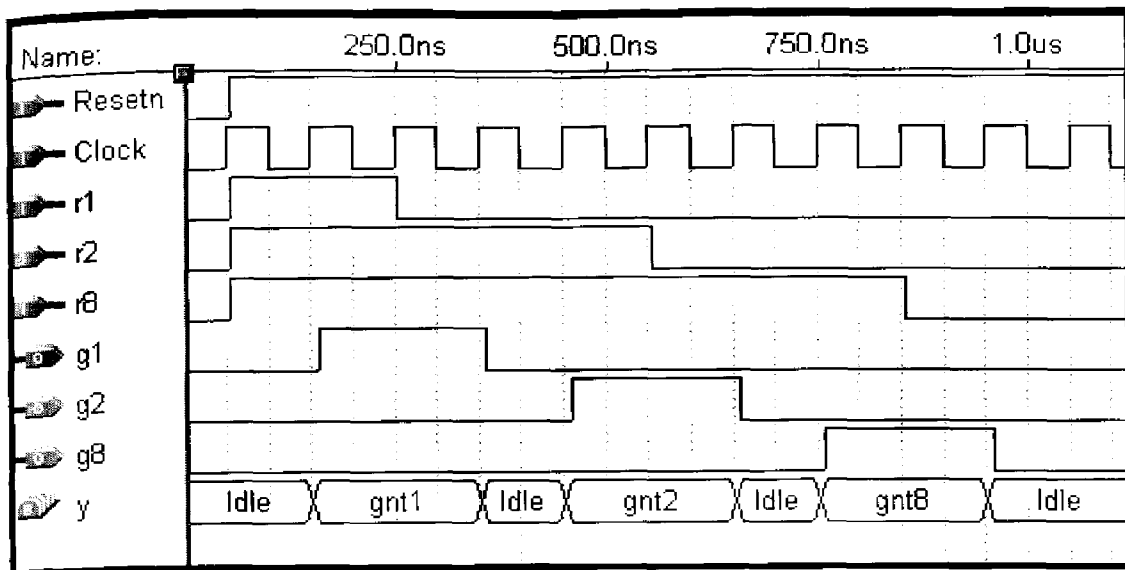


Figure 8.77 Simulation results for the arbiter circuit.

A more detailed display of a part of the simulation results appears in Figure 8.78. The waveforms are arranged such that only the signals *Clock*, *g₈*, and *y* are visible during the time period when *g₈* is asserted. The simulation results show that a propagation delay (about 7 ns) is needed for the *g₈* signal to be produced after the machine changes to the *gnt8* state. This delay corresponds to the time needed to generate the function $g_8 = y_1\bar{y}_2\bar{y}_3y_4$. We will show in section 8.8.2 that it is possible to optimize the timing of the implemented circuit such that a grant signal is produced immediately when the machine enters the grant state.

Implementation in an FPGA

Next we consider implementing the arbiter FSM in an FPGA chip. Instead of using four flip-flops to represent the nine states in the FSM, the FPGA implementation generated by the synthesis tool has nine state flip-flops, called y_9, y_8, \dots, y_1 . The state assignment is $Idle = 000000000$, $gnt1 = 110000000$, $gnt2 = 101000000$, $gnt3 = 100100000$, $gnt4 = 100010000$, $gnt5 = 100001000$, $gnt6 = 100000100$, $gnt7 = 100000010$, and $gnt8 = 100000001$. This assignment is very similar to the one-hot encoding. The only difference

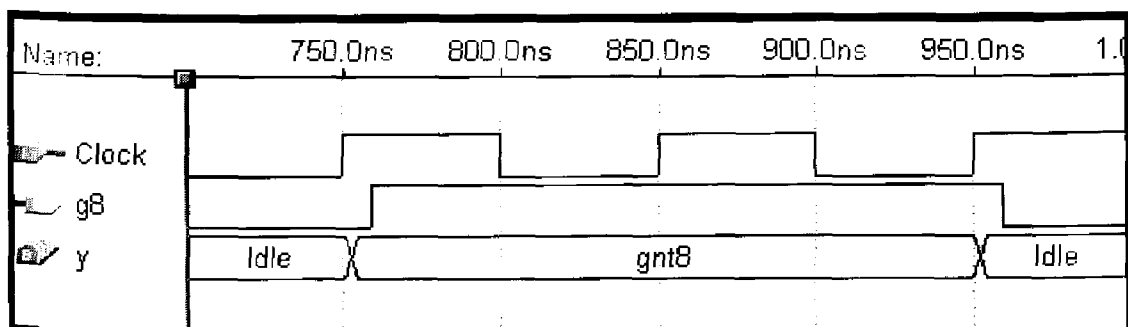


Figure 8.78 Output delays in the arbiter circuit.

is that the left-most flip-flop output, y_9 , is complemented. This is done to provide a simple reset mechanism. When all flip-flops are reset, they define the state represented by all state variables being 0, which is the *Idle* state.

In section 4.6 we discussed the issue of the limited fan-in of the logic gates provided in certain types of chips. We said that in such chips logic functions with a large number of inputs must be decomposed into smaller functions. For an FSM, this means that if the logic circuit that feeds each state flip-flop has many inputs, then several levels of gates may be needed. This increases the propagation delays in the circuit and results in a slower speed of operation. For the preceding CPLD implementation of the arbiter FSM, we showed the logic expression for the input to flip-flop y_4 . If that expression were implemented in an FPGA that has four-input lookup tables (LUTs) it would require a total of eight LUTs in a circuit that has three of the LUTs connected in series.

By contrast, the choice of nine state variables with the preceding state assignment results in a much simpler circuit. As an example, for the input to flip-flop y_8 , the synthesis tool produces $Y_8 = r_1y_8 + r_1\bar{y}_9$. Since it has only four inputs, this expression can be realized in a single four-input lookup table. The other eight next-state expressions are also relatively simple. To see the effect that the state assignment has on the speed of operation of the FSM, we compared two versions of the circuit implemented in an FPGA chip: one that has nine state flip-flops as shown above and another that has four flip-flops with the state assignment given earlier for the CPLD implementation. The results showed that when nine state variables are used, the arbiter FSM works correctly up to a maximum clock rate of 88.5 MHz, whereas when four state variables are used, the maximum clock rate is only 54.1 MHz. Note that the speed of operation of the circuit depends on the specific target chip and can also vary based on the synthesis options selected in the CAD tools.

We should also consider the complexity of the logic needed for the grant signals. These signals are trivial to generate when nine flip-flops are used. Each grant signal is the output of one of the flip-flops. For example, $g_8 = y_1$.

8.8.2 MINIMIZING THE OUTPUT DELAYS FOR AN FSM

Figure 8.78 shows the propagation delay incurred to produce the grant signals when the arbiter circuit is implemented in a CPLD. Once the circuit changes to a grant state, the appropriate grant signal is asserted after a delay of about 7 ns. The delay is caused by the circuitry that generates the grant signal depending on the values of the state flip-flops. However, as we showed in the FPGA implementation, when one-hot encoding is used each grant signal is provided as the output of one of the state flip-flops. Hence no extra circuitry is needed to generate the output signals. Figure 8.79 shows a timing simulation when the arbiter circuit is implemented in a CPLD using one-hot encoding. There is very little delay from when the circuit enters a grant state until the grant signal is produced. A small delay is incurred because of the time needed to propagate through the buffer that exists between the flip-flop output and the pin on the CPLD chip package, but this delay is only about 2 ns. This type of timing optimization is done in practice by designers of sequential circuits, because design specifications often require that outputs be produced after the shortest possible delays.

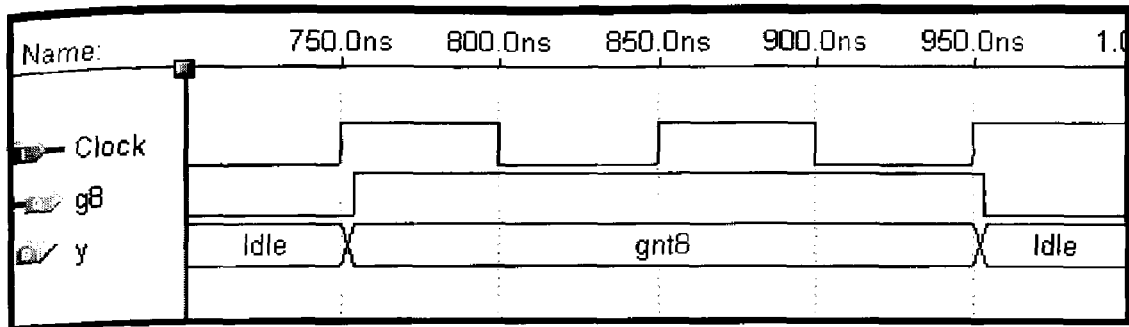


Figure 8.79 Output delays when using one-hot encoding.

8.8.3 SUMMARY

Our arbiter FSM is a practical circuit that is useful in many types of systems. An example is a computer system in which various devices in the system are connected by a bus. One aspect of the arbiter may have to be changed for use in such a system. Because of the priority scheme, it is possible that devices with high priority could prevent a lower-priority device from receiving a grant signal for an arbitrarily long time. This condition is often called *starvation* of the low-priority device. It is not difficult to modify the arbiter FSM to account for this issue (see problem 8.38).

8.9 ANALYSIS OF SYNCHRONOUS SEQUENTIAL CIRCUITS

In addition to knowing how to design a synchronous sequential circuit, the designer has to be able to analyze the behavior of an existing circuit. The analysis task is much simpler than the synthesis task. In this section we will show how analysis may be performed.

To analyze a circuit, we simply reverse the steps of the synthesis process. The outputs of the flip-flops represent the present-state variables. Their inputs determine the next state that the circuit will enter. From this information we can construct the state-assigned table for the circuit. This table leads to a state table and the corresponding state diagram by giving a name to each state. The type of flip-flops used in the circuit is a factor, as we will see in the examples that follow.

D-TYPE FLIP-FLOPS Figure 8.80 gives an FSM that has two D flip-flops. Let y_1 and y_2 be the present-state variables and Y_1 and Y_2 the next-state variables. The next-state and output expressions are

$$Y_1 = w\bar{y}_1 + wy_2$$

$$Y_2 = wy_1 + wy_2$$

$$z = y_1y_2$$

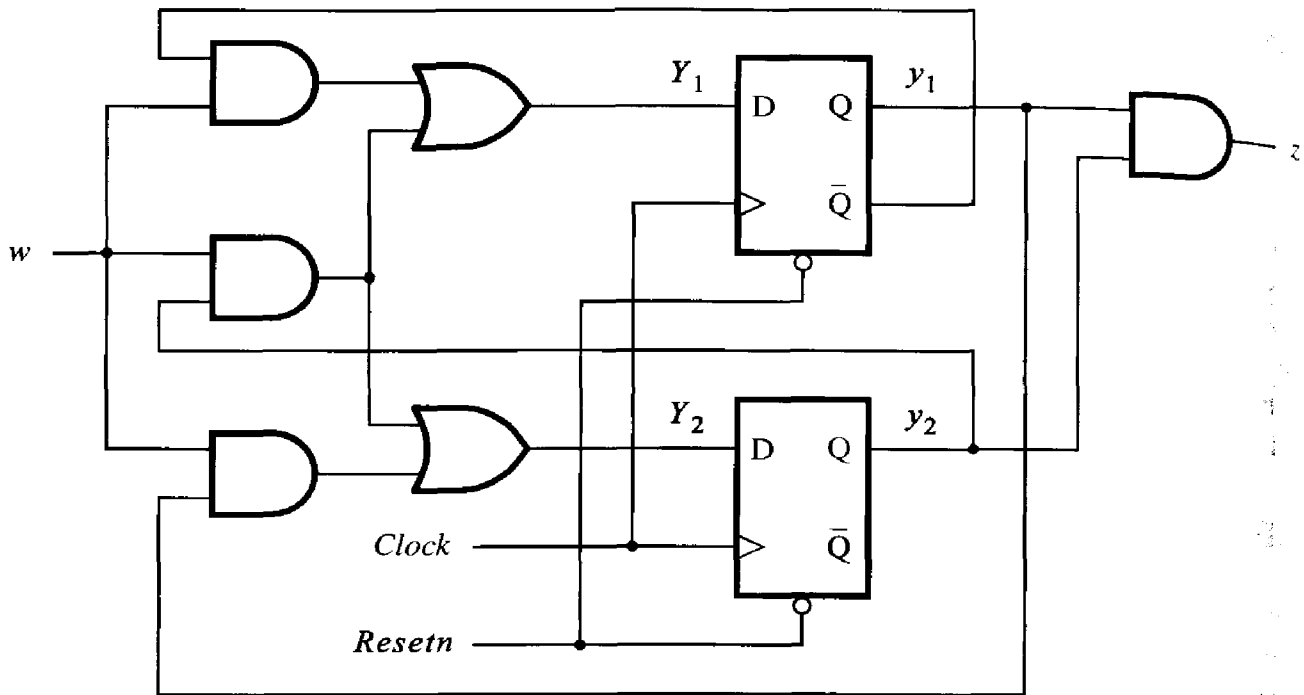


Figure 8.80 Circuit for Example 8.8.

Since there are two flip-flops, the FSM has four states. A good starting point in the analysis is to assume an initial state of the flip-flops such as $y_1 = y_2 = 0$. From the expressions for Y_1 and Y_2 , we can derive the state-assigned table in Figure 8.81a. For example, in the first row of the table $y_1 = y_2 = 0$. Then $w = 0$ causes $Y_1 = Y_2 = 0$, and $w = 1$ causes $Y_1 = 1$ and $Y_2 = 0$. The output for this state is $z = 0$. The other rows are derived in the same manner. Labeling the states as A , B , C , and D yields the state table in Figure 8.81b. From this table it is apparent that following the reset condition the FSM produces the output $z = 1$ whenever three consecutive 1s occur on the input w . Therefore, the FSM acts as a sequence detector for this pattern.

➤ **JK-TYPE FLIP-FLOPS** Now consider the circuit in Figure 8.82, which has two JK flip-flops. The expressions for the inputs to the flip-flops are

$$\begin{aligned} J_1 &= w \\ K_1 &= \bar{w} + \bar{y}_2 \\ J_2 &= wy_1 \\ K_2 &= \bar{w} \end{aligned}$$

The output is given by $z = y_1y_2$.

From these expressions we can derive the excitation table in Figure 8.83. Interpreting the entries in this table, we can construct the state-assigned table. For example, consider $y_2y_1 = 00$ and $w = 0$. Then, since $J_2 = J_1 = 0$ and $K_2 = K_1 = 1$, both flip-flops will remain in the 0 state; hence $Y_2 = Y_1 = 0$. If $y_2y_1 = 00$ and $w = 1$, then $J_2 = K_2 = 0$ and

Present state y_2y_1	Next State		Output z
	$w = 0$	$w = 1$	
	Y_2Y_1	Y_2Y_1	
00	00	01	0
01	00	10	0
10	00	11	0
11	00	11	1

(a) State-assigned table

Present state	Next state		Output z
	$w = 0$	$w = 1$	
A	A	B	0
B	A	C	0
C	A	D	0
D	A	D	1

(b) State table

Figure 8.81 Tables for the circuit in Figure 8.80.

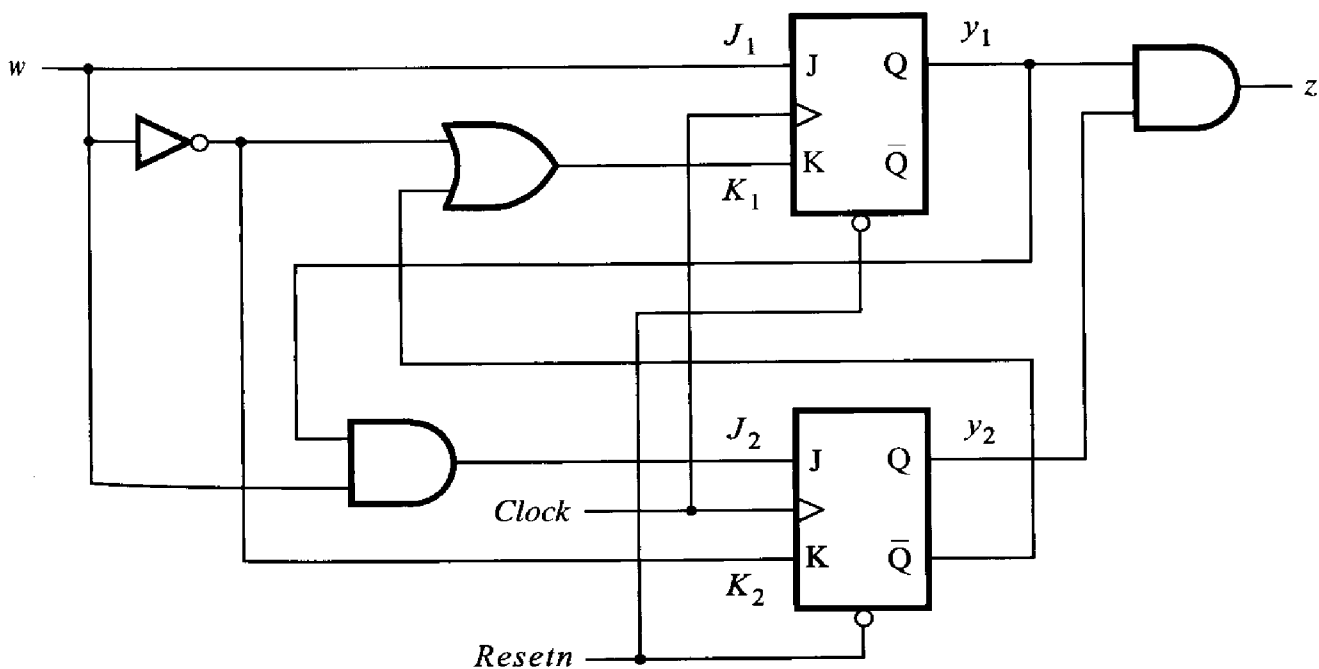


Figure 8.82 Circuit for Example 8.9.

Present state y_2y_1	Flip-flop inputs				Output z
	$w = 0$		$w = 1$		
	J_2K_2	J_1K_1	J_2K_2	J_1K_1	
00	01	01	00	11	0
01	01	01	10	11	0
10	01	01	00	10	0
11	01	01	10	10	1

Figure 8.83 The excitation table for the circuit in Figure 8.82.

$J_1 = K_1 = 1$, which leaves the y_2 flip-flop unchanged and sets the y_1 flip-flop to 1; hence $Y_2 = 0$ and $Y_1 = 1$. If $y_2y_1 = 01$ and $w = 0$, then $J_2 = J_1 = 0$ and $K_2 = K_1 = 1$, which resets the y_1 flip-flop and results in the state $y_2y_1 = 00$; hence $Y_2 = Y_1 = 0$. Similarly, if $y_2y_1 = 01$ and $w = 1$, then $J_2 = 1$ and $K_2 = 0$ sets y_2 to 1; hence $Y_2 = 1$, while $J_1 = K_1 = 1$ toggles y_1 ; hence $Y_1 = 0$. This leads to the state $y_2y_1 = 10$. Completing this process, we find that the resulting state-assigned table is the same as the one in Figure 8.81a. The conclusion is that the circuits in Figures 8.80 and 8.82 implement the same FSM.

8.10 MIXED FLIP-FLOPS There is no reason why one cannot use a mixture of flip-flop types in one circuit. Figure 8.84 shows a circuit with one D and one T flip-flop. The expressions for this circuit are

$$D_1 = w(\bar{y}_1 + y_2)$$

$$T_2 = \bar{w}y_2 + wy_1\bar{y}_2$$

$$z = y_1y_2$$

From these expressions we derive the excitation table in Figure 8.85. Since it is a T flip-flop, y_2 changes its state only when $T_2 = 1$. Thus if $y_2y_1 = 00$ and $w = 0$, then because $T_2 = D_1 = 0$ the state of the circuit will not change. An example of where $T_2 = 1$ is when $y_2y_1 = 01$ and $w = 1$, which causes y_2 to change to 1; $D_1 = 0$ makes $y_1 = 0$, hence $Y_2 = 1$ and $Y_1 = 0$. The other cases where $T_2 = 1$ occur when $w = 0$ and $y_2y_1 = 10$ or 11. In both of these cases $D_1 = 0$. Hence the T flip-flop changes its state from 1 to 0, while the D flip-flop is cleared, which means that the next state is $Y_2Y_1 = 00$. Completing this analysis we again obtain the state-assigned table in Figure 8.81a. Thus this circuit is yet another implementation of the FSM represented by the state table in Figure 8.81b.

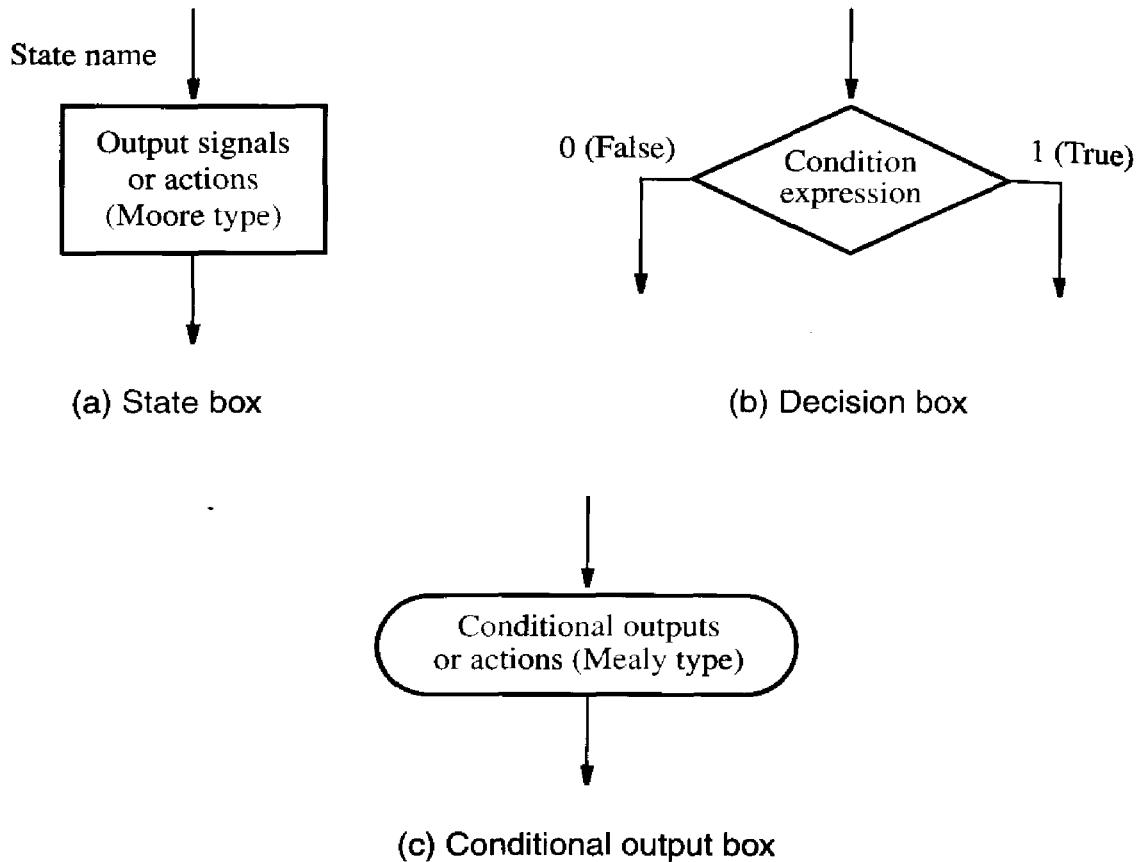


Figure 8.86 Elements used in ASM charts.

- State box** – A rectangle represents a state of the FSM. It is equivalent to a node in the state diagram or a row in the state table. The name of the state is indicated outside the box in the top-left corner. The Moore-type outputs are listed inside the box. These are the outputs that depend only on the values of the state variables that define the state; we will refer to them simply as *Moore outputs*. It is customary to write only the name of the signal that has to be asserted. Thus it is sufficient to write z , rather than $z = 1$, to indicate that the output z must have the value 1. Also, it may be useful to indicate an action that must be taken; for example, $Count \leftarrow Count + 1$ specifies that the contents of a counter have to be incremented by 1. Of course, this is just a simple way of saying that the control signal that causes the counter to be incremented must be asserted. We will use this way of specifying actions in larger systems that are discussed in Chapter 10.
- Decision box** – A diamond indicates that the stated condition expression is to be tested and the exit path is to be chosen accordingly. The condition expression consists of one or more inputs to the FSM. For example, w indicates that the decision is based on the value of the input w , whereas $w_1 \cdot w_2$ indicates that the true path is taken if $w_1 = w_2 = 1$ and the false path is taken otherwise.
- Conditional output box** – An oval denotes the output signals that are of Mealy type. These outputs depend on the values of the state variables and the inputs of the FSM; we will refer to these outputs simply as *Mealy outputs*. The condition that determines whether such outputs are generated is specified in a decision box.

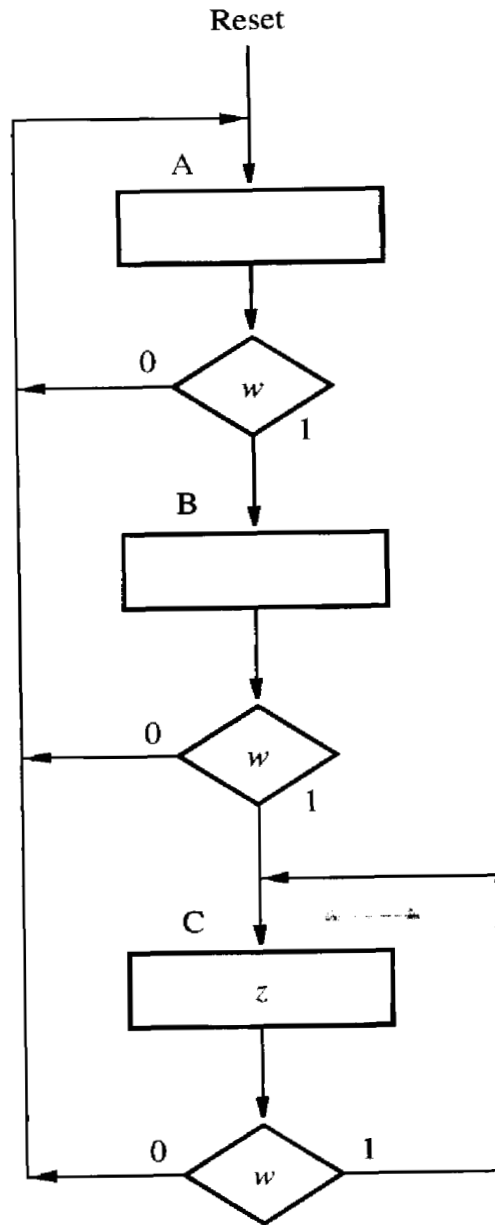


Figure 8.87 ASM chart for the FSM in Figure 8.3.

Figure 8.87 gives the ASM chart that represents the FSM in Figure 8.3. The transitions between state boxes depend on the decisions made by testing the value of the input variable w . In each case if $w = 0$, the exit path from a decision box leads to state A. If $w = 1$, then a transition from A to B or from B to C takes place. If $w = 1$ in state C, then the FSM stays in that state. The chart specifies a Moore output z , which is asserted only in state C, as indicated in the state box. In states A and B, the value of z is 0 (not asserted), which is implied by leaving the corresponding state boxes blank.

Figure 8.88 provides an example with Mealy outputs. This chart represents the FSM in Figure 8.23. The output, z , is equal to 1 when the machine is in state B and $w = 1$. This is indicated using the conditional output box. In all other cases the value of z is 0, which is implied by not specifying z as an output of state B for $w = 0$ and state A for w equal to 0 or 1.

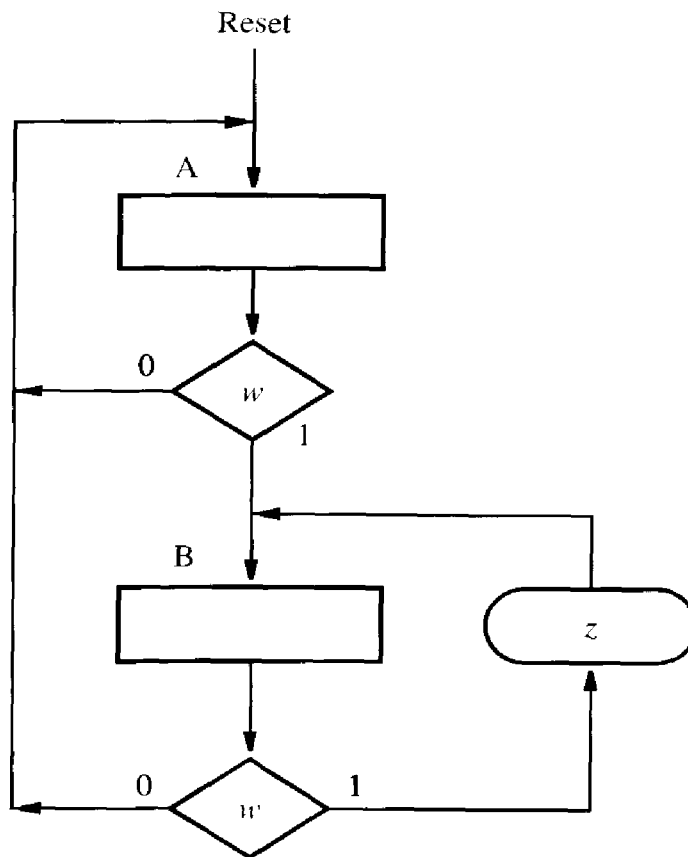


Figure 8.88 ASM chart for the FSM in Figure 8.23.

Figure 8.89 gives the ASM chart for the arbiter FSM in Figure 8.73. The decision box drawn below the state box for *Idle* specifies that if $r_1 = 1$, then the FSM changes to state *gnt1*. In this state the FSM asserts the output signal g_1 . The decision box to the right of the state box for *gnt1* specifies that as long as $r_1 = 1$, the machine stays in state *gnt1*, and when $r_1 = 0$, it changes to state *Idle*. The decision box labeled r_2 that is drawn below the state box for *Idle* specifies that if $r_2 = 1$, then the FSM changes to state *gnt2*. This decision box can be reached only after first checking the value of r_1 and following the arrow that corresponds to $r_1 = 0$. Similarly, the decision box labeled r_3 can be reached only if both r_1 and r_2 have the value 0. Hence the ASM chart describes the required priority scheme for the arbiter.

ASM charts are similar to traditional flowcharts. Unlike a traditional flowchart, the ASM chart includes timing information because it implicitly specifies that the FSM changes (flows) from one state to another only after each active clock edge. The examples of ASM charts presented here are quite simple. We have used them to introduce the ASM chart terminology by giving examples of state, decision, and conditional-output boxes. Another term sometimes applied to ASM charts is *ASM block*, which refers to a single state box and any decision and conditional-output boxes that the state box may be connected to. The ASM charts can be used to describe complex circuits that include one or more finite state machines and other circuitry such as registers, shift registers, counters, adders, and multipliers. We will use ASM charts as an aid for designing more complex circuits in Chapter 10.

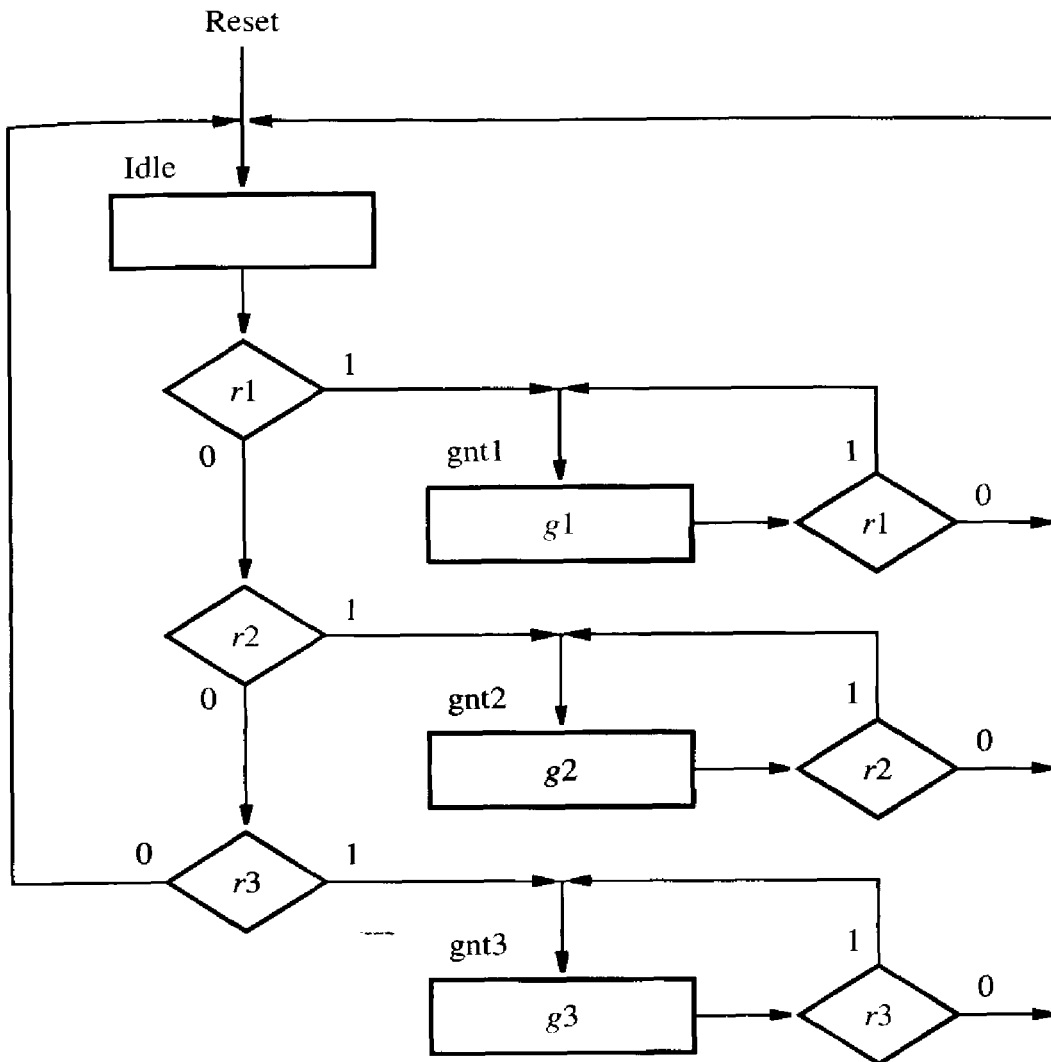


Figure 8.89 ASM chart for the arbiter FSM in Figure 8.73.

8.11 FORMAL MODEL FOR SEQUENTIAL CIRCUITS

This chapter has presented the synchronous sequential circuits using a rather informal approach because this is the easiest way to grasp the concepts that are essential in designing such circuits. The same topics can also be presented in a more formal manner, which has been the style adopted in many books that emphasize the switching theory aspects rather than the design using CAD tools. A formal model often gives a concise specification that is difficult to match in a more descriptive presentation. In this section we will describe a formal model that represents a general class of sequential circuits, including those of the synchronous type.

Figure 8.90 represents a general sequential circuit. The circuit has $W = \{w_1, w_2, \dots, w_n\}$ inputs, $Z = \{z_1, z_2, \dots, z_m\}$ outputs, $y = \{y_1, y_2, \dots, y_k\}$ present-state variables, and $Y = \{Y_1, Y_2, \dots, Y_k\}$ next-state variables. It can have up to 2^k states, $S = \{S_1, S_2, \dots, S_{2^k}\}$. There are delay elements in the feedback paths for the state-variables which ensure that y will take the values of Y after a time delay Δ . In the case of synchronous sequential circuits, the delay elements are flip-flops, which change their state on the active edge of a

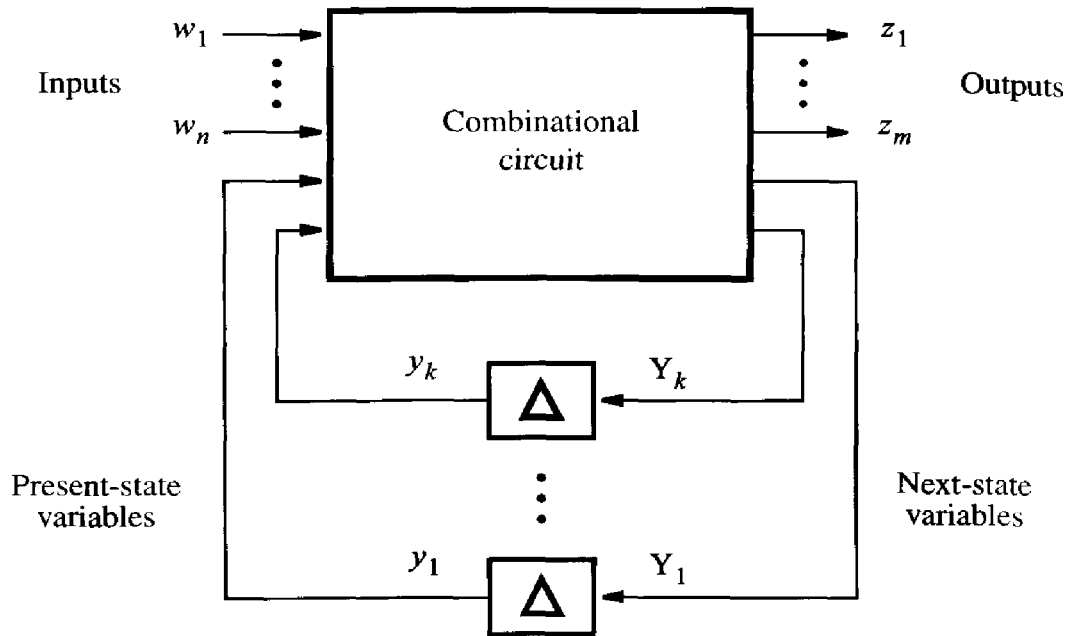


Figure 8.90 The general model for a sequential circuit.

clock signal. Thus the delay Δ is determined by the clock period. The clock period must be long enough to allow for the propagation delay in the combinational circuit, in addition to the setup and hold parameters of the flip-flops.

Using the model in Figure 8.90, a synchronous sequential circuit, M , can be defined formally as a quintuple

$$M = (W, Z, S, \varphi, \lambda)$$

where

- W , Z , and S are finite, nonempty sets of inputs, outputs, and states, respectively.
- φ is the state transition function, such that $S(t+1) = \varphi[W(t), S(t)]$.
- λ is the output function, such that $\lambda(t) = \lambda[S(t)]$ for the Moore model and $\lambda(t) = \lambda[W(t), S(t)]$ for the Mealy model.

This definition assumes that the time between t and $t+1$ is one clock cycle.

We will see in the next chapter that the delay Δ need not be controlled by a clock. In asynchronous sequential circuits the delays are due solely to the propagation delays through various gates.

8.12 CONCLUDING REMARKS

The existence of closed loops and delays in a sequential circuit leads to a behavior that is characterized by the set of states that the circuit can reach. The present values of the inputs are not the sole determining factor in this behavior, because a given valuation of inputs may cause the circuit to behave differently in different states.

The propagation delays through a sequential circuit must be taken into account. The design techniques presented in this chapter are based on the assumption that all changes in the circuit are triggered by the active edge of a clock signal. Such circuits work correctly only if all internal signals are stable when the clock signal arrives. Thus the clock period must be longer than the longest propagation delay in the circuit.

Synchronous sequential circuits are used extensively in practical designs. They are supported by the commonly used CAD tools. All textbooks on the design of logic circuits devote considerable space to synchronous sequential circuits. Some of the more notable references are [1–14].

In the next chapter we will present a different class of sequential circuits, which do not use flip-flops to represent the states of the circuit and do not use clock pulses to trigger changes in the states.

8.13 EXAMPLES OF SOLVED PROBLEMS

This section presents some typical problems that the reader may encounter, and shows how such problems can be solved.

Problem: Design an FSM that has an input w and an output z . The machine is a sequence detector that produces $z = 1$ when the previous two values of w were 00 or 11; otherwise $z = 0$. **Ex**

Solution: Section 8.1 presents the design of a sequence detector that detects the occurrence of consecutive 1s. Using the same approach, the desired FSM can be specified using the state diagram in Figure 8.91. State C denotes the occurrence of two or more 0s, and state E denotes two or more 1s. The corresponding state table is shown in Figure 8.92.

We can try to reduce the number of states by using the partitioning minimization procedure in section 8.6, which gives the following partitions

$$P_1 = (ABCDE)$$

$$P_2 = (ABD)(CE)$$

$$P_3 = (A)(B)(C)(D)(E)$$

Since all five states are needed, we have to use three flip-flops.

A straightforward state assignment leads to the state-assigned table in Figure 8.93. The codes $y_3y_2y_1 = 101, 110, 111$ can be treated as don't-care conditions. Then the next-state expressions are

$$Y_1 = w\bar{y}_1\bar{y}_3 + w\bar{y}_2\bar{y}_3 + \bar{w}y_1y_2 + \bar{w}\bar{y}_1\bar{y}_2$$

$$Y_2 = y_1\bar{y}_2 + \bar{y}_1y_2 + w\bar{y}_2\bar{y}_3$$

$$Y_3 = wy_3 + wy_1y_2$$

The output expression is

$$z = y_3 + \bar{y}_1y_2$$

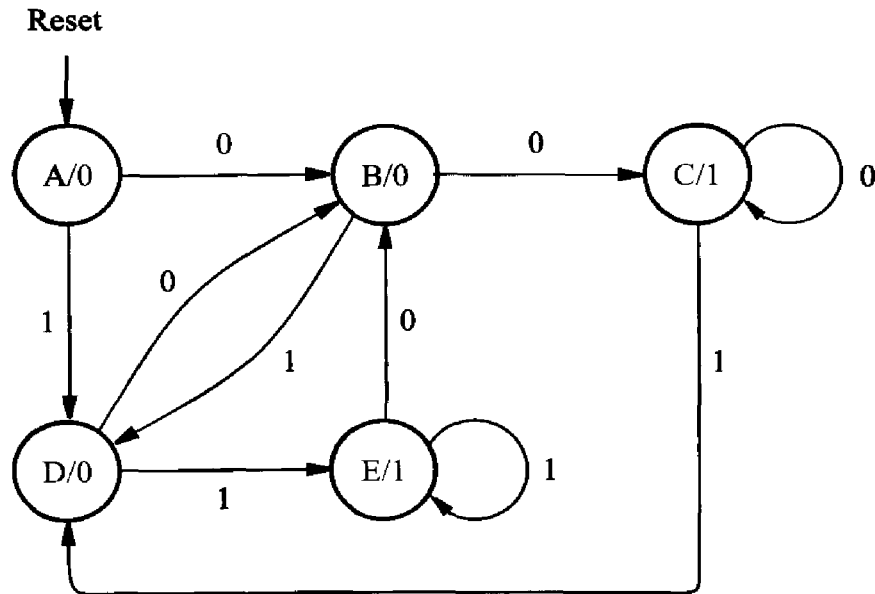


Figure 8.91 State diagram for Example 8.11.

Present state	Next state		Output z
	$w = 0$	$w = 1$	
A	B	D	0
B	C	D	0
C	C	D	1
D	B	E	0
E	B	E	1

Figure 8.92 State table for the FSM in Figure 8.91.

	Present state	Next state		Output z
		$w = 0$	$w = 1$	
	$y_3y_2y_1$	$Y_3Y_2Y_1$	$Y_3Y_2Y_1$	
A	000	001	011	0
B	001	010	011	0
C	010	010	011	1
D	011	001	100	0
E	100	001	100	1

Figure 8.93 State-assigned table for the FSM in Figure 8.92.

	Present state $y_3y_2y_1$	Next state		Output z
		$w = 0$	$w = 1$	
		$Y_3Y_2Y_1$	$Y_3Y_2Y_1$	
A	000	100	110	0
B	100	101	110	0
C	101	101	110	1
D	110	100	111	0
E	111	100	111	1

Figure 8.94 An improved state assignment for the FSM in Figure 8.92.

These expressions seem to be unnecessarily complex, suggesting that we may attempt to find a better state assignment. Observe that state *A* is reached only when the machine is reset by means of the *Reset* input. So, it may be advantageous to assign the four codes in which $y_3 = 1$ to the states *B*, *C*, *D*, and *E*. The result is the state-assigned table in Figure 8.94. From it, the next-state and output expressions are

$$Y_1 = wy_2 + \bar{w}y_3\bar{y}_2$$

$$Y_2 = w$$

$$Y_3 = 1$$

$$z = y_1$$

This is a much better solution.

Problem: Implement the sequence detector of Example 8.11 by using two FSMs. One FSM detects the occurrence of consecutive 1s, while the other detects consecutive 0s. **E**

Solution: A good realization of the FSM that detects consecutive 1s is given in Figures 8.16 and 8.17. The next-state and output expressions are

$$Y_1 = w$$

$$Y_2 = wy_1$$

$$z_{ones} = y_2$$

A similar FSM that detects consecutive 0s is defined in Figure 8.95. Its expressions are

$$Y_3 = \bar{w}$$

$$Y_4 = \bar{w}y_3$$

$$z_{zeros} = y_4$$

Present state	Next state		Output z_{zeros}
	$w = 0$	$w = 1$	
D	E	D	0
E	F	D	0
F	F	D	1

(a) State table

	Present state	Next state		Output z_{zeros}
		$w = 0$	$w = 1$	
	y_4y_3	Y_4Y_3	Y_4Y_3	
D	00	01	00	0
E	01	11	00	0
F	11	11	00	1
	10	dd	dd	d

(b) State-assigned table

Figure 8.95 FSM that detects a sequence of two zeros.

The output of the combined circuit is

$$z = z_{ones} + z_{zeros}$$

8.13 Problem: Derive a Mealy-type FSM that can act as a sequence detector described in Example 8.11.

Solution: A state diagram for the desired FSM is depicted in Figure 8.96. The corresponding state table is presented in Figure 8.97. Two flip-flops are needed to implement this FSM. A state-assigned table is given in Figure 8.98, which leads to the next-state and output expressions

$$Y_1 = 1$$

$$Y_2 = w$$

$$z = \bar{w}y_1\bar{y}_2 + wy_2$$

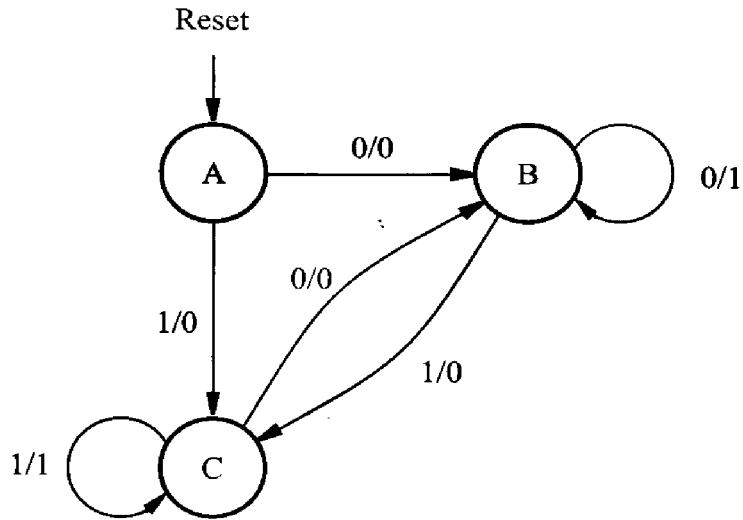


Figure 8.96 State diagram for Example 8.13.

Present state	Next state		Output z	
	$w = 0$	$w = 1$	$w = 0$	$w = 1$
A	B	C	0	0
B	B	C	1	0
C	B	C	0	1

Figure 8.97 State table for the FSM in Figure 8.96.

	Present state	Next state		Output	
		$w = 0$	$w = 1$	$w = 0$	$w = 1$
	y_2y_1	Y_2Y_1	Y_2Y_1	z	z
A	00	01	11	0	0
B	01	01	11	1	0
C	11	01	11	0	1

Figure 8.98 State-assigned table for the FSM in Figure 8.97.

	Present state $y_3y_2y_1$	Flip-flop inputs								Output z
		$w = 0$				$w = 1$				
		$Y_3Y_2Y_1$	J_3K_3	J_2K_2	J_1K_1	$Y_3Y_2Y_1$	J_3K_3	J_2K_2	J_1K_1	
A	000	100	1d	0d	0d	110	1d	1d	0d	0
B	100	101	d0	0d	1d	110	d0	1d	0d	0
C	101	101	d0	0d	d0	110	d0	1d	d1	1
D	110	100	d0	d1	0d	111	d0	d0	1d	0
E	111	100	d0	d1	d1	111	d0	d0	d0	1

Figure 8.99 Excitation table for the FSM in Figure 8.94 with JK flip-flops.

Example 8.14 Problem: Implement the FSM in Figure 8.94 using JK-type flip-flops.

Solution: Figure 8.99 shows the excitation table. It results in the following next-state and output expressions

$$J_1 = wy_2 + \bar{w}y_3\bar{y}_2$$

$$K_1 = \bar{w}y_2 + wy_1\bar{y}_2$$

$$J_2 = w$$

$$K_2 = \bar{w}$$

$$J_3 = 1$$

$$K_3 = 0$$

$$z = y_1$$

Example 8.15 Problem: Write VHDL code to implement the FSM in Figure 8.91.

Solution: Using the style of code given in Figure 8.29, the required FSM can be specified as shown in Figure 8.100.

Example 8.16 Problem: Write VHDL code to implement the FSM in Figure 8.96.

Solution: Using the style of code given in Figure 8.36, the Mealy-type FSM can be specified as shown in Figure 8.101.

```

LIBRARY ieee ;
USE ieee.std_logic_1164.all ;

ENTITY sequence IS
    PORT ( Clock, Resetn, w      : IN   STD_LOGIC ;
          z                      : OUT  STD_LOGIC ) ;
END sequence ;

ARCHITECTURE Behavior OF sequence IS
    TYPE State_type IS (A, B, C, D, E) ;
    SIGNAL y : State_type ;
BEGIN
    PROCESS ( Resetn, Clock )
    BEGIN
        IF Resetn = '0' THEN y <= A ;
        ELSIF (Clock'EVENT AND Clock = '1') THEN
            CASE y IS
                WHEN A =>
                    IF w = '0' THEN y <= B ;
                    ELSE y <= D ;
                    END IF ;
                WHEN B =>
                    IF w = '0' THEN y <= C ;
                    ELSE y <= D ;
                    END IF ;
                WHEN C =>
                    IF w = '0' THEN y <= C ;
                    ELSE y <= D ;
                    END IF ;
                WHEN D =>
                    IF w = '0' THEN y <= B ;
                    ELSE y <= E ;
                    END IF ;
                WHEN E =>
                    IF w = '0' THEN y <= B ;
                    ELSE y <= E ;
                    END IF ;
            END CASE ;
        END IF ;
    END PROCESS ;
    z <= '1' WHEN (y = C OR y = E) ELSE '0' ;
END Behavior ;

```

Figure 8.100 VHDL code for the FSM in Figure 8.91.

```

LIBRARY ieee ;
USE ieee.std_logic_1164.all ;

ENTITY seqmealy IS
    PORT ( Clock, Resetn, w      : IN  STD_LOGIC ;
          z                      : OUT STD_LOGIC ) ;
END seqmealy ;

ARCHITECTURE Behavior OF seqmealy IS
    TYPE State_type IS (A, B, C) ;
    SIGNAL y : State_type ;
BEGIN
    PROCESS ( Resetn, Clock )
    BEGIN
        IF Resetn = '0' THEN y <= A ;
        ELSIF (Clock'EVENT AND Clock = '1') THEN
            CASE y IS
                WHEN A =>
                    IF w = '0' THEN y <= B ;
                    ELSE y <= C ;
                    END IF ;
                WHEN B =>
                    IF w = '0' THEN y <= B ;
                    ELSE y <= C ;
                    END IF ;
                WHEN C =>
                    IF w = '0' THEN y <= B ;
                    ELSE y <= C ;
                    END IF ;
            END CASE ;
        END IF ;
    END PROCESS ;

    PROCESS ( y, w )
    BEGIN
        CASE y IS
            WHEN A =>
                z <= '0' ;
            WHEN B =>
                z <= NOT w ;
            WHEN C =>
                z <= w ;
        END CASE ;
    END PROCESS ;
END Behavior ;

```

Figure 8.101 VHDL code for the FSM in Figure 8.96.

Problem: In computer systems it is often desirable to transmit data serially, namely, one bit at a time, to save on the cost of interconnecting cables. This means that parallel data at one end must be transmitted serially, and at the other end the received serial data has to be turned back into parallel form. Suppose that we wish to transmit ASCII characters in this manner. As explained in section 5.8, the standard ASCII code uses seven bits to define each character. Usually, a character occupies one byte, in which case the eighth bit can either be set to 0 or it can be used to indicate the parity of the other bits to ensure a more reliable transmission. **Ex**

Parallel-to-serial conversion can be done by means of a shift register. Assume that a circuit accepts parallel data, $B = b_7, b_6, \dots, b_0$, representing ASCII characters. Assume also that bit b_7 is set to 0. The circuit is supposed to generate a parity bit, p , and send it instead of b_7 as a part of the serial transfer. Figure 8.102 gives a possible circuit. An FSM is used to generate the parity bit, which is included in the output stream by using a multiplexer. A three-bit counter is used to determine when the p bit is transmitted, which happens when the count reaches 7. Design the desired FSM.

Solution: As the bits are shifted out of the shift register, the FSM examines the bits and keeps track of whether there has been an even or odd number of 1s. It sets p to 1 if there is odd parity. Hence, the FSM must have two states. Figure 8.103 presents the state table, the state-assigned table, and the resulting circuit. The next state expression is

$$Y = \bar{w}y + w\bar{y}$$

The output p is just equal to y .

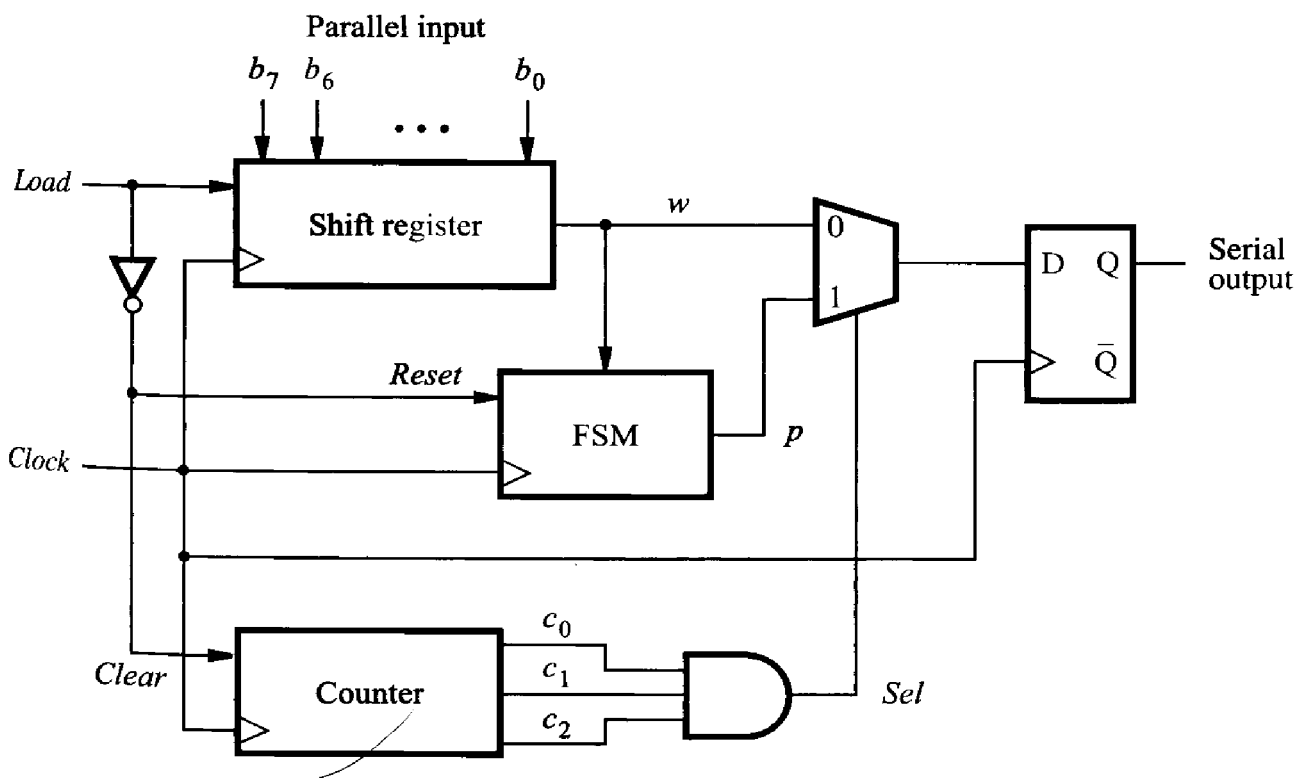


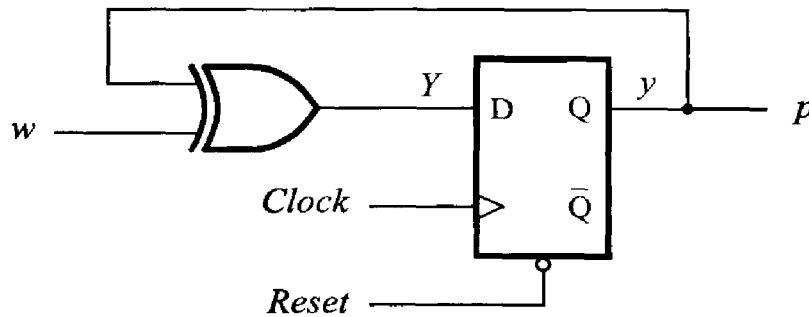
Figure 8.102 Parallel-to-serial converter.

Present state	Next state		Output P
	$w = 0$	$w = 1$	
S_{even}	S_{even}	S_{odd}	0
S_{odd}	S_{odd}	S_{even}	1

(a) State table

Present state	Next state		Output P
	$w = 0$	$w = 1$	
y	Y	Y	
0	0	1	0
1	1	0	1

(b) State-assigned table



(c) Circuit

Figure 8.103 FSM for parity generation.

PROBLEMS

Answers to problems marked by an asterisk are given at the back of the book.

- *8.1** An FSM is defined by the state-assigned table in Figure P8.1. Derive a circuit that realizes this FSM using D flip-flops.
- *8.2** Derive a circuit that realizes the FSM defined by the state-assigned table in Figure P8.1 using JK flip-flops.

Present state y_2y_1	Next state		Output z
	$w = 0$	$w = 1$	
	Y_2Y_1	Y_2Y_1	
00	10	11	0
01	01	00	0
10	11	00	0
11	10	01	1

Figure P8.1 State-assigned table for problems 8.1 and 8.2.

- 8.3** Derive the state diagram for an FSM that has an input w and an output z . The machine has to generate $z = 1$ when the previous four values of w were 1001 or 1111; otherwise, $z = 0$. Overlapping input patterns are allowed. An example of the desired behavior is

$w : 010111100110011111$
 $z : 000000100100010011$

- 8.4** Write VHDL code for the FSM described in problem 8.3.
- *8.5** Derive a minimal state table for a single-input and single-output Moore-type FSM that produces an output of 1 if in the input sequence it detects either 110 or 101 patterns. Overlapping sequences should be detected.
- *8.6** Repeat problem 8.5 for a Mealy-type FSM.
- 8.7** Derive the circuits that implement the state tables in Figures 8.51 and 8.52. What is the effect of state minimization on the cost of implementation?
- 8.8** Derive the circuits that implement the state tables in Figures 8.55 and 8.56. Compare the costs of these circuits.
- 8.9** A sequential circuit has two inputs, w_1 and w_2 , and an output, z . Its function is to compare the input sequences on the two inputs. If $w_1 = w_2$ during any four consecutive clock cycles, the circuit produces $z = 1$; otherwise, $z = 0$. For example

$w_1 : 0110111000110$
 $w_2 : 1110101000111$
 $z : 0000100001110$

Derive a suitable circuit.

- 8.10** Write VHDL code for the FSM described in problem 8.9.

- 8.11** A given FSM has an input, w , and an output, z . During four consecutive clock pulses, a sequence of four values of the w signal is applied. Derive a state table for the FSM that produces $z = 1$ when it detects that either the sequence $w : 0010$ or $w : 1110$ has been applied; otherwise, $z = 0$. After the fourth clock pulse, the machine has to be again in the reset state, ready for the next sequence. Minimize the number of states needed.
- *8.12** Derive a minimal state table for an FSM that acts as a three-bit parity generator. For every three bits that are observed on the input w during three consecutive clock cycles, the FSM generates the parity bit $p = 1$ if and only if the number of 1s in the three-bit sequence is odd.
- 8.13** Write VHDL code for the FSM described in problem 8.12.
- 8.14** Draw timing diagrams for the circuits in Figures 8.43 and 8.47, assuming the same changes in a and b signals for both circuits. Account for propagation delays.
- *8.15** Show a state table for the state-assigned table in Figure P8.1, using A, B, C, D for the four rows in the table. Give a new state-assigned table using a one-hot encoding. For A use the code $y_4y_3y_2y_1 = 0001$. For states B, C, D use the codes 0010, 0100, and 1000, respectively. Synthesize a circuit using D flip-flops.
- 8.16** Show how the circuit derived in problem 8.15 can be modified such that the code $y_4y_3y_2y_1 = 0000$ is used for the reset state, A , and the other codes for state B, C, D are changed as needed. (Hint: you do not have to resynthesize the circuit!)
- *8.17** In Figure 8.59 assume that the unspecified outputs in states B and G are 0 and 1, respectively. Derive the minimized state table for this FSM.
- 8.18** In Figure 8.59 assume that the unspecified outputs in states B and G are 1 and 0, respectively. Derive the minimized state table for this FSM.
- 8.19** Derive circuits that implement the FSMs defined in Figures 8.57 and 8.58. Can you draw any conclusions about the complexity of circuits that implement Moore and Mealy types of machines?
- 8.20** Design a counter that counts pulses on line w and displays the count in the sequence 0, 2, 1, 3, 0, 2, Use D flip-flops in your circuit.
- *8.21** Repeat problem 8.20 using JK flip-flops.
- *8.22** Repeat problem 8.20 using T flip-flops.
- 8.23** Design a modulo-6 counter, which counts in the sequence 0, 1, 2, 3, 4, 5, 0, 1, The counter counts the clock pulses if its enable input, w , is equal to 1. Use D flip-flops in your circuit.
- 8.24** Repeat problem 8.23 using JK flip-flops.
- 8.25** Repeat problem 8.23 using T flip-flops.
- 8.26** Design a three-bit counterlike circuit controlled by the input w . If $w = 1$, then the counter adds 2 to its contents, wrapping around if the count reaches 8 or 9. Thus if the present state is 8 or 9, then the next state becomes 0 or 1, respectively. If $w = 0$, then the counter subtracts 1 from its contents, acting as a normal down-counter. Use D flip-flops in your circuit.

- 8.27** Repeat problem 8.26 using JK flip-flops.
- 8.28** Repeat problem 8.26 using T flip-flops.
- *8.29** Derive the state table for the circuit in Figure P8.2. What sequence of input values on wire w is detected by this circuit?

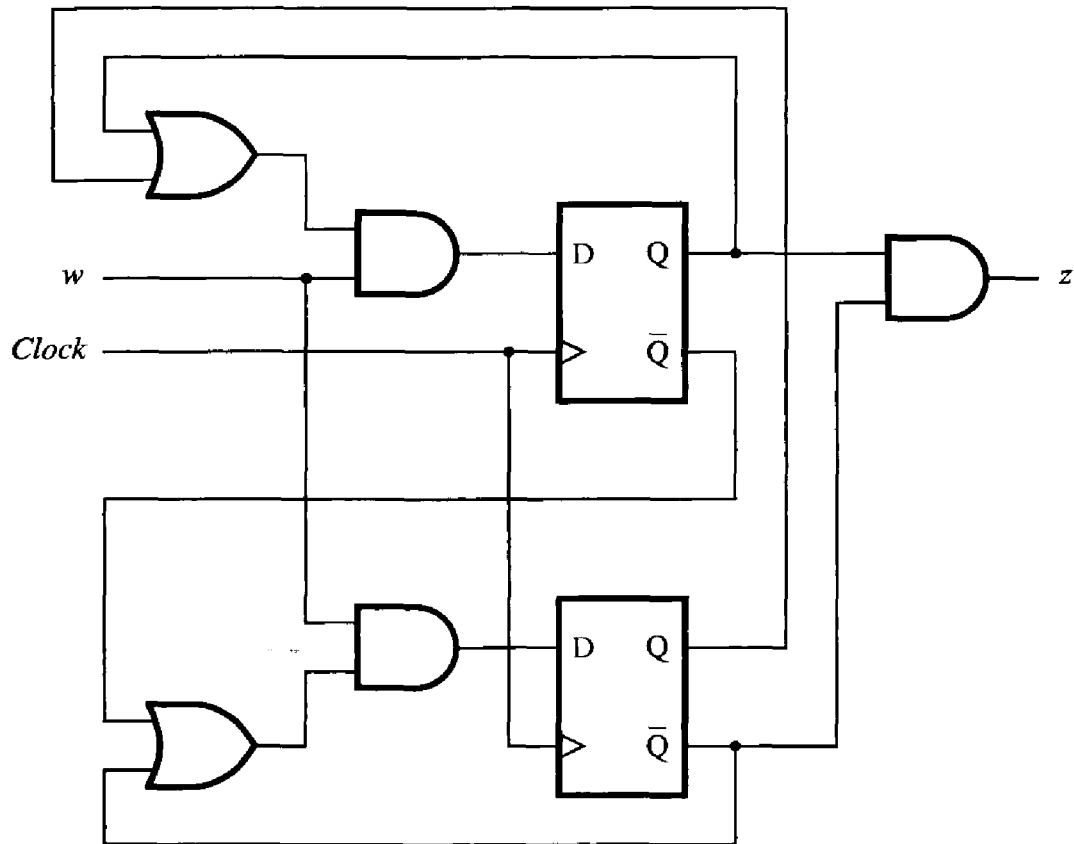


Figure P8.2 Circuit for problem 8.29.

- 8.30** Write VHDL code for the FSM shown in Figure 8.57, using the style of code in Figure 8.29.
- 8.31** Repeat problem 8.30, using the style of code in Figure 8.33.
- 8.32** Write VHDL code for the FSM shown in Figure 8.58, using the style of code in Figure 8.29.
- 8.33** Repeat problem 8.32, using the style of code in Figure 8.33.
- 8.34** Write VHDL code for the FSM shown in Figure P8.1. Use the method of state assignment shown in Figure 8.34.
- 8.35** Repeat problem 8.34, using the method of state assignment shown in Figure 8.35.
- 8.36** Represent the FSM in Figure 8.57 in form of an ASM chart.
- 8.37** Represent the FSM in Figure 8.58 in form of an ASM chart.
- 8.38** The arbiter FSM defined in section 8.8 (Figure 8.72) may cause device 3 to never get serviced if devices 1 and 2 continuously keep raising requests, so that in the Idle state it always happens that either device 1 or device 2 has an outstanding request. Modify the

proposed FSM to ensure that device 3 will get serviced, such that if it raises a request, the devices 1 and 2 will be serviced only once before the device 3 is granted its request.

- 8.39** Write VHDL code for the FSM designed in problem 8.38.
- 8.40** Consider a more general version of the task presented in Example 8.1. Assume that there are four n -bit registers connected to a bus in a processor. The contents of register R are placed on the bus by asserting the control signal R_{out} . The data on the bus are loaded into register R on the active edge of the clock signal if the control signal R_{in} is asserted. Assume that three of the registers, called $R1$, $R2$, and $R3$, are used as normal registers. The fourth register, called $TEMP$, is used for temporary storage in special cases. We want to realize an operation $SWAP R_i, R_j$, which swaps the contents of registers R_i and R_j . This is accomplished by the following sequence of steps (each performed in one clock cycle)

$$\begin{array}{rcl} TEMP & \leftarrow & [R_j] \\ R_j & \leftarrow & [R_i] \\ R_i & \leftarrow & [TEMP] \end{array}$$

Two input signals, w_1 and w_2 , are used to indicate that two registers have to be swapped as follows

If $w_2 w_1 = 01$, then swap $R1$ and $R2$.
 If $w_2 w_1 = 10$, then swap $R1$ and $R3$.
 If $w_2 w_1 = 11$, then swap $R2$ and $R3$.

An input valuation that specifies a swap is present for three clock cycles. Design a circuit that generates the required control signals: $R1_{out}$, $R1_{in}$, $R2_{out}$, $R2_{in}$, $R3_{out}$, $R3_{in}$, $TEMP_{out}$, and $TEMP_{in}$. Derive the next-state and output expressions for this circuit, trying to minimize the cost.

- 8.41** Write VHDL code to specify the circuit in Figure 8.102.
- 8.42** Section 8.5 presents a design for the serial adder. Derive a similar circuit that functions as a serial subtractor which produces the difference of operands A and B . (Hint: use the rule for finding 2's complements, in section 5.3.1, to generate the 2's complement of B .)
- 8.43** Write VHDL code that defines the serial subtractor designed in problem 8.42.

REFERENCES

1. A. Dewey, *Analysis and Design of Digital Systems with VHDL*, (PWS Publishing Co.: 1997).
2. D. D. Gajski, *Principles of Digital Design*, (Prentice-Hall: Upper Saddle River, NJ, 1997).

3. M. M. Mano, *Digital Design*, 3rd ed. (Prentice-Hall: Upper Saddle River, NJ, 2002).
4. J. P. Daniels, *Digital Design from Zero to One*, (Wiley: New York, 1996).
5. V. P. Nelson, H. T. Nagle, B. D. Carroll, and J. D. Irwin, *Digital Logic Circuit Analysis and Design*, (Prentice-Hall: Englewood Cliffs, NJ, 1995).
6. R. H. Katz, *Contemporary Logic Design*, (Benjamin/Cummings: Redwood City, CA, 1994).
7. F. J. Hill and G. R. Peterson, *Computer Aided Logical Design with Emphasis on VLSI* 4th ed., (Wiley: New York, 1993).
8. J. P. Hayes, *Introduction to Logic Design*, (Addison-Wesley: Reading, MA, 1993).
9. C. H. Roth Jr., *Fundamentals of Logic Design*, 4th ed., (West: St. Paul, MN, 1993).
10. J. F. Wakerly, *Digital Design Principles and Practices*, 3rd ed. (Prentice-Hall: Englewood Cliffs, NJ, 1999).
11. E. J. McCluskey, *Logic Design Principles*, (Prentice-Hall: Englewood Cliffs, NJ, 1986).
12. T. L. Booth, *Digital Networks and Computer Systems*, (Wiley: New York, 1971).
13. Z. Kohavi, *Switching and Finite Automata Theory*, (McGraw-Hill: New York, 1970).
14. J. Hartmanis and R. E. Stearns, *Algebraic Structure Theory of Sequential Machines*, (Prentice-Hall: Englewood Cliffs, NJ, 1966).

ASYNCHRONOUS SEQUENTIAL CIRCUITS

CHAPTER OBJECTIVES

In this chapter you will learn about:

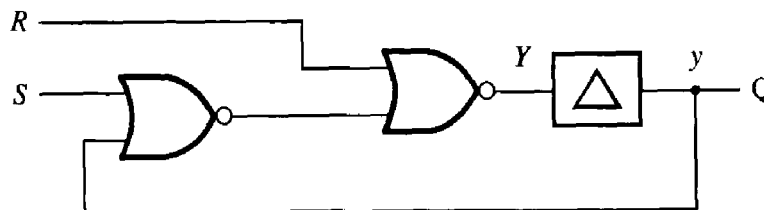
- Sequential circuits that are not synchronized by a clock
- Analysis of asynchronous sequential circuits
- Synthesis of asynchronous sequential circuits
- The concept of stable and unstable states
- Hazards that cause incorrect behavior of a circuit

In the previous chapter we covered the design of synchronous sequential circuits in which the state variables are represented by flip-flops that are controlled by a clock. The clock is a periodic signal that consists of pulses. Changes in state can occur on the positive or negative edge of each clock pulse. Since they are controlled by pulses, synchronous sequential circuits are said to operate in *pulse mode*. In this chapter we present sequential circuits that do not operate in *pulse mode* and do not use flip-flops to represent state variables. These circuits are called *asynchronous sequential circuits*.

In an asynchronous sequential circuit, changes in state are not triggered by clock pulses. Instead, changes in state are dependent on whether each of the inputs to the circuit has the logic level 0 or 1 at any given time. To achieve reliable operation, the inputs to the circuit must change one at a time. Moreover, there must be sufficient time between the changes in input signals to allow the circuit to reach a *stable state*, which is achieved when all internal signals stop changing. A circuit that adheres to these constraints is said to operate in the *fundamental mode*.

9.1 ASYNCHRONOUS BEHAVIOR

To introduce asynchronous sequential circuits, we will reconsider the basic latch circuit in Figure 7.4. This Set-Reset (SR) latch is redrawn in Figure 9.1a. The feedback loop gives rise to the sequential nature of the circuit. It is an asynchronous circuit because changes in



(a) Circuit with modeled gate delay

Present state	Next state			
	$SR = 00$	01	10	11
y	Y	Y	Y	Y
0	0	0	1	0
1	1	0	1	0

(b) State-assigned table

Figure 9.1 Analysis of the SR latch.

the value of the output, Q , occur without having to wait for a synchronizing clock pulse. In response to a change in either the S (Set) or R (Reset) input, the value of Q will change after a short propagation time through the NOR gates. In Figure 9.1a the combined propagation delay through the two NOR gates is represented by the box labeled Δ . Then, the NOR gate symbols represent ideal gates with zero delay. Using the notation in Chapter 8, Q corresponds to the *present state* of the circuit, represented by the *present-state variable*, y . The value of y is fed back through the circuit to generate the value of the *next-state variable*, Y , which represents the *next state* of the circuit. After the Δ time delay, y takes the value of Y . Observe that we have drawn the circuit in a style that conforms to the general model for sequential circuits presented in Figure 8.90.

By analyzing the SR latch, we can derive a state-assigned table, as illustrated in Figure 9.1b. When the present state is $y = 0$ and the inputs are $S = R = 0$, the circuit produces $Y = 0$. Since $y = Y$, the state of the circuit will not change. We say that the circuit is *stable* under these input conditions. Now assume that R changes to 1 while S remains at 0. The circuit still generates $Y = 0$ and remains stable. Assume next that S changes to 1 and R remains at 1. The value of Y is unchanged, and the circuit is stable. Then let R change to 0 while S remains at 1. This input valuation, $SR = 10$, causes the circuit to generate $Y = 1$. Since $y \neq Y$, the circuit is not stable. After the Δ time delay, the circuit changes to the new present state $y = 1$. Once this new state is reached, the value of Y remains equal to 1 as long as $SR = 10$. Hence the circuit is again stable. The analysis for the present state $y = 1$ can be completed using similar reasoning.

The concept of stable states is very important in the context of asynchronous sequential circuits. For a given valuation of inputs, if a circuit reaches a particular state and remains in this state, then the state is said to be stable. To clearly indicate the conditions under which the circuit is stable, it is customary to encircle the stable states in the table, as illustrated in Figure 9.1b.

From the state-assigned table, we can derive the state table in Figure 9.2a. The state names A and B represent the present states $y = 0$ and $y = 1$, respectively. Since the output Q depends only on the present state, the circuit is a Moore-type FSM. The state diagram that represents the behavior of this FSM is shown in Figure 9.2b.

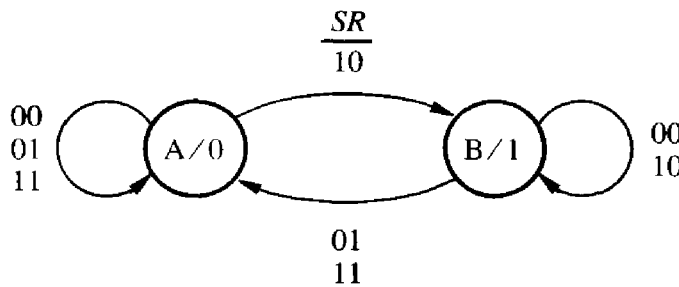
The preceding analysis shows that the behavior of an asynchronous sequential circuit can be represented as an FSM in a similar way as the synchronous sequential circuits in Chapter 8. Consider now performing the opposite task. That is, given the state table in Figure 9.2a, we can synthesize an asynchronous circuit as follows: After performing the state assignment, we have the state-assigned table in Figure 9.1b. This table represents a truth table for Y , with the inputs y , S , and R . Deriving a minimal product-of-sums expression yields

$$Y = \bar{R} \cdot (S + y)$$

If we were deriving a synchronous sequential circuit using the methods in Chapter 8, then Y would be connected to the D input of a flip-flop and a clock signal would be used to control the time when the changes in state take place. But since we are synthesizing an asynchronous circuit, we do not insert a flip-flop in the feedback path. Instead, we create a circuit that realizes the preceding expression using the necessary logic gates, and we feed

Present state	Next state				Output Q
	$SR = 00$	01	10	11	
A	(A)	(A)	B	(A)	0
B	(B)	A	(B)	A	1

(a) State table



(b) State diagram

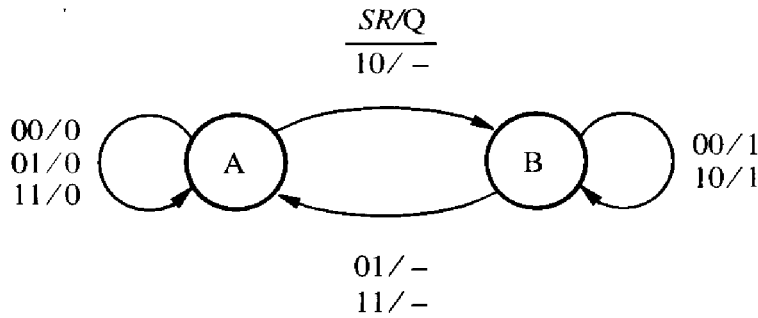
Figure 9.2 FSM model for the SR latch.

back the output signal as the present-state input y . Implementation using NOR gates results in the circuit in Figure 9.1a. This simple example suggests that asynchronous circuits and synchronous circuits can be synthesized using similar techniques. However, we will see shortly that for more complex asynchronous circuits, the design task is considerably more difficult.

To further explore the nature of asynchronous circuits, it is interesting to consider how the behavior of the SR latch can be represented in the form of a Mealy model. As depicted in Figure 9.3, the outputs produced when the circuit is in a stable state are the same as in the Moore model, namely 0 in state A and 1 in state B . Consider now what happens when the state of the circuit changes. Suppose that the present state is A and that the input valuation SR changes from 00 to 10. As the state table specifies, the next state of the FSM is B . When the circuit reaches state B , the output Q will be 1. But in the Mealy model, the output is supposed to be affected immediately by a change in the input signals. Thus while still in state A , the change in SR to 10 should result in $Q = 1$. We could have written a 1 in the corresponding entry in the top row of the state table, but we have chosen to leave this entry unspecified instead. The reason is that since Q will change to 1 as soon as the circuit reaches state B , there is little to be gained in trying to make Q go to 1 a little sooner. Leaving the entry unspecified allows us to assign either 0 or 1 to it, which may make the circuit that implements the state table somewhat simpler. A similar reasoning leads to the

Present state	Next state				Output, Q			
	SR = 00	01	10	11	00	01	10	11
A	\textcircled{A}	\textcircled{A}	B	\textcircled{A}	0	0	–	0
B	\textcircled{B}	A	\textcircled{B}	A	1	–	1	–

(a) State table



(b) State diagram

Figure 9.3 Mealy representation of the SR latch.

conclusion that the two output entries where a change from *B* to *A* takes place can also be left unspecified.

Using the state assignment $y = 0$ for *A* and $y = 1$ for *B*, the state-assigned table represents a truth table for both *Y* and *Q*. The minimal expression for *Y* is the same as for the Moore model. To derive an expression for *Q*, we need to set the unspecified entries to 0 or 1. Assigning a 0 to the unspecified entry in the first row and 1 to the two unspecified entries in the second row produces $Q = y$ and results in the circuit in Figure 9.1a.

Terminology

In the preceding discussion we used the same terminology as in the previous chapter on synchronous sequential circuits. However, when dealing with asynchronous sequential circuits, it is customary to use two different terms. Instead of a “state table,” it is more common to speak of a *flow table*, which indicates how the changes in state flow as a result of the changes in the input signals. Instead of a “state-assigned table,” it is usual to refer to a *transition table* or an *excitation table*. We will use the terms *flow table* and *excitation table* in this chapter. A flow table will define the state changes and outputs that must be generated. An excitation table will depict the transitions in terms of the state variables. The term excitation table derives from the fact that a change from a stable state is performed by “exciting” the next-state variables to start changing towards a new state.

9.2 ANALYSIS OF ASYNCHRONOUS CIRCUITS

To gain familiarity with asynchronous circuits, it is useful to analyze a few examples. We will keep in mind the general model in Figure 8.90, assuming that the delays in the feedback paths are a representation of the propagation delays in the circuit. Then each gate symbol will represent an ideal gate with zero delay.

9.1 GATED D LATCH In Chapters 7 and 8, we used the gated D latch as a key component in circuits that are controlled by a synchronizing clock. It is instructive to analyze this latch as an asynchronous circuit, where the clock is just one of the inputs. It is reasonable to assume that the signals on the D and clock inputs do not change at the same time, thus meeting the basic requirement of asynchronous circuits.

Figure 9.4a shows the gated D latch drawn in the style of the model of Figure 8.90. This circuit was introduced in Figure 7.8 and discussed in section 7.3. The next-state expression for this circuit is

$$\begin{aligned} Y &= (C \uparrow D) \uparrow ((C \uparrow \bar{D}) \uparrow y) \\ &= CD + \bar{C}y + Dy \end{aligned}$$

The term Dy in this expression is redundant and could be deleted without changing the logic function of Y . Hence the minimal expression is

$$Y = CD + \bar{C}y$$

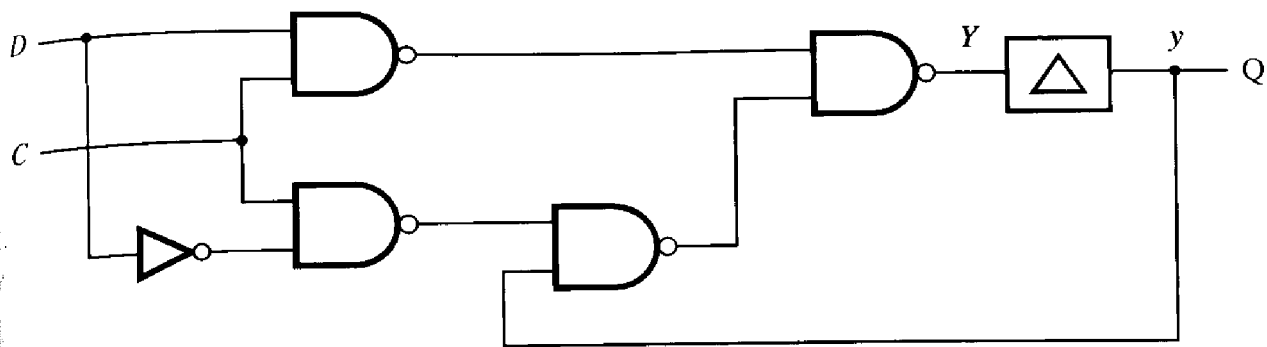
The reason that the circuit implements the redundant term Dy is that this term solves a race condition known as a *hazard*; we will discuss hazards in detail in section 9.6.

Evaluating the expression for Y for all valuations of C , D , and y leads to the excitation table in Figure 9.4b. Note that the circuit changes its state only when $C = 1$ and D is different from the present state, y . In all other cases the circuit is stable. Using the symbols A and B to represent the states $y = 0$ and $y = 1$, we obtain the flow table and the state diagram shown in parts (c) and (d).

9.2 MASTER-SLAVE D FLIP-FLOP In Example 9.1 we analyzed the gated D latch as an asynchronous circuit. Actually, all practical circuits are asynchronous. However, if the circuit's behavior is tightly controlled by a clock signal, then simpler operating assumptions can be used, as we did in Chapter 8. Recall that in a synchronous sequential circuit all signals change values in synchronization with the clock signal. Now we will analyze another synchronous circuit as if it were an asynchronous circuit.

Two gated D latches are used to implement the master-slave D flip-flop, as illustrated in Figure 7.10. This circuit is reproduced in Figure 9.5. We can analyze the circuit by treating it as a series connection of two gated D latches. Using the results from Example 9.1, the simplified next-state expressions can be written as

$$\begin{aligned} Y_m &= CD + \bar{C}y_m \\ Y_s &= \bar{C}y_m + Cy_s \end{aligned}$$



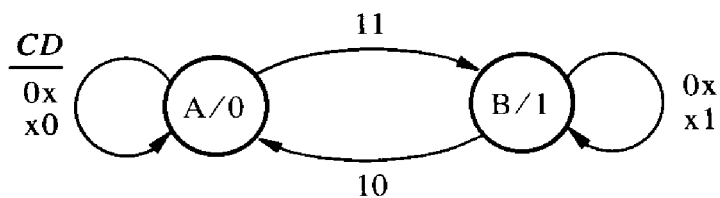
(a) Circuit

Present state	Next state				Q
	CD = 00	01	10	11	
y	Y	Y	Y	Y	
0	0	0	0	1	0
1	1	1	0	1	1

(b) Excitation table

Present state	Next state				Q
	CD = 00	01	10	11	
A	A	A	A	B	0
B	B	B	A	B	1

(c) Flow table



(d) State diagram

Figure 9.4 The gated D latch.

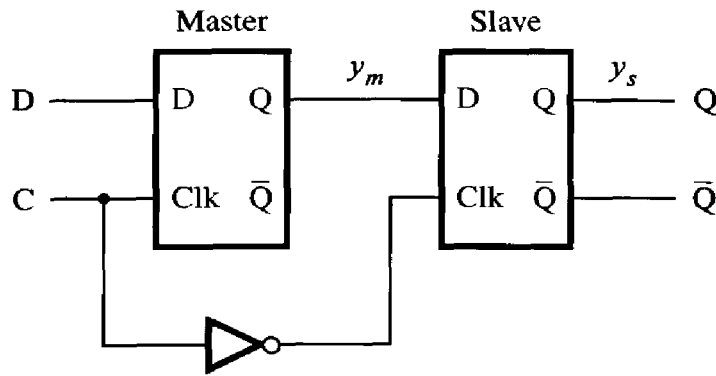


Figure 9.5 Circuit for the master-slave D flip-flop.

where the subscripts m and s refer to the master and slave stages of the flip-flop. These expressions lead to the excitation table in Figure 9.6a. Labeling the four states as $S1$ through $S4$, we derive the flow table in Figure 9.6b. A state-diagram form of this information is given in Figure 9.7.

Let us consider the behavior of this FSM in more detail. The state $S1$, where $y_m y_s = 00$, is stable for all input valuations except $CD = 11$. When $C = 1$, the value of D is stored in the master stage; hence $CD = 11$ causes the flip-flop to change to $S3$, where $y_m = 1$ and $y_s = 0$. If the D input now changes back to 0, while the clock remains at 1, the flip-flop moves back to the state $S1$. The transitions between $S1$ and $S3$ indicate that if $C = 1$, the output of the master stage, $Q_m = y_m$, tracks the changes in the D input signal without affecting the slave stage. From $S3$ the circuit changes to $S4$ when the clock goes to 0. In $S4$ both master and slave stages are set to 1 because the information from the master stage is transferred to the slave stage on the negative edge of the clock. Now the flip-flop remains in $S4$ until the clock goes to 1 and the D input changes to 0, which causes a change to $S2$. In $S2$ the master stage is cleared to 0, but the slave stage remains at 1. Again the flip-flop may change between $S2$ and $S4$ because the master stage will track the changes in the D input signal while $C = 1$. From $S2$ the circuit changes to $S1$ when the clock goes low.

In Figures 9.6 and 9.7, we indicated that the flip-flop has only one output Q , which one sees when the circuit is viewed as a negative-edge-triggered flip-flop. From the observer's point of view, the flip-flop has only two states, 0 and 1. But internally, the flip-flop consists of the master and slave parts, which gives rise to the four states described above.

We should also examine the basic assumption that the inputs must change one at a time. If the circuit is stable in state $S2$, for which $CD = 10$, it is impossible to go from this state to $S1$ under the influence of the input valuation $CD = 01$ because this simultaneous change in both inputs cannot occur. Thus in the second row of the flow table, instead of showing $S2$ changing to $S1$ under $CD = 01$, this entry can be labeled as unspecified. The change from $S2$ to $S1$ can be caused only by CD changing from 10 to 00. Similarly, if the circuit is in state $S3$, where $CD = 11$, it cannot change to $S4$ by having $CD = 00$. This entry can also be left unspecified in the table. The resulting flow table is shown in Figure 9.6c.

If we reverse the analysis procedure and, using the state assignment in Figure 9.6a, synthesize logic expressions for Y_m and Y_s , we get

$$Y_m = CD + \bar{C}y_m + y_m D$$

$$Y_s = \bar{C}y_m + Cy_s + y_m y_s$$

Present state $y_m y_s$	Next state				Output Q
	$CD = 00$	01	10	11	
	$Y_m Y_s$				
00	00	00	00	10	0
01	00	00	01	11	1
10	11	11	00	10	0
11	11	11	01	11	1

(a) Excitation table

Present state	Next state				Output Q
	$CD = 00$	01	10	11	
S1	S1	S1	S1	S3	0
S2	S1	S1	S2	S4	1
S3	S4	S4	S1	S3	0
S4	S4	S4	S2	S4	1

(b) Flow table

Present state	Next state				Output Q
	$CD = 00$	01	10	11	
S1	S1	S1	S1	S3	0
S2	S1	—	S2	S4	1
S3	—	S4	S1	S3	0
S4	S4	S4	S2	S4	1

(c) Flow table with unspecified entries

Figure 9.6 Excitation and flow tables for Example 9.2.

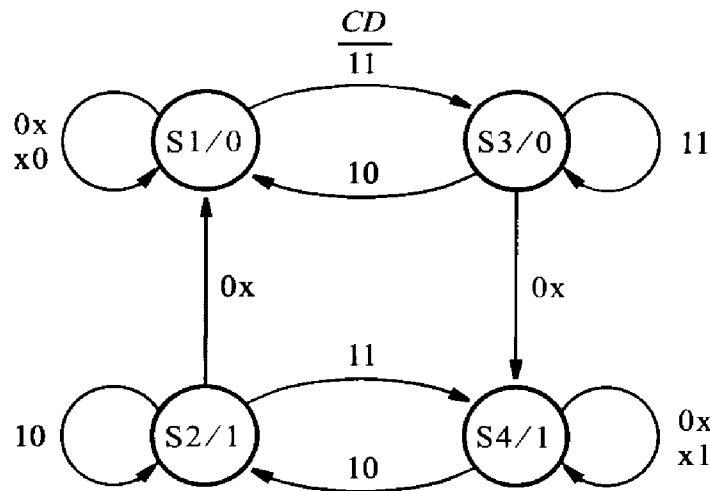


Figure 9.7 State diagram for the master-slave D flip-flop.

The terms $y_m D$ and $y_m y_s$ in these expressions are redundant. As mentioned earlier, they are included in the circuit to avoid race conditions, which are discussed in section 9.6.

9.3 Consider the circuit in Figure 9.8. It is represented by the following expressions

$$\begin{aligned}
 Y_1 &= y_1 \bar{y}_2 + w_1 \bar{y}_2 + \bar{w}_1 \bar{w}_2 y_1 \\
 Y_2 &= y_1 y_2 + w_1 y_2 + w_2 + \bar{w}_1 \bar{w}_2 y_1 \\
 z &= \bar{y}_1 y_2
 \end{aligned}$$

The corresponding excitation and flow tables are given in Figure 9.9.

Some transitions in the flow table will not occur in practice because of the assumption that both w_1 and w_2 cannot change simultaneously. In state *A* the circuit is stable under the valuation $w_2 w_1 = 00$. Its inputs cannot change to 11 without passing through the valuations 01 or 10, in which case the new state would be *B* or *C*, respectively. Thus the transition from *A* under $w_2 w_1 = 11$ can be left unspecified. Similarly, if the circuit is stable in state *B*, in which case $w_2 w_1 = 01$, it is impossible to force a change to state *D* by changing the inputs to $w_2 w_1 = 10$. This entry should also be unspecified. If the circuit is stable in state *C* under $w_2 w_1 = 11$, it is not possible to go to *A* by changing the inputs directly to $w_2 w_1 = 00$. However, the transition to *A* is possible by changing the inputs one at a time because the circuit remains stable in *C* for both $w_2 w_1 = 01$ and $w_2 w_1 = 10$.

A different situation arises if the circuit is stable in state *D* under $w_2 w_1 = 00$. It may seem that the entry under $w_2 w_1 = 11$ should be unspecified because this input change cannot be made from the stable state *D*. But suppose that the circuit is stable in state *B* under $w_2 w_1 = 01$. Now let the inputs change to $w_2 w_1 = 11$. This causes a change to state *D*. The circuit indeed changes to *D*, but it is not stable in this state for this input condition. As soon as it arrives into state *D*, the circuit proceeds to change to state *C* as required by $w_2 w_1 = 11$. It is then stable in state *C* as long as both inputs remain at 1. The conclusion is that the entry that specifies the change from *D* to *C* under $w_2 w_1 = 11$ is meaningful and

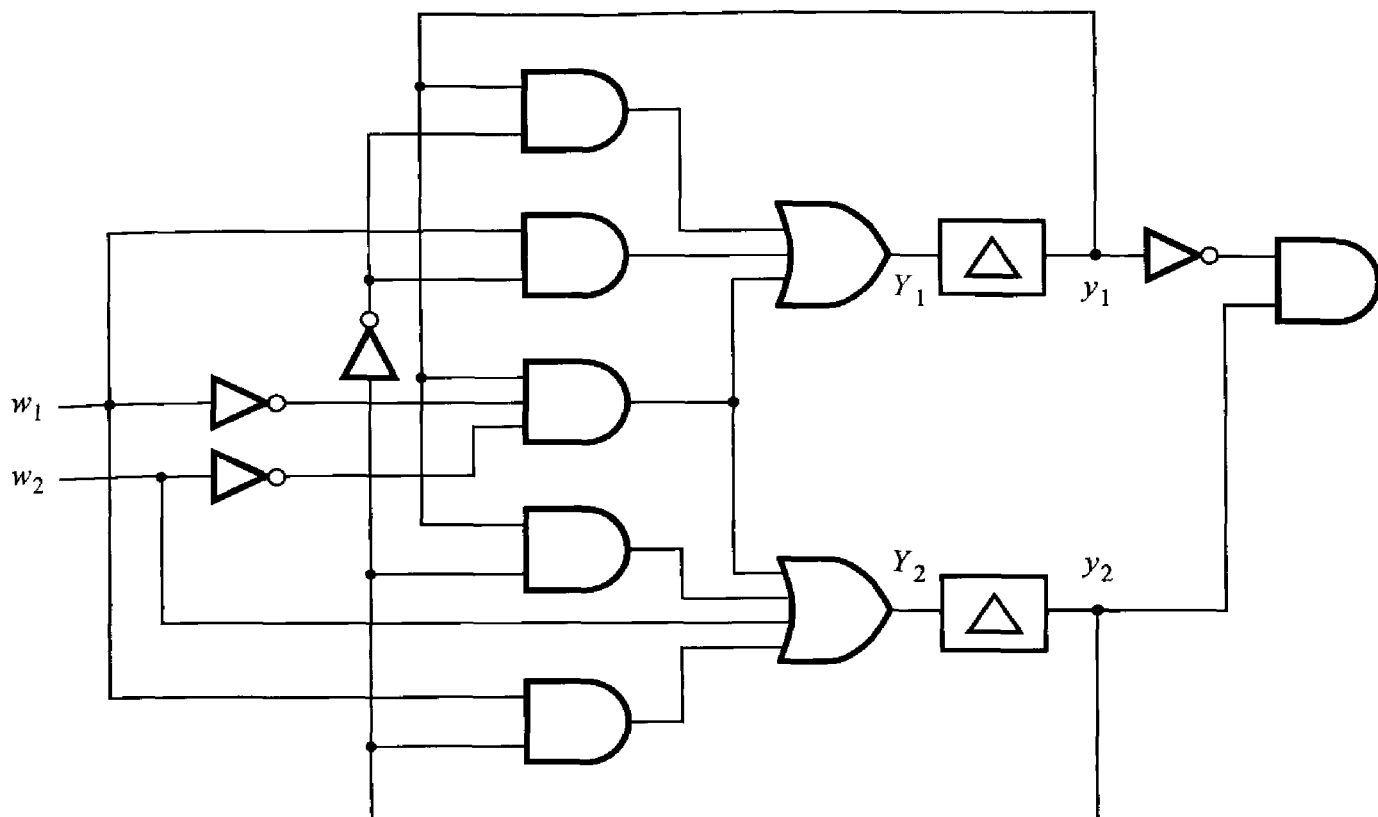


Figure 9.8 Circuit for Example 9.3.

should not be omitted. The transition from the stable state B to the stable state C , which passes through state D , illustrates that it is not imperative that all transitions be directly from one stable state to another. A state through which a circuit passes en route from one stable state to another is called an *unstable state*. Transitions that involve passing through an unstable state are not harmful as long as the unstable state does not generate an undesirable output signal. For example, if a transition is between two stable states for which the output signal should be 0, it would be unacceptable to pass through an unstable state that causes the output to be 1. Even though the circuit changes through the unstable state very quickly, the short glitch in the output signal is likely to be troublesome. This is not a problem in our example. When the circuit is stable in B , the output is $z = 0$. When the inputs change to $w_2w_1 = 11$, the transition to state D maintains the output at 0. It is only when the circuit finally changes into state C that z will change to 1. Therefore, the change from $z = 0$ to $z = 1$ occurs only once during the course of these transitions.

A modified flow table, showing the unspecified transitions, is presented in Figure 9.10. The table indicates the behavior of the circuit in Figure 9.8 in terms of state transitions. If we don't know what the circuit is supposed to do, it may be difficult to discover the practical application for a given circuit. Fortunately, in practice the purpose of the circuit is known, and the analysis is done by the designer to ascertain that the circuit performs as desired. In our example it is apparent that the circuit generates the output $z = 1$ in state C , which it reaches as a result of some input patterns that are detected using the other three states. The state diagram derived from Figure 9.10 is shown in Figure 9.11.

This diagram actually implements a control mechanism for a simple vending machine that accepts two types of coins, say, dimes and nickels, and dispenses merchandise such as

Present state y_2y_1	Next state				Output z
	$w_2w_1 = 00$	01	10	11	
	Y_2Y_1	Y_2Y_1	Y_2Y_1	Y_2Y_1	
00	00	01	10	11	0
01	11	01	11	11	0
10	00	10	10	10	1
11	11	10	10	10	0

(a) Excitation table

Present state	Next state				Output z
	$w_2w_1 = 00$	01	10	11	
A	A	B	C	D	0
B	D	B	D	D	0
C	A	C	C	C	1
D	D	C	C	C	0

(b) Flow table

Figure 9.9 Excitation and flow tables for the circuit in Figure 9.8.

Present state	Next state				Output z
	$w_2w_1 = 00$	01	10	11	
A	A	B	C	—	0
B	D	B	—	D	0
C	A	C	C	C	1
D	D	C	C	C	0

Figure 9.10 Modified flow table for Example 9.3.

candy. If w_1 represents a nickel and w_2 represents a dime, then a total of 10 cents must be deposited to get the FSM into state C where the candy is released. The coin mechanism accepts only one coin at a time, which means that $w_2w_1 = 11$ can never occur. Therefore, the transition discussed above, from B to C , through the unstable state D would not occur. Observe that both states B and D indicate that 5 cents has been deposited. State B indicates

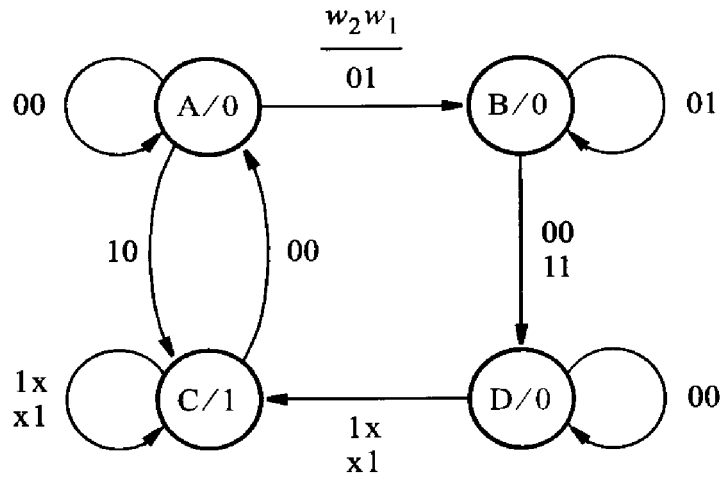


Figure 9.11 State diagram for Example 9.3.

Present state	Next state				Output z
	$w_2w_1 = 00$	01	10	11	
A	(A)	B	C	—	0
B	D	(B)	—	—	0
C	A	(C)	(C)	—	1
D	(D)	C	C	—	0

$w_2 \equiv$ dime $w_1 \equiv$ nickel

Figure 9.12 Flow table for a simple vending machine.

that a nickel is presently being sensed by the coin receptor, while *D* indicates that 5 cents has been deposited and the coin receptor is presently empty. In state *D* it is possible to deposit either a nickel or a dime, both leading to state *C*. No distinction is made between the two types of coins in state *D*; hence the machine would not give change if 15 cents is deposited. From state *A* a dime leads directly to state *C*. Knowing that the condition $w_2w_1 = 11$ will not occur allows the flow table to be specified as shown in Figure 9.12. If we were to synthesize the sum-of-products logic expressions for Y_1 and Y_2 , using the state assignment in Figure 9.9a, we would end up with the circuit in Figure 9.8.

Steps in the Analysis Process

We have demonstrated the analysis process using illustrative examples. The required steps can be stated as follows:

- A given circuit is interpreted in the form of the general model in Figure 8.90. That is, each feedback path is cut, and a delay element is inserted at the point where the cut

is made. The input signal to the delay element represents a corresponding next-state variable, Y_i , while the output signal is the present-state variable, y_i . A cut can be made anywhere in a particular loop formed by the feedback connection, as long as there is only one cut per (state variable) loop. Thus the number of cuts that should be made is the smallest number that results in there being no feedback anywhere in the circuit except from the output of a delay element. This minimal number of cuts is sometimes referred to as the *cut set*. Note that the analysis based on a cut made at one point in a given loop may not produce the same flow table as an analysis on a cut made at some other point in this loop. But both flow tables would reflect the same functional behavior in terms of the applied inputs and generated outputs.

- Next-state and output expressions are derived from the circuit.
- The excitation table corresponding to the next-state and output expressions is derived.
- A flow table is obtained, associating some (arbitrary) names with the particular encoded states.
- A corresponding state diagram is derived from the flow table if desired.

9.3 SYNTHESIS OF ASYNCHRONOUS CIRCUITS

Synthesis of asynchronous sequential circuits follows the same basic steps used to synthesize the synchronous circuits, which were discussed in Chapter 8. There are some differences due to the asynchronous nature, which make the asynchronous circuits more difficult to design. We will explain the differences by investigating a few design examples. The basic steps are

- Devise a state diagram for an FSM that realizes the required functional behavior.
- Derive the flow table and reduce the number of states if possible.
- Perform the state assignment and derive the excitation table.
- Obtain the next-state and output expressions.
- Construct a circuit that implements these expressions.

When devising a state diagram, or perhaps the flow table directly, it is essential to ensure that when the circuit is in a stable state, the correct output signals are generated. Should it be necessary to pass through an unstable state, this state must not produce an undesirable output signal.

Minimization of states is not straightforward. A minimization procedure is described in section 9.4.

State assignment is not done with the sole purpose of reducing the cost of the final circuit. In asynchronous circuits some state assignments may cause the circuit to be unreliable. We will explain this problem using the examples that follow.

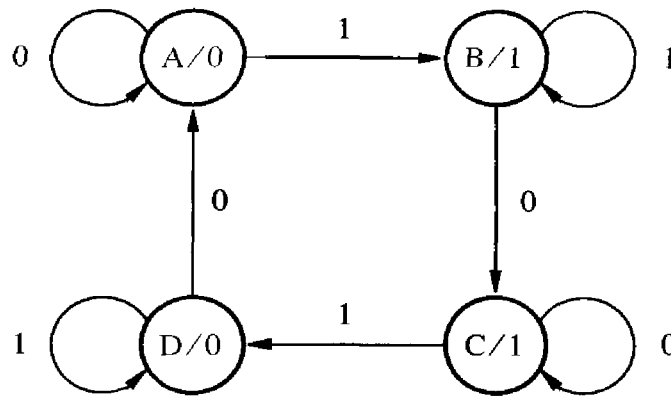
SERIAL PARITY GENERATOR Suppose that we want to design a circuit that has an input w and an output z , such that when pulses are applied to w , the output z is equal to 0 if the number of previously applied pulses is even and z is equal to 1 if the number of pulses is odd. Hence the circuit acts as a serial parity generator. Exi

Let A be the state that indicates that an even number of pulses has been received. Using the Moore model, the output z will be equal to 0 when the circuit is in state A . As long as $w = 0$, the circuit should remain in A , which is specified by a transition arc that both originates and terminates in state A . Thus A is stable when $w = 0$. When the next pulse arrives, the input $w = 1$ should cause the FSM to move to a new state, say, B , which produces the output $z = 1$. When the FSM reaches B , it must remain stable in this state as long as $w = 1$. This is specified by a transition arc that originates and terminates in B . The next input change occurs when w goes to 0. In response the FSM must change to a state where $z = 1$ and which corresponds to the fact that a complete pulse has been observed, namely, that w has changed from 1 to 0. Let this state be C ; it must be stable under the input condition $w = 0$. The arrival of the next pulse makes $w = 1$, and the FSM must change to a state, D , that indicates that an even number of pulses has been observed and that the last pulse is still present. The state D is stable under $w = 1$, and it causes the output to be $z = 0$. Finally, when w returns to 0 at the end of the pulse, the FSM returns to state A , which indicates an even number of pulses and w equal to 0 at the present time. The resulting state diagram is shown in Figure 9.13a.

A key point to understand is why it is necessary to have four states rather than just two, considering that we are merely trying to distinguish between the even and odd number of input pulses. States B and C cannot be combined into a single state even though they both indicate that an odd number of pulses has been observed. Suppose we had simply tried to use state B alone for this purpose. Then it would have been necessary to add an arc with a label 0 that originates and terminates in state B , which is fine. The problem is that without state C , there would have to be a transition from state B directly to D if the input is $w = 1$ to respond to the next change in the input when a new pulse arrives. It would be impossible to have B both stable under $w = 1$ and have a change to D effected for the same input condition. Similarly, we can show that the states A and D cannot be combined into a single state.

Figure 9.13b gives the flow table that corresponds directly to the state diagram. In many cases the designer can derive a flow table directly. We are using the state diagram mostly because it provides a simpler visual picture of the effect of the transitions in an FSM.

The next step is to assign values to the states in terms of the state variables. Since there are four states in our FSM, there have to be at least two state variables. Let these variables be y_1 and y_2 . As a first attempt at the state assignment, let the states A , B , C , and D be encoded as $y_2y_1 = 00, 01, 10, \text{ and } 11$, respectively. This assignment leads to the excitation table in Figure 9.14a. Unfortunately, it has a major flaw. The circuit that implements this table is stable in state $D = 11$ under the input condition $w = 1$. But consider what happens next if the input changes to $w = 0$. According to the excitation table, the circuit should change to state $A = 00$ and remain stable in this state. The problem is that in going from $y_2y_1 = 11$ to $y_2y_1 = 00$ both state variables must change their values. This is unlikely to occur at exactly the same time. In an asynchronous circuit the values of the next-state variables are determined by networks of logic gates with varying propagation delays. Thus



(a) State diagram

Present State	Next state		Output z
	$w = 0$	$w = 1$	
A	(A)	B	0
B	C	(B)	1
C	(C)	D	1
D	A	(D)	0

(b) Flow table

Figure 9.13 Parity-generating asynchronous FSM.

we should expect that one state variable will change slightly before the other, which could put the circuit into a state where it may react to the input in an undesirable way. Suppose that y_1 changes first. Then the circuit goes from $y_2y_1 = 11$ to $y_2y_1 = 10$. As soon as it reaches this state, C , it will attempt to remain there if $w = 0$, which is a wrong outcome. On the other hand, suppose that y_2 changes first. Then there will be a change from $y_2y_1 = 11$ to $y_2y_1 = 01$, which corresponds to state B . Since $w = 0$, the circuit will now try to change to $y_2y_1 = 10$. This again requires that both y_1 and y_2 change; assuming that y_1 changes first in the transition from $y_2y_1 = 01$, the circuit will find itself in the state $y_2y_1 = 00$, which is the correct destination state, A . This discussion indicates that the required transition from D to A will be performed correctly if y_2 changes before y_1 , but it will not work if y_1 changes before y_2 . The result depends on the outcome of the “race” to change between the signals y_1 and y_2 .

The uncertainty caused by multiple changes in the state variables in response to an input that should lead to a predictable change from one stable state to another has to be eliminated. The term *race condition* is used to refer to such unpredictable behavior. We will discuss this issue in detail in section 9.5.

Present state y_2y_1	Next state		Output z
	$w = 0$	$w = 1$	
	Y_2Y_1		
00	⊙00	01	0
01	10	⊙01	1
10	⊙10	11	1
11	00	⊙11	0

(a) Poor state assignment

Present state y_2y_1	Next state		Output z
	$w = 0$	$w = 1$	
	Y_2Y_1		
00	⊙00	01	0
01	11	⊙01	1
11	⊙11	10	1
10	00	⊙10	0

(b) Good state assignment

Figure 9.14 State assignment for Figure 9.13b.

Race conditions can be eliminated by treating the present-state variables as if they were inputs to the circuit, meaning that only one state variable is allowed to change at a time. For our example the assignment $A = 00$, $B = 01$, $C = 11$, and $D = 10$ achieves this objective. The resulting excitation table is presented in Figure 9.14b. The reader should verify that all transitions involve changing a single state variable.

From Figure 9.14b the next-state and output expressions are

$$Y_1 = w\bar{y}_2 + \bar{w}y_1 + y_1\bar{y}_2$$

$$Y_2 = wy_2 + \bar{w}y_1 + y_1y_2$$

$$z = y_1$$

The last product term in the expressions for Y_1 and Y_2 is included to deal with possible hazards, which are discussed in section 9.6. The corresponding circuit is shown in Figure 9.15.

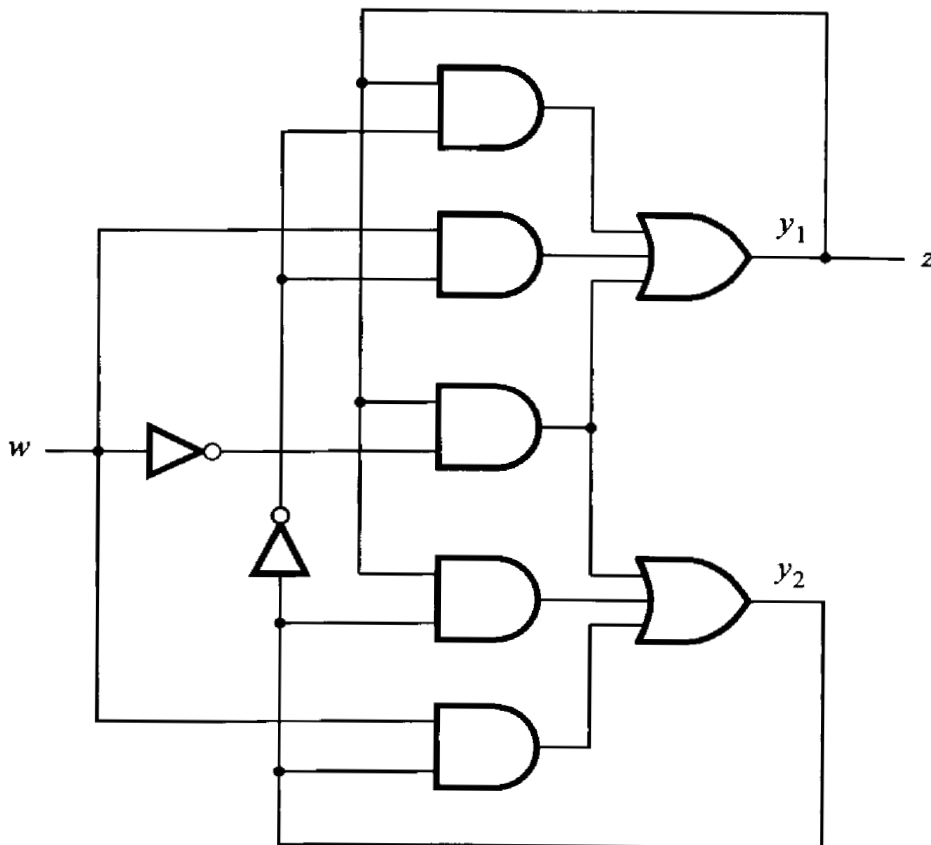


Figure 9.15 Circuit that implements the FSM in Figure 9.13b.

It is interesting to consider how the serial parity generator could be implemented using a synchronous approach. All that is needed is a single flip-flop that changes its state with the arrival of each input pulse. The positive-edge-triggered *D* flip-flop in Figure 9.16 accomplishes the task, assuming that the flip-flop is initially set to $Q = 0$. The logic complexity of the flip-flop is exactly the same as the circuit in Figure 9.15. Indeed, if we use the preceding expressions for Y_1 and Y_2 and substitute C for w , D for \bar{y}_2 , y_m for y_1 , and y_s for y_2 , we end up with the excitation expressions shown for the master-slave *D* flip-flop in Example 9.2. The circuit in Figure 9.15 is actually a negative-edge-triggered master-slave flip-flop, with the complement of its Q output (y_2) connected to its D input. The output z is connected to the output of the master stage of the flip-flop.

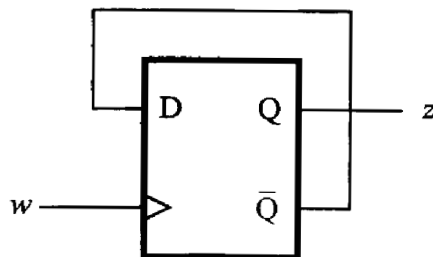


Figure 9.16 Synchronous solution for Example 9.4.

MODULO-4 COUNTER Chapters 7 and 8 described how counters can be implemented using flip-flops. Now we will synthesize a counter as an asynchronous sequential circuit. Figure 9.17 depicts a state diagram for a modulo-4 up-counter, which counts the number of pulses on an input line, w . The circuit must be able to react to all changes in the input signal; thus it must take specific actions at both the positive and negative edges of each pulse. Therefore, eight states are needed to deal with the edges in four consecutive pulses.

The counter begins in state A and stays in this state as long as $w = 0$. When w changes to 1, a transition to state B is made and the circuit remains stable in this state as long as $w = 1$. When w goes back to 0, the circuit moves to state C and remains stable until w becomes 1 again, which causes a transition to state D , and so on. Using the Moore model, the states correspond to specific counts. There are two states for each particular count: the state that the FSM enters when w changes from 0 to 1 at the start of a pulse and the state that the FSM enters when w goes back to 0 at the end of the pulse. States B and C correspond to the count of 1, states D and E to 2, and states F and G to 3. States A and H represent the count of 0.

Figure 9.18 shows the flow and excitation tables for the counter. The state assignment is chosen such that all transitions between states require changing the value of only one state variable to eliminate the possibility of race conditions. The output is encoded as a binary number, using variables z_2 and z_1 . From the excitation table the next-state and output expressions are

$$\begin{aligned}
 Y_1 &= \bar{w}y_1 + wy_2y_3 + w\bar{y}_2\bar{y}_3 + y_1y_2y_3 + y_1\bar{y}_2\bar{y}_3 \\
 &= \bar{w}y_1 + (w + y_1)(y_2y_3 + \bar{y}_2\bar{y}_3) \\
 Y_2 &= wy_2 + \bar{w}y_1\bar{y}_3 + \bar{y}_1y_2 + y_2\bar{y}_3
 \end{aligned}$$

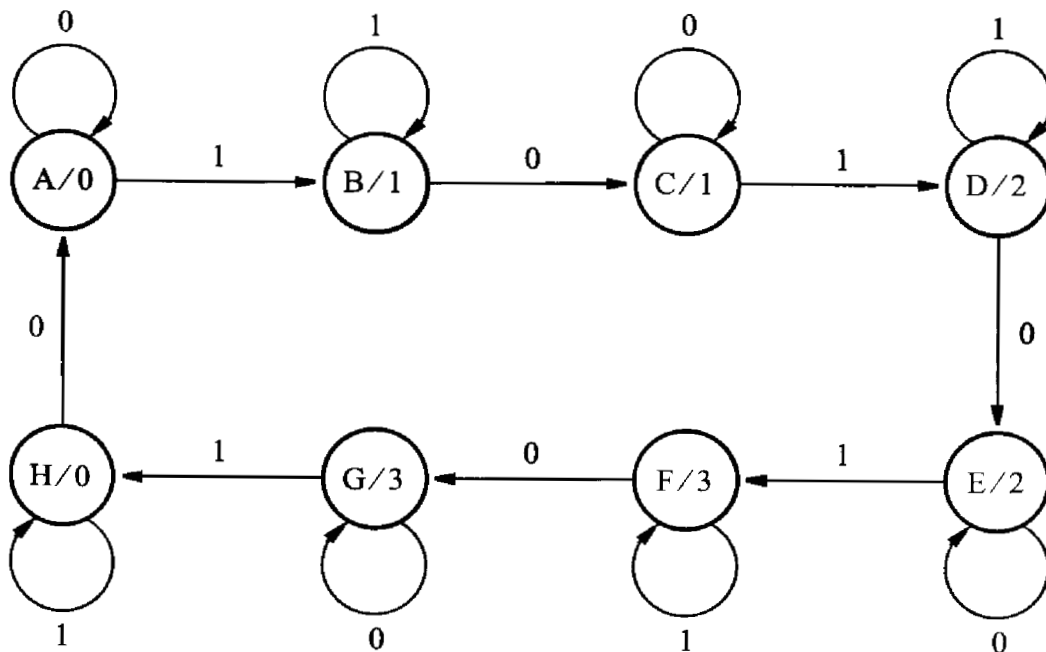


Figure 9.17 State diagram for a modulo-4 counter.

Present state	Next state		Output z
	$w = 0$	$w = 1$	
A	(A)	B	0
B	C	(B)	1
C	(C)	D	1
D	E	(D)	2
E	(E)	F	2
F	G	(F)	3
G	(G)	H	3
H	A	(H)	0

(a) Flow table

Present state $y_3y_2y_1$	Next state		Output z_2z_1	Mod-8 output $z_3z_2z_1$
	$w = 0$	$w = 1$		
	$Y_3Y_2Y_1$			
000	(000)	001	00	000
001	011	(001)	01	001
011	(011)	010	01	010
010	110	(010)	10	011
110	(110)	111	10	100
111	101	(111)	11	101
101	(101)	100	11	110
100	000	(100)	00	111

(b) Excitation table

(c) Output for counting the edges

Figure 9.18 Flow and excitation tables for a modulo-4 counter.

$$Y_3 = wy_3 + y_1y_3 + \bar{y}_1y_2\bar{w} + y_2y_3$$

$$z_1 = y_1$$

$$z_2 = y_1y_3 + \bar{y}_1y_2$$

These expressions define the circuit that implements the required modulo-4 pulse counter.

In the preceding derivation we designed a circuit that changes its state on every edge of the input signal w , requiring a total of eight states. Since the circuit is supposed to count the number of complete pulses, which contain a rising and a falling edge, the output count $z_3z_2z_1$ changes its value only in every second state. This FSM behaves like a synchronous sequential circuit in which the output count changes only as a result of w changing from 0 to 1.

Suppose now that we want to count the number of times the signal w changes its value, that is, the number of its edges. The state transitions specified in Figures 9.17 and 9.18 define an FSM that can operate as a modulo-8 counter for this purpose. We only need to specify a distinct output in each state, which can be done as shown in Figure 9.18c. The values of $z_3z_2z_1$ indicate the counting sequence 0, 1, 2, ..., 7, 0. Using this specification of the output and the state assignment in Figure 9.18b, the resulting output expressions are

$$z_1 = y_1 \oplus y_2 \oplus y_3$$

$$z_2 = y_2 \oplus y_3$$

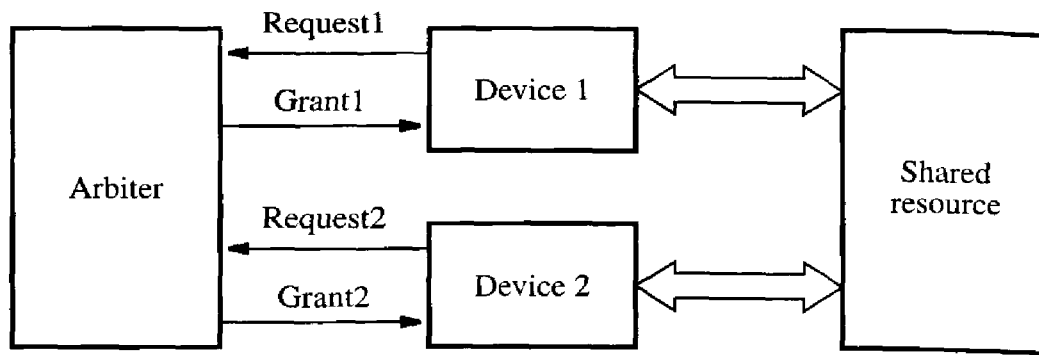
$$z_3 = y_3$$

A SIMPLE ARBITER In computer systems it is often useful to have some resource shared by a number of different devices. Usually, the resource can be used by only one device at a time. When various devices need to use the resource, they have to request to do so. These requests are handled by an arbiter circuit. When there are two or more outstanding requests, the arbiter may use some priority scheme to choose one of them, as already discussed in section 8.8.

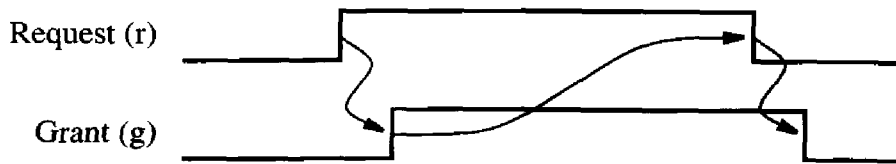
Exa

We will now consider an example of a simple arbiter implemented as an asynchronous sequential circuit. To keep the example small, suppose that two devices are competing for the shared resource, as indicated in Figure 9.19a. Each device communicates with the arbiter by means of two signals—*Request* and *Grant*. When a device needs to use the shared resource, it raises its Request signal to 1. Then it waits until the arbiter responds with the Grant signal.

Figure 9.19b illustrates a commonly used scheme for communication between two entities in the asynchronous environment, known as *handshake signaling*. Two signals are used to provide the handshake. A device initiates the activity by raising a request, $r = 1$. When the shared resource is available, the arbiter responds by issuing a grant, $g = 1$. When the device receives the grant signal, it proceeds to use the requested shared resource. When it completes its use of the resource, it drops its request by setting $r = 0$. When the arbiter sees that $r = 0$, it deactivates the grant signal, making $g = 0$. The arrows in the figure indicate the cause-effect relationships in this signaling scheme; a change in one



(a) Arbitration structure



(b) Handshake signaling

Figure 9.19 Arbitration example.

signal causes a change in the other signal. The time elapsed between the changes in the cause-effect signals depends on the specific implementation of the circuit. A key point is that there is no need for a synchronizing clock.

A state diagram for our simple arbiter is given in Figure 9.20. There are two inputs, the request signals r_1 and r_2 , and two outputs, the grant signals g_1 and g_2 . The diagram depicts the Moore model of the required FSM, where the arcs are labeled as r_2r_1 and the state outputs as g_2g_1 . The quiescent state is *A*, where there are no requests. State *B* represents the situation in which Device 1 is given permission to use the resource, and state *C* denotes the same for Device 2. Thus *B* is stable if $r_2r_1 = 01$, and *C* is stable if $r_2r_1 = 10$. To conform to the rules of asynchronous circuit design, we will assume that the inputs r_1 and r_2 become activated one at a time. Hence, in state *A* it is impossible to have a change from $r_2r_1 = 00$ to $r_2r_1 = 11$. The situation where $r_2r_1 = 11$ occurs only when a second request is raised before the device that has the grant signal completes its use of the shared resource, which can happen in states *B* and *C*. If the FSM is stable in either state *B* or *C*, it will remain in this state if both r_1 and r_2 go to 1.

The flow table is given in Figure 9.21*a*, and the excitation table is presented in Figure 9.21*b*. It is impossible to choose a state assignment such that all changes between states *A*, *B*, and *C* involve a change in a single state variable only. In the chosen assignment the transitions to or from state *A* are handled properly, but the transitions between states *B* and *C* involve changes in the values of both state variables y_1 and y_2 . Suppose that the circuit is stable in state *B* under input valuation $r_2r_1 = 11$. Now let the inputs change to $r_2r_1 = 10$. This should cause a change to state *C*, which means that the state variables must

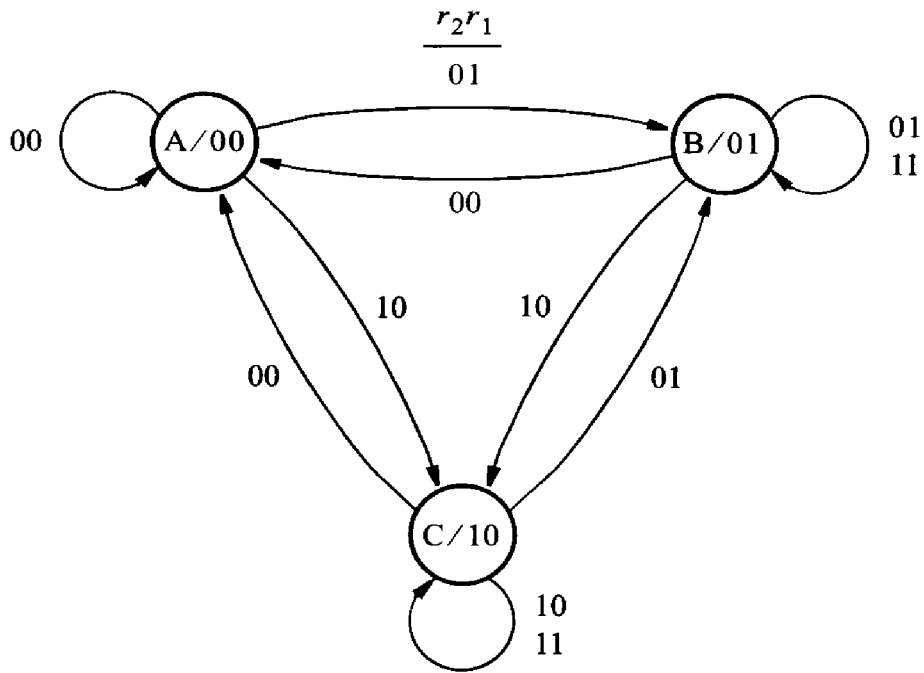


Figure 9.20 State diagram for the arbiter.

Present state	Next state				Output $g_2 g_1$
	$r_2 r_1 = 00$	01	10	11	
A	\textcircled{A}	B	C	—	00
B	A	\textcircled{B}	C	\textcircled{B}	01
C	A	B	\textcircled{C}	\textcircled{C}	10

(a) Flow table

Present state $y_2 y_1$	Next state				Output $g_2 g_1$
	$r_2 r_1 = 00$	01	10	11	
	$Y_2 Y_1$				
A 00	$\textcircled{00}$	01	10	—	00
B 01	00	$\textcircled{01}$	10	$\textcircled{01}$	01
C 10	00	01	$\textcircled{10}$	$\textcircled{10}$	10
D 11	—	01	10	—	dd

(b) Excitation table

Figure 9.21 Implementation of the arbiter.

change from $y_2y_1 = 01$ to 10 . If y_1 changes faster than y_2 , then the circuit will find itself momentarily in state $y_2y_1 = 00$, which leads to the desired final state because from state A there is a specified transition to C under the input valuation 10 . But if y_2 changes faster than y_1 , the circuit will reach the state $y_2y_1 = 11$, which is not defined in the flow table. To make sure that even in this case the circuit will proceed to the required destination C , we can include the state $y_2y_1 = 11$, labeled D , in the excitation table and specify the required transition as shown in the figure. A similar situation arises when the circuit is stable in C under $r_2r_1 = 11$, and it has to change to B when r_2 changes from 1 to 0 .

The output values for the extra state D are indicated as don't cares. Whenever a specific output is changing from 0 to 1 or from 1 to 0 , exactly when this change takes place is not important if the correct value is produced when the circuit is in a stable state. The don't-care specification may lead to a simpler realization of the output functions. It is important to ensure that unspecified outputs will not result in a value that may cause erroneous behavior. From Figure 9.21*b* it is possible that during the short time when the circuit passes through the unstable state D the outputs become $g_2g_1 = 11$. This is harmless in our example because the device that has just finished using the shared resource will not try to use it again until its grant signal has returned to 0 to indicate the end of the handshake with the arbiter. Observe that if this condition occurs when changing from B to C , then g_1 remains 1 slightly longer and g_2 becomes 1 slightly earlier. Similarly, if the transition is from C to B , then the change in g_1 from 0 to 1 happens slightly earlier and g_2 changes to 0 slightly later. In both of these cases there is no glitch on either g_1 or g_2 .

From the excitation table the following next-state and output expressions are derived

$$Y_1 = \bar{r}_2r_1 + r_1\bar{y}_2$$

$$Y_2 = r_2\bar{r}_1 + r_2y_2$$

$$g_1 = y_1$$

$$g_2 = y_2$$

Rewriting the first two expressions as

$$Y_1 = r_1(\bar{r}_2 + \bar{y}_2)$$

$$= r_1\overline{r_2y_2}$$

$$Y_2 = r_2(\bar{r}_1 + y_2)$$

produces the circuit in Figure 9.22. Observe that this circuit responds very quickly to the changes in the input signals. This behavior is in sharp contrast to the arbiter discussed in section 8.8 in which the synchronizing clock determines the minimum response time.

The difficulty with the race condition that arises in state changes between B and C can be resolved in another way. We can simply prevent the circuit from reaching an unspecified state. Figure 9.23*a* shows a modified flow table in which transitions between states B and C are made via state A . If the circuit is stable in B and the input valuation changes from $r_2r_1 = 11$ to 10 , a change to A will occur first. As soon as the circuit reaches A , which is not stable for the input valuation 10 , it will proceed to the stable state C . The detour through the unstable state A is acceptable because in this state the output is $g_2g_1 = 00$, which is consistent with the desired operation of the arbiter. The change from C to B is handled

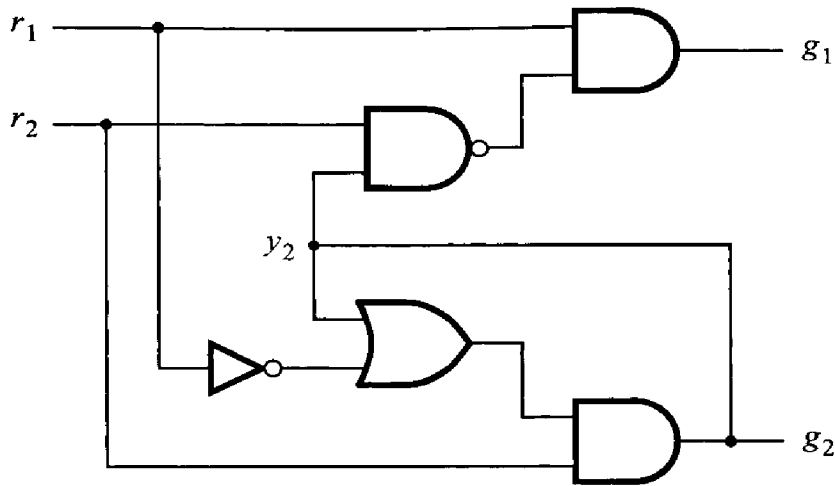


Figure 9.22 The arbiter circuit.

Present state	Next state				Output g_2g_1
	$r_2r_1 = 00$	01	10	11	
A	(A)	B	C	—	00
B	A	(B)	A	(B)	01
C	A	A	(C)	(C)	10

(a) Modified flow table

Present state y_2y_1	Next state				Output g_2g_1
	$r_2r_1 = 00$	01	10	11	
	Y_2Y_1				
00	(00)	01	10	—	00
01	00	(01)	00	(01)	01
10	00	00	(10)	(10)	10

(b) Modified excitation table

Figure 9.23 An alternative for avoiding a critical race in Figure 9.21a.

using the same approach. From the modified excitation table in Figure 9.23b, the following next-state expressions are derived

$$Y_1 = r_1\bar{y}_2$$

$$Y_2 = \bar{r}_1r_2\bar{y}_1 + r_2y_2$$

These expressions give rise to a circuit different from the one in Figure 9.22. However, both circuits implement the functionality required in the arbiter.

Next we will attempt to design the same arbiter using the Mealy model specification. From Figure 9.20 it is apparent that the states *B* and *C* are fundamentally different because for the input $r_2r_1 = 11$ they must produce two different outputs. But state *A* is unique only to the extent that it generates the output $g_2g_1 = 00$ whenever $r_2r_1 = 00$. This condition could be specified in both *B* and *C* if the Mealy model is used. Figure 9.24 gives a suitable state diagram. The flow and excitation tables are presented in Figure 9.25, which lead to the following expressions

$$Y = r_2\bar{r}_1 + \bar{r}_1y + r_2y$$

$$g_1 = r_1\bar{y}$$

$$g_2 = r_2y$$

Despite needing a single state variable, this circuit requires more gates for implementation than does the Moore version in Figure 9.22.

An important notion in the above examples is that it is necessary to pay careful attention to the state assignment, to avoid races in changing of the values of the state variables. Section 9.5 deals with this issue in more detail.

We made the basic assumption that the request inputs to the arbiter FSM change their values one at a time, which allows the circuit to reach a stable state before the next change takes place. If the devices are totally independent, they can raise their requests at any time. Suppose that each device raises a request every few seconds. Since the arbiter circuit needs only a few nanoseconds to change from one stable state to another, it is quite unlikely that both devices will raise their requests so close to each other that the arbiter circuit will produce erroneous outputs. However, while the probability of an error caused by the simultaneous arrival of requests is extremely low, it is not zero. If this small possibility of an error cannot be tolerated, then it is possible to feed the request signals through a special circuit called the *mutual exclusion* (ME) element. This circuit has two inputs and two outputs. If both inputs are 0, then both outputs are 0. If only one input is 1, then the corresponding output is 1. If both inputs are 1, the circuit makes one output go to 1 and keeps the other at 0.

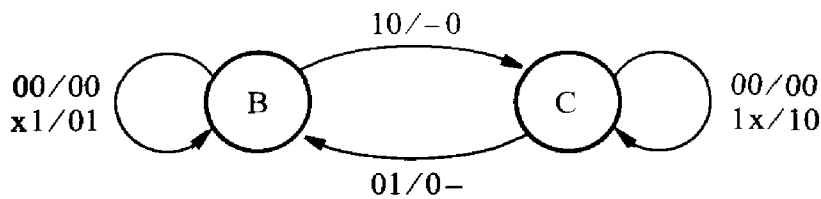


Figure 9.24 Mealy model for the arbiter FSM.

Present state	Next state				Output g_2g_1			
	$r_2r_1 = 00$	01	10	11	00	01	10	11
B	ⓑ	ⓑ	C	ⓑ	00	01	0	01
C	ⓐ	B	ⓐ	ⓐ	00	0	10	10

(a) Flow diagram

Present state	Next state				Output			
	$r_2r_1 = 00$	01	10	11	00	01	10	11
y	Y				g_2g_1			
0	ⓐ	ⓐ	1	ⓐ	00	01	$d0$	01
1	ⓑ	0	ⓑ	ⓑ	00	$0d$	10	10

(b) Excitation table

Figure 9.25 Mealy model implementation of the arbiter FSM.

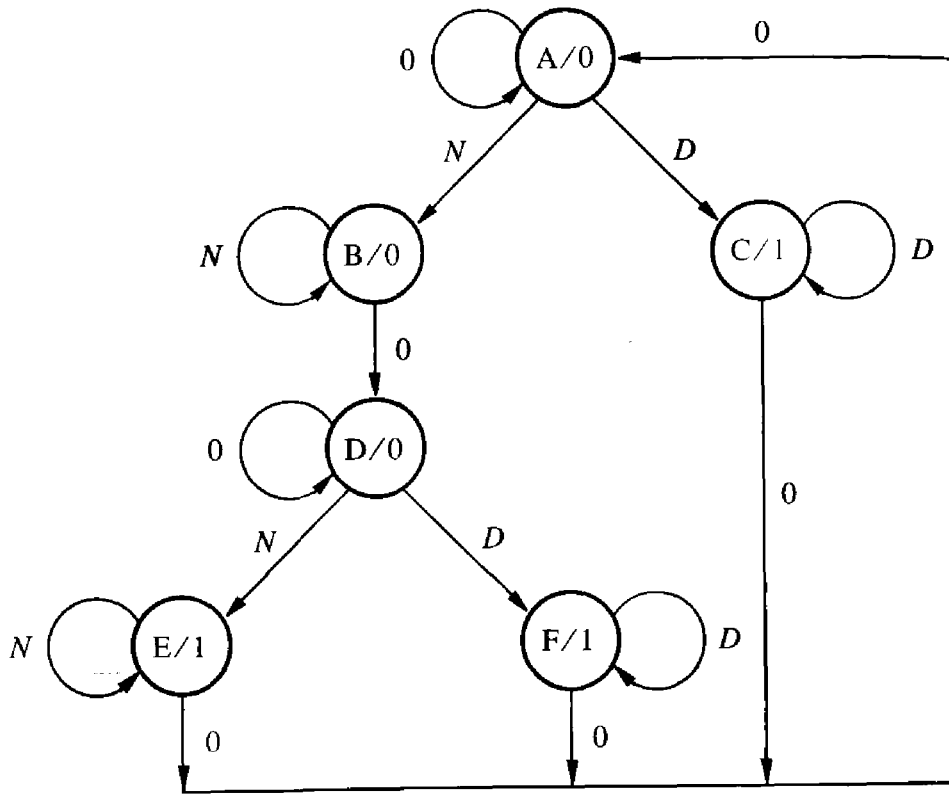
Using the ME element would change the design of the arbiter slightly; because the valuation $r_2r_1 = 11$ would never occur, all entries in the corresponding column in Figure 9.21 would be don't cares. The ME element and the issue of simultaneous changes in input signals are discussed in detail in reference [6]. Finally, we should note that a similar problem arises in synchronous circuits in which one or more inputs are generated by a circuit that is not controlled by a common clock. We will deal with this issue in section 10.3.3 in Chapter 10.

9.4 STATE REDUCTION

In Chapter 8 we saw that reducing the number of states needed to realize the functionality of a given FSM usually leads to fewer state variables, which means that fewer flip-flops are required in the corresponding synchronous sequential circuit. In asynchronous sequential circuits it is also useful to try to reduce the number of states because this usually results in simpler implementations.

When designing an asynchronous FSM, the initial flow table is likely to have many unspecified (don't-care) entries, because the designer has to obey the restriction that only one input variable can change its value at a time. For example, suppose that we want to design the FSM for the simple vending machine considered in Example 9.3. Recall that the machine accepts nickels and dimes and dispenses candy when 10 cents is deposited; the machine does not give change if 15 cents is deposited. An initial state diagram for

this FSM can be derived in straightforward fashion by enumerating all possible sequences of depositing the coins to give a sum of at least 10 cents. Figure 9.26a shows a possible diagram, defined as a Moore model. Starting in a reset state, A, the FSM remains in this state as long as no coin is deposited. This is denoted by an arc labeled 0 to indicate that $N = D = 0$. Now let an arc with the label N denote that the coin-sensing mechanism has



(a) Initial state diagram

Present State	Next state				Output z
	$DN = 00$	01	10	11	
A	(A)	B	C	-	0
B	D	(B)	-	-	0
C	A	-	(C)	-	1
D	(D)	E	F	-	0
E	A	(E)	-	-	1
F	A	-	(F)	-	1

(b) Initial flow table

Figure 9.26 Derivation of an FSM for the simple vending machine.

detected a nickel and has generated a signal $N = 1$. Similarly, let D denote that a dime has been deposited. If $N = 1$, then the FSM has to move to a new state, say, B , and it must remain stable in this state as long as N has the value of 1. Since B corresponds to 5 cents being deposited, the output in this state has to be 0. If a dime is deposited in state A , then the FSM must move to a different state, say, C . The machine should stay in C as long as $D = 1$, and it should release the candy by generating the output of 1. These are the only possible transitions from state A , because it is impossible to insert two coins at the same time, which means that $DN = 11$ can be treated as a don't-care condition. Next, in state B there must be a return to the condition $DN = 00$ because the coin-sensing mechanism will detect the second coin some time after the first coin has cleared the mechanism. This behavior is consistent with the requirement that only one input variable can change at a time; hence it is not allowed to go from $DN = 01$ to $DN = 10$. The input $DN = 10$ cannot occur in state B and should be treated as a don't care. The input $DN = 00$ takes the FSM to a new state, D , which indicates that 5 cents has been deposited and that there is no coin in the sensing mechanism. In state D it is possible to deposit either a nickel or a dime. If $DN = 01$, the machine moves to state E , which denotes that 10 cents has been deposited and generates the output of 1. If $DN = 10$, the machine moves to state F , which also generates the output of 1. Finally, when the FSM is in any of the states C , E , or F , the only possible input is $DN = 00$, which returns the machine to state A .

The flow table for this FSM is given in Figure 9.26*b*. It shows explicitly all don't-care entries. Such unspecified entries provide a certain amount of flexibility that can be exploited in reducing the number of states. Note that in each row of this table there is only one stable state. Such tables, where there is only one stable state for each row, are often referred to as *primitive flow tables*.

Several techniques have been developed for state reduction. In this section we will describe a two-step process. In the first step we will apply the partitioning procedure from section 8.6.1, assuming that the potentially equivalent rows in a flow table must produce the same outputs. As an additional constraint, for two rows to be potentially equivalent any unspecified entries must be in the same next-state columns. Thus combining the equivalent states into a single state will not remove the don't cares and the flexibility that they provide. In the second step, the rows are *merged* exploiting the unspecified entries. Two rows can be merged if they have no conflicting next-state entries. This means that their next-state entries for any given valuation of inputs are either the same, or one of them is unspecified, or both rows indicate a stable state. If the Moore model is used, then the two rows (states) must produce the same outputs. If the Mealy model is used, then the two states must produce the same outputs for any input valuations for which both states are stable.

We will now show how the flow diagram in Figure 9.26*b* can be reduced to the optimized form in Figure 9.12. The first step in the state-reduction process is the partitioning procedure from section 8.6.1. States A and D are stable under the input valuation $DN = 00$, producing the output of 0; they also have the unspecified entries in the same position. States C and F are stable under $DN = 10$, generating $z = 1$, and they have the same unspecified entries. States B and E have the same unspecified entries, but when they are stable under $DN = 01$ the state B produces $z = 0$ while E generates $z = 1$; they are not equivalent. Therefore, the

E

initial partition is

$$P_1 = (AD)(B)(CF)(E)$$

The successors of *A* and *D* are (*A*, *D*) for *DN* = 00, (*B*, *E*) for 01, and (*C*, *F*) for 10. Since the (*B*, *E*) pair is not in the same block of *P*₁, it follows that *A* and *D* are not equivalent. The successors of *C* and *F* are (*A*, *A*) for 00 and (*C*, *F*) for 10; each pair is in a single block. Thus the second partition is

$$P_2 = (A)(D)(B)(CF)(E)$$

The successors of *C* and *F* in *P*₂ are in the same block of *P*₂, which means that

$$P_3 = P_2$$

The conclusion is that rows *C* and *F* are equivalent. Combining them into a single row and changing all *F*s into *C*s gives the flow table in Figure 9.27.

Next we can try to merge some rows in the flow table by exploiting the existence of unspecified entries. The only row that can be merged with others is *C*. It can be merged with either *A* or *E*, but not both. Merging *C* with *A* would mean that the new state has to generate *z* = 0 when it is stable under the input valuation 00 and has to produce *z* = 1 when stable under 10. This can be achieved only by using the Mealy model. The alternative is to merge *C* and *E*, in which case the new state is stable under *DN* = 01 and 10, producing the output of 1. This can be achieved with the Moore model. Merging *C* and *E* into a single state *C* and changing all *E*s into *C*s yields the reduced flow table in Figure 9.12. Observe that when *C* and *E* are merged, the new row *C* must include all specifications in both rows *C* and *E*. Both rows specify *A* as the next state if *DN* = 00. Row *E* specifies a stable state for *DN* = 01; hence the new row (called *C*) must also specify a stable state for the same valuation. Similarly, row *C* specifies a stable state for *DN* = 10, which must be reflected in the new row. Therefore, the next-state entries in the new row are *A*, *C*, and *C* for the input valuations 00, 01, and 10, respectively.

Present state	Next state				Output <i>z</i>
	<i>DN</i> = 00	01	10	11	
A	<i>A</i>	B	C	—	0
B	D	<i>B</i>	—	—	0
C	A	—	<i>C</i>	—	1
D	<i>D</i>	E	C	—	0
E	A	<i>E</i>	—	—	1

Figure 9.27 First-step reduction of the FSM in Figure 9.26b.

Merging Procedure

In Example 9.7 it was easy to decide which rows should be merged because the only possibilities are to merge row C with either A or E . We chose to merge C and E because this can be done preserving the Moore model, which is likely to lead to a simpler expression that realizes the output z .

In general, there can be many possibilities for merging rows in larger flow tables. In such cases it is necessary to have a more structured procedure for making the choice. A useful procedure can be defined using the concept of *compatibility* of states.

Definition 9.1 – Two states (rows in a flow table), S_i and S_j , are said to be compatible if there are no state conflicts for any input valuation. Thus for each input valuation, one of the following conditions must be true:

- both S_i and S_j have the same successor, or
- both S_i and S_j are stable, or
- the successor of S_i or S_j , or both, is unspecified.

Moreover, both S_i and S_j must have the same output whenever specified.

Consider the primitive flow table in Figure 9.28. Let us examine the compatibility between different states, assuming that we would like to retain the Moore-type specification of outputs for this FSM. State A is compatible only with state H . State B is compatible with states F and G . State C is not compatible with any other state. State D is compatible with state E ; so are state F with G and state G with H . In other words, the following compatible pairs exist: (A, H) , (B, F) , (B, G) , (D, E) , (F, G) , and (G, H) . The compatibility relationship among various states can be represented conveniently in the form of a *merger diagram*, as follows:

Present state	Next state				Output z
	$w_2w_1 = 00$	01	10	11	
A	Ⓐ	H	B	–	0
B	F	–	Ⓑ	C	0
C	–	H	–	Ⓒ	1
D	A	Ⓓ	–	E	1
E	–	D	G	Ⓔ	1
F	Ⓕ	D	–	–	0
G	F	–	Ⓖ	–	0
H	–	Ⓗ	–	E	0

Figure 9.28 A primitive flow table.

- Each row of the flow table is represented as a point, labeled by the name of the row.
- A line is drawn connecting any two points that correspond to compatible states (rows).

From the merger diagram the best merging possibility can be chosen, and the reduced flow table can be derived.

Figure 9.29 gives the merger diagram for the primitive flow table in Figure 9.28. The diagram indicates that row *A* can be merged with *H*, but only if *H* is not merged with *G*, because there is no line joining *A* and *G*. Row *B* can be merged with rows *F* and *G*. Since it is also possible to merge *F* and *G*, it follows that *B*, *F*, and *G* are pairwise compatible. Any set of rows that are pairwise compatible for all pairs in the set can be merged into a single state. Thus states *B*, *F*, and *G* can be merged into a single state, but only if states *G* and *H* are not merged. State *C* cannot be merged with any other state. States *D* and *E* can be merged.

A prudent strategy is to merge the states so that the resulting flow table has as few states as possible. In our example the best choice is to merge the compatibles (*A*, *H*), (*B*, *F*, *G*), and (*D*, *E*), which leads to the reduced flow table in Figure 9.30. When a new row is created

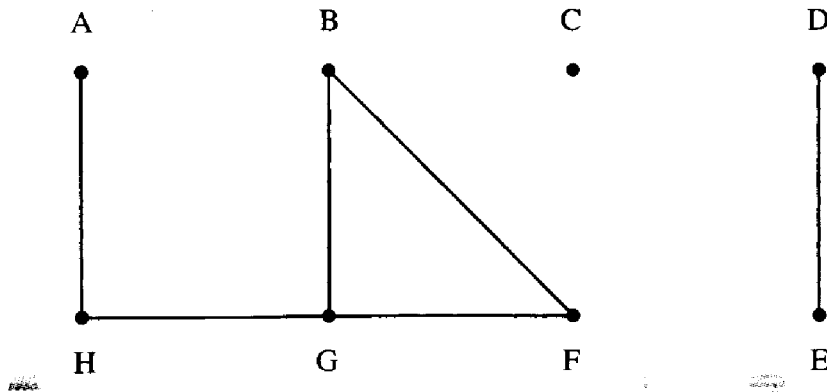


Figure 9.29 Merger diagram for the flow table in Figure 9.28, which preserves the Moore model.

Present state	Next state				Output <i>z</i>
	$w_2w_1 = 00$	01	10	11	
A	Ⓐ	Ⓐ	B	D	0
B	Ⓑ	D	Ⓑ	C	0
C	—	A	—	Ⓒ	1
D	A	Ⓓ	B	Ⓓ	1

Figure 9.30 Reduced Moore-type flow table for the FSM in Figure 9.28.

by merging two or more rows, all entries in the new row have to be specified to cover the individual requirements of the constituent rows. Replacing rows A and H with a new row A requires making A stable for both $w_2w_1 = 00$ and 01 , because the old A has to be stable for 00 and H has to be stable for 01 . It also requires specifying B as the next-state for $w_2w_1 = 10$ and E as the next state for $w_2w_1 = 11$. Since the old state E becomes D , after merging D and E , the new row A must have the next-state entries (A) , (A) , B , and D for the input valuations 00 , 01 , 10 , and 11 , respectively. Replacing rows B , F , and G with a new row B requires making B stable for $w_2w_1 = 00$ and 10 . The next-state entry for $w_2w_1 = 01$ has to be D to satisfy the requirement of the old state F . The next-state entry for $w_2w_1 = 11$ has to be C , as dictated by the old state B . Observe that the old state G imposes no requirements for transitions under $w_2w_1 = 01$ and 11 , because its corresponding next-state entries are unspecified. Row C remains the same as before except that the name of the next-state entry for $w_2w_1 = 01$ has to be changed from H to A . Rows D and E are replaced by a new row D , using similar reasoning. Note that the flow table in Figure 9.30 is still of Moore type.

So far we considered merging only those rows that would allow us to retain the Moore-type specification of the FSM in Figure 9.28. If we are willing to change to the Mealy model, then other possibilities exist for merging. Figure 9.31 shows the complete merger diagram for the FSM of Figure 9.28. Black lines connect the compatible states that can be merged into a new state that has a Moore-type output; this corresponds to the merger diagram in Figure 9.29. Blue lines connect the states that can be merged only if Mealy-type outputs are used.

In this case going to the Mealy model is unlikely to result in a simpler circuit. Although several merger possibilities exist, they all require at least four states in the reduced flow table, which is not any better than the solution obtained in Figure 9.30. For example, one possibility is to perform the merge based on the partition (A, H) , (B, C, G) (D, E)

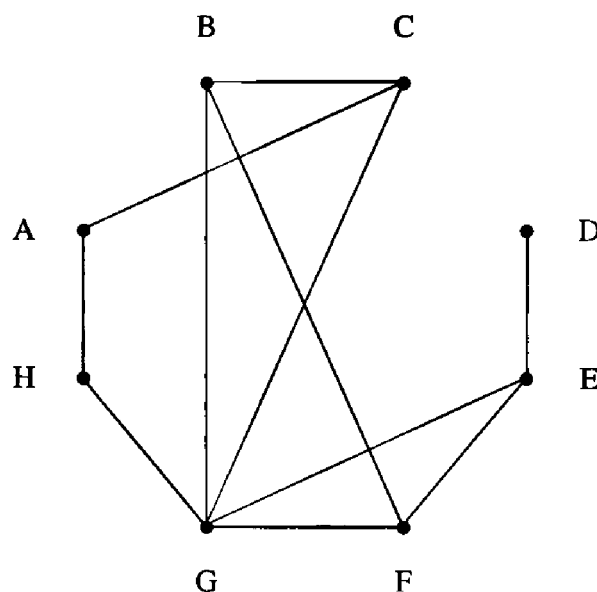


Figure 9.31 Complete merger diagram for Figure 9.28.

(*F*). Another possibility is to use (*A, C*) (*B, F*) (*D, E*) (*G, H*). We will not pursue these possibilities and will discuss the issues involved in specifying the Mealy-type outputs in Example 9.9.

State Reduction Procedure

We can summarize the steps needed to generate the reduced flow table from a primitive flow table as follows:

1. Use the partitioning procedure to eliminate the equivalent states in a primitive flow table.
2. Construct a merger diagram for the resulting flow table.
3. Choose subsets of compatible states that can be merged, trying to minimize the number of subsets needed to cover all states. Each state must be included in only one of the chosen subsets.
4. Derive the reduced flow table by merging the rows in chosen subsets.
5. Repeat steps 2 to 4 to see whether further reductions are possible.

Choosing an optimal subset of compatible states for merging can be a very complicated task because for large FSMs there may be many possibilities that should be investigated. A trial-and-error approach is a reasonable way to tackle this problem.

9.8 Consider the initial flow table in Figure 9.32. To apply the partitioning procedure, we identify state pairs (*A, G*), (*B, L*), and (*H, K*) as being potentially equivalent rows, because both rows in each pair have the same outputs and their don't-care entries are in the same column. The remaining rows are distinct in this respect. Therefore, the first partition is

$$P_1 = (AG)(BL)(C)(D)(E)(F)(HK)(J)$$

Now the successors of (*A, G*) are (*A, G*) for $w_2w_1 = 00$, (*F, B*) for 01, and (*C, J*) for 10. Since *F* and *B*, as well as *C* and *J*, are not in the same block, it follows that *A* and *G* are not equivalent. The successors of (*B, L*) are (*A, A*), (*B, L*), and (*H, K*), respectively. All are in single blocks. The successors of (*H, K*) are (*L, B*), (*E, E*), and (*H, K*), which are all contained in single blocks. Therefore, the second partition is

$$P_2 = (A)(G)(BL)(C)(D)(E)(F)(HK)(J)$$

Repeating the successor test shows that the successors of (*B, L*) and (*H, K*) are still in single blocks; hence

$$P_3 = P_2$$

Combining rows *B* and *L* under the name *B* and rows *H* and *K* under the name *H* leads to the flow table in Figure 9.33.

A merger diagram for this flow table is given in Figure 9.34. It indicates that rows *B* and *H* should be merged into one row, which we will label as *B*. The merger diagram also suggests that rows *D* and *E* should be merged; we will call the new row *D*. The remaining rows present more than one choice for merging. Rows *A* and *F* can be merged, but in that

Present state	Next state				Output z
	$w_2w_1 = 00$	01	10	11	
A	(A)	F	C	-	0
B	A	(B)	-	H	1
C	G	-	(C)	D	0
D	-	F	-	(D)	1
E	G	-	(E)	D	1
F	-	(F)	-	K	0
G	(G)	B	J	-	0
H	-	L	E	(H)	1
J	G	-	(J)	-	0
K	-	B	E	(K)	1
L	A	(L)	-	K	1

Figure 9.32 Flow table for Example 9.8.

Present state	Next state				Output z
	$w_2w_1 = 00$	01	10	11	
A	(A)	F	C	-	0
B	A	(B)	-	H	1
C	G	-	(C)	D	0
D	-	F	-	(D)	1
E	G	-	(E)	D	1
F	-	(F)	-	H	0
G	(G)	B	J	-	0
H	-	B	E	(H)	1
J	G	-	(J)	-	0

Figure 9.33 Reduction obtained by using the partitioning procedure.

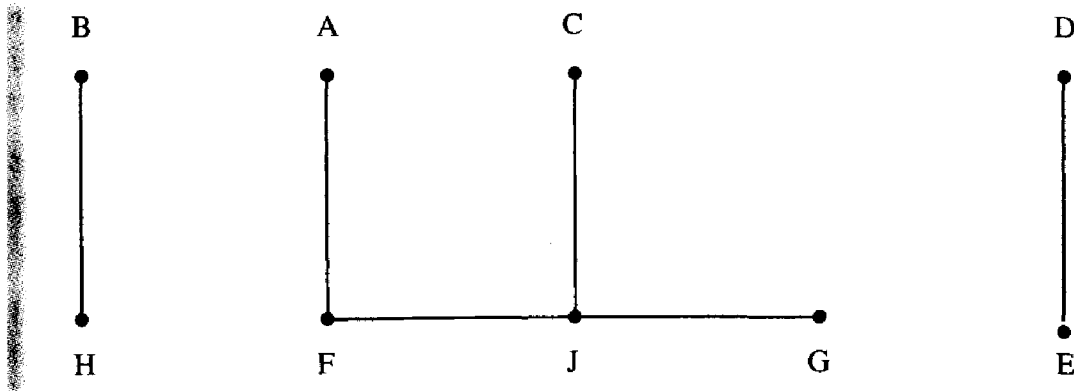


Figure 9.34 Merger diagram for Figure 9.33.

case *F* and *J* cannot be merged. Rows *C* and *J* can be merged, or *G* and *J* can be merged. We will choose to merge the rows *A* and *F* into a new row called *A* and rows *G* and *J* into a new row *G*. The merger choice is indicated in blue in the diagram. The resultant flow table is shown in Figure 9.35. To see whether this table offers any further opportunities for merging, we can construct the merger diagram in Figure 9.36. From this diagram it is apparent that rows *C* and *G* can be merged; let the new row be called *C*. This leads to the flow table in Figure 9.37, which cannot be reduced any more.

Present state	Next state				Output <i>z</i>
	$w_2w_1 = 00$	01	10	11	
A	(A)	(A)	C	B	0
B	A	(B)	D	(B)	1
C	G	-	(C)	D	0
D	G	A	(D)	(D)	1
G	(G)	B	(G)	-	0

Figure 9.35 Reduction obtained from the merger diagram in Figure 9.34.

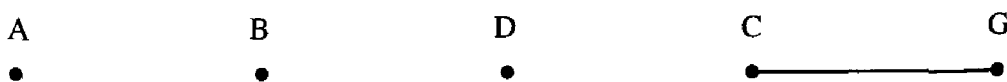


Figure 9.36 Merger diagram for Figure 9.35.

Present state	Next state				Output z
	$w_2w_1 = 00$	01	10	11	
A	(A)	(A)	C	B	0
B	A	(B)	D	(B)	1
C	(C)	B	(C)	D	0
D	C	A	(D)	(D)	1

Figure 9.37 Reduced flow table for Example 9.8.

consider the flow table in Figure 9.38. Applying the partitioning procedure to this table gives

$$P_1 = (AFK)(BJ)(CG)(D)(E)(H)$$

$$P_2 = (A)(FK)(BJ)(C)(G)(D)(E)(H)$$

$$P_3 = P_2$$

Combining B and J into a new state B , and F and K into F , gives the flow table in Figure 9.39.

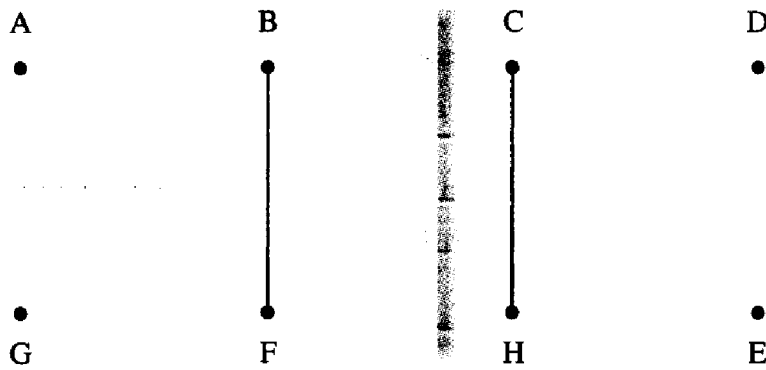
Figure 9.40a gives a merger diagram for this flow table, indicating the possibilities for merger if the Moore model of the FSM is to be preserved. In this case B and F can be merged, as well as C and H , resulting in a six-row flow table.

Present state	Next state				Output z
	$w_2w_1 = 00$	01	10	11	
A	(A)	G	E	—	0
B	K	—	(B)	D	0
C	F	(C)	—	H	1
D	—	C	E	(D)	0
E	A	—	(E)	D	1
F	(F)	C	J	—	0
G	K	(G)	—	D	1
H	—	—	E	(H)	1
J	F	—	(J)	D	0
K	(K)	C	B	—	0

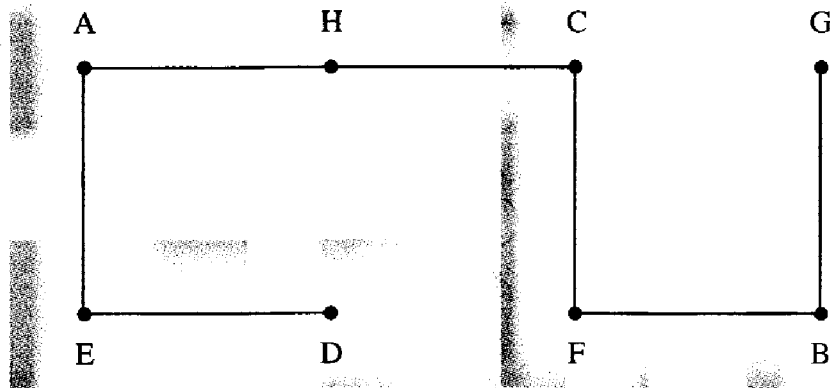
Figure 9.38 Flow table for Example 9.9.

Present state	Next state				Output z
	$w_2w_1 = 00$	01	10	11	
A	Ⓐ	G	E	-	0
B	F	-	Ⓑ	D	0
C	F	Ⓒ	-	H	1
D	-	C	E	Ⓓ	0
E	A	-	Ⓔ	D	1
F	Ⓕ	C	B	-	0
G	F	Ⓖ	-	D	1
H	-	-	E	Ⓗ	1

Figure 9.39 Reduction resulting from the partitioning procedure.



(a) Preserving the Moore model



(b) Complete merger diagram

Figure 9.40 Merger diagrams for Figure 9.39.

Next we should consider the merging possibilities if we are willing to change to the Mealy model. When going from the Moore model to the Mealy model, a stable state in the Mealy model must generate the same output as it had in the Moore model. It is also important to ensure that transitions in the Mealy model will not produce undesirable glitches in the output signal.

Figure 9.41 indicates how the FSM of Figure 9.39 can be represented in the Mealy form. The next-state entries are unchanged. In Figure 9.41, for each stable state the output value must be the same as for the corresponding row of the Moore-type table. For example, $z = 0$ when the state A is stable under $w_2w_1 = 00$. Also, $z = 0$ when the states $B, D,$ and F are stable under $w_2w_1 = 10, 11,$ and $00,$ respectively. Similarly, $z = 1$ when $C, E, G,$ and H are stable under $w_2w_1 = 01, 10, 01,$ and $11,$ respectively. If a transition from one stable state to another requires the output to change from 0 to 1, or from 1 to 0, then the exact time when the change takes place is not important, as we explained in section 9.1 when discussing Figure 9.3. For instance, suppose that the FSM is stable in A under $w_2w_1 = 00,$ producing $z = 0$. If the inputs then change to $w_2w_1 = 01,$ a transition to state G must be made, where $z = 1$. Since it is not essential that z becomes 1 before the circuit reaches the state $G,$ the output entry in row A that corresponds to this transition can be treated as a don't care; therefore, it is left unspecified in the table. From the stable state $A,$ it is also possible to change to $E,$ which allows specifying another don't care because z changes from 0 to 1. A different situation arises in row $B.$ Suppose that the circuit is stable in B under $w_2w_1 = 10$ and that the inputs change to 11. This has to cause a change to stable state $D,$ and z must remain at 0 throughout the change in states. Hence the output in row B under $w_2w_1 = 11$ is specified as 0. If it were left unspecified, to be used as a don't care, then it is possible that in the implementation of the circuit this don't care may be treated as a 1. This would cause a glitch in $z,$ which would change $0 \rightarrow 1 \rightarrow 0$ as the circuit moves from B to D when the inputs change from 10 to 11. The same situation occurs for the transition from

Present state	Next state				Output z			
	$w_2w_1 = 00$	01	10	11	00	01	10	11
A	Ⓐ	G	E	—	0	—	—	—
B	F	—	Ⓑ	D	0	—	0	0
C	F	Ⓒ	—	H	—	1	—	1
D	—	C	E	Ⓓ	—	—	—	0
E	A	—	Ⓔ	D	—	—	1	—
F	Ⓕ	C	B	—	0	—	0	—
G	F	Ⓖ	—	D	—	1	—	—
H	—	—	E	Ⓗ	—	—	1	1

Figure 9.41 The FSM of Figure 9.39 specified in the form of the Mealy model.

Present state	Next state				Output z			
	$w_2w_1 = 00$	01	10	11	00	01	10	11
A	(A)	B	D	(A)	0	–	1	1
B	C	(B)	(B)	D	0	1	0	0
C	(C)	(C)	B	A	0	1	0	1
D	A	C	(D)	(D)	–	–	1	0

Figure 9.42 Reduced flow table for Example 9.9.

B to F when the inputs change from 10 to 00. We can use the same reasoning to determine other output entries in Figure 9.41.

From Figure 9.41 we can derive the merger diagram in Figure 9.40*b*. The blue lines connect the rows that can be merged only by specifying the output in the Mealy style. The black lines connect the rows that can be merged even if the outputs are of Moore type; they correspond to the diagram in Figure 9.40*a*. Choosing the subsets of compatible states (A, H) , (B, G) , (C, F) , and (D, E) , the FSM can be represented using only four states. Merging the states A and H into a new state A , states B and G into B , states C and F into C , and D and E into D , we obtain the reduced flow table in Figure 9.42. Each entry in this table meets the requirements specified in the corresponding rows that were merged.

9.10 As another example consider the flow table in Figure 9.43. The partitioning procedure gives

$$P_1 = (AF)(BEG)(C)(D)(H)$$

$$P_2 = (AF)(BE)(G)(C)(D)(H)$$

$$P_3 = P_2$$

Present state	Next state				Output z
	$w_2w_1 = 00$	01	10	11	
A	(A)	B	C	–	0
B	F	(B)	–	H	0
C	F	–	(C)	H	0
D	(D)	G	C	–	1
E	A	(E)	–	H	0
F	(F)	E	C	–	0
G	D	(G)	–	H	0
H	–	G	C	(H)	1

Figure 9.43 Flow table for Example 9.10.

Replacing state *F* with *A*, and state *E* with *B*, results in the flow table in Figure 9.44. The corresponding merger diagram is presented in Figure 9.45. It is apparent that states *A*, *B*, and *C* can be merged and replaced with a new state *A*. Also *D*, *G*, and *H* can be merged into a new state *D*. The result is the reduced flow table in Figure 9.46, which has only two rows. Again we have used the Mealy model because the merged stable states *D* and *H* have $z = 1$ while *G* has $z = 0$.

Present state	Next state				Output <i>z</i>
	$w_2w_1 = 00$	01	10	11	
A	(A)	B	C	—	0
B	A	(B)	—	H	0
C	A	—	(C)	H	0
D	(D)	G	C	—	1
G	D	(G)	—	H	0
H	—	G	C	(H)	1

Figure 9.44 Reduction after the partitioning procedure.

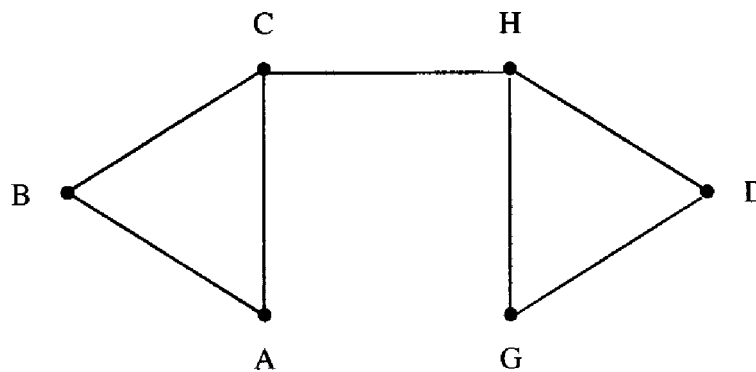


Figure 9.45 Merger diagram for Figure 9.44.

Present state	Next state				Output <i>z</i>			
	$w_2w_1 = 00$	01	10	11	00	01	10	11
A	(A)	(A)	(A)	D	0	0	0	—
D	(D)	(D)	A	(D)	1	0	—	1

Figure 9.46 Reduced flow diagram for Example 9.10.

9.5 STATE ASSIGNMENT

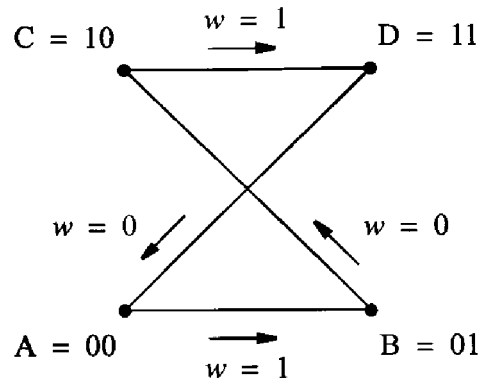
The examples in section 9.3 illustrate that the state assignment task for asynchronous FSMs is complex. The time needed to change the value of a state variable depends on the propagation delays in the circuit. Thus it is impossible to ensure that a change in the values of two or more variables will take place at exactly the same time. To achieve reliable operation of the circuit, the state variables should change their values one at a time in controlled fashion. This is accomplished by designing the circuit such that a change from one state to another entails a change in one state variable only.

States in FSMs are encoded as bit strings that represent different valuations of the state variables. The number of bit positions in which two given bit strings differ is called the *Hamming distance* between the strings. For example, for bit strings 0110 and 0100 the Hamming distance is 1, while for 0110 and 1101 it is 3. Using this terminology, an ideal state assignment has a Hamming distance of 1 for all transitions from one stable state to another. When the ideal state assignment is not possible, an alternative that makes use of unspecified states and/or transitions through unstable states must be sought. Sometimes it is necessary to increase the number of state variables to provide the needed flexibility.

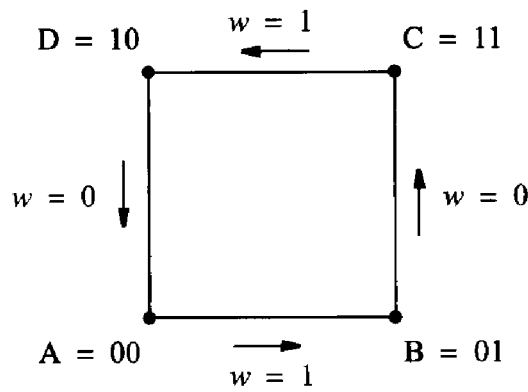
9.11 Consider the parity-generating FSM in Figure 9.13. Two possible state assignments for this FSM are given in Figure 9.14. The transitions between states, as specified in Figure 9.13b, can be described in pictorial form as shown in Figure 9.47. Each row of the flow table is represented by a point. The four points needed to represent the rows are placed as vertices of a square. Each vertex has an associated code that represents a valuation of the state variables, y_2y_1 . The codes shown in the figure, with $y_2y_1 = 00$ in the lower-left corner and so on, correspond to the coordinates of the two-dimensional cube presented in section 4.8. Figure 9.47a shows what happens if the state assignment in Figure 9.14a is used; namely, if $A = 00$, $B = 01$, $C = 10$, and $D = 11$. There is a transition from A to B if $w = 1$, which requires a change in y_1 only. A transition from C to D occurs if $w = 1$, which also requires a change in y_1 only. However, a transition from B to C caused by $w = 0$ involves a change in the values of both y_2 and y_1 . Similarly, both state variables must change in going from D to A if $w = 0$. A change in both variables corresponds to a diagonal path in the diagram.

Figure 9.47b shows the effect of the state assignment in Figure 9.14b, which reverses the valuations assigned to C and D . In this case all four transitions are along the edges of the two-dimensional cube, and they involve a change in only one of the state variables. This is the desirable state assignment.

9.12 The flow table for an arbiter FSM is given in Figure 9.21a. Transitions for this FSM are shown in Figure 9.48a, using the state assignment $A = 00$, $B = 01$, and $C = 10$. In this case multiple transitions are possible between the states. For example, there are two transitions between A and B : from B to A if $r_2r_1 = 00$ and from A to B if $r_2r_1 = 01$. Again there is a diagonal path, corresponding to transitions between B and C , which should be avoided. A possible solution is to introduce a fourth state, D , as indicated in Figure 9.48b. Now the transitions between B and C can take place via the unstable state D . Thus instead



(a) Corresponding to Figure 9.14a



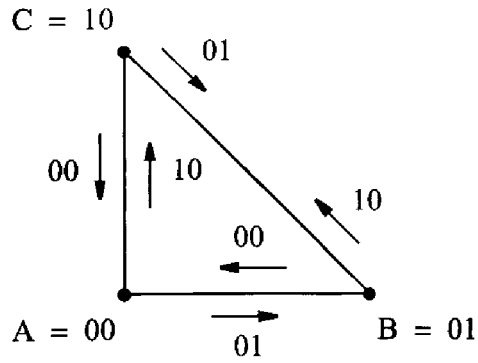
(b) Corresponding to Figure 9.14b

Figure 9.47 Transitions in Figure 9.13.

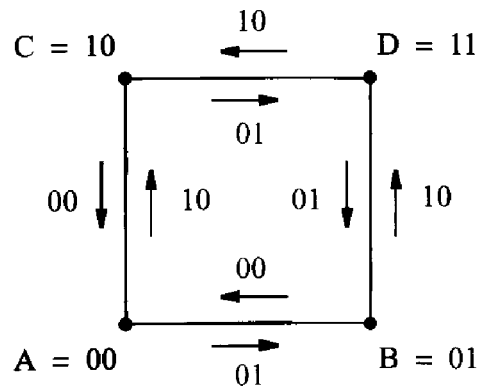
of going directly from B to C when $r_2r_1 = 10$, the circuit will go first from B to D and then from D to C .

Using the arrangement in Figure 9.48b requires modifying the flow table as shown in Figure 9.49. The state D is not stable for any input valuation. It cannot be reached if $r_2r_1 = 00$ or 11 ; hence these entries are left unspecified in the table. Also observe that we have specified the output $g_2g_1 = 10$ for state D , rather than leaving it unspecified. When a transition from one stable state to another takes place via an unstable state, the output of the unstable state must be the same as the output of one of the two stable states involved in the transition to ensure that a wrong output is not generated while passing through the unstable state.

It is interesting to compare this flow table with the excitation table in Figure 9.21b, which is also based on using the extra state D . In Figure 9.21b the state D specifies the necessary transitions should the circuit accidentally find itself in this state as a result of a race in changing the values of both state variables. In Figure 9.49 the state D is used in orderly transitions, which are not susceptible to any race conditions.



(a) Transitions in Figure 9.21a



(b) Using the extra state *D*

Figure 9.48 Transitions for the arbiter FSM in Figure 9.21.

Present state	Next state				Output g_2g_1
	$r_2r_1 = 00$	01	10	11	
A	(A)	B	C	—	00
B	A	(B)	D	(B)	01
C	A	D	(C)	(C)	10
D	—	B	C	—	10

Figure 9.49 Modified flow table based on the transitions in Figure 9.48b.

9.5.1 TRANSITION DIAGRAM

A diagram that illustrates the transitions specified in a flow table is called a *transition diagram*. In some books such diagrams are called *state-adjacency diagrams*. These diagrams provide a convenient aid in searching for a suitable state assignment.

A good state assignment results if the transition diagram does not have any diagonal paths. A general way of stating this requirement is to say that it must be possible to *embed* the transition diagram onto a k -dimensional cube, because in a cube all transitions between adjacent vertices involve the Hamming distance of 1. Ideally, a transition diagram for an FSM with n state variables can be embedded onto an n -dimensional cube, as is the case in the examples in Figures 9.47b and 9.48b. If this is not possible, then it becomes necessary to introduce additional state variables, as we will see in later examples.

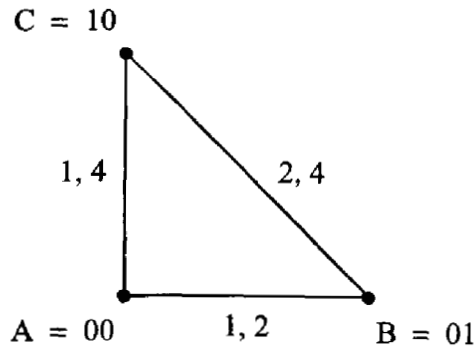
The diagrams in Figures 9.47 and 9.48 present all information pertinent to transitions between the states in the given FSMs. For larger FSMs such diagrams take on a cluttered appearance. A simpler form can be used instead, as described below.

A transition diagram has to show the state transitions for each valuation of the input variables. The direction of a transition, for example from A to B or from B to A , is not important, because it is only necessary to ensure that all transitions involve the Hamming distance of 1. The transition diagram has to show the effect of individual transitions into each stable state, which may involve passing through unstable states. For a given row of a flow table, it is possible to have two or more stable-state entries for different input valuations. It is useful to identify the transitions leading into these stable states with distinct labels in a transition diagram. To give each stable-state entry a distinct label, we will denote the stable-state entries with numbers 1, 2, 3, Thus if state A is stable for two input valuations, we will replace the label A with 1 for one input valuation and with 2 for the other valuation.

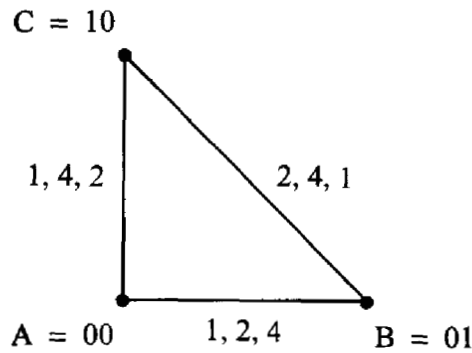
Figure 9.50 shows a relabeled version of the flow table in Figure 9.21a. We have arbitrarily chosen to label (A) as 1, the two appearances of (B) as 2 and 3, and the two appearances of (C) as 4 and 5. All entries in each next-state column are labeled using this scheme. The transitions identified by these labels are presented in Figure 9.51a. The same information is given in Figure 9.48a. Actually, the diagram in Figure 9.48a contains more information because arrowheads show the direction of each transition. Note also that the edges in that diagram are labeled with input values r_2r_1 , whereas the edges in Figure 9.51a are labeled with numerical stable-state labels as explained above.

Present state	Next state				Output g_2g_1
	$r_2r_1 = 00$	01	10	11	
A	(1)	2	4	—	00
B	1	(2)	4	(3)	01
C	1	2	(4)	(5)	10

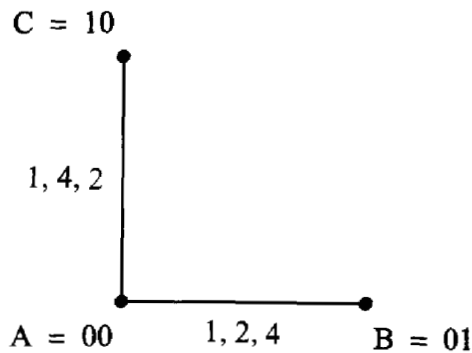
Figure 9.50 Relabeled flow table of Figure 9.21a.



(a) Transitions in Figure 9.50



(b) Complete transition diagram



(c) Selected transition diagram

Figure 9.51 Transition diagrams for Figure 9.50.

Figure 9.50 indicates that the stable state 2, which is one instance of the stable state B , can be reached either from state A or from state C . There is a corresponding label 2 on the paths connecting the vertices in the diagram in Figure 9.51a. The difficulty from the state-assignment point of view is that the path from C to B is diagonal. In Example 9.12 this problem was resolved by introducing a new state D . By examining the flow table in

Figure 9.50 more closely, we can see that the functional behavior of the required arbiter FSM can be achieved if the transition from C to B takes place via state A . Namely, if the circuit is stable in C , then the input $r_2r_1 = 01$ can cause the change to A , from which the circuit immediately proceeds to state B . We can indicate the possibility of using this path by placing the label 2 on the edge that connects C and A in Figure 9.51a.

A similar situation exists for the transition from B to C , which is labeled 4. An alternative path can be realized by causing the circuit to go from state B to state A if $r_2r_1 = 10$ and then immediately proceed to C . This can be indicated by placing the label 4 on the edge that connects B and A in Figure 9.51a.

A possibility of having an alternative path for a transition exists whenever two states have the same uncircled label in the relabeled flow diagram. In Figure 9.50 there is a third such possibility if $r_2r_1 = 00$, using the label 1. This possibility is not useful because changing from either B or C to A involves a change in only one state variable using the state assignment in Figure 9.51a. Hence there would be no benefit in having a transition between B and C for this input valuation.

To depict the possibility of having alternative paths, we will indicate in blue the corresponding transitions on the diagram. Thus a complete transition diagram will show all direct transitions to stable states in black and possible indirect transitions through unstable states in blue. Figure 9.51b shows the complete transition diagram for the flow table in Figure 9.21a.

The transition diagram in Figure 9.51b cannot be embedded on the two-dimensional cube, because some transitions require a diagonal path. The blue label 1 on the path between B and C is of no concern, because it represents only an alternative path that does not have to be used. But the transitions between B and C labeled 2 and 4 are required. The diagram shows an alternative path, through A , having the labels 2 and 4. Therefore, the alternative path can be used, and the diagonal connection in the diagram can be eliminated. This leads to the transition diagram in Figure 9.51c, which can be embedded on the two-dimensional cube. The conclusion is that the state assignment $A = 00$, $B = 01$, and $C = 10$ is good, but the flow table must be modified to specify the transitions through alternative paths. The modified table is the same as the flow table designed earlier using an ad hoc approach, shown in Figure 9.23a.

As a final comment on this example, note the impact of alternative paths on the outputs produced by the FSM. If $r_2r_1 = 01$, then a change from a stable state C through unstable A to stable B generates the outputs $g_2g_1 = 10 \rightarrow 00 \rightarrow 01$, rather than $10 \rightarrow 01$ as specified in Figure 9.21a. For the arbiter FSM this presents no problem, as explained in Example 9.6.

Procedure for Deriving Transition Diagrams

The transition diagram is derived from a flow table as follows:

- Derive the relabeled flow table as explained above. For a given input valuation, all transitions that lead to the same stable state are labeled with the same number. Transitions through unstable states that eventually lead to a stable state are given the same number as the stable-state entry.
- Represent each row of the flow table by a vertex.

- Join two vertices, V_i and V_j , by an edge if they have the same number in any column of the relabeled flow table.
- For each column in which V_i and V_j have the same number, label the edge between V_i and V_j with that number. We will use black labels for direct transitions to circled (stable) states and blue labels when the next-state entries for both V_i and V_j in the flow table are uncircled.

Note that the first point says that in the relabeled flow table the transitions through unstable states are given the label of the stable state to which they lead for a given input valuation. For example, to derive a transition diagram starting from the flow table in Figure 9.23a, the table would be relabeled to give the table in Figure 9.50. The transition from stable A to stable B , when $r_2r_1 = 01$, has the label 2. The same label is given to the transition from stable C to unstable A because this transition ultimately leads to stable B .

9.5.2 EXPLOITING UNSPECIFIED NEXT-STATE ENTRIES

Unspecified entries in a flow table provide some flexibility in finding good state assignments. The following example presents a possible approach. The example also illustrates all steps in the derivation of a transition diagram.

9.13 Consider the flow table in Figure 9.52a. This FSM has seven stable-state entries. Labeling these entries in order, from 1 to 7, results in the table in part (b) of the figure. In this case states 1 and 2 correspond to state A , 3 and 4 to state B , 5 and 6 to state C , and 7 to state D . In the column $w_2w_1 = 00$ there is a transition from C to A , which is labeled 1, and a transition from D to B , which is labeled 3, because 1 and 3 are the successor stable states in these transitions. Similarly, in column 11 there are transitions from B to C and from D to A , which are labeled 6 and 2, respectively. In column 01 there is a transition from A to B , which is labeled 4. State C is stable for this input valuation; it is labeled 5. There is no transition specified that leads to this stable state. The state can be reached only if C is stable under $w_2w_1 = 11$, which is labeled 6, and then the inputs change to $w_2w_1 = 01$. Note that the FSM remains stable in C if the inputs change from 11 to 01, or vice versa. Column 10 illustrates how unstable states are treated. From the stable state A , a transition to the unstable state C is specified. As soon as the FSM reaches state C , it proceeds to change to the stable state D , which is labeled 7. Thus 7 is used as the label for the entire transition sequence from A to C to D .

Taking rows A , B , C , and D as the four vertices, a first attempt at drawing the transition diagram is given in Figure 9.53a. The diagram shows transitions between all pairs of states, which seems to suggest that it is impossible to have a state assignment where all transitions are characterized by a Hamming distance of 1. If the state assignment $A = 00$, $B = 01$, $C = 11$, and $D = 10$ is used, then the diagonal transition between A and C , or B and D , requires both state variables to change their values. The diagonal path from B to D with the label 7 is not needed, because an alternative path from B to D exists under label 7 that

Present state	Next state				Output z_2z_1
	$w_2w_1 = 00$	01	10	11	
A	(A)	B	C	(A)	00
B	(B)	(B)	D	C	01
C	A	(C)	D	(C)	10
D	B	-	(D)	A	11

(a) Flow table

Present state	Next state				Output z_2z_1
	$w_2w_1 = 00$	01	10	11	
A	(1)	4	7	(2)	00
B	(3)	(4)	7	6	01
C	1	(5)	7	(6)	10
D	3	-	(7)	2	11

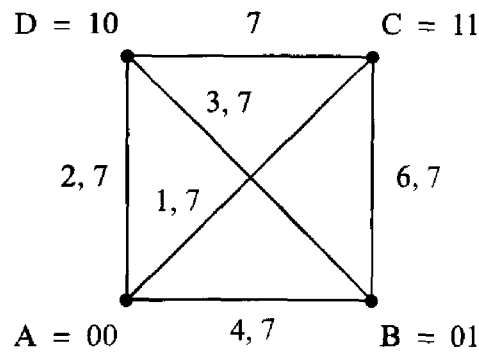
(b) Relabeled flow table

Figure 9.52 Flow tables for Example 9.13.

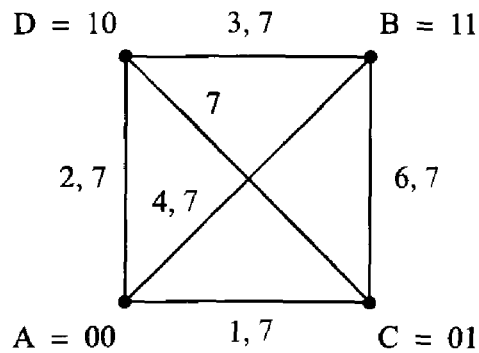
passes either through state *A* or through state *C*. Unfortunately, the diagonal paths labeled 1 and 3 cannot be removed, because there are no alternative paths for these transitions.

As the next attempt at finding a suitable state assignment, we will reverse the codes given to *B* and *C*, which yields the transition diagram in Figure 9.53*b*. Now the same argument about the alternative paths labeled 7 indicates that the diagonal from *C* to *D* can be omitted. Also, the label 7 on the diagonal between *A* and *B* can be omitted. However, this diagonal must remain because of the label 4 for which there is no alternative path between *A* and *B*. Looking at the flow table in Figure 9.52*b*, we see an unspecified entry in the column $w_2w_1 = 01$. This entry can be exploited by replacing it with the label 4, in which case the transition graph would show the label 4 on the edges connecting *A* and *D*, as well as *B* and *D*. Thus the diagonal between *A* and *B* could be removed, producing the transition diagram in Figure 9.53*c*. This diagram can be embedded on a two-dimensional cube, which means that the state assignment $A = 00$, $B = 11$, $C = 01$, and $D = 10$ can be used.

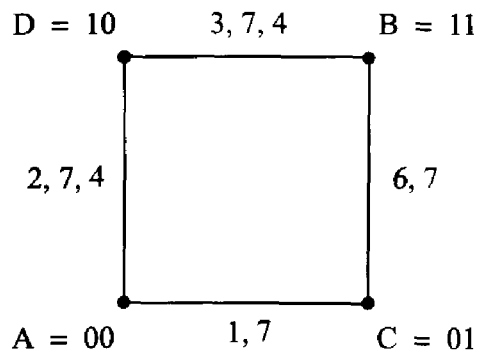
For the transition diagram in Figure 9.53*c* to be applicable, the flow table for the FSM must be modified as shown in Figure 9.54*a*. The unspecified entry in Figure 9.52*a* now specifies a transition to state *B*. According to Figure 9.53*c*, the change from state *A* to *B* under input valuation $w_2w_1 = 01$ must pass through state *D*; hence the corresponding entry



(a) First transition diagram



(b) Second transition diagram



(c) Augmented transition diagram

Figure 9.53 Transition diagrams for Figure 9.52.

in the first row is modified to ensure that this will take place. Also, when $w_2w_1 = 10$, the FSM must go to state D . If it happens to be in state C , then this change has to occur either via state A or state B . We have chosen the path via state B in Figure 9.54a.

The original flow table in Figure 9.52a is defined in the form of the Moore model. The modified flow table in Figure 9.54a requires the use of the Mealy model because the previously described transitions through unstable states must produce correct outputs.

Present state	Next state				Output z_2z_1			
	$w_2w_1 = 00$	01	10	11	00	01	10	11
A	(A)	D	D	(A)	00	00	11	00
B	(B)	(B)	D	C	01	01	11	01
C	A	(C)	B	(C)	0	10	1	10
D	B	B	(D)	A	1	0	11	00

(a) Modified flow table

Present state	Next state				Output				
	$w_2w_1 = 00$	01	10	11	00	01	10	11	
	y_2y_1	Y_2Y_1			z_2z_1				
A	00	(00)	10	10	(00)	00	00	11	00
B	11	(11)	(11)	10	01	01	01	11	01
C	01	00	(01)	11	(01)	0	10	1	10
D	10	11	11	(10)	00	1	0	11	00

(b) Excitation table

Figure 9.54 Realization of the FSM in Figure 9.52a.

Consider first the change from A if $w_2w_1 = 01$. While stable in state A, the circuit must produce the output $z_2z_1 = 00$. Upon reaching the stable state B, the output must become 01. The problem is that this transition requires a short visit to state D, which in the Moore model would produce $z_2z_1 = 11$. Thus a glitch would be generated on the output signal z_2 , which would undergo the change $0 \rightarrow 1 \rightarrow 0$. To avoid this undesirable glitch, the output in state D must be $z_2 = 0$ for this input valuation, which requires the use of the Mealy model as shown in the Figure 9.54a. Observe that while z_2 must be 0 in D for $w_2w_1 = 01$, z_1 can be either 0 or 1 because it is changing from 0 in state A to 1 in state B. Therefore, z_1 can be left unspecified so that this case can be treated as a don't-care condition. A similar situation arises when the circuit changes from C to D via B if $w_2w_1 = 10$. The output must change from 10 to 11, which means that z_2 must remain at 1 throughout this change, including the short time in state B where the Moore model output would be 01.

The modified flow table and the chosen state assignment lead to the excitation table in Figure 9.54b. From this table the next-state and output expressions are derived, as in the examples in section 9.3.

9.5.3 STATE ASSIGNMENT USING ADDITIONAL STATE VARIABLES

In Figure 9.52a there is an unspecified transition that can be exploited to find a suitable state assignment, as shown in section 9.5.2. In general, such flexibility may not exist. It may be impossible to find a race-free state assignment using $\log_2 n$ state variables for a flow table that has n rows. The problem can be solved by adding extra state variables. This can be done in three ways, as illustrated in the examples that follow.

9.14 USING EXTRA UNSTABLE STATES Consider the FSM specified by the flow table in Figure 9.55a. The flow table is relabeled in part (b) of the figure. A corresponding transition diagram is depicted in Figure 9.56a. It indicates that there are transitions between all pairs of vertices (rows). No rearrangement of the existing vertices would allow mapping of the transition diagram onto a two-dimensional cube.

Let us now introduce one more state variable so that we can look for a way to map the transition diagram onto a three-dimensional cube. With three state variables the assignment for state A can be a Hamming distance of 1 different from the assignments for B, C, and D. For example, we could have $A = 000$, $B = 001$, $C = 100$, and $D = 010$. But it

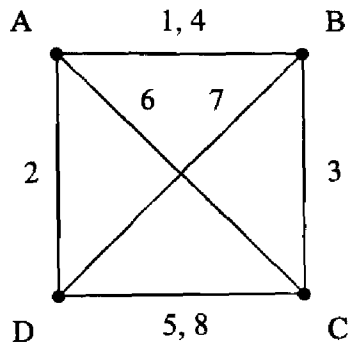
Present state	Next state				Output z_2z_1
	$w_2w_1 = 00$	01	10	11	
A	(A)	(A)	C	B	00
B	A	(B)	D	(B)	01
C	(C)	B	(C)	D	10
D	C	A	(D)	(D)	11

(a) Flow table

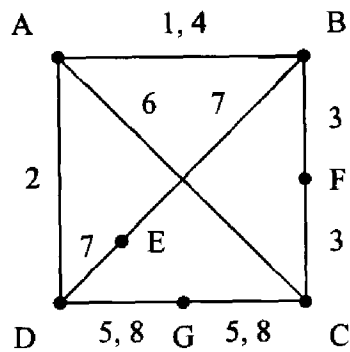
Present state	Next state				Output z_2z_1
	$w_2w_1 = 00$	01	10	11	
A	(1)	(2)	6	4	00
B	1	(3)	7	(4)	01
C	(5)	3	(6)	8	10
D	5	2	(7)	(8)	11

(b) Relabeled flow table

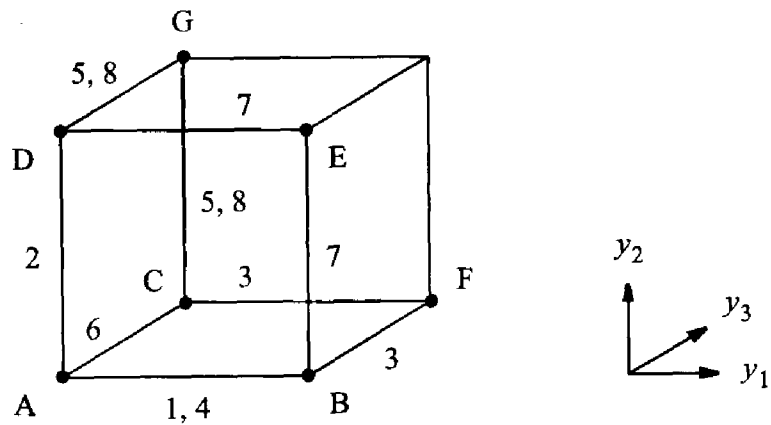
Figure 9.55 FSM for Example 9.14.



(a) Transition diagram



(b) Augmented transition diagram



(c) Embedded transition diagram

Figure 9.56 Transition diagrams for Figure 9.55.

would then be impossible to have the pairs (B, C) , (B, D) , and (C, D) within the Hamming distance of 1. The solution here is to insert extra vertices in the transition paths, as shown in Figure 9.56b. Vertex E separates B from D , while vertices F and G break the paths (B, C) and (C, D) . The labels associated with the transitions are attached to both segments of a broken path. The resulting transition diagram can be embedded onto a three-dimensional

cube as indicated in Figure 9.56c, where the black portion of the cube comprises the desired paths. Now the transition from *B* to *D* takes place via vertex *E* if $w_2w_1 = 10$ (label 7). The transition from *C* to *B* occurs via *F* if $w_2w_1 = 01$ (label 3). The transition from *C* to *D* goes through *G* if $w_2w_1 = 11$ (label 8), and the transition from *D* to *C* goes via *G* if $w_2w_1 = 00$ (label 5). Therefore, the flow table has to be modified as shown in Figure 9.57a. The three extra states are unstable because the circuit will not remain in these states for any valuation

Present state	Next state				Output z_2z_1
	$w_2w_1 = 00$	01	10	11	
A	Ⓐ	Ⓐ	C	B	00
B	A	Ⓑ	E	Ⓑ	01
C	Ⓒ	F	Ⓒ	G	10
D	G	A	Ⓓ	Ⓓ	11
E	-	-	D	-	-1
F	-	B	-	-	01
G	C	-	-	D	1-

(a) Modified flow table

	Present state	Next state				Output z_2z_1
		$w_2w_1 = 00$	01	10	11	
	$y_3y_2y_1$	$Y_3Y_2Y_1$				
A	000	Ⓐ	Ⓐ	100	001	00
B	001	000	Ⓑ	011	Ⓑ	01
C	100	Ⓒ	101	Ⓒ	110	10
D	010	110	000	Ⓓ	Ⓓ	11
E	011	-	-	010	-	-1
F	101	-	001	-	-	01
G	110	100	-	-	010	1-

(b) Excitation table

Figure 9.57 Modified tables for Example 9.14.

of the inputs. The circuit will merely pass through these states in the process of changing from one stable state to another. Observe that each of the states E , F , and G is needed to facilitate the transitions caused by only one or two valuations of inputs. Thus it is not necessary to specify the actions that might be caused by other input valuations, because such situations will never occur in a properly functioning circuit.

The outputs in Figure 9.57a can be specified using the Mealy model. It is essential that a proper output is generated when passing through unstable states, to avoid undesirable glitches in the output signals.

If we assign the state variables as shown on the right of Figure 9.56c, the modified flow table leads to the excitation table in Figure 9.57b. From this table, deriving the next-state and output expressions is a straightforward task.

USING PAIRS OF EQUIVALENT STATES Another approach is to increase the flexibility in state assignment by introducing an equivalent new state for each existing state. Thus state A can be replaced with two states $A1$ and $A2$ such that the final circuit produces the same outputs for $A1$ and $A2$ as it would for A . Similarly, other states can be replaced by equivalent pairs of states. Figure 9.58 shows how a three-dimensional cube can be used to find a good state assignment for a four-row flow table. The four equivalent pairs are arranged so that the minimum Hamming distance of 1 exists between all pairs. For example, the pair $(B1, B2)$ has the Hamming distance of 1 with respect to $A1$ (or $A2$), $C2$, and $D2$.

The transition diagram in Figure 9.56a can be embedded onto the three-dimensional cube as shown in Figure 9.58. Since there is a choice of two vertices on the cube for each vertex in the transition diagram in Figure 9.56a, the embedded transition diagram does not involve any diagonal paths. Using this assignment of states, the flow table in Figure 9.55a has to be modified as presented in Figure 9.59a. The entries in the table are made to allow each transition in the original flow table to be realized using a transition between the corresponding pairs of equivalent states. Both states in an equivalent pair are stable for the input valuations for which the original state is stable. Thus $A1$ and $A2$ are stable if $w_2w_1 = 00$ or 01 , $B1$ and $B2$ are stable if $w_2w_1 = 01$ or 11 , and so on. At any given time the FSM may be in either of the two equivalent states that represent an original state. Then

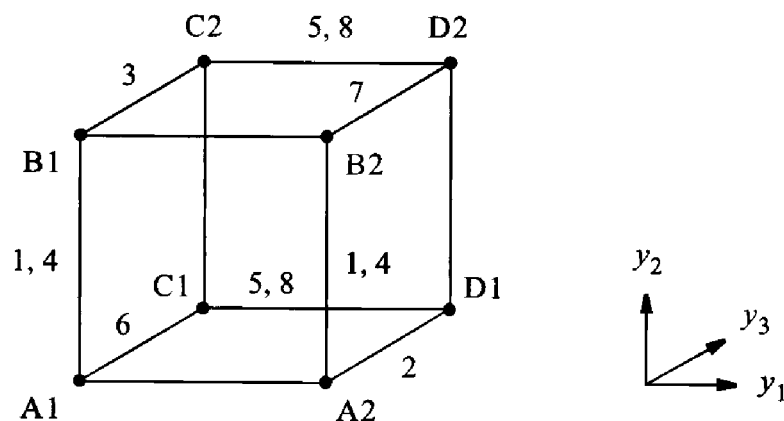


Figure 9.58 Embedded transition diagram if two nodes per row are used.

Present state	Next state				Output z_2z_1
	$w_2w_1 = 00$	01	10	11	
A1	(A1)	(A1)	C1	B1	00
A2	(A2)	(A2)	A1	B2	00
B1	A1	(B1)	B2	(B1)	01
B2	A2	(B2)	D2	(B2)	01
C1	(C1)	C2	(C1)	D1	10
C2	(C2)	B1	(C2)	D2	11
D1	C1	A2	(D1)	(D1)	11
D2	C2	D1	(D2)	(D2)	11

(a) Modified flow table

	Present state	Next state				Output z_2z_1
		$w_2w_1 = 00$	01	10	11	
	$y_3y_2y_1$	$Y_3Y_2Y_1$				
A1	000	(000)	(000)	100	010	00
A2	001	(001)	(001)	000	011	00
B1	010	000	(010)	011	(010)	01
B2	011	001	(011)	111	(011)	01
C1	100	(100)	110	(100)	101	10
C2	110	(110)	010	(110)	111	10
D1	101	100	001	(101)	(101)	11
D2	111	110	101	(111)	(111)	11

(b) Excitation table

Figure 9.59 Modified flow and excitation tables for Example 9.15.

a change to another state must be possible from either of these states. For example, Figure 9.55a specifies that the FSM must change from the stable state A to state B if the input is $w_2w_1 = 11$. The equivalent transition in the modified flow table is the change from state $A1$ to $B1$ or from state $A2$ to $B2$. If the FSM is stable in A and the input changes from 00 to 10, then a change to C is required. The equivalent transition in the modified flow table is from state $A1$ to $C1$; if the FSM happens to be in state $A2$, it will first have to change to $A1$. The remaining entries in Figure 9.59a are derived using the same reasoning.

The outputs are specified using the Moore model, because the only unstable states are those involved in changing from one member of the equivalent pair to another, and both members generate the same outputs. For instance, in the previously described transition from A to C , if the starting point is $A2$, it is necessary to go first to $A1$ and then to $C1$. Even though $A1$ is unstable for $w_2w_1 = 10$, there is no problem because its output is the same as that of $A2$. Therefore, if the original flow table is defined using the Moore model, then the modified flow table can also be done using the Moore model.

Using the assignment of the state variables in Figure 9.58 gives the excitation table in Figure 9.59b.

9.5.4 ONE-HOT STATE ASSIGNMENT

The previously described schemes based on embedding the flow table in a cube may lead to an optimal state assignment, but they require a trial-and-error approach that becomes awkward for large machines. A straightforward, but more expensive, alternative is to use one-hot codes. If each row in the flow table of an FSM is assigned a one-hot code, then race-free state transitions can be achieved by passing through unstable states that are at a Hamming distance of 1 from the two stable states involved in the transition. For example, suppose that state A is assigned the code 0001 and state B the code 0010. Then a race-free transition from A to B can pass through an unstable state 0011. Similarly, if C is assigned the code 0100, then a transition from A to C can be done via the unstable state 0101.

Using this approach, the flow table in Figure 9.55a can be modified as illustrated in Figure 9.60. The four states, A , B , C , and D , are assigned one-hot codes. As seen in the figure, it is necessary to introduce six unstable states, E through J , to handle the necessary transitions. These unstable states have to be specified only for the specific transitions, whereas for other input valuations they may be treated as don't cares.

The outputs can be specified using the Moore model. In some cases it does not matter when a particular output signal changes its value. For instance, state E is used to facilitate the transition from state A to C . Since $z_2z_1 = 00$ in A and 10 in C , it is not important if z_2 changes when passing through state E .

While straightforward to implement, the one-hot encoding is expensive because it requires n state variables to implement an n -row flow table. Simplicity of design and the cost of implementation often provide a challenging trade-off in designing logic circuits!

State assignment	Present State	Next state				Output z_2z_1
		$w_2w_1 = 00$	01	10	11	
0001	A	(A)	(A)	E	F	00
0010	B	F	(B)	G	(B)	01
0100	C	(C)	H	(C)	I	10
1000	D	I	J	(D)	(D)	11
0101	E	-	-	C	-	-0
0011	F	A	-	-	B	0-
1010	G	-	-	D	-	-1
0110	H	-	B	-	-	01
1100	I	C	-	-	D	1-
1001	J	-	A	-	-	00

Figure 9.60 State assignment with one-hot encoding.

9.6 HAZARDS

In asynchronous sequential circuits it is important that undesirable glitches on signals should not occur. The designer must be aware of the possible sources of glitches and ensure that the transitions in a circuit will be glitch free. The glitches caused by the structure of a given circuit and propagation delays in the circuit are referred to as *hazards*. Two types of hazards are illustrated in Figure 9.61.

A *static hazard* exists if a signal is supposed to remain at a particular logic value when an input variable changes its value, but instead the signal undergoes a momentary change

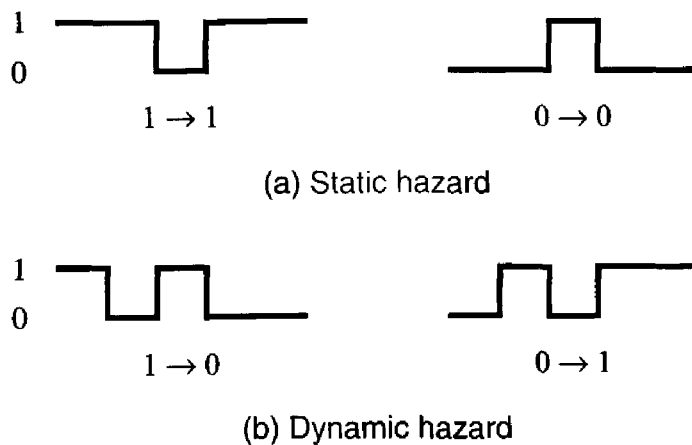


Figure 9.61 Definition of hazards.

in its required value. As shown in Figure 9.61a, one type of static hazard is when the signal at level 1 is supposed to remain at 1 but dips to 0 for a short time. Another type is when the signal is supposed to remain at level 0 but rises momentarily to 1, thus producing a glitch.

A different type of hazard may occur when a signal is supposed to change from 1 to 0 or from 0 to 1. If such a change involves a short oscillation before the signal settles into its new level, as illustrated in Figure 9.61b, then a *dynamic hazard* is said to exist.

9.6.1 STATIC HAZARDS

Figure 9.62a shows a circuit with a static hazard. Suppose that the circuit is in the state where $x_1 = x_2 = x_3 = 1$, in which case $f = 1$. Now let x_1 change from 1 to 0. Then the circuit is supposed to maintain $f = 1$. But consider what happens when the propagation delays through the gates are taken into account. The change in x_1 will probably be observed at point p before it will be seen at point q because the path from x_1 to q has an extra gate (NOT) in it. Thus the signal at p will become 0 before the signal at q becomes equal to 1. For a short time both p and q will be 0, causing f to drop to 0 before it recovers back to 1. This gives rise to the signal depicted on the left side of Figure 9.61a.

The glitch on f can be prevented as follows. The circuit implements the function

$$f = x_1x_2 + \bar{x}_1x_3$$

The corresponding Karnaugh map is given in Figure 9.62b. The two product terms realize the prime implicants encircled in black. The hazard explained above occurs when there is a transition from the prime implicant x_1x_2 to the prime implicant \bar{x}_1x_3 . The hazard can be eliminated by including the third prime implicant, encircled in blue. (This is the consensus term, defined in Property 17a in section 2.5.) Then the function would be implemented as

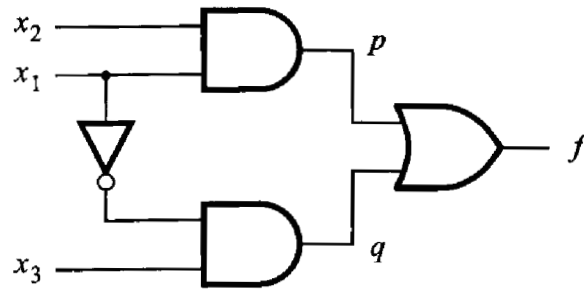
$$f = x_1x_2 + \bar{x}_1x_3 + x_2x_3$$

Now the change in x_1 from 1 to 0 would have no effect on the output f because the product term x_2x_3 would be equal to 1 if $x_2 = x_3 = 1$, regardless of the value of x_1 . The resulting hazard-free circuit is depicted in Figure 9.62c.

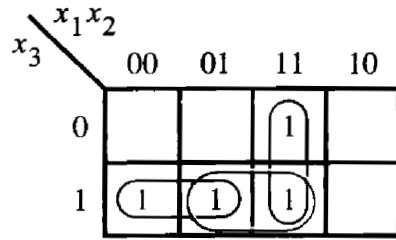
A potential hazard exists wherever two adjacent 1s in a Karnaugh map are not covered by a single product term. Therefore, a technique for removing hazards is to find a cover in which some product term includes each pair of adjacent 1s. Then, since a change in an input variable causes a transition between two adjacent 1s, no glitch can occur because both 1s are included in a product term.

In asynchronous sequential circuits a hazard can cause the circuit to change to an incorrect stable state. Example 9.16 illustrates this situation.

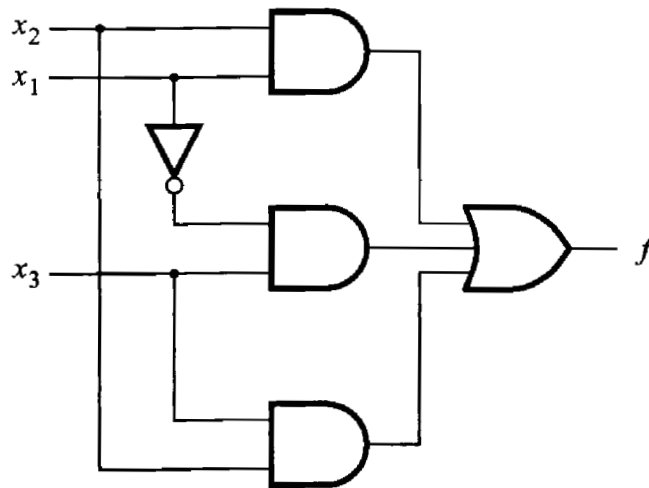
In Example 9.2 we analyzed the circuit that realizes a master-slave D flip-flop. From the excitation table in Figure 9.6a, one could attempt to synthesize a minimum-cost circuit that realizes the required functions, Y_m and Y_s . This would give **Exa**



(a) Circuit with a hazard



(b) Karnaugh map

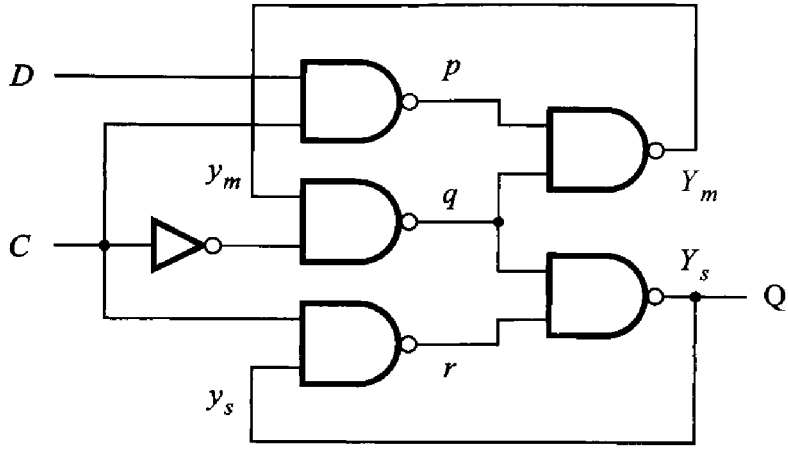


(c) Hazard-free circuit

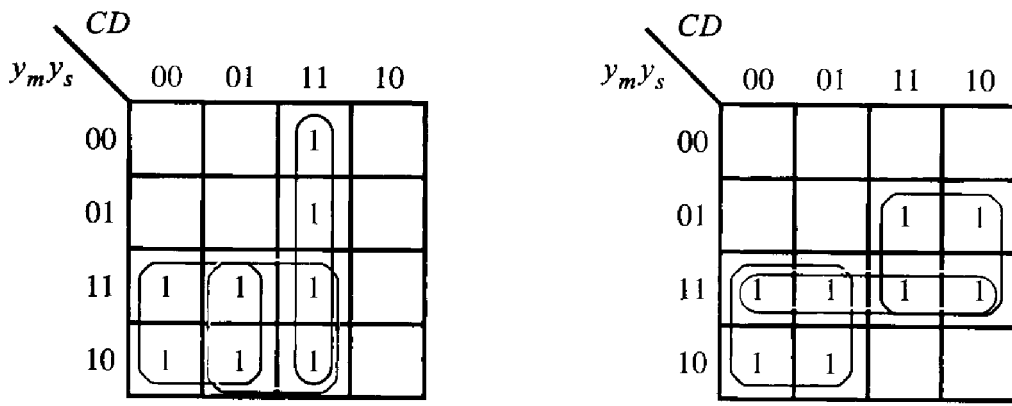
Figure 9.62 An example of a static-hazard.

$$\begin{aligned}
 Y_m &= CD + \bar{C}y_m \\
 &= (C \uparrow D) \uparrow (\bar{C} \uparrow y_m) \\
 Y_s &= \bar{C}y_m + Cy_s \\
 &= (\bar{C} \uparrow y_m) \uparrow (C \uparrow y_s)
 \end{aligned}$$

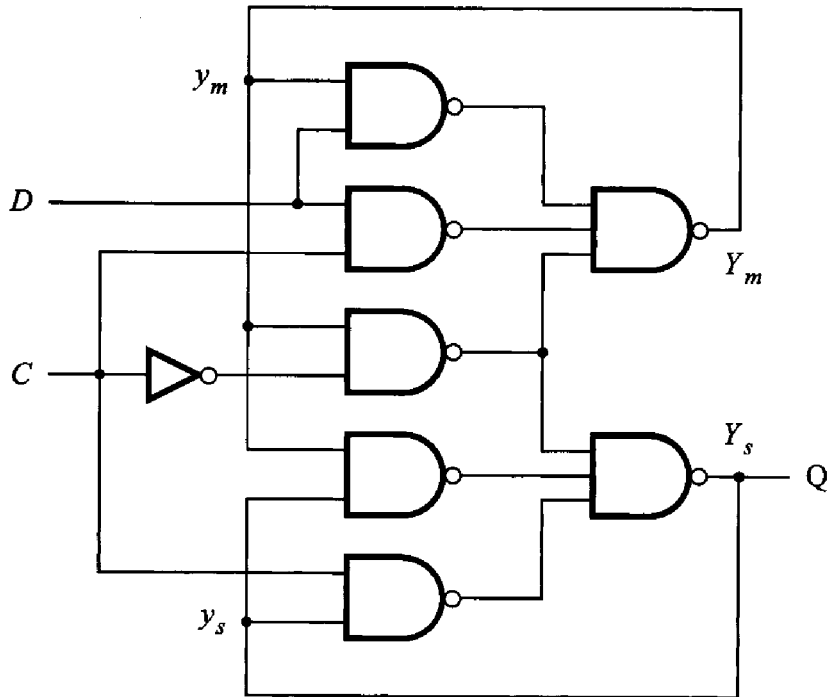
The corresponding circuit is presented in Figure 9.63a. At first glance this circuit may seem more attractive than the flip-flops discussed in Chapter 7 because it is less expensive. The problem is that the circuit contains a static hazard.



(a) Minimum-cost circuit



(b) Karnaugh maps for Y_m and Y_s in Figure 9.6a



(c) Hazard-free circuit

Figure 9.63 Two-level implementation of master-slave D flip-flop.

Figure 9.63*b* shows the Karnaugh maps for the functions Y_m and Y_s . The minimum-cost implementation is based on the prime implicants encircled in black. To see how this circuit is affected by static hazards, assume that presently $Y_s = 1$ and $C = D = 1$. The circuit generates $Y_m = 1$. Now let C change from 1 to 0. For the flip-flop to behave properly, Y_s must remain equal to 1. In Figure 9.63*a*, when C changes to 0, both p and r become 1. Due to the delay through the NOT gate, q may still be 1, causing the circuit to generate $Y_m = Y_s = 0$. The feedback from Y_m will maintain $q = 1$. Hence the circuit remains in an incorrect stable state with $Y_s = 0$.

To avoid the hazards, it is necessary to also include the terms encircled in blue, which gives rise to the expressions

$$Y_m = CD + \bar{C}y_m + Dy_m$$

$$Y_s = \bar{C}y_m + Cy_s + y_my_s$$

The resulting circuit, implemented with NAND gates, is shown in Figure 9.63*c*.

Note that we can obtain another NAND-gate implementation by rewriting the expressions for Y_m and Y_s as

$$Y_m = CD + (\bar{C} + D)y_m$$

$$= (C \uparrow D) \uparrow ((\bar{C} + D) \uparrow y_m)$$

$$= (C \uparrow D) \uparrow ((C \uparrow \bar{D}) \uparrow y_m)$$

$$Y_s = \bar{C}y_m + (C + y_m)y_s$$

$$= (\bar{C} \uparrow y_m) \uparrow ((\bar{C} \uparrow \bar{y}_m) \uparrow y_s)$$

These expressions correspond exactly to the circuit in Figure 7.13.

- 17** From the previous examples, it seems that static hazards can be avoided by including all prime implicants in a sum-of-products circuit that realizes a given function. This is indeed true. But it is not always necessary to include all prime implicants. It is only necessary to include product terms that cover the adjacent pairs of 1s. There is no need to cover the don't-care vertices.

Consider the function in Figure 9.64. A hazard-free circuit that implements this function should include the encircled terms, which gives

$$f = \bar{x}_1x_3 + x_2x_3 + x_3\bar{x}_4$$

The prime implicant $\bar{x}_1\bar{x}_2$ is not needed to prevent hazards, because it would account only for the two 1s in the left-most column. These 1s are already covered by \bar{x}_1x_3 .

- 18** Static hazards can also occur in other types of circuits. Figure 9.65*a* depicts a product-of-sums circuit that contains a hazard. If $x_1 = x_3 = 0$ and x_2 changes from 0 to 1, then f should remain at 0. However, if the signal at p changes earlier than the signal at q , then p and q will both be equal to 1 for a short time, causing a glitch $0 \rightarrow 1 \rightarrow 0$ on f .

In a POS circuit, it is the transitions between adjacent 0s that may lead to hazards. Thus to design a hazard-free circuit, it is necessary to include sum terms that cover all pairs of

		x_1x_2			
x_3x_4		00	01	11	10
00		d			d
01		d			
11		1	1	1	
10		1	1	1	1

Figure 9.64 Function for Example 9.17.

adjacent 0s. In this example the term in blue in the Karnaugh map must be included, giving

$$f = (x_1 + x_2)(\bar{x}_2 + x_3)(x_1 + x_3)$$

The circuit is shown in Figure 9.65c.

9.6.2 DYNAMIC HAZARDS

A dynamic hazard causes glitches on $0 \rightarrow 1$ or $1 \rightarrow 0$ transitions of an output signal. An example is given in Figure 9.66. Assuming that all NAND gates have equal delays, a timing diagram can be constructed as shown. The time elapsed between two vertical lines corresponds to a gate delay. The output f exhibits a glitch that **should** be avoided.

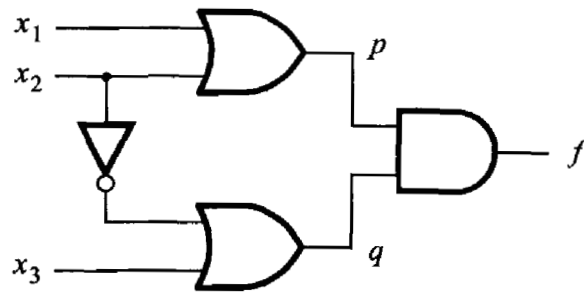
It is interesting to consider the function implemented by this circuit, which is

$$f = x_1\bar{x}_2 + \bar{x}_3x_4 + x_1x_4$$

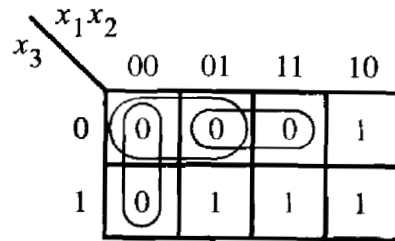
This is the minimum-cost sum-of-products expression for the function. If implemented in this form, the circuit would not have either a static or a dynamic hazard.

A dynamic hazard is caused by the structure of the circuit, where there exist multiple paths for a given signal change to propagate along. If the output signal changes its value three times, $0 \rightarrow 1 \rightarrow 0 \rightarrow 1$ in the example, then there must be at least three paths along which a change from a primary input can propagate. A circuit that has a dynamic hazard must also have a static hazard in some part of it. As seen in Figure 9.66b, there is a static hazard involving the signal on wire b .

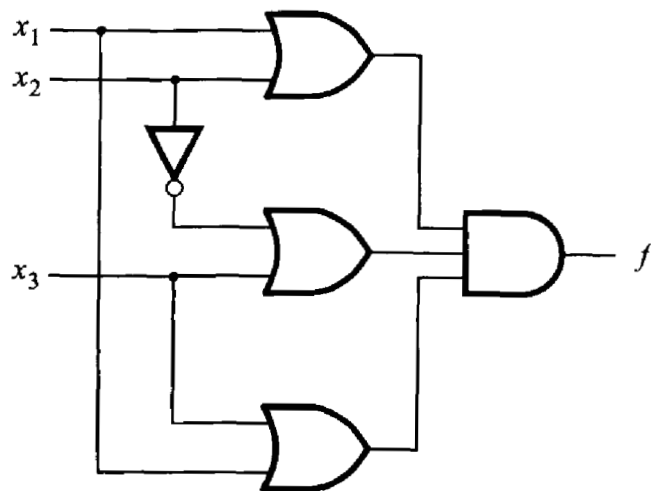
Dynamic hazards are encountered in multilevel circuits obtained using factoring or decomposition techniques, which were discussed in Chapter 4. Such hazards are neither easy to detect nor easy to deal with. The designer can avoid dynamic hazards simply by using two-level circuits and ensuring that there are no static hazards.



(a) Circuit with a hazard



(b) Karnaugh map



(c) Hazard-free circuit

Figure 9.65 Static hazard in a POS circuit.

9.6.3 SIGNIFICANCE OF HAZARDS

A glitch in an asynchronous sequential circuit can cause the circuit to enter an incorrect state and possibly become stable in that state. Therefore, the circuitry that generates the next-state variables must be hazard free. It is sufficient to eliminate hazards due to changes in the value of a single variable because the basic premise in an asynchronous sequential

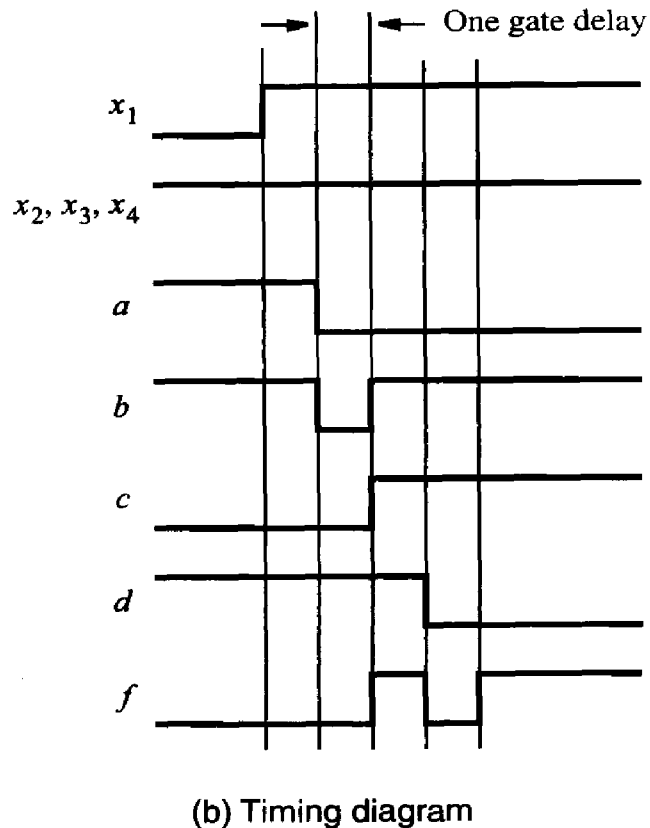
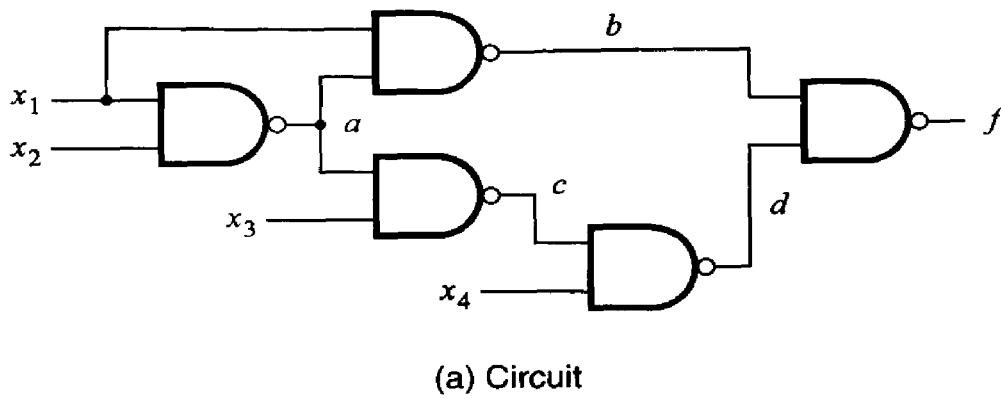


Figure 9.66 Circuit with a dynamic hazard.

circuit is that the values of both the primary inputs and the state variables must change one at a time.

In combinational circuits, discussed in Chapters 4 through 6, we did not worry about hazards, because the output of a circuit depends solely on the values of the inputs. In synchronous sequential circuits the input signals must be stable within the setup and hold times of flip-flops. It does not matter whether glitches occur outside the setup and hold times with respect to the clock signal.

9.7 A COMPLETE DESIGN EXAMPLE

In the previous sections we examined the various design aspects of asynchronous sequential circuits. In this section we give a complete design example, which covers all necessary steps.

9.7.1 THE VENDING-MACHINE CONTROLLER

The control mechanism of a vending machine is a good vehicle for illustrating a possible application of a digital circuit. We used it in the synchronous environment in Chapter 8. A small example of a vending machine served as an object of analysis in section 9.2. Now we will consider a vending-machine controller similar to the one in Example 8.6 to see how it can be implemented using an asynchronous sequential circuit. The specification for the controller is:

- It accepts nickels and dimes.
- A total of 15 cents is needed to release the candy from the machine.
- No change is given if 20 cents is deposited.

Coins are deposited one at a time. The coin-sensing mechanism generates signals $N = 1$ and $D = 1$ when it sees a nickel or a dime, respectively. It is impossible to have $N = D = 1$ at the same time. Following the insertion of a coin for which the sum equals or exceeds 15 cents, the machine releases the candy and resets to the initial state.

Figure 9.67 shows a state diagram for the required FSM. It is derived using a straightforward approach in which all possible sequences of depositing nickels and dimes are enumerated in a treelike structure. To keep the diagram uncluttered, the labels D and N denote the input conditions $DN = 10$ and $DN = 01$, respectively. The condition $DN = 00$ is labeled simply as 0. The candy is released in states F , H , and K , which are reached after 15 cents has been deposited, and in states I and L , upon a deposit of 20 cents.

The corresponding flow table is given in Figure 9.68. It can be reduced using the partitioning procedure as follows

$$\begin{aligned}
 P_1 &= (ADGJ)(BE)(C)(FIL)(HK) \\
 P_2 &= (A)(D)(GJ)(B)(E)(C)(FIL)(HK) \\
 P_3 &= P_2
 \end{aligned}$$

Using G to represent the equivalent states G and J , F to represent F , I , and L , and H to represent H and K yields a partially reduced flow table in Figure 9.69. The merger diagram for this table is presented in Figure 9.70. It indicates that states C and E can be merged, as well as F and H . Thus the reduced flow table is obtained as shown in Figure 9.71a. The same information is depicted in the form of a state diagram in Figure 9.72.

Next a suitable state assignment must be found. The flow table is relabeled in Figure 9.71b to associate a unique number with each stable state. Then the transition diagram in Figure 9.73a is obtained. Since we wish to try to embed the diagram onto a three-dimensional cube, eight vertices are shown in the figure. The diagram shows two diagonal

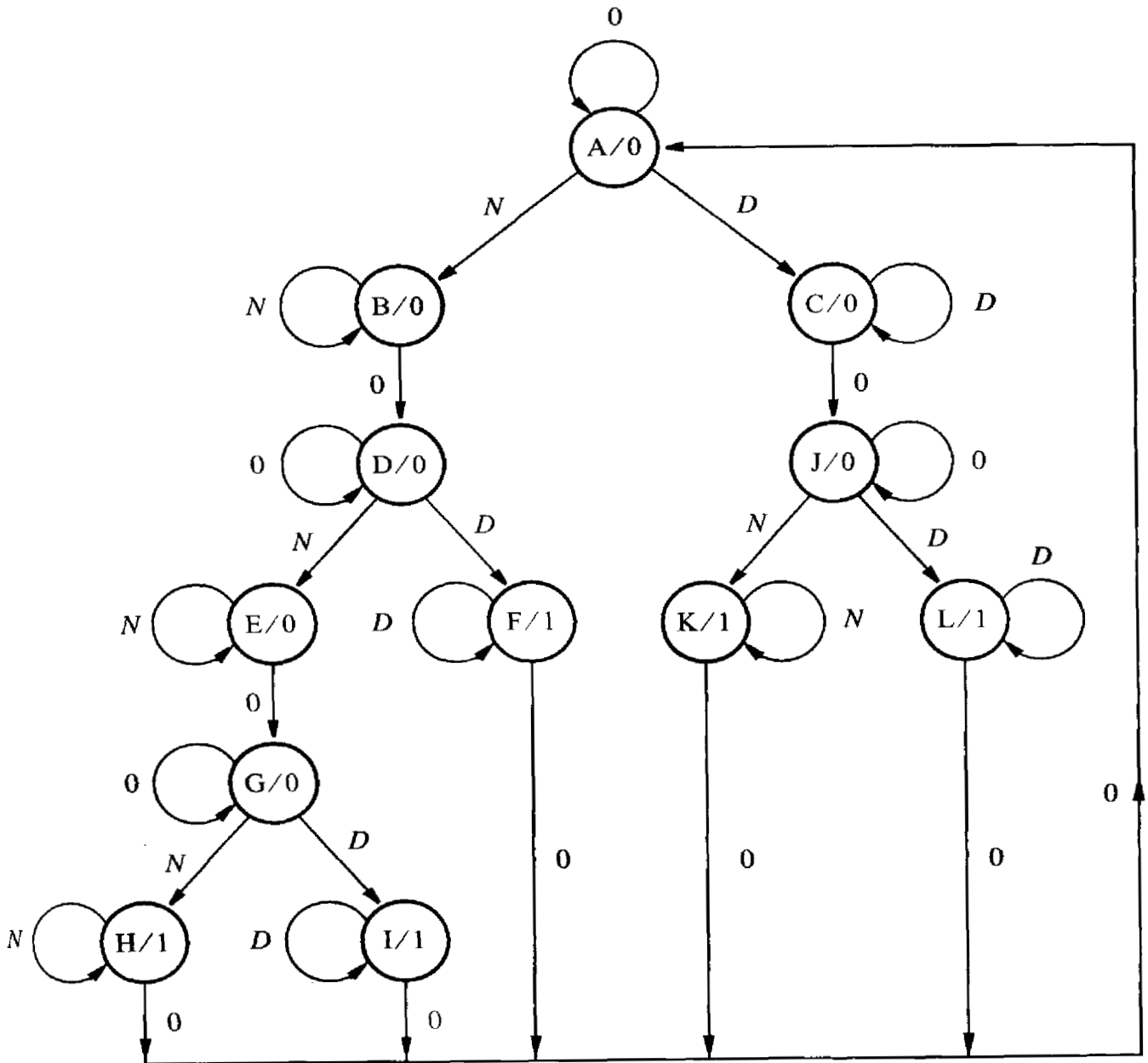


Figure 9.67 Initial state diagram for the vending-machine controller.

transitions. The transition between *D* and *G* (label 7) does not matter, because it is only an alternative path. The transition from *A* to *C* (label 4) is required, and it can be realized via unused states as indicated in blue in Figure 9.73*b*. Therefore, the transition diagram can be embedded onto a three-dimensional cube as shown. Using the state assignment from this figure, the excitation table in Figure 9.74 is derived.

The Karnaugh maps for the next-state functions are given in Figure 9.75. From these maps the following hazard-free expressions are obtained

$$Y_1 = \bar{N}y_2 + Ny_1 + Dy_1 + y_1y_3 + y_1y_2$$

$$Y_2 = N\bar{y}_1 + Ny_2 + \bar{y}_1y_3 + \bar{D}y_2\bar{y}_3 + Dy_2y_3$$

$$Y_3 = D\bar{y}_1 + y_2y_3 + Ny_1y_2 + \bar{D}y_3\bar{N}$$

Present state	Next state				Output z
	<i>DN</i> = 00	01	10	11	
A	(A)	B	C	—	0
B	D	(B)	—	—	0
C	J	—	(C)	—	0
D	(D)	E	F	—	0
E	G	(E)	—	—	0
F	A	—	(F)	—	1
G	(G)	H	I	—	0
H	A	(H)	—	—	1
I	A	—	(I)	—	1
J	(J)	K	L	—	0
K	A	(K)	—	—	1
L	A	—	(L)	—	1

Figure 9.68 Initial flow table for the vending-machine controller.

Present state	Next state				Output z
	<i>DN</i> = 00	01	10	11	
A	(A)	B	C	—	0
B	D	(B)	—	—	0
C	G	—	(C)	—	0
D	(D)	E	F	—	0
E	G	(E)	—	—	0
F	A	—	(F)	—	1
G	(G)	H	F	—	0
H	A	(H)	—	—	1

Figure 9.69 First step in state minimization.

All product terms in these expressions are needed for a minimum-cost POS implementation except for y_1y_2 , which is included to prevent hazards in the expression for Y_1 . The output expression is

$$z = y_1\bar{y}_2\bar{y}_3$$

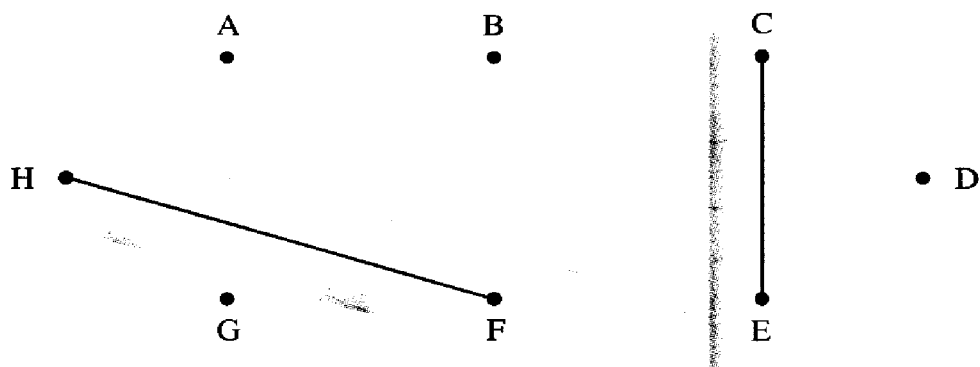


Figure 9.70 Merger diagram for Figure 9.69.

Present state	Next state				Output z
	$DN = 00$	01	10	11	
A	(A)	B	C	—	0
B	D	(B)	—	—	0
C	G	(C)	(C)	—	0
D	(D)	C	F	—	0
F	A	(F)	(F)	—	1
G	(G)	F	F	—	0

(a) Minimized flow table

Present state	Next state				Output z
	$DN = 00$	01	10	11	
A	(1)	2	4	—	0
B	5	(2)	—	—	0
C	8	(3)	(4)	—	0
D	(5)	3	7	—	0
F	1	(6)	(7)	—	1
G	(8)	6	7	—	0

(b) Relabeled flow table

Figure 9.71 Reduced flow tables.

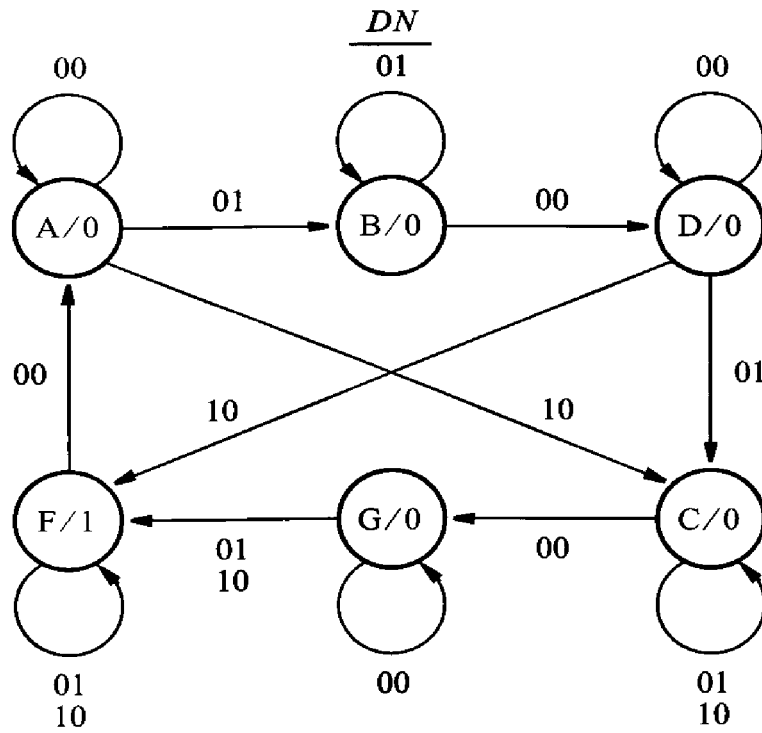
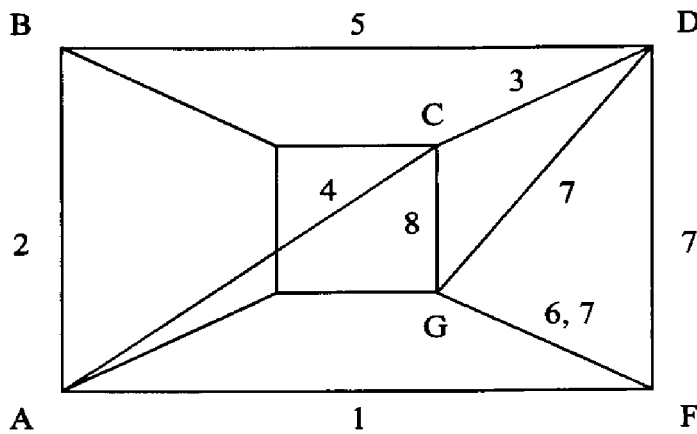
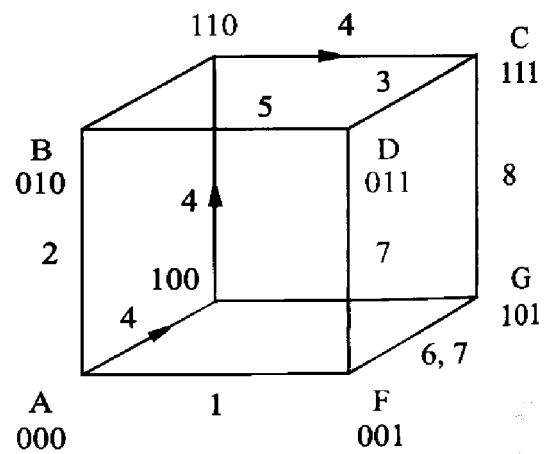


Figure 9.72 State diagram for the vending-machine controller.



(a) Transition diagram



(b) Embedded on the cube

Figure 9.73 Determination of the state assignment.

	Present state $y_3y_2y_1$	Next state				Output z
		$DN = 00$	01	10	11	
		$Y_3Y_2Y_1$				
A	000	000	010	100	—	0
B	010	011	010		—	0
C	111	101	111	111	—	0
D	011	011	111	001	—	0
F	001	000	001	001	—	1
G	101	101	001	001	—	0
	100	—	—	110	—	0
	110	—	—	111	—	0

Figure 9.74 Excitation table based on the state assignment in Figure 9.73b.

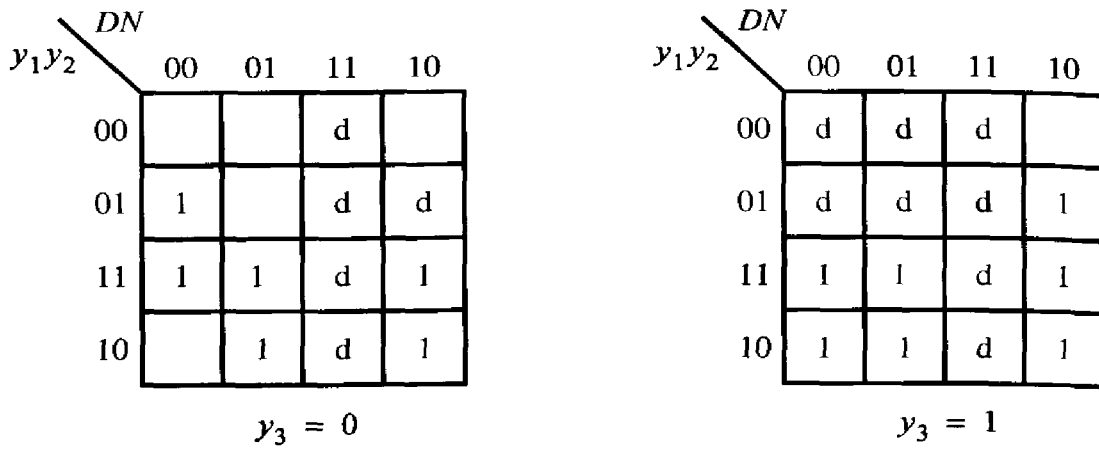
9.8 CONCLUDING REMARKS

Asynchronous sequential circuits are more difficult to design than the synchronous sequential circuits. The difficulties with race conditions present a problem that must be handled carefully. At the present time there is little CAD support for designing asynchronous circuits. For these reasons, most designers resort to synchronous sequential circuits in practical applications.

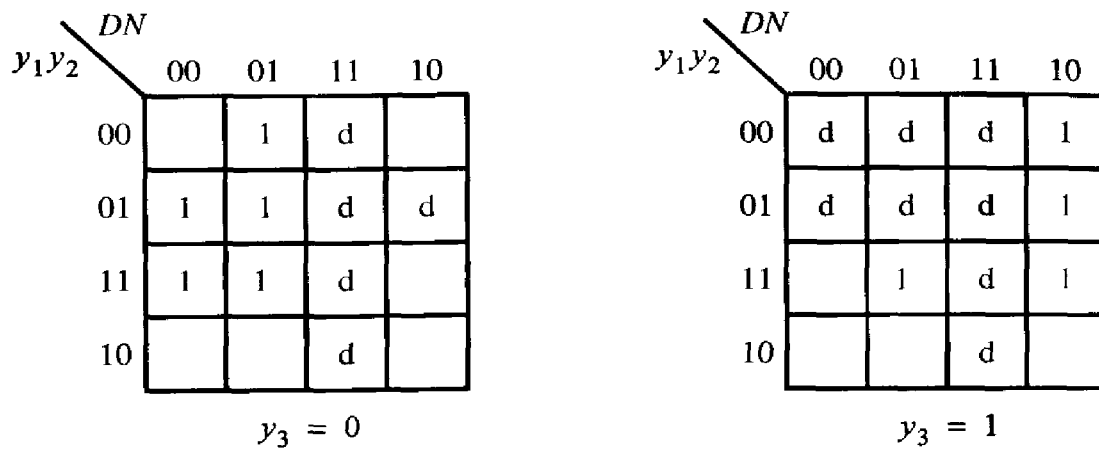
An important advantage of asynchronous circuits is their speed of operation. Since there is no clock involved, the speed of operation depends only on the propagation delays in the circuit. In an asynchronous system that comprises several circuits, some circuits may operate faster than others, thus potentially improving the overall performance of the system. In contrast, in synchronous systems the clock period has to be long enough to accommodate the slowest circuit, and it has a large effect on the performance.

Asynchronous circuit techniques are also useful in designing systems that consist of two or more synchronous circuits that operate under the control of different clocks. The signals exchanged between such circuits often appear to be asynchronous in nature.

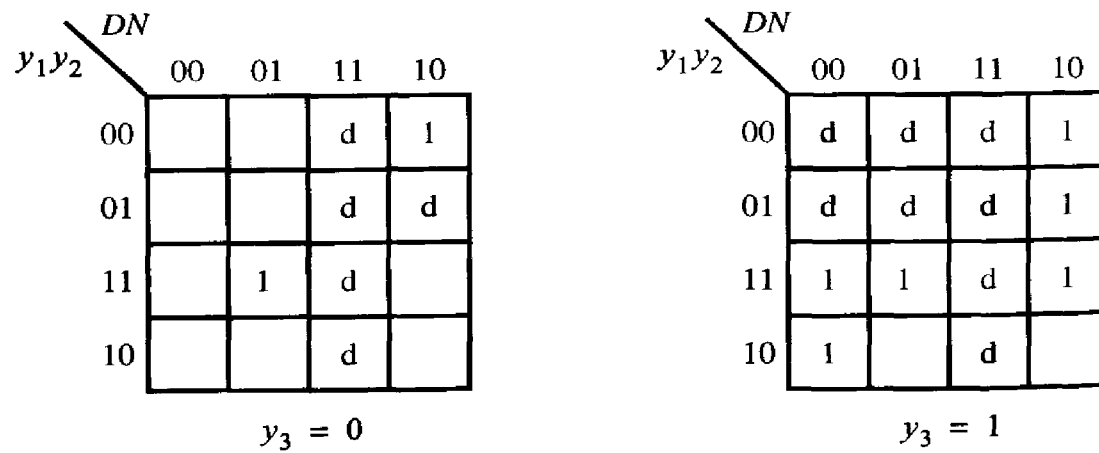
From the reader's point of view, it is useful to view asynchronous circuits as an excellent vehicle for gaining a deeper understanding of the operation of digital circuits in general. These circuits illustrate the consequences of propagation delays and race conditions that may be inherent in the structure of a circuit. They also illustrate the concept of stability, demonstrated through the existence of stable and unstable states. For further discussion of asynchronous sequential circuits, the reader may consult references [1–6].



(a) Map for Y_1



(b) Map for Y_2



(c) Map for Y_3

Figure 9.75 Karnaugh maps for the functions in Figure 9.74.

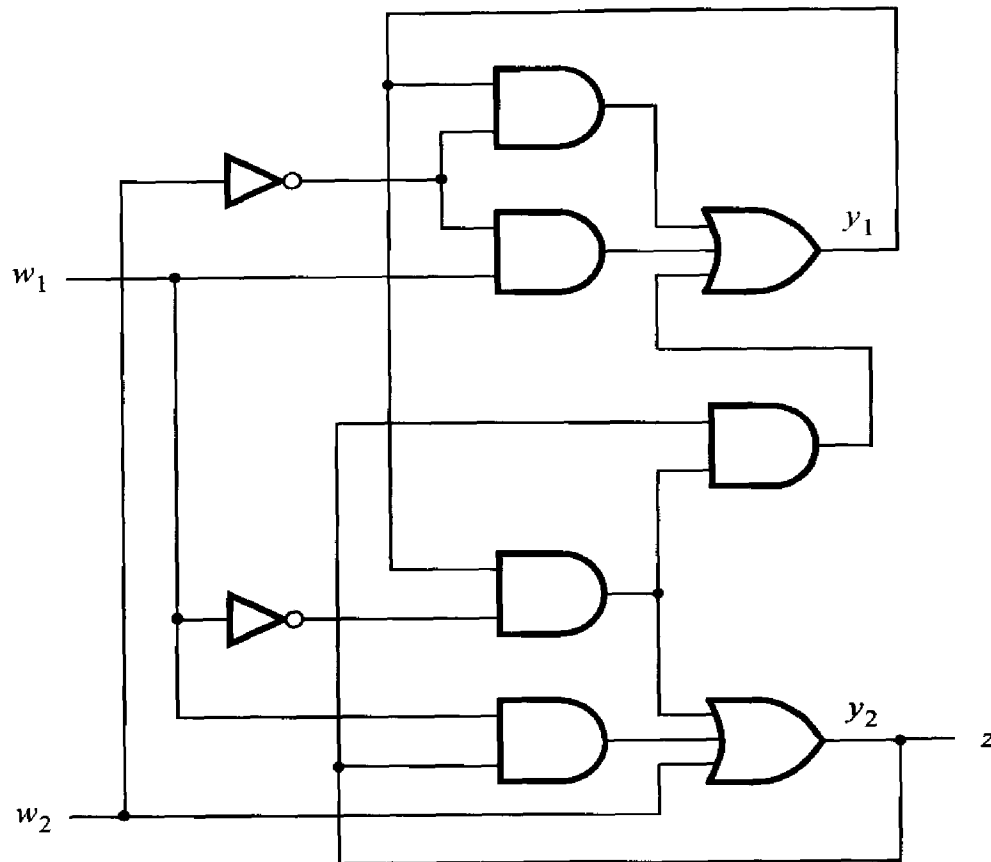


Figure 9.76 Circuit for Example 9.19.

9.9 EXAMPLES OF SOLVED PROBLEMS

This section presents some typical problems that the reader may encounter, and shows how such problems can be solved.

Problem: Derive a flow table that describes the behavior of the circuit in Figure 9.76. **Exc**

Solution: Modelling the propagation delay in the gates of the circuit as shown in Figure 9.8, the circuit in Figure 9.76 can be described by the following next-state and output expressions

$$Y_1 = w_1 \bar{w}_2 + \bar{w}_2 y_1 + \bar{w}_1 y_1 y_2$$

$$Y_2 = w_2 + \bar{w}_1 y_1 + w_1 y_2$$

$$z = y_2$$

These expressions lead to the excitation table in Figure 9.77a. Assuming the state assignment $A = 00$, $B = 01$, $C = 10$, and $D = 11$, yields the flow table in Figure 9.77b.

Present state y_2y_1	Next state				Output z
	$w_2w_1 = 00$	01	10	11	
	Y_2Y_1	Y_2Y_1	Y_2Y_1	Y_2Y_1	
00	00	01	10	10	0
01	11	01	10	10	0
10	00	11	10	10	1
11	11	11	11	10	1

(a) Excitation table

Present state	Next state				Output z
	$w_2w_1 = 00$	01	10	11	
A	A	B	C	C	0
B	D	B	C	C	0
C	A	D	C	C	1
D	D	D	D	C	1

(b) Flow table implemented by the circuit

Present state	Next state				Output z
	$w_2w_1 = 00$	01	10	11	
A	A	B	C	C	0
B	D	B	-	C	0
C	A	D	C	C	1
D	D	D	D	C	1

(c) Final flow table

Figure 9.77 Excitation and flow tables for the circuit in Figure 9.76.

Since in a given stable state, inputs to the circuit can only change one at a time, some entries in the flow table may be designated as unspecified. Such is the case when the circuit is stable in state B and input values are $w_2w_1 = 01$. Now, both inputs cannot change simultaneously, which means that the corresponding entry in the flow table should be designated as unspecified. However, a different situation arises when the circuit is stable in state A and input values are $w_2w_1 = 00$. In this case, we cannot indicate the transition in column $w_2w_1 = 11$ as unspecified. The reason is that if the circuit is in stable state B , it has to be able to change to state C when w_2 changes from 0 to 1. States B and C are implemented as $y_2y_1 = 01$ and $y_2y_1 = 10$, respectively. Since both state variables must change their values, the route from 01 to 10 will take place either via 11 or 00, depending on the delays in different paths in the circuit. If y_2 changes first, the circuit will pass through unstable state D and then settle in the stable state C . But, if w_1 changes first, the circuit has to pass through unstable state A before reaching state C . Hence, the transition to state C in the first row must be specified. This is an example of a safe race, where the circuit reaches the correct destination state regardless of propagation delays in different paths of the circuit. The final flow table is presented in Figure 9.77c.

Problem: Are there any hazards in the circuit in Figure 9.76?

Ex

Solution: Figure 9.78 gives Karnaugh maps for the next-state expressions derived in Example 9.19. As seen from the maps, all prime implicants are included in the expression for Y_1 . But, the expression for Y_2 includes only three of the four available prime implicants. There is a static hazard when $w_2y_2y_1 = 011$ and w_1 changes from 0 to 1 (or 1 to 0). This hazard can be removed by adding the fourth prime implicant, y_1y_2 , to the expression for Y_2 .

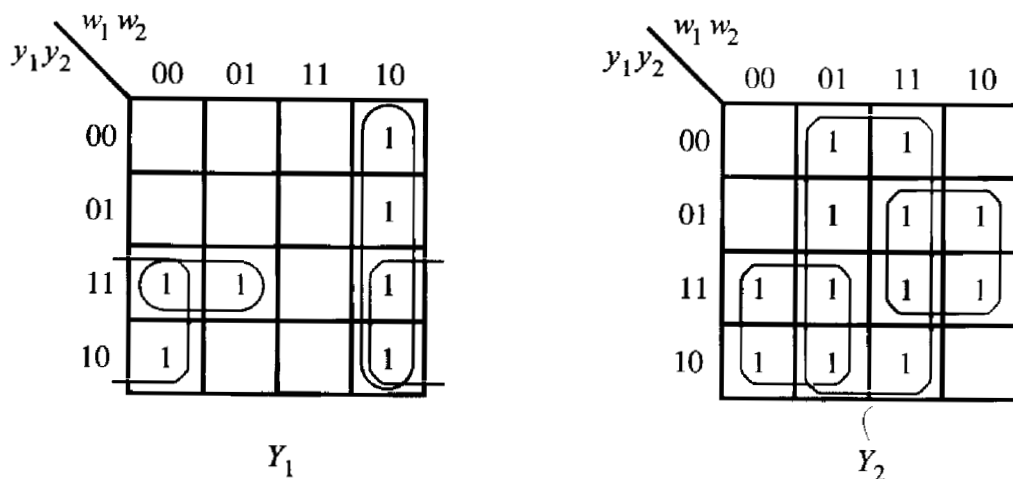


Figure 9.78 Karnaugh maps for the circuit in Figure 9.76.

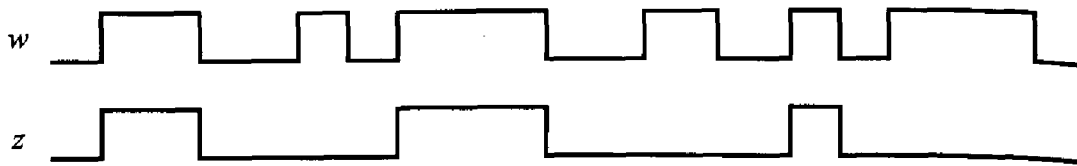
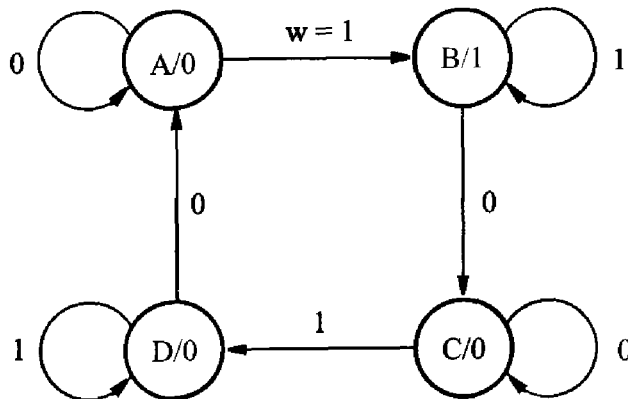


Figure 9.79 Waveforms for Example 9.21.

9.21 Problem: A circuit has an input w and an output z . A sequence of pulses is applied on input w . The output has to replicate every second pulse, as illustrated in Figure 9.79. Design a suitable circuit.

Solution: Figure 9.80 shows a possible state diagram and the corresponding flow table. Compare this with the FSM defined in Example 9.4 in Figure 9.13, which specifies a serial parity generator. The only difference is in the output signal. In our case, $z = 1$ only in state B . Therefore, the next-state expressions are the same as in Example 9.4. The output expression is

$$z = y_1\bar{y}_2$$



(a) State diagram

Present State	Next state		Output z
	$w = 0$	$w = 1$	
A	(A)	B	0
B	C	(B)	1
C	(C)	D	0
D	A	(D)	0

(b) Flow table

Figure 9.80 State diagram and flow table for Example 9.21.

Present state	Next state				Output z
	$w_2w_1 = 00$	01	10	11	
A	(A)	E	C	—	0
B	—	E	H	(B)	1
C	G	—	(C)	F	0
D	A	(D)	—	B	1
E	G	(E)	—	B	0
F	—	D	C	(F)	0
G	(G)	E	C	—	0
H	A	—	(H)	B	1

Figure 9.81 Flow table for Example 9.22.

Problem: Consider the flow table in Figure 9.81. Reduce this flow table and find a state assignment that allows this FSM to be realized as simply as possible, preserving the Moore model. Derive an excitation table. **Ex**

Solution: Using the partitioning procedure on the flow table in Figure 9.81 gives

$$P_1 = (ACEFG)(BDH)$$

$$P_2 = (AG)(B)(C)(D)(E)(F)(H)$$

$$P_3 = P_2$$

Combining A and G produces the flow table in Figure 9.82. A merger diagram for this table is shown in Figure 9.83. Merging the states (A, E) , (C, F) , and (D, H) leads to the reduced flow table in Figure 9.84. To find a good state assignment, we relabel this flow table as indicated in Figure 9.85, and construct the transition diagram in Figure 9.86a. The only problem in this diagram is the transition from state D to state A , labeled as 1. A change from D to A can be made via state C if we specify so in the flow table. Then, a direct transition from D to A is not needed, as depicted in Figure 9.86b. The resulting flow table and the corresponding excitation table are shown in Figure 9.87.

Problem: Derive a hazard-free minimum-cost SOP implementation for the function **Ex**

$$f(x_1, \dots, x_5) = \sum m(2, 3, 14, 17, 19, 25, 26, 30) + D(10, 23, 27, 31)$$

Solution: The Karnaugh map for the function is given in Figure 9.88. From it, the required expression is derived as

$$f = x_1\bar{x}_3x_5 + x_2x_4\bar{x}_5 + \bar{x}_1\bar{x}_2\bar{x}_3x_4 + \bar{x}_2\bar{x}_3x_4x_5$$

The first three product terms cover all 1s in the map. The fourth term is needed to avoid having a hazard when $x_2x_3x_4x_5 = 0011$ and x_1 changes from 0 to 1 (or 1 to 0). Thus, each pair of adjacent 1s is covered by some prime implicant in the expression.

Present state	Next state				Output z
	$w_2w_1 = 00$	01	10	11	
A	(A)	E	C	-	0
B	-	E	H	(B)	1
C	A	-	(C)	F	0
D	A	(D)	-	B	1
E	A	(E)	-	B	0
F	-	D	C	(F)	0
H	A	-	(H)	B	1

Figure 9.82 Reduction after the partitioning procedure.

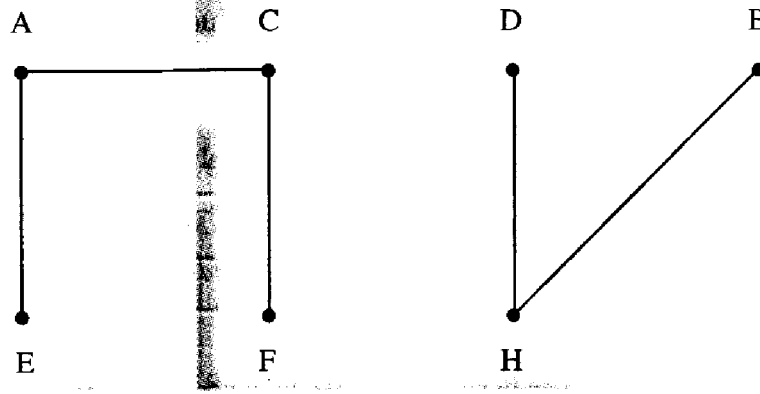


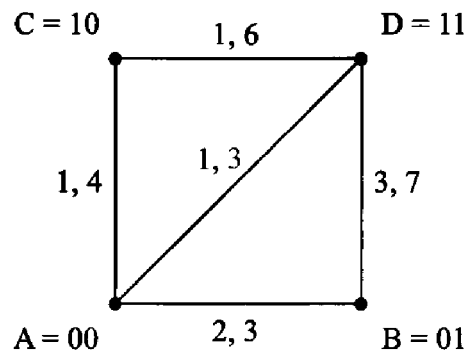
Figure 9.83 Merger diagram for the flow table in Figure 9.82.

Present state	Next state				Output z
	$w_2w_1 = 00$	01	10	11	
A	(A)	(A)	C	B	0
B	-	A	D	(B)	1
C	A	D	(C)	(C)	0
D	A	(D)	(D)	B	1

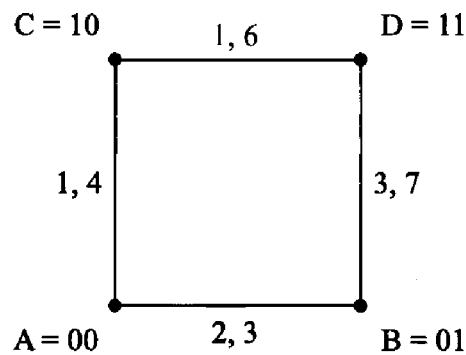
Figure 9.84 Reduced flow table for the FSM in Figure 9.82.

Present state	Next state				Output z
	$w_2w_1 = 00$	01	10	11	
A	①	②	4	3	0
B	—	2	7	③	1
C	1	6	④	⑤	0
D	1	⑥	⑦	3	1

Figure 9.85 Relabeled flow table of Figure 9.84.



(a) Initial transition diagram



(b) Augmented transition diagram

Figure 9.86 Transition diagrams for Figure 9.85.

Present state	Next state				Output z
	$w_2w_1 = 00$	01	10	11	
A	(A)	(A)	C	B	0
B	—	A	D	(B)	1
C	A	D	(C)	(C)	0
D	C	(D)	(D)	B	1

(a) Final flow table

Present state y_2y_1	Next state				Output z
	$w_2w_1 = 00$	01	10	11	
	Y_2Y_1	Y_2Y_1	Y_2Y_1	Y_2Y_1	
00	(00)	(00)	10	01	0
01	—	00	11	(01)	1
10	00	11	(10)	(10)	0
11	10	(11)	(11)	01	1

(b) Excitation table

Figure 9.87 Excitation and flow tables for Example 9.22.

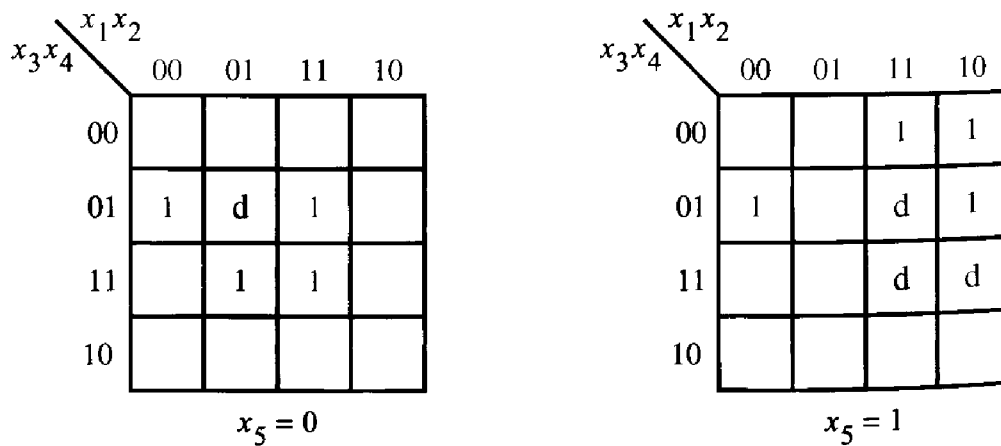


Figure 9.88 Karnaugh map for Example 9.23.

PROBLEMS

Solutions to problems marked by an asterisk are given at the back of the book.

- *9.1** Derive a flow table that describes the behavior of the circuit in Figure P9.1. Compare your solution with the tables in Figure 9.21. Is there any similarity?
- 9.2** Consider the circuit in Figure P9.2. Draw the waveforms for the signals C , z_1 , and z_2 . Assume that C is a square-wave clock signal and that each gate has a propagation delay Δ . Express the behavior of the circuit in the form of a flow table that would produce the desired signals. (Hint: use the Mealy model.)
- 9.3** Derive the minimal flow table that specifies the same functional behavior as the flow table in Figure P9.3.
- 9.4** Derive the minimal Moore-type flow table that specifies the same functional behavior as the flow table in Figure P9.4.

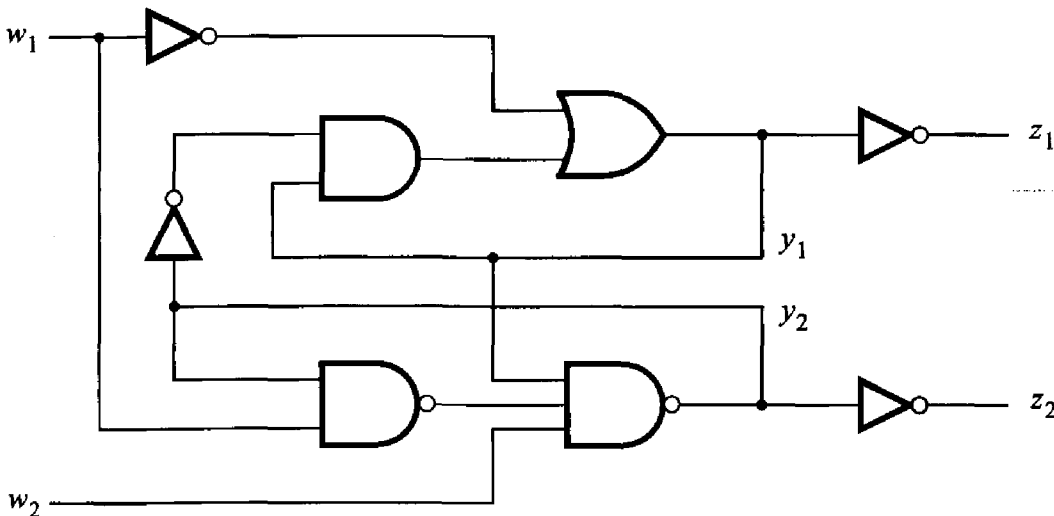


Figure P9.1 Circuit for problem 9.1.

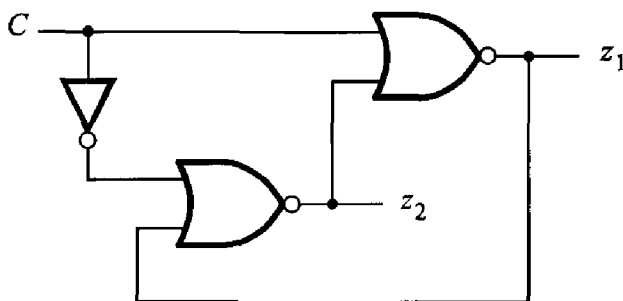


Figure P9.2 Circuit for problem 9.2.

Present state	Next state				Output z
	$w_2w_1 = 00$	01	10	11	
A	(A)	B	C	-	0
B	D	(B)	-	-	0
C	P	-	(C)	-	0
D	(D)	E	F	-	0
E	G	(E)	-	-	0
F	M	-	(F)	-	0
G	(G)	H	I	-	0
H	J	(H)	-	-	0
I	A	-	(I)	-	1
J	(J)	K	L	-	0
K	A	(K)	-	-	1
L	A	-	(L)	-	1
M	(M)	N	O	-	0
N	A	(N)	-	-	1
O	A	-	(O)	-	1
P	(P)	R	S	-	0
R	T	(R)	-	-	0
S	A	-	(S)	-	1
T	(T)	U	V	-	0
U	A	(U)	-	-	1
V	A	-	(V)	-	1

Figure P9.3 Flow table for problem 9.3.

- 9.5 Find a suitable state assignment using as few states as possible and derive the next-state and output expressions for the flow table in Figure 9.42.
- 9.6 Find a suitable state assignment for the flow table in Figure 9.42, using pairs of equivalent states, as explained in Example 9.15. Derive the next-state and output expressions.
- 9.7 Find a state assignment for the flow table in Figure 9.42, using one-hot encoding. Derive the next-state and output expressions.
- *9.8 Implement the FSM specified in Figure 9.39, using the merger diagram in Figure 9.40a.

Present state	Next state				Output z
	$w_2w_1 = 00$	01	10	11	
A	(A)	B	C	-	0
B	K	(B)	-	H	0
C	F	-	(C)	M	0
D	(D)	E	J	-	1
E	A	(E)	-	M	0
F	(F)	L	J	-	0
G	D	(G)	-	H	0
H	-	G	J	(H)	1
J	F	-	(J)	H	0
K	(K)	L	C	-	1
L	A	(L)	-	H	0
M	-	G	C	(M)	1

Figure P9.4 Flow table for problem 9.4.

9.9 Find a suitable state assignment for the FSM defined by the flow table in Figure P9.5. Derive the next-state and output expressions for the FSM using this state assignment.

***9.10** Find a hazard-free minimum-cost implementation of the function

$$f(x_1, \dots, x_4) = \sum m(0, 4, 11, 13, 15) + D(2, 3, 5, 10)$$

Present state	Next state				Output z
	$w_2w_1 = 00$	01	10	11	
A	(A)	B	C	-	0
B	D	(B)	-	G	0
C	F	-	(C)	G	0
D	(D)	E	C	-	1
E	A	(E)	-	G	0
F	(F)	E	C	-	0
G	-	B	C	(G)	1

Figure P9.5 Flow table for problem 9.9.

9.11 Repeat problem 9.10 for the function

$$f(x_1, \dots, x_5) = \sum m(0, 4, 5, 24, 25, 29) + D(8, 13, 16, 21)$$

***9.12** Find a hazard-free minimum-cost POS implementation of the function

$$f(x_1, \dots, x_4) = \prod M(0, 2, 3, 7, 10) + D(5, 13, 15)$$

9.13 Repeat problem 9.12 for the function

$$f(x_1, \dots, x_5) = \prod M(2, 6, 7, 25, 28, 29) + D(0, 8, 9, 10, 11, 21, 24, 26, 27, 30)$$

***9.14** Consider the circuit in Figure P9.6. Does this circuit exhibit any hazards?

9.15 Design an original circuit that exhibits a dynamic hazard.

9.16 A control mechanism for a vending machine accepts nickels and dimes. It dispenses merchandise when 20 cents is deposited; it does not give change if 25 cents is deposited. Design the FSM that implements the required control, using as few states as possible. Find a suitable state assignment and derive the next-state and output expressions.

***9.17** Design an asynchronous circuit that meets the following specifications. The circuit has two inputs: a clock input c and a control input w . The output, z , replicates the clock pulses when $w = 1$; otherwise, $z = 0$. The pulses appearing on z must be full pulses. Consequently, if $c = 1$ when w changes from 0 to 1, then the circuit will not produce a partial pulse on z , but will wait until the next clock pulse to generate $z = 1$. If $c = 1$ when w changes from 1 to 0, then a full pulse must be generated; that is, $z = 1$ as long as $c = 1$. Figure P9.7 illustrates the desired operation.

9.18 Repeat problem 9.17 but with the following change in the specification. While $w = 1$, the output z should have only one pulse; if several pulses occur on c , only the first one should be reproduced on z .

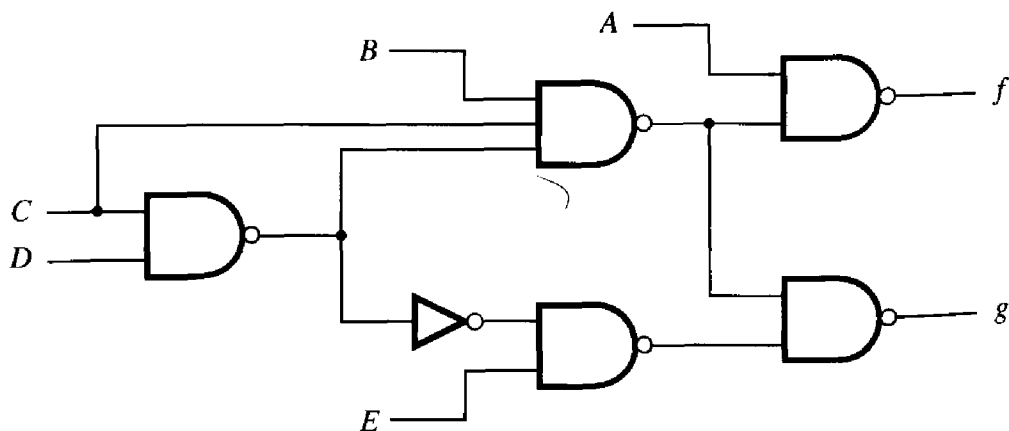


Figure P9.6 Circuit for problem 9.14.

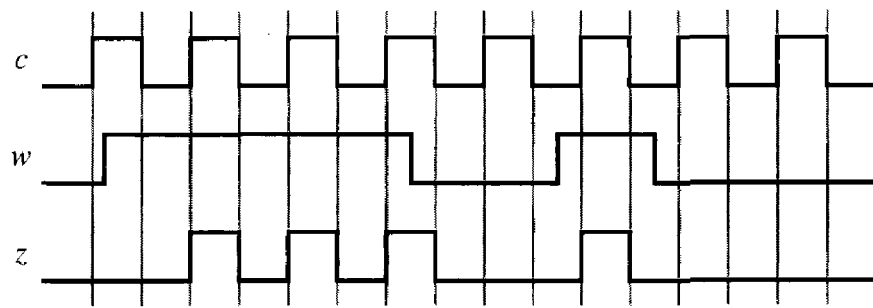


Figure P9.7 Waveforms for problem 9.17.

- 9.19** Example 9.6 describes a simple arbiter for two devices contending for a shared resource. Design a **similar** arbiter for three devices that use a shared resource. In case of simultaneous requests, namely, if one device has been granted access to the shared resource and before it releases its request the other two devices make requests of their own, let the priority of the devices be Device 1 > Device 2 > Device 3.
- 9.20** In the discussion of Example 9.6, we mentioned a possible use of the mutual exclusion element (ME) to prevent both request inputs to the FSM being equal to 1 at the same time. Design an arbiter circuit for this case.
- 9.21** In Example 9.21 we designed a circuit that replicates every second pulse on input w as a pulse on output z . Design a **similar** circuit that replicates every third pulse.
- 9.22** In Example 9.22 we merged states D and H to implement the FSM in Figure 9.82. An alternative was to merge states B and H , according to the merger diagram in Figure 9.83. Derive an implementation using this choice. Derive the resulting excitation table.

REFERENCES

1. K. J. Breeding, *Digital Design Fundamentals*, (Prentice-Hall: Englewood Cliffs, NJ, 1989).
2. F. J. Hill and G. R. Peterson, *Computer Aided Logical Design with Emphasis on VLSI*, 4th ed., (Wiley: New York, 1993).
3. V. P. Nelson, H. T. Nagle, B. D. Carroll, and J. D. Irwin, *Digital Logic Circuit Analysis and Design*, (Prentice-Hall: Englewood Cliffs, NJ, 1995).
4. N. L. Pappas, *Digital Design*, (West: St. Paul, MN, 1994).
5. C. H. Roth Jr., *Fundamentals of Logic Design*, 4th ed., (West: St. Paul, MN, 1993).
6. C. J. Myers, *Asynchronous Circuit Design*, (Wiley: New York, 2001).

chapter

10

DIGITAL SYSTEM DESIGN

CHAPTER OBJECTIVES

In this chapter you will learn about aspects of digital system design, including

- Enable inputs for flip-flops, registers, and shift registers
- Static random access memory (SRAM) blocks
- Several system design examples using ASM charts
- Clock synchronization
- Clock skew
- Flip-flop timing at the chip level

In the previous chapters we showed how to design many types of simple circuits, such as multiplexers, decoders, flip-flops, registers, and counters, which can be used as building blocks. In this chapter we provide examples of more complex circuits that can be constructed using the building blocks as subcircuits. Such larger circuits form a *digital system*. We show both the design of the circuits for these systems, and how they can be described using VHDL code. For practical reasons our examples of digital systems will not be large, but the design techniques presented are applicable to systems of any size. After presenting several examples, we will discuss some practical issues, such as how to ensure reliable clocking of flip-flops in individual and multiple chips, how to deal with input signals that are not synchronized to the clock signal, and the like.

A digital system consists of two main parts, called the datapath circuit and the control circuit. The *datapath circuit* is used to store and manipulate data and to transfer data from one part of the system to another. Datapath circuits comprise building blocks such as registers, shift registers, counters, multiplexers, decoders, adders, and so on. The *control circuit* controls the operation of the datapath circuit. In Chapter 8 we referred to the control circuits as finite state machines.

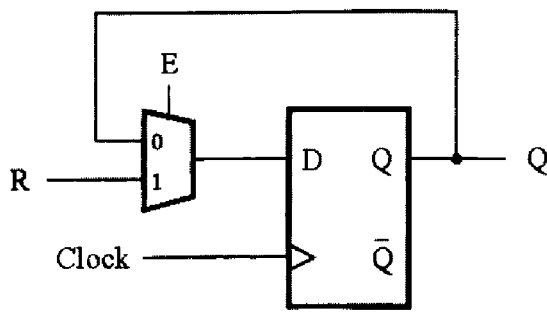
10.1 BUILDING BLOCK CIRCUITS

We will give several examples of digital systems and show how to design their datapath and control circuits. The examples use a number of the building block circuits that were presented in earlier chapters. Some building blocks used in this chapter are described below.

10.1.1 FLIP-FLOPS AND REGISTERS WITH ENABLE INPUTS

In many applications that use D flip-flops, it is useful to be able to prevent the data stored in the flip-flop from changing when an active clock edge occurs. We showed in Figure 7.56 how this capability can be provided by adding a multiplexer to the flip-flop. Figure 10.1a depicts the circuit. When $E = 0$, the flip-flop output cannot change, because the multiplexer connects Q to D . But if $E = 1$, then the multiplexer connects the R input to D . Instead of using the multiplexer shown in the figure, another way to implement the enable feature is to use a two-input AND gate that drives the flip-flop's clock input. One input to the AND gate is the clock signal, and the other input is E . Then setting $E = 0$ prevents the clock signal from reaching the flip-flop's clock input. This method seems simpler than the multiplexer approach, but we will show in section 10.3 that it can cause problems in practical operation. We will prefer the multiplexer-based approach over gating the clock with an AND gate in this chapter.

VHDL code for a D flip-flop with an asynchronous reset input and an enable input is given in Figure 10.1b. We can extend the enable capability to registers with n bits by using n 2-to-1 multiplexers controlled by E . The multiplexer for each flip-flop, i , selects either the external data bit, R_i , or the flip-flop's output, Q_i . VHDL code for an n -bit register with an asynchronous reset input and an enable input is given in Figure 10.2.



(a) Circuit

```
LIBRARY ieee ;
USE ieee.std_logic_1164.all ;
```

```
ENTITY rege IS
```

```
    PORT ( R, Resetn, E, Clock :IN      STD_LOGIC ;
           Q                   :BUFFER STD_LOGIC ) ;
```

```
END rege ;
```

```
ARCHITECTURE Behavior OF rege IS
```

```
BEGIN
```

```
    PROCESS ( Resetn, Clock )
```

```
    BEGIN
```

```
        IF Resetn = '0' THEN
```

```
            Q <= '0' ;
```

```
        ELSIF Clock'EVENT AND Clock = '1' THEN
```

```
            IF E = '1' THEN
```

```
                Q <= R ;
```

```
            ELSE
```

```
                Q <= Q ;
```

```
            END IF ;
```

```
        END IF ;
```

```
    END PROCESS ;
```

```
END Behavior ;
```

(b) VHDL code

Figure 10.1 A flip-flop with an enable input.

```

LIBRARY ieee ;
USE ieee.std_logic_1164.all ;

ENTITY regne IS
    GENERIC ( N : INTEGER := 4 ) ;
    PORT ( R      : IN  STD_LOGIC_VECTOR(N-1 DOWNT0 0) ;
          Resetn  : IN  STD_LOGIC ;
          E, Clock : IN  STD_LOGIC ;
          Q      : OUT STD_LOGIC_VECTOR(N-1 DOWNT0 0) ) ;
END regne ;

ARCHITECTURE Behavior OF regne IS
BEGIN
    PROCESS ( Resetn, Clock )
    BEGIN
        IF Resetn = '0' THEN
            Q <= (OTHERS => '0') ;
        ELSIF Clock'EVENT AND Clock = '1' THEN
            IF E = '1' THEN
                Q <= R ;
            END IF ;
        END IF ;
    END PROCESS ;
END Behavior ;

```

Figure 10.2 VHDL code for an n -bit register with an enable input.

10.1.2 SHIFT REGISTERS WITH ENABLE INPUTS

It is useful to be able to inhibit the shifting operation in a shift register by using an enable input, E . We showed in Figure 7.19 that shift registers can be constructed with a parallel-load capability, which is implemented using a multiplexer. Figure 10.3 shows how the enable feature can be added by using an additional multiplexer. If the parallel-load control input, L , is 1, the flip-flops are loaded in parallel. But if $L = 0$, the additional multiplexer selects new data to be loaded into the flip-flops only if the enable E is 1.

VHDL code that represents a right-to-left shifting version of the circuit in Figure 10.3 is given in Figure 10.4. When $L = 1$, the register is loaded in parallel from the R input. When $L = 0$ and $E = 1$, the data in the shift register is shifted in a right-to-left direction.

VHDL Components

For the examples presented later in this chapter, several VHDL components will be used as subcircuits. For convenience, the component declarations for these subcircuits are defined in the VHDL package named *components*, shown in Figure 10.5. The code for the *regne* entity is defined in Figure 10.2. The code for *shifflne* appears in Figure 10.4.

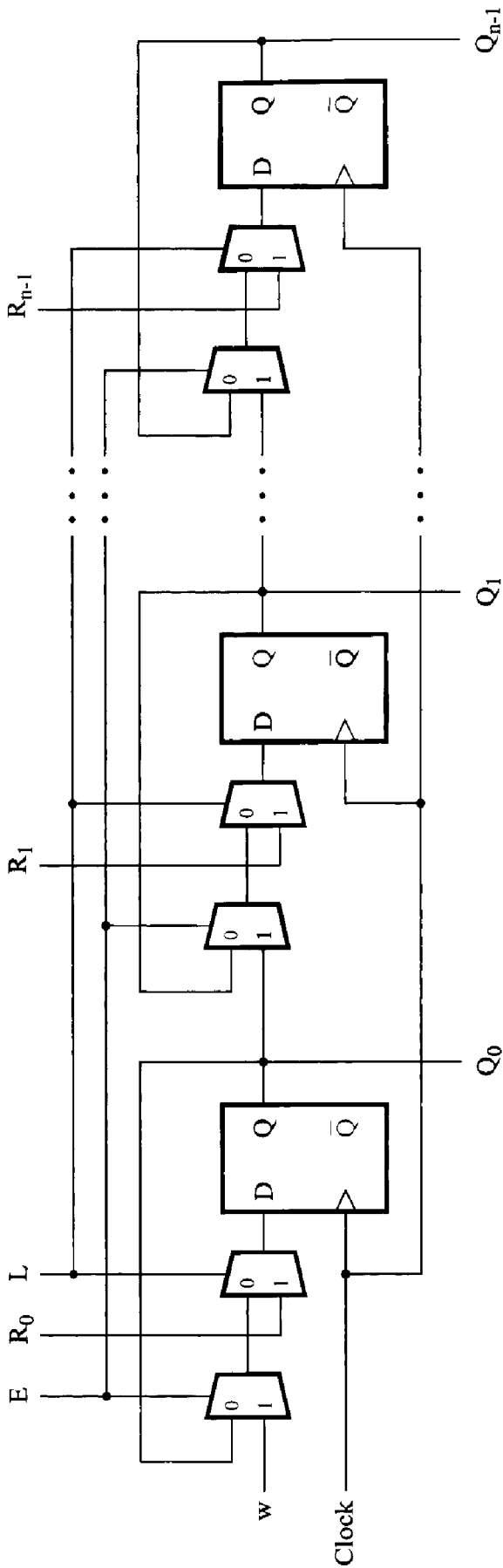


Figure 10.3 A shift register with parallel-load and enable control inputs.

```

LIBRARY ieee ;
USE ieee.std_logic_1164.all ;

-- right-to-left shift register with parallel load and enable
ENTITY shiftlne IS
    GENERIC ( N : INTEGER := 4 );
    PORT( R      : IN      STD_LOGIC_VECTOR(N-1 DOWNTO 0);
          L, E, w : IN      STD_LOGIC ;
          Clock  : IN      STD_LOGIC ;
          Q      : BUFFER STD_LOGIC_VECTOR(N-1 DOWNTO 0) );
END shiftlne ;

ARCHITECTURE Behavior OF shiftlne IS
BEGIN
    PROCESS
    BEGIN
        WAIT UNTIL Clock'EVENT AND Clock = '1' ;
        IF L = '1' THEN
            Q <= R ;
        ELSIF E = '1' THEN
            Q(0) <= w ;
            Genbits: FOR i IN 1 TO N-1 LOOP
                Q(i) <= Q(i-1) ;
            END LOOP ;
        END IF ;
    END PROCESS ;
END Behavior ;

```

Figure 10.4 Code for a right-to-left shift register with an enable input.

The *shiftrne* component represents an n -bit shift register with an enable input that shifts to the right. The code is shown in Figure 8.48. The code for the entities *mux2to1*, *muxdff*, and *downcnt* is given in Figures 6.27, 7.47, and 7.54, respectively. The *upcount* entity is the same as the one in Figure 7.53, with two differences. First, a **GENERIC** parameter is added, named *modulus*, which specifies that the count values are 0 to *modulus*−1. Second, an enable input, *E*, is added that prevents the counter's outputs from changing when $E = 0$.

10.1.3 STATIC RANDOM ACCESS MEMORY (SRAM)

We have introduced several types of circuits that can be used to store data. Assume that we need to store a large number, m , of data items, each of which consists of n bits. One possibility is to use an n -bit register for each data item. We would need to design circuitry to control access to each register, both for loading (writing) data into it and for reading data out.


```

LIBRARY ieee ;
USE ieee.std_logic_1164.all ;

PACKAGE components IS
  -- 2-to-1 multiplexer
  COMPONENT mux2to1
    PORT ( w0, w1 : IN  STD_LOGIC ;
          s      : IN  STD_LOGIC ;
          f      : OUT STD_LOGIC );
  END COMPONENT ;

  -- D flip-flop with 2-to-1 multiplexer connected to D
  COMPONENT muxdff
    PORT ( D0, D1, Sel, E, Clock : IN  STD_LOGIC ;
          Q                       : OUT STD_LOGIC );
  END COMPONENT ;

  -- n-bit register with enable
  COMPONENT regne
    GENERIC ( N : INTEGER := 4 );
    PORT ( R      : IN  STD_LOGIC_VECTOR(N-1 DOWNTO 0) ;
          Resetn  : IN  STD_LOGIC ;
          E, Clock : IN  STD_LOGIC ;
          Q       : OUT STD_LOGIC_VECTOR(N-1 DOWNTO 0) );
  END COMPONENT ;

  -- n-bit right-to-left shift register with parallel load and enable
  COMPONENT shiftlne
    GENERIC ( N : INTEGER := 4 );
    PORT ( R      : IN  STD_LOGIC_VECTOR(N-1 DOWNTO 0) ;
          L, E, w  : IN  STD_LOGIC ;
          Clock    : IN  STD_LOGIC ;
          Q       : BUFFER STD_LOGIC_VECTOR(N-1 DOWNTO 0) );
  END COMPONENT ;

  ... continued in Part b

```

Figure 10.5 Component declaration statements for building blocks (Part a).

When m is large, it is awkward to use individual registers to store the data. A better approach is to make use of a *static random access memory* (SRAM) block. An SRAM block is a two-dimensional array of SRAM cells, where each cell can store one bit of information. If we need to store m items with n bits each, we can use an array of $m \times n$ SRAM cells. The dimensions of the SRAM array are called its *aspect ratio*.

An SRAM cell is similar to the storage cell that was shown in Figure 7.3. Since an SRAM block may contain a large number of SRAM cells, each cell must take as little space

```

-- n-bit left-to-right shift register with parallel load and enable
COMPONENT shiftreg
  GENERIC ( N : INTEGER := 4 );
  PORT ( R      : IN      STD_LOGIC_VECTOR(N-1 DOWNTO 0);
        L, E, w : IN      STD_LOGIC ;
        Clock   : IN      STD_LOGIC ;
        Q       : BUFFER  STD_LOGIC_VECTOR(N-1 DOWNTO 0));
END COMPONENT ;

-- up-counter that counts from 0 to modulus - 1
COMPONENT upcount
  GENERIC ( modulus : INTEGER := 8 );
  PORT ( Resetn     : IN      STD_LOGIC ;
        Clock, E, L : IN      STD_LOGIC ;
        R           : IN      INTEGER RANGE 0 TO modulus - 1 ;
        Q           : BUFFER  INTEGER RANGE 0 TO modulus - 1 );
END COMPONENT ;

-- down-counter that counts from modulus - 1 down to 0
COMPONENT downcnt
  GENERIC ( modulus : INTEGER := 8 );
  PORT ( Clock, E, L : IN      STD_LOGIC ;
        Q           : BUFFER  INTEGER RANGE 0 TO modulus - 1 );
END COMPONENT ;
END components ;

```

Figure 10.5 Component declaration statements for building blocks (Part b).

on an integrated circuit chip as possible. For this reason, the storage cell should use as few transistors as possible. One popular storage cell used in practice is depicted in Figure 10.6. It operates as follows. To store data into the cell, the *Sel* input is set to 1, and the data value to be stored is placed on the *Data* input. The SRAM cell may include a separate input for the complement of the data, indicated by the transistor shown in blue in the figure. For simplicity we assume that this transistor is not included in the cell. After waiting long enough for the data to propagate through the feedback path formed by the two NOT gates, *Sel* is changed to 0. The stored data then remains in the feedback loop indefinitely. A possible problem is that when $Sel = 1$, the value of *Data* may not be the same as the value being driven by the small NOT gate in the feedback path. Hence the transistor controlled by *Sel* may attempt to drive the stored data to one logic value while the output of the small NOT gate has the opposite logic value. To resolve this problem, the NOT gate in the feedback path is built using small (weak) transistors, so that its output can be overridden with new data.

To read data stored in the cell, we simply set *Sel* to 1. In this case the *Data* node would not be driven to any value by external circuitry, so that the SRAM cell can place the stored

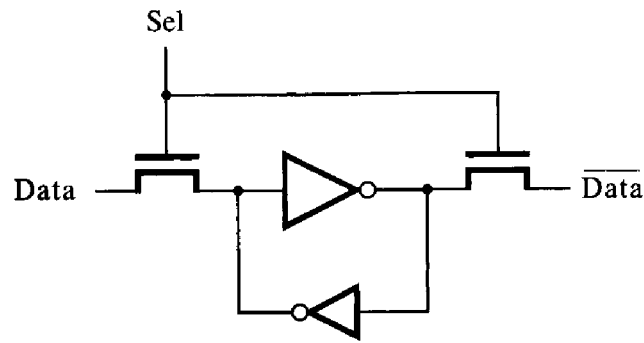


Figure 10.6 An SRAM cell.

data on this node. The *Data* signal is passed through a buffer, not shown in the figure, and provided as an output of the SRAM block.

An SRAM block contains an array of SRAM cells. Figure 10.7 shows an array with two rows of two cells each. In each column of the array, the *Data* nodes of the cells are connected together. Each row, i , has a separate select input, Sel_i , that is used to read or write the contents of the cells in that row. Larger arrays are formed by connecting more cells to Sel_i in each row and by adding more rows. The SRAM block must also contain circuitry that controls access to each row in the array. Figure 10.8 depicts a $2^m \times n$ array of the type in Figure 10.7, which has a decoder that drives the Sel_i inputs in each row of the array. The inputs to the decoder are called *Address* inputs. This term derives from the notion that the location of a row in the array can be thought of as the “address” of the row. The decoder

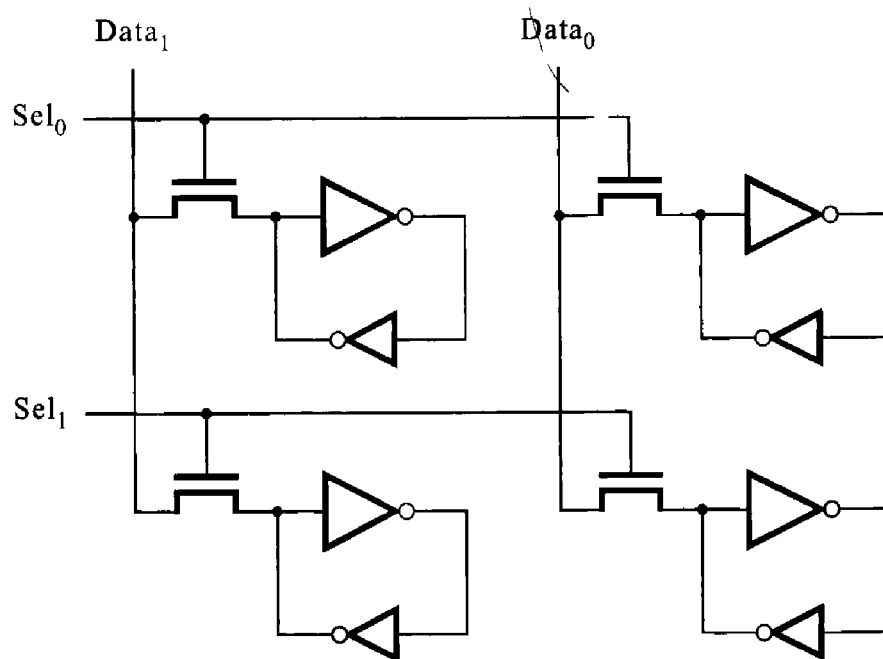


Figure 10.7 A 2×2 array of SRAM cells.

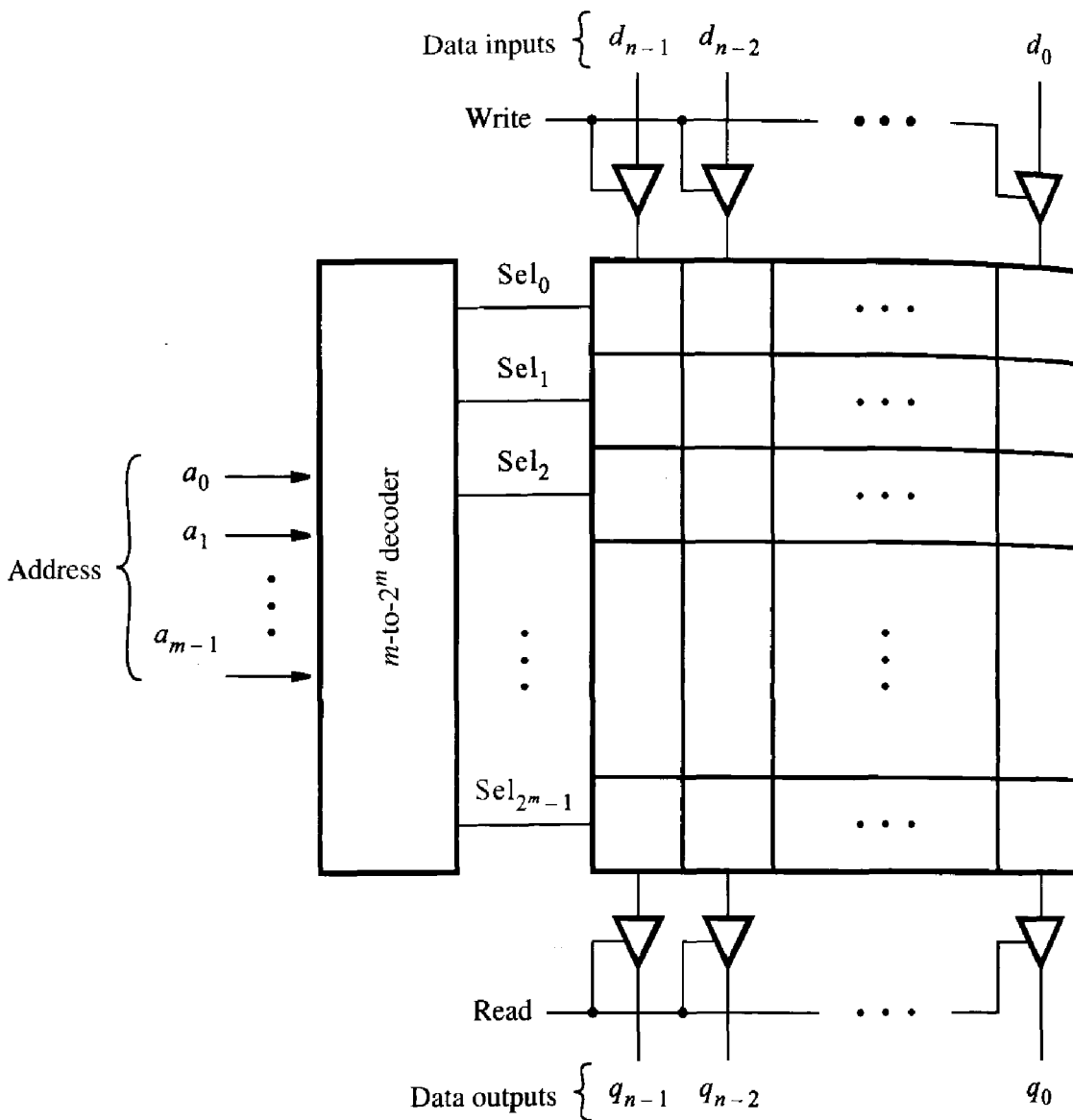


Figure 10.8 A $2^m \times n$ SRAM block.

has m Address inputs and produces 2^m select outputs. If the *Write* control input is 1, then the data bits on the inputs d_{n-1}, \dots, d_0 are stored in the cells of the row selected by the Address inputs. If the *Read* control input is 1, then the data stored in the row selected by the Address inputs appears on the outputs q_{n-1}, \dots, q_0 . In many practical applications the data inputs and data outputs are connected together. Thus the *Write* and *Read* inputs must never have the value 1 at the same time.

The design of memory blocks has been the subject of intensive research and development. We have described only the basic operation of one type of memory block. The reader can refer to books on computer organization for more information [1, 2].

10.1.4 SRAM BLOCKS IN PLDS

Some PLDs contain SRAM blocks that can be used as part of circuits implemented in the chips. One popular chip has a number of SRAM blocks, each of which contains 4096 SRAM cells. The SRAM blocks can be configured to provide different aspect ratios, depending on the needs of the design being implemented. Aspect ratios from 512×8 to 4096×1 can be realized using a single SRAM block, and multiple blocks can be combined to form larger memory arrays. To include SRAM blocks in a circuit, designers use prebuilt modules that are provided in a library as part of the CAD tools, or they write VHDL code from which synthesis tools can infer memory blocks.

10.2 DESIGN EXAMPLES

We introduced algorithmic state machine (ASM) charts in section 8.10 and showed how they can be used to describe finite state machines. ASM charts can also be used to describe digital systems that include both datapath and control circuits. We will illustrate how the ASM charts can be used as an aid in designing digital systems by giving several examples.

10.2.1 A BIT-COUNTING CIRCUIT

Suppose that we wish to count the number of bits in a register, A , that have the value 1. Figure 10.9 shows pseudo-code for a step-by-step procedure, or *algorithm*, that can be used to perform the required task. It assumes that A is stored in a register that can shift its contents in the left-to-right direction. The answer produced by the algorithm is stored in the variable named B . The algorithm terminates when A does not contain any more 1s, that is when $A = 0$. In each iteration of the while loop, if the least-significant bit (LSB) of A is 1, then B is incremented by 1; otherwise, B is not changed. A is shifted one bit to the right at the end of each loop iteration.

Figure 10.10 gives an ASM chart that represents the algorithm in Figure 10.9. The state box for the starting state, $S1$, specifies that B is initialized to 0. We assume that an input

```

B = 0 ;
while A ≠ 0 do
    if a0 = 1 then
        B = B + 1 ;
    end if ;
    Right-shift A ;
end while ;

```

Figure 10.9 Pseudo-code for the bit counter.

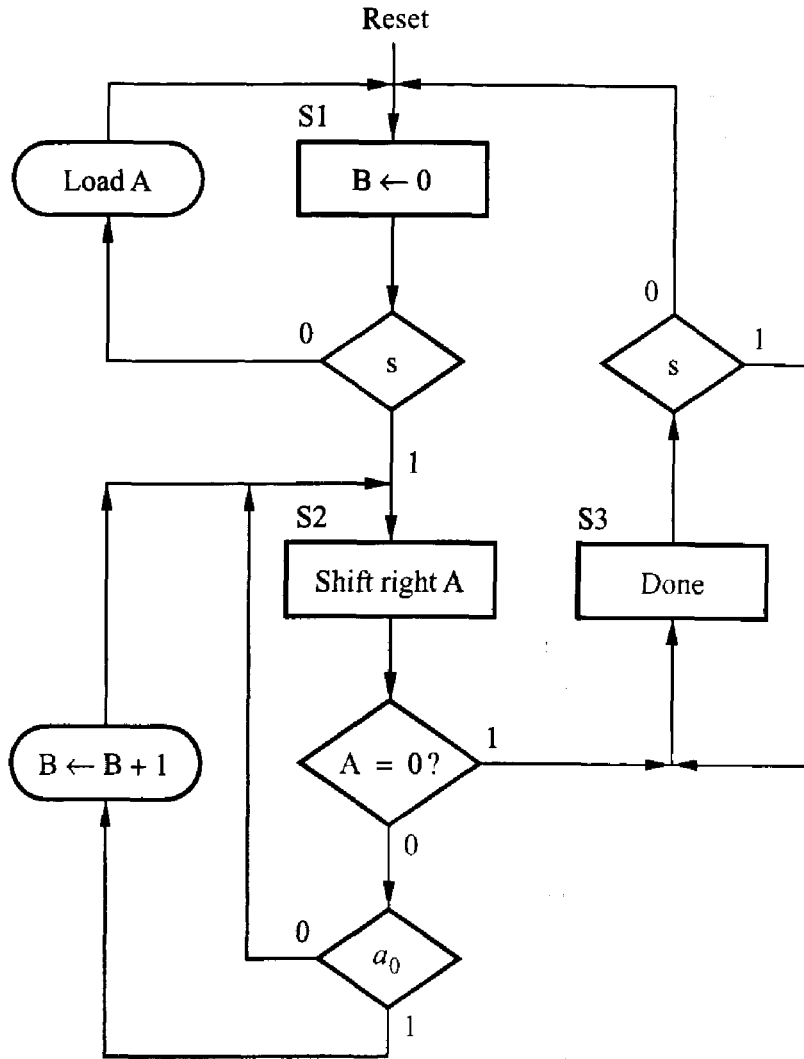


Figure 10.10 ASM chart for the pseudo-code in Figure 10.9.

signal, s , exists, which is used to indicate when the data to be processed has been loaded into A , so that the machine can start. The decision box labeled s stipulates that the machine remains in state $S1$ as long as $s = 0$. The conditional output box with *Load A* written inside it indicates that A is loaded from external data inputs if $s = 0$ in state $S1$.

When s becomes 1, the machine changes to state $S2$. The decision box below the state box for $S2$ checks whether $A = 0$. If so, the bit-counting operation is complete; hence the machine should change to state $S3$. If not, the FSM remains in state $S2$. The decision box at the bottom of the chart checks the value of a_0 . If $a_0 = 1$, B is incremented, which is indicated in the chart as $B \leftarrow B + 1$. If $a_0 = 0$, then B is not changed. In state $S3$, B contains the result, which is the number of bits in A that were 1. An output signal, *Done*, is set to 1 to indicate that the algorithm is finished; the FSM stays in $S3$ until s goes back to 0.

10.2.2 ASM CHART IMPLIED TIMING INFORMATION

In section 8.10 we said that ASM charts are similar to traditional flowcharts, except that the ASM chart implies timing information. We can use the bit-counting example to illustrate this concept. Consider the ASM block for state $S2$, which is shaded in blue in Figure 10.10. In a traditional flowchart, when state $S2$ is entered, the value of A would first be shifted to the right. Then we would examine the value of A and if A 's LSB is 1, we would immediately add 1 to B . But, since the ASM chart represents a sequential circuit, changes in A and B , which represent the outputs of flip-flops, take place after the active clock edge. The same clock signal that controls changes in the state of the machine also controls changes in A and B . Hence in state $S2$, the decision box that tests whether $A = 0$, as well as the box that checks the value of a_0 , check the bits in A before they are shifted. If $A = 0$, then the FSM will change to state $S3$ on the next clock edge (this clock edge also shifts A , which has no effect because A is already 0 in this case.) On the other hand, if $A \neq 0$, then the FSM does not change to $S3$, but remains in $S2$. At the same time, A is still shifted, and B is incremented if a_0 has the value 1. These timing issues are illustrated in Figure 10.14, which represents a simulation result for a circuit that implements the ASM chart. We show how the circuit is designed in the following discussion.

Datapath Circuit

By examining the ASM chart for the bit-counting circuit, we can infer the type of circuit elements needed to implement its datapath. We need a shift register that shifts left-to-right to implement A . It must have the parallel-load capability because of the conditional output box in state $S1$ that loads data into the register. An enable input is also required because shifting should occur only in state $S2$. A counter is needed for B , and it needs a parallel-load capability to initialize the count to 0 in state $S1$. It is not wise to rely on the counter's reset input to clear B to 0 in state $S1$. In practice, the reset signal is used in a digital system for only two purposes: to initialize the circuit when power is first applied, or to recover from an error. The machine changes from state $S3$ to $S1$ as a result of $s = 0$; hence we should not assume that the reset signal is used to clear the counter.

The datapath circuit is depicted in Figure 10.11. The serial input to the shift register, w , is connected to 0, because it is not needed. The load and enable inputs on the shift register are driven by the signals LA and EA . The parallel input to the shift register is named $Data$, and its parallel output is A . An n -input NOR gate is used to test whether $A = 0$. The output of this gate, z , is 1 when $A = 0$. Note that the figure indicates the n -input NOR gate by showing a single input connection to the gate, with the label n attached to it. The counter has $\log_2(n)$ bits, with parallel inputs connected to 0 and parallel outputs named B . It also has a parallel load input LB and enable input EB control signals.

Control Circuit

For convenience we can draw a second ASM chart that represents only the FSM needed for the control circuit, as shown in Figure 10.12. The FSM has the inputs s , a_0 , and z and generates the outputs EA , LB , EB , and $Done$. In state $S1$, LB is asserted, so that 0 is loaded in parallel into the counter. Note that for the control signals, like LB , instead of writing $LB = 1$, we simply write LB to indicate that the signal is asserted. We assume that external circuitry drives LA to 1 when valid data is present at the parallel inputs of the shift register,

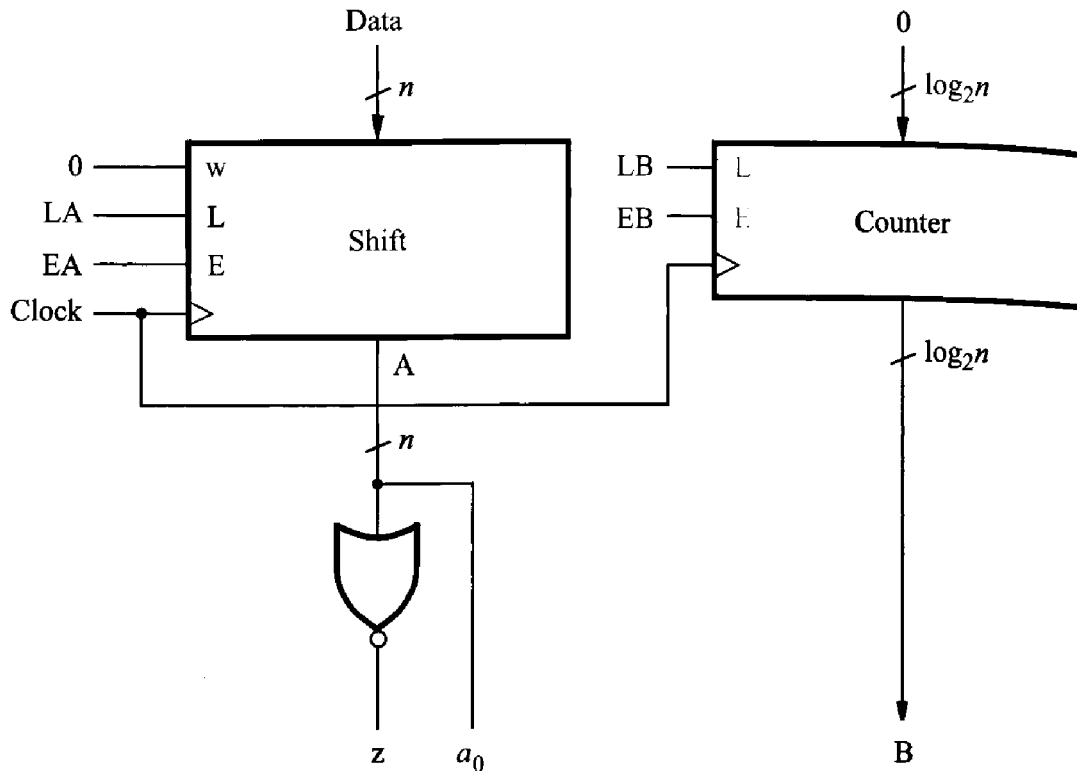


Figure 10.11 Datapath for the ASM chart in Figure 10.10.

so that the shift register contents are initialized before s changes to 1. In state S_2 , EA is asserted to cause a shift operation, and the count enable for B is asserted only if $a_0 = 1$.

VHDL Code

The bit-counting circuit can be described in VHDL code as shown in Figure 10.13. We have chosen to define A as an eight-bit `STD_LOGIC_VECTOR` signal and B as an integer signal. The ASM chart in Figure 10.12 can be directly translated into code that describes the required control circuit. The signal named y is used to represent the state flip-flops, and the process labeled *FSM_transitions*, at the top of the architecture body, specifies the state transitions. The process labeled *FSM_outputs* specifies the generated outputs in each state. A default value is specified at the beginning of this process for all output signals, and then individual output values are specified in the case statement.

The process labeled *upcount* defines the up-counter that implements B . The shift register for A is instantiated at the end of the code, and the z signal is defined using a conditional signal assignment. We implemented the code in Figure 10.13 in a chip and performed a timing simulation. Figure 10.14 gives the results of the simulation for $A = 00111011$. After the circuit is reset, the input signal LA is set to 1, and the desired data, $(3B)_{16}$, is placed on the *Data* input. When s changes to 1, the next active clock edge causes the FSM to change to state S_2 . In this state each active clock edge increments B if a_0 is 1, and shifts A . When $A = 0$, the next clock edge causes the FSM to change to state S_3 , where *Done* is set to 1 and B has the correct result, $B = 5$. To check more thoroughly that the circuit is designed correctly, we should try different values of input data.

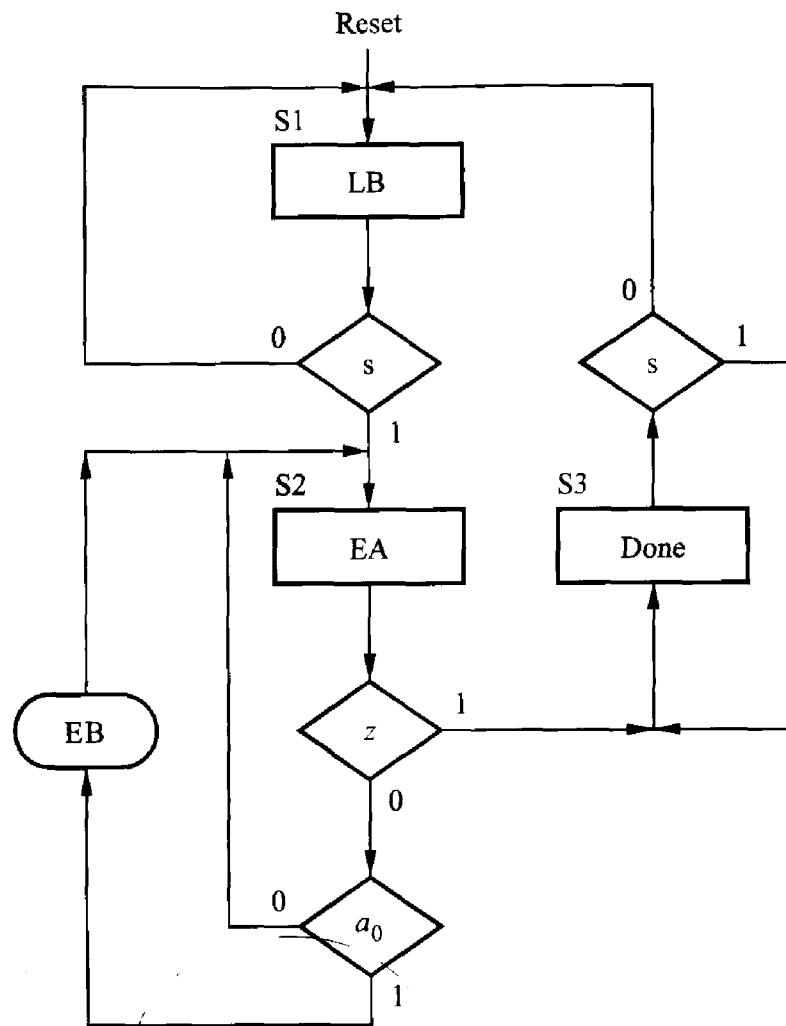


Figure 10.12 ASM chart for the bit counter control circuit.

10.2.3 SHIFT-AND-ADD MULTIPLIER

We presented a circuit that multiplies two unsigned n -bit binary numbers in Figure 5.32. The circuit uses a two-dimensional array of identical subcircuits, each of which contains a full-adder and an AND gate. For large values of n , this approach may not be appropriate because of the large number of gates needed. Another approach is to use a shift register in combination with an adder to implement the traditional method of multiplication that is done by “hand.” Figure 10.15a illustrates the manual process of multiplying two binary numbers. The product is formed by a series of addition operations. For each bit i in the multiplier that is 1, we add to the product the value of the multiplicand shifted to the left i times. This algorithm can be described in pseudo-code as shown in Figure 10.15b, where A is the multiplicand, B is the multiplier, and P is the product.

An ASM chart that represents the algorithm in Figure 10.15b is given in Figure 10.16. We assume that an input s is used to control when the machine begins the multiplication process. As long as s is 0, the machine stays in state $S1$ and the data for A and B can be loaded from external inputs. In state $S2$ we test the value of the LSB of B , and if it is 1, we

```

LIBRARY ieee ;
USE ieee.std_logic_1164.all ;
LIBRARY work ;
USE work.components.shiftrne ;

ENTITY bitcount IS
    PORT( Clock, Resetn : IN          STD_LOGIC ;
          LA, s         : IN          STD_LOGIC ;
          Data          : IN          STD_LOGIC_VECTOR(7 DOWNT0 0);
          B              : BUFFER INTEGER RANGE 0 to 8 ;
          Done          : OUT         STD_LOGIC );
END bitcount ;

ARCHITECTURE Behavior OF bitcount IS
    TYPE State_type IS ( S1, S2, S3 ) ;
    SIGNAL y : State_type ;
    SIGNAL A : STD_LOGIC_VECTOR(7 DOWNT0 0) ;
    SIGNAL z, EA, LB, EB, low : STD_LOGIC ;
BEGIN
    FSM_transitions: PROCESS ( Resetn, Clock )
    BEGIN
        IF Resetn = '0' THEN
            y <= S1 ;
        ELSIF (Clock'EVENT AND Clock = '1') THEN
            CASE y IS
                WHEN S1 =>
                    IF s = '0' THEN y <= S1 ; ELSE y <= S2 ; END IF ;
                WHEN S2 =>
                    IF z = '0' THEN y <= S2 ; ELSE y <= S3 ; END IF ;
                WHEN S3 =>
                    IF s = '1' THEN y <= S3 ; ELSE y <= S1 ; END IF ;
            END CASE ;
        END IF ;
    END PROCESS ;

    ... continued in Part b

```

Figure 10.13 VHDL code for the bit-counting circuit (Part a).

add A to P . Otherwise, P is not changed. The machine moves to state $S3$ when B contains 0, because P has the final product in this case. For each clock cycle in which the machine is in state $S2$, we shift the value of A to the left, as specified in the pseudo-code in Figure 10.15b. We shift the contents of B to the right so that in each clock cycle b_0 can be used to decide whether or not A should be added to P .

```

FSM_outputs: PROCESS ( y, A(0) )
BEGIN
    EA <= '0' ; LB <= '0' ; EB <= '0' ; Done <= '0' ;
    CASE y IS
        WHEN S1 =>
            LB <= '1' ;
        WHEN S2 =>
            EA <= '1' ;
            IF A(0) = '1' THEN EB <= '1' ; ELSE EB <= '0' ; END IF ;
        WHEN S3 =>
            Done <= '1' ;
    END CASE ;
END PROCESS ;

```

-- The datapath circuit is described below

```

upcount: PROCESS ( Resetn, Clock )
BEGIN
    IF Resetn = '0' THEN
        B <= 0 ;
    ELSIF (Clock'EVENT AND Clock = '1') THEN
        IF LB = '1' THEN
            B <= 0 ;
            ELSIF EB = '1' THEN
                B <= B * 1 ;
            END IF ;
        END IF ;
    END PROCESS ;

```

```

low <= '0' ;
ShiftA: shiftreg GENERIC MAP ( N => 8 )
    PORT MAP ( Data, LA, EA, low, Clock, A ) ;
z <= '1' WHEN A = "00000000" ELSE '0' ;
END Behavior ;

```

Figure 10.13 VHDL code for the bit-counting circuit (Part b).

Datapath Circuit

We can now define the datapath circuit. To implement A we need a right-to-left shift register that has $2n$ bits. A $2n$ -bit register is needed for P , and it must have an enable input because the assignment $P \leftarrow P + A$ in state $S2$ is inside a conditional output box. A $2n$ -bit adder is needed to produce $P + A$. Note that P is loaded with 0 in state $S1$, and P is loaded from the output of the adder in state $S2$. We cannot assume that the reset input is used to clear P , because the machine changes from state $S3$ back to $S1$ based on the s input, not the

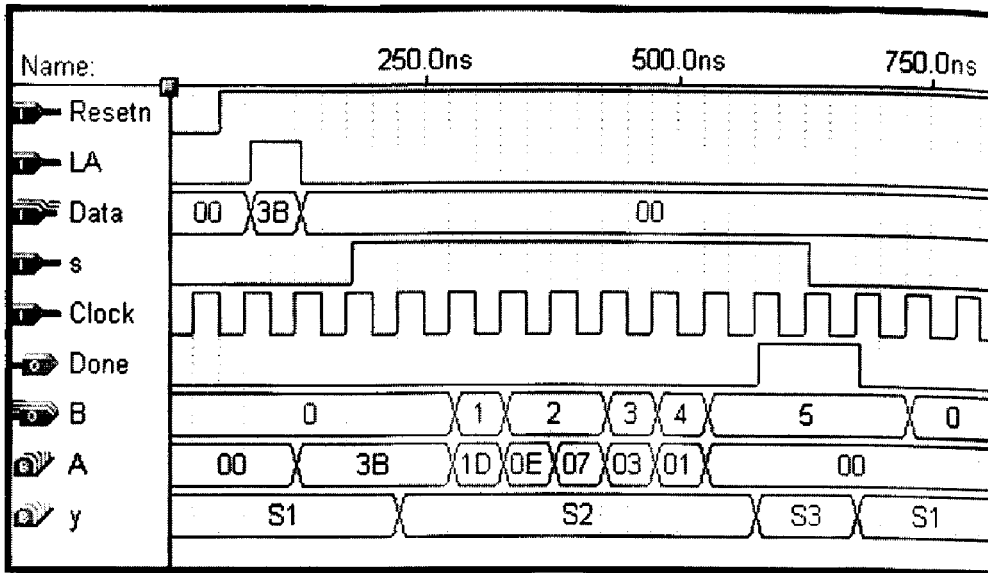


Figure 10.14 Simulation results for the bit-counting circuit.

Decimal	Binary	
13	1 1 0 1	Multiplicand
$\times 11$	$\times 1 0 1 1$	Multiplier
<hr/>	<hr/>	
13	1 1 0 1	
13↓	1 1 0 1	
<hr/>	0 0 0 0	
143	1 1 0 1 ↓ ↓ ↓	
	<hr/>	
	1 0 0 0 1 1 1 1	Product

(a) Manual method

```

P = 0;
for i = 0 to n - 1 do
    if  $b_i = 1$  then
        P = P + A;
    end if;
    Left-shift A;
end for;
    
```

(b) Pseudo-code

Figure 10.15 An algorithm for multiplication.

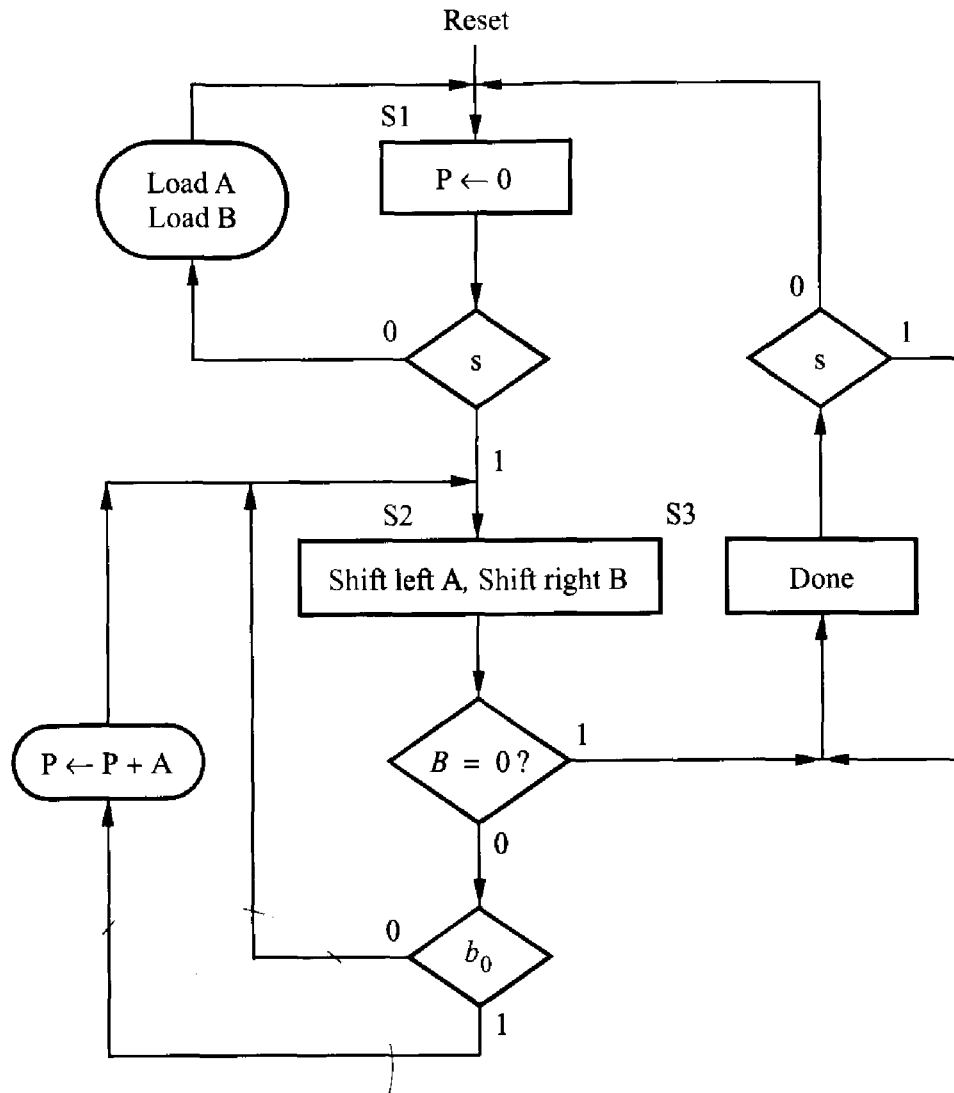


Figure 10.16 ASM chart for the multiplier.

reset input. Hence a 2-to-1 multiplexer is needed for each input to P , to select either 0 or the appropriate sum bit from the adder. An n -bit left-to-right shift register is needed for B , and an n -input NOR gate can be used to test whether $B = 0$.

Figure 10.17 shows the datapath circuit and labels the control signals for the shift registers. The input data for the shift register that holds A is named $DataA$. Since the shift register has $2n$ bits, the most-significant n data inputs are connected to 0. A single multiplexer symbol is shown connected to the register that holds P . This symbol represents $2n$ 2-to-1 multiplexers that are each controlled by the $Psel$ signal.

Control Circuit

An ASM chart that represents only the control signals needed for the multiplier is given in Figure 10.18. In state $S1$, $Psel$ is set to 0 and EP is asserted, so that register P is cleared. When $s = 0$, parallel data can be loaded into shift registers A and B by an external circuit that controls their parallel load inputs LA and LB . When $s = 1$, the machine changes to state $S2$, where $Psel$ is set to 1 and shifting of A and B is enabled. If $b_0 = 1$, the enable for P

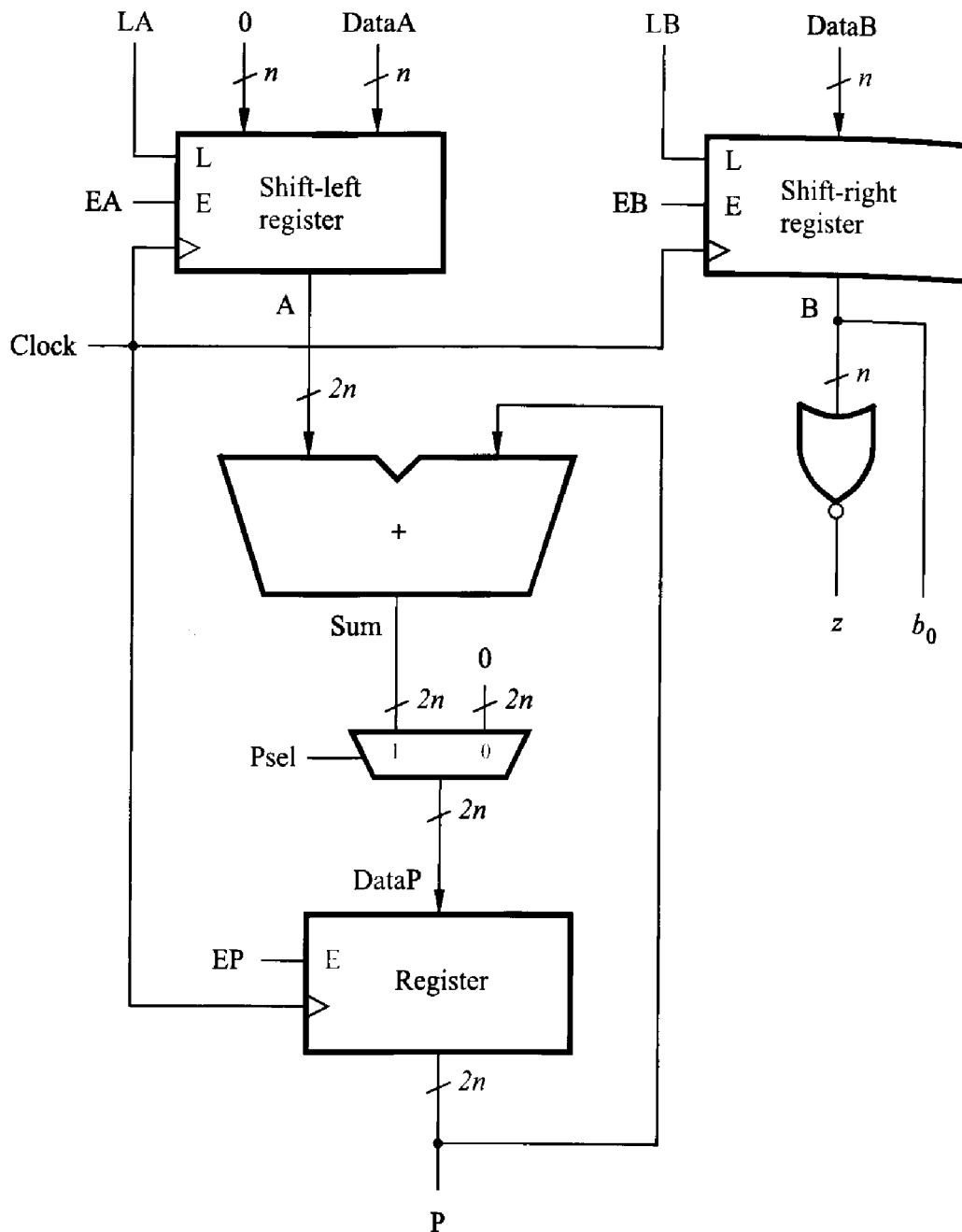


Figure 10.17 Datapath circuit for the multiplier.

is asserted. The machine changes to state $S3$ when $z = 1$, and then remains in $S3$ and sets $Done$ to the value 1 as long as $s = 1$.

VHDL Code

VHDL code for the multiplier is given in Figure 10.19. The number of bits in A and B is set by the generic parameter N . Since some registers are $2n$ bits wide, a second generic parameter NN is defined to represent $2 \times N$. By changing the value of the generic parameters, the code can be used for numbers of any size. The processes labeled $FSM_transitions$ and $FSM_outputs$ define the state transitions and generated outputs, respectively, in the control

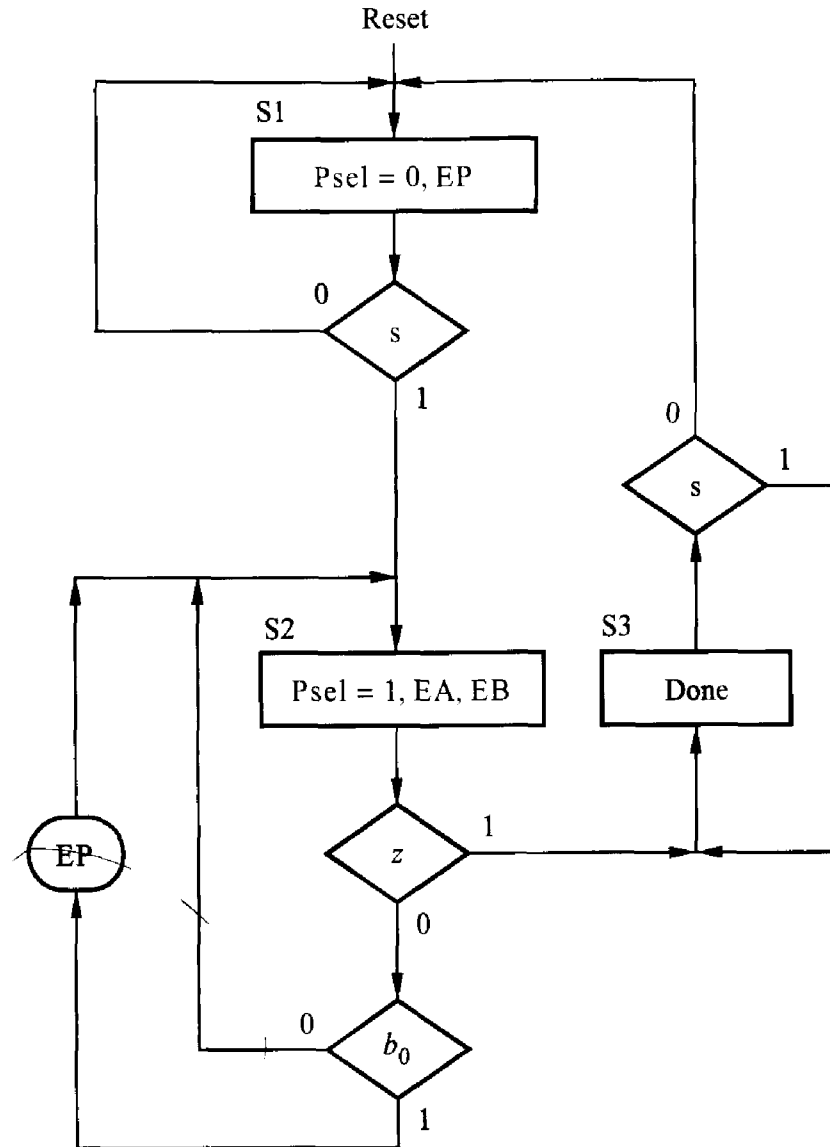


Figure 10.18 ASM chart for the multiplier control circuit.

circuit. The parallel data input on the shift register A is $2N$ bits wide, but $DataA$ is only N bits wide. The signal N_Zeros is used to generate n zero bits, and the signal Ain prepends these bits with $DataA$ for loading into the shift register. The multiplexer needed for register P is defined using a FOR GENERATE statement that instantiates $2N$ 2-to-1 multiplexers. Figure 10.20 gives a simulation result for the circuit generated from the code. After the circuit is reset, LA and LB are set to 1, and the numbers to be multiplied are placed on the $DataA$ and $DataB$ inputs. After s is set to 1, the FSM (y) changes to state $S2$, where it remains until $B = 0$. For each clock cycle in state $S2$, A is shifted to the left, and B is shifted to the right. In three of the clock cycles in state $S2$, the contents of A are added to P , corresponding to the three bits in B that have the value 1. When $B = 0$, the FSM changes to state $S3$ and P contains the correct product, which is $(64)_{16} \times (19)_{16} = (9C4)_{16}$. The decimal equivalent of this result is $100 \times 25 = 2500$.

```

LIBRARY ieee ;
USE ieee.std_logic_1164.all ;
USE ieee.std_logic_unsigned.all ;
USE work.components.all ;

ENTITY multiply IS
    GENERIC ( N : INTEGER := 8; NN : INTEGER := 16 );
    PORT ( Clock      : IN      STD_LOGIC ;
          Resetn     : IN      STD_LOGIC ;
          LA, LB, s   : IN      STD_LOGIC ;
          DataA      : IN      STD_LOGIC_VECTOR(N-1 DOWNTO 0) ;
          DataB      : IN      STD_LOGIC_VECTOR(N-1 DOWNTO 0) ;
          P          : BUFFER  STD_LOGIC_VECTOR(NN-1 DOWNTO 0) ;
          Done       : OUT     STD_LOGIC ) ;
END multiply ;

ARCHITECTURE Behavior OF multiply IS
    TYPE State_type IS ( S1, S2, S3 ) ;
    SIGNAL y : State_type ;
    SIGNAL Psel, z, EA, EB, EP, Zero : STD_LOGIC ;
    SIGNAL B, N_Zeros : STD_LOGIC_VECTOR(N-1 DOWNTO 0) ;
    SIGNAL A, Ain, DataP, Sum : STD_LOGIC_VECTOR(NN-1 DOWNTO 0) ;
BEGIN
    FSM_transitions: PROCESS ( Resetn, Clock )
    BEGIN
        IF Resetn = '0' THEN
            y <= S1 ;
        ELSIF (Clock'EVENT AND Clock = '1') THEN
            CASE y IS
                WHEN S1 =>
                    IF s = '0' THEN y <= S1 ; ELSE y <= S2 ; END IF ;
                WHEN S2 =>
                    IF z = '0' THEN y <= S2 ; ELSE y <= S3 ; END IF ;
                WHEN S3 =>
                    IF s = '1' THEN y <= S3 ; ELSE y <= S1 ; END IF ;
            END CASE ;
        END IF ;
    END PROCESS ;
END ARCHITECTURE ;

```

... continued in Part *b*

Figure 10.19 VHDL code for the multiplier circuit (Part *a*).


```

FSM_outputs: PROCESS ( y, s, B(0) )
BEGIN
    EP <= '0' ; EA <= '0' ; EB <= '0' ; Done <= '0' ; Psel <= '0' ;
    CASE y IS
        WHEN S1 =>
            EP <= '1' ;
        WHEN S2 =>
            EA <= '1' ; EB <= '1' ; Psel <= '1' ;
            IF B(0) = '1' THEN EP <= '1' ; ELSE EP <= '0' ; END IF ;
        WHEN S3 =>
            Done <= '1' ;
    END CASE ;
END PROCESS ;

-- Define the datapath circuit
Zero <= '0' ;
N_Zeros <= (OTHERS => '0' ) ;
Ain <= N_Zeros & DataA ;
ShiftA: shiftrne GENERIC MAP ( N => NN )
    PORT MAP ( Ain, LA, EA, Zero, Clock, A ) ;
ShiftB: shiftrne GENERIC MAP ( N => N )
    PORT MAP ( DataB, LB, EB, Zero, Clock, B ) ;
z <= '1' WHEN B = N_Zeros ELSE '0' ;
Sum <= A + P ;
-- Define the 2n 2-to-1 multiplexers for DataP
GenMUX: FOR i IN 0 TO NN-1 GENERATE
    Muxi: mux2to1 PORT MAP ( Zero, Sum(i), Psel, DataP(i) ) ;
END GENERATE;
RegP: regne GENERIC MAP ( N => NN )
    PORT MAP ( DataP, Resetn, EP, Clock, P ) ;
END Behavior ;

```

Figure 10.19 VHDL code for the multiplier circuit (Part *b*).

The number of clock cycles that the circuit requires to generate the final product is determined by the left-most digit in B that is 1. It is possible to reduce the number of clock cycles needed by using more complex shift registers for A and B . If the two right-most bits in B are both 0, then both A and B could be shifted by two bit positions in one clock cycle. Similarly, if the three lowest digits in B are 0, then a three bit-position shift can be done, and so on. A shift register that can shift by multiple bit positions at once can be built using a *barrel shifter*. We leave it as an exercise for the reader to modify the multiplier to make use of a barrel shifter.

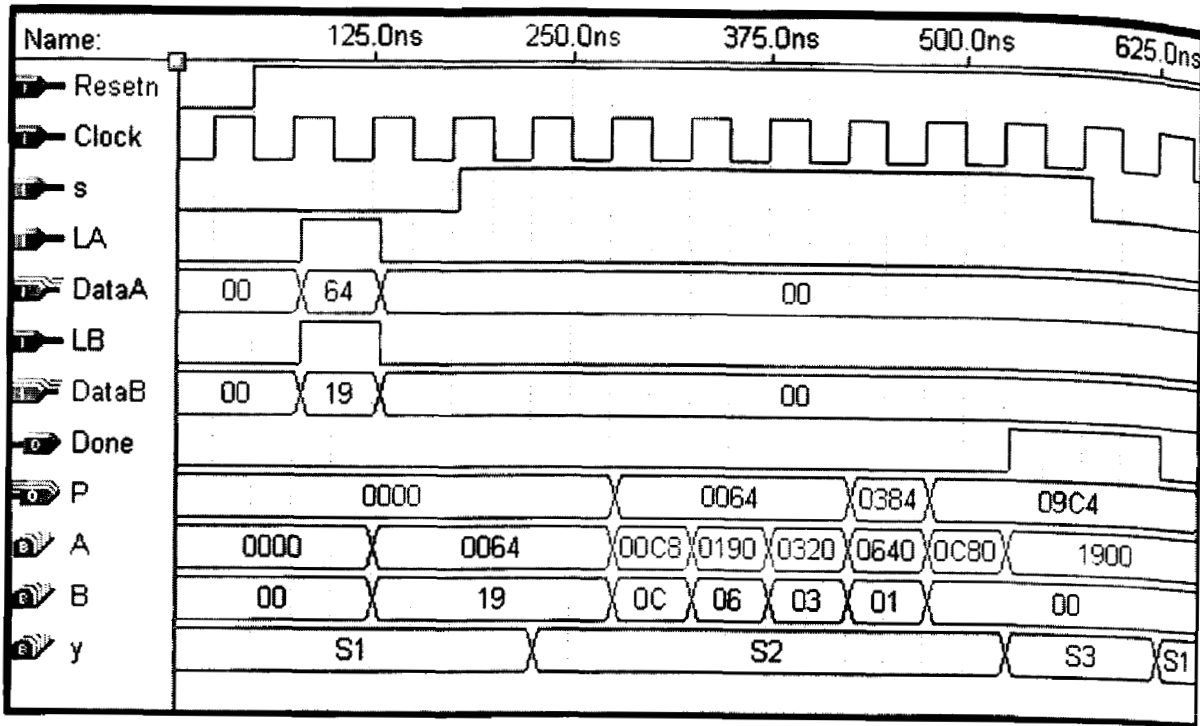


Figure 10.20 Simulation results for the multiplier circuit.

10.2.4 DIVIDER

The preceding example implements the traditional method of performing multiplication by hand. In this example we will design a circuit that implements the traditional long-hand division. Figure 10.21a gives an example of long-hand division. The first step is to try to divide the divisor 9 into the first digit of the dividend 1, which does not work. Next, we try to divide 9 into 14, and determine that 1 is the first digit in the quotient. We perform the subtraction $14 - 9 = 5$, bring down the last digit from the dividend to form 50, and then determine that the next digit in the quotient is 5. The remainder is $50 - 45 = 5$, and the quotient is 15. Using binary numbers, as illustrated in Figure 10.21b, involves the same process, with the simplification that each digit of the quotient can be only 0 or 1.

Given two unsigned n -bit numbers A and B , we wish to design a circuit that produces two n -bit outputs Q and R , where Q is the quotient A/B and R is the remainder. The procedure illustrated in Figure 10.21b can be implemented by shifting the digits in A to the left, one digit at a time, into a shift register R . After each shift operation, we compare R with B . If $R \geq B$, a 1 is placed in the appropriate bit position in the quotient and B is subtracted from R . Otherwise, a 0 bit is placed in the quotient. This algorithm is described using pseudo-code in Figure 10.21c. The notation $R||A$ is used to represent a $2n$ -bit shift register formed using R as the left-most n bits and A as the right-most n bits.

The pseudo-code for the multiplier in Figure 10.15b examines one digit, b_i , in each loop iteration. In the ASM chart in Figure 10.16, we shift B to the right so that b_0 always contains the digit needed. Similarly, in the long-division pseudo-code, each loop iteration results in setting a digit q_i to either 1 or 0. A straightforward way to accomplish this is

$$\begin{array}{r} 15 \\ 9 \overline{) 140} \\ \underline{9} \\ 50 \\ \underline{45} \\ 5 \end{array}$$

$$\begin{array}{r} 1111 \leftarrow Q \\ B \rightarrow 1001 \overline{) 10001100} \leftarrow A \\ \underline{1001} \\ 10001 \\ \underline{1001} \\ 10000 \\ \underline{1001} \\ 1110 \\ 1001 \\ \underline{101} \leftarrow R \end{array}$$

(a) An example using decimal numbers

(b) Using binary numbers

```

R = 0;
for i = 0 to n - 1 do
    Left-shift R||A;
    if R ≥ B then
        qi = 1;
        R = R - B;
    else
        qi = 0;
    end if;
end for;
    
```

(c) Pseudo-code

Figure 10.21 An algorithm for division.

to shift 1 or 0 into the least-significant bit of Q in each loop iteration. An ASM chart that represents the divider circuit is shown in Figure 10.22. The signal C represents a counter that is initialized to $n - 1$ in the starting state S1. In state S2, both R and A are shifted to the left, and then in state S3, B is subtracted from R if $R \geq B$. The machine changes to state S4 when $C = 0$.

Datapath Circuit

We need n -bit shift registers that shift right to left for A, R, and Q. An n -bit register is needed for B, and a subtractor is needed to produce $R - B$. We can use an adder module in which the carry-in is set to 1 and B is complemented. The carry-out, c_{out} , of this module has the value 1 if the condition $R \geq B$ is true. Hence the carry-out can be connected to the serial input of the shift register that holds Q, so that it is shifted into Q in state S3. Since R is loaded with 0 in state S1 and from the outputs of the adder in state S3, a multiplexer is needed for the parallel data inputs on R. The datapath circuit is depicted in Figure 10.23.

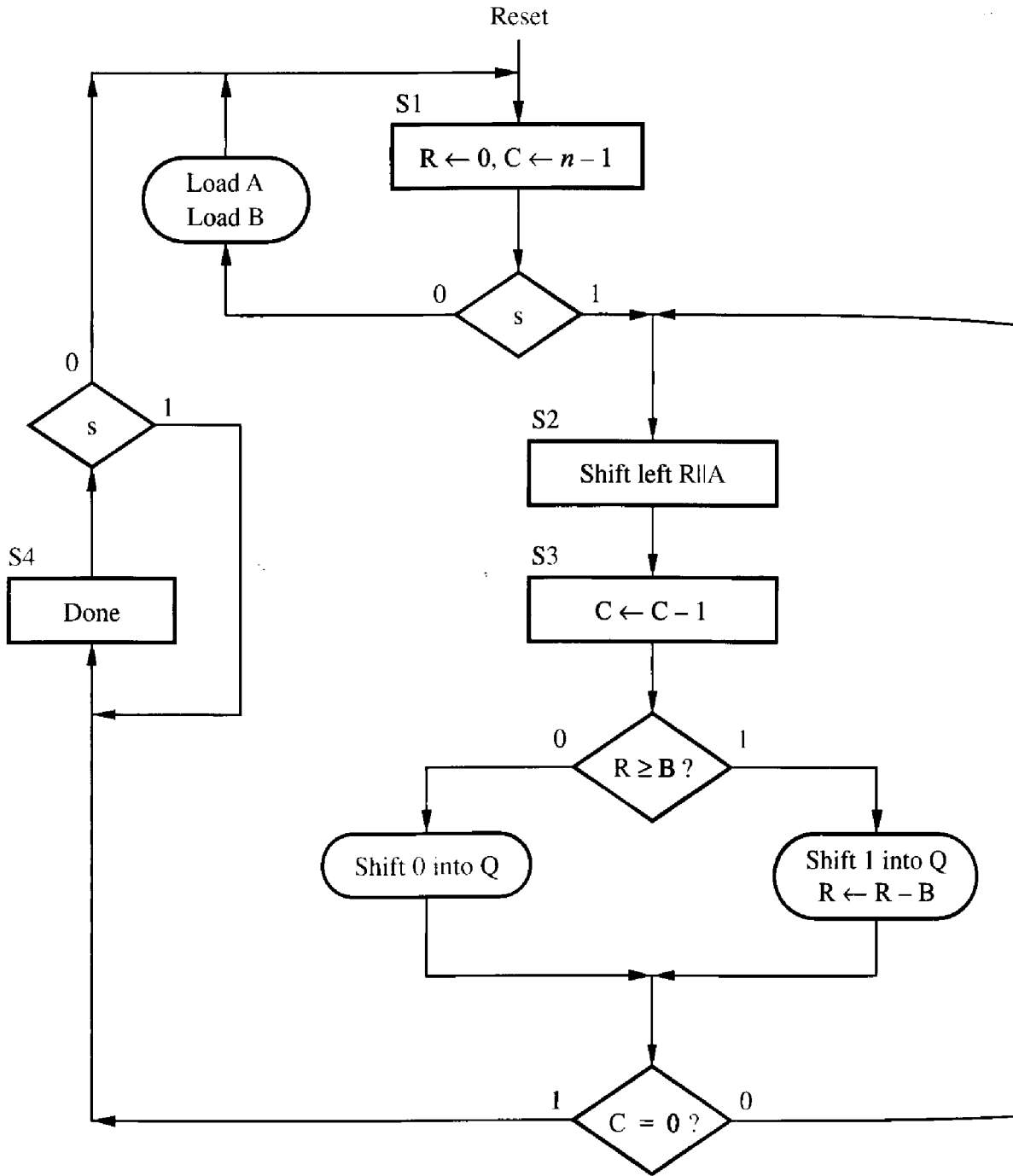


Figure 10.22 ASM chart for the divider.

Note that the down-counter needed to implement C and the NOR gate that outputs a 1 when $C = 0$ are not shown in the figure.

Control Circuit

An ASM chart that shows only the control signals needed for the divider is given in Figure 10.24. In state $S3$ the value of c_{out} determines whether or not the sum output of the adder is loaded into R . The shift enable on Q is asserted in state $S3$. We do not have to specify whether 1 or 0 is loaded into Q , because c_{out} is connected to Q 's serial input

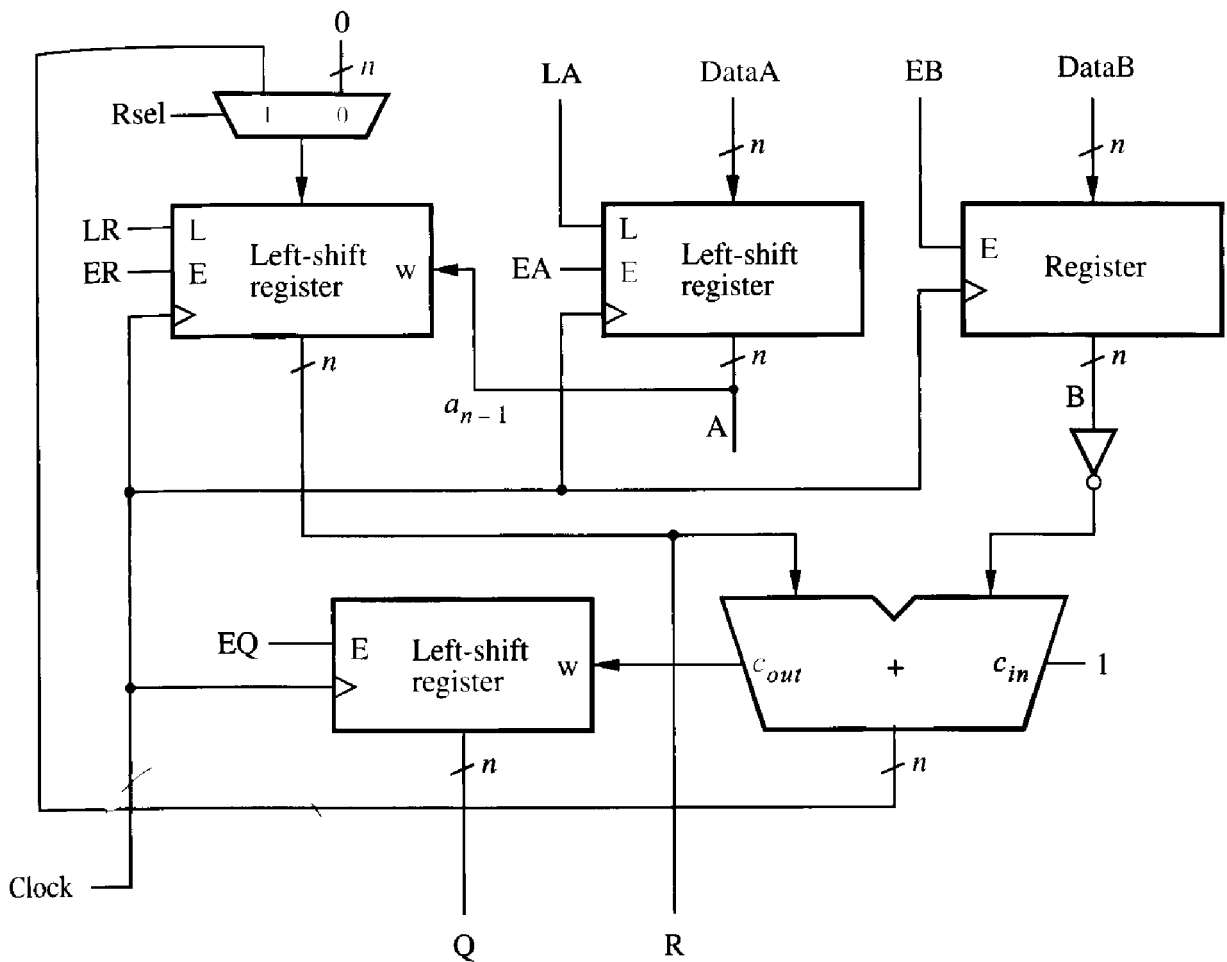


Figure 10.23 Datapath circuit for the divider.

in the datapath circuit. We leave it as an exercise for the reader to write VHDL code that represents the ASM chart in Figure 10.24 and the datapath circuit in Figure 10.23.

Enhancements to the Divider Circuit

Using the ASM chart in Figure 10.24 causes the circuit to loop through states *S2* and *S3* for $2n$ clock cycles. If these states can be merged into a single state, then the number of clock cycles needed can be reduced to n . In state *S3*, if $c_{out} = 1$, we load the sum output (result of the subtraction) from the adder into *R*, and (assuming $z = 0$) change to state *S2*. In state *S2* we then shift *R* (and *A*) to the left. To combine *S2* and *S3* into a new state, called *S2*, we need to be able to place the sum into the left-most bits of *R* while at the same time shifting the MSB of *A* into the LSB of *R*. This step can be accomplished by using a separate flip-flop for the LSB of *R*. Let the output of this flip-flop be called rr_0 . It is initialized to 0 when $s = 0$ in state *S1*. Otherwise, the flip-flop is loaded from the MSB of *A*. In state *S2*, if $c_{out} = 0$, *R* is shifted left and rr_0 is shifted into *R*. But if $c_{out} = 1$, *R* is loaded in parallel from the sum outputs of the adder.

Figure 10.25 illustrates how the division example from Figure 10.21*b* can be performed using n clock cycles. The table in the figure shows the values of *R*, rr_0 , *A*, and *Q* in each step of the division. In the datapath circuit in Figure 10.23, we use a separate shift register for *Q*.

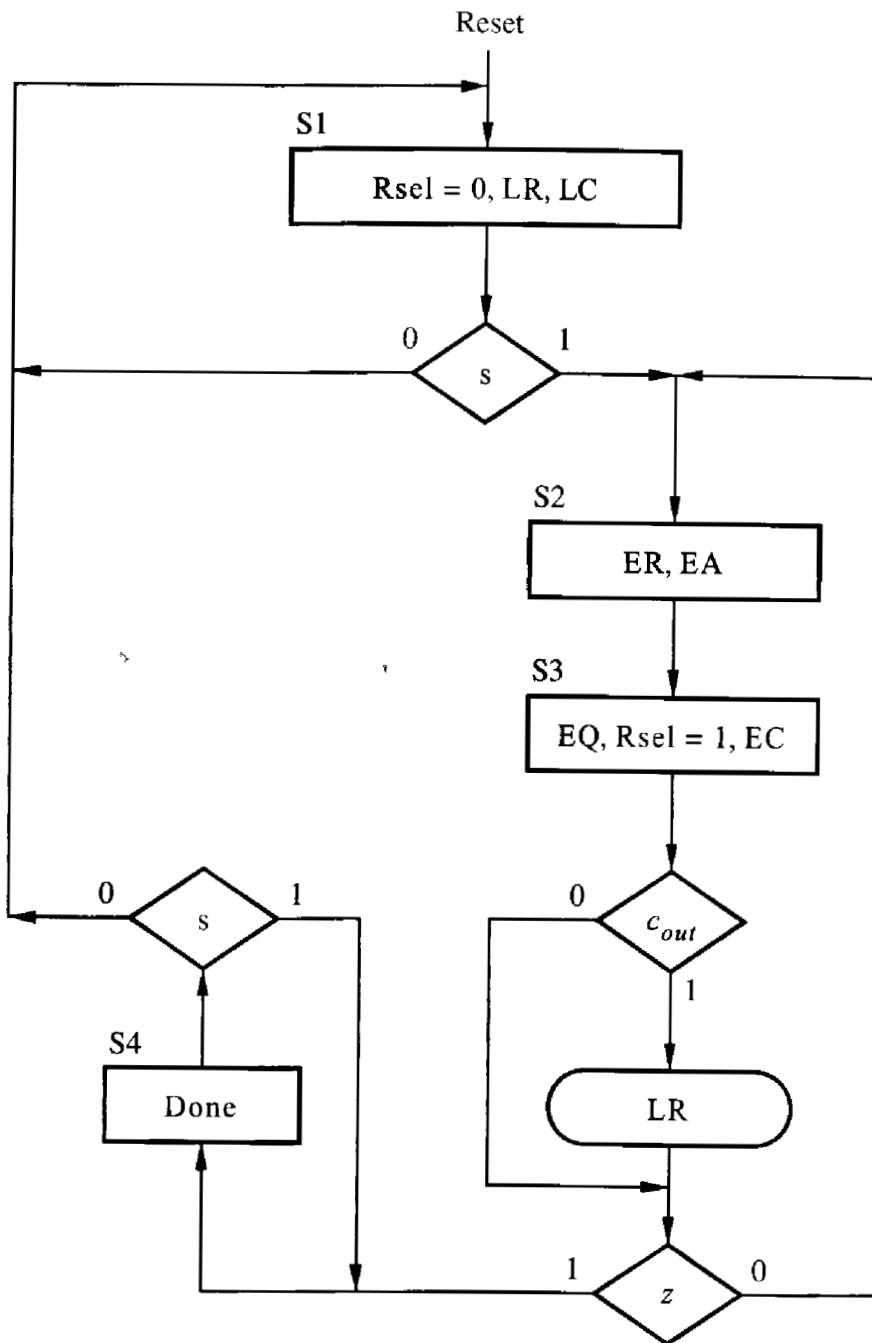


Figure 10.24 ASM chart for the divider control circuit.

This register is not actually needed, because the digits in the quotient can be shifted into the least-significant bit of the register used for A . In Figure 10.25 the digits of Q that are shifted into A are shown in blue. The first row in the table represents loading of initial data into registers A (and B) and clearing R and rr_0 to 0. In the second row of the table, labeled clock cycle 0, the diagonal blue arrow shows that the left-most bit of A (1) is shifted into rr_0 . The number in $R||rr_0$ is now 000000001, which is smaller than B (1001). In clock cycle 1, rr_0 is shifted into R , and the MSB of A is shifted into rr_0 . Also, as shown in blue, a 0 is shifted into the LSB of Q (A). The number in $R||rr_0$ is now 000000010, which is still smaller than B .

$$B \rightarrow 1001 \overline{) 10001100} \leftarrow A$$

Clock cycle	R	rr_0	A/Q
Load A, B	0 0 0 0 0 0 0 0	0	1 0 0 0 1 1 0 0
0 Shift left	0 0 0 0 0 0 0 0	1	0 0 0 1 1 0 0 0
1 Shift left, $Q_0 \leftarrow 0$	0 0 0 0 0 0 0 1	0	0 0 1 1 0 0 0 0
2 Shift left, $Q_0 \leftarrow 0$	0 0 0 0 0 0 1 0	0	0 1 1 0 0 0 0 0
3 Shift left, $Q_0 \leftarrow 0$	0 0 0 0 0 1 0 0	0	1 1 0 0 0 0 0 0
4 Shift left, $Q_0 \leftarrow 0$	0 0 0 0 1 0 0 0	1	1 0 0 0 0 0 0 0
5 Subtract, $Q_0 \leftarrow 1$	0 0 0 0 1 0 0 0	1	0 0 0 0 0 0 0 1
6 Subtract, $Q_0 \leftarrow 1$	0 0 0 0 1 0 0 0	0	0 0 0 0 0 0 1 1
7 Subtract, $Q_0 \leftarrow 1$	0 0 0 0 0 1 1 1	0	0 0 0 0 0 1 1 1
8 Subtract, $Q_0 \leftarrow 1$	0 0 0 0 0 1 0 1	0	0 0 0 0 1 1 1 1

Figure 10.25 An example of division using $n = 8$ clock cycles.

Hence, in clock cycle 2 the same actions are performed as for clock cycle 1. These actions are also performed in clock cycles 3 and 4, at which point $R||rr_0 = 000010001$. Since this is larger than B , in clock cycle 5 the result of the subtraction $000010001 - 1001 = 00001000$ is loaded into R . The MSB of A (1) is still shifted into rr_0 , and a 1 is shifted into Q . In clock cycles 6, 7, and 8, the number in $R||rr_0$ is larger than B ; hence in each of these cycles the result of the subtraction $R||rr_0 - B$ is loaded into R , and a 1 is loaded into Q . After clock cycle 8 the correct result, $Q = 00001111$ and $R = 00000101$, is obtained. The bit rr_0 is not a part of the final result.

An ASM chart that shows the values of the required control signals for the enhanced divider is depicted in Figure 10.26. The signal ER_0 is used in conjunction with the flip-flop that has the output rr_0 . When $ER_0 = 0$, the value 0 is loaded into the flip-flop. When ER_0 is set to 1, the MSB of shift register A is loaded into the flip-flop. In state $S1$, if $s = 0$, then LR is asserted to initialize R to 0. Registers A and B can be loaded with data from external inputs. When s changes to 1, the machine makes a transition to state $S2$ and at the same time shifts $R||R_0||A$ to the left. In state $S2$, if $c_{out} = 1$, then R is loaded in parallel from the sum outputs of the adder. At the same time, $R_0||A$ is shifted left (rr_0 is not shifted into R in this case). If $c_{out} = 0$, then $R||R_0||A$ is shifted left. The ASM chart shows how the parallel-load and enable inputs on the registers have to be controlled to achieve the desired operation.

The datapath circuit for the enhanced divider is illustrated in Figure 10.27. As discussed for Figure 10.25, the digits of the quotient Q are shifted into register A . Note that one of the n -bit data inputs on the adder module is composed of the $n - 1$ least-significant bits in register R concatenated with bit rr_0 on the right.

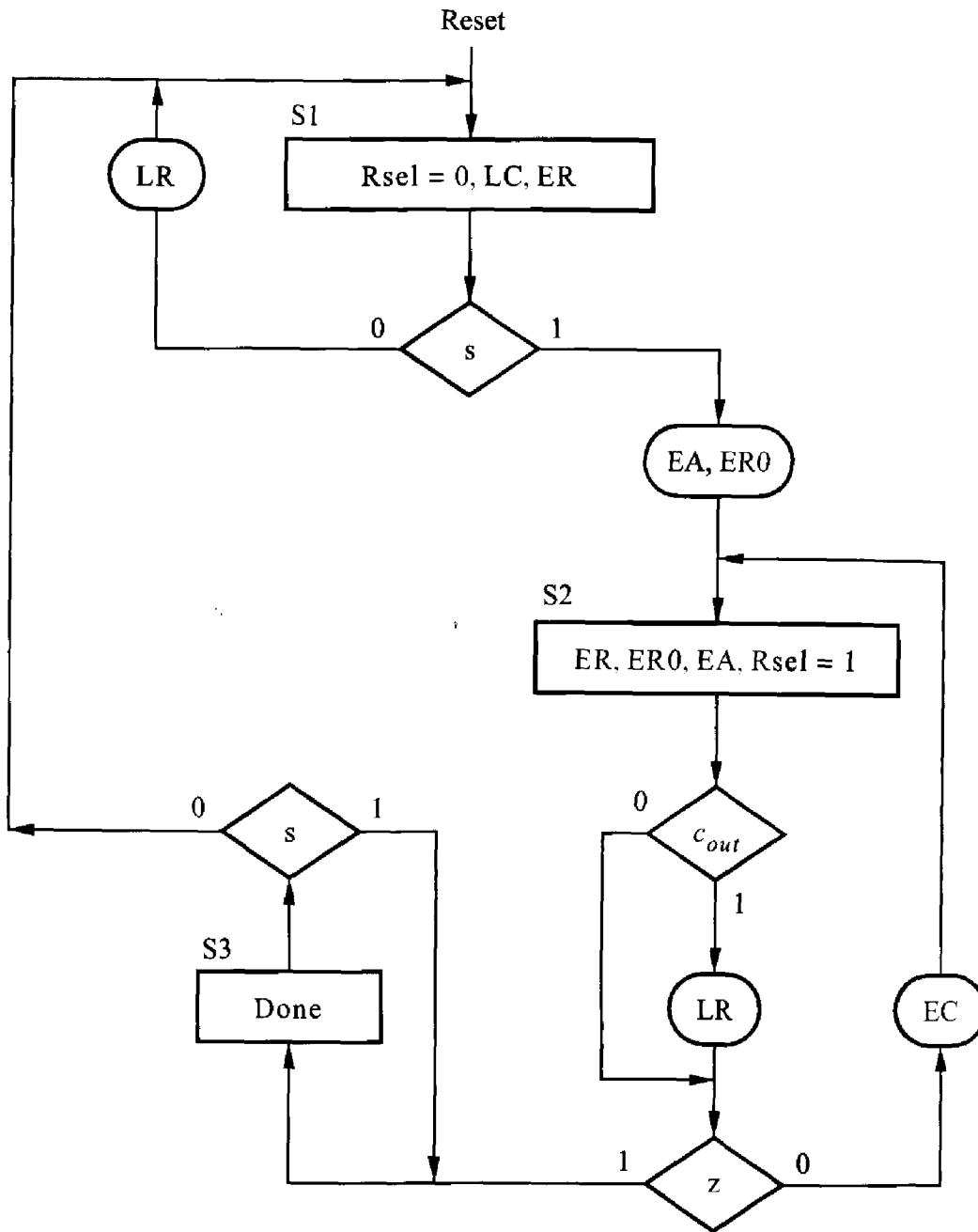


Figure 10.26 ASM chart for the enhanced divider control circuit.

VHDL Code

Figure 10.28 shows VHDL code that represents the enhanced divider. The generic parameter N sets the number of bits in the operands. The *FSM_transitions* and *FSM_outputs* processes describe the control circuit, as in the previous examples. The shift registers and counters in the datapath circuit are instantiated at the bottom of the code. The signal rr_0 in Figure 10.28 is represented in the code by the signal $R0$. This signal is implemented as the output of the *muxdff* component; the code for this subcircuit is shown in Figure 7.48. Note that the adder that produces the *Sum* signal has one input defined as the concatenation of R with $R0$. The multiplexer needed for the input to R is represented by the *DataR* signal. Instead of describing this multiplexer using a FOR GENERATE statement as in the previous examples, we have used the conditional signal assignment shown at the end of the code.

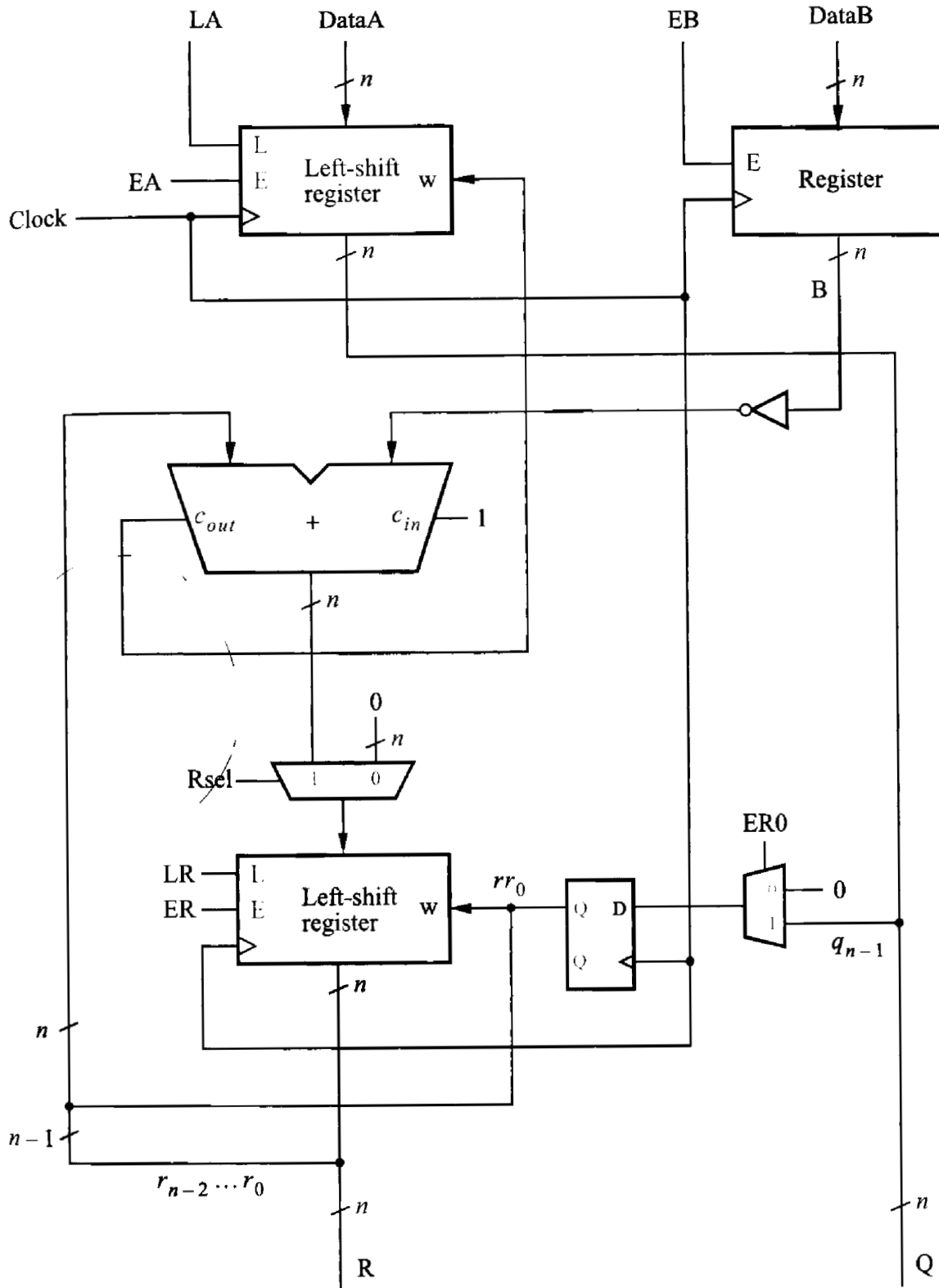


Figure 10.27 Datapath circuit for the enhanced divider.

```

LIBRARY ieee;
USE ieee.std_logic_1164.all;
USE ieee.std_logic_unsigned.all ;
USE work.components.all ;

ENTITY divider IS
    GENERIC ( N : INTEGER := 8 ) ;
    PORT( Clock      : IN      STD.LOGIC ;
          Resetn     : IN      STD.LOGIC ;
          s, LA, EB   : IN      STD.LOGIC ;
          DataA      : IN      STD.LOGIC_VECTOR(N-1 DOWNTO 0);
          DataB      : IN      STD.LOGIC_VECTOR(N-1 DOWNTO 0);
          R, Q       : BUFFER  STD.LOGIC_VECTOR(N-1 DOWNTO 0);
          Done       : OUT     STD.LOGIC );
END divider ;

ARCHITECTURE Behavior OF divider IS
    TYPE State_type IS ( S1, S2, S3 ) ;
    SIGNAL y : State_type ;
    SIGNAL Zero, Cout, z : STD.LOGIC ;
    SIGNAL EA, Rsel, LR, ER, ER0, LC, EC, R0 : STD.LOGIC ;
    SIGNAL A, B, DataR : STD.LOGIC_VECTOR(N-1 DOWNTO 0) ;
    SIGNAL Sum : STD.LOGIC_VECTOR(N DOWNTO 0) ; -- adder outputs
    SIGNAL Count : INTEGER RANGE 0 TO N-1 ;
BEGIN
    FSM_transitions: PROCESS ( Resetn, Clock )
    BEGIN
        IF Resetn = '0' THEN y <= S1 ;
        ELSIF (Clock'EVENT AND Clock = '1') THEN
            CASE y IS
                WHEN S1 =>
                    IF s = '0' THEN y <= S1 ; ELSE y <= S2 ; END IF ;
                WHEN S2 =>
                    IF z = '0' THEN y <= S2 ; ELSE y <= S3 ; END IF ;
                WHEN S3 =>
                    IF s = '1' THEN y <= S3 ; ELSE y <= S1 ; END IF ;
            END CASE ;
        END IF ;
    END PROCESS ;

    ... continued in Part b

```

Figure 10.28 VHDL code for the divider circuit (Part a).

```

FSM_outputs: PROCESS ( s, y, Cout, z )
BEGIN
    LR <= '0' ; ER <= '0' ; ER0 <= '0' ;
    LC <= '0' ; EC <= '0' ; EA <= '0' ; Done <= '0' ;
    Rsel <= '0' ;
    CASE y IS
        WHEN S1 =>
            LC <= '1' ; ER <= '1' ;
            IF s = '0' THEN
                LR <= '1' ; EA <= '0' ; ER0 <= '0' ;
            ELSE
                LR <= '0' ; EA <= '1' ; ER0 <= '1' ;
            END IF ;
        WHEN S2 =>
            Rsel <= '1' ; ER <= '1' ; ER0 <= '1' ; EA <= '1' ;
            IF Cout = '1' THEN LR <= '1' ; ELSE LR <= '0' ; END IF ;
            IF z = '0' THEN EC <= '1' ; ELSE EC <= '0' ; END IF ;
        WHEN S3 =>
            Done <= '1' ;
    END CASE ;
END PROCESS ;
-- define the datapath circuit
Zero <= '0' ;
RegB: regne GENERIC MAP ( N => N )
    PORT MAP ( DataB, Resetn, EB, Clock, B ) ;
ShiftR: shiftlne GENERIC MAP ( N => N )
    PORT MAP ( DataR, LR, ER, R0, Clock, R ) ;
FF_R0: muxdff PORT MAP ( Zero, A(N-1), ER0, Clock, R0 ) ;
ShiftA: shiftlne GENERIC MAP ( N => N )
    PORT MAP ( DataA, LA, EA, Cout, Clock, A ) ;
Q <= A ;
Counter: downcnt GENERIC MAP ( modulus => N )
    PORT MAP ( Clock, EC, LC, Count ) ;
z <= '1' WHEN Count = 0 ELSE '0' ;

Sum <= R & R0 + (NOT B + 1) ;
Cout <= Sum(N) ;
DataR <= (OTHERS => '0') WHEN Rsel = '0' ELSE Sum ;
END Behavior ;

```

Figure 10.28 VHDL code for the divider circuit (Part b).

A simulation result for the circuit produced from the code is given in Figure 10.29. The data $A = A6$ and $B = 8$ is loaded, and then s is set to 1. The circuit changes to state $S2$ and concurrently shifts R , $R0$, and A to the left. The output of the shift register that holds A is labeled Q in the simulation results because this shift register contains the quotient when the division operation is complete. On the first three active clock edges in state $S2$, the number represented by $R||R0$ is less than the number in B (8); hence $R||R0||A$ is shifted left on each clock edge, and 0 is shifted into Q . In the fourth consecutive clock cycle for which the FSM has been in state $S2$, the contents of R are $00000101 = (5)_{10}$, and $R0$ is 0; hence $R||R0 = 000001010 = (10)_{10}$. On the next active clock edge, the output of the adder, which is $10 - 8 = 2$, is loaded into R , and 1 is shifted into Q . After n clock cycles in state $S2$, the circuit changes to state $S3$, and the correct result, $Q = 14 = (20)_{16}$ and $R = 6$, is obtained.

10.2.5 ARITHMETIC MEAN

Assume that k n -bit numbers are stored in a set of registers R_0, \dots, R_{k-1} . We wish to design a circuit that computes the mean M of the numbers in the registers. The pseudo-code for a suitable algorithm is shown in Figure 10.30a. Each iteration of the loop adds the contents of one of the registers, denoted R_i , to a *Sum* variable. After the sum is computed, M is obtained as Sum/k . We assume that integer division is used, so a remainder R , not shown in the code, is produced as well.

An ASM chart is given in Figure 10.30b. While the start input, s , is 0, the registers can be loaded from external inputs. When s becomes 1, the machine changes to state $S2$,

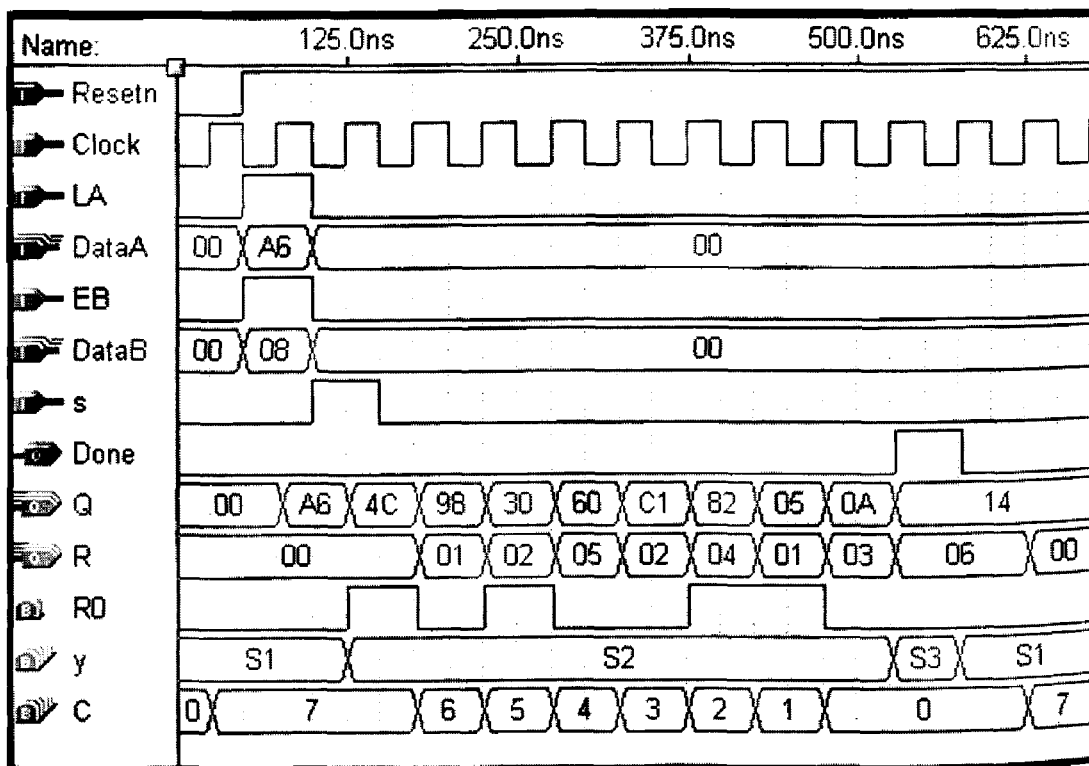


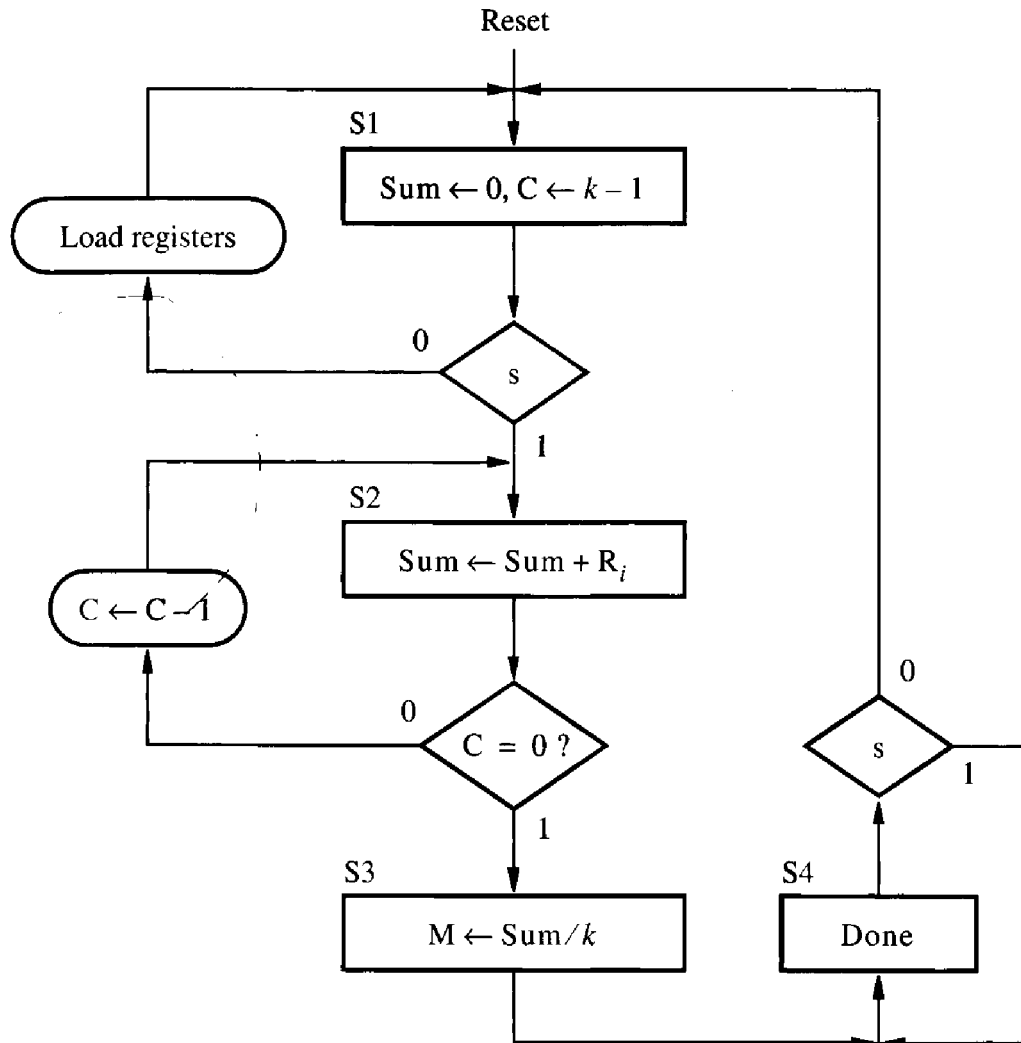
Figure 10.29 Simulation results for the divider circuit.

```

Sum = 0 ;
for i = k - 1 down to 0 do
    Sum = Sum + Ri
end for ;
M = Sum / k ;

```

(a) Pseudo-code



(b) ASM chart

Figure 10.30 An algorithm for finding the mean of k numbers.

where it remains while $C \neq 0$, and computes the summation (C is a counter that represents i in Figure 10.30a). When $C = 0$, the machine changes to state $S3$ and computes $M = \text{Sum}/k$. From the previous example, we know that the division operation requires multiple clock cycles, but we have chosen not to indicate this in the ASM chart. After computing the division operation, state $S4$ is entered and *Done* is set to 1.

Datapath Circuit

The datapath circuit for this task is more complex than in our previous examples. It is depicted in Figure 10.31. We need a register with an enable input to hold *Sum*. For simplicity, assume that the sum can be represented in n bits without overflowing. A multiplexer is required on the data inputs on the *Sum* register, to select 0 in state $S1$ and the sum outputs of an adder in state $S2$. The *Sum* register provides one of the data inputs to the adder. The other input has to be selected from the data outputs of one of the k registers. One way to select among the registers is to connect them to the data inputs of a k -to-1 multiplexer that is connected to the adder. The select lines on the multiplexer can be controlled by the counter C . To compute the division operation, we can use the divider circuit designed in section 10.2.4.

The circuit in Figure 10.31 is based on $k = 4$, but the same circuit structure can be used for larger values of k . Note that the enable inputs on the registers R_0 through R_3 are connected to the outputs of a 2-to-4 decoder that has the two-bit input *RAdd*, which stands for “register address.” The decoder enable input is driven by the *ER* signal. All registers are loaded from the same input lines, *Data*. Since $k = 4$, we could perform the division operation simply by shifting *Sum* two bits to the right, which can be done in one clock cycle with a shift register that shifts by two digits. To obtain a more general circuit that works for any value of k , we use the divider circuit designed in section 10.2.4.

Control Circuit

Figure 10.32 gives an ASM chart for the FSM needed to control the circuit in Figure 10.31. While in state $S1$, data can be loaded into registers R_0, \dots, R_{k-1} . But no control signals have to be asserted for this purpose, because the registers are loaded under control of the *ER* and *RAdd* inputs, as discussed above. When $s = 1$, the FSM changes to state $S2$, where it asserts the enable *ES* on the *Sum* register and allows C to decrement. When the counter reaches 0 ($z = 1$), the machine enters state $S3$, where it asserts the *LA* and *EB* signals to load the *Sum* and k into the *A* and *B* inputs of the divider circuit, respectively. The FSM then enters state $S4$ and asserts the *Div* signal to start the division operation. When it is finished, the divider circuit sets $zz = 1$, and the FSM moves to state $S5$. The mean M appears on the *Q* and *R* outputs of the divider circuit. The *Div* signal must still be asserted in state $S5$ to prevent the divider circuit from reinitializing its registers. Note that in the ASM chart in Figure 10.30b, only one state is shown for computing $M = \text{Sum}/k$, but in Figure 10.32, states $S3$ and $S4$ are used for this purpose. It is possible to combine states $S3$ and $S4$, which we will leave as an exercise for the reader (problem 10.6).

Alternative Datapath Circuits

In Figure 10.31 registers R_0, \dots, R_{k-1} are connected to the adder using a multiplexer. Another way to achieve the desired connection is to add tri-state buffers to the outputs of the k registers and to connect all tri-state buffers for a given bit position to the corresponding

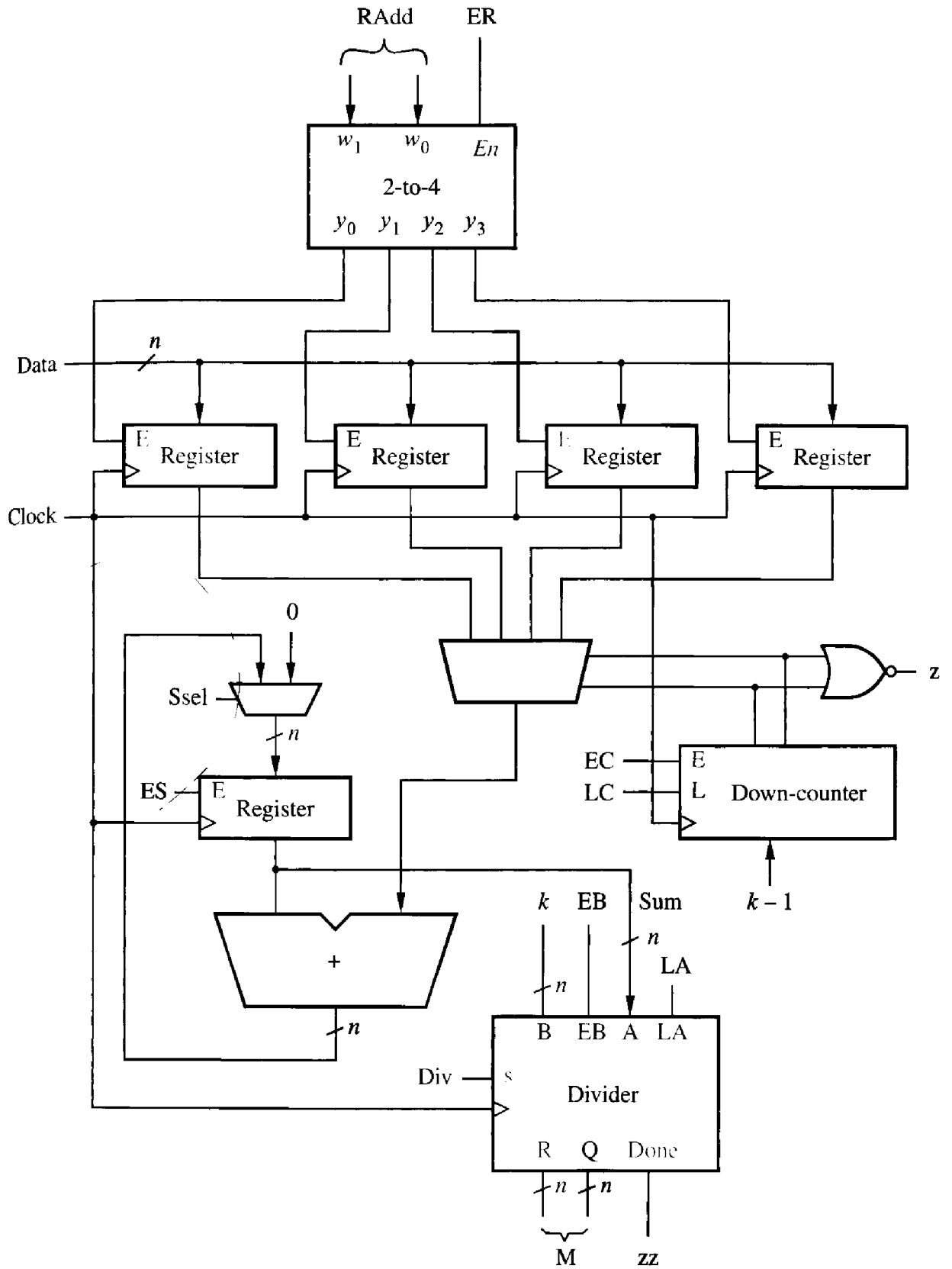


Figure 10.31 Datapath circuit for the mean operation.

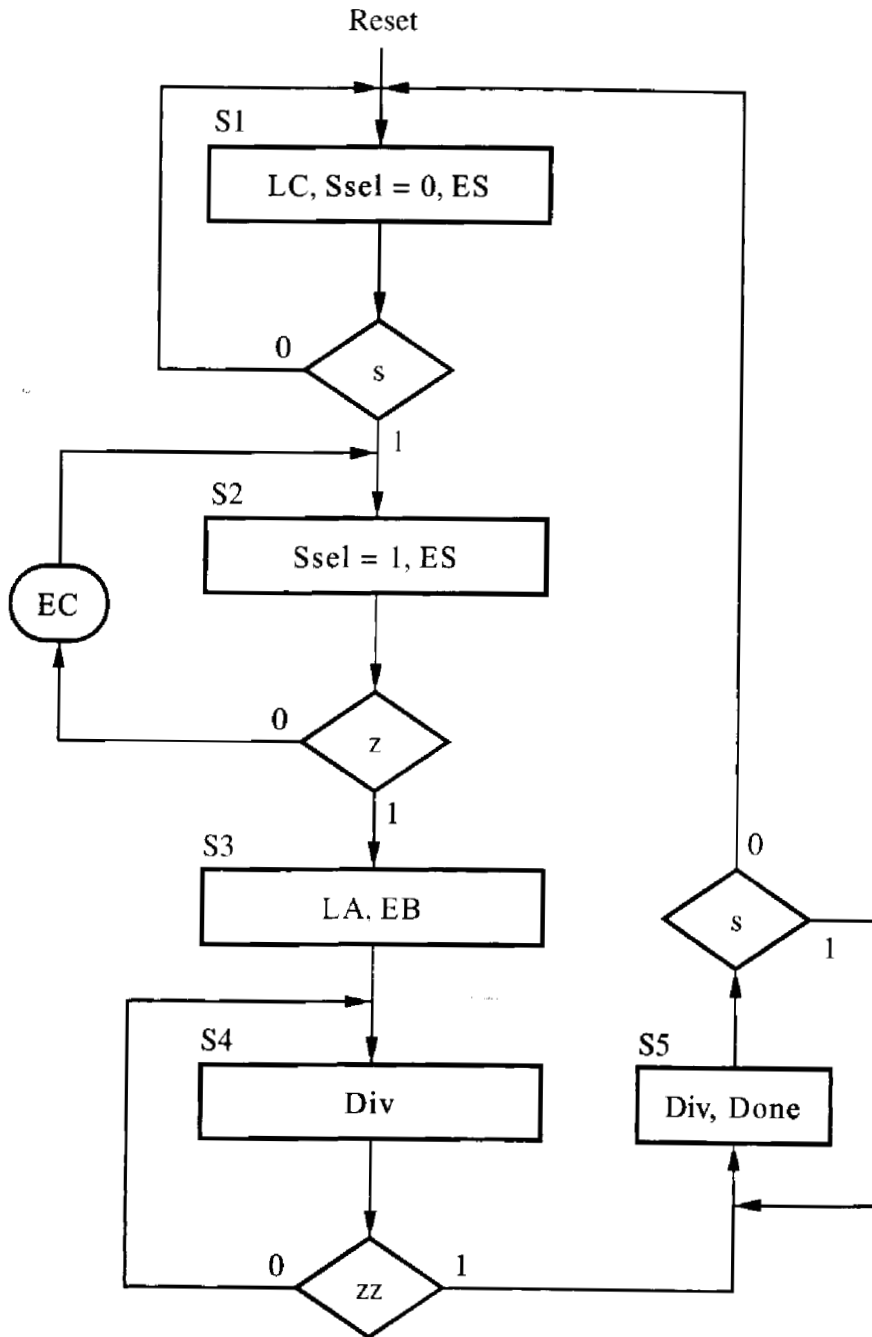


Figure 10.32 ASM chart for the control circuit.

input of the adder. The down-counter C can be used to enable each tri-state buffer at the proper time (when the FSM is in state $S2$), by connecting a 2-to-4 decoder to the outputs of the counter and using one output of the decoder to enable each tri-state buffer. We will show an example of using tri-states buffers in this manner in Figure 10.42.

For large values of k , it is preferable to use an SRAM block with k rows and n columns, instead of using k registers. Predefined modules that represent SRAM blocks are usually provided by CAD tools. If the circuit being designed is to be implemented in a custom chip, then the CAD tools ensure that the desired SRAM block is included on the chip.

Some PLDs include SRAM blocks that can be configured to implement various numbers of rows and columns. The CAD system that accompanies the book provides the *lpm_ram_dq* module, which is a part of the LPM standard library.

Figure 10.33 gives a schematic diagram for the arithmetic mean circuit, using the parameters $k = 16$ and $n = 8$. This schematic was created using the CAD tools that accompany the book. Four of the graphical symbols in the schematic represent subcircuits described using VHDL code, namely *downcnt*, *regne*, *divider*, and *meancntl*. The code for the *divider* subcircuit is shown in Figure 10.28. The *meancntl* subcircuit represents the FSM in Figure 10.32. The VHDL code for this FSM is not shown. The schematic also includes a multiplexer connected to the *Sum* register, an adder, and a NOR gate that detects when the counter *C* reaches 0. The outputs of the counter provide the address inputs to the SRAM block, called *MReg*.

The SRAM block has 16 rows and eight columns. In Figure 10.31 a decoder controls the loading of data into each of the k registers. To read the data from the registers, the counter *C* is used. To keep the schematic in Figure 10.33 simple, we have included the

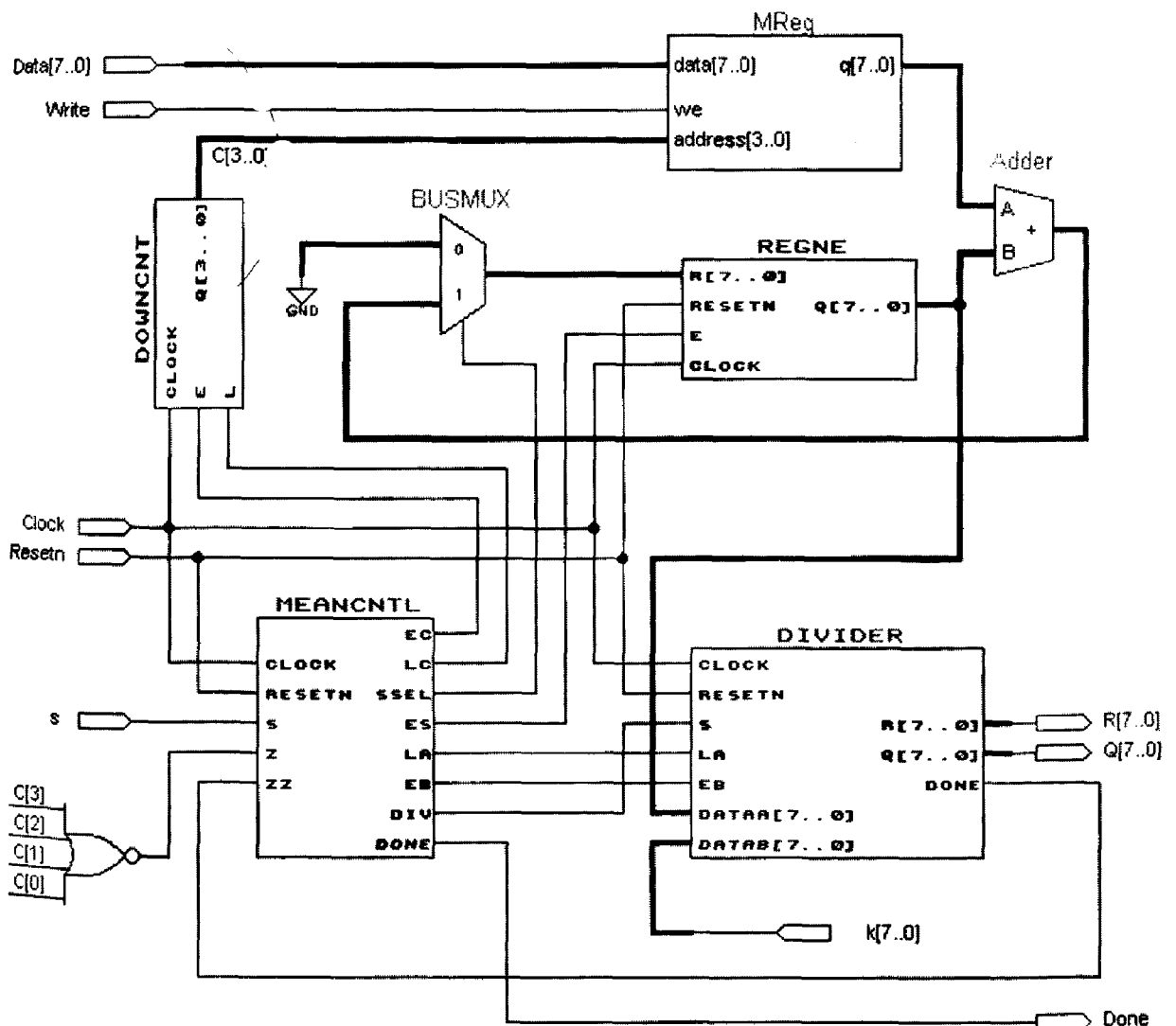


Figure 10.33 Schematic of the mean circuit with an SRAM block.

counter to read data from the SRAM block, but we have ignored the issue of writing data into the SRAM block. It is possible to modify the *meancntl* code to allow the counter *C* to address the SRAM block for loading the initial data, but we will not pursue this issue here.

For simulation purposes we can use a feature of the CAD system that allows initial data to be stored in the SRAM block. We chose to store 0 in R_0 (row 0 of the SRAM block); 1 in R_1, \dots ; and 15 in R_{15} . The results of a timing simulation for the circuit implemented in an FPGA chip are shown in Figure 10.34. Only a part of the simulation, from the point where $C = 5$, is shown in the figure. At this point the *meancntl* FSM is in state *S2*, and the *Sum* is being accumulated. When *C* reaches 0, *Sum* has the correct value, which is $0 + 1 + 2 + \dots + 15 = 120 = (78)_{16}$. The FSM changes to state *S3* for one clock cycle and then remains in state *S4* until the division operation is complete. The correct result, $Q = 7$ and $R = 8$, is obtained when the FSM changes to state *S5*.

10.2.6 SORT OPERATION

Given a list of k unsigned n -bit numbers stored in a set of registers R_0, \dots, R_{k-1} , we wish to design a circuit that can sort the list (contents of the registers) in ascending order. Pseudo-code for a simple sorting algorithm is shown in Figure 10.35. It is based on finding the smallest number in the sublist R_i, \dots, R_{k-1} and moving that number into R_i , for $i = 1, 2, \dots, k - 2$. Each iteration of the outer loop places the number in R_i into *A*. Each iteration of the inner loop compares this number to the contents of another register R_j . If the number in R_j is smaller than *A*, the contents of R_i and R_j are swapped and *A* is changed to hold the new contents of R_i .

An ASM chart that represents the sorting algorithm is shown in Figure 10.36. In the initial state *S1*, while $s = 0$ the registers are loaded from external data inputs and a counter C_i that represents i in the outer loop is cleared. When the machine changes to state *S2*, *A* is loaded with the contents of R_i . Also, C_j , which represents j in the inner loop, is initialized

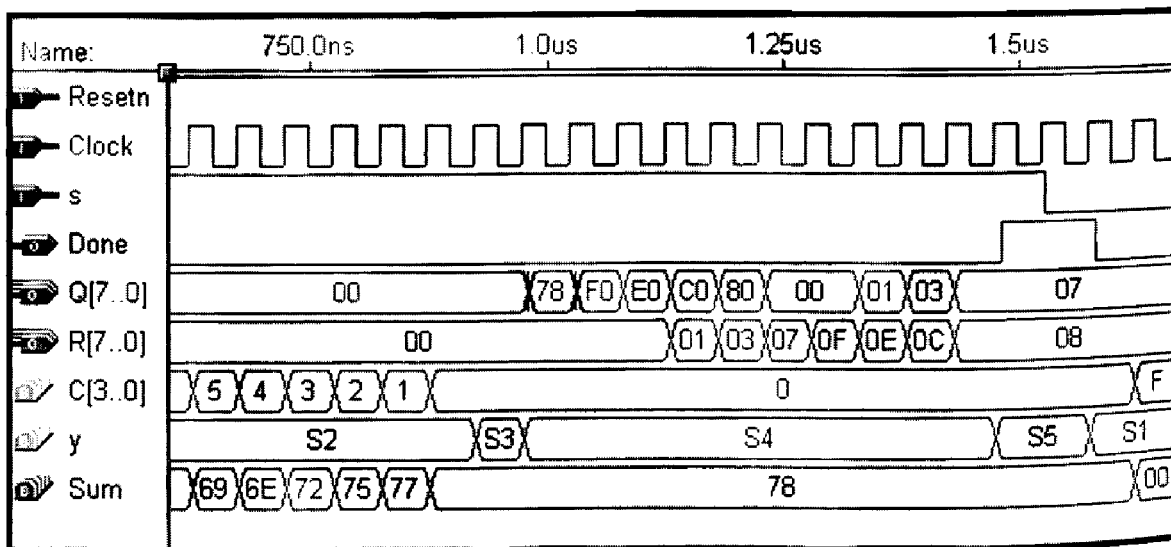


Figure 10.34 Simulation results for the mean circuit using SRAM.

```

for  $i = 0$  to  $k - 2$  do
   $A = R_i$  ;
  for  $j = i + 1$  to  $k - 1$  do
     $B = R_j$  ;
    if  $B < A$  then
       $R_i = B$  ;
       $R_j = A$  ;
       $A = R_i$  ;
    end if ;
  end for ;
end for ;

```

Figure 10.35 Pseudo-code for the sort operation.

to the value of i . State $S3$ is used to initialize j to the value $i + 1$, and state $S4$ loads the value of R_j into B . In state $S5$, A and B are compared, and if $B < A$, the machine moves to state $S6$. States $S6$ and $S7$ swap the values of R_i and R_j . State $S8$ loads A from R_i . Although this step is necessary only for the case where $B < A$, the flow of control is simpler if this operation is performed in both cases. If C_j is not equal to $k - 1$, the machine changes from $S8$ to $S4$, thus remaining in the inner loop. If $C_j = k - 1$ and C_i is not equal to $k - 2$, then the machine stays in the outer loop by changing to state $S2$.

Datapath Circuit

There are many ways to implement a datapath circuit that meets the requirements of the ASM chart in Figure 10.36. One possibility is illustrated in Figures 10.37 and 10.38. Figure 10.37 shows how the registers R_0, \dots, R_{k-1} can be connected to registers A and B using 4-to-1 multiplexers. We assume the value $k = 4$ for simplicity. Registers A and B are connected to a comparator subcircuit and, through multiplexers, back to the inputs of the registers R_0, \dots, R_{k-1} . The registers can be loaded with initial (unsorted) data using the *DataIn* lines. The data is written (loaded) into each register by asserting the *WrInit* control signal and placing the address of the register on the *RAdd* input. The tri-state buffer driven by the *Rd* control signal is used to output the contents of the registers on the *DataOut* output.

The signals Rin_0, \dots, Rin_{k-1} are controlled by the 2-to-4 decoder shown in Figure 10.38. If $Int = 1$, the decoder is driven by one of the counters C_i or C_j . If $Int = 0$, then the decoder is driven by the external input *RAdd*. The signals z_i and z_j are set to 1 if $C_i = k - 2$ and $C_j = k - 1$, respectively. An ASM chart that shows the control signals used in the datapath circuit is given in Figure 10.39.

VHDL Code

VHDL code for the sorting operation is presented in Figure 10.40. Instead of defining separate signals called R_0, \dots, R_3 for the register outputs, we have chosen to specify the registers as an array. This approach allows the registers to be referred to as $R(i)$ in a FOR GENERATE statement that instantiates each register. The array of registers is defined in

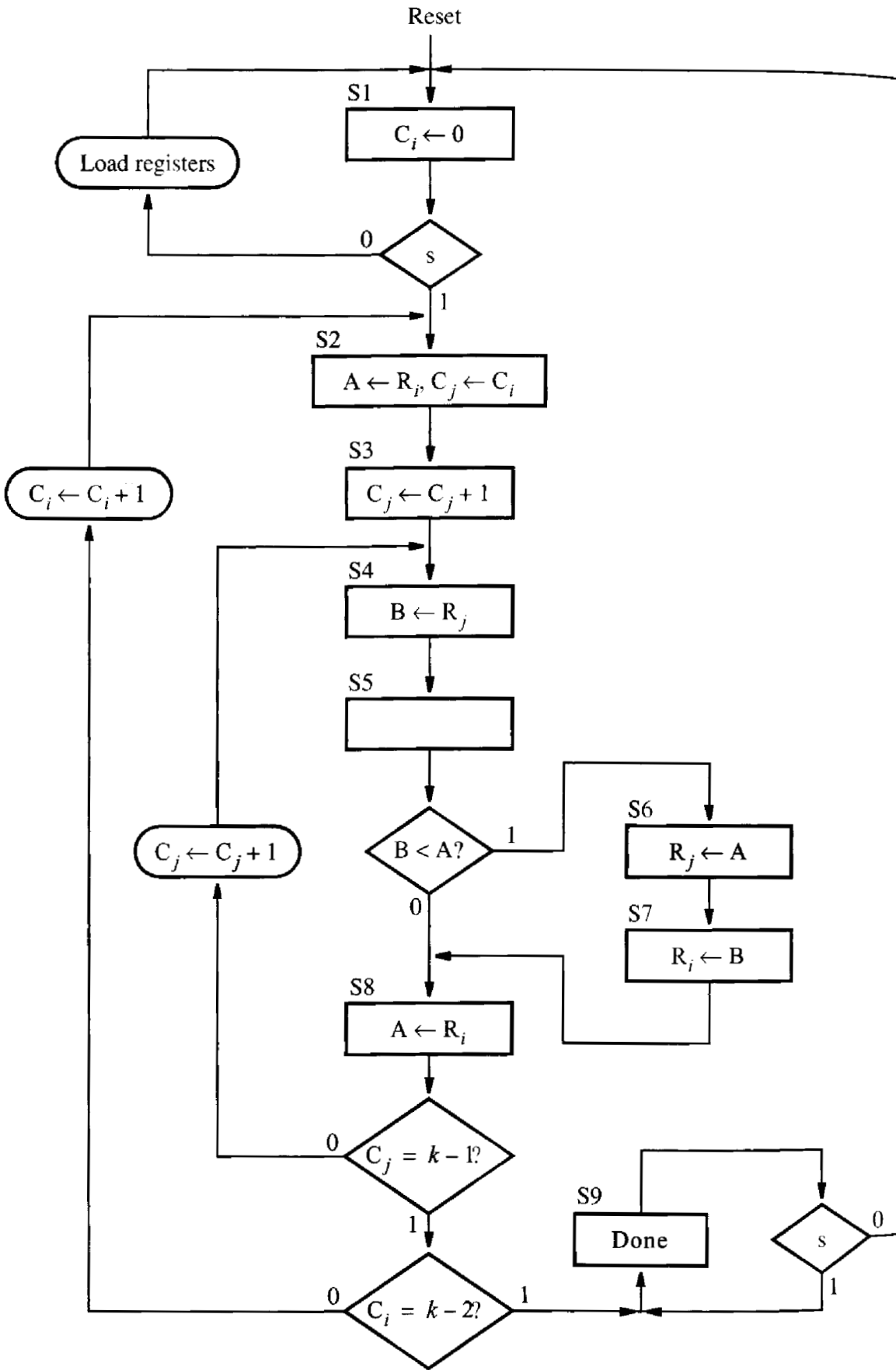


Figure 10.36 ASM chart for the sort operation.

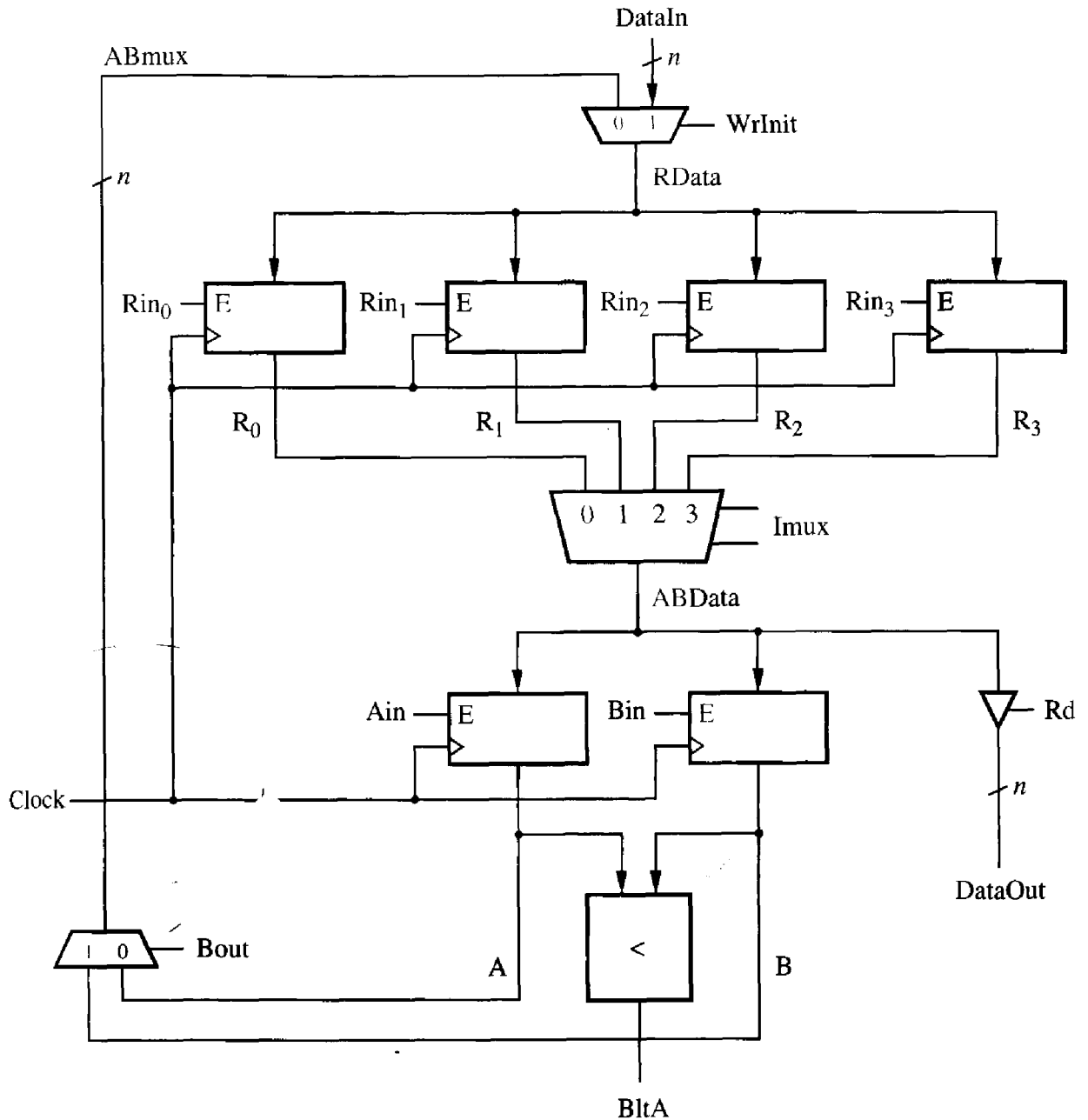


Figure 10.37 A part of the datapath circuit for the sort operation.

two steps. First, a user-defined type, for which we have chosen the name *RegArray*, is defined in the statement

```
TYPE RegArray IS ARRAY(3 DOWNTO 0) OF STD_LOGIC_VECTOR(N-1 DOWNTO 0)
```

This statement specifies that the type *RegArray* represents an array of four *STD_LOGIC_VECTOR* signals. The *STD_LOGIC_VECTOR* type is also defined as an array in the IEEE standard; it is an array of *STD_LOGIC* signals. The *R* signal is defined as an array with four elements of the *RegArray* type.

The FSM that controls the sort operation is described in the same way as in previous examples, using the processes *FSM_transitions* and *FSM_outputs*. Following these pro-

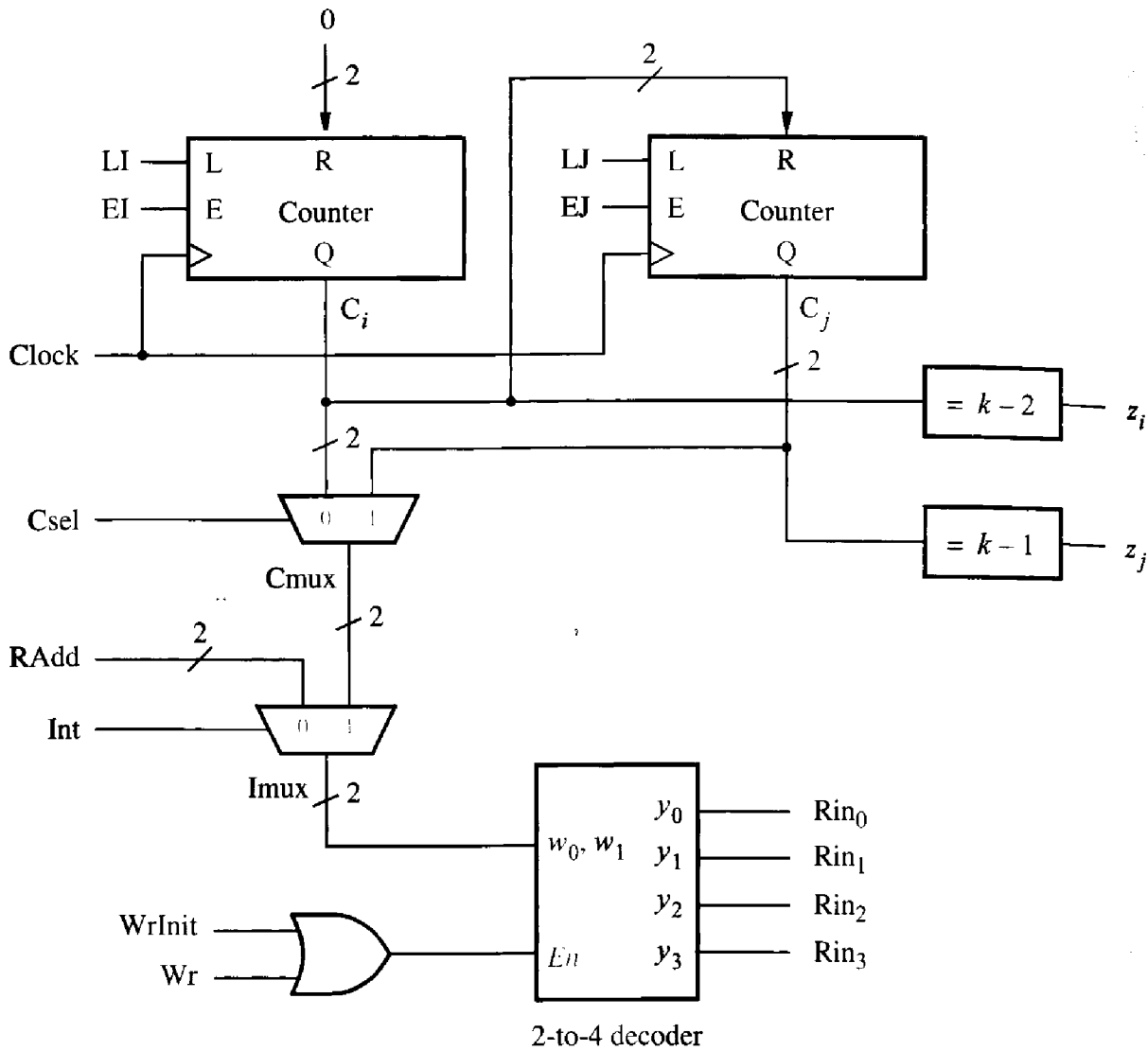


Figure 10.38 A part of the datapath circuit for the sort operation.

cesses, the code instantiates the registers R_0 to R_3 , as well as A and B . The counters C_i and C_j are instantiated by the two statements labeled *OuterLoop* and *InnerLoop*, respectively. The multiplexers with the outputs $CMux$ and $IMux$ are specified using conditional signal assignments. The 4-to-1 multiplexer in Figure 10.37 is defined by the selected signal assignment that specifies the value of the $ABData$ signal for each value of $IMux$. The 2-to-4 decoder in Figure 10.38 with the outputs Rin_0, \dots, Rin_3 is defined by the process statement labeled *RinDec*. Finally, the z_i and z_j signals and the *DataOut* output are specified using conditional signal assignments.

We implemented the code in Figure 10.40 in an FPGA chip. Figure 10.41 gives an example of a simulation result. Part (a) of the figure shows the first half of the simulation, from 0 to $1.25 \mu s$, and part (b) shows the second half, from $1.25 \mu s$ to $2.5 \mu s$. After resetting the circuit, $WrInit$ is set to 1 for four clock cycles, and unsorted data is written into the four registers using the *DataIn* and *RAdd* inputs. After s is changed to 1, the FSM changes to state S_2 . States S_2 to S_4 load A with the contents of R_0 (3) and B with the contents of

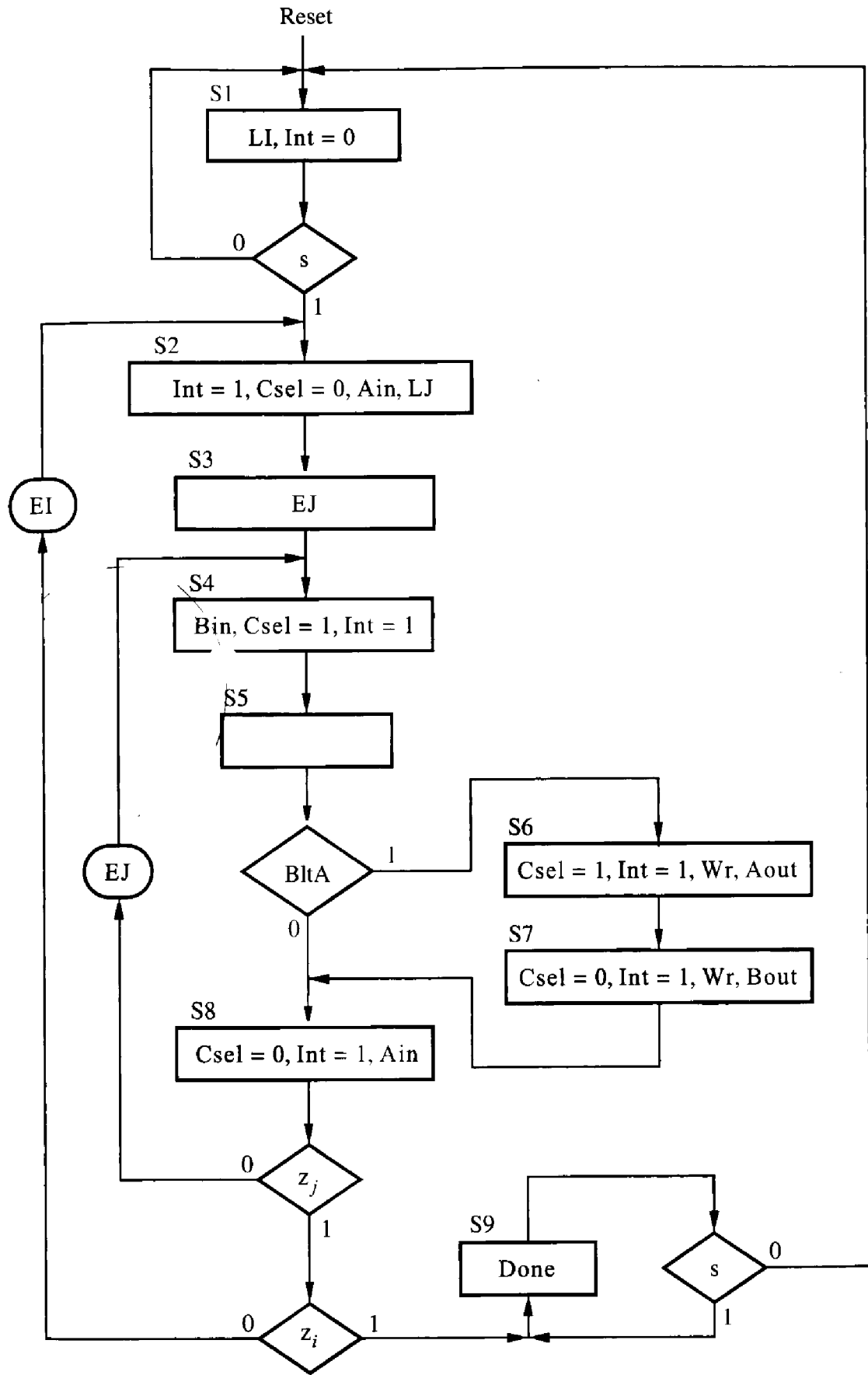


Figure 10.39 ASM chart for the control circuit.

```

LIBRARY ieee;
USE ieee.std_logic_1164.all;
USE work.components.all ;

ENTITY sort IS
    GENERIC ( N : INTEGER := 4 ) ;
    PORT ( Clock, Resetn : IN          STD_LOGIC ;
          s, WrInit, Rd   : IN          STD_LOGIC ;
          DataIn          : IN          STD_LOGIC_VECTOR(N-1 DOWNT0 0)
          RAdd            : IN          INTEGER RANGE 0 TO 3 ;
          DataOut         : BUFFER STD_LOGIC_VECTOR(N-1 DOWNT0 0)
          Done            : BUFFER STD_LOGIC ) ;
END sort ;

ARCHITECTURE Behavior OF sort IS
    TYPE State_type IS ( S1, S2, S3, S4, S5, S6, S7, S8, S9 ) ;
    SIGNAL y : State_type ;
    SIGNAL Ci, Cj : INTEGER RANGE 0 TO 3 ;
    SIGNAL Rin : STD_LOGIC_VECTOR(3 DOWNT0 0) ;
    TYPE RegArray IS
        ARRAY(3 DOWNT0 0) OF STD_LOGIC_VECTOR(N-1 DOWNT0 0) ;
    SIGNAL R : RegArray ;
    SIGNAL RData, ABMux : STD_LOGIC_VECTOR(N-1 DOWNT0 0) ;
    SIGNAL Int, Csel, Wr, BltA : STD_LOGIC ;
    SIGNAL CMux, IMux : INTEGER RANGE 0 TO 3 ;
    SIGNAL Ain, Bin, Aout, Bout : STD_LOGIC ;
    SIGNAL LI, LJ, EI, EJ, zi, zj : STD_LOGIC ;
    SIGNAL Zero : INTEGER RANGE 3 DOWNT0 0 ; -- parallel data for Ci = 0
    SIGNAL A, B, ABData : STD_LOGIC_VECTOR(N-1 DOWNT0 0) ;
BEGIN
    FSM_transitions: PROCESS ( Resetn, Clock )
    BEGIN
        IF Resetn = '0' THEN
            y <= S1 ;
        ELSIF (Clock'EVENT AND Clock = '1') THEN
            CASE y IS
                WHEN S1 => IF S = '0' THEN y <= S1 ;
                            ELSE y <= S2 ; END IF ;
                WHEN S2 => y <= S3 ;
                WHEN S3 => y <= S4 ;
                WHEN S4 => y <= S5 ;
            END CASE ;
        END IF ;
    END PROCESS ;

```

... continued in Part *b*

Figure 10.40 VHDL code for the sort operation (Part *a*).


```

    WHEN S5 => IF BltA = '1' THEN y <= S6 ;
                ELSE y <= S8 ; END IF ;
    WHEN S6 => y <= S7 ;
    WHEN S7 => y <= S8 ;
    WHEN S8 =>
        IF zj = '0' THEN y <= S4 ;
        ELSIF zi = '0' THEN y <= S2 ;
        ELSE y <= S9 ;
        END IF ;
    WHEN S9 => IF s = '1' THEN y <= S9 ; ELSE y <= S1 ; END IF ;
END CASE ;
END IF ;
END PROCESS ;
-- define the outputs generated by the FSM
Int <= '0' WHEN y = S1 ELSE '1' ;
Done <= '1' WHEN y = S9 ELSE '0' ;
FSM_outputs: PROCESS ( y, zi, zj )
BEGIN
    LI <= '0' ; LJ <= '0' ; EI <= '0' ; EJ <= '0' ; Csel <= '0' ;
    Wr <= '0' ; Ain <= '0' ; Bin <= '0' ; Aout <= '0' ; Bout <= '0' ;
    CASE y IS
        WHEN S1 => LI <= '1' ;
        WHEN S2 => Ain <= '1' ; LJ <= '1' ;
        WHEN S3 => EJ <= '1' ;
        WHEN S4 => Bin <= '1' ; Csel <= '1' ;
        WHEN S5 => -- no outputs asserted in this state
        WHEN S6 => Csel <= '1' ; Wr <= '1' ; Aout <= '1' ;
        WHEN S7 => Wr <= '1' ; Bout <= '1' ;
        WHEN S8 => Ain <= '1' ;
            IF zj = '0' THEN
                EJ <= '1' ;
            ELSE
                EJ <= '0' ;
                IF zi = '0' THEN
                    EI <= '1' ;
                ELSE
                    EI <= '0' ;
                END IF ;
            END IF ;
        WHEN S9 => -- Done is assigned 1 by conditional signal assignment
    END CASE ;
END PROCESS ;

```

... continued in Part *c*

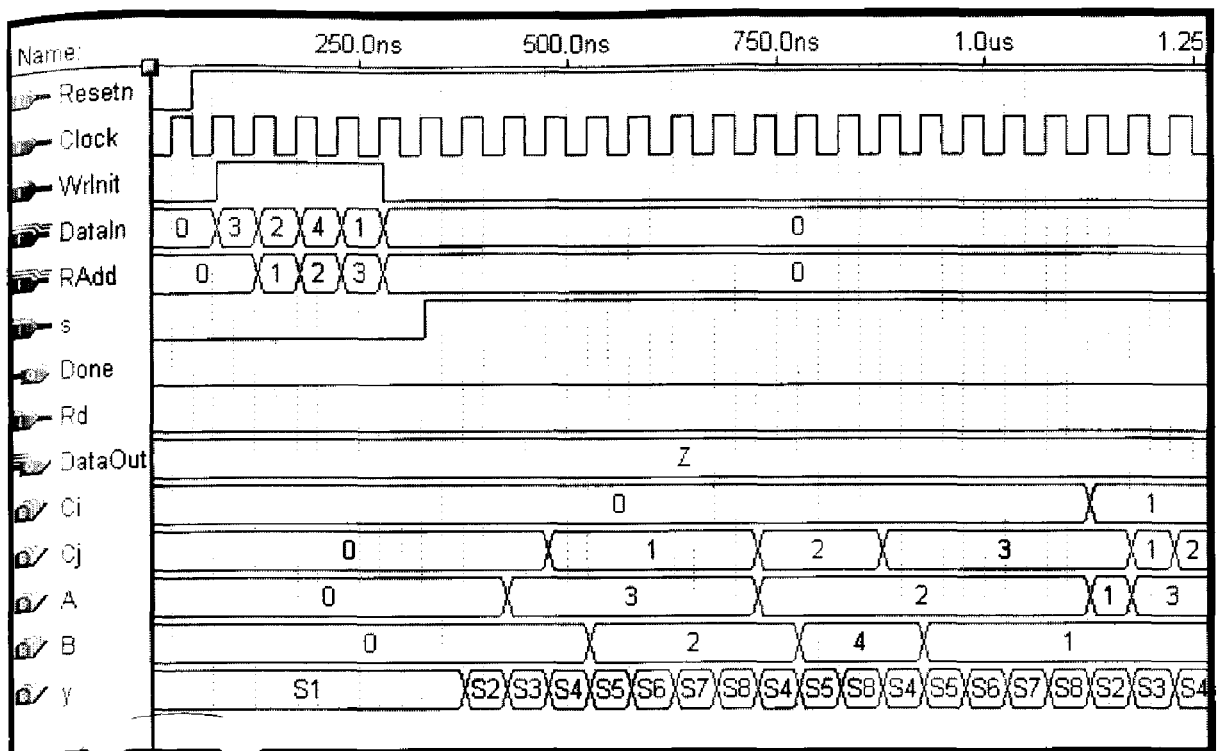
Figure 10.40 VHDL code for the sort operation (Part *b*).

```

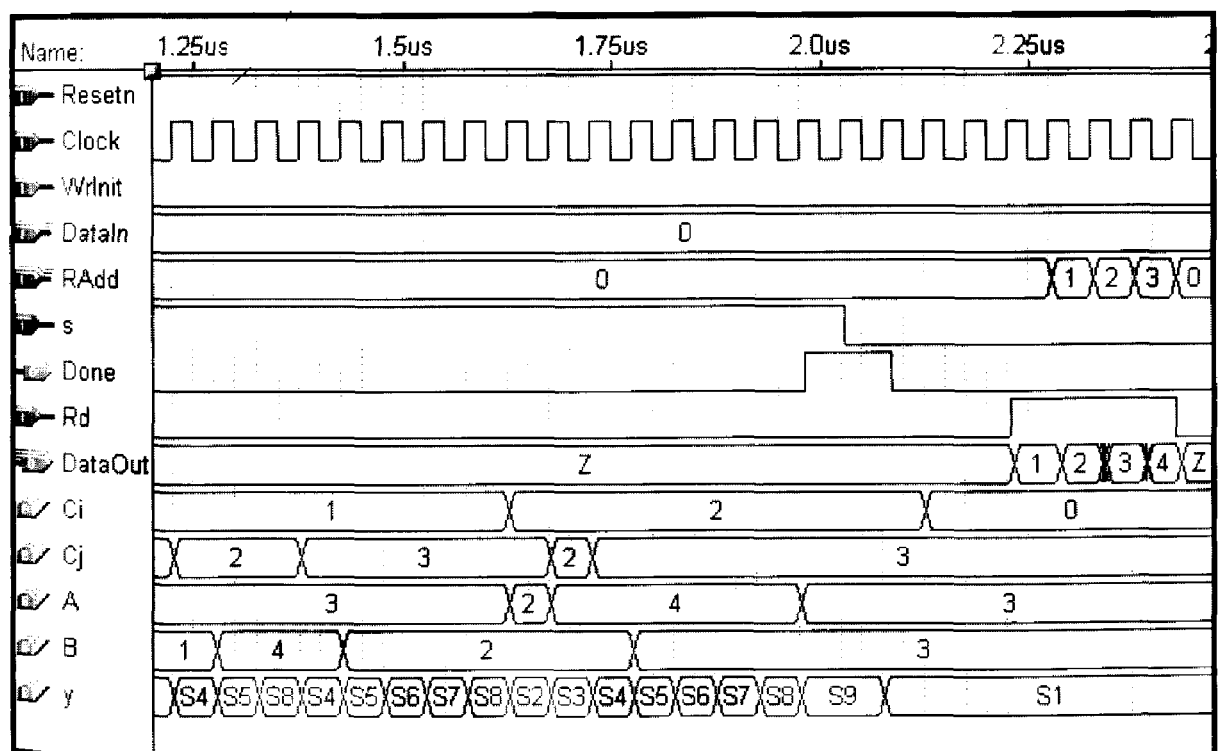
-- define the datapath circuit
Zero <= 0 ;
GenReg: FOR i IN 0 TO 3 GENERATE
    Reg: regne GENERIC MAP ( N => N )
        PORT MAP ( RData, Resetn, Rin(i), Clock, R(i) ) ;
END GENERATE ;
RegA: regne GENERIC MAP ( N => N )
    PORT MAP ( ABData, Resetn, Ain, Clock, A ) ;
RegB: regne GENERIC MAP ( N => N )
    PORT MAP ( ABData, Resetn, Bin, Clock, B ) ;
BltA <= '1' WHEN B < A ELSE '0' ;
ABMux <= A WHEN Bout = '0' ELSE B ;
RData <= ABMux WHEN WrInit = '0' ELSE DataIn ;
OuterLoop: upcount GENERIC MAP ( modulus => 4 )
    PORT MAP ( Resetn, Clock, EI, LI, Zero, Ci ) ;
InnerLoop: upcount GENERIC MAP ( modulus => 4 )
    PORT MAP ( Resetn, Clock, EJ, LJ, Ci, Cj ) ;
CMux <= Ci WHEN Csel = '0' ELSE Cj ;
IMux <= Cmux WHEN Int = '1' ELSE Radd ;
WITH IMux Select
    ABData <= R(0) WHEN 0,
        R(1) WHEN 1,
        R(2) WHEN 2,
        R(3) WHEN OTHERS ;
RinDec: PROCESS ( WrInit, Wr, IMux )
BEGIN
    IF (WrInit OR Wr) = '1' THEN
        CASE IMux IS
            WHEN 0 => Rin <= "0001" ;
            WHEN 1 => Rin <= "0010" ;
            WHEN 2 => Rin <= "0100" ;
            WHEN OTHERS => Rin <= "1000" ;
        END CASE ;
    ELSE Rin <= "0000" ;
    END IF ;
END PROCESS ;
Zi <= '1' WHEN Ci = 2 ELSE '0' ;
Zj <= '1' WHEN Cj = 3 ELSE '0' ;
DataOut <= (OTHERS => 'Z') WHEN Rd = '0' ELSE ABData ;
END Behavior ;

```

Figure 10.40 VHDL code for the sort operation (Part c).



(a) Loading the registers and starting the sort operation



(a) Completing the sort operation and reading the registers

Figure 10.41 Simulation results for the sort operation.

R_1 (2). State $S5$ compares B with A , and since $B < A$, the FSM uses states $S6$ and $S7$ to swap the contents of registers R_0 and R_1 . In state $S8$, A is reloaded from R_0 , which now contains 2. Since z_j is not asserted, the FSM increments the counter C_j and changes back to state $S4$. Register B is now loaded with the contents of R_2 (4), and the FSM changes to state $S5$. Since $B = 4$ is not less than $A = 2$, the machine changes to $S8$ and then back to $S4$. Register B is now loaded with the contents of R_3 (1), which is then compared against $A = 2$ in state $S5$. The contents of R_0 and R_3 are swapped, and the machine changes to $S8$. At this point, the register contents are $R_0 = 1$, $R_1 = 3$, $R_2 = 4$, and $R_3 = 2$. Since $z_j = 1$ and $z_i = 0$, the FSM performs the next iteration of the outer loop by changing to state $S2$. Jumping forward in the simulation time, in Figure 10.41b the circuit reaches the state in which $C_i = 2$, $C_j = 3$, and the FSM is in state $S8$. The FSM then changes to state $S9$ and sets *Done* to the value 1. The correctly sorted data is read out of the registers by setting the signal $Rd = 1$ and using the *RAdd* inputs to select each of the registers.

Alternative Datapath Circuits

In Figure 10.37 we use multiplexers to connect the various registers in the datapath circuit. Another approach is to use tri-state buffers to interconnect the registers, as illustrated in Figure 10.42. As we said in section 7.14, the set of n common wires that connect the registers is called a *bus*. The circuit in Figure 10.42 has two buses, one that connects the outputs of registers R_0, \dots, R_3 to the inputs of registers A and B and another that connects the outputs of A and B back to the inputs of R_0, \dots, R_{k-1} . When multiplexers provide the connection between registers, as shown in Figure 10.37, the term *bus* can still be used to refer to the connection between registers.

The circuit in Figure 10.42 uses the circuit in Figure 10.38 with one modification. In Figure 10.38 the *IMux* signal is connected to a 2-to-4 decoder that generates Rin_0, \dots, Rin_3 . If the circuit in Figure 10.42 is used, then a second decoder connected to *IMux* is required to generate the control signals $Rout_0, \dots, Rout_3$. The control circuit described in the ASM chart in Figure 10.39 can be used for the datapath circuit in Figure 10.42.

We said in section 10.2.5 that for large values of k , it is better to use an SRAM block to store the data, instead of individual registers. The sorting circuit can be changed to make use of an SRAM block with k rows and n columns. In this case the datapath circuit is similar to the one in Figure 10.37, but does not require the 4-to-1 multiplexers, because the data outputs from the SRAM block are connected directly to registers A and B . We still need to use the circuit in Figure 10.38, except that the 2-to-4 decoder is not required, because the *IMux* signal is connected to the address inputs on the SRAM block. The *write* input on the SRAM block is driven by the OR gate with the inputs *WrInit* and *Wr*. VHDL code can be written for the sorting circuit, in which a component that represents the SRAM block is instantiated from a library of predefined modules, or VHDL code is provided such that a CAD tool can infer the need for a memory block. The code for the control circuit shown in Figure 10.40 does not have to be changed (see problem 10.11).

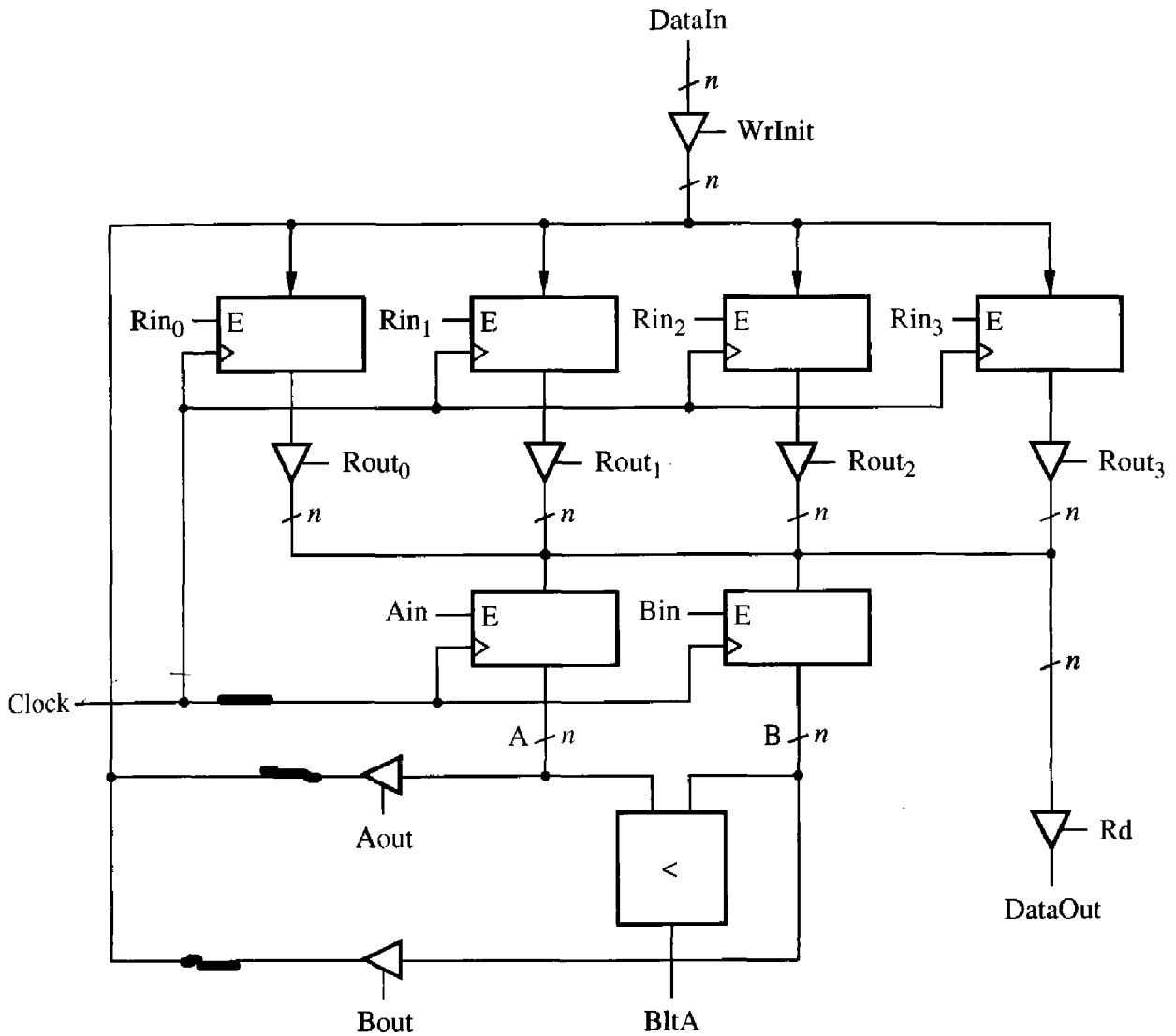


Figure 10.42 Using tri-state buffers in the datapath circuit.

10.3 CLOCK SYNCHRONIZATION

In the previous section we provided several examples of circuits that contain many flip-flops. In Chapter 9 we showed that to ensure proper operation of sequential circuits it is essential to give careful consideration to the timing aspects associated with the storage elements. This section discusses some of the timing aspects of synchronous sequential circuits.

10.3.1 CLOCK SKEW

Figure 10.1 shows how an enable input can be used to prevent a flip-flop from changing its stored value when an active clock edge occurs. Another way to implement the clock enable feature is shown in Figure 10.43. The circuit uses an AND gate to force the clock input to have the value 0 when $E = 0$. This circuit is simpler than the one in Figure 10.1 but can cause problems in practice. Consider a sequential circuit that has many flip-flops, some of which have an enable input and others that do not. If the circuit in Figure 10.43 is used,

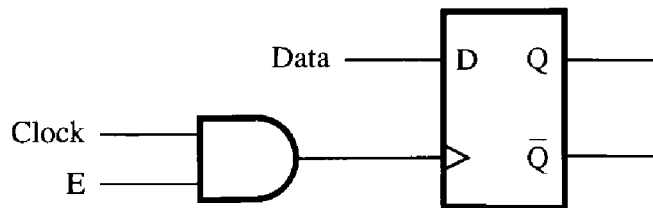


Figure 10.43 Clock enable circuit.

then the flip-flops without the enable input will observe changes in the clock signal slightly earlier than the flip-flops that have the enable input. This situation, in which the clock signal arrives at different times at different flip-flops, is known as *clock skew*. Figure 10.43 shows only one possible source of clock skew. Similar problems arise in a chip in which the clock signal is distributed to different flip-flops by wires whose lengths vary appreciably.

To understand the possible problems caused by clock skew, consider the datapath circuit for the bit-counting example in Figure 10.11. The shift register's LSB, a_0 , is used as a control signal that determines whether or not a counter is incremented. Assume that clock skew exists that causes the clock signal to arrive earlier at the shift-register flip-flops than at the counter. The clock skew may cause the shift register to be shifted *before* the value of a_0 is used to cause the counter to increment. Therefore, the signal EB in Figure 10.11 may fail to cause the counter to be incremented on the proper clock edge even if the value of a_0 is 1.

For proper operation of synchronous sequential circuits, it is essential to minimize the clock skew as much as possible. Chips that contain many flip-flops, such as PLDs, use carefully designed networks of wires to distribute the clock signal to the flip-flops. Figure 10.44 gives an example of a clock-distribution network. Each node labeled *ff* represents the clock input of a flip-flop; for clarity, the flip-flops are not shown. The buffer on the left of the figure produces the clock signal. This signal is distributed to the flip-flops such that the length of the wire between each flip-flop and the clock source is the same. Due to the appearance of sections of the wires, which resemble the letter H, the clock distribution network is known as an *H tree*. In PLDs the term *global clock* refers to the clock network. A PLD chip usually provides one or more global clocks that can be connected to all flip-flops. When designing a circuit to be implemented in such a chip, a good design practice is to connect all the flip-flops in the circuit to a single global clock. Connecting logic gates to the clock inputs of flip-flops, as discussed for the enable circuit in Figure 10.43, should be avoided.

It is useful to be able to ensure that a sequential circuit is reset into a known state when power is first applied to the circuit. A good design practice is to connect the asynchronous reset (clear) inputs of all flip-flops to a wiring network that provides a low-skew reset signal. PLDs usually provide a *global reset* wiring network for this purpose.

10.3.2 FLIP-FLOP TIMING PARAMETERS

We discussed the timing parameters for storage elements in section 7.3.1. Data to be clocked into a flip-flop must be stable t_{su} before the active clock edge and must remain stable t_h after the clock edge. A change in the value of the output Q appears after the *register delay*,

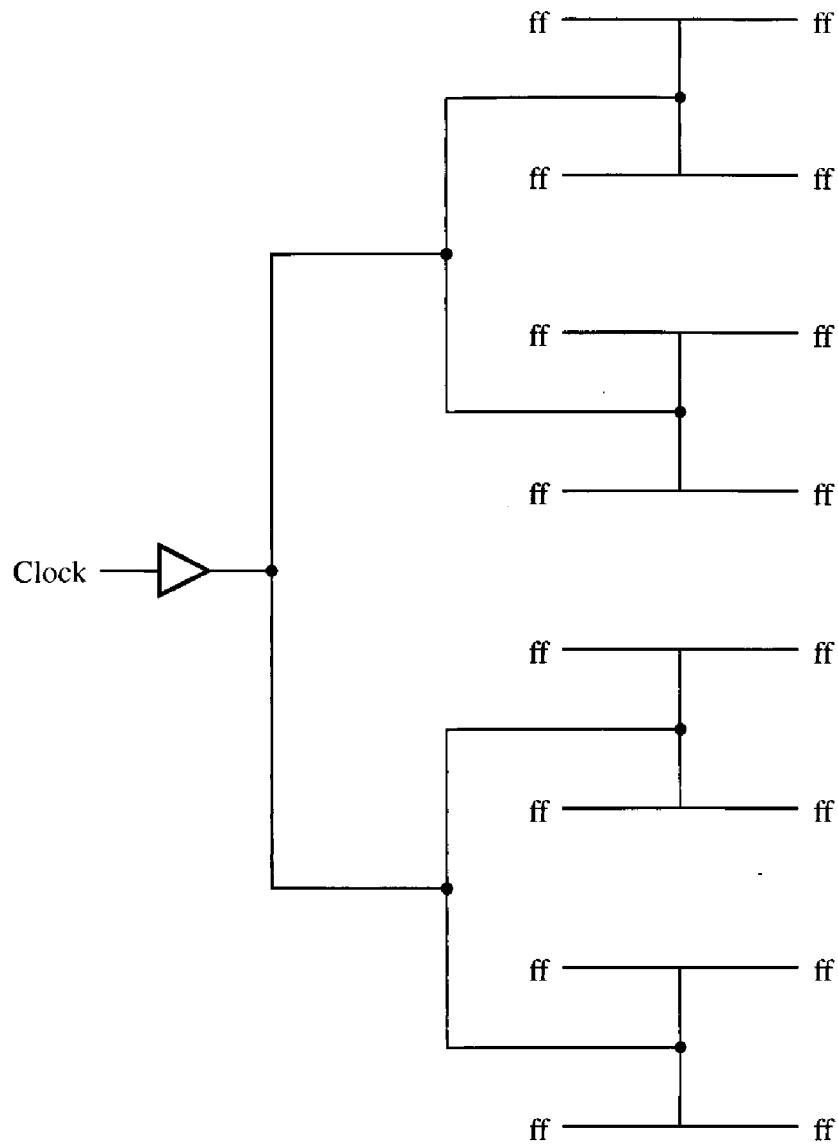


Figure 10.44 An H tree clock distribution network.

t_{rd} . An *output delay time*, t_{od} , is required for the change in Q to propagate to an output pin on the chip. These timing parameters account for the behavior of an individual flip-flop without considering how the flip-flop is connected to other circuitry in an integrated circuit chip.

Figure 10.45 depicts a flip-flop as part of an integrated circuit. Connections are shown from the flip-flop's clock, D, and Q terminals to pins on the chip package. There is an input buffer associated with each pin on the chip. Other circuitry may also be connected to the flip-flop; the shaded box represents a combinational circuit connected to D. The propagation delays between the pins on the chip package and the flip-flop are labeled in the figure as t_{Data} , t_{Clock} , and t_{od} .

In digital systems the output signals from one chip are used as the input signals to another chip. Often the flip-flops in all chips are driven by a common clock that has low skew. The signals must propagate from the Q outputs of flip-flops in one chip to the D inputs of flip-flops in another chip. To ensure that all timing specifications are met, it is necessary to consider the output delays in one chip and the input delays in another.

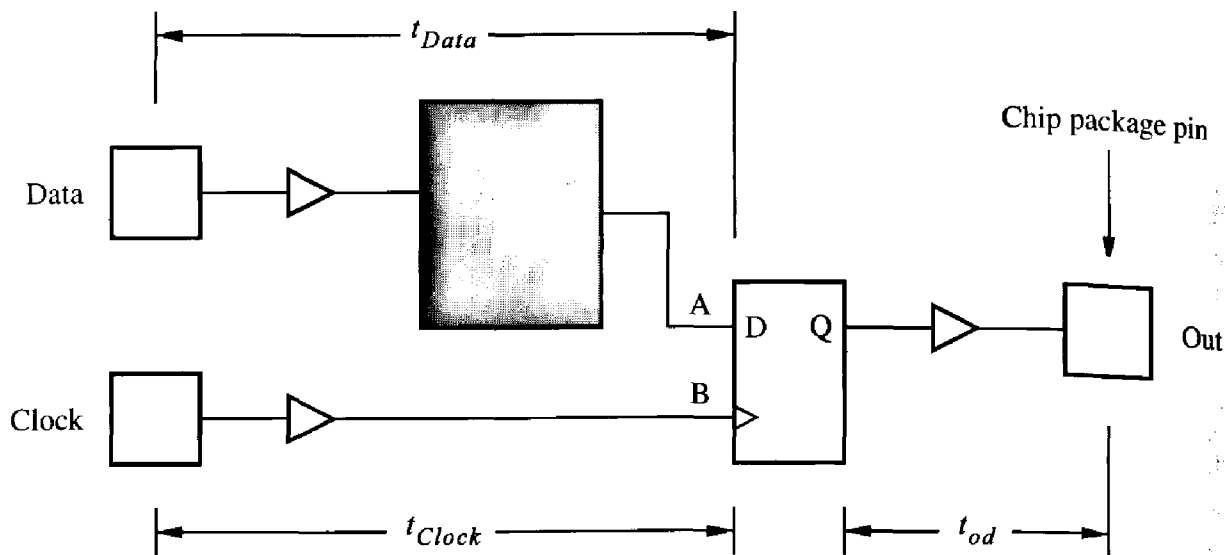


Figure 10.45 A flip-flop in an integrated circuit chip.

The t_{co} delay determines how long it takes from when an active clock edge occurs at the clock pin on the chip package until a change in the output of a flip-flop appears at an output pin on the chip. This delay consists of three main parts. The clock signal must first propagate from its input pin on the chip to the flip-flop's *Clock* input. This delay is labeled t_{Clock} in Figure 10.45. After the register delay t_{rd} , the flip-flop produces a new output, which takes t_{od} to propagate to the output pin. An example of timing parameters taken from a commercial CPLD chip is $t_{Clock} = 1.5$ ns, $t_{rd} = 1$ ns, and $t_{od} = 2$ ns. These parameters give the delay from the active clock edge to the change on the output pin as $t_{co} = 4.5$ ns.

If chips are separated by a large distance, the propagation delays between them must be taken into consideration. But in most cases the distance between chips is small, and the propagation time of signals between the chips is negligible. Once a signal reaches the input pin on a chip, the relative values of t_{Data} and t_{Clock} (see Figure 10.45) must be considered. For example, in Figure 10.46 we assume that $t_{Data} = 4.5$ ns and $t_{Clock} = 1.5$ ns. The setup time for the flip-flops in the chip is specified as $t_{su} = 3$ ns. In the figure the *Data* signal changes from low to high 3 ns before the positive clock edge, which should meet the setup requirements. The *Data* signal takes 4.5 ns to reach the flip-flop, whereas the *Clock* signal

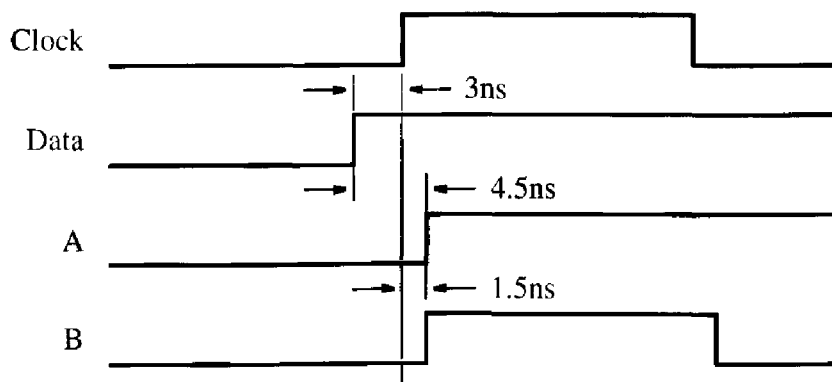


Figure 10.46 Flip-flop timing in a chip.

takes only 1.5 ns. The signal labeled *A* and the clock signal labeled *B* reach the flip-flop at the same time. The setup time requirement is violated, and the flip-flop may become unstable. To avoid this condition, it is necessary to increase the setup time as seen from outside the chip.

The hold time for flip-flops is also affected by chip-level delays. The result is usually a reduction in the hold time, rather than an increase. For example, with the timing parameters in Figure 10.46 assume that the hold time is $t_h = 2$ ns. Assume that the signal at the *Data* pin on the chip changes value at exactly the same time that an active edge occurs at the *Clock* pin. The change in the *Clock* signal will reach node *B* $4.5 - 1.5 = 3$ ns before the change in *Data* reaches node *A*. Hence even though the external change in *Data* is coincident with the clock edge, the required hold time of 2 ns is not violated.

For large circuits, ensuring that flip-flop timing parameters are properly adhered to is a challenge. Both the timing parameters of the flip-flops themselves and the relative delays incurred by the clock and data signals must be considered. CAD systems provide tools that can check the setup and hold times at all flip-flops automatically. This task is done using timing simulation, as well as special-purpose timing-analysis tools.

10.3.3 ASYNCHRONOUS INPUTS TO FLIP-FLOPS

In our examples of synchronous sequential circuits, we have assumed that changes in all input signals occur shortly after an active clock edge. The rationale for this assumption is that the inputs to one circuit are produced as the outputs of another circuit, and the same clock signal is used for both circuits. In practice, some of the inputs to a circuit may be generated asynchronously with respect to the clock signal. If these signals are connected to the *D* input of a flip-flop, then the setup or hold times may be violated.

When a flip-flop's setup or hold times are violated, the flip-flop's output may assume a voltage level that does not correspond to either logic value 0 or 1. We say that the flip-flop is in a *metastable* state. The flip-flop eventually settles in one of the stable states, 0 or 1, but the time required to recover from the metastable state is not predictable. A common approach for dealing with asynchronous inputs is illustrated in Figure 10.47. The asynchronous data input is connected to a two-bit shift register. The output of the first flip-flop, labeled *A* in the figure, will sometimes become metastable. But if the clock period is sufficiently long, then *A* will recover to a stable logic value before the next clock pulse occurs. Hence the output of the second flip-flop will not become metastable and can safely be connected to

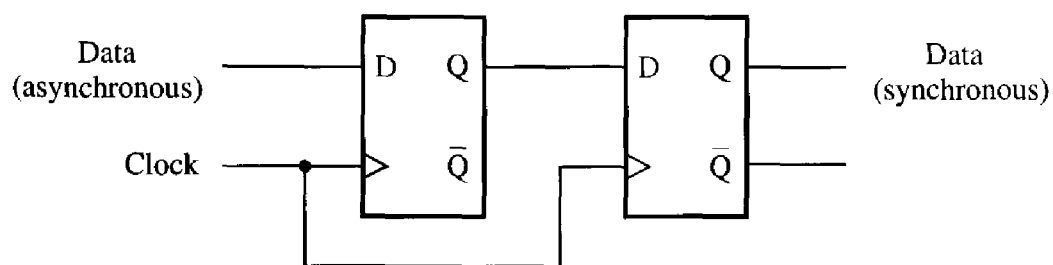


Figure 10.47 Asynchronous inputs.

other parts of the circuit. The synchronization circuit introduces a delay of one clock cycle before the signal can be used by the rest of the circuit.

Commercial chips, such as PLDs, specify the minimum allowable clock period that has to be used for the circuit in Figure 10.47 to solve the metastability problem. In practice, it is not possible to *guarantee* that node *A* will always be stable before a clock edge occurs. The data sheets specify a probability of node *A* being stable, as a function of the clock period. We will not pursue this issue further; the interested reader can refer to references [10, 11] for a more detailed discussion.

10.3.4 SWITCH DEBOUNCING

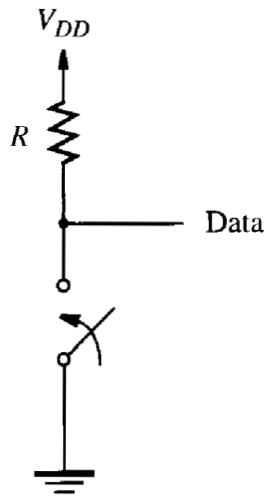
Inputs to a logic circuit are sometimes generated by mechanical switches. A problem with such switches is that they bounce away from their contact points when changed from one position to the other. Figure 10.48*a* shows a single-pole single-throw switch that provides an input to a logic circuit. If the switch is open, then the *Data* signal has the value 1. When the switch is thrown to the closed position, *Data* becomes 0, but the switch bounces for some time, causing *Data* to oscillate between 1 and 0. The bouncing typically persists for about 10 ms.

There is no simple way of dealing with the bouncing problem using the single-pole single-throw switch. If this type of switch must be used, then a possible solution is to use a circuit, such as a counter, to measure an appropriately long delay to wait for the bouncing to stop (see problem 10.23).

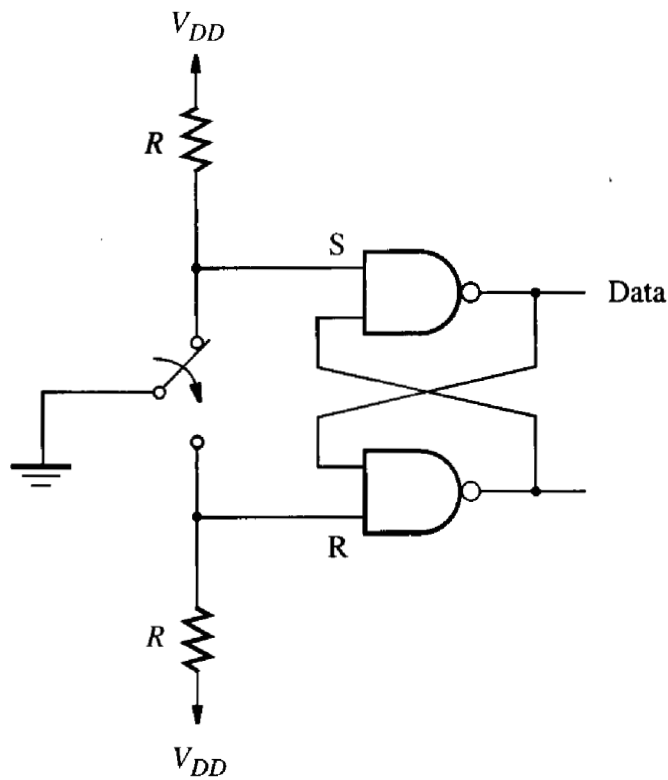
A better approach for dealing with switch bouncing is depicted in Figure 10.48*b*. It uses a single-pole double-throw switch and a basic SR latch to generate an input to a logic circuit. When the switch is in the bottom position, the *R* input on the latch is 0 and *Data* = 0. When the switch is thrown to the top position, the *S* input on the latch becomes 0, which sets *Data* to 1. If the switch bounces away from the top position, the inputs to the latch become $R = S = 1$ and the value $Data = 1$ is stored by the latch. When the switch is thrown to the bottom position, *Data* changes to 0 and this value is stored in the latch if the switch bounces. Note that when a switch bounces, it cannot bounce fully between the *S* and *R* terminals; it only bounces slightly away from one of the terminals and then back to it.

10.4 CONCLUDING REMARKS

This chapter has provided several examples of digital systems that include one or more FSMs as well as building blocks like adders, registers, shift registers, and counters. We have shown how ASM charts can be used as an aid for designing a digital system, and we have shown how the circuits can be described using VHDL code. A number of practical issues have been discussed, such as clock skew, synchronization of asynchronous inputs, and switch debouncing. Some notable books that also cover the material presented in this chapter include [3–10].



(a) Single-pole single-throw switch



(b) Single-pole double-throw switch with a basic SR latch

Figure 10.48 Switch debouncing circuit.

PROBLEMS

- 10.1** The circuit in Figure 10.4 gives a shift register in which the parallel-load control input is independent of the enable input. Show a different shift register circuit in which the parallel-load operation can be performed only when the enable input is also asserted.
- 10.2** The ASM chart in Figure 10.10, which describes the bit-counting circuit, includes Moore-type outputs in states $S1$, $S2$, and $S3$, and it has a Mealy-type output in state $S2$.
- Show how the ASM chart can be modified such that it has only Moore-type outputs in state $S2$.
 - Give the ASM chart for the control circuit corresponding to part (a).
 - Give VHDL code that represents the modified control circuit.
- 10.3** Figure 10.17 shows the datapath circuit for the shift-and-add multiplier. It uses a shift register for B so that b_0 can be used to decide whether or not A should be added to P . A different approach is to use a normal register to hold operand B and to use a counter and multiplexer to select bit b_i in each stage of the multiplication operation.
- Show the ASM chart that uses a normal register for B , instead of a shift register.
 - Show the datapath circuit corresponding to part (a).
 - Give the ASM chart for the control circuit corresponding to part (b).
 - Give VHDL code that represents the multiplier circuit.
- 10.4** Write VHDL code for the divider circuit that has the datapath in Figure 10.23 and the control circuit represented by the ASM chart in Figure 10.24.
- 10.5** Section 10.2.4 shows how to implement the traditional long division that is done by “hand.” A different approach for implementing integer division is to perform repeated subtraction as indicated in the pseudo-code in Figure P10.1.

```

Q = 0 ;
R = A ;
while ((R - B) > 0) do
    R = R - B ;
    Q = Q + 1 ;
end while ;

```

Figure P10.1 Pseudo-code for integer division.

- Give an ASM chart that represents the pseudo-code in Figure P10.1.
- Show the datapath circuit corresponding to part (a).
- Give the ASM chart for the control circuit corresponding to part (b).
- Give VHDL code that represents the divider circuit.
- Discuss the relative merits and drawbacks of your circuit in comparison with the circuit designed in section 10.2.4.

- 10.6** In the ASM chart in Figure 10.32, the two states $S3$ and $S4$ are used to compute the mean $M = Sum/k$. Show a modified ASM chart that combines states $S3$ and $S4$ into a single state, called $S3$.
- 10.7** Write VHDL code for the FSM represented by your ASM chart defined in problem 10.6.
- 10.8** In the ASM chart in Figure 10.36, we specify the assignment $C_j \leftarrow C_i$ in state $S2$, and then in state $S3$ we increment C_j by 1. Is it possible to eliminate state $S3$ if the assignment $C_j \leftarrow C_i + 1$ is performed in $S2$? Explain any implications that this change has on the control and datapath circuits.
- 10.9** Figure 10.35 gives pseudo-code for the sorting operation in which the registers being sorted are indexed using variables i and j . In the ASM chart in Figure 10.36, variables i and j are implemented using the counters C_i and C_j . A different approach is to implement i and j using two shift registers.
- Redesign the circuit for the sorting operation using the shift registers instead of the counters to index registers R_0, \dots, R_3 .
 - Give VHDL code for the circuit designed in part (a).
 - Discuss the relative merits and drawbacks of your circuit in comparison with the circuit that uses the counters C_i and C_j .
- 10.10** Figure 10.42 shows a datapath circuit for the sorting operation that uses tri-state buffers to access the registers. Using a schematic capture tool draw the schematic in Figure 10.42. Create the other necessary subcircuits using VHDL code and create graphical symbols that represent them. Describe the control circuit using VHDL code, create a graphical symbol for it, and connect this symbol to the datapath modules in the schematic. Give a simulation result for your circuit implemented in a chip of your choosing. See Appendices B, C, and D for instructions on using the CAD tools.
- 10.11** Figure 10.40 gives VHDL code for the sorting circuit. Show how to modify this code to make use of a subcircuit that represents a $k \times n$ SRAM block. Use the *lpm_ram_dq* module for the SRAM block. Choose the synchronous SRAM option so that all changes to the SRAM contents are synchronized to the clock signal. (Hint: use the complement of the clock signal to synchronize the SRAM operations because this approach allows the VHDL code for the FSM shown in Figure 10.40 to be used without changes.)
- 10.12** Design a circuit that finds the \log_2 of an operand that is stored in an n -bit register. Show all steps in the design process and state any assumptions made. Give VHDL code that describes your circuit.
- 10.13** Figure 10.33 shows a schematic for the circuit that computes the mean operation. Write VHDL code that represents this circuit. Use an array of registers instead of an SRAM block. For the *divider* subcircuit, use a shift operation that divides by four, instead of using the divider circuit designed in section 10.2.4.
- 10.14** The circuit designed in section 10.2.5 uses an adder to compute the sum of the contents of the registers. The divider subcircuit used to compute $M = Sum/k$ also includes an adder.

Show how the circuit can be redesigned so that it contains only a single adder subcircuit that is used both for the summation operation and the division operation. Show only the extra circuitry needed to connect to the adder; and explain its operation.

- 10.15** Give VHDL code for the circuit designed in problem 10.14, including both the datapath and control circuits.
- 10.16** The pseudo-code for the sorting operation given in Figure 10.35 uses registers A and B to hold the contents of the registers being sorted. Show pseudo-code for the sorting operation that uses only register A to hold temporary data during the sorting operation. Give a corresponding ASM chart that represents the datapath and control circuits needed. Use multiplexers to interconnect the registers, in the style shown in Figure 10.37. Give a separate ASM chart that represents the control circuit.
- 10.17** Give VHDL code for the sorting circuit designed in problem 10.16.
- 10.18** In section 7.14.1 we showed a digital system with three registers, $R1$ to $R3$, and we designed a control circuit that can be used to swap the contents of registers $R1$ and $R2$. Give an ASM chart that represents this digital system and the swap operation.
- 10.19** (a) For the ASM chart derived in problem 10.18, show another ASM chart that specifies the required control signals to control the datapath circuit. Assume that multiplexers are used to implement the bus that connects the registers, as shown in Figure 7.60.
 (b) Write complete VHDL code for the system in problem 10.18, including the control circuit described in part (a).
 (c) Synthesize a circuit from the VHDL code written in part (b) and show a timing simulation that illustrates correct functionality of the circuit.
- 10.20** In section 7.14.2 we gave the design for a circuit that works as a processor. Give an ASM chart that describes the functionality of this processor.
- 10.21** (a) For the ASM chart derived in problem 10.20, show another ASM chart that specifies the required control signals to control the datapath circuit in the processor. Assume that multiplexers are used to implement the bus that connects the registers, $R0$ to $R3$, in the processor.
 (b) Write complete VHDL code for the system in problem 10.20, including the control circuit described in part (a).
 (c) Synthesize a circuit from the VHDL code written in part (b) and show a timing simulation that illustrates correct functionality of the circuit.
- 10.22** Consider the design of a circuit that controls the traffic lights at the intersection of two roads. The circuit generates the outputs $G1$, $Y1$, $R1$ and $G2$, $Y2$, $R2$. These outputs represent the states of the green, yellow, and red lights, respectively, on each road. A light is turned on if the corresponding output signal has the value 1. The lights have to be controlled in the following manner: when $G1$ is turned on it must remain on for a time period called t_1 and then be turned off. Turning off $G1$ must result in $Y1$ being immediately turned on; it should remain on for a time period called t_2 and then be turned off. When either $G1$ or $Y1$ is on, $R2$ must be on and $G2$ and $Y2$ must be off. Turning off $Y1$ must result in $G2$ being immediately turned on for the t_1 time period. When $G2$ is turned off, $Y2$ is turned on for the t_2 time period. Of course, when either $G2$ or $Y2$ is turned on, $R1$ must be turned on and $G1$ and $Y1$ must be off.

(a) Give an ASM chart that describes the traffic-light controller. Assume that two down-counters exist, one that is used to measure the t_1 delay and another that is used to measure t_2 . Each counter has parallel load and enable inputs. These inputs are used to load an appropriate value representing either the t_1 or t_2 delay and then allow the counter to count down to 0.

(b) Give an ASM chart for the control circuit for the traffic-light controller.

(c) Write complete VHDL code for the traffic-light controller, including the control circuit from part (a) and counters to represent t_1 and t_2 . Use any convenient clock frequency to clock the circuit and assume convenient count values to represent t_1 and t_2 . Give simulation results that illustrate the operation of your circuit.

10.23 Assume that you need to use a single-pole single-throw switch as shown in Figure 10.48a. Show how a counter can be used as a means of debouncing the *Data* signal produced by the switch. (Hint: design an FSM that has *Data* as an input and produces the output z , which is the debounced version of *Data*. Assume that you have access to a *Clock* input signal with the frequency 102.4 kHz, which can be used as needed.)

10.24 Clock signals are usually generated using special purpose chips. One example of such a chip is the 555 programmable timer, which is depicted in Figure P10.2. By choosing particular values for the resistors R_a and R_b and the capacitor C_1 , the 555 timer can be used to produce a desired clock signal. It is possible to choose both the period of the clock signal and its duty cycle. The term *duty cycle* refers to the percentage of the clock period for which

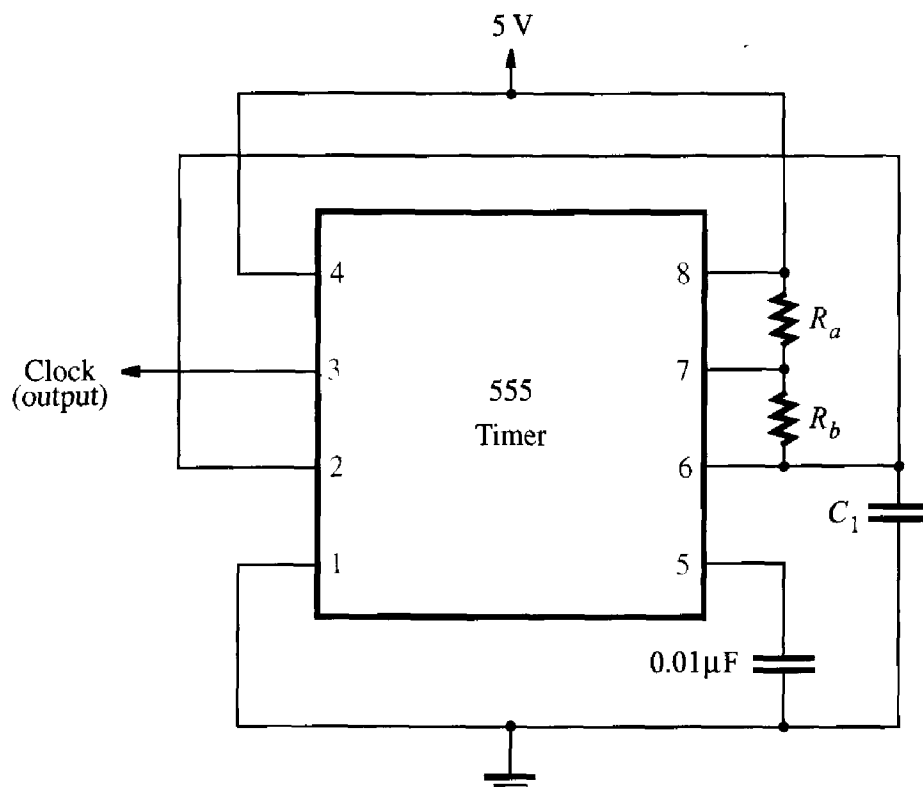


Figure P10.2 The 555 programmable timer chip.

the signal is high. The following equations define the clock signal produced by the chip

$$\text{Clock period} = 0.7(R_a + 2R_b)C_1$$

$$\text{Duty cycle} = \frac{R_a + R_b}{R_a + 2R_b}$$

- (a) Determine the values of R_a , R_b , and C_1 needed to produce a clock signal with a 50 percent duty cycle and a frequency of about 500 kHz.
 (b) Repeat part (a) for a duty cycle of 75 percent.

REFERENCES

1. V. C. Hamacher, Z. G. Vranesic, and S. G. Zaky, *Computer Organization*, 5th ed. (McGraw-Hill: New York, 2002).
2. D. A. Patterson and J. L. Hennessy, *Computer Organization and Design—The Hardware/Software Interface*, 2nd ed. (Morgan Kaufmann: San Francisco, CA, 1998).
3. D. D. Gajski, *Principles of Digital Design* (Prentice-Hall: Upper Saddle River, NJ, 1997).
4. M. M. Mano and C. R. Kime, *Logic and Computer Design Fundamentals* (Prentice-Hall: Upper Saddle River, NJ, 1997).
5. J. P. Daniels, *Digital Design from Zero to One* (Wiley: New York, 1996).
6. V. P. Nelson, H. T. Nagle, B. D. Carroll, and J. D. Irwin, *Digital Logic Circuit Analysis and Design* (Prentice-Hall: Englewood Cliffs, NJ, 1995).
7. R. H. Katz, *Contemporary Logic Design* (Benjamin/Cummings: Redwood City, CA, 1994).
8. J. P. Hayes, *Introduction to Logic Design* (Addison-Wesley: Reading, MA, 1993).
9. C. H. Roth Jr., *Fundamentals of Logic Design*, 4th ed. (West: St. Paul, MN, 1993).
10. J. F. Wakerly, *Digital Design Principles and Practices*, 3rd ed. (Prentice-Hall: Englewood Cliffs, NJ, 1999).
11. C. J. Myers, *Asynchronous Circuit Design*, (Wiley: New York, 2001).

chapter

11

TESTING OF LOGIC CIRCUITS

CHAPTER OBJECTIVES

In this chapter you will be introduced to:

- Various techniques for testing of digital circuits
- Representation of typical faults in a circuit
- Derivation of tests needed to test the behavior of a circuit
- Design of circuits for easy testability

In the previous chapters we have discussed the design of logic circuits. Following a sound design procedure, we expect that the designed circuit will perform as required. But how does one verify that the final circuit indeed achieves the design objectives? It is essential to ascertain that the circuit exhibits the required functional behavior and that it meets any timing constraints that are imposed on the design. We have discussed the timing issues in several places in the book. In this chapter we will discuss some testing techniques that can be used to verify the functionality of a given circuit.

There are several reasons for testing a logic circuit. When the circuit is first developed, it is necessary to verify that the designed circuit meets the required functional and timing specifications. When multiple copies of a correctly designed circuit are being manufactured, it is essential to test each copy to ensure that the manufacturing process has not introduced any flaws. It is also necessary to test circuits used in equipment that is installed in the field when it is suspected that there may be something wrong.

The basis of all testing techniques is to apply predefined sets of inputs, called *tests*, to a circuit and compare the outputs observed with the patterns that a correctly functioning circuit is supposed to produce. The challenge is to derive a relatively small number of tests that provide an adequate indication that the circuit is correct. The exhaustive approach of applying all possible tests is impractical for large circuits because there are too many possible tests.

11.1 FAULT MODEL

A circuit functions incorrectly when there is something wrong with it, such as a transistor fault or an interconnection wiring fault. Many things can go wrong, leading to a variety of faults. A transistor switch can break so that it is permanently either closed or open. A wire in the circuit can be shorted to V_{DD} or to ground, or it can be simply broken. There can be an unwanted connection between two wires. A logic gate may generate a wrong output signal because of a fault in the circuitry that implements the gate. Dealing with many different types of faults is cumbersome. Fortunately, it is possible to restrict the testing process to some simple faults, and obtain generally satisfactory results.

11.1.1 STUCK-AT MODEL

Most circuits discussed in this text use logic gates as the basic building blocks. A good model for representing faults in such circuits is to assume that all faults manifest themselves as some wires (inputs or outputs of gates) being permanently stuck at logic value 0 or 1. We indicate that a wire, w , has an undesirable signal that always corresponds to the logic value 0 by saying that w is *stuck-at-0*, which is denoted as $w/0$. If w has an undesirable signal that is always equal to logic 1, then w is *stuck-at-1*, which is denoted as $w/1$.

An obvious example of a stuck-at fault is when an input to a gate is incorrectly connected to a power supply, either V_{DD} or ground. But the stuck-at model is also useful for dealing with faults of other types, which often cause the same problems as if a wire were stuck at a particular logic value. The exact impact of a fault in the circuitry that implements a logic gate depends on the particular technology used. We will restrict our attention to the stuck-at faults and will examine the testing process assuming that these are the only faults that can occur.

11.1.2 SINGLE AND MULTIPLE FAULTS

A circuit can be faulty because it has either a single fault or possibly many faults. Dealing with multiple faults is difficult because each fault can occur in many different ways. A pragmatic approach is to consider single faults only. Practice has shown that a set of tests that can detect all single faults in a given circuit can also detect the vast majority of multiple faults.

A fault is detected if the output value produced by the faulty circuit is different from the value produced by the good circuit when an appropriate test is applied as input. Each test is supposed to be able to detect the occurrence of one or more faults. A complete set of tests used for a given circuit is referred to as the *test set*.

11.1.3 CMOS CIRCUITS

CMOS logic circuits present some special problems in terms of faulty behavior. The transistors may fail in permanently open or shorted (closed) state. Many such failures manifest themselves as stuck-at faults. But some produce entirely different behavior. For example, transistors that fail in the shorted state may cause a continuous flow of current from V_{DD} to ground, which can create an intermediate output voltage that may not be determined as either logic 0 or 1. Transistors failing in the open state may lead to conditions where the output capacitor retains its charge level because the switch that is supposed to discharge it is broken. The effect is that a combinational CMOS circuit starts behaving as a sequential circuit.

Specific techniques for testing of CMOS circuits are beyond the scope of this book. An introductory discussion of this topic can be found in references [1–3]. Testing of CMOS circuits has been the subject of considerable research [4–6]. We will assume that a test set developed using the stuck-at model will provide an adequate coverage of faults in all circuits.

11.2 COMPLEXITY OF A TEST SET

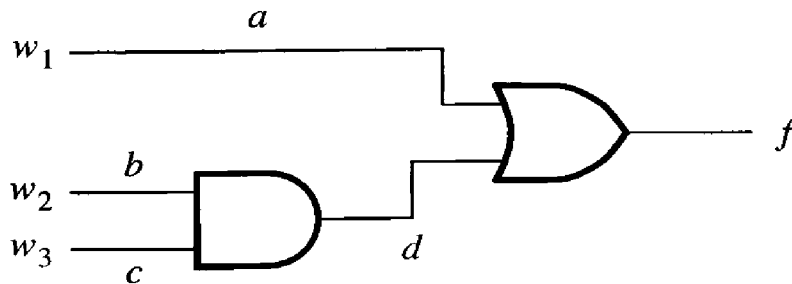
There is large difference in testing combinational and sequential circuits. Combinational circuits can be tested adequately regardless of their design. Sequential circuits present a much greater challenge because the behavior of a circuit under test is influenced not only by the tests that are applied to the external inputs but also by the states that the circuit is in when the tests are applied. It is very difficult to test a sequential circuit designed by a designer who does not take its testability into account. However, it is possible to design such circuits to make them more easily testable, as we will discuss in section 11.6. We will start by considering the testing of combinational circuits.

An obvious way to test a combinational circuit is to apply a test set that comprises all possible input valuations. Then it is only necessary to check if the output values produced by the circuit are the same as specified in a truth table that defines the circuit. This approach works well for small circuits, where the test set is not large, but it becomes totally impractical

for large circuits with many input variables. Fortunately, it is not necessary to apply all 2^n valuations as tests for an n -input circuit. A complete test set, capable of detecting all single faults, usually comprises a much smaller number of tests.

Figure 11.1a gives a simple three-input circuit for which we want to determine the smallest test set. An exhaustive test set would include all eight input valuations. This circuit involves five wires, labeled $a, b, c, d,$ and f in the figure. Using our fault model, each wire can be stuck either at 0 or 1.

Figure 11.1b enumerates the utility of the eight input valuations as possible tests for the circuit. The valuation $w_1w_2w_3 = 000$ can detect the occurrence of a stuck-at-1 fault on wires $a, d,$ and f . In a good circuit this test results in the output $f = 0$. However, if any of the faults $a/1, d/1,$ or $f/1$ occurs, then the circuit will produce $f = 1$ when the input valuation 000 is applied. The test 001 causes $f = 0$ in the good circuit, and it results in



(a) Circuit

Test $w_1w_2w_3$	Fault detected									
	$a/0$	$a/1$	$b/0$	$b/1$	$c/0$	$c/1$	$d/0$	$d/1$	$f/0$	$f/1$
000		✓						✓		✓
001		✓		✓				✓		✓
010		✓				✓		✓		✓
011			✓		✓		✓		✓	
100	✓								✓	
101	✓								✓	
110	✓								✓	
111									✓	

(b) Faults detected by the various input valuations

Figure 11.1 Fault detection in a simple circuit.

$f = 1$ if any of the faults $a/1$, $b/1$, $d/1$, or $f/1$ occurs. This test can detect the occurrence of four different faults. We say that it *covers* these faults. The last test, 111, can detect only one fault, $f/0$.

A minimal test set that covers all faults in the circuit can be derived from the table by inspection. Some faults are covered by only one test, which means that these tests must be included in the test set. The fault $b/1$ is covered only by 001. The fault $c/1$ is covered only by 010. The faults $b/0$, $c/0$, and $d/0$ are covered only by 011. Therefore, these three tests are essential. For the remaining faults there is a choice of tests that can be used. Selecting the tests 001, 010, and 011 covers all faults except $a/0$. This fault can be covered by three different tests. Choosing 100 arbitrarily, a complete test set for the circuit is

$$\text{Test set} = \{001, 010, 011, 100\}$$

The conclusion is that all possible stuck-at faults in this circuit can be detected using four tests, rather than the eight tests that would be used if we simply tried to test the circuit using its complete truth table.

The size of the complete test set for a given n -input circuit is generally much smaller than 2^n . But this size may still be unacceptably large in practical terms. Moreover, deriving the minimal test set is likely to be a daunting task for even moderately sized circuits. Certainly, the simple approach of Figure 11.1 is not practical. In the next section we will explore a more interesting approach.

11.3 PATH SENSITIZING

Deriving a test set by considering the individual faults on all wires in a circuit, as done in section 11.2, is not attractive from the practical point of view. There are too many wires and too many faults to consider. A better alternative is to deal with several wires that form a path as an entity that can be tested for several faults using a single test. It is possible to activate a path so that the changes in the signal that propagates along the path have a direct impact on the output signal.

Figure 11.2 illustrates a path from input w_1 to output f , through three gates, which consists of wires a , b , c , and f . The path is activated by ensuring that other paths in the circuit do not determine the value of the output f . Thus the input w_2 must be set to 1 so that the signal at b depends only on the value at a . The input w_3 must be 0 so that it does

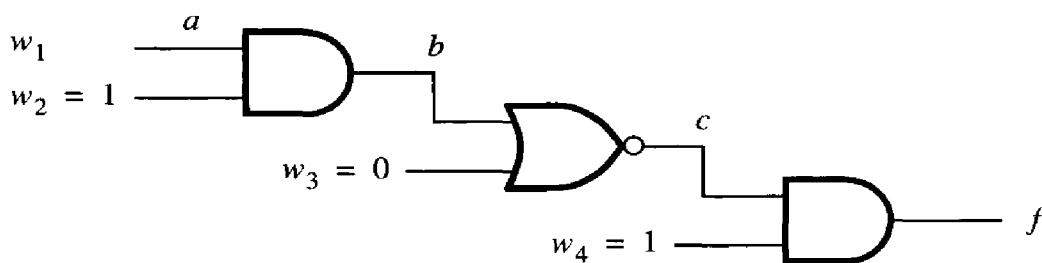


Figure 11.2 A sensitized path.

not affect the NOR gate, and w_4 must be 1 to not affect the AND gate. Then if $w_1 = 0$ the output will be $f = 1$, whereas $w_1 = 1$ will cause $f = 0$. Instead of saying that the path from w_1 to f is activated, a more specific term is used in technical literature, which says that the path is *sensitized*.

To sensitize a path through an input of an AND or NAND gate, all other inputs must be set to 1. To sensitize a path through an input of an OR or NOR gate, all other inputs must be 0.

Consider now the effect of faults along a sensitized path. The fault $a/0$ in Figure 11.2 will cause $f = 1$ even if $w_1 = 1$. The same effect occurs if the faults $b/0$ or $c/1$ are present. Thus the test $w_1w_2w_3w_4 = 1101$ detects the occurrence of faults $a/0$, $b/0$, and $c/1$. Similarly, if $w_1 = 0$, the output should be $f = 1$. But if any of the faults $a/1$, $b/1$, or $c/0$ is present, the output will be $f = 0$. Hence these three faults are detectable using the test 0101. The presence of any stuck-at fault along the sensitized path is detectable by applying only two tests.

The number of paths in a given circuit is likely to be much smaller than the number of individual wires. This suggests that it may be attractive to derive a test set based on the sensitized paths. This possibility is illustrated in the next example.

1 PATH-SENSITIZED TESTS Consider the circuit in Figure 11.3. This circuit has five paths. The path $w_1 - c - f$ is sensitized by setting $w_2 = 1$ and $w_4 = 0$. It doesn't matter whether w_3 is 0 or 1, because $w_2 = 1$ causes the signal on wire b to be equal to 0, which forces $d = 0$ regardless of the value of w_3 . Thus the path is sensitized by setting $w_2w_3w_4 = 1x0$, where the symbol x means that the value of w_3 does not matter. Now the tests $w_1w_2w_3w_4 = 01x0$ and $11x0$ detect all faults along this path. The second path, $w_2 - c - f$, is tested using 1000 and 1100. The path $w_2 - b - d - f$ is tested using 0010 and 0110. The tests for the path $w_3 - d - f$ are $x000$ and $x010$. The fifth path, $w_4 - f$, is tested with $0x00$ and $0x01$. Instead of using all ten of these tests, we can observe that the test 0110 serves also as the test 01x0, the test 1100 serves also as 11x0, the test 1000 serves also as x000, and the test 0010 serves also as x010. Therefore, the complete test set is

$$\text{Test set} = \{0110, 1100, 1000, 0010, 0x00, 0x01\}$$

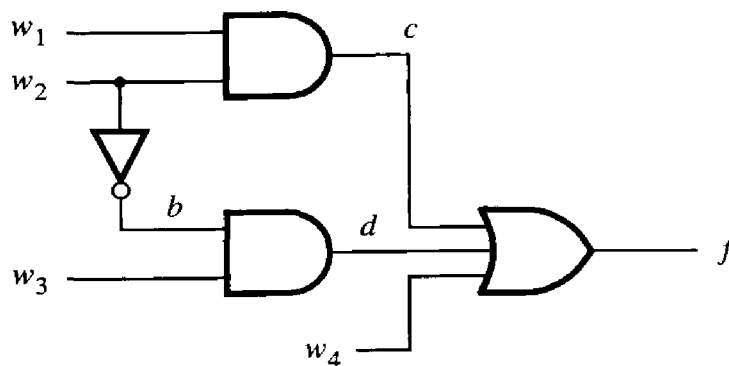


Figure 11.3 Circuit for Example 11.1.

While this approach is simpler, it is still impractical for large circuits. But the concept of path sensitizing is very useful, as we will see in the discussion that follows.

11.3.1 DETECTION OF A SPECIFIC FAULT

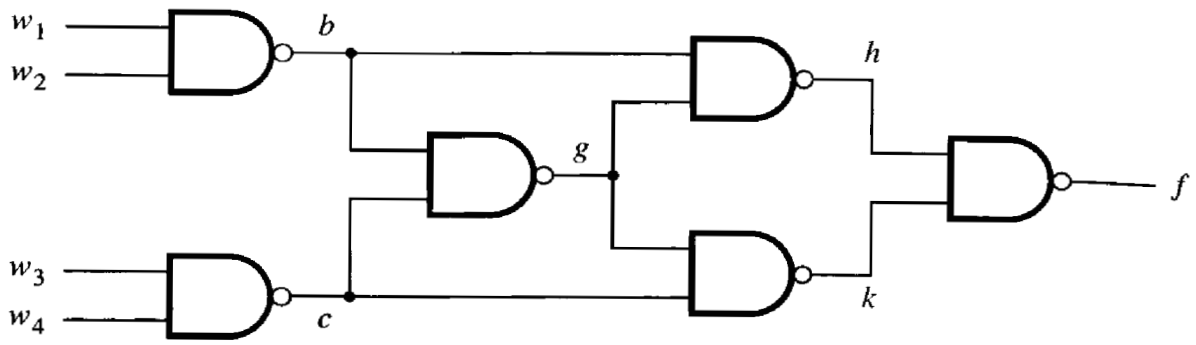
Suppose that we suspect that the circuit in Figure 11.3 has a fault where the wire b is stuck-at-1. A test that determines the presence of this fault can be obtained by sensitizing a path that propagates the effect of the fault to the output, f , where it can be observed. The path goes from b to d to f . It is necessary to set $w_3 = 1$, $w_4 = 0$, and $c = 0$. The latter can be accomplished by setting $w_1 = 0$. If b is stuck-at-1, then it is necessary to apply an input that would normally produce the value of 0 on the wire b , so that the output values in good and faulty circuits would be different. Hence w_2 must be set to 1. Therefore, the test that detects the $b/1$ fault is $w_1w_2w_3w_4 = 0110$.

In general, the fault on a given wire can be detected by propagating the effect of the fault to the output, sensitizing an appropriate path. This involves assigning values to other inputs of the gates along the path. These values must be obtainable by assigning specific values to the primary inputs, which may not always be possible. Example 11.2 illustrates the process.

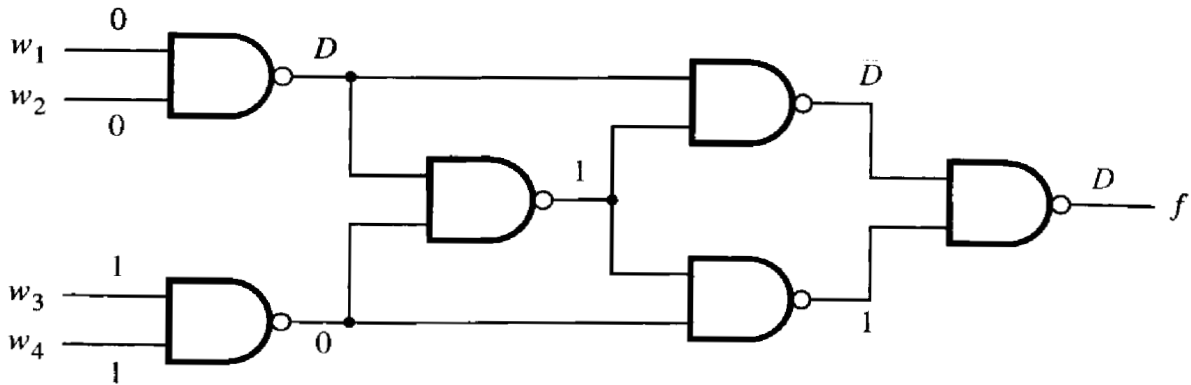
FAULT PROPAGATION As the effect of a fault propagates through the gates along a sensitized path, the polarity of the signal will change when passing through an inverting gate. Let the symbol D denote a stuck-at-0 fault in general. The effect of the stuck-at-0 fault will be unaltered when passed through an AND or OR gate. If D is on an input of an AND (OR) gate and the other inputs are set to 1 (0), then the output of the gate will behave as having D on it. But if D is on an input of a NOT, NAND, or NOR gate, then the output will appear to be stuck-at-1, which is denoted as \bar{D} .

Figure 11.4 shows how the effect of a fault can be propagated using the D and \bar{D} symbols. Suppose first that there is a stuck-at-0 fault on wire b ; that is, $b/0$. We want to propagate the effect of this fault along the path $b - h - f$. This can be done as indicated in Figure 11.4b. Setting $g = 1$ propagates the fault to the wire h . Then h appears to be stuck-at-1, denoted by \bar{D} . Next the effect is propagated to f by setting $k = 1$. Since the last NAND also inverts the signal, the output becomes equal to D , which is equivalent to $f/0$. Thus in a good circuit the output should be 1, but in a faulty circuit it will be 0. Next we must ascertain that it is possible to have $g = 1$ and $k = 1$ by assigning the appropriate values to the primary input variables. This is called the *consistency check*. By setting $c = 0$, both g and k will be forced to 1, which can be achieved with $w_3 = w_4 = 1$. Finally, to cause the propagation of the fault D on wire b , it is necessary to apply a signal that causes b to have the value 1, which means that either w_1 or w_2 has to be 0. Then the test $w_1w_2w_3w_4 = 0011$ detects the fault $b/0$.

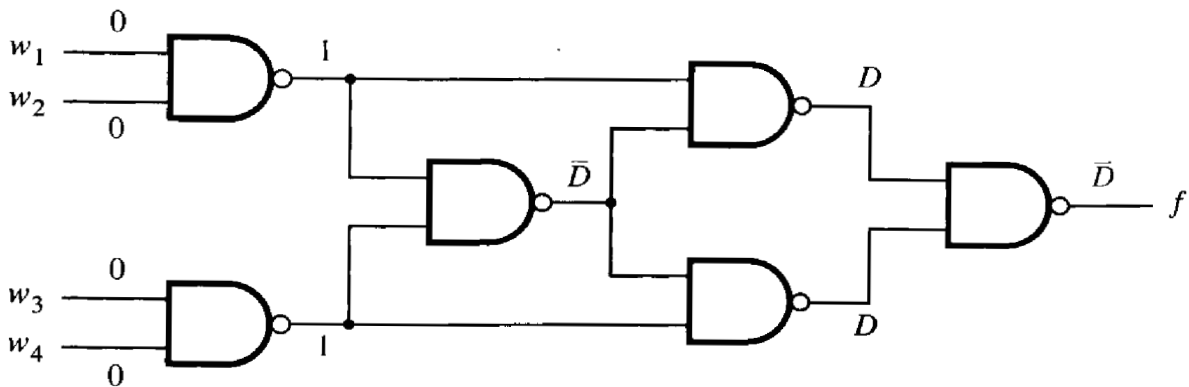
Suppose next that the wire g is stuck-at-1, denoted by \bar{D} . We can try to propagate the effect of this fault through the path $g - h - f$ by setting $b = 1$ and $k = 1$. To make $b = 1$,



(a) Circuit



(b) Detection of $b/0$ fault



(c) Detection of $g/1$ fault

Figure 11.4 Detection of faults.

we set $w_1 = w_2 = 0$. To make $k = 1$, we have to make $c = 0$. But it is also necessary to cause the propagation of the \bar{D} fault on g by means of a signal that makes $g = 0$ in the good circuit. This can be done only if $b = c = 1$. The problem is that at the same time we need $c = 0$, to make $k = 1$. Therefore, the consistency check fails, and the fault $g/1$ cannot be propagated in this way.

Another possibility is to propagate the effect of the fault along two paths simultaneously, as shown in Figure 11.4c. In this case the fault is propagated along the paths $g - h - f$ and

$g = k = f$. This requires setting $b = 1$ and $c = 1$, which also happens to be the condition needed to cause the propagation as explained above. The test 0000 achieves the desired objective of detecting $g/1$. Observe that if D (or \bar{D}) appears on both inputs of a NAND gate, the output value will be \bar{D} (or D).

The idea of propagating the effect of faults using path sensitizing has been exploited in a number of methods for derivation of test sets for fault detection. The scheme illustrated in Figure 11.4 indicates the essence of the D -algorithm, which was one of the first practical schemes developed for fault detection purposes [7]. Other techniques have grown from this basic approach [8].

11.4 CIRCUITS WITH TREE STRUCTURE

Circuits with a treelike structure, where each gate has a fan-out of 1, are particularly easy to test. The most common forms of such circuits are the sum-of-products or product-of-sums. Since there is a unique path from each primary input to the output of the circuit, it is sufficient to derive the tests for faults on the primary inputs. We will illustrate this concept by means of the sum-of-products circuit in Figure 11.5.

If any input of an AND gate is stuck-at-0, this condition can be detected by setting all inputs of the gate to 1 and ensuring that the other AND gates produce 0. This makes $f = 1$ in the good circuit, and $f = 0$ in the faulty circuit. Three such tests are needed because there are three AND gates.

Testing for stuck-at-1 faults is slightly more involved. An input of an AND gate is tested for the stuck-at-1 fault by driving it with the logic value 0, while the other inputs of the gate have the logic value 1. Thus a good gate produces the output of 0, and a faulty

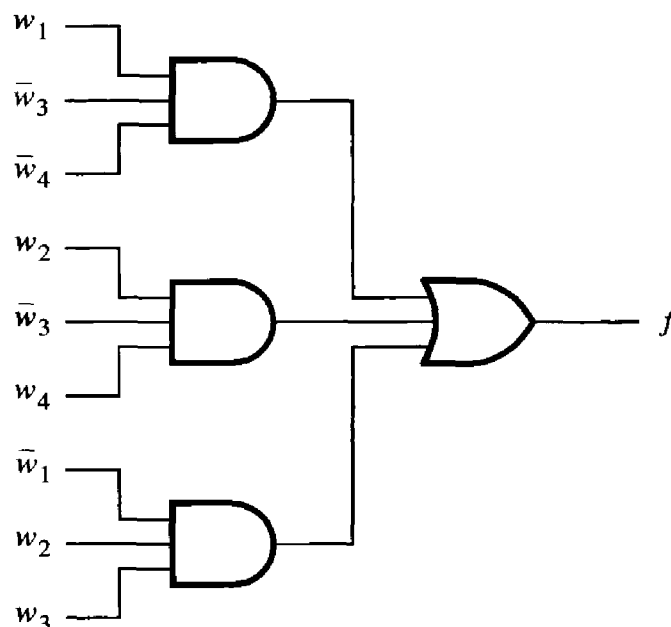


Figure 11.5 Circuit with a tree structure.

No.	Product term			Test	
	$w_1 \bar{w}_3 \bar{w}_4$	$w_2 \bar{w}_3 w_4$	$\bar{w}_1 w_2 w_3$	$w_1 w_2 w_3 w_4$	
Stuck-at-0 tests	1	1 1 1	0 1 0	0 0 0	1 0 0 0
	2	0 1 0	1 1 1	1 1 0	0 1 0 1
	3	0 0 0	1 0 1	1 1 1	0 1 1 1
Stuck-at-1 tests	4	0 1 1	1 1 0	1 1 0	0 1 0 0
	5	1 0 1	1 0 0	0 1 1	1 1 1 0
	6	1 1 0	0 1 1	0 0 0	1 0 0 1
	7	1 0 0	1 0 1	0 1 1	1 1 1 1
	8	0 0 0	0 0 1	1 0 1	0 0 1 1

Figure 11.6 Derivation of tests for the circuit in Figure 11.5.

gate generates 1. At the same time, the other AND gates must have the output of 0, which is accomplished by making at least one input of these gates equal to 0.

Figure 11.6 shows the derivation of the necessary tests. The first three tests are for the stuck-at-0 faults. Test 4 detects a stuck-at-1 fault on either the first input of the top AND gate or the third inputs of the other two gates. Observe that in each case the tested input is driven by logic 0, while the other inputs are equal to 1. This yields the test vector $w_1 w_2 w_3 w_4 = 0100$. Clearly, it is useful to test inputs on as many gates as possible using a single test vector. Test 5 detects a fault on either the second input of the top gate or the first input of the bottom gate; it does not test any inputs of the middle gate. The required test pattern is 1110. Three more tests are needed to detect stuck-at-1 faults on the remaining inputs of the AND gates. Therefore, the complete test set is

$$\text{Test set} = \{1000, 0101, 0111, 0100, 1110, 1001, 1111, 0011\}$$

11.5 RANDOM TESTS

So far we have considered the task of deriving a *deterministic* test set for a given circuit, primarily relying on the path-sensitizing concept. In general, it is difficult to generate such test sets when circuits become larger. A useful alternative is to choose the tests at random, which we will explore in this section.

Figure 11.7 gives all functions of two variables. For an n -variable function, there are 2^{2^n} possible functions; hence there are $2^{2^2} = 16$ two-variable functions. Consider the XOR function, implemented as shown in Figure 11.8. Let us consider the possible stuck-at-0 and stuck-at-1 faults on wires b , c , d , h , and k in this circuit. Each fault transforms the circuit

w_1w_2	f_0	f_1	f_2	f_3	f_4	f_5	f_6	f_7	f_8	f_9	f_{10}	f_{11}	f_{12}	f_{13}	f_{14}	f_{15}
00	0	0	0	0	0	0	0	0	1	1	1	1	1	1	1	1
01	0	0	0	0	1	1	1	1	0	0	0	0	1	1	1	1
10	0	0	1	1	0	0	1	1	0	0	1	1	0	0	1	1
11	0	1	0	1	0	1	0	1	0	1	0	1	0	1	0	1

Figure 11.7 All two-variable functions.

into a faulty circuit that implements a function other than XOR, as indicated in Figure 11.9. To test the circuit, we can apply one or more input valuations to distinguish the good circuit from the possible faulty circuits listed in Figure 11.9. Choose arbitrarily $w_1w_2 = 01$ as the first test. This test will distinguish the good circuit, which must generate $f = 1$, from the faulty circuits that realize $f_0, f_2, f_3,$ and f_{10} , because each of these would generate $f = 0$. Next, arbitrarily choose the test $w_1w_2 = 11$. This test distinguishes the good circuit from the faulty circuits that realize $f_5, f_7,$ and f_{15} , in addition to f_3 , which we have already tested for using $w_1w_2 = 01$. Let the third test be $w_1w_2 = 10$; it will distinguish the good circuit from f_4 and f_{12} . These three tests, chosen in a seemingly random way, detect all faulty circuits that involve the faults in Figure 11.9. Moreover, note that the first two tests distinguish seven of the nine possible faulty circuits.

This example suggests that it may be possible to derive a suitable test set by selecting the tests randomly. How effective can random testing be? Looking at Figure 11.7, we see that any of the four possible tests distinguishes the correct function from eight faulty functions, because they produce different output values for this input valuation. These eight faulty functions detectable by a single test are one-half of the total number of possible functions (2^{2^2-1} for the two-variable case). The test cannot distinguish between the correct function and the seven faulty functions that produce the same output value. The application of the second test distinguishes four of the remaining seven functions because they produce

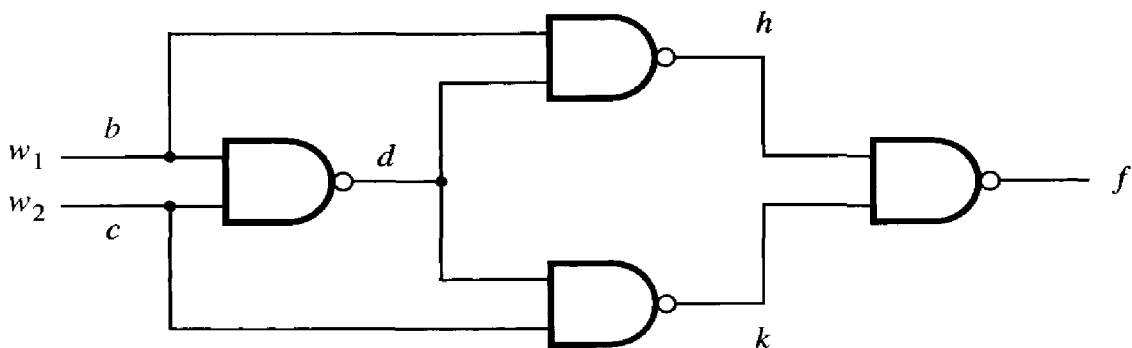


Figure 11.8 The XOR circuit.

Fault	Circuit implements
$b/0$	$f_5 = w_2$
$b/1$	$f_{10} = \bar{w}_2$
$c/0$	$f_3 = w_1$
$c/1$	$f_{12} = \bar{w}_1$
$d/0$	$f_0 = 0$
$d/1$	$f_7 = w_1 + w_2$
$h/0$	$f_{15} = 1$
$h/1$	$f_4 = \bar{w}_1 w_2$
$k/0$	$f_{15} = 1$
$k/1$	$f_2 = w_1 \bar{w}_2$

Figure 11.9 The effect of various faults.

an output value that is different from the correct function. Thus each application of a new test essentially cuts in half the number of faulty functions that have not been detected. Consequently, the probability that the first few tests will detect a large portion of all possible faults is high. More specifically, the probability that each faulty circuit can be detected by the first test is

$$P_1 = \frac{1}{2^{2^2} - 1} \cdot 2^{2^2-1} = \frac{8}{15} = 0.53$$

This is the ratio of the number of faulty circuits that produce an output value different from the good circuit, to the total number of faulty circuits.

This reasoning is readily extended to n -variable functions. In this case the first test detects 2^{2^n-1} out of a total of $2^{2^n} - 1$ possible faulty functions. Therefore, if m tests are applied, the probability that a faulty circuit will be detected is

$$P_m = \frac{1}{2^{2^n} - 1} \cdot \sum_{i=1}^m 2^{2^n-i}$$

This expression is depicted in graphical form in Figure 11.10. The conclusion is that random testing is very effective and that after a few tens of tests the existence of a fault is likely to be detected even in very large circuits.

Random testing works particularly well for circuits that do not have high fan-in. If fan-in is high, then it may be necessary to resort to other testing schemes. For example, suppose that an AND gate has a large number of inputs. Then there is a problem with detecting stuck-at-1 faults on its inputs, which may not be covered by random tests. But it is possible to test for these faults using the approach described in section 11.4.

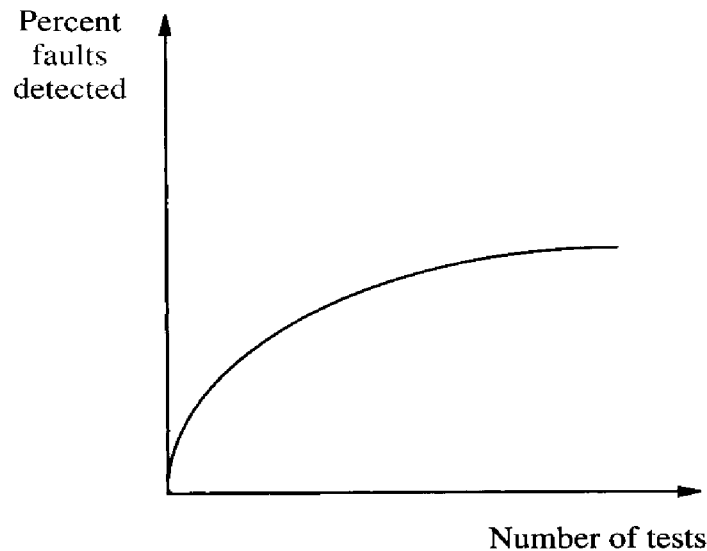


Figure 11.10 Effectiveness of random testing.

The simplicity of random testing is a very attractive feature. For this reason, coupled with good effectiveness of tests, this technique is often used in practice.

11.6 TESTING OF SEQUENTIAL CIRCUITS

As seen in the previous sections, combinational circuits can be tested effectively, using either deterministic or random test sets. It is much more difficult to test sequential circuits. The presence of memory elements allows a sequential circuit to be in various states, and the response of the circuit to externally applied test inputs depends on the state of the circuit.

A combinational circuit can be tested by comparing its behavior with the functionality specified in the truth table. An equivalent attempt would be to test a sequential circuit by comparing its behavior with the functionality specified in the state table. This entails checking that the circuit performs correctly all transitions between states and that it produces a correct output. This approach may seem easy, but in reality it is extremely difficult. A big problem is that it is difficult to ascertain that the circuit is in a specific state if the state variables are not observable on the external pins of the circuit, which is usually the case. Yet for each transition to be tested, it is necessary to verify with complete certainty that the correct destination state was reached. Such an approach may work for very small sequential circuits, but it is not feasible for practical-size circuits. A much better approach is to design the sequential circuits so that they are easily testable.

11.6.1 DESIGN FOR TESTABILITY

A synchronous sequential circuit comprises the combinational circuit that implements the output and next-state functions, as well as the flip-flops that hold the state information during a clock cycle. A general model for the sequential circuits is shown in Figure 8.90.

The inputs to the combinational network are the primary inputs, w_1 through w_n , and the present state variables, y_1 through y_k . The outputs of the network are the primary outputs, z_1 through z_m , and the next-state variables, Y_1 through Y_k . The combinational network could be tested using the techniques presented in the previous sections if it were possible to apply tests on all of its inputs and observe the results on all of its outputs. Applying the test vectors to the primary inputs poses no difficulty. Also, it is easy to observe the values on the primary outputs. The question is how to apply the test vectors on the present-state inputs and how to observe the values on the next-state outputs.

A possible approach is to include a two-way multiplexer in the path of each present-state variable so that the input to the combinational network can be either the value of the state variable (obtained from the output of the corresponding flip-flop) or the value that is a part of the test vector. A significant drawback of this approach is that the second input of each multiplexer must be directly accessible through external pins, which requires many pins if there are many state variables. An attractive alternative is to provide a connection that allows shifting the test vector into the circuit one bit at a time, thus trading off pin requirements for the time it takes to perform a test. Several such schemes have been proposed, one of which is described below.

Scan-Path Technique

A popular technique, called the *scan path*, uses multiplexers on flip-flop inputs to allow the flip-flops to be used either independently during normal operation of the sequential circuit, or as a part of a shift register for testing purposes. Figure 11.11 presents the general scan-path structure for a circuit with three flip-flops. A 2-to-1 multiplexer connects the D input of each flip-flop either to the corresponding next-state variable or to the serial path that connects all flip-flops into a shift register. The control signal $\overline{Normal}/Scan$ selects the active input of the multiplexer. During the normal operation the flip-flop inputs are driven by the next-state variables, Y_1 , Y_2 , and Y_3 .

For testing purposes the shift-register connection is used to scan in the portion of each test vector that involves the present-state variables, y_1 , y_2 , and y_3 . This connection has Q_i connected to D_{i+1} . The input to the first flip-flop is the externally accessible pin *Scan-in*. The output comes from the last flip-flop, which is provided on the *Scan-out* pin.

The scan-path technique involves the following steps:

1. The operation of the flip-flops is tested by scanning into them a pattern of 0s and 1s, for example, 01011001, in consecutive clock cycles, and observing whether the same pattern is scanned out.
2. The combinational circuit is tested by applying test vectors on $w_1w_2 \cdots w_ny_1y_2y_3$ and observing the values generated on $z_1z_2 \cdots z_mY_1Y_2Y_3$. This is done as follows:
 - The $y_1y_2y_3$ portion of the test vector is scanned into the flip-flops during three clock cycles, using $\overline{Normal}/Scan = 1$.
 - The $w_1w_2 \cdots w_n$ portion of the test vector is applied as usual and the normal operation of the sequential circuit is performed for one clock cycle, by setting $\overline{Normal}/Scan = 0$. The outputs $z_1z_2 \cdots z_m$ are observed. The generated values of $Y_1Y_2Y_3$ are loaded into the flip-flops at this time.
 - The select input is changed to $\overline{Normal}/Scan = 1$, and the contents of the flip-flops are scanned out during the next three clock cycles, which makes the

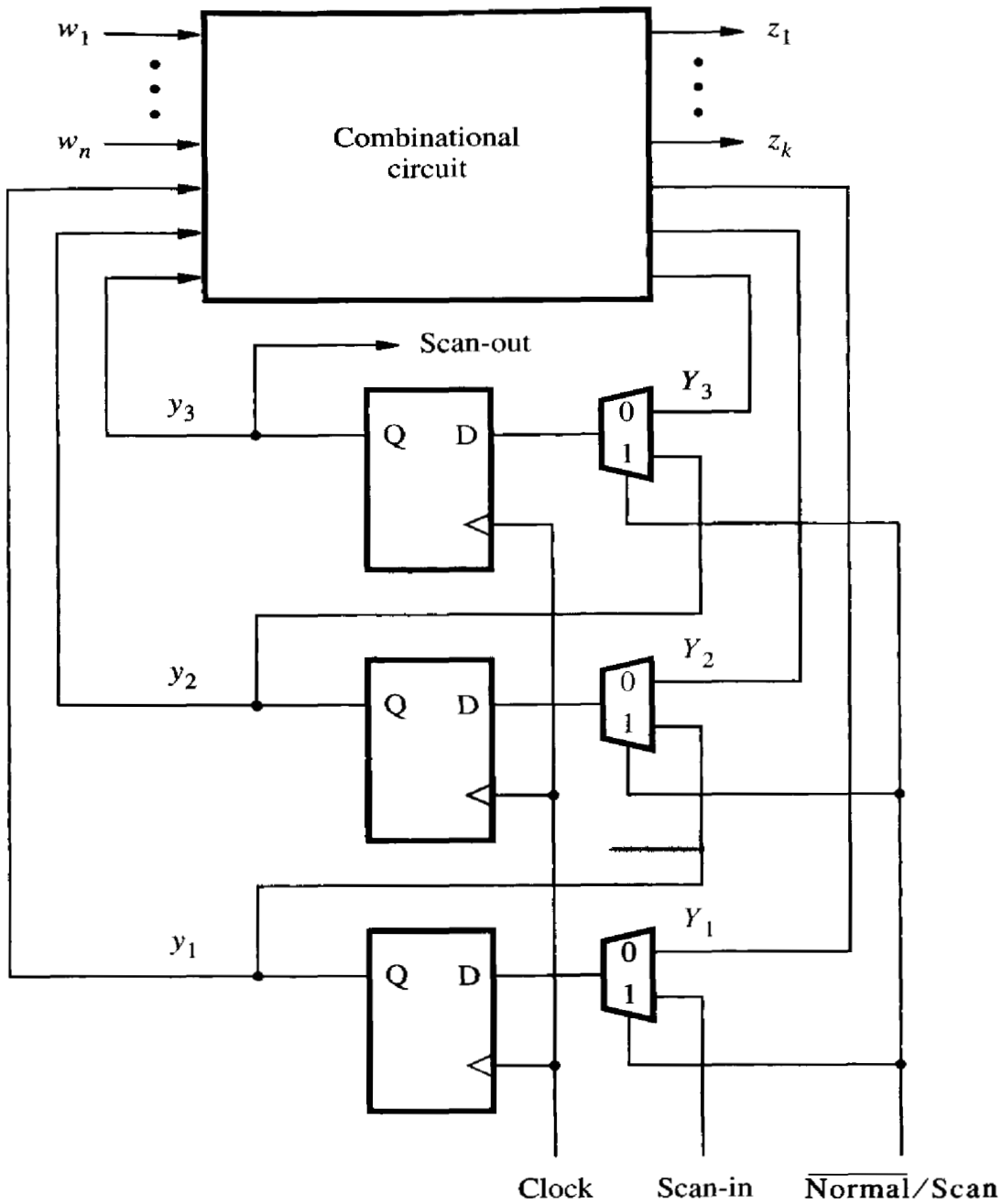


Figure 11.11 Scan-path arrangement.

$Y_1 Y_2 Y_3$ portion of the test result observable externally. At the same time, the next test vector can be scanned in to reduce the total time needed to test the circuit.

The next example shows a specific circuit that is designed for scan-path testing.

Figure 8.80 shows a circuit that recognizes a specific input sequence, which was discussed **Exc** in section 8.9. The circuit can be made easily testable by modifying it for scan path as shown in Figure 11.12. The combinational part, consisting of four AND and two OR gates, is the same in both figures.

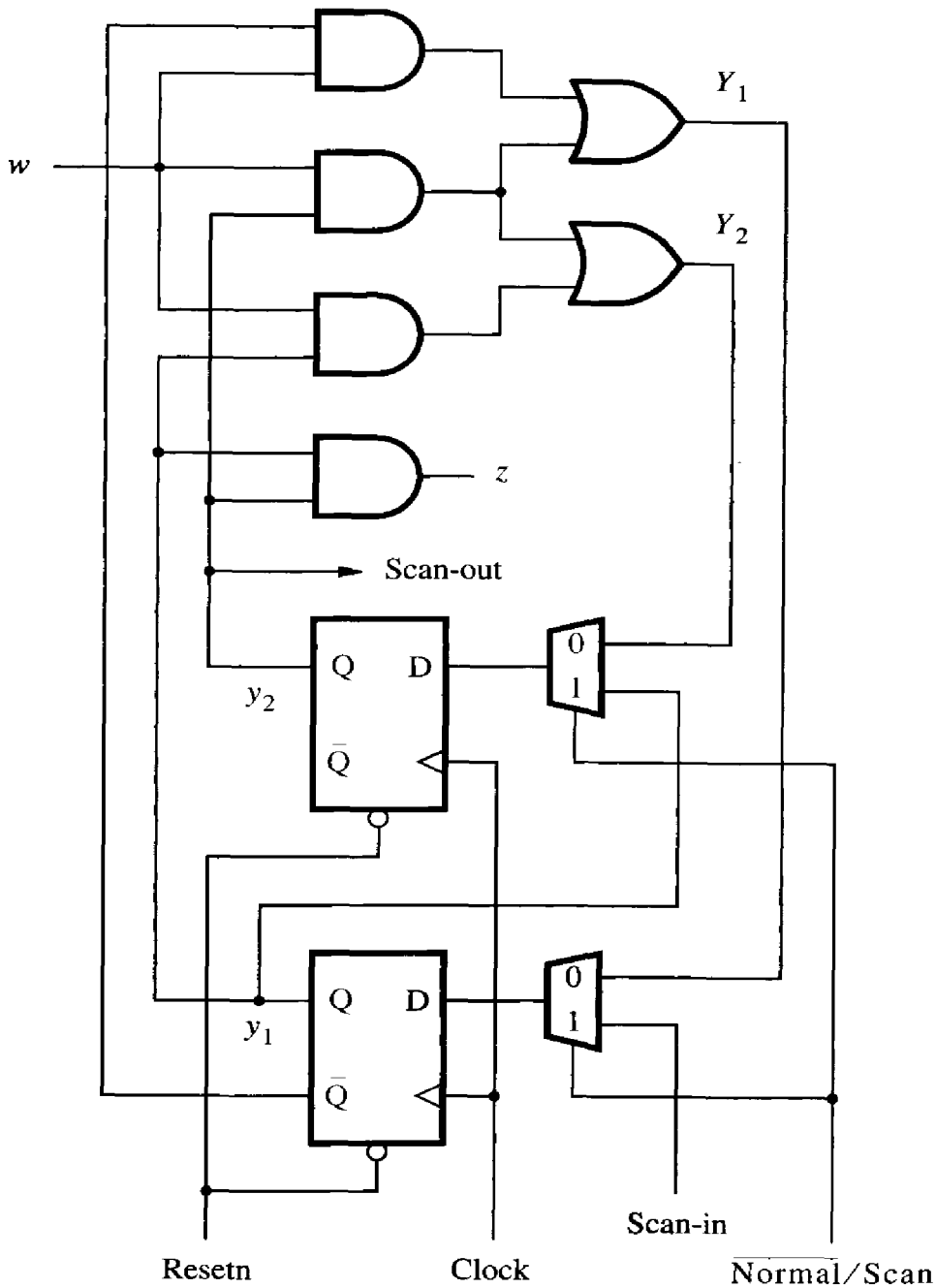


Figure 11.12 Circuit for Example 11.3.

The flip-flops can be tested by scanning through them a sequence of 0s and 1s as explained above. The combinational circuit can be tested by applying test vectors on w , y_1 , and y_2 . Let us use the random-testing approach, choosing arbitrarily four test vectors $wy_1y_2 = 001, 110, 100, \text{ and } 111$. To apply the first test vector, the pattern $y_1y_2 = 01$ is scanned into the flip-flops during two clock cycles. Then for one clock cycle, the circuit is made to operate in the normal mode with $w = 0$. This essentially applies the vector $wy_1y_2 = 001$ to the AND-OR circuit. The result of this test should be $z = 0, Y_1 = 0, \text{ and } Y_2 = 0$. The value of z can be observed directly. The values of Y_1 and Y_2 are loaded into the respective flip-flops, and they are scanned out during the next two clock cycles. As these values are being scanned out, the next test pattern $y_1y_2 = 10$ can be scanned in. Thus it

takes five cycles to perform one test, but the last two cycles are overlapped with the second test. The third and fourth tests are performed in the same way. The total time needed to perform all four tests is 14 clock cycles.

The preceding approach is based on testing a sequential circuit by testing its combinational part using the techniques developed in the previous sections. The scan-path facility makes it also possible to test the sequential circuit by making it go through all transitions specified in the state table. The circuit can be placed into a given state simply by scanning into the flip-flops the valuation of the state variables that denotes this state. The result of the transition can be checked by observing the primary outputs and by scanning out the valuation that presents the destination state. We leave it to the reader to develop the details of this approach (see problem 11.16).

One limitation of the scan-path technique is that it does not work well if the asynchronous preset and reset features of the flip-flops are used during normal operation. We have already suggested that it is better to use synchronous preset and reset. If the designer wishes to use the asynchronous preset and reset capability, then a testable circuit can be designed using techniques such as the *level-sensitive scan design* [1, 9]. The reader can consult the references for a description of this technique.

11.7 BUILT-IN SELF-TEST

Until now we have assumed that testing of logic circuits is done by externally applying the test inputs and comparing the results with the expected behavior of the circuit. This requires connecting external equipment to the circuit under test. An interesting question is whether it is possible to incorporate the testing capability within the circuit itself so that no external equipment is needed. Such built-in capability would allow the circuit to be self-testable. This section presents a scheme that provides the *built-in self-test* (BIST) capability.

Figure 11.13 shows a possible BIST arrangement in which a test vector generator produces the test vectors that must be applied to the circuit under test. In section 11.5 we explained that randomly chosen test vectors give good results, with the fault coverage depending on the number of tests performed. For each test vector applied to the circuit, it is

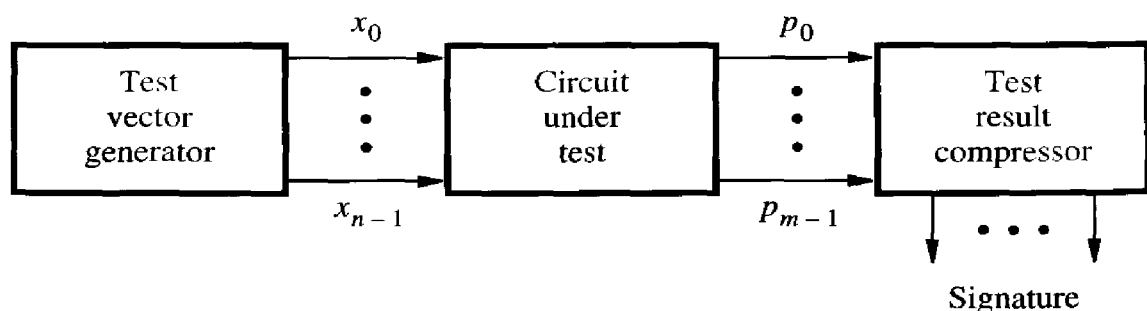
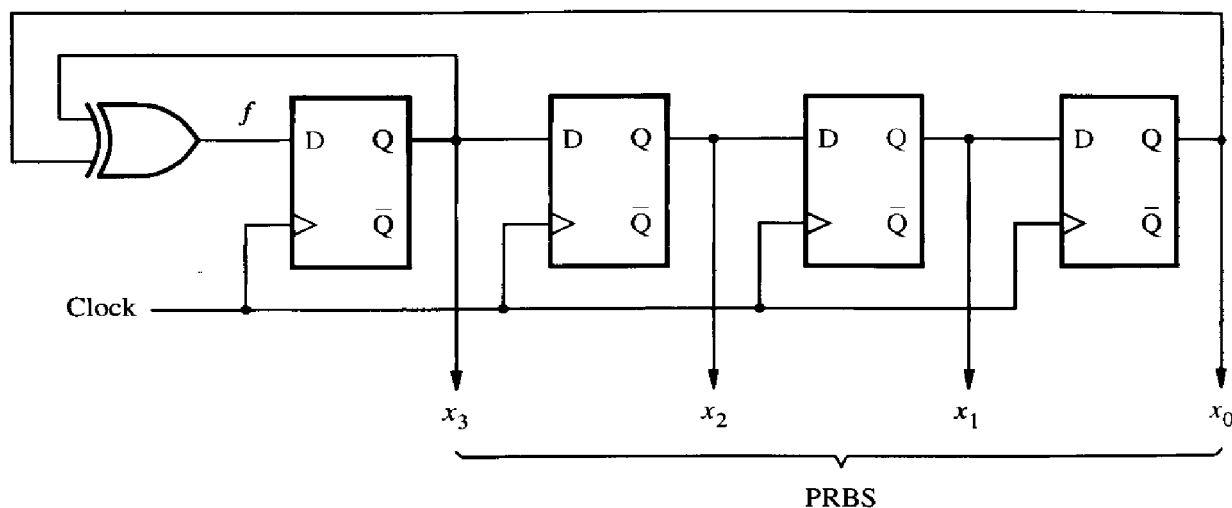


Figure 11.13 The testing arrangement.

necessary to determine the required response of the circuit. The response of a good circuit may be determined using the simulator tool of a CAD system. The expected responses to the applied tests must be stored on the chip so that a comparison can be made when the circuit is being tested.

A practical approach for generating the test vectors on-chip is to use *pseudorandom* tests, which have the same characteristics as random tests but are produced deterministically and can be repeated at will. The generator for pseudorandom tests is easily constructed using a feedback shift-register circuit. A small example of a possible generator is given in Figure 11.14. A four-bit shift register, with the signals from the first and fourth stages fed back through an XOR gate, generates 15 different patterns during successive clock cycles. If the shift register is set at the beginning to $x_3x_2x_1x_0 = 1000$, then the generated patterns are as shown in part (b) of the figure. Observe that the pattern 0000 cannot be used, because the circuit would be locked in this pattern indefinitely.

The circuit in Figure 11.14 is representative of a class of circuits known as *linear feedback shift registers* (LFSRs). Using feedback from the various stages of an n -bit shift



(a) Circuit

x_3	1	1	1	1	0	1	0	1	1	0	0	1	0	0	0	1	...
x_2	0	1	1	1	1	0	1	0	1	1	0	0	1	0	0	0	...
x_1	0	0	1	1	1	1	0	1	0	1	1	0	0	1	0	0	...
x_0	0	0	0	1	1	1	1	0	1	0	1	1	0	0	1	0	...
f	1	1	1	0	1	0	1	1	0	0	1	0	0	0	1	1	...

(b) Generated sequence

Figure 11.14 Pseudorandom binary sequence generator (PRBSG).

register, connected to the first stage by means of XOR gates, it is possible to generate a sequence of $2^n - 1$ patterns that have the characteristics of randomly generated numbers. Such circuits are used extensively in error-correcting codes. The theory of operation of these circuits is presented in a number of books [1–3, 10]. A table of the feedback connections for various values of n , which generate a maximum-length pseudorandom sequence, is given in Peterson and Weldon [11].

The pseudorandom binary sequence generator (PRBSG) gives a simple method of generating tests. The required response of the circuit under test can be determined by using the simulator tool of the CAD system. The remaining question is how to check whether the circuit indeed produces the required response. It is not attractive to have to store a large number of responses to the tests on a chip that also includes the main circuit. A practical solution is to compress the results of the tests into a single pattern. This can be done using an LFSR circuit. Instead of just providing the feedback signals as the input, a compressor circuit includes the output signals produced by the circuit under test. Figure 11.15 shows a single-input compressor circuit (SIC), which uses the same feedback connections as the PRBSG of Figure 11.14. The input p is the output of a circuit under test. After applying a number of test vectors, the resulting values of p drive the SIC and, coupled with the LFSR functionality, produce a four-bit pattern. The pattern generated by the SIC is called a *signature* of the tested circuit for the given sequence of tests. The signature represents a single pattern that may be interpreted as a result of all the applied tests. It can be compared against a predetermined pattern to see if the tested circuit is working properly. Storing a single n -bit pattern for comparison purposes presents only a small overhead. The randomizing nature of the compressor circuits based on LFSRs provides a good coverage of patterns that may result from a faulty circuit [12].

If the circuit under test has more than one output, then an LFSR with multiple inputs can be used. Figure 11.16 illustrates how four inputs, p_0 through p_3 , can be added to the basic circuit of Figure 11.14. Again the four-bit signature provides a good mechanism for distinguishing among different sequences of four-bit patterns that may appear on the inputs of this multiple-input compressor circuit (MIC).

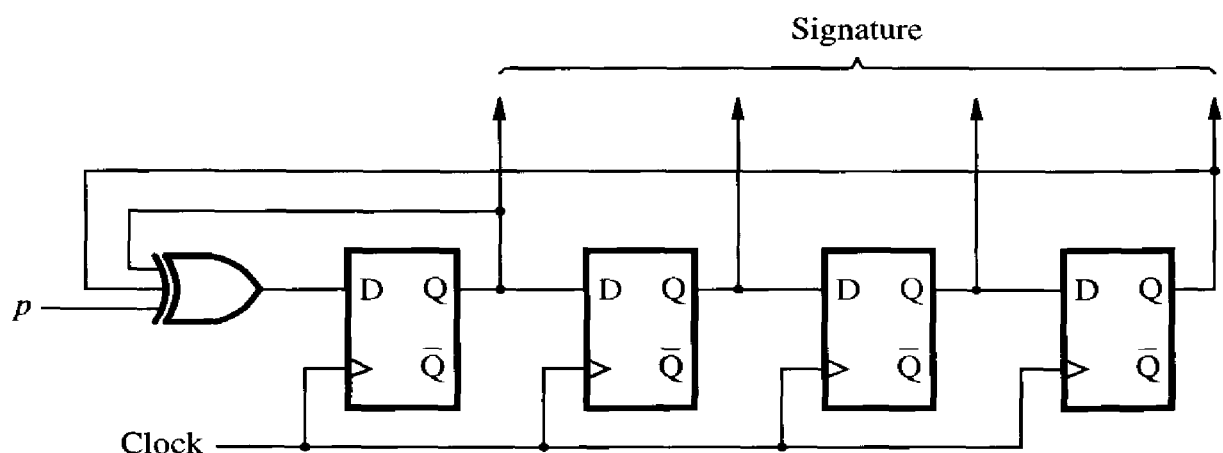


Figure 11.15 Single-input compressor circuit (SIC).

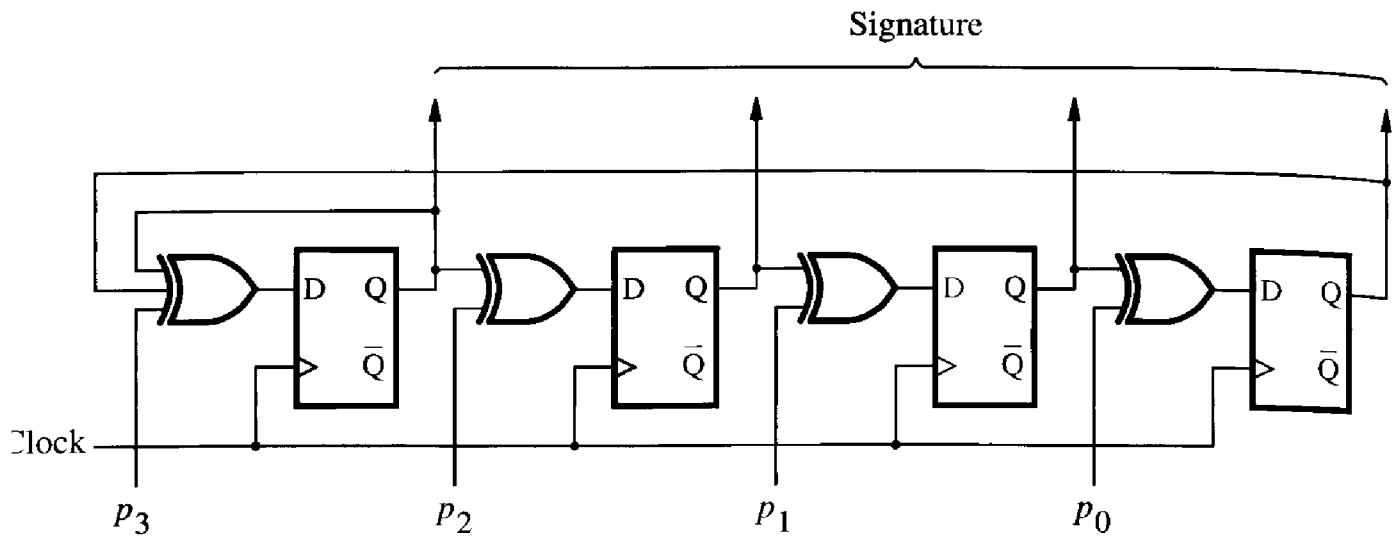


Figure 11.16 Multiple-input compressor circuit (MIC).

A complete BIST scheme for a sequential circuit may be implemented as indicated in Figure 11.17. The scan-path approach is used to provide a testable circuit. The test patterns that would normally be applied on the primary inputs $W = w_1w_2 \cdots w_n$ are generated internally as the patterns on $X = x_1x_2 \cdots x_n$. Multiplexers are needed to allow switching from W to X , as inputs to the combinational circuit. A pseudorandom binary sequence

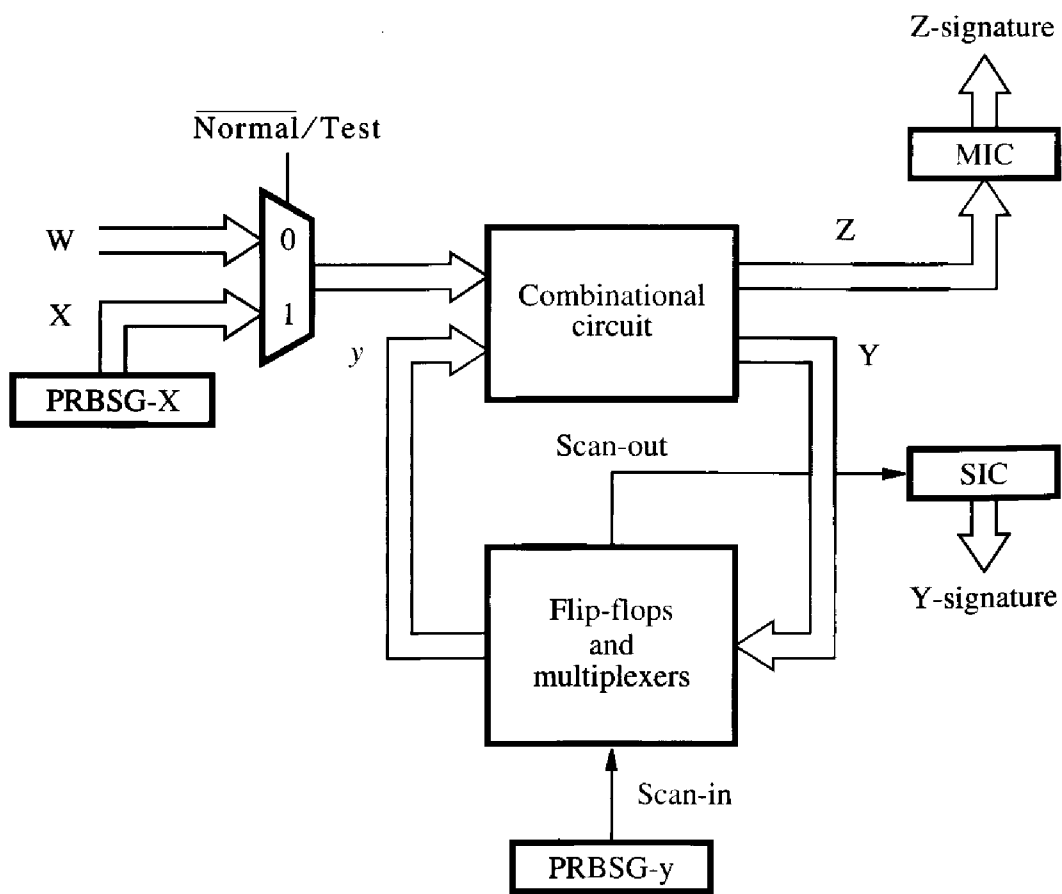


Figure 11.17 BIST in a sequential circuit.

generator, PRBSG- X , generates the test patterns for X . The portion of the tests applied via the next-state signals, y , is generated by the second PRBS generator, PRBSG- y . These patterns are scanned into the flip-flops as explained in section 11.6.

The test outputs are compressed using the two compressor circuits. The patterns on the primary outputs, $Z = z_1z_2 \cdots z_m$, are compressed using the MIC circuit, and those on the next-state wires $Y = Y_1Y_2 \cdots Y_k$, by the SIC circuit. These circuits produce the Z -signature and Y -signature, respectively. The testing procedure is the same as given in Example 11.3 except that the comparison with the test result that a good circuit is supposed to give is done only once; at the end of the testing process the two signatures are compared with the stored patterns. Figure 11.17 does not show the circuitry needed to store these patterns and perform the comparison. Instead of storing the signature patterns of the required results as a part of the designed circuit, it is possible to shift out the contents of MIC and SIC shift registers onto two output pins and to perform the necessary comparison with the expected signatures externally. Note that using signature testing in this way reduces the testing time significantly, compared to the time it would take to test the circuit by scanning out the results of individual tests and comparing them with predetermined patterns.

The effectiveness of the BIST approach depends on the length of the LFSR generator and compressor circuits. Longer shift registers give better results [13]. One reason for failing to detect that the circuit under test may be faulty is that the pseudorandomly generated tests do not have perfect coverage of all possible faults. Another reason is that a signature generated by compressing the outputs of a faulty circuit may coincidentally end up being the same as the signature of the good circuit. This can occur because the compression process results in a loss of some information, such that two distinct output patterns may be compressed into the same signature. This is known as the *aliasing* problem.

11.7.1 BUILT-IN LOGIC BLOCK OBSERVER

The essence of BIST is to have internal capability for generation of tests and for compression of the results. Instead of using separate circuits for these two functions, it is possible to design a single circuit that serves both purposes. Figure 11.18 shows the structure of a possible circuit, known as the *built-in logic block observer* (BILBO) [14]. This four-bit circuit has the same feedback connections as the circuit of Figure 11.14.

The BILBO circuit has four modes of operation, which are controlled by the mode bits, M_1 and M_2 . The modes are as follows:

- $M_1M_2 = 11$ — Normal system mode in which all flip-flops are independently controlled by the signals on inputs p_0 through p_3 . In this mode each flip-flop may be used to implement a state variable of a finite state machine by using p_0 to p_3 as y_0 to y_3 .
- $M_1M_2 = 00$ — Shift-register mode in which the flip-flops are connected into a shift register. This mode allows test vectors to be scanned in, and the results of applied tests to be scanned out, if the control input \overline{G}/S is equal to 1. If $\overline{G}/S = 0$, then the circuit acts as the PRBS generator.
- $M_1M_2 = 10$ — Signature mode in which a series of patterns applied on inputs p_0 through p_3 are compressed into a signature available as a pattern on q_0 through q_3 .
- $M_1M_2 = 01$ — Reset mode in which all flip-flops are reset to 0.

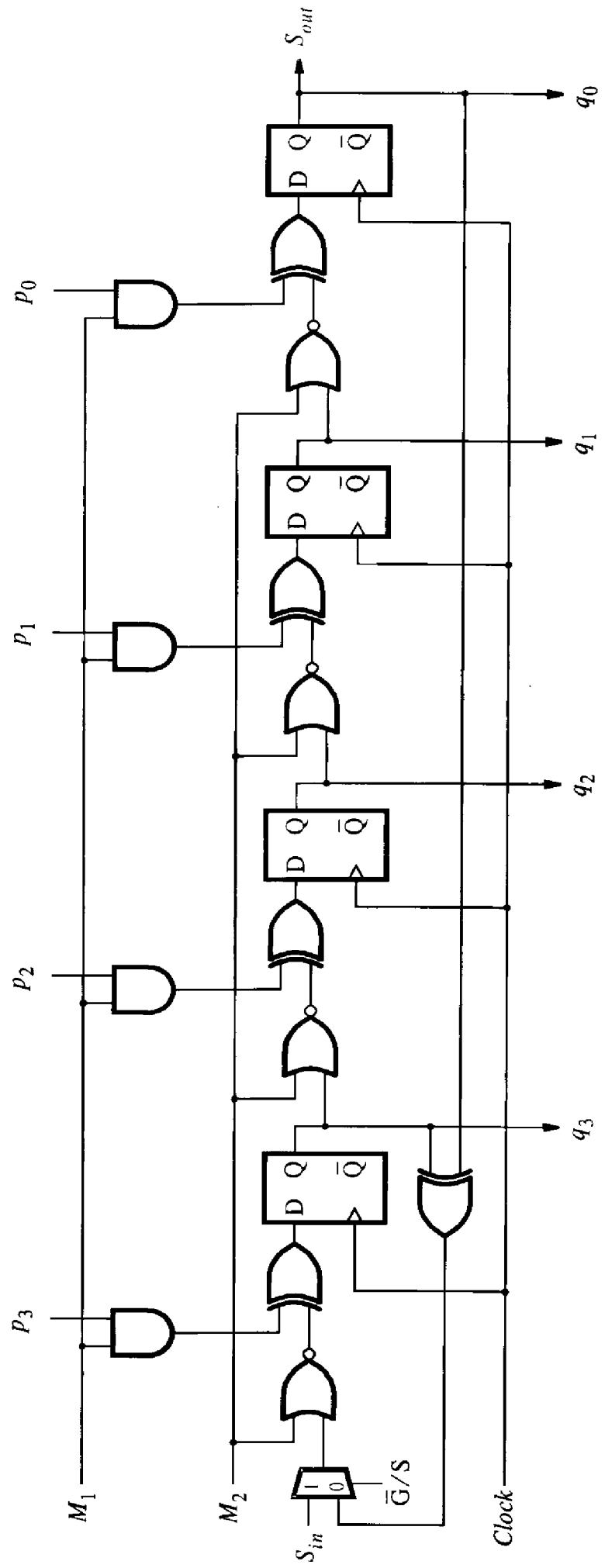


Figure 11.18 A four-bit built-in logic block observer (BILBO).

An efficient way of using BILBO circuits is presented in Figure 11.19. A combinational circuit can be tested by partitioning it into two (or more) parts. A BILBO circuit is used to provide inputs to one part and to accept outputs from the other part. The testing process involves a two-phase approach. First, BILBO1 is used as a PRBS generator that provides test patterns for combinational network 1 (CN1). During this time BILBO2 acts as a compressor and produces a signature for the test. The signature is shifted out by placing BILBO2 into the shift-register mode. Next, the roles of BILBO1 and BILBO2 are reversed, and the process is repeated to test CN2.

The detailed steps in the testing process are

1. Scan the initial test pattern into BILBO1 and reset all flip-flops in BILBO2.
2. Use BILBO1 as the PRBS generator for a given number of clock cycles and use BILBO2 to produce a signature.
3. Scan out the contents of BILBO2 and externally compare the signature; then scan into it the initial test pattern for testing CN2. Reset the flip-flops in BILBO1.
4. Use BILBO2 as the PRBS generator for a given number of clock cycles and use BILBO1 to produce a signature.
5. Scan out the signature in BILBO1 and externally compare it with the required pattern.

The BILBO circuits are used in this way for testing purposes. At other times the normal system mode is used.

11.7.2 SIGNATURE ANALYSIS

We have explained the use of signatures in the context of implementing an efficient built-in testing mechanism. The main idea of compressing a long sequence of test results into a single signature was originally developed as the basis for an instrument manufactured by Hewlett-Packard in the 1970s, known as the Signature Analyzer [15]. Thus the name *signature analysis* was coined to refer to the testing schemes that use signatures to represent the results of applied tests.

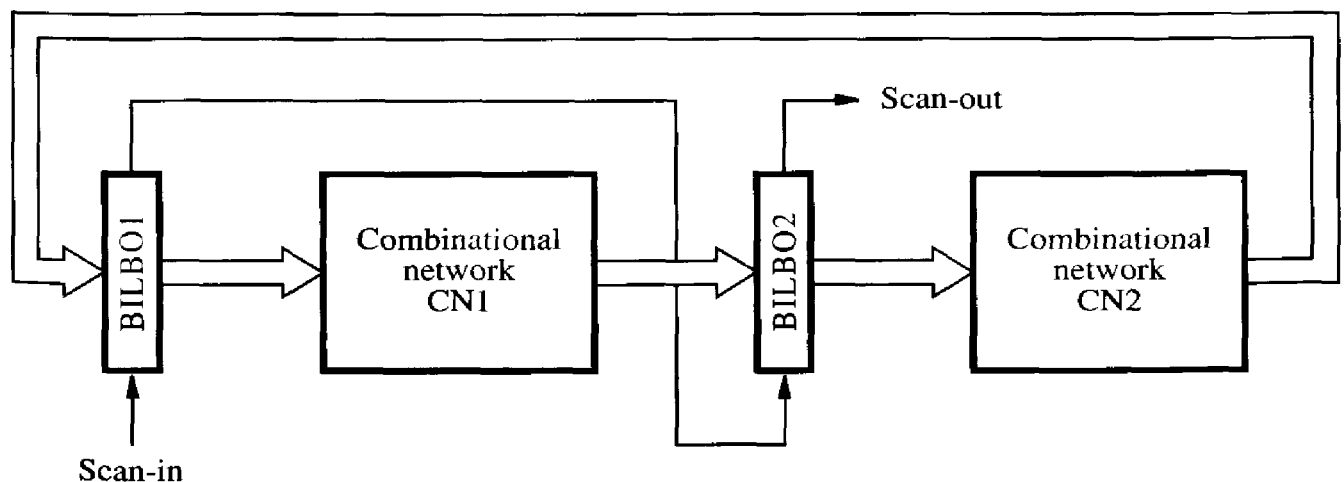


Figure 11.19 Using BILBO circuits for testing.

Signature analysis is particularly suitable for digital systems that naturally include an ability to generate the desired test patterns. Such is the case with computer systems in which various parts of the system can be stimulated by test patterns produced under software control.

11.7.3 BOUNDARY SCAN

The testing techniques discussed in the previous sections are equally applicable to circuits that are implemented on single chips or on printed circuit boards that contain a number of chips. A circuit can be tested only if it is possible to apply the tests to it and observe the outputs produced. This involves having access to the primary inputs and outputs.

When chips are soldered onto a printed circuit board, it often becomes impossible to attach test probes to pins. This hinders the testing process unless some indirect access to the pins is provided. The scan-path concept can be extended to the board level to deal with the problem. Suppose that each primary input or output pin on a chip is connected through a D flip-flop and that a provision is made for a test mode in which all flip-flops can be connected into a shift register. Then the test information can be scanned in and scanned out using the shift-register path, via two pins that serve as serial input and output. Connecting the serial output pin of one chip to the serial input pin of another chip results in the pins of all chips being connected into a board-wide shift register for testing purposes. This approach has become popular in practice and has been embodied into the IEEE Standard 1149.1 [16].

11.8 PRINTED CIRCUIT BOARDS

Design and testing techniques presented in this book can be applied to any logic circuit, whether the circuit is realized on a single chip or its implementation involves a number of chips placed on a printed circuit board (PCB). In this section we discuss some practical issues that arise when one or more circuits that form a larger digital system are implemented on a PCB.

A typical PCB contains multiple layers of wiring. When the board is manufactured, the wiring pattern on each layer is generated. The layers are separated by insulating material and pressed together in sandwichlike fashion to form the board. Connections between different wiring levels are made through holes that are provided for this purpose. Chips and other components are then soldered to the top and possibly to the bottom layers.

In preceding chapters we have discussed in considerable detail the CAD tools used for designing circuits that can be implemented on a single chip, such as a PLD. For a multiple-chip implementation, we need a different set of CAD tools to design a PCB that incorporates the chips and connections needed to realize the complete digital system. Such tools are available from a number of companies, for example, Cadence Design Systems and Mentor Graphics. These tools can automatically determine where each chip should be placed on the PCB, but the designer can also specify the location of particular chips. This is called the *placement* process. Given a specific placement of chips and other components (such as connectors and capacitors), the tools generate a layout for each layer of wiring traces that provide the required connections on the board. This process is referred to as *routing*.

Again the designer can intervene and manually route some connections. However, since the number of connections can be in the tens of thousands, it is crucial to obtain a good automated solution.

In addition to the design issues discussed in the previous chapters, a large circuit implemented on a PCB is subject to some other constraints. Signals on the wiring traces may be affected by noise problems caused by crosstalk, spikes in the power supply voltage, and reflections from the end points of long traces.

Crosstalk

Two closely spaced wires that run parallel to each other are capacitively coupled, and a pulse on one wire can induce a similar (but usually much smaller) pulse on the adjoining wire. This is referred to as *crosstalk*. Its existence is undesirable because it contributes to noise problems.

When drawing timing diagrams, we usually draw ideal waveforms with sharp edges, which have well-defined voltage levels for the logic values 0 and 1. In an actual circuit the corresponding signals may depart significantly from the desired behavior. As explained in section 3.8.4, noise in a circuit can affect voltage levels, which can be troublesome. For example, if at some point in time the noise diminishes the value of a signal that should be at logic 1 to a level where this signal is interpreted by the next gate as being logic 0, then a malfunction in the circuit is likely to occur. Since the noise effects tend to be random, they are often difficult to detect.

To minimize crosstalk, it is prudent to avoid having long wires running parallel in close proximity to each other. This may be difficult to achieve because of limited space on a PCB and the need to provide a large number of wires. Using additional layers (planes) of wiring helps in coping with crosstalk problems.

Power Supply Noise

When a CMOS circuit changes its state, there is a momentary flow of current in the circuit, which is manifested as a current pulse on the power supply (V_{DD} and *Ground*) wires. Since a wiring trace on a PCB has a small “line inductance,” such a current pulse causes a voltage spike (short pulse) on these lines. The cumulative effect of such voltage spikes can cause a malfunction of the circuit.

The induced voltage spikes can be reduced significantly by connecting a small capacitor between the V_{DD} and *Ground* wires, in close proximity to the chip that causes the spikes to occur. Since these spikes have the characteristic of a very high frequency signal, the path through the capacitor is essentially a short circuit for them. Thus the voltage spikes “bypass” the power supply lines and do not affect other chips connected to the same lines. Such capacitors are called *bypass capacitors*. They do not affect the DC voltage on the power supply lines.

Large chips, such as PLDs, often require more than one V_{DD} and *Ground* connection. In this case it is advisable to use one bypass capacitor for each pair of V_{DD} and *Ground* pins on the chip. For example, with PLDs the manufacturers recommend using a $0.2\ \mu\text{F}$ capacitor for each such pair of pins, placed as close as possible to the PLD chip.

Reflections and Terminations

Wiring traces on a PCB act as simple wires in circuits when the clock frequency is low. However, at higher clock frequencies it becomes necessary to worry about so-called

transmission-line effects. When a signal propagates along a long wire, it is attenuated due to the small resistance of the wire, it picks up crosstalk that manifests itself as noise, and it may be reflected when it reaches the end of the wire. The reflection causes a problem if its effect does not die down before the next active clock edge. The discussion of transmission-line effects is beyond the scope of this book. We will only mention that the reflection of signals can be prevented by placing a suitable “termination” component on the line. This termination can be as simple as a resistor whose resistance matches the apparent resistance of the line, known as the *characteristic impedance* of the line. Other forms of termination are also possible. For details of such schemes, the reader may consult other references [17–18].

11.8.1 TESTING OF PCBs

The manufactured PCB has to be tested thoroughly. Flaws in the manufacturing process may cause some connections to be broken and others to be shorted by a solder blob that touches two adjacent wires. There may be problems caused by design errors that were not discovered during the design process. Finally, some chips and other components on the PCB may be defective.

Power Up

The first step is to turn on the power supply. In the worst case this may cause some chip to be destroyed because of a fatal short-circuit condition (in an extreme case a chip package may actually blow apart). Assuming that this is not the case, it is essential to check if any of the chips is becoming inordinately hot. Overheating is a symptom of a serious problem that must be corrected.

It is also necessary to check that the power and ground connections are properly made on each chip and that the voltage level is as specified.

Reset

The next step is to reset all circuitry on the PCB to reach a predetermined starting point. This typically implies resetting the flip-flops, which is usually achieved by asserting a common reset line. It is important to verify that the starting state is correctly established.

Low-Level Functional Testing

Since practical circuits can be extremely complex, it is prudent to test the basic functionality first. A key test is to verify that the control signals are working correctly.

Using the divide-and-conquer approach, simple functions are tested first, followed by the more complex ones.

Full Functional Testing

Having verified the operation of smaller subcircuits, it is necessary to test the functionality of the entire system on the PCB. The number of errors often depends on the thoroughness of the simulation done during the design process. In general, it is difficult to simulate large digital systems fully, so some errors are likely to be found on the PCB. Typical errors are due to

- Manufacturing errors, such as wrong wiring traces, blown components, or incorrect power supply voltage.
- Incorrect specifications.
- Designer's misinterpretation of information on the data sheets that describe some chips.
- Incorrect information on the data sheets provided by the chip manufacturer.

As mentioned earlier, PCBs contain multiple layers of wiring. Each layer may have several thousands of wires in it. Finding and fixing errors can be a difficult and time-consuming task, especially if errors involve wires in internal (as opposed to the top or bottom) wiring layers.

Timing

It is next necessary to verify the timing of the circuit. A good strategy is to start with a slow clock. If the circuit works properly, then the clock frequency is gradually increased until the required operating frequency is reached.

Timing problems arise because of propagation delays through various paths in a circuit. These delays are caused by the logic gates and the wiring that interconnects them. It is essential to ensure that all data inputs to flip-flops in the circuit are stable before the active edge of the clock signal arrives, as required by the setup time.

Reliability

A digital system is expected to operate reliably for a long time. Its reliability may be affected by several factors, such as timing, noise, and crosstalk problems.

The timing of signals has to provide some safety margin to allow for small changes in propagation delays. If the timing is too tight, then it is likely that the circuit will operate correctly for some period of time, but will eventually fail because of a timing error. The timing of chips may change with temperature, so failures can occur if thermal constraints are not adhered to. Cooling is usually provided by means of fans.

11.8.2 INSTRUMENTATION

Testing of circuits implemented in PCBs requires some specialized instruments.

Oscilloscope

The details of individual signals can be examined using an oscilloscope. This instrument displays the voltage waveform of a signal, showing the potential problems with respect to propagation delay and noise. The waveform displayed on an oscilloscope shows the actual voltage levels of the signal; it does not depict the simplified view of ideal waveforms that have perfectly square edges. If the user wants to see only the logic values of a signal (0 or 1), then a different type of instrument called a logic analyzer can be used.

Logic Analyzer

While an oscilloscope allows simultaneous examination of a few signals, a logic analyzer allows examination of tens or even hundreds of signals at the same time. It takes inputs from a set of points in the circuit, by means of probes attached to these points, and

digitizes and displays the detected signals in the form of waveforms on a screen. A powerful feature of the logic analyzer is that it has internal storage capable of recording a sequence of changes in the signals over a substantial period of time. Then any segment of this information can be displayed as desired by the operator. Typically, it is possible to record a few milliseconds' worth of events, which involves many cycles of a normal digital clock.

Looking at the waveforms taken when the circuit under test is working properly is not helpful in the debugging process. It is essential to see the waveforms generated when a malfunction takes place. The logic analyzer can be "triggered" to record a window of events that occurred before and after the trigger event. The user must specify the trigger event. For example, suppose that a malfunction is suspected to be caused by two control signals, A and B , being asserted at the same time, even though the design specification requires that these signals be mutually exclusive. A useful trigger point can then be established as the time when the AND of A and B has the value 1. Finding suitable trigger events can be difficult, and the user must rely on intuition and experience.

To use a logic analyzer effectively, it must be possible to connect the probes to some useful (for testing purposes) points in the circuit. Thus it is important to provide such "test" points when a PCB is being designed.

11.9 CONCLUDING REMARKS

Manufactured products must be tested to ensure that they perform as expected. All of the techniques discussed in this chapter are relevant for this type of testing. The development of tests and the required responses is based on the assumption that the circuits are designed correctly. Thus it is the validity of the physical implementation that is being tested.

Another aspect of testing occurs during the design process. The designer has to ascertain that the designed circuit meets the specifications. From the testing point of view, this poses a significant problem because there exists no provably good circuit that can be used to generate the desired tests. CAD tools are helpful in deriving tests for a designed circuit, but they cannot determine whether the circuit is indeed what the designer intended to achieve in terms of its functionality. A design error usually results in a circuit that has somewhat different functionality than required by the specification.

Small circuits can be tested fully to verify their functionality. A combinational circuit can be tested to see if it performs according to its truth table. A sequential circuit can be tested by checking the transitions specified in the state table. This is much easier to do if the circuit is designed for testability, as explained in section 11.6.1. Large circuits cannot be tested exhaustively, because a vast number of tests would have to be applied. In this case the designer's ingenuity is needed to determine a manageable set of tests that will hopefully demonstrate the correctness of the circuit.

PROBLEMS

- 11.1** Derive a table similar to Figure 11.1*b* for the circuit in Figure P11.1 to show the coverage of the various stuck-at-0 and stuck-at-1 faults by the eight possible tests. Find a minimal test set for this circuit.

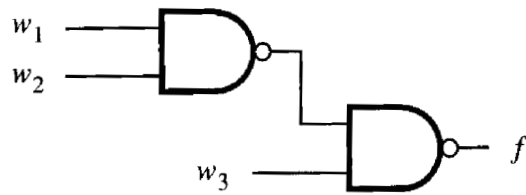


Figure P11.1 Circuit for problem 11.1.

11.2 Repeat problem 11.1 for the circuit in Figure P11.2.

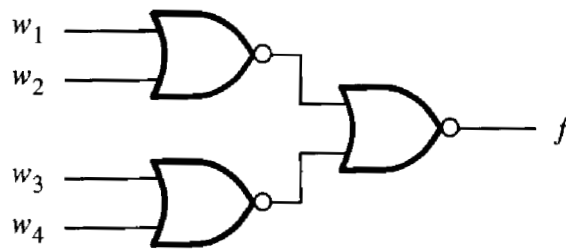


Figure P11.2 Circuit for problem 11.2.

***11.3** Devise a test to distinguish between two circuits that implement the following expressions

$$f = x_1x_2x_3 + x_2\bar{x}_3x_4 + \bar{x}_1\bar{x}_2x_4 + \bar{x}_1x_3\bar{x}_4$$

$$g = (\bar{x}_1 + x_2)(x_3 + x_4)$$

11.4 Consider the circuit in Figure P11.3. Sensitize each path in this circuit to obtain a complete test set that comprises a minimum number of tests.

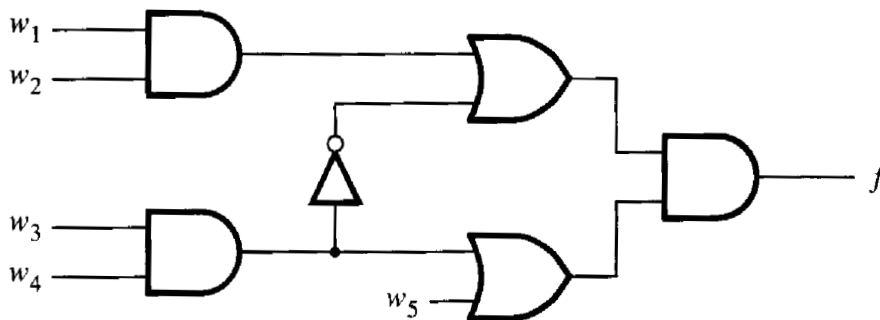


Figure P11.3 Circuit for problem 11.4.

***11.5** For the circuit of Figure 11.4a, show the tests that can detect each of the faults: $w_1/0$, $w_4/1$, $g/0$, and $c/1$.

- 11.6** Suppose that the tests $w_1w_2w_3w_4 = 0100, 1010, 0011, 1111,$ and 0110 are chosen randomly to test the circuit in Figure 11.3. What percentage of single faults are detected using these tests?
- 11.7** Repeat problem 11.6 for the circuit in Figure 11.4a.
- 11.8** Repeat problem 11.6 for the circuit in Figure 11.5.
- *11.9** Consider the circuit in Figure P11.4. Are all single stuck-at-0 and stuck-at-1 faults in this circuit detectable? If not, explain why.

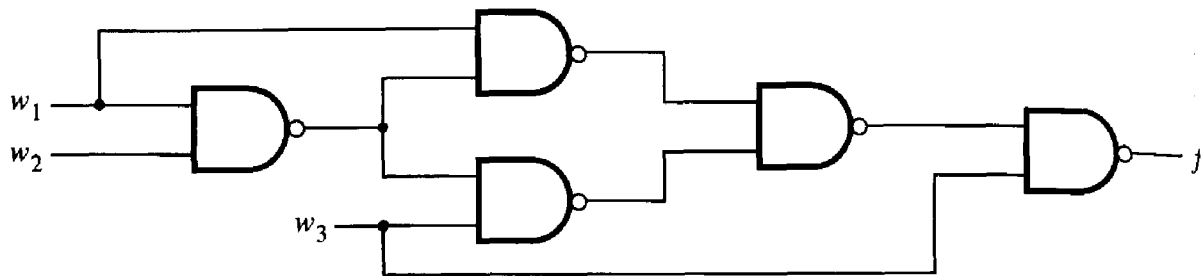


Figure P11.4 Circuit for problem 11.9.

- 11.10** Prove that in a circuit in which all gates have a fan-out of 1, any set of tests that detects all single faults on the input wires detects all single faults in the entire circuit.
- *11.11** The circuit in Figure P11.5 determines the parity of a four-bit data unit. Derive a minimal test set that can detect all single stuck-at-0 and stuck-at-1 faults in this circuit. Would your test set work if the XOR gates are implemented using the circuit in Figure 4.26c? Can your result be extended to a general case that involves n -bit data units?

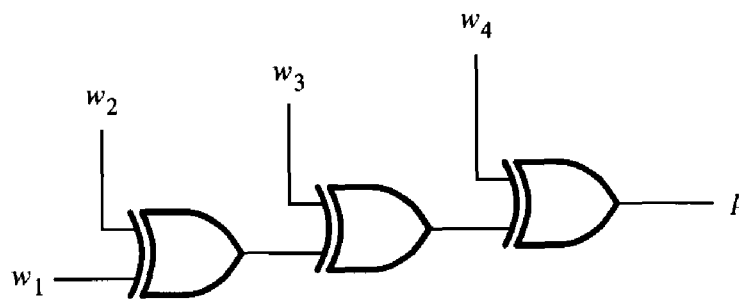


Figure P11.5 Circuit for problem 11.11.

- *11.12** Derive a test set that can detect all single faults in the decoder circuit in Figure 6.16c.
- 11.13** List all single faults in the circuit in Figure 11.4a that can be detected using each of the tests $w_1w_2w_3w_4 = 1100, 0010,$ and 0110 .

- 11.14** Sensitize each path in the combinational part of the circuit in Figure 11.12 to obtain a complete test set that comprises as few tests as possible. Show how your test set can be applied to test this circuit. How many clock cycles are needed to perform the necessary tests?
- 11.15** Derive an ASM chart that represents the flow of control needed to test the circuit in Figure 11.12.
- 11.16** The circuit in Figure 11.12 provides an easily testable implementation of the FSM in Figure 8.81. In Example 11.3 we showed how this circuit may be tested by testing the combinational part using randomly chosen tests. A different approach to testing may be to attempt to determine whether the circuit actually realizes the functionality specified in the state table in Figure 8.81*b*. This can be done by making the circuit go through all transitions given in the state table. For example, after applying the $Reset = 0$ signal, the circuit begins in state *A*. It must be verified that the circuit is indeed forced into state *A* by scanning out the expected valuation $y_2y_1 = 00$. Next each transition must be checked. To verify the transition $A \rightarrow A$ if $w = 0$, it is necessary to make the input w equal to 0 and allow the normal operation to take place for one clock cycle by making $\overline{Normal/Scan} = 0$. The value of the output z must be observed. This is followed by scanning out the values of y_2 and y_1 to see if $y_2y_1 = 00$. At the same time, the valuation for the next test should be scanned in. If this test involves verifying that $B \rightarrow A$ if $w = 0$, then the valuation $y_2y_1 = 01$ is scanned in. This process continues until all transitions have been verified.
- Indicate in the form of a table the values of the signals $\overline{Normal/Scan}$, $Scan-in$, $Scan-out$, w , and z , as well as the transition tested, for each clock cycle necessary to perform the complete test for this circuit.
- 11.17** Write VHDL code that represents the circuit in Figure 11.12.
- 11.18** Derive an ASM chart that describes the control needed to test a digital system that uses the BILBO structure in Figures 11.18 and 11.19.

REFERENCES

1. A. Miczo, *Digital Logic Testing and Simulation* (Wiley: New York, 1986).
2. P. K. Lala, *Practical Digital Logic Design and Testing* (Prentice-Hall: Englewood Cliffs, NJ, 1996).
3. F. H. Hill and G. R. Peterson, *Computer Aided Logical Design with Emphasis on VLSI*, 4th ed. (Wiley: New York, 1993).
4. Y. M. El Ziq, "Automatic Test Generation for Stuck-Open Faults in CMOS VLSI," Proc. 18th Design Automation Conf., 1981, pp. 347–54.
5. D. Baschiera and B. Courtois, "Testing CMOS: A Challenge," *VLSI Design*, October 1984, pp. 58–62.
6. P. S. Moritz and L. M. Thorsen, "CMOS Circuit Testability," *IEEE Journal of Solid State Circuits* SC-21 (April 1986), pp. 306–9.

7. J. P. Roth et al., "Programmed Algorithms to Compute Tests to Detect and Distinguish Between Failures in Logic Circuits," *IEEE Transactions on Computers* EC-16, no. 5, (October 1967), pp. 567–80.
8. J. Abraham and V. K. Agarwal, "Test Generation for Digital Systems," in D. K. Pradhan, *Fault-Tolerant Computing*, vol. 1, (Prentice-Hall: Englewood Cliffs, NJ, 1986).
9. T. W. Williams and K. P. Parker, "Design for Testability—a Survey," *IEEE Transactions on Computers* C-31 (January 1982), pp. 2–15.
10. V. P. Nelson, H. T. Nagle, B. D. Carroll, and J. D. Irwin, *Digital Logic Circuit Analysis and Design* (Prentice-Hall: Englewood Cliffs, NJ, 1995).
11. W. W. Peterson and E. J. Weldon Jr., *Error-Correcting Codes*, 2nd ed. (MIT Press: Boston, MA, 1972).
12. J. E. Smith, "Measures of Effectiveness of Fault Signature Analysis," *IEEE Transactions on Computers* C-29, no. 7 (June 1980), pp. 510–4.
13. R. David, "Testing by Feedback Shift Register," *IEEE Transactions on Computers* C-29, no. 7 (July 1980), pp. 668–73.
14. B. Koenemann, J. Mucha, and G. Zwiehoff, "Built-In Logic Block Observation Techniques," Proceedings 1977 Test Conference, IEEE Pub. 79CH1609-9C, October 1979, pp. 37–41.
15. A. Y. Chan, "Easy-to-Use Signature Analyzer Accurately Troubleshoots Complex Logic Circuits," *Hewlett-Packard Journal*, May 1997, pp. 9–14.
16. *Test Access Port and Boundary-Scan Architecture*, IEEE Standard 1149.1, May 1990.
17. *High-Speed Board Designs*, Application Note 75, Altera Corporation, January 1998.
18. L. Y. Levesque, "High-Speed Interconnection Techniques," Technical Report, Texas Instruments Inc., 1994.

chapter

12

COMPUTER AIDED DESIGN TOOLS

CHAPTER OBJECTIVES

In this chapter you will learn how CAD tools can be used to design and implement a logic circuit. The discussion deals with the synthesis and physical design stages in a typical CAD system, including

- Netlist extraction
- Technology mapping
- Placement
- Routing
- Static timing analysis

We introduced CAD tools in section 2.9, and have discussed them briefly in other chapters. The word *tool* in this context means a software program that allows a user to perform a particular task. In this chapter we describe some of the tools in a typical CAD system in more detail, by showing how a small design example is processed and optimized as it passes through different stages in the CAD flow.

12.1 SYNTHESIS

Figure 12.1, which is reproduced from Figure 2.29, gives an overview of a CAD system. A description of the desired circuit is prepared, usually in the form of a hardware description language like VHDL. The VHDL code is then processed by the synthesis stage of the CAD system. Synthesis is the process of generating a logic circuit from the user's specification. Figure 12.2 shows three typical phases that are found in the synthesis process.

12.1.1 NETLIST GENERATION

The *netlist generation* phase checks the syntax of the code, and reports any errors such as undefined signals, missing parentheses, and wrong keywords. Once all errors are fixed a circuit netlist is generated as determined by the semantics of the VHDL code. The netlist uses logic expressions to describe the circuit, and includes components such as adders, flip-flops, and finite state machines.

12.1.2 GATE OPTIMIZATION

The next phase is *gate optimization*, which performs the kinds of logic optimizations described in Chapter 4. These optimizations manipulate the netlist to obtain an equivalent, but better circuit according to the optimization goals. As we said in section 2.9.2, the measurement of what makes one circuit better than another may be based on the cost of the circuit, its speed of operation, or a combination of both.

As an example of results produced by the synthesis phases discussed so far, consider the VHDL code for the *addersubtractor* entity in Figure 12.3, which specifies a circuit that can add or subtract n -bit numbers and accumulate the result in a register. From this code the synthesis tool produces a netlist that corresponds to the circuit in Figure 12.4. The input numbers, $A = a_0, \dots, a_{n-1}$ and $B = b_0, \dots, b_{n-1}$, are placed into registers *Areg* and *Breg* prior to being used in addition or subtraction operations. These registers synchronize the operation of the circuit if A and B are externally provided asynchronous inputs. The control input *Sel* determines the mode of operation. If $Sel = 0$, then A is selected as an input to the adder; if $Sel = 1$, then the result register *Zreg* is selected. The control input *AddSub* determines whether the operation is addition or subtraction. The flip-flops in Figure 12.4 for registers A , B , Sel , $AddSub$, and *Overflow* are inferred from the code at the bottom of Figure 12.3a. Multiplexers are produced from the *mux2to1* entity in Figure 12.3b, and an adder is generated from the *adderk* entity in Figure 12.3c. The exclusive-OR gates connected to

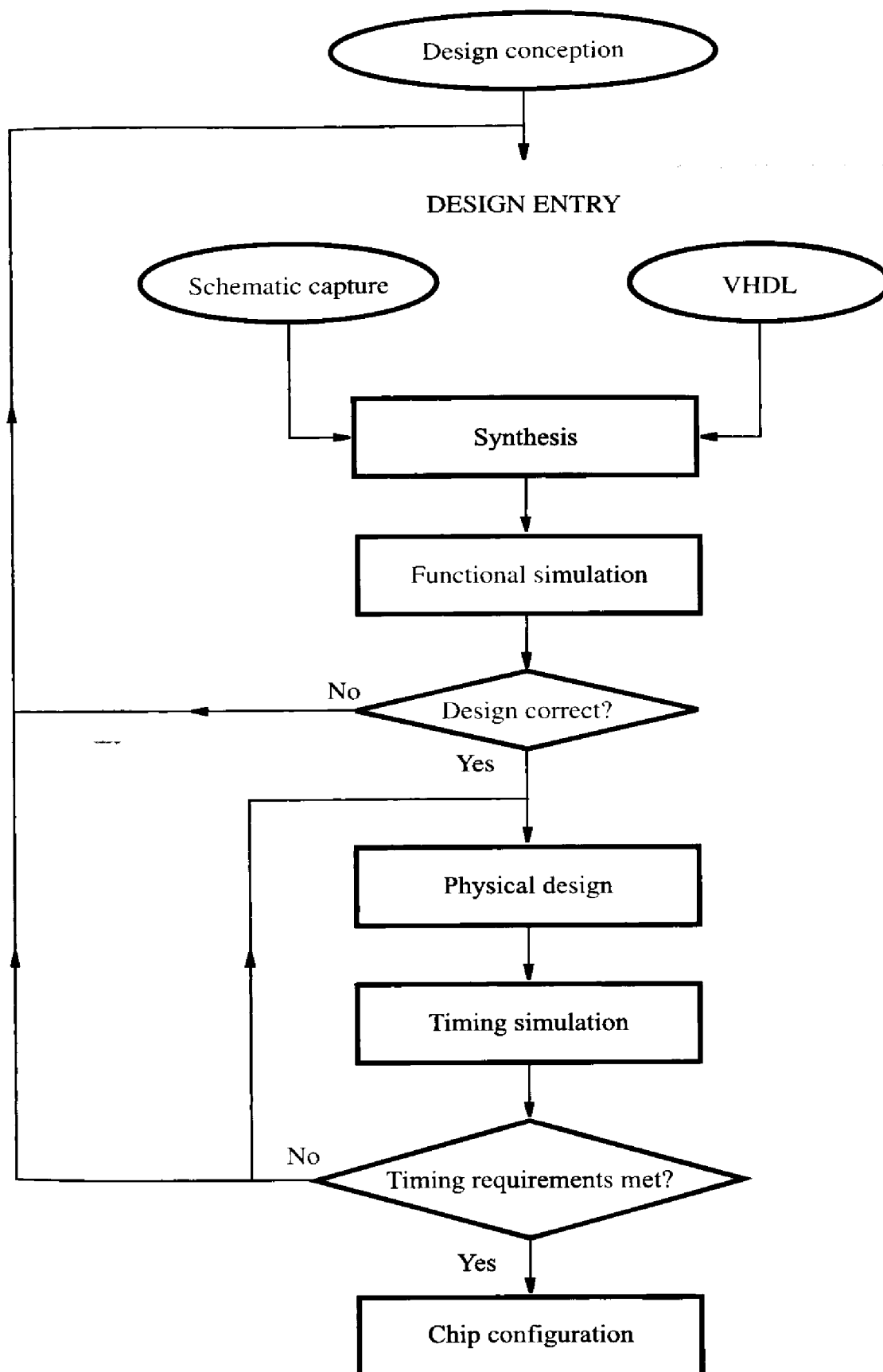


Figure 12.1 A typical CAD system.

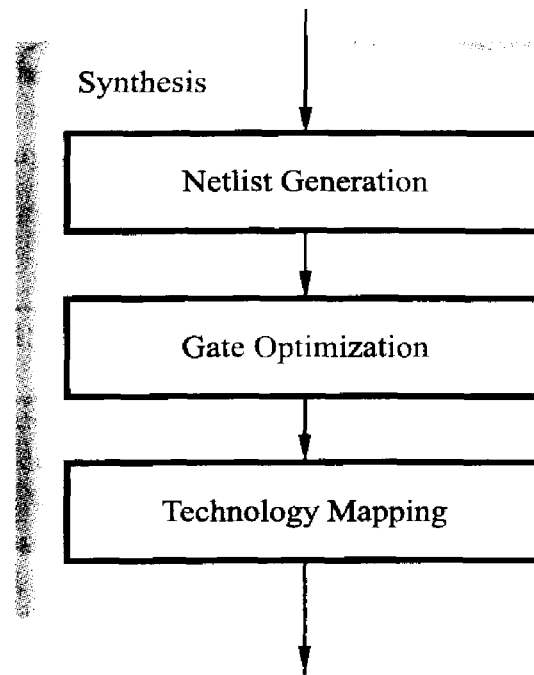


Figure 12.2 The stages included in a synthesis tool.

register *B*, and the XOR function for the *Overflow* output are generated from the code at the end of the *addersubtractor* entity.

12.1.3 TECHNOLOGY MAPPING

The final phase of synthesis is *technology mapping*. This phase determines how each component in the netlist can be realized in the resources available in the target chip. To see the results of technology mapping assume that we have selected an FPGA for implementation of our example circuit. We showed in section 3.6.5 that an FPGA contains a two-dimensional array of logic blocks. Figure 3.38 gives a diagram of a simple logic block that contains a three-input lookup table (LUT) and a flip-flop. The block has one output, which can be selected from either the LUT or the flip-flop.

A more flexible logic block is depicted in Figure 12.5a. It contains a four-input LUT and a flip-flop, and has two outputs. A multiplexer is provided to allow loading of the flip-flop from the LUT or directly from input *In3*. Another multiplexer allows the stored value in the flip-flop to be fed back to one input of the LUT. There are a number of different ways, or *modes*, in which this logic block can be used. The most straightforward choice is to implement a function of up to four inputs in the LUT, and store this function's value in the flip-flop; both the LUT and flip-flop can provide outputs from the logic block. Parts *b* to *e* of the figure illustrate four other modes of using the block. In parts *b* and *c* only the LUT or the flip-flop is used, but not both. In part *d* only the LUT provides an output of the logic block, and one of the LUT's inputs is connected to the flip-flop.

```

LIBRARY ieee ;
USE ieee.std_logic_1164.all ;

ENTITY addersubtractor IS
    GENERIC ( n : INTEGER := 16 ) ;
    PORT ( A, B
           : IN          STD_LOGIC_VECTOR(n-1 DOWNTO 0) ;
          Clock, Reset, Sel, AddSub
           : IN          STD_LOGIC ;
          Z
           : BUFFER     STD_LOGIC_VECTOR(n-1 DOWNTO 0) ;
          Overflow
           : OUT        STD_LOGIC ) ;
END addersubtractor ;

ARCHITECTURE Behavior OF addersubtractor IS
    SIGNAL G, H, M, Areg, Breg, Zreg, AddSubR_n : STD_LOGIC_VECTOR(n-1 DOWNTO 0) ;
    SIGNAL SelR, AddSubR, carryout, over_flow : STD_LOGIC ;
    COMPONENT mux2to1
        GENERIC ( k : INTEGER := 8 ) ;
        PORT ( V, W : IN      STD_LOGIC_VECTOR(k-1 DOWNTO 0) ;
              Sel  : IN      STD_LOGIC ;
              F    : OUT     STD_LOGIC_VECTOR(k-1 DOWNTO 0) ) ;
    END COMPONENT ;
    COMPONENT adderk
        GENERIC ( k : INTEGER := 8 ) ;
        PORT ( carryin : IN    STD_LOGIC ;
              X, Y     : IN    STD_LOGIC_VECTOR(k-1 DOWNTO 0) ;
              S        : OUT   STD_LOGIC_VECTOR(k-1 DOWNTO 0) ;
              carryout : OUT   STD_LOGIC ) ;
    END COMPONENT ;
BEGIN
    PROCESS ( Reset, Clock )
    BEGIN
        IF Reset = '1' THEN
            Areg <= (OTHERS => '0'); Breg <= (OTHERS => '0');
            Zreg <= (OTHERS => '0'); SelR <= '0'; AddSubR <= '0'; Overflow <= '0';
        ELSIF Clock'EVENT AND Clock = '1' THEN
            Areg <= A; Breg <= B; Zreg <= M;
            SelR <= Sel; AddSubR <= AddSub; Overflow <= over_flow;
        END IF ;
    END PROCESS ;

```

... continued in Part *b*

Figure 12.3 VHDL code for an accumulator circuit (Part *a*).

In Chapter 5 we said that FPGAs often contain dedicated circuitry for implementation of fast adder circuits. Figure 12.5*e* shows one way in which such circuitry can be realized. The LUT is used in two halves, where one half produces the sum function of three LUT inputs and the other half produces the carry function of these inputs (recall from section 3.6.5 that a four-input LUT is built by using two three-input LUTs). The sum function can provide an output of the block or be stored in the flip-flop, and the carry function provides a special output signal. This carry output connects directly to a neighboring logic block that uses it as a carry input. This block in turn generates the next stage of carry output, and so

```

nbit_adder: adderk
    GENERIC MAP ( k => n )
    PORT MAP ( AddSubR, G, H, M, carryout );
multiplexer: mux2to1
    GENERIC MAP ( k => n )
    PORT MAP ( Areg, Z, SelR, G );
AddSubR_n <= (OTHERS => AddSubR);
H <= Breg XOR AddSubR_n;
over_flow <= carryout XOR G(n-1) XOR H(n-1) XOR M(n-1);
Z <= Zreg;
END Behavior;

LIBRARY ieee;
USE ieee.std_logic_1164.all;

ENTITY mux2to1 IS
GENERIC ( k : INTEGER := 8 );
PORT ( V, W : IN STD_LOGIC_VECTOR(k-1 DOWNTO 0);
      Sel : IN STD_LOGIC;
      F : OUT STD_LOGIC_VECTOR(k-1 DOWNTO 0) );
END mux2to1;

ARCHITECTURE Behavior OF mux2to1 IS
BEGIN
    PROCESS ( V, W, Sel )
    BEGIN
        IF Sel = '0' THEN
            F <= V;
        ELSE
            F <= W;
        END IF;
    END PROCESS;
END Behavior;

... continued in Part c

```

Figure 12.3 VHDL code for an accumulator circuit (Part *b*).

on. In this way, direct connections between neighboring logic blocks are used to form fast carry chains.

Figure 12.6 shows a part of the results of technology mapping for the netlist generated for Figure 12.4. Each logic block is highlighted with a blue square, and has a label on the lower left corner that indicates which mode in Figure 12.5 is being used. The figure shows bit h_0 from Figure 12.4, which is produced by a logic block in mode *d*. This block uses a flip-flop to store the value of primary input b_0 , and implements an XOR function in its LUT, which is needed in subtraction operations to complement the number B . One input of the XOR is provided by the logic block in mode *c* that stores in a flip-flop the value of the *AddSub* input. This flip-flop also drives 15 other logic blocks that implement h_1, \dots, h_{15} , but these blocks are not shown in the figure.

```

LIBRARY ieee ;
USE ieee.std_logic_1164.all ;
USE ieee.std_logic_signed.all ;

ENTITY adderk IS
    GENERIC ( k : INTEGER := 8 ) ;
    PORT ( carryin : IN  STD_LOGIC ;
          X, Y     : IN  STD_LOGIC_VECTOR(k-1 DOWNTO 0) ;
          S       : OUT STD_LOGIC_VECTOR(k-1 DOWNTO 0) ;
          carryout : OUT STD_LOGIC ) ;
END adderk ;

ARCHITECTURE Behavior OF adderk IS
    SIGNAL Sum : STD_LOGIC_VECTOR(k DOWNTO 0) ;
BEGIN
    Sum <= ('0' & X) + Y + carryin ;
    S <= Sum(k-1 DOWNTO 0) ;
    carryout <= Sum(k) ;
END Behavior ;

```

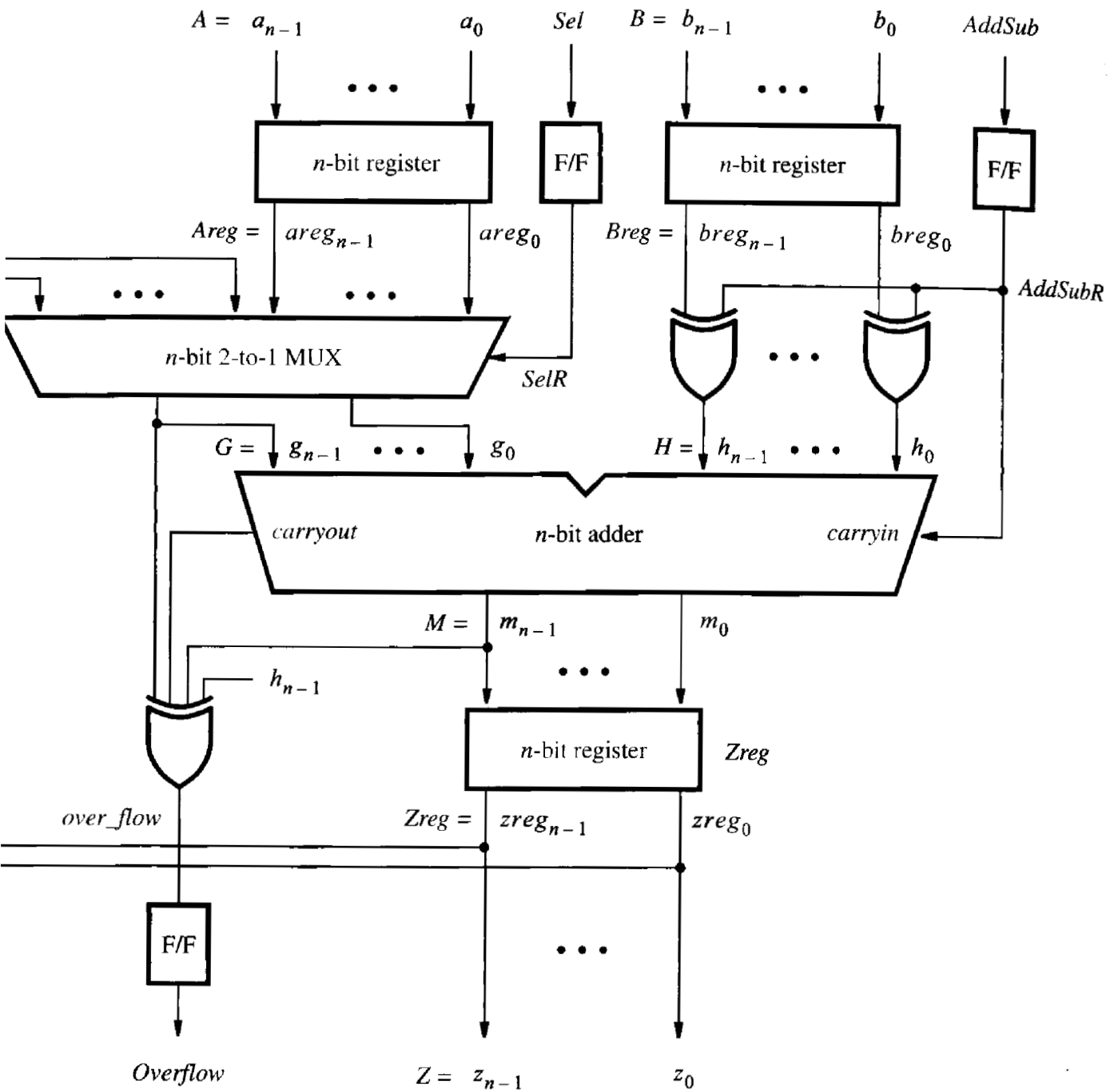
Figure 12.3 VHDL code for an accumulator circuit (Part c).

The *AddSub* flip-flop is connected to the carry-in of the first logic block in the adder. This block uses mode *e* to produce sum and carry outputs. The sum is stored in a flip-flop that produces z_0 , and the carry feeds the next stage of the adder. The figure shows the carry function in the form

$$c_1 = \overline{(c_0 \oplus h_0)} \cdot h_0 + (c_0 \oplus h_0) \cdot g_0$$

This expression is functionally equivalent to the one used in Chapter 5, which has the form $c_1 = c_0 h_0 + c_0 g_0 + h_0 g_0$, but it represents more closely how the carry chain is built in an FPGA. The last logic block of the adder in Figure 12.6 does not use its flip-flop, because the sum output has to be connected directly to the logic block that implements the *Overflow* signal. The sum output cannot be provided from both the combinational and registered outputs concurrently, so a separate logic block in mode *c* is needed for the z_{15} signal.

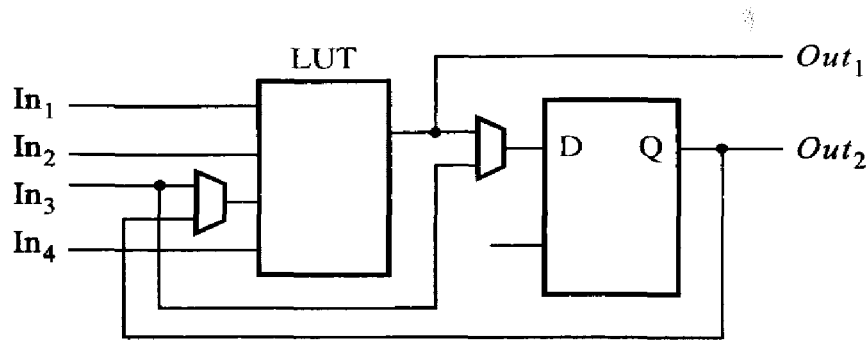
Figure 12.6 shows only a few of the logic blocks that a technology mapping tool would create for implementing our circuit. In general, there are many different ways in which technology mapping can be done, and each method will lead to equivalent, but different circuits. The reader can consult references [1–3] for a detailed discussion of technology mapping approaches.



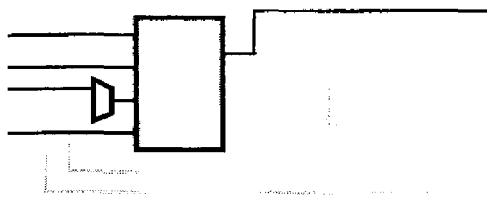
12.4 Circuit specified by the code in Figure 12.3.

12.2 PHYSICAL DESIGN

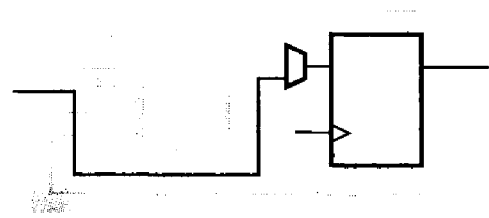
The next stages following synthesis in Figure 12.1 are functional simulation and physical design. As we said in section 2.9, functional simulation involves applying test patterns to the synthesized netlist and checking to see if it produces the correct outputs. The simulation assumes that there are no propagation delays in the circuit, because the intent is to evaluate



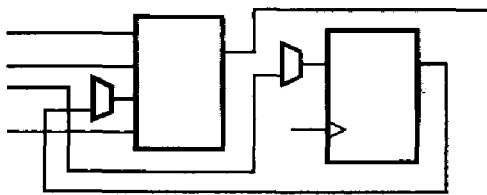
(a) An FPGA logic element.



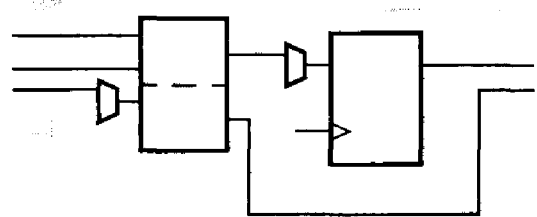
(b) Combinational mode



(c) Synchronous mode



(d) Synchronous feedback mode



(e) Arithmetic (synchronous) mode

Figure 12.5 Different modes of an FPGA logic block.

the basic functionality rather than timing. The netlist used by a functional simulator could be either the version before technology mapping, or after. An example of performing functional simulation using the software included with the book is provided in Appendix B, and we will not discuss it further here.

Once the netlist produced by synthesis is functionally correct, the physical design stage can be performed. This stage determines exactly how the synthesized netlist will be implemented in the target chip. As illustrated in Figure 12.7, three phases are involved: placement, routing, and static timing analysis.

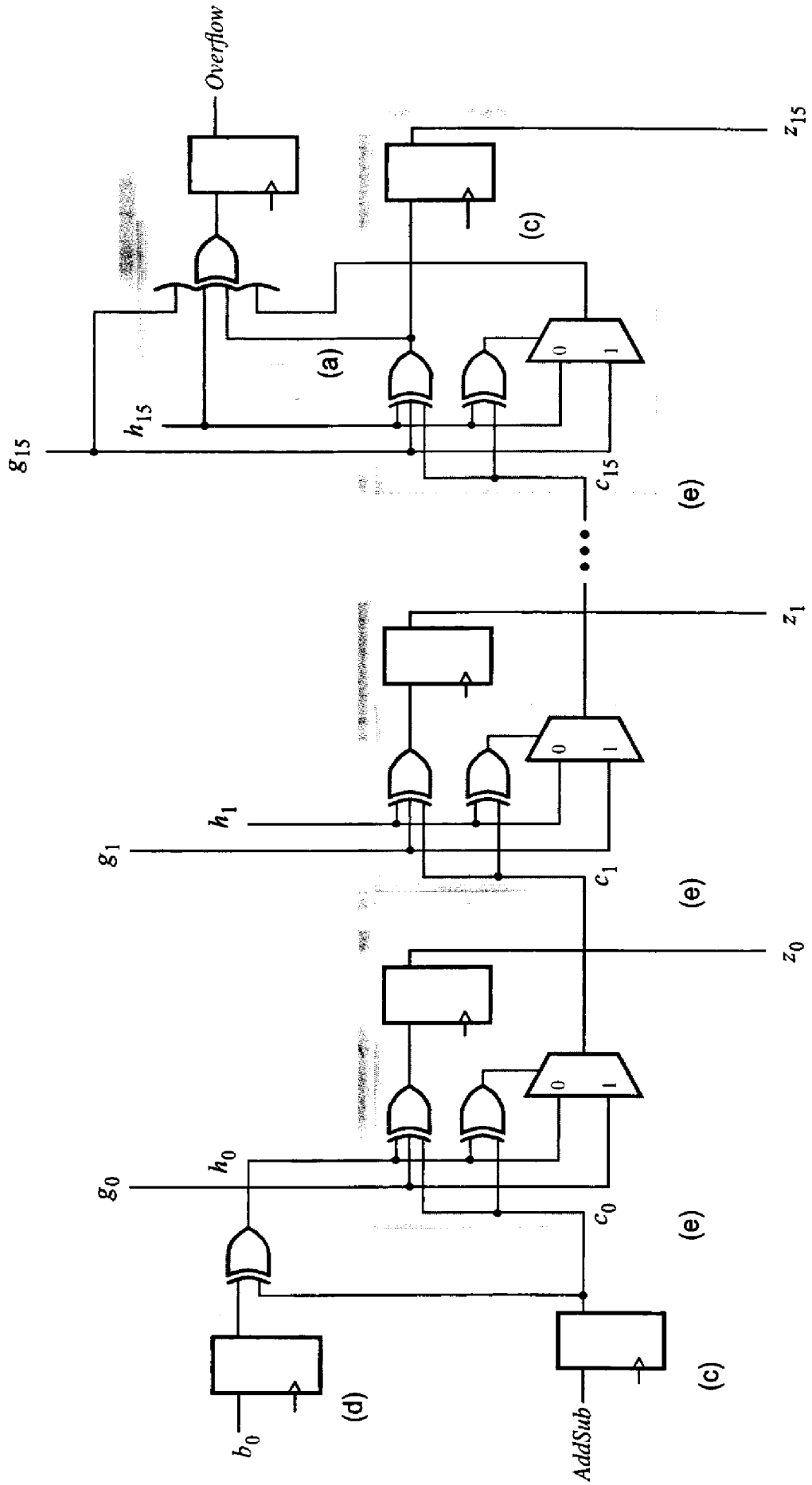


Figure 12.6 A part of the circuit in Figure 12.4 after technology mapping.

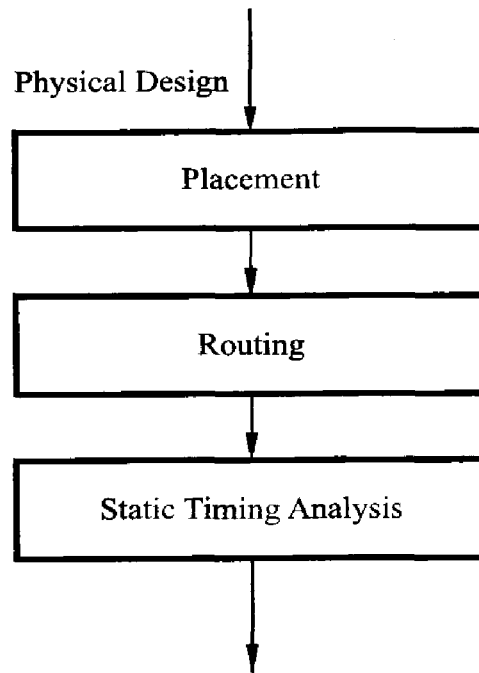


Figure 12.7 Phases in physical design.

12.2.1 PLACEMENT

The placement phase chooses a location on the target device for each logic block in the technology-mapped netlist. An example of a placement result is given in Figure 12.8. It shows an array of logic blocks in a small portion of an FPGA chip. The white squares represent unoccupied blocks and the grey squares show the placement of blocks that implement the circuit of Figure 12.4. There is a total of 53 logic blocks in this circuit, including the ones shown in Figure 12.6. Also shown in Figure 12.8 is the placement of some of the primary inputs to the circuit, which are assigned to pins around the chip periphery.

To find a good placement solution a number of different locations have to be considered for each logic block. For a large circuit, which may contain tens of thousands of blocks, this is a hard problem to solve. To appreciate the complexity involved, consider how many different placement solutions are possible for a given circuit. Assume that the circuit has N logic blocks, and it is to be placed in an FPGA that also contains exactly N blocks. A placement tool has N choices for the location of the first block that it selects. There remain $N - 1$ choices for the second block, $N - 2$ choices for the third, and so on. Multiplying these choices gives a total of $(N)(N - 1) \cdots (1) = N!$ possible placement solutions. For even moderate values, $N!$ is a huge number, which means that heuristic techniques must be used to find a good solution while considering only a small fraction of the total number of choices. A typical commercial placement tool operates by constructing an initial placement configuration and then moving logic blocks to different locations in an iterative manner. For each iteration the quality of the solution is assessed by using metrics that estimate the

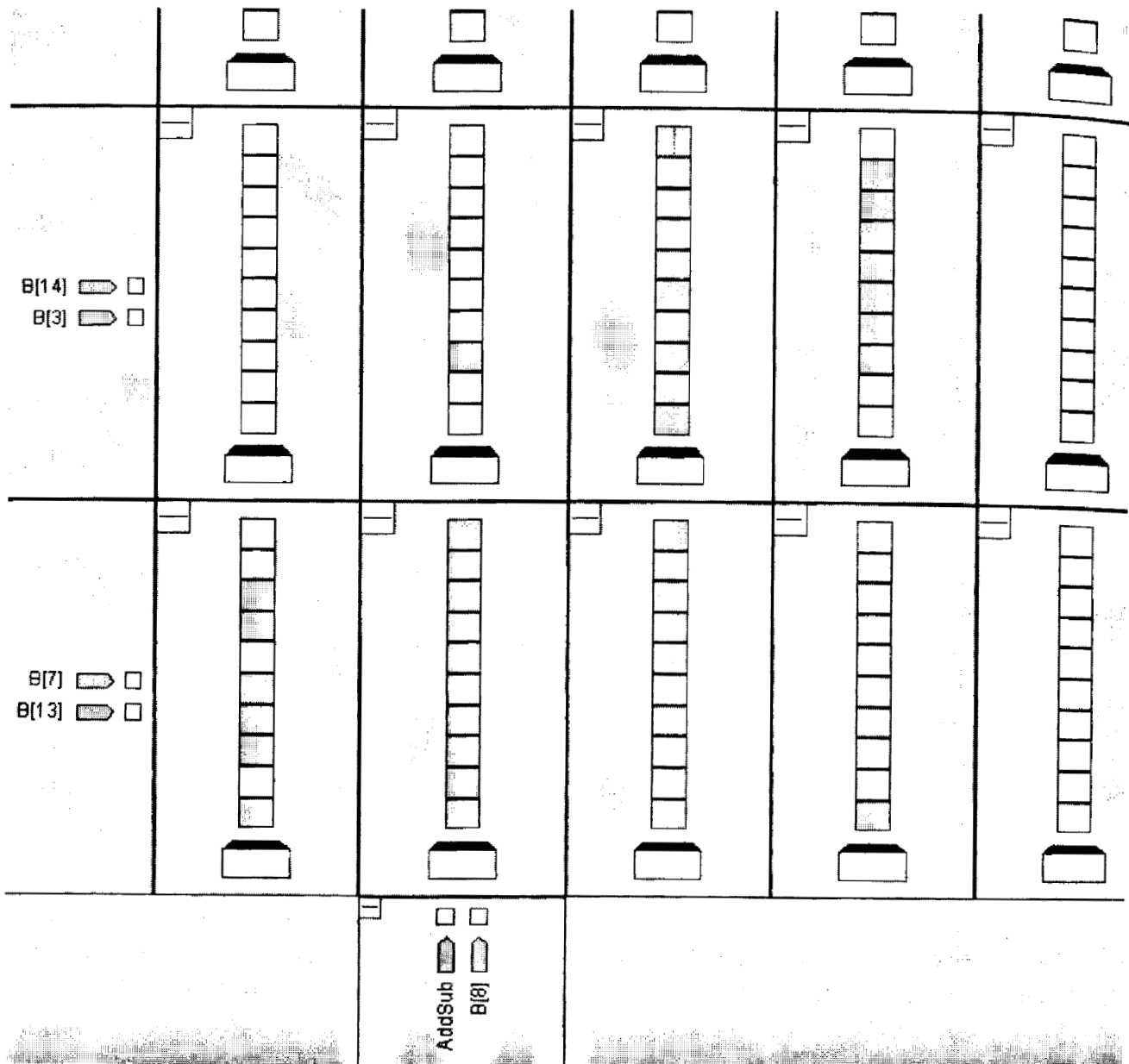


Figure 12.8 Placement of the circuit in Figure 12.6.

speed of operation of the implemented circuit, or its cost. The placement problem has been studied extensively and is described in detail in references [4–7].

12.2.2 ROUTING

Once a location in the chip is chosen for each logic block in a circuit, the routing phase connects the blocks together by using the wires that exist in the chip. An example of a routing solution for the placement in Figure 12.8 is given in Figure 12.9. In addition to showing the logic blocks, this figure also displays some of the wires in the chip. Wires

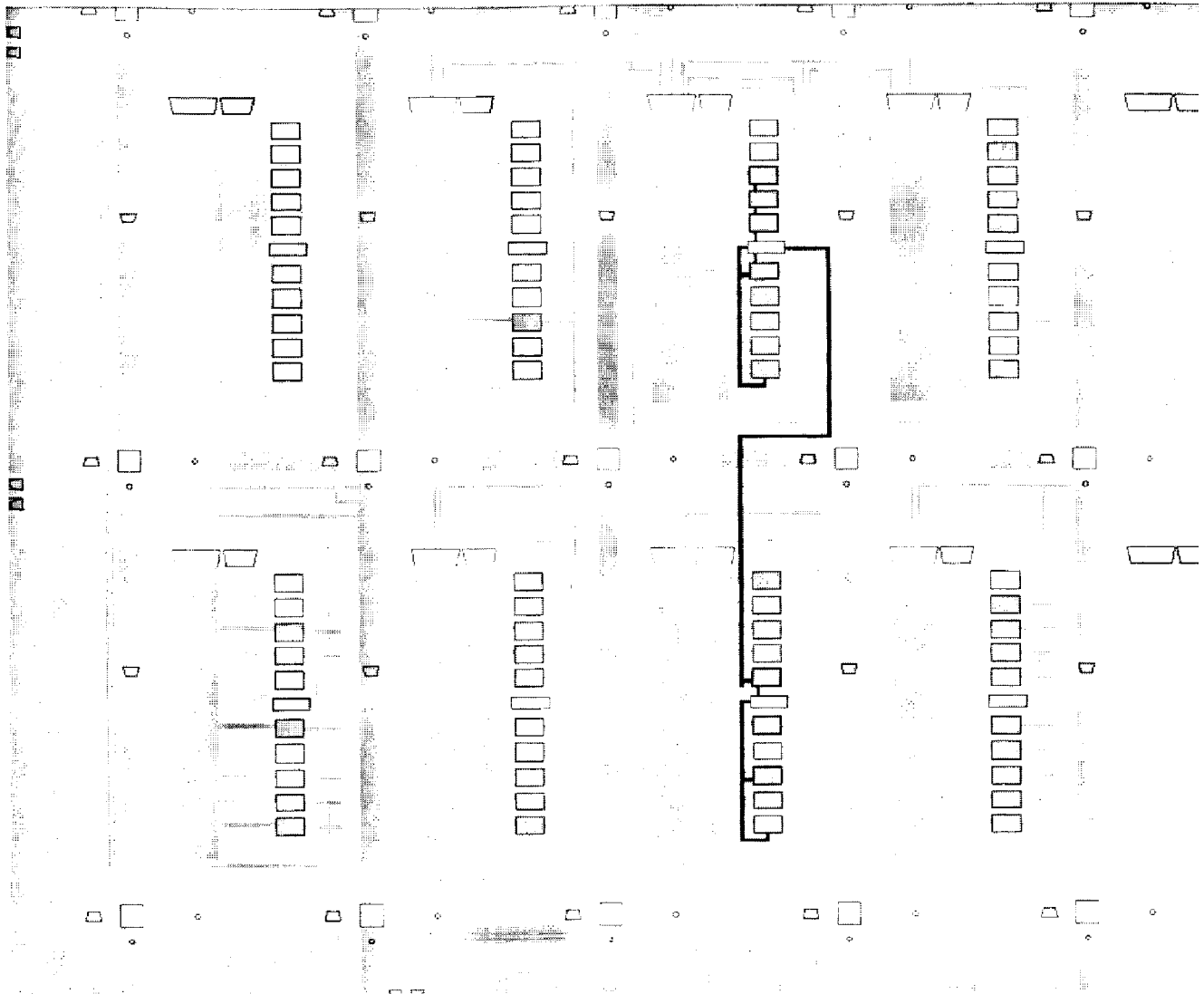


Figure 12.9 Routing for the placement in Figure 12.8.

that are being used by the implemented circuit are shaded in grey. The figure depicts both individual wires, which may be of various lengths, and bundles of wires, which are shown as grey rectangles. The routing CAD tool tries to make the best use of various kinds of wires, such as efficient connections for carry chains. Figure 12.9 shows an example of the carry chain path from Figure 12.6. Black lines highlight the carry chain wires, which connect through the stages of the adder, ending at the *Overflow* register. A detailed discussion of routing tools can be found in references [3], [5–6], and [8].

12.2.3 STATIC TIMING ANALYSIS

After routing is complete the timing delays for the implemented circuit are known, because the CAD system computes the timing delays of all blocks and wires in the chip. A static timing analysis tool examines this delay information and produces a set of tables that

quantify the circuit's performance. An example of a timing analysis result is given in Table 12.1, which lists four parameters: f_{max} , t_{su} , t_{co} , and t_h . The f_{max} value specifies the maximum operating frequency of the circuit's *clock*. This value is determined by the path with the longest propagation delay, often called the *critical path*, between any two flip-flops in the circuit. As shown in section 10.3, the path delay must account for the delays through logic blocks and wires, as well as the flip-flop register delay (t_{rd}) and setup (t_{su}) parameters. In our example the critical path delay is $1/261.1 \times 10^6 = 3.83$ ns. The last two columns in the f_{max} row show that the path starts at the *AddSub* flip-flop and ends at the *Overflow* flip-flop shown in Figure 12.6.

Most CAD systems allow users to specify the timing requirements for their circuit. In Table 12.1 we assume the user has specified that the circuit *clock* has to operate correctly up to a frequency of 200 MHz. The difference between this requirement and the result that is obtained by the CAD tools is referred to as *slack*. In the table, the requirement is that the propagation delays must not exceed $1/200 \times 10^6 = 5$ ns; the result is 3.83 ns, which gives a slack value of 1.17 ns. This positive slack means that the constraints have been met with some room to spare. If the obtained result had a negative slack, then the user's requirements would not have been met, and it would be necessary to modify the VHDL code or settings used in the CAD tool to try to meet the constraints.

The other rows in Table 12.1 show the timing results for the design's primary inputs and outputs. The t_{su} result indicates the worst-case setup requirement is 2.356 ns, from pin b_0 to flip-flop $breg_0$. This parameter means that the b_0 signal must have a stable value at least 2.356 ns before each active edge of the clock signal at its assigned pin. Since the designer specified a worst-case setup requirement of 10 ns, the obtained result means that the implemented circuit exceeds the requirement by a slack value of 7.644 ns. The worst-case clock-to-output delay for our circuit is 6.772 ns, from flip-flop $zreg_0$ to pin z_0 . This means that the propagation delay from an active edge of the clock signal at its pin to a corresponding change in the z_0 signal at its pin is 6.772 ns. Since the designer's constraint specifies that a 10 ns t_{co} is allowed, the available slack is 3.228 ns.

The last row in Table 12.1 gives a maximum hold time of 0.24 ns, for the path from pin b_1 to flip-flop $breg_1$. Hence, the signal at pin b_1 must maintain a stable value for at least 0.24 ns after each active edge at the clock pin. We assume that no constraint was set for this parameter, thus no slack value is shown.

Table 12.1 A summary of static timing analysis results.

Parameter	Actual	Required	Slack	From	To
f_{max}	261.1 MHz	200 MHz	1.17 ns	<i>AddSub</i>	<i>Overflow</i>
t_{su}	2.356 ns	10.0 ns	7.644 ns	b_0	$breg_0$
t_{co}	6.772 ns	10.0 ns	3.228 ns	$zreg_0$	z_0
t_h	0.240 ns	N/A	N/A	b_1	$breg_1$

Table 12.1 lists only the worst-case paths for f_{max} , t_{su} , t_{co} , and t_h . The implemented circuit will have a number of other paths that have smaller delays and greater slack values. A static timing analysis tool typically provides additional tables for each parameter, which list more paths.

The final stage of the CAD flow in Figure 12.1 is timing simulation. We show in Appendix C how timing simulation is performed by applying test patterns to the implemented circuit and observing both its functional and timing behavior.

12.3 CONCLUDING REMARKS

In this chapter we explained briefly a typical design flow made possible by the existence of powerful CAD tools. We considered only the most important subset of the tools available in commercial CAD systems. To learn more the reader can consult references [1–8], or visit the web sites of CAD tool suppliers. Table 12.2 lists some of the major vendors of CAD tools, and shows their web addresses and the names of some popular products.

Table 12.2 Major CAD tool products.

Vendor Name	WWW Locator	Product Names
Altera	altera.com	Quartus II
Mentor Graphics	mentorgraphics.com	ModelSim, Precision
Synplicity	synplicity.com	Synplify
Synopsys	synopsys.com	Design Compiler, VCS
Xilinx	xilinx.com	ISE

REFERENCES

1. R. Murgai, R. Brayton, A. Sangiovanni-Vincentelli, *Logic Synthesis for Field-Programmable Gate Arrays*, (Kluwer Academic Publishers, 1995).
2. J. Cong and Y. Ding, *FlowMap: An Optimal Technology Mapping Algorithm for Delay Optimization in Lookup-Table Based FPGA Designs*, (in IEEE Transactions on Computer-aided Design 13 (1), January 1994).
3. S. Brown, R. Francis, J. Rose, Z. Vranesic, *Field-Programmable Gate Arrays*, (Kluwer Academic Publishers, 1995).
4. M. Breuer, *A Class of Min-cut Placement Algorithms*, (in Design Automation Conference, pages 284–290, IEEE/ACM, 1977).

5. Carl Sechen, *VLSI Placement and Global Routing Using Simulated Annealing*, (Kluwer Academic Publishers, 1988).
6. V. Betz, J. Rose, and A. Marquardt, *Architecture and CAD for Deep-Submicron FPGAs*, (Kluwer Academic Publishers, 1999).
7. M. Sarrafzadeh, M. Wang, and X. Yang, *Modern Placement Techniques*, (Kluwer Academic Publishers, 2003).
8. L. McMurchie and C. Ebeling, *PathFinder: A Negotiation-Based Performance-Driven Router for FPGAs*, (in International Symposium on Field Programmable Gate Arrays, Monterey, Ca., Feb. 1995).

A

VHDL REFERENCE

This appendix describes the features of VHDL that are used in this book. It is meant to serve as a convenient reference for the reader. Hence only brief descriptions are provided, along with examples. The reader is encouraged to first study the introduction to VHDL in sections 2.10 and 4.12.

In some ways VHDL uses an unusual syntax for describing logic circuits. The prime reason is that VHDL was originally intended to be a language for documenting and simulating circuits, rather than for describing circuits for synthesis. This appendix is not meant to be a comprehensive VHDL manual. While we discuss almost all the features of VHDL that are useful in the synthesis of logic circuits, we do not discuss any of the features that are useful only for simulation of circuits or for other purposes. Although the omitted features are not needed for any of the examples used in this book, a reader who wishes to learn more about using VHDL can refer to specialized books [1-7].

How *Not* to Write VHDL Code

In section 2.10 we mentioned the most common problem encountered by designers who are just beginning to write VHDL code. The tendency for the novice is to write code that resembles a computer program, containing many variables and loops. It is difficult to determine what logic circuit the CAD tools will produce when synthesizing such code. This book contains more than 150 examples of complete VHDL code that represents a wide range of logic circuits. In all of these examples, the code is easily related to the described logic circuit. The reader is encouraged to adopt the same style of code. A good general guideline is to assume that if the designer cannot readily determine what logic circuit is described by the VHDL code, then the CAD tools are not likely to synthesize the circuit that the designer is trying to describe.

Since VHDL is a complex language, errors in syntax and usage are quite common. Some problems encountered by our students, as novice designers, are listed at the end of this appendix in section A.11. The reader may find it useful to examine these errors in an effort to avoid them when writing code.

Once complete VHDL code is written for a particular design, it is useful to analyze the resulting circuit synthesized by the CAD tools. Much can be learned about VHDL, logic circuits, and logic synthesis by studying the circuits that are produced automatically by the CAD tools.

A.1 DOCUMENTATION IN VHDL CODE

Documentation can be included in VHDL code by writing a comment. The two characters '--', '--' denote the beginning of the comment. The VHDL compiler ignores any text on a line after the '--'.

A.1

```
-- this is a VHDL comment
```

A.2 DATA OBJECTS

Information is represented in VHDL code as data objects. Three kinds of data objects are provided: signals, constants, and variables. For describing logic circuits, the most important data objects are signals. They represent the logic signals (wires) in the circuit. The constants and variables are also sometimes useful for describing logic circuits, but they are used infrequently.

A.2.1 DATA OBJECT NAMES

The rules for specifying data object names are simple: any alphanumeric character may be used in the name, as well as the '_' underscore character. There are four caveats. A name cannot be a VHDL keyword, it must begin with a letter, it cannot end with an '_' underscore, and it cannot have two successive '_' underscores. Thus examples of legal names are *x*, *x1*, *x_y*, and *Byte*. Some examples of illegal names are *1x*, *_y*, *x__y*, and *entity*. The latter name is not allowed because it is a VHDL keyword. We should note that VHDL is not case sensitive. Hence *x* is the same as *X*, and *ENTITY* is the same as *entity*. To make the examples of VHDL code in this book more readable, we use uppercase letters in all keywords.

To avoid confusion when using the word *signal*, which can mean either a VHDL data object or a logic signal in a circuit, we sometimes write the VHDL data object as *SIGNAL*.

A.2.2 DATA OBJECT VALUES AND NUMBERS

We use *SIGNAL* data objects to represent individual logic signals in a circuit, multiple logic signals, and binary numbers (integers). The value of an individual *SIGNAL* is specified using apostrophes, as in '0' or '1'. The value of a multibit *SIGNAL* is given with double quotes. An example of a four-bit *SIGNAL* value is "1001", and an eight-bit value is "10011000". Double quotes can also be used to denote a binary number. Hence while "1001" can represent the four *SIGNAL* values '1', '0', '0', '1', it can also mean the integer $(1001)_2 = (9)_{10}$. Integers can alternatively be specified in decimal by not using quotes, as in 9 or 152. The values of *CONSTANT* or *VARIABLE* data objects are specified in the same way as for *SIGNAL* data objects.

A.2.3 SIGNAL DATA OBJECTS

SIGNAL data objects represent the logic signals, or wires, in a circuit. There are three places in which signals can be declared in VHDL code: in an entity declaration (see section A.4.1), in the declarative section of an architecture (see section A.4.2), and in the declarative section of a package (see section A.5). A signal has to be declared with an associated *type*, as follows:

```
SIGNAL signal_name : type_name ;
```

The signal's *type_name* determines the legal values that the signal can have and its legal uses in VHDL code. In this section we describe 10 signal types: BIT, BIT_VECTOR, STD_LOGIC, STD_LOGIC_VECTOR, STD_ULOGIC, SIGNED, UNSIGNED, INTEGER, ENUMERATION, and BOOLEAN.

A.2.4 BIT AND BIT_VECTOR TYPES

These types are predefined in the VHDL Standards IEEE 1076 and IEEE 1164. Hence no library is needed to use these types in the code. Objects of BIT type can have the values '0' or '1'. An object of BIT_VECTOR type is a linear array of BIT objects.

Ex

```
SIGNAL x1   : BIT ;
SIGNAL C    : BIT_VECTOR (1 TO 4) ;
SIGNAL Byte : BIT_VECTOR (7 DOWNT0 0) ;
```

The signals *C* and *Byte* illustrate the two possible ways of defining a multibit data object. The syntax “lowest_index TO highest_index” is useful for a multibit signal that is simply an array of bits. In the signal *C* the most-significant (left-most) bit is referenced using lowest_index, and the least-significant (right-most) bit is referenced using highest_index. The syntax “highest_index DOWNT0 lowest_index” is useful if the signal represents a binary number. In this case the most-significant (left-most) bit has the index highest_index, and the least-significant (right-most) bit has the index lowest_index.

The multibit signal *C* represents four BIT objects. It can be used as a single four-bit quantity, or each bit can be referred to individually. The syntax for referring to the signals individually is *C*(1), *C*(2), *C*(3), or *C*(4). An assignment statement such as

```
C <= “1010” ;
```

results in *C*(1) = 1, *C*(2) = 0, *C*(3) = 1, and *C*(4) = 0.

The signal *Byte* comprises eight BIT objects. The assignment statement

```
Byte <= “10011000” ;
```

results in *Byte*(7) = 1, *Byte*(6) = 0, and so on to *Byte*(0) = 0.

A.2.5 STD_LOGIC AND STD_LOGIC_VECTOR TYPES

The `STD_LOGIC` type was added to the VHDL Standard in IEEE 1164. It provides more flexibility than the `BIT` type. To use this type, we must include the two statements

```
LIBRARY ieee ;
USE ieee.std_logic_1164.all ;
```

These statements provide access to the `std_logic_1164` package, which defines the `STD_LOGIC` type. We describe VHDL packages in section A.5. In general, they are used as a place to store VHDL code, such as the code that defines a type, which can then be used in other source code files. The following values are legal for a `STD_LOGIC` data object: 0, 1, Z, —, L, H, U, X, and W. Only the first four are useful for synthesis of logic circuits. The value Z represents high impedance, and — stands for “don’t care.” The value L stands for “weak 0,” H means “weak 1,” U means “uninitialized,” X means “unknown,” and W means “weak unknown.” The `STD_LOGIC_VECTOR` type represents an array of `STD_LOGIC` objects.

3

```
SIGNAL x1, x2, Cin, Cout, Sel : STD_LOGIC ;
SIGNAL C                      : STD_LOGIC_VECTOR (1 TO 4) ;
SIGNAL X, Y, S                : STD_LOGIC_VECTOR (3 DOWNTO 0) ;
```

`STD_LOGIC` objects are often used in logic expressions in VHDL code. `STD_LOGIC_VECTOR` signals can be used as binary numbers in arithmetic circuits by including in the code the statement

```
USE ieee.std_logic_signed.all ;
```

The `std_logic_signed` package specifies that it is legal to use the `STD_LOGIC_VECTOR` signals with arithmetic operators, like + (see section A.7.1). The VHDL compiler should generate a circuit that works for signed numbers. An alternative is to use the package `std_logic_unsigned`. In this case the compiler should generate a circuit that works for unsigned numbers.

A.2.6 STD_ULOGIC TYPE

In this book we use the `STD_LOGIC` type in most examples of VHDL code. This type is actually a *subtype* of the `STD_ULOGIC` type. Signals that have the `STD_ULOGIC` type can take the same values as the `STD_LOGIC` signals that we have been using. The

only difference between `STD_ULOGIC` and `STD_LOGIC` has to do with the concept of a *resolution function*. In VHDL a resolution function is used to determine what value a signal should take if there are two sources for that signal. For example, two tri-state buffers could both have their outputs connected to a signal, x . At some given time one buffer might produce the output value 'Z' and the other buffer might produce the value 1. A resolution function is used to determine that the value of x should be 1 in this case. The `STD_LOGIC` type allows multiple sources for a signal; it resolves the correct value using a resolution function that is provided as part of the `std_logic_1164` package. The `STD_ULOGIC` type does not permit signals to have multiple sources. We have introduced `STD_ULOGIC` for completeness only; it is not used in this book.

A.2.7 SIGNED AND UNSIGNED TYPES

The `std_logic_signed` and `std_logic_unsigned` packages mentioned in section A.2.5 make use of another package, called `std_logic_arith`. This package defines the type of circuit that should be used to implement the arithmetic operators, such as $+$. The `std_logic_arith` package defines two signal types, `SIGNED` and `UNSIGNED`. These types are identical to the `STD_LOGIC_VECTOR` type because they represent an array of `STD_LOGIC` signals. The purpose of the `SIGNED` and `UNSIGNED` types is to allow the user to indicate in the VHDL code what kind of number representation is being used. The `SIGNED` type is used in code for circuits that deal with signed (2's complement) numbers, and the `UNSIGNED` type is used in code that deals with unsigned numbers.

Assume that A and B are signals with the `SIGNED` type. Assume that A is assigned the value "1000", and B is assigned the value "0001". VHDL provides relational operators (see Table A.1 in section A.3) that can be used to compare the values of two signals. The comparison $A < B$ evaluates to true because the signed values are $A = -8$ and $B = 1$. On the other hand, if A and B are defined with the `UNSIGNED` type, then $A < B$ evaluates to false because the unsigned values are $A = 8$ and $B = 1$. E>

The `std_logic_signed` package specifies that `STD_LOGIC_VECTOR` signals should be treated like `SIGNED` signals. Similarly, the `std_logic_unsigned` package specifies that `STD_LOGIC_VECTOR` signals should be treated like `UNSIGNED` signals. It is an arbitrary choice whether code is written using `STD_LOGIC_VECTOR` signals in conjunction with the `std_logic_signed` or `std_logic_unsigned` packages or using `SIGNED` and `UNSIGNED` signals with the `std_logic_arith` package.

The `std_logic_arith` package, and hence the `std_logic_signed` and `std_logic_unsigned` packages, are not actually a part of the VHDL standards. They are provided by Synopsys Inc., which is a vendor of CAD software. However, these packages are included with most CAD systems that support VHDL, and they are widely used in practice.

A.2.8 INTEGER TYPE

The VHDL standard defines the INTEGER type for use with arithmetic operators. In this book the STD_LOGIC_VECTOR type is usually preferred in code for arithmetic circuits, but the INTEGER type is used occasionally. An INTEGER signal represents a binary number. The code does not specifically give the number of bits in the signal, as it does for STD_LOGIC_VECTOR signals. By default, an INTEGER signal has 32 bits and can represent numbers from $-(2^{31} - 1)$ to $2^{31} - 1$. This is one number less than the normal 2's complement range; the reason is simply that the VHDL standard specifies an equal number of negative and positive numbers. Integers with fewer bits can also be declared, using the RANGE keyword.

```
SIGNAL X : INTEGER RANGE -127 TO 127 ;
```

This defines *X* as an eight-bit signed number.

A.2.9 BOOLEAN TYPE

An object of type BOOLEAN can have the values TRUE or FALSE, where TRUE is equivalent to 1 and FALSE is 0.

```
SIGNAL Flag : Boolean ;
```

A.2.10 ENUMERATION TYPE

A SIGNAL of ENUMERATION type is one for which the possible values that the signal can have are user specified. The general form of an ENUMERATION type is

```
TYPE enumerated_type_name IS (name {, name}) ;
```

The curly brackets indicate that one or more additional items can be included. We use these brackets in this manner in several places in the appendix. The most common example of using the ENUMERATION type is for specifying the states for a finite-state machine.

Ex

```

TYPE State_type IS (stateA, stateB, stateC) ;
SIGNAL y : State_type ;

```

This declares a signal named *y*, for which the legal values are *stateA*, *stateB*, and *stateC*. When the code is translated by the VHDL compiler, it automatically assigns bit patterns (codes) to represent *stateA*, *stateB*, and *stateC*.

A.2.11 CONSTANT DATA OBJECTS

A **CONSTANT** is a data object whose value cannot be changed. Unlike a **SIGNAL**, a **CONSTANT** does not represent a wire in a circuit. The general form of a **CONSTANT** declaration is

```

CONSTANT constant_name : type_name := constant_value ;

```

The purpose of a constant is to improve the readability of code, by using the name of the constant in place of a value or number.

Ex

```

CONSTANT Zero : STD_LOGIC_VECTOR (3 DOWNT0 0) := "0000" ;

```

Then the word *Zero* can be used in the code to indicate the constant value "0000".

A.2.12 VARIABLE DATA OBJECTS

A **VARIABLE**, unlike a **SIGNAL**, does not necessarily represent a wire in a circuit. **VARIABLE** data objects are sometimes used to hold the results of computations and for the index variables in loops. We will give some examples in section A.9.7.

A.2.13 TYPE CONVERSION

VHDL is a strongly type-checked language, which means that it does not permit the value of a signal of one type to be assigned to another signal that has a different type. Even for signals that intuitively seem compatible, such as **BIT** and **STD_LOGIC**, using the two types together is not permitted. To avoid this problem, we generally use only the **STD_LOGIC**

and `STD_LOGIC_VECTOR` types in this book. When it is necessary to use code that has a mixture of types, type-conversion functions can be used to convert from one type to another.

Assume that *X* is defined as an eight-bit `STD_LOGIC_VECTOR` signal and *Y* is an `INTEGER` signal defined with the range from 0 to 255. An example of a conversion function that allows the value of *Y* to be assigned to *X* is

```
X <= CONV_STD_LOGIC_VECTOR(Y, 8);
```

This conversion function has two parameters: the name of the signal to be converted and the number of bits in *X*. The function is provided as part of the `std_logic_arith` package; hence that package must be included in the code using the appropriate `LIBRARY` and `USE` clauses.

A.2.14 ARRAYS

We said above that the `BIT_VECTOR` and `STD_LOGIC_VECTOR` types are arrays of `BIT` and `STD_LOGIC` signals, respectively. The definitions of these arrays, which are provided as part of the VHDL standards, are

```
TYPE BIT_VECTOR IS ARRAY (NATURAL RANGE <>) OF BIT;
TYPE STD_LOGIC_VECTOR IS ARRAY (NATURAL RANGE <>) OF STD_LOGIC;
```

The sizes of the arrays are not set in the definitions; the syntax `(NATURAL RANGE <>)` has the effect of allowing the user to set the size of the array when a data object of either type is declared. Arrays of any type can be defined by the user. For example

```
TYPE Byte IS ARRAY (7 DOWNTO 0) OF STD_LOGIC;
SIGNAL X : Byte;
```

declares the signal *X* with the type *Byte*, which is an eight-element array of `STD_LOGIC` data objects.

An example that defines a two-dimensional array is

```
TYPE RegArray IS ARRAY(3 DOWNTO 0) OF STD_LOGIC_VECTOR(7 DOWNTO 0);
SIGNAL R : RegArray;
```

This code defines *R* as an array with four elements. Each element is an eight-bit `STD_LOGIC_VECTOR` signal. The syntax *R*(*i*), where $3 \geq i \geq 0$, is used to refer to element *i* of the array. The syntax *R*(*i*)(*j*), where $7 \geq j \geq 0$, is used to refer to one bit in the array *R*(*i*). This bit has the type `STD_LOGIC`. An example using the *RegArray* type is given in section 10.2.6.

A.3 OPERATORS

VHDL provides a number of operators that are useful for synthesizing, simulating, and documenting logic circuits. In section 6.6.8 we discussed the operators that are used for synthesis purposes. We listed them according to their functionality. The VHDL Standard groups all operators into formal classes as shown in Table A.1. Operators in a given class have the same precedence. The precedence of classes is indicated in the table. Observe that the NOT operator is in the Miscellaneous class rather than Logical class. Hence, NOT has higher precedence than AND and OR.

In a logic expression, the operators of the same class are evaluated from left to right. Parentheses should always be used to ensure the correct interpretation of the expression. For example, the expression

$$x1 \text{ AND } x2 \text{ OR } x3 \text{ AND } x4$$

does not have the $x_1x_2 + x_3x_4$ meaning that would be expected because AND does not have precedence over OR. To have the desired meaning, it must be written as

$$(x1 \text{ AND } x2) \text{ OR } (x3 \text{ AND } x4)$$

Table A.1 The VHDL operators.

	Operator Class	Operator
Highest precedence	Miscellaneous	**, ABS, NOT
	Multiplying	*, /, MOD, REM
	Sign	+, -
	Adding	+, -, &
	Relational	=, / =, <, <=, >, >=
Lowest precedence	Logical	AND, OR, NAND, NOR, XOR, XNOR

A.4 VHDL DESIGN ENTITY

A circuit or subcircuit described with VHDL code is called a *design entity*, or just *entity*. Figure A.1 shows the general structure of an entity. It has two main parts: the *entity declaration*, which specifies the input and output signals for the entity, and the *architecture*, which gives the circuit details.

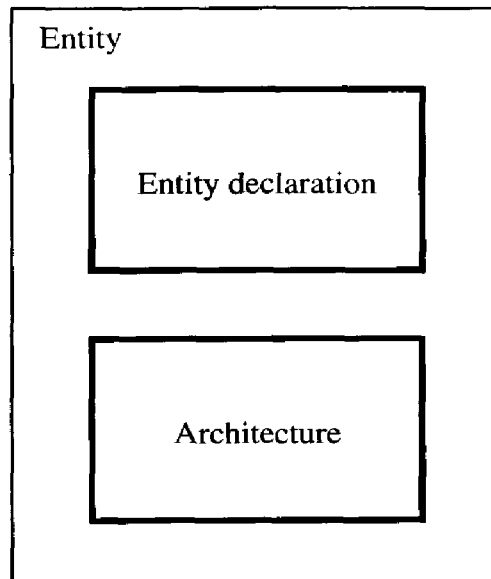


Figure A.1 The general structure of a VHDL design entity.

A.4.1 ENTITY DECLARATION

The input and output signals in an entity are specified using the **ENTITY** declaration, as indicated in Figure A.2. The name of the entity can be any legal VHDL name. The square brackets indicate an optional item. The input and output signals are specified using the keyword **PORT**. Whether each port is an input, output, or bidirectional signal is specified by the *mode* of the port. The available modes are summarized in Table A.2. If the mode of a port is not specified, it is assumed to have the mode **IN**.

A.4.2 ARCHITECTURE

An **ARCHITECTURE** provides the circuit details for an entity. The general structure of an architecture is shown in Figure A.3. It has two main parts: the *declarative region* and the *architecture body*. The declarative region appears preceding the **BEGIN** keyword. It can be used to declare signals, user-defined types, and constants. It can also be used to declare

```
ENTITY entity_name IS
    PORT ( [SIGNAL] signal_name {, signal_name} : [mode] type_name {
        [SIGNAL] signal_name {, signal_name} : [mode] type_name } );
END entity_name ;
```

Figure A.2 The general form of an entity declaration.

Table A.2 The possible modes for signals that are entity ports.

Mode	Purpose
IN	Used for a signal that is an input to an entity.
OUT	Used for a signal that is an output from an entity. The value of the signal can not be used inside the entity. This means that in an assignment statement, the signal can appear only to the left of the <= operator.
INOUT	Used for a signal that is both an input to an entity and an output from the entity.
BUFFER	Used for a signal that is an output from an entity. The value of the signal can be used inside the entity, which means that in an assignment statement, the signal can appear both on the left and right sides of the <= operator.

```

ARCHITECTURE architecture_name OF entity_name IS
    [SIGNAL declarations]
    [CONSTANT declarations]
    [TYPE declarations]
    [COMPONENT declarations]
    [ATTRIBUTE specifications]
BEGIN
    {COMPONENT instantiation statement ;}
    {CONCURRENT ASSIGNMENT statement ;}
    {PROCESS statement ;}
    {GENERATE statement ;}
END [architecture_name] ;

```

Figure A.3 The general form of an architecture.

components and to specify attributes; we discuss the **COMPONENT** and **ATTRIBUTE** keywords in sections A.6 and A.10.13, respectively.

The functionality of the entity is specified in the architecture **body**, which follows the **BEGIN** keyword. This specification involves statements that define the logic functions in the circuit, which can be given in a variety of ways. We will discuss a number of possibilities in the sections that follow.

Figure A.4 gives the VHDL code for an entity named *fulladd*, which represents a full-adder circuit. (The full-adder is discussed in section 5.2.) The entity declaration specifies the input and output signals. The input port *Cin* is the carry-in, and the bits to be added are the input ports *x* and *y*. The output ports are the sum, *s*, and the carry-out, *Cout*. The input and

```

LIBRARY ieee ;
USE ieee.std_logic_1164.all ;

ENTITY fulladd IS
    PORT ( Cin, x, y : IN  STD_LOGIC ;
          s, Cout   : OUT STD_LOGIC ) ;
END fulladd ;

ARCHITECTURE LogicFunc OF fulladd IS
BEGIN
    s <= x XOR y XOR Cin ;
    Cout <= (x AND y) OR (x AND Cin) OR (y AND Cin) ;
END LogicFunc ;

```

Figure A.4 Code for a full-adder.

output signals are called the *ports* of the entity. This term is adopted from the electrical jargon in which it refers to an input or output connection in an electrical circuit.

The architecture defines the functionality of the full-adder using logic equations. The name of the architecture can be any legal VHDL name. We chose the name `LogicFunc` for this simple example. In terms of the general form of the architecture in Figure A.3, a logic equation is a type of concurrent assignment statement. These statements are described in section A.7.

A.5 PACKAGE

A VHDL package serves as a repository. It is used to hold VHDL code that is of general use, like the code that defines a type. The package can be included for use in any number of other source code files, which can then use the definitions provided in the package. Like an architecture, introduced in section A.4.2, a package can have two main parts: the *package declaration* and the *package body*. The *package body* is an optional part, which we do not use in this book; one use of a package body is to define VHDL functions, such as the conversion functions introduced in section A.2.13.

The general form of a package declaration is depicted in Figure A.5. Definitions provided in the package, such as the definition of a type, can be used in any source code file that includes the statements

```

LIBRARY library_name ;
USE library_name.package_name.all ;

```

```

PACKAGE package_name IS
    [TYPE declarations]
    [SIGNAL declarations]
    [COMPONENT declarations]
END package_name ;

```

Figure A.5 The general form of a PACKAGE declaration.

The *library_name* represents the location in the computer file system where the package is stored. A library can either be provided as part of a CAD system, in which case it is termed a *system library*, or be created by the user, in which case it is called a *user library*. An example of a system library is the *ieee* library. We discussed four packages in that library in section A.2: *std_logic_1164*, *std_logic_signed*, *std_logic_unsigned*, and *std_logic_arith*.

A special case of a user library is represented by the file-system directory where the VHDL source code file that declares a package is stored. This directory can be referred to by the library name *work*, which stands for *working directory*. Hence, if a source code file that contains a package declaration called *user_package_name* is compiled, then the package can be used in another source code file (which is stored in the same file-system directory) by including the statements

```

LIBRARY work ;
USE work.user_package_name.all ;

```

Actually, for the special case of the *work* library, the **LIBRARY** clause is not required, because the work library is always accessible.

Figure A.5 shows that the package declaration can be used to declare signals and components. Components are discussed in the next section. A signal declared in a package can be used by any design entity that accesses the package. Such signals are similar in concept to global variables used in computer programming languages. In contrast, a signal declared in an architecture can be used only inside that architecture. Such signals are analogous to local variables in a programming language.

A.6 USING SUBCIRCUITS

A VHDL entity defined in one source code file can be used as a subcircuit in another source code file. In VHDL jargon the subcircuit is called a *component*. A subcircuit must be declared using a *component declaration*. This statement specifies the name of the subcircuit and gives the names of its input and output ports. The component declaration can appear either in the declaration region of an architecture or in a package declaration. The general form of the statement is shown in Figure A.6. The syntax used is similar to the syntax in an entity declaration.

Once a component declaration is given, the component can be *instantiated* as a subcircuit. This is done using a *component instantiation* statement. It has the general form

```

COMPONENT component_name
  [GENERIC ( parameter_name : integer := default_value {;
            parameter_name : integer := default_value } );]
  PORT ( [SIGNAL] signal_name {, signal_name} : [mode] type_name {;
        SIGNAL] signal_name {, signal_name} : [mode] type_name } );
END COMPONENT ;

```

Figure A.6 The general form of a component declaration.

```

instance_name : component_name PORT MAP (
  formal_name => actual_name {, formal_name => actual_name} );

```

Each *formal_name* is the name of a port in the subcircuit. Each *actual_name* is the name of a signal in the code that instantiates the subcircuit. The syntax “formal_name =>” is provided so that the order of the signals listed after the PORT MAP keywords does not have to be the same as the order of the ports in the corresponding COMPONENT declaration. In VHDL jargon this is called the *named association*. If the signal names following the PORT MAP keywords are given in the same order as in the COMPONENT declaration, then “formal_name =>” is not needed. This is called the *positional association*.

An example using a component (subcircuit) is shown in Figure A.7. It gives the code for a four-bit ripple-carry adder built using four instances of the *fulladd* subcircuit. The inputs to the adder are the carry-in, *Cin*, and the 2 four-bit numbers *X* and *Y*. The output is the four-bit sum, *S*, and the carry-out, *Cout*. We have chosen the name *Structure* in the architecture because the hierarchical style of code that uses subcircuits is often called the *structural* style. Observe that a three-bit signal, *C*, is declared to represent the carry-outs from stages 0, 1, and 2. This signal is declared in the architecture, rather than in the entity declaration, because it is used internally in the circuit and is not an input or output port.

The next statement in the architecture gives the component declaration for the *fulladd* subcircuit. The architecture body instantiates four copies of the full-adder subcircuit. In the first three instantiation statements, we have used positional association because the signals are listed in the same order as given in the declaration for the *fulladd* component in Figure A.4. The last instantiation statement gives an example of named association. Note that it is legal to use the same name for a signal in the architecture that is used for a port name in a component. An example of this is the *Cout* signal. The signal names used in the instantiation statements implicitly specify how the component instances are interconnected to create the adder entity.

A second example of component instantiation is shown in Figure A.8. A package called *lpm_components* in the library named *lpm* is included in the code. This package represents a collection of components called the *Library of Parameterized Modules (LPM)*, which is a standardized library of circuit building blocks that are generally useful for implementing logic circuits.

The code in Figure A.8 instantiates the LPM component called *lpm_add_sub*, which is introduced in section 5.5.1. It represents an adder/subtractor circuit. The GENERIC keyword is used to set the number of bits in the adder/subtractor to 4. We discuss generics

```

LIBRARY ieee ;
USE ieee.std_logic_1164.all ;

ENTITY adder IS
    PORT ( Cin   : IN   STD_LOGIC ;
          X, Y   : IN   STD_LOGIC_VECTOR(3 DOWNTO 0) ;
          S     : OUT  STD_LOGIC_VECTOR(3 DOWNTO 0) ;
          Cout  : OUT  STD_LOGIC ) ;
END adder ;

ARCHITECTURE Structure OF adder IS
    SIGNAL C : STD_LOGIC_VECTOR(1 TO 3) ;
    COMPONENT fulladd
        PORT ( Cin, x, y : IN   STD_LOGIC ;
              s, Cout  : OUT  STD_LOGIC ) ;
    END COMPONENT ;
BEGIN
    stage0: fulladd PORT MAP ( Cin , X(0), Y(0), S(0), C(1) ) ;
    stage1: fulladd PORT MAP ( C(1), X(1), Y(1), S(1), C(2) ) ;
    stage2: fulladd PORT MAP ( C(2), X(2), Y(2), S(2), C(3) ) ;
    stage3: fulladd PORT MAP (
        x => X(3), y => Y(3), Cin => C(3), s => S(3), Cout => Cout ) ;
--END Structure ;

```

Figure A.7 Code for a four-bit adder, using component instantiation.

in section A.8. The function of each PORT on the *lpm_add_sub* component is self-evident from the port names used in the instantiation statement.

A.6.1 DECLARING A COMPONENT IN A PACKAGE

Figure A.5 shows that a component declaration can be given in a package. An example is shown in Figure A.9. It defines the package named *fulladd_package*, which provides the component declaration for the *fulladd* entity. This package can be stored in a separate source code file or can be included at the end of the file that defines the *fulladd* entity (see Figure A.4). Any source code that includes the statement “USE work.fulladd_package.all” can use the *fulladd* component as a subcircuit. Figure A.10 shows how a four-bit ripple-carry adder entity can be written to use the package. The code is the same as that in Figure A.7 except that it includes the extra USE clause for the package and deletes the component declaration statement from the architecture.

```

LIBRARY ieee ;
USE ieee.std_logic_1164.all ;
LIBRARY lpm ;
USE lpm.lpm_components.all ;

ENTITY adderLPM IS
    PORT ( Cin   : IN   STD_LOGIC ;
          X, Y   : IN   STD_LOGIC_VECTOR(3 DOWNTO 0) ;
          S     : OUT  STD_LOGIC_VECTOR(3 DOWNTO 0) ;
          Cout  : OUT  STD_LOGIC ) ;
END adderLPM ;

ARCHITECTURE Structure OF adderLPM IS
BEGIN
    instance: lpm_add_sub
        GENERIC MAP ( LPM_WIDTH => 4)
        PORT MAP (
            dataa => X, datab => Y, Cin => Cin, result => S, Cout => Cout ) ;
END Structure ;

```

Figure A.8 Instantiating a four-bit adder from the LPM library.

```

LIBRARY ieee ;
USE ieee.std_logic_1164.all ;

PACKAGE fulladd_package IS
    COMPONENT fulladd
        PORT ( Cin, x, y : IN   STD_LOGIC ;
              s, Cout  : OUT  STD_LOGIC ) ;
    END COMPONENT ;
END fulladd_package ;

```

Figure A.9 An example of a package declaration.

A.7 CONCURRENT ASSIGNMENT STATEMENTS

A concurrent assignment statement is used to assign a value to a signal in an architecture body. An example was given in Figure A.4, in which the logic expressions illustrate one type of concurrent assignment statement. VHDL provides four different types of concurrent assignment statements: simple signal assignment, selected signal assignment, conditional signal assignment, and generate statements.


```

LIBRARY ieee ;
USE ieee.std_logic_1164.all ;
USE work.fulladd_package.all ;

ENTITY adder IS
    PORT ( Cin   : IN   STD_LOGIC ;
          X, Y   : IN   STD_LOGIC_VECTOR(3 DOWNTO 0) ;
          S     : OUT  STD_LOGIC_VECTOR(3 DOWNTO 0) ;
          Cout  : OUT  STD_LOGIC ) ;
END adder ;

ARCHITECTURE Structure OF adder IS
    SIGNAL C : STD_LOGIC_VECTOR(1 TO 3) ;
BEGIN
    stage0: fulladd PORT MAP ( Cin, X(0), Y(0), S(0), C(1) ) ;
    stage1: fulladd PORT MAP ( C(1), X(1), Y(1), S(1), C(2) ) ;
    stage2: fulladd PORT MAP ( C(2), X(2), Y(2), S(2), C(3) ) ;
    stage3: fulladd PORT MAP ( C(3), X(3), Y(3), S(3), Cout ) ;
END Structure ;

```

Figure A.10 Using a component defined in a package.

A.7.1 SIMPLE SIGNAL ASSIGNMENT

A simple signal assignment statement is used for a logic or an arithmetic expression. The general form is

$$\text{signal_name} \leq \text{expression} ;$$

where \leq is the VHDL *assignment operator*. The following examples illustrate its use.

```

SIGNAL x1, x2, x3, f : STD_LOGIC ;
    .
    .
    .
f <= (x1 AND x2) OR x3 ;

```

This defines f in a logic expression, which involves single-bit quantities. VHDL also supports multibit logic expressions, as in

```

SIGNAL A, B, C : STD_LOGIC_VECTOR (1 TO 3);
      .
      .
      .
C <= A AND B ;

```

This results in $C(1) = A(1) \cdot B(1)$, $C(2) = A(2) \cdot B(2)$, and $C(3) = A(3) \cdot B(3)$.

An example of an arithmetic expression is

```

SIGNAL X, Y, S : STD_LOGIC_VECTOR (3 DOWNTO 0);
      .
      .
      .
S <= X + Y ;

```

This represents a four-bit adder, without carry-in and carry-out. We can alternatively declare a carry-in signal, *Cin*, and a five-bit signal, *Sum*, as follows

```

SIGNAL Cin : STD_LOGIC ;
SIGNAL Sum : STD_LOGIC_VECTOR (4 DOWNTO 0);

```

Then the statement

```
Sum <= ('0' & X) + Y + Cin ;
```

represents the four-bit adder with carry-in and carry-out. The four sum bits are *Sum*(3) to *Sum*(0), while the carry-out is the bit *Sum*(4). The syntax ('0' & X) uses the VHDL *concatenate operator*, &, to put a 0 on the left end of the signal X. The reader should not confuse this use of the & symbol with the logical AND operation, which is the usual meaning of this symbol; in VHDL the logical AND is indicated by the word AND, and & means concatenate. The concatenate operation prepends a 0 digit onto X, creating a five-bit number. VHDL requires at least one of the operands of an arithmetic expression to have the same number of bits as the signal used to hold the result. The complete code for the four-bit adder with carry signals is given in Figure A.11. We should note that this is a different way (it is actually a better way) to describe a four-bit adder, in comparison with the structural code in Figure A.7. Observe that the statement "S <= Sum(3 DOWNTO 0)" assigns the lower four bits of the *Sum* signal, which are the four sum bits, to the output S.

A.7.2 ASSIGNING SIGNAL VALUES USING OTHERS

Assume that we wish to set all bits in the signal S to 0. As we already know, one way to do so is to write "S <= "0000" ;". If the number of bits in S is large, a more convenient way of expressing the assignment statement is to use the OTHERS keyword, as in

```
S <= (OTHERS => '0') ;
```

This statement also sets all bits in S to 0. But it has the benefit of working for any number of bits, not just four. In general, the meaning of (OTHERS => Value) is to set each bit of the destination operand to Value. An example of code that uses this construct is shown in Figure A.28.

```

LIBRARY ieee ;
USE ieee.std_logic_1164.all ;
USE ieee.std_logic_signed.all ;

ENTITY adder IS
    PORT ( Cin   : IN   STD_LOGIC ;
          X, Y   : IN   STD_LOGIC_VECTOR(3 DOWNTO 0) ;
          S      : OUT  STD_LOGIC_VECTOR(3 DOWNTO 0) ;
          Cout   : OUT  STD_LOGIC ) ;
END adder ;

ARCHITECTURE Behavior OF adder IS
    SIGNAL Sum : STD_LOGIC_VECTOR(4 DOWNTO 0) ;
BEGIN
    Sum <= ('0' & X) + Y + Cin ;
    S <= Sum(3 DOWNTO 0) ;
    Cout <= Sum(4) ;
END Behavior ;

```

Figure A.11 Code for a four-bit adder, using arithmetic expressions.

A.7.3 SELECTED SIGNAL ASSIGNMENT

A selected signal assignment statement is used to set the value of a signal to one of several alternatives based on a selection criterion. The general form is

```

[label:] -- an optional label can be placed here
WITH expression SELECT
    signal_name <= expression WHEN constant_value{,
                    expression WHEN constant_value} ;

```

```

SIGNAL x1, x2, Sel, f : STD_LOGIC ;
    .
    .
    .
WITH Sel SELECT
    f <=  x1 WHEN '0',
        x2 WHEN OTHERS ;

```

This code describes a 2-to-1 multiplexer with *Sel* as the select input. In a selected signal assignment, all possible values of the select input, *Sel* in this case, must be explicitly listed in the code. The word **OTHERS** provides an easy way to meet this requirement. **OTHERS** represents all possible values not already listed. In this case the other possible values are

1, Z, —, and so on. Another requirement for the selected signal assignment is that each WHEN clause must specify a criterion that is mutually exclusive of the criteria in all other WHEN clauses.

A.7.4 CONDITIONAL SIGNAL ASSIGNMENT

Similar to the selected signal assignment, the conditional signal assignment is used to set a signal to one of several alternative values. The general form is

```
[label:]
signal_name <= expression WHEN logic_expression ELSE
                {expression WHEN logic_expression ELSE}
                expression ;
```

An example is

```
f <= '1' WHEN x1 = x2 ELSE '0' ;
```

One key difference in comparison with the selected signal assignment has to be noted. The conditions listed after each WHEN clause need not be mutually exclusive, because the conditions are given a priority from the first listed to the last listed. This is illustrated by the example in Figure A.12. The code represents a priority encoder in which the highest-priority request is indicated as the output of the circuit. (Encoder circuits are described in Chapter 6.) The output, *f*, of the priority encoder comprises two bits whose values depend on the three inputs, *req1*, *req2*, and *req3*. If *req1* is 1, then *f* is set to 01. If *req2* is 1, then *f* is set to 10, but only if *req1* is not also 1. Hence *req1* has higher priority than *req2*.

```
LIBRARY ieee;
USE ieee.std_logic_1164.all;

ENTITY priority IS
    PORT ( req1, req2, req3 : IN    STD_LOGIC ;
          f                : OUT  STD_LOGIC_VECTOR(1 DOWNTO 0) );
END priority ;

ARCHITECTURE Behavior OF priority IS
BEGIN
    f <= "01" WHEN req1 = '1' ELSE
        "10" WHEN req2 = '1' ELSE
        "11" WHEN req3 = '1' ELSE
        "00" ;
END Behavior;
```

Figure A.12 A priority encoder described with a conditional signal assignment.

```

generate_label:
FOR index_variable IN range GENERATE
    statement ;
    { statement ; }
END GENERATE ;

```

```

generate_label:
IF expression GENERATE
    statement ;
    { statement ; }
END GENERATE ;

```

Figure A.13 The general forms of the GENERATE statement.

Similarly, *req1* and *req2* have higher priority than *req3*. Thus if *req3* is 1, then *f* is 11, but only if neither *req1* nor *req2* is also 1. For this priority encoder, if none of the three inputs is 1, then *f* is assigned the value 00.

A.7.5 GENERATE STATEMENT

There are two variants of the GENERATE statement: the FOR GENERATE and the IF GENERATE. The general form of both types is shown in Figure A.13. The IF GENERATE statement is seldom needed, but FOR GENERATE is often used in practice. It provides a convenient way of repeating either a logic expression or a component instantiation. Figure A.14 illustrates its use for component instantiation. The code in the figure is equivalent to the code given in Figure A.7.

A.8 DEFINING AN ENTITY WITH GENERICS

The code in Figure A.14 represents an adder for four-bit numbers. It is possible to make this code more general by introducing a parameter in the code that represents the number of bits in the adder. In VHDL jargon such a parameter is called a GENERIC. Figure A.15 gives the code for an *n*-bit adder entity, named *addern*. The GENERIC keyword is used to define the number of bits, *n*, to be added. This parameter is used in the code, both in the definitions of the signals *X*, *Y*, and *S* and in the FOR GENERATE statement that instantiates the *n* full-adders.

It is possible to use the GENERIC feature with components that are instantiated as subcircuits in other code. In section A.10.9 we give an example that uses the *addern* entity as a subcircuit.

```

LIBRARY ieee ;
USE ieee.std_logic_1164.all ;
USE work.fulladd_package.all ;

ENTITY adder IS
    PORT ( Cin   : IN    STD_LOGIC ;
          X, Y   : IN    STD_LOGIC_VECTOR(3 DOWNTO 0) ;
          S      : OUT   STD_LOGIC_VECTOR(3 DOWNTO 0) ;
          Cout   : OUT   STD_LOGIC ) ;
END adder ;

ARCHITECTURE Structure OF adder IS
    SIGNAL C : STD_LOGIC_VECTOR(0 TO 4) ;
BEGIN
    C(0) <= Cin ;
    Generate_label:
    FOR i IN 0 TO 3 GENERATE
        bit: fulladd PORT MAP ( C(i), X(i), Y(i), S(i), C(i+1)) ;
    END GENERATE ;
    Cout <= C(4) ;
END Structure ;

```

Figure A.14 An example of component instantiation with FOR GENERATE.

A.9 SEQUENTIAL ASSIGNMENT STATEMENTS

The order in which the concurrent assignment statements in an architecture body appear does not affect the meaning of the code. Many types of logic circuits can be described using these statements. However, VHDL also provides another type of statements, called *sequential assignment statements*, for which the order of the statements in the code can affect the semantics of the code. There are three variants of the sequential assignment statements: IF statement, CASE statement, and LOOP statements.

A.9.1 PROCESS STATEMENT

Since the order in which the sequential statements appear in VHDL code is significant, whereas the ordering of concurrent statements is not, the sequential statements must be separated from the concurrent statements. This is accomplished using a PROCESS statement. The PROCESS statement appears inside an architecture body, and it encloses other statements within it. The IF, CASE, and LOOP statements can appear only inside a process. The general form of a PROCESS statement is shown in Figure A.16. Its structure is somewhat similar to an architecture. VARIABLE data objects can be declared (only) inside

```

LIBRARY ieee ;
USE ieee.std_logic_1164.all ;
USE work.fulladd_package.all ;

ENTITY addern IS
    GENERIC ( n : INTEGER := 4 ) ;
    PORT ( Cin   : IN   STD_LOGIC ;
          X, Y   : IN   STD_LOGIC_VECTOR(n-1 DOWNTO 0) ;
          S     : OUT  STD_LOGIC_VECTOR(n-1 DOWNTO 0) ;
          Cout  : OUT  STD_LOGIC ) ;
END addern ;

ARCHITECTURE Structure OF addern IS
    SIGNAL C : STD_LOGIC_VECTOR(0 TO n) ;
BEGIN
    C(0) <= Cin ;
    Generate_label:
    FOR i IN 0 TO n-1 GENERATE
        stage: fulladd PORT MAP ( C(i), X(i), Y(i), S(i), C(i+1)) ;
    END GENERATE ;
    Cout <= C(4) ;
END Structure ;

```

Figure A.15 An n -bit adder.

```

[process_label:]
PROCESS [( signal name {, signal name} )]
    [VARIABLE declarations]
BEGIN
    [WAIT statement]
    [Simple Signal Assignment Statements]
    [Variable Assignment Statements]
    [IF Statements]
    [CASE Statements]
    [LOOP Statements]
END PROCESS [process_label] ;

```

Figure A.16 The general form of a PROCESS statement.

the process. Any variable declared can be used only by the code within the process; we say that the *scope* of the variable is limited to the process. To use the value of such a variable outside the process, the variable's value can be assigned to a signal. The various elements of the process are best explained by giving some examples. But first we need to introduce the IF, CASE, and LOOP statements.

The IF, CASE, and LOOP statements can be used to describe either combinational or sequential circuits. We will introduce these statements by giving some examples of combinational circuits because they are easier to understand. Sequential circuits are described in section A.10.

A.9.2 IF STATEMENT

The general form of an IF statement is given in Figure A.17. An example using an IF statement for combinational logic is

```

IF Sel = '0' THEN
    f <= x1 ;
ELSE
    f <= x2 ;
END IF ;

```

This code defines the 2-to-1 multiplexer that was used as an example of a selected signal assignment in the previous section. Examples of sequential logic described with IF statements are given in section A.10.

A.9.3 CASE STATEMENT

The general form of a CASE statement is shown in Figure A.18. The *constant_value* can be a single value, such as 2, a list of values separated by the | pipe, such as 2|3, or a range, such as 2 to 4. An example of a CASE statement used to describe combinational logic is

```

IF expression THEN
    statement ;
    {statement ;}
ELSIF expression THEN
    statement ;
    {statement ;}
ELSE
    statement ;
    {statement ;}
END IF ;

```

Figure A.17 The general form of an IF statement.


```

CASE expression IS
  WHEN constant_value =>
    statement ;
    {statement ;}
  WHEN constant_value =>
    statement ;
    {statement ;}
  WHEN OTHERS =>
    statement ;
    {statement ;}
END CASE ;

```

Figure A.18 The general form of a CASE statement.

```

CASE Sel IS
  WHEN '0' =>
    f <= x1 ;
  WHEN OTHERS =>
    f <= x2 ;
END CASE ;

```

This code represents the same 2-to-1 multiplexer described in section A.9.2 using the IF statement. Similar to a selected signal assignment, all possible valuations of the expression used for the WHEN clauses must be listed; hence the OTHERS keyword is needed. Also, all WHEN clauses in the CASE statement must be mutually exclusive. Examples of sequential circuits described with the CASE statement are given in section A.10.10.

A.9.4 LOOP STATEMENTS

VHDL provides two types of loop statements: the FOR-LOOP statement and the WHILE-LOOP statement. Their general forms are shown in Figure A.19. These statements are used to repeat one or more sequential assignment statements in much the same way as a FOR GENERATE statement is used to repeat concurrent assignment statements. Examples of the FOR-LOOP are given in section A.9.7.

A.9.5 USING A PROCESS FOR A COMBINATIONAL CIRCUIT

An example of a PROCESS statement is shown in Figure A.20. It includes the code for the IF statement from section A.9.2. The signals *Sel*, *x1*, and *x2* are shown in parentheses after the PROCESS keyword. They indicate which signals the process depends on and are called the *sensitivity list* of the process. For a process that describes combinational logic, as in this example, the sensitivity list includes all input signals used inside the process.

```

[loop_label:]
FOR variable_name IN range LOOP
    statement ;
    { statement ; }
END LOOP [loop_label] ;

```

```

[loop_label:]
WHILE boolean_expression LOOP
    statement ;
    { statement ; }
END LOOP [loop_label] ;

```

Figure A.19 The general forms of FOR-LOOP and WHILE-LOOP statements.

```

PROCESS ( Sel, x1, x2 )
BEGIN
    IF Sel = '0' THEN
        f <= x1 ;
    ELSE
        f <= x2 ;
    END IF ;
END PROCESS ;

```

Figure A.20 A PROCESS statement.

In VHDL jargon a process is described as follows. When the value of a signal in the sensitivity list changes, the process becomes *active*. Once active, the statements inside the process are “evaluated” in sequential order. Any signal assignments made in the process take effect only after all the statements inside the process have been evaluated. We say that the signal assignment statements inside the process are *scheduled* and will take effect at the end of the process.

The process describes a logic circuit and is translated into logic expressions in the same manner as the concurrent assignment statements in an architecture body. The concept of the process statements being evaluated in sequence provides a convenient way of understanding the semantics of the code inside a process. In particular, a key concept is that if multiple assignments are made to a signal inside a process, only the last one to be evaluated has any effect. This is illustrated in the next example.

A.9.6 STATEMENT ORDERING

The IF statement in Figure A.20 describes a multiplexer that assigns either of two inputs, x_1 or x_2 , to the output f . Another way of describing the multiplexer with an IF statement is shown in Figure A.21. The statement “ $f \leq x_1$;” is evaluated first. However, the signal f may not actually be changed to the value of x_1 , because there may be a subsequent assignment to f in the code inside the process statement. At this point in the process, x_1 represents the *default* value for f if no other assignment to f is evaluated. If we assume that $Sel = 1$, then the statement “ $f \leq x_2$;” will be evaluated. The effect of this second assignment to f is to override the default assignment. Hence the result of the process is that f is set to the value x_2 when $Sel = 1$. If we assume that $Sel = 0$, then the IF condition fails and f is assigned its default value, x_1 .

This example illustrates the effect of the ordering of statements inside a process. If the two statements were reversed in order, then the IF statement would be evaluated first and the statement “ $f \leq x_1$;” would be evaluated last. Hence the process would always result in f being set to the value of x_1 .

Implied Memory

Consider the process in Figure A.22. It is the same as the process in Figure A.21 except that the default assignment statement “ $f \leq x_1$;” has been removed. Because the process does not specify a default value for f , and there is no ELSE clause in the IF statement, the meaning of the process is that f should retain its present value when the IF condition is not

```

PROCESS ( Sel, x1, x2 )
BEGIN
    f <= x1 ;
    IF Sel = 1 THEN
        f <= x2 ;
    END IF ;
END PROCESS ;

```

Figure A.21 An example illustrating the ordering of statements within a PROCESS.

```

PROCESS ( Sel, x2 )
BEGIN
    IF Sel = 1 THEN
        f <= x2 ;
    END IF ;
END PROCESS ;

```

Figure A.22 An example of implied memory.

satisfied. The following expression is generated by the VHDL compiler for this process

$$f = Sel \cdot x2 + \overline{Sel} \cdot f$$

Hence when $Sel = 0$, the value of $x2$ is “remembered” at the output f . In VHDL jargon this is called *implied memory* or *implicit memory*. Although it is rarely useful for combinational circuits, we will show shortly that implied memory is the key concept used to describe sequential circuits.

A.9.7 USING A VARIABLE IN A PROCESS

We mentioned earlier that VHDL provides VARIABLE data objects, in addition to SIGNAL data objects. Unlike a signal, a variable data object does not represent a wire in a circuit. Therefore, a variable can be used to describe the functionality of a logic circuit in ways that are not possible using a signal. This concept is illustrated in Figure A.23. The intent of the code is to describe a logic circuit that counts the number of bits in the three-bit signal X that are equal to 1. The count is output using the signal called $Count$, which is a two-bit unsigned integer. Notice that $Count$ is declared with the mode *Buffer* because it is used in the architecture body on both the left and right sides of an assignment operator. Table A.2 explains the meaning of the *Buffer* mode.

Inside the process, $Count$ is initially set to 0. No quotes are used for the number 0 in this case, because VHDL allows a decimal number, which we said in section A.2.2 is denoted

```

LIBRARY ieee ;
USE ieee.std_logic_1164.all ;

ENTITY numbits IS
    PORT ( X      : IN      STD_LOGIC_VECTOR(1 TO 3) ;
          Count  : BUFFER INTEGER RANGE 0 TO 3 ) ;
END numbits ;

ARCHITECTURE Behavior OF numbits IS
BEGIN
    PROCESS ( X ) -- count the number of bits in X with the value 1
    BEGIN
        Count <= 0 ; -- the 0 with no quotes is a decimal number
        FOR i IN 1 TO 3 LOOP
            IF X(i) = '1' THEN
                Count <= Count + 1 ;
            END IF ;
        END LOOP ;
    END PROCESS ;
END Behavior ;

```

Figure A.23 A FOR-LOOP that does not represent a sensible circuit.

with no quotes, to be assigned to an INTEGER signal. The code gives a FOR-LOOP with the loop index variable *i*. For the values of *i* from 1 to 3, the IF statement inside the FOR-LOOP checks the value of bit *X(i)*; if it is 1, then the value of *Count* is incremented. The code given in the figure is legal VHDL code and can be compiled without generating any errors. However, it will not work as intended, and it does not represent a sensible logic circuit.

There are two reasons why the code in Figure A.23 will not work as intended. First, there are multiple assignment statements for the signal *Count* within the process. As explained for the previous example, only the last of these assignments will have any effect. Hence if any bit in *X* is 1, then the statement “Count <= '0' ;” will not have the desired effect of initializing *Count* to 0, because it will be overridden by the assignment statement in the FOR-LOOP. Also, the FOR-LOOP will not work as desired, because each iteration for which *X(1)* is 1 will override the effect of the previous iteration. The second reason why the code is not sensible is that the statement “Count <= Count + '1' ;” describes a circuit with feedback. Since the circuit is combinational, such feedback will result in oscillations and the circuit will not be stable.

The desired behavior of the VHDL code in Figure A.23 can be achieved using a variable, instead of a signal. This is illustrated in Figure A.24, in which the variable *Tmp* is used instead of the signal *Count* inside the process. The value of *Tmp* is assigned to *Count* at the end of the process. Observe that the assignment statements to *Tmp* are indicated with the :=

```

LIBRARY ieee ;
USE ieee.std_logic_1164.all ;

ENTITY Numbits IS
    PORT ( X      : IN  STD_LOGIC_VECTOR(1 TO 3) ;
          Count  : OUT INTEGER RANGE 0 TO 3 ) ;
END Numbits ;

ARCHITECTURE Behavior OF Numbits IS
BEGIN
    PROCESS ( X ) -- count the number of bits in X equal to 1
        VARIABLE Tmp : INTEGER ;
    BEGIN
        Tmp := 0 ;
        FOR i IN 1 TO 3 LOOP
            IF X(i) = '1' THEN
                Tmp := Tmp + 1 ;
            END IF ;
        END LOOP ;
        Count <= Tmp ;
    END PROCESS ;
END Behavior ;

```

Figure A.24 The FOR-LOOP from Figure A.23 using a variable.

operator, as opposed to the \leq operator. The $:=$ is called the *variable assignment operator*. Unlike \leq , it does not result in the assignment being *scheduled* until the end of the process. The variable assignment takes place immediately. This *immediate* assignment solves the first of the two problems with the code in Figure A.23. The second problem is also solved by using a *variable* instead of a signal. Because the variable does not represent a wire in a circuit, the FOR-LOOP need not be literally interpreted as a circuit with feedback. By using the variable, the FOR-LOOP represents only a desired *behavior*, or *functionality*, of the circuit. When the code is translated, the VHDL compiler will generate a combinational circuit that implements the functionality expressed in the FOR-LOOP.

When the code in Figure A.24 is translated by the VHDL compiler, it produces the circuit with 2 two-bit adders shown in Figure A.25. It is possible to see how this circuit corresponds to the FOR-LOOP in the code. The result of the first iteration of the loop is that *Count* is set to the value of $X(1)$. The second iteration then adds $X(1)$ to $X(2)$. This is realized by the top adder in the figure. The third iteration adds $X(3)$ to the sum produced from the second iteration. This corresponds to the bottom adder. When this circuit is optimized by the logic synthesis algorithms, the resulting expressions for *Count* are

$$\begin{aligned} \text{Count}(1) &= X(1)X(2) + X(1)X(3) + X(2)X(3) \\ \text{Count}(0) &= X(1) \oplus X(2) \oplus X(3) \end{aligned}$$

These expressions represent a full-adder circuit, with *Count*(0) as the sum output and *Count*(1) as the carry-out. It is interesting to note that even though the VHDL code describes the desired behavior of the circuit in an abstract way, using a FOR-LOOP, in this example

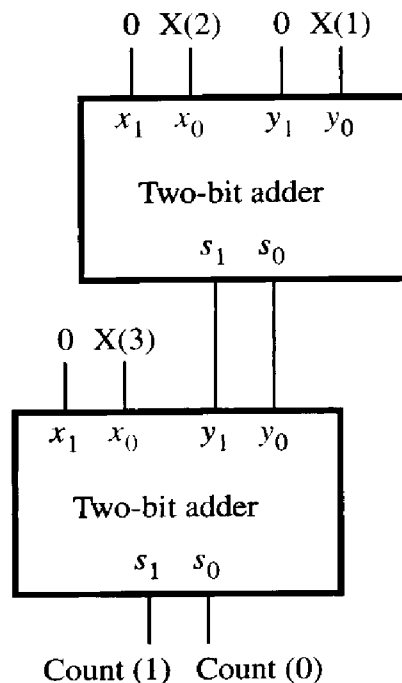


Figure A.25 The circuit generated from the code in Figure A.24.

the logic synthesis algorithms produce the most efficient circuit, which is the full-adder. As we said at the beginning of this appendix and in section 2.10, the style of code in Figure A.24 should be avoided, because it is often difficult for the designer to envisage what logic circuit the code represents.

As another example of the use of a variable, Figure A.26 gives the code for an n -bit NAND gate entity, named $NANDn$. The number of inputs to the NAND gate is set by the GENERIC parameter n . The inputs are the n -bit signal X , and the output is f . The variable Tmp is defined in the architecture and originally set to the value of the input signal $X(1)$. In the FOR LOOP, Tmp is ANDed successively with input signals $X(2)$ to $X(n)$. Since Tmp is a variable data object, assignments to it take effect immediately; they are not scheduled to take effect at the end of the process. The complement of Tmp is assigned to f , thus completing the description of the n -input NAND operation.

Figure A.27 shows the same code given in Figure A.26 but with the data object Tmp defined as a signal, instead of as a variable. This code gives a wrong result, because only the last statement included in the process has any effect on Tmp . The code results in $Tmp = Tmp \cdot X(4)$, as determined by the last iteration of the FOR LOOP. Also, since Tmp is never initialized, its value is unknown. Hence the value of the output $f = \overline{Tmp}$ is unknown.

Figure A.28 shows one way to describe the n -input NAND gate using signals. Here Tmp is defined as an n -bit signal, which is set to contain n 1s using the (OTHERS => '1')

```

LIBRARY ieee ;
USE ieee.std_logic_1164.all ;

ENTITY NANDn IS
    GENERIC ( n : INTEGER := 4 ) ;
    PORT ( X : IN  STD_LOGIC_VECTOR(1 TO n) ;
          f : OUT STD_LOGIC ) ;
END NANDn ;

ARCHITECTURE Behavior OF NANDn IS
BEGIN
    PROCESS ( X )
        VARIABLE Tmp : STD_LOGIC ;
    BEGIN
        Tmp := X(1) ;
        AND_bits: FOR i IN 2 TO n LOOP
            Tmp := Tmp AND X(i) ;
        END LOOP AND_bits ;
        f <= NOT Tmp ;
    END PROCESS ;
END Behavior ;

```

Figure A.26 Using a variable to describe an n -input NAND gate.

```

LIBRARY ieee ;
USE ieee.std_logic_1164.all ;

ENTITY NANDn IS
    GENERIC ( n : INTEGER := 4 ) ;
    PORT ( X : IN    STD_LOGIC_VECTOR(1 TO n) ;
          f : OUT STD_LOGIC ) ;
END NANDn ;

ARCHITECTURE Behavior OF NANDn IS
    SIGNAL Tmp : STD_LOGIC ;
BEGIN
    PROCESS ( X )
    BEGIN
        Tmp <= X(1) ;
        AND_bits: FOR i IN 2 TO n LOOP
            Tmp <= Tmp AND X(i) ;
        END LOOP AND_bits ;
        f <= NOT Tmp ;
    END PROCESS ;
END Behavior ;

```

Figure A.27 The code from Figure A.26 using a signal.

```

LIBRARY ieee ;
USE ieee.std_logic_1164.all ;

ENTITY NANDn IS
    GENERIC ( n : INTEGER := 4 ) ;
    PORT ( X : IN    STD_LOGIC_VECTOR(1 TO n) ;
          f : OUT STD_LOGIC ) ;
END NANDn ;

ARCHITECTURE Behavior OF NANDn IS
    SIGNAL Tmp : STD_LOGIC_VECTOR(1 TO n) ;
BEGIN
    Tmp <= (OTHERS => '1') ;
    f <= '0' WHEN X = Tmp ELSE '1' ;
END Behavior ;

```

Figure A.28 Using a signal to describe an n -input NAND gate.

construct. The conditional signal assignment specifies that f is 0 only if all bits in the input X are 1, thus describing the NAND operation.

A final example of variables used in a sequential circuit is given in section A.10.7. In general, using both variables and signals in VHDL code can lead to confusion because they imply different semantics. Since variables do not necessarily represent wires in a circuit, the meaning of code that uses variables is sometimes ill defined. To avoid confusion, in this book we use variables only for the loop indices in FOR GENERATE and FOR LOOP statements. Except for similar purposes, the reader should avoid using variables because they are not needed for describing logic circuits.

A.10 SEQUENTIAL CIRCUITS

Although combinational circuits can be described using either concurrent or sequential assignment statements, sequential circuits can be described only with sequential assignment statements. We now give some representative examples of sequential circuits.

A.10.1 A GATED D LATCH

Figure A.29 gives the code for a gated D latch. The process sensitivity list includes both the latch's data input, D , and clock, clk . Hence whenever a change occurs in the value of either D or clk , the process becomes active. The IF statement specifies that Q should be set

```

LIBRARY ieee ;
USE ieee.std_logic_1164.all ;

ENTITY latch IS
    PORT ( D, clk : IN  STD_LOGIC ;
          Q      : OUT STD_LOGIC ) ;
END latch ;

ARCHITECTURE Behavior OF latch IS
BEGIN
    PROCESS ( D, clk )
    BEGIN
        IF clk = '1' THEN
            Q <= D ;
        END IF ;
    END PROCESS ;
END Behavior ;

```

Figure A.29 A gated D Latch.

to the value of D whenever the clock is 1. There is no ELSE clause in the IF statement. As we explained for Figure A.22, this implies that Q should retain its present value when the IF condition is not met.

A.10.2 D FLIP-FLOP

Figure A.30 gives a process that is slightly different from the one in Figure A.29. The sensitivity list includes only the *Clock* signal, which means that the process is active only when the value of *Clock* changes. The condition in the IF statement looks unusual. The syntax *Clock*'EVENT represents a *change* in the value of the clock signal. In VHDL jargon 'EVENT is called an *attribute*, and combining 'EVENT with a signal name, such as *Clock*, yields a logical condition. The combination in the IF statement of the two conditions *Clock*'EVENT and *Clock* = '1' specifies that Q should be assigned the value of D when "a change occurs in the value of *Clock*, and *Clock* is now 1". This describes a low-to-high transition of the clock signal; hence the code describes a positive-edge-triggered D flip-flop.

The *std_logic_1164* package defines the two functions named *rising_edge* and *falling_edge*. They can be used as a short-form notation for the condition that checks for the occurrence of a clock edge. In Figure A.30 we could replace the line "IF *Clock*'EVENT AND *Clock* = '1' THEN" with the equivalent line "IF *rising_edge*(*Clock*) THEN". We do not use *rising_edge* or *falling_edge* in this book; they are mentioned for completeness.

```

LIBRARY ieee ;
USE ieee.std_logic_1164.all ;

ENTITY flipflop IS
    PORT ( D, Clock : IN  STD_LOGIC ;
          Q         : OUT STD_LOGIC ) ;
END flipflop ;

ARCHITECTURE Behavior OF flipflop IS
BEGIN
    PROCESS ( Clock )
    BEGIN
        IF Clock'EVENT AND Clock = '1' THEN
            Q <= D ;
        END IF ;
    END PROCESS ;
END Behavior ;

```

Figure A.30 D flip-flop.

A.10.3 USING A WAIT UNTIL STATEMENT

The process in Figure A.31 uses a different syntax to describe a D flip-flop. Synchronization with the clock edge is specified by using the statement “WAIT UNTIL Clock’EVENT AND Clock = ‘1’;”. A process that uses a WAIT UNTIL statement is a special case because the sensitivity list is omitted. Use of this WAIT UNTIL statement implicitly specifies that the sensitivity list includes only *Clock*. For our purposes, which is using VHDL for synthesis of circuits, a process can include a WAIT UNTIL statement only if it is the first statement in the process.

The WAIT UNTIL statement above can be written more simply as

```
WAIT UNTIL Clock = '1' ;
```

which means “wait for the next positive edge of the *Clock* signal”. But, since some CAD synthesis tools require the inclusion of the ’EVENT attribute, we include the attribute in our examples.

As seen in Figures A.30 and A.31, both IF and WAIT UNTIL statements can be used to describe flip-flops. If a process only defines flip-flops, then it makes no difference which construct is used. However, in practical designs a process often includes many statements. If one or more of these statements specify a combinational subcircuit, then it is necessary to use IF statements to infer flip-flops where desired. If the WAIT UNTIL statement is used, which has to be the first statement in the process, then there will be flip-flops inferred for all statements in the process. For this reason, designers prefer using the IF statement.

```
LIBRARY ieee ;
USE ieee.std_logic_1164.all ;

ENTITY flipflop IS
    PORT ( D, Clock : IN  STD_LOGIC ;
          Q         : OUT STD_LOGIC ) ;
END flipflop ;

ARCHITECTURE Behavior OF flipflop IS
BEGIN
    PROCESS
    BEGIN
        WAIT UNTIL Clock’EVENT AND Clock = '1' ;
        Q <= D ;
    END PROCESS ;
END Behavior ;
```

Figure A.31 Equivalent code to Figure A.30, using a WAIT UNTIL statement.

A.10.4 A FLIP-FLOP WITH ASYNCHRONOUS RESET

Figure A.32 gives a process that is similar to the one in Figure A.30. It describes a D flip-flop with an asynchronous reset, or clear, input. The reset signal has the name *Resetn*. When *Resetn* = 0, the flip-flop output Q is set to 0. Appending the letter *n* to a signal name is a widely used convention to denote an active-low signal.

A.10.5 SYNCHRONOUS RESET

Figure A.33 shows how a flip-flop with a synchronous reset input can be described by using the IF statement. Figure A.34 presents a specification based on the WAIT UNTIL statement.

A.10.6 REGISTERS

One possible approach for describing a multibit register is to create an entity that instantiates multiple flip-flops. A more convenient method is illustrated in Figure A.35. It gives the same code shown in Figure A.32 but using the four-bit STD_LOGIC_VECTOR input *D* and the four-bit output Q. The code describes a four-bit register with asynchronous clear.

Figure A.36 gives the code for an entity named *regn*. It shows how the code in Figure A.35 can be extended to represent an *n*-bit register. The number of flip-flops is set by the generic parameter *n*.

The code in Figure A.37 shows how an enable input can be added to the *n*-bit register from Figure A.36. When the active clock edge occurs, the flip-flops in the register cannot

```

LIBRARY ieee ;
USE ieee.std_logic_1164.all ;

ENTITY flipflop IS
    PORT ( D, Resetn, Clock : IN    STD_LOGIC ;
          Q                 : OUT  STD_LOGIC ) ;
END flipflop ;

ARCHITECTURE Behavior OF flipflop IS
BEGIN
    PROCESS ( Resetn, Clock )
    BEGIN
        IF Resetn = '0' THEN
            Q <= '0' ;
        ELSIF Clock'EVENT AND Clock = '1' THEN
            Q <= D ;
        END IF ;
    END PROCESS ;
END Behavior ;

```

Figure A.32 D flip-flop with asynchronous reset.

```

LIBRARY ieee ;
USE ieee.std_logic_1164.all ;

ENTITY flipflop IS
    PORT ( D, Resetn, Clock : IN  STD_LOGIC ;
          Q                  : OUT STD_LOGIC ) ;
END flipflop ;

ARCHITECTURE Behavior OF flipflop IS
BEGIN
    PROCESS ( Resetn, Clock )
    BEGIN
        IF Clock'EVENT AND Clock = '1' THEN
            IF Resetn = '0' THEN
                Q <= '0' ;
            ELSE
                Q <= D ;
            END IF ;
        END IF ;
    END PROCESS ;
END Behavior ;

```

Figure A.33 D flip-flop with synchronous reset, using an IF statement.

```

LIBRARY ieee ;
USE ieee.std_logic_1164.all ;

ENTITY flipflop IS
    PORT ( D, Resetn, Clock : IN  STD_LOGIC ;
          Q                  : OUT STD_LOGIC ) ;
END flipflop ;

ARCHITECTURE Behavior OF flipflop IS
BEGIN
    PROCESS
    BEGIN
        WAIT UNTIL Clock'EVENT AND Clock = '1' ;
        IF Resetn = '0' THEN
            Q <= '0' ;
        ELSE
            Q <= D ;
        END IF ;
    END PROCESS ;
END Behavior ;

```

Figure A.34 D flip-flop with synchronous reset, using a WAIT UNTIL statement.

```

LIBRARY ieee ;
USE ieee.std_logic_1164.all ;

ENTITY reg4 IS
    PORT ( D           : IN   STD_LOGIC_VECTOR(3 DOWNTO 0) ;
          Resetn, Clock : IN   STD_LOGIC ;
          Q           : OUT  STD_LOGIC_VECTOR(3 DOWNTO 0) ) ;
END reg4 ;

ARCHITECTURE Behavior OF reg4 IS
BEGIN
    PROCESS ( Resetn, Clock )
    BEGIN
        IF Resetn = '0' THEN
            Q <= "0000" ;
        ELSIF Clock'EVENT AND Clock = '1' THEN
            Q <= D ;
        END IF ;
    END PROCESS ;
END Behavior ;

```

Figure A.35 Code for a four-bit register with asynchronous clear.

```

LIBRARY ieee ;
USE ieee.std_logic_1164.all ;

ENTITY regn IS
    GENERIC ( n : INTEGER := 4 ) ;
    PORT ( D           : IN   STD_LOGIC_VECTOR(n-1 DOWNTO 0) ;
          Resetn, Clock : IN   STD_LOGIC ;
          Q           : OUT  STD_LOGIC_VECTOR(n-1 DOWNTO 0) ) ;
END regn ;

ARCHITECTURE Behavior OF regn IS
BEGIN
    PROCESS ( Resetn, Clock )
    BEGIN
        IF Resetn = '0' THEN
            Q <= (OTHERS => '0') ;
        ELSIF Clock'EVENT AND Clock = '1' THEN
            Q <= D ;
        END IF ;
    END PROCESS ;
END Behavior ;

```

Figure A.36 Code for an n -bit register with asynchronous clear.

```

LIBRARY ieee ;
USE ieee.std_logic_1164.all ;

ENTITY regne IS
    GENERIC ( n : INTEGER := 4 ) ;
    PORT ( D      : IN  STD_LOGIC_VECTOR(n-1 DOWNT0 0) ;
          Resetn  : IN  STD_LOGIC ;
          E, Clock : IN  STD_LOGIC ;
          Q       : OUT STD_LOGIC_VECTOR(n-1 DOWNT0 0) ) ;
END regne ;

ARCHITECTURE Behavior OF regne IS
BEGIN
    PROCESS ( Resetn, Clock )
    BEGIN
        IF Resetn = '0' THEN
            Q <= (OTHERS => '0') ;
        ELSIF Clock'EVENT AND Clock = '1' THEN
            IF E = '1' THEN
                Q <= D ;
            END IF ;
        END IF ;
    END PROCESS ;
END Behavior ;

```

Figure A.37 VHDL code for an n -bit register with an enable input.

change their stored values if the enable E is 0. If $E = 1$, the register responds to the active clock edge in the normal way.

A.10.7 SHIFT REGISTERS

An example of code that defines a four-bit shift register is shown in Figure A.38. The lines of code are numbered for ease of reference. The shift register has a serial input, w , and parallel outputs, Q . The right-most bit in the register is $Q(4)$, and the left-most bit is $Q(1)$; shifting is performed in the right-to-left direction. The architecture declares the signal $Sreg$, which is used to describe the shift operation. All assignments to $Sreg$ are synchronized to the clock edge by the IF condition; hence $Sreg$ represents the outputs of flip-flops. The statement in line 13 specifies that $Sreg(4)$ is assigned the value of w . As we explained previously, this assignment does not take effect immediately but is scheduled to occur at the end of the process. In line 14 the current value of $Sreg(4)$, before it is shifted as a result of line 13, is assigned to $Sreg(3)$. Lines 15 and 16 complete the shift operation. They assign the current values of $Sreg(3)$ and $Sreg(2)$, before they are changed as a result of lines 14 and 15, to $Sreg(2)$ and $Sreg(1)$, respectively. Finally, $Sreg$ is assigned to the Q outputs.

```

1  LIBRARY ieee ;
2  USE ieee.std_logic_1164.all ;

3  ENTITY shift4 IS
4      PORT ( w, Clock : IN  STD_LOGIC ;
5            Q       : OUT STD_LOGIC_VECTOR(1 TO 4) ) ;
6  END shift4 ;

7  ARCHITECTURE Behavior OF shift4 IS
8      SIGNAL Sreg : STD_LOGIC_VECTOR(1 TO 4) ;
9  BEGIN
10     PROCESS ( Clock )
11     BEGIN
12         IF Clock'EVENT AND Clock = '1' THEN
13             Sreg(4) <= w ;
14             Sreg(3) <= Sreg(4) ;
15             Sreg(2) <= Sreg(3) ;
16             Sreg(1) <= Sreg(2) ;
17         END IF ;
18     END PROCESS ;
19     Q <= Sreg ;
20 END Behavior ;

```

Figure A.38 Code for a four-bit shift register.

The key point that has to be appreciated in the code in Figure A.38 is that the assignment statements in lines 13 to 16 do not take effect until the end of the process. Hence all flip-flops change their values at the same time, as required in the shift register. We could write the statements in lines 13 to 16 in any order without changing the meaning of the code.

In section A.9.7 we introduced variables and showed how they differ from signals. As another example of the semantics involved using variables, Figure A.39 gives the code from Figure A.38 but with *Sreg* declared as a variable, instead of as a signal. The statement in line 13 assigns the value of *w* to *Sreg* (4). Since *Sreg* is a variable, the assignment takes effect immediately. In line 14 the value of *Sreg* (4), which has already been changed to *w*, is assigned to *Sreg* (3). Hence line 14 results in *Sreg* (3) = *w*. Similarly, lines 15 and 16 set *Sreg* (2) and *Sreg* (1) to the value of *w*. The code does not describe the desired shift register, but rather loads all flip-flops with the value on the input *w*.

For the code in Figure A.39 to correctly describe a shift register, the ordering of lines 13 to 16 has to be reversed. Then the first assignment sets *Sreg* (1) to the value of *Sreg* (2), the second sets *Sreg* (2) to the value of *Sreg* (3), and so on. Each successive assignment is not affected by the one that precedes it; hence the semantics of using variables does not cause a problem. As we said in section A.9.7, it can be confusing to use both signals and variables at the same time because they imply different semantics.


```

1  LIBRARY ieee ;
2  USE ieee.std_logic_1164.all ;

3  ENTITY shift4 IS
4      PORT ( w, Clock : IN  STD_LOGIC ;
5            Q         : OUT STD_LOGIC_VECTOR(1 TO 4) ) ;
6  END shift4 ;

7  ARCHITECTURE Behavior OF shift4 IS
8  BEGIN
9      PROCESS ( Clock )
10         VARIABLE Sreg : STD_LOGIC_VECTOR(1 TO 4) ;
11     BEGIN
12         IF Clock'EVENT AND Clock = '1' THEN
13             Sreg(4) := w ;
14             Sreg(3) := Sreg(4) ;
15             Sreg(2) := Sreg(3) ;
16             Sreg(1) := Sreg(2) ;
17         END IF ;
18         Q <= Sreg ;
19     END PROCESS ;
20 END Behavior ;

```

Figure A.39 The code from Figure A.38, using a variable.

A.10.8 COUNTERS

Figure A.40 shows the code for a four-bit counter with an asynchronous reset input. The counter also has an enable input. On the positive clock edge, if the enable E is 1, the count is incremented. If $E = 0$, the counter holds its current value. Because counters are commonly needed in logic circuits, most CAD systems provide a selection of counters that can be instantiated in a design.

A.10.9 USING SUBCIRCUITS WITH GENERIC PARAMETERS

We have shown several examples of VHDL entities that include generic parameters. When these subcircuits are used as components in other code, the generic parameters can be set to whatever values are needed. To give an example of component instantiation using generics, consider the circuit shown in Figure A.41. The circuit adds the binary number represented by the k -bit input X to itself a number of times. Such a circuit is often called an *accumulator*. To store the result of each addition operation, the circuit includes a k -bit

```

LIBRARY ieee ;
USE ieee.std_logic_1164.all ;
USE ieee.std_logic_unsigned.all ;

ENTITY count4 IS
    PORT ( Resetn    : IN    STD_LOGIC ;
          E, Clock   : IN    STD_LOGIC ;
          Q          : OUT  STD_LOGIC_VECTOR (3 DOWNTO 0) );
END count4 ;

ARCHITECTURE Behavior OF count4 IS
    SIGNAL Count : STD_LOGIC_VECTOR (3 DOWNTO 0) ;
BEGIN
    PROCESS ( Clock, Resetn )
    BEGIN
        IF Resetn = '0' THEN
            Count <= "0000" ;
        ELSIF (Clock'EVENT AND Clock = '1') THEN
            IF E = '1' THEN
                Count <= Count + 1 ;
            END IF ;
        END IF ;
    END PROCESS ;
    Q <= Count ;
END Behavior ;

```

Figure A.40 An example of a counter.

register. The register has an asynchronous reset input, *Resetn*. It also has an enable input, *E*, which is controlled by a four-bit counter. The counter has an asynchronous clear input and a count enable input. The circuit operates by first clearing all bits in the register and counter to 0. Then in each clock cycle, the counter is incremented, and the sum outputs from the adder are stored in the register. When the counter reaches the value 1111, the enable inputs on both the register and counter are set to 0 by the NAND gate. Hence the circuit remains in this state until it is reset again. The final value stored in the register is equal to $15X$.

We can represent the accumulator circuit using several subcircuits described in this appendix: *addern* (Figure A.15), *NANDn* (Figure A.28), *regne*, and *count4*. We placed the component declaration statements for all of these subcircuits in one package, named *components*, which is shown in Figure A.42.

Complete code for the accumulator is given in Figure A.43. It uses the generic parameter *k* to represent the number of bits in the input *X*. Using this parameter in the code makes it easy to change the bit-width at a later time if desired. The architecture defines the signal *Sum* to represent the outputs of the adder; for simplicity, we ignore the possibility of arithmetic overflow and assume that the sum can be represented using *k* bits. The four-bit signal *C*

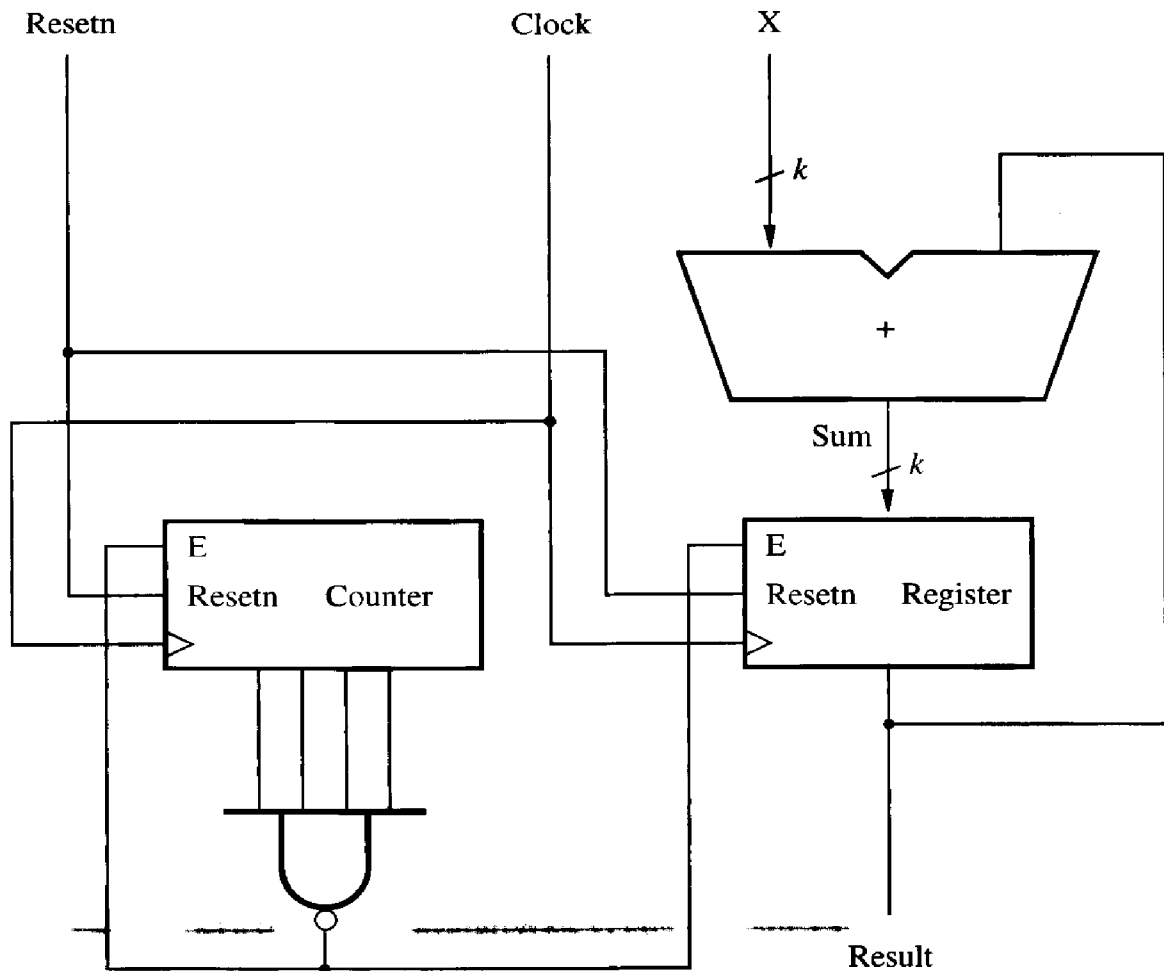


Figure A.41 The accumulator circuit.

represents the outputs from the counter. The *Stop* signal is connected to the enable inputs on the register and counter.

The statement labeled *adder* instantiates the *addern* subcircuit. The GENERIC MAP keywords are used to specify the value of the adder's generic parameter, n . The syntax ($n \Rightarrow k$) sets the number of bits in the adder to k . We do not need the carry-in port on the adder, but a signal must be connected to it. The signal *Zero_bit*, which is set to '0' in the code, is used as a placeholder for the carry-in port (the VHDL syntax does not permit a constant value, such as '1', to be associated directly with a port; hence a signal must be defined for this purpose). The k -bit data inputs to the adder are X and the output of the register, which is named *Result*. The sum output from the adder is named *Sum*, and the carry-out, which is not used in the circuit, is named *Cout*.

The *regne* subcircuit is instantiated in the statement labeled *reg*. GENERIC MAP is used to set the number of bits in the register to k . The k -bit register input is provided by the *Sum* output from the adder. The register's output is named *Result*; this signal represents the output of the accumulator circuit. It has the mode BUFFER in the entity declaration. This is required in the VHDL syntax for the signal to be connected to a port on an instantiated component.

```

LIBRARY ieee ;
USE ieee.std_logic_1164.all ;

PACKAGE components IS

    COMPONENT addern -- n-bit adder
        GENERIC ( n : INTEGER := 4 ) ;
        PORT ( Cin : IN STD_LOGIC ;
              X, Y : IN STD_LOGIC_VECTOR(n-1 DOWNTO 0) ;
              S : OUT STD_LOGIC_VECTOR(n-1 DOWNTO 0) ;
              Cout : OUT STD_LOGIC ) ;
    END COMPONENT ;

    COMPONENT regne -- n-bit register with enable
        GENERIC ( n : INTEGER := 4 ) ;
        PORT ( D : IN STD_LOGIC_VECTOR(n-1 DOWNTO 0) ;
              Resetn : IN STD_LOGIC ;
              E, Clock : IN STD_LOGIC ;
              Q : OUT STD_LOGIC_VECTOR(n-1 DOWNTO 0) ) ;
    END COMPONENT ;

    COMPONENT count4 -- 4-bit counter with enable
        PORT ( Resetn : IN STD_LOGIC ;
              E, Clock : IN STD_LOGIC ;
              Q : OUT STD_LOGIC_VECTOR ( 3 DOWNTO 0 ) ) ;
    END COMPONENT ;

    COMPONENT NANDn -- n-bit AND gate
        GENERIC ( n : INTEGER := 4 ) ;
        PORT ( X : IN STD_LOGIC_VECTOR(1 TO n) ;
              f : OUT STD_LOGIC ) ;
    END COMPONENT ;

END components ;

```

Figure A.42 Component declarations for the accumulator circuit.

The *count4* and *NANDn* components are instantiated in the statements labeled *Counter* and *NANDgate*. We do not have to use the **GENERIC MAP** keyword for *NANDn*, because the default value of its generic parameter is 4, which is the value needed in this application.

A.10.10 A MOORE-TYPE FINITE STATE MACHINE

Figure A.44 shows the state diagram of a simple Moore machine. The code for this machine is shown in Figure A.45. The signal named *y* represents the state of the machine. It is

```

LIBRARY ieee ;
USE ieee.std_logic_1164.all ;
USE work.components.all ;

ENTITY accum IS
    GENERIC ( k : INTEGER := 8 ) ;
    PORT ( Resetn, Clock : IN          STD_LOGIC ;
          X              : IN          STD_LOGIC_VECTOR(k-1 DOWNTO 0) ;
          Result         : BUFFER STD_LOGIC_VECTOR(k-1 DOWNTO 0) ) ;
END accum ;

ARCHITECTURE Structure OF accum IS
    SIGNAL Sum : STD_LOGIC_VECTOR(k-1 DOWNTO 0) ;
    SIGNAL C   : STD_LOGIC_VECTOR(3 DOWNTO 0) ;
    SIGNAL Zero_bit, Cout, Stop : STD_LOGIC ;
BEGIN
    Zero_bit <= '0' ;
    adder: addern
        GENERIC MAP ( n => k )
        PORT MAP ( Zero_bit, X, Result, Sum, Cout ) ;
    reg: regne
        GENERIC MAP ( n => k )
        PORT MAP ( Sum, Resetn, Stop, Clock, Result ) ;
    Counter: count4
        PORT MAP ( Clock, Resetn, Stop, C ) ;
    NANDgate: NANDn
        PORT MAP ( C, Stop ) ;
END Structure ;

```

Figure A.43 Code for the accumulator circuit.

declared with an enumerated type, *State_type*, that has the three possible values A, B, and C. When the code is compiled, the VHDL compiler automatically performs a state assignment to select appropriate bit patterns for the three states. The behavior of the machine is defined by the process with the sensitivity list that comprises the reset and clock signals.

The VHDL code includes an asynchronous reset input that puts the machine in state A. The state table for the machine is defined using a CASE statement. Each WHEN clause corresponds to a present state of the machine, and the IF statement inside the WHEN clause specifies the next state to be reached after the next positive edge of the clock signal. Since the machine is of the Moore type, the output *z* can be defined as a separate concurrent assignment statement that depends only on the present state of the machine. Alternatively, the appropriate value for *z* could have been specified within each WHEN clause of the CASE statement.

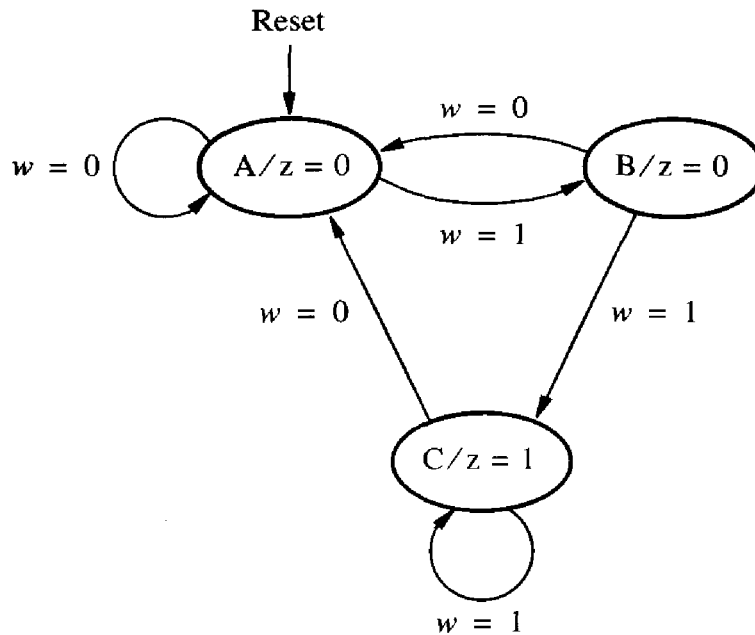


Figure A.44 State diagram of a simple Moore-type FSM.

An alternative way to describe a Moore-type finite state machine is given in the architecture in Figure A.46. Two signals are used to describe how the machine moves from one state to another state. The signal *y_present* represents the outputs of the state flip-flops, and the signal *y_next* represents the inputs to the flip-flops. The code has two processes. The top process describes a combinational circuit. It uses a CASE statement to specify the values that *y_next* should have for each value of *y_present*. The other process represents a sequential circuit, which specifies that *y_present* is assigned the value of *y_next* on the positive clock edge. The process also specifies that *y_present* should take the value A when *Resetn* is 0, which provides the asynchronous reset.

A.10.11 A MEALY-TYPE FINITE STATE MACHINE

A state diagram for a simple Mealy machine is shown in Figure A.47. The corresponding code is given in Figure A.48. The code is the same as in Figure A.45 except that the output *z* is specified using a separate CASE statement. The CASE statement states that when the FSM is in state A, *z* should be 0, but when in state B, *z* should take the value of *w*. This CASE statement properly describes the logic needed for *z*. However, it is not obvious why we have used a second CASE statement in the code, rather than specify the value of *z* inside the CASE statement that defines the state table for the machine. This approach would not work properly because the CASE statement for the state table is nested inside the IF statement that waits for a clock edge to occur. Hence if we placed the code for *z* inside this CASE statement, then the value of *z* could change only as a result of a clock edge. This does not meet the requirements of the Mealy-type FSM, because the value of *z* depends not only on the state of the machine but also on the value of the input *w*.

```

LIBRARY ieee ;
USE ieee.std_logic_1164.all ;

ENTITY moore IS
    PORT ( Clock   : IN   STD_LOGIC ;
          w       : IN   STD_LOGIC ;
          Resetn  : IN   STD_LOGIC ;
          z       : OUT  STD_LOGIC ) ;
END moore ;

ARCHITECTURE Behavior OF moore IS
    TYPE State_type IS (A, B, C) ;
    SIGNAL y : State_type ;
BEGIN
    PROCESS ( Resetn, Clock )
    BEGIN
        IF Resetn = '0' THEN
            y <= A ;
        ELSIF (Clock'EVENT AND Clock = '1') THEN
            CASE y IS
                WHEN A =>
                    IF w = '0' THEN
                        y <= A ;
                    ELSE
                        y <= B ;
                    END IF ;
                WHEN B =>
                    IF w = '0' THEN
                        y <= A ;
                    ELSE
                        y <= C ;
                    END IF ;
                WHEN C =>
                    IF w = '0' THEN
                        y <= A ;
                    ELSE
                        y <= C ;
                    END IF ;
            END CASE ;
        END IF ;
    END PROCESS ;

    z <= '1' WHEN y = C ELSE '0' ;
END Behavior ;

```

Figure A.45 An example of a Moore-type finite state machine.

```

ARCHITECTURE Behavior OF moore IS
  TYPE State_type IS (A, B, C);
  SIGNAL y_present, y_next : State_type;
BEGIN
  PROCESS ( w, y_present )
  BEGIN
    CASE y_present IS
      WHEN A =>
        IF w = '0' THEN
          y_next <= A;
        ELSE
          y_next <= B;
        END IF;
      WHEN B =>
        IF w = '0' THEN
          y_next <= A;
        ELSE
          y_next <= C;
        END IF;
      WHEN C =>
        IF w = '0' THEN
          y_next <= A;
        ELSE
          y_next <= C;
        END IF;
    END CASE;
  END PROCESS;

  PROCESS ( Clock, Resetn )
  BEGIN
    IF Resetn = '0' THEN
      y_present <= A;
    ELSIF (Clock'EVENT AND Clock = '1') THEN
      y_present <= y_next;
    END IF;
  END PROCESS;

  z <= '1' WHEN y_present = C ELSE '0';
END Behavior;

```

Figure A.46 Code equivalent to Figure A.45, using two processes.

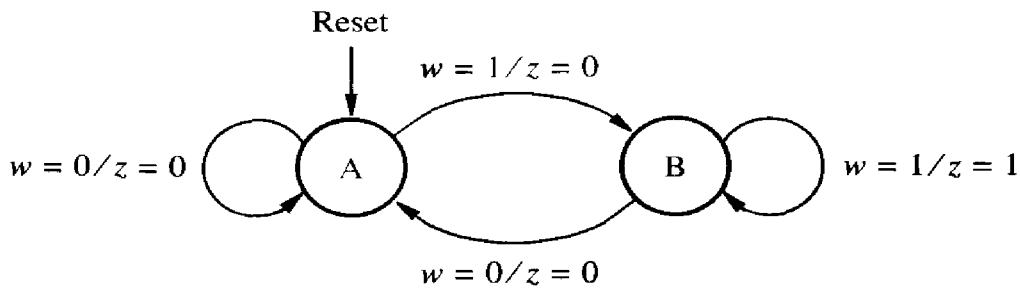


Figure A.47 State diagram of a Mealy-type FSM.

A.11 COMMON ERRORS IN VHDL CODE

This section lists some common errors that our students have made when writing VHDL code.

ENTITY and ARCHITECTURE Names

The name used in an ENTITY declaration and the corresponding ARCHITECTURE must be identical. The code

```

ENTITY adder IS
  :
END adder ;
ARCHITECTURE Structure OF adder4 IS
  :
END Structure ;
  
```

is erroneous because the ENTITY declaration uses the name *adder*, whereas the architecture uses the name *adder4*.

Missing Semicolon

Every VHDL statement must end with a semicolon.

Use of Quotes

Single quotes are used for single-bit data, double quotes for multibit data, and no quotes are used for integer data. Examples are given in section A.2.

Combinational versus Sequential Statements

Combinational statements include simple signal assignments, selected signal assignments, and generate statements. Simple signal assignments can be used either outside or inside a PROCESS statement. The other types of combinational statements can be used only outside a PROCESS statement.

```

LIBRARY ieee ;
USE ieee.std_logic_1164.all ;

ENTITY mealy IS
    PORT ( Clock, Resetn : IN    STD_LOGIC ;
          w              : IN    STD_LOGIC ;
          z              : OUT   STD_LOGIC ) ;
END mealy ;

ARCHITECTURE Behavior OF mealy IS
    TYPE State_type IS ( A, B ) ;
    SIGNAL y : State_type ;
BEGIN
    PROCESS ( Resetn, Clock )
    BEGIN
        IF Resetn = '0' THEN
            y <= A ;
        ELSIF (Clock'EVENT AND Clock = '1') THEN
            CASE y IS
                WHEN A =>
                    IF w = '0' THEN y <= A ;
                    ELSE y <= B ;
                    END IF ;
                WHEN B =>
                    IF w = '0' THEN y <= A ;
                    ELSE y <= B ;
                    END IF ;
            END CASE ;
        END IF ;
    END PROCESS ;

    PROCESS ( y, w )
    BEGIN
        CASE y IS
            WHEN A =>
                z <= '0' ;
            WHEN B =>
                z <= w ;
        END CASE ;
    END PROCESS ;
END Behavior ;

```

Figure A.48 An example of a Mealy-type machine.

Sequential statements include IF, CASE, and LOOP statements. Each of these types of statements can be used only inside a process statement.

Component Instantiation

The following statement contains two errors

```
control: shiftr GENERIC MAP ( K => 3 );
        PORT MAP ( '1', Clock, w, Q );
```

There should be no semicolon at the end of the first line, because the two lines represent a single VHDL statement. Also, it is illegal to associate a constant value ('1') with a port on a component. The following code shows how the two errors can be fixed

```
SIGNAL High ;
:
High <= '1';
control: shiftr GENERIC MAP ( K => 3 )
        PORT MAP ( High, Clock, w, Q );
```

Label, Signal, and Variable Names

It is illegal to use any VHDL keyword as a label, signal, or variable name. For example, it is illegal to name a signal *In* or *Out*. Also, it is illegal to use the same name multiple times for any label, signal, or variable in a given VHDL design. A common error is to use the same name for a signal and a variable used as the index in a generate or loop statement. For instance, if the code uses the generate statement

```
Generate_label:
FOR i IN 0 TO 3 GENERATE
    bit: fulladd PORT MAP ( C(i), X(i), Y(i), S(i), C(i+1) );
END GENERATE ;
```

then it is illegal to define a signal named *i* (or *I*, because VHDL does not distinguish between lower and uppercase letters).

Implied Memory

As shown in section A.10, implied memory is used to describe storage elements. Care must be taken to avoid unintentional implied memory. The code

```
IF LA = '1' THEN
    EA <= '1';
END IF ;
```

results in implied memory for the *EA* signal. If this is not desired, then the code can be fixed by writing

```
IF LA = '1' THEN
    EA <= '1';
ELSE
    EA <= '0';
END IF;
```

Implied memory also applies to CASE statements. The statement

```
CASE y IS
    WHEN S1 =>
        EA <= '1';
    WHEN S2 =>
        EB <= '1';
END CASE;
```

does not specify the value of the *EA* signal when *y* is not equal to *S1*, and it does not specify the value of *EB* when *y* is not equal to *S2*. To avoid having implied memory for both *EA* and *EB*, these signals should be assigned default values, as in the code

```
EA <= '0'; EB <= '0';
CASE y IS
    WHEN S1 =>
        EA <= '1';
    WHEN S2 =>
        EB <= '1';
END CASE;
```

In general, the designer should attempt to write VHDL code that contains as few errors as possible because finding the source of an error can often be difficult.

A.12 CONCLUDING REMARKS

This appendix describes all the important VHDL constructs that are useful for the synthesis of logic circuits. As mentioned earlier, we do not discuss any features of VHDL that are useful only for simulation of circuits, or for other purposes. A reader who wishes to learn more about using VHDL can refer to specialized books [1–7].

REFERENCES

1. Institute of Electrical and Electronics Engineers, "1076-1993 IEEE Standard VHDL Language Reference Manual," 1993.
2. D. L. Perry, *VHDL*, 3rd ed. (McGraw-Hill: New York, 1998).
3. Z. Navabi, *VHDL—Analysis and Modeling of Digital Systems*, 2nd ed. (McGraw-Hill: New York, 1998).
4. J. Bhasker, *A VHDL Primer*, 3rd ed. (Prentice-Hall: Englewood Cliffs, NJ, 1998).
5. K. Skahill, *VHDL for Programmable Logic* (Addison-Wesley: Menlo Park, CA, 1996).
6. A. Dewey, *Analysis and Design of Digital Systems with VHDL* (PWS Publishing Co.: Boston, MA, 1997).
7. S. Yalamanchili, *VHDL Starter's Guide* (Prentice-Hall: Upper Saddle River, NJ, 1998).

***Appendix B, C and D
comes here !!***

COMMERCIAL DEVICES

In Chapter 3 we described the three main types of programmable logic devices (PLDs): simple PLDs, complex PLDs, and field-programmable gate arrays (FPGAs). This appendix describes some examples of commercial PLD products.

E.1 SIMPLE PLDs

Simple PLDs (SPLDs) include PLAs, PALs, and other similar types of devices. The major manufacturers of SPLD products are listed in Table E.1. The first and second columns show the company name and some of the SPLD products it offers. Data sheets that describe each product can be obtained from the World Wide Web (WWW), using the locator given in the third column in the table.

Table E.1 Commercial SPLD products.

Manufacturer	SPLD Products	WWW Locator
Altera	Classic	http://www.altera.com
Atmel	PAL	http://www.atmel.com
Cypress	PAL	http://www.cypress.com
Lattice	ispGAL	http://www.latticesemi.com

E.1.1 THE 22V10 PAL DEVICE

PAL devices are among the most commonly used SPLDs. They are offered in a range of sizes and are identified by a part number of the form $NNXMM-S$. The digits NN specify the total number of input and output pins; the digits MM give the number of pins that can be used as outputs. The letter X gives additional information, such as whether the PAL

contains flip-flops. The final digit, *S*, specifies the *speed grade*. This value represents the propagation delay from an input pin on the PAL to an output pin, assuming that the flip-flop, if present, is bypassed.

An example of a commonly used PAL is the 22V10 [1], which is depicted in Figure E.1. There are 11 input pins that feed the AND plane, and an additional input that can also

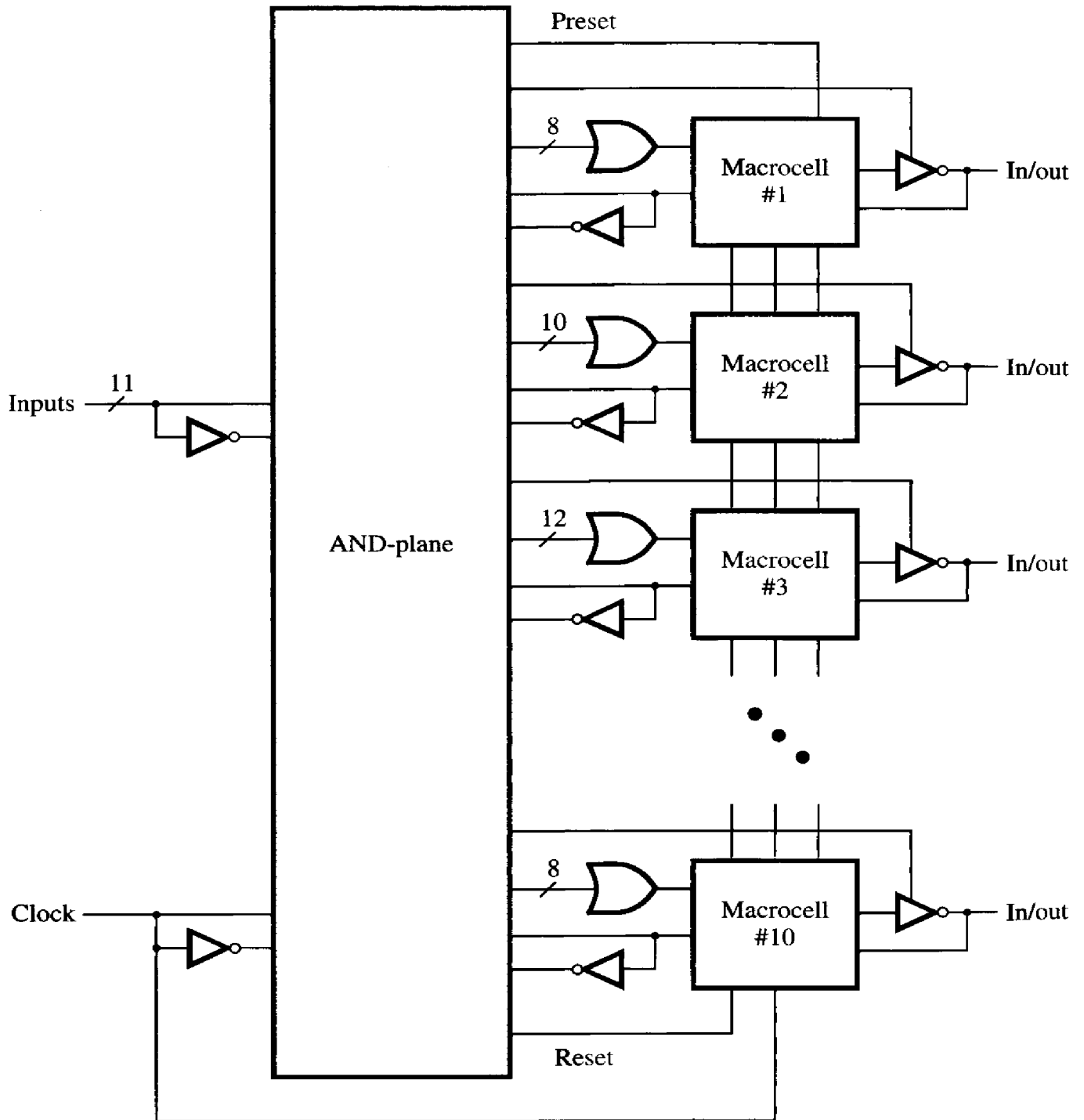


Figure E.1 The 22V10 PAL device.

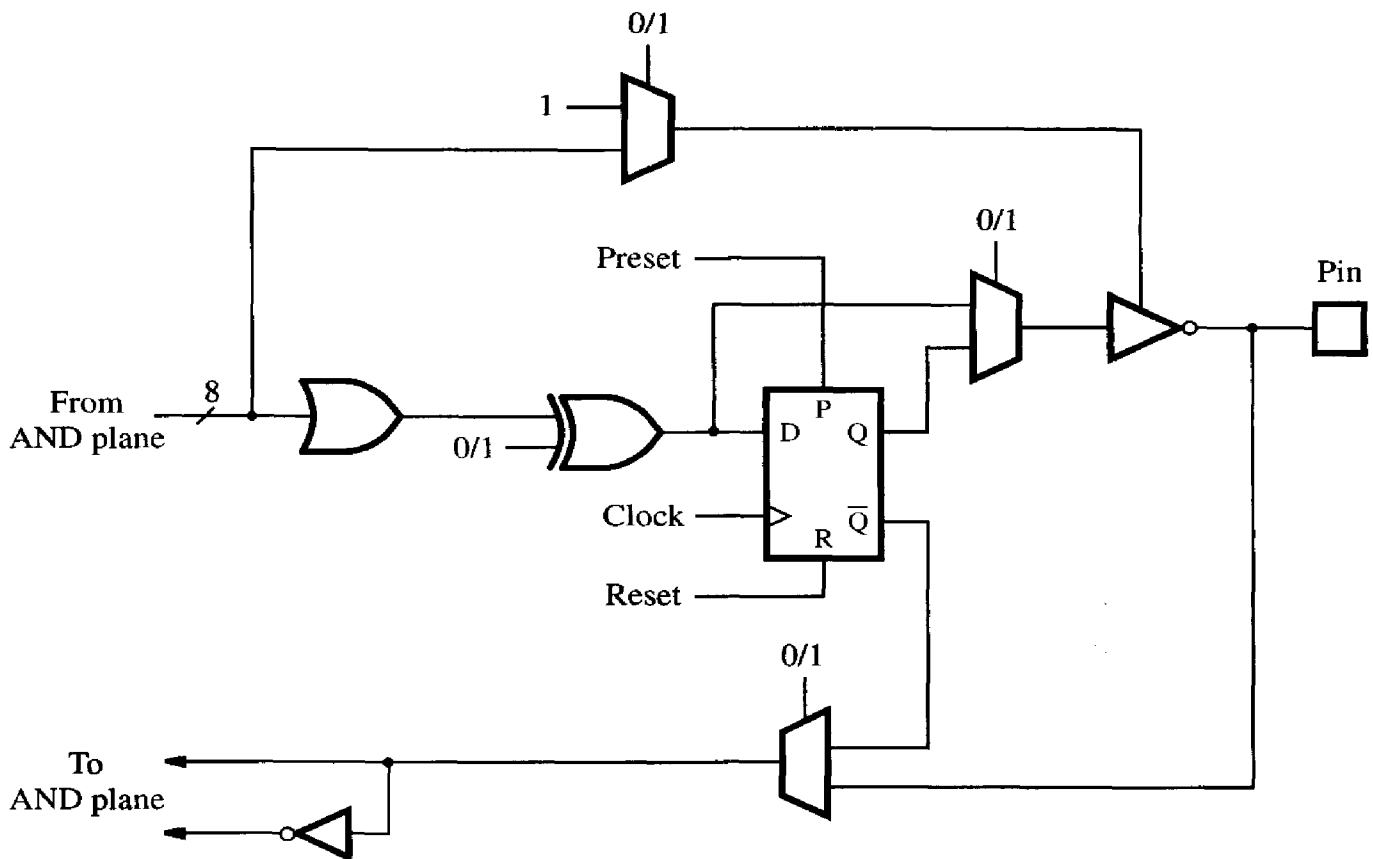


Figure E.2 The 22V10 macrocell.

serve as a clock input. The OR gates are of variable size, ranging from 8 to 16 inputs. Each output pin has a tri-state buffer, which allows the pin to optionally be used as an input pin.

We said in section 3.6.2 that the circuitry between an OR gate and an output in a PAL is usually called a macrocell. Figure E.2 shows one of the macrocells in the 22V10 PAL. It connects the OR gate shown to one input on an XOR gate, which feeds a D flip-flop. Since the other input to the XOR gate can be programmed to be 0 or 1, it can be used to complement the OR-gate output. A 2-to-1 multiplexer allows bypassing of the flip-flop, and the tri-state buffer can be either permanently enabled or connected to a product term from the AND plane. Either the \bar{Q} output from the flip-flop or the output of the tri-state buffer can be connected to the AND plane. If the tri-state buffer is disabled, the corresponding pin can be used as an input.

E.2 COMPLEX PLDs

The names of several manufacturers of Complex PLDs (CPLDs), products they offer, and the corresponding WWW locators are listed in Table E.2. An example of a widely used CPLD family, the Altera MAX 7000 [2], is described in the next section.

Table E.2 Commercial CPLD products.

Manufacturer	CPLD Products	WWW Locator
Altera	MAX 3000, 7000, and 9000, and MAX II	http://www.altera.com
Atmel	ATF	http://www.atmel.com
Cypress	Delta39K, FLASH370, Ultra37000	http://www.cypress.com
Lattice	ispLSI, ispMACH	http://www.latticesemi.com
Xilinx	XC9500, CoolRunner	http://www.xilinx.com

E.2.1 ALTERA MAX 7000

The MAX 7000 CPLD family includes chips that range in size from the 7032, which has 32 macrocells, to the 7512, which has 512 macrocells. There are two main variants of these chips, identified by the suffix *S*. If this letter is present in the chip name, as in 7128S, then the chip is in-system programmable. But if the suffix is absent, as in 7128, then the chip has to be programmed in a programming unit.

The overall structure of a MAX 7000 chip is illustrated in Figure E.3. There are four dedicated input pins; two of these can be used as global clock inputs, and one can be used as a global reset for all flip-flops. Each shaded box in the figure is called a *logic array*

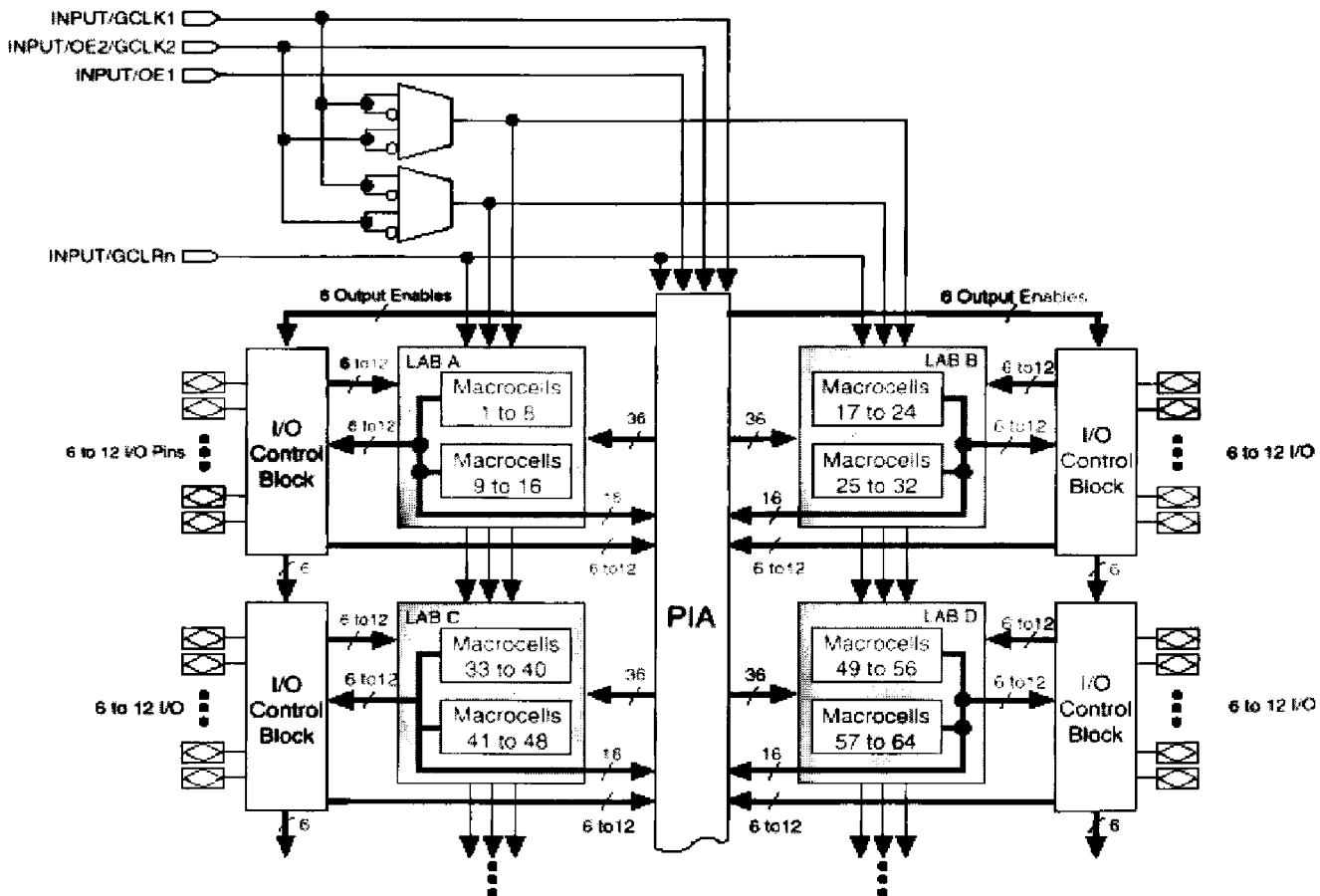


Figure E.3 MAX 7000 CPLD (courtesy of Altera).

block (LAB), which contains 16 macrocells. Each LAB is connected to an *I/O control block*, which contains tri-state buffers that are connected to pins on the chip package; each of these pins can be used as an input or output pin. Each LAB is also connected to the *programmable interconnect array (PIA)*. The PIA consists of a set of wires that span the entire device. All connections between macrocells are made using the PIA.

Figure E.4 shows the structure of a MAX 7000 macrocell. There are five product terms that can be connected through the *product term select matrix* to an OR gate. This OR gate can be configured to use only the product terms needed for the logic function being implemented in the macrocell. If more than five product terms are required, additional product terms can be “shared” from other macrocells, as described below. The OR gate is connected through an XOR gate to a flip-flop, which can be bypassed.

Figure E.5 shows how product terms can be shared between macrocells. The OR gate in a macrocell includes an extra input that can be connected to the output of the OR gate in the macrocell above it. This feature is called *parallel expanders* and is used for logic functions with up to 20 product terms. If even more product terms are needed, then a feature called *shared expanders* is used. As shown in the lower shaded box in Figure E.4, one of the product terms in a macrocell is inverted and fed back to the product term array. If the inputs to this product terms are used in their complemented form, then using DeMorgan’s theorem, a sum term is produced. A shared expander can be used by any macrocell in the same LAB.

Each specific MAX 7000 device is available in a range of speed grades. These grades specify the propagation delay from an input pin through the PIA and a macrocell to an output pin. For example, the chip named 7128S-7 has a propagation delay of 7.5 ns. If the logic function implemented uses parallel or shared expanders, the propagation delay is increased.

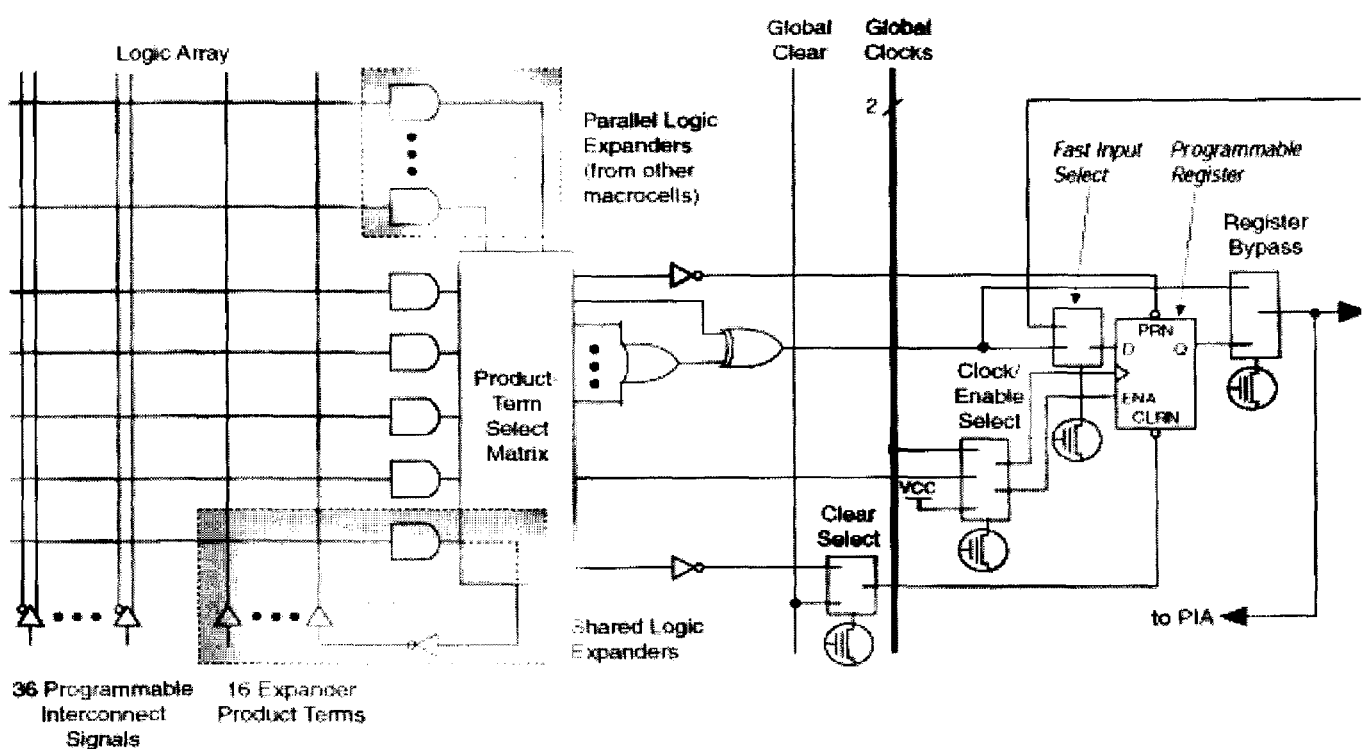


Figure E.4 MAX 7000 macrocell (courtesy of Altera).

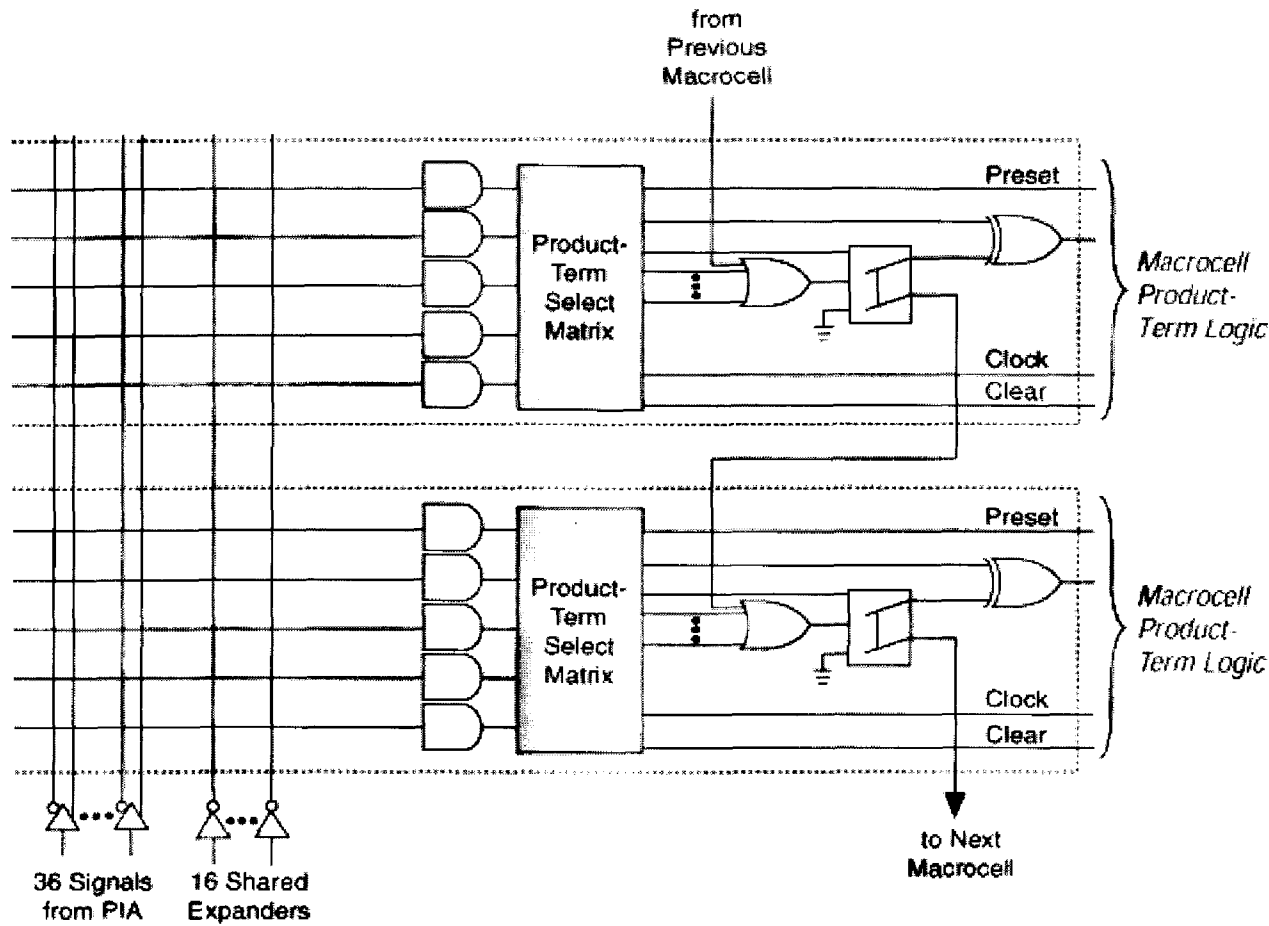


Figure E.5 Parallel Expanders (courtesy of Altera).

E.3 FIELD-PROGRAMMABLE GATE ARRAYS

Table E.3 lists the names of FPGA manufacturers, their products, and their WWW locators. This section describes examples of FPGAs produced by Altera and Xilinx.

E.3.1 ALTERA FLEX 10K

Figure E.6 shows the structure of the FLEX 10K chip [3]. It contains a collection of logic array blocks (LABs), where each LAB comprises eight *logic elements* based on lookup tables (LUTs). In addition to LABs, the chip also contains embedded array blocks (EABs), which are SRAM blocks that can be configured to provide memory blocks of various aspect ratios (see section 10.1.3). The LABs and EABs can be interconnected using the row and column *interconnect wires*. These wires also provide connections to the input and output pins on the chip package.

Figure E.7 shows the contents of a LAB. It has a number of inputs that are provided from the adjacent row interconnect wires to a set of local interconnect wires inside the LAB. These local wires are used to make connections to the inputs of the logic elements, and the logic element outputs also feed back to the local wires. Logic element outputs also connect to the adjacent row and column wires. The structure of a logic element is depicted in Figure E.8. The element has a four-input LUT and a flip-flop that can be bypassed.

Table E.3 Commercial FPGA products.

Manufacturer	FPGA Products	WWW Locator
Actel	Act 1, 2 and 3, MX, SX	http://www.actel.com
Altera	FLEX 6000, 8000 and 10K, Mercury, APEX 20K (II), Excalibur, Stratix (II)	http://www.altera.com
Atmel	AT6000, AT40K	http://www.atmel.com
Lattice	ispXPGA, ORCA	http://www.latticesemi.com
QuickLogic	pASIC, Eclipse, Eclipse II	http://www.quicklogic.com
Xilinx	XC3000, XC4000, Spartan (3), Virtex, Virtex II (Pro)	http://www.xilinx.com

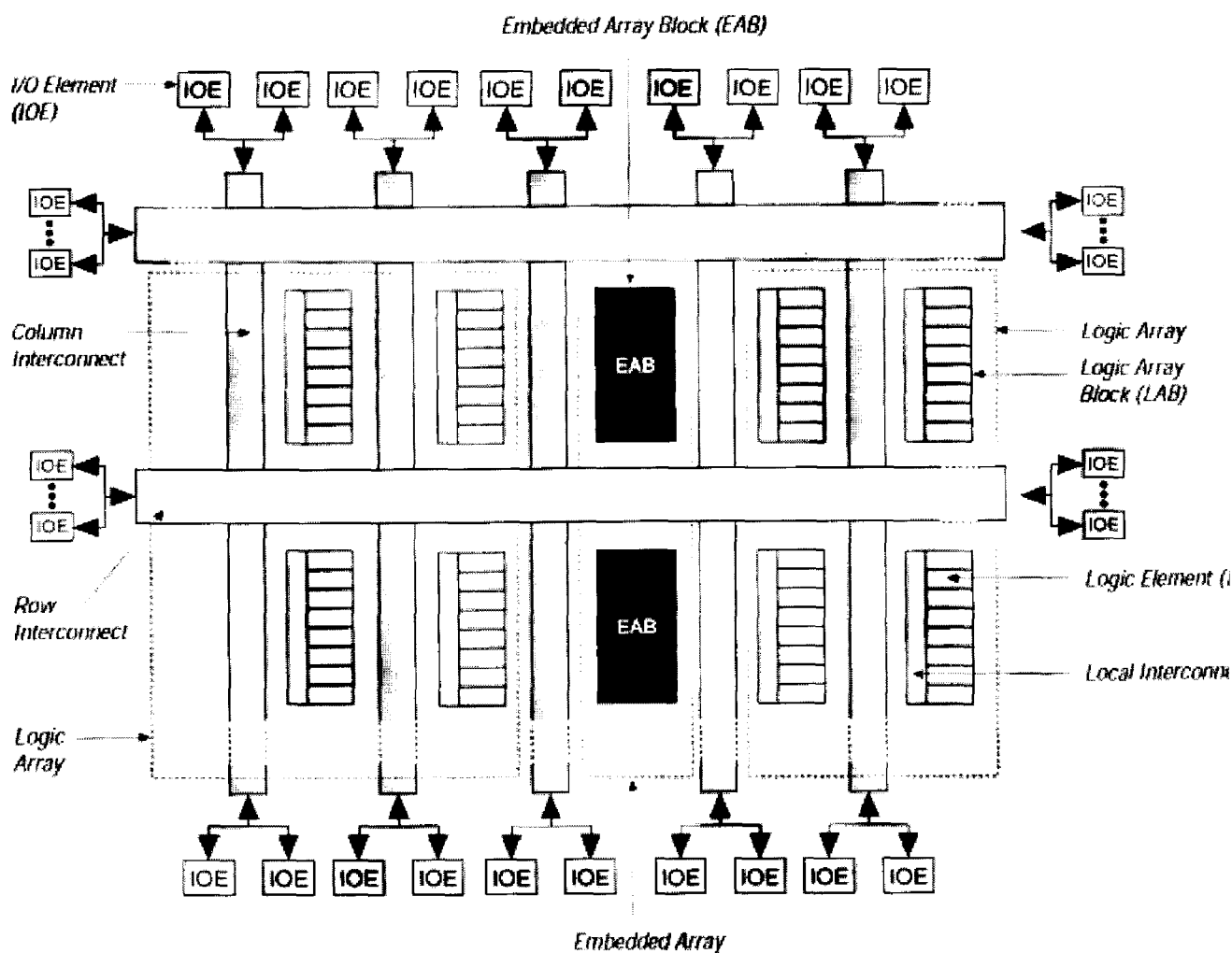


Figure E.6 FLEX 10K FPGA (courtesy of Altera).

For implementation of arithmetic adders, the four-input LUT can be used to implement 2 three-input functions, namely, the sum and carry functions in a full-adder.

The structure of an EAB is depicted in Figure E.9. It contains 2048 SRAM cells, which can be used to provide memory blocks that have a range of aspect ratios: 256×8 , 512×4 , 1024×2 , and 2048×1 bits. The address and data inputs to the memory block are

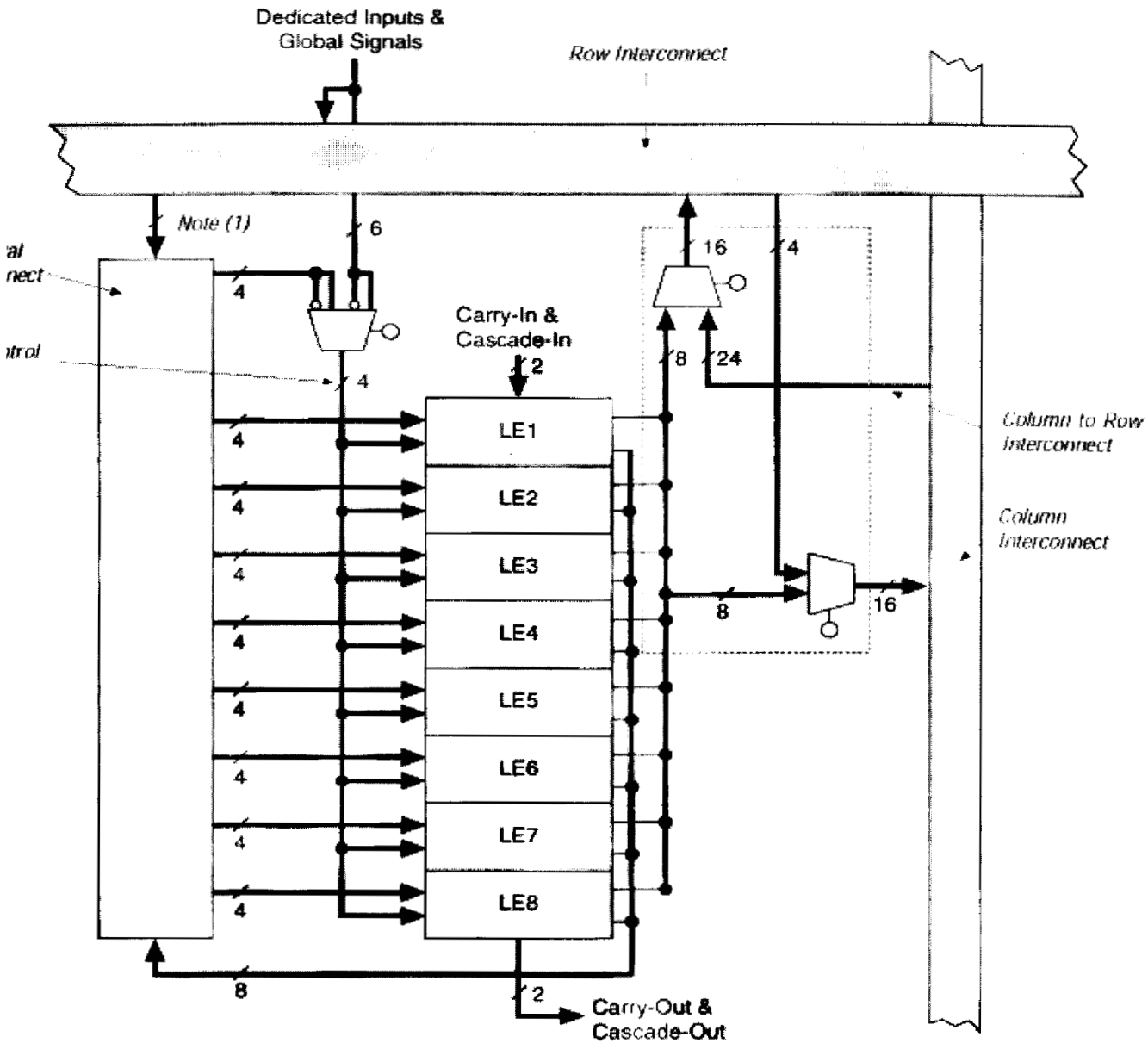


Figure E.7 FLEX 10K logic array block (courtesy of Altera).

provided from a set of local interconnect wires. These inputs, as well as a write enable for the memory block, can optionally be stored in flip-flops. Figure E.9 shows that the number of address and data inputs connected to the memory block varies depending on the aspect ratio being used. The data outputs can also optionally be stored in flip-flops. For large memory blocks it is possible to combine multiple EABs.

Configuration of EABs is done using predesigned modules, such as those in the LPM library. For example, the module named *lpm_ram_dq* can be used to specify an SRAM block, and *lpm_rom* can be used for a ROM block. These modules can be imported into a schematic or instantiated in code using a language such as VHDL. It is possible to specify initial data to be loaded into the memory block when the FPGA chip is programmed. This is done by creating a special type of file, called a *memory initialization file*, that is associated with the *lpm_ram_dq* or *lpm_rom* module. Complete details on using these modules can be found in the MAX+plusII documentation.

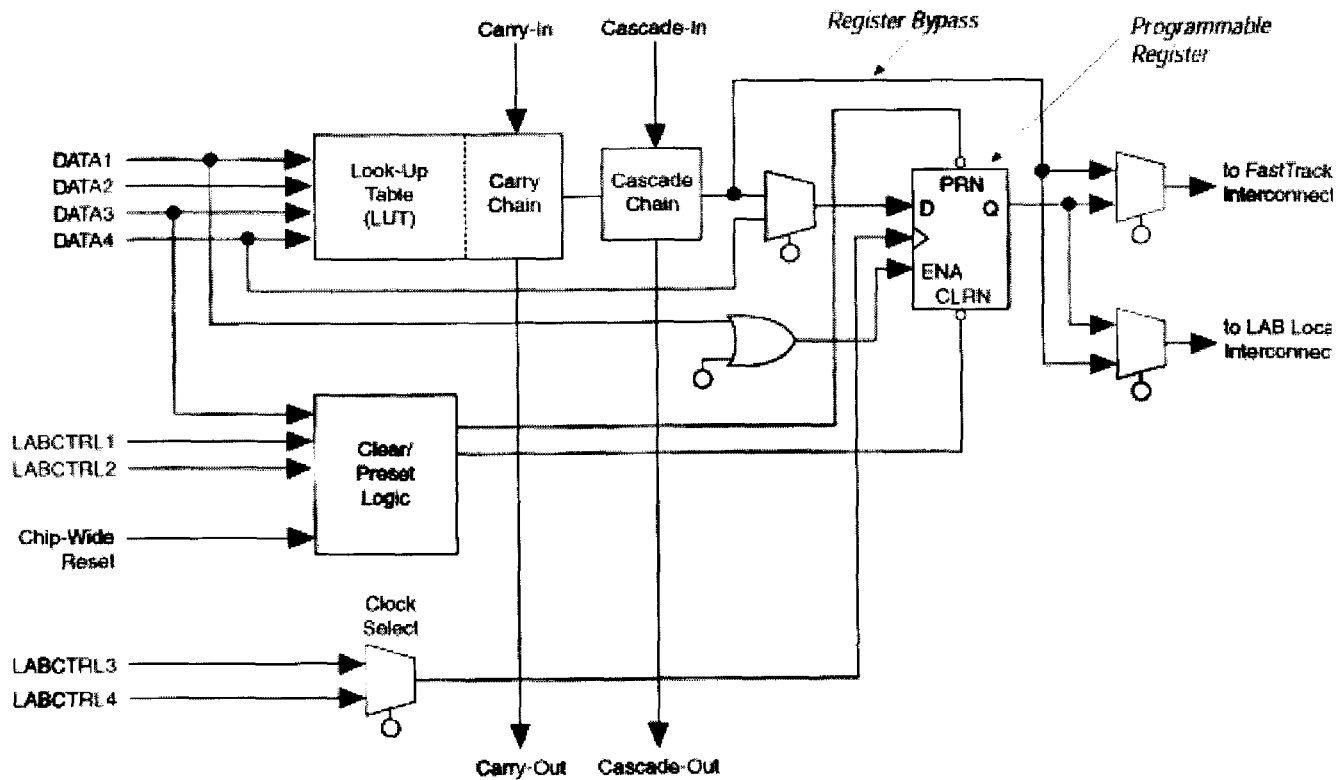


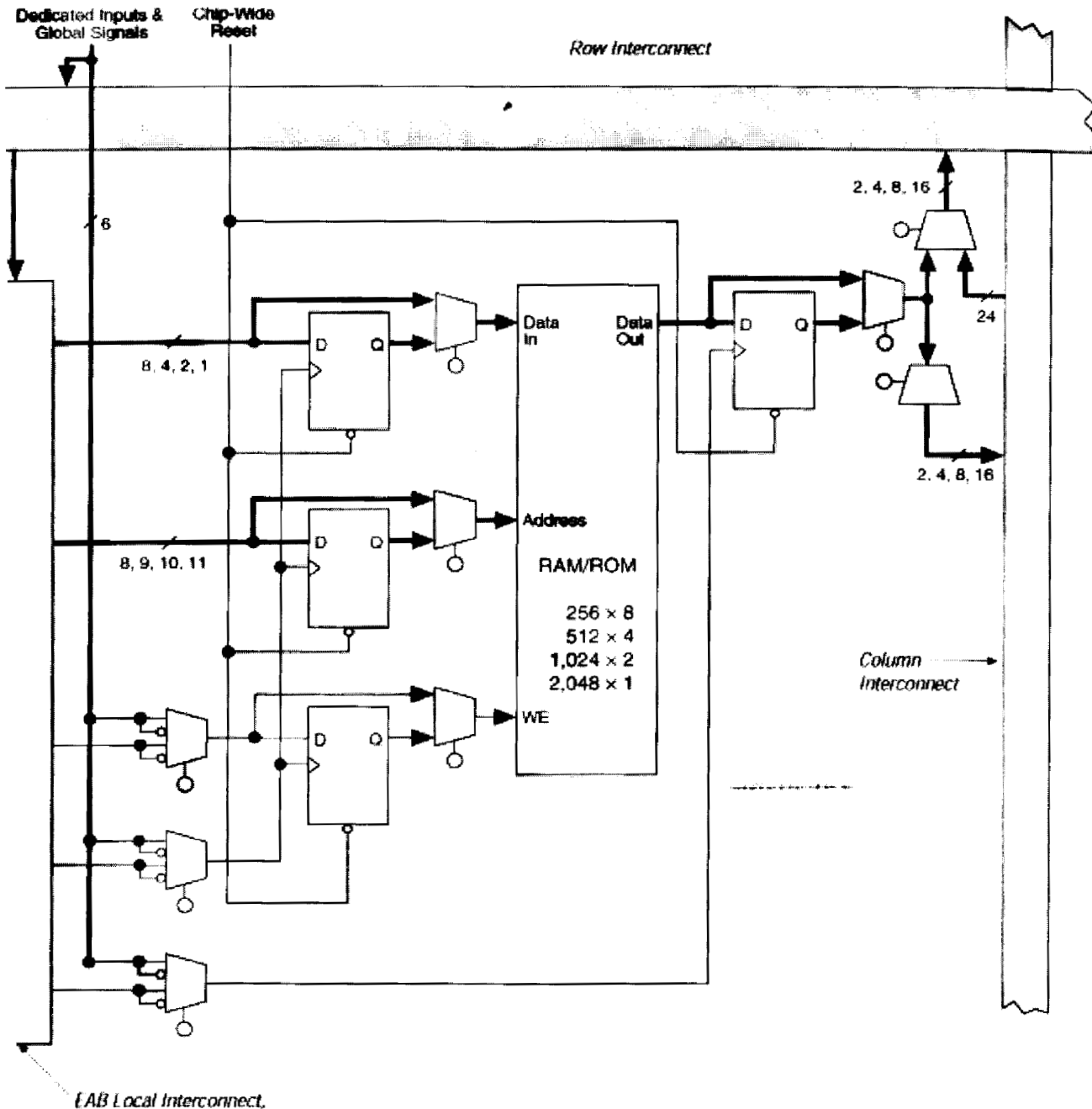
Figure E.8 FLEX 10K logic element (courtesy of Altera).

FLEX 10K chips are available in sizes ranging from the 10K10 to 10K250, which offer about 10,000 and 250,000 equivalent logic gates, respectively. Specific chips are available in various speeds, indicated using a suffix letter, such as *A*, as in 10K10A, and a speed grade, as in 10K10A-1. Unlike PALs and CPLDs, the speed grade for an FPGA does not specify an actual propagation delay in nanoseconds. Instead, it represents a relative speed within the device family. For instance, the 10K10-1 is a faster chip than the 10K10-2. The actual propagation delays in implemented circuits can be examined using a timing simulator CAD tool.

E.3.2 XILINX XC4000

The structure of a Xilinx XC4000 chip [4] is similar to the FPGA structure shown in Figure 3.35. It has a two-dimensional array of *configurable logic blocks (CLBs)* that can be interconnected using the vertical and horizontal routing channels. Chips range in size from the XC4002 to XC40250, which have about 2000 and 250,000 equivalent logic gates, respectively. As shown in Figure E.10, a CLB contains 2 four-input LUTs; hence it can implement any two logic functions of up to four variables. The output of each of these LUTs can optionally be stored in a flip-flop. The CLB also contains a three-input LUT connected to the 2 four-input LUTs, which allows implementation of functions with five or more variables.

Similar to the logic elements in the FLEX 10K FPGAs described in section E.3.1, the CLB can be configured for efficient implementation of adder modules. In this mode each



e E.9 Embedded array block (courtesy of Altera).

four-input LUT in the CLB implements both the sum and carry functions of a full-adder. Also, instead of implementing logic functions, the CLB can be used as a memory module. Each four-input LUT can serve as a 16×1 memory block, or both four-LUTs can be combined into a 32×1 memory block. Multiple CLBs can be combined to form larger memory blocks.

The CLBs are interconnected using the wires in the routing channels. Wires of various lengths are provided, from wires that span a single CLB to wires that span the entire device. The number of wires in a routing channel varies for each specific chip.

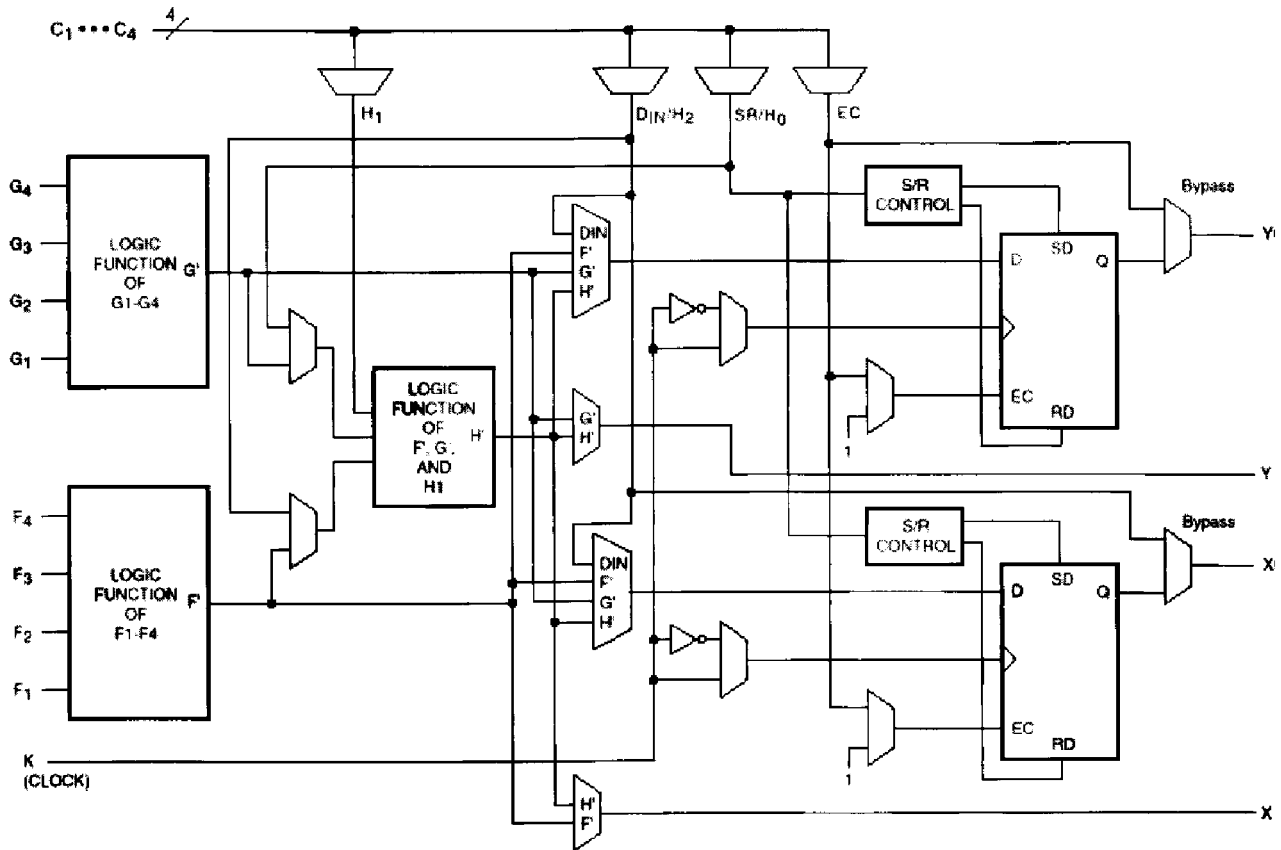


Figure E.10 XC4000 configurable logic block (courtesy of Xilinx).

E.3.3 ALTERA APEX 20K

The Altera APEX 20K [5] family is the next generation product following the FLEX 10K. The logic element (LE), which is an optimized version of the one depicted in Figure E.8, contains a four-input LUT and a flip-flop. Chips range in sizes from 1200 to 51,840 LEs.

Each APEX device contains logic elements (LUTs), memory blocks, and IO cells. The LEs are arranged into LABs similar to the structure depicted in Figure E.7, with ten LEs per LAB. The LABs are further grouped into MegaLABs, with up to 24 LABs in a MegaLAB. As shown in Figure E.11, the MegaLAB contains wires to interconnect the LABs, and it also contains a memory block, called the embedded system block (ESB). Similar to the EAB shown in Figure E.9, the ESB supports memory blocks with various aspect ratios. An APEX device comprises either two or four columns of MegaLABs; the number of MegaLABs per column varies for each device.

E.3.4 ALTERA STRATIX

Stratix [6] is Altera's FPGA product that supersedes the APEX family. Figure E.12 shows the architecture of a Stratix device. Each chip comprises columns of resources of various types. The LAB columns house logic elements arranged into LABs that have ten LEs per LAB. Each LE contains a four-input LUT and a register, and can be configured in a variety

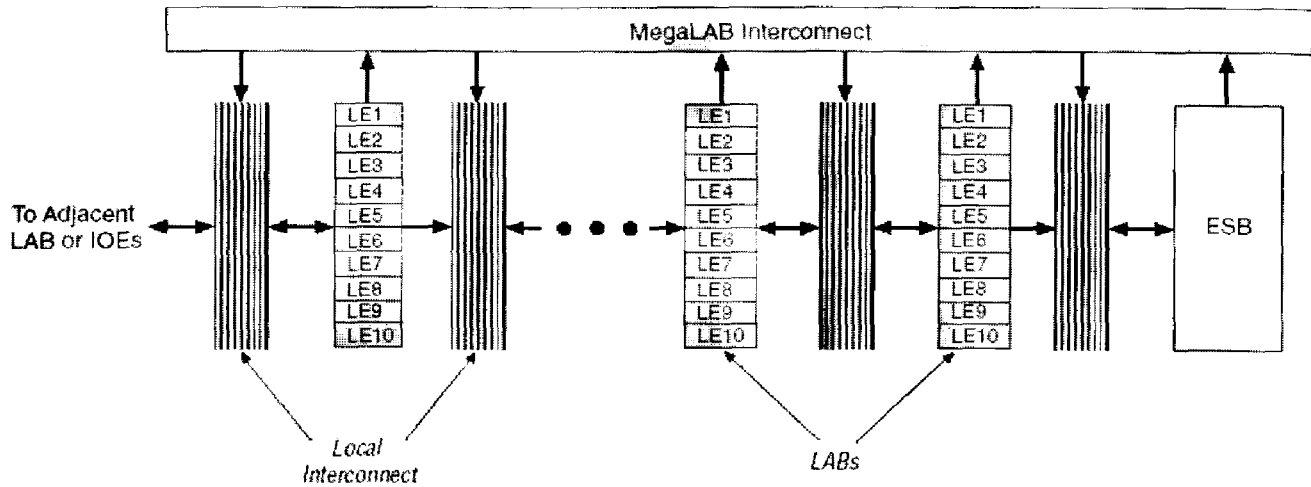


Figure E.11 APEX 20K MegaLAB (courtesy of Altera).

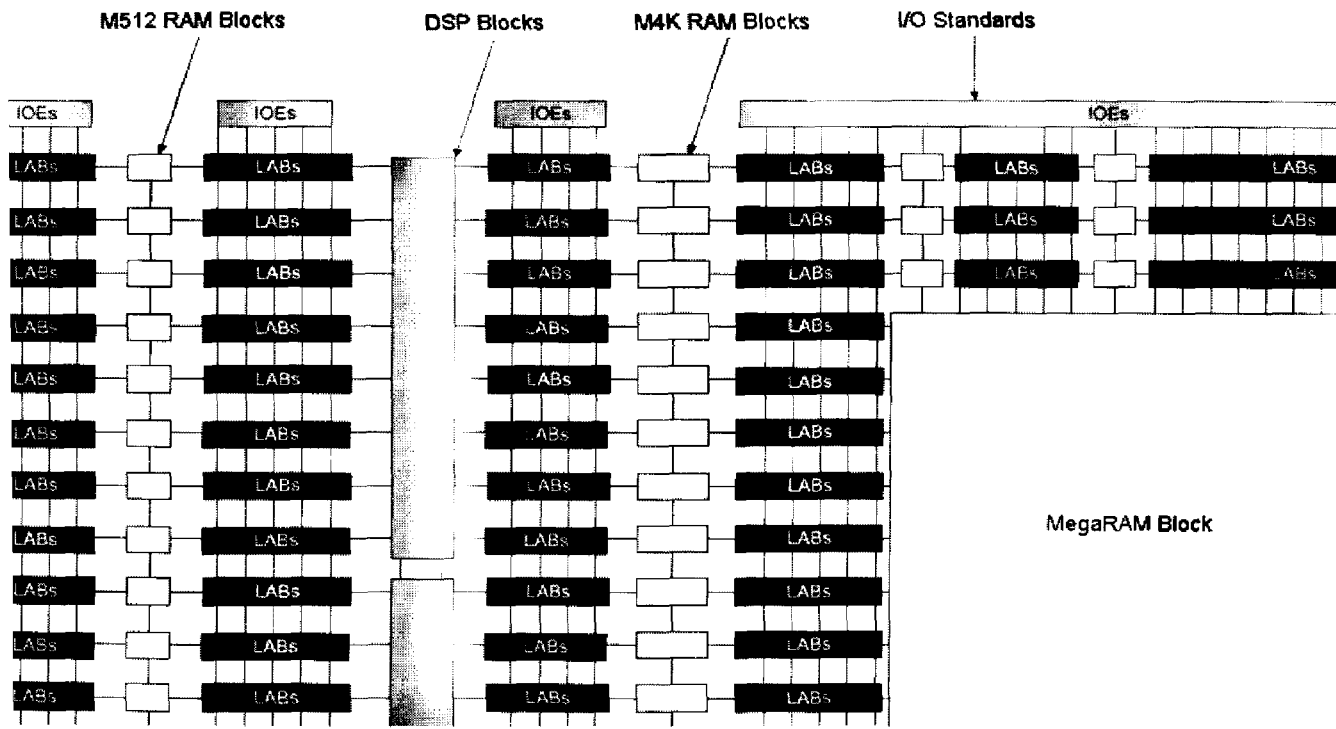


Figure E.12 Stratix LAB, DSP, and memory blocks (courtesy of Altera).

of modes, including a fast arithmetic mode. There are a number of types of wiring resources in a Stratix chip. Connections within a LAB are made using fast local resources, such as a carry chain that runs downward in each column. For connections from one LAB to other resources there exist short nearest-neighbor connections, wires that span four columns or rows, and longer wires.

In addition to LAB columns, Stratix devices contain three other types of columns. The M512 columns consist of memory blocks with 512 bits each, and the M4K columns contain larger memory blocks with 4K bits per block. Each of the M512 and M4K blocks support implementations of memories with various aspect ratios. Stratix devices also include very large memory blocks called MegaRAMs, each of which contains 512K bits of memory.

Finally, there are columns that comprise Digital Signal Processing (DSP) blocks. Each of these blocks includes hardware multiplier and adder circuits that allow fast multiplication and accumulation (summing) of data. These blocks provide efficient implementation of the types of circuits used in digital signal processing applications.

Stratix chips are available in sizes from 10,570 to 79,040 logic elements and over seven Mbits of memory.

E.3.5 ALTERA CYCLONE

Cyclone [7] FPGAs are based on the Stratix architecture, but are intended for low-cost applications. A Cyclone chip has the same basic structure as that shown in Figure 12, except that the DSP columns are removed, and only M4K memory blocks are included. The Cyclone logic element is a four-input LUT with dedicated arithmetic circuitry and a programmable flip-flop. Cyclone devices range in size from 2910 to 20,060 logic elements and 288 Kbits of memory.

E.3.6 ALTERA STRATIX II

Stratix II [8] FPGAs are the successor to the Stratix family. They offer device sizes from 15,600 to 179,400 logic elements and up to nine Mbits of memory. Stratix II contains a more complex logic element than other FPGAs, called the Adaptive Logic Module (ALM). As shown in Figure E.13, the ALM comprises a combinational logic circuit and two programmable flip-flops. The combinational logic circuit can be programmed as either one or two LUTs; it can implement a single logic function of up to seven inputs, or two functions

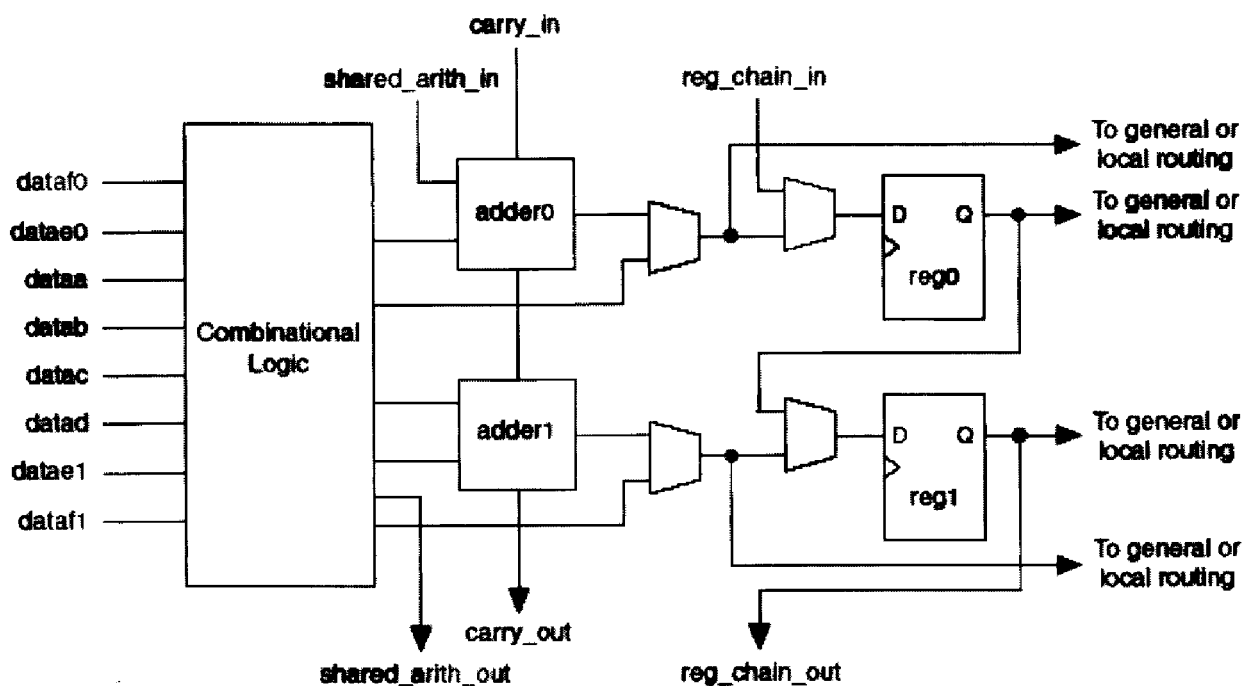


Figure E.13 The Stratix II Adaptive Logic Module.

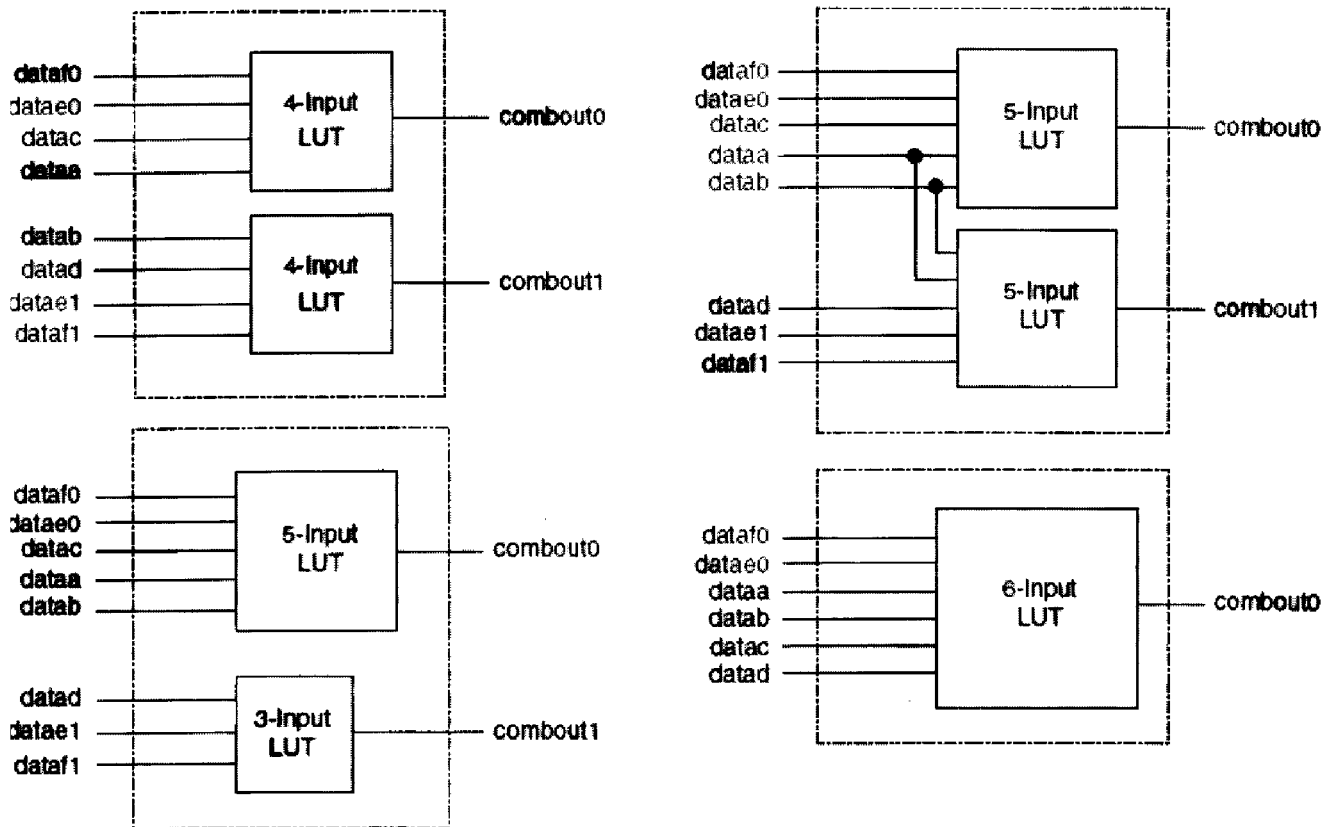


Figure E.14 Some of the modes of the Stratix II ALM.

of various sizes. Figure E.14 shows a few of the possible configurations of the ALM, such as realizing two four-input LUTs, a four-input LUT plus a five-input LUT, and so on.

E.3.7 XILINX VIRTEX

The Xilinx Virtex [9] FPGAs are the next generation family following the XC4000. As indicated in Figure E.15, each Virtex chip comprises logic resources called CLBs, and memory resources called Block RAMs (BRAMs). The CLB is an enhanced version of the XC4000 CLB shown in Figure E.10. As indicated in Figure E.16, the Virtex CLB is divided into two halves; each half is called a *slice*. Each slice contains two four-input LUTs, two registers, and dedicated arithmetic (carry chain) logic.

The BRAM blocks contain 4K bits of memory, and can be configured to support aspect ratios from 4096×1 to 256×16 . The CLB and BRAM blocks can be interconnected by wires that span a single CLB, or longer distances. Virtex devices are available in sizes from 256 to 46,592 CLB slices.

E.3.8 XILINX VIRTEX-II AND VIRTEX-II PRO

The Xilinx Virtex-II [10] and Virtex-II Pro [11] FPGAs are the successors to the Virtex family. They are offered in sizes from 3168 to 99,216 logic elements and with more than eight Mbits of memory. The logic elements are arranged into slices similar to the Virtex

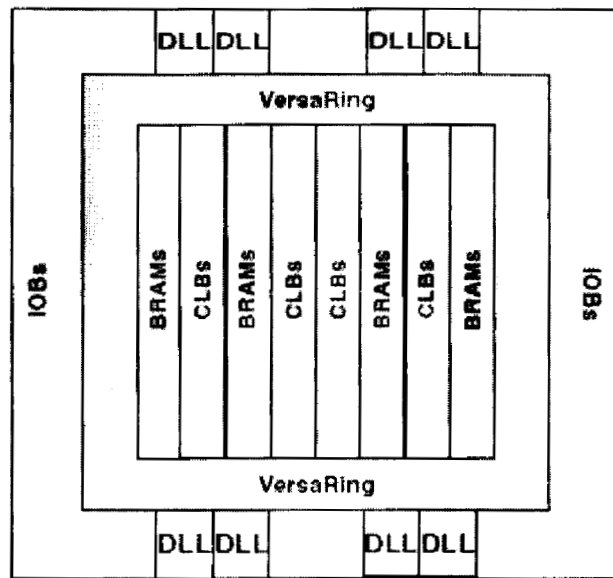


Figure E.15 Virtex FPGA (courtesy of Xilinx).

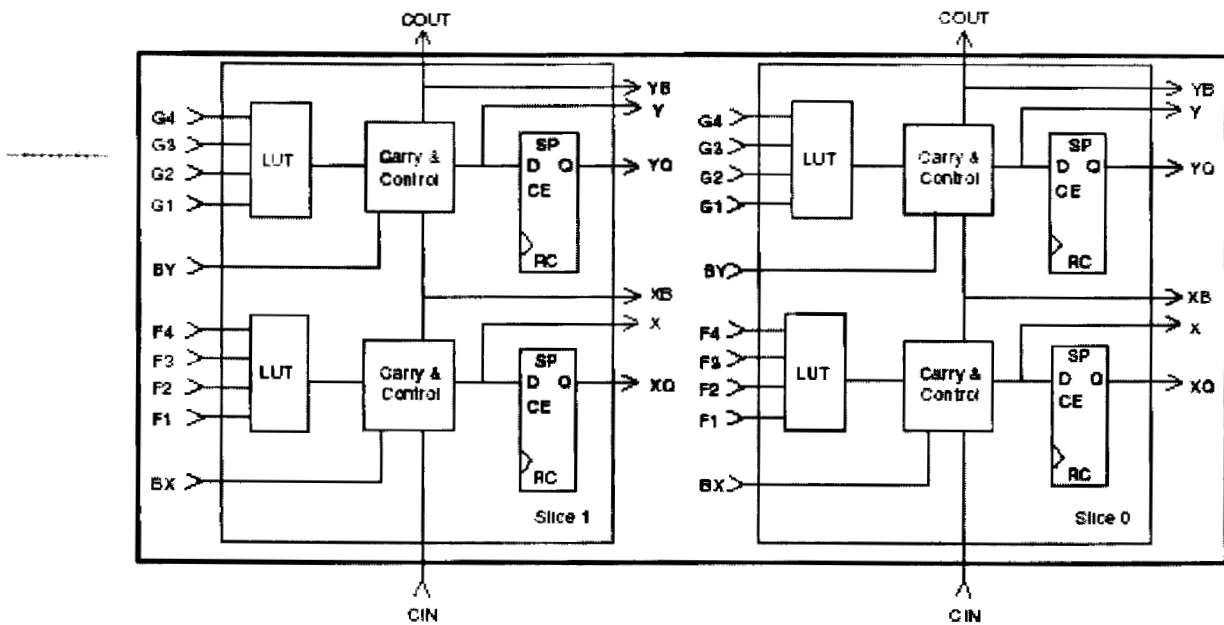


Figure E.16 Virtex logic block (courtesy of Xilinx).

FPGAs (see Figure E.16), with four slices in a CLB. The Virtex-II Pro chips include one or more microprocessor cores within the chip, and have additional advanced features that are not present in Virtex-II.

E.3.9 XILINX SPARTAN-3

The Xilinx Spartan-3 [12] FPGAs are a low-cost version of the Virtex-II architecture. Similar to Virtex-II, the logic elements are arranged into CLBs that each have four slices,

but not all slices have the same feature-set as in Virtex-II. Spartan-3 chips are available in sizes from 1728 to 74,880 logic elements and more than 1.8 Mbits of memory.

E.4 TRANSISTOR-TRANSISTOR LOGIC

Before the emergence of CMOS, the dominant technology was *transistor-transistor logic*, commonly referred to as *TTL*. Most digital systems built in the 1970s and 1980s were based on this technology. TTL circuits are available in relatively small sizes, known as small-scale integration (SSI) and medium-scale integration (MSI), as explained in section 3.5. A typical SSI chip contains just a few logic gates, with their inputs and outputs available on the pins of the package. An MSI chip may comprise a somewhat larger circuit, such as a four-bit arithmetic and logic unit (ALU).

TTL technology is not as suitable for large-scale integration as CMOS technology, which has led to TTL's demise. However, its impact was so large that some aspects are still important today. In this section we consider these aspects.

Voltage Levels

TTL circuits use a 5-volt power supply. Any voltage in the range 0 to 0.8 V is interpreted as a logic 0 when applied to an input pin. A voltage in the range 2 to 5 volts is interpreted as a logic 1. Using the terminology from section 3.8, $V_{IL} = 0.8$ V and $V_{IH} = 2$ V. The maximum output voltage produced for logic 0 is $V_{OL} = 0.4$ V, and the minimum voltage produced for logic 1 is $V_{OH} = 2.4$ V. These parameters lead to the noise margins $NM_L = NM_H = 0.4$ V. Typical output voltages generated by a TTL circuit are 0.2 V for logic 0 and 3.6 V for logic 1.

When a new digital circuit is designed, it is often intended for use in an existing digital system. If different technologies are used to implement different parts of a system, it is essential to ensure that compatible voltage levels are used for signals in the interfaces between the different parts. While CMOS voltage levels are normally different from TTL levels, some CMOS chips, such as PLDs, can be configured to use TTL-compatible voltage levels on their input and output pins.

Input Connections

In CMOS circuits all inputs to a gate must always be driven to either logic value 0 or 1. Otherwise, the gate's output will have an unknown (usually tri-state) value. In the case of TTL circuits, an unconnected input behaves as if it were connected to a constant 1.

E.4.1 TTL CIRCUIT FAMILIES

TTL circuits are available in several designs that have different propagation speeds and power consumption. They have the same functional characteristics, defined by the specifications for the type of circuits known as the 7400 series, which is introduced in section 3.5. Actually, the 7400 label denotes a chip that comprises 4 two-input NAND gates. Other chips that contain different logic elements have the same prefix 74, but are identified by

additional digits. For example, 7421 denotes a chip that comprises 2 four-input AND gates. Table E.4 presents the propagation delay and power dissipation characteristics of the various TTL families.

Table E.4 TTL logic families.

Name	Designation	Propagation Delay (ns)	Power Dissipation (mW)
Standard	7400	9	10
Low power	74L00	33	1
High speed	74H00	6	22
Schottky	74S00	3	20
Low-power Schottky	74LS00	9	2
Advanced Schottky	74AS00	1.5	20
Advanced low-power Schottky	74ALS00	4	1
Fast	74F00	3	4

Standard TTL is based on the original specifications, and it was the first type of such circuits introduced in the 1960s. Subsequent versions provided various improvements. Faster circuits were developed, trading off increased power consumption for shorter propagation delays. Conversely, low-power circuits were developed, at the cost of longer propagation delays. Table E.4 gives the typical values that can be expected under normal operating conditions.

The maximum fan-out in TTL circuits is 10 in most cases, but it can be as high as 20 for the low-power types. The fan-in is determined by the number of inputs provided on a given chip.

TTL gates can have different output configurations. In addition to the normal output configuration, there exist gates that have tri-state outputs or open-collector outputs. The purpose of a tri-state output is discussed in section 3.8.8. Gates with open-collector outputs are used when it is desirable to connect the outputs of two or more gates together directly. These gates are not damaged by such a connection, because each gate either drives the output to 0 or does not affect it at all. Connecting the outputs of several open-collector gates through a pull-up resistor to +5 V results in a circuit where the voltage at the output point is equal to +5 V if none of the gates produces an output of 0 and is equal to 0 if one or more gates produce the output of 0. A similar approach can be used with CMOS technology, resulting in open-drain gates.

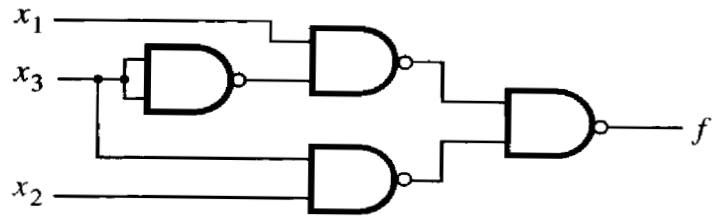
We have not pursued TTL technology in any detail because of its diminished importance in today's design environment. An interested reader may consult numerous books that provide a detailed explanation. A particularly thorough reference is [13].

REFERENCES

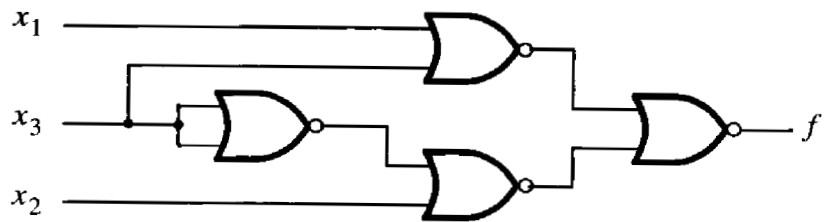
1. Lattice Semiconductor, Simple PLDs Data Sheets, <http://www.latticesemi.com>
2. Altera Corporation, MAX 7000 CPLD Data Sheets, <http://www.altera.com>
3. Altera Corporation, FLEX 10K Data Sheets, <http://www.altera.com>
4. Xilinx Corporation, XC4000 FPGA Data Sheets, <http://www.xilinx.com>
5. Altera Corporation, APEX 20K Data Sheets, <http://www.altera.com>
6. Altera Corporation, Stratix FPGA Data Sheets, <http://www.altera.com>
7. Altera Corporation, Cyclone FPGA Data Sheets, <http://www.altera.com>
8. Altera Corporation, Stratix II FPGA Data Sheets, <http://www.altera.com>
9. Xilinx Corporation, Virtex FPGA Data Sheets, <http://www.xilinx.com>
10. Xilinx Corporation, Virtex-II FPGA Data Sheets, <http://www.xilinx.com>
11. Xilinx Corporation, Virtex-II Pro FPGA Data Sheets, <http://www.xilinx.com>
12. Xilinx Corporation, Spartan-3 FPGA Data Sheets, <http://www.xilinx.com>
13. A. S. Sedra and K. C. Smith, *Microelectronic Circuits*, 5th ed. (Oxford University Press: New York, 2003).

CHAPTER 2

- 2.7. (a) Yes (b) Yes (c) No
- 2.12. $f = x_1x_3 + x_2x_3 + \bar{x}_2\bar{x}_3$
- 2.15. $f = (x_1 + x_2)(\bar{x}_2 + x_3)$
- 2.20. $f = x_2x_3 + x_1\bar{x}_3$
- 2.23. $f = (x_1 + x_2)(\bar{x}_1 + \bar{x}_3)$
- 2.28. $f = x_1x_2 + x_1x_3 + x_2x_3$
- 2.32. $f = (x_1 + x_2 + \bar{x}_3)(x_1 + \bar{x}_2 + x_3)(\bar{x}_1 + \bar{x}_2 + \bar{x}_3)(\bar{x}_1 + x_2 + x_3)$
- 2.33. $f = \bar{x}_1x_3 + \bar{x}_1x_2 + x_2x_3 + x_1\bar{x}_2\bar{x}_3$
- 2.40. The circuit is

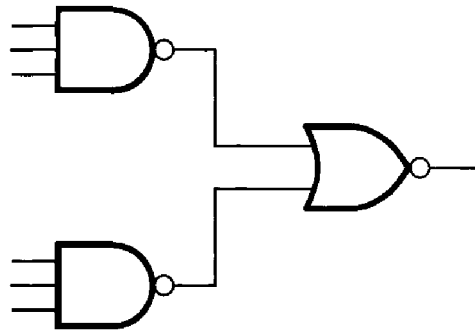


- 2.42. The circuit is



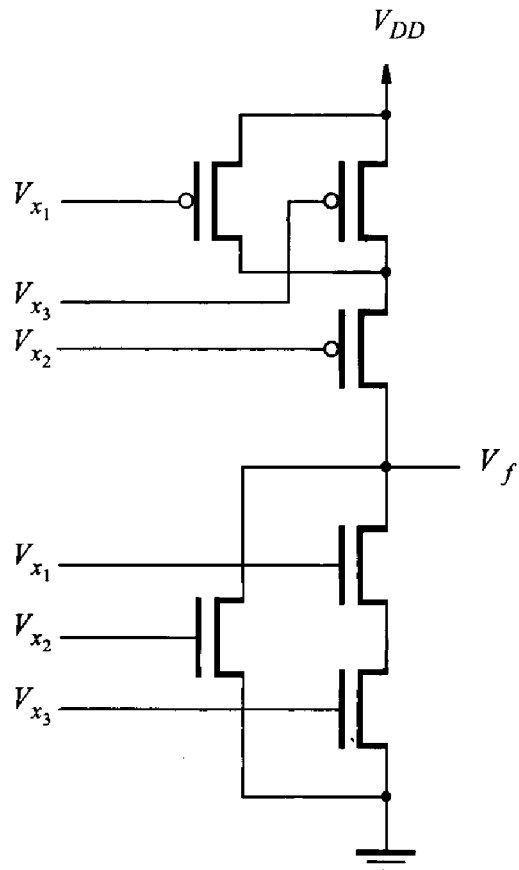
CHAPTER 3

3.4. Using the circuit

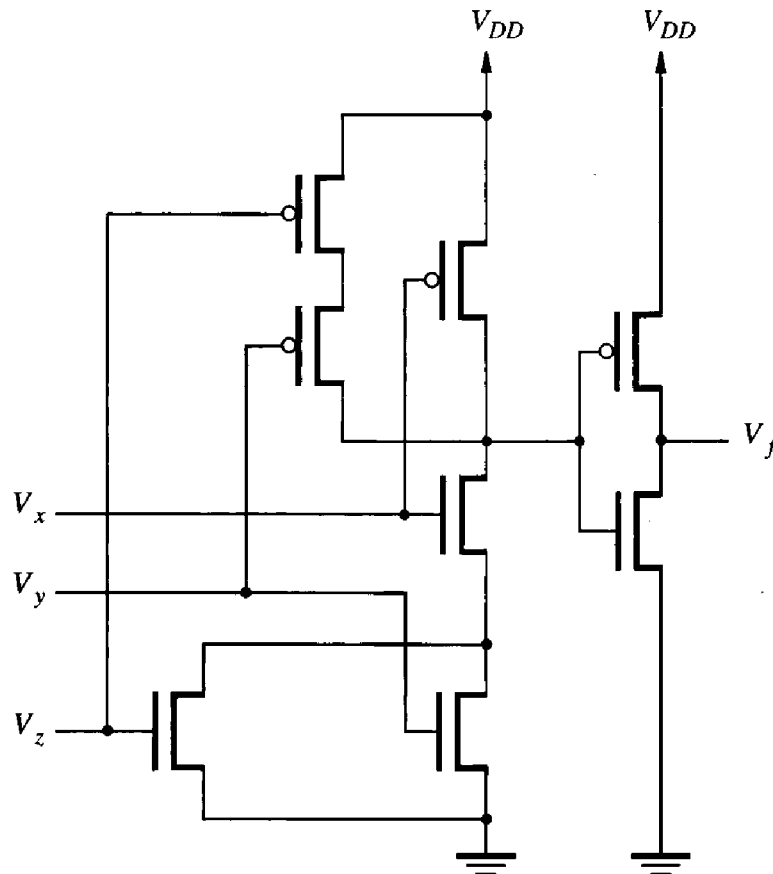


The number of transistors needed is 16.

3.8. The complete circuit is



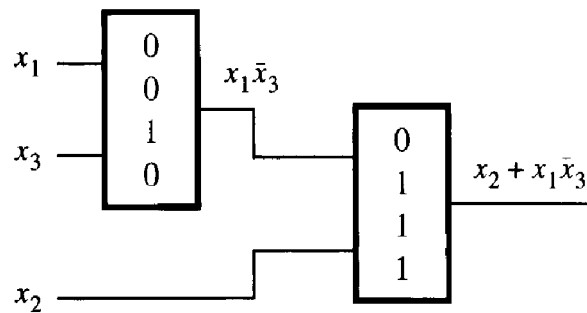
3.12.

3.14. (a) $I_D = 800 \mu\text{A}$ (b) $I_D = 78 \mu\text{A}$ 3.17. $R_{DS} = 947 \Omega$ 3.25. (a) $NM_H = 0.5 \text{ V}$ $NM_L = 0.7 \text{ V}$ (b) $V_{OL} = 0.8 \text{ V}$ $NM_L = 0.2 \text{ V}$ 3.28. (a) $P_{\text{NOT_gate}} = 163 \mu\text{W}$ (b) $P_{\text{total}} = 8.2 \text{ W}$

3.32. The two NMOS transistors in a CMOS NOR gate are connected in parallel. The worst case current to drive the output low happens when only one of these transistors is turned "ON". Thus each transistor has to have the same dimensions as the NMOS transistor in the inverter, namely $W_n/L_n = 2$.

The two PMOS transistors are connected in series. If each of these transistors had the ratio W_p/L_p , then the two transistors could be thought of as one transistor with a $W_p/2L_p$ ratio. Thus each PMOS transistor must be made twice as wide as that in the inverter, namely $W_n/L_n = 8$.

- 3.45. $f = x_2 + x_1\bar{x}_3$. The corresponding circuit is



- 3.55. The circuit in Figure P3.11 is a two-input XOR gate. This circuit has two drawbacks: when both inputs are 0 the PMOS transistor must drive f to 0, resulting in $f = V_T$ volts. Also, when $x_1 = 1$ and $x_2 = 0$, the NMOS transistor must drive the output high, resulting in $f = V_{DD} - V_T$.

CHAPTER 4

- 4.1. SOP form: $f = \bar{x}_1x_2 + \bar{x}_2x_3$
 POS form: $f = (\bar{x}_1 + \bar{x}_2)(x_2 + x_3)$
- 4.2. SOP form: $f = x_1\bar{x}_2 + x_1x_3 + \bar{x}_2x_3$
 POS form: $f = (x_1 + x_3)(x_1 + \bar{x}_2)(\bar{x}_2 + x_3)$
- 4.5. SOP form: $f = \bar{x}_3\bar{x}_5 + \bar{x}_3x_4 + x_2x_4\bar{x}_5 + \bar{x}_1x_3\bar{x}_4x_5 + x_1x_2\bar{x}_4x_5$
 POS form: $f = (\bar{x}_3 + x_4 + x_5)(\bar{x}_3 + \bar{x}_4 + \bar{x}_5)(x_2 + \bar{x}_3 + \bar{x}_4)(x_1 + x_3 + x_4 + \bar{x}_5)(\bar{x}_1 + x_2 + x_4 + \bar{x}_5)$
- 4.9. $f = x_1x_2x_3 + x_1x_2x_4 + x_1x_3x_4 + x_2x_3x_4$
- 4.11. The statement is false. As a counter example consider $f(x_1, x_2, x_3) = \sum m(0, 5, 7)$. Then, the minimum-cost SOP form $f = x_1x_3 + \bar{x}_1\bar{x}_2\bar{x}_3$ is unique. But, there are two minimum-cost POS forms:
 $f = (x_1 + \bar{x}_3)(\bar{x}_1 + x_3)(x_1 + \bar{x}_2)$ and
 $f = (x_1 + \bar{x}_3)(\bar{x}_1 + x_3)(\bar{x}_2 + x_3)$
- 4.12. In a combined circuit:
 $f = \bar{x}_2x_3\bar{x}_4 + \bar{x}_1\bar{x}_3\bar{x}_4 + x_1\bar{x}_2\bar{x}_3x_4 + \bar{x}_1x_2x_3$
 $g = \bar{x}_2x_3\bar{x}_4 + \bar{x}_1\bar{x}_3\bar{x}_4 + x_1\bar{x}_2\bar{x}_3x_4 + x_1x_2x_4$
 The first 3 product terms are shared, hence the total cost is 31.
- 4.14. $f = (x_3 \uparrow g) \uparrow ((g \uparrow g) \uparrow x_4)$ where $g = (x_1 \uparrow (x_2 \uparrow x_2)) \uparrow ((x_1 \uparrow x_1) \uparrow x_2)$
- 4.15. $\bar{f} = (((x_3 \downarrow x_3) \downarrow g) \downarrow ((g \downarrow g) \downarrow (x_4 \downarrow x_4)))$, where
 $g = ((x_1 \downarrow x_1) \downarrow x_2) \downarrow (x_1 \downarrow (x_2 \downarrow x_2))$. Then, $f = \bar{f} \downarrow \bar{f}$.

- 4.18. $f = \bar{x}_1(x_2 + x_3)(x_4 + x_5) + x_1(\bar{x}_2 + x_3)(\bar{x}_4 + x_5)$
- 4.21. $f = g \cdot h + \bar{g} \cdot \bar{h}$, where $g = x_1x_2$ and $h = x_3 + x_4$
- 4.23. $f = \bar{x}_1\bar{x}_2\bar{x}_4 + \bar{x}_1x_2\bar{x}_3 + x_1\bar{x}_2\bar{x}_3 + x_2x_3x_4$
- 4.32. Representing both functions in the form of Karnaugh map, it is easy to show that $f = g$.

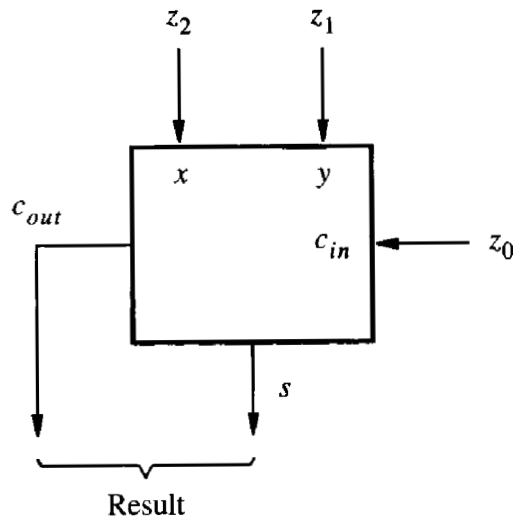
TER 5

- 5.1. (a) 478 (b) 743 (c) 2025 (d) 41567 (e) 61680
- 5.2. (a) 478 (b) -280 (c) -1
- 5.3. (a) 478 (b) -281 (c) -2
- 5.4. The numbers are represented as follows:

Decimal	Sign and Magnitude	1's Complement	2's Complement
73	000001001001	000001001001	000001001001
1906	011101110010	011101110010	011101110010
-95	100001011111	111101000000	111101000001
-1630	111001011110	100110100001	100110100010

- 5.11. Yes, it works. The NOT gate that produces c_i is not needed in stages where $i > 0$. The drawback is "poor" propagation of $\bar{c}_i = 1$ through the topmost NMOS transistor. The positive aspect is fewer transistors needed to produce \bar{c}_{i+1} .
- 5.12. From Expression 5.4, each c_i requires i AND gates and one OR gate. Therefore, to determine all c_i signals we need $\sum_{i=1}^n (i + 1) = (n^2 + 3n)/2$ gates. In addition to this, we need $3n$ gates to generate all g , p , and s functions. Therefore, a total of $(n^2 + 9n)/2$ gates are needed.
- 5.13. 84 gates.
- 5.17. The code in Figure P5.2 represents a multiplier. It multiplies the lower two bits of *Input* by the upper two bits of *Input*, producing the four-bit *Output*.

- 5.21. A full-adder circuit can be used, such that two of the bits of the number are connected as inputs x and y , while the third bit is connected as the carry-in. Then, the carry-out and sum bits will indicate how many input bits are equal to 1.

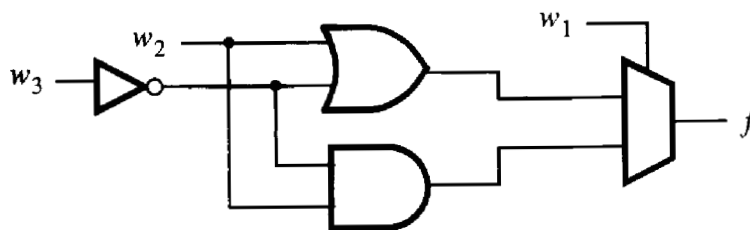


CHAPTER 6

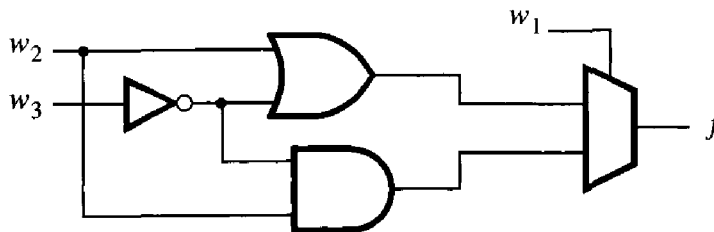
- 6.3.

w_1	w_2	w_3	f
0	0	0	1
0	0	1	0
0	1	0	1
0	1	1	1
1	0	0	0
1	0	1	0
1	1	0	1
1	1	1	0

w_1	f
0	$w_2 + \bar{w}_3$
1	$w_2 \bar{w}_3$



6.5. The derived circuit is



6.10. $f(w_1, w_2, \dots, w_n) = [w_1 + f(0, w_2, \dots, w_n)] \cdot [\bar{w}_1 + f(1, w_2, \dots, w_n)]$

6.12. Expansion of f in terms of w_2 gives

$$\begin{aligned} f &= \bar{w}_2(\bar{w}_1 + \bar{w}_3) + w_2(w_1w_3) \\ &= w_2 \oplus (\bar{w}_1 + \bar{w}_3) \\ &= w_2 \oplus \overline{w_1w_3} \end{aligned}$$

The cost of this circuit is 2 gates + 4 inputs = 6.

6.14. Any number of 5-variable functions can be implemented by using two 4-LUTs. For example, if we cascade the two 4-LUTs by connecting the output of one 4-LUT to an input of the other, then we can realize any function of the form

$$\begin{aligned} f &= f_1(w_1, w_2, w_3, w_4) + w_5 \\ f &= f_1(w_1, w_2, w_3, w_4) \cdot w_5 \end{aligned}$$

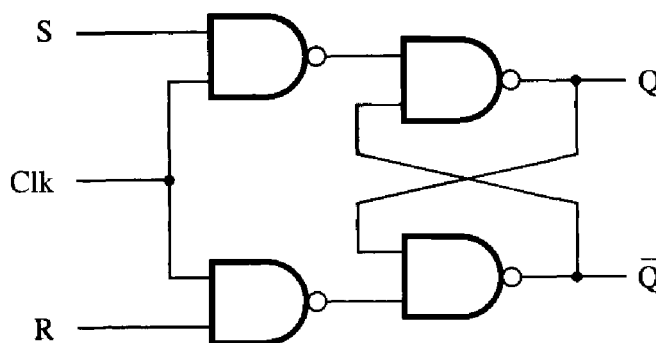
6.18. The code in Figure P6.2 is a 2-to-4 decoder with an enable input. It is not a good style for defining this decoder. The code is not easy to read. It is better to use the style in Figures 6.30 or 6.46.

6.29.

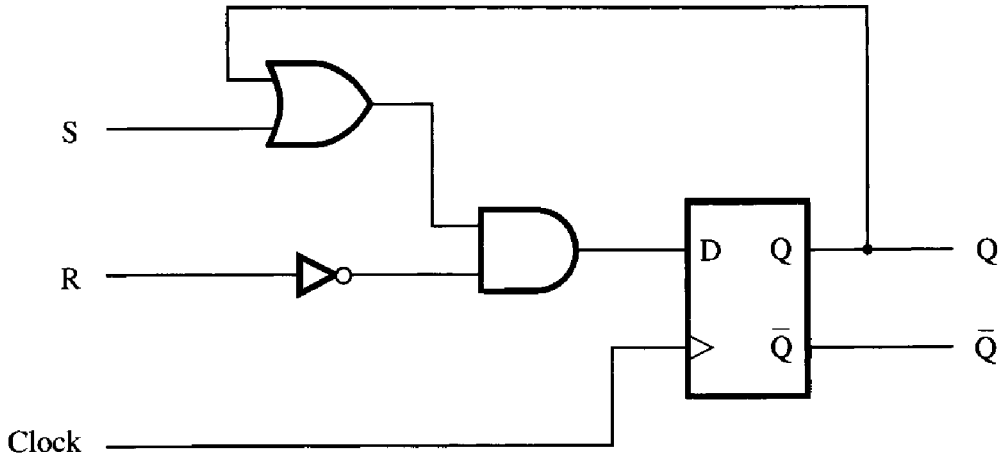
$$\begin{aligned} a &= w_3 + w_2w_0 + w_1 + \bar{w}_2\bar{w}_0 \\ b &= \bar{w}_1\bar{w}_0 + w_1w_0 + \bar{w}_2 \\ c &= w_2 + \bar{w}_1 + w_0 \end{aligned}$$

CHAPTER 7

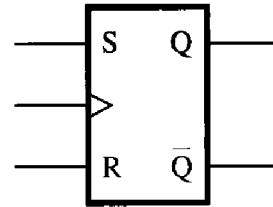
7.4.



7.6.

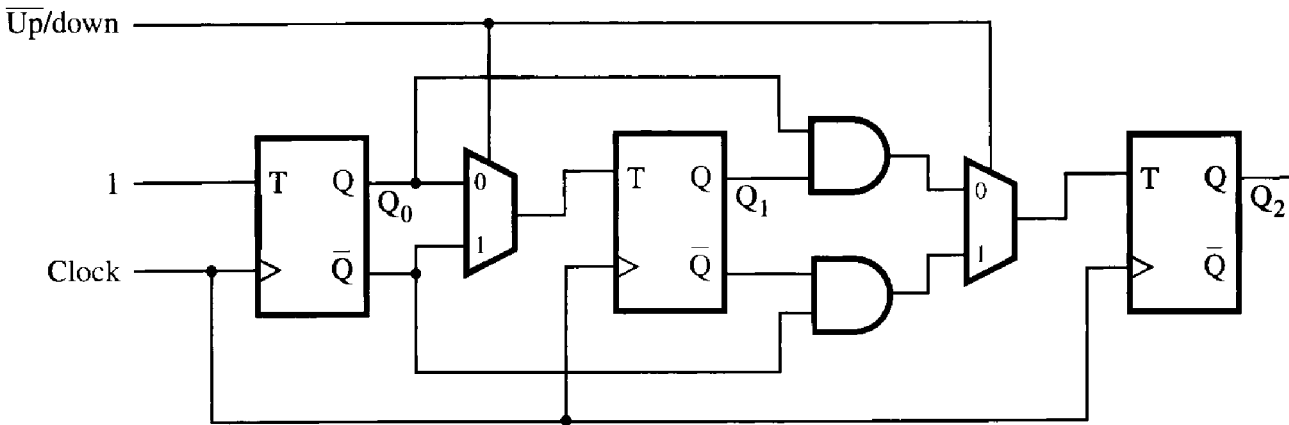


S	R	$Q(t+1)$
0	0	$Q(t)$
0	1	0
1	0	1
1	1	0



7.9. The circuit acts as a negative-edge-triggered JK flip-flop, in which $J = A$, $K = B$, Clock = C, $Q = D$, and $\bar{Q} = E$.

7.16.



7.18. The counting sequence is 000, 001, 010, 111.

- 7.24.** The longest delay in the circuit is the from the output of FF₀ to the input of FF₃. This delay totals 5 ns. Thus the minimum period for which the circuit will operate reliably is

$$T_{\min} = 5 + 3 + 1 = 9 \text{ ns}$$

The maximum frequency is

$$F_{\max} = 1/T_{\min} = 111 \text{ MHz}$$

- 7.28.** LIBRARY ieee ;
USE ieee.std_logic_1164.all ;
USE ieee.std_logic_unsigned.all ;

ENTITY prob7_28 IS

```
    PORT ( Clock, Reset : IN          STD_LOGIC ;
          Data           : IN          STD_LOGIC_VECTOR(3 DOWNTO 0) ;
          Q              : BUFFER STD_LOGIC_VECTOR(3 DOWNTO 0) ) ;
```

END prob7_28;

ARCHITECTURE Behavior OF prob7_28 IS

BEGIN

```
    PROCESS ( Clock, Reset )
```

```
    BEGIN
```

```
        IF Reset = '1' THEN
```

```
            Q <= "0000" ;
```

```
        ELSIF Clock'EVENT AND Clock = '1' THEN
```

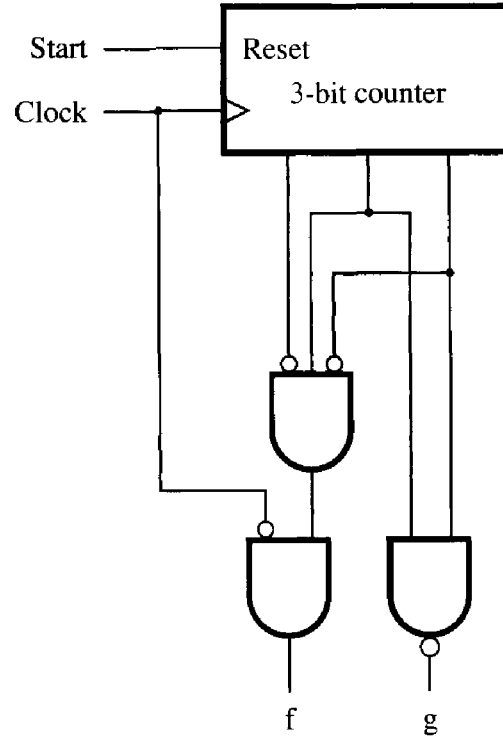
```
            Q <= Q + Data ;
```

```
        END IF ;
```

```
    END PROCESS ;
```

```
END Behavior ;
```

7.35.



CHAPTER 8

- 8.1. The expressions for the inputs of the flip-flops are

$$D_2 = Y_2 = \bar{w}y_2 + \bar{y}_1\bar{y}_2$$

$$D_1 = Y_1 = w \oplus y_1 \oplus y_2$$

The output equation is $z = y_1y_2$.

- 8.2. The expressions for the inputs of the flip-flops are

$$J_2 = \bar{y}_1$$

$$K_2 = w$$

$$J_1 = \bar{w}y_2 + w\bar{y}_2$$

$$K_1 = J_1$$

The output equation is $z = y_1y_2$.

8.5. 8.15. The next-state expressions are

$$D_4 = Y_4 = \bar{w}y_3 + wy_1$$

$$D_3 = Y_3 = \bar{w}(y_1 + y_4)$$

$$D_2 = Y_2 = \bar{w}y_2 + wy_4$$

$$D_1 = Y_1 = w(y_2 + y_1)$$

The output is given by $z = y_4$.

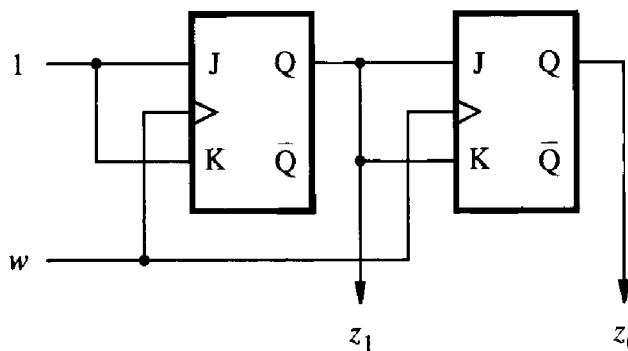
8.17. Minimal state table is

8.6.

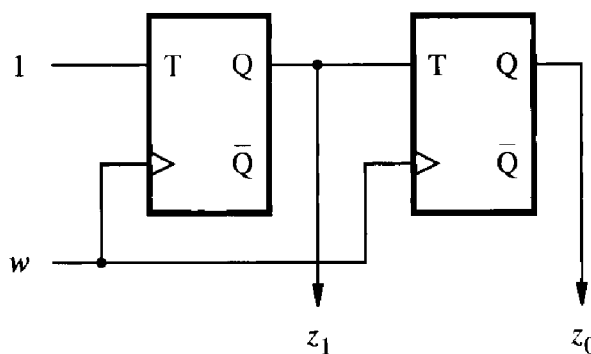
Present state	Next state		Output z	
	w = 0	w = 1	w = 0	w = 1
A	A	C	0	0
C	F	C	0	1
F	C	A	0	1

8.21. The desired circuit is

8.12.



8.22. The desired circuit is



8.15. The next-state expressions are

$$D_4 = Y_4 = \bar{w}y_3 + wy_1$$

$$D_3 = Y_3 = \bar{w}(y_1 + y_4)$$

$$D_2 = Y_2 = \bar{w}y_2 + wy_4$$

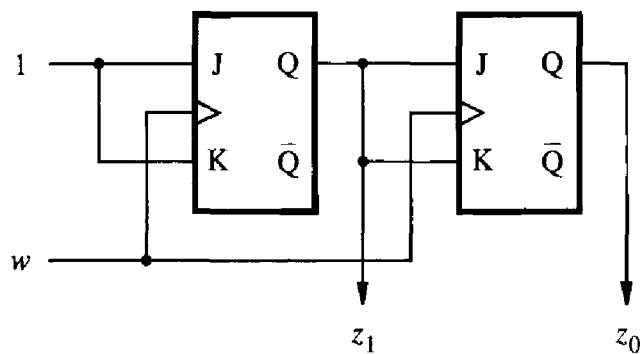
$$D_1 = Y_1 = w(y_2 + y_1)$$

The output is given by $z = y_4$.

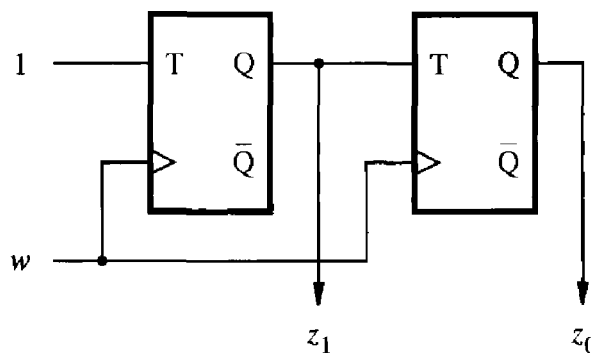
8.17. Minimal state table is

Present state	Next state		Output z	
	$w = 0$	$w = 1$	$w = 0$	$w = 1$
A	A	C	0	0
C	F	C	0	1
F	C	A	0	1

8.21. The desired circuit is



8.22. The desired circuit is



29.

Present state	Next state		Output z
	w = 0	w = 1	
A	A	C	0
B	A	D	1
C	A	D	0
D	A	B	0

The circuit produces $z = 1$ whenever the input sequence on w comprises a 0 followed by an even number of 1s.

ER 9

9.1. The flow table is

Present state	Next state				z ₂ z ₁
	w ₂ w ₁ = 00	01	10	11	
A	D	C	D	C	11
B	D	D	(B)	(B)	10
C	(C)	D	(C)	01
D	(D)	C	B	C	00

The behavior is the same as described in the flow table in Figure 9.21a, if the state interchanges $A \leftrightarrow D$ and $B \leftrightarrow C$ are made.

9.8. Using the merger diagram in Figure 9.40a, the FSM in Figure 9.39 becomes

Present state	Next state				Output z
	w ₂ w ₁ = 00	01	10	11	
A	(A)	G	E	-	0
B	(B)	C	(B)	D	0
C	B	(C)	E	(C)	1
D	-	C	E	(D)	0
E	A	-	(E)	D	1
G	B	(G)	-	D	1

9.10. The minimum-cost hazard-free implementation is

$$f = \bar{x}_1\bar{x}_3\bar{x}_4 + x_1x_2x_4 + x_1x_3x_4$$

9.12. The minimum-cost hazard-free POS implementation is

$$f = (x_1 + x_2 + x_4)(x_1 + x_2 + \bar{x}_3)(x_1 + \bar{x}_3 + \bar{x}_4)(x_2 + \bar{x}_3 + x_4)$$

9.14. If $A = B = D = E = 1$ and C changes from 0 to 1, then f changes $0 \rightarrow 1 \rightarrow 0$ and g changes $0 \rightarrow 1 \rightarrow 0 \rightarrow 1$. Therefore, there is a static hazard on f and a dynamic hazard on g .

9.17. The excitation table is

Present state y	Next state Y				Output z			
	wc = 00	01	10	11	00	01	10	11
	0	(0)	(0)	1	(0)	0	0	0
1	0	(1)	(1)	(1)	0	1	0	1

The next-state expression is $Y = w\bar{c} + cy + wy$. Note that the term wy is included to prevent a static hazard.

The output expression is $z = cy$.

APTER II

- 11.1.** A minimal test set must include the tests $w_1w_2w_3 = 011, 101,$ and $111,$ as well as one of $000, 010,$ or $100.$
- 11.3.** The two functions differ only in the vertex $x_1x_2x_3x_4 = 0111.$ Therefore, the circuits can be distinguished by applying this input valuation.
- 11.5.** The tests are $w_1w_2w_3w_4 = 1111, 1110, 0111,$ and $1111.$
- 11.9.** Cannot detect if the input wire w_1 is stuck-at-1. The reason is that this circuit is highly redundant. It realizes the function $f = w_3(\bar{w}_1 + \bar{w}_2),$ which can be implemented with a simpler circuit.
- 11.11.** Test set = $\{0000, 0111, 1111, 1000\}.$ It would work with XORs implemented as shown in Figure 4.28c.
 For n bits, the same patterns can be used; thus
 Test set = $\{00 \dots 00, 011 \dots 1, 11 \dots 1, 100 \dots 0\}.$
- 11.12.** In the decoder circuit in Figure 6.16c the four AND gates are enabled only if the En signal is active. The required test set has to include all four valuations of w_1 and w_2 when $En = 1.$ It is also necessary to test if the En wire is stuck at 1, which can be accomplished with the test $w_1w_2En = 000.$ Therefore, a complete test set comprises $w_1w_2En = 000, 001, 011, 101,$ and $111.$

A

Absorption property, 30
 Accumulator, 424, 813
 Active clock edge, 389, 480
 Active-low signal, 133
 Adaptive Logic Module (ALM), 911
 Adder:
 BCD, 297
 carry lookahead, 271
 carry save, 309
 full-adder, 252
 half-adder, 250
 in VHDL code, 281-289
 propagation delay, 270, 276
 ripple-carry, 255, 867
 serial, 514
 Adder/subtractor, 264, 459
 Addition, 250-255, 261
 BCD, 297
 carry, 250
 generate function, 271
 overflow, 269
 propagate function, 271
 sum, 250
 VHDL, 285-289
 Address, 334
 Aliasing problem in testing, 745
 Algorithm, 673
 Algorithmic state machine (ASM):
 ASM charts, 555
 ASM block, 558
 conditional output box, 556
 decision box, 556
 implied timing, 675
 state box, 556
 Alphanumeric characters, 303
 Altera APEX 20K, 909
 Altera Cyclone, 911
 Altera FLEX 10K, 904
 Altera MAX 7000 CPLD, 902
 Altera Stratix FPGA, 909
 Altera Stratix II FPGA, 911
 Altera UP-1 board, 895
 And-Or-Invert cells, 146
 Analysis, 27, 196, 551, 582
 AND gate (*see* Gates)
 AND plane, 94

Anode terminal, 461
 Arbiter circuit, 543, 597
 Architecture (VHDL), 61, 782
 body, 782
 declarative part, 782
 Arithmetic:
 floating-point (*see* Floating point)
 operators (VHDL), 362
 overflow, 269, 760
 (*See also* Addition; Division;
 Multiplication; Subtraction)
 Arithmetic and logic unit (ALU), 358
 Arithmetic assignment (VHDL), 285
 Array multiplier (*see* Multiplication)
 Array (VHDL), 780
 ASCII code, 302
 ASIC, 6, 111
 ASM block, 558
 ASM chart (*see* Algorithmic state
 machine)
 Associative property, 30
 Asynchronous clear (reset), 393, 412
 Asynchronous clear (in VHDL), 422, 808
 Asynchronous counter, 403
 Asynchronous inputs, 717
 Asynchronous sequential circuits
 (*see* Sequential circuits)
 Attribute (VHDL), 420, 509, 806
 enum_encoding, 509
 EVENT, 420, 806
 Axioms of Boolean algebra, 29

B

Barrel shifter, 369, 685
 Basic latch, 381, 398
 BCD (*see* Binary-coded decimal)
 BCD-to-7-segment decoder, 338, 358
 Behavioral VHDL code, 285, 339-342,
 466, 802
 BGA package, 106
 BILBO (Built-in Logic Block Observer),
 745
 Binary-coded decimal (BCD), 297
 addition, 297
 counter, 463
 digits, 297

Binary decoder (*see* Decoder)
 Binary encoder (*see* Encoder)
 Binary numbers, 247
 in VHDL code, 687
 Binary variable, 20
 BIST (Built-in Self Test), 741
 Bit, 247
 Bit-counting circuit, 675, 802
 BIT type, 60, 775
 Body effect, 127
 Boolean algebra, 29-37
 Boundary scan, 748
 Branching heuristic, 213, 221
 Buffer, 131, 463
 inverting, 131
 tri-state, 93, 442
 VHDL (port mode), 434
 Bus, 435, 441, 870
 Bypass capacitor, 749
 Byte, 247

C

CAD (*see* Computer aided design)
 Canonical expressions:
 canonical product-of-sums, 43
 canonical sum-of-products, 41
 Capacitance, 121, 147
 Carry, 250
 carry-in, 250
 carry-out, 252
 Carry chain, 408, 762, 769, 877
 Carry lookahead adder, 271
 Carry save adder, 309
 CASE statement, 356, 457, 797
 Cathode terminal, 461
 Channel (in MOSFET), 115
 Character codes, 301
 Characteristic impedance, 750
 Characteristic table, 382
 Chip configuration, 58
 Circuit size, 105
 Clear input (*see* Reset input), 393
 Clock, 385, 883
 Clock divider, 461
 Clock enable, 664

- Clock EVENT, 420
 - Clock skew, 437, 713
 - Clock synchronization, 402, 713
 - Clock-to-output time (t_{co}), 417, 716, 770, 886
 - CMOS technology, 78
 - Code:
 - BCD (*see* Binary-coded decimal)
 - binary, 247
 - converter, 337, 366
 - decimal, 246
 - error-detecting, 303
 - Gray, 366
 - Cofactor, 326
 - Coincidence operation, 254
 - Column dominance, 211
 - Combinational circuits, 315-372
 - Combining property, 31
 - Comment (VHDL), 774
 - Commutative property, 30
 - Comparator, 238
 - Compatible states, 607
 - Complement:
 - diminished radix, 268
 - of a logic variable, 23
 - 1's, 258
 - radix, 265
 - 2's, 259
 - Complementary metal-oxide semiconductor (*see* CMOS technology)
 - Completely specified FSM, 531
 - Complex gate (CMOS), 86
 - Complex programmable logic device (CPLD), 101
 - Components (VHDL), 281, 445, 666, 786
 - Compressor circuit, 743
 - Computer, 9
 - Computer-aided design (CAD), 54-58
 - chip configuration, 895
 - design entry, 54
 - functional simulation, 57, 846
 - technology mapping, 760
 - timing analysis, 769
 - timing simulation, 57, 871
 - tools, 54
 - Concatenation (VHDL), 287, 362, 790
 - Concurrent assignment statement (VHDL), 350, 788
 - Conditional signal assignment (VHDL), 344, 792
 - Configurable logic block (CLB), 907
 - Consensus property, 31
 - Consistency check, 731
 - Constant (in VHDL), 779
 - Context sensitive help, 830, 857
 - Control circuit, 664
 - Conversion of types (VHDL), 780
 - Cost, 41, 174
 - Counter:
 - asynchronous, 403
 - asynchronous circuit design, 595
 - BCD, 412
 - design, 415
 - down, 403
 - enable and clear capability, 406
 - Johnson, 415, 468
 - modulo-n, 468
 - parallel load of, 408
 - reset of, 410, 412
 - ring, 414
 - ripple, 403
 - synchronous, 405, 406, 533
 - up, 402, 676
 - up/down, 403
 - VHDL code, 434, 454, 814
 - Cover, 174
 - fault, 729
 - minimum, 209
 - table, 209
 - Critical path, 271, 770, 873
 - Crossbar, 319
 - Cross-coupled gates, 383
 - Crosstalk, 749
 - Cubical representation, 203-207
 - Current flow:
 - dynamic, 123
 - gate, 116
 - leakage, 119
 - short circuit, 125, 133
 - sink, 461
 - static, 119, 127, 144
 - Custom chips, 6, 111
 - Cut-off region, 114
 - Cut set, 590
- D**
- D flip-flop (*see* Flip-flop)
 - D-algorithm, 733
 - Data, 334
 - Datapath, 664
 - DC-set, 220
 - Debouncing, 718
 - Decimal numbers, 246
 - Decoder, 329, 451
 - tree, 331
 - Decomposition (*see* Functional decomposition)
 - Default value (VHDL), 455, 799
 - Delay (*see* Propagation delay)
 - DeMorgan's theorem, 31
 - Demultiplexer, 333
 - Design ENTITY (*see* ENTITY)
 - Design entry, 54
 - Design for testability, 737
 - Design process, 6
 - Digital hardware, 2
 - Digital system, 664
 - Diminished radix complement, 268
 - DIP package, 91
 - Directory, 828
 - Disjoint decomposition, 193
 - Distributive property, 30
 - Divide and conquer, 12
 - Division, 686
 - Don't-care condition, 180
 - in VHDL code, 358
 - Double precision (*see* Floating point)
 - Down-counter, 403, 434
 - Drain (in MOSFET transistor), 76
 - Duality, 30
 - Duty cycle, 883
 - Dynamic hazard, 635
- E**
- EDA tools, 830
 - Edge (in signals), 389
 - Edge-triggered, 388, 392
 - EDIF, 833
 - Editing tool, 845
 - Electrically-erasable programmable read-only memory (EEPROM), 138
 - Embedded Array Blocks (EABs), 904
 - Enable input, 406, 518, 664
 - Encoder:
 - binary, 335, 446
 - priority, 336
 - Energy (capacitor), 125
 - ENTITY, 60, 781
 - ENTITY declaration, 60, 782
 - with GENERIC parameter, 793
 - enum_encoding, 509
 - Enumeration type (VHDL), 778
 - Equivalence:
 - of logic networks, 28
 - of states, 524
 - Equivalent-gates metric, 105
 - Erasable programmable read-only memory (EPROM), 140
 - Errors in VHDL code, 821
 - Espresso, 223
 - Essential prime implicant, 175, 218
 - EVENT attribute, 420
 - Excess-127 format, 296
 - Excess-1023 format, 296
 - Excitation table, 581

Exclusive-NOR (XNOR) gate (*see* Gates)
 Exclusive-OR (XOR) gate (*see* Gates)
 Expansion theorem (Shannon's), 325

F

Factoring, 186
 Fall time, 123
 Fan-in, 187, 128
 Fan-out, 130
 Fault:
 detection, 727, 731
 model, 726
 propagation, 731
 stuck-at, 726
 Feedback, 381
 Field-programmable gate array (FPGA),
 5, 105
 Finite state machine (FSM), 480
 incompletely specified, 531
 summary of design procedure, 488
 555 programmable timer chip, 723
 Fixed-point numbers, 293
 Flip-flop, 389, 398
 Flip-flops:
 clear and preset inputs, 393
 configurable (in PLDs), 397
 D, 389, 420
 edge-triggered, 392, 398
 JK, 398, 467, 536
 master-slave, 389, 398, 582
 negative-edge-triggered, 392
 positive-edge-triggered, 392, 395
 SR, 369
 T, 394
 VHDL code for, 420, 806
 Floating gate, 138
 Floating point, 295
 double precision, 295
 exponent, 295
 format, 295
 IEEE standard, 295
 mantissa, 295
 normalized, 295
 representation, 295
 single precision, 295
 Floorplan Editor, 863
 Flow table, 581
 primitive, 605
 state reduction, 603-617
 f_{max} , 770, 885
 Folder, 828
 FOR GENERATE statement, 348, 432,
 454, 683, 692, 703, 793
 FOR LOOP statement, 432, 442, 797, 801
 Fowler-Nordheim tunneling, 139

FPLA (*see* PLA)
 FSM (*see* Finite state machine)
 Full-adder, 252, 281, 784
 Functional behavior, 27
 Functional decomposition, 190
 Functional equivalence, 28
 Functional simulation, 57
 Fundamental mode, 578
 Fuse, 136

G

Gate (in MOSFET transistor), 76
 Gate array, 112
 Gate delay (*see* Propagation delay)
 Gate optimization, 758
 Gated D latch, 398, 419, 582, 805
 Gated latch, 385, 398
 Gated SR latch, 383, 385, 398
 Gates, 25
 AND, 26
 NAND, 45, 80, 83
 NOR, 45, 80, 85
 NOT, 26, 78, 82
 OR, 26
 XNOR, 254, 135
 XOR, 252, 135
 GENERATE statement, 348, 454, 793
 GENERIC (*see* ENTITY declaration)
 GENERIC MAP, 426, 428, 815
 Glitch, 587, 634
 Global signals, 504, 714
 Gray code, 366
 Guidelines, 835

H

H tree, 714
 Half-adder, 250
 Hamming distance, 618
 Handshake signaling, 597
 Hardware description language (HDL), 55
 Hazard-free design, 638
 Hazards, 634-641
 dynamic, 635
 static, 417, 634
 Heuristic approach, 176
 Hexadecimal numbers, 248
 Hierarchical design, 55, 274
 Hierarchical VHDL code, 282-284, 343,
 349, 786
 High-level behavioral VHDL code, 466
 High-impedance output, 132
 Hold time, 389, 770, 885
 Huntington's postulates, 31
 Hypercube, 207

I

IF GENERATE statement, 349
 IF statement, 350, 796
 IEEE, 55
 IEEE standards (*see* Standards)
 Implicant, 173
 Implied memory (VHDL), 355, 419, 455,
 799
 Incompletely specified FSM, 531
 Incompletely specified functions, 180
 Input variable, 21
 Instantiation (of VHDL components), 281,
 445, 785
 Instrumentation, 751
 In-system programming (ISP), 100, 902
 Integer:
 in VHDL, 289, 433, 778
 signed, 246
 unsigned, 246
 INTEGER type (VHDL), 289, 778
 Intersection, 33
 Inversion, 23
 Inverter, 78, 82

J

JK flip-flop, 398, 467, 536
 Johnson counter, 415, 468
 JTAG port, 104

K

Karnaugh map, 164-172
 k -cube, 207
 k -successor, 524
 Keyboard short-cuts, 841
 Keywords (VHDL), 774

L

Large scale integration (LSI), 93
 Latch:
 basic SR, 381, 398, 578
 D, 398
 gated D, 386, 398, 419, 582
 gated SR, 383, 385, 398
 set-dominant SR, 472
 VHDL code, 419
 Leads, 91
 Leakage current, 119
 Least-significant bit, 247
 LED (Light emitting diode), 132, 460
 Level sensitive element, 388
 Level sensitive scan design, 741

- Libraries, 55, 224
 - ieee, 283
 - work, 284, 785
 - Library of Parameterized Modules (LPM), 279, 786
 - lpm_add_sub*, 279, 424, 876
 - lpm_counter*, 427
 - LPM_DIRECTION*, 426
 - lpm_ff*, 424
 - lpm_ram_dq*, 701, 721, 906
 - lpm_rom*, 906
 - lpm_shiftreg*, 426
 - LPM_WIDTH*, 426
 - Linear feedback shift register (LFSR), 742
 - Linear region (*see* Triode region)
 - Literal, 173
 - Logic analyzer, 27, 751
 - Logic array block (LAB), 903, 904, 909
 - Logic block, 105
 - Logic circuit, 2, 26
 - Logic element, 904
 - Logic expression, 21
 - Logic functions, 21
 - AND, 22
 - minimization, 172-179, 207-222
 - NAND, 45, 80
 - NOR, 45
 - NOT, 23
 - OR, 22
 - synthesis, 37-44
 - XNOR, 254
 - XOR, 252
 - Logic gates, 25
 - drive capability, 131
 - dynamic operation, 121
 - fall time, 123
 - fan-in, 187, 128, 863, 863
 - fan-out, 130
 - noise margin, 119, 914
 - power dissipation, 124
 - propagation delay, 122
 - rise time, 122
 - transfer characteristic, 120
 - Logic network, 26
 - Logic values, 20
 - Logical operators (VHDL), 259
 - Logical product (AND), 36
 - Logical sum (OR), 36
 - Lookup table, 107
 - Loop statement (*see* FOR LOOP)
 - LUT, 107
- M**
- Macrocell, 98, 901
 - Macrofunction, 279
 - Magnitude, 256
 - Majority function, 237
 - Master (*see* Flip-flop, master-slave)
 - Master-slave (*see* Flip-flop)
 - Maxterm, 42
 - Mealy FSM, 480, 496
 - VHDL code, 511, 818
 - Mealy output, 556
 - Mean operation, 696
 - Medium-scale integration (MSI), 93
 - Megafunction, 279
 - MegaWizard Plug-in Manager, 876
 - Memory,
 - implied memory (VHDL), 355, 419, 799
 - Memory initialization file, 906
 - Merger diagram, 607
 - Merging, 605
 - procedure, 607
 - Metal-oxide semiconductor (*see* MOSFET)
 - Metastability, 717
 - Minimization:
 - of logic functions, 172-179, 207-222
 - of states, 524-531, 603-617
 - Minterm, 40
 - Mixed logic, 90
 - Mode (of a logic block), 760
 - Moore FSM, 480
 - VHDL code, 502, 816
 - Moore output, 556
 - Moore's law, 2
 - MOSFET transistor, 75
 - on-resistance, 117
 - Most-significant bit, 247
 - Motherboard, 9
 - Multilevel circuits, 185-203, 864
 - Multiple-output circuits, 182
 - Multiplex (definition), 333
 - Multiplexer, 51, 316-328, 133, 136
 - Multiplexer (VHDL code), 341-344, 446
 - Multiplication, 289, 677
 - array implementation, 291
 - partial product, 290
 - sequential implementation, 677
 - signed-operand, 292
 - Mutual exclusion element (ME), 602
- N**
- Named association (VHDL), 282, 786
 - Names (VHDL), 774
 - NAND circuits, 45-47, 195, 80
 - NAND gate (*see* Gates)
 - n*-cube, 207
 - Negative edge, 389
 - Negative logic, 74, 88
 - Negative numbers, 256
 - Netlist generation, 758
 - Network, 25
 - Next state, 483, 579
 - variables, 484, 579
 - Nibble, 247
 - 9's complement, 265
 - NMOS technology, 78
 - NMOS transistor, 75
 - Node Finder, 844
 - Node (Quartus II), 838
 - Noise, 119
 - margin, 119
 - power supply, 749
 - Non-disjoint decomposition, 193
 - Nonvolatile programming, 104
 - NOR circuits, 45-48, 195, 80
 - NOR gate (*see* Gates)
 - NOR plane, 138
 - NOT gate (*see* Gates)
 - Number conversion, 247-250
 - Number representation:
 - binary coded decimal, 297
 - fixed-point, 293
 - floating-point, 295
 - hexadecimal, 248
 - octal, 248
 - 1's-complement, 258
 - positional notation, 246
 - sign and magnitude, 258
 - signed integer, 256
 - 10's-complement, 265
 - 2's-complement, 259
 - unsigned integer, 246
 - in VHDL, 284
 - Numbers (in VHDL), 774
- O**
- Octal numbers, 248
 - Odd function, 252
 - One-hot encoding, 330, 414, 494, 633
 - 1's-complement representation, 258
 - 1076 VHDL Standard, 58
 - 1164 VHDL Standard, 58
 - 1149.1 Standard, 748
 - On-resistance, 117
 - ON-set, 220
 - Open-collector, 915
 - Open-drain, 915
 - Operations (*see* Logic functions)
 - Operators (VHDL), 359, 781
 - Optimization (*see* Minimization)
 - OR gate (*see* Gates)
 - OR plane, 94

Ordering of statements (VHDL), 350, 431, 799, 812
 Oscilloscope, 27, 751
 OTHERS (VHDL), 340, 428, 790
 Output delay time (t_{od}), 715
 Overflow (*see* Arithmetic overflow)

P

Packages (physical):
 ball grid array (BGA), 106
 dual inline (DIP), 91
 pin grid array (PGA), 106
 plastic-leaded chip carrier (PLCC), 100
 quad flat pack, 102
 small-outline integrated circuit (SOIC), 93
 Package (VHDL), 225, 283, 444, 454, 784
 PAL, 97
 Parallel expanders, 903
 Parallel-to-serial converter, 569
 Parallel transfer, 400
 Parasitic capacitance, 121
 Parity, 303, 591
 Partial product, 290
 Pass transistor, 144
 Path sensitizing, 729
 Physical design, 57
 Pin assignments, 889
 Pins, 91
 Pinstub, 838
 PLA, 94, 138
 Placement, 748, 767
 PLD, 5, 94
 PMOS transistor, 76
 P-N junction, 114
 Polysilicon, 114
 Port (VHDL), 61, 782
 PORT MAP, 282, 786
 Portability, 55
 Positional association (VHDL), 282, 786
 Positional number representation, 246
 Positive logic, 74, 88
 Power dissipation, 124
 dynamic, 124, 126
 in CMOS circuits, 125
 in NMOS circuits, 124
 static, 124, 127, 144
 PRBSG, 743
 Precedence of operations, 37, 363
 Present state, 483, 579
 variables, 484, 579
 Preset input, 393
 Price/performance ratio, 270
 Prime implicant, 174

Primitive flow table, 605
 Primitives library, 833
 Printed circuit board (PCB), 13, 748
 Priority, 336
 encoder, 336
 in VHDL code, 345, 353
 Process statement (VHDL), 350, 794, 798
 Process transconductance parameter, 116
 Processor, 449
 Product-of-sums form (POS), 43
 Programmable array logic (*see* PAL)
 Programmable logic array (*see* PLA)
 Programmable logic device (*see* PLD)
 Programmable ROM (PROM), 335, 109
 Programmable switch, 4
 Project (Quartus II), 828
 Propagation delay, 57, 122, 388
 Properties of Boolean algebra, 30
 Pseudo-NMOS technology, 119, 149
 Pseudorandom tests, 742
 Pseudorandom binary sequence generator (PRBSG), 742
 Pull-down network, 81
 Pull-up network, 82
 Pull-up resistor, 79
 Pulse mode, 578

Q

QFP package, 102
 Quartus project file, 860
 Quine-McCluskey method, 207

R

Race condition, 592
 Radix, 246, 870
 Radix complement, 265
 RAM (*see* Static random access memory)
 Random testing, 734
 Read-only memory (ROM), 334
 Reflections, 749
 Register, 399
 VHDL code, 808
 Register delay time (t_{rd}), 714
 Register-Transfer Level (RTL) code, 466
 Register (VHDL code), 426
 Relational operators (VHDL), 361
 Reliability, 751
 Reset input, 380, 482
 Reset state, 481
 Resistance (transistor channel), 117
 Resolution function (VHDL), 777
 Ring counter, 414
 Ring Oscillator, 475
 Ripple-carry adder, 255

Ripple counter, 403
 Rise time, 122
 ROM (*see* Read only memory)
 Rotate operators (VHDL), 362
 Rotate symbol, 835
 Routing, 748, 768
 channel, 105, 111
 Row dominance, 207
 Rubberbanding, 839

S

Saturation region, 116
 Scan path, 738
 Schematic, 25
 Schematic capture, 55, 278
 Sea-of-gates technology, 112
 Selected signal assignment (VHDL), 299, 340, 791
 Selection tool, 845
 Semiconductor, 114
 Semi-custom chips, 111
 Sensitivity list (VHDL), 350, 798
 Sequence detector, 481, 561
 Sequential assignment statement (VHDL), 350, 794
 Sequential circuits, 480
 analysis, 551, 582
 asynchronous, 578-657
 definition of, 380, 480
 finite state machine, 480
 flow table, 581
 formal model, 559
 merger diagram, 607
 state assignment, 483, 491, 618
 state assignment in VHDL, 509
 state diagram, 482
 state minimization, 524-531, 603-617
 state table, 483
 synchronous, 380, 480-560
 testing, 737-748
 transition diagram, 621
 Serial adder, 514
 Serial parity generator, 591
 Series-to-parallel converter, 400
 Setup time, 388, 714, 770, 885
 7400-series chips, 91
 7-segment display, 338, 463
 BCD-to-7-segment decoder, 338
 Shannon's expansion, 324
 Sharp-operation (#-operation), 218
 Shift operators (VHDL), 362
 Shift register, 399, 666
 VHDL code, 430, 811
 SIA roadmap, 2
 Sign bit, 256

- Sign-and-magnitude representation, 258
 - SIGNAL, 775
 - Signature, 743
 - Signature analysis, 747
 - Sign extension, 293
 - Signed numbers, 256
 - SIGNED type, 288
 - Simple signal assignment, 62, 789
 - Simplification (*see* Minimization)
 - Simulation:
 - functional, 57, 15
 - timing, 57, 15
 - Simulator, 57
 - Single-precision (*see* Floating point)
 - SIS (Sequential Interactive Synthesis), 223
 - Skew (*see* Clock skew)
 - Slack, 770
 - Slave (*see* Flip-flop, master-slave)
 - Slice, 912
 - Small-scale integration (SSI), 93
 - Socket, 101
 - Sort operation, 703
 - Source (in MOSFET transistor), 76
 - Speed grade, 861, 900
 - SR latch (*see* Latch)
 - Stable state, 578
 - Standard cells, 111, 146
 - Standard chips, 4
 - Standards:
 - IEEE floating-point, 295
 - 1149.1 (Testing), 748
 - Verilog, 55
 - 1076 (VHDL), 58
 - 1164 (VHDL), 58
 - Star-operation (*-operation), 216
 - Starvation, 551
 - Starting state, 481
 - State, 480
 - assignment, 483, 491, 618
 - assignment in VHDL, 509
 - compatibility, 607
 - definition of, 380, 480
 - diagram, 482
 - equivalence, 524
 - minimization, 524-531, 603
 - table, 483
 - variables, 483, 579
 - State-adjacency diagram, 621
 - State-assigned table, 484
 - State machine (*see* Finite state machine)
 - Statement ordering (VHDL), 350, 431, 799, 812
 - Static hazard, 417, 634
 - Static random access memory (SRAM), 142, 668, 700
 - SRAM blocks in PLDs, 673
 - Static timing analysis (*see* Timing analyzer)
 - STD_LOGIC type, 224
 - Storage cells, 107
 - Structural VHDL code, 281
 - Stuck-at fault, 726
 - Substrate, 76
 - Subtraction, 262
 - Subtype (VHDL), 776
 - Sum, 250
 - Sum-of-products form (SOP), 41
 - Switch, 20
 - Synchronous clear (reset), 393, 410, 423
 - Synchronous counter, 405, 406
 - Synchronous sequential circuits (*see* Sequential circuits)
 - Synthesis, 27, 39, 56, 321, 488, 590, 840
 - logic, 37-44
 - multilevel, 185-196, 864
- T**
- T flip-flop, 394
 - Technology mapping, 223, 760
 - 10's complement, 265
 - Template (Gate array), 112
 - Templates (VHDL), 849
 - Terminations, 749
 - Test, 726
 - Test generation, 727-737, 842
 - Test set, 727-737
 - Test vectors (*see* Test generation)
 - Testing, 506, 727-752
 - Text Editor, 848
 - Theorems of Boolean algebra, 30
 - Three-state output (*see* Tri-state)
 - Threshold voltage, 74, 114
 - Third party tools, 830
 - Timer, 723
 - Timing Analyzer, 769, 873
 - Timing diagram, 27, 486
 - Timing simulation, 57
 - Tool (CAD), 758
 - Traffic light controller, 722
 - Transfer characteristic, 119
 - Transistor:
 - EEPROM, 138
 - EPROM, 140
 - MOSFET, 75
 - size, 123
 - Transistor-transistor logic (TTL), 914
 - Transition diagram, 621
 - Transition table (*see* Excitation table)
 - Transmission gate, 134, 136
 - Transmission line effects, 750
 - Tree structure, 733
- Triode region, 116
- Tri-state:
 - buffer, 93, 132
 - VHDL code, 442
- Truth table, 24
- 2's-complement representation, 259
- 22V10 PAL, 900
- Type (VHDL), 775
- U**
- Ultraviolet light, 140
 - Union, 33
 - Universal shift register, 473
 - Unsigned numbers, 246
 - UNSIGNED type, 288
 - Unstable state, 587
 - Up-counter, 402, 432, 454, 676
 - Up/down-counter, 403
 - USE clause, 224, 784
 - User-programmable device (*see* PLD)
- V**
- Valuation, 24
 - Variable assignment statement, 802
 - VARIABLE, 779, 800
 - Vending machine controller, 469, 526, 642
 - Venn diagram, 33-36
 - Verilog HDL, 55
 - Vertex, 204
 - Very large-scale integration (VLSI), 93
 - VHDL, 58-63, 224, 281-288, 339-363, 502-512, 773-824
 - architecture, 61, 782
 - arithmetic assignment, 285
 - array, 705, 780
 - asynchronous clear, 422, 808
 - BUFFER, 434
 - CASE statement, 356, 457, 797
 - comment, 774
 - component, 281, 786
 - concatenation, 287, 790
 - conditional signal assignment, 344, 792
 - don't care, 358, 776
 - entity, 60, 782
 - FOR LOOP, 432, 797, 801
 - GENERATE, 348, 454, 793
 - IF statement, 350, 796
 - implied memory, 355, 419, 799
 - instantiation of components, 281, 445, 666, 785
 - named association, 282
 - names, 774
 - number representaton, 284, 774

operators, 359, 781
ordering of statements, 350, 431, 799, 812
package, 225, 283, 444, 454, 784
port, 61, 782
positional association, 282
precedence, 363
process, 350, 794, 798
selected signal assignment, 299, 340, 791
sensitivity list, 350, 798
signal, 775
synchronous reset, 423, 808
variable, 779, 800

vector, 775
Via, 111
Volatile programming, 109
Voltage levels,
 high, 74
 low, 74
 substrate bias, 127
 V_{OH} and V_{OL} , 120
 V_{IH} and V_{IL} , 120
Voltage transfer characteristic (VTC), 119

W

WAIT UNTIL statement, 420, 430, 807

Waveform Editor, 845
WHEN clause (VHDL), 340, 356, 792
Wiring complexity, 190
World Wide Web, 223

X

Xilinx Spartan-3, 913
Xilinx Virtex FPGA, 912
Xilinx Virtex II (Pro) FPGA, 912
Xilinx XC4000 FPGA, 907
XNOR (Exclusive-NOR) gate (*see* Gates)
XOR (Exclusive-OR) gate (*see* Gates)

Fundamentals of Digital Logic with VHDL Design provides a modern approach for teaching the design of logic circuits. It combines the classical treatment of circuits with the techniques that exploit the advantages of automation. Basic concepts are introduced using simple logic circuits, which are designed by using both manual and modern CAD-tool-based methods. Having established the fundamental concepts, more complex, realistic circuits are then designed using the CAD tools.

Key features of the text are:

- Numerous detailed examples, ranging from circuits with only a few basic logic elements to digital systems such as a simple processor.
- An in-depth presentation of modern digital circuit technology, with emphasis on Programmable Logic Devices (FPGAs and CPLDs).
- IEEE standard VHDL language, an integral part of design techniques used throughout the book; the language is introduced gradually in a way that is easily understood by beginning designers.
- Altera's Quartus II CAD system (on a CD-ROM) and a series of step-by-step tutorials; the CD-ROM also contains all VHDL examples presented in the book.

McGraw-Hill EngineeringCS.com

www.McGraw-HillEngineeringCS.com—Your one-stop online shop for all McGraw-Hill Engineering & Computer Science books, supplemental materials, content, & resources! For the student, the professor, and the professional, this site houses it all for your Engineering and CS needs.



The McGraw-Hill Companies

McGraw-Hill Higher Education

P/N 0-07-246085-7
PART OF
ISBN 0-07-244738-1



9 780072 499384

www.mhhe.com